

# BASIC ENGINEERING CIRCUIT ANALYSIS

TENTH EDITION



J. DAVID IRWIN

R. MARK NELMS

*This page intentionally left blank*



*accessible, affordable,  
active learning*

WileyPLUS is an innovative, research-based, online environment for effective teaching and learning.

### WileyPLUS...

**...motivates students with confidence-boosting feedback and proof of progress, 24/7.**

**...supports instructors with reliable resources that reinforce course goals inside and outside of the classroom.**



**Includes  
Interactive  
Textbook &  
Resources**

**WileyPLUS... Learn More.**

**www.wileyplus.com**



## ALL THE HELP, RESOURCES, AND PERSONAL SUPPORT YOU AND YOUR STUDENTS NEED!

[www.wileyplus.com/resources](http://www.wileyplus.com/resources)



2-Minute Tutorials and all of the resources you & your students need to get started.



Student support from an experienced student user.



Collaborate with your colleagues, find a mentor, attend virtual and live events, and view resources.  
[www.WhereFacultyConnect.com](http://www.WhereFacultyConnect.com)



Pre-loaded, ready-to-use assignments and presentations. Created by subject matter experts.



Technical Support 24/7  
FAQs, online chat, and phone support.  
[www.wileyplus.com/support](http://www.wileyplus.com/support)



Your WileyPLUS Account Manager. Personal training and implementation support.

# BASIC ENGINEERING CIRCUIT ANALYSIS

*This page intentionally left blank*

# BASIC ENGINEERING CIRCUIT ANALYSIS

Tenth Edition

J. DAVID IRWIN

Auburn University

R. MARK NELMS

Auburn University



John Wiley & Sons, Inc.

Vice President and Executive Publisher	Don Fowley
Associate Publisher	Dan Sayre
Production Manager	Dorothy Sinclair
Senior Production Editor	Valerie A. Vargas
Marketing Manager	Christopher Ruel
Creative Director	Harry Nolan
Senior Designer	Kevin Murphy
Production Management Services	Furino Production
Senior Illustration Editor	Anna Melhorn
Senior Photo Editor	Lisa Gee
Editorial Assistant	Katie Singleton
Executive Media Editor	Thomas Kulesa
Cover Photo	provided courtesy of Tesla Motors, Inc.

This book was set in 10/12 Times by Prepare and printed and bound by Courier-Kendallville. The cover was printed by Courier-Kendallville.

Copyright © 2011, 2008, 2005

John Wiley & Sons, Inc. All rights reserved. No part of this publication may be reproduced, stored in a retrieval system or transmitted in any form or by any means, electronic, mechanical, photocopying, recording, scanning or otherwise, except as permitted under Sections 107 or 108 of the 1976 United States Copyright Act, without either the prior written permission of the Publisher, or authorization through payment of the appropriate per-copy fee to the Copyright Clearance Center, Inc. 222 Rosewood Drive, Danvers, MA 01923, website [www.copyright.com](http://www.copyright.com). Requests to the Publisher for permission should be addressed to the Permissions Department, John Wiley & Sons, Inc., 111 River Street, Hoboken, NJ 07030-5774, (201)748-6011, fax (201)748-6008, website <http://www.wiley.com/go/permissions>.

Founded in 1807, John Wiley & Sons, Inc. has been a valued source of knowledge and understanding for more than 200 years, helping people around the world meet their needs and fulfill their aspirations. Our company is built on a foundation of principles that include responsibility to the communities we serve and where we live and work. In 2008, we launched a Corporate Citizenship Initiative, a global effort to address the environmental, social, economic, and ethical challenges we face in our business. Among the issues we are addressing are carbon impact, paper specifications and procurement, ethical conduct within our business and among our vendors, and community and charitable support. For more information, please visit our website: [www.wiley.com/go/citizenship](http://www.wiley.com/go/citizenship).

Evaluation copies are provided to qualified academics and professionals for review purposes only, for use in their courses during the next academic year. These copies are licensed and may not be sold or transferred to a third party. Upon completion of the review period, please return the evaluation copy to Wiley. Return instructions and a free of charge return shipping label are available at [www.wiley.com/go/returnlabel](http://www.wiley.com/go/returnlabel). Outside of the United States, please contact your local representative.

ISBN-13 978-0-470-63322-9

Printed in the United States of America

10 9 8 7 6 5 4 3 2 1



**To my loving family:**

**Edie**

**Geri, Bruno, Andrew and Ryan**

**John, Julie, John David and Abi**

**Laura**

**To my parents:**

**Robert and Elizabeth Nelms**

*This page intentionally left blank*

# BRIEF CONTENTS

<b>CHAPTER 1</b>	<b>Basic Concepts</b>	<b>1</b>
<b>CHAPTER 2</b>	<b>Resistive Circuits</b>	<b>25</b>
<b>CHAPTER 3</b>	<b>Nodal and Loop Analysis Techniques</b>	<b>102</b>
<b>CHAPTER 4</b>	<b>Operational Amplifiers</b>	<b>156</b>
<b>CHAPTER 5</b>	<b>Additional Analysis Techniques</b>	<b>189</b>
<b>CHAPTER 6</b>	<b>Capacitance and Inductance</b>	<b>245</b>
<b>CHAPTER 7</b>	<b>First- and Second-Order Transient Circuits</b>	<b>296</b>
<b>CHAPTER 8</b>	<b>AC Steady-State Analysis</b>	<b>369</b>
<b>CHAPTER 9</b>	<b>Steady-State Power Analysis</b>	<b>435</b>
<b>CHAPTER 10</b>	<b>Magnetically Coupled Networks</b>	<b>491</b>
<b>CHAPTER 11</b>	<b>Polyphase Circuits</b>	<b>541</b>
<b>CHAPTER 12</b>	<b>Variable-Frequency Network Performance</b>	<b>577</b>
<b>CHAPTER 13</b>	<b>The Laplace Transform</b>	<b>667</b>
<b>CHAPTER 14</b>	<b>Application of the Laplace Transform to Circuit Analysis</b>	<b>695</b>
<b>CHAPTER 15</b>	<b>Fourier Analysis Techniques</b>	<b>751</b>
<b>CHAPTER 16</b>	<b>Two-Port Networks</b>	<b>801</b>

*This page intentionally left blank*

# CONTENTS

## Preface

xiii

## CHAPTER 1

### BASIC CONCEPTS

1

- 1.1 System of Units 2
- 1.2 Basic Quantities 2
- 1.3 Circuit Elements 8
- Summary 17
- Problems 17

## CHAPTER 2

### RESISTIVE CIRCUITS

25

- 2.1 Ohm's Law 26
- 2.2 Kirchhoff's Laws 31
- 2.3 Single-Loop Circuits 39
- 2.4 Single-Node-Pair Circuits 46
- 2.5 Series and Parallel Resistor Combinations 51
- 2.6 Circuits with Series-Parallel Combinations of Resistors 55
- 2.7 Wye  $\rightleftharpoons$  Delta Transformations 61
- 2.8 Circuits with Dependent Sources 64
- 2.9 Resistor Technologies for Electronic Manufacturing 69
- 2.10 Application Examples 72
- 2.11 Design Examples 75
- Summary 81
- Problems 82

## CHAPTER 3

### NODAL AND LOOP ANALYSIS TECHNIQUES

102

- 3.1 Nodal Analysis 102
- 3.2 Loop Analysis 122
- 3.3 Application Example 137
- 3.4 Design Example 139
- Summary 139
- Problems 140

## CHAPTER 4

### OPERATIONAL AMPLIFIERS

156

- 4.1 Introduction 157
- 4.2 Op-Amp Models 157
- 4.3 Fundamental Op-Amp Circuits 163
- 4.4 Comparators 172
- 4.5 Application Examples 173
- 4.6 Design Examples 176
- Summary 179
- Problems 180

## CHAPTER 5

### ADDITIONAL ANALYSIS TECHNIQUES

189

- 5.1 Introduction 190
- 5.2 Superposition 192
- 5.3 Thévenin's and Norton's Theorems 198

**5.4** Maximum Power Transfer 216  
**5.5** Application Example 220  
**5.6** Design Examples 221  
 Summary 227  
 Problems 227

**CHAPTER 6**  
**CAPACITANCE AND INDUCTANCE** 245

**6.1** Capacitors 246  
**6.2** Inductors 254  
**6.3** Capacitor and Inductor Combinations 264  
**6.4** RC Operational Amplifier Circuits 272  
**6.5** Application Examples 274  
**6.6** Design Examples 279  
 Summary 280  
 Problems 281

**CHAPTER 7**  
**FIRST- AND SECOND-ORDER TRANSIENT CIRCUITS** 296

**7.1** Introduction 297  
**7.2** First-Order Circuits 298  
**7.3** Second-Order Circuits 319  
**7.4** Application Examples 333  
**7.5** Design Examples 343  
 Summary 351  
 Problems 351

**CHAPTER 8**  
**AC STEADY-STATE ANALYSIS** 369

**8.1** Sinusoids 370  
**8.2** Sinusoidal and Complex Forcing Functions 373  
**8.3** Phasors 377  
**8.4** Phasor Relationships for Circuit Elements 379  
**8.5** Impedance and Admittance 383  
**8.6** Phasor Diagrams 390  
**8.7** Basic Analysis Using Kirchoff's Laws 393

**8.8** Analysis Techniques 396  
**8.9** Application Examples 408  
**8.10** Design Examples 410  
 Summary 413  
 Problems 414

**CHAPTER 9**  
**STEADY-STATE POWER ANALYSIS** 435

**9.1** Instantaneous Power 436  
**9.2** Average Power 437  
**9.3** Maximum Average Power Transfer 442  
**9.4** Effective or rms Values 447  
**9.5** The Power Factor 450  
**9.6** Complex Power 452  
**9.7** Power Factor Correction 457  
**9.8** Single-Phase Three-Wire Circuits 461  
**9.9** Safety Considerations 464  
**9.10** Application Examples 472  
**9.11** Design Examples 476  
 Summary 478  
 Problems 478

**CHAPTER 10**  
**MAGNETICALLY COUPLED NETWORKS** 491

**10.1** Mutual Inductance 492  
**10.2** Energy Analysis 503  
**10.3** The Ideal Transformer 506  
**10.4** Safety Considerations 515  
**10.5** Application Examples 516  
**10.6** Design Examples 521  
 Summary 525  
 Problems 526

**CHAPTER 11**  
**POLYPHASE CIRCUITS** 541

**11.1** Three-Phase Circuits 542  
**11.2** Three-Phase Connections 547  
**11.3** Source/Load Connections 548  
**11.4** Power Relationships 557  
**11.5** Power Factor Correction 561

- 11.6 Application Examples 562
- 11.7 Design Examples 566
  - Summary 570
  - Problems 570

## CHAPTER 12

### VARIABLE-FREQUENCY NETWORK PERFORMANCE

577

- 12.1 Variable Frequency-Response Analysis 578
- 12.2 Sinusoidal Frequency Analysis 586
- 12.3 Resonant Circuits 597
- 12.4 Scaling 619
- 12.5 Filter Networks 620
- 12.6 Application Examples 645
- 12.7 Design Examples 649
  - Summary 655
  - Problems 656

## CHAPTER 13

### THE LAPLACE TRANSFORM

667

- 13.1 Definition 668
- 13.2 Two Important Singularity Functions 669
- 13.3 Transform Pairs 671
- 13.4 Properties of the Transform 673
- 13.5 Performing the Inverse Transform 676
- 13.6 Convolution Integral 681
- 13.7 Initial-Value and Final-Value Theorems 685
- 13.8 Application Examples 687
  - Summary 689
  - Problems 689

## CHAPTER 14

### APPLICATION OF THE LAPLACE TRANSFORM TO CIRCUIT ANALYSIS

695

- 14.1 Laplace Circuit Solutions 696
- 14.2 Circuit Element Models 697

- 14.3 Analysis Techniques 699
- 14.4 Transfer Function 712
- 14.5 Pole-Zero Plot/Bode Plot Connection 724
- 14.6 Steady-State Response 727
- 14.7 Application Examples 729
- 14.8 Design Examples 731
  - Summary 738
  - Problems 738

## CHAPTER 15

### FOURIER ANALYSIS TECHNIQUES

751

- 15.1 Fourier Series 752
- 15.2 Fourier Transform 773
- 15.3 Application Examples 780
- 15.4 Design Example 787
  - Summary 793
  - Problems 794

## CHAPTER 16

### TWO-PORT NETWORKS

801

- 16.1 Admittance Parameters 802
- 16.2 Impedance Parameters 805
- 16.3 Hybrid Parameters 807
- 16.4 Transmission Parameters 809
- 16.5 Parameter Conversions 811
- 16.6 Interconnection of Two-Ports 811
- 16.7 Application Examples 815
- 16.8 Design Example 819
  - Summary 821
  - Problems 821

## APPENDIX

### COMPLEX NUMBERS

829

### Index

834

*This page intentionally left blank*



# PREFACE

Circuit analysis is not only fundamental to the entire breadth of electrical and computer engineering—the concepts studied here extend far beyond those boundaries. For this reason it remains the starting point for many future engineers who wish to work in this field. The text and all the supplementary materials associated with it will aid you in reaching this goal. We strongly recommend while you are here to read the Preface closely and view all the resources available to you as a learner. And one last piece of advice, learning requires practice and repetition, take every opportunity to work one more problem or study one more hour than you planned. In the end, you'll be thankful you did.

To the Student

The Tenth Edition has been prepared based on a careful examination of feedback received from instructors and students. The revisions and changes made should appeal to a wide variety of instructors. We are aware of significant changes taking place in the way this material is being taught and learned. Consequently, the authors and the publisher have created a formidable array of traditional and non-traditional learning resources to meet the needs of students and teachers of modern circuit analysis.

To the  
Instructor

- A four-color design is employed to enhance and clarify both text and illustrations. This sharply improves the pedagogical presentation, particularly with complex illustrations. For example, see Figure 2.5 on page 31.
- New chapter previews provide motivation for studying the material in the chapter. See page 25 for a chapter preview sample. Learning objectives for each chapter have been updated and appear as part of the new chapter openers.
- End of chapter homework problems have been substantially revised and augmented. There are now approximately 1400 problems in the Tenth Edition, of which over 400 are new! Multiple-choice Fundamentals of Engineering (FE) Exam problems also appear at the end of each chapter.
- Practical applications have been added for nearly every topic in the text. Since these are items students will naturally encounter on a regular basis, they serve to answer questions such as, “Why is this important?” or “How am I going to use what I learn from this course?” For a typical example application, see page 333.

Highlights of the  
Tenth Edition

- Problem Solving videos have been created showing students step-by-step how to solve all Learning Assessment problems within each chapter. This is a special feature that should significantly enhance the learning experience for each subsection in a chapter. The problem-solving videos (PSVs) are now also available for the Apple iPod.
- In order to provide maximum flexibility, online supplements contain solutions to examples in the book using MATLAB, PSPICE or MultiSim. The worked examples can be supplied to students as digital files, or one or more of them can be incorporated into custom print editions of the text, depending upon the instructor's preference.
- Problem-Solving Strategies have been retained in the Tenth Edition. They are utilized as a guide for the solutions contained in the PSVs.
- The WileyPLUS resources have been greatly updated and expanded, with additional algorithmic problems, problem-solving videos and much more. New Reading Quiz questions give instructors the opportunity to track student reading and measure their comprehension. New Math Skills Assessments provide faculty with tools to assess students' mastery of essential mathematical concepts. Not only can faculty measure their students' math comprehension at the beginning of the term, they also now have resources to which they can direct students to help them reinforce areas where they need to upgrade their skills.

## Organization

This text is suitable for a one-semester, a two-semester or a three-quarter course sequence. The first seven chapters are concerned with the analysis of dc circuits. An introduction to operational amplifiers is presented in Chapter 4. This chapter may be omitted without any loss of continuity; a few examples and homework problems in later chapters must be skipped. Chapters 8–12 are focused on the analysis of ac circuits beginning with the analysis of single-frequency circuits (single-phase and three-phase) and ending with variable-frequency circuit operation. Calculation of power in single-phase and three-phase ac circuits is also presented. The important topics of the Laplace transform, Fourier transform, and two-port networks are covered in Chapters 13–16.

The organization of the text provides instructors maximum flexibility in designing their courses. One instructor may choose to cover the first seven chapters in a single semester, while another may omit Chapter 4 and cover Chapters 1–3 and 5–8. Other instructors have chosen to cover Chapters 1–3, 5–6, and sections 7.1 and 7.2 and then cover Chapters 8 and 9. The remaining chapters can be covered in a second semester course.

## Text Pedagogy

The pedagogy of this text is rich and varied. It includes print and media and much thought has been put into integrating its use. To gain the most from this pedagogy, please review the following elements commonly available in most chapters of this book.

**Learning Objectives** are provided at the outset of each chapter. This tabular list tells the reader what is important and what will be gained from studying the material in the chapter.

**Examples** are the mainstay of any circuit analysis text and numerous examples have always been a trademark of this textbook. These examples provide a more graduated level of presentation with simple, medium and challenging examples. Besides regular examples, numerous **Design Examples** and **Application Examples** are found throughout the text. See for example, page 343.

**Hints** can often be found in the page margins. They facilitate understanding and serve as reminders of key issues. See for example, page 6.

**Learning Assessments** are a critical learning tool in this text. These exercises test the cumulative concepts to that point in a given section or sections. Not only is the answer provided, but a problem-solving video accompanies each of these exercises, demonstrating the solution in step-by-step detail. The student who masters these is ready to move forward. See for example, page 7.

**Problem-Solving Strategies** are step-by-step problem-solving techniques that many students find particularly useful. They answer the frequently asked question, “where do I begin?” Nearly every chapter has one or more of these strategies, which are a kind of summation on problem-solving for concepts presented. See for example, page 121.

**The Problems** have been greatly revised for the 10<sup>th</sup> Edition. This edition has over 400 new problems of varying depth and level. Any instructor will find numerous problems appropriate for any level class. There are approximately 1400 problems in the 10<sup>th</sup> Edition! Included with the Problems are **FE Exam Problems** for each chapter. If you plan on taking the FE Exam, these problems closely match problems you will typically find on the FE Exam.

**Circuit Simulation and Analysis Software** represents a fundamental part of engineering circuit design today. Software such as **PSPICE**®, **MultiSim**® and **MATLAB**® allow engineers to design and simulate circuits quickly and efficiently. As an enhancement with enormous flexibility, all three of these software packages can be employed in the 10<sup>th</sup> edition. In each case, online supplements are available that contain the solutions to numerous examples in each of these software programs. Instructors can opt to make this material available online or as part of a customized print edition, making this software an integral and effective part of the presentation of course material.

The rich collection of material that is provided for this edition offers a distinctive and helpful way for exploring the book’s examples and exercises from a variety of simulation techniques.

---

WileyPLUS is an innovative, research-based, online environment for effective teaching and learning.

WileyPLUS

### WHAT DO STUDENTS RECEIVE WITH WILEYPLUS?

*A Research-based Design.* WileyPLUS provides an online environment that integrates relevant resources, including the entire digital textbook, in an easy-to-navigate framework that helps students study more effectively.

- WileyPLUS adds structure by organizing textbook content into smaller, more manageable “chunks”.
- Related media, examples, and sample practice items reinforce the learning objectives.
- Innovative features such as calendars, visual progress tracking and self-evaluation tools improve time management and strengthen areas of weakness.

*One-on-one Engagement.* With WileyPLUS, students receive 24/7 access to resources that promote positive learning outcomes. Students engage with related examples (in various media) and sample practice items, including:

- FE Exam Questions
- Reading Quiz Questions
- Circuit Solutions
- Learning Assessments
- Math Skills Assessments

*Measurable Outcomes.* Throughout each study session, students can assess their progress and gain immediate feedback. WileyPLUS provides precise reporting of strengths and weaknesses, as well as individualized quizzes, so that students are confident they are spending their time on the right things. With WileyPLUS, students always know the exact outcome of their efforts.

**WHAT DO INSTRUCTORS RECEIVE WITH WILEYPLUS?** WileyPLUS provides reliable, customizable resources that reinforce course goals inside and outside of the classroom as well as visibility into individual student progress. Pre-created materials and activities help instructors optimize their time.

**Customizable Course Plan:** WileyPLUS comes with a pre-created Course Plan designed by a subject matter expert uniquely for this course. Simple drag-and-drop tools make it easy to assign the course plan as-is or modify it to reflect your course syllabus.

Pre-created Activity Types include:

- Questions
- Readings and Resources
- Presentation
- Print Tests
- Concept Mastery

Course Materials and Assessment Content:

- Lecture Notes
- PowerPoint Slides
- Image Gallery
- Instructor's Manual
- Gradable Reading Assignment Questions (embedded with online text)
- Question Assignments: all end-of-chapter problems coded algorithmically with hints, links to text, whiteboard/show work feature and instructor controlled problem solving help.

**Gradebook:** WileyPLUS provides instant access to reports on trends in class performance, student use of course materials and progress towards learning objectives, helping inform decisions and drive classroom discussions.

WileyPLUS. Learn more at [www.wileyplus.com](http://www.wileyplus.com).

Powered by proven technology and built on a foundation of cognitive research, WileyPLUS has enriched the education of millions of students, in over 20 countries around the world.

## Supplements

The supplements list is extensive and provides instructors and students with a wealth of traditional and modern resources to match different learning needs.

**Problem-Solving Videos** are offered again in the 10<sup>th</sup> Edition in an iPod-compatible format. The videos provide step-by-step solutions to Learning Assessments. Videos for Learning Assessments will follow directly after a chapter feature called *Problem-Solving Strategy*. Students who have used these videos with past editions have found them to be very helpful.

The **Solutions Manual** for the 10<sup>th</sup> Edition has been completely redone, checked and double-checked for accuracy. Although it is hand-written to avoid typesetting errors, it is the most accurate solutions manual ever created for this textbook. Qualified instructors who adopt the text for classroom use can download it off Wiley's Instructor's Companion Site.

**PowerPoint Lecture Slides** are an especially valuable supplementary aid for some instructors. While most publishers make only figures available, these slides are true lecture tools that summarize the key learning points for each chapter and are easily editable in PowerPoint. The slides are available for download from Wiley's Instructor Companion Site for qualified adopters.

Over the more than two decades that this text has been in existence, we estimate more than one thousand instructors have used our book in teaching circuit analysis to hundreds of thousand of students. As authors there is no greater reward than having your work used by so many. We are grateful for the confidence shown in our text and for the numerous evaluations and suggestions from professors and their students over the years. This feedback has helped us continuously improve the presentation. For this Tenth edition, we especially thank Jim Rowland from the University of Kansas for his assistance with the chapter openers and Stephen Haddock with Auburn University for his assistance with **PSPICE**<sup>®</sup>, **MultiSim**<sup>®</sup> and **MATLAB**<sup>®</sup> supplemental materials. The authors also wish to express a special thanks to Sandy Johnson for her diligence and dedication in the preparation of this 10th edition.

## Acknowledgments

We were fortunate to have an outstanding group of faculty who has participated in reviews, surveys and focus groups for this edition. They are:

Jorge Aravena, Louisiana State University  
 James Conrad, University of North Carolina, Charlotte  
 Paul King, Vanderbilt University  
 Gordon Lee, San Diego State University  
 Tokunbo Ogunfunmi, Santa Clara University  
 Michael Polis, Oakland University

The preparation of this book and the materials that support it have been handled with both enthusiasm and great care. The combined wisdom and leadership of our colleagues at Wiley has resulted in a tremendous team effort that has addressed every aspect of the presentation. This team included the following individuals:

Executive Publisher, Don Fowley  
 Associate Publisher, Dan Sayre  
 Executive Media Editor, Tom Kulesa  
 Executive Marketing Manager, Chris Ruel  
 Senior Production Editor, Valerie Vargas  
 Senior Designer, Kevin Murphy  
 Production Manager, Dorothy Sinclair  
 Senior Photo Editor, Lisa Gee  
 Media Editor, Lauren Sapira  
 Editorial Assistant, Katie Singelton

Each member of this team played a vital role in preparing the package that is the Tenth Edition of *Basic Engineering Circuit Analysis*. We are most appreciative of their many contributions.

As in the past, we are most pleased to acknowledge the support that has been provided by numerous individuals to earlier editions of this book. Our Auburn colleagues who have helped are:

Thomas A. Baginski  
 Travis Blalock  
 Henry Cobb

Bill Dillard  
Zhi Ding  
Kevin Driscoll  
E. R. Graf  
L. L. Grigsby  
Charles A. Gross  
Stephen Haddock  
David C. Hill  
M. A. Honnell  
R. C. Jaeger  
Keith Jones  
Betty Kelley  
Ray Kirby  
Matthew Langford  
Aleck Leedy  
George Lindsey  
Jo Ann Loden  
James L. Lowry  
David Mack  
Paulo R. Marino  
M. S. Morse  
Sung-Won Park  
John Parr  
Monty Rickles  
C. L. Rogers  
Tom Shumpert  
Les Simonton  
James Trivltayakhum  
Susan Williamson  
Jacinda Woodward

Many of our friends throughout the United States, some of whom are now retired, have also made numerous suggestions for improving the book:

David Anderson, University of Iowa  
Jorge Aravena, Louisiana State University  
Les Axelrod, Illinois Institute of Technology  
Richard Baker, UCLA  
Charles F. Bunting, Oklahoma State University  
John Choma, University of Southern California  
David Conner, University of Alabama at Birmingham  
James L. Dodd, Mississippi State University  
Kevin Donahue, University of Kentucky  
John Durkin, University of Akron  
Prasad Enjeti, Texas A&M University  
Earl D. Eyman, University of Iowa  
Arvin Gabel, Northeastern University  
Paul Gray, University of Wisconsin-Platteville  
Ashok Goel, Michigan Technological University  
Walter Green, University of Tennessee  
Paul Greiling, UCLA  
Mohammad Habli, University of New Orleans  
John Hadjiligiou, Florida Institute of Technology  
Yasser Hegazy, University of Waterloo  
Keith Holbert, Arizona State University

Aileen Honka, The MOSIS Service- USC Inf. Sciences Institute  
 Marty Kaliski, Cal Poly, San Luis Obispo  
 Muhammad A. Khaliq, Minnesota State University  
 Ralph Kinney, LSU  
 Robert Krueger, University of Wisconsin  
 K. S. P. Kumar, University of Minnesota  
 Jung Young Lee, UC Berkeley student  
 Aleck Leedy, Murray State University  
 Hongbin Li, Stevens Institute of Technology  
 James Luster, Snow College  
 Erik Luther, National Instruments  
 Ian McCausland, University of Toronto  
 Arthur C. Moeller, Marquette University  
 Darryl Morrell, Arizona State University  
 M. Paul Murray, Mississippi State University  
 Burks Oakley II, University of Illinois at Champaign-Urbana  
 John O'Malley, University of Florida  
 Arnost Neugroschel, University of Florida  
 William R. Parkhurst, Wichita State University  
 Peyton Peebles, University of Florida  
 Jian Peng, Southeast Missouri State University  
 Clifford Pollock, Cornell University  
 George Prans, Manhattan College  
 Mark Rabalais, Louisiana State University  
 Tom Robbins, National Instruments  
 Armando Rodriguez, Arizona State University  
 James Rowland, University of Kansas  
 Robert N. Sackett, Normandale Community College  
 Richard Sanford, Clarkson University  
 Peddapullaiah Sannuti, Rutgers University  
 Ronald Schulz, Cleveland State University  
 M. E. Shafeei, Penn State University at Harrisburg  
 Martha Sloan, Michigan Technological University  
 Scott F. Smith, Boise State University  
 Karen M. St. Germaine, University of Nebraska  
 Janusz Strazyk, Ohio University  
 Gene Stuffle, Idaho State University  
 Thomas M. Sullivan, Carnegie Mellon University  
 Saad Tabet, Florida State University  
 Val Tareski, North Dakota State University  
 Thomas Thomas, University of South Alabama  
 Leonard J. Tung, Florida A&M University/Florida State University  
 Marian Tzolov, Lock Haven University  
 Darrell Vines, Texas Tech University  
 Carl Wells, Washington State University  
 Seth Wolpert, University of Maine

Finally, Dave Irwin wishes to express his deep appreciation to his wife, Edie, who has been most supportive of our efforts in this book. Mark Nelms would like to thank his parents, Robert and Elizabeth, for their support and encouragement.

**J. David Irwin and R. Mark Nelms**

*This page intentionally left blank*



# BASIC CONCEPTS



Courtesy NASA, 2009

## THE LEARNING GOALS FOR THIS CHAPTER ARE:

- Review the SI system of units and standard prefixes
- Know the definitions of basic electrical quantities: voltage, current, and power
- Know the symbols for and definitions of independent and dependent sources
- Be able to calculate the power absorbed by a circuit element using the passive sign convention

**Hubble Space Telescope** If you were asked to identify the top engineering achievements that depend on currents, voltages, and power in electrical systems, would NASA's Hubble Space Telescope make your list? It should. Launched over 20 years ago into an orbit 375 miles above the Earth's surface, the Hubble Telescope avoids distorting effects of the atmosphere and gives significant new data about the universe. It features multiple channels having many intricate electrical systems that detect different wavelengths of light and enables us to examine our solar system as well as remote galaxies. The success of the Hubble Space Telescope program has led to other NASA plans. In February 2010, the Solar

Dynamics Observatory was launched to aid in studying our sun's dynamic processes including high resolution measurements of solar flares; it is the first mission of NASA's Living with a Star program.

Sophisticated as it is, the power of the Hubble Space Telescope is rooted in the fundamental concepts you will begin to study in this chapter—charge, current, voltage, power, and batteries. These core principles are the fundamental building blocks of your understanding of electrical engineering and your ability to analyze and design more complicated electrical systems. Just as the Hubble has led to even greater innovations, we cannot imagine today what else may lie ahead for you.

## 1.1

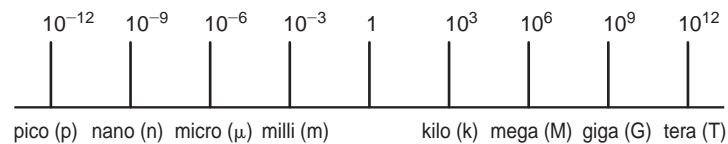
## System of Units

The system of units we employ is the international system of units, the *Système International des Unités*, which is normally referred to as the SI standard system. This system, which is composed of the basic units meter (m), kilogram (kg), second (s), ampere (A), kelvin (K), and candela (cd), is defined in all modern physics texts and therefore will not be defined here. However, we will discuss the units in some detail as we encounter them in our subsequent analyses.

The standard prefixes that are employed in SI are shown in Fig. 1.1. Note the decimal relationship between these prefixes. These standard prefixes are employed throughout our study of electric circuits.

Circuit technology has changed drastically over the years. For example, in the early 1960s the space on a circuit board occupied by the base of a single vacuum tube was about the size of a quarter (25-cent coin). Today that same space could be occupied by an Intel Pentium integrated circuit chip containing 50 million transistors. These chips are the engine for a host of electronic equipment.

Figure 1.1 Standard SI prefixes.



## 1.2

## Basic Quantities

Before we begin our analysis of electric circuits, we must define terms that we will employ. However, in this chapter and throughout the book our definitions and explanations will be as simple as possible to foster an understanding of the use of the material. No attempt will be made to give complete definitions of many of the quantities because such definitions are not only unnecessary at this level but are often confusing. Although most of us have an intuitive concept of what is meant by a circuit, we will simply refer to an *electric circuit* as an interconnection of electrical components, each of which we will describe with a mathematical model.

The most elementary quantity in an analysis of electric circuits is the electric *charge*. Our interest in electric charge is centered around its motion, since charge in motion results in an energy transfer. Of particular interest to us are those situations in which the motion is confined to a definite closed path.

An electric circuit is essentially a pipeline that facilitates the transfer of charge from one point to another. The time rate of change of charge constitutes an electric *current*. Mathematically, the relationship is expressed as

$$i(t) = \frac{dq(t)}{dt} \quad \text{or} \quad q(t) = \int_{-\infty}^t i(x) dx \quad 1.1$$

where  $i$  and  $q$  represent current and charge, respectively (lowercase letters represent time dependency, and capital letters are reserved for constant quantities). The basic unit of current is the ampere (A), and 1 ampere is 1 coulomb per second.

Although we know that current flow in metallic conductors results from electron motion, the conventional current flow, which is universally adopted, represents the movement of positive charges. It is important that the reader think of current flow as the movement of positive charge regardless of the physical phenomena that take place. The symbolism that will be used to represent current flow is shown in Fig. 1.2.  $I_1 = 2 \text{ A}$  in Fig. 1.2a indicates that at any point in the wire shown, 2 C of charge pass from left to right each second.  $I_2 = -3 \text{ A}$  in Fig. 1.2b indicates that at any point in the wire shown, 3 C of charge pass from right to left each second. Therefore, it is important to specify not only the magnitude of the variable representing the current but also its direction.

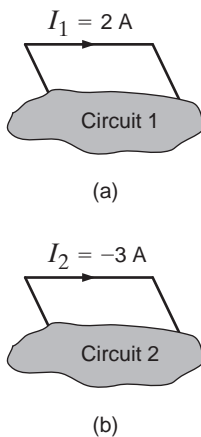
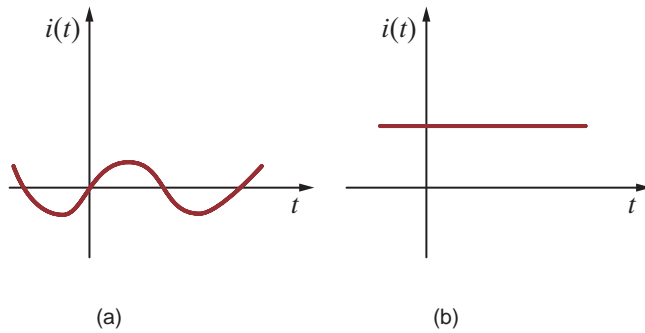


Figure 1.2

Conventional current flow:  
(a) positive current flow;  
(b) negative current flow.

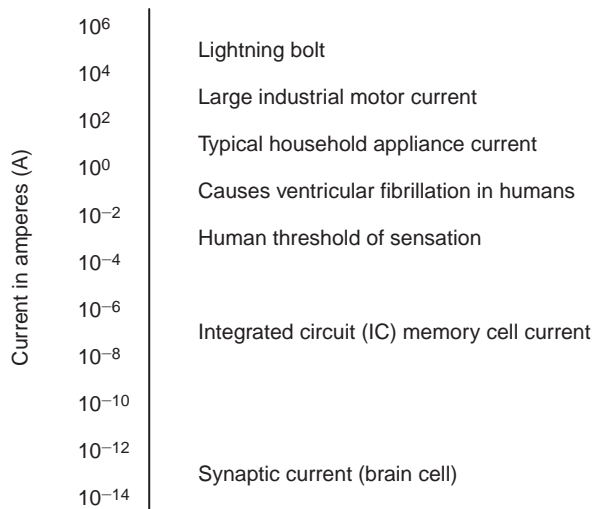
**Figure 1.3**

Two common types of current: (a) alternating current (ac); (b) direct current (dc).

The two types of current that we encounter often in our daily lives, alternating current (ac) and direct current (dc), are shown as a function of time in Fig. 1.3. *Alternating current* is the common current found in every household and is used to run the refrigerator, stove, washing machine, and so on. Batteries, which are used in automobiles and flashlights, are one source of *direct current*. In addition to these two types of currents, which have a wide variety of uses, we can generate many other types of currents. We will examine some of these other types later in the book. In the meantime, it is interesting to note that the magnitude of currents in elements familiar to us ranges from soup to nuts, as shown in Fig. 1.4.

We have indicated that charges in motion yield an energy transfer. Now we define the *voltage* (also called the *electromotive force*, or *potential*) between two points in a circuit as the difference in energy level of a unit charge located at each of the two points. Voltage is very similar to a gravitational force. Think about a bowling ball being dropped from a ladder into a tank of water. As soon as the ball is released, the force of gravity pulls it toward the bottom of the tank. The potential energy of the bowling ball decreases as it approaches the bottom. The gravitational force is pushing the bowling ball through the water. Think of the bowling ball as a charge and the voltage as the force pushing the charge through a circuit. Charges in motion represent a current, so the motion of the bowling ball could be thought of as a current. The water in the tank will resist the motion of the bowling ball. The motion of charges in an electric circuit will be impeded or resisted as well. We will introduce the concept of resistance in Chapter 2 to describe this effect.

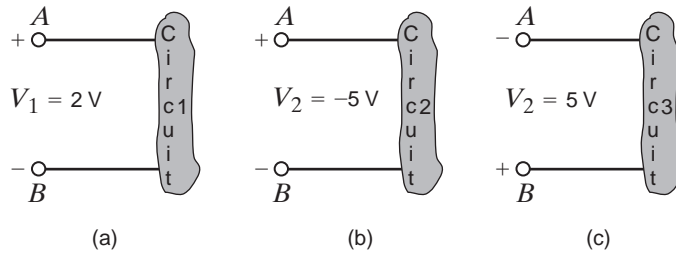
Work or energy,  $w(t)$  or  $W$ , is measured in joules (J); 1 joule is 1 newton meter ( $\text{N} \cdot \text{m}$ ). Hence, voltage [ $v(t)$  or  $V$ ] is measured in volts (V) and 1 volt is 1 joule per coulomb; that is, 1 volt = 1 joule per coulomb = 1 newton meter per coulomb. If a unit positive charge is moved between two points, the energy required to move it is the difference in energy level between the two points and is the defined voltage. It is extremely important that the variables used to represent voltage between two points be defined in such a way that the solution will let us interpret which point is at the higher potential with respect to the other.

**Figure 1.4**

Typical current magnitudes.

**Figure 1.5**

Voltage representations.



In Fig. 1.5a the variable that represents the voltage between points *A* and *B* has been defined as  $V_1$ , and it is assumed that point *A* is at a higher potential than point *B*, as indicated by the + and – signs associated with the variable and defined in the figure. The + and – signs define a reference direction for  $V_1$ . If  $V_1 = 2\text{ V}$ , then the difference in potential of points *A* and *B* is 2 V and point *A* is at the higher potential. If a unit positive charge is moved from point *A* through the circuit to point *B*, it will give up energy to the circuit and have 2 J less energy when it reaches point *B*. If a unit positive charge is moved from point *B* to point *A*, extra energy must be added to the charge by the circuit, and hence the charge will end up with 2 J more energy at point *A* than it started with at point *B*.

For the circuit in Fig. 1.5b,  $V_2 = -5\text{ V}$  means that the potential between points *A* and *B* is 5 V and point *B* is at the higher potential. The voltage in Fig. 1.5b can be expressed as shown in Fig. 1.5c. In this equivalent case, the difference in potential between points *A* and *B* is  $V_2 = 5\text{ V}$ , and point *B* is at the higher potential.

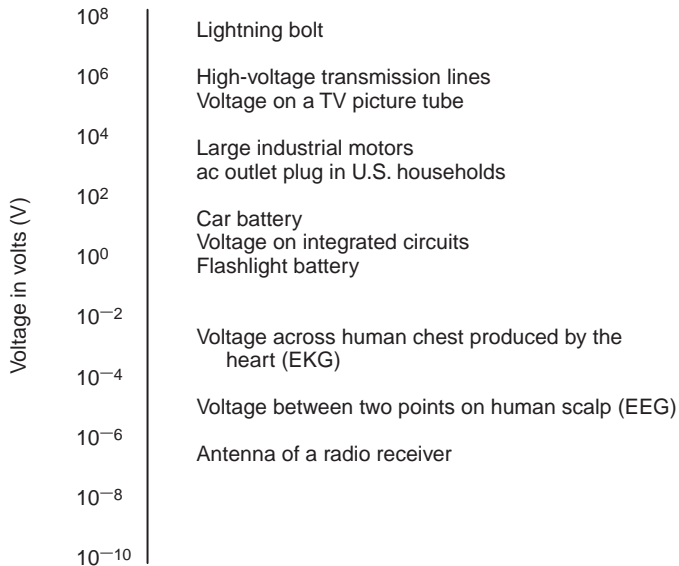
Note that it is important to define a variable with a reference direction so that the answer can be interpreted to give the physical condition in the circuit. We will find that it is not possible in many cases to define the variable so that the answer is positive, and we will also find that it is not necessary to do so.

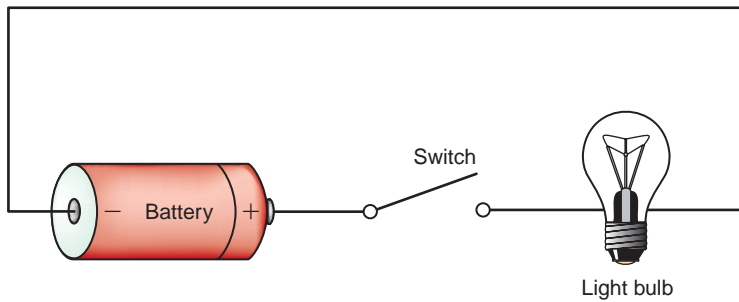
As demonstrated in Figs. 1.5b and c, a negative number for a given variable, for example,  $V_2$  in Fig. 1.5b, gives exactly the same information as a positive number, that is,  $V_2$  in Fig. 1.5c, except that it has an opposite reference direction. Hence, when we define either current or voltage, it is absolutely necessary that we specify both magnitude and direction. Therefore, it is incomplete to say that the voltage between two points is 10 V or the current in a line is 2 A, since only the magnitude and not the direction for the variables has been defined.

The range of magnitudes for voltage, equivalent to that for currents in Fig. 1.4, is shown in Fig. 1.6. Once again, note that this range spans many orders of magnitude.

**Figure 1.6**

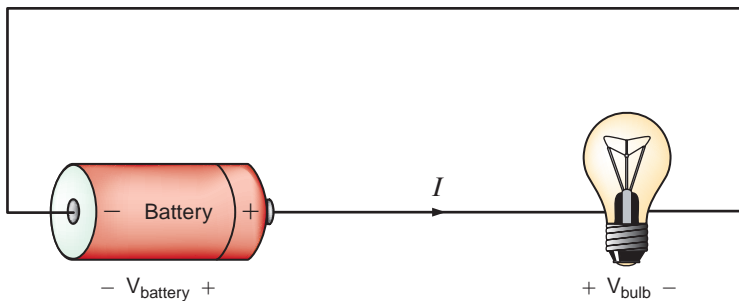
Typical voltage magnitudes.





**Figure 1.7**  
Flashlight circuit.

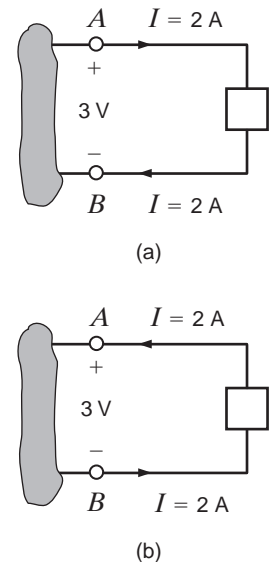
At this point we have presented the conventions that we employ in our discussions of current and voltage. *Energy* is yet another important term of basic significance. Let's investigate the voltage–current relationships for energy transfer using the flashlight shown in Fig. 1.7. The basic elements of a flashlight are a battery, a switch, a light bulb, and connecting wires. Assuming a good battery, we all know that the light bulb will glow when the switch is closed. A current now flows in this closed circuit as charges flow out of the positive terminal of the battery through the switch and light bulb and back into the negative terminal of the battery. The current heats up the filament in the bulb, causing it to glow and emit light. The light bulb converts electrical energy to thermal energy; as a result, charges passing through the bulb lose energy. These charges acquire energy as they pass through the battery as chemical energy is converted to electrical energy. An energy conversion process is occurring in the flashlight as the chemical energy in the battery is converted to electrical energy, which is then converted to thermal energy in the light bulb.



**Figure 1.8**  
Flashlight circuit with  
voltages and current.

Let's redraw the flashlight as shown in Fig. 1.8. There is a current  $I$  flowing in this diagram. Since we know that the light bulb uses energy, the charges coming out of the bulb have less energy than those entering the light bulb. In other words, the charges expend energy as they move through the bulb. This is indicated by the voltage shown across the bulb. The charges gain energy as they pass through the battery, which is indicated by the voltage across the battery. Note the voltage–current relationships for the battery and bulb. We know that the bulb is absorbing energy; the current is entering the positive terminal of the voltage. For the battery, the current is leaving the positive terminal, which indicates that energy is being supplied.

This is further illustrated in Fig. 1.9, where a circuit element has been extracted from a larger circuit for examination. In Fig. 1.9a, energy is being supplied *to* the element by whatever is attached to the terminals. Note that 2 A, that is, 2 C of charge are moving from point A to point B through the element each second. Each coulomb loses 3 J of energy as it passes through the element from point A to point B. Therefore, the element is absorbing 6 J of energy per second. Note that when the element is *absorbing* energy, a positive current enters the positive terminal. In Fig. 1.9b energy is being supplied *by* the element to whatever is connected to terminals A–B. In this case, note that when the element is *supplying* energy, a positive current enters the negative terminal and leaves via the positive terminal. In this convention, a negative current in one direction is equivalent to a positive current in the opposite direction, and vice versa. Similarly, a negative voltage in one direction is equivalent to a positive voltage in the opposite direction.



**Figure 1.9**  
Voltage–current relationships  
for (a) energy absorbed and  
(b) energy supplied.

## EXAMPLE 1.1

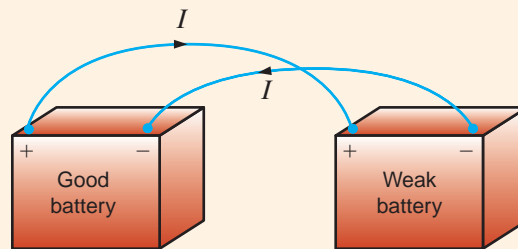
Suppose that your car will not start. To determine whether the battery is faulty, you turn on the light switch and find that the lights are very dim, indicating a weak battery. You borrow a friend's car and a set of jumper cables. However, how do you connect his car's battery to yours? What do you want his battery to do?

### SOLUTION

Essentially, his car's battery must supply energy to yours, and therefore it should be connected in the manner shown in Fig. 1.10. Note that the positive current leaves the positive terminal of the good battery (supplying energy) and enters the positive terminal of the weak battery (absorbing energy). Note that the same connections are used when charging a battery.

Figure 1.10

Diagram for Example 1.1.



In practical applications there are often considerations other than simply the electrical relations (e.g., safety). Such is the case with jump-starting an automobile. Automobile batteries produce explosive gases that can be ignited accidentally, causing severe physical injury. Be safe—follow the procedure described in your auto owner's manual.

We have defined voltage in joules per coulomb as the energy required to move a positive charge of 1 C through an element. If we assume that we are dealing with a differential amount of charge and energy, then

$$v = \frac{dw}{dq} \quad 1.2$$

Multiplying this quantity by the current in the element yields

$$vi = \frac{dw}{dq} \left( \frac{dq}{dt} \right) = \frac{dw}{dt} = p \quad 1.3$$

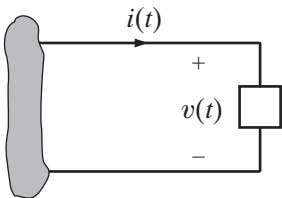


Figure 1.11

Sign convention for power.

which is the time rate of change of energy or power measured in joules per second, or watts (W). Since, in general, both  $v$  and  $i$  are functions of time,  $p$  is also a time-varying quantity. Therefore, the change in energy from time  $t_1$  to time  $t_2$  can be found by integrating Eq. (1.3); that is,

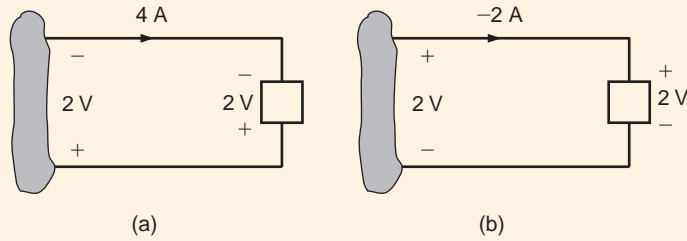
$$\Delta w = \int_{t_1}^{t_2} p \, dt = \int_{t_1}^{t_2} vi \, dt \quad 1.4$$

At this point, let us summarize our sign convention for power. To determine the sign of any of the quantities involved, the variables for the current and voltage should be arranged as shown in Fig. 1.11. The variable for the voltage  $v(t)$  is defined as the voltage across the element with the positive reference at the same terminal that the current variable  $i(t)$  is entering. This convention is called the *passive sign convention* and will be so noted in the remainder of this book. The product of  $v$  and  $i$ , with their attendant signs, will determine the magnitude and sign of the power. If the sign of the power is positive, power is being absorbed by the element; if the sign is negative, power is being supplied by the element.

### [hint]

The passive sign convention is used to determine whether power is being absorbed or supplied.

Given the two diagrams shown in Fig. 1.12, determine whether the element is absorbing or supplying power and how much.



## EXAMPLE 1.2

Figure 1.12

Elements for Example 1.2.

In Fig. 1.12a the power is  $P = (2 \text{ V})(-4 \text{ A}) = -8 \text{ W}$ . Therefore, the element is supplying power. In Fig. 1.12b, the power is  $P = (2 \text{ V})(-2 \text{ A}) = -4 \text{ W}$ . Therefore, the element is supplying power.

## SOLUTION

## Learning Assessment

**E1.1** Determine the amount of power absorbed or supplied by the elements in Fig. E1.1.

## ANSWER:

- (a)  $P = -48 \text{ W}$ ;  
 (b)  $P = 8 \text{ W}$ .

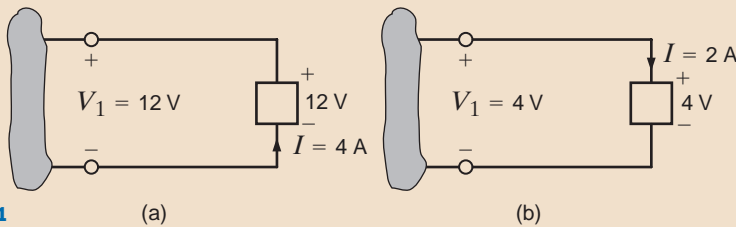
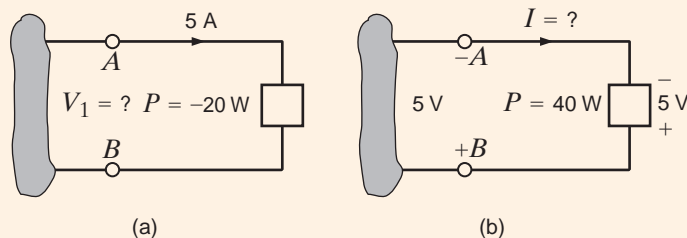


Figure E1.1

We wish to determine the unknown voltage or current in Fig. 1.13.



## EXAMPLE 1.3

Figure 1.13

Elements for Example 1.3.

In Fig. 1.13a, a power of  $-20 \text{ W}$  indicates that the element is delivering power. Therefore, the current enters the negative terminal (terminal  $A$ ), and from Eq. (1.3) the voltage is  $4 \text{ V}$ . Thus,  $B$  is the positive terminal,  $A$  is the negative terminal, and the voltage between them is  $4 \text{ V}$ .

In Fig. 1.13b, a power of  $+40 \text{ W}$  indicates that the element is absorbing power and, therefore, the current should enter the positive terminal  $B$ . The current thus has a value of  $-8 \text{ A}$ , as shown in the figure.

## SOLUTION

# Learning Assessment

**E1.2** Determine the unknown variables in Fig. E1.2.

**ANSWER:**

(a)  $V_1 = -20$  V;

(b)  $I = -5$  A.

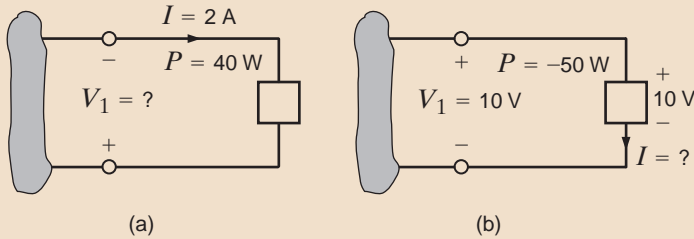


Figure E1.2

Finally, it is important to note that our electrical networks satisfy the principle of conservation of energy. Because of the relationship between energy and power, it can be implied that power is also conserved in an electrical network. This result was formally stated in 1952 by B. D. H. Tellegen and is known as Tellegen's theorem—the sum of the powers absorbed by all elements in an electrical network is zero. Another statement of this theorem is that the power supplied in a network is exactly equal to the power absorbed. Checking to verify that Tellegen's theorem is satisfied for a particular network is one way to check our calculations when analyzing electrical networks.

## 1.3

### Circuit Elements

Thus far we have defined voltage, current, and power. In the remainder of this chapter we will define both independent and dependent current and voltage sources. Although we will assume ideal elements, we will try to indicate the shortcomings of these assumptions as we proceed with the discussion.

In general, the elements we will define are terminal devices that are completely characterized by the current through the element and/or the voltage across it. These elements, which we will employ in constructing electric circuits, will be broadly classified as being either active or passive. The distinction between these two classifications depends essentially on one thing—whether they supply or absorb energy. As the words themselves imply, an *active* element is capable of generating energy and a *passive* element cannot generate energy.

However, later we will show that some passive elements are capable of storing energy. Typical active elements are batteries and generators. The three common passive elements are resistors, capacitors, and inductors.

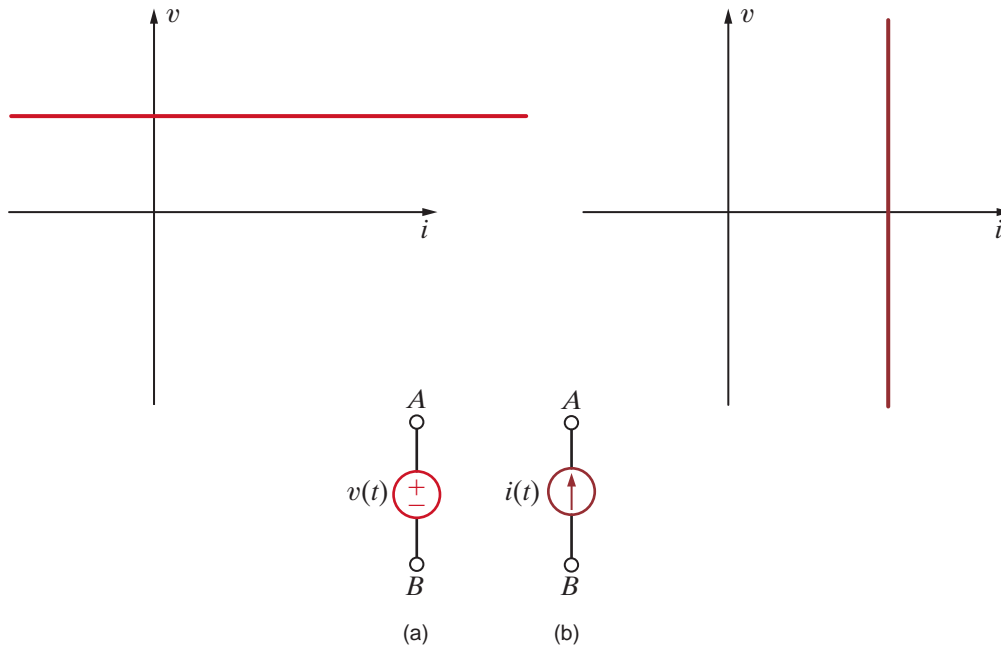
In Chapter 2 we will launch an examination of passive elements by discussing the resistor in detail. Before proceeding with that element, we first present some very important active elements.

1. Independent voltage source
2. Independent current source
3. Two dependent voltage sources
4. Two dependent current sources

**INDEPENDENT SOURCES** An *independent voltage source* is a two-terminal element that maintains a specified voltage between its terminals *regardless of the current through it* as shown by the  $v$ - $i$  plot in Fig. 1.14a. The general symbol for an independent source, a circle, is also shown in Fig. 1.14a. As the figure indicates, terminal  $A$  is  $v(t)$  volts positive with respect to terminal  $B$ .

In contrast to the independent voltage source, the *independent current source* is a two-terminal element that maintains a specified current *regardless of the voltage across its terminals*, as illustrated by the  $v$ - $i$  plot in Fig. 1.14b. The general symbol for an independent current source is also shown in Fig. 1.14b, where  $i(t)$  is the specified current and the arrow indicates the positive direction of current flow.





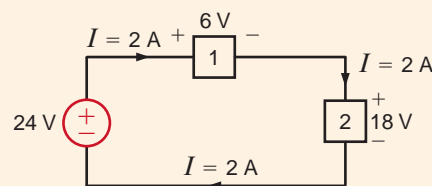
**Figure 1.14**  
Symbols for (a) independent voltage source, (b) independent current source.

In their normal mode of operation, independent sources supply power to the remainder of the circuit. However, they may also be connected into a circuit in such a way that they absorb power. A simple example of this latter case is a battery-charging circuit such as that shown in Example 1.1.

It is important that we pause here to interject a comment concerning a shortcoming of the models. In general, mathematical models approximate actual physical systems only under a certain range of conditions. Rarely does a model accurately represent a physical system under every set of conditions. To illustrate this point, consider the model for the voltage source in Fig. 1.14a. We assume that the voltage source delivers  $v$  volts regardless of what is connected to its terminals. Theoretically, we could adjust the external circuit so that an infinite amount of current would flow, and therefore the voltage source would deliver an infinite amount of power. This is, of course, physically impossible. A similar argument could be made for the independent current source. Hence, the reader is cautioned to keep in mind that models have limitations and thus are valid representations of physical systems only under certain conditions.

For example, can the independent voltage source be utilized to model the battery in an automobile under all operating conditions? With the headlights on, turn on the radio. Do the headlights dim with the radio on? They probably won't if the sound system in your automobile was installed at the factory. If you try to crank your car with the headlights on, you will notice that the lights dim. The starter in your car draws considerable current, thus causing the voltage at the battery terminals to drop and dimming the headlights. The independent voltage source is a good model for the battery with the radio turned on; however, an improved model is needed for your battery to predict its performance under cranking conditions.

Determine the power absorbed or supplied by the elements in the network in Fig. 1.15.



## EXAMPLE 1.4

**Figure 1.15**  
Network for Example 1.4.

**SOLUTION**

[hint]

Elements that are connected in series have the same current.

The current flow is out of the positive terminal of the 24-V source, and therefore this element is supplying  $(2)(24) = 48$  W of power. The current is into the positive terminals of elements 1 and 2, and therefore elements 1 and 2 are absorbing  $(2)(6) = 12$  W and  $(2)(18) = 36$  W, respectively. Note that the power supplied is equal to the power absorbed.

## Learning Assessment

**E1.3** Find the power that is absorbed or supplied by the elements in Fig. E1.3.

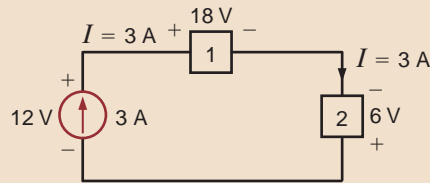


Figure E1.3

**ANSWER:** Current source supplies 36 W, element 1 absorbs 54 W, and element 2 supplies 18 W.

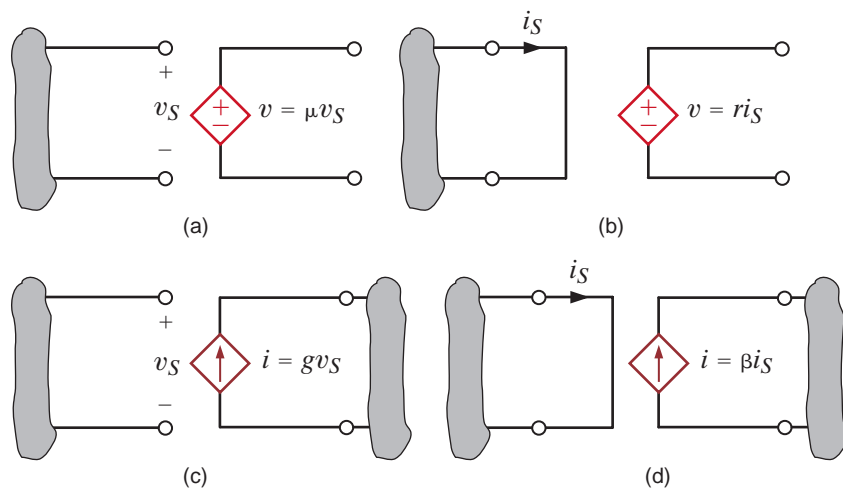
**DEPENDENT SOURCES** In contrast to the independent sources, which produce a particular voltage or current completely unaffected by what is happening in the remainder of the circuit, dependent sources generate a voltage or current that is determined by a voltage or current at a specified location in the circuit. These sources are very important because they are an integral part of the mathematical models used to describe the behavior of many electronic circuit elements.

For example, metal-oxide-semiconductor field-effect transistors (MOSFETs) and bipolar transistors, both of which are commonly found in a host of electronic equipment, are modeled with dependent sources, and therefore the analysis of electronic circuits involves the use of these controlled elements.

In contrast to the circle used to represent independent sources, a diamond is used to represent a dependent or controlled source. Fig. 1.16 illustrates the four types of dependent sources. The input terminals on the left represent the voltage or current that controls the dependent source, and the output terminals on the right represent the output current or voltage of the controlled source. Note that in Figs. 1.16a and d, the quantities  $\mu$  and  $\beta$  are dimensionless constants because we are transforming voltage to voltage and current to current. This is not the case in Figs. 1.16b and c; hence, when we employ these elements a short time later, we must describe the units of the factors  $r$  and  $g$ .

Figure 1.16

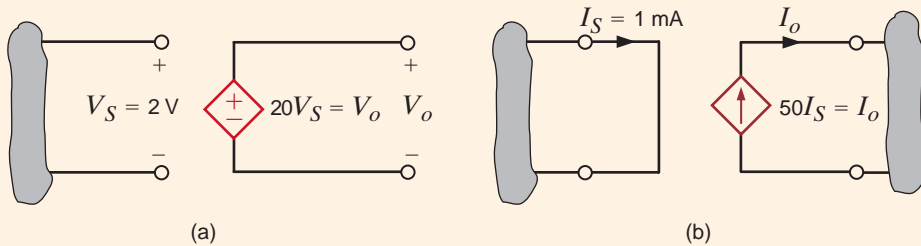
Four different types of dependent sources.



Given the two networks shown in Fig. 1.17, we wish to determine the outputs.

**EXAMPLE****1.5**

In Fig. 1.17a the output voltage is  $V_o = \mu V_S$  or  $V_o = 20 V_S = (20)(2 \text{ V}) = 40 \text{ V}$ . Note that the output voltage has been amplified from 2 V at the input terminals to 40 V at the output terminals; that is, the circuit is a voltage amplifier with an amplification factor of 20.

**SOLUTION****Figure 1.17**

Circuits for Example 1.5.

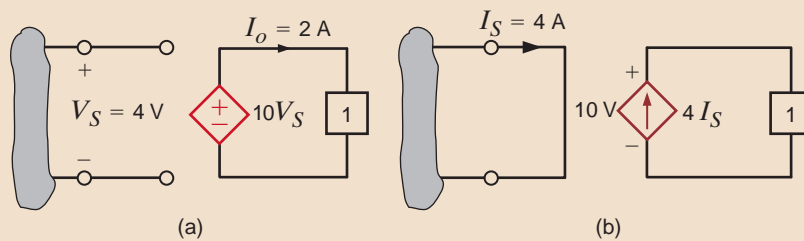
In Fig. 1.17b, the output current is  $I_o = \beta I_S = (50)(1 \text{ mA}) = 50 \text{ mA}$ ; that is, the circuit has a current gain of 50, meaning that the output current is 50 times greater than the input current.

## Learning Assessment

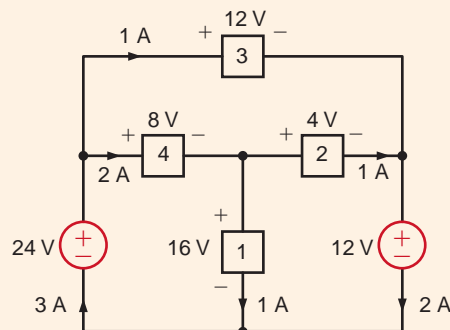
**E1.4** Determine the power supplied by the dependent sources in Fig. E1.4.

**ANSWER:**

- (a) Power supplied = 80 W;  
 (b) power supplied = 160 W.

**Figure E1.4**

Calculate the power absorbed by each element in the network of Fig. 1.18. Also verify that Tellegen's theorem is satisfied by this network.

**EXAMPLE****1.6****Figure 1.18**

Circuit used in Example 1.6.

Let's calculate the power absorbed by each element using the sign convention for power.

**SOLUTION**

$$P_1 = (16)(1) = 16 \text{ W}$$

$$P_2 = (4)(1) = 4 \text{ W}$$

$$P_3 = (12)(1) = 12 \text{ W}$$

$$P_4 = (8)(2) = 16 \text{ W}$$

$$P_{12\text{V}} = (12)(2) = 24 \text{ W}$$

$$P_{24\text{V}} = (24)(-3) = -72 \text{ W}$$

Note that to calculate the power absorbed by the 24-V source, the current of 3 A flowing up through the source was changed to a current  $-3 \text{ A}$  flowing down through the 24-V source. Let's sum up the power absorbed by all elements:  $16 + 4 + 12 + 16 + 24 - 72 = 0$ . This sum is zero, which verifies that Tellegen's theorem is satisfied.

### EXAMPLE 1.7

Use Tellegen's theorem to find the current  $I_o$  in the network in Fig. 1.19.

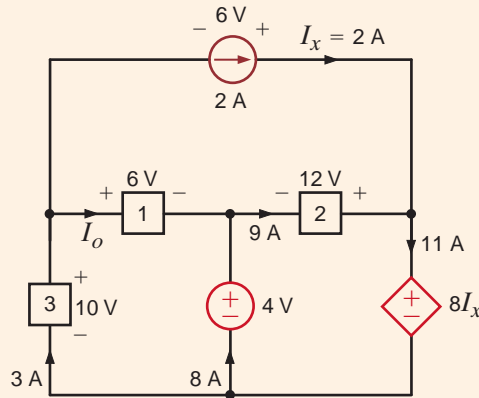


Figure 1.19

Circuit used in Example 1.7.

#### SOLUTION

First, we must determine the power absorbed by each element in the network. Using the sign convention for power, we find

$$P_{2\text{A}} = (6)(-2) = -12 \text{ W}$$

$$P_1 = (6)(I_o) = 6I_o \text{ W}$$

$$P_2 = (12)(-9) = -108 \text{ W}$$

$$P_3 = (10)(-3) = -30 \text{ W}$$

$$P_{4\text{V}} = (4)(-8) = -32 \text{ W}$$

$$P_{DS} = (8I_x)(11) = (16)(11) = 176 \text{ W}$$

Applying Tellegen's theorem yields

$$-12 + 6I_o - 108 - 30 - 32 + 176 = 0$$

or

$$6I_o + 176 = 12 + 108 + 30 + 32$$

Hence,

$$I_o = 1\text{A}$$

## Learning Assessment

**E1.5** Find the power that is absorbed or supplied by the circuit elements in the network in Fig. E1.5.

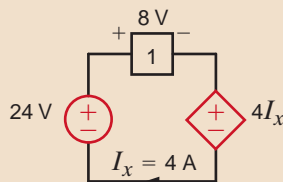


Figure E1.5

#### ANSWER:

$P_{24\text{V}} = 96 \text{ W}$  supplied;  
 $P_1 = 32 \text{ W}$  absorbed;  
 $P_{4I_x} = 64 \text{ W}$  absorbed.

**E1.6** Find the power that is absorbed or supplied by the network elements in Fig. E1.6.

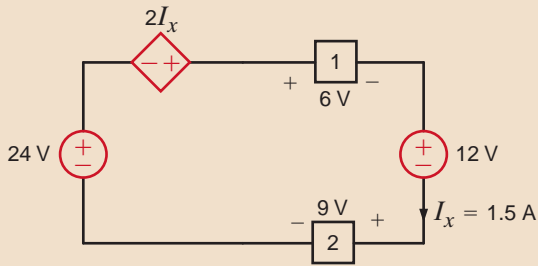


Figure E1.6

**ANSWER:**

$P_{24V} = 36 \text{ W}$  supplied,  
 $P_{12V} = 18 \text{ W}$  absorbed,  
 $P_{2I_x} = 4.5 \text{ W}$  supplied,  
 $P_1 = 9 \text{ W}$  absorbed,  
 $P_2 = 13.5 \text{ W}$  absorbed.

**E1.7** Find  $I_x$  in Fig. E1.7 using Tellegen's theorem.

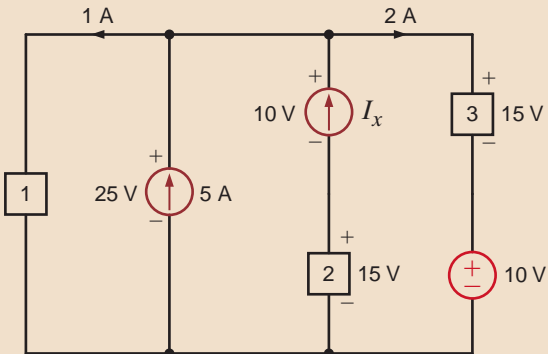
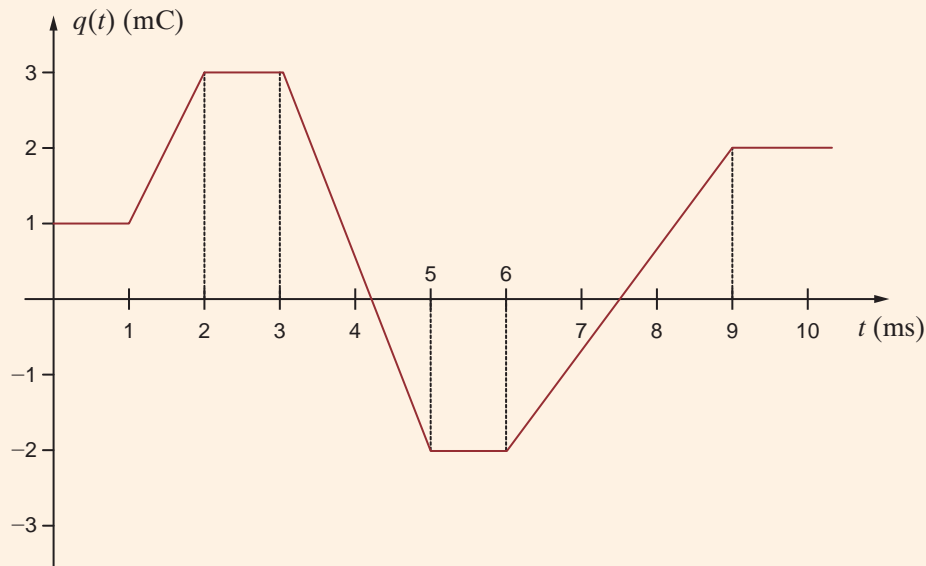
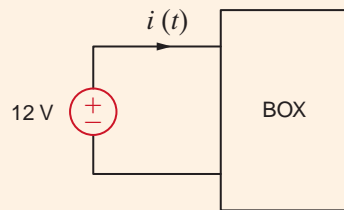


Figure E1.7

**ANSWER:**

$I_x = -2 \text{ A}$ .

The charge that enters the BOX is shown in Fig. 1.20. Calculate and sketch the current flowing into and the power absorbed by the BOX between 0 and 10 milliseconds.



## EXAMPLE 1.8

Figure 1.20

Diagrams for Example 1.8.

**SOLUTION** Recall that current is related to charge by  $i(t) = \frac{dq(t)}{dt}$ . The current is equal to the slope of the charge waveform.

$$i(t) = 0 \quad 0 \leq t \leq 1 \text{ ms}$$

$$i(t) = \frac{3 \times 10^{-3} - 1 \times 10^{-3}}{2 \times 10^{-3} - 1 \times 10^{-3}} = 2 \text{ A} \quad 1 \leq t \leq 2 \text{ ms}$$

$$i(t) = 0 \quad 2 \leq t \leq 3 \text{ ms}$$

$$i(t) = \frac{-2 \times 10^{-3} - 3 \times 10^{-3}}{5 \times 10^{-3} - 3 \times 10^{-3}} = -2.5 \text{ A} \quad 3 \leq t \leq 5 \text{ ms}$$

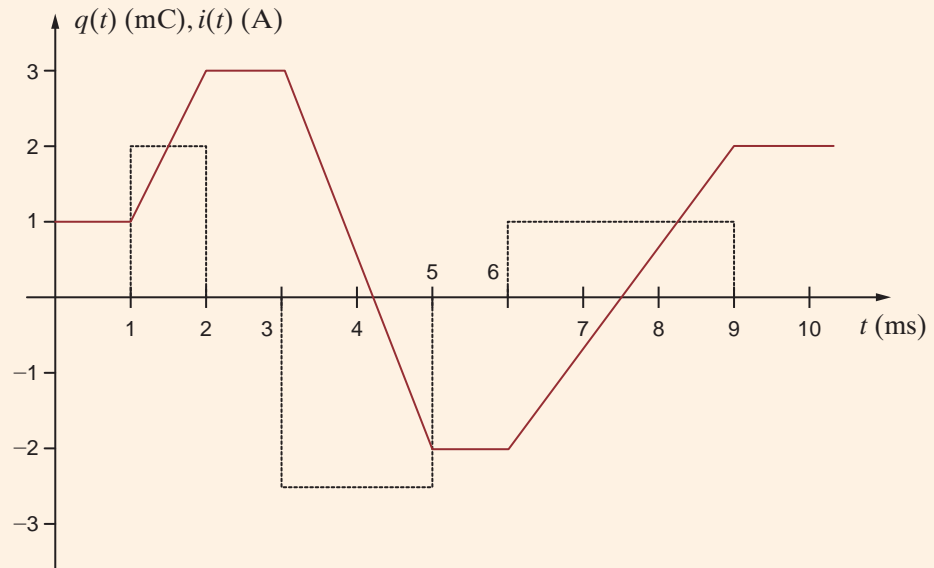
$$i(t) = 0 \quad 5 \leq t \leq 6 \text{ ms}$$

$$i(t) = \frac{2 \times 10^{-3} - (-2 \times 10^{-3})}{9 \times 10^{-3} - 6 \times 10^{-3}} = 1.33 \text{ A} \quad 6 \leq t \leq 9 \text{ ms}$$

$$i(t) = 0 \quad t \geq 9 \text{ ms}$$

The current is plotted with the charge waveform in Fig. 1.21. Note that the current is zero during times when the charge is a constant value. When the charge is increasing, the current is positive, and when the charge is decreasing, the current is negative.

**Figure 1.21**  
Charge and current  
waveforms for Example 1.8.



The power absorbed by the BOX is  $12 \cdot i(t)$ .

$$p(t) = 12 \cdot 0 = 0 \quad 0 \leq t \leq 1 \text{ ms}$$

$$p(t) = 12 \cdot 2 = 24 \text{ W} \quad 1 \leq t \leq 2 \text{ ms}$$

$$p(t) = 12 \cdot 0 = 0 \quad 2 \leq t \leq 3 \text{ ms}$$

$$p(t) = 12 \cdot (-2.5) = -30 \text{ W} \quad 3 \leq t \leq 5 \text{ ms}$$

$$p(t) = 12 \cdot 0 = 0 \quad 5 \leq t \leq 6 \text{ ms}$$

$$p(t) = 12 \cdot 1.33 = 16 \text{ W} \quad 6 \leq t \leq 9 \text{ ms}$$

$$p(t) = 12 \cdot 0 = 0 \quad t \geq 9 \text{ ms}$$

The power absorbed by the BOX is plotted in Fig. 1.22. For the time intervals,  $1 \leq t \leq 2$  ms and  $6 \leq t \leq 9$  ms, the BOX is absorbing power. During the time interval  $3 \leq t \leq 5$  ms, the power absorbed by the BOX is negative, which indicates that the BOX is supplying power to the 12-V source.

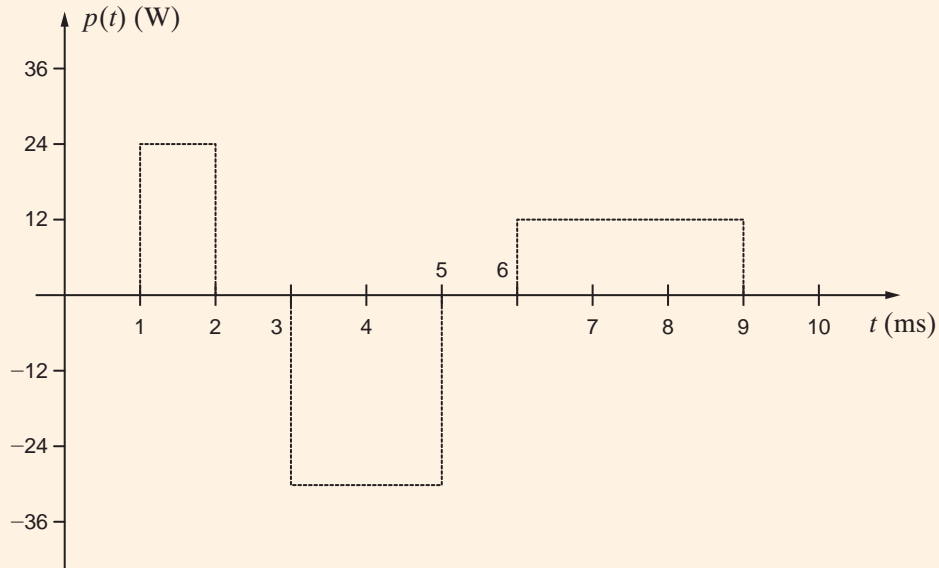
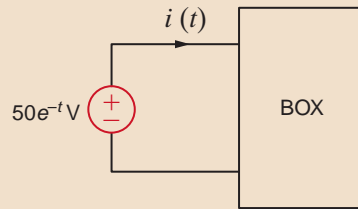


Figure 1.22

Power waveform for Example 1.8.

## Learning Assessment

**E1.8** The power absorbed by the BOX in Fig. E1.8 is  $p(t) = 2.5e^{-4t}$  W. Compute the energy and charge delivered to the BOX in the time interval  $0 < t < 250$  ms.



**ANSWER:** 395.1 mJ, 8.8 mC.

Figure E1.8

**E1.9** The energy absorbed by the BOX in Fig. E1.9 is given below. Calculate and sketch the current flowing into the BOX. Also calculate the charge that enters the BOX between 0 and 12 seconds.

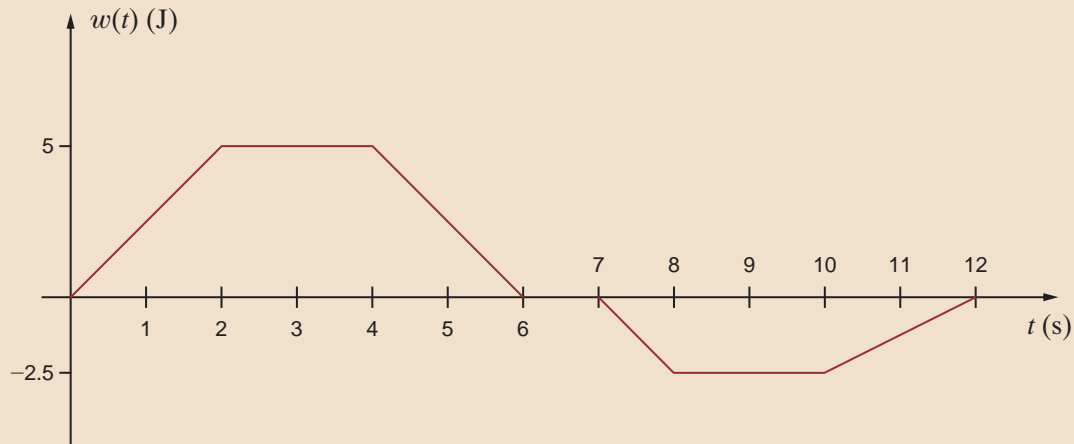
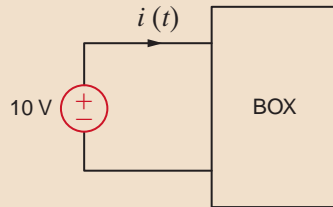
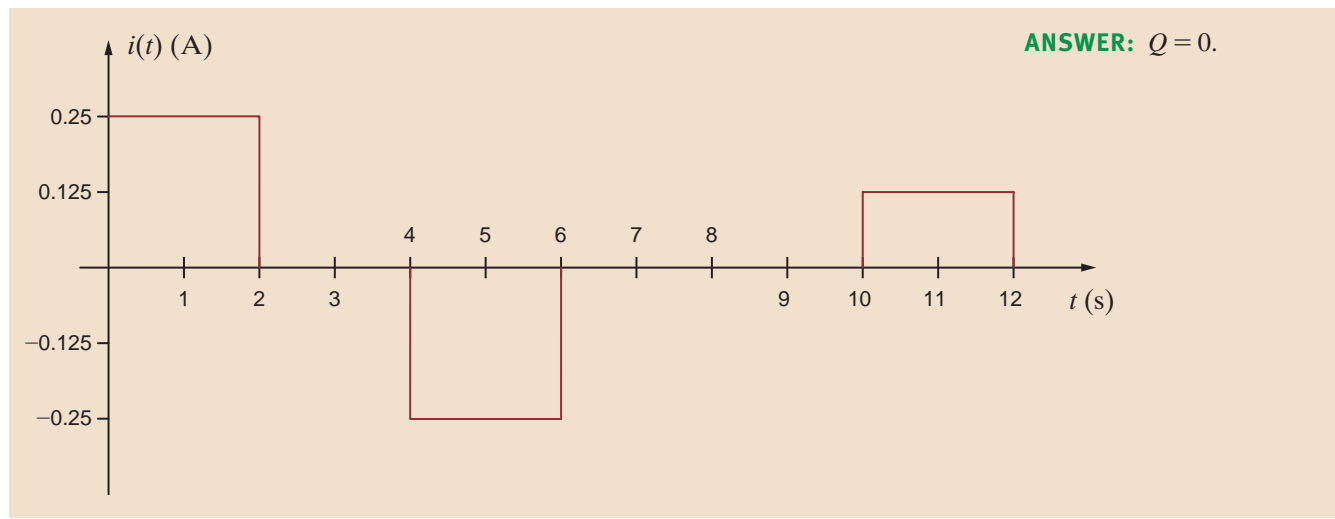


Figure E1.9



### EXAMPLE 1.9

A Universal Serial Bus (USB) port is a common feature on both desktop and notebook computers as well as many handheld devices such as MP3 players, digital cameras, and cell phones. The USB 2.0 specification ([www.usb.org](http://www.usb.org)) permits data transfer between a computer and a peripheral device at rates up to 480 megabits per second. One important feature of USB is the ability to swap peripherals without having to power down a computer. USB ports are also capable of supplying power to external peripherals. Fig. 1.23 shows a Motorola RAZR® and an Apple iPod® being charged from the USB ports on a notebook computer. A USB cable is a four-conductor cable with two signal conductors and two conductors for providing power. The amount of current that can be provided over a USB port is defined in the USB specification in terms of unit loads, where one unit load is specified to be 100 mA. All USB ports default to low-power ports at one unit load, but can be changed under software control to high-power ports capable of supplying up to five unit loads or 500 mA.

**Figure 1.23**

Charging a Motorola RAZR® and Apple iPod® from USB ports. (Courtesy of Mark Nelms and Jo Ann Loden)





1. A 680 mAh lithium-ion battery is standard in a Motorola RAZR®. If this battery is completely discharged (i.e., 0 mAh), how long will it take to recharge the battery to its full capacity of 680 mAh from a low-power USB port? How much charge is stored in the battery at the end of the charging process?
2. A third-generation iPod® with a 630 mAh lithium-ion battery is to be recharged from a high-power USB port supplying 150 mA of current. At the beginning of the recharge, 7.8 C of charge are stored in the battery. The recharging process halts when the stored charge reaches 35.9 C. How long does it take to recharge the battery?

1. A low-power USB port operates at 100 mA. Assuming that the charging current from the USB port remains at 100 mA throughout the charging process, the time required to recharge the battery is  $680 \text{ mAh}/100 \text{ mA} = 6.8 \text{ h}$ . The charge stored in the battery when fully charged is  $680 \text{ mAh} \cdot 60 \text{ s/h} = 40,800 \text{ mAs} = 40.8 \text{ As} = 40.8 \text{ C}$ .
2. The charge supplied to the battery during the recharging process is  $35.9 - 7.8 = 28.1 \text{ C}$ . This corresponds to  $28.1 \text{ As} = 28,100 \text{ mAs} \cdot 1 \text{ h}/60 \text{ s} = 468.3 \text{ mAh}$ . Assuming a constant charging current of 150 mA from the high-power USB port, the time required to recharge the battery is  $468.3 \text{ mAh}/150 \text{ mA} = 3.12 \text{ h}$ .

### SOLUTION

## SUMMARY

### ■ The standard prefixes employed

$$\begin{array}{ll} \text{p} = 10^{-12} & \text{k} = 10^3 \\ \text{n} = 10^{-9} & \text{M} = 10^6 \\ \mu = 10^{-6} & \text{G} = 10^9 \\ \text{m} = 10^{-3} & \text{T} = 10^{12} \end{array}$$

### ■ The relationships between current and charge

$$i(t) = \frac{dq(t)}{dt} \quad \text{or} \quad q(t) = \int_{-\infty}^t i(x) dx$$

### ■ The relationships among power, energy, current, and voltage

$$\begin{aligned} p &= \frac{dw}{dt} = vi \\ \Delta w &= \int_{t_1}^{t_2} p dt = \int_{t_1}^{t_2} vi dt \end{aligned}$$

■ **The passive sign convention** The passive sign convention states that if the voltage and current associated with an element are as shown in Fig. 1.11, the product of  $v$  and  $i$ , with their attendant signs, determines the magnitude and sign of the power. If the sign is positive, power is being absorbed by the element, and if the sign is negative, the element is supplying power.

■ **Independent and dependent sources** An ideal independent voltage (current) source is a two-terminal element that maintains a specified voltage (current) between its terminals, regardless of the current (voltage) through (across) the element. Dependent or controlled sources generate a voltage or current that is determined by a voltage or current at a specified location in the circuit.

■ **Conservation of energy** The electric circuits under investigation satisfy the conservation of energy.

■ **Tellegen's theorem** The sum of the powers absorbed by all elements in an electrical network is zero.

## PROBLEMS

- 1.1 If the current in an electric conductor is 2.4 A, how many coulombs of charge pass any point in a 30-second interval?
- 1.2 Determine the time interval required for a 12-A battery charger to deliver 4800 C.
- 1.3 A lightning bolt carrying 30,000 A lasts for 50 microseconds. If the lightning strikes an airplane flying at 20,000 feet, what is the charge deposited on the plane?
- 1.4 If a 12-V battery delivers 100 J in 5 s, find (a) the amount of charge delivered and (b) the current produced.

- 1.5 The current in a conductor is 1.5 A. How many coulombs of charge pass any point in a time interval of 1.5 minutes?
- 1.6 If 60 C of charge pass through an electric conductor in 30 seconds, determine the current in the conductor.
- 1.7 Determine the number of coulombs of charge produced by a 12-A battery charger in an hour.
- 1.8 Five coulombs of charge pass through the element in Fig. P1.8 from point A to point B. If the energy absorbed by the element is 120 J, determine the voltage across the element.

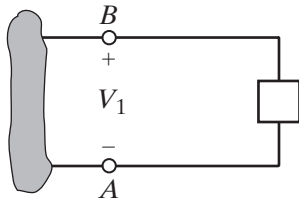


Figure P1.8

- 1.9 The current that enters an element is shown in Fig. P1.9. Find the charge that enters the element in the time interval  $0 < t < 20$  s.

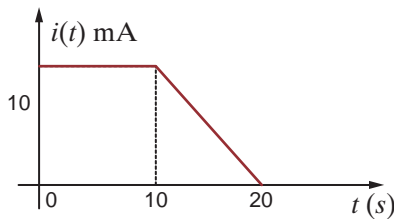


Figure P1.9

- 1.10 The charge entering the positive terminal of an element is  $q(t) = -30e^{-4t}$  mC. If the voltage across the element is  $120e^{-2t}$  V, determine the energy delivered to the element in the time interval  $0 < t < 50$  ms.

- 1.11 The charge entering the positive terminal of an element is given by the expression  $q(t) = -12e^{-2t}$  mC. The power delivered to the element is  $p(t) = 2.4e^{-3t}$  W. Compute the current in the element, the voltage across the element, and the energy delivered to the element in the time interval  $0 < t < 100$  ms.
- 1.12 The voltage across an element is  $12e^{-2t}$  V. The current entering the positive terminal of the element is  $2e^{-2t}$  A. Find the energy absorbed by the element in 1.5 s starting from  $t = 0$ .
- 1.13 The power absorbed by the BOX in Fig. P1.13 is  $2e^{-2t}$  W. Calculate the amount of charge that enters the BOX between 0.1 and 0.4 seconds.

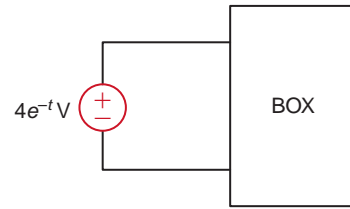


Figure P1.13

- 1.14 The power absorbed by the BOX in Fig. P1.14 is  $0.1e^{-4t}$  W. Calculate the energy absorbed by the BOX during this same time interval.

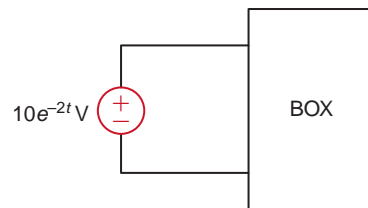


Figure P1.14

- 1.15 The energy absorbed by the BOX in Fig. P1.15 is shown below. How much charge enters the BOX between 0 and 10 milliseconds?

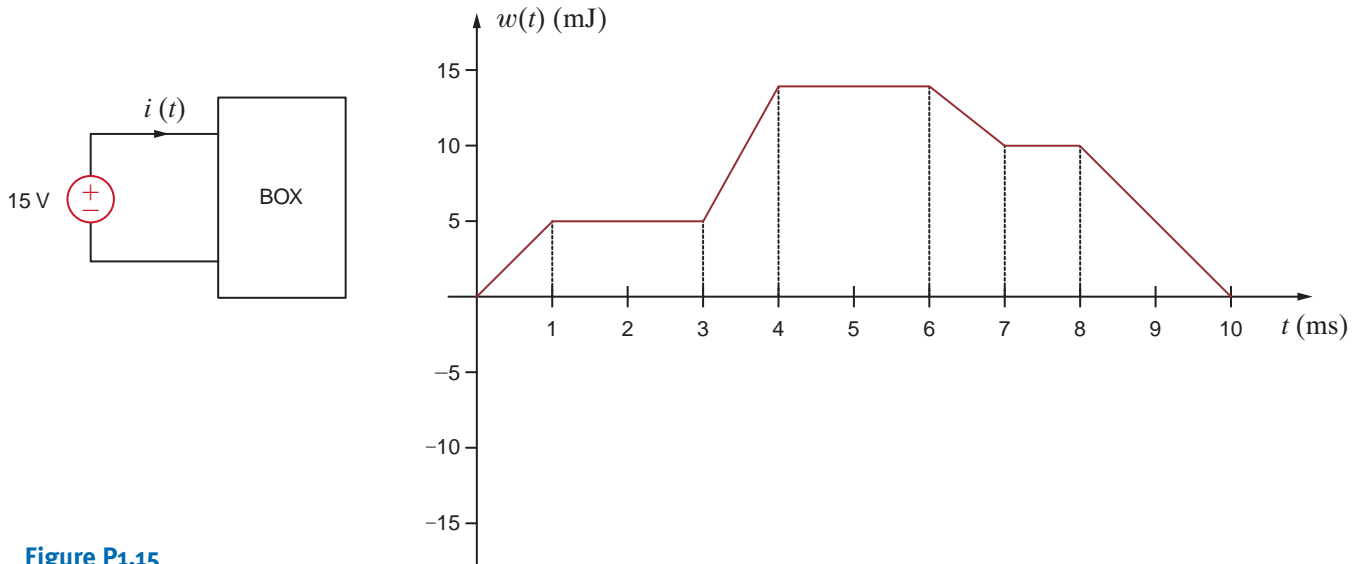


Figure P1.15

1.16 The charge that enters the BOX in Fig. P1.16 is shown in the graph below. Calculate and sketch the current flowing into and the power absorbed by the BOX between 0 and 10 milliseconds.

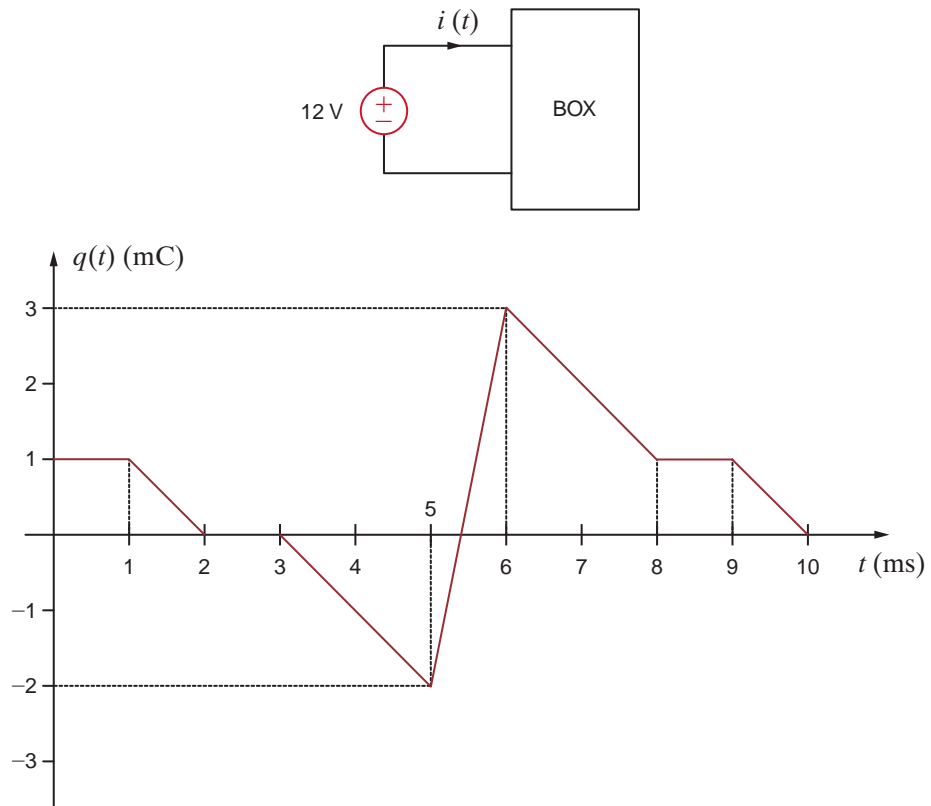


Figure P1.16

1.17 The energy absorbed by the BOX in Fig. P1.17 is given below. Calculate and sketch the current flowing into the BOX. Also calculate the charge which enters the BOX between 0 and 12 seconds.

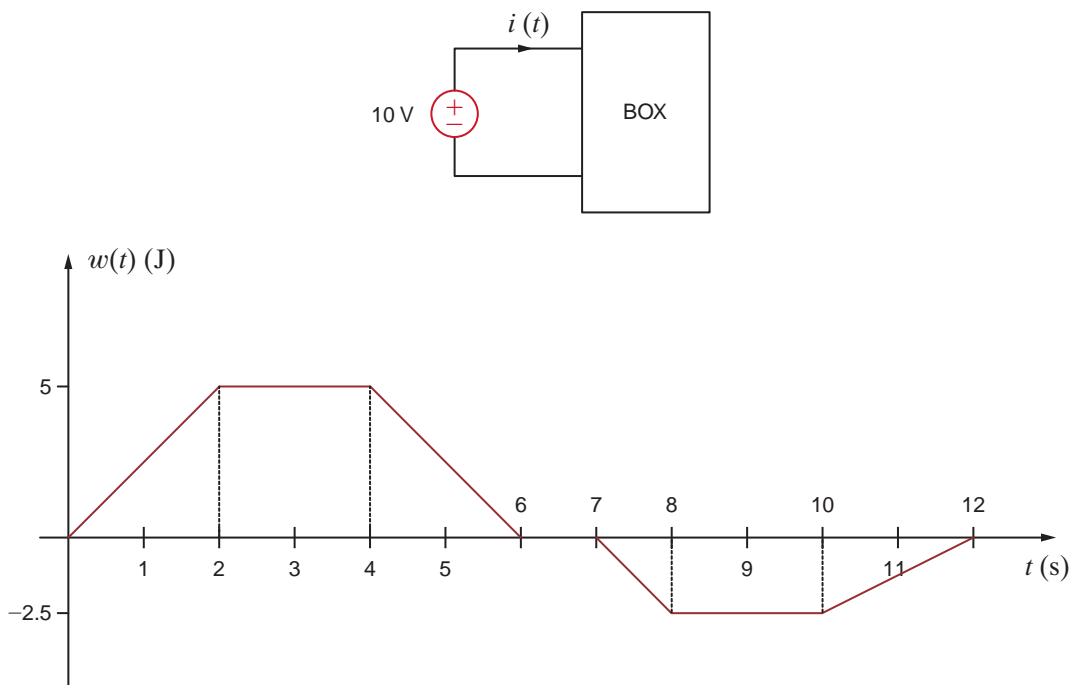
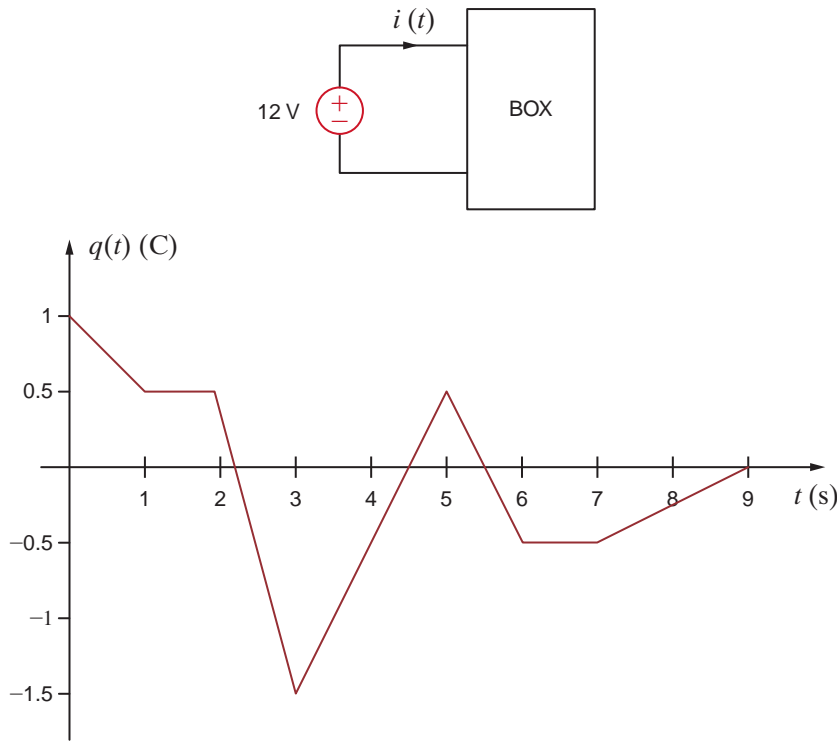


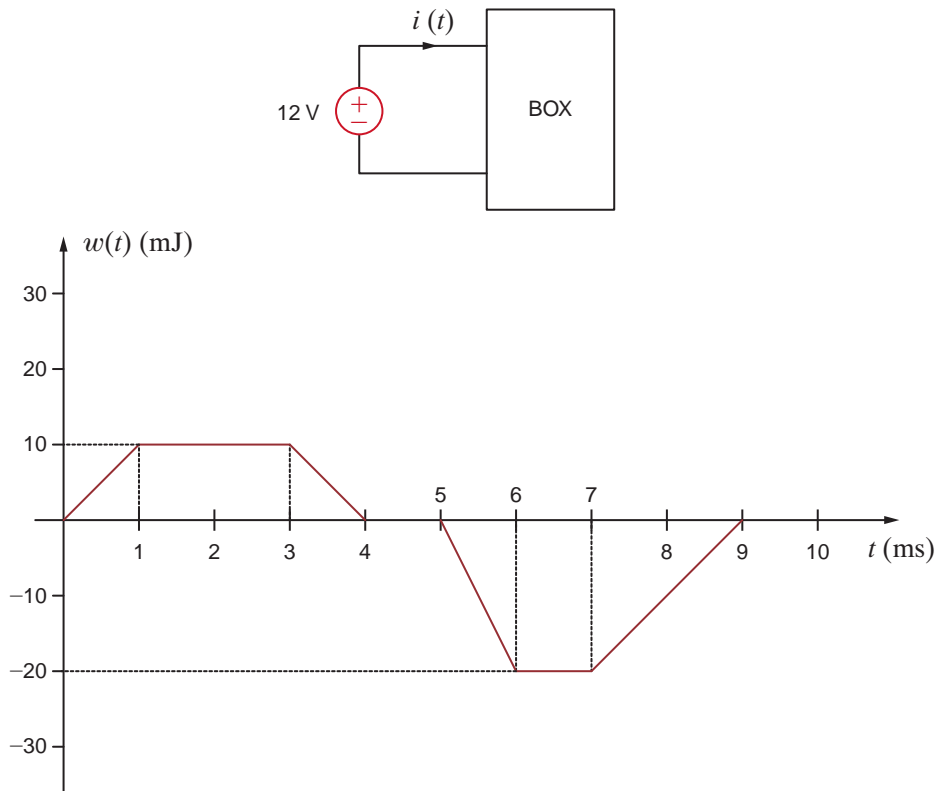
Figure P1.17

**1.18** The charge entering the upper terminal of the BOX in Fig. P1.18 is shown below. How much energy is absorbed by the BOX between 0 and 9 seconds?



**Figure P1.18**

**1.19** The energy absorbed by the BOX in Fig. P1.19 is shown in the graph below. Calculate and sketch the current flowing into the BOX between 0 and 10 milliseconds.



**Figure P1.19**

**1.20** Determine the amount of power absorbed or supplied by the element in Fig. P1.20 if

- (a)  $V_1 = 9\text{ V}$  and  $I = 2\text{ A}$
- (b)  $V_1 = 9\text{ V}$  and  $I = -3\text{ A}$
- (c)  $V_1 = -12\text{ V}$  and  $I = 2\text{ A}$
- (d)  $V_1 = -12\text{ V}$  and  $I = -3\text{ A}$

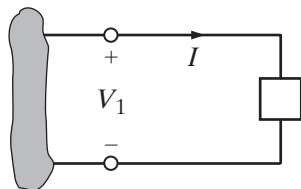


Figure P1.20

**1.21** Calculate the power absorbed by element A in Fig. P1.21.

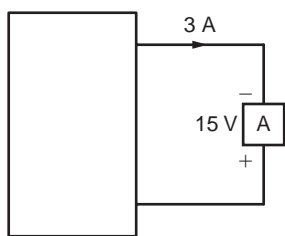


Figure P1.21

**1.22** Calculate the power supplied by element A in Fig. P1.22.

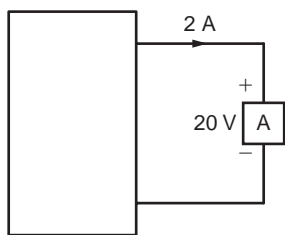


Figure P1.22

**1.23** Element A in the diagram in Fig. P1.23 absorbs 30 W of power. Calculate  $V_x$ .

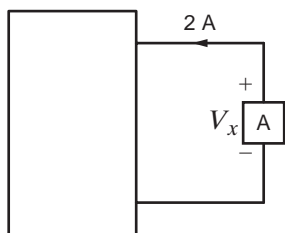


Figure P1.23

**1.24** Element B in the diagram in Fig. P1.24 supplies 60 W of power. Calculate  $I_x$ .

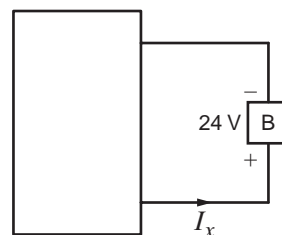


Figure P1.24

**1.25** Element B in the diagram in Fig. P1.25 supplies 72 W of power. Calculate  $V_A$ .

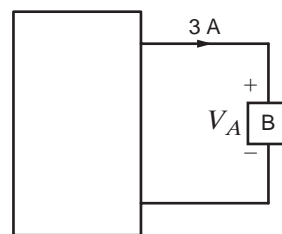


Figure P1.25

**1.26** Element B in the diagram in Fig. P1.26 supplies 72 W of power. Calculate  $I_x$ .

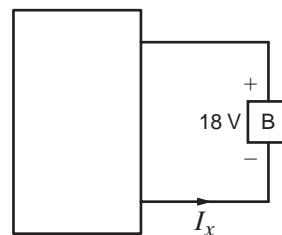


Figure P1.26

**1.27 (a)** In Fig. P1.27 (a),  $P_1 = 36\text{ W}$ . Is element 2 absorbing or supplying power, and how much?

**(b)** In Fig. P1.27 (b),  $P_2 = -48\text{ W}$ . Is element 1 absorbing or supplying power, and how much?

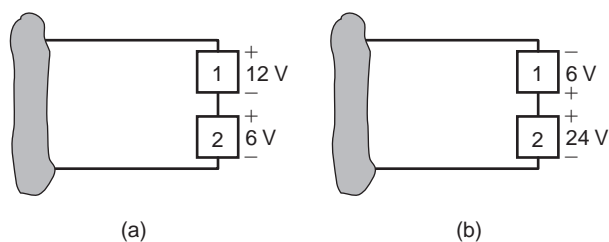


Figure P1.27

**1.28** Two elements are connected in series, as shown in Fig. P1.28. Element 1 supplies 24 W of power. Is element 2 absorbing or supplying power, and how much?

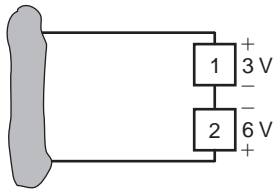


Figure P1.28

**1.29** Element 2 in Fig. P1.29 absorbed 32 W. Find the power absorbed or supplied by elements 1 and 3.

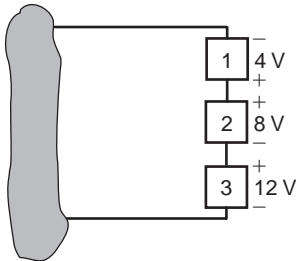


Figure P1.29

**1.30** Choose  $I_s$  such that the power absorbed by element 2 in Fig. P1.30 is 7 W.

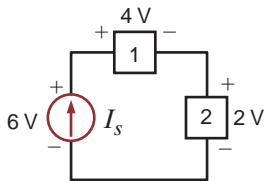
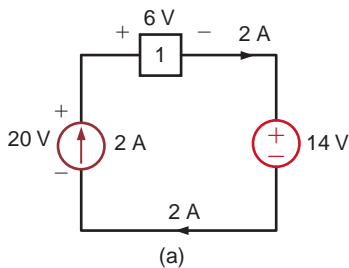
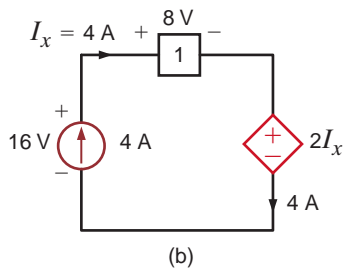


Figure P1.30

**1.31** Find the power that is absorbed or supplied by the circuit elements in Fig. P1.31.



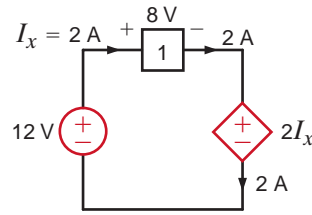
(a)



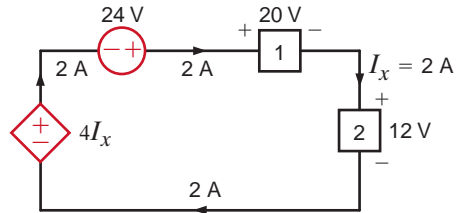
(b)

Figure P1.31

**1.32** Find the power that is absorbed or supplied by the network elements in Fig. P1.32.



(a)



(b)

Figure P1.32

**1.33** Compute the power that is absorbed or supplied by the elements in the network in Fig. P1.33.

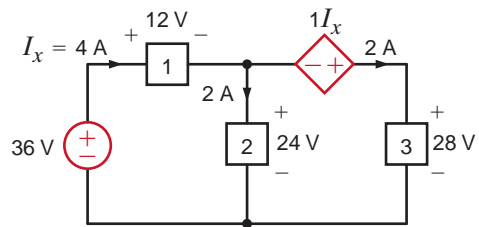


Figure P1.33

**1.34** Find the power that is absorbed or supplied by element 2 in Fig. P1.34.

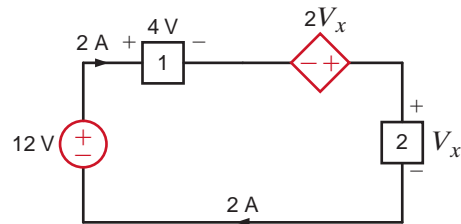


Figure P1.34

**1.35** Find  $I_x$  in the network in Fig. P1.35.

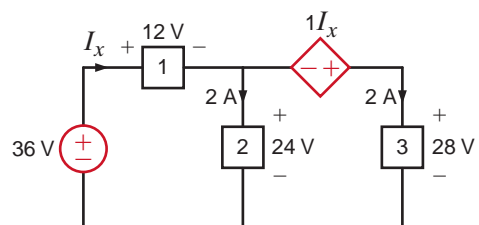


Figure P1.35

1.36 Determine the power absorbed by element 1 in Fig. P1.36.

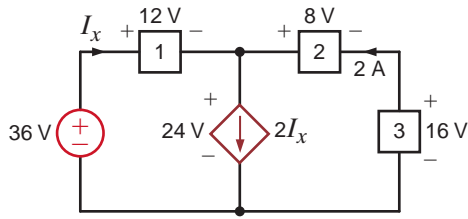


Figure P1.36

1.37 Find the power absorbed or supplied by element 1 in Fig. P1.37.

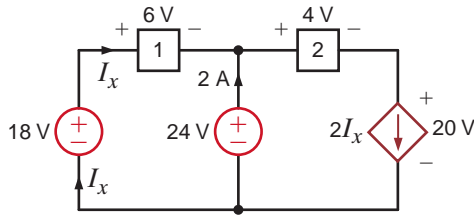


Figure P1.37

1.38 Find the power absorbed or supplied by element 3 in Fig. P1.38.

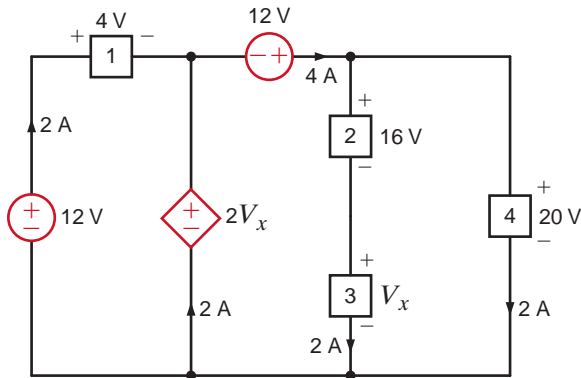


Figure P1.38

1.39 Find the power absorbed or supplied by element 1 in Fig. P1.39.

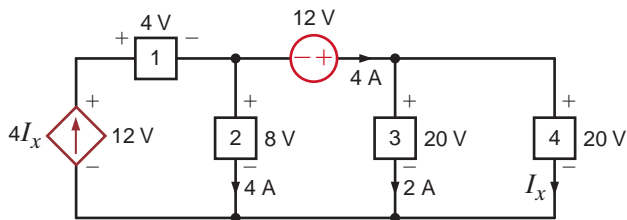


Figure P1.39

1.40 Find  $V_x$  in the network in Fig. P1.40 using Tellegen's theorem.

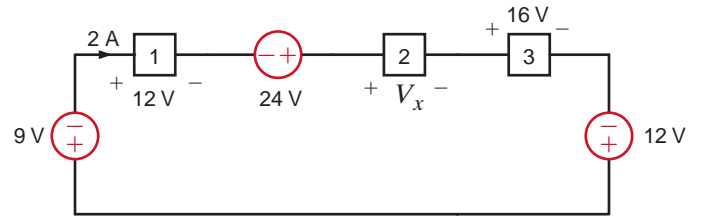


Figure P1.40

1.41 Find  $I_x$  in the circuit in Fig. P1.41 using Tellegen's theorem.

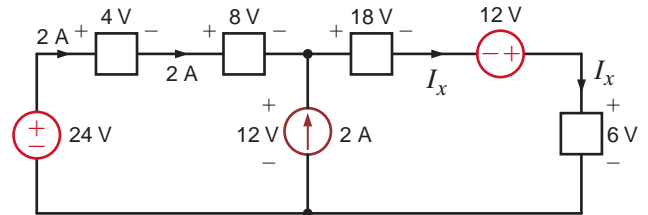


Figure P1.41

1.42 Is the source  $V_s$  in the network in Fig. P1.42 absorbing or supplying power, and how much?

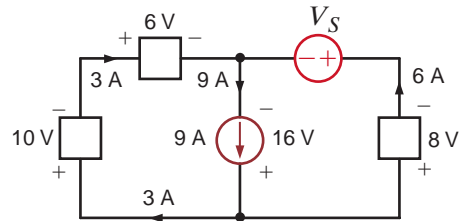


Figure P1.42

1.43 Find  $I_o$  in the network in Fig. P1.43 using Tellegen's theorem.

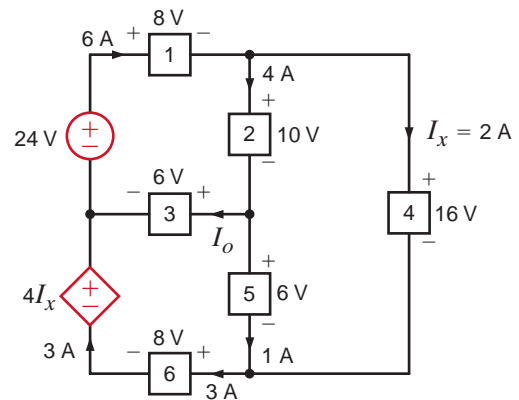


Figure P1.43

- 1.44** Calculate the power absorbed by each element in the circuit in Fig. P1.44. Also verify Tellegen's theorem is satisfied by this circuit.

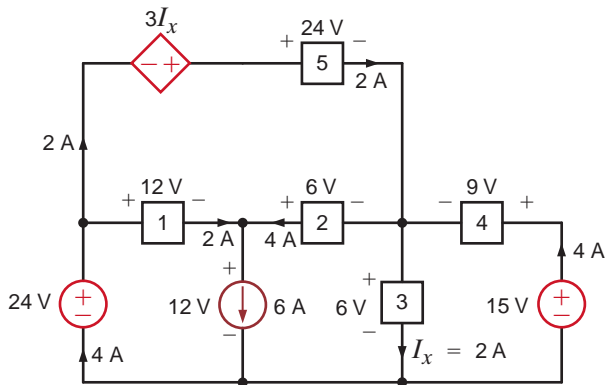


Figure P1.44

- 1.45** Calculate the power absorbed by each element in the circuit in Fig. P1.45. Also verify that Tellegen's theorem is satisfied by this circuit.

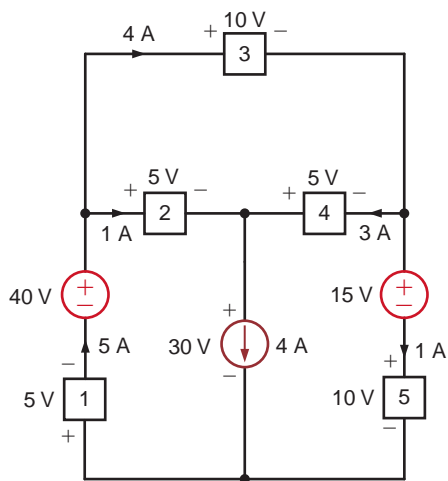


Figure P1.45

- 1.46** In the circuit in Fig. P1.46, element 1 absorbs 40 W, element 2 supplies 50 W, element 3 supplies 25 W, and element 4 absorbs 15 W. How much power is supplied by element 5?

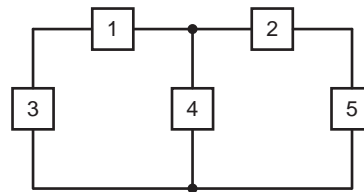


Figure P1.46



# RESISTIVE CIRCUITS



Courtesy of Tesla Motors

**Tesla Roadster** Green technologies come in many colors. The 2010 Tesla Roadster, for example, comes in Fusion Red, Arctic White, Racing Green and Electric Blue, to name a few. An environmentally friendly sports car that seats two, this convertible has rocket acceleration and hugs the road like a dream; it's the world's first high-performance electric car. The Roadster contains over 6,800 safe, rechargeable lithium-ion batteries that weigh about 1,000 pounds in total. It is twice as efficient as hybrid cars that combine a gasoline engine and an electric motor to provide propulsion, but its fantastic performance comes at a cost of over \$100,000.

Choosing between an all-electric vehicle and a hybrid requires trade-offs on a wide range of criteria: performance, cost, efficiency, effects on the environment, safety, and relia-

## THE LEARNING GOALS FOR THIS CHAPTER ARE:

- Be able to use Ohm's law to solve electric circuits
- Be able to apply Kirchhoff's current law and Kirchhoff's voltage law to solve electric circuits
- Know how to analyze single-loop and single-node-pair circuits
- Know how to combine resistors in series and parallel
- Be able to use voltage and current division to solve simple electric circuits
- Understand when and how to apply wye-delta transformations in the analysis of electric circuits
- Know how to analyze electric circuits containing dependent sources

bility. Handling qualities may be highly important to some, cost and efficiency to others.

As a student of circuit analysis, you will make trade-offs in choosing between methods of analysis for different circuit topologies. This chapter describes fundamental laws that apply to all circuits regardless of their complexity. Ohm's law governs the most common relationship between voltage and current for circuits that are linear. Circuits having a single power source with resistances having the same currents and others having the same voltage will be analyzed using the series-parallel method. You'll learn more techniques in the chapters that follow, as you begin to master the same principles used by the designers of the Tesla Roadster.

# 2.1

## Ohm's Law

### [hint]

The passive sign convention will be employed in conjunction with Ohm's law.

Ohm's law is named for the German physicist Georg Simon Ohm, who is credited with establishing the voltage–current relationship for resistance. As a result of his pioneering work, the unit of resistance bears his name.

*Ohm's law states that the voltage across a resistance is directly proportional to the current flowing through it.* The resistance, measured in ohms, is the constant of proportionality between the voltage and current.

A circuit element whose electrical characteristic is primarily resistive is called a resistor and is represented by the symbol shown in Fig. 2.1a. A resistor is a physical device that can be purchased in certain standard values in an electronic parts store. These resistors, which find use in a variety of electrical applications, are normally carbon composition or wire-wound. In addition, resistors can be fabricated using thick oxide or thin metal films for use in hybrid circuits, or they can be diffused in semiconductor integrated circuits. Some typical discrete resistors are shown in Fig. 2.1b.

The mathematical relationship of Ohm's law is illustrated by the equation

$$v(t) = R i(t), \text{ where } R \geq 0 \quad 2.1$$

or equivalently, by the voltage–current characteristic shown in Fig. 2.2a. Note carefully the relationship between the polarity of the voltage and the direction of the current. In addition, note that we have tacitly assumed that the resistor has a constant value and therefore that the voltage–current characteristic is linear.

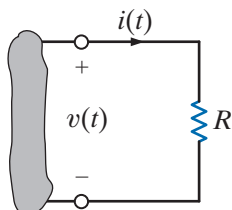
The symbol  $\Omega$  is used to represent ohms, and therefore,

$$1 \Omega = 1 \text{ V/A}$$


Although in our analysis we will always assume that the resistors are *linear* and are thus described by a straight-line characteristic that passes through the origin, it is important that readers realize that some very useful and practical elements do exist that exhibit a *nonlinear* resistance characteristic; that is, the voltage–current relationship is not a straight line.

**Figure 2.1**

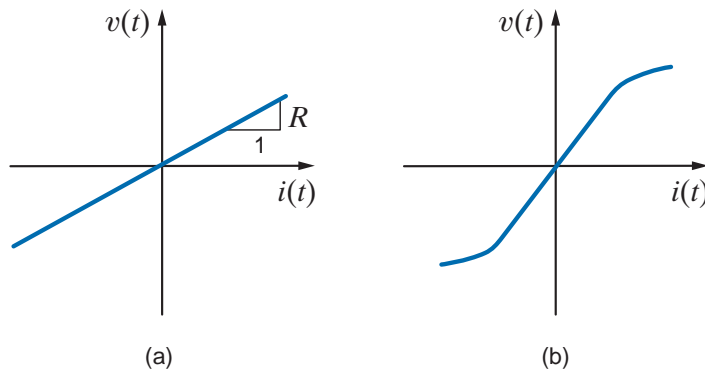
- (a) Symbol for a resistor;
- (b) some practical devices.
- (1), (2), and (3) are high-power resistors. (4) and (5) are high-wattage fixed resistors. (6) is a high-precision resistor. (7)–(12) are fixed resistors with different power ratings. (Photo courtesy of Mark Nelms and Jo Ann Loden)



(a)



(b)



**Figure 2.2**  
Graphical representation of the voltage–current relationship for (a) a linear resistor and (b) a light bulb.

The light bulb from the flashlight in Chapter 1 is an example of an element that exhibits a nonlinear characteristic. A typical characteristic for a light bulb is shown in Fig. 2.2b.

Since a resistor is a passive element, the proper current–voltage relationship is illustrated in Fig. 2.1a. The power supplied to the terminals is absorbed by the resistor. Note that the charge moves from the higher to the lower potential as it passes through the resistor and the energy absorbed is dissipated by the resistor in the form of heat. As indicated in Chapter 1, the rate of energy dissipation is the instantaneous power, and therefore

$$p(t) = v(t)i(t) \quad 2.2$$

which, using Eq. (2.1), can be written as

$$p(t) = Ri^2(t) = \frac{v^2(t)}{R} \quad 2.3$$

This equation illustrates that the power is a nonlinear function of either current or voltage and that it is always a positive quantity.

Conductance, represented by the symbol  $G$ , is another quantity with wide application in circuit analysis. By definition, conductance is the reciprocal of resistance; that is,

$$G = \frac{1}{R} \quad 2.4$$

The unit of conductance is the siemens, and the relationship between units is

$$1 \text{ S} = 1 \text{ A/V}$$

Using Eq. (2.4), we can write two additional expressions,

$$i(t) = Gv(t) \quad 2.5$$

and

$$p(t) = \frac{i^2(t)}{G} = Gv^2(t) \quad 2.6$$

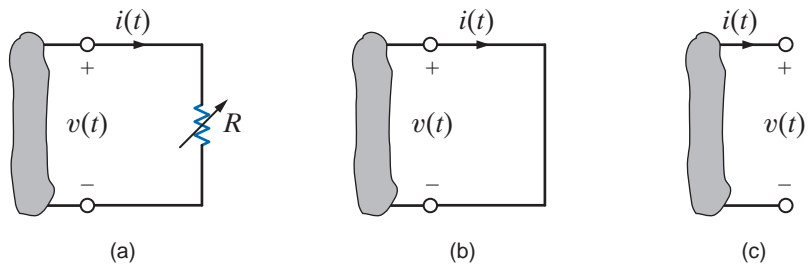
Eq. (2.5) is another expression of Ohm's law.

Two specific values of resistance, and therefore conductance, are very important:  $R = 0$  and  $R = \infty$ .

In examining the two cases, consider the network in Fig. 2.3a. The variable resistance symbol is used to describe a resistor such as the volume control on a radio or television set.

**Figure 2.3**

Short-circuit and open-circuit descriptions.



As the resistance is decreased and becomes smaller and smaller, we finally reach a point where the resistance is zero and the circuit is reduced to that shown in Fig. 2.3b; that is, the resistance can be replaced by a short circuit. On the other hand, if the resistance is increased and becomes larger and larger, we finally reach a point where it is essentially infinite and the resistance can be replaced by an open circuit, as shown in Fig. 2.3c. Note that in the case of a short circuit where  $R = 0$ ,

$$\begin{aligned} v(t) &= Ri(t) \\ &= 0 \end{aligned}$$

Therefore,  $v(t) = 0$ , although the current could theoretically be any value. In the open-circuit case where  $R = \infty$ ,

$$\begin{aligned} i(t) &= v(t)/R \\ &= 0 \end{aligned}$$

Therefore, the current is zero regardless of the value of the voltage across the open terminals.

**EXAMPLE**

**2.1**

**SOLUTION**

In the circuit in Fig. 2.4a, determine the current and the power absorbed by the resistor.

Using Eq. (2.1), we find the current to be

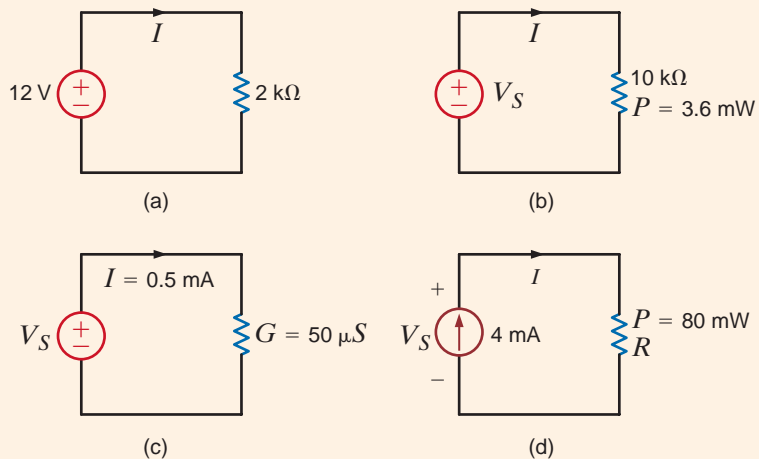
$$I = V/R = 12/2k = 6 \text{ mA}$$

Note that because many of the resistors employed in our analysis are in  $k\Omega$ , we will use  $k$  in the equations in place of 1000. The power absorbed by the resistor is given by Eq. (2.2) or (2.3) as

$$\begin{aligned} P &= VI = (12)(6 \times 10^{-3}) = 0.072 \text{ W} \\ &= I^2R = (6 \times 10^{-3})^2(2k) = 0.072 \text{ W} \\ &= V^2/R = (12)^2/2k = 0.072 \text{ W} \end{aligned}$$

**Figure 2.4**

Circuits for Examples 2.1 to 2.4.



The power absorbed by the 10-k $\Omega$  resistor in Fig. 2.4b is 3.6 mW. Determine the voltage and the current in the circuit.

## EXAMPLE 2.2

Using the power relationship, we can determine either of the unknowns:

**SOLUTION**

$$\begin{aligned}V_S^2/R &= P \\V_S^2 &= (3.6 \times 10^{-3})(10\text{k}) \\V_S &= 6 \text{ V}\end{aligned}$$

and

$$\begin{aligned}I^2R &= P \\I^2 &= (3.6 \times 10^{-3})/10\text{k} \\I &= 0.6 \text{ mA}\end{aligned}$$

Furthermore, once  $V_S$  is determined,  $I$  could be obtained by Ohm's law, and likewise once  $I$  is known, then Ohm's law could be used to derive the value of  $V_S$ . Note carefully that the equations for power involve the terms  $I^2$  and  $V_S^2$ . Therefore,  $I = -0.6 \text{ mA}$  and  $V_S = -6 \text{ V}$  also satisfy the mathematical equations and, in this case, the direction of *both* the voltage and current is reversed.

Given the circuit in Fig. 2.4c, we wish to find the value of the voltage source and the power absorbed by the resistance.

## EXAMPLE 2.3

The voltage is

**SOLUTION**

$$V_S = I/G = (0.5 \times 10^{-3})/(50 \times 10^{-6}) = 10 \text{ V}$$

The power absorbed is then

$$P = I^2/G = (0.5 \times 10^{-3})^2/(50 \times 10^{-6}) = 5 \text{ mW}$$

Or we could simply note that

$$R = 1/G = 20 \text{ k}\Omega$$

and therefore

$$V_S = IR = (0.5 \times 10^{-3})(20\text{k}) = 10 \text{ V}$$

and the power could be determined using  $P = I^2R = V_S^2/R = V_S I$ .

Given the network in Fig. 2.4d, we wish to find  $R$  and  $V_S$ .

## EXAMPLE 2.4

Using the power relationship, we find that

**SOLUTION**

$$R = P/I^2 = (80 \times 10^{-3})/(4 \times 10^{-3})^2 = 5 \text{ k}\Omega$$

The voltage can now be derived using Ohm's law as

$$V_S = IR = (4 \times 10^{-3})(5\text{k}) = 20 \text{ V}$$

The voltage could also be obtained from the remaining power relationships in Eqs. (2.2) and (2.3).

Before leaving this initial discussion of circuits containing sources and a single resistor, it is important to note a phenomenon that we will find to be true in circuits containing many sources and resistors. The presence of a voltage source between a pair of terminals tells us precisely what the voltage is between the two terminals regardless of what is happening in the balance of the network. What we do not know is the current in the voltage source. We must apply circuit analysis to the entire network to determine this current. Likewise, the presence of a current source connected between two terminals specifies the exact value of the current through the source between the terminals. What we do not know is the value of the voltage across the current source. This value must be calculated by applying circuit analysis to the entire network. Furthermore, it is worth emphasizing that when applying Ohm's law, the relationship  $V = IR$  specifies a relationship between the voltage *directly across* a resistor  $R$  and the current that is *present* in this resistor. Ohm's law does not apply when the voltage is present in one part of the network and the current exists in another. This is a common mistake made by students who try to apply  $V = IR$  to a resistor  $R$  in the middle of the network while using a  $V$  at some other location in the network.

## Learning Assessments

**E2.1** Given the circuits in Fig. E2.1, find (a) the current  $I$  and the power absorbed by the resistor in Fig. E2.1a, and (b) the voltage across the current source and the power supplied by the source in Fig. E2.1b.

**ANSWER:** (a)  $I = 0.3$  mA,  
 $P = 3.6$  mW;  
 (b)  $V_S = 3.6$  V,  
 $P = 2.16$  mW.

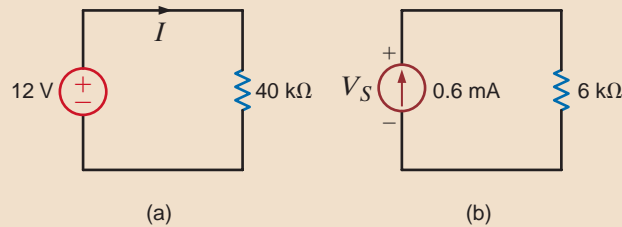


Figure E2.1

**E2.2** Given the circuits in Fig. E2.2, find (a)  $R$  and  $V_S$  in the circuit in Fig. E2.2a, and (b) find  $I$  and  $R$  in the circuit in Fig. E2.2b.

**ANSWER:** (a)  $R = 10$  kΩ,  
 $V_S = 4$  V;  
 (b)  $I = 20.8$  mA,  
 $R = 576$  Ω.

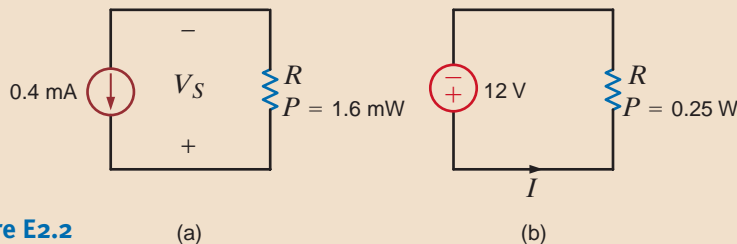


Figure E2.2

**E2.3** The power absorbed by  $G_x$  in Fig. E2.3 is 50 mW. Find  $G_x$ .

**ANSWER:**  $G_x = 500$  μS.

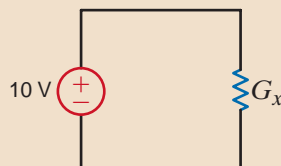


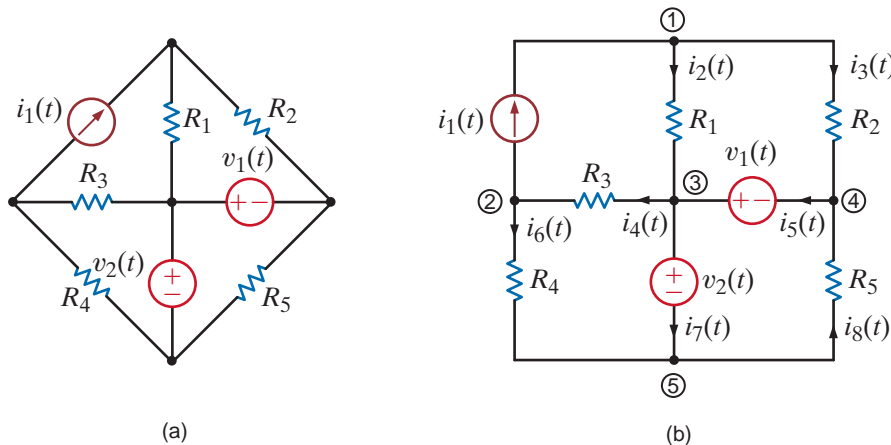
Figure E2.3

## 2.2

## Kirchhoff's Laws

The circuits we have considered previously have all contained a single resistor, and we have analyzed them using Ohm's law. At this point we begin to expand our capabilities to handle more complicated networks that result from an interconnection of two or more of these simple elements. We will assume that the interconnection is performed by electrical conductors (wires) that have zero resistance—that is, perfect conductors. Because the wires have zero resistance, the energy in the circuit is in essence lumped in each element, and we employ the term *lumped-parameter circuit* to describe the network.

To aid us in our discussion, we will define a number of terms that will be employed throughout our analysis. As will be our approach throughout this text, we will use examples to illustrate the concepts and define the appropriate terms. For example, the circuit shown



**Figure 2.5**  
Circuit used to illustrate KCL.

in Fig. 2.5a will be used to describe the terms *node*, *loop*, and *branch*. A node is simply a point of connection of two or more circuit elements. The reader is cautioned to note that, although one node can be spread out with perfect conductors, it is still only one node. This is illustrated in Fig. 2.5b, where the circuit has been redrawn. Node 5 consists of the entire bottom connector of the circuit.

If we start at some point in the circuit and move along perfect conductors in any direction until we encounter a circuit element, the total path we cover represents a single node. Therefore, we can assume that a node is one end of a circuit element together with all the perfect conductors that are attached to it. Examining the circuit, we note that there are numerous paths through it. A *loop* is simply any *closed path* through the circuit in which no node is encountered more than once. For example, starting from node 1, one loop would contain the elements  $R_1$ ,  $v_2$ ,  $R_4$ , and  $i_1$ ; another loop would contain  $R_2$ ,  $v_1$ ,  $v_2$ ,  $R_4$ , and  $i_1$ ; and so on. However, the path  $R_1$ ,  $v_1$ ,  $R_5$ ,  $v_2$ ,  $R_3$ , and  $i_1$  is not a loop because we have encountered node 3 twice. Finally, a *branch* is a portion of a circuit containing only a single element and the nodes at each end of the element. The circuit in Fig. 2.5 contains eight branches.

Given the previous definitions, we are now in a position to consider Kirchhoff's laws, named after German scientist Gustav Robert Kirchhoff. These two laws are quite simple but extremely important. We will not attempt to prove them because the proofs are beyond our current level of understanding. However, we will demonstrate their usefulness and attempt to make the reader proficient in their use. The first law is *Kirchhoff's current law* (KCL), which states that *the algebraic sum of the currents entering any node is zero*. In mathematical form the law appears as

[hint]

KCL is an extremely important and useful law.

$$\sum_{j=1}^N i_j(t) = 0$$

2.7

where  $i_j(t)$  is the  $j$ th current entering the node through branch  $j$  and  $N$  is the number of branches connected to the node. To understand the use of this law, consider node 3 shown in Fig. 2.5. Applying Kirchhoff's current law to this node yields

$$i_2(t) - i_4(t) + i_5(t) - i_7(t) = 0$$

We have assumed that the algebraic signs of the currents entering the node are positive and, therefore, that the signs of the currents leaving the node are negative.

If we multiply the foregoing equation by  $-1$ , we obtain the expression

$$-i_2(t) + i_4(t) - i_5(t) + i_7(t) = 0$$

which simply states that *the algebraic sum of the currents leaving a node is zero*. Alternatively, we can write the equation as

$$i_2(t) + i_5(t) = i_4(t) + i_7(t)$$

which states that *the sum of the currents entering a node is equal to the sum of the currents leaving the node*. Both of these italicized expressions are alternative forms of Kirchhoff's current law.

Once again it must be emphasized that the latter statement means that the sum of the *variables* that have been defined entering the node is equal to the sum of the *variables* that have been defined leaving the node, not the actual currents. For example,  $i_j(t)$  may be defined entering the node, but if its actual value is negative, there will be positive charge leaving the node.

Note carefully that Kirchhoff's current law states that the *algebraic* sum of the currents either entering or leaving a node must be zero. We now begin to see why we stated in Chapter 1 that it is critically important to specify both the magnitude and the direction of a current. Recall that current is charge in motion. Based on our background in physics, charges cannot be stored at a node. In other words, if we have a number of charges entering a node, then an equal number must be leaving that same node. Kirchhoff's current law is based on this principle of conservation of charge.

Finally, it is possible to generalize Kirchhoff's current law to include a closed surface. By a closed surface we mean some set of elements completely contained within the surface that are interconnected. Since the current entering each element within the surface is equal to that leaving the element (i.e., the element stores no net charge), it follows that the current entering an interconnection of elements is equal to that leaving the interconnection. Therefore, Kirchhoff's current law can also be stated as follows: *The algebraic sum of the currents entering any closed surface is zero*.

## EXAMPLE

### 2.5

#### SOLUTION

Let us write KCL for every node in the network in Fig. 2.5, assuming that the currents leaving the node are positive.

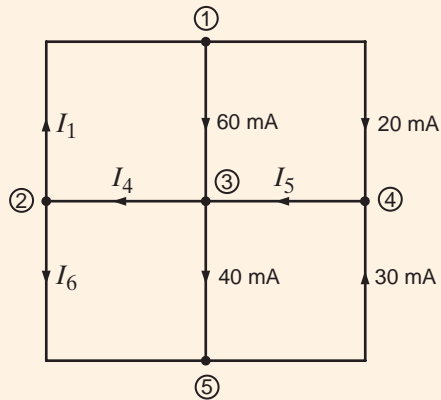
The KCL equations for nodes 1 through 5 are

$$\begin{aligned} -i_1(t) + i_2(t) + i_3(t) &= 0 \\ i_1(t) - i_4(t) + i_6(t) &= 0 \\ -i_2(t) + i_4(t) - i_5(t) + i_7(t) &= 0 \\ -i_3(t) + i_5(t) - i_8(t) &= 0 \\ -i_6(t) - i_7(t) + i_8(t) &= 0 \end{aligned}$$

Note carefully that if we add the first four equations, we obtain the fifth equation. What does this tell us? Recall that this means that this set of equations is not linearly independent. We can show that the first four equations are, however, linearly independent. Store this idea in memory because it will become very important when we learn how to write the equations necessary to solve for all the currents and voltages in a network in the following chapter.



The network in Fig. 2.5 is represented by the topological diagram shown in Fig. 2.6. We wish to find the unknown currents in the network.



## EXAMPLE 2.6

**Figure 2.6**  
Topological diagram for the circuit in Fig. 2.5.

Assuming the currents leaving the node are positive, the KCL equations for nodes 1 through 4 are

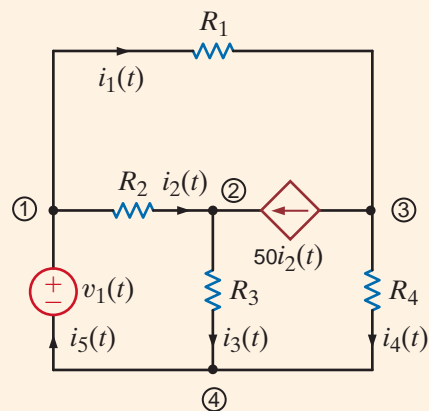
$$\begin{aligned} -I_1 + 0.06 + 0.02 &= 0 \\ I_1 - I_4 + I_6 &= 0 \\ -0.06 + I_4 - I_5 + 0.04 &= 0 \\ -0.02 + I_5 - 0.03 &= 0 \end{aligned}$$

## SOLUTION

The first equation yields  $I_1$  and the last equation yields  $I_5$ . Knowing  $I_5$ , we can immediately obtain  $I_4$  from the third equation. Then the values of  $I_1$  and  $I_4$  yield the value of  $I_6$  from the second equation. The results are  $I_1 = 80$  mA,  $I_4 = 70$  mA,  $I_5 = 50$  mA, and  $I_6 = -10$  mA.

As indicated earlier, dependent or controlled sources are very important because we encounter them when analyzing circuits containing active elements such as transistors. The following example presents a circuit containing a current-controlled current source.

Let us write the KCL equations for the circuit shown in Fig. 2.7.



## EXAMPLE 2.7

**Figure 2.7**  
Circuit containing a dependent current source.

**SOLUTION** The KCL equations for nodes 1 through 4 follow:

$$\begin{aligned}i_1(t) + i_2(t) - i_5(t) &= 0 \\-i_2(t) + i_3(t) - 50i_2(t) &= 0 \\-i_1(t) + 50i_2(t) + i_4(t) &= 0 \\i_5(t) - i_3(t) - i_4(t) &= 0\end{aligned}$$

If we added the first three equations, we would obtain the negative of the fourth. What does this tell us about the set of equations?

Kirchhoff's second law, called *Kirchhoff's voltage law* (KVL), states that the *algebraic sum of the voltages around any loop is zero*. As was the case with Kirchhoff's current law, we will defer the proof of this law and concentrate on understanding how to apply it. Once again the reader is cautioned to remember that we are dealing only with lumped-parameter circuits. These circuits are conservative, meaning that the work required to move a unit charge around any loop is zero.

In Chapter 1, we related voltage to the difference in energy levels within a circuit and talked about the energy conversion process in a flashlight. Because of this relationship between voltage and energy, Kirchhoff's voltage law is based on the conservation of energy.

Recall that in Kirchhoff's current law, the algebraic sign was required to keep track of whether the currents were entering or leaving a node. In Kirchhoff's voltage law, the algebraic sign is used to keep track of the voltage polarity. In other words, as we traverse the circuit, it is necessary to

## EXAMPLE

### 2.8

#### SOLUTION

Let us find  $I_4$  and  $I_1$  in the network represented by the topological diagram in Fig. 2.6.

This diagram is redrawn in Fig. 2.8; node 1 is enclosed in surface 1, and nodes 3 and 4 are enclosed in surface 2. A quick review of the previous example indicates that we derived a value for  $I_4$  from the value of  $I_5$ . However,  $I_5$  is now completely enclosed in surface 2. If we apply KCL to surface 2, assuming the currents out of the surface are positive, we obtain

$$I_4 - 0.06 - 0.02 - 0.03 + 0.04 = 0$$

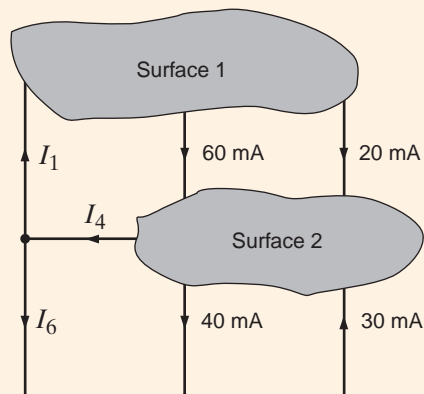
or

$$I_4 = 70 \text{ mA}$$

which we obtained without any knowledge of  $I_5$ . Likewise for surface 1, what goes in must come out and, therefore,  $I_1 = 80 \text{ mA}$ . The reader is encouraged to cut the network in Fig. 2.6 into two pieces in any fashion and show that KCL is always satisfied at the boundaries.

**Figure 2.8**

Diagram used to demonstrate KCL for a surface.



## Learning Assessments

**E2.4** Given the networks in Fig. E2.3, find (a)  $I_1$  in Fig. E2.4a and (b)  $I_T$  in Fig. E2.4b.

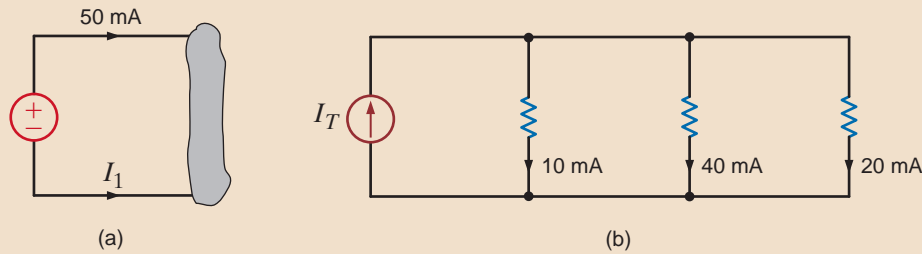


Figure E2.4

**ANSWER:**

- (a)  $I_1 = -50$  mA;  
 (b)  $I_T = 70$  mA.

**E2.5** Find (a)  $I_1$  in the network in Fig. E2.5a and (b)  $I_1$  and  $I_2$  in the circuit in Fig. E2.5b.

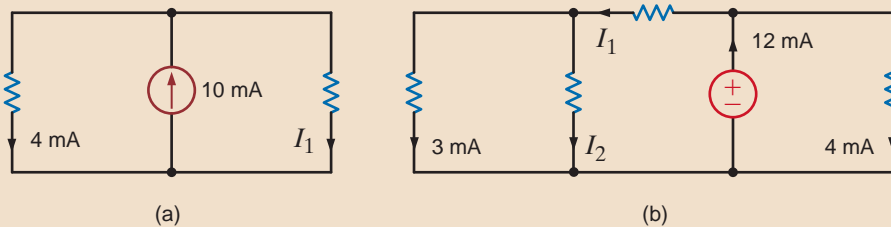


Figure E2.5

**ANSWER:** (a)  $I_1 = 6$  mA;  
 (b)  $I_1 = 8$  mA and  
 $I_2 = 5$  mA.

**E2.6** Find the current  $i_x$  in the circuits in Fig. E2.6.

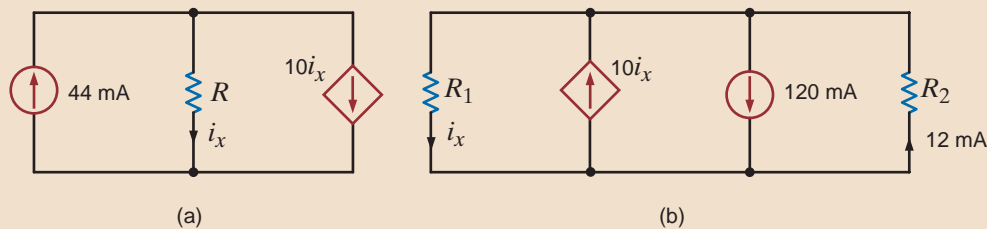


Figure E2.6

**ANSWER:** (a)  $i_x = 4$  mA;  
 (b)  $i_x = 12$  mA.

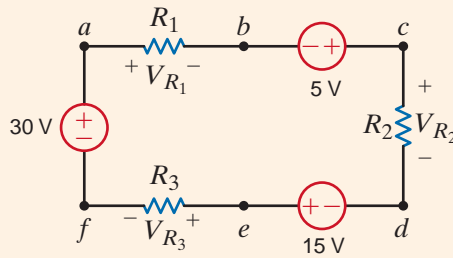
sum to zero the increases and decreases in energy level. Therefore, it is important we keep track of whether the energy level is increasing or decreasing as we go through each element.

In applying KVL, we must traverse any loop in the circuit and sum to zero the increases and decreases in energy level. At this point, we have a decision to make. Do we want to consider a decrease in energy level as positive or negative? We will adopt a policy of considering a decrease in energy level as positive and an increase in energy level as negative. As we move around a loop, we encounter the plus sign first for a decrease in energy level and a negative sign first for an increase in energy level.

Finally, we employ the convention  $V_{ab}$  to indicate the voltage of point  $a$  with respect to point  $b$ : that is, the variable for the voltage between point  $a$  and point  $b$ , with point  $a$  considered positive relative to point  $b$ . Since the potential is measured between two points, it is convenient to use an arrow between the two points, with the head of the arrow located at the positive node. Note that the double-subscript notation, the  $+$  and  $-$  notation, and the single-headed arrow notation are all the same if the head of the arrow is pointing toward the positive terminal and the first subscript in the double-subscript notation. All of these equivalent forms

**EXAMPLE**  
**2.9**

Consider the circuit shown in Fig. 2.9. If  $V_{R_1}$  and  $V_{R_2}$  are known quantities, let us find  $V_{R_3}$ .



**Figure 2.9**  
Circuit used to illustrate KVL.

**SOLUTION**

Starting at point  $a$  in the network and traversing it in a clockwise direction, we obtain the equation

$$+V_{R_1} - 5 + V_{R_2} - 15 + V_{R_3} - 30 = 0$$

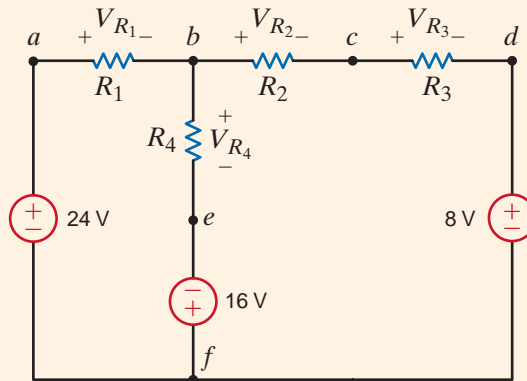
which can be written as

$$\begin{aligned} +V_{R_1} + V_{R_2} + V_{R_3} &= 5 + 15 + 30 \\ &= 50 \end{aligned}$$

Now suppose that  $V_{R_1}$  and  $V_{R_2}$  are known to be 18 V and 12 V, respectively. Then  $V_{R_3} = 20$  V.

**EXAMPLE**  
**2.10**

Consider the network in Fig. 2.10.



**Figure 2.10**  
Circuit used to explain KVL.

Let us demonstrate that only two of the three possible loop equations are linearly independent.

**SOLUTION**

Note that this network has three closed paths: the left loop, right loop, and outer loop. Applying our policy for writing KVL equations and traversing the left loop starting at point  $a$ , we obtain

$$V_{R_1} + V_{R_4} - 16 - 24 = 0$$

The corresponding equation for the right loop starting at point  $b$  is

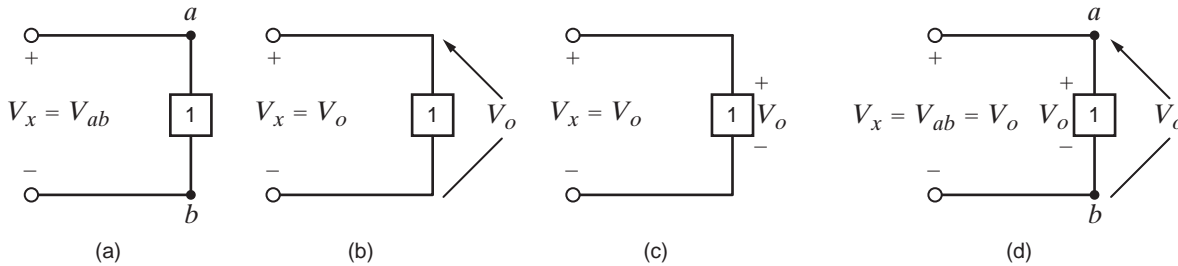
$$V_{R_2} + V_{R_3} + 8 + 16 - V_{R_4} = 0$$

The equation for the outer loop starting at point  $a$  is

$$V_{R_1} + V_{R_2} + V_{R_3} + 8 - 24 = 0$$

Note that if we add the first two equations, we obtain the third equation. Therefore, as we indicated in Example 2.5, the three equations are not linearly independent. Once again, we will address this issue in the next chapter and demonstrate that we need only the first two equations to solve for the voltages in the circuit.

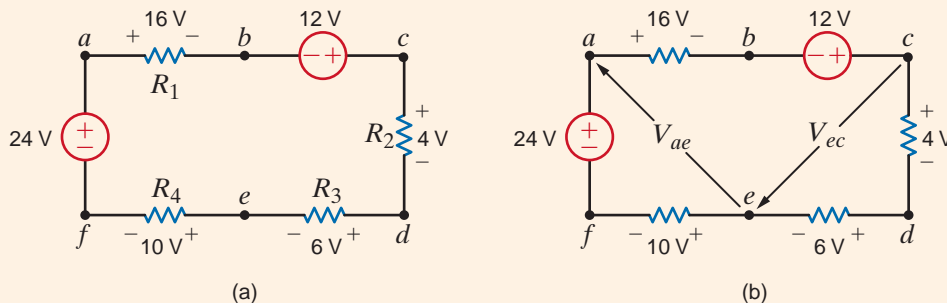
for labeling voltages are shown in Fig. 2.11. The usefulness of the arrow notation stems from the fact that we may want to label the voltage between two points that are far apart in a network. In this case, the other notations are often confusing.



**Figure 2.11**

Equivalent forms for labeling voltage.

Consider the network in Fig. 2.12a. Let us apply KVL to determine the voltage between two points. Specifically, in terms of the double-subscript notation, let us find  $V_{ae}$  and  $V_{ec}$ .



## EXAMPLE 2.11

**Figure 2.12**  
Network used in Example 2.11.

The circuit is redrawn in Fig. 2.12b. Since points  $a$  and  $e$  as well as  $e$  and  $c$  are not physically close, the arrow notation is very useful. Our approach to determining the unknown voltage is to apply KVL with the unknown voltage in the closed path. Therefore, to determine  $V_{ae}$  we can use the path  $ae$  or  $abcdea$ . The equations for the two paths in which  $V_{ae}$  is the only unknown are

$$V_{ae} + 10 - 24 = 0$$

and

$$16 - 12 + 4 + 6 - V_{ae} = 0$$

Note that both equations yield  $V_{ae} = 14$  V. Even before calculating  $V_{ae}$ , we could calculate  $V_{ec}$  using the path  $cdec$  or  $cefabc$ . However, since  $V_{ae}$  is now known, we can also use the path  $ceabc$ . KVL for each of these paths is

$$\begin{aligned} 4 + 6 + V_{ec} &= 0 \\ -V_{ec} + 10 - 24 + 16 - 12 &= 0 \end{aligned}$$

and

$$-V_{ec} - V_{ae} + 16 - 12 = 0$$

Each of these equations yields  $V_{ec} = -10$  V.

## SOLUTION

In general, the mathematical representation of Kirchhoff's voltage law is

$$\sum_{j=1}^N v_j(t) = 0$$

2.8

where  $v_j(t)$  is the voltage across the  $j$ th branch (with the proper reference direction) in a loop containing  $N$  voltages. This expression is analogous to Eq. (2.7) for Kirchhoff's current law.

## [hint]

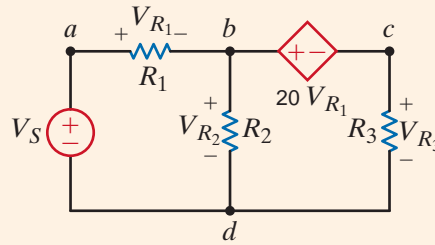
KVL is an extremely important and useful law.

**EXAMPLE**  
**2.12**

Given the network in Fig. 2.13 containing a dependent source, let us write the KVL equations for the two closed paths *abda* and *bcdb*.

**Figure 2.13**

Network containing a dependent source.



**SOLUTION** The two KVL equations are

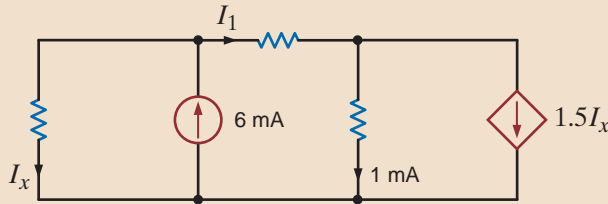
$$V_{R_1} + V_{R_2} - V_S = 0$$

$$20V_{R_1} + V_{R_3} - V_{R_2} = 0$$

## Learning Assessments

**E2.7** Find  $I_x$  and  $I_1$  in Fig. E2.7.

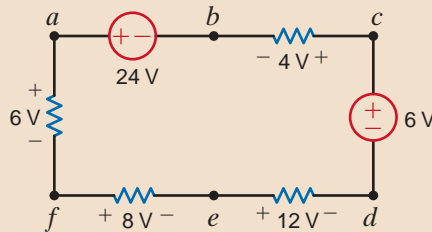
**ANSWER:**  $I_x = 2$  mA,  
 $I_1 = 4$  mA.



**Figure E2.7**

**E2.8** Find  $V_{ad}$  and  $V_{eb}$  in the network in Fig. E2.8.

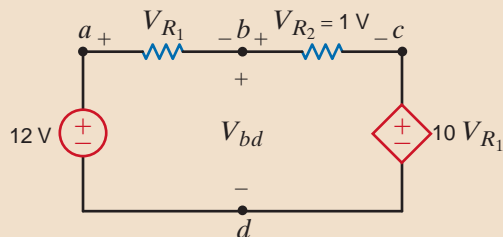
**ANSWER:**  $V_{ad} = 26$  V,  
 $V_{eb} = 10$  V.



**Figure E2.8**

**E2.9** Find  $V_{bd}$  in the circuit in Fig. E2.9.

**ANSWER:**  $V_{bd} = 11$  V.

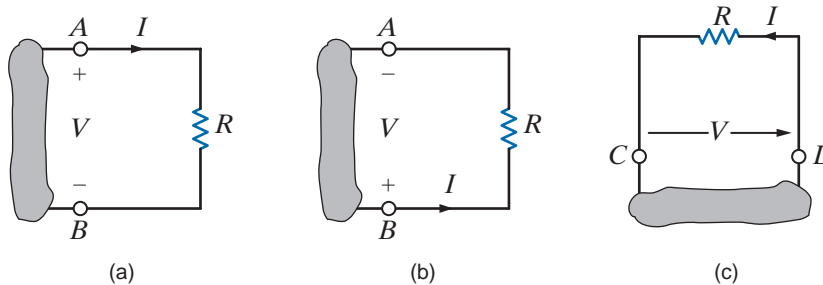


**Figure E2.9**

Before proceeding with the analysis of simple circuits, it is extremely important that we emphasize a subtle but very critical point. Ohm's law as defined by the equation  $V = IR$  refers to the relationship between the voltage and current as defined in Fig. 2.14a. If the direction of either the current or the voltage, but not both, is reversed, the relationship between the current and the voltage would be  $V = -IR$ . In a similar manner, given the circuit in Fig. 2.14b, if the polarity of the voltage between the terminals  $A$  and  $B$  is specified as shown, then the direction of the current  $I$  is from point  $B$  through  $R$  to point  $A$ . Likewise, in Fig. 2.14c, if the direction of the current is specified as shown, then the polarity of the voltage must be such that point  $D$  is at a higher potential than point  $C$  and, therefore, the arrow representing the voltage  $V$  is from point  $C$  to point  $D$ .

## [hint]

The subtleties associated with Ohm's law, as described here, are important and must be adhered to in order to ensure that the variables have the proper sign.



**Figure 2.14** Circuits used to explain Ohm's law.

**VOLTAGE DIVISION** At this point we can begin to apply the laws presented earlier to the analysis of simple circuits. To begin, we examine what is perhaps the simplest circuit—a single closed path, or loop, of elements.

Applying KCL to every node in a single-loop circuit reveals that the same current flows through all elements. We say that these elements are connected in series because they carry the same current. We will apply Kirchhoff's voltage law and Ohm's law to the circuit to determine various quantities in the circuit.

Our approach will be to begin with a simple circuit and then generalize the analysis to more complicated ones. The circuit shown in Fig. 2.15 will serve as a basis for discussion. This circuit consists of an independent voltage source that is in series with two resistors. We have assumed that the current flows in a clockwise direction. If this assumption is correct, the solution of the equations that yields the current will produce a positive value. If the current is actually flowing in the opposite direction, the value of the current variable will simply be negative, indicating that the current is flowing in a direction opposite to that assumed. We have also made voltage polarity assignments for  $v_{R_1}$  and  $v_{R_2}$ . These assignments have been made using the convention employed in our discussion of Ohm's law and our choice for the direction of  $i(t)$ —that is, the convention shown in Fig. 2.14a.

Applying Kirchhoff's voltage law to this circuit yields

$$-v(t) + v_{R_1} + v_{R_2} = 0$$

or

$$v(t) = v_{R_1} + v_{R_2}$$

However, from Ohm's law we know that

$$v_{R_1} = R_1 i(t)$$

$$v_{R_2} = R_2 i(t)$$

Therefore,

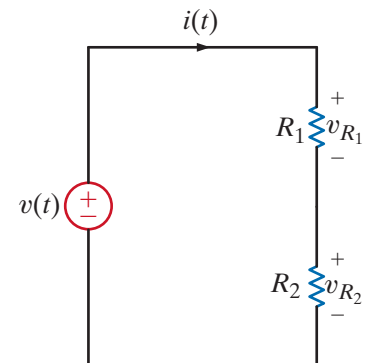
$$v(t) = R_1 i(t) + R_2 i(t)$$

Solving the equation for  $i(t)$  yields

$$i(t) = \frac{v(t)}{R_1 + R_2}$$

## 2.3

## Single-Loop Circuits



**Figure 2.15** Single-loop circuit.

Knowing the current, we can now apply Ohm's law to determine the voltage across each resistor:

$$\begin{aligned} v_{R_1} &= R_1 i(t) \\ &= R_1 \left[ \frac{v(t)}{R_1 + R_2} \right] \\ &= \frac{R_1}{R_1 + R_2} v(t) \end{aligned} \quad 2.10$$

[hint]

The manner in which voltage divides between two series resistors.

Similarly,

$$v_{R_2} = \frac{R_2}{R_1 + R_2} v(t) \quad 2.11$$

Though simple, Eqs. (2.10) and (2.11) are very important because they describe the operation of what is called a *voltage divider*. In other words, the source voltage  $v(t)$  is divided between the resistors  $R_1$  and  $R_2$  in direct proportion to their resistances.

In essence, if we are interested in the voltage across the resistor  $R_1$ , we bypass the calculation of the current  $i(t)$  and simply multiply the input voltage  $v(t)$  by the ratio

$$\frac{R_1}{R_1 + R_2}$$

As illustrated in Eq. (2.10), we are using the current in the calculation, but not explicitly.

Note that the equations satisfy Kirchhoff's voltage law, since

$$-v(t) + \frac{R_1}{R_1 + R_2} v(t) + \frac{R_2}{R_1 + R_2} v(t) = 0$$

## EXAMPLE 2.13

Consider the circuit shown in Fig. 2.16. The circuit is identical to Fig. 2.15 except that  $R_1$  is a variable resistor such as the volume control for a radio or television set. Suppose that  $V_S = 9 \text{ V}$ ,  $R_1 = 90 \text{ k}\Omega$ , and  $R_2 = 30 \text{ k}\Omega$ .

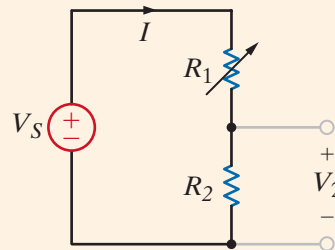


Figure 2.16

Voltage-divider circuit.

Let us examine the change in both the voltage across  $R_2$  and the power absorbed in this resistor as  $R_1$  is changed from  $90 \text{ k}\Omega$  to  $15 \text{ k}\Omega$ .

**SOLUTION** Since this is a voltage-divider circuit, the voltage  $V_2$  can be obtained directly as

$$\begin{aligned} V_2 &= \left[ \frac{R_2}{R_1 + R_2} \right] V_S \\ &= \left[ \frac{30\text{k}}{90\text{k} + 30\text{k}} \right] (9) \\ &= 2.25 \text{ V} \end{aligned}$$



Now suppose that the variable resistor is changed from 90 k $\Omega$  to 15 k $\Omega$ . Then

$$\begin{aligned} V_2 &= \left[ \frac{30\text{k}}{30\text{k} + 15\text{k}} \right] 9 \\ &= 6 \text{ V} \end{aligned}$$

The direct voltage-divider calculation is equivalent to determining the current  $I$  and then using Ohm's law to find  $V_2$ . Note that the larger voltage is across the larger resistance. This voltage-divider concept and the simple circuit we have employed to describe it are very useful because, as will be shown later, more complicated circuits can be reduced to this form.

Finally, let us determine the instantaneous power absorbed by the resistor  $R_2$  under the two conditions  $R_1 = 90 \text{ k}\Omega$  and  $R_1 = 15 \text{ k}\Omega$ . For the case  $R_1 = 90 \text{ k}\Omega$ , the power absorbed by  $R_2$  is

$$\begin{aligned} P_2 &= I^2 R_2 = \left( \frac{9}{120\text{k}} \right)^2 (30\text{k}) \\ &= 0.169 \text{ mW} \end{aligned}$$

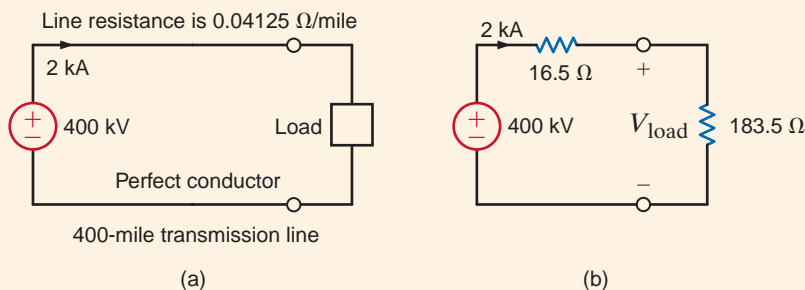
In the second case

$$\begin{aligned} P_2 &= \left( \frac{9}{45\text{k}} \right)^2 (30\text{k}) \\ &= 1.2 \text{ mW} \end{aligned}$$

The current in the first case is 75  $\mu\text{A}$ , and in the second case it is 200  $\mu\text{A}$ . Since the power absorbed is a function of the square of the current, the power absorbed in the two cases is quite different.

Let us now demonstrate the practical utility of this simple voltage-divider network.

Consider the circuit in Fig. 2.17a, which is an approximation of a high-voltage dc transmission facility. We have assumed that the bottom portion of the transmission line is a perfect conductor and will justify this assumption in the next chapter. The load can be represented by a resistor of value 183.5  $\Omega$ . Therefore, the equivalent circuit of this network is shown in Fig. 2.17b.



## EXAMPLE 2.14

**Figure 2.17**

A high-voltage dc transmission facility.

Let us determine both the power delivered to the load and the power losses in the line.

Using voltage division, the load voltage is

$$\begin{aligned} V_{\text{load}} &= \left[ \frac{183.5}{183.5 + 16.5} \right] 400\text{k} \\ &= 367 \text{ kV} \end{aligned}$$

## SOLUTION

The input power is 800 MW and the power transmitted to the load is

$$\begin{aligned} P_{\text{load}} &= I^2 R_{\text{load}} \\ &= 734 \text{ MW} \end{aligned}$$

Therefore, the power loss in the transmission line is

$$\begin{aligned} P_{\text{line}} &= P_{\text{in}} - P_{\text{load}} = I^2 R_{\text{line}} \\ &= 66 \text{ MW} \end{aligned}$$

Since  $P = VI$ , suppose now that the utility company supplied power at 200 kV and 4 kA. What effect would this have on our transmission network? Without making a single calculation, we know that because power is proportional to the square of the current, there would be a large increase in the power loss in the line and, therefore, the efficiency of the facility would decrease substantially. That is why, in general, we transmit power at high voltage and low current.

**MULTIPLE-SOURCE/RESISTOR NETWORKS** At this point we wish to extend our analysis to include a multiplicity of voltage sources and resistors. For example, consider the circuit shown in Fig. 2.18a. Here we have assumed that the current flows in a clockwise direction, and we have defined the variable  $i(t)$  accordingly. This may or may not be the case, depending on the value of the various voltage sources. Kirchhoff's voltage law for this circuit is

$$+v_{R_1} + v_2(t) - v_3(t) + v_{R_2} + v_4(t) + v_5(t) - v_1(t) = 0$$

or, using Ohm's law,

$$(R_1 + R_2)i(t) = v_1(t) - v_2(t) + v_3(t) - v_4(t) - v_5(t)$$

which can be written as

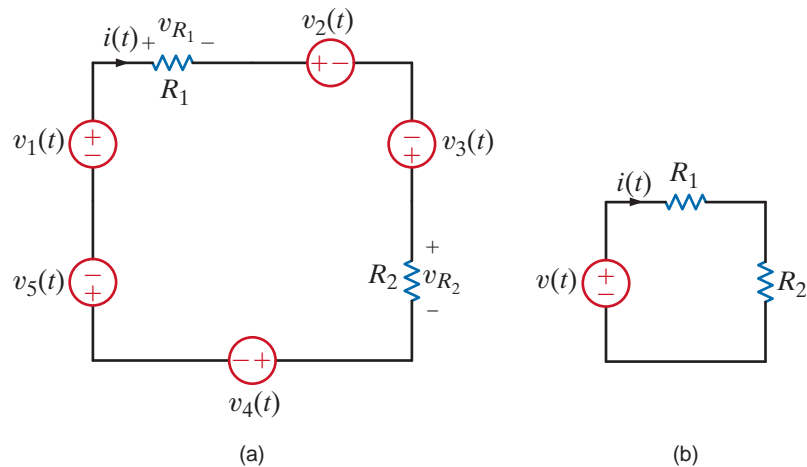
$$(R_1 + R_2)i(t) = v(t)$$

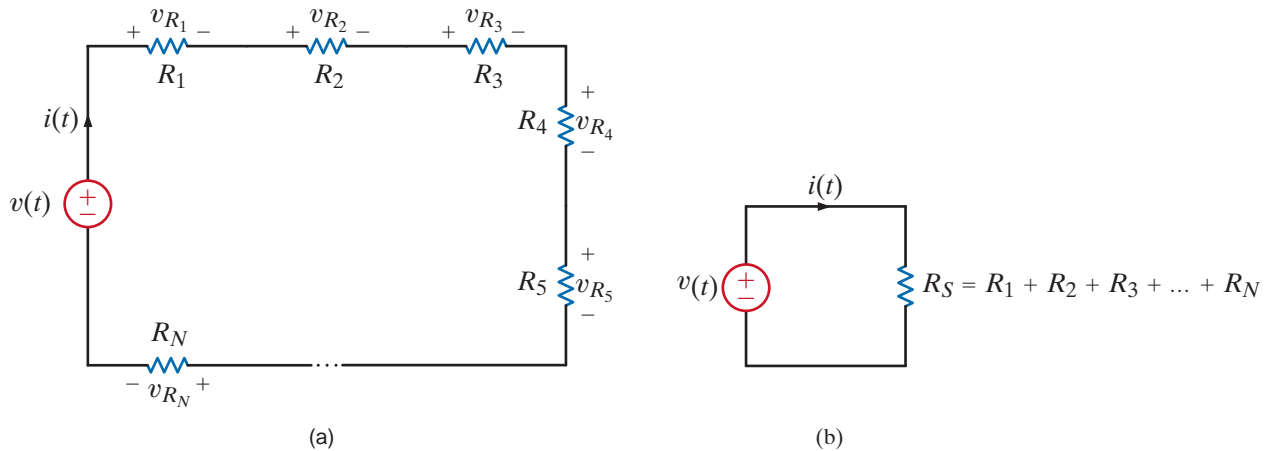
where

$$v(t) = v_1(t) + v_3(t) - [v_2(t) + v_4(t) + v_5(t)]$$

so that under the preceding definitions, Fig. 2.18a is equivalent to Fig. 2.18b. In other words, the sum of several voltage sources in series can be replaced by one source whose value is the algebraic sum of the individual sources. This analysis can, of course, be generalized to a circuit with  $N$  series sources.

**Figure 2.18**  
Equivalent circuits with  
multiple sources.





**Figure 2.19**  
Equivalent circuits.

Now consider the circuit with  $N$  resistors in series, as shown in Fig. 2.19a. Applying Kirchhoff's voltage law to this circuit yields

$$\begin{aligned} v(t) &= v_{R_1} + v_{R_2} + \cdots + v_{R_N} \\ &= R_1 i(t) + R_2 i(t) + \cdots + R_N i(t) \end{aligned}$$

and therefore,

$$v(t) = R_S i(t) \quad 2.12$$

where

$$R_S = R_1 + R_2 + \cdots + R_N \quad 2.13$$

and hence,

$$i(t) = \frac{v(t)}{R_S} \quad 2.14$$

Note also that for any resistor  $R_i$  in the circuit, the voltage across  $R_i$  is given by the expression

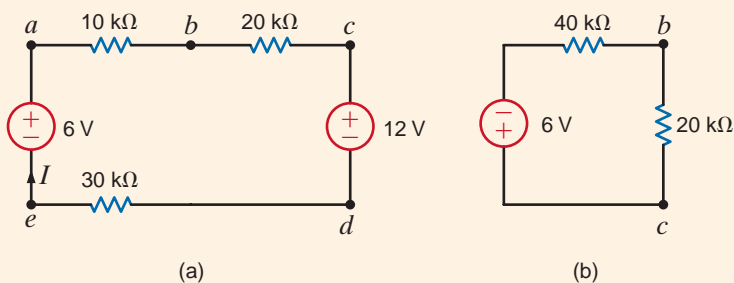
$$v_{R_i} = \frac{R_i}{R_S} v(t) \quad 2.15$$

which is the voltage-division property for multiple resistors in series.

Equation (2.13) illustrates that *the equivalent resistance of  $N$  resistors in series is simply the sum of the individual resistances*. Thus, using Eq. (2.13), we can draw the circuit in Fig. 2.19b as an equivalent circuit for the one in Fig. 2.19a.

Given the circuit in Fig. 2.20a, let us find  $I$ ,  $V_{bd}$ , and the power absorbed by the 30-k $\Omega$  resistor. Finally, let us use voltage division to find  $V_{bc}$ .

### EXAMPLE 2.15



**Figure 2.20**  
Circuit used in Example 2.15.

**SOLUTION** KVL for the network yields the equation

$$10kI + 20kI + 12 + 30kI - 6 = 0$$

$$60kI = -6$$

$$I = -0.1 \text{ mA}$$

Therefore, the magnitude of the current is 0.1 mA, but its direction is opposite to that assumed.

The voltage  $V_{bd}$  can be calculated using either of the closed paths  $abdea$  or  $bcd b$ . The equations for both cases are

$$10kI + V_{bd} + 30kI - 6 = 0$$

and

$$20kI + 12 - V_{bd} = 0$$

Using  $I = -0.1 \text{ mA}$  in either equation yields  $V_{bd} = 10 \text{ V}$ . Finally, the power absorbed by the 30-k $\Omega$  resistor is

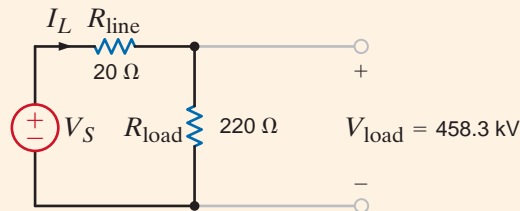
$$P = I^2 R = 0.3 \text{ mW}$$

Now from the standpoint of determining the voltage  $V_{bc}$ , we can simply add the sources since they are in series, add the remaining resistors since they are in series, and reduce the network to that shown in Fig. 2.20b. Then

$$\begin{aligned} V_{bc} &= \frac{20k}{20k + 40k} (-6) \\ &= -2 \text{ V} \end{aligned}$$

## EXAMPLE 2.16

A dc transmission facility is modeled by the approximate circuit shown in Fig. 2.21. If the load voltage is known to be  $V_{\text{load}} = 458.3 \text{ kV}$ , we wish to find the voltage at the sending end of the line and the power loss in the line.



**Figure 2.21**  
Circuit used in  
Example 2.16.

**SOLUTION** Knowing the load voltage and load resistance, we can obtain the line current using Ohm's law:

$$\begin{aligned} I_L &= 458.3k/220 \\ &= 2.083 \text{ kA} \end{aligned}$$

The voltage drop across the line is

$$\begin{aligned} V_{\text{line}} &= (I_L)(R_{\text{line}}) \\ &= 41.66 \text{ kV} \end{aligned}$$

Now, using KVL,

$$\begin{aligned} V_S &= V_{\text{line}} + V_{\text{load}} \\ &= 500 \text{ kV} \end{aligned}$$

Note that since the network is simply a voltage-divider circuit, we could obtain  $V_S$  immediately from our knowledge of  $R_{\text{line}}$ ,  $R_{\text{load}}$ , and  $V_{\text{load}}$ . That is,

$$V_{\text{load}} = \left[ \frac{R_{\text{load}}}{R_{\text{load}} + R_{\text{line}}} \right] V_S$$

and  $V_S$  is the only unknown in this equation.

The power absorbed by the line is

$$\begin{aligned} P_{\text{line}} &= I_L^2 R_{\text{line}} \\ &= 86.79 \text{ MW} \end{aligned}$$

## Problem-Solving Strategy

### Single-Loop Circuits

- Step 1.** Define a current  $i(t)$ . We know from KCL that there is only one current for a single-loop circuit. This current is assumed to be flowing either clockwise or counterclockwise around the loop.
- Step 2.** Using Ohm's law, define a voltage across each resistor in terms of the defined current.
- Step 3.** Apply KVL to the single-loop circuit.
- Step 4.** Solve the single KVL equation for the current  $i(t)$ . If  $i(t)$  is positive, the current is flowing in the direction assumed; if not, then the current is actually flowing in the opposite direction.

## Learning Assessments

**E2.10** Find  $I$  and  $V_{bd}$  in the circuit in Fig. E2.10.

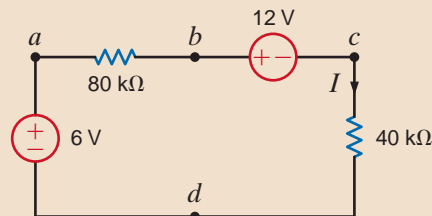


Figure E2.10

**ANSWER:**  $I = -0.05 \text{ mA}$   
and  $V_{bd} = 10 \text{ V}$ .

**E2.11** In the network in Fig. E2.11, if  $V_{ad}$  is 3 V, find  $V_S$ .

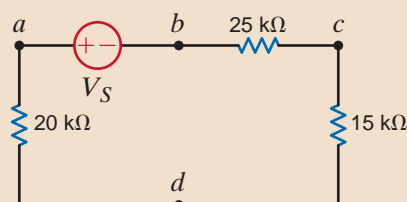


Figure E2.11

**ANSWER:**  $V_S = 9 \text{ V}$ .

## 2.4

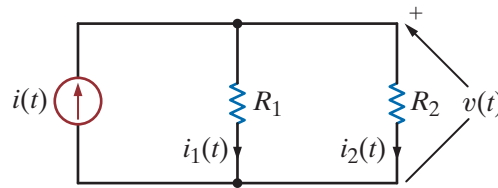
Single-Node-Pair  
Circuits

**CURRENT DIVISION** An important circuit is the single-node-pair circuit. If we apply KVL to every loop in a single-node-pair circuit, we discover that all of the elements have the same voltage across them and, therefore, are said to be connected in parallel. We will, however, apply Kirchhoff's current law and Ohm's law to determine various unknown quantities in the circuit.

Following our approach with the single-loop circuit, we will begin with the simplest case and then generalize our analysis. Consider the circuit shown in Fig. 2.22. Here we have an independent current source in parallel with two resistors.

Figure 2.22

Simple parallel circuit.



Since all of the circuit elements are in parallel, the voltage  $v(t)$  appears across each of them. Furthermore, an examination of the circuit indicates that the current  $i(t)$  is into the upper node of the circuit and the currents  $i_1(t)$  and  $i_2(t)$  are out of the node. Since KCL essentially states that what goes in must come out, the question we must answer is how  $i_1(t)$  and  $i_2(t)$  divide the input current  $i(t)$ .

Applying Kirchhoff's current law to the upper node, we obtain

$$i(t) = i_1(t) + i_2(t)$$

and, employing Ohm's law, we have

$$\begin{aligned} i(t) &= \frac{v(t)}{R_1} + \frac{v(t)}{R_2} \\ &= \left( \frac{1}{R_1} + \frac{1}{R_2} \right) v(t) \\ &= \frac{v(t)}{R_p} \end{aligned}$$

## [hint]

The parallel resistance equation.

where

$$\frac{1}{R_p} = \frac{1}{R_1} + \frac{1}{R_2} \quad 2.16$$

$$R_p = \frac{R_1 R_2}{R_1 + R_2} \quad 2.17$$

Therefore, the equivalent resistance of two resistors connected in parallel is equal to the product of their resistances divided by their sum. Note also that this equivalent resistance  $R_p$  is always less than either  $R_1$  or  $R_2$ . Hence, by connecting resistors in parallel we reduce the overall resistance. In the special case when  $R_1 = R_2$ , the equivalent resistance is equal to half of the value of the individual resistors.

The manner in which the current  $i(t)$  from the source divides between the two branches is called *current division* and can be found from the preceding expressions. For example,

$$\begin{aligned} v(t) &= R_p i(t) \\ &= \frac{R_1 R_2}{R_1 + R_2} i(t) \end{aligned} \quad 2.18$$

and

$$i_1(t) = \frac{v(t)}{R_1}$$

$$i_1(t) = \frac{R_2}{R_1 + R_2} i(t) \quad 2.19$$

and

$$i_2(t) = \frac{v(t)}{R_2}$$

$$= \frac{R_1}{R_1 + R_2} i(t) \quad 2.20$$

Eqs. (2.19) and (2.20) are mathematical statements of the current-division rule.

[hint]

The manner in which current divides between two parallel resistors.

Given the network in Fig. 2.23a, let us find  $I_1$ ,  $I_2$ , and  $V_o$ .

First, it is important to recognize that the current source feeds two parallel paths. To emphasize this point, the circuit is redrawn as shown in Fig. 2.23b. Applying current division, we obtain

$$I_1 = \left[ \frac{40\text{k} + 80\text{k}}{60\text{k} + (40\text{k} + 80\text{k})} \right] (0.9 \times 10^{-3})$$

$$= 0.6 \text{ mA}$$

and

$$I_2 = \left[ \frac{60\text{k}}{60\text{k} + (40\text{k} + 80\text{k})} \right] (0.9 \times 10^{-3})$$

$$= 0.3 \text{ mA}$$

Note that the larger current flows through the smaller resistor, and vice versa. In addition, note that if the resistances of the two paths are equal, the current will divide equally between them. KCL is satisfied since  $I_1 + I_2 = 0.9 \text{ mA}$ .

The voltage  $V_o$  can be derived using Ohm's law as

$$V_o = 80\text{k}I_2$$

$$= 24 \text{ V}$$

The problem can also be approached in the following manner. The total resistance seen by the current source is  $40 \text{ k}\Omega$ , that is,  $60 \text{ k}\Omega$  in parallel with the series combination of  $40 \text{ k}\Omega$  and  $80 \text{ k}\Omega$ , as shown in Fig. 2.23c. The voltage across the current source is then

$$V_1 = (0.9 \times 10^{-3})40\text{k}$$

$$= 36 \text{ V}$$

Now that  $V_1$  is known, we can apply voltage division to find  $V_o$ :

$$V_o = \left( \frac{80\text{k}}{80\text{k} + 40\text{k}} \right) V_1$$

$$= \left( \frac{80\text{k}}{120\text{k}} \right) 36$$

$$= 24 \text{ V}$$

## EXAMPLE

## 2.17

### SOLUTION

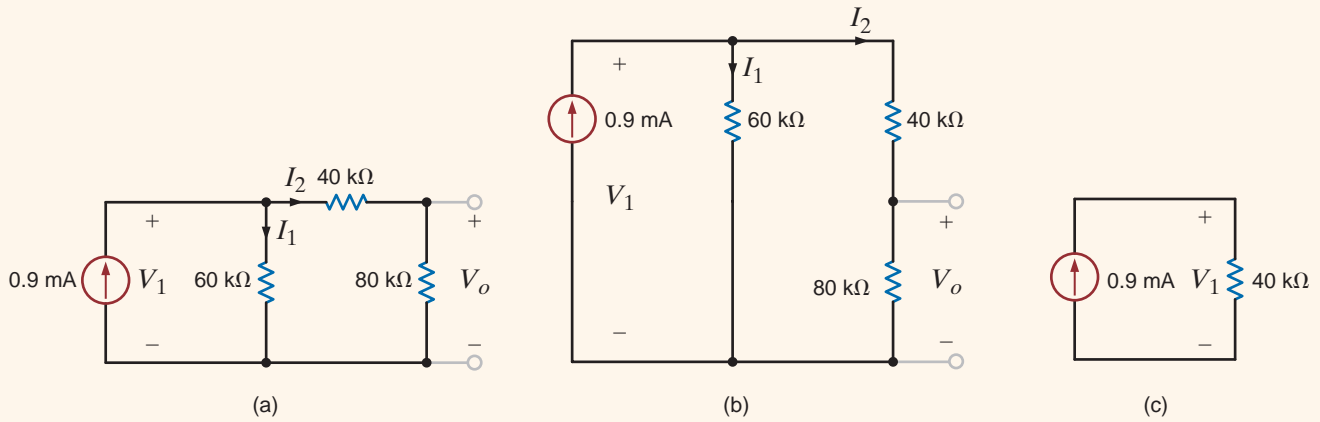


Figure 2.23

Circuits used in Example 2.17.

### EXAMPLE 2.18

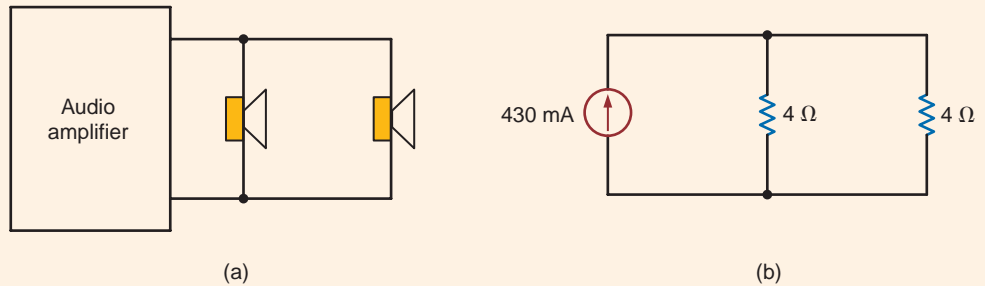
A typical car stereo consists of a 2-W audio amplifier and two speakers represented by the diagram shown in Fig. 2.24a. The output circuit of the audio amplifier is in essence a 430-mA current source, and each speaker has a resistance of 4 Ω. Let us determine the power absorbed by the speakers.

#### SOLUTION

The audio system can be modeled as shown in Fig. 2.24b. Since the speakers are both 4-Ω devices, the current will split evenly between them, and the power absorbed by each speaker is

$$\begin{aligned}
 P &= I^2R \\
 &= (215 \times 10^{-3})^2(4) \\
 &= 184.9 \text{ mW}
 \end{aligned}$$

Figure 2.24  
Circuits used in Example 2.18.



## Learning Assessment

**E2.12** Find the currents  $I_1$  and  $I_2$  and the power absorbed by the 40-kΩ resistor in the network in Fig. E2.12.

**ANSWER:**  $I_1 = 12 \text{ mA}$ ,  
 $I_2 = -4 \text{ mA}$ , and  
 $P_{40 \text{ k}\Omega} = 5.76 \text{ W}$ .

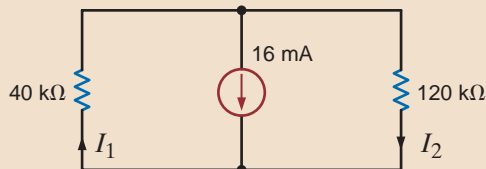


Figure E2.12



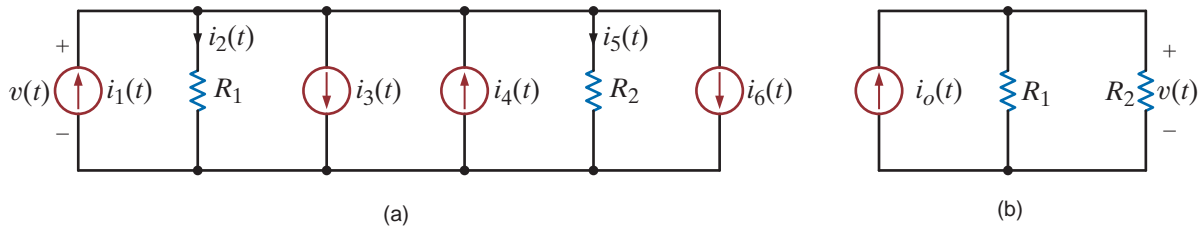


Figure 2.25

Equivalent circuits.

**MULTIPLE-SOURCE/RESISTOR NETWORKS** Let us now extend our analysis to include a multiplicity of current sources and resistors in parallel. For example, consider the circuit shown in Fig. 2.25a. We have assumed that the upper node is  $v(t)$  volts positive with respect to the lower node. Applying Kirchhoff's current law to the upper node yields

$$i_1(t) - i_2(t) - i_3(t) + i_4(t) - i_5(t) - i_6(t) = 0$$

or

$$i_1(t) - i_3(t) + i_4(t) - i_6(t) = i_2(t) + i_5(t)$$

The terms on the left side of the equation all represent sources that can be combined algebraically into a single source; that is,

$$i_o(t) = i_1(t) - i_3(t) + i_4(t) - i_6(t)$$

which effectively reduces the circuit in Fig. 2.25a to that in Fig. 2.25b. We could, of course, generalize this analysis to a circuit with  $N$  current sources. Using Ohm's law, we can express the currents on the right side of the equation in terms of the voltage and individual resistances so that the KCL equation reduces to

$$i_o(t) = \left( \frac{1}{R_1} + \frac{1}{R_2} \right) v(t)$$

Now consider the circuit with  $N$  resistors in parallel, as shown in Fig. 2.26a. Applying Kirchhoff's current law to the upper node yields

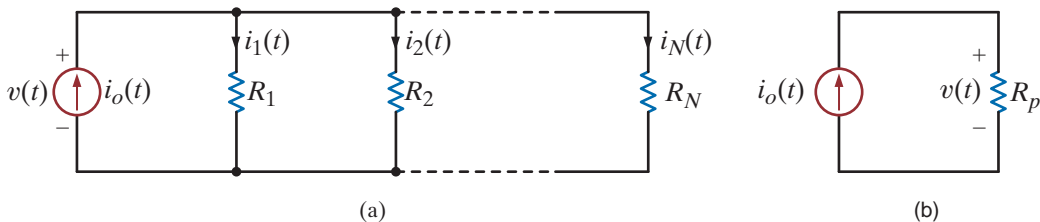


Figure 2.26

Equivalent circuits.

$$\begin{aligned} i_o(t) &= i_1(t) + i_2(t) + \cdots + i_N(t) \\ &= \left( \frac{1}{R_1} + \frac{1}{R_2} + \cdots + \frac{1}{R_N} \right) v(t) \end{aligned} \quad 2.21$$

or

$$i_o(t) = \frac{v(t)}{R_p} \quad 2.22$$

where

$$\frac{1}{R_p} = \sum_{i=1}^N \frac{1}{R_i} \quad 2.23$$

so that as far as the source is concerned, Fig. 2.26a can be reduced to an equivalent circuit, as shown in Fig. 2.26b.

The current division for any branch can be calculated using Ohm's law and the preceding equations. For example, for the  $j$ th branch in the network of Fig. 2.26a,

$$i_j(t) = \frac{v(t)}{R_j}$$

Using Eq. (2.22), we obtain

$$i_j(t) = \frac{R_p}{R_j} i_o(t) \quad 2.24$$

which defines the current-division rule for the general case.

### EXAMPLE

## 2.19

### SOLUTION

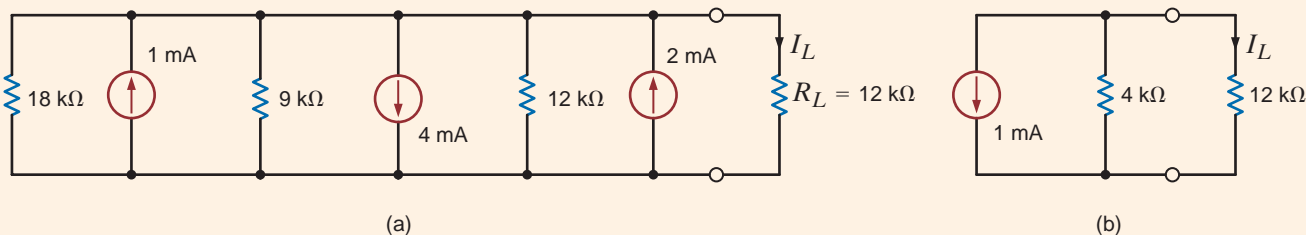
Given the circuit in Fig. 2.27a, we wish to find the current in the 12-k $\Omega$  load resistor.

To simplify the network in Fig. 2.27a, we add the current sources algebraically and combine the parallel resistors in the following manner:

$$\begin{aligned} \frac{1}{R_p} &= \frac{1}{18\text{k}} + \frac{1}{9\text{k}} + \frac{1}{12\text{k}} \\ R_p &= 4\text{ k}\Omega \end{aligned}$$

Using these values we can reduce the circuit in Fig. 2.27a to that in Fig. 2.27b. Now, applying current division, we obtain

$$\begin{aligned} I_L &= -\left[\frac{4\text{k}}{4\text{k} + 12\text{k}}\right](1 \times 10^{-3}) \\ &= -0.25\text{ mA} \end{aligned}$$



**Figure 2.27**  
Circuits used  
in Example 2.19.

## Problem-Solving Strategy

### Single-Node-Pair Circuits

- Step 1.** Define a voltage  $v(t)$  between the two nodes in this circuit. We know from KVL that there is only one voltage for a single-node-pair circuit. A polarity is assigned to the voltage such that one of the nodes is assumed to be at a higher potential than the other node, which we will call the reference node.
- Step 2.** Using Ohm's law, define a current flowing through each resistor in terms of the defined voltage.
- Step 3.** Apply KCL at one of the two nodes in the circuit.
- Step 4.** Solve the single KCL equation for  $v(t)$ . If  $v(t)$  is positive, then the reference node is actually at a lower potential than the other node; if not, the reference node is actually at a higher potential than the other node.

## Learning Assessment

**E2.13** Find the power absorbed by the 6-k $\Omega$  resistor in the network in Fig. E2.13.

**ANSWER:**  $P = 2.67$  mW.

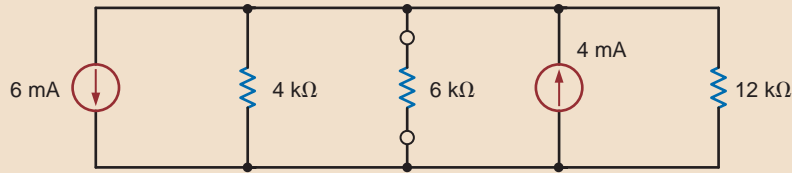


Figure E2.13

We have shown in our earlier developments that the equivalent resistance of  $N$  resistors in series is

$$R_s = R_1 + R_2 + \cdots + R_N \quad 2.25$$

and the equivalent resistance of  $N$  resistors in parallel is found from

$$\frac{1}{R_p} = \frac{1}{R_1} + \frac{1}{R_2} + \cdots + \frac{1}{R_N} \quad 2.26$$

Let us now examine some combinations of these two cases.

## 2.5

### Series and Parallel Resistor Combinations

We wish to determine the resistance at terminals  $A$ - $B$  in the network in Fig. 2.28a.

Starting at the opposite end of the network from the terminals and combining resistors as shown in the sequence of circuits in Fig. 2.28, we find that the equivalent resistance at the terminals is 5 k $\Omega$ .

### EXAMPLE

### 2.20

#### SOLUTION

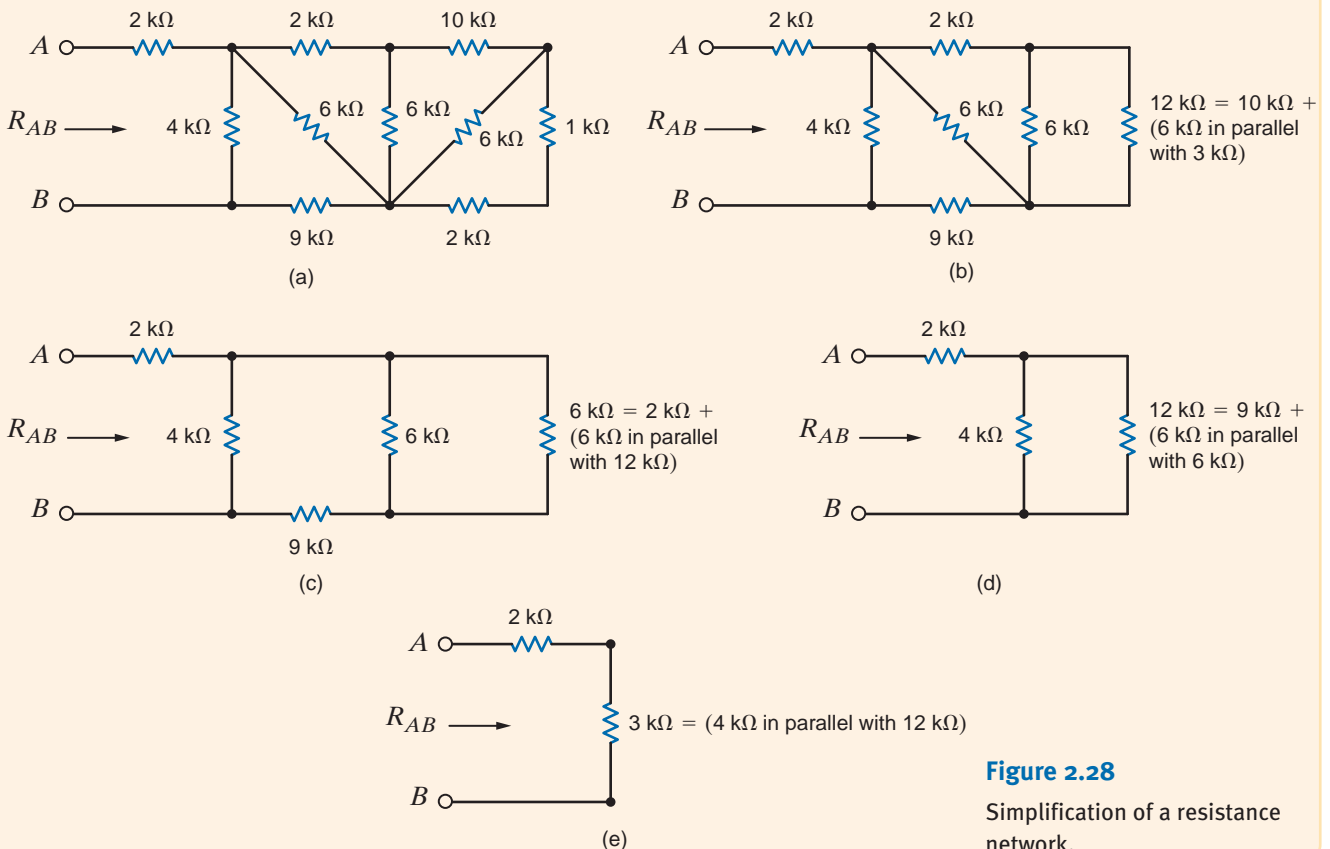


Figure 2.28

Simplification of a resistance network.

## Learning Assessment

**E2.14** Find the equivalent resistance at the terminals  $A$ - $B$  in the network in Fig. E2.14.

**ANSWER:**  $R_{AB} = 22 \text{ k}\Omega$ .

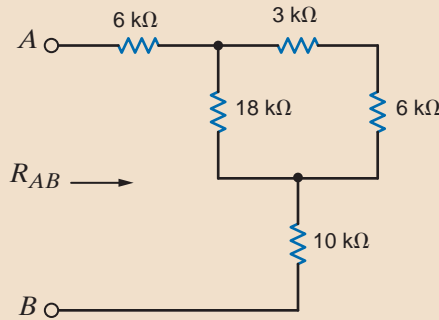


Figure E2.14

## Problem-Solving Strategy

### Simplifying Resistor Combinations

When trying to determine the equivalent resistance at a pair of terminals of a network composed of an interconnection of numerous resistors, it is recommended that the analysis begin at the end of the network opposite the terminals. Two or more resistors are combined to form a single resistor, thus simplifying the network by reducing the number of components as the analysis continues in a steady progression toward the terminals. The simplification involves the following:

- Step 1. Resistors in series.** Resistors  $R_1$  and  $R_2$  are in series if they are connected end to end with one common node and carry exactly the same current. They can then be combined into a single resistor  $R_s$ , where  $R_s = R_1 + R_2$ .
- Step 2. Resistors in parallel.** Resistors  $R_1$  and  $R_2$  are in parallel if they are connected to the same two nodes and have exactly the same voltage across their terminals. They can then be combined into a single resistor  $R_p$ , where  $R_p = R_1 R_2 / (R_1 + R_2)$ .

These two combinations are used repeatedly, as needed, to reduce the network to a single resistor at the pair of terminals.

## Learning Assessment

**E2.15** Find the equivalent resistance at the terminals  $A$ - $B$  in the circuit in Fig. E2.15.

**ANSWER:**  $R_{AB} = 3 \text{ k}\Omega$ .

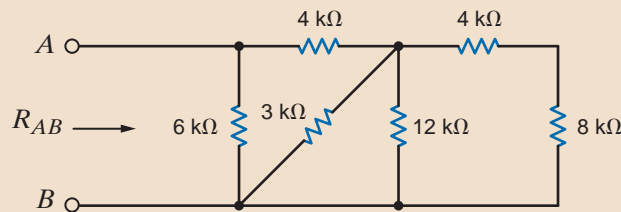


Figure E2.15

**E2.16** Find  $R_{AB}$  in Fig. E2.16.

**ANSWER:**  $R_{AB} = 12 \text{ k}\Omega$ .

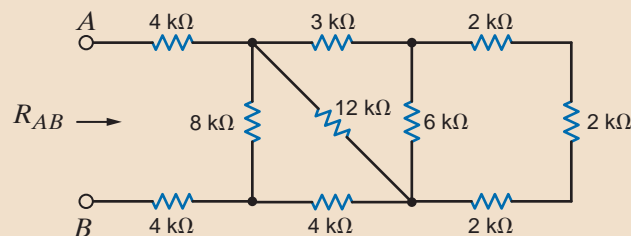
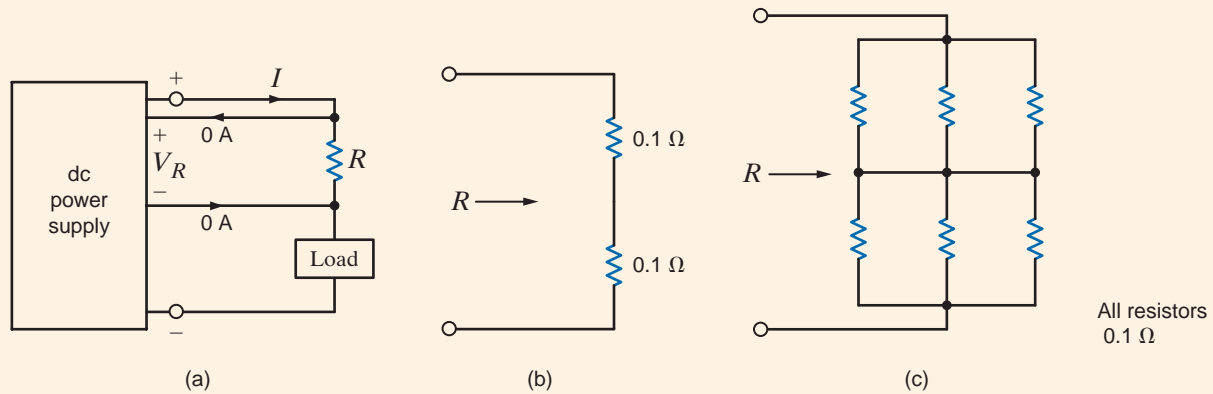


Figure E2.16

A standard dc current-limiting power supply shown in Fig. 2.29a provides 0–18 V at 3 A to a load. The voltage drop,  $V_R$ , across a resistor,  $R$ , is used as a current-sensing device, fed back to the power supply and used to limit the current  $I$ . That is, if the load is adjusted so that the current tries to exceed 3 A, the power supply will act to limit the current to that value. The feedback voltage,  $V_R$ , should typically not exceed 600 mV.

If we have a box of standard 0.1- $\Omega$ , 5-W resistors, let us determine the configuration of these resistors that will provide  $V_R = 600$  mV when the current is 3 A.



**Figure 2.29**

Circuits used in  
Example 2.21.

Using Ohm's law, the value of  $R$  should be

$$\begin{aligned} R &= \frac{V_R}{I} \\ &= \frac{0.6}{3} \\ &= 0.2 \Omega \end{aligned}$$

Therefore, two 0.1- $\Omega$  resistors connected in series, as shown in Fig. 2.29b, will provide the proper feedback voltage. Suppose, however, that the power supply current is to be limited to 9 A. The resistance required in this case to produce  $V_R = 600$  mV is

$$\begin{aligned} R &= \frac{0.6}{9} \\ &= 0.0667 \Omega \end{aligned}$$

We must now determine how to interconnect the 0.1- $\Omega$  resistor to obtain  $R = 0.0667 \Omega$ . Since the desired resistance is less than the components available (i.e., 0.1- $\Omega$ ), we must connect the resistors in some type of parallel configuration. Since all the resistors are of equal value, note that three of them connected in parallel would provide a resistance of one-third their value, or 0.0333  $\Omega$ . Then two such combinations connected in series, as shown in Fig. 2.29c, would produce the proper resistance.

### SOLUTION

Finally, we must check to ensure that the configurations in Figs. 2.29b and c have not exceeded the power rating of the resistors. In the first case, the current  $I = 3$  A is present in each of the two series resistors. Therefore, the power absorbed in each resistor is

$$\begin{aligned} P &= I^2R \\ &= (3)^2(0.1) \\ &= 0.9 \text{ W} \end{aligned}$$

which is well within the 5-W rating of the resistors.

In the second case, the current  $I = 9$  A. The resistor configuration for  $R$  in this case is a series combination of two sets of three parallel resistors of equal value. Using current division, we know that the current  $I$  will split equally among the three parallel paths and, hence, the current in each resistor will be 3 A. Therefore, once again, the power absorbed by each resistor is within its power rating.

**RESISTOR SPECIFICATIONS** Some important parameters that are used to specify resistors are the resistor's value, tolerance, and power rating. The tolerance specifications for resistors are typically 5% and 10%. A listing of standard resistor values with their specified tolerances is shown in Table 2.1.

The power rating for a resistor specifies the maximum power that can be dissipated by the resistor. Some typical power ratings for resistors are 1/4 W, 1/2 W, 1 W, 2 W, and so forth, up to very high values for high-power applications. Thus, in selecting a resistor for some particular application, one important selection criterion is the expected power dissipation.

**TABLE 2.1** Standard resistor values for 5% and 10% tolerances (values available with a 10% tolerance shown in boldface)

1.0	10	100	1.0k	10k	100k	1.0M	10M
1.1	11	110	1.1k	11k	110k	1.1M	11M
1.2	12	120	1.2k	12k	120k	1.2M	12M
1.3	13	130	1.3k	13k	130k	1.3M	13M
1.5	15	150	1.5k	15k	150k	1.5M	15M
1.6	16	160	1.6k	16k	160k	1.6M	16M
1.8	18	180	1.8k	18k	180k	1.8M	18M
2.0	20	200	2.0k	20k	200k	2.0M	20M
2.2	22	220	2.2k	22k	220k	2.2M	22M
2.4	24	240	2.4k	24k	240k	2.4M	
2.7	27	270	2.7k	27k	270k	2.7M	
3.0	30	300	3.0k	30k	300k	3.0M	
3.3	33	330	3.3k	33k	330k	3.3M	
3.6	36	360	3.6k	36k	360k	3.6M	
3.9	39	390	3.9k	39k	390k	3.9M	
4.3	43	430	4.3k	43k	430k	4.3M	
4.7	47	470	4.7k	47k	470k	4.7M	
5.1	51	510	5.1k	51k	510k	5.1M	
5.6	56	560	5.6k	56k	560k	5.6M	
6.2	62	620	6.2k	62k	620k	6.2M	
6.8	68	680	6.8k	68k	680k	6.8M	
7.5	75	750	7.5k	75k	750k	7.5M	
8.2	82	820	8.2k	82k	820k	8.2M	
9.1	91	910	9.1k	91k	910k	9.1M	

Given the network in Fig. 2.30, we wish to find the range for both the current and power dissipation in the resistor if  $R$  is a 2.7-k $\Omega$  resistor with a tolerance of 10%.

Using the equations  $I = V/R = 10/R$  and  $P = V^2/R = 100/R$ , the minimum and maximum values for the resistor, current, and power are outlined next.

$$\text{Minimum resistor value} = R(1 - 0.1) = 0.9 R = 2.43 \text{ k}\Omega$$

$$\text{Maximum resistor value} = R(1 + 0.1) = 1.1 R = 2.97 \text{ k}\Omega$$

$$\text{Minimum current value} = 10/2970 = 3.37 \text{ mA}$$

$$\text{Maximum current value} = 10/2430 = 4.12 \text{ mA}$$

$$\text{Minimum power value} = 100/2970 = 33.7 \text{ mW}$$

$$\text{Maximum power value} = 100/2430 = 41.2 \text{ mW}$$

Thus, the ranges for the current and power are 3.37 mA to 4.12 mA and 33.7 mW to 41.2 mW, respectively.

## EXAMPLE 2.22

### SOLUTION

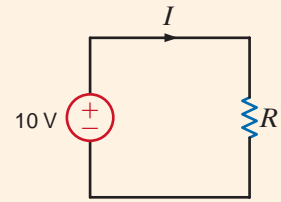


Figure 2.30

Circuit used in Example 2.22.

Given the network shown in Fig. 2.31: (a) find the required value for the resistor  $R$ ; (b) use Table 2.1 to select a standard 10% tolerance resistor for  $R$ ; (c) using the resistor selected in (b), determine the voltage across the 3.9-k $\Omega$  resistor; (d) calculate the percent error in the voltage  $V_1$ , if the standard resistor selected in (b) is used; and (e) determine the power rating for this standard component.

- a. Using KVL, the voltage across  $R$  is 19 V. Then using Ohm's law, the current in the loop is

$$I = 5/3.9\text{k} = 1.282 \text{ mA}$$

The required value of  $R$  is then

$$R = 19/0.001282 = 14.82 \text{ k}\Omega$$

- b. As shown in Table 2.1, the nearest standard 10% tolerance resistor is 15 k $\Omega$ .

- c. Using the standard 15-k $\Omega$  resistor, the actual current in the circuit is

$$I = 24/18.9\text{k} = 1.2698 \text{ mA}$$

and the voltage across the 3.9-k $\Omega$  resistor is

$$V = IR = (0.0012698)(3.9\text{k}) = 4.952 \text{ V}$$

- d. The percent error involved in using the standard resistor is

$$\% \text{ Error} = (4.952 - 5)/5 \times 100 = -0.96\%$$

- e. The power absorbed by the resistor  $R$  is then

$$P = IR = (0.0012698)^2(15\text{k}) = 24.2 \text{ mW}$$

Therefore, even a quarter-watt resistor is adequate in this application.

## EXAMPLE 2.23

### SOLUTION

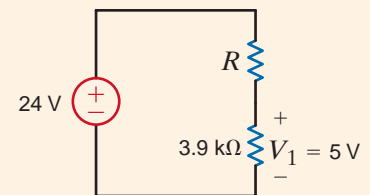


Figure 2.31

Circuit used in Example 2.23.

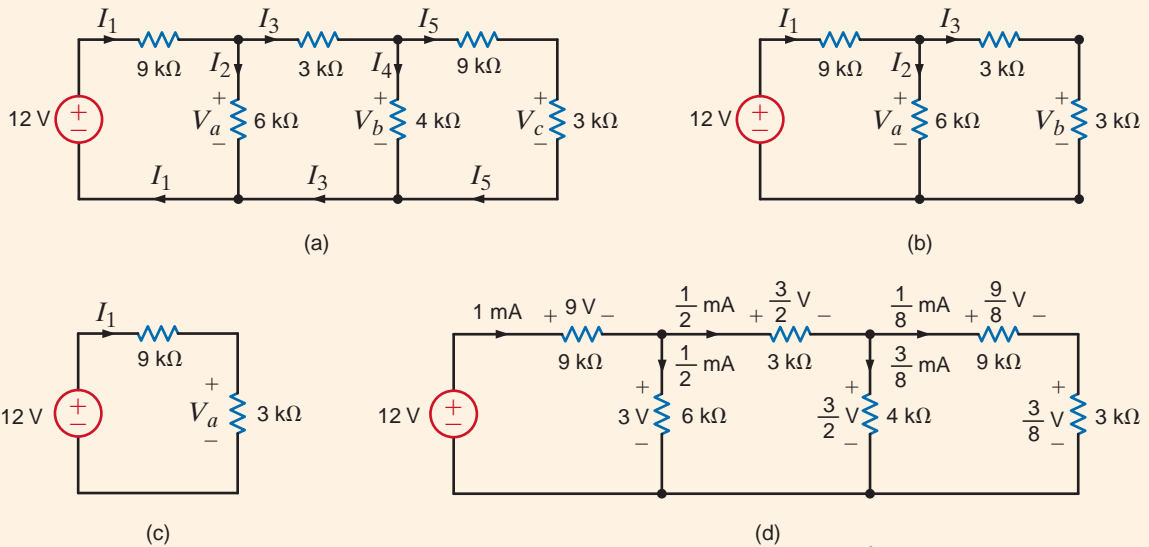
At this point we have learned many techniques that are fundamental to circuit analysis. Now we wish to apply them and show how they can be used in concert to analyze circuits. We will illustrate their application through a number of examples that will be treated in some detail.

## 2.6

### Circuits with Series-Parallel Combinations of Resistors

**EXAMPLE**  
**2.24**

We wish to find all the currents and voltages labeled in the ladder network shown in Fig. 2.32a.



**Figure 2.32**  
Analysis of a ladder network.

**SOLUTION** To begin our analysis of the network, we start at the right end of the circuit and combine the resistors to determine the total resistance seen by the 12-V source. This will allow us to calculate the current  $I_1$ . Then employing KVL, KCL, Ohm’s law, and/or voltage and current division, we will be able to calculate all currents and voltages in the network.

At the right end of the circuit, the 9-k $\Omega$  and 3-k $\Omega$  resistors are in series and, thus, can be combined into one equivalent 12-k $\Omega$  resistor. This resistor is in parallel with the 4-k $\Omega$  resistor, and their combination yields an equivalent 3-k $\Omega$  resistor, shown at the right edge of the circuit in Fig. 2.32b. In Fig. 2.32b the two 3-k $\Omega$  resistors are in series, and their combination is in parallel with the 6-k $\Omega$  resistor. Combining all three resistances yields the circuit shown in Fig. 2.32c.

Applying Kirchhoff’s voltage law to the circuit in Fig. 2.32c yields

$$I_1(9\text{k} + 3\text{k}) = 12$$

$$I_1 = 1 \text{ mA}$$

$V_a$  can be calculated from Ohm’s law as

$$V_a = I_1(3\text{k})$$

$$= 3 \text{ V}$$

or, using Kirchhoff’s voltage law,

$$V_a = 12 - 9\text{k}I_1$$

$$= 12 - 9$$

$$= 3 \text{ V}$$

Knowing  $I_1$  and  $V_a$ , we can now determine all currents and voltages in Fig. 2.32b. Since  $V_a = 3 \text{ V}$ , the current  $I_2$  can be found using Ohm’s law as

$$I_2 = \frac{3}{6\text{k}}$$

$$= \frac{1}{2} \text{ mA}$$



Then, using Kirchhoff's current law, we have

$$\begin{aligned} I_1 &= I_2 + I_3 \\ 1 \times 10^{-3} &= \frac{1}{2} \times 10^{-3} + I_3 \\ I_3 &= \frac{1}{2} \text{ mA} \end{aligned}$$

Note that the  $I_3$  could also be calculated using Ohm's law:

$$\begin{aligned} V_a &= (3\text{k} + 3\text{k})I_3 \\ I_3 &= \frac{3}{6\text{k}} \\ &= \frac{1}{2} \text{ mA} \end{aligned}$$

Applying Kirchhoff's voltage law to the right-hand loop in Fig. 2.32b yields

$$\begin{aligned} V_a - V_b &= 3\text{k}I_3 \\ 3 - V_b &= \frac{3}{2} \\ V_b &= \frac{3}{2} \text{ V} \end{aligned}$$

or, since  $V_b$  is equal to the voltage drop across the  $3\text{-k}\Omega$  resistor, we could use Ohm's law as

$$\begin{aligned} V_b &= 3\text{k}I_3 \\ &= \frac{3}{2} \text{ V} \end{aligned}$$

We are now in a position to calculate the final unknown currents and voltages in Fig. 2.32a. Knowing  $V_b$ , we can calculate  $I_4$  using Ohm's law as

$$\begin{aligned} V_b &= 4\text{k}I_4 \\ I_4 &= \frac{\frac{3}{2}}{4\text{k}} \\ &= \frac{3}{8} \text{ mA} \end{aligned}$$

Then, from Kirchhoff's current law, we have

$$\begin{aligned} I_3 &= I_4 + I_5 \\ \frac{1}{2} \times 10^{-3} &= \frac{3}{8} \times 10^{-3} + I_5 \\ I_5 &= \frac{1}{8} \text{ mA} \end{aligned}$$

We could also have calculated  $I_5$  using the current-division rule. For example,

$$\begin{aligned} I_5 &= \frac{4\text{k}}{4\text{k} + (9\text{k} + 3\text{k})} I_3 \\ &= \frac{1}{8} \text{ mA} \end{aligned}$$

Finally,  $V_c$  can be computed as

$$\begin{aligned} V_c &= I_5(3\text{k}) \\ &= \frac{3}{8}\text{V} \end{aligned}$$

$V_c$  can also be found using voltage division (i.e., the voltage  $V_b$  will be divided between the  $9\text{-k}\Omega$  and  $3\text{-k}\Omega$  resistors). Therefore,

$$\begin{aligned} V_c &= \left[ \frac{3\text{k}}{3\text{k} + 9\text{k}} \right] V_b \\ &= \frac{3}{8}\text{V} \end{aligned}$$

Note that Kirchhoff's current law is satisfied at every node and Kirchhoff's voltage law is satisfied around every loop, as shown in Fig. 2.32d.

The following example is, in essence, the reverse of the previous example in that we are given the current in some branch in the network and are asked to find the value of the input source.

### EXAMPLE

## 2.25

### SOLUTION

Given the circuit in Fig. 2.33 and  $I_4 = 1/2$  mA, let us find the source voltage  $V_o$ .

If  $I_4 = 1/2$  mA, then from Ohm's law,  $V_b = 3$  V.  $V_b$  can now be used to calculate  $I_3 = 1$  mA. Kirchhoff's current law applied at node  $y$  yields

$$\begin{aligned} I_2 &= I_3 + I_4 \\ &= 1.5\text{ mA} \end{aligned}$$

Then, from Ohm's law, we have

$$\begin{aligned} V_a &= (1.5 \times 10^{-3})(2\text{k}) \\ &= 3\text{ V} \end{aligned}$$

Since  $V_a + V_b$  is now known,  $I_5$  can be obtained:

$$\begin{aligned} I_5 &= \frac{V_a + V_b}{3\text{k} + 1\text{k}} \\ &= 1.5\text{ mA} \end{aligned}$$

Applying Kirchhoff's current law at node  $x$  yields

$$\begin{aligned} I_1 &= I_2 + I_5 \\ &= 3\text{ mA} \end{aligned}$$

Now KVL applied to any closed path containing  $V_o$  will yield the value of this input source. For example, if the path is the outer loop, KVL yields

$$-V_o + 6\text{k}I_1 + 3\text{k}I_5 + 1\text{k}I_5 + 4\text{k}I_1 = 0$$

Since  $I_1 = 3$  mA and  $I_5 = 1.5$  mA,

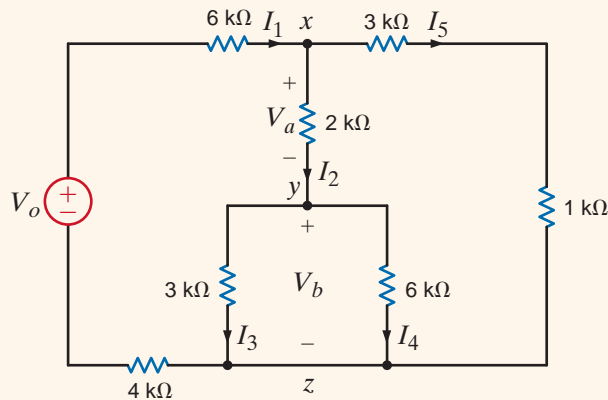
$$V_o = 36\text{ V}$$

If we had selected the path containing the source and the points  $x$ ,  $y$ , and  $z$ , we would obtain

$$-V_o + 6kI_1 + V_a + V_b + 4kI_1 = 0$$

Once again, this equation yields

$$V_o = 36 \text{ V}$$



**Figure 2.33**

Example circuit for analysis.

## Problem-Solving Strategy

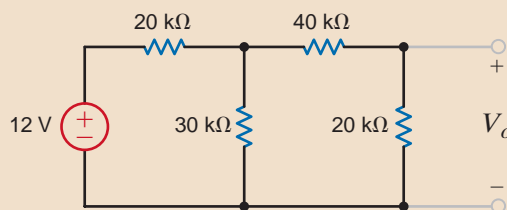
- Step 1.** Systematically reduce the resistive network so that the resistance seen by the source is represented by a single resistor.
- Step 2.** Determine the source current for a voltage source or the source voltage if a current source is present.
- Step 3.** Expand the network, retracing the simplification steps, and apply Ohm's law, KVL, KCL, voltage division, and current division to determine all currents and voltages in the network.

**Analyzing Circuits Containing a Single Source and a Series-Parallel Interconnection of Resistors**

## Learning Assessments

**E2.17** Find  $V_o$  in the network in Fig. E2.17.

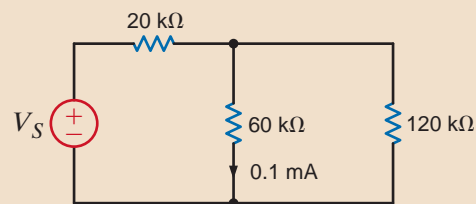
**ANSWER:**  $V_o = 2 \text{ V}$ .



**Figure E2.17**

**E2.18** Find  $V_S$  in the circuit in Fig. E2.18.

**ANSWER:**  $V_S = 9 \text{ V}$ .



**Figure E2.18**

**E2.19** Find  $I_S$  in the circuit in Fig. E2.19.

**ANSWER:**  $I_S = 0.3 \text{ mA}$ .

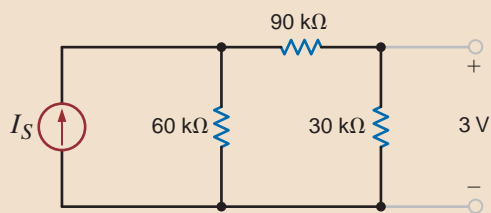


Figure E2.19

**E2.20** Find  $V_1$  in Fig. E2.20.

**ANSWER:**  $V_1 = 12 \text{ V}$ .

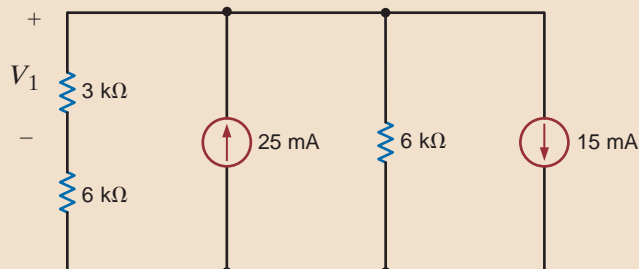


Figure E2.20

**E2.21** Find  $I_0$  in Fig. E2.21.

**ANSWER:**  $I_0 = -4 \text{ mA}$ .

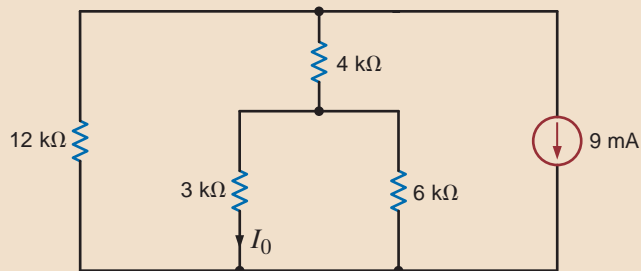


Figure E2.21

**E2.22** Find  $V_o$ ,  $V_1$ , and  $V_2$  in Fig. E2.22.

**ANSWER:**  $V_o = 3.33 \text{ V}$ ,  
 $V_1 = -4 \text{ V}$ ,  $V_2 = 4 \text{ V}$ .

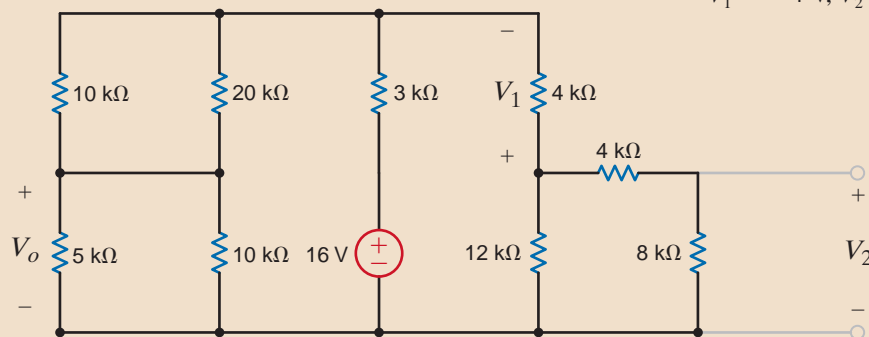


Figure E2.22

**E2.23** Find  $V_0$  and  $V_1$  in Fig. E2.23.

**ANSWER:**  $V_0 = -60$  V,  
 $V_1 = 10$  V.

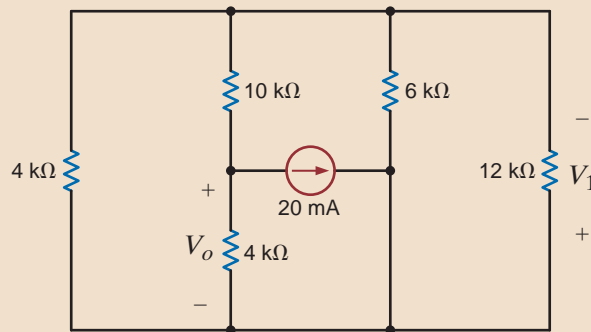


Figure E2.23

To provide motivation for this topic, consider the circuit in Fig. 2.34. Note that this network has essentially the same number of elements as contained in our recent examples. However, when we attempt to reduce the circuit to an equivalent network containing the source  $V_1$  and an equivalent resistor  $R$ , we find that nowhere is a resistor in series or parallel with another. Therefore, we cannot attack the problem directly using the techniques that we have learned thus far. We can, however, replace one portion of the network with an equivalent circuit, and this conversion will permit us, with ease, to reduce the combination of resistors to a single equivalent resistance. This conversion is called the wye-to-delta or delta-to-wye transformation.

2.7

Wye  $\rightleftharpoons$  Delta  
Transformations

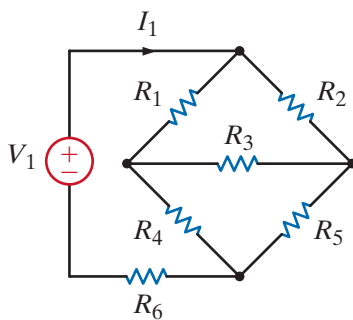


Figure 2.34

Network used to illustrate the need for the wye  $\rightleftharpoons$  delta transformation.

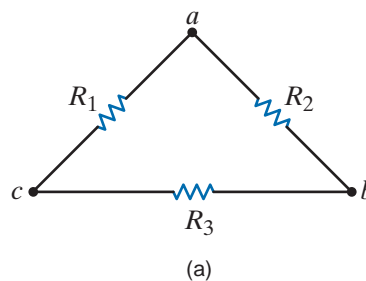
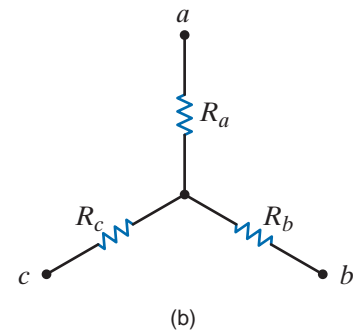


Figure 2.35

Delta and wye resistance networks.



Consider the networks shown in Fig. 2.35. Note that the resistors in Fig. 2.35a form a  $\Delta$  (delta) and the resistors in Fig. 2.35b form a Y (wye). If both of these configurations are connected at only three terminals  $a$ ,  $b$ , and  $c$ , it would be very advantageous if an equivalence could be established between them. It is, in fact, possible to relate the resistances of one network to those of the other such that their terminal characteristics are the same. This relationship between the two network configurations is called the Y- $\Delta$  transformation.

The transformation that relates the resistances  $R_1$ ,  $R_2$ , and  $R_3$  to the resistances  $R_a$ ,  $R_b$ , and  $R_c$  is derived as follows. For the two networks to be equivalent at each corresponding pair of terminals, it is necessary that the resistance at the corresponding terminals be equal (e.g., the resistance at terminals  $a$  and  $b$  with  $c$  open-circuited must be the same for both networks).

Therefore, if we equate the resistances for each corresponding set of terminals, we obtain the following equations:

$$\begin{aligned} R_{ab} &= R_a + R_b = \frac{R_2(R_1 + R_3)}{R_2 + R_1 + R_3} \\ R_{bc} &= R_b + R_c = \frac{R_3(R_1 + R_2)}{R_3 + R_1 + R_2} \\ R_{ca} &= R_c + R_a = \frac{R_1(R_2 + R_3)}{R_1 + R_2 + R_3} \end{aligned} \quad 2.27$$

Solving this set of equations for  $R_a$ ,  $R_b$ , and  $R_c$  yields

$$\begin{aligned} R_a &= \frac{R_1 R_2}{R_1 + R_2 + R_3} \\ R_b &= \frac{R_2 R_3}{R_1 + R_2 + R_3} \\ R_c &= \frac{R_1 R_3}{R_1 + R_2 + R_3} \end{aligned} \quad 2.28$$

Similarly, if we solve Eq. (2.27) for  $R_1$ ,  $R_2$ , and  $R_3$ , we obtain

$$\begin{aligned} R_1 &= \frac{R_a R_b + R_b R_c + R_a R_c}{R_b} \\ R_2 &= \frac{R_a R_b + R_b R_c + R_a R_c}{R_c} \\ R_3 &= \frac{R_a R_b + R_b R_c + R_a R_c}{R_a} \end{aligned} \quad 2.29$$

Equations (2.28) and (2.29) are general relationships and apply to any set of resistances connected in a Y or  $\Delta$ . For the balanced case where  $R_a = R_b = R_c$  and  $R_1 = R_2 = R_3$ , the equations above reduce to

$$R_Y = \frac{1}{3} R_\Delta \quad 2.30$$

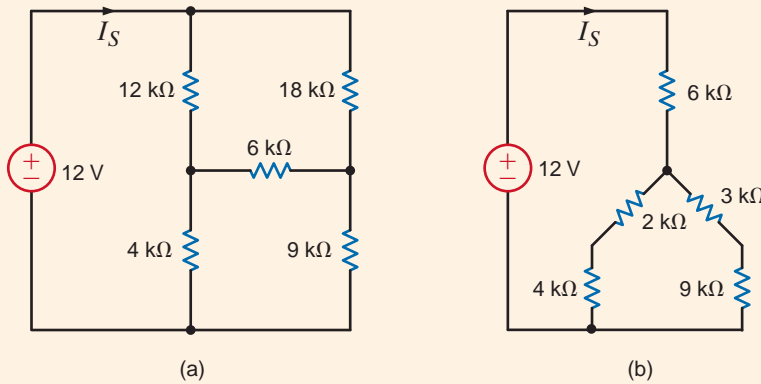
and

$$R_\Delta = 3R_Y \quad 2.31$$

It is important to note that it is not necessary to memorize the formulas in Eqs. (2.28) and (2.29). Close inspection of these equations and Fig. 2.35 illustrates a definite pattern to the relationships between the two configurations. For example, the resistance connected to point  $a$  in the wye (i.e.,  $R_a$ ) is equal to the product of the two resistors in the  $\Delta$  that are connected to point  $a$  divided by the sum of all the resistances in the delta.  $R_b$  and  $R_c$  are determined in a similar manner. Similarly, there are geometrical patterns associated with the equations for calculating the resistors in the delta as a function of those in the wye.

Let us now examine the use of the delta  $\iff$  wye transformation in the solution of a network problem.

Given the network in Fig. 2.36a, let us find the source current  $I_S$ .



## EXAMPLE 2.26

**Figure 2.36**  
Circuits used in  
Example 2.26.

Note that none of the resistors in the circuit are in series or parallel. However, careful examination of the network indicates that the 12k-, 6k-, and 18k-ohm resistors, as well as the 4k-, 6k-, and 9k-ohm resistors each form a delta that can be converted to a wye. Furthermore, the 12k-, 6k-, and 4k-ohm resistors, as well as the 18k-, 6k-, and 9k-ohm resistors, each form a wye that can be converted to a delta. Any one of these conversions will lead to a solution. We will perform a delta-to-wye transformation on the 12k-, 6k-, and 18k-ohm resistors, which leads to the circuit in Fig. 2.36b. The 2k- and 4k-ohm resistors, like the 3k- and 9k-ohm resistors, are in series and their parallel combination yields a 4k-ohm resistor. Thus, the source current is

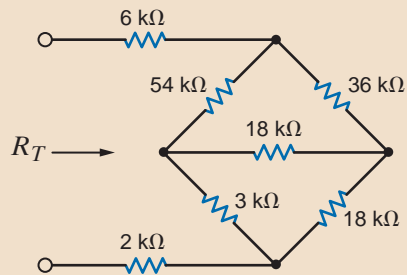
## SOLUTION

$$\begin{aligned} I_S &= 12 / (6k + 4k) \\ &= 1.2 \text{ mA} \end{aligned}$$

## Learning Assessments

**E2.24** Determine the total resistance  $R_T$  in the circuit in Fig. E2.24.

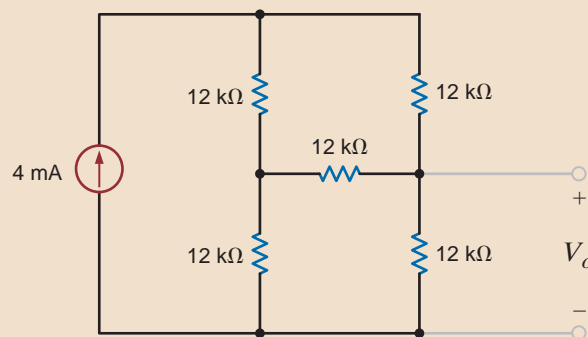
**ANSWER:**  $R_T = 34 \text{ k}\Omega$ .



**Figure E2.24**

**E2.25** Find  $V_o$  in the network in Fig. E2.25.

**ANSWER:**  $V_o = 24 \text{ V}$ .



**Figure E2.25**

**E2.26** Find  $I_1$  in Fig. E2.26.

**ANSWER:**  $I_1 = -1.2$  A.

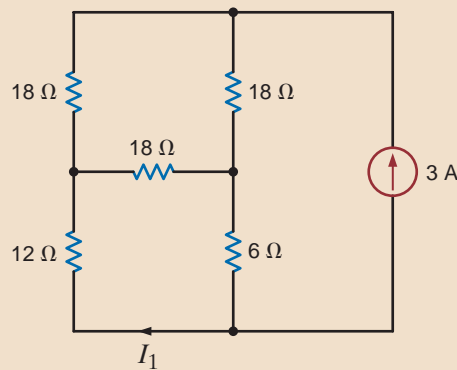


Figure E2.26

## 2.8

### Circuits with Dependent Sources

In Chapter 1 we outlined the different kinds of dependent sources. These controlled sources are extremely important because they are used to model physical devices such as *npn* and *pnp* bipolar junction transistors (BJTs) and field-effect transistors (FETs) that are either metal-oxide-semiconductor field-effect transistors (MOSFETs) or insulated-gate field-effect transistors (IGFETs). These basic structures are, in turn, used to make analog and digital devices. A typical analog device is an operational amplifier (op-amp). This device is presented in Chapter 4. Typical digital devices are random access memories (RAMs), read-only memories (ROMs), and microprocessors. We will now show how to solve simple one-loop and one-node circuits that contain these dependent sources. Although the following examples are fairly simple, they will serve to illustrate the basic concepts.

## Problem-Solving Strategy

### Circuits with Dependent Sources

- Step 1.** When writing the KVL and/or KCL equations for the network, treat the dependent source as though it were an independent source.
- Step 2.** Write the equation that specifies the relationship of the dependent source to the controlling parameter.
- Step 3.** Solve the equations for the unknowns. Be sure that the number of linearly independent equations matches the number of unknowns.

The following four examples will each illustrate one of the four types of dependent sources: current-controlled voltage source, current-controlled current source, voltage-controlled voltage source, and voltage-controlled current source.

### EXAMPLE 2.27

Let us determine the voltage  $V_o$  in the circuit in Fig. 2.37.

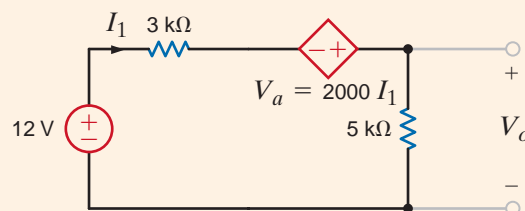


Figure 2.37  
Circuit used in  
Example 2.27.



Applying KVL, we obtain

$$-12 + 3kI_1 - V_A + 5kI_1 = 0$$

where

$$V_A = 2000I_1$$

and the units of the multiplier, 2000, are ohms. Solving these equations yields

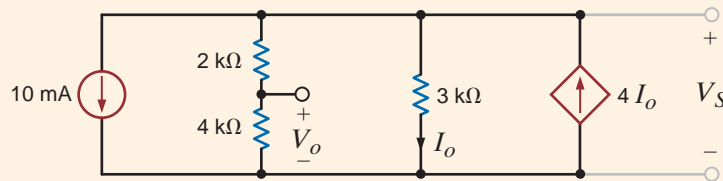
$$I_1 = 2 \text{ mA}$$

Then

$$\begin{aligned} V_o &= (5 \text{ k})I_1 \\ &= 10 \text{ V} \end{aligned}$$

### SOLUTION

Given the circuit in Fig. 2.38 containing a current-controlled current source, let us find the voltage  $V_o$ .



Applying KCL at the top node, we obtain

$$10 \times 10^{-3} + \frac{V_S}{2\text{k} + 4\text{k}} + \frac{V_S}{3\text{k}} - 4I_o = 0$$

where

$$I_o = \frac{V_S}{3\text{k}}$$

Substituting this expression for the controlled source into the KCL equation yields

$$10^{-2} + \frac{V_S}{6\text{k}} + \frac{V_S}{3\text{k}} - \frac{4V_S}{3\text{k}} = 0$$

Solving this equation for  $V_S$ , we obtain

$$V_S = 12 \text{ V}$$

The voltage  $V_o$  can now be obtained using a simple voltage divider; that is,

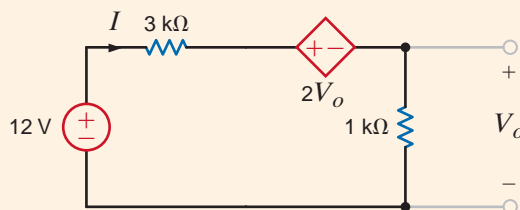
$$\begin{aligned} V_o &= \left[ \frac{4\text{k}}{2\text{k} + 4\text{k}} \right] V_S \\ &= 8 \text{ V} \end{aligned}$$

### EXAMPLE 2.28

Figure 2.38  
Circuit used in  
Example 2.28.

### SOLUTION

The network in Fig. 2.39 contains a voltage-controlled voltage source. We wish to find  $V_o$  in this circuit.



### EXAMPLE 2.29

Figure 2.39  
Circuit used in  
Example 2.29.

**SOLUTION** Applying KVL to this network yields

$$-12 + 3kI + 2V_o + 1kI = 0$$

where

$$V_o = 1kI$$

Hence, the KVL equation can be written as

$$-12 + 3kI + 2kI + 1kI = 0$$

or

$$I = 2 \text{ mA}$$

Therefore,

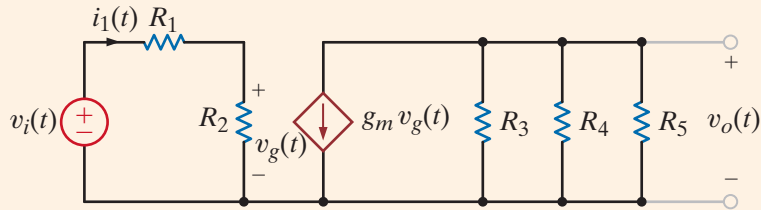
$$\begin{aligned} V_o &= 1kI \\ &= 2 \text{ V} \end{aligned}$$

### EXAMPLE 2.30

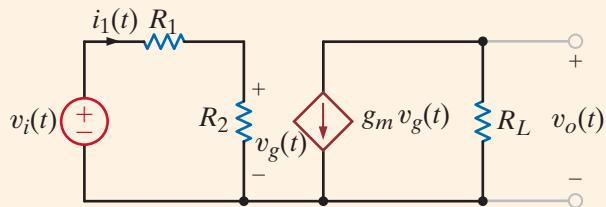
An equivalent circuit for a FET common-source amplifier or BJT common-emitter amplifier can be modeled by the circuit shown in Fig. 2.40a. We wish to determine an expression for the gain of the amplifier, which is the ratio of the output voltage to the input voltage.

**Figure 2.40**

Example circuit containing a voltage-controlled current source.



(a)



(b)

**SOLUTION**

Note that although this circuit, which contains a voltage-controlled current source, appears to be somewhat complicated, we are actually in a position now to solve it with techniques we have studied up to this point. The loop on the left, or input to the amplifier, is essentially detached from the output portion of the amplifier on the right. The voltage across  $R_2$  is  $v_g(t)$ , which controls the dependent current source.

To simplify the analysis, let us replace the resistors  $R_3$ ,  $R_4$ , and  $R_5$  with  $R_L$  such that

$$\frac{1}{R_L} = \frac{1}{R_3} + \frac{1}{R_4} + \frac{1}{R_5}$$

Then the circuit reduces to that shown in Fig. 2.40b. Applying Kirchhoff's voltage law to the input portion of the amplifier yields

$$v_i(t) = i_1(t)(R_1 + R_2)$$

and

$$v_g(t) = i_1(t)R_2$$

Solving these equations for  $v_g(t)$  yields

$$v_g(t) = \frac{R_2}{R_1 + R_2} v_i(t)$$

From the output circuit, note that the voltage  $v_o(t)$  is given by the expression

$$v_o(t) = -g_m v_g(t) R_L$$

Combining this equation with the preceding one yields

$$v_o(t) = \frac{-g_m R_L R_2}{R_1 + R_2} v_i(t)$$

Therefore, the amplifier gain, which is the ratio of the output voltage to the input voltage, is given by

$$\frac{v_o(t)}{v_i(t)} = -\frac{g_m R_L R_2}{R_1 + R_2}$$

Reasonable values for the circuit parameters in Fig. 2.40a are  $R_1 = 100 \Omega$ ,  $R_2 = 1 \text{ k}\Omega$ ,  $g_m = 0.04 \text{ S}$ ,  $R_3 = 50 \text{ k}\Omega$ , and  $R_4 = R_5 = 10 \text{ k}\Omega$ . Hence, the gain of the amplifier under these conditions is

$$\begin{aligned} \frac{v_o(t)}{v_i(t)} &= \frac{-(0.04)(4.545)(10^3)(1)(10^3)}{(1.1)(10^3)} \\ &= -165.29 \end{aligned}$$

Thus, the magnitude of the gain is 165.29.

At this point it is perhaps helpful to point out again that when analyzing circuits with dependent sources, we first treat the dependent source as though it were an independent source when we write a Kirchhoff's current or voltage law equation. Once the equation is written, we then write the controlling equation that specifies the relationship of the dependent source to the unknown variable. For instance, the first equation in Example 2.28 treats the dependent source like an independent source. The second equation in the example specifies the relationship of the dependent source to the voltage, which is the unknown in the first equation.

## Learning Assessments

**E2.27** Find  $V_o$  in the circuit in Fig. E2.27.

**ANSWER:**  $V_o = 12 \text{ V}$ .

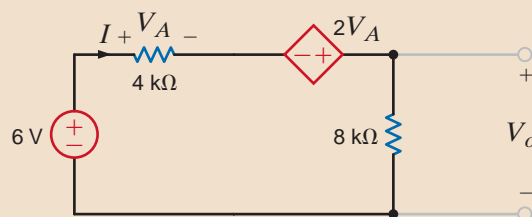
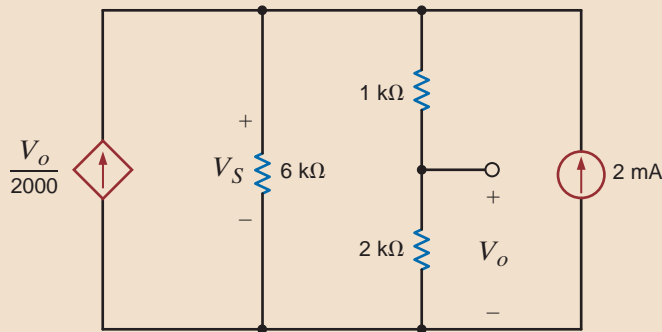


Figure E2.27

**E2.28** Find  $V_o$  in the network in Fig. E2.28.

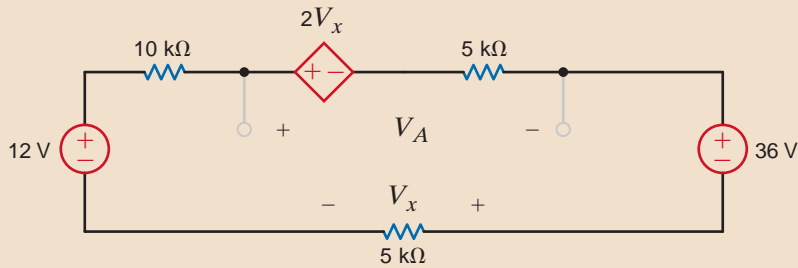
**ANSWER:**  $V_o = 8 \text{ V}$ .



**Figure E2.28**

**E2.29** Find  $V_A$  in Fig. E2.29.

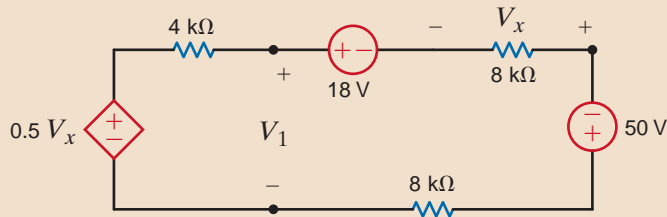
**ANSWER:**  $V_A = -12 \text{ V}$ .



**Figure E2.29**

**E2.30** Find  $V_1$  in Fig. E2.30.

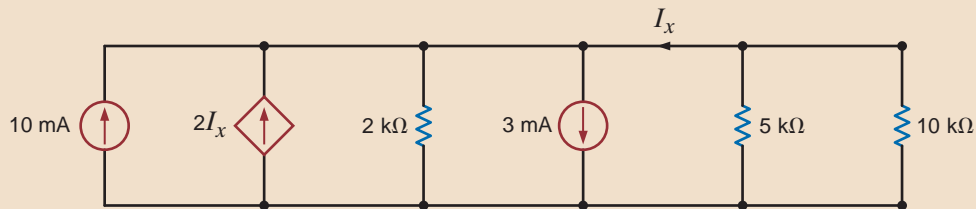
**ANSWER:**  $V_1 = -32/3 \text{ V}$ .



**Figure E2.30**

**E2.31** Find  $I_x$  in Fig. E2.31.

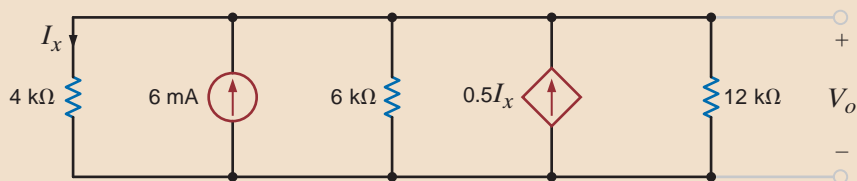
**ANSWER:**  $I_x = -1.5 \text{ mA}$ .



**Figure E2.31**

**E2.32** Find  $V_o$  in Fig. E2.32.

**ANSWER:**  $V_o = 16 \text{ V}$ .



**Figure E2.32**

**E2.33** If the power supplied by the 3-A current source in Fig. E2.33 is 12 W, find  $V_S$  and the power supplied by the 10-V source.

**ANSWER:**  $V_S = 42$  V,  $-30$  W.

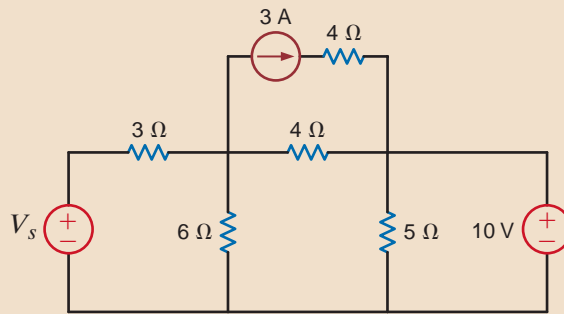


Figure E2.33


In addition to the resistors shown in Fig 2.1, three types are employed in the modern electronics industry: thick-film, thin-film, and silicon-diffused resistors.

**THICK-FILM RESISTORS** Thick-film resistor components are found on all modern surface mount technology (SMT) printed circuit boards. They come in a variety of shapes, sizes, and values. A table of standard sizes for thick-film chip resistors is shown in Table 2.2, and some examples of surface mount thick-film ceramic resistors can be seen in Fig. 2.41.

Thick-film resistors are considered “low-tech,” when compared with thin-film and silicon-diffused components, because they are manufactured using a screen printing process similar to that used with T-shirts. The screens utilized in thick-film manufacturing use a much finer mesh and are typically made of stainless steel for a longer lifetime. The paste used in screen printing resistors consists of a mixture of ruthenium oxides ( $\text{RuO}_2$ ) and glass.

**TABLE 2.2** Thick-film chip resistor standard sizes

SIZE CODE	SIZE (MILS)	POWER RATING (WATTS)
0201	20 × 10	1/20
0402	40 × 20	1/16
0603	60 × 30	1/10
0805	80 × 50	1/8
1206	120 × 60	1/4
2010	200 × 100	1/2
2512	250 × 120	1



Chip Resistors      Chip Capacitors

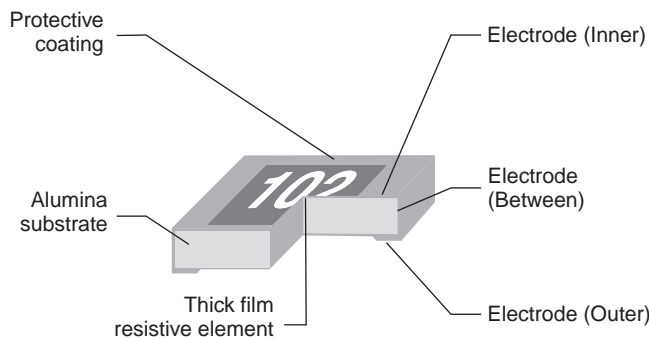
Figure 2.41

A printed circuit board showing surface mount thick-film ceramic resistors. (Courtesy of Mike Palmer)

## 2.9

### Resistor Technologies for Electronic Manufacturing

**Figure 2.42**  
Thick-film chip resistor  
cross-section.



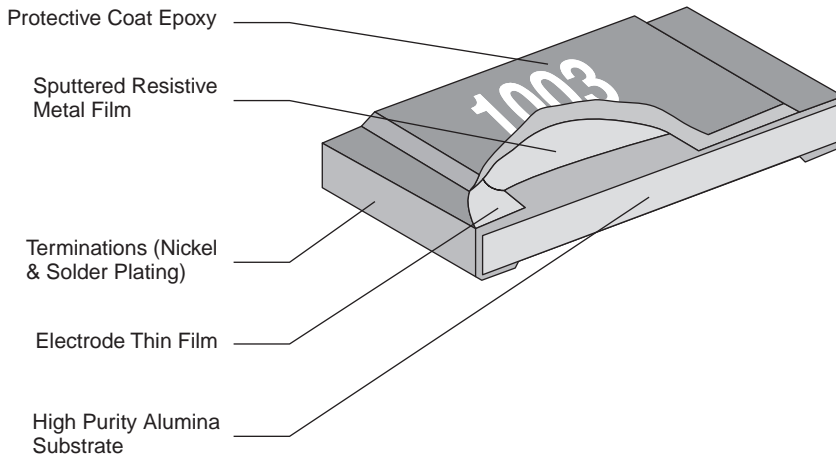
Once the paste is screen printed, it is fired at temperatures around  $850^{\circ}\text{C}$ , causing the organic binders to vaporize and to allow the glass to melt and bind the metal and glass filler to the substrate. The substrates are typically 95% alumina ceramic. After firing, conductors are screen printed and fired to form the contacts used to solder the resistors. A second layer of glass is screen printed and fired to seal and protect the resistor. A cross-section of a typical thick-film resistor is shown in Fig. 2.42. Notice that the conductors are “wrapped” around the substrate to allow them to be soldered from the bottom or top and allow the solder to “wic” up the side to form a more reliable mechanical and electrical contact.

Thick-film resistors have typical “as fired” tolerances of  $\pm 10\%$  to  $\pm 20\%$ . These wide tolerances are due to the fact that the screen printing process does not afford good geometry transfer or consistent thickness. To obtain a better tolerance (i.e.,  $\pm 0.5\%$  to  $\pm 1.0\%$ ), the resistors can be trimmed with a YAG laser to remove a portion of the resistor and change its value. The resistor is constantly measured during the cutting process to make sure the resistance is within the specified tolerance.

**THIN-FILM RESISTORS** Thin-film resistors are fabricated by depositing a thin layer (hundreds of angstroms, where one angstrom is one ten-billionth of a meter) of Tantalum Nitride (TaN) or Nichrome (NiCr) onto a silicon or highly polished alumina ceramic substrate. Using a photolithography process, the metal film is patterned and etched to form the resistor structure. Thin-film metals have a limited resistivity (the reciprocal of conductivity—a measure of a material’s ability to carry an electric current). This low resistivity limits the practical range of thin-film resistors due to the large areas required. Both TaN and NiCr have similar characteristics, but TaN is more chemically and thermally resistant and will hold up better to harsh environments. Sputtered metal thin films are continuous and virtually defect free, which makes them very stable, low-noise components that have negligible nonlinearity when compared with the more porous thick-film materials.

Thin-film resistors are available in standard SMT packages, but are also available as wire-bondable chips that can be directly patterned onto integrated circuits. A cross-sectional drawing of the thin-film chip on ceramic or silicon is shown in Fig 2.43. Because of the additional sophistication involved in fabrication, thin-film resistors are more expensive than thick-film resistors. However, they have a number of important characteristics that make them the preferred devices for a number of microwave applications. Like thick-film resistors, these components can also be laser-trimmed to obtain a desired value within a specified tolerance. Since the sputtered metal film is extremely thin, the power requirement for the laser is very low, which in turn ensures that there will be minimal micro-cracking and therefore an increased level of stability.

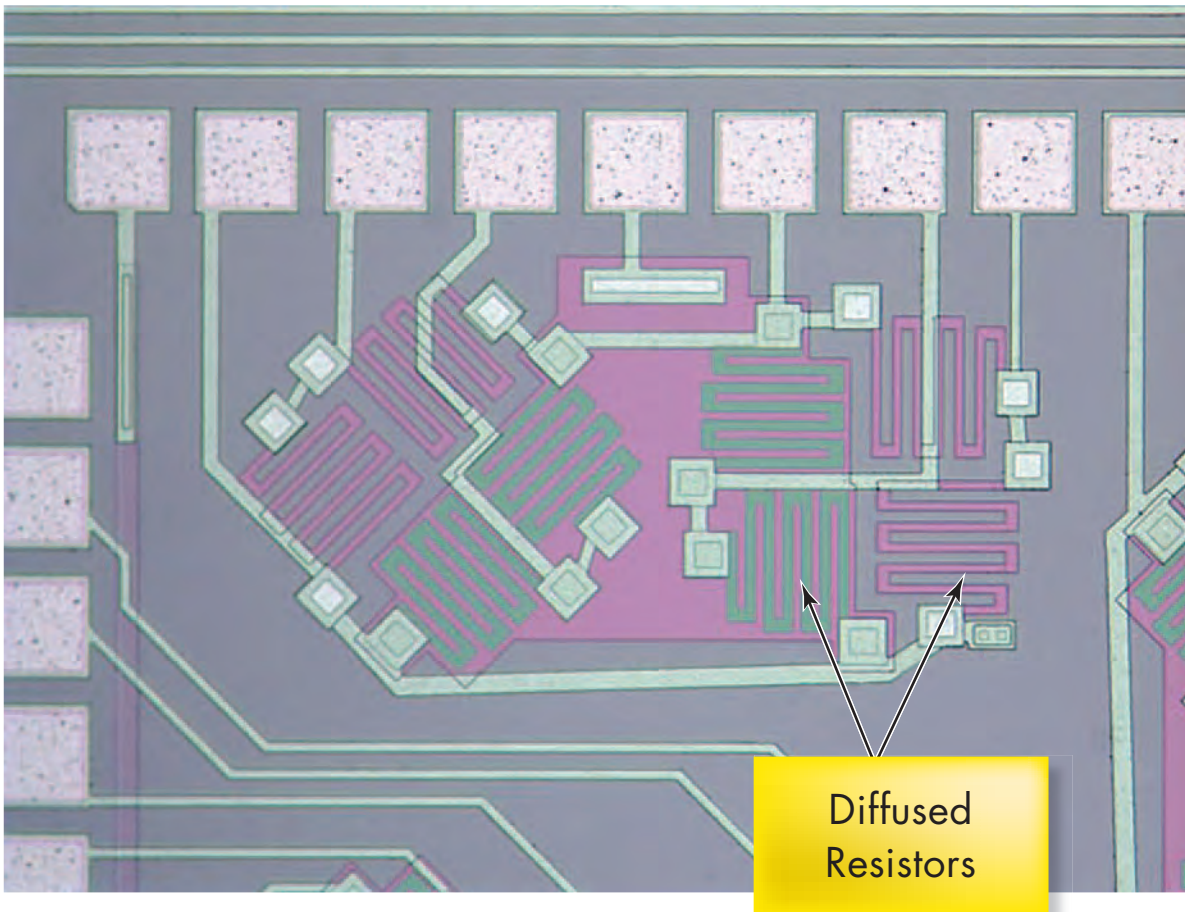
**SILICON-DIFFUSED RESISTORS** Silicon-diffused resistors are part of virtually all integrated circuits (ICs). They are passive devices that are implemented to support or enhance the capabilities of active devices, such as transistors and diodes. Both passive and active devices are manufactured at the same time using the same technology (e.g., CMOS—complementary metal-oxide semiconductor). The resistors are made by diffusing a dopant, such as boron or phosphorus, into a silicon substrate at high temperature. This process is very



**Figure 2.43**  
Thin-film chip resistor  
cross-section.

expensive and is the reason silicon-diffused resistors cost more than thin- or thick-film resistors. A photo of an integrated silicon resistor is shown in Fig. 2.44. Notice that the resistor is completely integrated within a larger circuit, because it is not economically feasible to make discrete silicon-diffused resistors. Table 2.3 compares some of the characteristics of thick-film, thin-film, and silicon-diffused resistors.

Silicon resistors have a resistance range on the order of 5–6k ohms/sq. The term “ohms per square” means a dimensionless square area of resistive material, having an ohmic value equal



**Figure 2.44**  
Silicon-diffused resistors.

to the sheet resistivity of the material. For example, a 10-ohm sheet resistivity material would constitute a 10-ohm resistor whether the material was 1 mil by 1 mil or 1 inch by 1 inch. Dividing the length of the resistor by its width yields the number of squares, and multiplying the number of squares by the sheet resistance yields the resistance value. The total resistance values are limited because of the high cost of silicon area, and there are other circuit design techniques for implementing high-valued resistors through the judicious use of transistors. These devices suffer from large changes in value over temperature and some resistance change with applied voltage. As a result of these poor characteristics, thin-film resistors mounted on the surface of the silicon are used in place of diffused resistors in critical applications.

**TABLE 2.3** Characteristics of resistor types

CHARACTERISTIC	THICK-FILM	THIN-FILM	SILICON-DIFFUSED
Sheet resistance	5 – 500k ohms/sq	25 – 300 ohms/sq	5 – 6k ohms/sq
Sheet tolerance (as fired)	+/-20%	+/-10%	+/-2%
Sheet tolerance (final)	+/-1%	+/-1%	N/A
Relative cost	Low	High	Higher

## 2.10

### Application Examples

Throughout this book we endeavor to present a wide variety of examples that demonstrate the usefulness of the material under discussion in a practical environment. To enhance our presentation of the practical aspects of circuit analysis and design, we have dedicated sections, such as this one, in most chapters for the specific purpose of presenting additional application-oriented examples.

#### APPLICATION EXAMPLE 2.31

The eyes (heating elements) of an electric range are frequently made of resistive nichrome strips. Operation of the eye is quite simple. A current is passed through the heating element causing it to dissipate power in the form of heat. Also, a four-position selector switch, shown in Fig. 2.45, controls the power (heat) output. In this case the eye consists of two nichrome strips modeled by the resistors  $R_1$  and  $R_2$ , where  $R_1 < R_2$ .

1. How should positions  $A$ ,  $B$ ,  $C$ , and  $D$  be labeled with regard to high, medium, low, and off settings?
2. If we desire that high and medium correspond to 2000 W and 1200 W power dissipation, respectively, what are the values of  $R_1$  and  $R_2$ ?
3. What is the power dissipation at the low setting?

#### SOLUTION

Position  $A$  is the off setting since no current flows to the heater elements. In position  $B$ , current flows through  $R_2$  only, while in position  $C$  current flows through  $R_1$  only. Since  $R_1 < R_2$ , more power will be dissipated when the switch is at position  $C$ . Thus, position  $C$  is the medium setting,  $B$  is the low setting, and, by elimination, position  $D$  is the high setting.

When the switch is at the medium setting, only  $R_1$  dissipates power, and we can write  $R_1$  as

$$R_1 = \frac{V_S^2}{P_1} = \frac{230^2}{1200}$$

or

$$R_1 = 44.08 \, \Omega$$



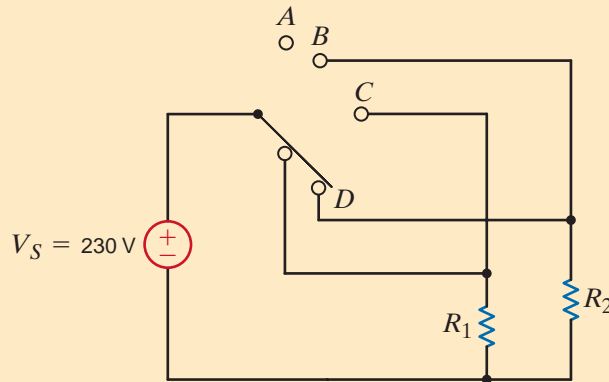
On the high setting, 2000 W of total power is delivered to  $R_1$  and  $R_2$ . Since  $R_1$  dissipates 1200 W,  $R_2$  must dissipate the remaining 800 W. Therefore,  $R_2$  is

$$R_2 = \frac{V_S^2}{P_2} = \frac{230^2}{800}$$

or

$$R_2 = 66.13 \, \Omega$$

Finally, at the low setting, only  $R_2$  is connected to the voltage source; thus, the power dissipation at this setting is 800 W.



**Figure 2.45**  
Simple resistive heater selector circuit.

Have you ever cranked your car with the headlights on? While the starter kicked the engine, you probably saw the headlights dim then return to normal brightness once the engine was running on its own. Can we create a model to predict this phenomenon?

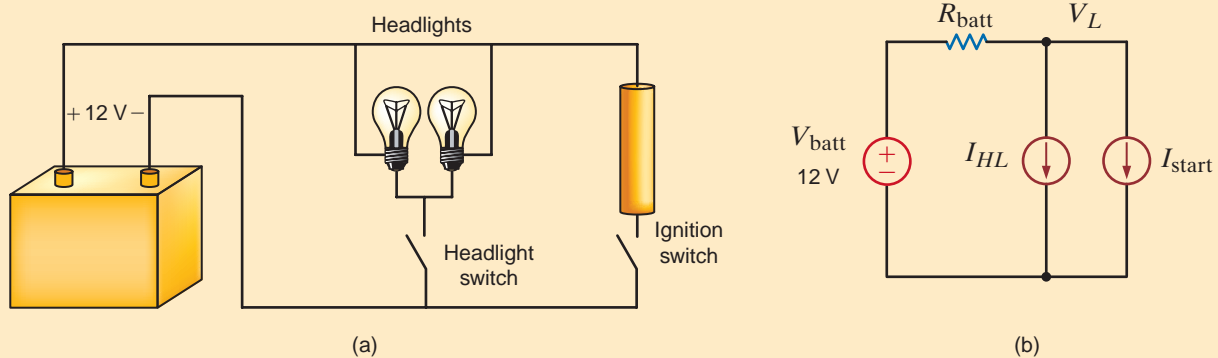
### APPLICATION EXAMPLE 2.32

Yes, we can. Consider the conceptual circuit in Fig. 2.46a and the model circuit in Fig. 2.46b, which isolates just the battery, headlights, and starter. Note the resistor  $R_{\text{batt}}$ . It is included to model several power loss mechanisms that can occur between the battery and the loads, that is, the headlights and starter. First, there are the chemical processes within the battery itself which are not 100% efficient. Second, there are the electrical connections at both the battery posts and the loads. Third, the wiring itself has some resistance, although this is usually so small that it is negligible. The sum of these losses is modeled by  $R_{\text{batt}}$ , and we expect the value of  $R_{\text{batt}}$  to be small. A reasonable value is 25 m $\Omega$ .

### SOLUTION

Next we address the starter. When energized, a typical automobile starter will draw between 90 and 120 A. We will use 100 A as a typical number. Finally, the headlights will draw much less current—perhaps only 1 A. Now we have values to use in our model circuit.

**Figure 2.46**  
A conceptual (a) model and (b) circuit for examining the effect of starter current on headlight intensity.



Assume first that the starter is off. By applying KCL at the node labeled  $V_L$ , we find that the voltage applied to the headlights can be written as

$$V_L = V_{\text{batt}} - I_{HL}R_{\text{batt}}$$

Substituting our model values into this equation yields  $V_L = 11.75 \text{ V}$ —very close to 12 V. Now we energize the starter and apply KCL again:

$$V_L = V_{\text{batt}} - (I_{HL} + I_{\text{start}})R_{\text{batt}}$$

Now the voltage across the headlights is only 9.25 V. No wonder the headlights dim! How would corrosion or loose connections on the battery posts change the situation? In this case, we would expect the quality of the connection from battery to load to deteriorate, increasing  $R_{\text{batt}}$  and compounding the headlight dimming issue.

### APPLICATION EXAMPLE 2.33

A Wheatstone bridge circuit is an accurate device for measuring resistance. This circuit, shown in Fig. 2.47, is used to measure the unknown resistor  $R_x$ . The center leg of the circuit contains a galvanometer, which is a very sensitive device that can be used to measure current in the microamp range. When the unknown resistor is connected to the bridge,  $R_3$  is adjusted until the current in the galvanometer is zero, at which point the bridge is balanced. In this balanced condition

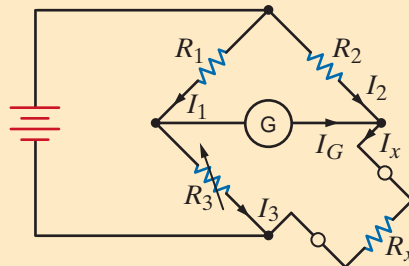
$$\frac{R_1}{R_3} = \frac{R_2}{R_x}$$

so that

$$R_x = \left(\frac{R_2}{R_1}\right)R_3$$

Figure 2.47

The Wheatstone bridge circuit.



Engineers also use this bridge circuit to measure strain in solid material. For example, a system used to determine the weight of a truck is shown in Fig. 2.48a. The platform is supported by cylinders on which strain gauges are mounted. The strain gauges, which measure strain when the cylinder deflects under load, are connected to a Wheatstone bridge as shown in Fig. 2.48b. The strain gauge has a resistance of  $120 \Omega$  under no-load conditions and changes value under load. The variable resistor in the bridge is a calibrated precision device.

Weight is determined in the following manner. The  $\Delta R_3$  required to balance the bridge represents the  $\Delta$  strain, which when multiplied by the modulus of elasticity yields the  $\Delta$  stress. The  $\Delta$  stress multiplied by the cross-sectional area of the cylinder produces the  $\Delta$  load, which is used to determine weight.

Let us determine the value of  $R_3$  under no load when the bridge is balanced and its value when the resistance of the strain gauge changes to  $120.24 \Omega$  under load.

**SOLUTION** Using the balance equation for the bridge, the value of  $R_3$  at no load is

$$R_3 = \left(\frac{R_1}{R_2}\right)R_x$$

$$= \left(\frac{100}{110}\right)(120)$$

$$= 109.0909 \Omega$$

Under load, the value of  $R_3$  is

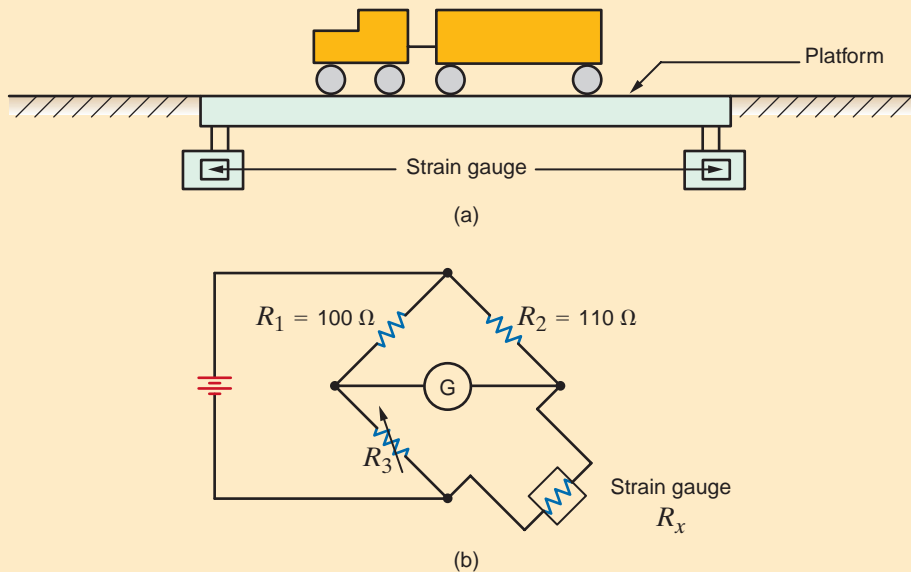
$$R_3 = \left(\frac{100}{110}\right)(120.24)$$

$$= 109.3091 \Omega$$

Therefore, the  $\Delta R_3$  is

$$\Delta R_3 = 109.3091 - 109.0909$$

$$= 0.2182 \Omega$$



**Figure 2.48**

Diagrams used in Example 2.33.

Most of this text is concerned with circuit analysis; that is, given a circuit in which all the components are specified, analysis involves finding such things as the voltage across some element or the current through another. Furthermore, the solution of an analysis problem is generally unique. In contrast, design involves determining the circuit configuration that will meet certain specifications. In addition, the solution is generally not unique in that there may be many ways to satisfy the circuit/performance specifications. It is also possible that there is no solution that will meet the design criteria.

In addition to meeting certain technical specifications, designs normally must also meet other criteria, such as economic, environmental, and safety constraints. For example, if a circuit design that meets the technical specifications is either too expensive or unsafe, it is not viable regardless of its technical merit.

At this point, the number of elements that we can employ in circuit design is limited primarily to the linear resistor and the active elements we have presented. However, as we progress through the text we will introduce a number of other elements (for example, the op-amp, capacitor, and inductor), which will significantly enhance our design capability.

We begin our discussion of circuit design by considering a couple of simple examples that demonstrate the selection of specific components to meet certain circuit specifications.

## 2.11

### Design Examples

**DESIGN  
EXAMPLE 2.34**

An electronics hobbyist who has built his own stereo amplifier wants to add a back-lit display panel to his creation for that professional look. His panel design requires seven light bulbs—two operate at 12 V/15 mA and five at 9 V/5 mA. Luckily, his stereo design already has a quality 12-V dc supply; however, there is no 9-V supply. Rather than building a new dc power supply, let us use the inexpensive circuit shown in Fig. 2.49a to design a 12-V to 9-V converter with the restriction that the variation in  $V_2$  be no more than  $\pm 5\%$ . In particular, we must determine the necessary values of  $R_1$  and  $R_2$ .

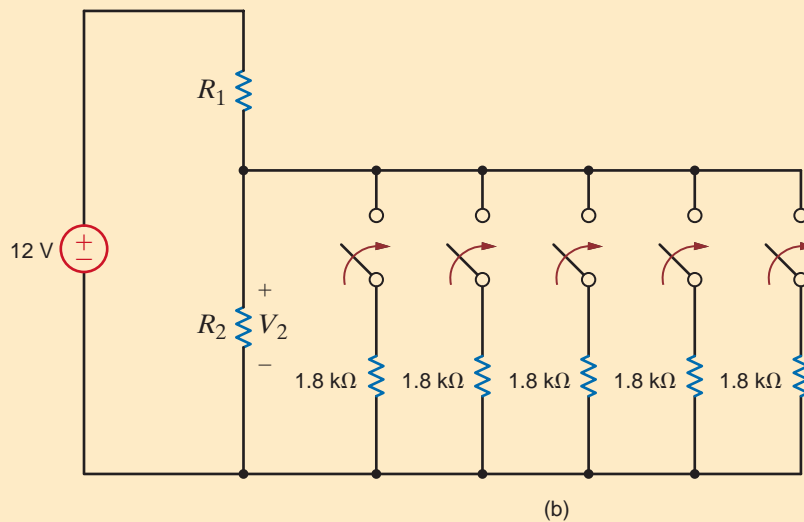
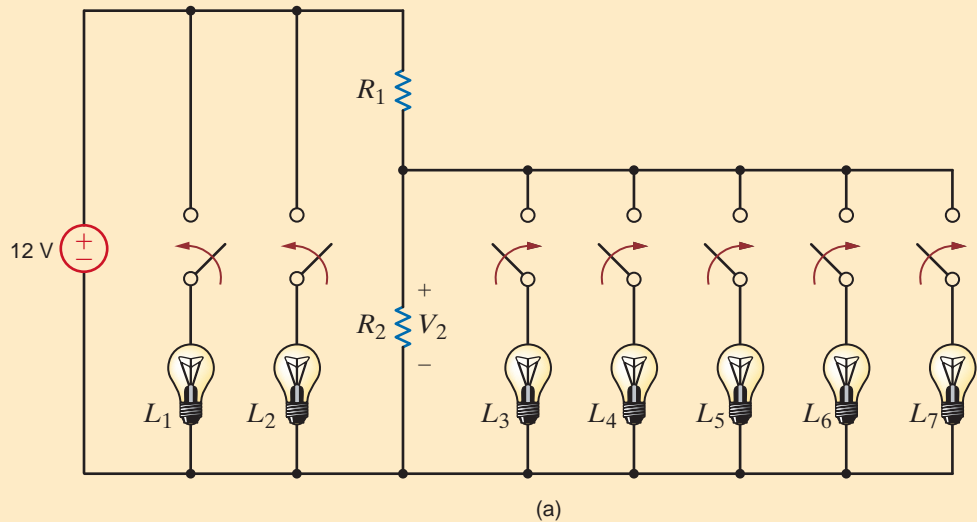
**SOLUTION** First, lamps  $L_1$  and  $L_2$  have no effect on  $V_2$ . Second, when lamps  $L_3$ – $L_7$  are on, they each have an equivalent resistance of

$$R_{\text{eq}} = \frac{V_2}{I} = \frac{9}{0.005} = 1.8 \text{ k}\Omega$$

As long as  $V_2$  remains fairly constant, the lamp resistance will also be fairly constant. Thus, the requisite model circuit for our design is shown in Fig. 2.49b. The voltage  $V_2$  will be at its maximum value of  $9 + 5\% = 9.45 \text{ V}$  when  $L_3$ – $L_7$  are all off. In this case  $R_1$  and  $R_2$  are in series, and  $V_2$  can be expressed by simple voltage division as

$$V_2 = 9.45 = 12 \left[ \frac{R_2}{R_1 + R_2} \right]$$

**Figure 2.49**  
12-V to 9-V converter circuit  
for powering panel lighting.



Rearranging the equation yields

$$\frac{R_1}{R_2} = 0.27$$

A second expression involving  $R_1$  and  $R_2$  can be developed by considering the case when  $L_3$ – $L_7$  are all on, which causes  $V_2$  to reach its minimum value of 9–5%, or 8.55 V. Now, the effective resistance of the lamps is five 1.8-k $\Omega$  resistors in parallel, or 360  $\Omega$ . The corresponding expression for  $V_2$  is

$$V_2 = 8.55 = 12 \left[ \frac{R_2 // 360}{R_1 + (R_2 // 360)} \right]$$

which can be rewritten in the form

$$\frac{360R_1}{R_2} + 360 + R_1 = \frac{12}{8.55} = 1.4$$

Substituting the value determined for  $R_1/R_2$  into the preceding equation yields

$$R_1 = 360[1.4 - 1 - 0.27]$$

or

$$R_1 = 48.1 \Omega$$

and so for  $R_2$

$$R_2 = 178.3 \Omega$$

Let's design a circuit that produces a 5-V output from a 12-V input. We will arbitrarily fix the power consumed by the circuit at 240 mW. Finally, we will choose the best possible standard resistor values from Table 2.1 and calculate the percent error in the output voltage that results from that choice.

The simple voltage divider, shown in Fig. 2.50, is ideally suited for this application. We know that  $V_o$  is given by

$$V_o = V_{in} \left[ \frac{R_2}{R_1 + R_2} \right]$$

which can be written as

$$R_1 = R_2 \left[ \frac{V_{in}}{V_o} - 1 \right]$$

Since all of the circuit's power is supplied by the 12-V source, the total power is given by

$$P = \frac{V_{in}^2}{R_1 + R_2} \leq 0.24$$

Using the second equation to eliminate  $R_1$ , we find that  $R_2$  has a lower limit of

$$R_2 \geq \frac{V_o V_{in}}{P} = \frac{(5)(12)}{0.24} = 250 \Omega$$

Substituting these results into the second equation yields the lower limit of  $R_1$ , that is

$$R_1 = R_2 \left[ \frac{V_{in}}{V_o} - 1 \right] \geq 350 \Omega$$

Thus, we find that a significant portion of Table 2.1 is not applicable to this design. However, determining the best pair of resistor values is primarily a trial-and-error operation

## DESIGN EXAMPLE 2.35

### SOLUTION

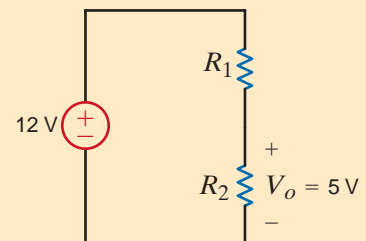


Figure 2.50

A simple voltage divider

that can be enhanced by using an Excel spreadsheet as shown in Table 2.4. Standard resistor values from Table 2.1 were entered into Column A of the spreadsheet for  $R_2$ . Using the equation above, theoretical values for  $R_1$  were calculated using  $R_1 = 1.4 \cdot R_2$ . A standard resistor value was selected from Table 2.1 for  $R_1$  based on the theoretical calculation in Column B.  $V_0$  was calculated using the simple voltage-divider equation, and the power absorbed by  $R_1$  and  $R_2$  was calculated in Column E.

Note that a number of combinations of  $R_1$  and  $R_2$  satisfy the power constraint for this circuit. The power absorbed decreases as  $R_1$  and  $R_2$  increase. Let's select  $R_1 = 1800 \Omega$  and  $R_2 = 1300 \Omega$ , because this combination yields an output voltage of 5.032 V that is closest to the desired value of 5 V. The resulting error in the output voltage can be determined from the expression

$$\text{Percent error} = \left[ \frac{5.032 - 5}{5} \right] 100\% = 0.64\%$$

It should be noted, however, that these resistor values are nominal, that is, typical values. To find the worst-case error, we must consider that each resistor as purchased may be as much as  $\pm 5\%$  off the nominal value. In this application, since  $V_0$  is already greater than the target of 5 V, the worst-case scenario occurs when  $V_0$  increases even further, that is,  $R_1$  is 5% too low (1710  $\Omega$ ) and  $R_2$  is 5% too high (1365  $\Omega$ ). The resulting output voltage is 5.32 V, which yields a percent error of 6.4%. Of course, most resistor values are closer to the nominal value than to the guaranteed maximum/minimum values. However, if we intend to build this circuit with a guaranteed tight output error such as 5% we should use resistors with lower tolerances.

How much lower should the tolerances be? Our first equation can be altered to yield the worst-case output voltage by adding a tolerance,  $\Delta$ , to  $R_2$  and subtracting the tolerance from  $R_1$ . Let's choose a worst-case output voltage of  $V_{0\text{max}} = 5.25$  V, that is, a 5% error:

**TABLE 2.4** Spreadsheet calculations for simple voltage divider

	A	B	C	D	E
1	R2	R1 theor	R1	Vo	Pabs
2	300	420	430	4.932	0.197
3	330	462	470	4.950	0.180
4	360	504	510	4.966	0.166
5	390	546	560	4.926	0.152
6	430	602	620	4.914	0.137
7	470	658	680	4.904	0.125
8	510	714	750	4.857	0.114
9	560	784	750	5.130	0.110
10	620	868	910	4.863	0.094
11	680	952	910	5.132	0.091
12	750	1050	1000	5.143	0.082
13	820	1148	1100	5.125	0.075
14	910	1274	1300	4.941	0.065
15	1000	1400	1300	5.217	0.063
16	1100	1540	1500	5.077	0.055
17	1200	1680	1600	5.143	0.051
18	1300	1820	1800	5.032	0.046
19	1500	2100	2000	5.143	0.041
20	1600	2240	2200	5.053	0.038
21	1800	2520	2400	5.143	0.034
22	2000	2800	2700	5.106	0.031
23	2200	3080	3000	5.077	0.028
24	2400	3360	3300	5.053	0.025

$$V_{0\max} = 5.25 = V_{in} \left[ \frac{R_2(1 + \Delta)}{R_1(1 - \Delta) + R_2(1 + \Delta)} \right] = 12 \left[ \frac{1300(1 + \Delta)}{1800(1 - \Delta) + 1300(1 + \Delta)} \right]$$

The resulting value of  $\Delta$  is 0.037, or 3.7%. Standard resistors are available in tolerances of 10, 5, 2, and 1%. Tighter tolerances are available but very expensive. Thus, based on nominal values of 1300  $\Omega$  and 1800  $\Omega$ , we should utilize 2% resistors to ensure an output voltage error less than 5%.

In factory instrumentation, process parameters such as pressure and flowrate are measured, converted to electrical signals, and sent some distance to an electronic controller. The controller then decides what actions should be taken. One of the main concerns in these systems is the physical distance between the sensor and the controller. An industry standard format for encoding the measurement value is called the 4–20 mA standard, where the parameter range is linearly distributed from 4 to 20 mA. For example, a 100 psi pressure sensor would output 4 mA if the pressure were 0 psi, 20 mA at 100 psi, and 12 mA at 50 psi. But most instrumentation is based on voltages between 0 and 5 V, not on currents.

Therefore, let us design a current-to-voltage converter that will output 5 V when the current signal is 20 mA.

The circuit in Fig. 2.51a is a very accurate model of our situation. The wiring from the sensor unit to the controller has some resistance,  $R_{\text{wire}}$ . If the sensor output were a voltage proportional to pressure, the voltage drop in the line would cause measurement error even if the sensor output were an ideal source of voltage. But, since the data are contained in the current value,  $R_{\text{wire}}$  does not affect the accuracy at the controller as long as the sensor acts as an ideal current source.

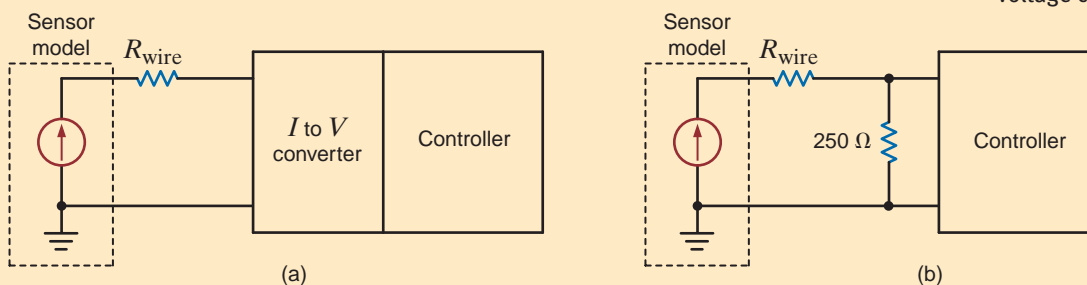
As for the current-to-voltage converter, it is extremely simple—a resistor. For 5 V at 20 mA, we employ Ohm's law to find

$$R = \frac{5}{0.02} = 250 \Omega$$

The resulting converter is added to the system in Fig. 2.51b, where we tacitly assume that the controller does not load the remaining portion of the circuit.

Note that the model indicates that the distance between the sensor and controller could be infinite. Intuitively, this situation would appear to be unreasonable, and it is. Losses that would take place over distance can be accounted for by using a more accurate model of the sensor, as shown in Fig. 2.52. The effect of this new sensor model can be seen from the equations that describe this new network. The model equations are

$$I_S = \frac{V_S}{R_S} + \frac{V_S}{R_{\text{wire}} + 250}$$



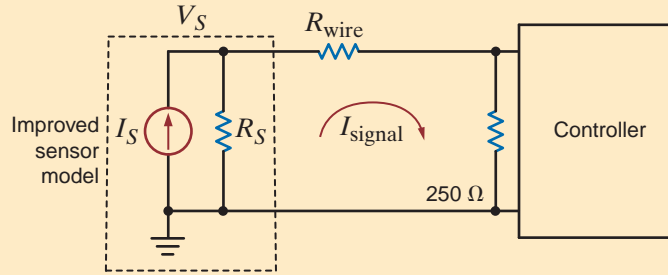
## DESIGN EXAMPLE 2.36

### SOLUTION

Figure 2.51

The 4- to 20-mA control loop (a) block diagram, (b) with the current-to-voltage converter.

**Figure 2.52**  
A more accurate model  
for the 4- to 20-mA  
control loop.



and

$$I_{\text{signal}} = \frac{V_S}{R_{\text{wire}} + 250}$$

Combining these equations yields

$$\frac{I_{\text{signal}}}{I_S} = \frac{1}{1 + \frac{R_{\text{wire}} + 250}{R_S}}$$

Thus, we see that it is the size of  $R_S$  relative to  $(R_{\text{wire}} + 250 \Omega)$  that determines the accuracy of the signal at the controller. Therefore, we want  $R_S$  as large as possible. Both the maximum sensor output voltage and output resistance,  $R_S$ , are specified by the sensor manufacturer.

We will revisit this current-to-voltage converter in Chapter 4.

## DESIGN EXAMPLE 2.37

The network in Fig. 2.53 is an equivalent circuit for a transistor amplifier used in a stereo preamplifier. The input circuitry, consisting of a 2-mV source in series with a 500- $\Omega$  resistor, models the output of a compact disk player. The dependent source,  $R_{\text{in}}$ , and  $R_o$  model the transistor, which amplifies the signal and then sends it to the power amplifier. The 10-k $\Omega$  load resistor models the input to the power amplifier that actually drives the speakers. We must design a transistor amplifier as shown in Fig. 2.53 that will provide an overall gain of  $-200$ . In practice we do not actually vary the device parameters to achieve the desired gain; rather, we select a transistor from the manufacturer's data books that will satisfy the required specification. The model parameters for three different transistors are listed as follows:

Manufacturer's transistor parameter values

Part Number	$R_{\text{in}}$ (k $\Omega$ )	$R_o$ (k $\Omega$ )	$g_m$ (mA/V)
1	1.0	50	50
2	2.0	75	30
3	8.0	80	20

Design the amplifier by choosing the transistor that produces the most accurate gain. What is the percent error of your choice?

**SOLUTION** The output voltage can be written

$$V_o = -g_m V(R_o // R_L)$$



Using voltage division at the input to find  $V$ ,

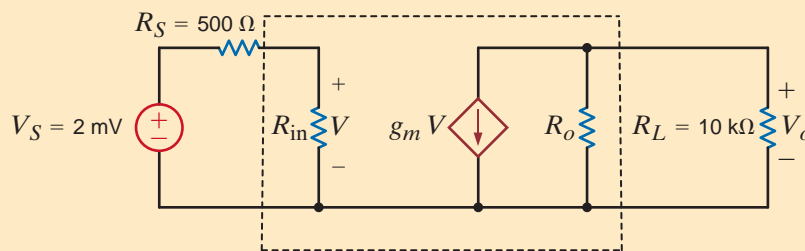
$$V = V_S \left( \frac{R_{in}}{R_{in} + R_S} \right)$$

Combining these two expressions, we can solve for the gain:

$$A_V = \frac{V_o}{V_S} = -g_m \left( \frac{R_{in}}{R_{in} + R_S} \right) (R_o // R_L)$$

Using the parameter values for the three transistors, we find that the best alternative is transistor number 2, which has a gain error of

$$\text{Percent error} = \left( \frac{211.8 - 200}{200} \right) \times 100\% = 5.9\%$$



**Figure 2.53**

Transistor amplifier circuit model.

## SUMMARY

- **Ohm's law**  $V = IR$
- **The passive sign convention with Ohm's law** The current enters the resistor terminal with the positive voltage reference.
- **Kirchhoff's current law (KCL)** The algebraic sum of the currents leaving (entering) a node is zero.
- **Kirchhoff's voltage law (KVL)** The algebraic sum of the voltages around any closed path is zero.
- **Solving a single-loop circuit** Determine the loop current by applying KVL and Ohm's law.
- **Solving a single-node-pair circuit** Determine the voltage between the pair of nodes by applying KCL and Ohm's law.
- **The voltage-division rule** The voltage is divided between two series resistors in direct proportion to their resistance.
- **The current-division rule** The current is divided between two parallel resistors in reverse proportion to their resistance.
- **The equivalent resistance of a network of resistors** Combine resistors in series by adding their resistances. Combine resistors in parallel by adding their conductances. The wye-to-delta and delta-to-wye transformations are also an aid in reducing the complexity of a network.
- **Short circuit** Zero resistance, zero voltage; the current in the short is determined by the rest of the circuit.
- **Open circuit** Zero conductance, zero current; the voltage across the open terminals is determined by the rest of the circuit.

**PROBLEMS**

**2.1** Determine the current and power dissipated in the resistor in Fig. P2.1.



Figure P2.1

**2.2** Determine the current and power dissipated in the resistors in Fig. P2.2.

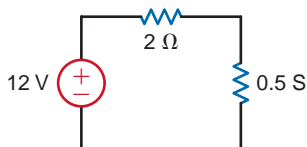


Figure P2.2

**2.3** Determine the voltage across the resistor in Fig. P2.3 and the power dissipated.



Figure P2.3

**2.4** Given the circuit in Fig. P2.4, find the voltage across each resistor and the power dissipated in each.

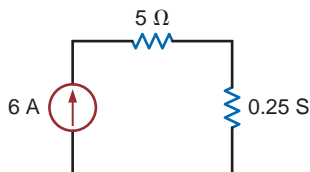


Figure P2.4

**2.5** In the network in Fig. P2.5, the power absorbed by  $R_x$  is 20 mW. Find  $R_x$ .

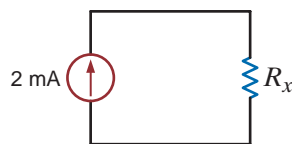


Figure P2.5

**2.6** In the network in Fig. P2.6, the power absorbed by  $G_x$  is 20 mW. Find  $G_x$ .

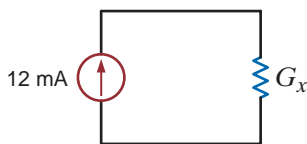


Figure P2.6

**2.7** A model for a standard two D-cell flashlight is shown in Fig. P2.7. Find the power dissipated in the lamp.

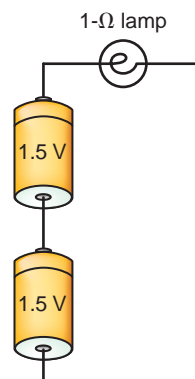


Figure P2.7

**2.8** An automobile uses two halogen headlights connected as shown in Fig. P2.8. Determine the power supplied by the battery if each headlight draws 3 A of current.

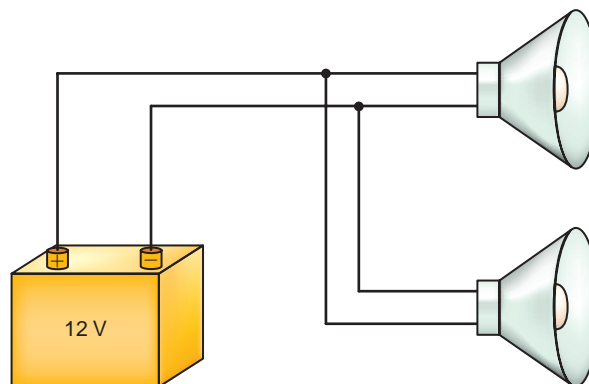
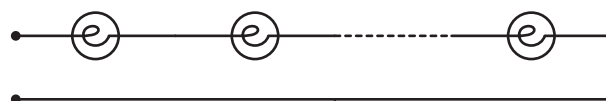
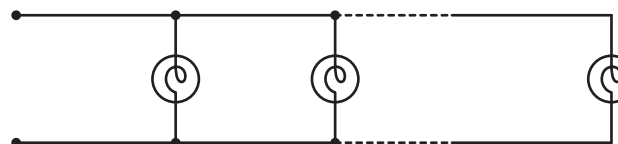


Figure P2.8

**2.9** Many years ago a string of Christmas tree lights was manufactured in the form shown in Fig. P2.9a. Today the lights are manufactured as shown in Fig. P2.9b. Is there a good reason for this change?



(a)



(b)

Figure P2.9

2.10 Find  $I_1$  in the network in Fig. P2.10.

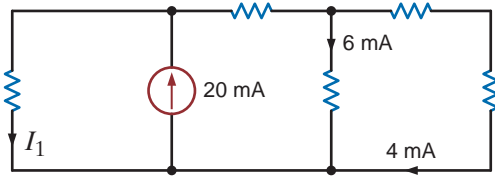


Figure P2.10

2.11 Find  $I_1$  in the network in Fig. P2.11.

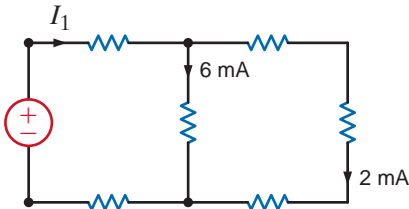


Figure P2.11

2.12 Find  $I_1$  and  $I_2$  in the network in Fig. P2.12.

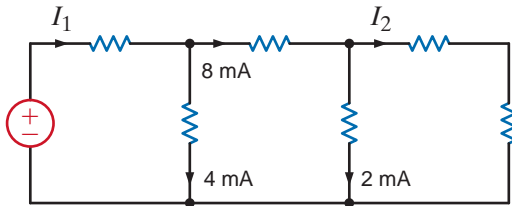


Figure P2.12

2.13 Find  $I_1$  in the circuit in Fig. P2.13.

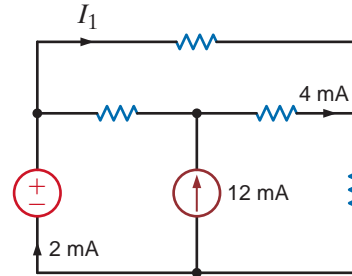


Figure P2.13

2.14 Find  $I_x$  in the network in Fig. P2.14.

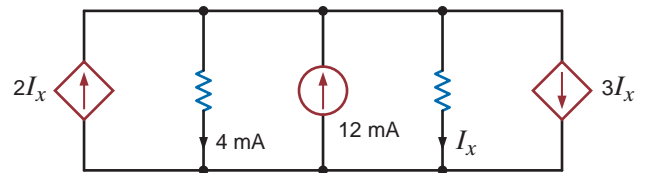


Figure P2.14

2.15 Determine  $I_L$  in the circuit in Fig. P2.15.

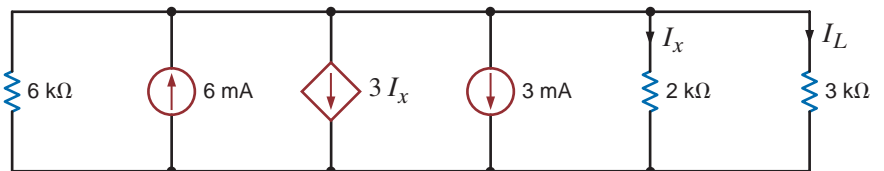


Figure P2.15

2.16 Find  $I_o$  and  $I_1$  in the circuit in Fig. P2.16.

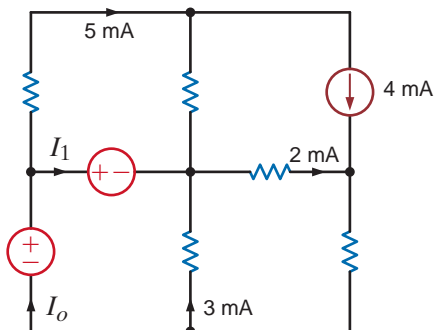


Figure P2.16

2.17 Find  $I_1$  in the network in Fig. P2.17.

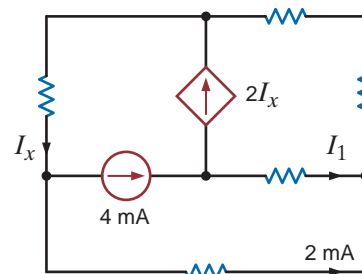


Figure P2.17

2.18 Find  $I_x$ ,  $I_y$ , and  $I_z$  in the network in Fig. P2.18.

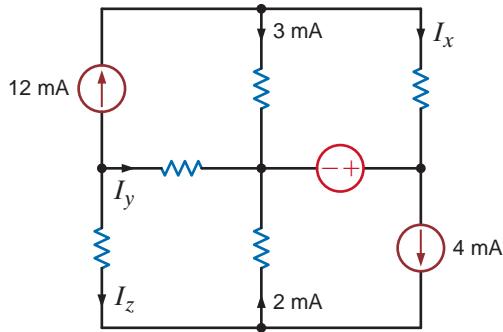


Figure P2.18

2.19 Find  $I_1$  in the circuit in Fig. P2.19.

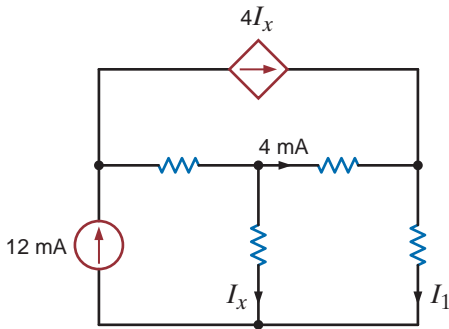


Figure P2.19

2.20 Find  $I_1$  in the network in Fig. P2.20.

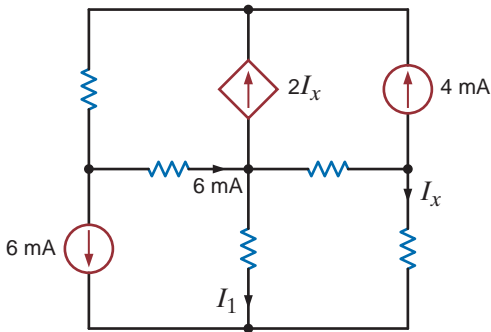


Figure P2.20

2.21 Find  $I_1$ ,  $I_2$ , and  $I_3$  in the network in Fig. P2.21.

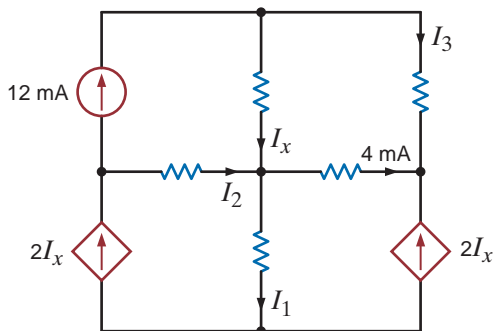


Figure P2.21

2.22 In the network in Fig. P2.22, Find  $I_1$ ,  $I_2$  and  $I_3$  and show that KCL is satisfied at the boundary.

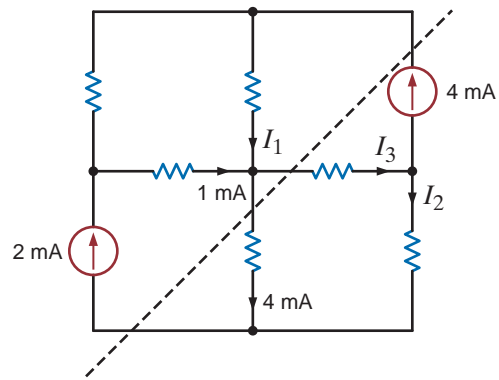


Figure P2.22

2.23 Find  $V_{bd}$  in the circuit in Fig. P2.23.

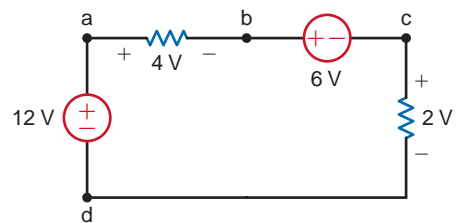


Figure P2.23

2.24 Find  $V_{ad}$  in the network in Fig. P2.24.

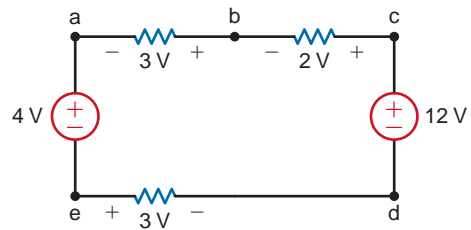


Figure P2.24

2.25 Find  $V_{fb}$  and  $V_{ec}$  in the circuit in Fig. P2.25.

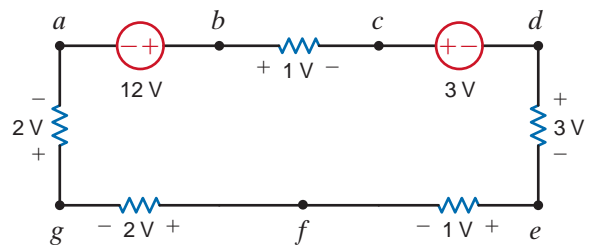


Figure P2.25

2.26 Find  $V_{ae}$  and  $V_{cf}$  in the circuit in Fig. P2.26.

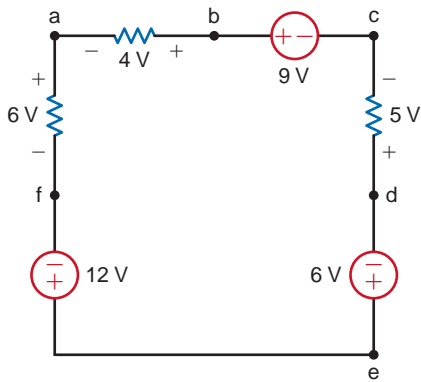


Figure P2.26

2.27 Given the circuit diagram in Fig. P2.27, find the following voltages:  $V_{da}$ ,  $V_{bh}$ ,  $V_{gc}$ ,  $V_{di}$ ,  $V_{fa}$ ,  $V_{ac}$ ,  $V_{ai}$ ,  $V_{hf}$ ,  $V_{fb}$ , and  $V_{dc}$ .

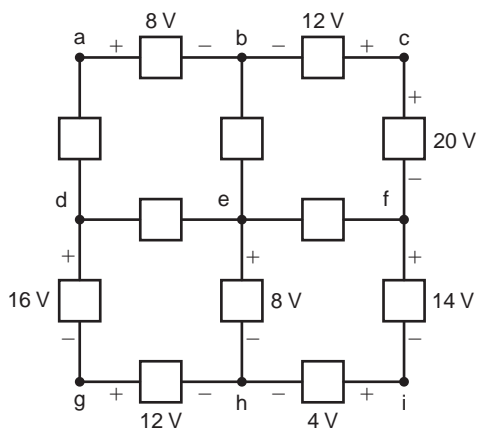


Figure P2.27

2.28 Find  $V_x$  and  $V_y$  in the circuit in Fig. P2.28.

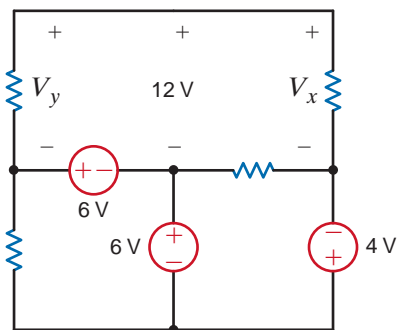


Figure P2.28

2.29 Find  $V_x$  and  $V_y$  in the circuit in Fig. P2.29.

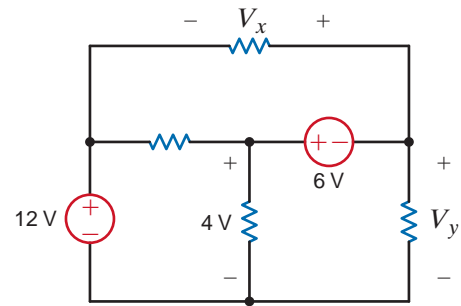


Figure P2.29

2.30 Find  $V_1$ ,  $V_2$  and  $V_3$  in the network in Fig. P2.30.

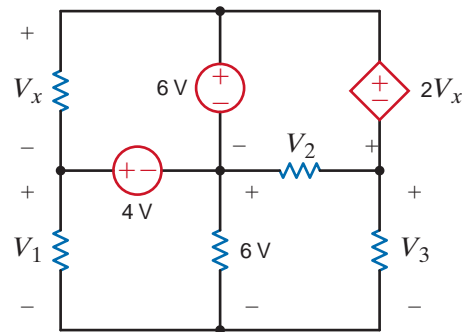


Figure P2.30

2.31 Find  $V_o$  in the network in Fig. P2.31.

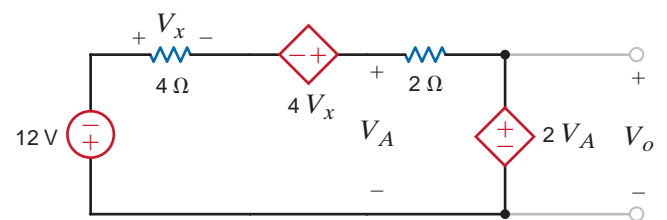


Figure P2.31

2.32 Find  $V_o$  in the circuit in Fig. P2.32.

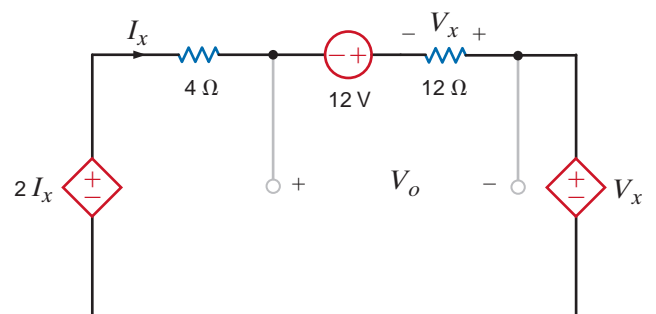


Figure P2.32

**2.33** The 10-V source absorbs 2.5 mW of power. Calculate  $V_{ba}$  and the power absorbed by the dependent voltage source in Fig. P2.33.

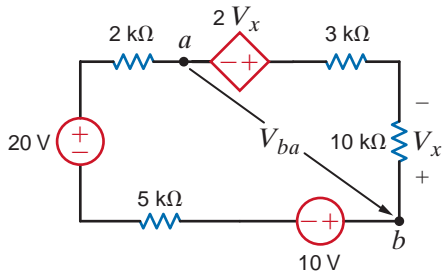


Figure P2.33

**2.34** Find  $V_1$ ,  $V_2$ , and  $V_3$  in the network in Fig. P2.34.

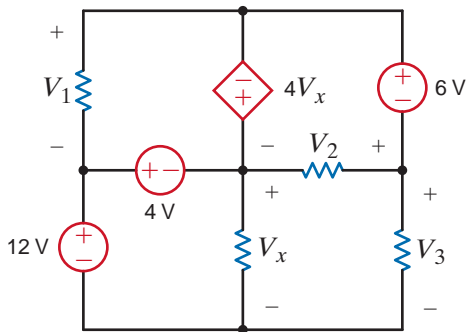


Figure P2.34

**2.35** The 10-V source in Fig. P2.35 is supplying 50 W. Determine  $R_1$ .

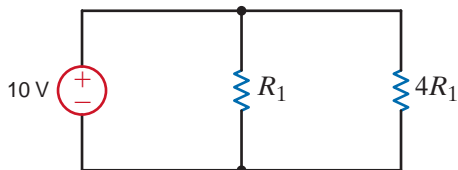


Figure P2.35

**2.36** Find  $V_1$  and  $V_2$  in Fig. P2.36.

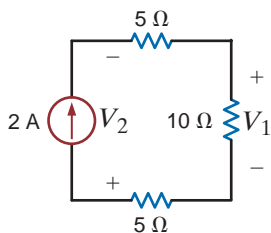


Figure P2.36

**2.37** Find  $V_{bd}$  in the network in Fig. P2.37.

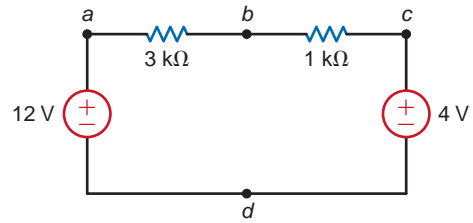


Figure P2.37

**2.38** Find  $V_x$  in the circuit in Fig. P2.38.

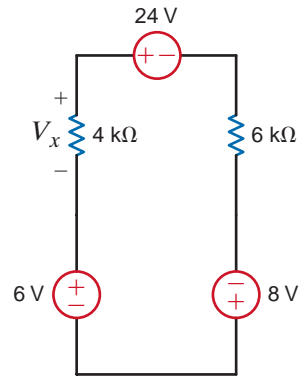


Figure P2.38

**2.39** Find  $V_{ab}$  in the network in Fig. P2.39.

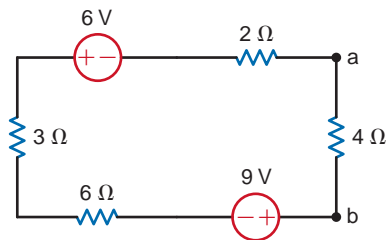


Figure P2.39

**2.40** Find  $V_x$  and the power supplied by the 15-V source in the circuit in Fig. P2.40.

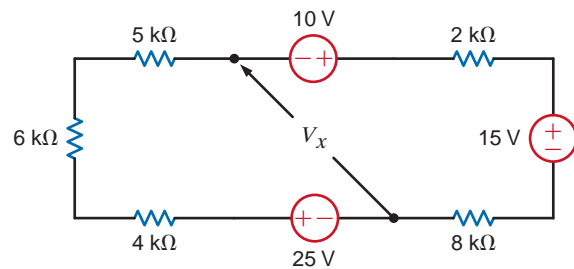


Figure P2.40

2.41 Find  $V_1$  in the network in Fig. P2.41.

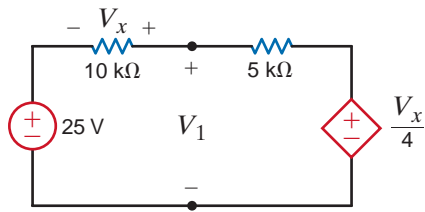


Figure P2.41

2.42 Find the power supplied by each source, including the dependent source, in Fig. P2.42.

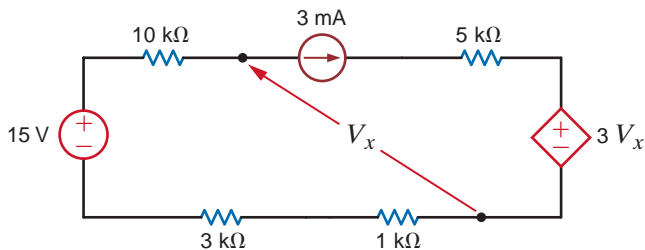


Figure P2.42

2.43 Find the power absorbed by the dependent voltage source in the circuit in Fig. P2.43.

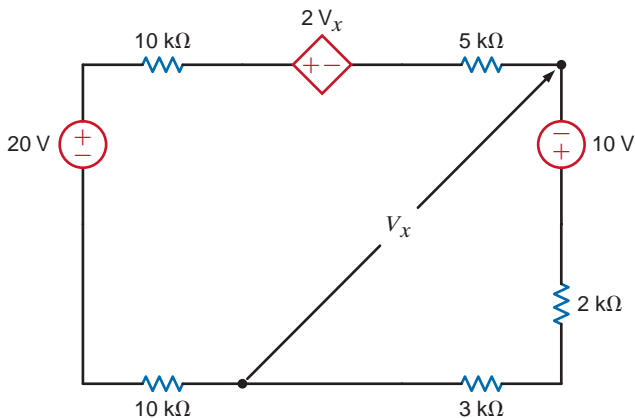


Figure P2.43

2.44 Find the power absorbed by the dependent source in the circuit in Fig. P2.44.

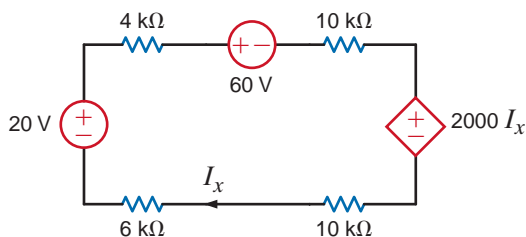


Figure P2.44

2.45 The 100-V source in the circuit in Fig. P2.45 is supplying 200 W. Solve for  $V_2$ .

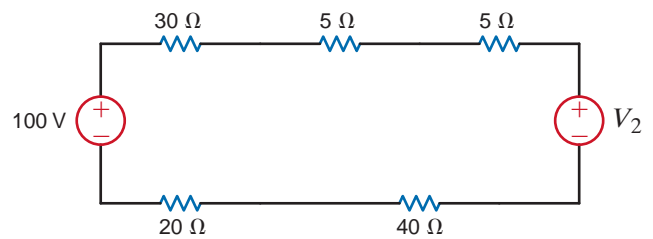


Figure P2.45

2.46 Find the value of  $V_2$  in Fig. P2.46 such that  $V_1 = 0$ .

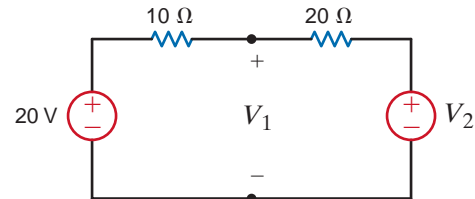


Figure P2.46

2.47 Find  $I_o$  in the network in Fig. P2.47.

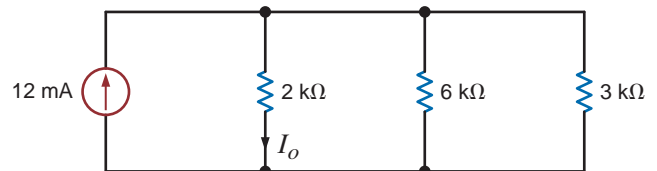


Figure P2.47

2.48 Find  $I_o$  in the network in Fig. P2.48.

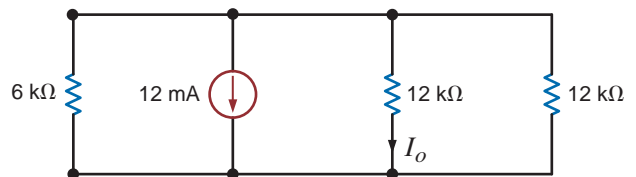


Figure P2.48

2.49 Find the power supplied by each source in the circuit in Fig. P2.49.

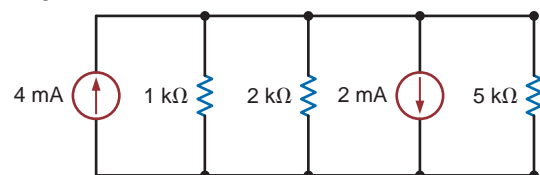


Figure P2.49

2.50 Find the current  $I_A$  in the circuit in Fig. P2.50.

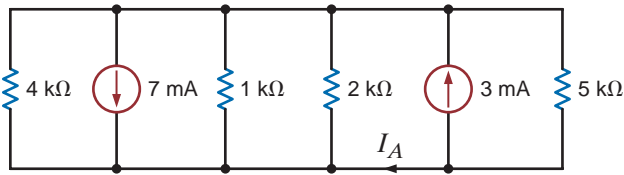


Figure P2.50

2.51 Find  $I_o$  in the network in Fig. P2.51.

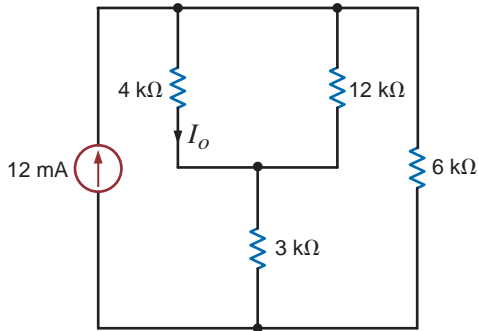


Figure P2.51

2.52 Find  $I_o$  in the network in Fig. P2.52.

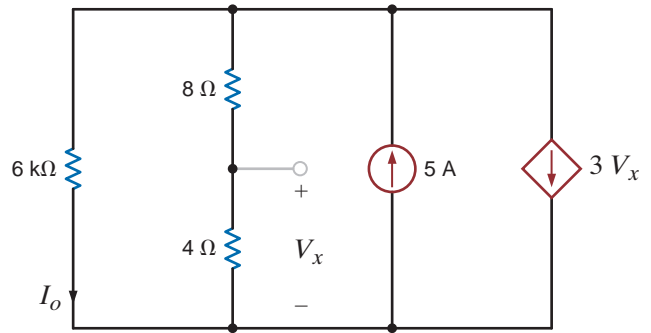


Figure P2.52

2.53 Determine  $I_L$  in the circuit in Fig. P2.53.

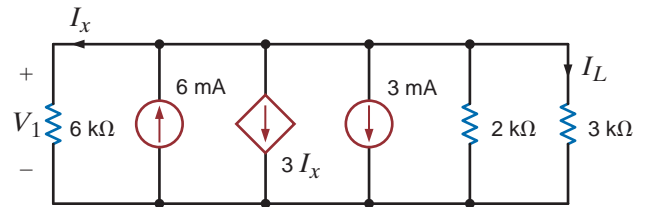


Figure P2.53

2.54 Find the power absorbed by the dependent source in the network in Fig. P2.54.

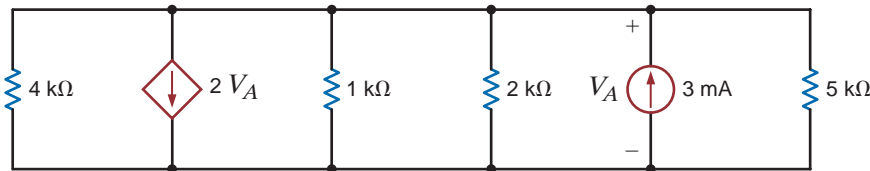


Figure P2.54

2.55 Find  $R_{AB}$  in the circuit in Fig. P2.55.

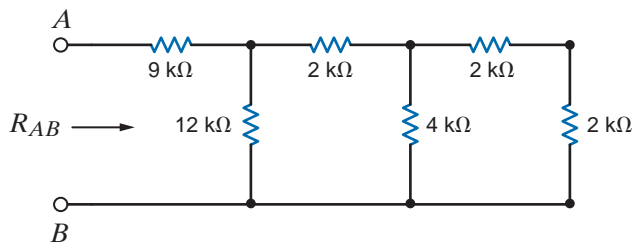


Figure P2.55

2.56 Find  $R_{AB}$  in the network in Fig. P2.56.

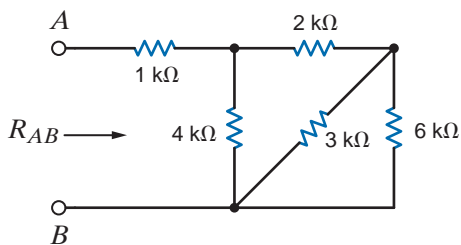


Figure P2.56



2.57 Find  $R_{AB}$  in the circuit in Fig. P2.57.

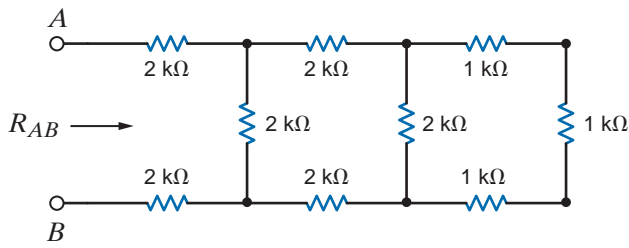


Figure P2.57

2.58 Find  $R_{AB}$  in the network in Fig. P2.58.

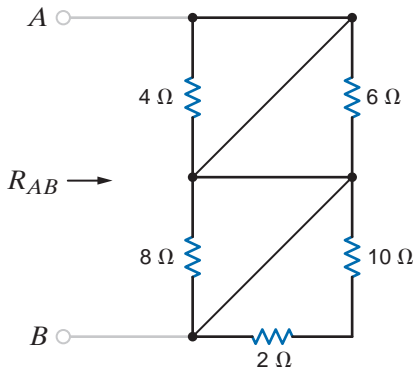


Figure P2.58

2.59 Find  $R_{AB}$  in the circuit in Fig. P2.59.

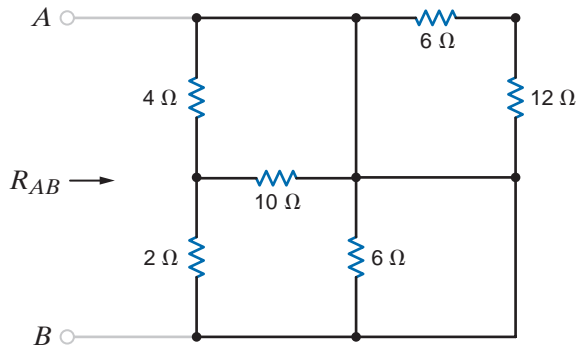


Figure P2.59

2.60 Find  $R_{AB}$  in the network in Fig. P2.60.

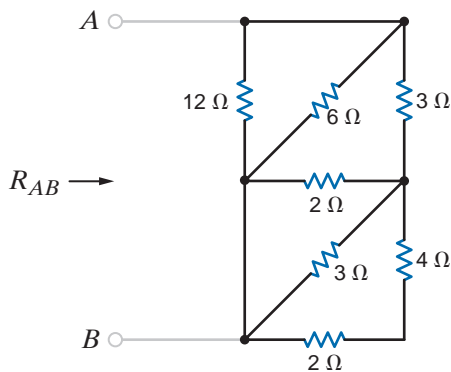


Figure P2.60

2.61 Find  $R_{AB}$  in the circuit in Fig. P2.61.

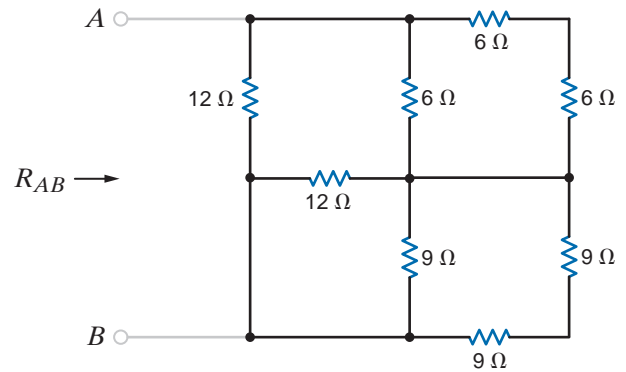


Figure P2.61

2.62 Find  $R_{AB}$  in the network in Fig. P2.62.

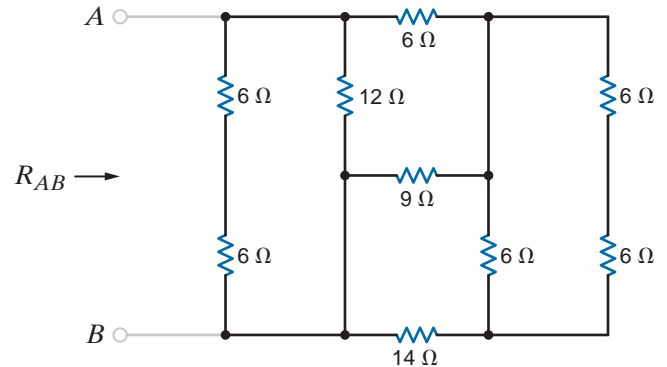


Figure P2.62

2.63 Find the equivalent resistance  $R_{eq}$  in the network in Fig. P2.63.

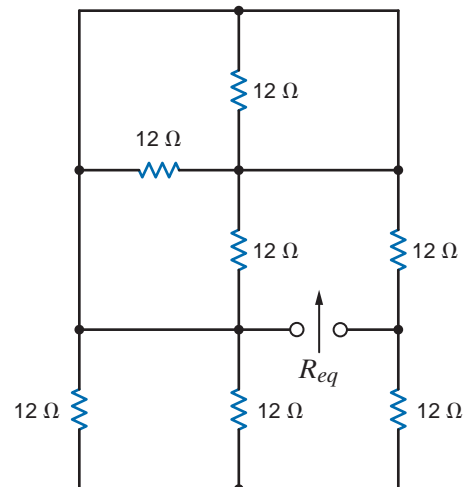


Figure P2.63

2.64 Find the equivalent resistance looking in at terminals a-b in the circuit in Fig. P2.64.

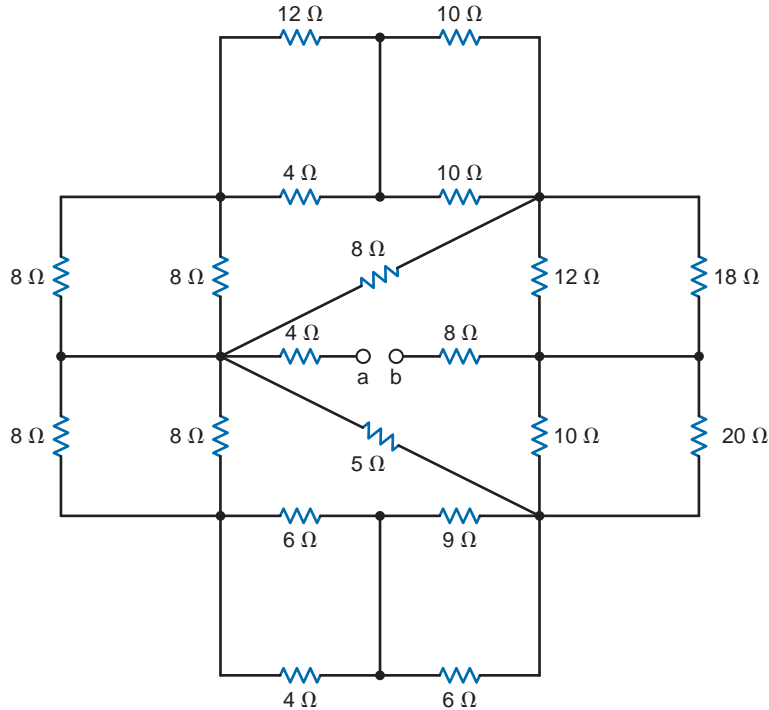


Figure P2.64

2.65 Given the resistor configuration shown in Fig. P2.65, find the equivalent resistance between the following sets of terminals: (1) a and b, (2) b and c, (3) a and c, (4) d and e, (5) a and e, (6) c and d, (7) a and d, (8) c and e, (9) b and d, and (10) b and e.

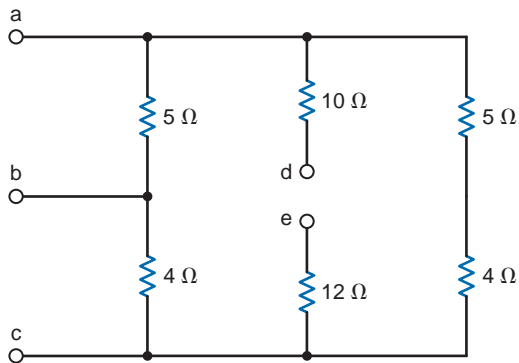


Figure P2.65

2.66 Seventeen possible equivalent resistance values may be obtained using three resistors. Determine the seventeen different values if you are given resistors with standard values:  $47 \Omega$ ,  $33 \Omega$ , and  $15 \Omega$ .

2.67 Find  $I_1$  and  $V_o$  in the circuit in Fig. P2.67.

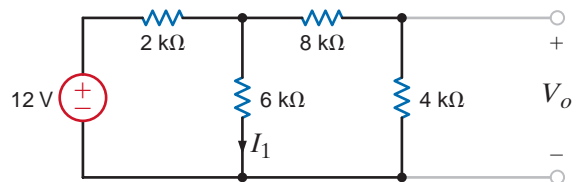


Figure P2.67

2.68 Find  $I_1$  and  $V_o$  in the circuit in Fig. P2.68.

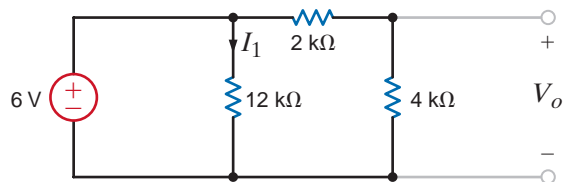


Figure P2.68

2.69 Find  $V_{ab}$  and  $V_{dc}$  in the circuit in Fig. P2.69.

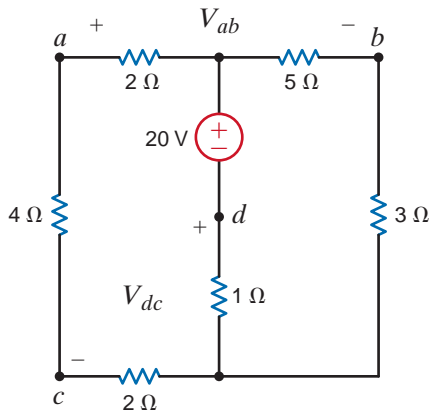


Figure P2.69

2.70 Find  $V_1$  and  $I_A$  in the network in Fig. P2.70.

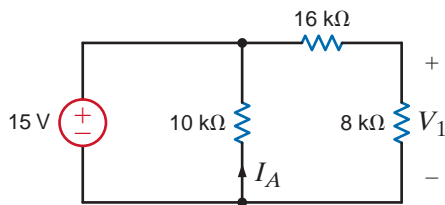


Figure P2.70

2.71 Find  $I_o$  in the network in Fig. P2.71.

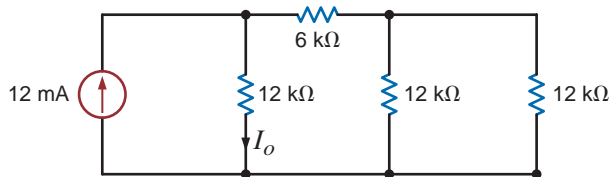


Figure P2.71

2.72 Determine  $I_o$  in the circuit in Fig. P2.72.

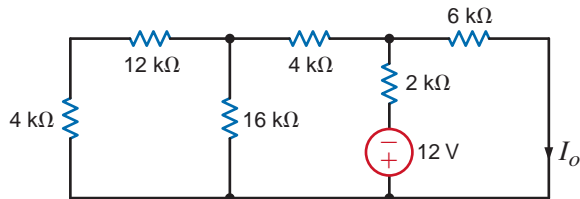


Figure P2.72

2.73 Determine  $V_o$  in the network in Fig. P2.73.

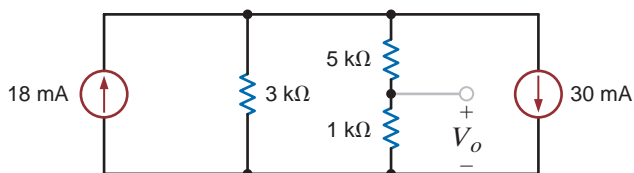


Figure P2.73

2.74 Calculate  $V_{ab}$  in Fig. P2.74.

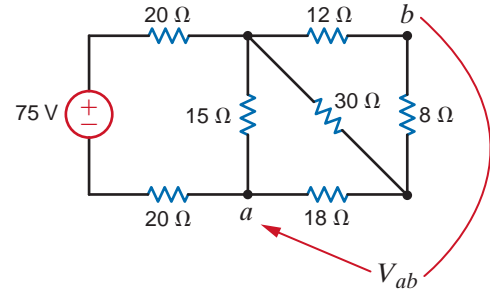


Figure P2.74

2.75 Calculate  $V_{AB}$  in Fig. P2.75.

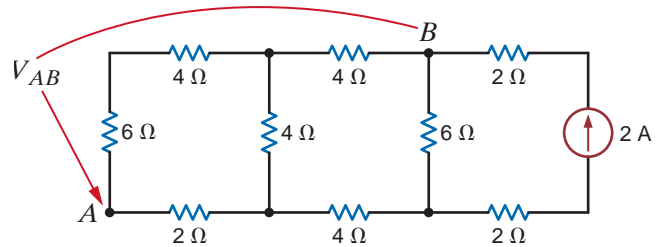


Figure P2.75

2.76 Calculate  $V_{ab}$  and  $V_1$  in Fig. P2.76.

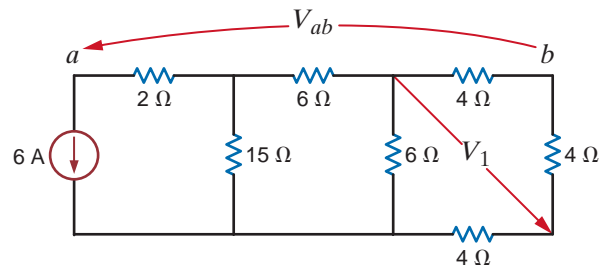


Figure P2.76

2.77 Calculate  $V_{AB}$  in Fig. P2.77.

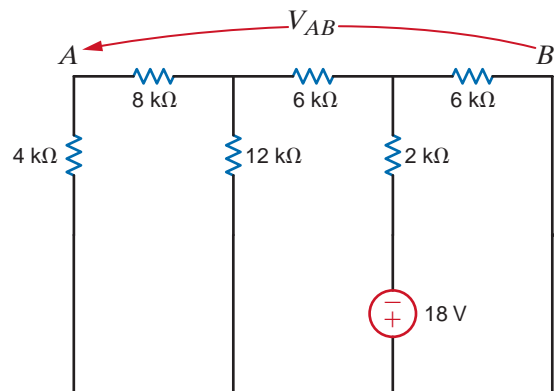


Figure P2.77



2.78 Calculate  $V_{AB}$  and  $I_1$  in Fig. P2.78.

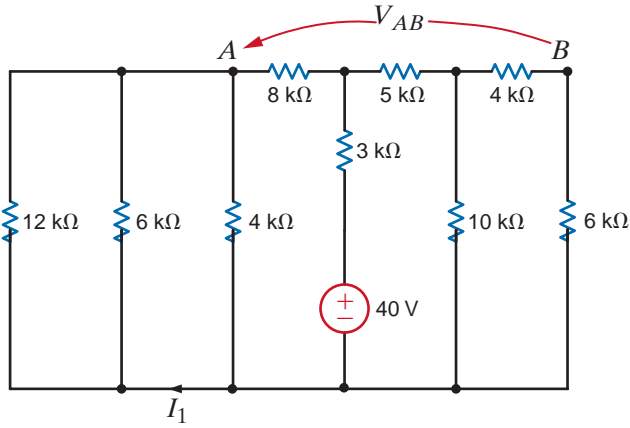


Figure P2.78

2.79 Calculate  $V_{AB}$  and  $I_1$  in Fig. P2.79.

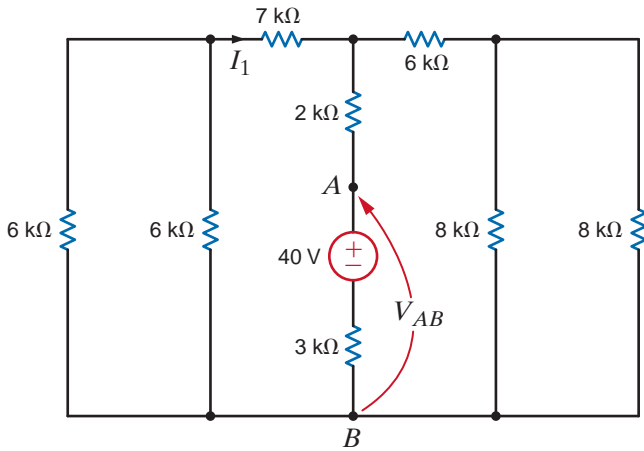


Figure P2.79

2.80 Find  $V_{ab}$  in Fig. P2.80.

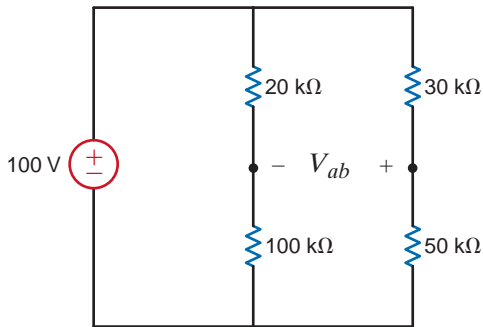


Figure P2.80

2.81 If  $V_o = 4$  V in the network in Fig. P2.81, find  $V_s$ .

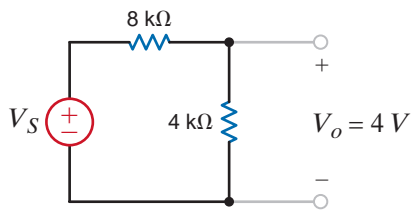


Figure P2.81

2.82 If  $I_o = 5$  mA in the circuit in Fig. P2.82, find  $I_s$ .

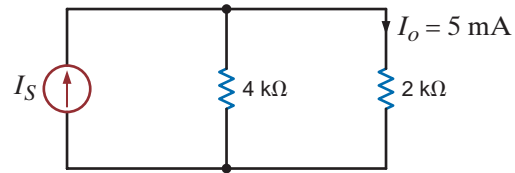


Figure P2.82

2.83 If  $I_o = 2$  mA in the circuit in Fig. P2.83, find  $V_s$ .

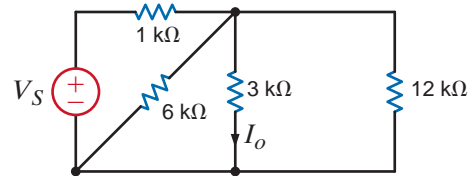


Figure P2.83

2.84 Find the value of  $V_s$  in the network in Fig. P2.84 such that the power supplied by the current source is 0.

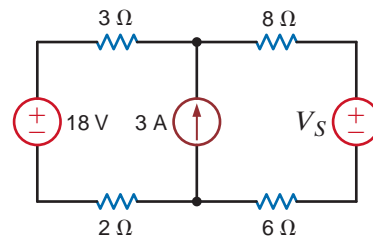


Figure P2.84

2.85 In the network in Fig. P2.85,  $V_o = 6$  V. Find  $I_s$ .

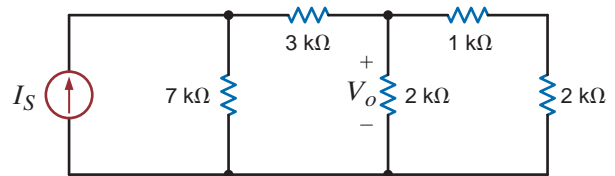


Figure P2.85

2.86 Find the value of  $V_1$  in the network in Fig. P2.86 such that  $V_a = 0$ .

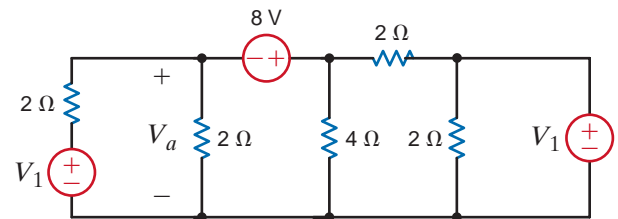


Figure P2.86



2.87 If  $V_1 = 5\text{ V}$  in the circuit in Fig. P2.87, find  $I_S$ .

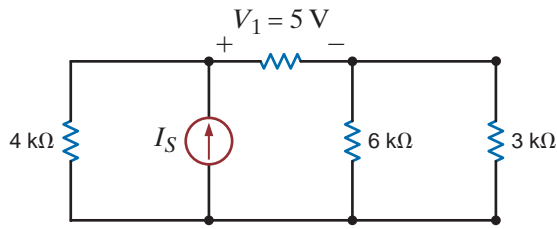


Figure P2.87

2.88 In the network in Fig. P2.88,  $V_1 = 12\text{ V}$ . Find  $V_S$ .

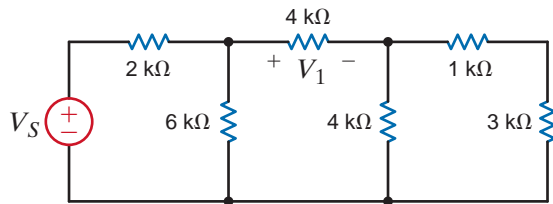


Figure P2.88

2.89 Given that  $V_o = 4\text{ V}$  in the network in Fig. P2.89, find  $V_S$ .

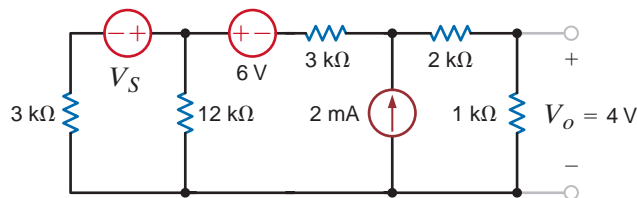


Figure P2.89

2.90 If  $V_R = 15\text{ V}$ , find  $V_x$  in Fig. P2.90.

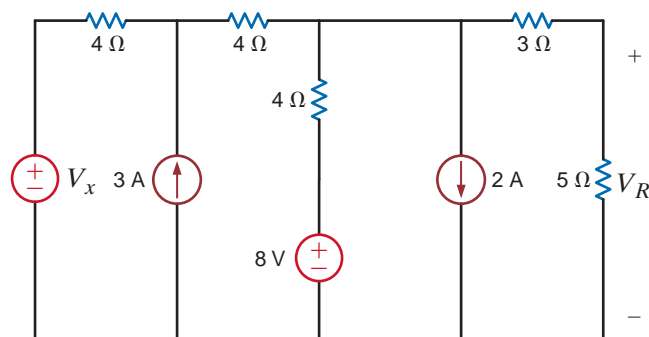


Figure P2.90

2.91 If  $V_2 = 4\text{ V}$  in Fig. P2.91, calculate  $V_x$ .

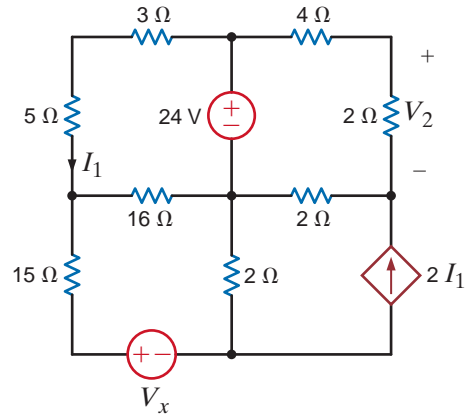


Figure P2.91

2.92 Find the value of  $I_A$  in the network in Fig. P2.92.

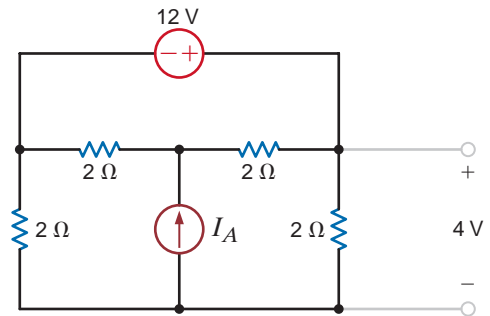


Figure P2.92

2.93 Find the value of  $I_A$  in the circuit in Fig. P2.93.

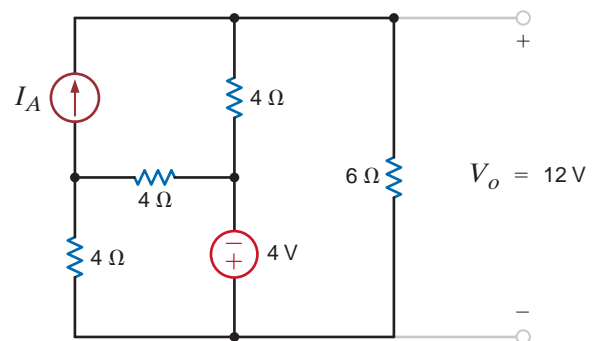


Figure P2.93

**2.94** Find in value of the current source  $I_A$  in the network in Fig. P2.94.

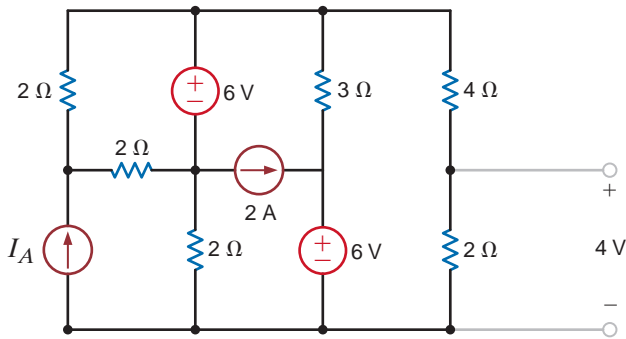


Figure P2.94

**2.95** Given  $V_o = 12$  V, find the value of  $I_A$  in the circuit in Fig. P2.95.

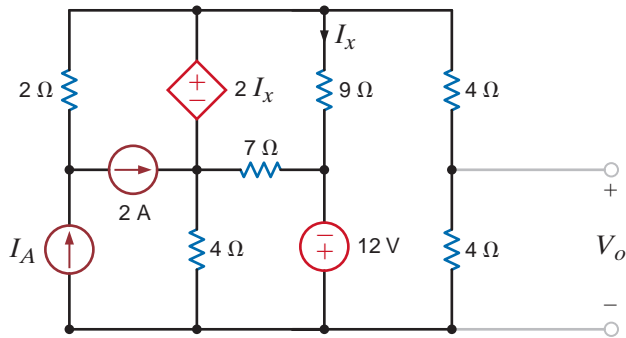


Figure P2.95

**2.96** Find the value of  $V_x$  in the network in Fig. P2.96, such that the 5-A current source supplies 50 W.

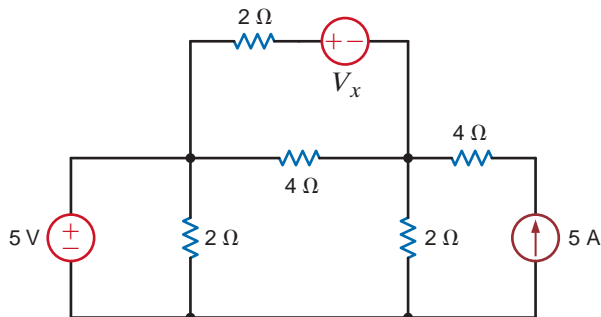


Figure P2.96

**2.97** The 5-A current source in Fig. P2.97 supplies 150 W. Calculate  $V_A$ .

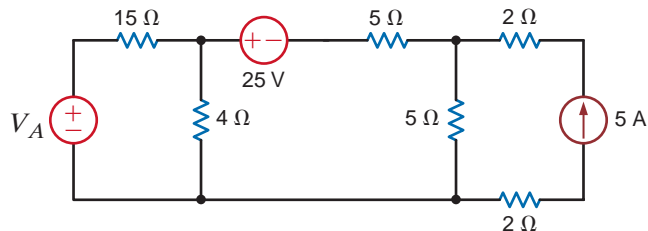


Figure P2.97

**2.98** Given  $I_o = 2$  mA in the circuit in Fig. P2.98, find  $I_A$ .

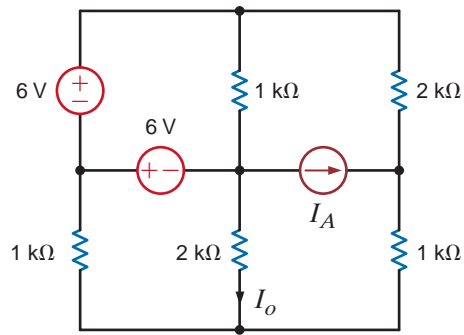


Figure P2.98

**2.99** Given  $I_o = 2$  mA in the network in Fig. P2.99, find  $V_A$ .

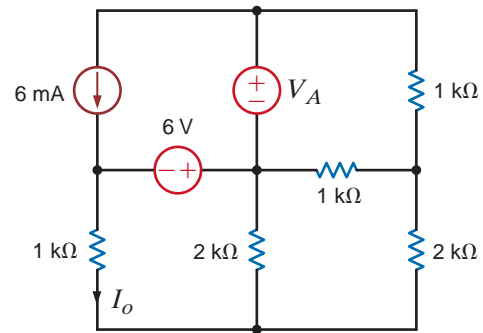


Figure P2.99

**2.100** Given  $V_o$  in the network in Fig. P2.100, find  $I_A$ .

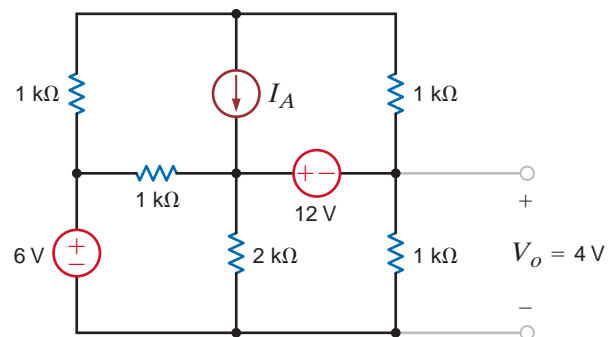


Figure P2.100

**2.101** Find the value of  $V_x$  in the circuit in Fig. P2.101 such that the power supplied by the 5-A source is 60 W.

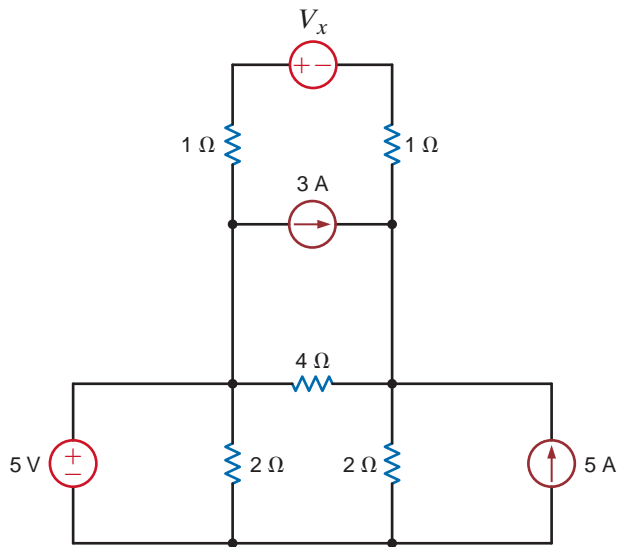


Figure P2.101

**2.102** The 3-A current source in Fig. P2.102 is absorbing 12 W. Determine  $R$ .

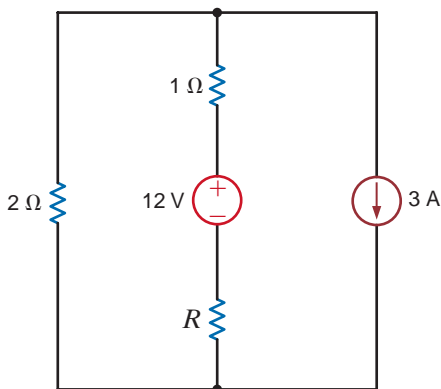


Figure P2.102

**2.103** If the power supplied by the 50-V source in Fig. P2.103 is 100 W, find  $R$ .

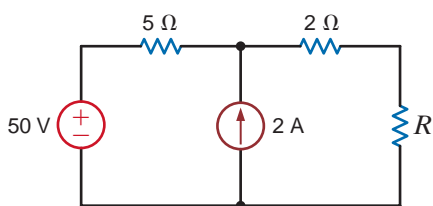


Figure P2.103

**2.104** Given that  $V_1 = 4$  V, find  $V_A$  and  $R_B$  in the circuit in Fig. P2.104.

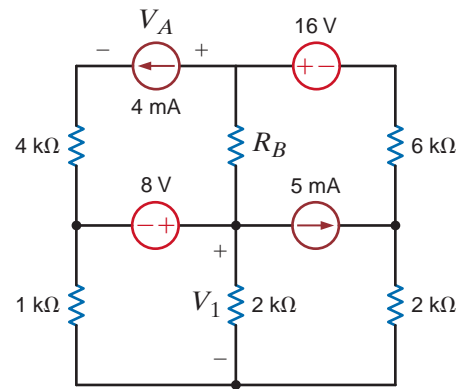


Figure P2.104

**2.105** Find the power absorbed by the network in Fig. P2.105.

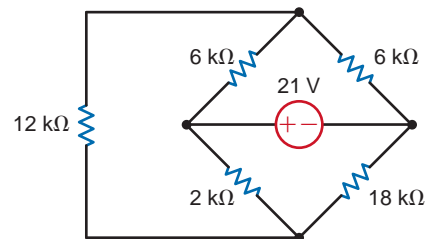


Figure P2.105

**2.106** Find the value of  $g$  in the network in Fig. P2.106 such that the power supplied by the 3-A source is 20 W.

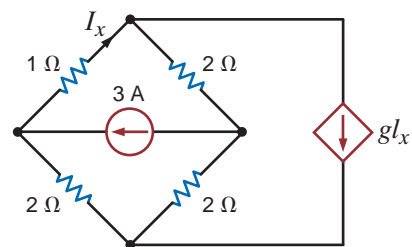


Figure P2.106

**2.107** Find the power supplied by the 24-V source in the circuit in Fig. P2.107.

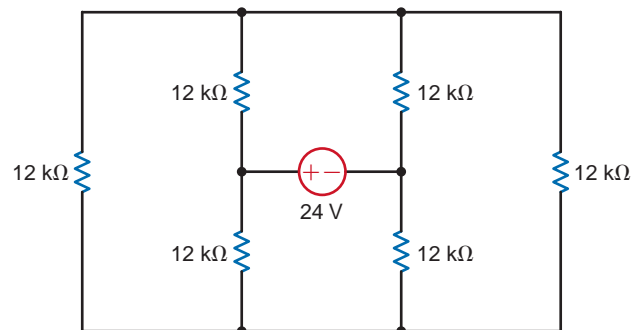


Figure P2.107



2.108 Find  $I_o$  in the circuit in Fig. P2.108.

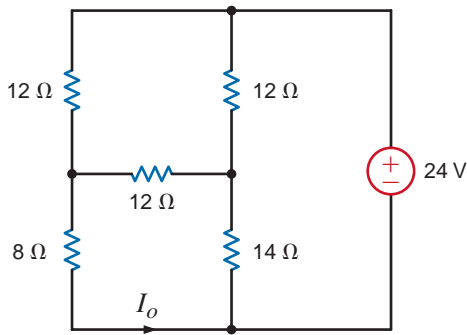


Figure P2.108

2.109 Find  $I_o$  in the circuit in Fig. P2.109.

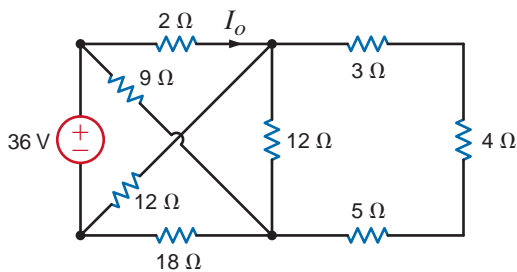


Figure P2.109

2.110 Determine the value of  $V_o$  in the network in Fig. P2.110.

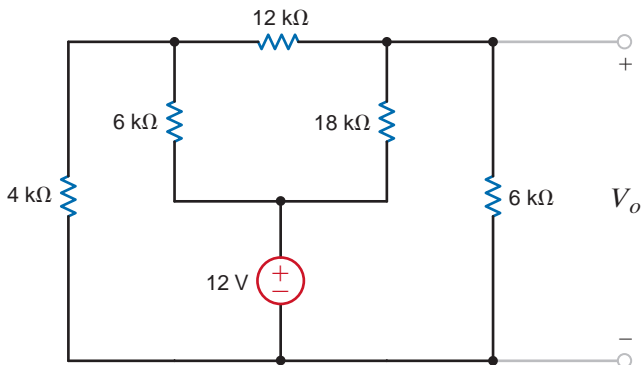


Figure P2.110

2.111 Find  $V_o$  in the circuit in Fig. P2.111.

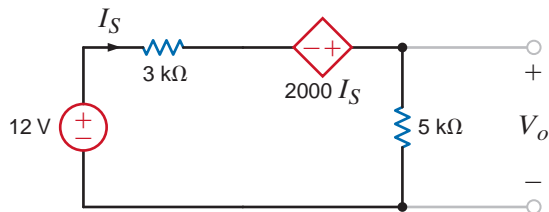


Figure P2.111

2.112 Find  $V_o$  in the network in Fig. P2.112.

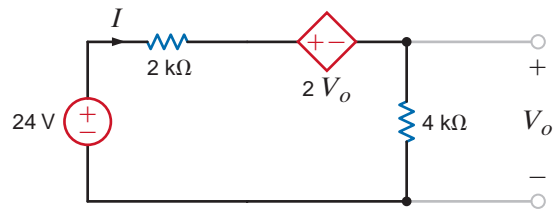


Figure P2.112

2.113 Find  $I_o$  in the circuit in Fig. P2.113.

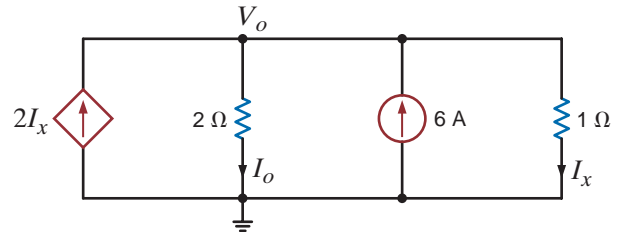


Figure P2.113

2.114 Find  $I_o$  in the circuit in Fig. P2.114.

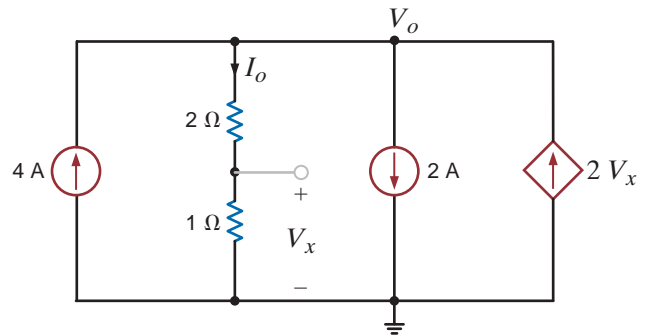


Figure P2.114

2.115 Find  $V_o$  in the circuit in Fig. P2.115.

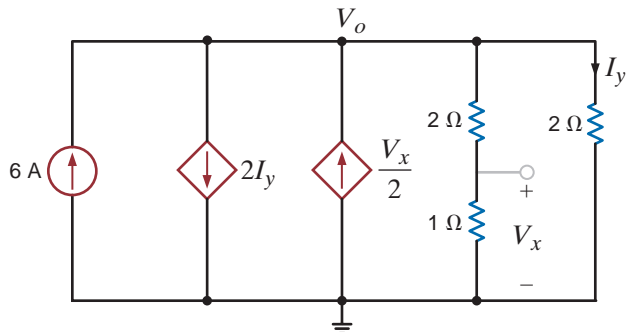


Figure P2.115



2.116 Find  $V_x$  in the network in Fig. P2.116.

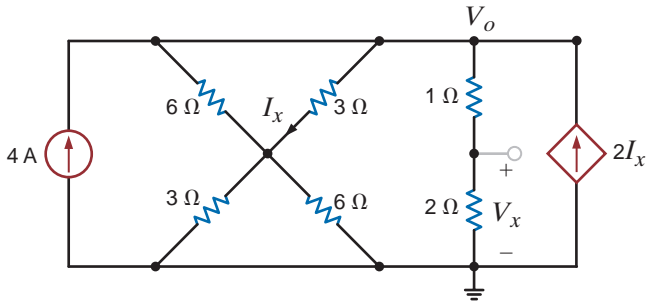


Figure P2.116

2.118 Find  $I_1$ ,  $I_2$ , and  $I_3$  in the circuit in Fig. P2.118.

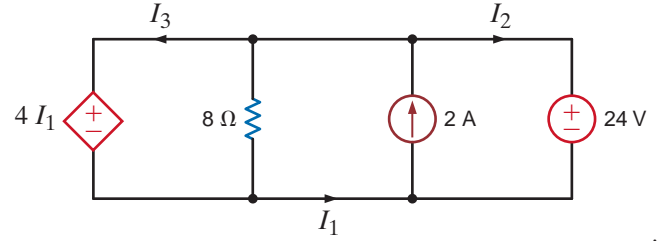


Figure P2.118

2.117 Find  $V_o$  in the network in Fig. P2.117.

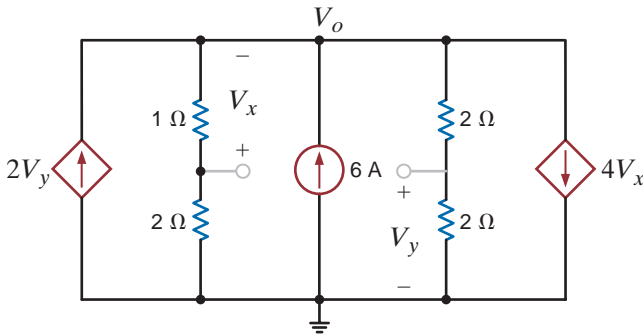


Figure P2.117

2.119 Find  $I_o$  in the network in Fig. P2.119.

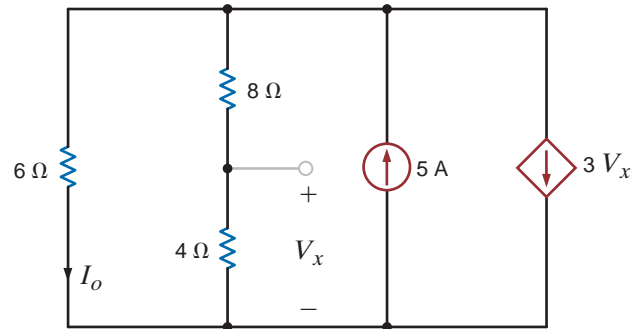


Figure P2.119

2.120 A typical transistor amplifier is shown in Fig. P2.120. Find the amplifier gain  $G$  (i.e., the ratio of the output voltage to the input voltage).

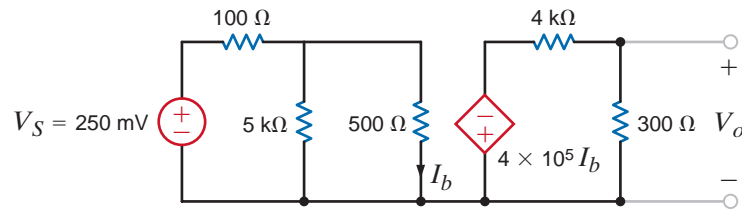


Figure P2.120

2.121 Find the value of  $k$  in the network in Fig. P2.121, such that the power supplied by the 6-A source is 108 W.

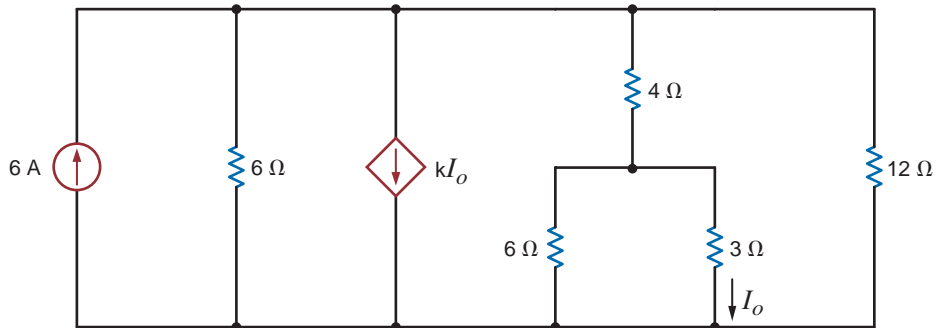


Figure P2.121

**2.122** Find the power supplied by the dependent current source in Fig. P2.122.

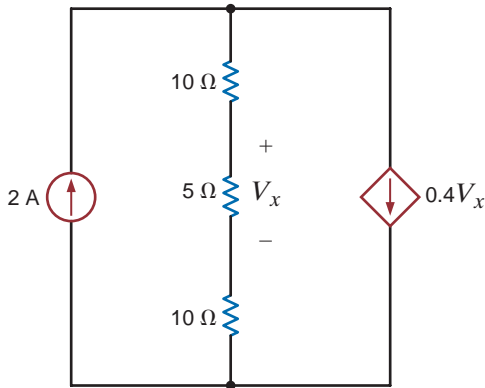


Figure P2.122

**2.123** If the power absorbed by the 10-V source in Fig. P2.123 is 40 W, calculate  $I_5$ .

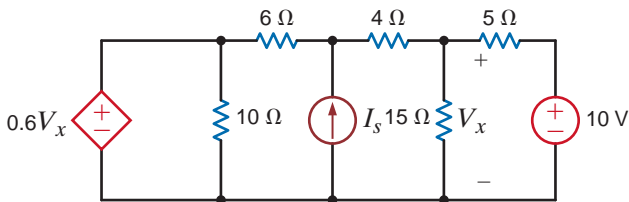


Figure P2.123

**2.124** The power supplied by the 2-A current source in Fig. P2.124 is 50 W, calculate  $k$ .

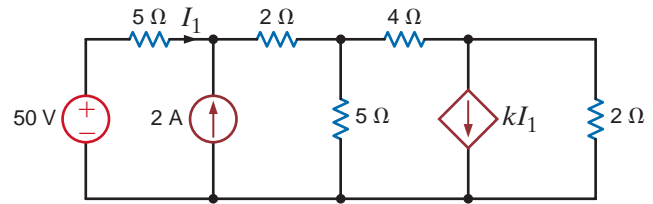


Figure P2.124

**2.125** Given the circuit in Fig. P2.125, solve for the value of  $k$ .

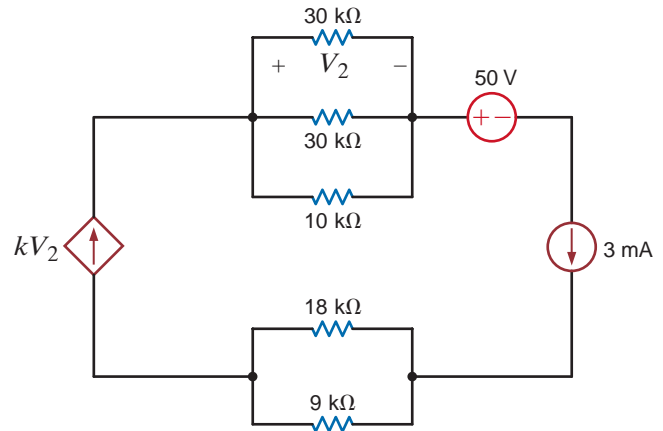


Figure P2.125

**TYPICAL PROBLEMS FOUND ON THE FE EXAM**

**2FE-1** What is the power generated by the source in the network in Fig. 2PFE-1?

- a. 2.8 W
- b. 1.2 W
- c. 3.6 W
- d. 2.4 W

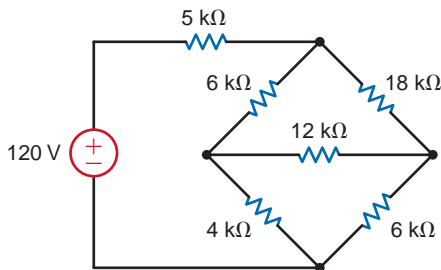


Figure 2PFE-1

**2FE-2** Find  $V_{ab}$  in the circuit in Fig. 2PFE-2.

- a. -5 V
- b. 10 V
- c. 15 V
- d. -10 V

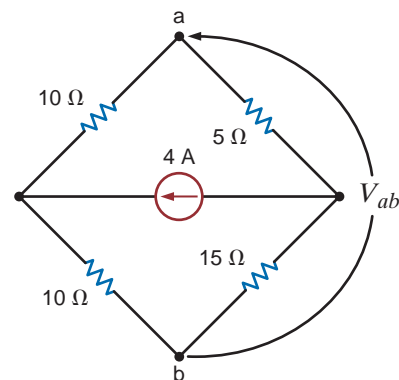


Figure 2PFE-2

- 2FE-3** If  $R_{eq} = 10.8 \Omega$  in the circuit in Fig. 2PFE-3, what is  $R_2$ ?
- $12 \Omega$
  - $20 \Omega$
  - $8 \Omega$
  - $18 \Omega$

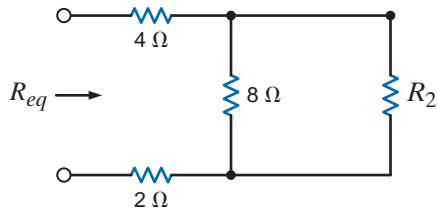


Figure 2PFE-3

- 2FE-4** Find the equivalent resistance of the circuit in Fig. 2PFE-4 at the terminals A-B.
- $4 \text{ k}\Omega$
  - $12 \text{ k}\Omega$
  - $8 \text{ k}\Omega$
  - $20 \text{ k}\Omega$

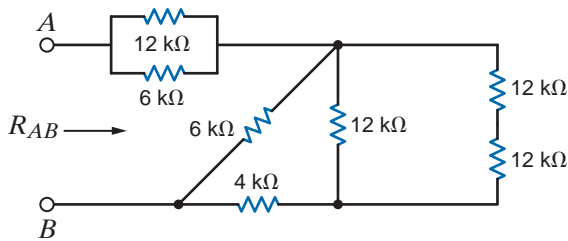


Figure 2PFE-4

- 2FE-5** The  $100 \text{ V}$  source is absorbing  $50 \text{ W}$  of power in the network in Fig. 2PFE-5. What is  $R$ ?
- $17.27 \Omega$
  - $9.42 \Omega$
  - $19.25 \Omega$
  - $15.12 \Omega$

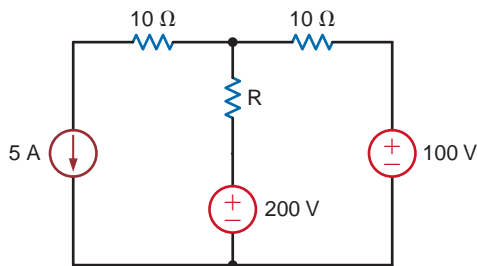


Figure 2PFE-5

- 2FE-6** Find the power supplied by the  $40 \text{ V}$  source in the circuit in Fig. 2PFE-6.
- $120 \text{ W}$
  - $232 \text{ W}$
  - $212 \text{ W}$
  - $184 \text{ W}$

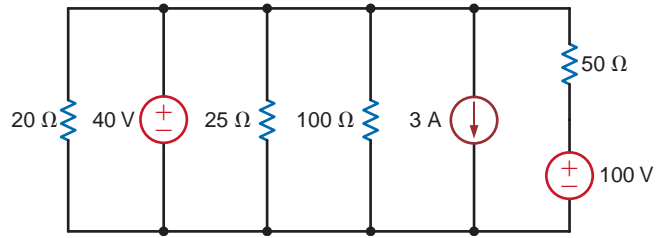


Figure 2PFE-6

- 2FE-7** What is the current  $I_o$  in the circuit in Fig. 2PFE-7?
- $0.84 \text{ mA}$
  - $-1.25 \text{ mA}$
  - $2.75 \text{ mA}$
  - $-0.22 \text{ mA}$

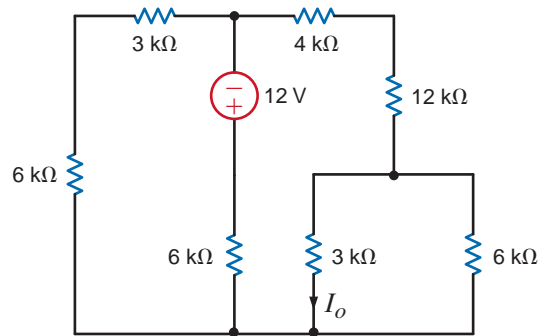


Figure 2PFE-7

- 2FE-8** Find the voltage  $V_o$  in the network in Fig. 2PFE-8.
- $24 \text{ V}$
  - $10 \text{ V}$
  - $36 \text{ V}$
  - $12 \text{ V}$

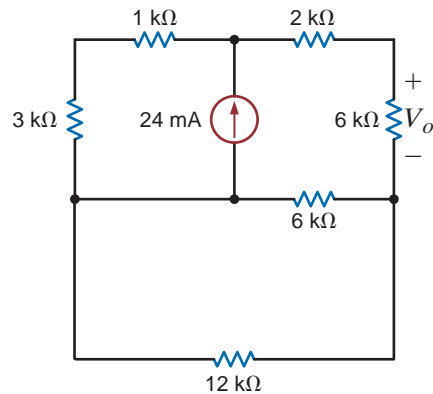


Figure 2PFE-8

**2FE-9** What is the voltage  $V_o$  in the circuit in Fig. 2PFE-9?

- a. 2 V
- b. 8 V
- c. 5 V
- d. 12 V

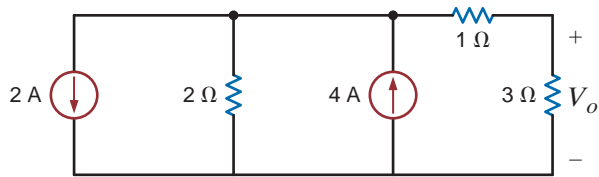


Figure 2PFE-9

**2FE-10** Find the current  $I_x$  in Fig. 2PFE-10.

- a. 1/2 A
- b. 5/3 A
- c. 3/2 A
- d. 8/3 A

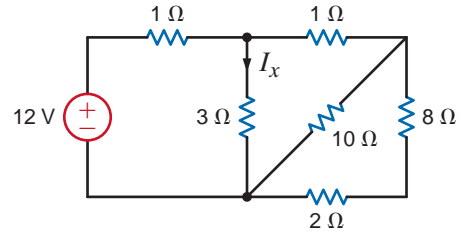


Figure 2PFE-10

# NODAL AND LOOP ANALYSIS TECHNIQUES



Courtesy of UPI/Ed Turner/Boeing/NewsCom

## THE LEARNING GOALS FOR THIS CHAPTER ARE:

- Be able to calculate all currents and voltages in circuits that contain multiple nodes and loops
- Learn to employ Kirchhoff's current law (KCL) to perform a nodal analysis to determine all the node voltages in a circuit
- Learn to employ Kirchhoff's voltage law (KVL) to perform a loop analysis to determine all the loop currents in a network
- Be able to ascertain which of the two analysis techniques should be utilized to solve a particular problem

**Boeing Dreamliner** Truly a dream come true, the Boeing 787 Dreamliner brings big-jet ranges to mid-size airplanes. A pleasure for both cross-country and intercontinental commercial travelers, this super-efficient airplane can carry 210 to 330 passengers on long-range flights from nearly 3,000 miles to over 9,000 miles. Featuring composite materials, it boasts unmatched efficiency, requiring 20% less fuel than its competitors. In various design stages for nearly six years, the final assembly plant opened in 2007 in Washington State and first flight occurred in late 2009.

Inside its efficient hull lies state of the art electronics. Based on an open architecture, the Dreamliner has health-monitoring systems that allow the airplane to self-monitor and report maintenance requirements to ground computer systems. A wireless broadband link sends this real-time diagnostic data to technicians on the ground. The goal is safer operations with predicted mechanical problems and shorter repair times.

An active gust alleviation system that automatically adjusts wing flaps using sensor data of turbulence at the aircraft's nose improves flight control.

The design of the Dreamliner is based on fundamental laws that lead to algorithms most efficiently implemented on computers. The two basic circuit analysis techniques described in this chapter follow this same pattern. Nodal analysis is based on balancing currents coming into and out of nodes in the circuits. Mesh or loop analysis is based on balancing voltage increases and drops around closed paths in the circuits. Both methods clearly follow the fundamental laws introduced in Chapter 2. Unlike a branch-by-branch analysis that yields large numbers of simple equations, these two methods use network topology to provide a minimum number of equations. Just as the Dreamliner outstrips its predecessors in efficiency and range, these all-encompassing techniques can easily handle more complex linear circuits.

## 3.1

## Nodal Analysis

In a nodal analysis, the variables in the circuit are selected to be the node voltages. The node voltages are defined with respect to a common point in the circuit. One node is selected as the reference node, and all other node voltages are defined with respect to that node. Quite often this node is the one to which the largest number of branches are connected. It is commonly called *ground* because it is said to be at ground-zero potential, and it sometimes represents the chassis or ground line in a practical circuit.

We will select our variables as being positive with respect to the reference node. If one or more of the node voltages are actually negative with respect to the reference node, the analysis will indicate it.

In order to understand the value of knowing all the node voltages in a network, we consider once again the network in Fig. 2.32, which is redrawn in Fig. 3.1. The voltages,  $V_S$ ,  $V_a$ ,  $V_b$ , and  $V_c$ , are all measured with respect to the bottom node, which is selected as the reference and labeled with the ground symbol  $\perp$ . Therefore, the voltage at node 1 is  $V_S = 12$  V with respect to the reference node 5; the voltage at node 2 is  $V_a = 3$  V with respect to the reference node 5, and so on. Now note carefully that once these node voltages are known, we can immediately calculate any branch current or the power supplied or absorbed by any element, since we know the voltage across every element in the network. For example, the voltage  $V_1$  across the leftmost 9-k $\Omega$  resistor is the difference in potential between the two ends of the resistor; that is,

$$\begin{aligned} V_1 &= V_S - V_a \\ &= 12 - 3 \\ &= 9 \text{ V} \end{aligned}$$

This equation is really nothing more than an application of KVL around the leftmost loop; that is,

$$-V_S + V_1 + V_a = 0$$

In a similar manner, we find that

$$V_3 = V_a - V_b$$

and

$$V_5 = V_b - V_c$$

Then the currents in the resistors are

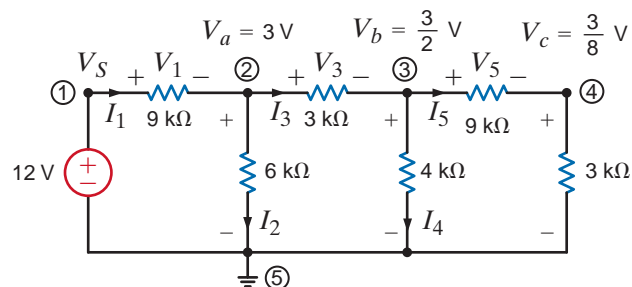
$$\begin{aligned} I_1 &= \frac{V_1}{9\text{k}} = \frac{V_S - V_a}{9\text{k}} \\ I_3 &= \frac{V_3}{3\text{k}} = \frac{V_a - V_b}{3\text{k}} \\ I_5 &= \frac{V_5}{9\text{k}} = \frac{V_b - V_c}{9\text{k}} \end{aligned}$$

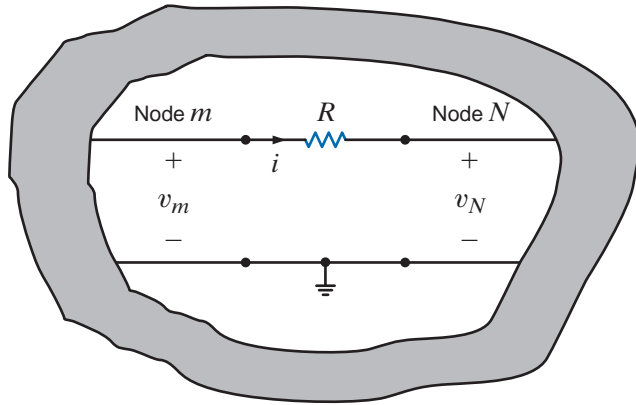
In addition,

$$\begin{aligned} I_2 &= \frac{V_a - 0}{6\text{k}} \\ I_4 &= \frac{V_b - 0}{4\text{k}} \end{aligned}$$

since the reference node 5 is at zero potential.

**Figure 3.1**  
Circuit with known node voltages.



**Figure 3.2**

Circuit used to illustrate Ohm's law in a multiple-node network.

Thus, as a general rule, if we know the node voltages in a circuit, we can calculate the current through any resistive element using Ohm's law; that is,

$$i = \frac{v_m - v_N}{R} \quad 3.1$$

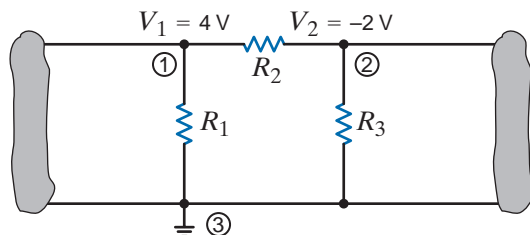
as illustrated in Fig. 3.2.

Now that we have demonstrated the value of knowing all the node voltages in a network, let us determine the manner in which to calculate them. In a nodal analysis, we employ KCL equations in such a way that the variables contained in these equations are the unknown node voltages of the network. As we have indicated, one of the nodes in an  $N$ -node circuit is selected as the reference node, and the voltages at all the remaining  $N - 1$  nonreference nodes are measured with respect to this reference node. Using network topology, it can be shown that exactly  $N - 1$  linearly independent KCL equations are required to determine the  $N - 1$  unknown node voltages. Therefore, theoretically once one of the nodes in an  $N$ -node circuit has been selected as the reference node, our task is reduced to identifying the remaining  $N - 1$  nonreference nodes and writing one KCL equation at each of them.

In a multiple-node circuit, this process results in a set of  $N - 1$  linearly independent simultaneous equations in which the variables are the  $N - 1$  unknown node voltages. To help solidify this idea, consider once again Example 2.5. Note that in this circuit only four (i.e., any four) of the five KCL equations, one of which is written for each node in this five-node network, are linearly independent. Furthermore, many of the branch currents in this example (those not contained in a source) can be written in terms of the node voltages as illustrated in Fig. 3.2 and expressed in Eq. (3.1). It is in this manner, as we will illustrate in the sections that follow, that the KCL equations contain the unknown node voltages.

It is instructive to treat nodal analysis by examining several different types of circuits and illustrating the salient features of each. We begin with the simplest case. However, as a prelude to our discussion of the details of nodal analysis, experience indicates that it is worthwhile to digress for a moment to ensure that the concept of node voltage is clearly understood.

At the outset it is important to specify a reference. For example, to state that the voltage at node A is 12 V means nothing unless we provide the reference point; that is, the voltage at node A is 12 V with respect to what? The circuit in Fig. 3.3 illustrates a portion of a network containing three nodes, one of which is the reference node.

**Figure 3.3**

An illustration of node voltages.

The voltage  $V_1 = 4\text{ V}$  is the voltage at node 1 with respect to the reference node 3. Similarly, the voltage  $V_2 = -2\text{ V}$  is the voltage at node 2 with respect to node 3. In addition, however, the voltage at node 1 with respect to node 2 is  $\pm 6\text{ V}$ , and the voltage at node 2 with respect to node 1 is  $-6\text{ V}$ . Furthermore, since the current will flow from the node of higher potential to the node of lower potential, the current in  $R_1$  is from top to bottom, the current in  $R_2$  is from left to right, and the current in  $R_3$  is from bottom to top.

These concepts have important ramifications in our daily lives. If a man were hanging in midair with one hand on one line and one hand on another and the dc line voltage of each line was exactly the same, the voltage across his heart would be zero and he would be safe. If, however, he let go of one line and let his feet touch the ground, the dc line voltage would then exist from his hand to his foot with his heart in the middle. He would probably be dead the instant his foot hit the ground.

In the town where we live, a young man tried to retrieve his parakeet that had escaped its cage and was outside sitting on a power line. He stood on a metal ladder and with a metal pole reached for the parakeet; when the metal pole touched the power line, the man was killed instantly. Electric power is vital to our standard of living, but it is also very dangerous. The material in this book *does not* qualify you to handle it safely. Therefore, always be extremely careful around electric circuits.

Now as we begin our discussion of nodal analysis, our approach will be to begin with simple cases and proceed in a systematic manner to those that are more challenging. Numerous examples will be the vehicle used to demonstrate each facet of this approach. Finally, at the end of this section, we will outline a strategy for attacking any circuit using nodal analysis.

**CIRCUITS CONTAINING ONLY INDEPENDENT CURRENT SOURCES** Consider the network shown in Fig. 3.4. Note that this network contains three nodes, and thus we know that exactly  $N - 1 = 3 - 1 = 2$  linearly independent KCL equations will be required to determine the  $N - 1 = 2$  unknown node voltages. First, we select the bottom node as the reference node, and then the voltage at the two remaining nodes labeled  $v_1$  and  $v_2$  will be measured with respect to this node.

The branch currents are assumed to flow in the directions indicated in the figures. If one or more of the branch currents are actually flowing in a direction opposite to that assumed, the analysis will simply produce a branch current that is negative.

Applying KCL at node 1 yields

$$-i_A + i_1 + i_2 = 0$$

Using Ohm's law ( $i = Gv$ ) and noting that the reference node is at zero potential, we obtain

$$-i_A + G_1(v_1 - 0) + G_2(v_1 - v_2) = 0$$

or

$$(G_1 + G_2)v_1 - G_2v_2 = i_A$$

KCL at node 2 yields

$$-i_2 + i_B + i_3 = 0$$

or

$$-G_2(v_1 - v_2) + i_B + G_3(v_2 - 0) = 0$$

which can be expressed as

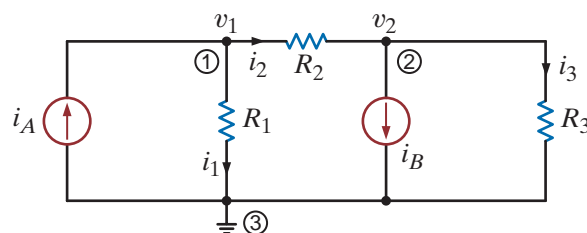
$$-G_2v_1 + (G_2 + G_3)v_2 = -i_B$$

### [hint]

Employing the passive sign convention.

**Figure 3.4**

A three-node circuit.





Therefore, the two equations for the two unknown node voltages  $v_1$  and  $v_2$  are

$$\begin{aligned}(G_1 + G_2)v_1 - G_2v_2 &= i_A \\ -G_2v_1 + (G_2 + G_3)v_2 &= -i_B\end{aligned}\quad 3.2$$

Note that the analysis has produced two simultaneous equations in the unknowns  $v_1$  and  $v_2$ . They can be solved using any convenient technique, and modern calculators and personal computers are very efficient tools for this application.

In what follows, we will demonstrate three techniques for solving linearly independent simultaneous equations: Gaussian elimination, matrix analysis, and the MATLAB mathematical software package. A brief refresher that illustrates the use of both Gaussian elimination and matrix analysis in the solution of these equations is provided in the Problem-Solving Companion for this text. Use of the MATLAB software is straightforward, and we will demonstrate its use as we encounter the application.

The KCL equations at nodes 1 and 2 produced two linearly independent simultaneous equations:

$$\begin{aligned}-i_A + i_1 + i_2 &= 0 \\ -i_2 + i_B + i_3 &= 0\end{aligned}$$

The KCL equation for the third node (reference) is

$$+i_A - i_1 - i_B - i_3 = 0$$

Note that if we add the first two equations, we obtain the third. Furthermore, any two of the equations can be used to derive the remaining equation. Therefore, in this  $N = 3$  node circuit, only  $N - 1 = 2$  of the equations are linearly independent and required to determine the  $N - 1 = 2$  unknown node voltages.

Note that a nodal analysis employs KCL in conjunction with Ohm's law. Once the direction of the branch currents has been *assumed*, then Ohm's law, as illustrated by Fig. 3.2 and expressed by Eq. (3.1), is used to express the branch currents in terms of the unknown node voltages. We can assume the currents to be in any direction. However, once we assume a particular direction, we must be very careful to write the currents correctly in terms of the node voltages using Ohm's law.

Suppose that the network in Fig. 3.4 has the following parameters:  $I_A = 1$  mA,  $R_1 = 12$  k $\Omega$ ,  $R_2 = 6$  k $\Omega$ ,  $I_B = 4$  mA, and  $R_3 = 6$  k $\Omega$ . Let us determine all node voltages and branch currents.

## EXAMPLE 3.1

For purposes of illustration we will solve this problem using Gaussian elimination, matrix analysis, and MATLAB. Using the parameter values Eq. (3.2) becomes

$$\begin{aligned}V_1\left[\frac{1}{12\text{k}} + \frac{1}{6\text{k}}\right] - V_2\left[\frac{1}{6\text{k}}\right] &= 1 \times 10^{-3} \\ -V_1\left[\frac{1}{6\text{k}}\right] + V_2\left[\frac{1}{6\text{k}} + \frac{1}{6\text{k}}\right] &= -4 \times 10^{-3}\end{aligned}$$

where we employ capital letters because the voltages are constant. The equations can be written as

$$\begin{aligned}\frac{V_1}{4\text{k}} - \frac{V_2}{6\text{k}} &= 1 \times 10^{-3} \\ -\frac{V_1}{6\text{k}} + \frac{V_2}{3\text{k}} &= -4 \times 10^{-3}\end{aligned}$$

Using Gaussian elimination, we solve the first equation for  $V_1$  in terms of  $V_2$ :

$$V_1 = V_2\left(\frac{2}{3}\right) + 4$$

## SOLUTION

This value is then substituted into the second equation to yield

$$\frac{-1}{6k} \left( \frac{2}{3} V_2 + 4 \right) + \frac{V_2}{3k} = -4 \times 10^{-3}$$

or

$$V_2 = -15 \text{ V}$$

This value for  $V_2$  is now substituted back into the equation for  $V_1$  in terms of  $V_2$ , which yields

$$\begin{aligned} V_1 &= \frac{2}{3} V_2 + 4 \\ &= -6 \text{ V} \end{aligned}$$

The circuit equations can also be solved using matrix analysis. The general form of the matrix equation is

$$\mathbf{GV} = \mathbf{I}$$

where in this case

$$\mathbf{G} = \begin{bmatrix} \frac{1}{4k} & -\frac{1}{6k} \\ -\frac{1}{6k} & \frac{1}{3k} \end{bmatrix}, \mathbf{V} = \begin{bmatrix} V_1 \\ V_2 \end{bmatrix}, \text{ and } \mathbf{I} = \begin{bmatrix} 1 \times 10^{-3} \\ -4 \times 10^{-3} \end{bmatrix}$$

The solution to the matrix equation is

$$\mathbf{V} = \mathbf{G}^{-1}\mathbf{I}$$

and therefore,

$$\begin{bmatrix} V_1 \\ V_2 \end{bmatrix} = \begin{bmatrix} \frac{1}{4k} & -\frac{1}{6k} \\ -\frac{1}{6k} & \frac{1}{3k} \end{bmatrix}^{-1} \begin{bmatrix} 1 \times 10^{-3} \\ -4 \times 10^{-3} \end{bmatrix}$$

To calculate the inverse of  $\mathbf{G}$ , we need the adjoint and the determinant. The adjoint is

$$\text{Adj } \mathbf{G} = \begin{bmatrix} \frac{1}{3k} & \frac{1}{6k} \\ \frac{1}{6k} & \frac{1}{4k} \end{bmatrix}$$

and the determinant is

$$\begin{aligned} |\mathbf{G}| &= \left( \frac{1}{3k} \right) \left( \frac{1}{4k} \right) - \left( \frac{-1}{6k} \right) \left( \frac{-1}{6k} \right) \\ &= \frac{1}{18k^2} \end{aligned}$$

Therefore,

$$\begin{aligned} \begin{bmatrix} V_1 \\ V_2 \end{bmatrix} &= 18k^2 \begin{bmatrix} \frac{1}{3k} & \frac{1}{6k} \\ \frac{1}{6k} & \frac{1}{4k} \end{bmatrix} \begin{bmatrix} 1 \times 10^{-3} \\ -4 \times 10^{-3} \end{bmatrix} \\ &= 18k^2 \begin{bmatrix} \frac{1}{3k^2} & -\frac{4}{6k^2} \\ \frac{1}{6k^2} & -\frac{1}{k^2} \end{bmatrix} \\ &= \begin{bmatrix} -6 \\ -15 \end{bmatrix} \end{aligned}$$

Knowing the node voltages, we can determine all the currents using Ohm's law:

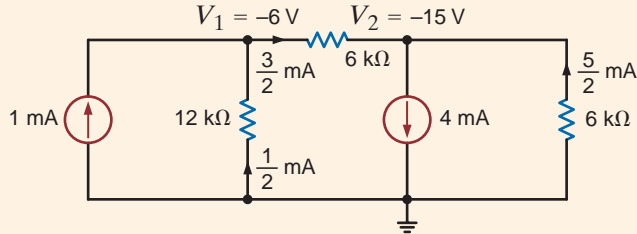
$$I_1 = \frac{V_1}{R_1} = \frac{-6}{12\text{k}} = -\frac{1}{2} \text{ mA}$$

$$I_2 = \frac{V_1 - V_2}{6\text{k}} = \frac{-6 - (-15)}{6\text{k}} = \frac{3}{2} \text{ mA}$$

and

$$I_3 = \frac{V_2}{6\text{k}} = \frac{-15}{6\text{k}} = -\frac{5}{2} \text{ mA}$$

Fig. 3.5 illustrates the results of all the calculations. Note that KCL is satisfied at every node.



**Figure 3.5**  
Circuit used in Example 3.1

Let us now examine the circuit in Fig. 3.6. The current directions are assumed as shown in the figure.

We note that this network has four nodes. The node at the bottom of the circuit is selected as the reference node and labeled with the ground symbol. Since  $N = 4$ ,  $N - 1 = 3$  linearly independent KCL equations will be required to determine the three unknown nonreference node voltages labeled  $v_1$ ,  $v_2$ , and  $v_3$ .

At node 1, KCL yields

$$i_1 - i_A + i_2 - i_3 = 0$$

or

$$\frac{v_1}{R_1} - i_A + \frac{v_1 - v_2}{R_2} - \frac{v_3 - v_1}{R_3} = 0$$

$$v_1 \left( \frac{1}{R_1} + \frac{1}{R_2} + \frac{1}{R_3} \right) - v_2 \frac{1}{R_2} - v_3 \frac{1}{R_3} = i_A$$

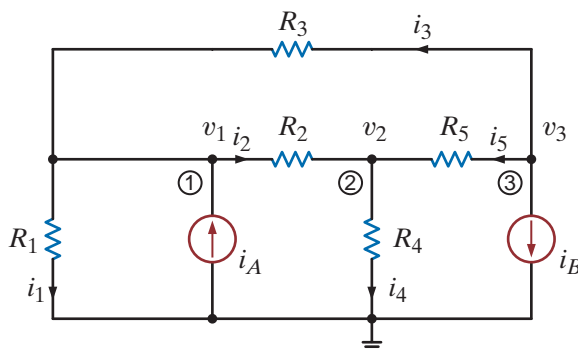
At node 2, KCL yields

$$-i_2 + i_4 - i_5 = 0$$

or

$$-\frac{v_1 - v_2}{R_2} + \frac{v_2}{R_4} - \frac{v_3 - v_2}{R_5} = 0$$

$$-v_1 \frac{1}{R_2} + v_2 \left( \frac{1}{R_2} + \frac{1}{R_4} + \frac{1}{R_5} \right) - v_3 \frac{1}{R_5} = 0$$



**Figure 3.6**  
A four-node circuit.

At node 3, the equation is

$$i_3 + i_5 + i_B = 0$$

or

$$\begin{aligned} \frac{v_3 - v_1}{R_3} + \frac{v_3 - v_2}{R_5} + i_B &= 0 \\ -v_1 \frac{1}{R_3} - v_2 \frac{1}{R_5} + v_3 \left( \frac{1}{R_3} + \frac{1}{R_5} \right) &= -i_B \end{aligned}$$

Grouping the node equations together, we obtain

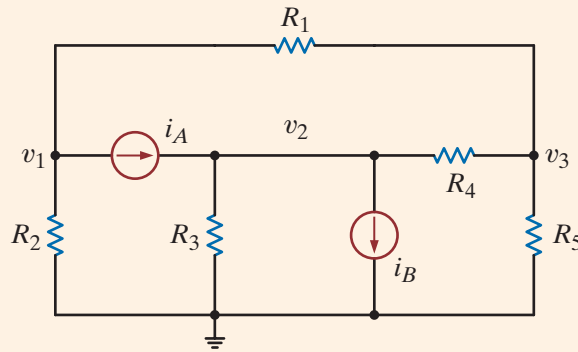
$$\begin{aligned} v_1 \left( \frac{1}{R_1} + \frac{1}{R_2} + \frac{1}{R_3} \right) - v_2 \frac{1}{R_2} - v_3 \frac{1}{R_3} &= i_A \\ -v_1 \frac{1}{R_2} + v_2 \left( \frac{1}{R_2} + \frac{1}{R_4} + \frac{1}{R_5} \right) - v_3 \frac{1}{R_5} &= 0 \\ -v_1 \frac{1}{R_3} - v_2 \frac{1}{R_5} + v_3 \left( \frac{1}{R_3} + \frac{1}{R_5} \right) &= -i_B \end{aligned} \quad 3.3$$

Note that our analysis has produced three simultaneous equations in the three unknown node voltages  $v_1$ ,  $v_2$ , and  $v_3$ . The equations can also be written in matrix form as

$$\begin{bmatrix} \frac{1}{R_1} + \frac{1}{R_2} + \frac{1}{R_3} & -\frac{1}{R_2} & -\frac{1}{R_3} \\ -\frac{1}{R_2} & \frac{1}{R_2} + \frac{1}{R_4} + \frac{1}{R_5} & -\frac{1}{R_5} \\ -\frac{1}{R_3} & -\frac{1}{R_5} & \frac{1}{R_3} + \frac{1}{R_5} \end{bmatrix} \begin{bmatrix} v_1 \\ v_2 \\ v_3 \end{bmatrix} = \begin{bmatrix} i_A \\ 0 \\ -i_B \end{bmatrix} \quad 3.4$$

At this point it is important that we note the symmetrical form of the equations that describe the two previous networks. Eqs. (3.2) and (3.3) exhibit the same type of symmetrical form. The  $\mathbf{G}$  matrix for each network is a symmetrical matrix. This symmetry is not accidental. The node equations for networks containing only resistors and independent current sources can always be written in this symmetrical form. We can take advantage of this fact and learn to write the equations by inspection. Note in the first equation of (3.2) that the coefficient of  $v_1$  is the sum of all the conductances connected to node 1 and the coefficient of  $v_2$  is the negative of the conductances connected between node 1 and node 2. The right-hand side of the equation is the sum of the currents entering node 1 through current sources. This equation is KCL at node 1. In the second equation in (3.2), the coefficient of  $v_2$  is the sum of all the conductances connected to node 2, the coefficient of  $v_1$  is the negative of the conductance connected between node 2 and node 1, and the right-hand side of the equation is the sum of the currents entering node 2 through current sources. This equation is KCL at node 2. Similarly, in the first equation in (3.3) the coefficient of  $v_1$  is the sum of the conductances connected to node 1, the coefficient of  $v_2$  is the negative of the conductance connected between node 1 and node 2, the coefficient of  $v_3$  is the negative of the conductance connected between node 1 and node 3, and the right-hand side of the equation is the sum of the currents entering node 1 through current sources. The other two equations in (3.3) are obtained in a similar manner. In general, if KCL is applied to node  $j$  with node voltage  $v_j$ , the coefficient of  $v_j$  is the sum of all the conductances connected to node  $j$  and the coefficients of the other node voltages (e.g.,  $v_{j-1}$ ,  $v_{j+1}$ ) are the negative of the sum of the conductances connected directly between these nodes and node  $j$ . The right-hand side of the equation is equal to the sum of the currents entering the node via current sources. Therefore, the left-hand side of the equation represents the sum of the currents leaving node  $j$  and the right-hand side of the equation represents the currents entering node  $j$ .

Let us apply what we have just learned to write the equations for the network in Fig. 3.7 by inspection. Then given the following parameters, we will determine the node voltages using MATLAB:  $R_1 = R_2 = 2 \text{ k}\Omega$ ,  $R_3 = R_4 = 4 \text{ k}\Omega$ ,  $R_5 = 1 \text{ k}\Omega$ ,  $i_A = 4 \text{ mA}$ , and  $i_B = 2 \text{ mA}$ .



## EXAMPLE 3.2

Figure 3.7

Circuit used in Example 3.2.

The equations are

$$\begin{aligned} v_1 \left( \frac{1}{R_1} + \frac{1}{R_2} \right) - v_2(0) - v_3 \left( \frac{1}{R_1} \right) &= -i_A \\ -v_1(0) + v_2 \left( \frac{1}{R_3} + \frac{1}{R_4} \right) - v_3 \left( \frac{1}{R_4} \right) &= i_A - i_B \\ -v_1 \left( \frac{1}{R_1} \right) - v_2 \left( \frac{1}{R_4} \right) + v_3 \left( \frac{1}{R_1} + \frac{1}{R_4} + \frac{1}{R_5} \right) &= 0 \end{aligned}$$

which can also be written directly in matrix form as

$$\begin{bmatrix} \frac{1}{R_1} + \frac{1}{R_2} & 0 & -\frac{1}{R_1} \\ 0 & \frac{1}{R_3} + \frac{1}{R_4} & -\frac{1}{R_4} \\ -\frac{1}{R_1} & -\frac{1}{R_4} & \frac{1}{R_1} + \frac{1}{R_4} + \frac{1}{R_5} \end{bmatrix} \begin{bmatrix} v_1 \\ v_2 \\ v_3 \end{bmatrix} = \begin{bmatrix} -i_A \\ i_A - i_B \\ 0 \end{bmatrix}$$

Both the equations and the  $\mathbf{G}$  matrix exhibit the symmetry that will always be present in circuits that contain only resistors and current sources.

If the component values are now used, the matrix equation becomes

$$\begin{bmatrix} \frac{1}{2\text{k}} + \frac{1}{2\text{k}} & 0 & -\frac{1}{2\text{k}} \\ 0 & \frac{1}{4\text{k}} + \frac{1}{4\text{k}} & -\frac{1}{4\text{k}} \\ -\frac{1}{2\text{k}} & -\frac{1}{4\text{k}} & \frac{1}{2\text{k}} + \frac{1}{4\text{k}} + \frac{1}{1\text{k}} \end{bmatrix} \begin{bmatrix} v_1 \\ v_2 \\ v_3 \end{bmatrix} = \begin{bmatrix} -0.004 \\ 0.002 \\ 0 \end{bmatrix}$$

or

$$\begin{bmatrix} 0.001 & 0 & -0.0005 \\ 0 & 0.0005 & -0.00025 \\ -0.0005 & -0.00025 & 0.00175 \end{bmatrix} \begin{bmatrix} v_1 \\ v_2 \\ v_3 \end{bmatrix} = \begin{bmatrix} -0.004 \\ 0.002 \\ 0 \end{bmatrix}$$

This equation is in the form of  $Gv = i$ . Therefore,  $v = G^{-1}i$ . Performing this operation yields the following voltages:

$$v_1 = -4.3636 \text{ V}$$

$$v_2 = 3.6364 \text{ V}$$

$$v_3 = -0.7273 \text{ V}$$

## SOLUTION

## Learning Assessments

**E3.1** Write the node equations for the circuit in Fig. E3.1.

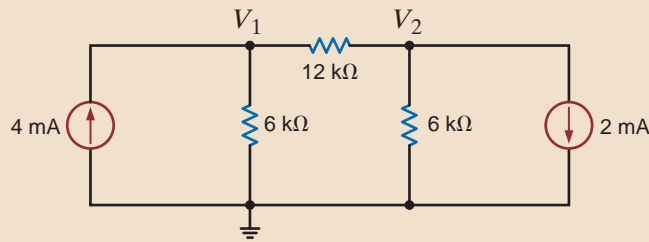


Figure E3.1

**ANSWER:**

$$\frac{1}{4k} V_1 - \frac{1}{12k} V_2 = 4 \times 10^{-3},$$

$$\frac{-1}{12k} V_1 + \frac{1}{4k} V_2 = -2 \times 10^{-3}.$$

**E3.2** Find all the node voltages in the network in Fig. E3.2 using MATLAB.

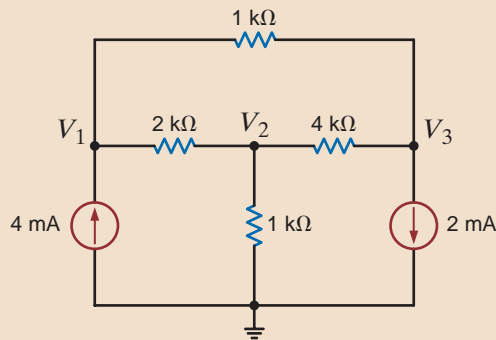


Figure E3.2

**ANSWER:**  $V_1 = 5.4286$  V,

$$V_2 = 2.000$$
 V,

$$V_3 = 3.1429$$
 V.

**E3.3** Use nodal analysis to find  $V_o$  in Fig. E3.3.

**ANSWER:**  $V_o = 2.79$  V.

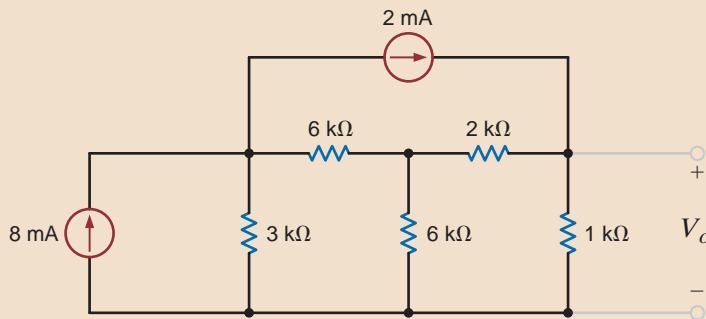


Figure E3.3

**CIRCUITS CONTAINING DEPENDENT CURRENT SOURCES** The presence of a dependent source may destroy the symmetrical form of the nodal equations that define the circuit. Consider the circuit shown in Fig. 3.8, which contains a current-controlled current source. The KCL equations for the nonreference nodes are

$$\beta i_o + \frac{v_1}{R_1} + \frac{v_1 - v_2}{R_2} = 0$$

and

$$\frac{v_2 - v_1}{R_2} + i_o - i_A = 0$$

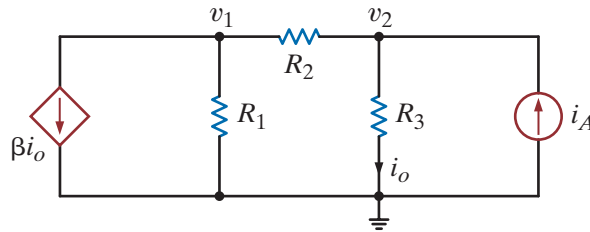
where  $i_o = v_2/R_3$ . Simplifying the equations, we obtain

$$\begin{aligned}(G_1 + G_2)v_1 - (G_2 - \beta G_3)v_2 &= 0 \\ -G_2v_1 + (G_2 + G_3)v_2 &= i_A\end{aligned}$$

or in matrix form

$$\begin{bmatrix} (G_1 + G_2) & -G_2 - \beta G_3 \\ -G_2 & (G_2 + G_3) \end{bmatrix} \begin{bmatrix} v_1 \\ v_2 \end{bmatrix} = \begin{bmatrix} 0 \\ i_A \end{bmatrix}$$

Note that the presence of the dependent source has destroyed the symmetrical nature of the node equations.



**Figure 3.8**

Circuit with a dependent source.

Let us determine the node voltages for the network in Fig. 3.8, given the following parameters:

$$\begin{aligned}\beta &= 2 & R_2 &= 6 \text{ k}\Omega & i_A &= 2 \text{ mA} \\ R_1 &= 12 \text{ k}\Omega & R_3 &= 3 \text{ k}\Omega\end{aligned}$$

### EXAMPLE 3.3

Using these values with the equations for the network yields

$$\begin{aligned}\frac{1}{4\text{k}}V_1 + \frac{1}{2\text{k}}V_2 &= 0 \\ -\frac{1}{6\text{k}}V_1 + \frac{1}{2\text{k}}V_2 &= 2 \times 10^{-3}\end{aligned}$$

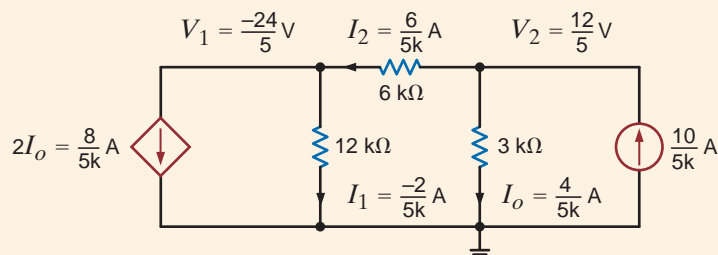
Solving these equations using any convenient method yields  $V_1 = -24/5 \text{ V}$  and  $V_2 = 12/5 \text{ V}$ . We can check these answers by determining the branch currents in the network and then using that information to test KCL at the nodes. For example, the current from top to bottom through  $R_3$  is

$$I_o = \frac{V_2}{R_3} = \frac{12/5}{3\text{k}} = \frac{4}{5\text{k}} \text{ A}$$

Similarly, the current from right to left through  $R_2$  is

$$I_2 = \frac{V_2 - V_1}{R_2} = \frac{12/5 - (-24/5)}{6\text{k}} = \frac{6}{5\text{k}} \text{ A}$$

All the results are shown in Fig. 3.9. Note that KCL is satisfied at every node.

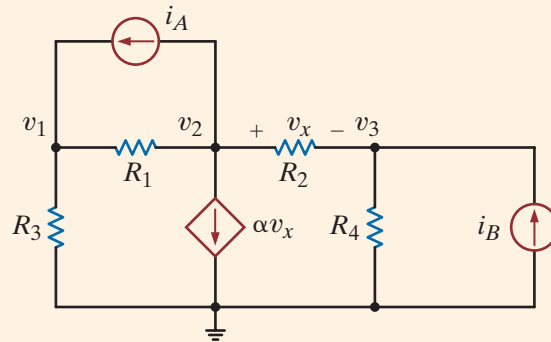


**Figure 3.9**

Circuit used in Example 3.3.

### EXAMPLE 3.4

**Figure 3.10**  
Circuit containing a  
voltage-controlled  
current source.



Applying KCL at each of the nonreference nodes yields the equations

$$\begin{aligned} G_3 v_1 + G_1(v_1 - v_2) - i_A &= 0 \\ i_A + G_1(v_2 - v_1) + \alpha v_x + G_2(v_2 - v_3) &= 0 \\ G_2(v_3 - v_2) + G_4 v_3 - i_B &= 0 \end{aligned}$$

where  $v_x = v_2 - v_3$ . Simplifying these equations, we obtain

$$\begin{aligned} (G_1 + G_3)v_1 - G_1 v_2 &= i_A \\ -G_1 v_1 + (G_1 + \alpha + G_2)v_2 - (\alpha + G_2)v_3 &= -i_A \\ -G_2 v_2 + (G_2 + G_4)v_3 &= i_B \end{aligned}$$

Given the component values, the equations become

$$\begin{bmatrix} \frac{1}{1\text{k}} + \frac{1}{2\text{k}} & -\frac{1}{\text{k}} & 0 \\ -\frac{1}{\text{k}} & \frac{1}{\text{k}} + 2 + \frac{1}{2\text{k}} & -\left(2 + \frac{1}{2\text{k}}\right) \\ 0 & -\frac{1}{2\text{k}} & \frac{1}{2\text{k}} + \frac{1}{4\text{k}} \end{bmatrix} \begin{bmatrix} v_1 \\ v_2 \\ v_3 \end{bmatrix} = \begin{bmatrix} 0.002 \\ -0.002 \\ 0.004 \end{bmatrix}$$

or

$$\begin{bmatrix} 0.0015 & -0.001 & 0 \\ -0.001 & 2.0015 & -2.0005 \\ 0 & -0.0005 & 0.00075 \end{bmatrix} \begin{bmatrix} v_1 \\ v_2 \\ v_3 \end{bmatrix} = \begin{bmatrix} 0.002 \\ -0.002 \\ 0.004 \end{bmatrix}$$

Once again, the circuit equations resulting from a nodal analysis or in the form  $Gv = i$ , and the results obtained from performing the operation  $v = G^{-1} i$  are

$$v_1 = 11.9940 \text{ V}$$

$$v_2 = 15.9910 \text{ V}$$

$$v_3 = 15.9940 \text{ V}$$



## Learning Assessments

**E3.4** Find the node voltages in the circuit in Fig. E3.4.

**ANSWER:**  $V_1 = 16\text{ V}$ ,  
 $V_2 = -8\text{ V}$ .

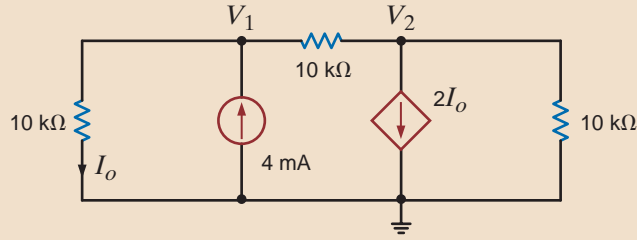


Figure E3.4

**E3.5** Find the voltage  $V_o$  in the network in Fig. E3.5.

**ANSWER:**  $V_o = 4\text{ V}$ .

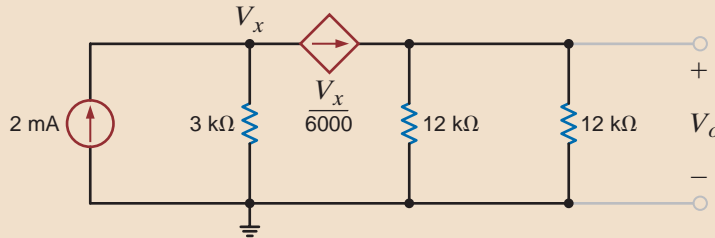


Figure E3.5

**E3.6** Find  $V_o$  in Fig. E3.6 using nodal analysis.

**ANSWER:**  $V_o = 0.952\text{ V}$ .

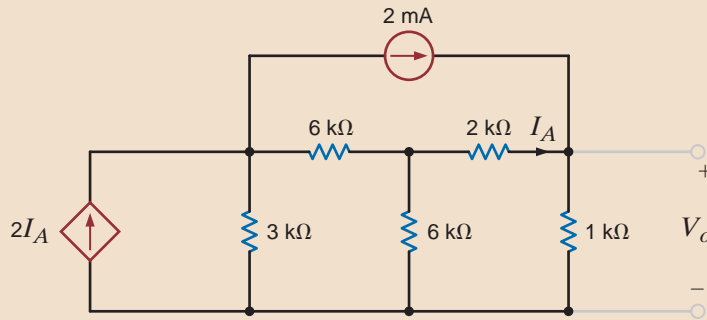


Figure E3.6

**CIRCUITS CONTAINING INDEPENDENT VOLTAGE SOURCES** As is our practice, in our discussion of this topic we will proceed from the simplest case to more complicated cases. The simplest case is that in which an independent voltage source is connected to the reference node. The following example illustrates this case.

Consider the circuit shown in Fig. 3.11a. Let us determine all node voltages and branch currents.

This network has three nonreference nodes with labeled node voltages  $V_1$ ,  $V_2$ , and  $V_3$ . Based on our previous discussions, we would assume that in order to find all the node voltages we would need to write a KCL equation at each of the nonreference nodes. The resulting three linearly independent simultaneous equations would produce the unknown node voltages. However, note that  $V_1$  and  $V_3$  are known quantities because an independent voltage source is connected directly between the nonreference node and each of these nodes. Therefore,  $V_1 = 12\text{ V}$  and  $V_3 = -6\text{ V}$ . Furthermore, note that the current through the  $9\text{-k}\Omega$  resistor is  $[12 - (-6)]/9\text{k} = 2\text{ mA}$  from left to right. We do not know  $V_2$  or the current in the remaining resistors. However, since only one node voltage is unknown, a single-node equation will produce it. Applying KCL to this center node yields

**EXAMPLE**  
**SOLUTION 3.5**

[hint]

Any time an independent voltage source is connected between the reference node and a nonreference node, the nonreference node voltage is known.

$$\frac{V_2 - V_1}{12k} + \frac{V_2 - 0}{6k} + \frac{V_2 - V_3}{12k} = 0 \quad \text{or} \quad \frac{V_2 - 12}{12k} + \frac{V_2}{6k} + \frac{V_2 - (-6)}{12k} = 0$$

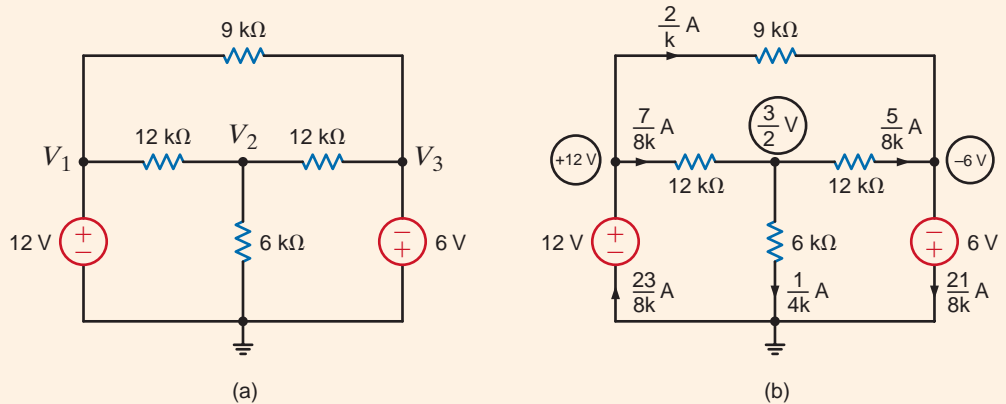
from which we obtain

$$V_2 = \frac{3}{2} \text{ V}$$

Once all the node voltages are known, Ohm's law can be used to find the branch currents shown in Fig. 3.11b. The diagram illustrates that KCL is satisfied at every node.

Note that the presence of the voltage sources in this example has simplified the analysis, since two of the three linear independent equations are  $V_1 = 12 \text{ V}$  and  $V_3 = -6 \text{ V}$ . We will find that as a general rule, whenever voltage sources are present between nodes, the node voltage equations that describe the network will be simpler.

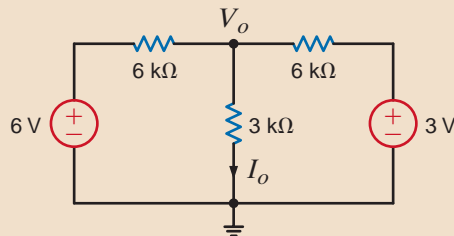
**Figure 3.11**  
Circuit used in Example 3.5.



## Learning Assessment

**E3.7** Use nodal analysis to find the current  $I_o$  in the network in Fig. E3.7.

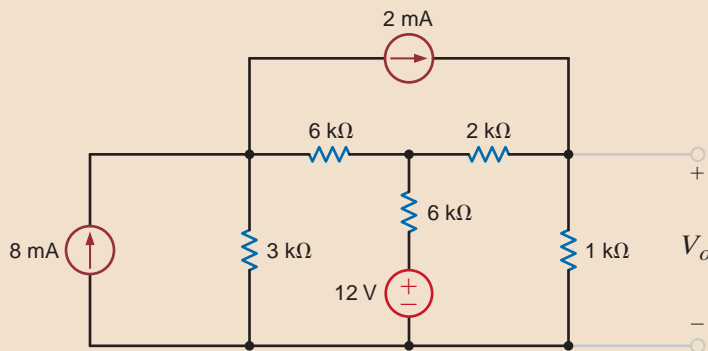
**ANSWER:**  $I_o = \frac{3}{4} \text{ mA}$ .



**Figure E3.7**

**E3.8** Find  $V_o$  in Fig. E3.8 using nodal analysis.

**ANSWER:**  $V_o = 3.89 \text{ V}$ .



**Figure E3.8**

Next let us consider the case in which an independent voltage source is connected between two nonreference nodes.

Suppose we wish to find the currents in the two resistors in the circuit of Fig. 3.12a.

### EXAMPLE

### SOLUTION 3.6

If we try to attack this problem in a brute-force manner, we immediately encounter a problem. Thus far, branch currents were either known source values or could be expressed as the branch voltage divided by the branch resistance. However, the branch current through the 6-V source is certainly not known and cannot be directly expressed using Ohm's law. We can, of course, give this current a name and write the KCL equations at the two nonreference nodes in terms of this current. However, this approach is no panacea because this technique will result in *two* linearly independent simultaneous equations in terms of *three* unknowns—that is, the two node voltages and the current in the voltage source.

To solve this dilemma, we recall that  $N-1$  linearly independent equations are required to determine the  $N-1$  nonreference node voltages in an  $N$ -node circuit. Since our network has three nodes, we need two linearly independent equations. Now note that if somehow one of the node voltages is known, we immediately know the other; that is, if  $V_1$  is known, then  $V_2 = V_1 - 6$ . If  $V_2$  is known, then  $V_1 = V_2 + 6$ . Therefore, the difference in potential between the two nodes is *constrained* by the voltage source and, hence,

$$V_1 - V_2 = 6$$

This constraint equation is one of the two linearly independent equations needed to determine the node voltages.

Next consider the network in Fig. 3.12b, in which the 6-V source is completely enclosed within the dashed surface. The constraint equation governs this dashed portion of the network. The remaining equation is obtained by applying KCL to this dashed surface, which is commonly called a *supernode*. Recall that in Chapter 2 we demonstrated that KCL must hold for a surface, and this technique eliminates the problem of dealing with a current through a voltage source. KCL for the supernode is

$$-6 \times 10^{-3} + \frac{V_1}{6\text{k}} + \frac{V_2}{12\text{k}} + 4 \times 10^{-3} = 0$$

Solving these equations yields  $V_1 = 10\text{ V}$  and  $V_2 = 4\text{ V}$  and, hence,  $I_1 = 5/3\text{ mA}$  and  $I_2 = 1/3\text{ mA}$ . A quick check indicates that KCL is satisfied at every node.

Note that applying KCL at the reference node yields the same equation as shown above. The student may feel that the application of KCL at the reference node saves one from having to deal with supernodes. Recall that we do not apply KCL at any node—even the reference node—that contains an independent voltage source. This idea can be illustrated with the circuit in the next example.

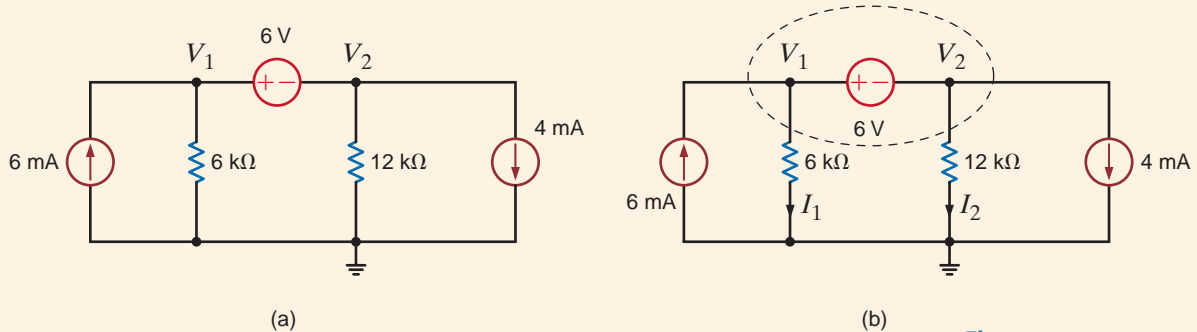


Figure 3.12  
Circuits used in Example 3.6.

**EXAMPLE**

**3.7**

**SOLUTION**

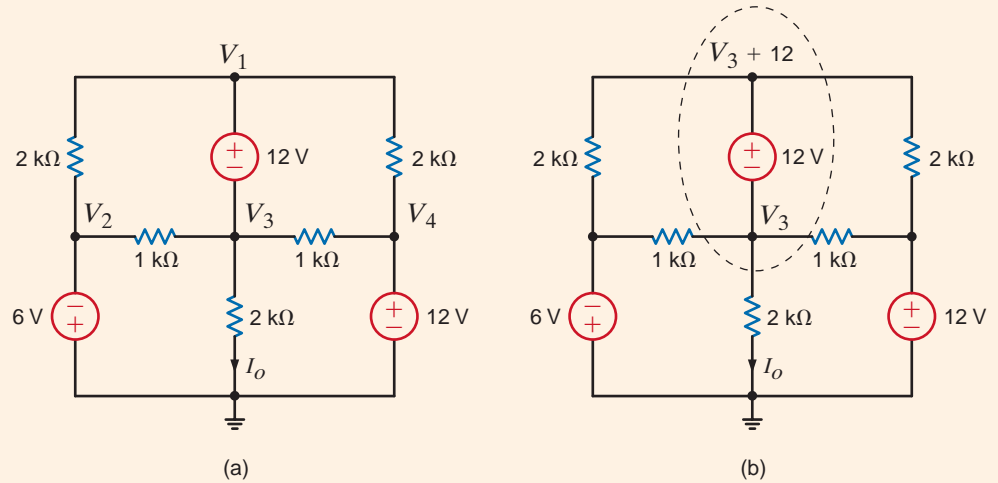
Let us determine the current  $I_o$  in the network in Fig. 3.13a.

Examining the network, we note that node voltages  $V_2$  and  $V_4$  are known and the node voltages  $V_1$  and  $V_3$  are constrained by the equation

$$V_1 - V_3 = 12$$

The network is redrawn in Fig. 3.13b.

**Figure 3.13**  
Example circuit with supernodes.



Since we want to find the current  $I_o$ ,  $V_1$  (in the supernode containing  $V_1$  and  $V_3$ ) is written as  $V_3 + 12$ . The KCL equation at the supernode is then

$$\frac{V_3 + 12 - (-6)}{2k} + \frac{V_3 + 12 - 12}{2k} + \frac{V_3 - (-6)}{1k} + \frac{V_3 - 12}{1k} + \frac{V_3}{2k} = 0$$

Solving the equation for  $V_3$  yields

$$V_3 = -\frac{6}{7} \text{ V}$$

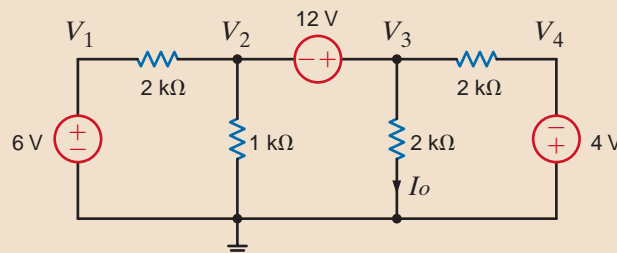
$I_o$  can then be computed immediately as

$$I_o = \frac{-\frac{6}{7}}{2k} = -\frac{3}{7} \text{ mA}$$

**Learning Assessment**

**E3.9** Use nodal analysis to find  $I_o$  in the network in Fig. E3.9.

**ANSWER:**  $I_o = 3.8 \text{ mA}$ .



**Figure E3.9**

**E3.10** Find  $V_o$  in Fig. E3.10 using nodal analysis.

**ANSWER:**  $V_o = 5.6$  V.

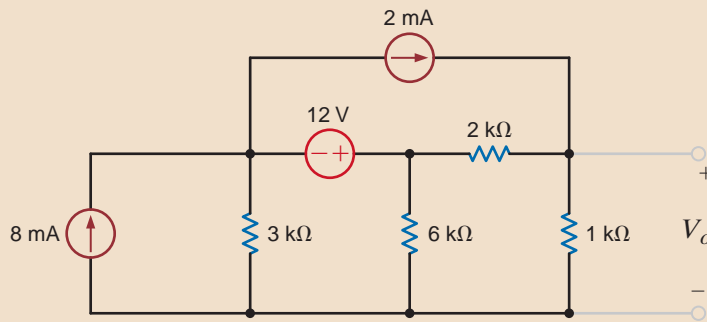


Figure E3.10

**CIRCUITS CONTAINING DEPENDENT VOLTAGE SOURCES** As the following examples will indicate, networks containing dependent (controlled) sources are treated in the same manner as described earlier.

We wish to find  $I_o$  in the network in Fig. 3.14.

### EXAMPLE

Since the dependent voltage source is connected between the node labeled  $V_1$  and the reference node,

### SOLUTION 3.8

$$V_1 = 2kI_x$$

KCL at the node labeled  $V_2$  is

$$\frac{V_2 - V_1}{2k} - \frac{4}{k} + \frac{V_2}{1k} = 0$$

where

$$I_x = \frac{V_2}{1k}$$

Solving these equations yields  $V_2 = 8$  V and  $V_1 = 16$  V. Therefore,

$$\begin{aligned} I_o &= \frac{V_1 - V_2}{2k} \\ &= 4 \text{ mA} \end{aligned}$$

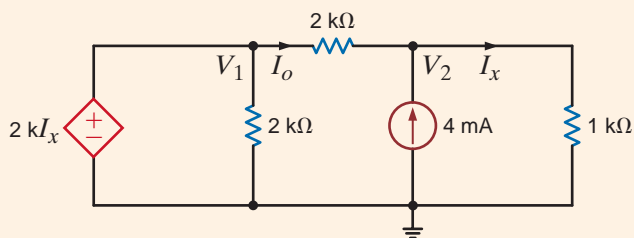


Figure 3.14

Circuits used in Example 3.8.

**EXAMPLE****3.9****SOLUTION**

Let us find the current  $I_o$  in the network in Fig. 3.15.

This circuit contains both an independent voltage source and a voltage-controlled voltage source. Note that  $V_3 = 6\text{ V}$ ,  $V_2 = V_x$ , and a supernode exists between the nodes labeled  $V_1$  and  $V_2$ .

Applying KCL to the supernode, we obtain

$$\frac{V_1 - V_3}{6\text{k}} + \frac{V_1}{12\text{k}} + \frac{V_2}{6\text{k}} + \frac{V_2 - V_3}{12\text{k}} = 0$$

where the constraint equation for the supernode is

$$V_1 - V_2 = 2V_x$$

The final equation is

$$V_3 = 6$$

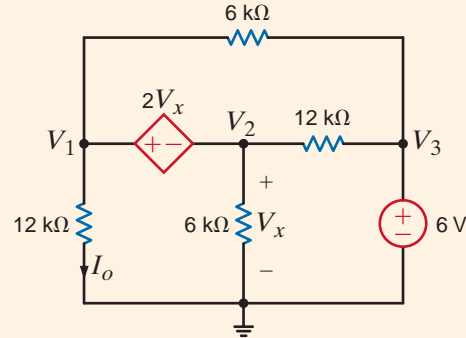
Solving these equations, we find that

$$V_1 = \frac{9}{2}\text{ V}$$

and, hence,

$$I_o = \frac{V_1}{12\text{k}} = \frac{3}{8}\text{ mA}$$

**Figure 3.15**  
Circuit used in  
Example 3.9.



Finally, let us consider two additional circuits that, for purposes of comparison, we will examine using more than one method.

**EXAMPLE****3.10**

Let us find  $V_o$  in the network in Fig. 3.16a. Note that the circuit contains two voltage sources, one of which is a controlled source, and two independent current sources. The circuit is redrawn in Fig. 3.16b in order to label the nodes and identify the supernode surrounding the controlled source. Because of the presence of the independent voltage source, the voltage at node 4 is known to be 4 V. We will use this knowledge in writing the node equations for the network.

Since the network has five nodes, four linear independent equations are sufficient to determine all the node voltages. Within the supernode, the defining equation is

$$V_1 - V_2 = 2V_x$$

where

$$V_2 = V_x$$

and thus

$$V_1 = 3V_x$$

Furthermore, we know that one additional equation is

$$V_4 = 4$$

Thus, given these two equations, only two more equations are needed in order to solve for the unknown node voltages. These additional equations result from applying KCL at the supernode and at the node labeled  $V_3$ . The equations are

$$-\frac{2}{k} + \frac{V_x}{1k} + \frac{V_x - V_3}{1k} + \frac{3V_x - V_3}{1k} + \frac{3V_x - 4}{1k} = 0$$

$$\frac{V_3 - 3V_x}{1k} + \frac{V_3 - V_x}{1k} = \frac{2}{k}$$

Combining the equations yields the two equations

$$8V_x - 2V_3 = 6$$

$$-4V_x + 2V_3 = 2$$

Solving these equations, we obtain

$$V_x = 2 \text{ V} \quad \text{and} \quad V_3 = 5 \text{ V}$$

$$V_o = 3V_x - V_3 = 1 \text{ V}$$

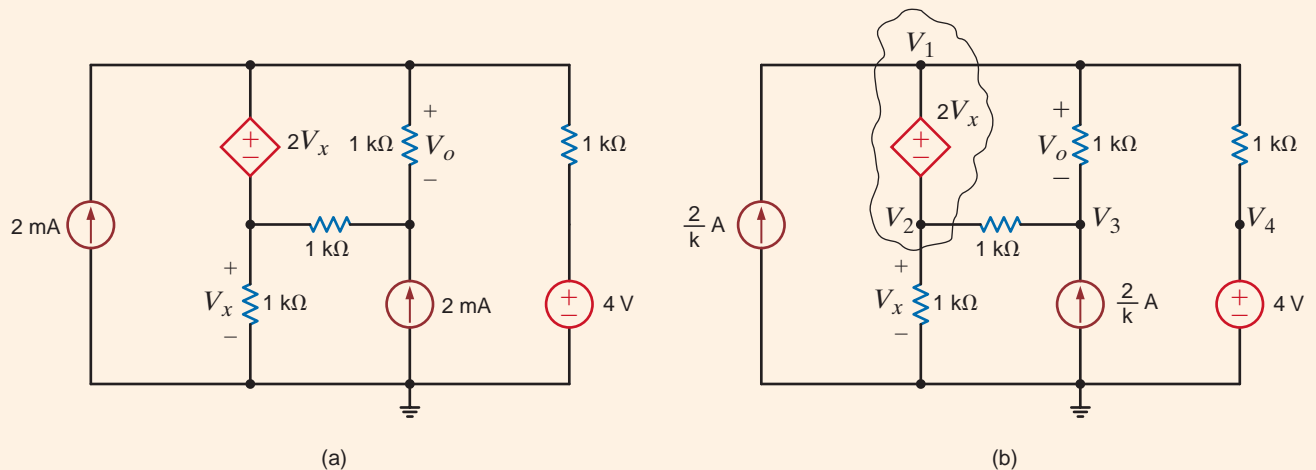


Figure 3.16

Circuit used in Example 3.10.

We wish to find  $I_o$  in the network in Fig. 3.17a. Note that this circuit contains three voltage sources, one of which is a controlled source and another is a controlled current source. Because two of the voltage sources are connected to the reference node, one node voltage is known directly and one is specified by the dependent source. Furthermore, the difference in voltage between two nodes is defined by the 6-V independent source.

## EXAMPLE 3.11

The network is redrawn in Fig. 3.17b in order to label the nodes and identify the supernode. Since the network has six nodes, five linear independent equations are needed to determine the unknown node voltages.

The two equations for the supernode are

$$V_1 - V_4 = -6$$

$$\frac{V_1 - 12}{1\text{k}} + \frac{V_1 - V_3}{1\text{k}} + 2I_x + \frac{V_4 - V_3}{1\text{k}} + \frac{V_4}{1\text{k}} + \frac{V_4 - V_5}{1\text{k}} = 0$$

The three remaining equations are

$$V_2 = 12$$

$$V_3 = 2V_x$$

$$\frac{V_5 - V_4}{1\text{k}} + \frac{V_5}{1\text{k}} = 2I_x$$

The equations for the control parameters are

$$V_x = V_1 - 12$$

$$I_x = \frac{V_4}{1\text{k}}$$

Combining these equations yields the following set of equations:

$$-2V_1 + 5V_4 - V_5 = -36$$

$$V_1 - V_4 = -6$$

$$-3V_4 + 2V_5 = 0$$

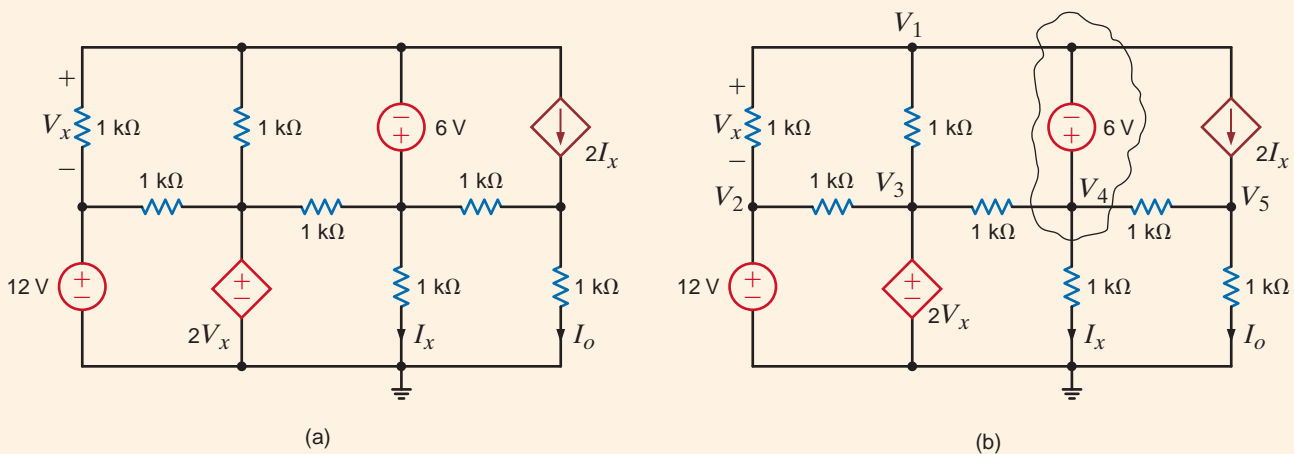
Solving these equations by any convenient means yields

$$V_1 = -38 \text{ V}$$

$$V_4 = -32 \text{ V}$$

$$V_5 = -48 \text{ V}$$

Then, since  $V_3 = 2V_x$ ,  $V_3 = -100 \text{ V}$ .  $I_o$  is  $-48 \text{ mA}$ . The reader is encouraged to verify that KCL is satisfied at every node.



**Figure 3.17**

Circuit used in Example 3.11.



## Problem-Solving Strategy

- Step 1.** Determine the number of nodes in the circuit. Select one node as the reference node. Assign a node voltage between each nonreference node and the reference node. All node voltages are assumed positive with respect to the reference node. For an  $N$ -node circuit, there are  $N - 1$  node voltages. As a result,  $N - 1$  linearly independent equations must be written to solve for the node voltages.
- Step 2.** Write a constraint equation for each voltage source—independent or dependent—in the circuit in terms of the assigned node voltages using KVL. Each constraint equation represents one of the necessary linearly independent equations, and  $N_v$  voltage sources yield  $N_v$  linearly independent equations. For each dependent voltage source, express the controlling variable for that source in terms of the node voltages.  
A voltage source—independent or dependent—may be connected between a nonreference node and the reference node or between two nonreference nodes. A supernode is formed by a voltage source and its two connecting nonreference nodes.
- Step 3.** Use KCL to formulate the remaining  $N - 1 - N_v$  linearly independent equations. First, apply KCL at each nonreference node not connected to a voltage source. Second, apply KCL at each supernode. Treat dependent current sources like independent current sources when formulating the KCL equations. For each dependent current source, express the controlling variable in terms of the node voltages.

### Nodal Analysis

## Learning Assessment

**E3.11** Use nodal analysis to find  $I_o$  in the circuit in Fig. E3.11.

**ANSWER:**  $I_o = \frac{4}{3}$  mA.

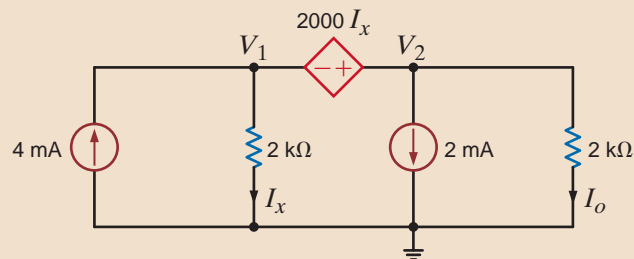


Figure E3.11

**E3.12** Find  $V_o$  in Fig. E3.12 using nodal analysis.

**ANSWER:**  $V_o = 6.29$  V.

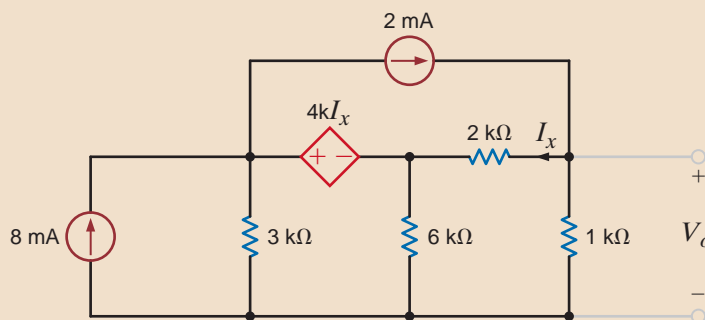


Figure E3.12

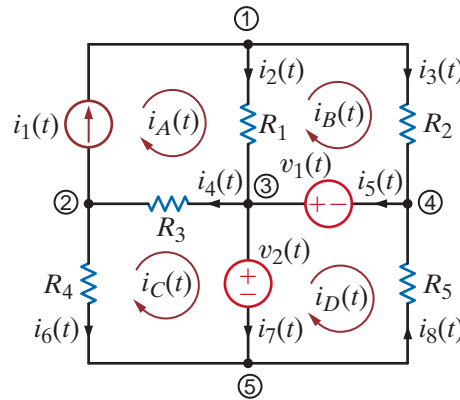
## 3.2

### Loop Analysis

We found that in a nodal analysis the unknown parameters are the node voltages and KCL was employed to determine them. Once these node voltages have been calculated, all the branch currents in the network can easily be determined using Ohm's law. In contrast to this approach, a loop analysis uses KVL to determine a set of loop currents in the circuit. Once these loop currents are known, Ohm's law can be used to calculate any voltages in the network. Via network topology we can show that, in general, there are exactly  $B - N + 1$  linearly independent KVL equations for any network, where  $B$  is the number of branches and  $N$  is the number of nodes. For example, if we once again examine the circuit in Fig. 2.5, we find that there are eight branches and five nodes. Thus, the number of linearly independent KVL equations necessary to determine all currents in the network is  $B - N + 1 = 8 - 5 + 1 = 4$ . The network in Fig. 2.5 is redrawn as shown in Fig. 3.18 with 4 loop currents labeled as shown. The branch currents are then determined as

Figure 3.18

Figure 2.5 redrawn with loop currents.

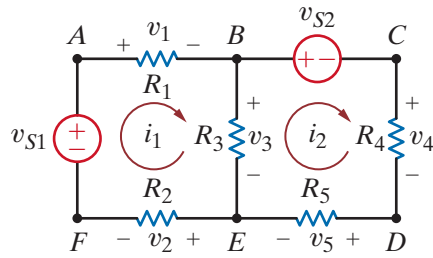


$$\begin{aligned}
 i_1(t) &= i_A(t) \\
 i_2(t) &= i_A(t) - i_B(t) \\
 i_3(t) &= i_B(t) \\
 i_4(t) &= i_A(t) - i_C(t) \\
 i_5(t) &= i_B(t) - i_D(t) \\
 i_6(t) &= -i_C(t) \\
 i_7(t) &= i_C(t) - i_D(t) \\
 i_8(t) &= -i_D(t)
 \end{aligned}$$

All the circuits we will examine in this text will be *planar*, which simply means that we can draw the circuit on a sheet of paper in such a way that no conductor crosses another conductor. If a circuit is planar, the loops are more easily identified. For example, recall in Chapter 2 that we found that a single equation was sufficient to determine the current in a circuit containing a single loop. If the circuit contains  $N$  independent loops, we will show (and the general topological formula  $B - N + 1$  can be used for verification) that  $N$  independent simultaneous equations will be required to describe the network.

Our approach to loop analysis will mirror the approach used in nodal analysis (i.e., we will begin with simple cases and systematically proceed to those that are more difficult). Then at the end of this section we will outline a general strategy for employing loop analysis.

**CIRCUITS CONTAINING ONLY INDEPENDENT VOLTAGE SOURCES** To begin our analysis, consider the circuit shown in Fig. 3.19. We note that this network has seven branches and six nodes, and thus the number of linearly independent KVL equations necessary to determine all currents in the circuit is  $B - N + 1 = 7 - 6 + 1 = 2$ . Since two linearly independent KVL equations are required, we identify two independent loops,  $A-B-E-F-A$  and  $B-C-D-E-B$ . We now define a new set of current variables called *loop currents*, which can be used to find the physical currents in the circuit. Let us assume that current  $i_1$  flows in the first loop and that current  $i_2$  flows in the second loop. Then the branch current flowing from  $B$  to  $E$



**Figure 3.19**  
A two-loop circuit.

through  $R_3$  is  $i_1 - i_2$ . The directions of the currents have been assumed. As was the case in the nodal analysis, if the actual currents are not in the direction indicated, the values calculated will be negative.

Applying KVL to the first loop yields

$$+v_1 + v_3 + v_2 - v_{S1} = 0$$

KVL applied to loop 2 yields

$$+v_{S2} + v_4 + v_5 - v_3 = 0$$

where  $v_1 = i_1 R_1$ ,  $v_2 = i_1 R_2$ ,  $v_3 = (i_1 - i_2) R_3$ ,  $v_4 = i_2 R_4$ , and  $v_5 = i_2 R_5$ .

Substituting these values into the two KVL equations produces the two simultaneous equations required to determine the two loop currents; that is,

$$\begin{aligned} i_1(R_1 + R_2 + R_3) - i_2(R_3) &= v_{S1} \\ -i_1(R_3) + i_2(R_3 + R_4 + R_5) &= -v_{S2} \end{aligned}$$

or in matrix form

$$\begin{bmatrix} R_1 + R_2 + R_3 & -R_3 \\ -R_3 & R_3 + R_4 + R_5 \end{bmatrix} \begin{bmatrix} i_1 \\ i_2 \end{bmatrix} = \begin{bmatrix} v_{S1} \\ -v_{S2} \end{bmatrix}$$

At this point, it is important to define what is called a *mesh*. A mesh is a special kind of loop that does not contain any loops within it. Therefore, as we traverse the path of a mesh, we do not encircle any circuit elements. For example, the network in Fig. 3.19 contains two meshes defined by the paths  $A-B-E-F-A$  and  $B-C-D-E-B$ . The path  $A-B-C-D-E-F-A$  is a loop, but it is not a mesh. Since the majority of our analysis in this section will involve writing KVL equations for meshes, we will refer to the currents as mesh currents and the analysis as a *mesh analysis*.

[hint]  
The equations employ the passive sign convention.

Consider the network in Fig. 3.20a. We wish to find the current  $I_o$ .

We will begin the analysis by writing mesh equations. Note that there are no + and - signs on the resistors. However, they are not needed, since we will apply Ohm's law to each resistive element as we write the KVL equations. The equation for the first mesh is

$$-12 + 6kI_1 + 6k(I_1 - I_2) = 0$$

The KVL equation for the second mesh is

$$6k(I_2 - I_1) + 3kI_2 + 3 = 0$$

where  $I_o = I_1 - I_2$ .

Solving the two simultaneous equations yields  $I_1 = 5/4$  mA and  $I_2 = 1/2$  mA. Therefore,  $I_o = 3/4$  mA. All the voltages and currents in the network are shown in Fig. 3.20b. Recall from nodal analysis that once the node voltages were determined, we could check our analysis using KCL at the nodes. In this case, we know the branch currents and can use KVL around any closed path to check our results. For example, applying KVL to the outer loop yields

$$\begin{aligned} -12 + \frac{15}{2} + \frac{3}{2} + 3 &= 0 \\ 0 &= 0 \end{aligned}$$

### EXAMPLE SOLUTION 3.12

Since we want to calculate the current  $I_o$ , we could use loop analysis, as shown in Fig. 3.20c. Note that the loop current  $I_1$  passes through the center leg of the network and, therefore,  $I_1 = I_o$ . The two loop equations in this case are

$$-12 + 6k(I_1 + I_2) + 6kI_1 = 0$$

and

$$-12 + 6k(I_1 + I_2) + 3kI_2 + 3 = 0$$

Solving these equations yields  $I_1 = 3/4$  mA and  $I_2 = 1/2$  mA. Since the current in the 12-V source is  $I_1 + I_2 = 5/4$  mA, these results agree with the mesh analysis.

Finally, for purposes of comparison, let us find  $I_o$  using nodal analysis. The presence of the two voltage sources would indicate that this is a viable approach. Applying KCL at the top center node, we obtain

$$\frac{V_o - 12}{6k} + \frac{V_o}{6k} + \frac{V_o - 3}{3k} = 0$$

and hence,

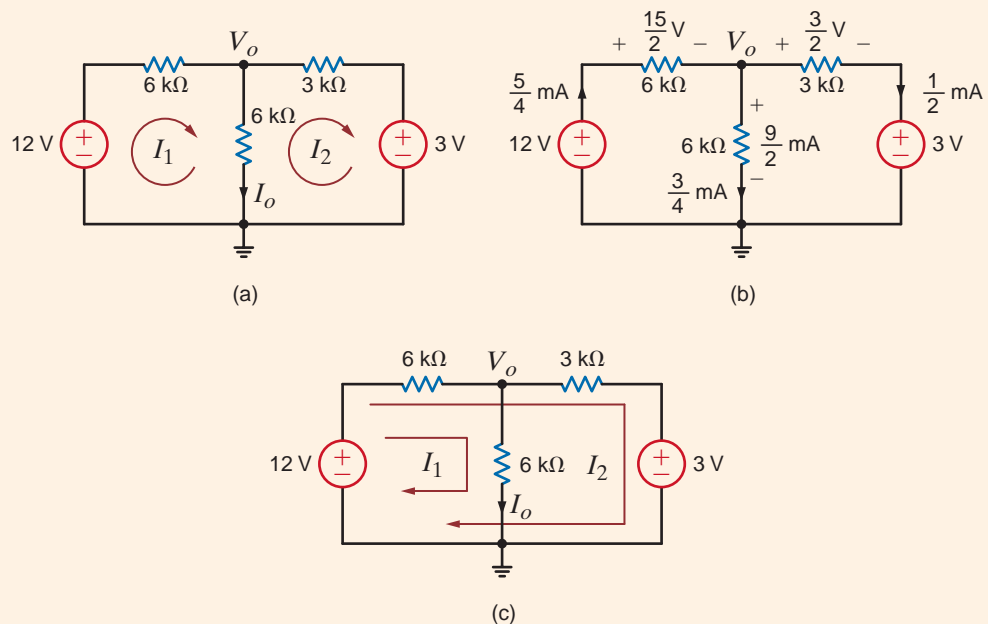
$$V_o = \frac{9}{2} \text{ V}$$

and then

$$I_o = \frac{V_o}{6k} = \frac{3}{4} \text{ mA}$$

Note that in this case we had to solve only one equation instead of two.

**Figure 3.20**  
Circuits used in  
Example 3.12.



Once again we are compelled to note the symmetrical form of the mesh equations that describe the circuit in Fig. 3.19. Note that the coefficient matrix for this circuit is symmetrical.

Since this symmetry is generally exhibited by networks containing resistors and independent voltage sources, we can learn to write the mesh equations by inspection. In the first equation, the coefficient of  $i_1$  is the sum of the resistances through which mesh current 1 flows, and the coefficient of  $i_2$  is the negative of the sum of the resistances common to mesh current 1 and mesh current 2. The right-hand side of the equation is the algebraic sum of the voltage sources in mesh 1. The sign of the voltage source is positive if it aids the assumed direction of the current flow and negative if it opposes the assumed flow. The first equation is KVL for mesh 1. In the second equation, the coefficient of  $i_2$  is the sum of all the

resistances in mesh 2, the coefficient of  $i_1$  is the negative of the sum of the resistances common to mesh 1 and mesh 2, and the right-hand side of the equation is the algebraic sum of the voltage sources in mesh 2. In general, if we assume all of the mesh currents to be in the same direction (clockwise or counterclockwise), then if KVL is applied to mesh  $j$  with mesh current  $i_j$ , the coefficient of  $i_j$  is the sum of the resistances in mesh  $j$  and the coefficients of the other mesh currents (e.g.,  $i_{j-1}, i_{j+1}$ ) are the negatives of the resistances common to these meshes and mesh  $j$ . The right-hand side of the equation is equal to the algebraic sum of the voltage sources in mesh  $j$ . These voltage sources have a positive sign if they aid the current flow  $i_j$  and a negative sign if they oppose it.

Let us write the mesh equations by inspection for the network in Fig. 3.21. Then we will use MATLAB to solve for the mesh currents.

The three linearly independent simultaneous equations are

$$\begin{aligned}(4k + 6k)I_1 - (0)I_2 - (6k)I_3 &= -6 \\ -(0)I_1 + (9k + 3k)I_2 - (3k)I_3 &= 6 \\ -(6k)I_1 - (3k)I_2 + (3k + 6k + 12k)I_3 &= 0\end{aligned}$$

or in matrix form

$$\begin{bmatrix} 10k & 0 & -6k \\ 0 & 12k & -3k \\ -6k & -3k & 21k \end{bmatrix} \begin{bmatrix} I_1 \\ I_2 \\ I_3 \end{bmatrix} = \begin{bmatrix} -6 \\ 6 \\ 0 \end{bmatrix}$$

Note the symmetrical form of the equations. The general form of the matrix equation is

$$\mathbf{RI} = \mathbf{V}$$

and the solution of this matrix equation is

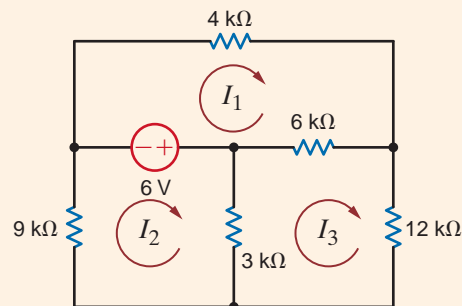
$$\mathbf{I} = \mathbf{R}^{-1}\mathbf{V}$$

Performing the indicated operation yields the following loop currents:

$$i_1 = -0.6757 \text{ mA}$$

$$i_2 = 0.4685 \text{ mA}$$

$$i_3 = -0.1261 \text{ mA}$$



### EXAMPLE SOLUTION 3.13

**Figure 3.21**  
Circuit used in  
Example 3.13.

**CIRCUITS CONTAINING INDEPENDENT CURRENT SOURCES** Just as the presence of a voltage source in a network simplified the nodal analysis, the presence of a current source simplifies a loop analysis. The following examples illustrate the point.

## Learning Assessment

**E3.13** Use mesh equations to find  $V_o$  in the circuit in Fig. E3.13.

**ANSWER:**  $V_o = \frac{33}{5}$  V.

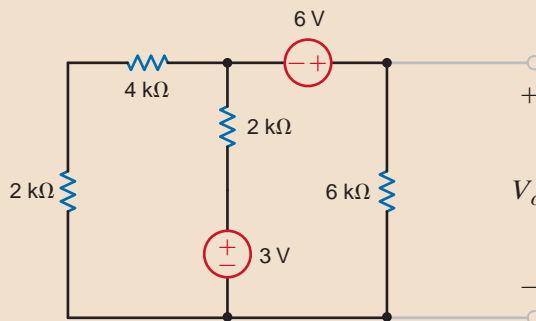


Figure E3.13

**E3.14** Find  $V_o$  in Fig. E3.14 using mesh analysis.

**ANSWER:**  $V_o = 8.96$  V.

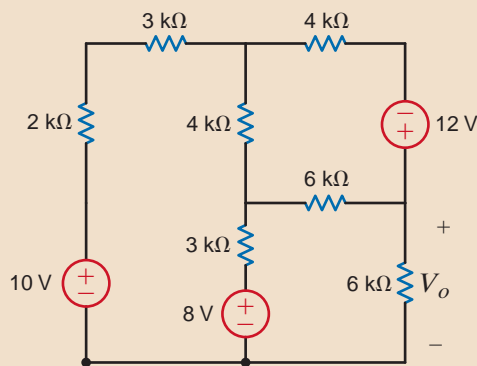


Figure E3.14

### EXAMPLE

### 3.14 SOLUTION

Let us find both  $V_o$  and  $V_1$  in the circuit in Fig. 3.22.

Although it appears that there are two unknown mesh currents, the current  $I_1$  goes directly through the current source and, therefore,  $I_1$  is constrained to be 2 mA. Hence, only the current  $I_2$  is unknown. KVL for the rightmost mesh is

$$2k(I_2 - I_1) - 2 + 6kI_2 = 0$$

And, of course,

$$I_1 = 2 \times 10^{-3}$$

These equations can be written as

$$\begin{aligned} -2kI_1 + 8kI_2 &= 2 \\ I_1 &= 2/k \end{aligned}$$

Solving these equation for  $I_2$  yields  $I_2 = 3/4kA$  and thus

$$V_o = 6kI_2 = \frac{9}{2} \text{ V}$$

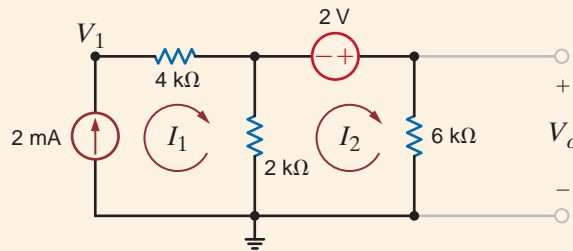
To obtain  $V_1$  we apply KVL around any closed path. If we use the outer loop, the KVL equation is

$$-V_1 + 4kI_1 - 2 + 6kI_2 = 0$$

And therefore,

$$V_1 = \frac{21}{2} \text{ V}$$

Note that since the current  $I_1$  is known, the 4-k $\Omega$  resistor did not enter the equation in finding  $V_o$ . However, it appears in every loop containing the current source and, thus, is used in finding  $V_1$ .



**Figure 3.22**

Circuit used in Example 3.14.

We wish to find  $V_o$  in the network in Fig. 3.23.

Since the currents  $I_1$  and  $I_2$  pass directly through a current source, two of the three required equations are

$$\begin{aligned} I_1 &= 4 \times 10^{-3} \\ I_2 &= -2 \times 10^{-3} \end{aligned}$$

The third equation is KVL for the mesh containing the voltage source; that is,

$$4k(I_3 - I_2) + 2k(I_3 - I_1) + 6kI_3 - 3 = 0$$

These equations yield

$$I_3 = \frac{1}{4} \text{ mA}$$

and hence,

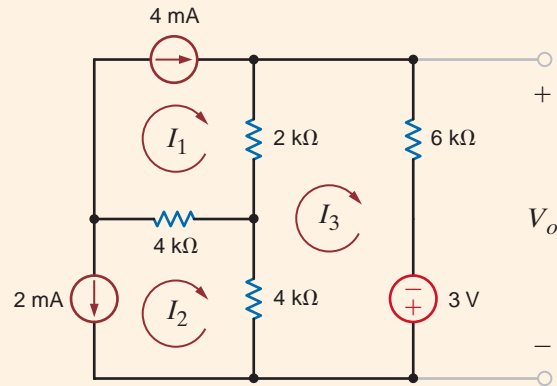
$$V_o = 6kI_3 - 3 = \frac{-3}{2} \text{ V}$$

### EXAMPLE

### SOLUTION 3.15

**Figure 3.23**

Circuit used in Example 3.15.



What we have demonstrated in the previous example is the general approach for dealing with independent current sources when writing KVL equations; that is, use one loop through each current source. The number of “window panes” in the network tells us how many equations we need. Additional KVL equations are written to cover the remaining circuit elements in the network. The following example illustrates this approach.

**EXAMPLE****3.16 SOLUTION****[hint]**

In this case the 4-mA current source is located on the boundary between two meshes. Thus, we will demonstrate two techniques for dealing with this type of situation. One is a special loop technique, and the other is known as the supermesh approach.

Let us find  $I_o$  in the network in Fig. 3.24a.

First, we select two loop currents  $I_1$  and  $I_2$  such that  $I_1$  passes directly through the 2-mA source, and  $I_2$  passes directly through the 4-mA source, as shown in Fig. 3.24b. Therefore, two of our three linearly independent equations are

$$I_1 = 2 \times 10^{-3}$$

$$I_2 = 4 \times 10^{-3}$$

The remaining loop current  $I_3$  must pass through the circuit elements not covered by the two previous equations and cannot, of course, pass through the current sources. The path for this remaining loop current can be obtained by open-circuiting the current sources, as shown in Fig. 3.24c. When all currents are labeled on the original circuit, the KVL equation for this last loop, as shown in Fig. 3.24d, is

$$-6 + 1kI_3 + 2k(I_2 + I_3) + 2k(I_3 + I_2 - I_1) + 1k(I_3 - I_1) = 0$$

Solving the equations yields

$$I_3 = \frac{-2}{3} \text{ mA}$$

and therefore,

$$I_o = I_1 - I_2 - I_3 = \frac{-4}{3} \text{ mA}$$

Next consider the supermesh technique. In this case the three mesh currents are specified as shown in Fig. 3.24e, and since the voltage across the 4-mA current source is unknown, it is assumed to be  $V_x$ . The mesh currents constrained by the current sources are

$$I_1 = 2 \times 10^{-3}$$

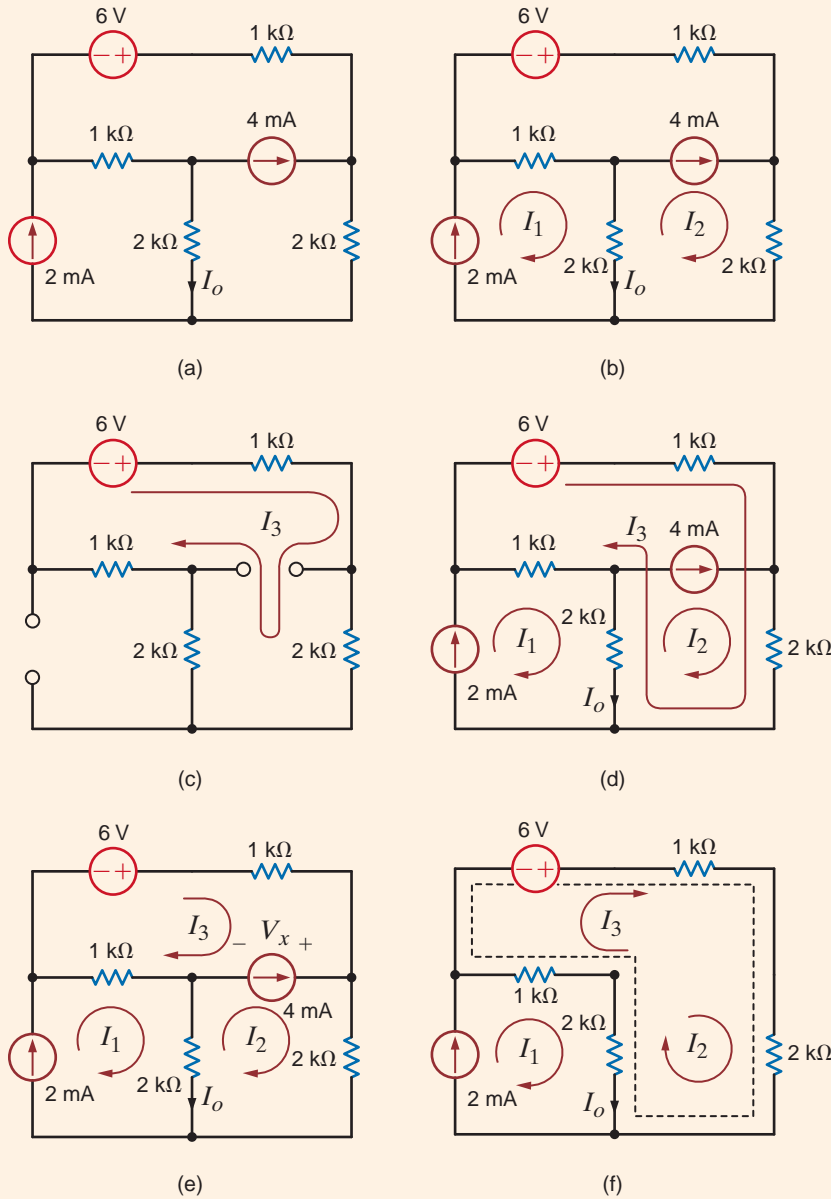
$$I_2 - I_3 = 4 \times 10^{-3}$$

The KVL equations for meshes 2 and 3, respectively, are

$$2kI_2 + 2k(I_2 - I_1) - V_x = 0$$

$$-6 + 1kI_3 + V_x + 1k(I_3 - I_1) = 0$$





**Figure 3.24**  
Circuits used in  
Example 3.16.

Adding the last two equations yields

$$-6 + 1kI_3 + 2kI_2 + 2k(I_2 - I_1) + 1k(I_3 - I_1) = 0$$

Note that the unknown voltage  $V_x$  has been eliminated. The two constraint equations, together with this latter equation, yield the desired result.

The purpose of the supermesh approach is to avoid introducing the unknown voltage  $V_x$ . The supermesh is created by mentally removing the 4-mA current source, as shown in Fig. 3.24f. Then writing the KVL equation around the dotted path, which defines the supermesh, using the original mesh currents as shown in Fig. 3.24e, yields

$$-6 + 1kI_3 + 2kI_2 + 2k(I_2 - I_1) + 1k(I_3 - I_1) = 0$$

Note that this supermesh equation is the same as that obtained earlier by introducing the voltage  $V_x$ .

## Learning Assessments

**E3.15** Find  $V_o$  in the network in Fig. E3.15.

**ANSWER:**  $V_o = \frac{33}{5} \text{ V}$ .

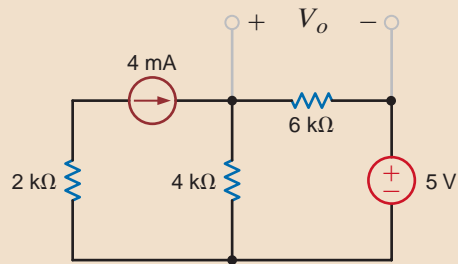


Figure E3.15

**E3.16** Find  $V_o$  in the network in Fig. E3.16.

**ANSWER:**  $V_o = \frac{32}{5} \text{ V}$ .

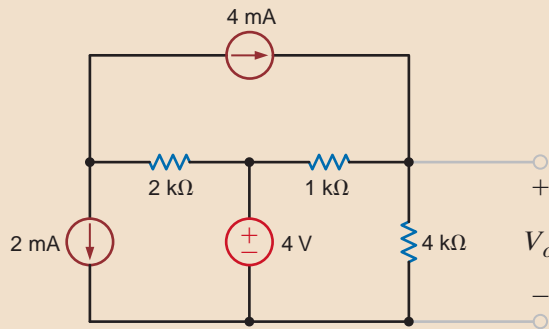


Figure E3.16

**E3.17** Find  $V_o$  in Fig. E3.17 using loop analysis.

**ANSWER:**  $V_o = 9.71 \text{ V}$ .

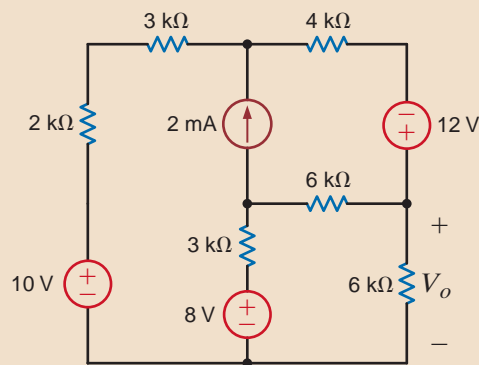


Figure E3.17

**E3.18** Find  $V_o$  in Fig. E3.17 using mesh analysis.

**ANSWER:**  $V_o = 9.71 \text{ V}$ .

**CIRCUITS CONTAINING DEPENDENT SOURCES** We deal with circuits containing dependent sources just as we have in the past. First, we treat the dependent source as though it were an independent source when writing the KVL equations. Then we write the controlling equation for the dependent source. The following examples illustrate the point.

Let us find  $V_o$  in the circuit in Fig. 3.25, which contains a voltage-controlled voltage source.

**EXAMPLE**  
**SOLUTION 3.17**

The equations for the loop currents shown in the figure are

$$\begin{aligned} -2V_x + 2k(I_1 + I_2) + 4kI_1 &= 0 \\ -2V_x + 2k(I_1 + I_2) - 3 + 6kI_2 &= 0 \end{aligned}$$

where

$$V_x = 4kI_1$$

These equations can be combined to produce

$$\begin{aligned} -2kI_1 + 2kI_2 &= 0 \\ -6kI_1 + 8kI_2 &= 3 \end{aligned}$$

These equations can be placed in the form  $RI = V$ , where

$$R = \begin{bmatrix} -2000 & 2000 \\ -6000 & 8000 \end{bmatrix} \quad I = \begin{bmatrix} i_1 \\ i_2 \end{bmatrix} \quad V = \begin{bmatrix} 0 \\ 3 \end{bmatrix}$$

The solution is  $I = R^{-1}V$ , and this operation yields

$$\begin{aligned} i_1 &= 1.5 \text{ mA} \\ i_2 &= 1.5 \text{ mA} \end{aligned}$$

and therefore,

$$V_o = 6kI_2 = 9 \text{ V}$$

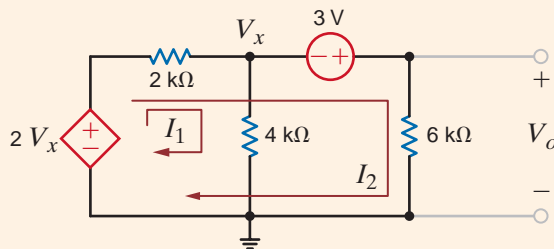
For comparison, we will also solve the problem using nodal analysis. The presence of the voltage sources indicates that this method could be simpler. Treating the 3-V source and its connecting nodes as a supernode and writing the KCL equation for this supernode yields

$$\frac{V_x - 2V_x}{2k} + \frac{V_x}{4k} + \frac{V_x + 3}{6k} = 0$$

where

$$V_o = V_x + 3$$

These equations also yield  $V_o = 9 \text{ V}$ .



**Figure 3.25**  
Circuit used in  
Example 3.17.

**EXAMPLE**

**3.18 SOLUTION**

Let us find  $V_o$  in the circuit in Fig. 3.26, which contains a voltage-controlled current source.

The currents  $I_1$  and  $I_2$  are drawn through the current sources. Therefore, two of the equations needed are

$$I_1 = \frac{V_x}{2000}$$

$$I_2 = 2 \times 10^{-3}$$

The KVL equation for the third mesh is

$$-3 + 2k(I_3 - I_1) + 6kI_3 = 0$$

where

$$V_x = 4k(I_1 - I_2)$$

Combining these equations yields

$$-I_1 + 2I_2 = 0$$

$$I_2 = 2/k$$

$$-2kI_2 + 8kI_3 = 3$$

The equations can be expressed in matrix form as  $IR = V$ , where

$$R = \begin{bmatrix} -1 & 2 & 0 \\ 0 & 1 & 0 \\ -2000 & 0 & 8000 \end{bmatrix} \quad I = \begin{bmatrix} i_1 \\ i_2 \\ i_3 \end{bmatrix} \quad \text{and } V = \begin{bmatrix} 0 \\ 0.002 \\ 3 \end{bmatrix}$$

Performing the operation  $I = R^{-1}V$ , produces the currents

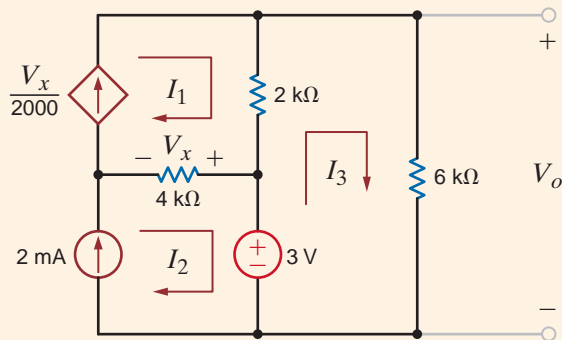
$$i_1 = 4.0 \text{ mA}$$

$$i_2 = 2.0 \text{ mA}$$

$$i_3 = 1.375 \text{ mA}$$

And hence,  $V_o = 8.25 \text{ V}$ .

**Figure 3.26**  
Circuit used in Example 3.18.



**EXAMPLE**

**3.19 SOLUTION**

The network in Fig. 3.27 contains both a current-controlled voltage source and a voltage-controlled current source. Let us use MATLAB to determine the loop currents.

The equations for the loop currents shown in the figure are

$$I_1 = \frac{4}{k}$$

$$I_2 = \frac{V_x}{2k}$$

$$-1kI_x + 2k(I_3 - I_1) + 1k(I_3 - I_4) = 0$$

$$1k(I_4 - I_3) + 1k(I_4 - I_2) + 12 = 0$$

where

$$\begin{aligned} V_x &= 2k(I_3 - I_1) \\ I_x &= I_4 - I_2 \end{aligned}$$

Combining these equations yields

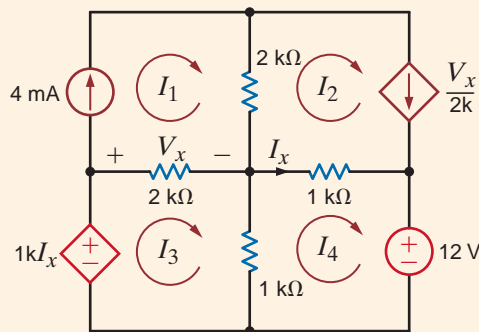
$$\begin{aligned} I_1 &= \frac{4}{k} \\ I_1 + I_2 - I_3 &= 0 \\ 1kI_2 + 3kI_3 - 2kI_4 &= 8 \\ 1kI_2 + 1kI_3 - 2kI_4 &= 12 \end{aligned}$$

In matrix form the equations are

$$\begin{bmatrix} 1 & 0 & 0 & 0 \\ 1 & 1 & -1 & 0 \\ 0 & 1k & 3k & -2k \\ 0 & 1k & 1k & -2k \end{bmatrix} \begin{bmatrix} I_1 \\ I_2 \\ I_3 \\ I_4 \end{bmatrix} = \begin{bmatrix} \frac{4}{k} \\ 0 \\ 8 \\ 12 \end{bmatrix}$$

The equations are in the form  $RI = V$ , and the solution to  $I = R^{-1}V$  is

$$\begin{aligned} i_1 &= 4.0 \text{ mA} \\ i_2 &= 6.0 \text{ mA} \\ i_3 &= -2.0 \text{ mA} \\ i_4 &= -1.0 \text{ mA} \end{aligned}$$



**Figure 3.27**  
Circuit used in  
Example 3.19.

At this point we will again examine the circuit in Example 3.10 and analyze it using loop equations. Recall that because the network has two voltage sources, the nodal analysis was somewhat simplified. In a similar manner, the presence of the current sources should simplify a loop analysis.

Clearly, the network has four loops, and thus four linearly independent equations are required to determine the loop currents. The network is redrawn in Fig. 3.28 where the loop currents are specified. Note that we have drawn one current through each of the independent current sources. This choice of currents simplifies the analysis since two of the four equations are

$$\begin{aligned} I_1 &= 2/k \\ I_3 &= -2/k \end{aligned}$$

## EXAMPLE 3.20

The two remaining KVL equations for loop currents  $I_2$  and  $I_4$  are

$$-2V_x + 1kI_2 + (I_2 - I_3)1k = 0$$

$$(I_4 + I_3 - I_1)1k - 2V_x + 1kI_4 + 4 = 0$$

where

$$V_x = 1k(I_1 - I_3 - I_4)$$

Substituting the equations for  $I_1$  and  $I_3$  into the two KVL equations yields

$$2kI_2 + 2kI_4 = 6$$

$$4kI_4 = 8$$

Solving these equations for  $I_2$  and  $I_4$ , we obtain

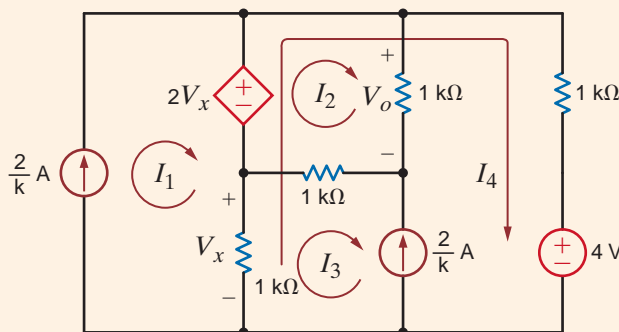
$$I_4 = 2 \text{ mA}$$

$$I_2 = 1 \text{ mA}$$

and thus

$$V_o = 1 \text{ V}$$

**Figure 3.28**  
Circuit used in  
Example 3.20.



### EXAMPLE 3.21

Let us once again consider Example 3.11. In this case we will examine the network using loop analysis. Although there are four sources, two of which are dependent, only one of them is a current source. Thus, from the outset we expect that a loop analysis will be more difficult than a nodal analysis. Clearly, the circuit contains six loops. Thus, six linearly independent equations are needed to solve for all the unknown currents.

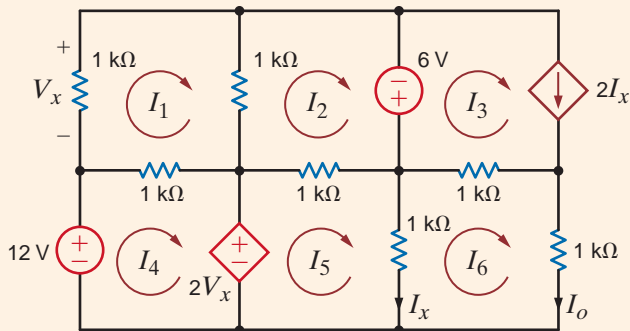
The network is redrawn in Fig. 3.29 where the loops are specified. The six KVL equations that describe the network are

$$1kI_1 + 1k(I_1 - I_2) + 1k(I_1 - I_4) = 0$$

$$1k(I_2 - I_1) - 6 + 1k(I_2 - I_5) = 0$$

$$I_3 = 2I_x$$

**Figure 3.29**  
Circuit used in  
Example 3.21.



$$\begin{aligned} -12 + 1k(I_4 - I_1) + 2V_x &= 0 \\ -2V_x + 1k(I_5 - I_2) + 1k(I_5 - I_o) &= 0 \\ 1k(I_o - I_5) + 1k(I_o - I_3) + 1kI_o &= 0 \end{aligned}$$

And the control variables for the two dependent sources are

$$\begin{aligned} V_x &= -1kI_1 \\ I_x &= I_5 - I_o \end{aligned}$$

Substituting the control parameters into the six KVL equations yields

$$\begin{aligned} 3I_1 - I_2 + 0 - I_4 + 0 + 0 &= 0 \\ -I_1 + 2I_2 + 0 + 0 - I_5 + 0 &= 6/k \\ 0 + 0 + I_3 + 0 - 2I_5 + 2I_o &= 0 \\ -3I_1 + 0 + 0 + I_4 + 0 + 0 &= 12/k \\ 2I_1 - I_2 + 0 + 0 + 2I_5 - I_o &= 0 \\ 0 + 0 + 0 + 0 - 3I_5 + 5I_o &= 0 \end{aligned}$$

which can be written in matrix form as

$$\begin{bmatrix} 3 & -1 & 0 & -1 & 0 & 0 \\ -1 & 2 & 0 & 0 & -1 & 0 \\ 0 & 0 & 1 & 0 & -2 & 2 \\ -3 & 0 & 0 & 1 & 0 & 0 \\ 2 & -1 & 0 & 0 & 2 & -1 \\ 0 & 0 & 0 & 0 & -3 & 5 \end{bmatrix} \begin{bmatrix} I_1 \\ I_2 \\ I_3 \\ I_4 \\ I_5 \\ I_o \end{bmatrix} = \begin{bmatrix} 0 \\ 6/k \\ 0 \\ 12/k \\ 0 \\ 0 \end{bmatrix}$$

The solution to the matrix equations  $RI = V$  is

$$\begin{aligned} i_1 &= 50.0 \text{ mA} \\ i_2 &= -12.0 \text{ mA} \\ i_3 &= -64.0 \text{ mA} \\ i_4 &= 162.0 \text{ mA} \\ i_5 &= -80.0 \text{ mA} \\ i_6 &= -48.0 \text{ mA} \end{aligned}$$

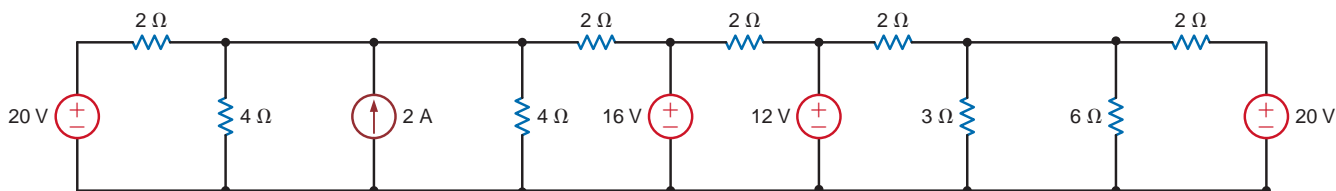
As a final point, it is very important to examine the circuit carefully before selecting an analysis approach. One method could be much simpler than another, and a little time invested up front may save a lot of time in the long run. For an  $N$ -node circuit,  $N - 1$  linearly independent equations must be formulated to solve for  $N - 1$  node voltages. An  $N$ -loop circuit requires the formulation of  $N$  linearly independent equations. One consideration in the selection of a method should be the number of linearly independent equations that must be formulated. The same circuit was solved in Example 3.10 using nodal analysis and in Example 3.20 using loop analysis. The circuit in Fig. 3.16 has four unknown node voltages. As a result, four linearly independent equations are required. Because there are two voltage sources, two constraint equations are needed. It was pointed out in Example 3.20 that this same circuit has four loops which requires four linearly independent equations. The two current sources produce two constraint equations.

The effort required to solve this circuit using either nodal or loop analysis is similar. However, this is not true for many circuits. Consider the circuit in Fig. 3.30. This circuit has eight loops. Selection of the loop currents such that only one loop current flows through the independent current source leaves us with seven unknown loop currents. Since this circuit has seven nodes, there are six node voltages, and we must formulate six linearly independent

equations. By judicious selection of the bottom node as the reference node, four of the node voltages are known, leaving just two unknown node voltages—the node voltage across the current source and the node voltage across the 3- $\Omega$  and 6- $\Omega$  resistors. Applying KCL at these two nodes yields two equations that can be solved for the two unknown node voltages. Even with the use of a modern calculator or a computer program such as MATLAB, the solution of two simultaneous equations requires less effort than the solution of the seven simultaneous equations that the loop analysis would require.

**Figure 3.30**

A circuit utilized in a discussion of the selection of an analysis technique.



## Problem-Solving Strategy

### Loop Analysis

**Step 1.** Determine the number of independent loops in the circuit. Assign a loop current to each independent loop. For an  $N$ -loop circuit, there are  $N$ -loop currents. As a result,  $N$  linearly independent equations must be written to solve for the loop currents.

If current sources are present in the circuit, either of two techniques can be employed. In the first case, one loop current is selected to pass through one of the current sources. The remaining loop currents are determined by open-circuiting the current sources in the circuit and using this modified circuit to select them. In the second case, a current is assigned to each mesh in the circuit.

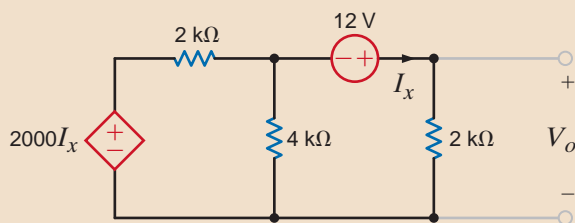
**Step 2.** Write a constraint equation for each current source—dependent or independent—in the circuit in terms of the assigned loop current using KCL. Each constraint equation represents one of the necessary linearly independent equations, and  $N_I$  current sources yield  $N_I$  linearly independent equations. For each dependent current source, express the controlling variable for that source in terms of the loop currents.

**Step 3.** Use KVL to formulate the remaining  $N - N_I$  linearly independent equations. Treat dependent voltage sources like independent voltage sources when formulating the KVL equations. For each dependent voltage source, express the controlling variable in terms of the loop currents.

## Learning Assessments

**E3.19** Use mesh analysis to find  $V_o$  in the circuit in Fig. E3.19.

**ANSWER:**  $V_o = 12\text{ V}$ .



**Figure E3.19**



**E3.20** Use loop analysis to solve the network in Example 3.5 and compare the time and effort involved in the two solution techniques.

**E3.21** Use nodal analysis to solve the circuit in Example 3.15 and compare the time and effort involved in the two solution strategies.

**E3.22** Find  $V_o$  in Fig. E3.22 using mesh analysis.

**ANSWER:**  $V_o = 6.97$  V.

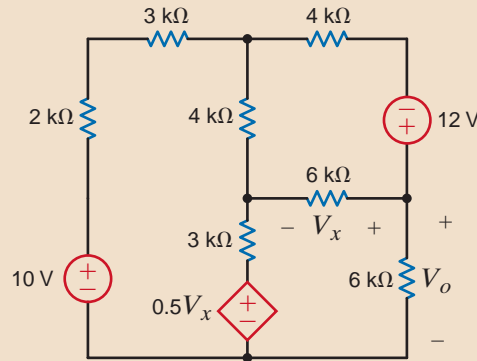


Figure E3.22

**E3.23** Find  $V_o$  in Fig. E3.23 using mesh analysis.

**ANSWER:**  $V_o = 9$  V.

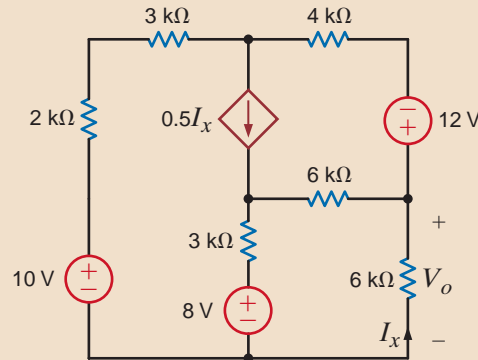


Figure E3.23

## 3.3

### Application Example

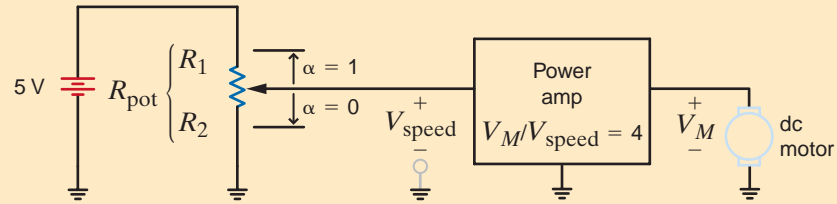
A conceptual circuit for manually setting the speed of a dc electric motor is shown in Fig. 3.31a. The resistors  $R_1$  and  $R_2$  are inside a component called a potentiometer, or pot, which is nothing more than an adjustable resistor, for example, a volume control. Turning the knob changes the ratio  $\alpha = R_2/(R_1 + R_2)$ , but the total resistance,  $R_{\text{pot}} = R_1 + R_2$ , is

### APPLICATION EXAMPLE 3.22

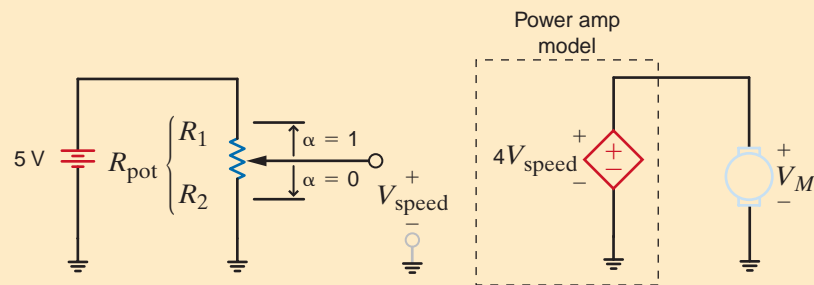
unchanged. In this way the pot forms a voltage divider that sets the voltage  $V_{\text{speed}}$ . The power amplifier output,  $V_M$ , is four times  $V_{\text{speed}}$ . Power amplifiers can output the high currents needed to drive the motor. Finally, the dc motor speed is proportional to  $V_M$ ; that is, the speed in rpm is some constant  $k$  times  $V$ . Without knowing the details of the power amplifier, can we analyze this system? In particular, can we develop a relationship between rpm and  $\alpha$ ?

**Figure 3.31**

(a) A simple dc motor driver and (b) the circuit model used to analyze it.



(a)



(b)

**SOLUTION**

Since the power amplifier output voltage is proportional to its input, we can model the amplifier as a simple dependent source. The resulting circuit diagram is shown in Fig. 3.31b. Now we can easily develop a relationship between motor speed and the pot position,  $\alpha$ . The equations that govern the operation of the motor, power amplifier, and the voltage divider are

$$\begin{aligned} \text{speed (rpm)} &= K_M V_M \\ V_M &= 4V_{\text{speed}} \\ V_{\text{speed}} &= 5 \frac{R_2}{R_1 + R_2} = 5 \left[ \frac{R_2}{R_{\text{pot}}} \right] = 5\alpha \\ R_2 &= \alpha R_{\text{pot}} \quad R_1 = (1 - \alpha) R_{\text{pot}} \end{aligned}$$

Combining these relationships to eliminate  $V_{\text{speed}}$  yields a relationship between motor speed and  $\alpha$ , that is,  $\text{rpm} = 20\alpha$ . If, for example, the motor constant  $K_M$  is 50 rpm/V, then

$$\text{rpm} = 1000\alpha$$

This relationship specifies that the motor speed is proportional to the pot knob position. Since the maximum value of  $\alpha$  is 1, the motor speed ranges from 0 to 1000 rpm.

Note that in our model, the power amplifier, modeled by the dependent source, can deliver *any* current the motor requires. Of course, this is not possible, but it does demonstrate some of the tradeoffs we experience in modeling. By choosing a simple model, we were able to develop the required relationship quickly. However, other characteristics of an actual power amplifier have been omitted in this model.

## 3.4

## Design Example

An 8-V source is to be used in conjunction with two standard resistors to design a voltage divider that will output 5 V when connected to a 100- $\mu$ A load. While keeping the consumed power as low as possible, we wish to minimize the error between the actual output and the required 5 volts.

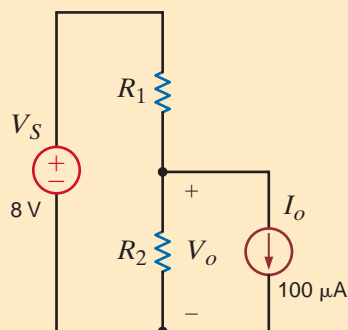
The divider can be modeled as shown in Fig. 3.32. Applying KCL at the output node yields the equation

$$\frac{V_S - V_o}{R_1} = \frac{V_o}{R_2} + I_o$$

Using the specified parameters for the input voltage, desired output voltage, and the current source, we obtain

$$R_1 = \frac{3R_2}{5 + (100\mu)R_2}$$

By trial and error, we find that excellent values for the two standard resistors are  $R_1 = 10 \text{ k}\Omega$  and  $R_2 = 27 \text{ k}\Omega$ . Large resistor values are used to minimize power consumption. With this selection of resistors the output voltage is 5.11 V, which is a percent error of only 2.15%.

**DESIGN  
EXAMPLE 3.23****SOLUTION****Figure 3.32**

A simple voltage-divider circuit with a 100- $\mu$ A load.

**SUMMARY****Nodal Analysis for an  $N$ -node Circuit**

- Determine the number of nodes in the circuit. Select one node as the reference node. Assign a node voltage between each nonreference node and the reference node. All node voltages are assumed positive with respect to the reference node. For an  $N$ -node circuit, there are  $N - 1$  node voltages. As a result,  $N - 1$  linearly independent equations must be written to solve for the node voltages.
- Write a constraint equation for each voltage source— independent or dependent—in the circuit in terms of the assigned node voltages using KVL. Each constraint equation represents one of the necessary linearly independent equations, and  $N_v$  voltage sources yield  $N_v$  linearly independent equations. For each dependent voltage source, express the controlling variable for that source in terms of the node voltages.
- A voltage source— independent or dependent—may be connected between a nonreference node and the reference node or between two nonreference nodes. A supernode is formed by a voltage source and its two connecting nonreference nodes.
- Use KCL to formulate the remaining  $N - 1 - N_v$  linearly independent equations. First, apply KCL at each nonreference node not connected to a voltage source. Second, apply KCL at each supernode. Treat dependent current sources like independent current sources when formulating the KCL equations. For each dependent current source, express the controlling variable in terms of the node voltages.

**Loop Analysis for an  $N$ -loop Circuit**

- Determine the number of independent loops in the circuit. Assign a loop current to each independent loop. For an  $N$ -loop circuit, there are  $N$ -loop currents. As a result,

$N$  linearly independent equations must be written to solve for the loop currents.

- If current sources are present in the circuit, either of two techniques can be employed. In the first case, one loop current is selected to pass through one of the current sources. The remaining loop currents are determined by open-circuiting the current sources in the circuit and using this modified circuit to select them. In the second case, a current is assigned to each mesh in the circuit.
- Write a constraint equation for each current source— independent or dependent—in the circuit in terms of the

assigned loop currents using KCL. Each constraint equation represents one of the necessary linearly independent equations, and  $N_I$  current sources yield  $N_I$  linearly independent equations. For each dependent current source, express the controlling variable for that source in terms of the loop currents.

- Use KVL to formulate the remaining  $N - N_I$  linearly independent equations. Treat dependent voltage sources like independent voltage sources when formulating the KVL equations. For each dependent voltage source, express the controlling variable in terms of the loop currents.

## PROBLEMS

3.1 Find  $I_1$  in the circuit in Fig. P3.1.

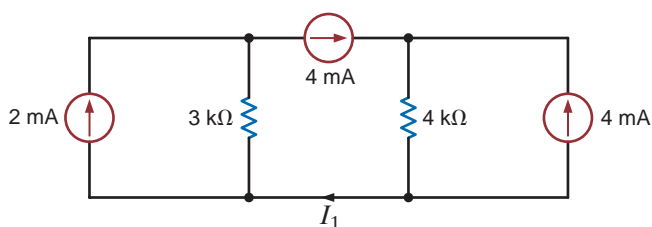


Figure P3.1

3.2 Find  $I_1$  in the network in Fig. P3.2.

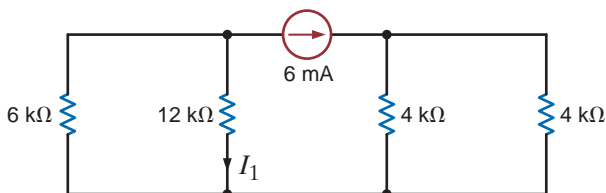


Figure P3.2

3.3 Find  $I_o$  in the circuit in Fig. P3.3.

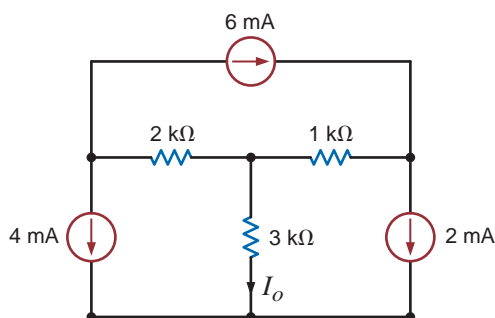


Figure P3.3

3.4 Use nodal analysis to find  $V_1$  in the circuit in Fig P3.4.

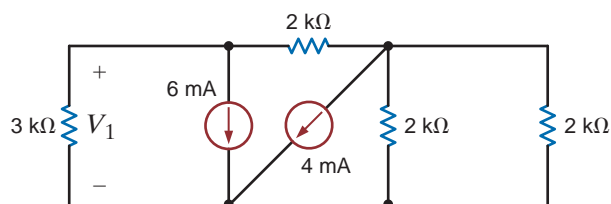


Figure P3.4

3.5 Find  $V_1$  and  $V_2$  in the circuit in Fig. P3.5 using nodal analysis.

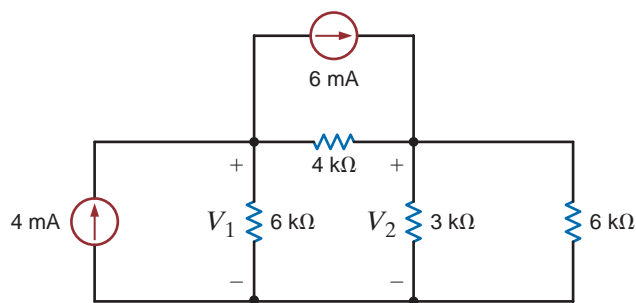


Figure P3.5

3.6 Use nodal analysis to find both  $V_1$  and  $V_o$  in the circuit in Fig 3.6.

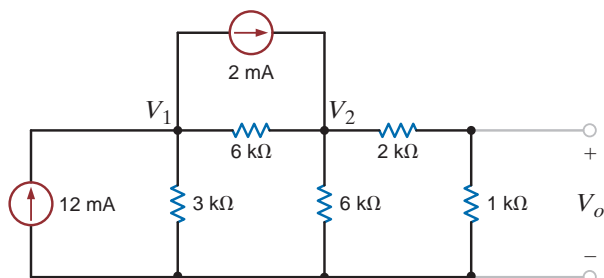


Figure P3.6

3.7 Find  $I_o$  in the circuit in Fig. P3.7 using nodal analysis.

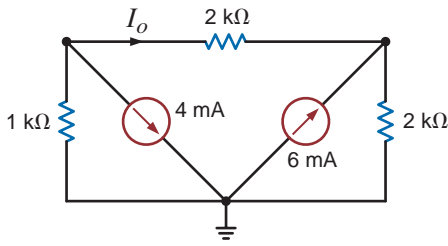


Figure P3.7

3.8 Find  $I_o$  in the network in Fig. P3.8 using nodal analysis.

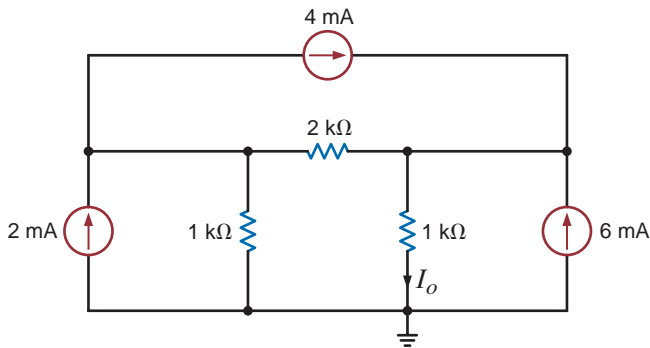


Figure P3.8

3.9 Find  $I_o$  in the circuit in Fig. P3.9.

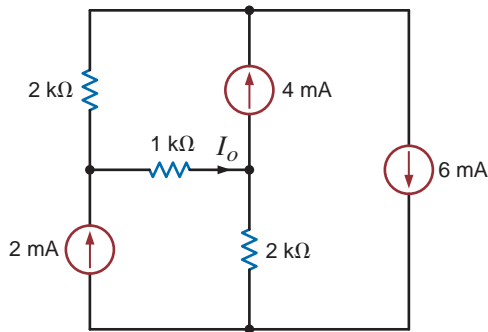


Figure P3.9

3.10 Find  $I_o$  in the circuit in Fig. P3.10 using nodal analysis.

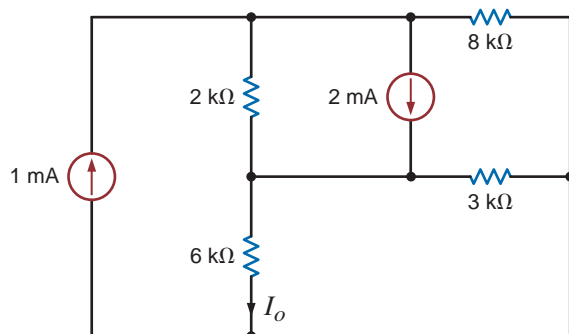


Figure P3.10

3.11 Use nodal analysis to find  $I_o$  in the network in Fig. P3.11.

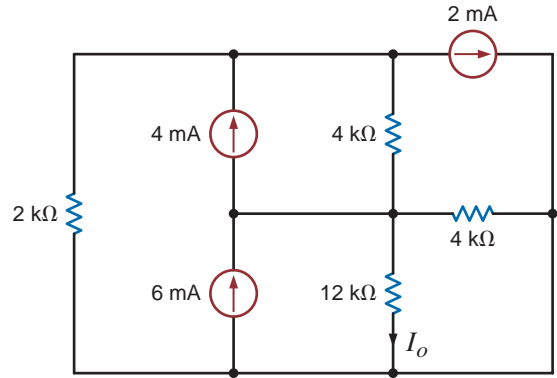


Figure P3.11

3.12 Find  $V_o$  in the network in Fig. P3.12 using nodal analysis.

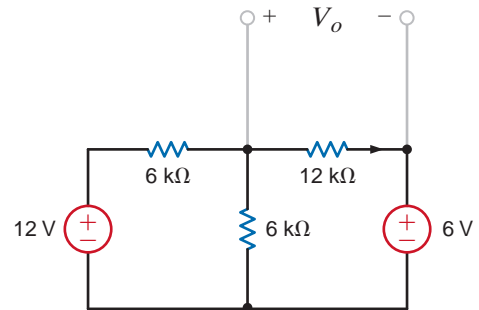


Figure P3.12

3.13 Find  $V_o$  in the circuit in Fig. P3.13 using nodal analysis.

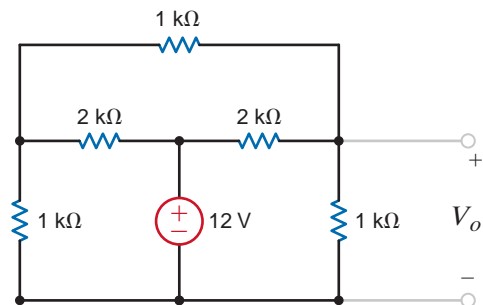


Figure P3.13

3.14 Use nodal analysis to find  $V_o$  in the circuit in Fig. P3.14.

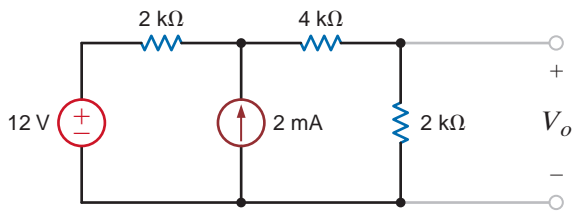


Figure P3.14

3.18 Find  $V_o$  in the circuit in Fig. P3.18 using nodal analysis.

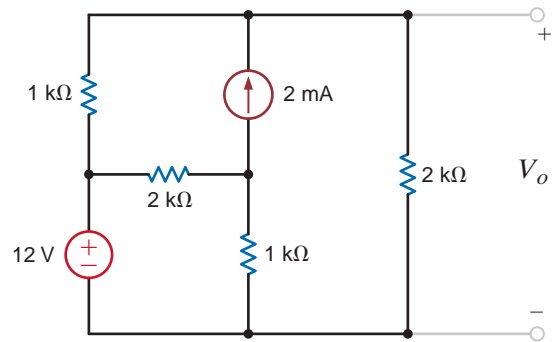


Figure P3.18

3.15 Find  $I_o$  in the network in Fig. P3.15 using nodal analysis.

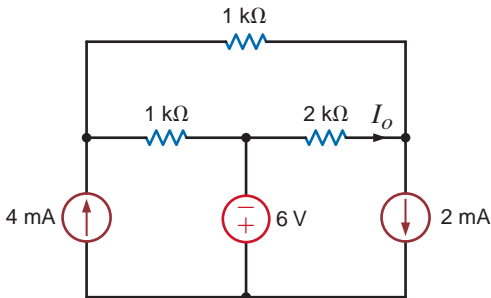


Figure P3.15

3.19 Find  $I_o$  in the circuit in Fig. P3.19 using nodal analysis.

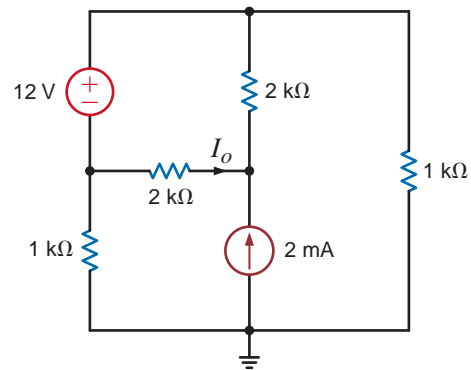


Figure P3.19

3.16 Find  $I_o$  in the circuit in Fig. P3.16 using nodal analysis.

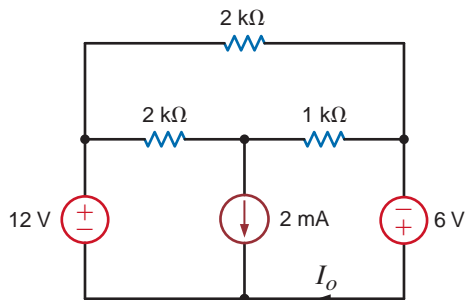


Figure P3.16

3.20 Find  $V_o$  in the network in Fig. P3.20 using nodal analysis.

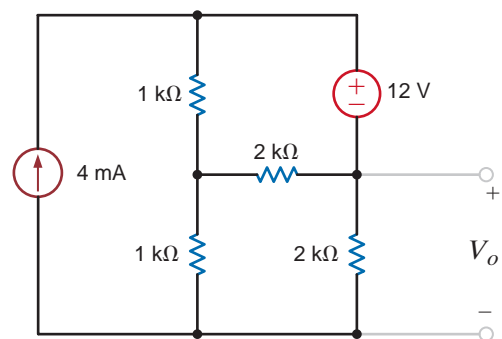


Figure P3.20

3.17 Find  $V_o$  in the circuit in Fig. P3.17 using nodal analysis.

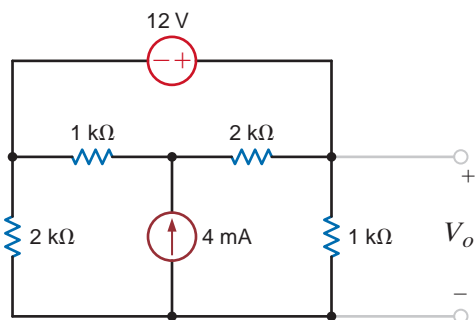


Figure P3.17



3.21 Find  $V_o$  in the circuit in Fig. P3.21 using nodal analysis.

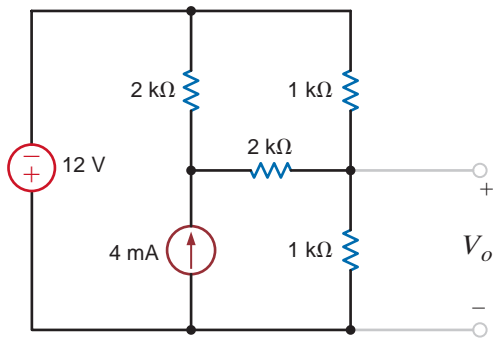


Figure P3.21

3.24 Find  $I_o$  in the circuit in Fig. P3.24 using nodal analysis.

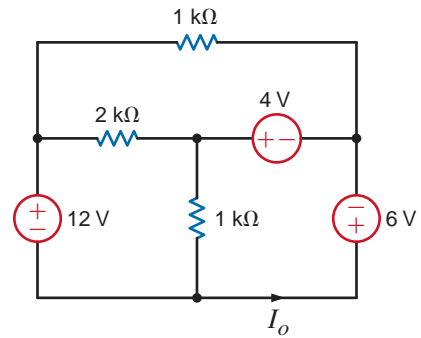


Figure P3.24

3.22 Find  $V_o$  in the network in Fig. P3.22 using nodal analysis.

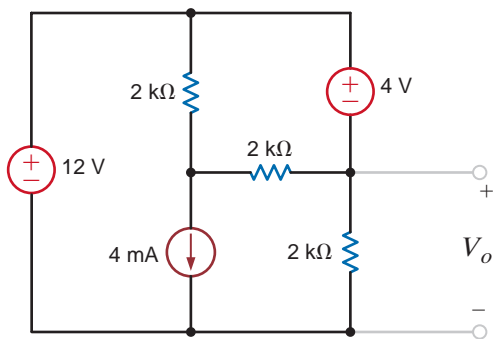


Figure P3.22

3.25 Use nodal analysis to solve for the node voltages in the circuit in Fig. P3.25. Also calculate the power supplied by the 2-mA current source.

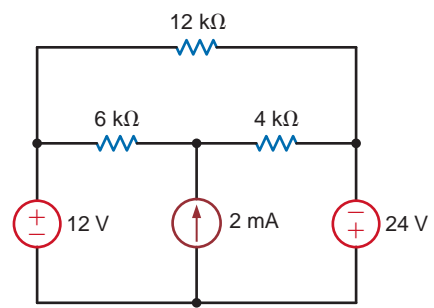


Figure P3.25

3.23 Find  $I_o$  in the circuit in Fig. P3.23 using nodal analysis.

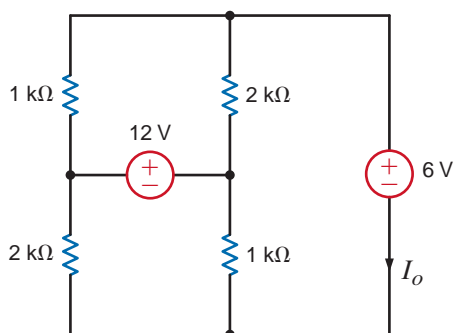


Figure P3.23

3.26 Use nodal analysis to determine the node voltages defined in the circuit in Fig. P3.26.

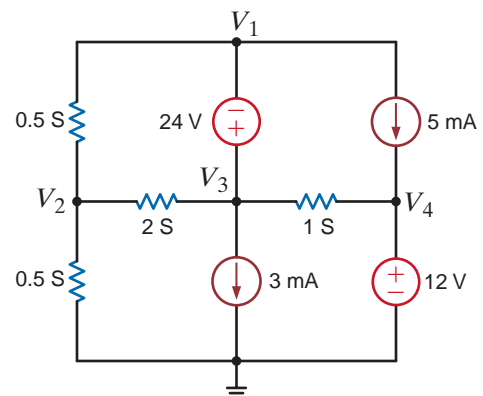


Figure P3.26

**3.27** Use nodal analysis to solve for the node voltages in the circuit in Fig. P3.27. Also calculate the power supplied by the 2-mA current source.

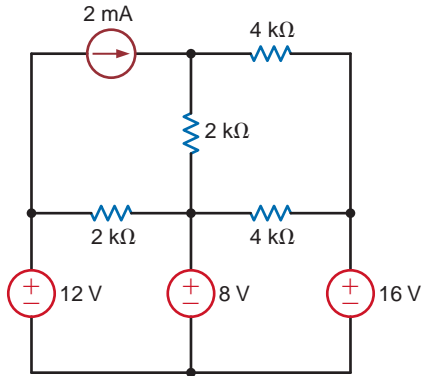


Figure P3.27

**3.28** Use nodal analysis to find  $V_o$  in the network in Fig. P3.28.

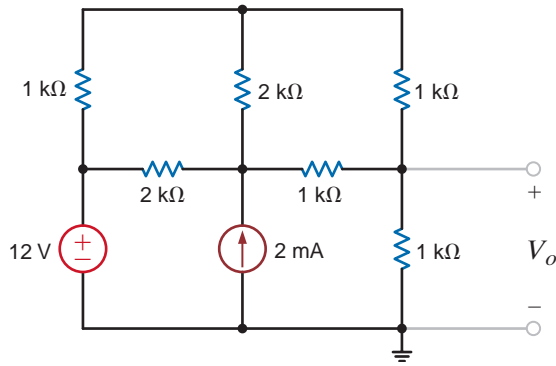


Figure P3.28

**3.29** Use nodal analysis to find  $V_o$  in the circuit in Fig. P3.29.

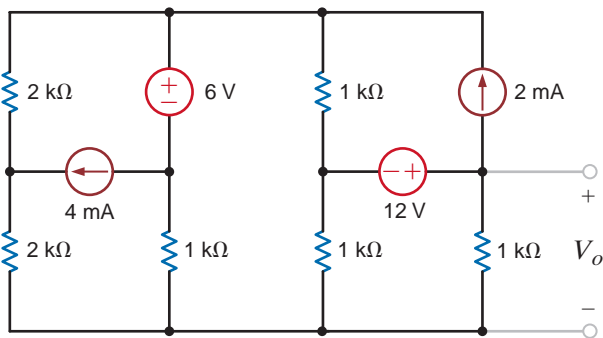


Figure P3.29

**3.30** Use nodal analysis to find  $V_o$  in the circuit in Fig. P3.30.

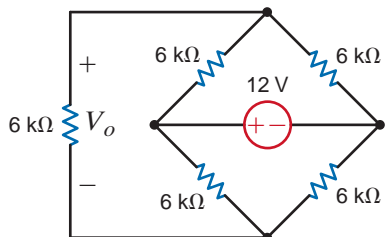


Figure P3.30

**3.31** Find  $V_o$  in the network in Fig. P3.31.

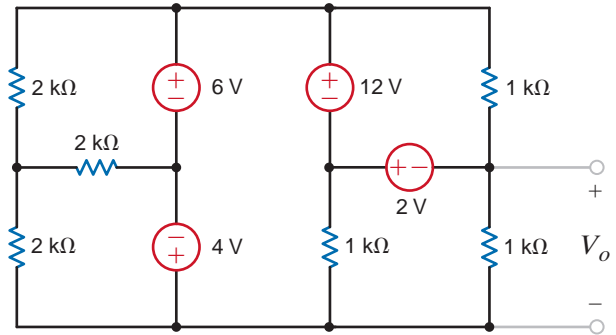


Figure P3.31

**3.32** Find  $I_o$  in the network in Fig. P3.32 using nodal analysis.

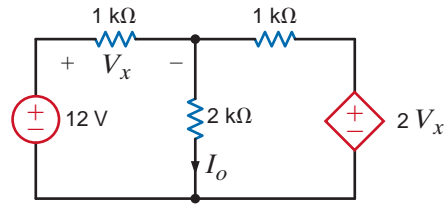


Figure P3.32

**3.33** Find  $I_o$  in the network in Fig. P3.33 using nodal analysis.

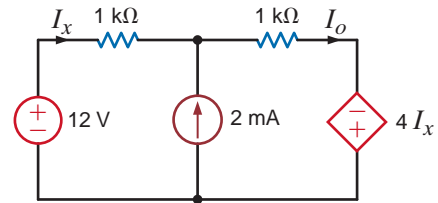


Figure P3.33

**3.34** Find  $V_o$  in the network in Fig. P3.34 using nodal analysis.

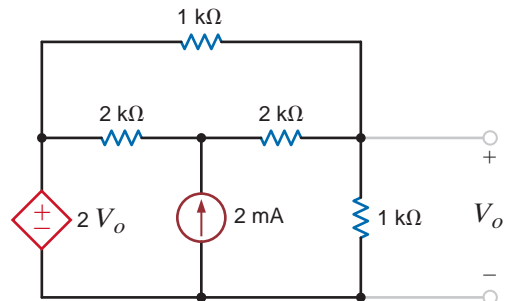


Figure P3.34



**3.35** Find  $V_o$  in the circuit in Fig. P3.35 using nodal analysis.

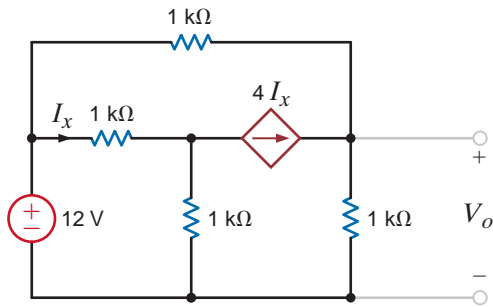


Figure P3.35

**3.36** Find  $V_o$  in the network in Fig. P3.36 using nodal analysis.

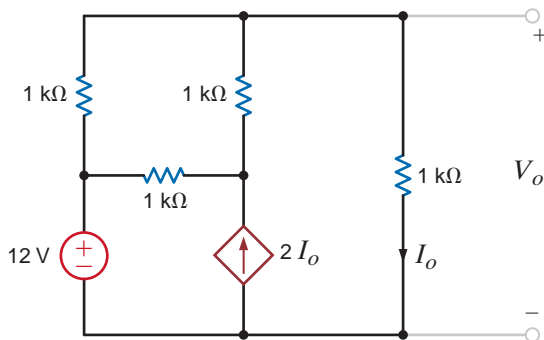


Figure P3.36

**3.37** Find  $I_o$  in the network in Fig. P3.37 using nodal analysis.

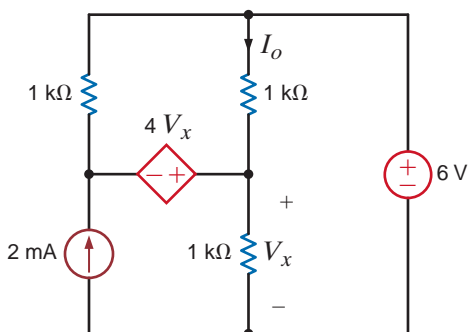


Figure P3.37

**3.38** Find  $I_o$  in the network in Fig. P3.38 using nodal analysis.

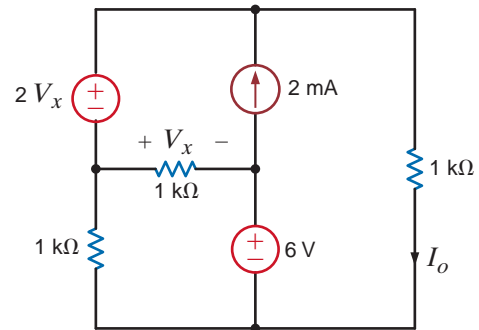


Figure P3.38

**3.39** Find  $V_o$  in the network in Fig. P3.39 using nodal analysis.

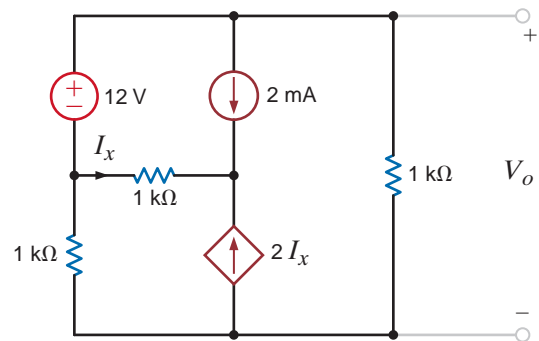


Figure P3.39

**3.40** Use nodal analysis to find  $V_o$  in the circuit in Fig. P3.40.

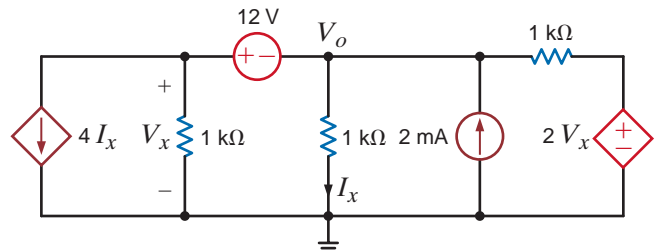


Figure P3.40

**3.41** Use nodal analysis to find  $V_o$  in the circuit in Fig. P3.41.

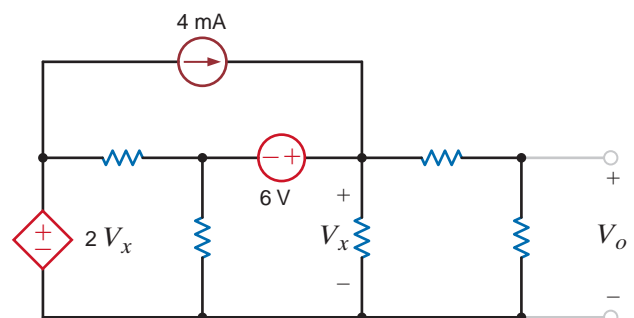


Figure P3.41

**3.42** Use nodal analysis to find  $V_o$  in the network in Fig. P3.42.

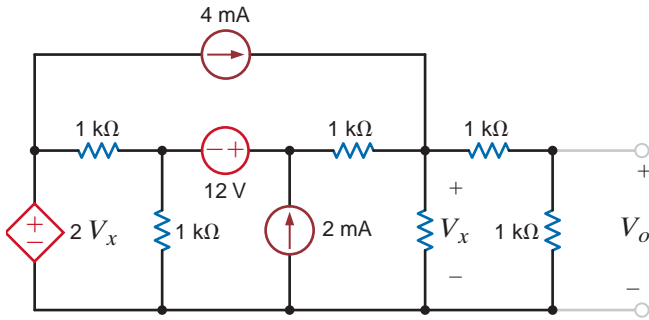


Figure P3.42

**3.45** Find  $I_o$  in the circuit in Fig. P3.45 using nodal analysis.

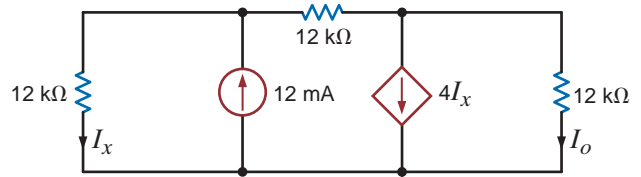


Figure P3.45

**3.46** Find  $V_o$  in the circuit in Fig. P3.46.

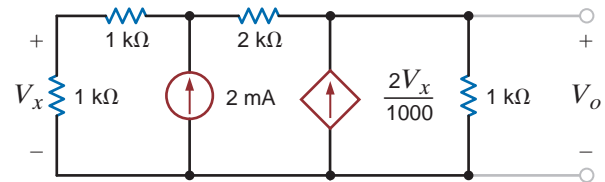


Figure P3.46

**3.43** Use nodal analysis to find  $V_o$  in the circuit in Fig. P3.43.

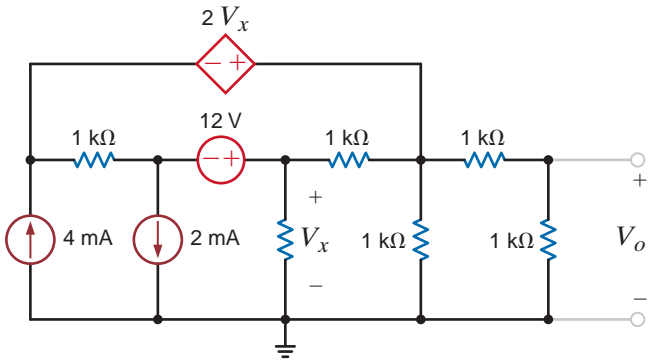


Figure P3.43

**3.47** Use nodal analysis to find  $V_o$  in the circuit in Fig. P3.47. In addition, find all branch currents and check your answers using KCL at every node.

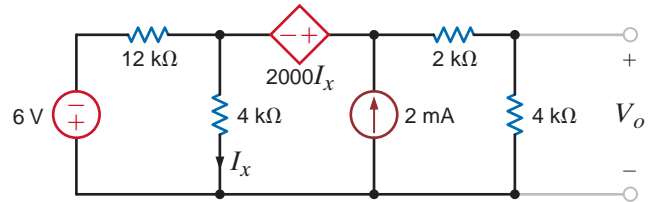


Figure P3.47

**3.44** Use nodal analysis to find  $I_o$  in the circuit in Fig. P3.44.

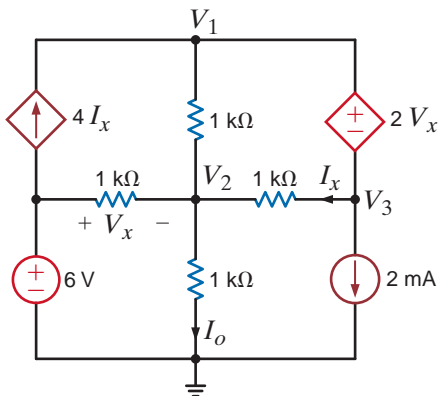


Figure P3.44

**3.48** Determine  $V_o$  in the network in Fig. P3.48 using nodal analysis.

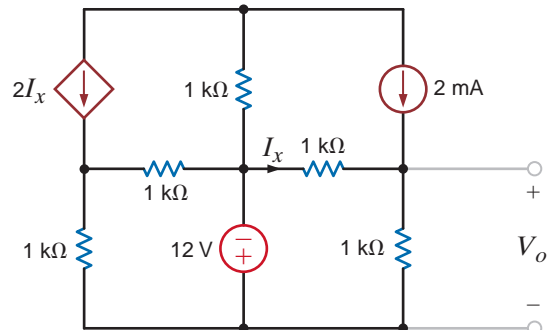


Figure P3.48

**3.49** Use nodal analysis to find  $V_1$ ,  $V_2$ ,  $V_3$ , and  $V_4$  in the circuit in Fig. P3.49.

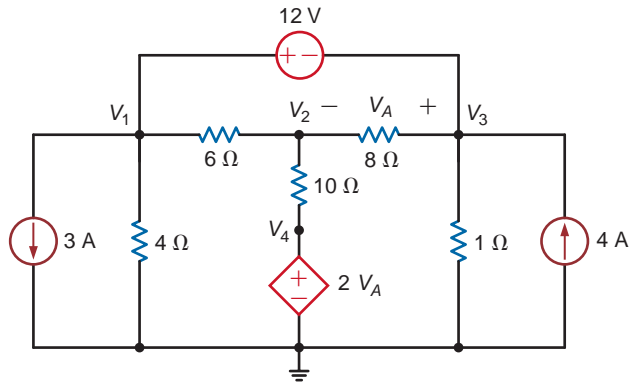


Figure P3.49

**3.52** Use nodal analysis to determine the node voltages defined in the circuit in Fig. P3.52.

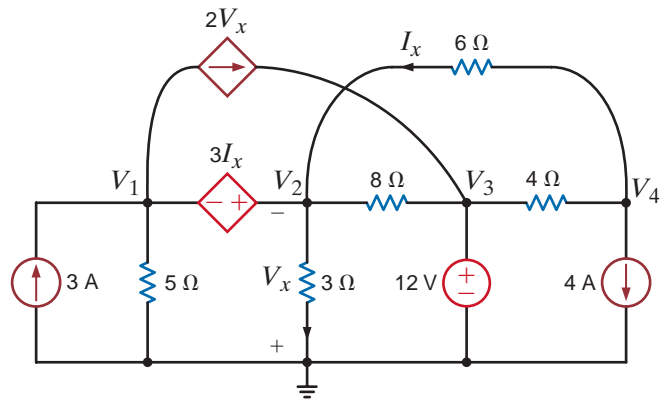


Figure P3.52

**3.50** Use nodal analysis to determine the node voltages defined in the circuit in Fig. P3.50.

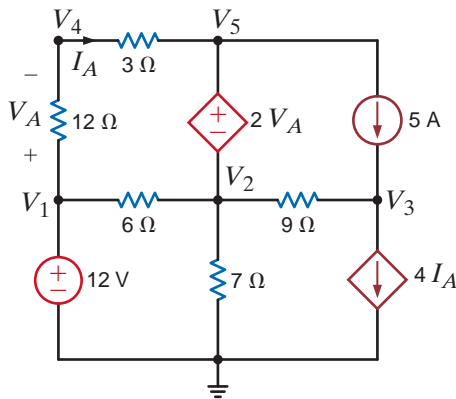


Figure P3.50

**3.53** Find  $I_o$  in the network in Fig. P3.53 using mesh analysis.

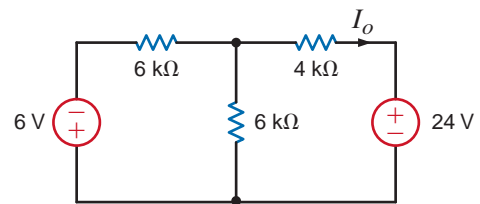


Figure P3.53

**3.51** Use nodal analysis to determine the node voltages defined in the circuit in Fig. P3.51.

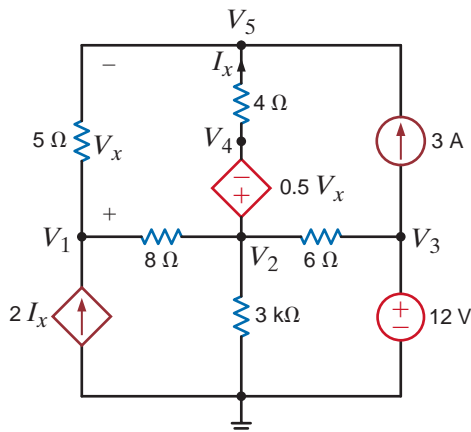


Figure P3.51

**3.54** Find  $I_o$  in the circuit in Fig. P3.54.

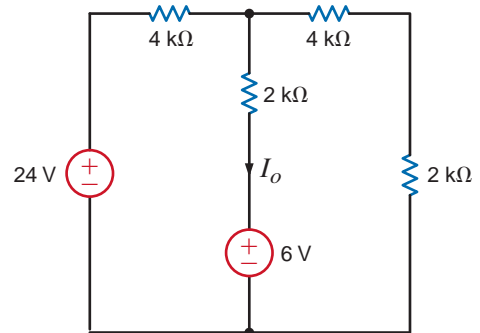


Figure P3.54

**3.55** Find  $V_o$  in the network in Fig. P3.55 using mesh analysis.

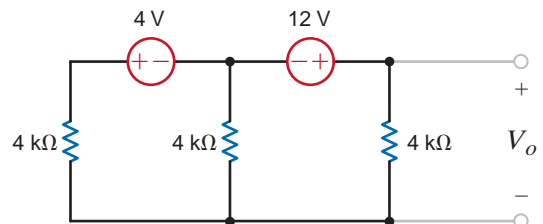


Figure P3.55

3.56 Find  $I_o$  in the circuit in Fig. P3.56.

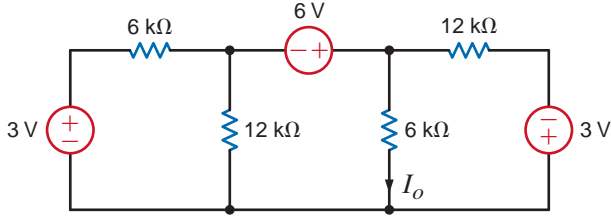


Figure P3.56

3.60 Use mesh analysis to find  $V_o$  in the network in Fig. P3.60.

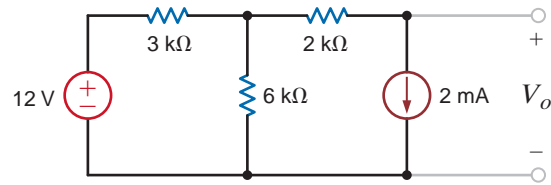


Figure P3.60

3.57 Use mesh analysis to find the power dissipated in the 6-kΩ resistor in Fig. P3.57.

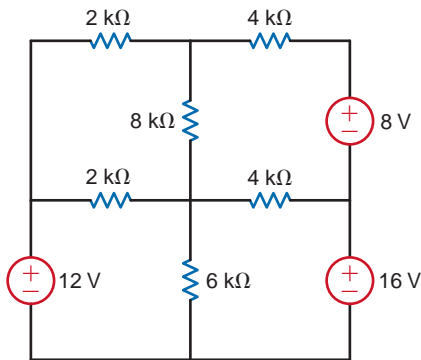


Figure P3.57

3.61 Find  $V_o$  in the network in Fig. P3.61 using loop analysis.

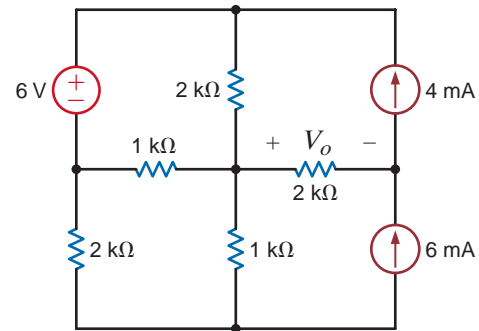


Figure P3.61

3.58 Find  $V_o$  in the circuit in Fig. P3.58 using mesh analysis.

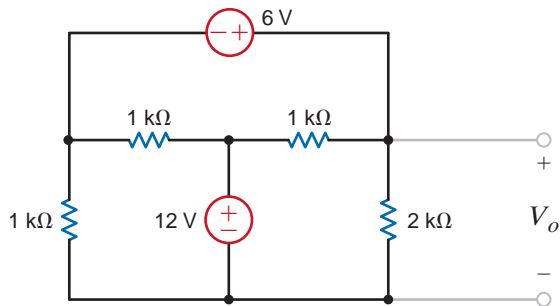


Figure P3.58

3.62 Find  $V_o$  in the circuit in Fig. P3.62 using loop analysis.

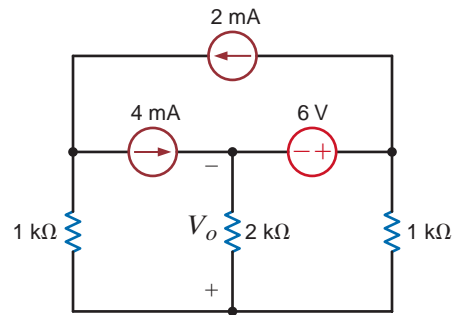


Figure P3.62

3.59 Use loop analysis to find  $V_o$  in the network in Fig. P3.59.

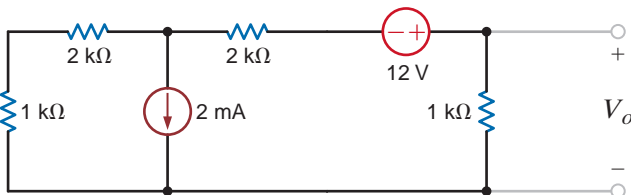


Figure P3.59

3.63 Find  $I_o$  in the circuit in Fig. P3.63 using loop analysis.

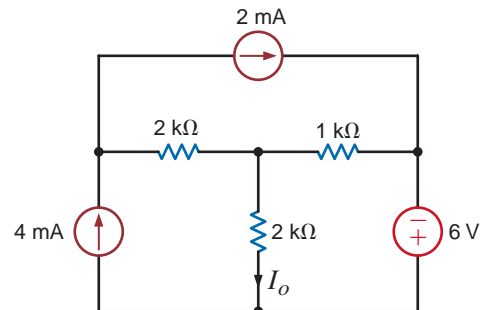


Figure P3.63

3.64 Find  $I_o$  in the network in Fig. P3.64 using loop analysis.

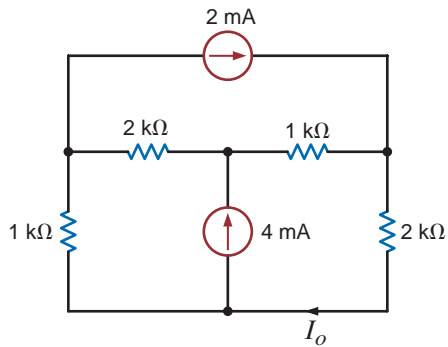


Figure P3.64

3.68 Find  $I_o$  in the network in Fig. P3.68 using loop analysis.

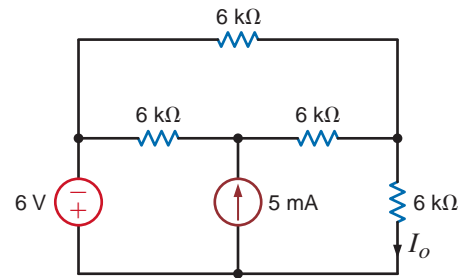


Figure P3.68

3.65 Find  $V_o$  in the network in Fig. P3.65 using loop analysis.

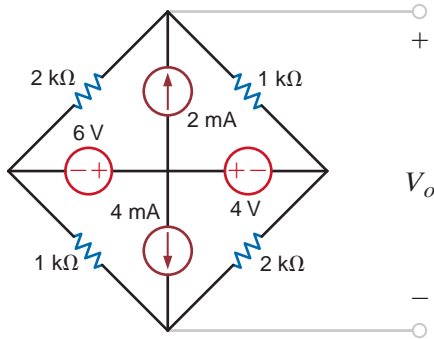


Figure P3.65

3.69 Use loop analysis to find  $V_o$  in the circuit in Fig. P3.69.

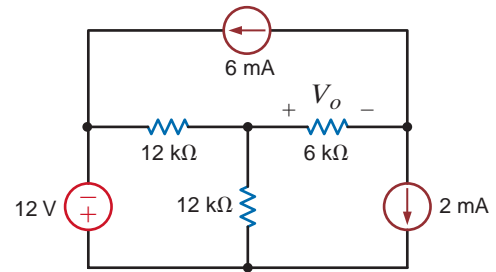


Figure P3.69

3.66 Find  $V_o$  in the circuit in Fig. P3.66 using loop analysis.

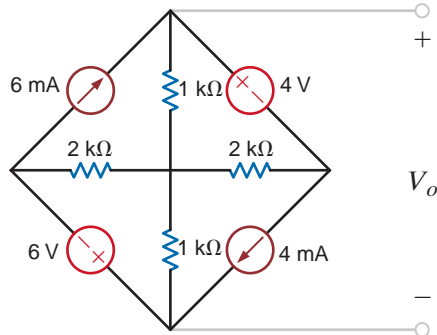


Figure P3.66

3.70 Using loop analysis, find  $V_o$  in the network in Fig. P3.70.

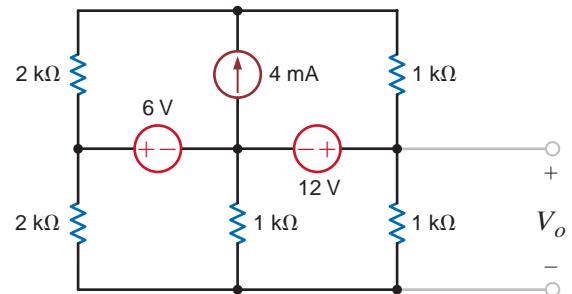


Figure P3.70

3.67 Find  $I_o$  in the network in Fig. P3.67 using loop analysis.

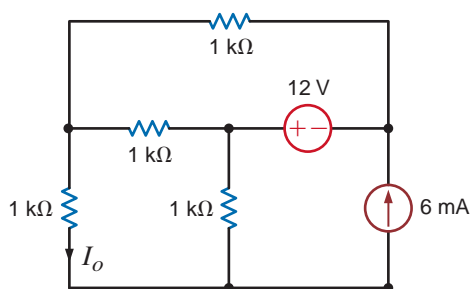


Figure P3.67

3.71 Find  $I_o$  in the circuit in Fig. P3.71.

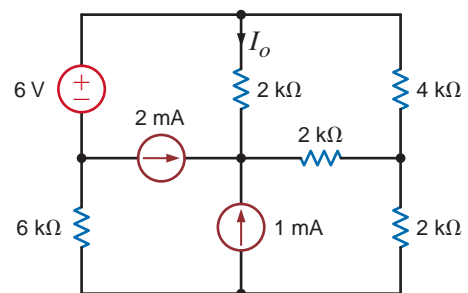


Figure P3.71

3.72 Use loop analysis to find  $I_o$  in the network in Fig. P3.72.

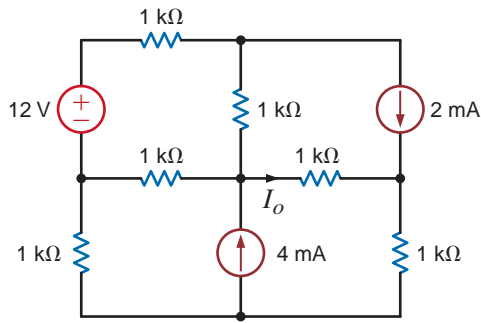


Figure P3.72

3.73 Find  $I_o$  in the circuit in Fig. P3.73 using loop analysis.

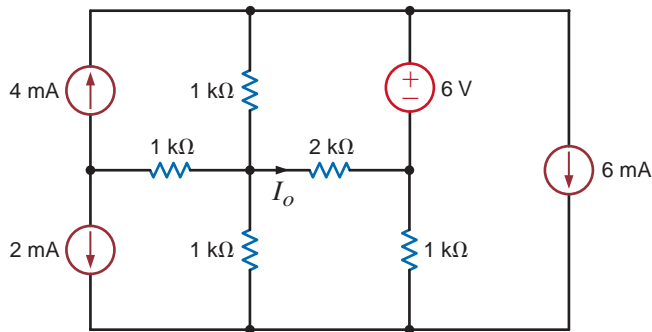


Figure P3.73

3.76 Using loop analysis, find  $I_o$  in the circuit in Fig. P3.76.

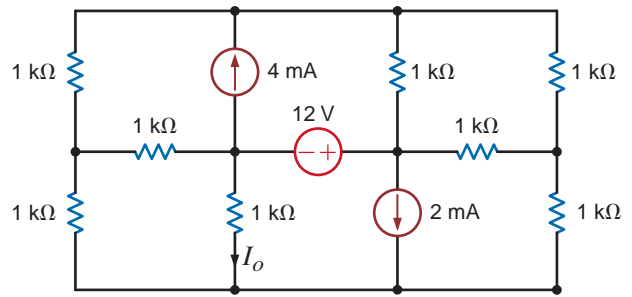


Figure P3.76

3.77 Find the mesh currents in the network in Fig. P3.77.

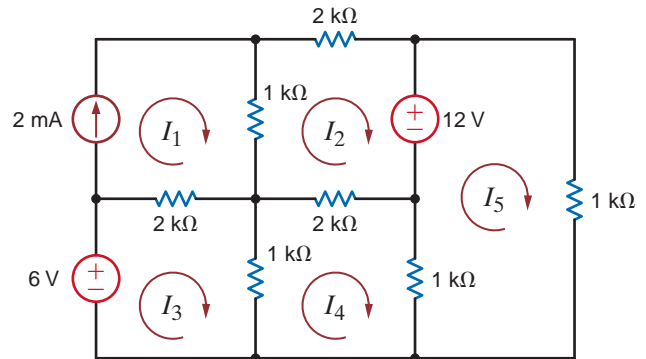


Figure P3.77

3.74 Find  $I_o$  in the network in Fig. P3.74 using loop analysis.

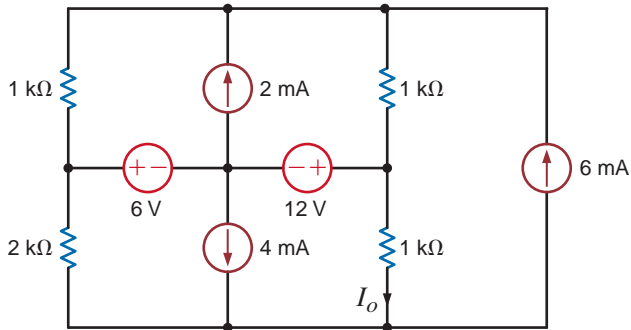


Figure P3.74

3.78 Use loop analysis to find  $V_o$  in the network in Fig. P3.78.

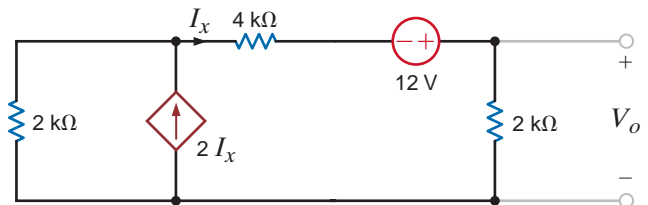


Figure P3.78

3.75 Find  $V_o$  in the circuit in Fig. P3.75 using loop analysis.

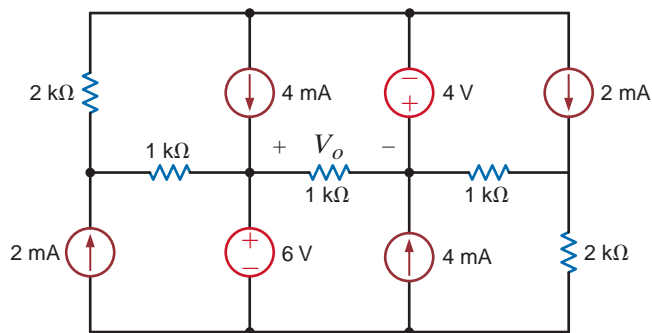


Figure P3.75

3.79 Find  $V_o$  in the circuit in Fig. P3.79 using nodal analysis.

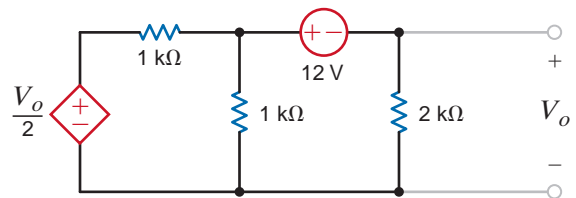


Figure P3.79

3.80 Use nodal analysis to find  $V_o$  in Fig. P3.80.

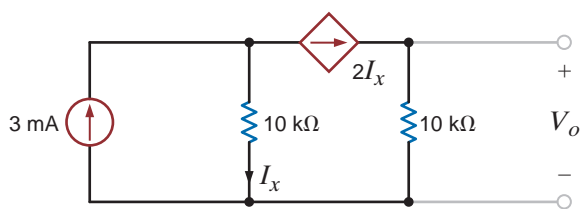


Figure P3.80

3.81 Find the power supplied by the 2-A current source in the network in Fig. P3.81 using loop analysis.

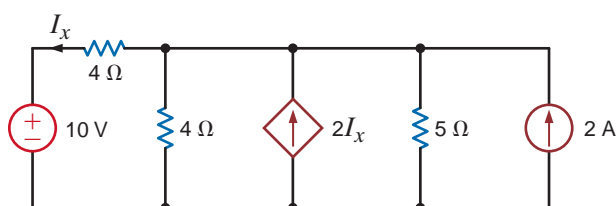


Figure P3.81

3.82 Find  $I_o$  in the network in Fig. P3.82.

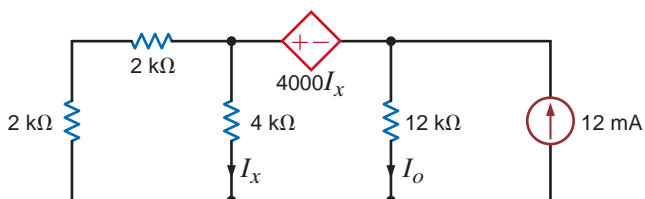


Figure P3.82

3.83 Find  $V_o$  in the circuit in Fig. P3.83 using loop analysis.

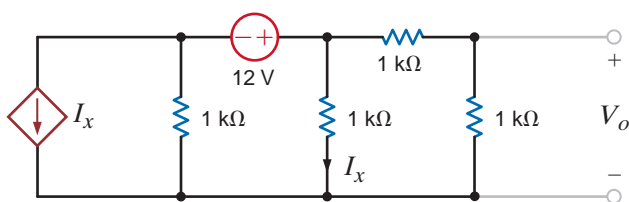


Figure P3.83

3.84 Find  $V_o$  in the network in Fig. P3.84 using nodal analysis.

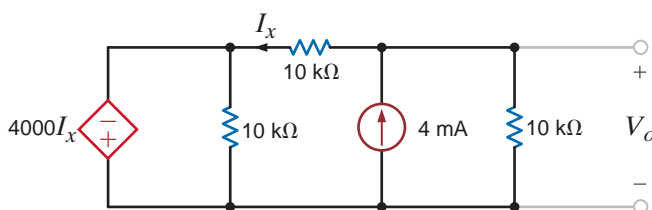


Figure P3.84

3.85 Find  $I_o$  in the circuit in Fig. P3.85 using loop analysis.

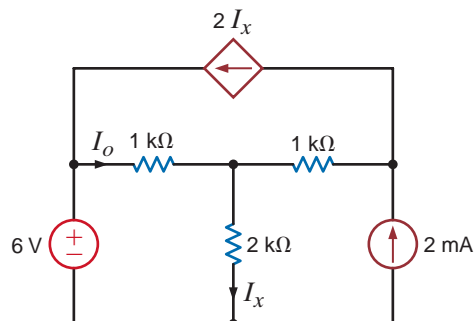


Figure P3.85

3.86. Use mesh analysis to find  $V_o$  in the circuit in Fig. P3.86.

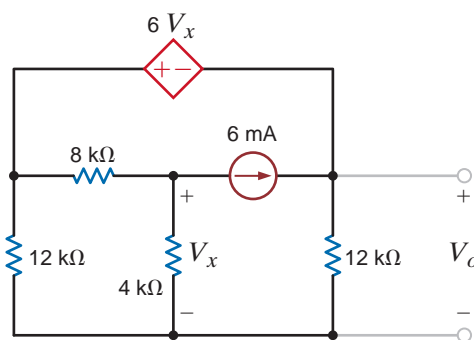


Figure P3.86

3.87 Using mesh analysis, find  $V_o$  in the circuit in Fig. P3.87.

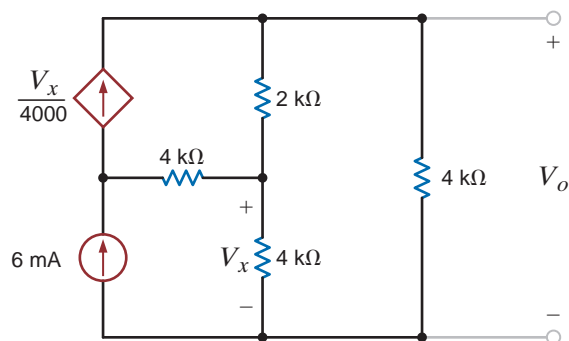


Figure P3.87

**3.88** Find  $V_o$  in the network in Fig. P3.88.

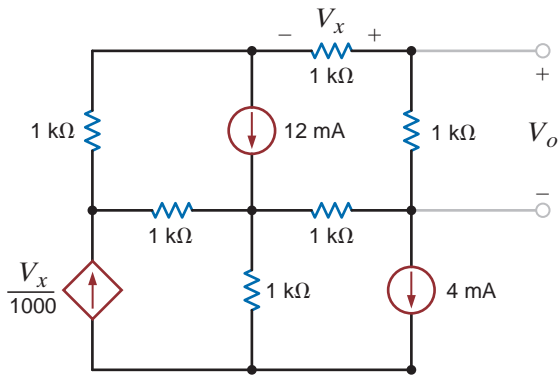


Figure P3.88

**3.92** Using loop analysis, find  $V_o$  in the circuit in Fig. P3.92.

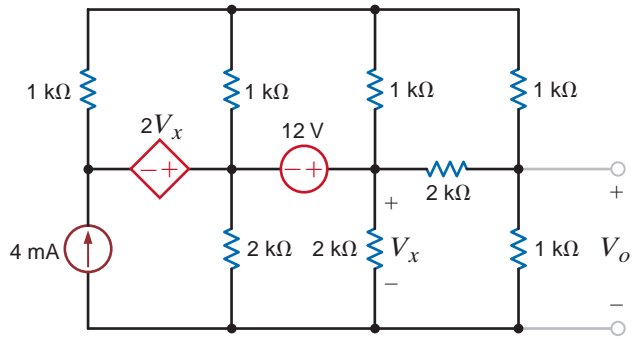


Figure P3.92

**3.89** Using loop analysis, find  $V_o$  in the circuit in Fig. P3.89.

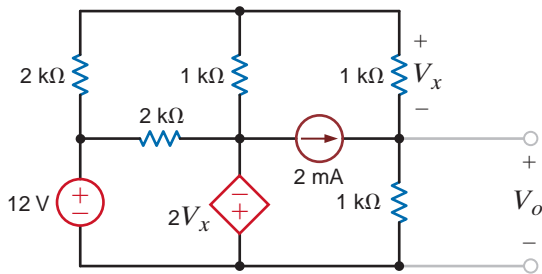


Figure P3.89

**3.93** Using loop analysis, find  $I_o$  in the network in Fig. P3.93.

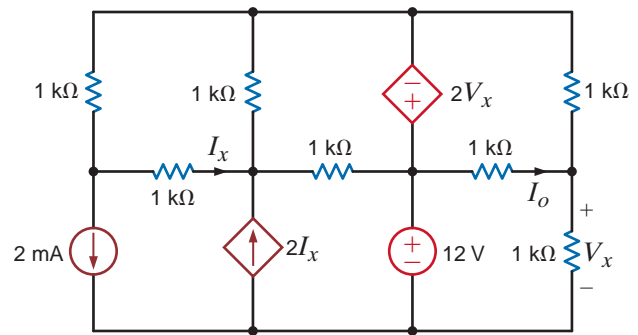


Figure P3.93

**3.90** Using loop analysis, find  $V_o$  in the circuit in Fig. P3.90.

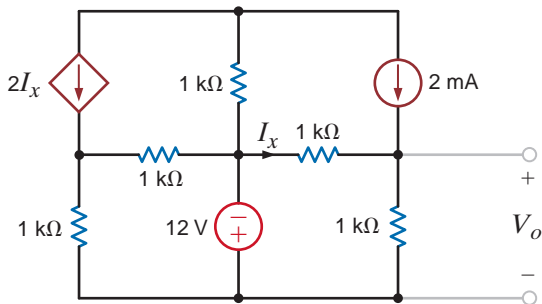


Figure P3.90

**3.94** Use loop analysis to find  $I_o$  in the circuit in Fig. P3.94.

**3.91** Using loop analysis, find  $V_o$  in the network in Fig. P3.91.

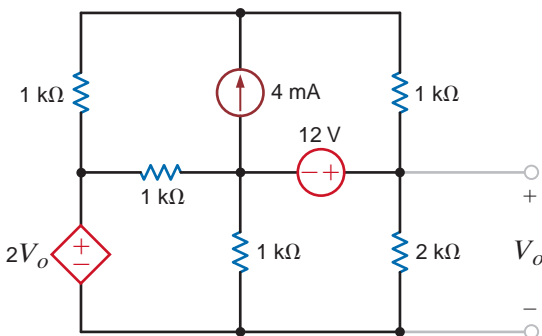


Figure P3.91

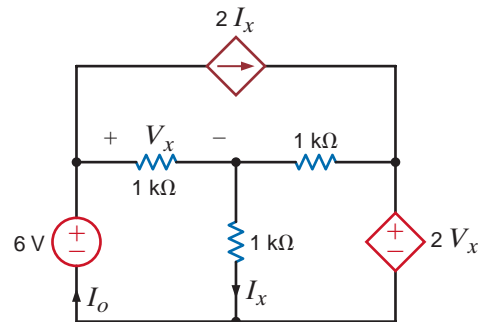


Figure P3.94



3.95 Find  $I_x$  in the circuit in Fig. P3.95 using loop analysis.

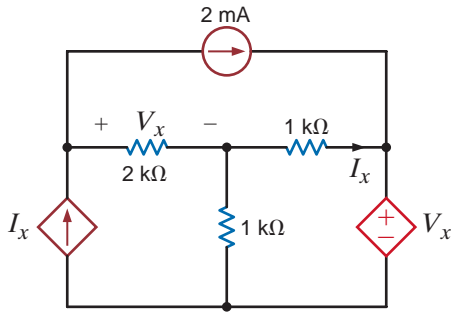


Figure P3.95

3.98 Solve for the mesh currents defined in the circuit in Fig. P3.98.

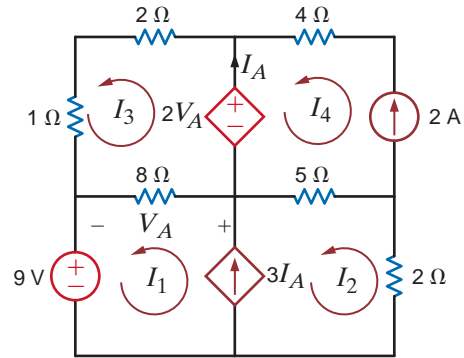


Figure P3.98

3.96 Find  $I_o$  in the circuit in Fig. P3.96 using loop analysis.

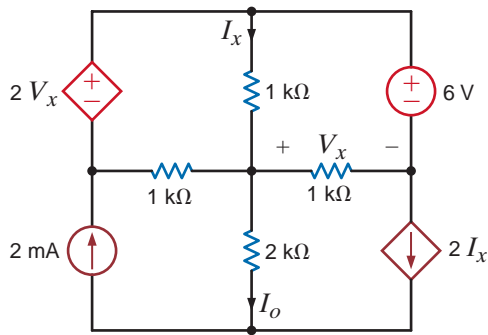


Figure P3.96

3.99 Solve for the mesh currents defined in the circuit in Fig. P3.99.

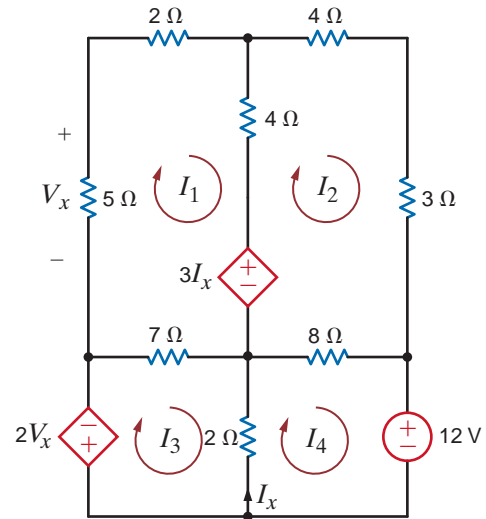


Figure P3.99

3.97 Find  $V_o$  in the circuit in Fig. P3.97 using loop analysis.

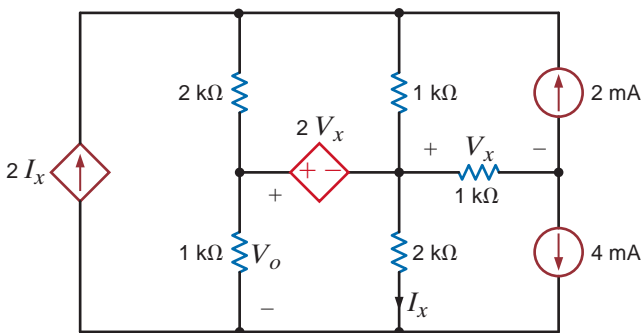


Figure P3.97

3.100 Solve for the mesh currents defined in the circuit in Fig. P3.100.

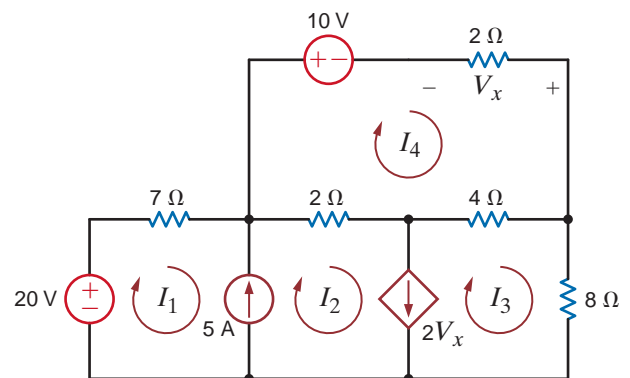


Figure P3.100

**3.101** Using loop analysis, find  $I_o$  in the circuit in Fig. P3.101.

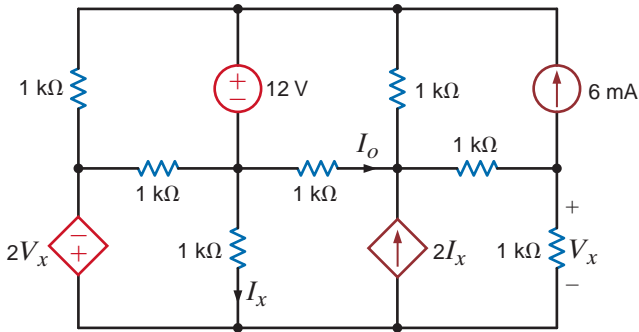


Figure P3.101

**3.104** Use both nodal and loop analyses to determine  $I_o$  in the circuit in Fig. P3.104.

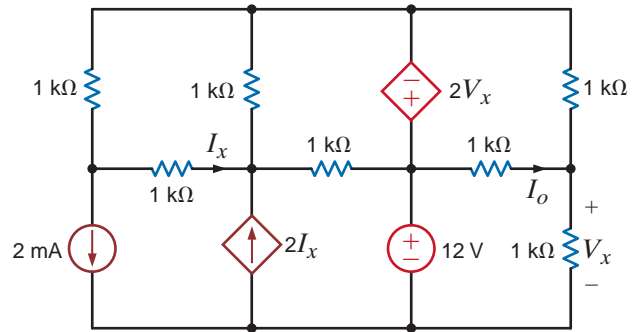


Figure P3.104

**3.102** Use mesh analysis to determine the power delivered by the independent 3-V source in the network in Fig. P3.102.

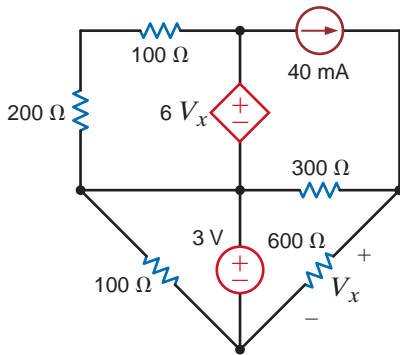


Figure P3.102

**3.105** Use both nodal and loop analyses to find  $V_o$  in the circuit in Fig. P3.105.

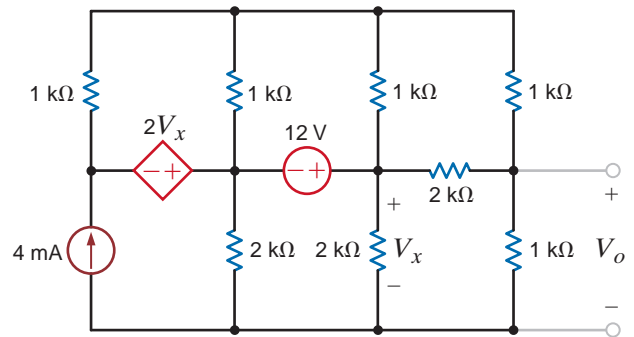


Figure P3.105

**3.103** Use mesh analysis to find the power delivered by the current-control voltage source in the circuit in Fig. P3.103.

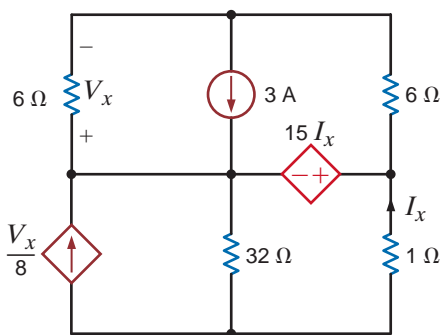


Figure P3.103

**3.106** Find  $I_o$  in the network in Fig. P3.106 using nodal analysis.

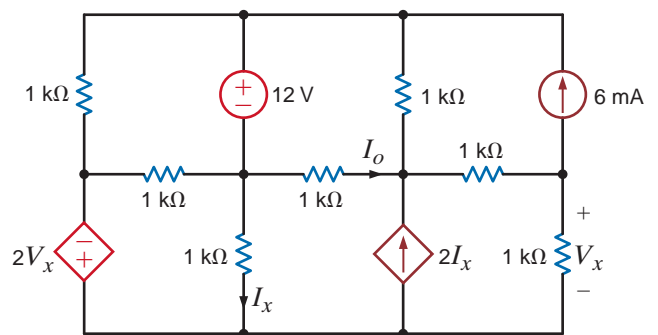


Figure P3.106

**TYPICAL PROBLEMS FOUND ON THE FE EXAM**

**3FE-1** Find  $V_o$  in the circuit in Fig. 3PFE-1.

- a. 3.33 V
- b. 8.25 V
- c. 9.33 V
- d. 2.25 V

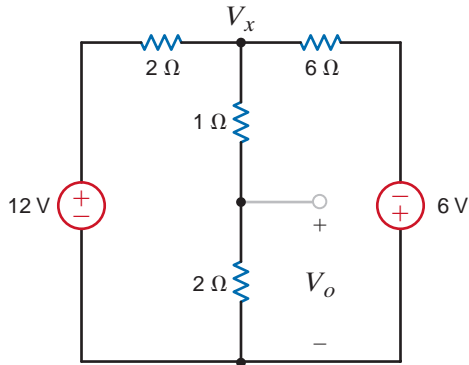


Figure 3PFE-1

**3FE-2** Determine the power dissipated in the 6-ohm resistor in the network in Fig. 3PFE-2.

- a. 8.2 W
- b. 15.3 W
- c. 4.4 W
- d. 13.5 W

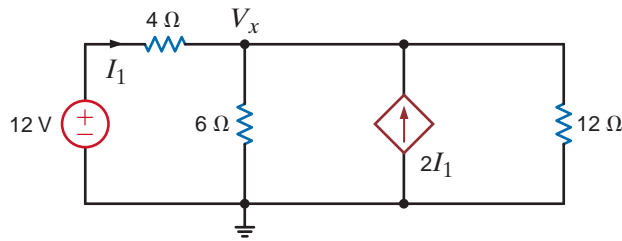


Figure 3PFE-2

**3FE-3** Find the current  $I_x$  in the 4-ohm resistor in the circuit in Fig. 3PFE-3.

- a. 20 A
- b. 12 A
- c. 7 A
- d. 14 A

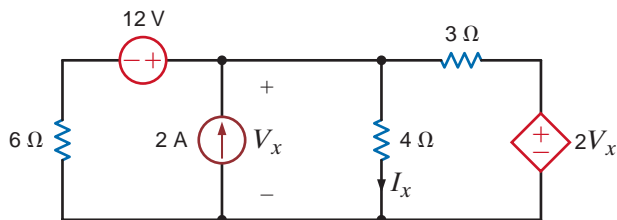


Figure 3PFE-3

**3FE-4** Determine the voltage  $V_o$  in the circuit in Fig. 3PFE-4.

- a. -3.28 V
- b. 4.14 V
- c. -6.43 V
- d. 2.25 V

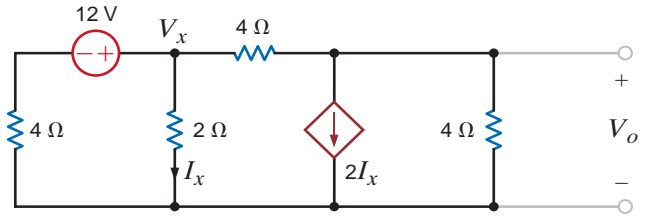


Figure 3PFE-4

**3FE-5** What is the voltage  $V_1$  in the circuit in Fig. 3PFE-5?

- a. -7 V
- b. 5 V
- c. -2 V
- d. 4 V

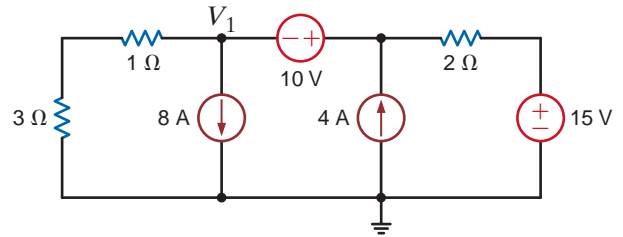


Figure 3PFE-5

# OPERATIONAL AMPLIFIERS

## THE LEARNING GOALS FOR THIS CHAPTER ARE:

- Learn how to model the op-amp device
- Learn how to analyze a variety of circuits that employ op-amps
- Understand the use of op-amps in a number of practical applications



Courtesy of NewsCom

**Robotic Surgery** Robotic-assisted surgery may well be the most significant story in medical circles since the Jarvik artificial heart hit the headlines years ago. Using small surgical cuts, this minimally invasive procedure leads to faster recovery and less pain, bleeding, and risk of infection. You can expect to leave the hospital after an overnight stay and walk within a day following kidney or bladder removal, once considered major surgeries. Robotic-assisted techniques have even been extended to certain heart surgeries.

Robotics allows surgeons to work at a console only a few feet away from the operating table, remotely manipulating robotic arms at the bedside. The primary advantage is reducing the impact of hand tremors on surgical instruments. Combining computers and robotics also lets surgeons run

practice sessions beforehand on computer simulations, further increasing their accuracy in a field where precision is literally a matter of life or death.


In this chapter, you will study the operational amplifier, or op-amp, a key building block in robotics. Nodal analysis and Ohm's law are all that you need to analyze this basic electronic component. An active device that receives external power, the op-amp appears in common configurations for inverting, amplifying, and summing voltage signals. The op-amp also provides design separation for cascaded stages. Surgeons at the forefront of healthcare rely on electronic designers for pioneering tools. With the op-amp at your command, you can begin to create designs that could prove to be life-savers.

## 4.1

## Introduction

It can be argued that the operational amplifier, or op-amp as it is commonly known, is the single most important integrated circuit for analog circuit design. It is a versatile interconnection of transistors and resistors that vastly expands our capabilities in circuit design, from engine control systems to cellular phones. Early op-amps were built of vacuum tubes, making them bulky and power hungry. The invention of the transistor at Bell Labs in 1947 allowed engineers to create op-amps that were much smaller and more efficient. Still, the op-amp itself consisted of individual transistors and resistors interconnected on a printed circuit board (PCB). When the manufacturing process for integrated circuits (ICs) was developed around 1970, engineers could finally put all of the op-amp transistors and resistors onto a single IC chip. Today, it is common to find as many as four high-quality op-amps on a single IC for as little as \$0.40. A sample of commercial op-amps is shown in Fig. 4.1.

Why are they called operational amplifiers? Originally, the op-amp was designed to perform mathematical operations such as addition, subtraction, differentiation, and integration. By adding simple networks to the op-amp, we can create these “building blocks” as well as voltage scaling, current-to-voltage conversion, and myriad more complex applications.



**Figure 4.1**

A selection of op-amps. On the left (a) is a discrete op-amp assembled on a printed circuit board (PCB). On the right, top-down, a LM324 DIP, LMC6492 DIP, and MAX4240 in a SO-5 package (small outline/5 pins). The APEX PA03 with its lid removed (b) showing individual transistors and resistors. (Left, Courtesy of Mark Nelms and Jo Ann Loden; right, Courtesy of Milt Perrin, Apex Microtechnology Corp.)

How can we, understanding only sources and resistors, hope to comprehend the performance of the op-amp? The answer lies in modeling. When the bells and whistles are removed, an op-amp is just a really good voltage amplifier. In other words, the output voltage is a scaled replica of the input voltage. Modern op-amps are such good amplifiers that it is easy to create an accurate, first-order model. As mentioned earlier, the op-amp is very popular and is used extensively in circuit design at all levels. We should not be surprised to find that op-amps are available for every application—low voltage, high voltage, micro-power, high speed, high current, and so forth. Fortunately, the topology of our model is independent of these issues.

We start with the general-purpose LM324 quad (four in a pack) op-amp from National Semiconductor, shown in the upper right corner of Fig. 4.1a. The pinout for the LM324 is shown in Fig. 4.2 for a DIP (Dual Inline Pack) style package with dimensions in inches. Recognizing there are four identical op-amps in the package, we will focus on amplifier 1. Pins 3 and 2 are the input pins,  $IN_+$  and  $IN_-$ , and are called the noninverting and inverting inputs, respectively. The output is at pin 1. A relationship exists between the output and input voltages,

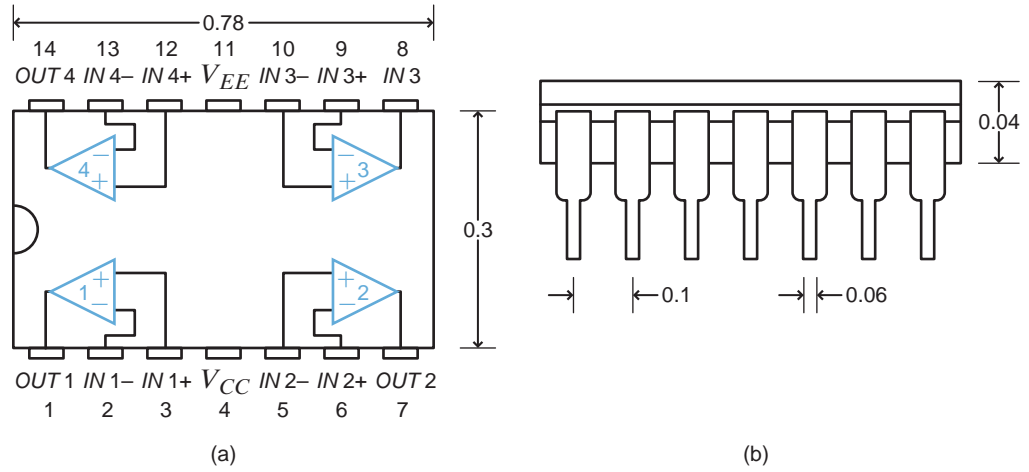
$$V_o = A_o(IN_+ - IN_-) \quad 4.1$$

## 4.2

## Op-Amp Models

**Figure 4.2**

The pinout (a) and dimensional diagram (b) of the LM324 quad op-amp. Note the pin pitch (distance pin-to-pin) is 0.1 inches—standard for DIP packages.



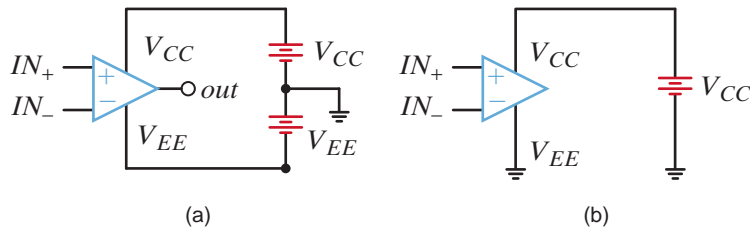
where all voltages are measured with respect to ground and  $A_o$  is the gain of the op-amp. (The location of the ground terminal will be discussed shortly.) From Eq. (4.1), we see that when  $IN_+$  increases, so will  $V_o$ . However, if  $IN_-$  increases, then  $V_o$  will decrease—hence the names noninverting and inverting inputs. We mentioned earlier that op-amps are very good voltage amplifiers. How good? Typical values for  $A_o$  are between 10,000 and 1,000,000!

Amplification requires power that is provided by the dc voltage sources connected to pins 4 and 11, called  $V_{CC}$  and  $V_{EE}$ , respectively. Fig. 4.3 shows how the power supplies, or rails, are connected for both dual- and single-supply applications and defines the ground node to which all input and output voltages are referenced. Traditionally,  $V_{CC}$  is a positive dc voltage with respect to ground, and  $V_{EE}$  is either a negative voltage or ground itself. Actual values for these power supplies can vary widely depending on the application, from as little as one volt up to several hundred.

How can we model the op-amp? A dependent voltage source can produce  $V_o$ ! What about the currents into and out of the op-amp terminals (pins 3, 2, and 1)? Fortunately for us, the currents are fairly proportional to the pin voltages. That sounds like Ohm’s law. So, we model the  $I$ - $V$  performance with two resistors, one at the input terminals ( $R_i$ ) and another at the output ( $R_o$ ). The circuit in Fig. 4.4 brings everything together.

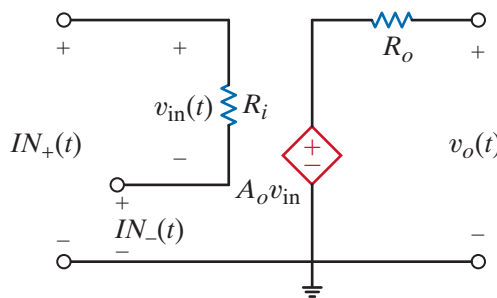
**Figure 4.3**

Schematics showing the power supply connections and ground location for (a) dual-supply and (b) single-supply implementations.



**Figure 4.4**

A simple model for the gain characteristics of an op-amp.



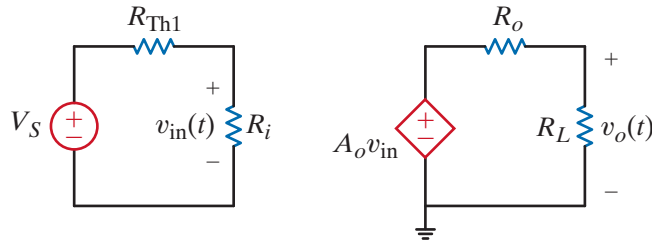


Figure 4.5

A network that depicts an op-amp circuit.  $V_S$  and  $R_{Th1}$  model the driving circuit, while the load is modeled by  $R_L$ . The circuit in Fig. 4.4 is the op-amp model.

What values can we expect for  $A_o$ ,  $R_i$ , and  $R_o$ ? We can reason through this issue with the help of Fig. 4.5 where we have drawn an equivalent for the circuitry that drives the input nodes and we have modeled the circuitry connected to the output with a single resistor,  $R_L$ . Since the op-amp is supposed to be a great voltage amplifier, let's write an equation for the overall gain of the circuit  $V_o/V_S$ . Using voltage division at the input and again at the output, we quickly produce the expression

$$\frac{V_o}{V_S} = \left[ \frac{R_i}{R_i + R_{Th1}} \right] A_o \left[ \frac{R_L}{R_o + R_L} \right]$$

To maximize the gain regardless of the values of  $R_{Th1}$  and  $R_L$ , we make the voltage division ratios as close to unity as possible. The ideal scenario requires that  $A_o$  be infinity,  $R_i$  be infinity, and  $R_o$  be zero, yielding a large overall gain of  $A_o$ . Table 4.1 shows the actual values of  $A_o$ ,  $R_i$ , and  $R_o$  for a sampling of commercial op-amps intended for very different applications. While  $A_o$ ,  $R_i$ , and  $R_o$  are not ideal, they do have the correct tendencies.

The power supplies affect performance in two ways. First, each op-amp has minimum and maximum supply ranges over which the op-amp is guaranteed to function. Second, for proper operation, the input and output voltages are limited to no more than the supply voltages.\* If the inputs/output can reach within a few dozen millivolts of the supplies, then the inputs/output are called rail-to-rail. Otherwise, the inputs/output voltage limits are more severe—usually a volt or so away from the supply values. Combining the model in Fig. 4.4, the values in Table 4.1, and these I/O limitations, we can produce the graph in Fig. 4.6 showing the output–input relation for each op-amp in Table 4.1. From the graph we see that LMC6492 and MAX4240 have rail-to-rail outputs while the LM324 and PA03 do not.

**TABLE 4.1** A list of commercial op-amps and their model values

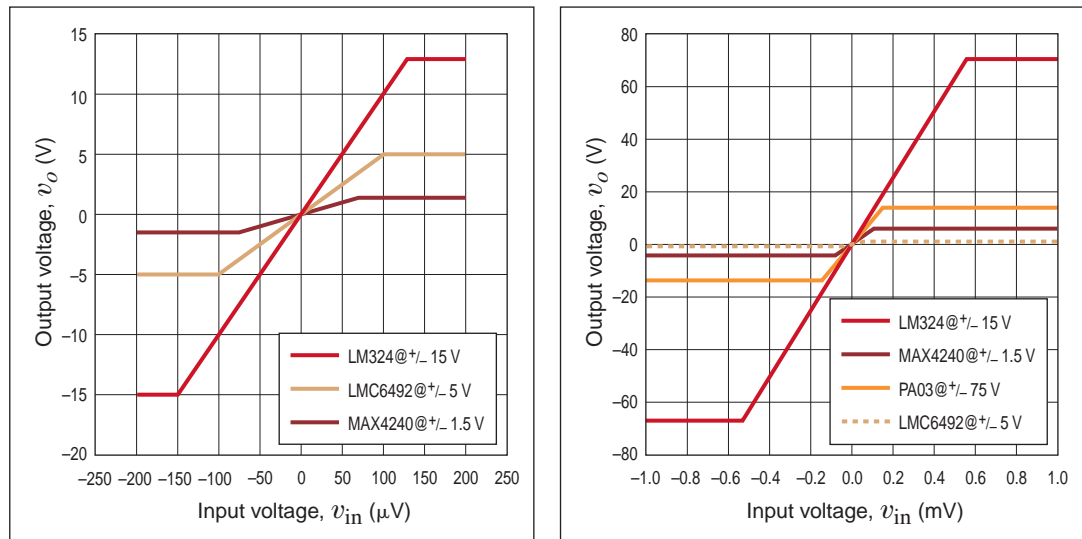
MANUFACTURER	PART NO.	$A_o$ (V/V)	$R_i$ (M $\Omega$ )	$R_o$ ( $\Omega$ )	COMMENTS
National	LM324	100,000	1.0	20	General purpose, up to $\pm 16$ V supplies, very inexpensive
National	LMC6492	50,000	$10^7$	150	Low voltage, rail-to-rail inputs and outputs <sup>†</sup>
Maxim	MAX4240	20,000	45	160	Micro-power (1.8 V supply @ 10 $\mu$ A), rail-to-rail inputs and outputs
Apex	PA03	125,000	$10^5$	2	High-voltage, $\pm 75$ V and high-output current capability, 30 A. That's 2 kW!

<sup>†</sup>Rail-to-rail is a trademark of Motorola Corporation. This feature is discussed further in the following paragraphs.

\*Op-amps are available that have input and/or output voltage ranges beyond the supply rails. However, these devices constitute a very small percentage of the op-amp market and will not be discussed here.

**Figure 4.6**

Transfer plots for the op-amps listed in Table 4.1. The supply voltages are listed in the plot legends. Note that the LMC6492 and MAX4240 have rail-to-rail output voltages (output voltage range extends to power supply values), while the LM324 and PA03 do not.



Even though the op-amp can function within the minimum and maximum supply voltages, because of the circuit configuration, an increase in the input voltage may not yield a corresponding increase in the output voltage. In this case, the op-amp is said to be in saturation. The following example addresses this issue.

**EXAMPLE**

**4.1**

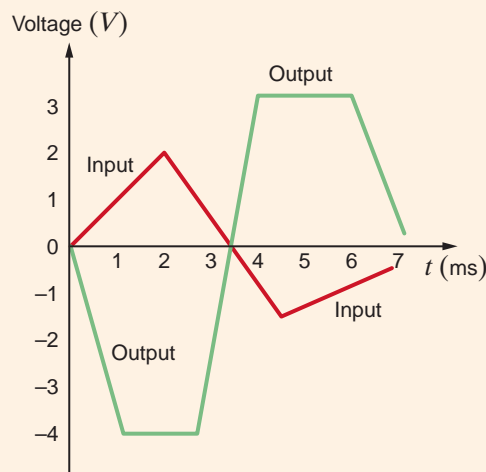
**SOLUTION**

The input and output signals for an op-amp circuit are shown in Fig. 4.7. We wish to determine (a) if the op-amp circuit is linear and (b) the circuit's gain.

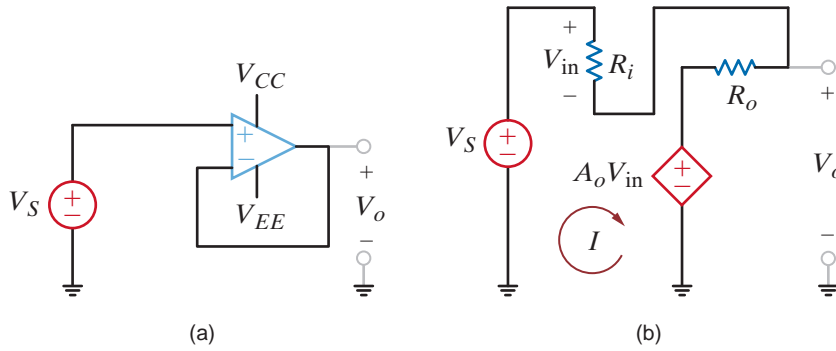
- a. We know that if the circuit is linear, the output must be linearly related, that is, proportional, to the input. An examination of the input and output waveforms in Fig. 4.7 clearly indicates that in the region  $t = 1.25$  to  $2.5$  and  $4$  to  $6$  ms the output is constant while the input is changing. In this case, the op-amp circuit is in saturation and therefore not linear.
- b. In the region where the output is proportional to the input, that is,  $t = 0$  to  $1$  ms, the input changes by  $1$  V and the output changes by  $3.3$  V. Therefore, the circuit's gain is  $3.3$ .

**Figure 4.7**

An op-amp input–output characteristic.







**Figure 4.8**  
Circuit (a) and model (b) for the unity gain buffer.

To introduce the performance of the op-amp in a practical circuit, consider the network in Fig. 4.8a called a unity gain buffer. Notice that the op-amp schematic symbol includes the power supplies. Substituting the model in Fig. 4.4 yields the circuit in Fig. 4.8b, containing just resistors and dependent sources, which we can easily analyze. Writing loop equations, we have

$$\begin{aligned} V_S &= IR_i + IR_o + A_o V_{in} \\ V_{out} &= IR_o + A_o V_{in} \\ V_{in} &= IR_i \end{aligned}$$

Solving for the gain,  $V_o/V_S$ , we find

$$\frac{V_o}{V_S} = \frac{1}{1 + \frac{R_i}{R_o + A_o R_i}}$$

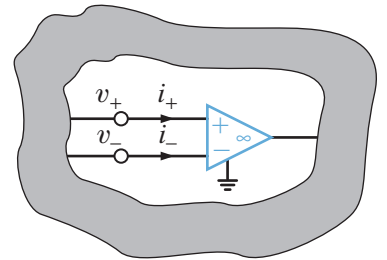
For  $R_o \ll R_i$ , we have

$$\frac{V_o}{V_S} \approx \frac{1}{1 + \frac{1}{A_o}}$$

And, if  $A_o$  is indeed  $\gg 1$ ,

$$\frac{V_o}{V_S} \approx 1$$

The origin of the name *unity gain buffer* should be apparent. Table 4.2 shows the actual gain values for  $V_S = 1$  V using the op-amps listed in Table 4.1. Notice how close the gain is to unity and how small the input voltage and current are. These results lead us to simplify the op-amp in Fig. 4.4 significantly. We introduce the *ideal op-amp model*, where  $A_o$  and  $R_i$  are infinite and  $R_o$  is zero. This produces two important results for analyzing op-amp circuitry, listed in Table 4.3.



**Figure 4.9**  
Ideal model for an operational amplifier. Model parameters:  
 $i_+ = i_- = 0, v_+ = v_-$ .

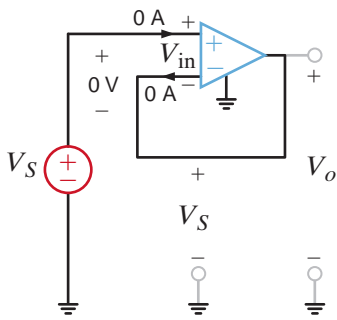
**TABLE 4.2** Unity gain buffer performance for the op-amps listed in Table 4.1

OP-AMP	BUFFER GAIN	$V_{in}$ (mV)	$I$ (pA)
LM324	0.999990	9.9999	9.9998
LMC6492	0.999980	19.999	$1.9999 \times 10^{-6}$
MAX4240	0.999950	49.998	1.1111
PA03	0.999992	7.9999	$7.9999 \times 10^{-5}$

**TABLE 4.3** Consequences of the ideal op-amp model on input terminal I/V values

MODEL ASSUMPTION	TERMINAL RESULT
$A_o \rightarrow \infty$	input voltage $\rightarrow 0$ V
$R_i \rightarrow \infty$	input current $\rightarrow 0$ A

From Table 4.3 we find that the ideal model for the op-amp is reduced to that shown in Fig. 4.9. The important characteristics of the model are as follows: (1) since  $R_i$  is extremely large, the input currents to the op-amp are approximately zero (i.e.,  $i_+ \approx i_- \approx 0$ ); and (2) if the output voltage is to remain bounded, then as the gain becomes very large and approaches infinity, the voltage across the input terminals must simultaneously become infinitesimally small so that as  $A_o \rightarrow \infty, v_+ - v_- \rightarrow 0$  (i.e.,  $v_+ - v_- = 0$  or  $v_+ = v_-$ ). The difference between these input voltages is often called the *error signal* for the op-amp (i.e.,  $v_+ - v_- = v_e$ ).



**Figure 4.10**  
An ideal op-amp configured as a unity gain buffer.

The ground terminal  $\perp$  shown on the op-amp is necessary for signal current return, and it guarantees that Kirchoff's current law is satisfied at both the op-amp and the ground node in the circuit.

In summary, then, our ideal model for the op-amp is simply stated by the following conditions:

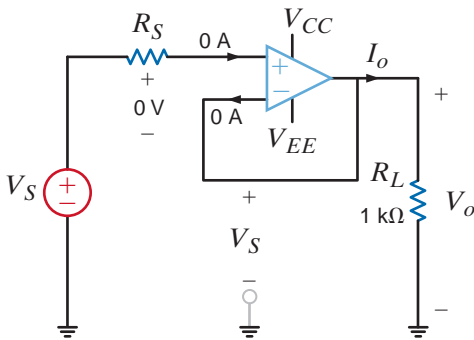
$$i_+ = i_- = 0$$

$$v_+ = v_-$$

**4.2**

These simple conditions are extremely important because they form the basis of our analysis of op-amp circuits.

Let's use the ideal model to reexamine the unity gain buffer, drawn again in Fig. 4.10, where the input voltage and currents are shown as zero. Given that  $V_{in}$  is zero, the voltage at both op-amp inputs is  $V_S$ . Since the inverting input is physically connected to the output,  $V_o$  is also  $V_S$ —unity gain!



**Figure 4.11**  
A unity gain buffer with a load resistor.

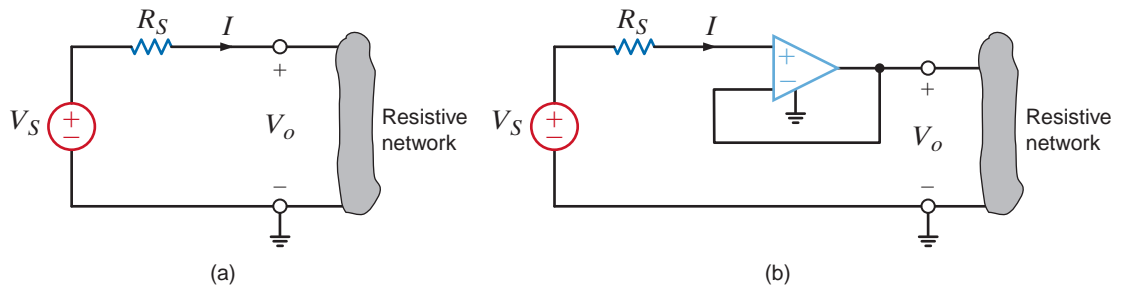
Armed with the ideal op-amp model, let's change the circuit in Fig. 4.10 slightly as shown in Fig. 4.11 where  $V_S$  and  $R_S$  are an equivalent for the circuit driving the buffer and  $R_L$  models the circuitry connected to the output. There are three main points here. First, the gain is still unity. Second, the op-amp requires no current from the driving circuit. Third, the output current ( $I_o = V_o/R_L$ ) comes from the power supplies, through the op-amp and out of the output pin. In other words, the load current comes from the power supplies, which have plenty of current output capacity, rather than the driving circuit, which may have very little. This isolation of current is called buffering.

An obvious question at this point is this: if  $V_o = V_S$ , why not just connect  $V_S$  to  $V_o$  via two parallel connection wires; why do we need to place an op-amp between them? The answer to this question is fundamental and provides us with some insight that will aid us in circuit analysis and design.

Consider the circuit shown in Fig. 4.12a. In this case  $V_o$  is not equal to  $V_S$  because of the voltage drop across  $R_S$ :

$$V_o = V_S - IR_S$$

However, in Fig. 4.12b, the input current to the op-amp is zero and, therefore,  $V_S$  appears at the op-amp input. Since the gain of the op-amp configuration is 1,  $V_o = V_S$ . In Fig. 4.12a the resistive network's interaction with the source caused the voltage  $V_o$  to be less than  $V_S$ . In other words, the resistive network loads the source voltage. However, in Fig. 4.12b the op-amp isolates the source from the resistive network; therefore, the voltage follower is referred to as a *buffer amplifier* because it can be used to isolate one circuit from another. The energy supplied to the resistive network in the first case must come from the source  $V_S$ , whereas in the second case it comes from the power supplies that supply the amplifier, and little or no energy is drawn from  $V_S$ .



**Figure 4.12**  
Illustration of the isolation capability of a voltage follower.

As a general rule, when analyzing op-amp circuits we write nodal equations at the op-amp input terminals, using the ideal op-amp model conditions. Thus, the technique is straightforward and simple to implement.

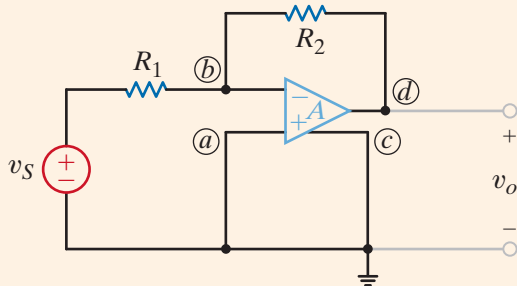
## 4.3

## Fundamental Op-Amp Circuits

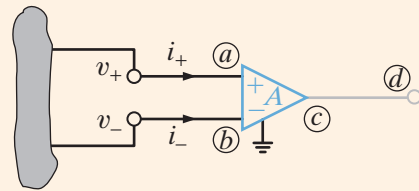
Let us determine the gain of the basic inverting op-amp configuration shown in Fig. 4.13a using both the nonideal and ideal op-amp models.

## EXAMPLE

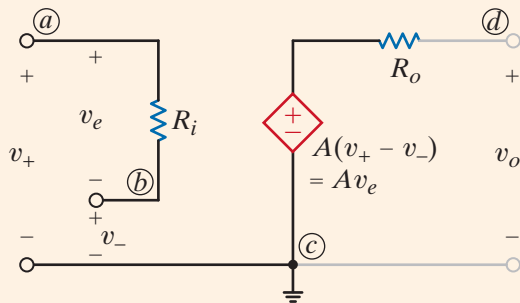
## 4.2



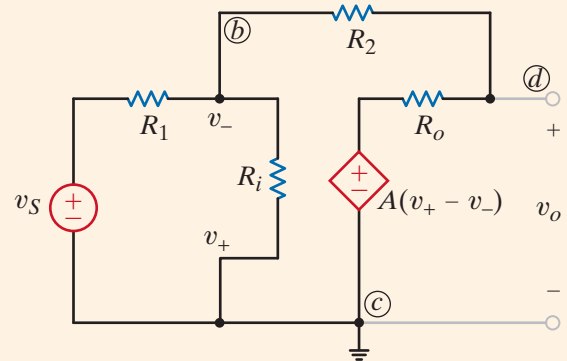
(a)



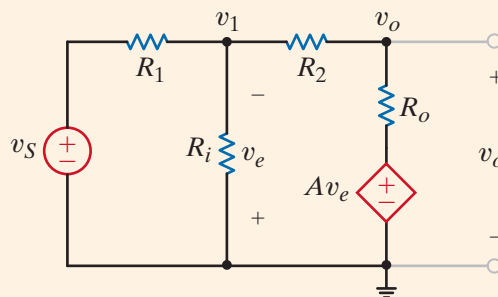
(b)



(c)



(d)



(e)

Figure 4.13

Op-amp circuit.

Our model for the op-amp is shown generically in Fig. 4.13b and specifically in terms of the parameters  $R_i$ ,  $A$ , and  $R_o$  in Fig. 4.13c. If the model is inserted in the network in Fig. 4.13a, we obtain the circuit shown in Fig. 4.13d, which can be redrawn as shown in Fig. 4.13e.

## SOLUTION

The node equations for the network are

$$\begin{aligned}\frac{v_1 - v_S}{R_1} + \frac{v_1}{R_i} + \frac{v_1 - v_o}{R_2} &= 0 \\ \frac{v_o - v_1}{R_2} + \frac{v_o - Av_e}{R_o} &= 0\end{aligned}$$

where  $v_e = -v_1$ . The equations can be written in matrix form as

$$\begin{bmatrix} \frac{1}{R_1} + \frac{1}{R_i} + \frac{1}{R_2} & -\left(\frac{1}{R_2}\right) \\ -\left(\frac{1}{R_2} - \frac{A}{R_o}\right) & \frac{1}{R_2} + \frac{1}{R_o} \end{bmatrix} \begin{bmatrix} v_1 \\ v_o \end{bmatrix} = \begin{bmatrix} \frac{v_S}{R_1} \\ 0 \end{bmatrix}$$

Solving for the node voltages, we obtain

$$\begin{bmatrix} v_1 \\ v_o \end{bmatrix} = \frac{1}{\Delta} \begin{bmatrix} \frac{1}{R_2} + \frac{1}{R_o} & \frac{1}{R_2} \\ \frac{1}{R_2} - \frac{A}{R_o} & \frac{1}{R_1} + \frac{1}{R_i} + \frac{1}{R_o} \end{bmatrix} \begin{bmatrix} \frac{v_S}{R_1} \\ 0 \end{bmatrix}$$

where

$$\Delta = \left(\frac{1}{R_1} + \frac{1}{R_i} + \frac{1}{R_2}\right)\left(\frac{1}{R_2} + \frac{1}{R_o}\right) - \left(\frac{1}{R_2}\right)\left(\frac{1}{R_2} - \frac{A}{R_o}\right)$$

Hence,

$$v_o = \frac{\left(\frac{1}{R_2} - \frac{A}{R_o}\right)\left(\frac{v_S}{R_1}\right)}{\left(\frac{1}{R_1} + \frac{1}{R_i} + \frac{1}{R_2}\right)\left(\frac{1}{R_2} + \frac{1}{R_o}\right) - \left(\frac{1}{R_2}\right)\left(\frac{1}{R_2} - \frac{A}{R_o}\right)}$$

which can be written as

$$\frac{v_o}{v_S} = \frac{-(R_2/R_1)}{1 - \left[\left(\frac{1}{R_1} + \frac{1}{R_i} + \frac{1}{R_2}\right)\left(\frac{1}{R_2} + \frac{1}{R_o}\right) / \left(\frac{1}{R_2}\right)\left(\frac{1}{R_2} - \frac{A}{R_o}\right)\right]}$$

If we now employ typical values for the circuit parameters (e.g.,  $A = 10^5$ ,  $R_i = 10^8 \Omega$ ,  $R_o = 10 \Omega$ ,  $R_1 = 1 \text{ k}\Omega$ , and  $R_2 = 5 \text{ k}\Omega$ ), the voltage gain of the network is

$$\frac{v_o}{v_S} = -4.9996994 \approx -5.000$$

However, the ideal op-amp has infinite gain. Therefore, if we take the limit of the gain equation as  $A \rightarrow \infty$ , we obtain

$$\lim_{A \rightarrow \infty} \left(\frac{v_o}{v_S}\right) = -\frac{R_2}{R_1} = -5.000$$

Note that the ideal op-amp yielded a result accurate to within four significant digits of that obtained from an exact solution of a typical op-amp model. These results are easily repeated for the vast array of useful op-amp circuits.

We now analyze the network in Fig. 4.13a using the ideal op-amp model. In this model,

$$\begin{aligned}i_+ &= i_- = 0 \\ v_+ &= v_-\end{aligned}$$

As shown in Fig. 4.13a,  $v_+ = 0$  and, therefore,  $v_- = 0$ . If we now write a node equation at the negative terminal of the op-amp, we obtain

$$\frac{v_S - 0}{R_1} + \frac{v_o - 0}{R_2} = 0$$

or

$$\frac{v_o}{v_S} = -\frac{R_2}{R_1}$$

and we have immediately obtained the results derived previously.

Notice that the gain is a simple resistor ratio. This fact makes the amplifier very versatile in that we can control the gain accurately and alter its value by changing only one resistor. Also, the gain is essentially independent of op-amp parameters. Since the precise values of  $A_o$ ,  $R_i$ , and  $R_o$  are sensitive to such factors as temperature, radiation, and age, their elimination results in a gain that is stable regardless of the immediate environment. Since it is much easier to employ the ideal op-amp model rather than the nonideal model, unless otherwise stated we will use the ideal op-amp assumptions to analyze circuits that contain operational amplifiers.

## Problem-Solving Strategy

**Step 1.** Use the ideal op-amp model:  $A_o = \infty$ ,  $R_i = \infty$ ,  $R_o = 0$ .

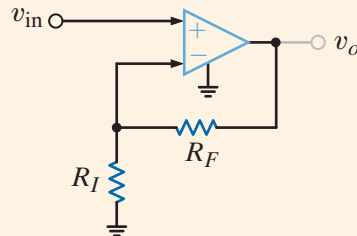
- $i_+ = i_- = 0$
- $v_+ = v_-$

**Step 2.** Apply nodal analysis to the resulting circuit.

**Step 3.** Solve nodal equations to express the output voltage in terms of the op-amp input signals.

### Op-Amp Circuits

Let us now determine the gain of the basic noninverting op-amp configuration shown in Fig. 4.14.



Once again, we employ the ideal op-amp model conditions, that is,  $v_- = v_+$  and  $i_- = i_+$ . Using the fact that  $i_- = 0$  and  $v_- = v_{in}$ , the KCL equation at the negative terminal of the op-amp is

$$\frac{v_{in}}{R_I} = \frac{v_o - v_{in}}{R_F}$$

or

$$v_{in} \left( \frac{1}{R_I} + \frac{1}{R_F} \right) = \frac{v_o}{R_F}$$

Thus,

$$\frac{v_o}{v_{in}} = 1 + \frac{R_F}{R_I}$$

Note the similarity of this case to the inverting op-amp configuration in the previous example. We find that the gain in this configuration is also controlled by a simple resistor ratio but is not inverted; that is, the gain ratio is positive.

## EXAMPLE 4.3

Figure 4.14

The non-inverting op-amp configuration.

### SOLUTION

The remaining examples, though slightly more complicated, are analyzed in exactly the same manner as those outlined above.

**EXAMPLE**  
**4.4**

Gain error in an amplifier is defined as

$$GE = \left[ \frac{\text{actual gain} - \text{ideal gain}}{\text{ideal gain}} \right] \times 100\%$$

We wish to show that for a standard noninverting configuration with finite gain  $A_o$ , the gain error is

$$GE = \frac{-100\%}{1 + A_o\beta}$$

where  $\beta = R_1/(R_1 + R_2)$ .

**SOLUTION**

The standard noninverting configuration and its equivalent circuit are shown in Fig. 4.15a and b, respectively. The circuit equations for the network in Fig. 4.15b are

$$v_S = v_{in} + v_1, \quad v_{in} = \frac{v_o}{A_o} \quad \text{and} \quad v_1 = \frac{R_1}{R_1 + R_2} v_o = \beta v_o$$

The expression that relates the input and output is

$$v_S = v_o \left[ \frac{1}{A_o} + \beta \right] = v_o \left[ \frac{1 + A_o\beta}{A_o} \right]$$

and thus the actual gain is

$$\frac{v_o}{v_S} = \frac{A_o}{1 + A_o\beta}$$

Recall that the ideal gain for this circuit is  $(R_1 + R_2)/R_1 = 1/\beta$ . Therefore, the gain error is

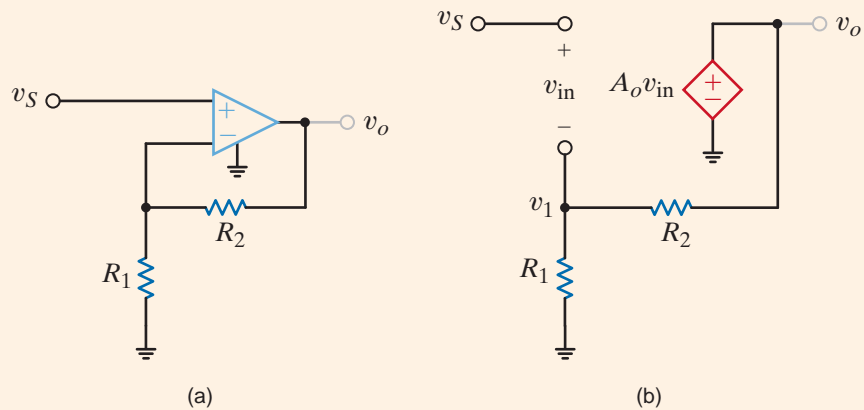
$$GE = \left[ \frac{\frac{A_o}{1 + A_o\beta} - \frac{1}{\beta}}{\frac{1}{\beta}} \right] 100\%$$

which, when simplified, yields

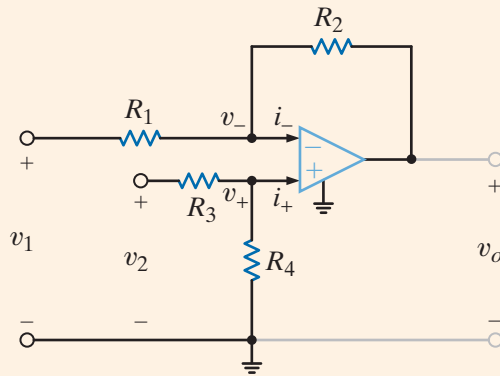
$$GE = \frac{-100\%}{1 + A_o\beta}$$

**Figure 4.15**

Circuits used in Example 4.4.



Consider the op-amp circuit shown in Fig. 4.16. Let us determine an expression for the output voltage.



## EXAMPLE 4.5

Figure 4.16

Differential amplifier operational amplifier circuit.

The node equation at the inverting terminal is

$$\frac{v_1 - v_-}{R_1} + \frac{v_o - v_-}{R_2} = i_-$$

At the noninverting terminal KCL yields

$$\frac{v_2 - v_+}{R_3} = \frac{v_+}{R_4} + i_+$$

However,  $i_+ = i_- = 0$  and  $v_+ = v_-$ . Substituting these values into the two preceding equations yields

$$\frac{v_1 - v_-}{R_1} + \frac{v_o - v_-}{R_2} = 0$$

and

$$\frac{v_2 - v_-}{R_3} = \frac{v_-}{R_4}$$

Solving these two equations for  $v_o$  results in the expression

$$v_o = \frac{R_2}{R_1} \left( 1 + \frac{R_1}{R_2} \right) \frac{R_4}{R_3 + R_4} v_2 - \frac{R_2}{R_1} v_1$$

Note that if  $R_4 = R_2$  and  $R_3 = R_1$ , the expression reduces to

$$v_o = \frac{R_2}{R_1} (v_2 - v_1)$$

Therefore, this op-amp can be employed to subtract two input voltages.

## SOLUTION

The circuit shown in Fig. 4.17a is a precision differential voltage-gain device. It is used to provide a single-ended input for an analog-to-digital converter. We wish to derive an expression for the output of the circuit in terms of the two inputs.

## EXAMPLE 4.6

To accomplish this, we draw the equivalent circuit shown in Fig. 4.17b. Recall that the voltage across the input terminals of the op-amp is approximately zero and the currents into the op-amp input terminals are approximately zero. Note that we can write node equations for node voltages  $v_1$  and  $v_2$  in terms of  $v_o$  and  $v_a$ . Since we are interested in an expression for

## SOLUTION

$v_o$  in terms of the voltages  $v_1$  and  $v_2$ , we simply eliminate the  $v_a$  terms from the two node equations. The node equations are

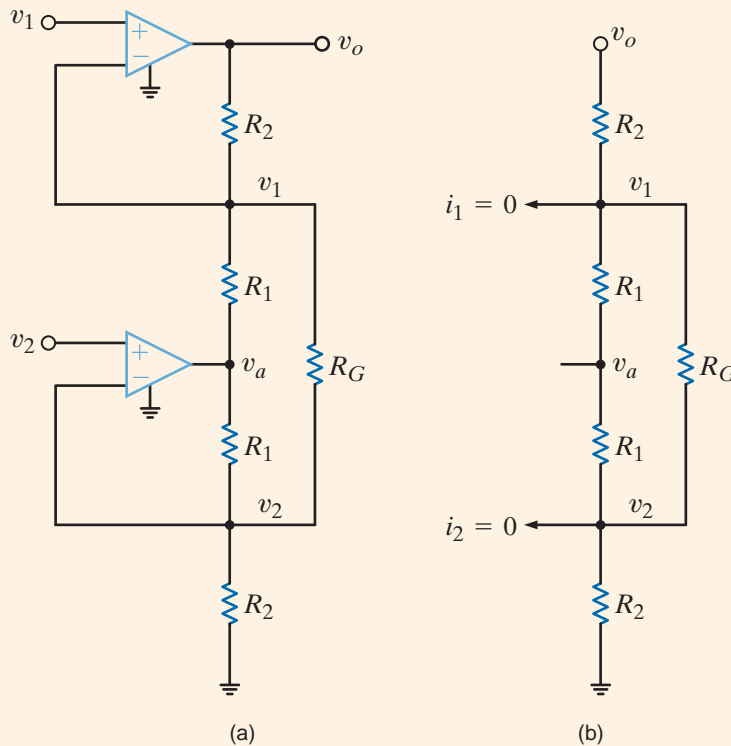
$$\frac{v_1 - v_o}{R_2} + \frac{v_1 - v_a}{R_1} + \frac{v_1 - v_2}{R_G} = 0$$

$$\frac{v_2 - v_a}{R_1} + \frac{v_2 - v_1}{R_G} + \frac{v_2}{R_2} = 0$$

Combining the two equations to eliminate  $v_a$ , and then writing  $v_o$  in terms of  $v_1$  and  $v_2$ , yields

$$v_o = (v_1 - v_2) \left( 1 + \frac{R_2}{R_1} + \frac{2R_2}{R_G} \right)$$

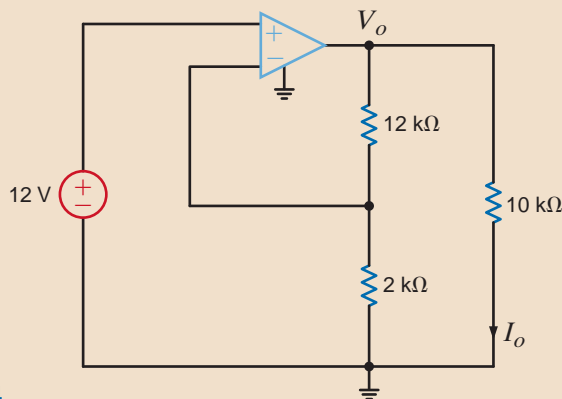
**Figure 4.17**  
Instrumentation amplifier circuit.



## Learning Assessments

**E4.1** Find  $I_o$  in the network in Fig. E4.1.

**ANSWER:**  $I_o = 8.4$  mA.



**Figure E4.1**



**E4.2** Determine the gain of the op-amp circuit in Fig. E4.2.

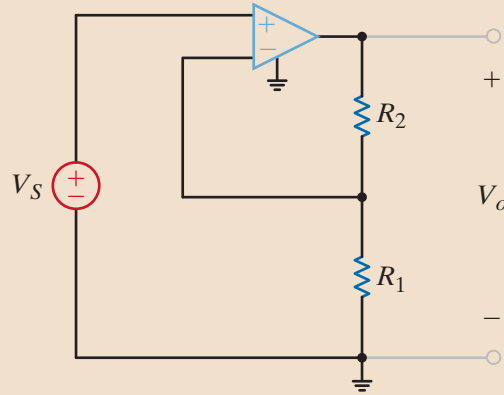


Figure E4.2

**ANSWER:**  $\frac{V_o}{V_S} = 1 + \frac{R_2}{R_1}$ .

**E4.3** Determine both the gain and the output voltage of the op-amp configuration shown in Fig. E4.3.

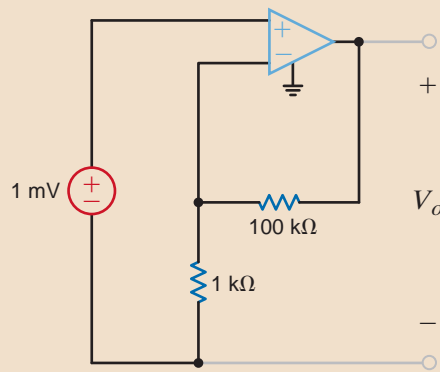


Figure E4.3

**ANSWER:**  $V_o = 0.101 \text{ V}$ ;  
gain = 101.

**E4.4** Find  $I_1$ ,  $I_2$ ,  $I_3$ , and  $I_4$  in Fig. E4.4.

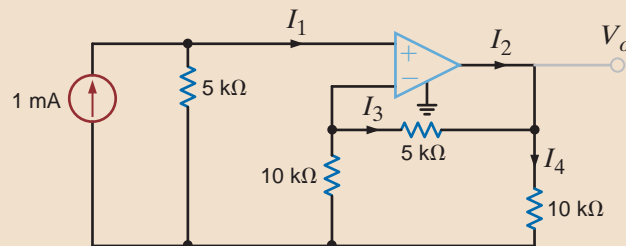


Figure E4.4

**ANSWER:**  
 $I_1 = 0$ ,  $I_2 = 1.25 \text{ mA}$ ,  
 $I_3 = -0.5 \text{ mA}$ ,  $I_4 = 0.75 \text{ mA}$ .

**E4.5** Find  $V_o$  in terms of  $V_1$  and  $V_2$  in Fig. E4.5. If  $V_1 = V_2 = 4 \text{ V}$ , find  $V_o$ . If the op-amp power supplies are  $\pm 15 \text{ V}$  and  $V_2 = 2 \text{ V}$ , what is the allowable range of  $V_1$ ?

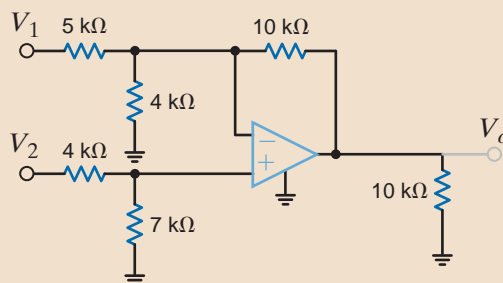


Figure E4.5

**ANSWER:**  $V_o = -2 V_1 + 3.5 V_2$ ,  $6 \text{ V}$ ,  $-4 \text{ V} \leq V_1 \leq 11 \text{ V}$ .

(continues on the next page)

**E4.6** Find  $V_o$  and  $V_3$  in Fig. E4.6.

**ANSWER:**  $V_o = -9$  V,  
 $V_3 = -4.8$  V.

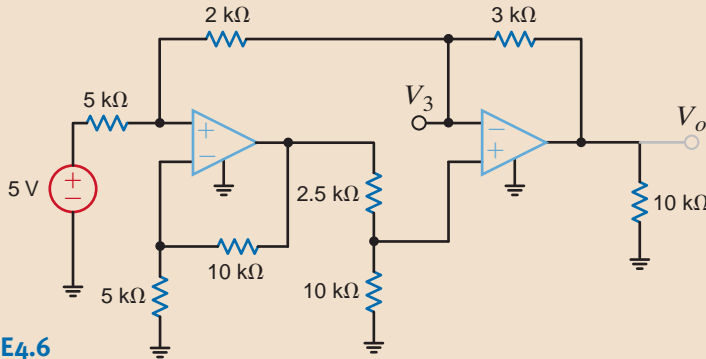


Figure E4.6

**E4.7** Find  $V_o$  in Fig. E4.7.

**ANSWER:**

$$V_o = \left[ \left( \frac{R_3}{R_2} + \frac{R_3}{R_4} + 1 \right) \left( 1 + \frac{R_2}{R_1} \right) - \frac{R_3}{R_2} \right] V_1$$

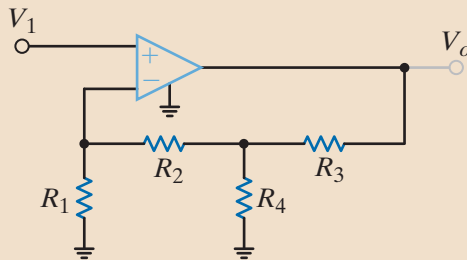


Figure E4.7

### EXAMPLE 4.7

The two op-amp circuits shown in Fig. 4.18 produce an output given by the equation

$$V_o = 8V_1 - 4V_2$$

where

$$1 \text{ V} \leq V_1 \leq 2 \text{ V} \quad \text{and} \quad 2 \text{ V} \leq V_2 \leq 3 \text{ V}$$

We wish to determine (a) the range of  $V_o$  and (b) if both of the circuits will produce the full range of  $V_o$  given that the dc supplies are  $\pm 10$  V.

**SOLUTION** a. Given that  $V_o = 8V_1 - 4V_2$  and the range for both  $V_1$  and  $V_2$  as  $1 \text{ V} \leq V_1 \leq 2 \text{ V}$  and  $2 \text{ V} \leq V_2 \leq 3 \text{ V}$ , we find that

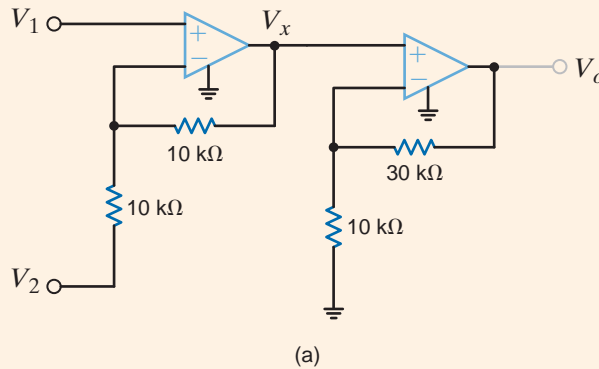
$$V_{o\text{max}} = 8(2) - 4(2) = 8 \text{ V} \quad \text{and} \quad V_{o\text{min}} = 8(1) - 4(3) = -4 \text{ V}$$

and thus the range of  $V_o$  is  $-4$  V to  $+8$  V.

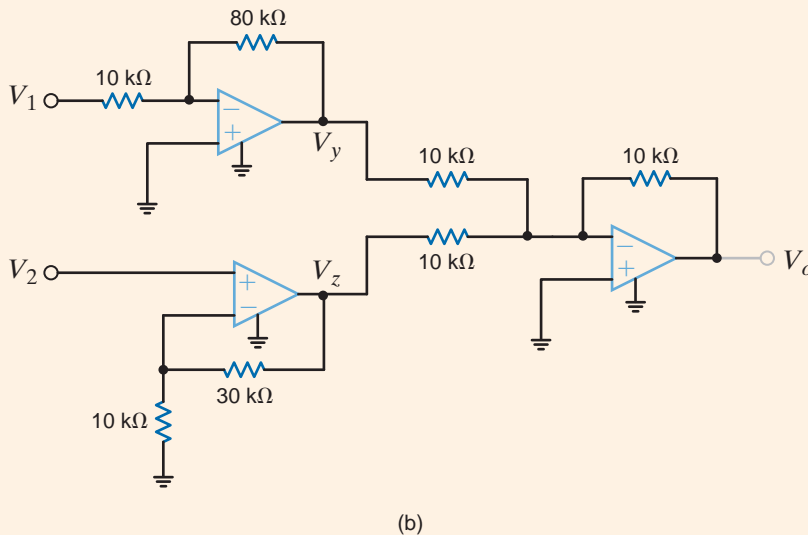
b. Consider first the network in Fig. 4.18a. The signal at  $V_x$ , which can be derived using the network in Example 4.5, is given by the equation  $V_x = 2V_1 - V_2$ .  $V_x$  is a maximum when  $V_1 = 2$  V and  $V_2 = 2$  V, that is,  $V_{x\text{max}} = 2(2) - 2 = 2$  V. The minimum value for  $V_x$  occurs when  $V_1 = 1$  V and  $V_2 = 3$  V, that is,  $V_{x\text{min}} = 2(1) - 3 = -1$  V. Since both the max and min values are within the supply range of  $\pm 10$  V, the first op-amp in

Fig. 4.18a will not saturate. The output of the second op-amp in this circuit is given by the expression  $V_o = 4V_x$ . Therefore, the range of  $V_o$  is  $-4 \text{ V} \leq V_o \leq 8 \text{ V}$ . Since this range is also within the power supply voltages, the second op-amp will not saturate, and this circuit will produce the full range of  $V_o$ .

Next, consider the network in Fig. 4.18b. The signal  $V_y = -8V_1$  and so the range of  $V_y$  is  $-16 \text{ V} \leq V_y \leq -8 \text{ V}$  and the range of  $V_y$  is outside the power supply limits. This circuit will saturate and fail to produce the full range of  $V_o$ .



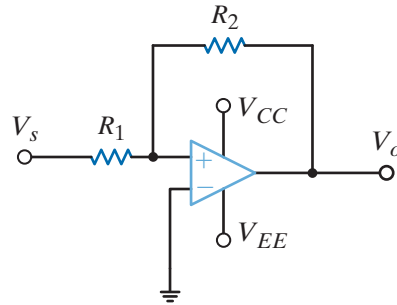
**Figure 4.18**  
Circuits used in  
Example 4.7.



If you review the op-amp circuits presented in this chapter to this point, you will note one common characteristic of all circuits. The output is connected to the inverting input of the op-amp through a resistive network. This connection where a portion of the output voltage is fed back to the inverting input is referred to as negative feedback. Recall from the model of an ideal op-amp that the output voltage is proportional to the voltage difference between the input terminals. Feeding back the output voltage to the negative input terminal maintains this voltage difference near zero to allow linear operation of the op-amp. As a result, negative feedback is necessary for the proper operation of nearly all op-amp circuits. Our analysis of op-amp circuits is based on the assumption that the voltage difference at the input terminals is zero.

Almost all op-amp circuits utilize negative feedback. However, positive feedback is utilized in oscillator circuits, the Schmitt trigger, and the comparator, which will be discussed in the following section. Let's now consider the circuit in Fig. 4.19. This circuit is very similar to the circuit of Fig. 4.13a. However, there is one very important difference. In Fig. 4.19, resistor  $R_2$  is connected to the positive input terminal of the op-amp instead of the negative

**Figure 4.19**  
Op-amp circuit with positive feedback.



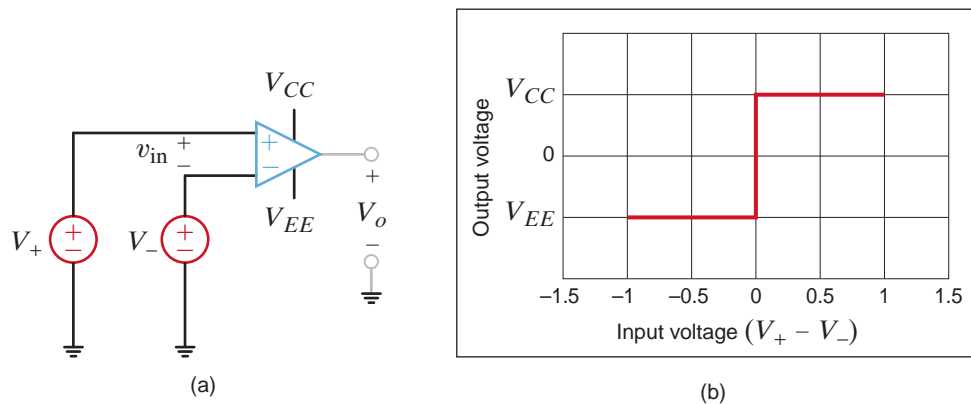
input. Connecting the output terminal to the positive input terminal results in positive feedback. As a result of the positive feedback, the output value of this op-amp circuit has two possible values  $V_{CC}$  or  $V_{EE}$ . Analysis of this circuit using the ideal op-amp model presented in this chapter does not predict this result. It is important to remember that the ideal op-amp model may only be utilized when negative feedback is present in the op-amp circuit.

## 4.4 Comparators

A comparator, a variant of the op-amp, is designed to compare the noninverting and inverting input voltages. As shown in Fig. 4.20, when the noninverting input voltage is greater, the output goes as high as possible, at or near  $V_{CC}$ . On the other hand, if the inverting input voltage is greater, the output goes as low as possible, at or near  $V_{EE}$ . Of course, an ideal op-amp can do the same thing, that is, swing the output voltage as far as possible. However, op-amps are not designed to operate with the outputs saturated, whereas comparators are. As a result, comparators are faster and less expensive than op-amps.

We will present two very different quad comparators in this text, National Semiconductor’s LM339 and Maxim’s MAX917. Note that the LM339 requires a resistor, called a pull-up resistor, connected between the output pin and  $V_{CC}$ . The salient features of these products are listed in Table 4.4. From Table 4.4, it is easy to surmise that the LM339 is a general-purpose comparator, whereas the MAX917 is intended for low-power applications such as hand-held products.

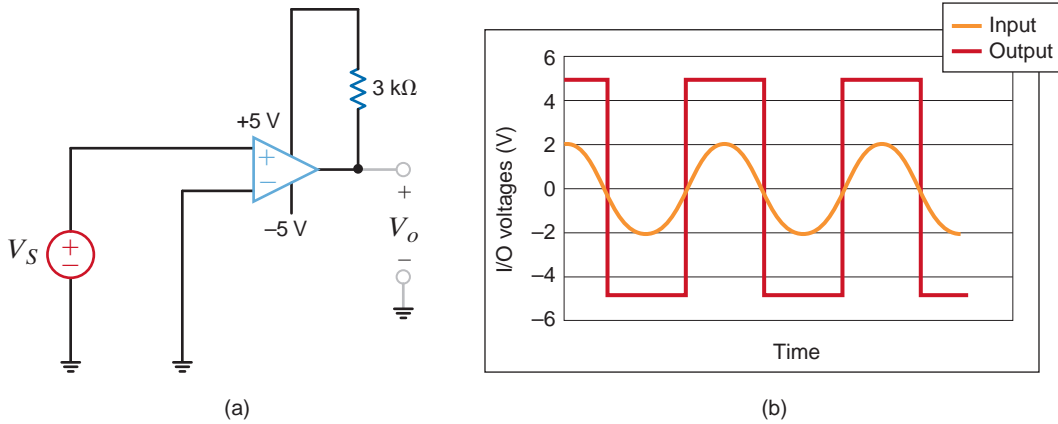
**Figure 4.20**  
(a) An ideal comparator and  
(b) its transfer curve.



A common comparator application is the zero-crossing detector, shown in Fig. 4.21a using a LM339 with  $\pm 5$  V supplies. As seen in Fig. 4.21b, when  $V_S$  is positive,  $V_o$  should be near +5 V and when  $V_S$  is negative,  $V_o$  should be near -5 V. The output changes value on every zero crossing!

**TABLE 4.4** A listing of some of the features of the LM339 and MAX917 comparators

PRODUCT	MIN. SUPPLY	MAX. SUPPLY	SUPPLY CURRENT	MAX. OUTPUT CURRENT	TYPICAL $R_{\text{pull-up}}$
LM339	2 V	36 V	3 mA	50 mA	3 k $\Omega$
MAX919	2.8 V	5.5 V	0.8 $\mu$ A	8 mA	NA

**Figure 4.21**

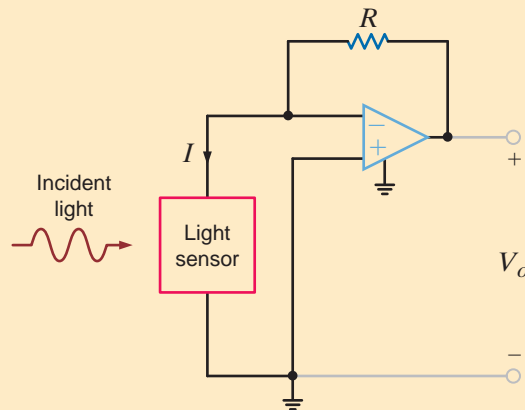
(a) A zero-crossing detector and (b) the corresponding input/output waveforms.

At this point, we have a new element, the op-amp, which we can effectively employ in both applications and circuit design. This device is an extremely useful element that vastly expands our capability in these areas. Because of its ubiquitous nature, the addition of the op-amp to our repertoire of circuit elements permits us to deal with a wide spectrum of practical circuits. Thus, we will employ it here, and also use it throughout this text.

## 4.5

### Application Examples

In a light meter, a sensor produces a current proportional to the intensity of the incident radiation. We wish to obtain a voltage proportional to the light's intensity using the circuit in Fig. 4.22. Thus, we select a value of  $R$  that will produce an output voltage of 1 V for each 10  $\mu\text{A}$  of sensor current. Assume that the sensor has zero resistance.



### APPLICATION EXAMPLE 4.8

**Figure 4.22**

Light intensity to voltage converter.

Applying KCL at the op-amp input,

$$I = V_o/R$$

Since  $V_o/I$  is  $10^5$ ,

$$R = 100 \text{ k}\Omega$$

### SOLUTION

The circuit in Fig. 4.23 is an electronic ammeter. It operates as follows: the unknown current,  $I$ , through  $R_1$  produces a voltage,  $V_1$ .  $V_1$  is amplified by the op-amp to produce a voltage,  $V_o$ , which is proportional to  $I$ . The output voltage is measured with a simple voltmeter. We want to find the value of  $R_2$  such that 10 V appears at  $V_o$  for each milliamp of unknown current.

### APPLICATION EXAMPLE 4.9

**SOLUTION** Since the current into the op-amp + terminal is zero, the relationship between  $V_I$  and  $I$  is

$$V_I = IR_I$$

The relationship between the input and output voltages is

$$V_o = V_I \left( 1 + \frac{R_2}{R_1} \right)$$

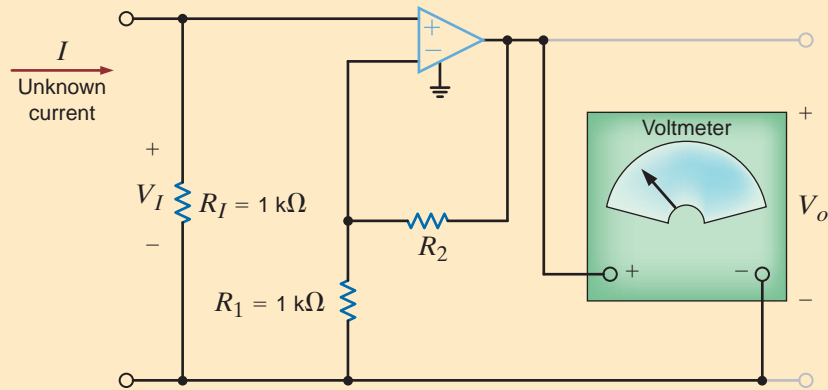
or, solving the equation for  $V_o/I$ , we obtain

$$\frac{V_o}{I} = R_I \left( 1 + \frac{R_2}{R_1} \right)$$

Using the required ratio  $V_o/I$  of  $10^4$  and resistor values from Fig. 4.23, we can find that

$$R_2 = 9 \text{ k}\Omega$$

**Figure 4.23**  
Electronic ammeter.



**APPLICATION EXAMPLE 4.10**

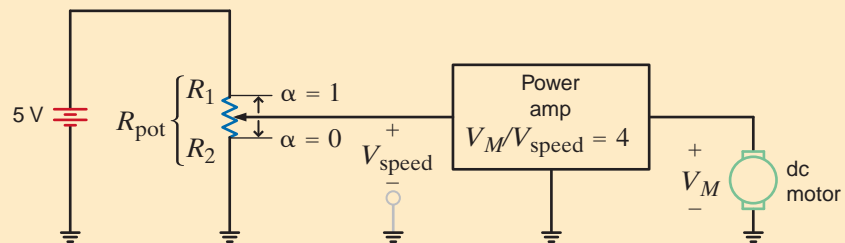
Let us return to the dc motor control example in Chapter 3 (Example 3.22). We want to define the form of the power amplifier that reads the speed control signal,  $V_{\text{speed}}$ , and outputs the dc motor voltage with sufficient current to drive the motor as shown in Fig. 4.24. Let us make our selection under the condition that the total power dissipation in the amplifier should not exceed 100 mW.

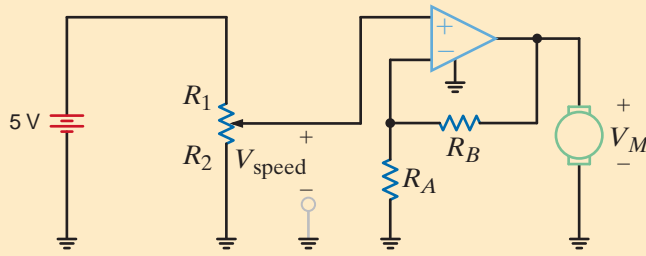
**SOLUTION** From Table 4.1 we find that the only op-amp with sufficient output voltage—that is, a maximum output voltage of  $(4)(5) = 20 \text{ V}$ —for this application is the PA03 from APEX. Since the required gain is +4, we can employ the standard noninverting amplifier configuration shown in Fig. 4.25. If the PA03 is assumed to be ideal, then

$$V_M = V_{\text{speed}} \left[ 1 + \frac{R_B}{R_A} \right] = 4V_{\text{speed}}$$

There are, of course, an infinite number of solutions that will satisfy this equation.

**Figure 4.24**  
The dc motor example from Chapter 3.



**Figure 4.25**

The power amplifier configuration using the PA03 op-amp.

In order to select reasonable values, we should consider the possibility of high currents in  $R_A$  and  $R_B$  when  $V_M$  is at its peak value of 20 V. Assuming that  $R_{in}$  for the PA03 is much greater than  $R_A$ , the currents in  $R_B$  and  $R_A$  essentially determine the total power dissipated. The total power dissipated in  $R_A$  and  $R_B$  is

$$P_{\text{total}} = \frac{V_M^2}{R_A + R_B} \leq \frac{20^2}{R_A + R_B} = \frac{400}{R_A + R_B}$$

Since the total power should not exceed 100 mW, we can use 1/4 W resistors—an inexpensive industry standard—with room to spare. With this power specification, we find that

$$R_A + R_B = \frac{V_M^2}{P_{\text{total}}} = \frac{400}{0.1} = 4000$$

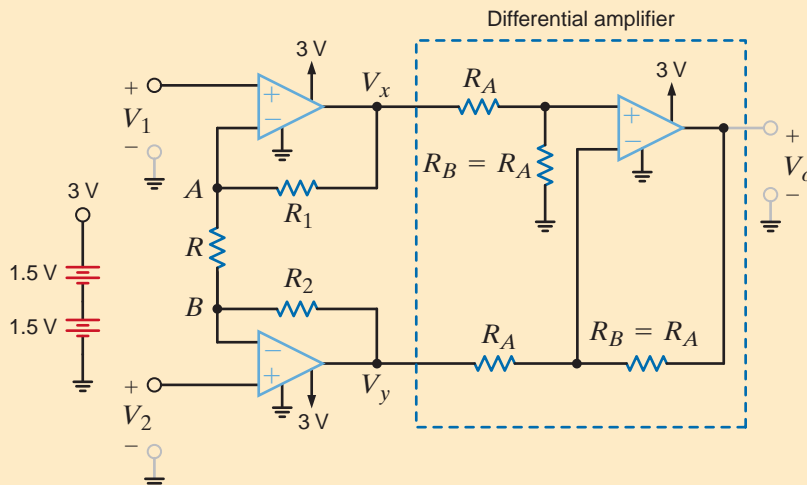
Also, since

$$1 + \frac{R_B}{R_A} = 4$$

then  $R_B = 3R_A$ . Combining this result with the power specification yields  $R_A = 1 \text{ k}\Omega$  and  $R_B = 3 \text{ k}\Omega$ . Both are standard 5% tolerance values.

An instrumentation amplifier of the form shown in Fig. 4.26 has been suggested. This amplifier should have high-input resistance, achieve a voltage gain  $V_o/(V_1 - V_2)$  of 10, employ the MAX4240 op-amp listed in Table 4.1, and operate from two 1.5 V AA cell batteries in series. Let us analyze this circuit, select the resistor values, and explore the validity of this configuration.

## APPLICATION EXAMPLE 4.11

**Figure 4.26**

An instrumentation amplifier using the MAX4240 op-amp.

**SOLUTION** As indicated, the op-amp on the right side of the circuit is connected in the traditional differential amplifier configuration. Example 4.5 indicates that the voltage gain for this portion of the network is

$$V_o = (V_x - V_y) \left[ \frac{R_B}{R_A} \right]$$

And if  $R_A = R_B$ , the equation reduces to

$$V_o = V_x - V_y$$

If we can find a relationship between  $V_1$ ,  $V_2$ , and  $V_x$  and  $V_y$ , then an expression for the overall voltage can be written. Applying KCL at node  $A$  yields

$$\frac{V_1 - V_2}{R} = \frac{V_x - V_1}{R_1}$$

or

$$V_x = V_1 \left[ 1 + \frac{R_1}{R} \right] - V_2 \left[ \frac{R_1}{R} \right]$$

In a similar manner, at node  $B$  we obtain

$$\frac{V_1 - V_2}{R} = \frac{V_2 - V_y}{R_2}$$

or

$$V_y = -V_1 \left[ \frac{R_2}{R} \right] + V_2 \left[ 1 + \frac{R_2}{R} \right]$$

By combining these equations, the output voltage can be expressed as

$$V_o = V_x - V_y = V_1 \left[ 1 + \frac{R_1}{R} \right] - V_2 \left[ \frac{R_1}{R} \right] + V_1 \left[ \frac{R_2}{R} \right] - V_2 \left[ 1 + \frac{R_2}{R} \right]$$

If the resistors are selected such that  $R_1 = R_2$ , then the voltage gain is

$$\frac{V_o}{V_1 - V_2} = 1 + \frac{2R_1}{R}$$

For a gain of +10, we set  $R_1 = 4.5R$ . To maintain low power, we will use fairly large values for these resistors. We somewhat arbitrarily choose  $R = 100 \text{ k}\Omega$  and  $R_1 = R_2 = 450 \text{ k}\Omega$ . We can use  $100 \text{ k}\Omega$  resistors in the differential amplifier stage as well.

Note that the voltage gain of the instrumentation amplifier is essentially the same as that of a generic differential amplifier. So why add the cost of two more op-amps? In this configuration the inputs  $V_1$  and  $V_2$  are directly connected to op-amp input terminals; therefore, the input resistance of the instrumentation amplifier is extremely large. From Table 4.1 we see that  $R_{in}$  for the MAX4240 is  $45 \text{ M}\Omega$ . This is not the case in the traditional differential amplifier where the external resistor can significantly decrease the input resistance.

## 4.6

### Design Examples

#### DESIGN EXAMPLE 4.12

We are asked to construct an amplifier that will reduce a very large input voltage (i.e.,  $V_{in}$  ranges between  $\pm 680 \text{ V}$ ) to a small output voltage in the range  $\pm 5 \text{ V}$ . Using only two resistors, we wish to design the best possible amplifier.



Since we must reduce  $+680\text{ V}$  to  $-5\text{ V}$ , the use of an inverting amplifier seems to be appropriate. The input/output relationship for the circuit shown in Fig. 4.27 is

$$\frac{V_o}{V_{in}} = -\frac{R_2}{R_1}$$

Since the circuit must reduce the voltage,  $R_1$  must be much larger than  $R_2$ . By trial and error, one excellent choice for the resistor pair, selected from the standard Table 2.1, is  $R_1 = 27\text{ k}\Omega$  and  $R_2 = 200\ \Omega$ . For  $V_{in} = 680\text{ V}$ , the resulting output voltage is  $5.037\text{ V}$ , resulting in a percent error of only  $0.74\%$ .

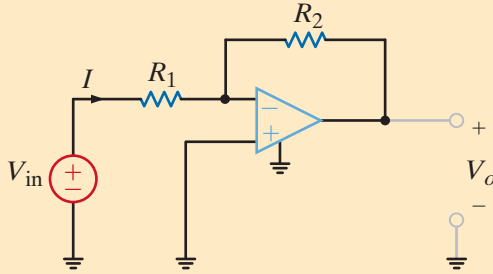


Figure 4.27

A standard inverting amplifier stage.

There is a requirement to design a noninverting op-amp configuration with two resistors under the following conditions: the gain must be  $+10$ , the input range is  $\pm 2\text{ V}$ , and the total power consumed by the resistors must be less than  $100\text{ mW}$ .

## DESIGN EXAMPLE 4.13

For the standard noninverting configuration in Fig. 4.28a, the gain is

$$\frac{V_o}{V_{in}} = 1 + \frac{R_2}{R_1}$$

For a gain of  $10$ , we find  $R_2/R_1 = 9$ . If  $R_1 = 3\text{ k}\Omega$  and  $R_2 = 27\text{ k}\Omega$ , then the gain requirement is met exactly. Obviously, a number of other choices can be made, from the standard Table 2.1, with a  $3/27$  ratio. The power limitation can be formalized by referring to Fig. 4.28b where the maximum input voltage ( $2\text{ V}$ ) is applied. The total power dissipated by the resistors is

$$P_R = \frac{2^2}{R_1} + \frac{(20 - 2)^2}{R_2} = \frac{4}{R_1} + \frac{324}{9R_1} < 0.1$$

The minimum value for  $R_1$  is  $400\ \Omega$ .

## SOLUTION

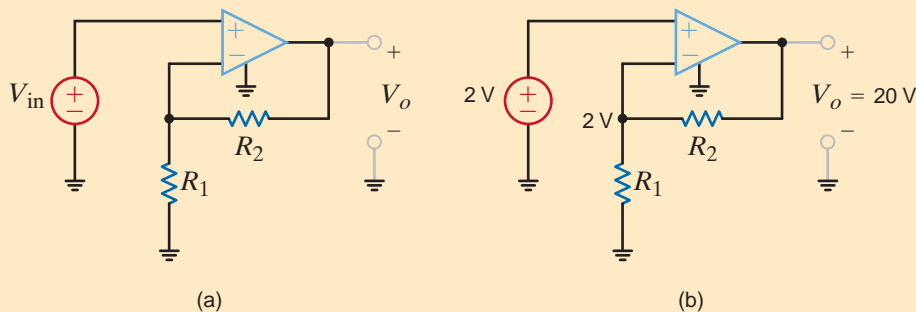


Figure 4.28

The noninverting op-amp configuration employed in Example 4.13.

**DESIGN  
EXAMPLE 4.14**

We wish to design a weighted-summer circuit that will produce the output

$$V_o = -0.9V_1 - 0.1V_2$$

The design specifications call for use of one op-amp and no more than three resistors. Furthermore, we wish to minimize power while using resistors no larger than 10 k $\Omega$ .

**SOLUTION** A standard weighted-summer configuration is shown in Fig. 4.29. Our problem is reduced to finding values for the three resistors in the network. Using KCL, we can write

$$I_1 + I_2 = -\frac{V_o}{R}$$

where

$$I_1 = \frac{V_1}{R_1} \quad \text{and} \quad I_2 = \frac{V_2}{R_2}$$

Combining these relationships yields

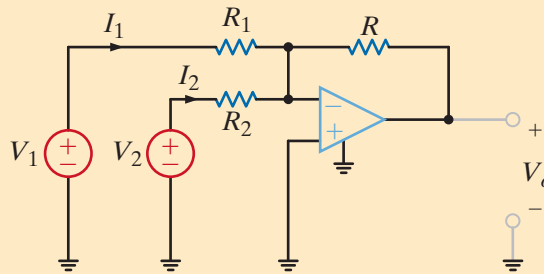
$$V_o = -\left[\frac{R}{R_1}\right]V_1 - \left[\frac{R}{R_2}\right]V_2$$

Therefore, we require

$$\frac{R}{R_1} = 0.9 \quad \text{and} \quad \frac{R}{R_2} = 0.1$$

From these requirements, we see that the largest resistor is  $R_2$  and that  $R$  is the smallest. Also, note that the  $R/R_1$  ratio can be expressed as 27/30. Finally, to minimize power, we should use the largest possible resistor values. Based on this information, the best resistor values are  $R = 270 \Omega$ ,  $R_1 = 300 \Omega$ , and  $R_2 = 2.7 \text{ k}\Omega$ , which yield the desired performance exactly.

**Figure 4.29**  
A standard weighted-summer configuration.

**DESIGN  
EXAMPLE 4.15**

In Example 2.36, a 250- $\Omega$  resistor was used to convert a current in the 4- to 20-mA range to a voltage such that a 20-mA input produced a 5-V output. In this case, the minimum current (4 mA) produces a resistor voltage of 1 V. Unfortunately, many control systems operate on a 0- to 5-V range rather than a 1- to 5-V range. Let us design a new converter that will output 0 V at 4 mA and 5 V at 20 mA.

**SOLUTION** The simple resistor circuit we designed in Example 2.36 is a good start. However, the voltage span is only 4 V rather than the required 5 V, and the minimum value is not zero. These

facts imply that a new resistor value is needed and the output voltage should be shifted down so that the minimum is zero. We begin by computing the necessary resistor value:

$$R = \frac{V_{\max} - V_{\min}}{I_{\max} - I_{\min}} = \frac{5 - 0}{0.02 - 0.004} = 312.5 \Omega$$

The resistor voltage will now range from  $(0.004)(312.5)$  to  $(0.02)(312.5)$ , or 1.25 to 6.25 V. We must now design a circuit that shifts these voltage levels so that the range is 0 to 5 V. One possible option for the level shifter circuit is the differential amplifier shown in Fig. 4.30. Recall that the output voltage of this device is

$$V_o = (V_I - V_{\text{shift}}) \frac{R_2}{R_1}$$

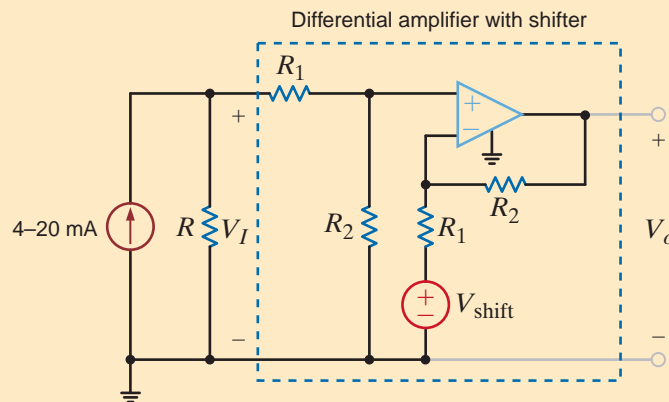
Since we have already chosen  $R$  for a voltage span of 5 V, the gain of the amplifier should be 1 (i.e.,  $R_1 = R_2$ ). Clearly, the value of the required shift voltage is 1.25 V. However, we can verify this value by inserting the minimum values into this last equation

$$0 = [(312.5)(0.004) - V_{\text{shift}}] \frac{R_2}{R_1}$$

and find

$$V_{\text{shift}} = (312.5)(0.004) = 1.25 \text{ V}$$

There is one caveat to this design. We don't want the converter resistor,  $R$ , to affect the differential amplifier, or vice versa. This means that the vast majority of the 4–20 mA current should flow entirely through  $R$  and not through the differential amplifier resistors. If we choose  $R_1$  and  $R_2 \gg R$ , this requirement will be met. Therefore, we might select  $R_1 = R_2 = 100 \text{ k}\Omega$  so that their resistance values are more than 300 times that of  $R$ .



**Figure 4.30**

A 4–20 mA to 0–5 V converter circuit.

## SUMMARY

- Op-amps are characterized by
  - High-input resistance
  - Low-output resistance
  - Very high gain
- Op-amp problems are typically analyzed by writing node equations at the op-amp input terminals
- The output of a comparator is dependent on the difference in voltage at the input terminals

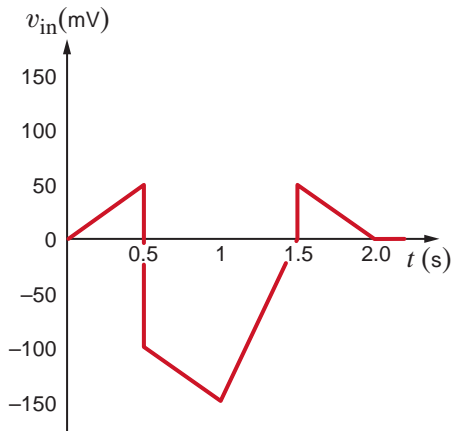
- The ideal op-amp is modeled using

$$i_+ = i_- = 0$$

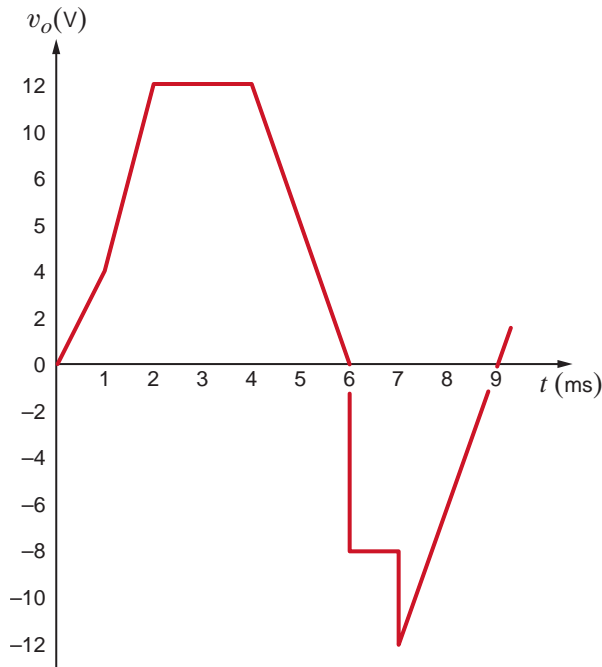
$$v_+ = v_-$$

**PROBLEMS**

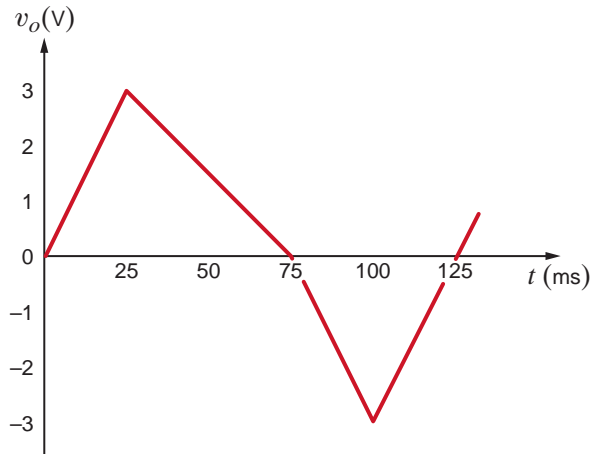
- 4.1** An amplifier has a gain of 15 and the input waveform shown in Fig. P4.1. Draw the output waveform.


**Figure P4.1**

- 4.2** An amplifier has a gain of  $-5$  and the output waveform shown in Fig. P4.2. Sketch the input waveform.


**Figure P4.2**

- 4.3** An op-amp based amplifier has supply voltages of  $\pm 5$  V and a gain of 20.
- Sketch the input waveform from the output waveform in Fig. P4.3.
  - Double the amplitude of your results in (a) and sketch the new output waveform.


**Figure P4.3**

- 4.4** For an ideal op-amp, the voltage gain and input resistance are infinite while the output resistance is zero. What are the consequences for
- the op-amp's input voltage?
  - the op-amp's input currents?
  - the op-amp's output current?
- 4.5** Revisit your answers in Problem 4.4 under the following nonideal scenarios.
- $R_{in} = \infty, R_{out} = 0, A_o \neq \infty$ .
  - $R_{in} = \infty, R_{out} > 0, A_o = \infty$ .
  - $R_{in} \neq \infty, R_{out} = 0, A_o = \infty$ .
- 4.6** Revisit the exact analysis of the inverting configuration in Section 4.3.
- Find an expression for the gain if  $R_{in} = \infty, R_{out} = 0, A_o \neq \infty$ .
  - Plot the ratio of the gain in (a) to the ideal gain versus  $A_o$  for  $1 \leq A_o \leq 1000$  for an ideal gain of  $-10$ .
  - From your plot, does the actual gain approach the ideal value as  $A_o$  increases or decreases?
  - From your plot, what is the minimum value of  $A_o$  if the actual gain is within 5% of the ideal case?
- 4.7** Revisit the exact analysis of the inverting amplifier in Section 4.3.
- Find an expression for the voltage gain if  $R_{in} \neq \infty, R_{out} = 0, A_o \neq \infty$ .
  - For  $R_2 = 27 \text{ k}\Omega$  and  $R_1 = 3 \text{ k}\Omega$ , plot the ratio of the actual gain to the ideal gain for  $A_o = 1000$  and  $1 \text{ k}\Omega \leq R_{in} \leq 100 \text{ k}\Omega$ .
  - From your plot, does the ratio approach unity as  $R_{in}$  increases or decreases?
  - From your plot in (b), what is the minimum value of  $R_{in}$  if the gain ratio is to be at least 0.98?

4.8 An op-amp based amplifier has  $\pm 18\text{ V}$  supplies and a gain of  $-80$ . Over what input range is the amplifier linear?

4.9 Assuming an ideal op-amp, determine the voltage gain of the circuit in Fig. P4.9.

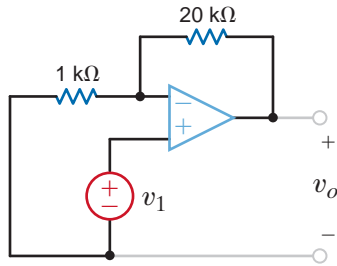


Figure P4.9

4.10 Assuming an ideal op-amp, determine the voltage gain of the circuit in Fig. P4.10.

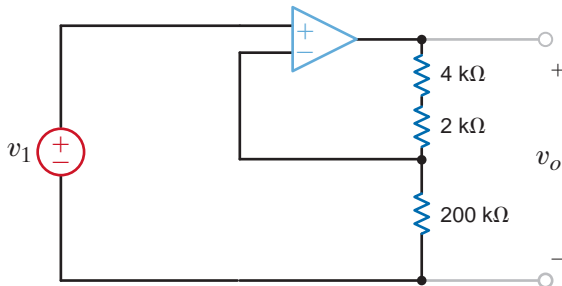


Figure P4.10

4.11 Assuming an ideal op-amp in Fig. P4.11, determine the value of  $R_x$  that will produce a voltage gain of 26.

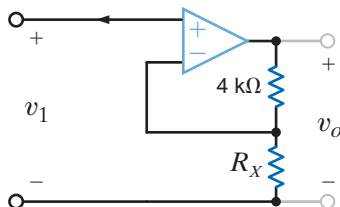


Figure P4.11

4.12 Assuming an ideal op-amp, find the voltage gain of the network in Fig. P4.12.

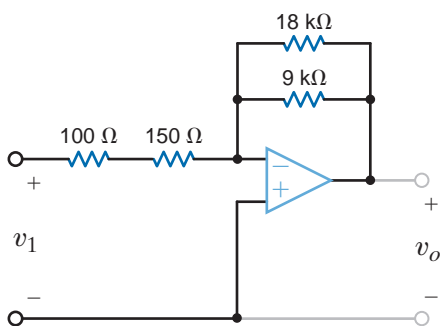


Figure P4.12

4.13 Assuming an ideal op-amp in Fig. P4.13, determine the output voltage  $V_o$ .

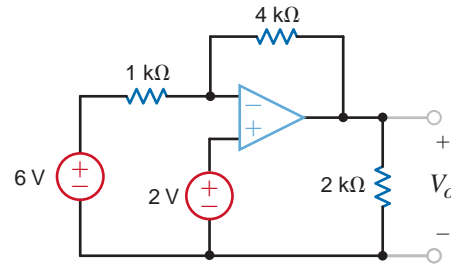


Figure P4.13

4.14 Determine the gain of the amplifier in Fig. P4.14. What is the value of  $I_o$ ?

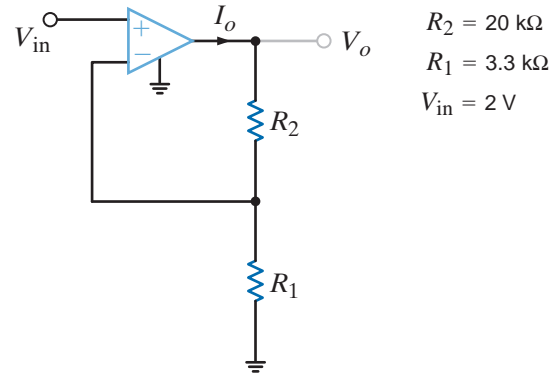


Figure P4.14

4.15 For the amplifier in Fig. P4.15, find the gain and  $I_o$ .

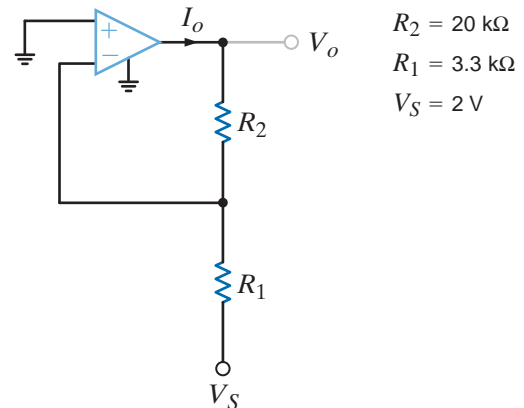


Figure P4.15

4.16 Using the ideal op-amp assumptions, determine the values of  $V_o$  and  $I_1$  in Fig. P4.16.

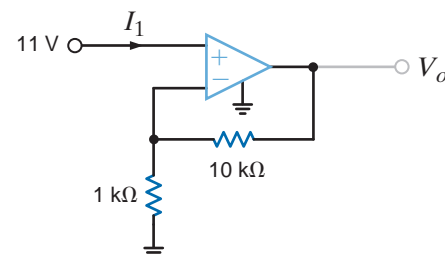


Figure P4.16

**4.17** Using the ideal op-amp assumptions, determine  $I_1$ ,  $I_2$ , and  $I_3$  in Fig. P4.17.

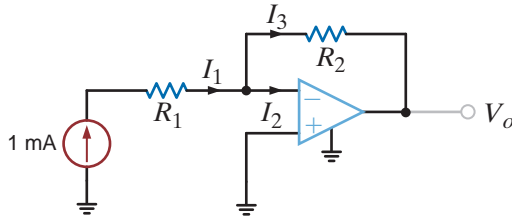


Figure P4.17

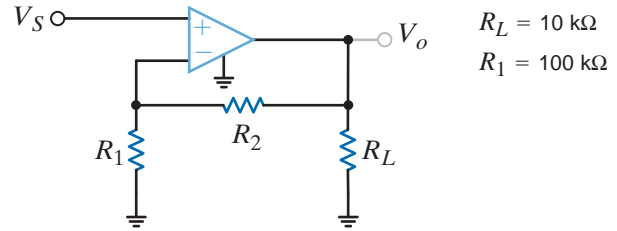


Figure P4.20

$R_L = 10 \text{ k}\Omega$   
 $R_1 = 100 \text{ k}\Omega$

**4.18** In a useful application, the amplifier drives a load. The circuit in Fig. P4.18 models this scenario.

- (a) Sketch the gain  $V_o/V_S$  for  $10 \Omega \leq R_L \leq \infty$ .
- (b) Sketch  $I_o$  for  $10 \Omega \leq R_L \leq \infty$  if  $V_S = 0.1 \text{ V}$ .
- (c) Repeat (b) if  $V_S = 1.0 \text{ V}$ .
- (d) What is the minimum value of  $R_L$  if  $|I_o|$  must be less than  $100 \text{ mA}$  for  $|V_S| < 0.5 \text{ V}$ ?
- (e) What is the current  $I_S$  if  $R_L$  is  $100 \Omega$ ? Repeat for  $R_L = 10 \text{ k}\Omega$ .

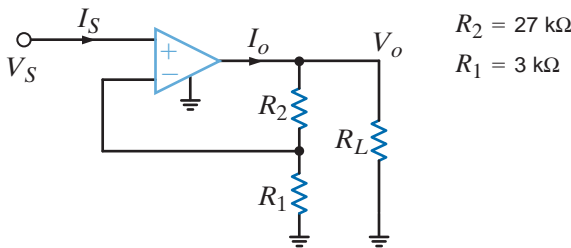


Figure P4.18

$R_2 = 27 \text{ k}\Omega$   
 $R_1 = 3 \text{ k}\Omega$

**4.19** The op-amp in the amplifier in Fig. P4.19 operates with  $\pm 15 \text{ V}$  supplies and can output no more than  $200 \text{ mA}$ . What is the maximum gain allowable for the amplifier if the maximum value of  $V_S$  is  $1 \text{ V}$ ?

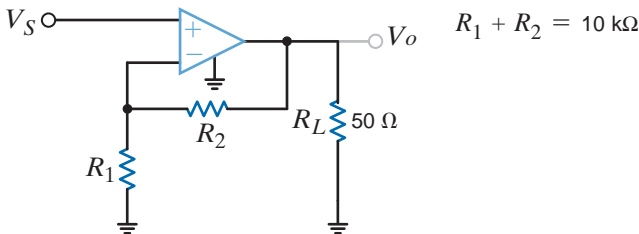


Figure P4.19

$R_1 + R_2 = 10 \text{ k}\Omega$

**4.20** For the amplifier in Fig. P4.20, the maximum value of  $V_S$  is  $2 \text{ V}$  and the op-amp can deliver no more than  $100 \text{ mA}$ .

- (a) If  $\pm 10 \text{ V}$  supplies are used, what is the maximum allowable value of  $R_2$ ?
- (b) Repeat for  $\pm 3 \text{ V}$  supplies.
- (c) Discuss the impact of the supplies on the maximum allowable gain.

**4.21** For the circuit in Fig. P4.21,

- (a) find  $V_o$  in terms of  $V_1$  and  $V_2$ .
- (b) If  $V_1 = 2 \text{ V}$  and  $V_2 = 6 \text{ V}$ , find  $V_o$ .
- (c) If the op-amp supplies are  $\pm 12 \text{ V}$ , and  $V_1 = 4 \text{ V}$ , what is the allowable range of  $V_2$ ?

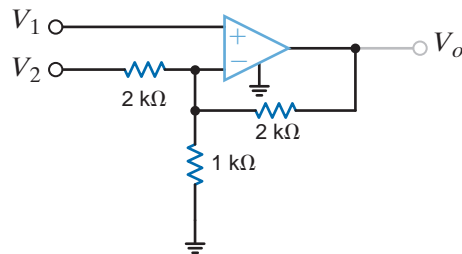


Figure P4.21

**4.22** Find  $V_o$  in the circuit in Fig. P4.22, assuming that the op-amp is ideal.

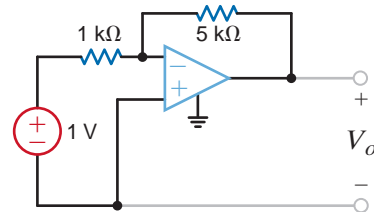


Figure P4.22

**4.23** The network in Fig. P4.23 is a current-to-voltage converter or transconductance amplifier. Find  $v_o/i_S$  for this network.

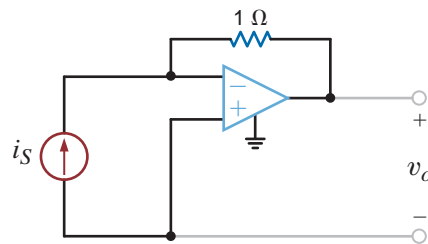


Figure P4.23

4.24 Calculate the transfer function  $i_o/v_1$  for the network shown in Fig. P4.24.

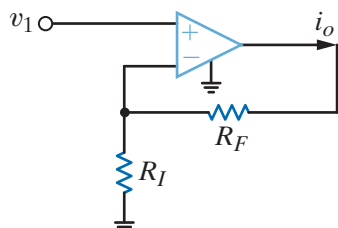


Figure P4.24

4.25 Determine the relationship between  $v_1$  and  $i_o$  in the circuit shown in Fig. P4.25.

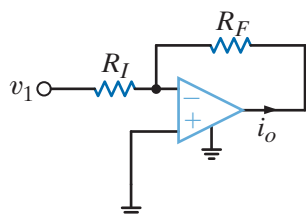


Figure P4.25

4.26 Find  $V_o$  in the network in Fig. P4.26 and explain what effect  $R_1$  has on the output.

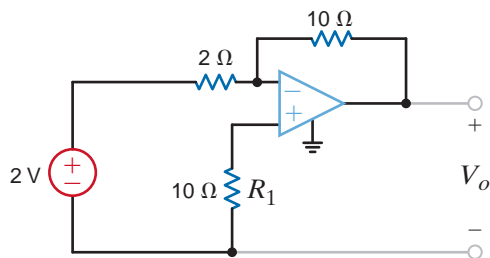


Figure P4.26

4.27 Determine the expression for  $v_o$  in the network in Fig. P4.27.

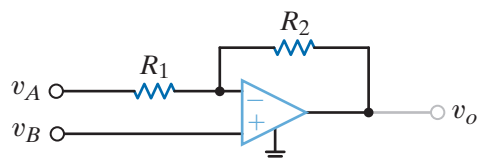


Figure P4.27

4.28 Show that the output of the circuit in Fig. P4.28 is

$$V_o = \left[ 1 + \frac{R_2}{R_1} \right] V_1 - \frac{R_2}{R_1} V_2$$

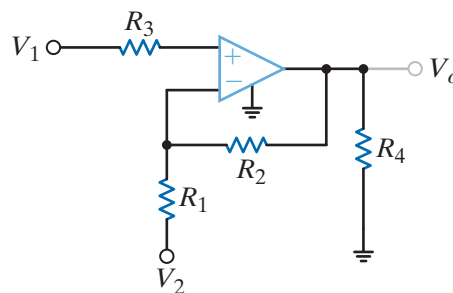


Figure P4.28

4.29 Find  $V_o$  in the network in Fig. P4.29.

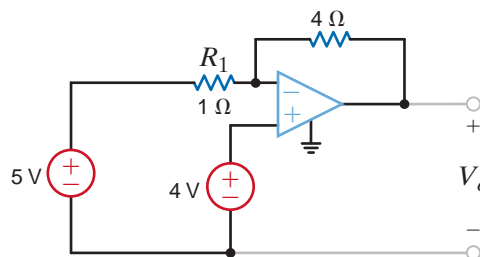


Figure P4.29

4.30 Find the voltage gain of the op-amp circuit shown in Fig. P4.30.

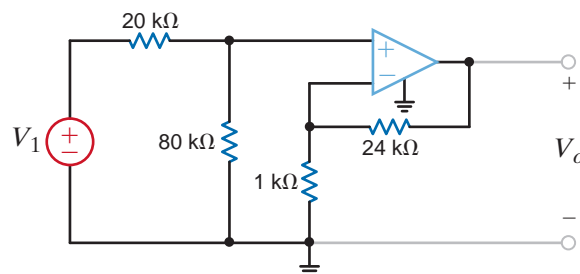


Figure P4.30

4.31 Determine the relationship between  $v_o$  and  $v_{in}$  in the circuit in Fig. P4.31.

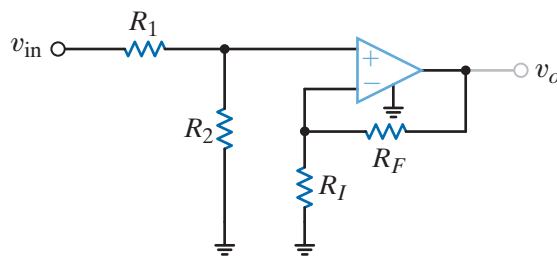


Figure P4.31



**4.32** In the network in Fig. P4.32, derive the expression for  $v_o$  in terms of the inputs  $v_1$  and  $v_2$ .

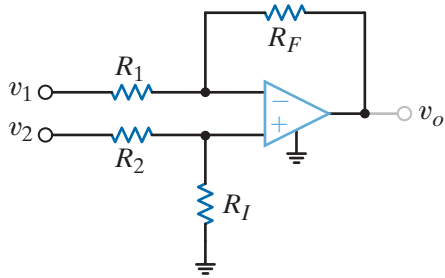


Figure P4.32

**4.33** For the circuit in Fig. P4.33, find the value of  $R_1$  that produces a voltage gain of 10.

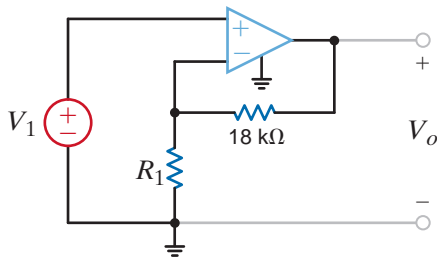


Figure P4.33

**4.34** Find  $V_o$  in the circuit in Fig. P4.34.

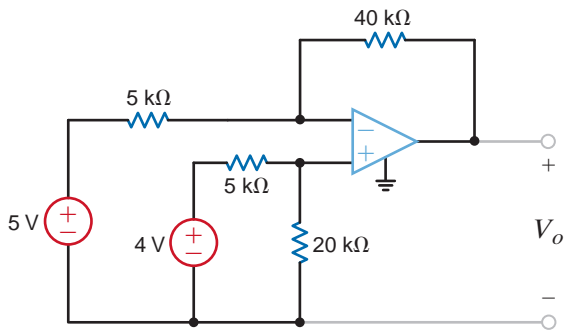


Figure P4.34

**4.35** Find  $V_o$  in the circuit in Fig. P4.35.

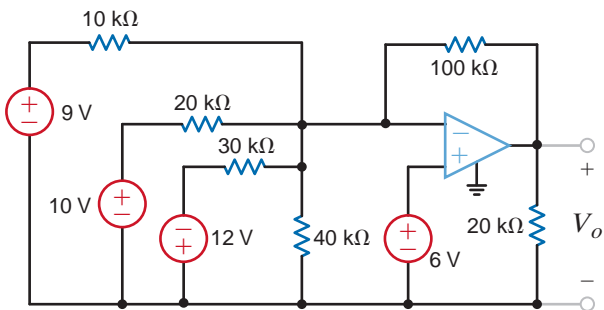


Figure P4.35

**4.36** Determine the expression for the output voltage,  $v_o$ , of the inverting-summer circuit shown in Fig. P4.36.

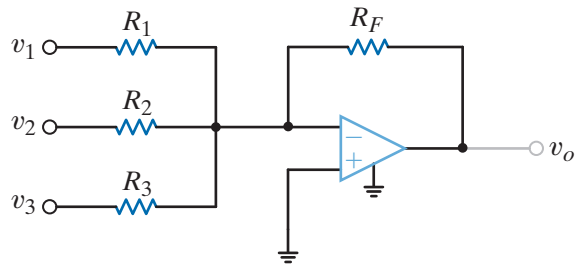


Figure P4.36

**4.37** Determine the output voltage,  $v_o$ , of the noninverting averaging circuit shown in Fig. P4.37.

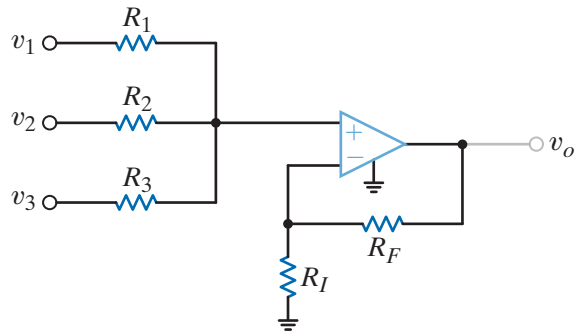


Figure P4.37

**4.38** Find the input/output relationship for the current amplifier shown in Fig. P4.38.

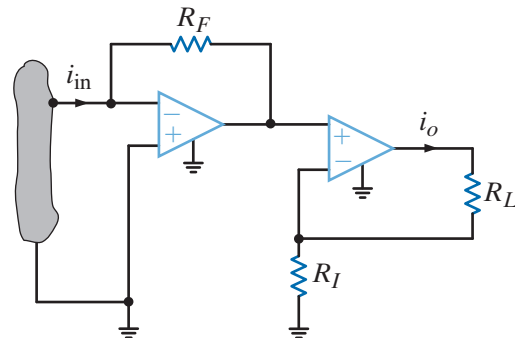


Figure P4.38

**4.39** Find  $V_o$  in the circuit in Fig. P4.39.

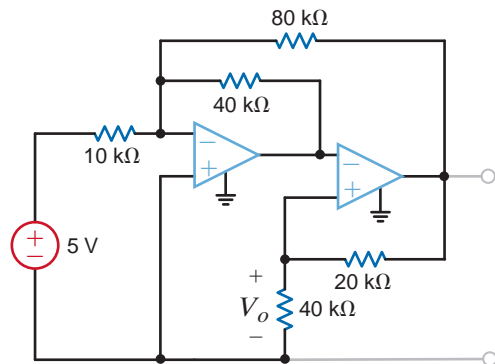


Figure P4.39



4.40 Find  $v_o$  in the circuit in Fig. P4.40.

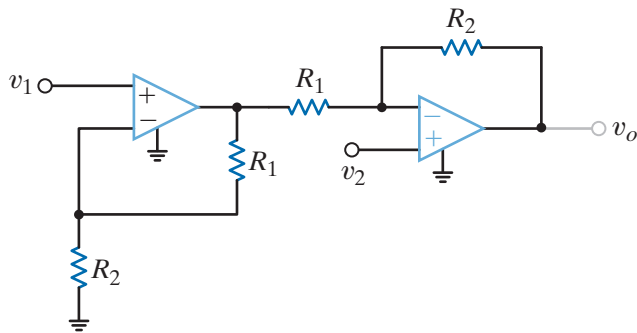


Figure P4.40

4.41 Find the expression for  $v_o$  in the differential amplifier circuit shown in Fig. P4.41.

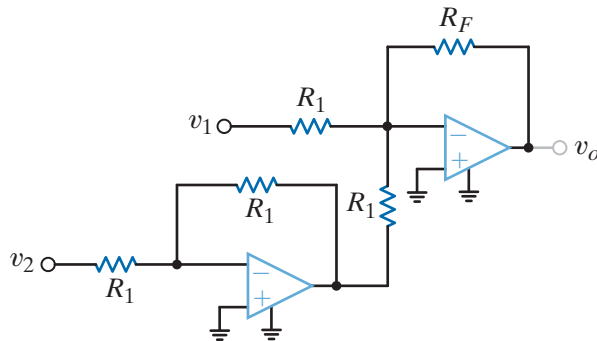


Figure P4.41

4.42 Find  $v_o$  in the circuit in Fig. P4.42.

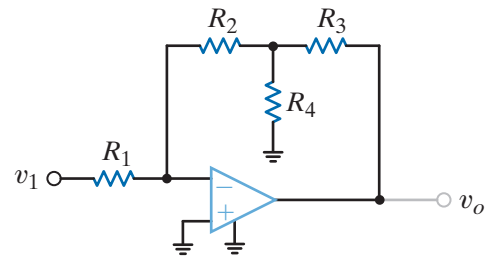


Figure P4.42

4.43 Find the output voltage,  $v_o$ , in the circuit in Fig. P4.43.

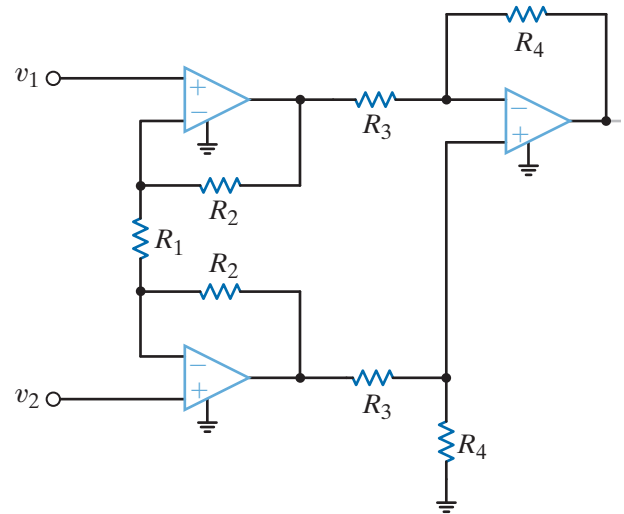


Figure P4.43

4.44 The electronic ammeter in Example 4.9 has been modified and is shown in Fig. P4.44. The selector switch allows the user to change the range of the meter. Using values for  $R_1$  and  $R_2$  from Example 4.9, find the values of  $R_A$  and  $R_B$  that will yield a 10-V output when the current being measured is 100 mA and 10 mA, respectively.

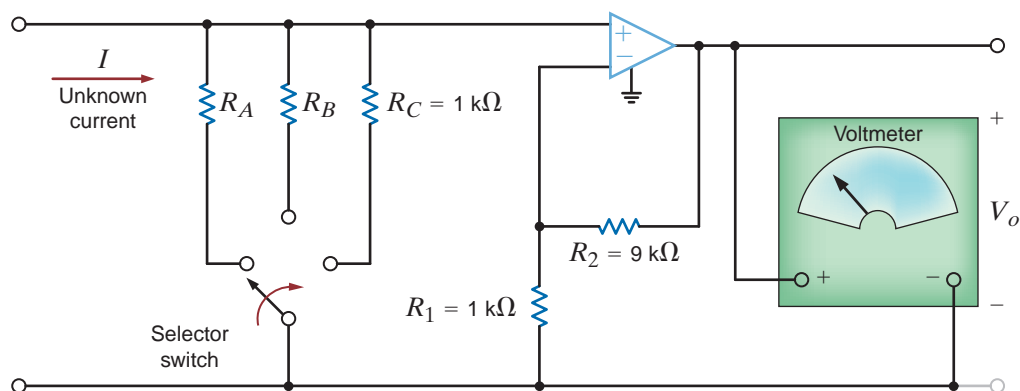


Figure P4.44

- 4.45** Given a box of 10-k $\Omega$  resistors and an op-amp, design a circuit that will have an output voltage of

$$V_o = -2V_1 - 4V_2$$

- 4.46** Design an op-amp circuit that has a gain of  $-50$  using resistors no smaller than 1 k $\Omega$ .

- 4.47** Design a two-stage op-amp network that has a gain of  $-50,000$  while drawing no current into its input terminal. Use no resistors smaller than 1 k $\Omega$ .

- 4.48** Design an op-amp circuit that has the following input/output relationship:

$$V_o = -5V_1 + 0.5V_2$$

- 4.49** A voltage waveform with a maximum value of 200 mV must be amplified to a maximum of 10 V and inverted. However, the circuit that produces the waveform can provide no more than 100  $\mu$ A. Design the required amplifier.

- 4.50** An amplifier with a gain of  $\pi \pm 1\%$  is needed. Using resistor values from Table 2.1, design the amplifier. Use as few resistors as possible.

- 4.51** Design an op-amp-based circuit to produce the function

$$V_o = 5V_1 - 4V_2$$

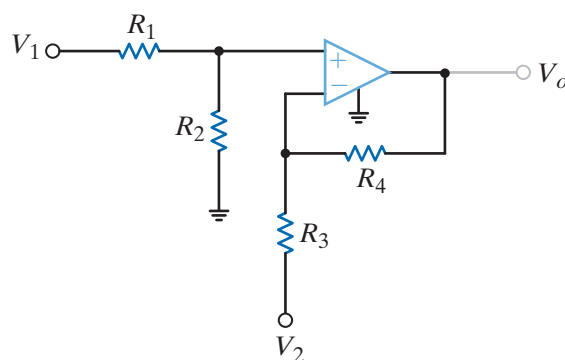
- 4.52** Design an op-amp-based circuit to produce the function

$$V_o = 5V_1 - 7V_2$$

- 4.53** Show that the circuit in Fig. P4.53 can produce the output

$$V_o = K_1V_1 - K_2V_2$$

only for  $0 \leq K_1 \leq K_2 + 1$ .



**Figure P4.53**



## TYPICAL PROBLEMS FOUND ON THE FE EXAM

**4PFE-1** Given the summing amplifier shown in Fig. 4PFE-1, select the values of  $R_2$  that will produce an output voltage of  $-3$  V.

- a.  $4.42$  k $\Omega$       b.  $6.33$  k $\Omega$   
 c.  $3.6$  k $\Omega$       d.  $5.14$  k $\Omega$

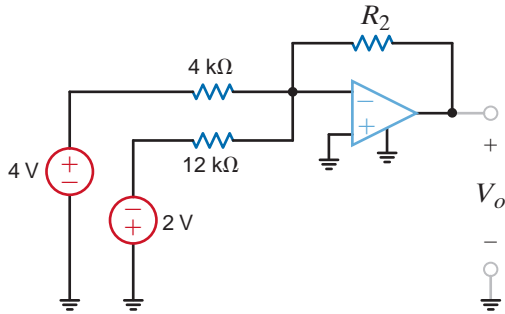


Figure 4PFE-1

**4PFE-2** Determine the output voltage  $V_o$  of the summing op-amp circuit shown in Fig. 4PFE-2.

- a.  $6$  V      b.  $18$  V  
 c.  $9$  V      d.  $10$  V

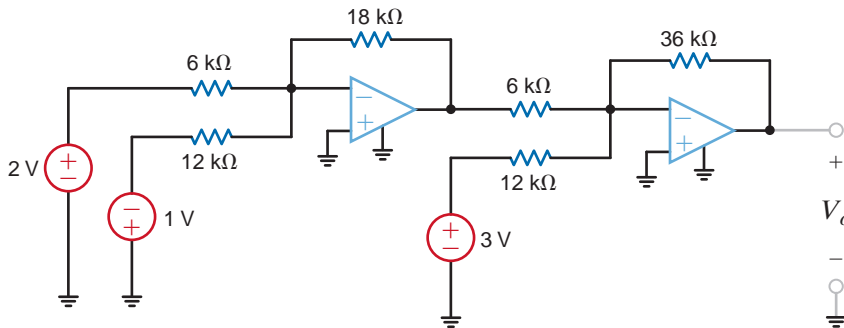


Figure 4PFE-2

**4PFE-3** What is the output voltage  $V_o$  in Fig. 4PFE-3?

- a.  $-5$  V      b.  $6$  V  
 c.  $4$  V      d.  $-7$  V

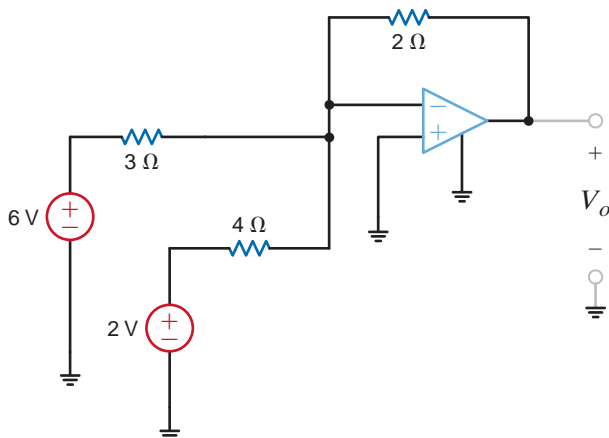


Figure 4PFE-3

**4PFE-4** What value of  $R_f$  in the op-amp circuit of Fig. 4PFE-4 is required to produce a voltage gain of 50?

- a. 135 k $\Omega$
- b. 210 k $\Omega$
- c. 180 k $\Omega$
- d. 245 k $\Omega$

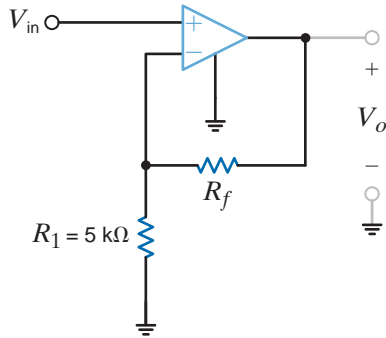


Figure 4PFE-4

**4PFE-5** What is the voltage  $V_o$  in the circuit in Fig. 4PFE-5?

- a. 3 V
- b. 6 V
- c. 8 V
- d. 5 V

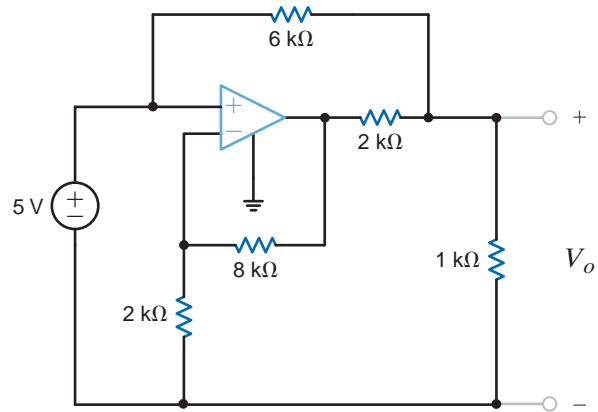


Figure 4PFE-5

# ADDITIONAL ANALYSIS TECHNIQUES



Courtesy egdigital/iStockphoto

## THE LEARNING GOALS FOR THIS CHAPTER ARE:

- Understand the concepts of linearity and equivalence
- Know how to analyze electric circuits using the principle of superposition
- Be able to calculate a Thévenin equivalent circuit for a linear circuit
- Be able to calculate a Norton equivalent circuit for a linear circuit
- Understand when and how to use a source transformation
- Be able to use the maximum power transfer theorem

**Monitoring Devices** Devices that monitor traffic flow on interstate roadways help reduce congestion near cities. For improved traffic control, monitoring devices flash your speed as you approach, warning you when you are over the limit and persuading you to slow down. Such devices are useful in construction zones where reduced speeds are required to protect workers.

Electric circuits have similar tools: current-monitoring devices that detect excessive currents and disconnect components that would be damaged if power limitations are exceeded. These circuit breakers in homes or office buildings have cutoff features that can be reset to restore service.

Measuring and regulating current flow in a circuit is as important as ensuring traffic flows freely. In this chapter, we use the superposition concept to calculate currents flowing in an electric circuit due to multiple sources. We form a simple equivalent circuit for parts of circuits that remain fixed, enabling a focus only on components to be changed for different operating conditions. Once you've mastered these concepts you'll be better prepared to design circuits that keep the current flowing under the legal limit.

## 5.1

## Introduction

Before introducing additional analysis techniques, let us review some of the topics we have used either explicitly or implicitly in our analyses thus far.

**EQUIVALENCE** Table 5.1 is a short compendium of some of the equivalent circuits that have been employed in our analyses. This listing serves as a quick review as we begin to look at other techniques that can be used to find a specific voltage or current somewhere in a network and provide additional insight into the network's operation. In addition to the forms listed in the table, it is important to note that a series connection of current sources or a parallel connection of voltage sources is forbidden unless the sources are pointing in the same direction and have exactly the same values.

**TABLE 5.1** Equivalent circuit forms

	→	
	→	
	→	
	→	
	→	

**LINEARITY** All the circuits we have analyzed thus far have been linear circuits, which are described by a set of linear algebraic equations. Most of the circuits we will analyze in the remainder of the book will also be linear circuits, and any deviation from this type of network will be specifically identified as such.

Linearity requires both additivity and homogeneity (scaling). It can be shown that the circuits that we are examining satisfy this important property. The following example illustrates one way in which this property can be used.

For the circuit shown in Fig. 5.1, we wish to determine the output voltage  $V_{\text{out}}$ . However, rather than approach the problem in a straightforward manner and calculate  $I_o$ , then  $I_1$ , then  $I_2$ , and so on, we will use linearity and simply assume that the output voltage is  $V_{\text{out}} = 1 \text{ V}$ . This assumption will yield a value for the source voltage. We will then use the actual value of the source voltage and linearity to compute the actual value of  $V_{\text{out}}$ .

If we assume that  $V_{\text{out}} = V_2 = 1 \text{ V}$ , then

$$I_2 = \frac{V_2}{2\text{k}} = 0.5 \text{ mA}$$

$V_1$  can then be calculated as

$$\begin{aligned} V_1 &= 4\text{k}I_2 + V_2 \\ &= 3 \text{ V} \end{aligned}$$

Hence,

$$I_1 = \frac{V_1}{3\text{k}} = 1 \text{ mA}$$

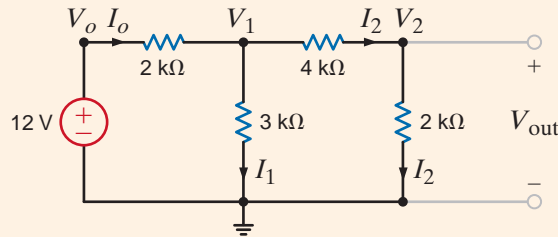
Now, applying KCL,

$$I_o = I_1 + I_2 = 1.5 \text{ mA}$$

Then

$$\begin{aligned} V_o &= 2\text{k}I_o + V_1 \\ &= 6 \text{ V} \end{aligned}$$

Therefore, the assumption that  $V_{\text{out}} = 1 \text{ V}$  produced a source voltage of 6 V. However, since the actual source voltage is 12 V, the actual output voltage is  $1 \text{ V}(12/6) = 2 \text{ V}$ .

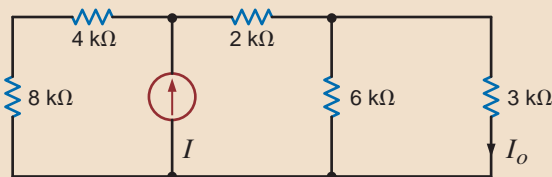


**Figure 5.1**  
Circuit used  
in Example 5.1.

## Learning Assessment

**E5.1** Use linearity and the assumption that  $I_o = 1 \text{ mA}$  to compute the correct current  $I_o$  in the circuit in Fig. E5.1 if  $I = 6 \text{ mA}$ .

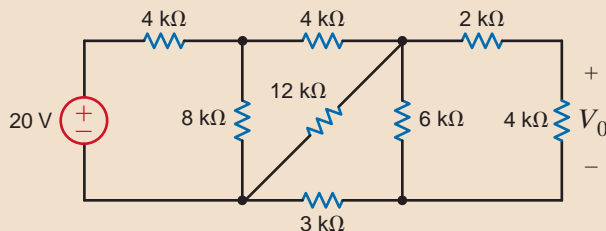
**ANSWER:**  $I_o = 3 \text{ mA}$ .



**Figure E5.1**

**E5.2** Find  $V_o$  in Fig. E5.2 using linearity and the assumption that  $V_o = 1 \text{ V}$ .

**ANSWER:**  $V_o = 5/3 \text{ V}$ .



**Figure E5.2**

## 5.2

## Superposition

EXAMPLE  
5.2

To provide motivation for this subject, let us examine the simple circuit of Fig. 5.2a, in which two sources contribute to the current in the network. The actual values of the sources are left unspecified so that we can examine the concept of superposition.

**SOLUTION** The mesh equations for this network are

$$\begin{aligned} 6ki_1(t) - 3ki_2(t) &= v_1(t) \\ -3ki_1(t) + 9ki_2(t) &= -v_2(t) \end{aligned}$$

Solving these equations for  $i_1(t)$  yields

$$i_1(t) = \frac{v_1(t)}{5k} - \frac{v_2(t)}{15k}$$

In other words, the current  $i_1(t)$  has a component due to  $v_1(t)$  and a component due to  $v_2(t)$ . In view of the fact that  $i_1(t)$  has two components, one due to each independent source, it would be interesting to examine what each source acting alone would contribute to  $i_1(t)$ . For  $v_1(t)$  to act alone,  $v_2(t)$  must be zero. As we pointed out in Chapter 2,  $v_2(t) = 0$  means that the source  $v_2(t)$  is replaced with a short circuit. Therefore, to determine the value of  $i_1(t)$  due to  $v_1(t)$  only, we employ the circuit in Fig. 5.2b and refer to this value of  $i_1(t)$  as  $i_1'(t)$ .

$$i_1'(t) = \frac{v_1(t)}{3k + \frac{(3k)(6k)}{3k + 6k}} = \frac{v_1(t)}{5k}$$

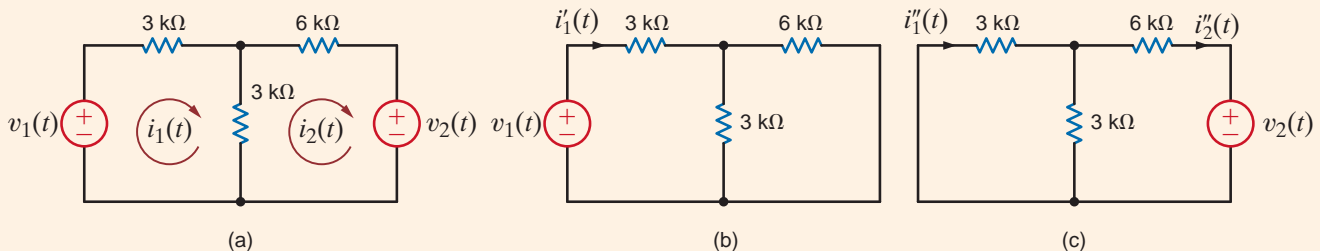
Let us now determine the value of  $i_1(t)$  due to  $v_2(t)$  acting alone and refer to this value as  $i_1''(t)$ . Using the network in Fig. 5.2c,

$$i_1''(t) = -\frac{v_2(t)}{6k + \frac{(3k)(3k)}{3k + 3k}} = \frac{-2v_2(t)}{15k}$$

Then, using current division, we obtain

$$i_1''(t) = \frac{-2v_2(t)}{15k} \left( \frac{3k}{3k + 3k} \right) = \frac{-v_2(t)}{15k}$$

**Figure 5.2**  
Circuits used to illustrate  
superposition.



Now, if we add the values of  $i_1'(t)$  and  $i_1''(t)$ , we obtain the value computed directly; that is,

$$i_1(t) = i_1'(t) + i_1''(t) = \frac{v_1(t)}{5k} - \frac{v_2(t)}{15k}$$

Note that we have *superposed* the value of  $i_1'(t)$  on  $i_1''(t)$ , or vice versa, to determine the unknown current.



What we have demonstrated in Example 5.2 is true in general for linear circuits and is a direct result of the property of linearity. *The principle of superposition*, which provides us with this ability to reduce a complicated problem to several easier problems—each containing only a single independent source—states that

In any linear circuit containing multiple independent sources, the current or voltage at any point in the network may be calculated as the algebraic sum of the individual contributions of each source acting alone.

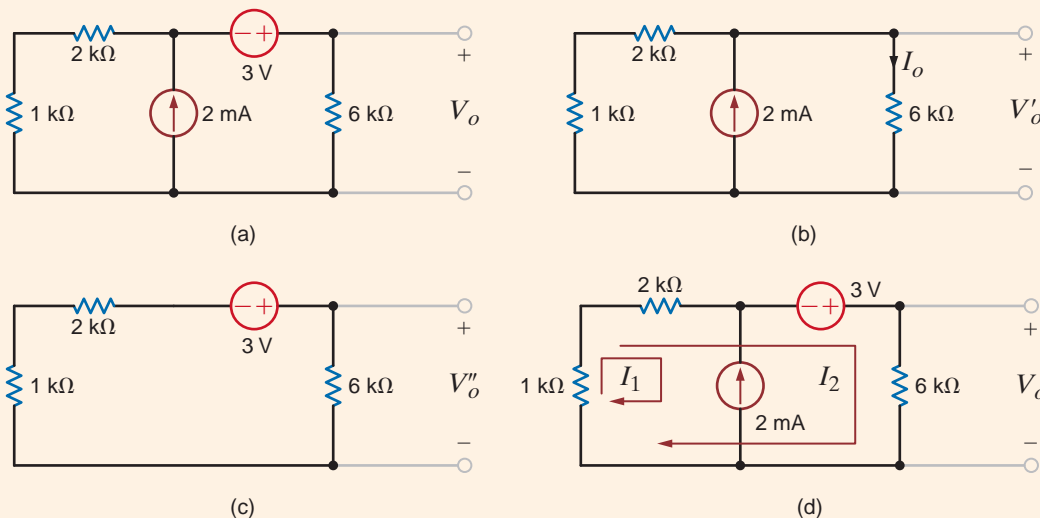
When determining the contribution due to an independent source, any remaining voltage sources are made zero by replacing them with short circuits, and any remaining current sources are made zero by replacing them with open circuits.

Although superposition can be used in linear networks containing dependent sources, it is not useful in this case since the dependent source is never made zero.

As the previous example indicates, superposition provides some insight in determining the contribution of each source to the variable under investigation.

We will now demonstrate superposition with two examples and then provide a problem-solving strategy for the use of this technique. For purposes of comparison, we will also solve the networks using both node and loop analyses. Furthermore, we will employ these same networks when demonstrating subsequent techniques, if applicable.

Let us use superposition to find  $V_o$  in the circuit in Fig. 5.3a.



### EXAMPLE 5.3

Figure 5.3  
Circuits used  
in Example 5.3.

The contribution of the 2-mA source to the output voltage is found from the network in Fig. 5.3b, using current division

$$I_o = (2 \times 10^{-3}) \left( \frac{1\text{k} + 2\text{k}}{1\text{k} + 2\text{k} + 6\text{k}} \right) = \frac{2}{3} \text{ mA}$$

and

$$V'_o = I_o(6\text{k}) = 4 \text{ V}$$

The contribution of the 3-V source to the output voltage is found from the circuit in Fig. 5.3c. Using voltage division,

$$\begin{aligned} V''_o &= 3 \left( \frac{6\text{k}}{1\text{k} + 2\text{k} + 6\text{k}} \right) \\ &= 2 \text{ V} \end{aligned}$$

Therefore,

$$V_o = V'_o + V''_o = 6 \text{ V}$$

Although we used two separate circuits to solve the problem, both were very simple.

### SOLUTION

If we use nodal analysis and Fig. 5.3a to find  $V_o$  and recognize that the 3-V source and its connecting nodes form a supernode,  $V_o$  can be found from the node equation

$$\frac{V_o - 3}{1\text{k} + 2\text{k}} - 2 \times 10^{-3} + \frac{V_o}{6\text{k}} = 0$$

which yields  $V_o = 6\text{ V}$ . In addition, loop analysis applied as shown in Fig. 5.3d produces the equations

$$I_1 = -2 \times 10^{-3}$$

and

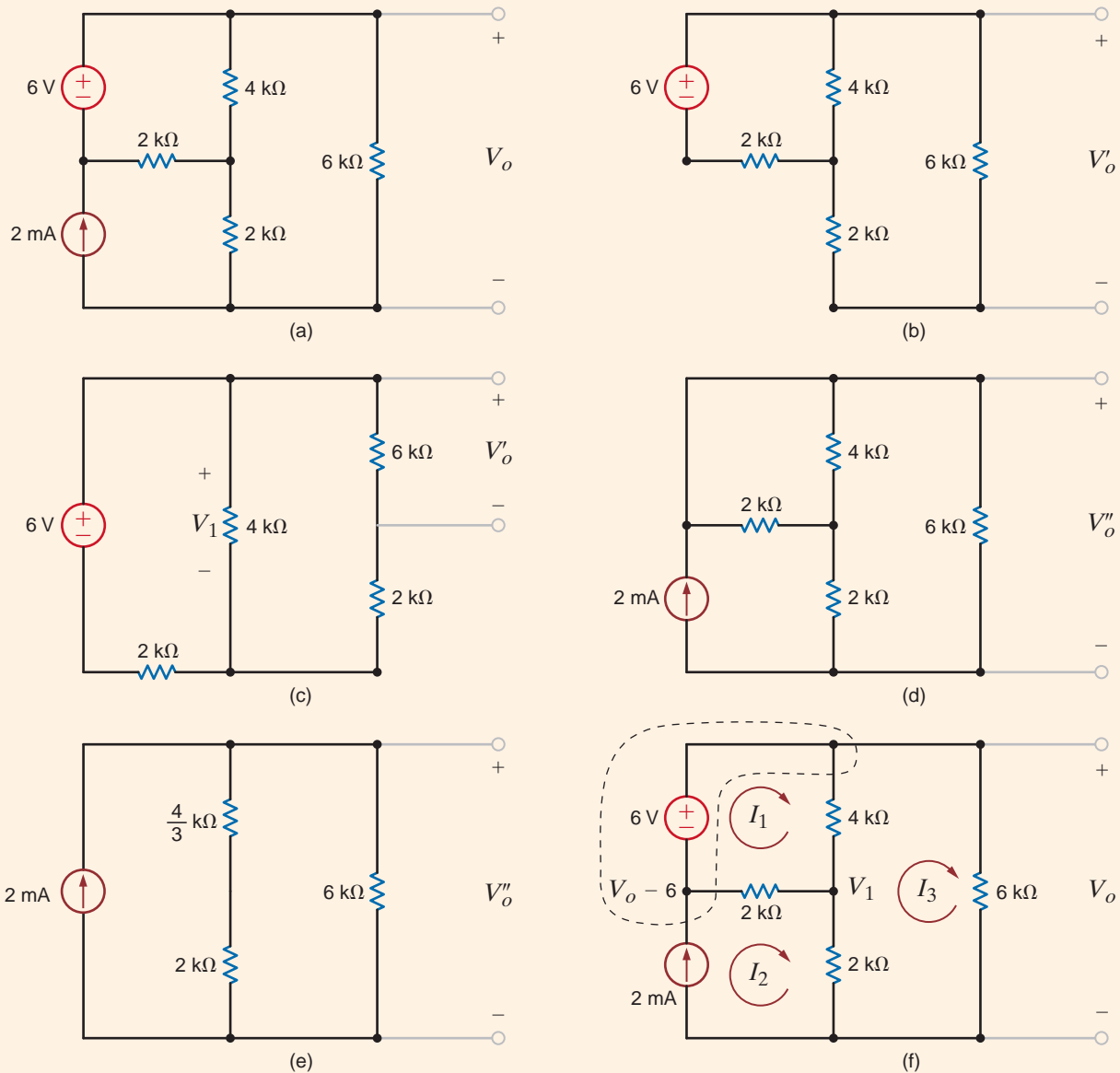
$$3\text{k}(I_1 + I_2) - 3 + 6\text{k}I_2 = 0$$

which yield  $I_2 = 1\text{ mA}$  and hence  $V_o = 6\text{ V}$ .

**EXAMPLE**

Consider now the network in Fig. 5.4a. Let us use superposition to find  $V_o$ .

**5.4**



**Figure 5.4**

Circuits used in Example 5.4.

The contribution of the 6-V source to  $V_o$  is found from the network in Fig. 5.4b, which is redrawn in Fig. 5.4c. The  $2\text{ k}\Omega + 6\text{ k}\Omega = 8\text{-k}\Omega$  resistor and  $4\text{-k}\Omega$  resistor are in parallel, and their combination is an  $8/3\text{-k}\Omega$  resistor. Then, using voltage division,

$$V_1 = 6 \left( \frac{\frac{8}{3}\text{k}}{\frac{8}{3}\text{k} + 2\text{k}} \right) = \frac{24}{7}\text{ V}$$

Applying voltage division again,

$$V'_o = V_1 \left( \frac{6\text{k}}{6\text{k} + 2\text{k}} \right) = \frac{18}{7}\text{ V}$$

The contribution of the 2-mA source is found from Fig. 5.4d, which is redrawn in Fig. 5.4e.  $V''_o$  is simply equal to the product of the current source and the parallel combination of the resistors; that is,

$$V''_o = (2 \times 10^{-3}) \left( \frac{10}{3}\text{k} // 6\text{k} \right) = \frac{30}{7}\text{ V}$$

Then

$$V_o = V'_o + V''_o = \frac{48}{7}\text{ V}$$

A nodal analysis of the network can be performed using Fig. 5.4f. The equation for the supernode is

$$-2 \times 10^{-3} + \frac{(V_o - 6) - V_1}{2\text{k}} + \frac{V_o - V_1}{4\text{k}} + \frac{V_o}{6\text{k}} = 0$$

The equation for the node labeled  $V_1$  is

$$\frac{V_1 - V_o}{4\text{k}} + \frac{V_1 - (V_o - 6)}{2\text{k}} + \frac{V_1}{2\text{k}} = 0$$

Solving these two equations, which already contain the constraint equation for the supernode, yields  $V_o = 48/7\text{ V}$ .

Once again, referring to the network in Fig. 5.4f, the mesh equations for the network are

$$\begin{aligned} -6 + 4\text{k}(I_1 - I_3) + 2\text{k}(I_1 - I_2) &= 0 \\ I_2 &= 2 \times 10^{-3} \\ 2\text{k}(I_3 - I_2) + 4\text{k}(I_3 - I_1) + 6\text{k}I_3 &= 0 \end{aligned}$$

Solving these equations, we obtain  $I_3 = 8/7\text{ mA}$  and, hence,  $V_o = 48/7\text{ V}$ .

**SOLUTION**

Let us demonstrate the power of superposition in the analysis of op-amp circuits by determining the input/output relationship for the op-amp configuration shown in Fig. 5.5a.

**EXAMPLE  
5.5**

The contribution of  $V_1$  to the output  $V_o$  is derived from the network in Fig. 5.5b where  $V_2$  is set to zero. This circuit is the basic inverting gain configuration and

**SOLUTION**

$$\frac{V_{o1}}{V_1} = -\frac{R_2}{R_1}$$

The contribution due to  $V_2$  is shown in Fig. 5.5c where  $V_1$  is set to zero. This circuit is the basic noninverting configuration and

$$\frac{V_{o2}}{V_2} = 1 + \frac{R_2}{R_1}$$

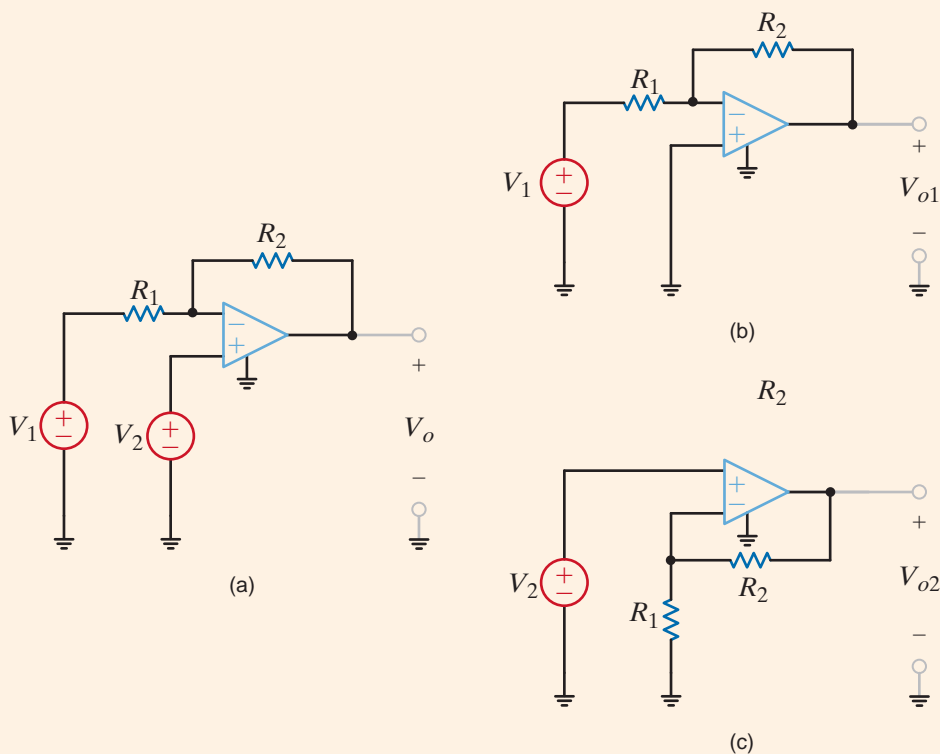
Therefore, using superposition,

$$V_o = \left[ 1 + \frac{R_2}{R_1} \right] V_2 - \left[ \frac{R_2}{R_1} \right] V_1$$

Thus, in this case, we have used what we learned in Chapter 4, via superposition, to immediately derive the input/output relationship for the network in Fig. 5.5a.

**Figure 5.5**

(a) A superposition example circuit; (b) the circuit with  $V_2$  set to zero; (c) the circuit with  $V_1$  set to zero.



## Problem-Solving Strategy

### Applying Superposition

- Step 1.** In a network containing multiple independent sources, each source can be applied independently with the remaining sources turned off.
- Step 2.** To turn off a voltage source, replace it with a short circuit, and to turn off a current source, replace it with an open circuit.
- Step 3.** When the individual sources are applied to the circuit, all the circuit laws and techniques we have learned, or will soon learn, can be applied to obtain a solution.
- Step 4.** The results obtained by applying each source independently are then added together algebraically to obtain a solution.

Superposition can be applied to a circuit with any number of dependent and independent sources. In fact, superposition can be applied to such a network in a variety of ways. For example, a circuit with three independent sources can be solved using each source acting alone, as we have just demonstrated, or we could use two at a time and sum the result with

that obtained from the third acting alone. In addition, the independent sources do not have to assume their actual value or zero. However, it is mandatory that the sum of the different values chosen add to the total value of the source.

Superposition is a fundamental property of linear equations and, therefore, can be applied to any effect that is linearly related to its cause. In this regard it is important to point out that although superposition applies to the current and voltage in a linear circuit, it cannot be used to determine power because power is a nonlinear function.

## Learning Assessment

**E5.3** Compute  $V_o$  in circuit in Fig. E5.3 using superposition.

**ANSWER:**  $V_o = \frac{4}{3}$  V.

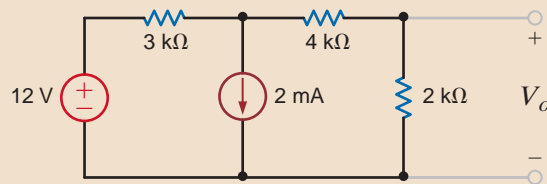


Figure E5.3

**E5.4** Find  $V_o$  in Fig. E5.4 using superposition.

**ANSWER:**  $V_o = 5.6$  V.

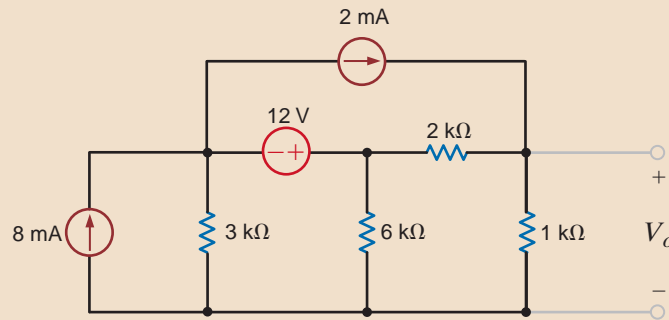


Figure E5.4

**E5.5** Find  $I_o$  in Fig. E5.5 using superposition.

**ANSWER:**  $I_o = -2/3$  mA.

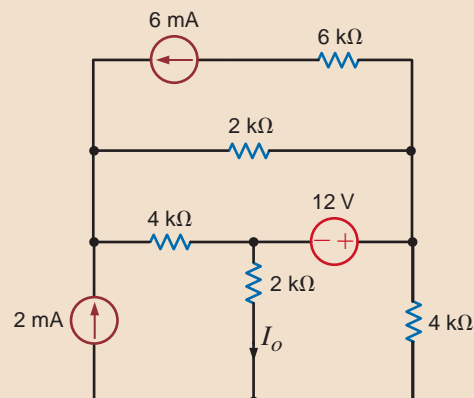


Figure E5.5

## 5.3

Thévenin's  
and Norton's  
Theorems

Thus far we have presented a number of techniques for circuit analysis. At this point we will add two theorems to our collection of tools that will prove to be extremely useful. The theorems are named after their authors, M. L. Thévenin, a French engineer, and E. L. Norton, a scientist formerly with Bell Telephone Laboratories.

Suppose that we are given a circuit and that we wish to find the current, voltage, or power that is delivered to some resistor of the network, which we will call the load. *Thévenin's theorem* tells us that we can replace the entire network, exclusive of the load, by an equivalent circuit that contains only an independent voltage source in series with a resistor in such a way that the current–voltage relationship at the load is unchanged. *Norton's theorem* is identical to the preceding statement except that the equivalent circuit is an independent current source in parallel with a resistor.

Note that this is a very important result. It tells us that if we examine any network from a pair of terminals, we know that with respect to those terminals, the entire network is equivalent to a simple circuit consisting of an independent voltage source in series with a resistor or an independent current source in parallel with a resistor.

In developing the theorems, we will assume that the circuit shown in Fig. 5.6a can be split into two parts, as shown in Fig. 5.6b. In general, circuit *B* is the load and may be linear or nonlinear. Circuit *A* is the balance of the original network exclusive of the load and must be linear. As such, circuit *A* may contain independent sources, dependent sources and resistors, or any other linear element. We require, however, that a dependent source and its control variable appear in the same circuit.

Circuit *A* delivers a current  $i$  to circuit *B* and produces a voltage  $v_o$  across the input terminals of circuit *B*. From the standpoint of the terminal relations of circuit *A*, we can replace circuit *B* by a voltage source of  $v_o$  volts (with the proper polarity), as shown in Fig. 5.6c. Since the terminal voltage is unchanged and circuit *A* is unchanged, the terminal current  $i$  is unchanged.

Now, applying the principle of superposition to the network shown in Fig. 5.6c, the total current  $i$  shown in the figure is the sum of the currents caused by all the sources in circuit *A* and the source  $v_o$  that we have just added. Therefore, via superposition the current  $i$  can be written

$$i = i_o + i_{sc} \quad 5.1$$

where  $i_o$  is the current due to  $v_o$  with all independent sources in circuit *A* made zero (i.e., voltage sources replaced by short circuits and current sources replaced by open circuits), and  $i_{sc}$  is the short-circuit current due to all sources in circuit *A* with  $v_o$  replaced by a short circuit.

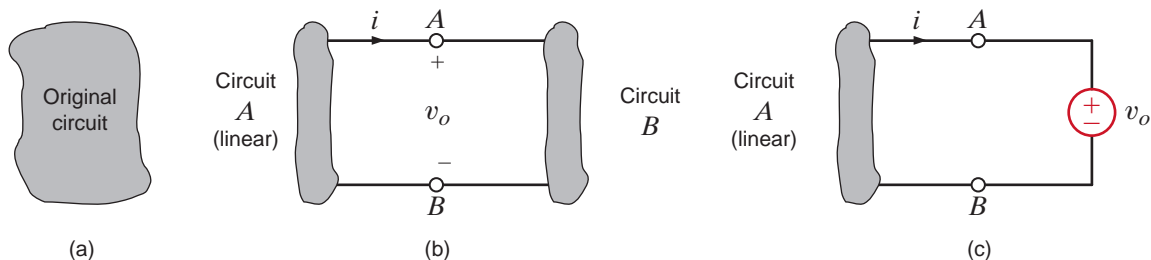
The terms  $i_o$  and  $v_o$  are related by the equation

$$i_o = \frac{-v_o}{R_{Th}} \quad 5.2$$

where  $R_{Th}$  is the equivalent resistance looking back into circuit *A* from terminals *A-B* with all independent sources in circuit *A* made zero.

Figure 5.6

Concepts used to develop Thévenin's theorem.



Substituting Eq. (5.2) into Eq. (5.1) yields

$$i = -\frac{v_o}{R_{Th}} + i_{sc} \quad 5.3$$

This is a general relationship and, therefore, must hold for any specific condition at terminals  $A$ - $B$ . As a specific case, suppose that the terminals are open-circuited. For this condition,  $i = 0$  and  $v_o$  is equal to the open-circuit voltage  $v_{oc}$ . Thus, Eq. (5.3) becomes

$$i = 0 = \frac{-v_{oc}}{R_{Th}} + i_{sc} \quad 5.4$$

Hence,

$$v_{oc} = R_{Th}i_{sc} \quad 5.5$$

This equation states that the open-circuit voltage is equal to the short-circuit current times the equivalent resistance looking back into circuit  $A$  with all independent sources made zero. We refer to  $R_{Th}$  as the Thévenin equivalent resistance.

Substituting Eq. (5.5) into Eq. (5.3) yields

$$i = \frac{-v_o}{R_{Th}} + \frac{v_{oc}}{R_{Th}}$$

or

$$v_o = v_{oc} - R_{Th}i \quad 5.6$$

Let us now examine the circuits that are described by these equations. The circuit represented by Eq. (5.6) is shown in Fig. 5.7a. The fact that this circuit is equivalent at terminals  $A$ - $B$  to circuit  $A$  in Fig. 5.6 is a statement of *Thévenin's theorem*. The circuit represented by Eq. (5.3) is shown in Fig. 5.7b. The fact that this circuit is equivalent at terminals  $A$ - $B$  to circuit  $A$  in Fig. 5.6 is a statement of *Norton's theorem*.

Having demonstrated that there is an inherent relationship between the Thévenin equivalent circuit and the Norton equivalent circuit, we now proceed to apply these two important and useful theorems. The manner in which these theorems are applied depends on the structure of the original network under investigation. For example, if only independent sources are present, we can calculate the open-circuit voltage or short-circuit current and the Thévenin equivalent resistance. However, if dependent sources are also present, the Thévenin equivalent will be determined by calculating  $v_{oc}$  and  $i_{sc}$ , since this is normally the best approach for determining  $R_{Th}$  in a network containing dependent sources. Finally, if circuit  $A$  contains no *independent* sources, then both  $v_{oc}$  and  $i_{sc}$  will necessarily be zero. (Why?) Thus, we cannot determine  $R_{Th}$  by  $v_{oc}/i_{sc}$ , since the ratio is indeterminate. We must look for another approach. Notice that if  $v_{oc} = 0$ , then the equivalent circuit is merely the unknown resistance  $R_{Th}$ . If we apply an external source to circuit  $A$ —a test source  $v_t$ —and determine the current,  $i_t$ , which

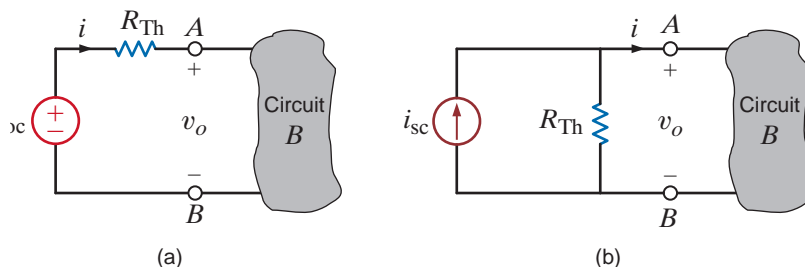


Figure 5.7

(a) Thévenin and (b) Norton equivalent circuits.

flows into circuit *A* from  $v_i$ , then  $R_{Th}$  can be determined from  $R_{Th} = v_i/i_i$ . Although the numerical value of  $v_i$  need not be specified, we could let  $v_i = 1\text{ V}$  and then  $R_{Th} = 1/i_i$ . Alternatively, we could use a current source as a test source and let  $i_i = 1\text{ A}$ ; then  $v_i = (1)R_{Th}$ .

Before we begin our analysis of several examples that will demonstrate the utility of these theorems, remember that these theorems, in addition to being another approach, often permit us to solve several small problems rather than one large one. They allow us to replace a network, no matter how large, at a pair of terminals with a Thévenin or Norton equivalent circuit. In fact, we could represent the entire U.S. power grid at a pair of terminals with one of the equivalent circuits. Once this is done, we can quickly analyze the effect of different loads on a network. Thus, these theorems provide us with additional insight into the operation of a specific network.

**CIRCUITS CONTAINING ONLY INDEPENDENT SOURCES**

**EXAMPLE**

**5.6 SOLUTION**

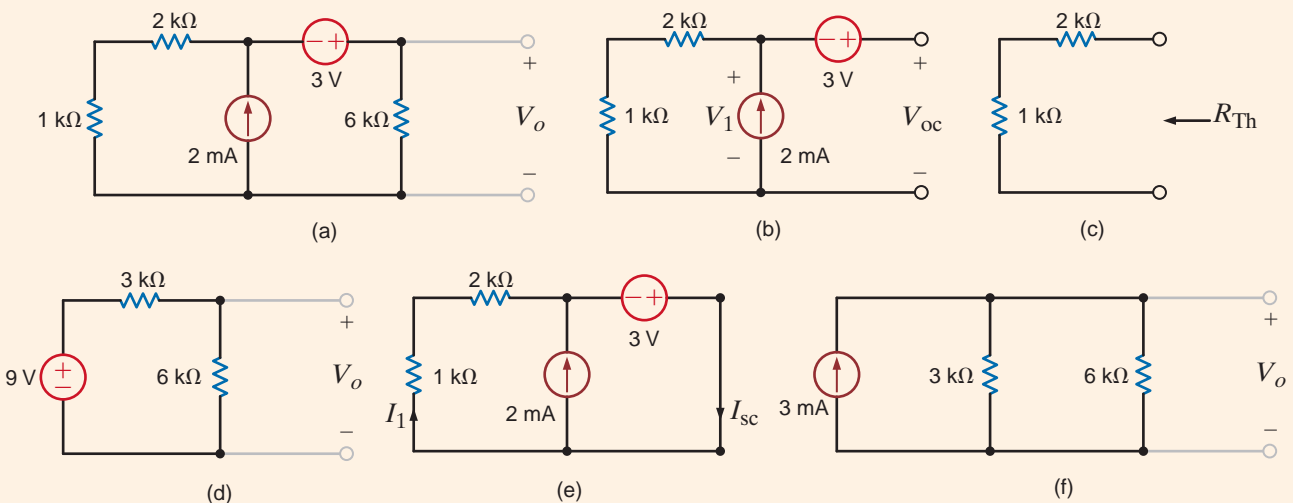
Let us use Thévenin’s and Norton’s theorems to find  $V_o$  in the network in Example 5.3.

The circuit is redrawn in Fig. 5.8a. To determine the Thévenin equivalent, we break the network at the 6-k $\Omega$  load as shown in Fig. 5.8b. KVL indicates that the open-circuit voltage,  $V_{oc}$ , is equal to 3 V plus the voltage  $V_1$ , which is the voltage across the current source. The 2 mA from the current source flows through the two resistors (where else could it possibly go!) and, therefore,  $V_1 = (2 \times 10^{-3})(1k + 2k) = 6\text{ V}$ . Therefore,  $V_{oc} = 9\text{ V}$ . By making both sources zero, we can find the Thévenin equivalent resistance,  $R_{Th}$ , using the circuit in Fig. 5.8c. Obviously,  $R_{Th} = 3\text{ k}\Omega$ . Now our Thévenin equivalent circuit, consisting of  $V_{oc}$  and  $R_{Th}$ , is connected back to the original terminals of the load, as shown in Fig. 5.8d. Using a simple voltage divider, we find that  $V_o = 6\text{ V}$ .

To determine the Norton equivalent circuit at the terminals of the load, we must find the short-circuit current as shown in Fig. 5.8e. Note that the short circuit causes the 3-V source to be directly across (i.e., in parallel with) the resistors and the current source. Therefore,  $I_1 = 3/(1k + 2k) = 1\text{ mA}$ . Then, using KCL,  $I_{sc} = 3\text{ mA}$ . We have already determined  $R_{Th}$ , and, therefore, connecting the Norton equivalent to the load results in the circuit in Fig. 5.8f. Hence,  $V_o$  is equal to the source current multiplied by the parallel resistor combination, which is 6 V.

**Figure 5.8**

Circuits used in Example 5.6.





Consider for a moment some salient features of this example. Note that in applying the theorems there is no point in breaking the network to the left of the 3-V source, since the resistors in parallel with the current source are already a Norton equivalent. Furthermore, once the network has been simplified using a Thévenin or Norton equivalent, we simply have a new network with which we can apply the theorems again. The following example illustrates this approach.

Let us use Thévenin's theorem to find  $V_o$  in the network in Fig. 5.9a.

### EXAMPLE

If we break the network to the left of the current source, the open-circuit voltage  $V_{oc_1}$  is as shown in Fig. 5.9b. Since there is no current in the 2-k $\Omega$  resistor and therefore no voltage across it,  $V_{oc_1}$  is equal to the voltage across the 6-k $\Omega$  resistor, which can be determined by voltage division as

### SOLUTION 5.7

$$V_{oc_1} = 12 \left( \frac{6k}{6k + 3k} \right) = 8 \text{ V}$$

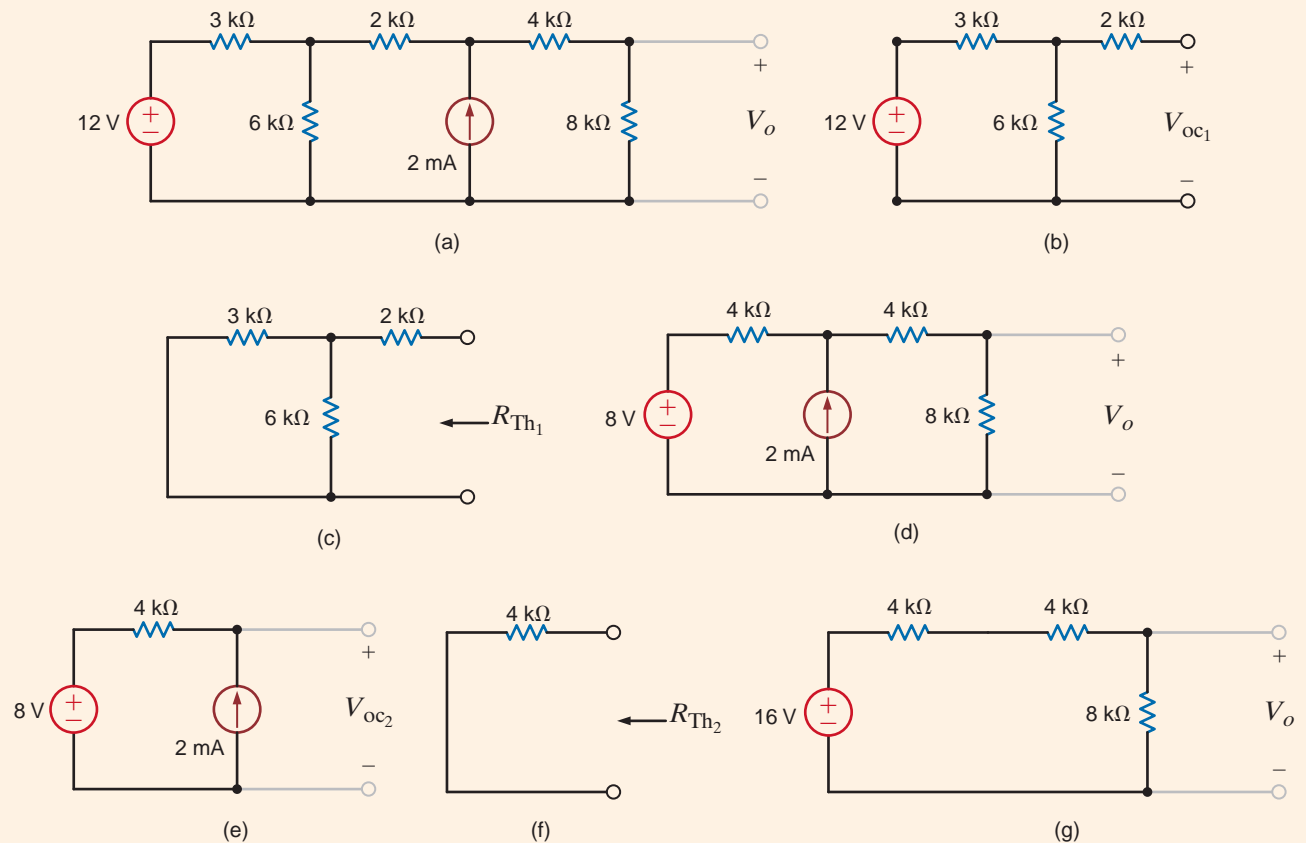
The Thévenin equivalent resistance,  $R_{Th_1}$ , is found from Fig. 5.9c as

$$R_{Th_1} = 2k + \frac{(3k)(6k)}{3k + 6k} = 4 \text{ k}\Omega$$

Connecting this Thévenin equivalent back to the original network produces the circuit shown in Fig. 5.9d. We can now apply Thévenin's theorem again, and this time we break the network to the right of the current source as shown in Fig. 5.9e. In this case  $V_{oc_2}$  is

$$V_{oc_2} = (2 \times 10^{-3})(4k) + 8 = 16 \text{ V}$$

Figure 5.9  
Circuits used in Example 5.7.



and  $R_{Th_2}$  obtained from Fig. 5.9f is  $4\text{ k}\Omega$ . Connecting this Thévenin equivalent to the remainder of the network produces the circuit shown in Fig. 5.9g. Simple voltage division applied to this final network yields  $V_o = 8\text{ V}$ . Norton's theorem can be applied in a similar manner to solve this network; however, we save that solution as an exercise.

**EXAMPLE****5.8****SOLUTION**

It is instructive to examine the use of Thévenin's and Norton's theorems in the solution of the network in Fig. 5.4a, which is redrawn in Fig. 5.10a.

If we break the network at the  $6\text{-k}\Omega$  load, the open-circuit voltage is found from Fig. 5.10b. The equations for the mesh currents are

$$-6 + 4kI_1 + 2k(I_1 - I_2) = 0$$

and

$$I_2 = 2 \times 10^{-3}$$

from which we easily obtain  $I_1 = 5/3\text{ mA}$ . Then, using KVL,  $V_{oc}$  is

$$\begin{aligned} V_{oc} &= 4kI_1 + 2kI_2 \\ &= 4k\left(\frac{5}{3} \times 10^{-3}\right) + 2k(2 \times 10^{-3}) \\ &= \frac{32}{3}\text{ V} \end{aligned}$$

$R_{Th}$  is derived from Fig. 5.10c and is

$$R_{Th} = (2k//4k) + 2k = \frac{10}{3}\text{ k}\Omega$$

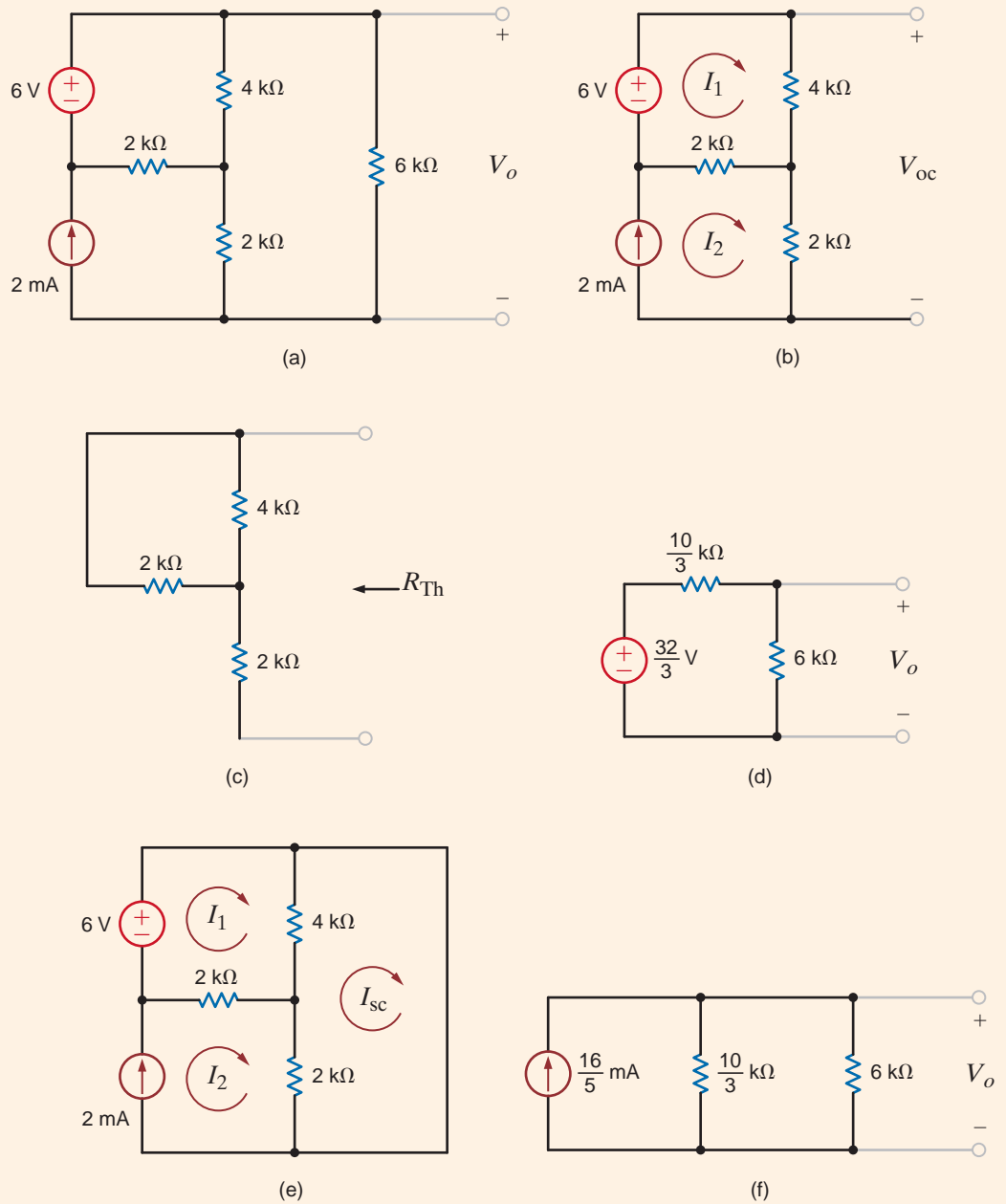
Attaching the Thévenin equivalent to the load produces the network in Fig. 5.10d. Then using voltage division, we obtain

$$\begin{aligned} V_o &= \frac{32}{3} \left( \frac{6k}{6k + \frac{10}{3}k} \right) \\ &= \frac{48}{7}\text{ V} \end{aligned}$$

In applying Norton's theorem to this problem, we must find the short-circuit current shown in Fig. 5.10e. At this point the quick-thinking reader stops immediately! Three mesh equations applied to the original circuit will immediately lead to the solution, but the three mesh equations in the circuit in Fig. 5.10e will provide only part of the answer, specifically the short-circuit current. Sometimes the use of the theorems is more complicated than a straightforward attack using node or loop analysis. This would appear to be one of those situations. Interestingly, it is not. We can find  $I_{sc}$  from the network in Fig. 5.10e without using the mesh equations. The technique is simple, but a little tricky, and so we ignore it at this time. Having said all these things, let us now finish what we have started. The mesh equations for the network in Fig. 5.10e are

$$\begin{aligned} -6 + 4k(I_1 - I_{sc}) + 2k(I_1 - 2 \times 10^{-3}) &= 0 \\ 2k(I_{sc} - 2 \times 10^{-3}) + 4k(I_{sc} - I_1) &= 0 \end{aligned}$$

where we have incorporated the fact that  $I_2 = 2 \times 10^{-3}$  A. Solving these equations yields  $I_{sc} = 16/5$  mA.  $R_{Th}$  has already been determined in the Thévenin analysis. Connecting the Norton equivalent to the load results in the circuit in Fig. 5.10f. Solving this circuit yields  $V_o = 48/7$  V.



**Figure 5.10**

Circuits used in Example 5.8.

## Learning Assessments

**E5.6** Use Thévenin's theorem to find  $V_o$  in the network in Fig. E5.6.

**ANSWER:**  $V_o = -3\text{V}$ .

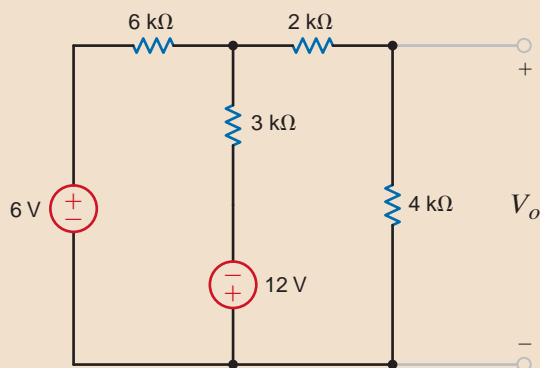


Figure E5.6

**E5.7** Find  $V_o$  in the circuit in Fig. E5.6 using both Thévenin's and Norton's theorems. When deriving the Norton equivalent circuit, break the network to the left of the 4-k $\Omega$  resistor. Why?

**ANSWER:**  $V_o = \frac{4}{3}\text{V}$ .

**E5.8** Find  $V_o$  in Fig. E5.8 using Thévenin's theorem.

**ANSWER:**  $V_o = 3.88\text{V}$ .

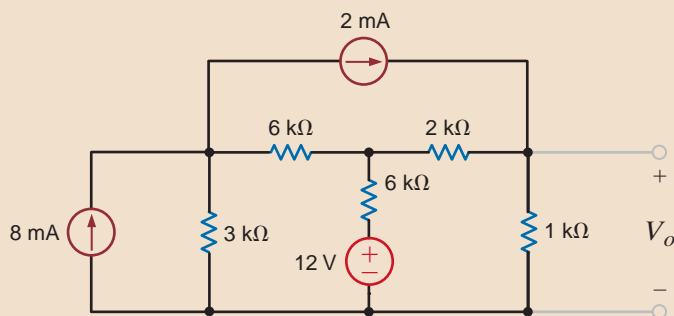


Figure E5.8

**E5.9** Find  $I_o$  in Fig. E5.9 using Norton's theorem.

**ANSWER:**  $I_o = -0.857\text{mA}$ .

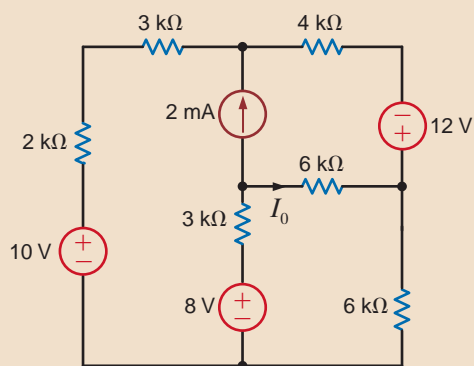


Figure E5.9

**CIRCUITS CONTAINING ONLY DEPENDENT SOURCES** As we have stated earlier, the Thévenin or Norton equivalent of a network containing only dependent sources is  $R_{Th}$ . The following examples will serve to illustrate how to determine this Thévenin equivalent resistance.

We wish to determine the Thévenin equivalent of the network in Fig. 5.11a at the terminals A-B.

## EXAMPLE 5.9

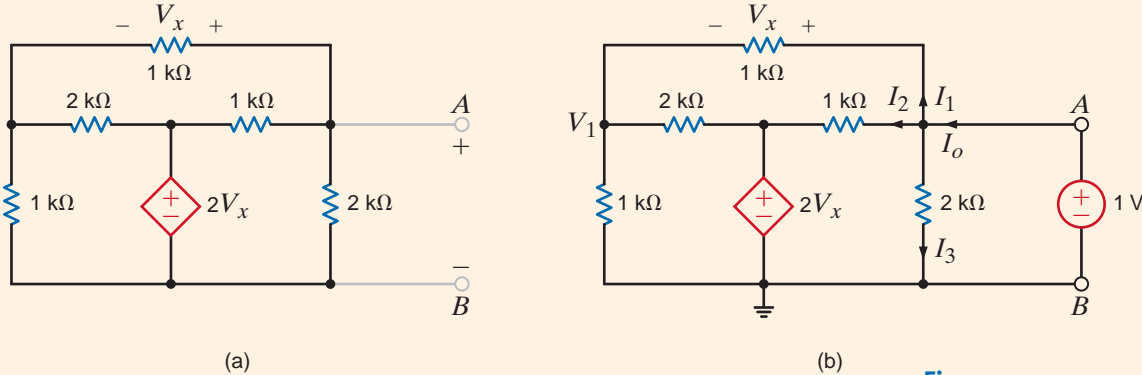


Figure 5.11

Networks employed in Example 5.9.

Our approach to this problem will be to apply a 1-V source at the terminals as shown in Fig. 5.11b and then compute the current  $I_o$  and  $R_{Th} = 1/I_o$ .

## SOLUTION

The equations for the network in Fig. 5.11b are as follows. KVL around the outer loop specifies that

$$V_1 + V_x = 1$$

The KCL equation at the node labeled  $V_1$  is

$$\frac{V_1}{1k} + \frac{V_1 - 2V_x}{2k} + \frac{V_1 - 1}{1k} = 0$$

Solving the equations for  $V_x$  yields  $V_x = 3/7$  V. Knowing  $V_x$ , we can compute the currents  $I_1$ ,  $I_2$ , and  $I_3$ . Their values are

$$I_1 = \frac{V_x}{1k} = \frac{3}{7} \text{ mA}$$

$$I_2 = \frac{1 - 2V_x}{1k} = \frac{1}{7} \text{ mA}$$

$$I_3 = \frac{1}{2k} = \frac{1}{2} \text{ mA}$$

Therefore,

$$\begin{aligned} I_o &= I_1 + I_2 + I_3 \\ &= \frac{15}{14} \text{ mA} \end{aligned}$$

and

$$\begin{aligned} R_{Th} &= \frac{1}{I_o} \\ &= \frac{14}{15} \text{ k}\Omega \end{aligned}$$

**EXAMPLE**
**5.10 SOLUTION**

Let us determine  $R_{Th}$  at the terminals  $A-B$  for the network in Fig. 5.12a.

Our approach to this problem will be to apply a 1-mA current source at the terminals  $A-B$  and compute the terminal voltage  $V_2$  as shown in Fig. 5.12b. Then  $R_{Th} = V_2/0.001$ .

The node equations for the network are

$$\frac{V_1 - 2000I_x}{2k} + \frac{V_1}{1k} + \frac{V_1 - V_2}{3k} = 0$$

$$\frac{V_2 - V_1}{3k} + \frac{V_2}{2k} = 1 \times 10^{-3}$$

and

$$I_x = \frac{V_1}{1k}$$

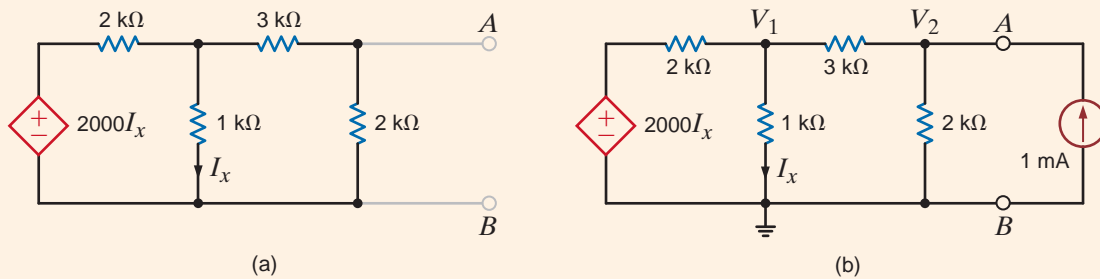
Solving these equations yields

$$V_2 = \frac{10}{7} \text{ V}$$

and hence,

$$\begin{aligned} R_{Th} &= \frac{V_2}{1 \times 10^{-3}} \\ &= \frac{10}{7} \text{ k}\Omega \end{aligned}$$

**Figure 5.12**  
Networks used  
in Example 5.10.



**CIRCUITS CONTAINING BOTH INDEPENDENT AND DEPENDENT SOURCES** In these types of circuits we must calculate both the open-circuit voltage and short-circuit current to calculate the Thévenin equivalent resistance. Furthermore, we must remember that we cannot split the Thévenin source and its controlling variable when we break the network to find the Thévenin or Norton equivalent.

We now illustrate this technique with a circuit containing a current-controlled voltage source.

**EXAMPLE**
**5.11 SOLUTION**

Let us use Thévenin's theorem to find  $V_o$  in the network in Fig. 5.13a.

To begin, we break the network at points  $A-B$ . Could we break it just to the right of the 12-V source? No! Why? The open-circuit voltage is calculated from the network in Fig. 5.13b. Note that we now use the source  $2000I'_x$  because this circuit is different from that in Fig. 5.13a. KCL for the supernode around the 12-V source is

$$\frac{(V_{oc} + 12) - (-2000I'_x)}{1k} + \frac{V_{oc} + 12}{2k} + \frac{V_{oc}}{2k} = 0$$

where

$$I'_x = \frac{V_{oc}}{2k}$$

yielding  $V_{oc} = -6 V$ .

$I_{sc}$  can be calculated from the circuit in Fig. 5.13c. Note that the presence of the short circuit forces  $I''_x$  to zero and, therefore, the network is reduced to that shown in Fig. 5.13d.

Therefore,

$$I_{sc} = \frac{-12}{\frac{2}{3}k} = -18 \text{ mA}$$

Then

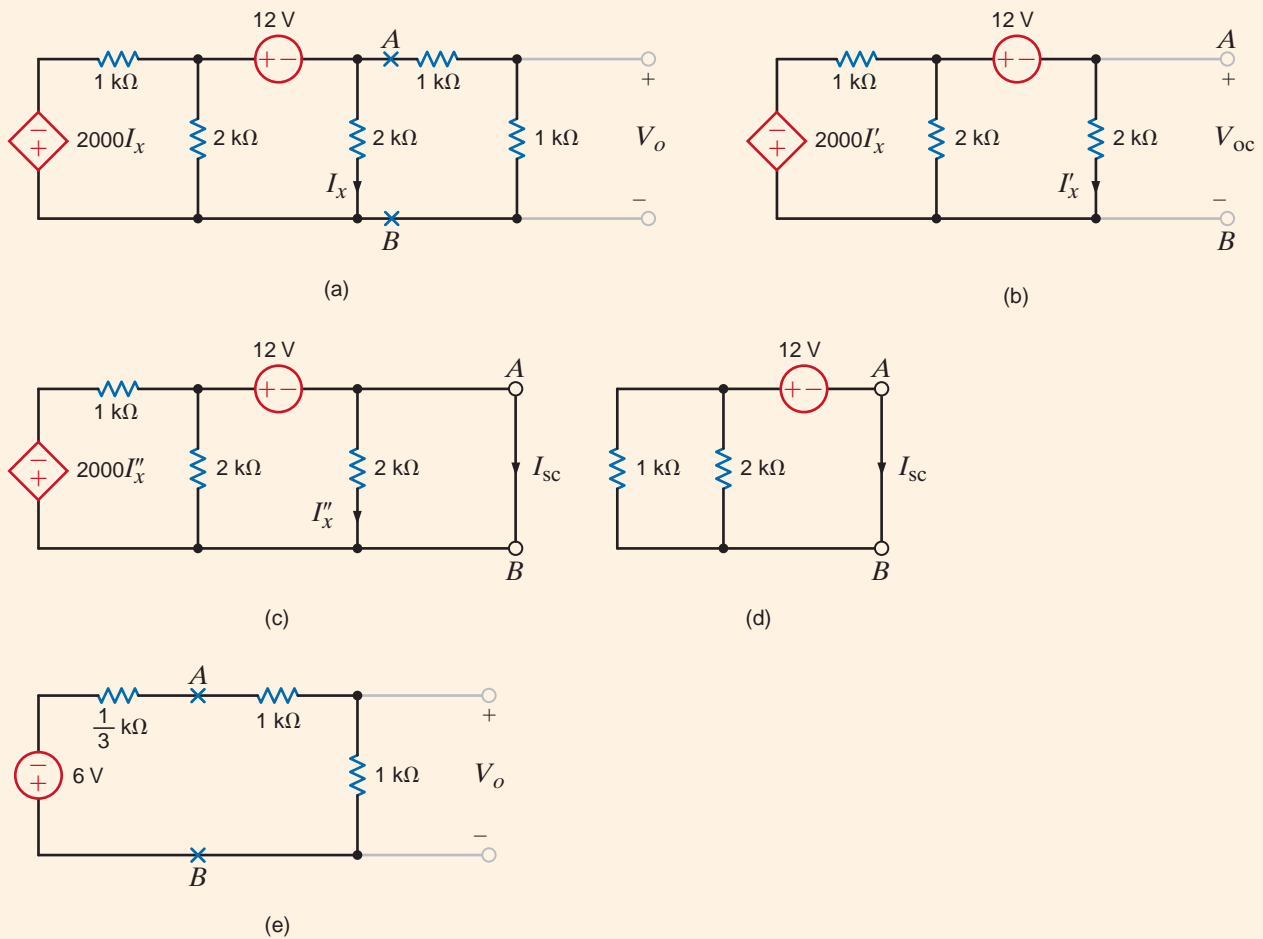
$$R_{Th} = \frac{V_{oc}}{I_{sc}} = \frac{1}{3} k\Omega$$

Connecting the Thévenin equivalent circuit to the remainder of the network at terminals A-B produces the circuit in Fig. 5.13e. At this point, simple voltage division yields

$$V_o = (-6) \left( \frac{1k}{1k + 1k + \frac{1}{3}k} \right) = \frac{-18}{7} \text{ V}$$

**Figure 5.13**

Circuits used in Example 5.11.



**EXAMPLE**

Let us find  $V_o$  in the network in Fig. 5.14a using Thévenin's theorem.

**5.12 SOLUTION**

$V_{oc}$  is determined from the network in Fig. 5.14b. Note that

$$I_1 = \frac{V'_x}{2k}$$

$$I_2 = 2 \text{ mA}$$

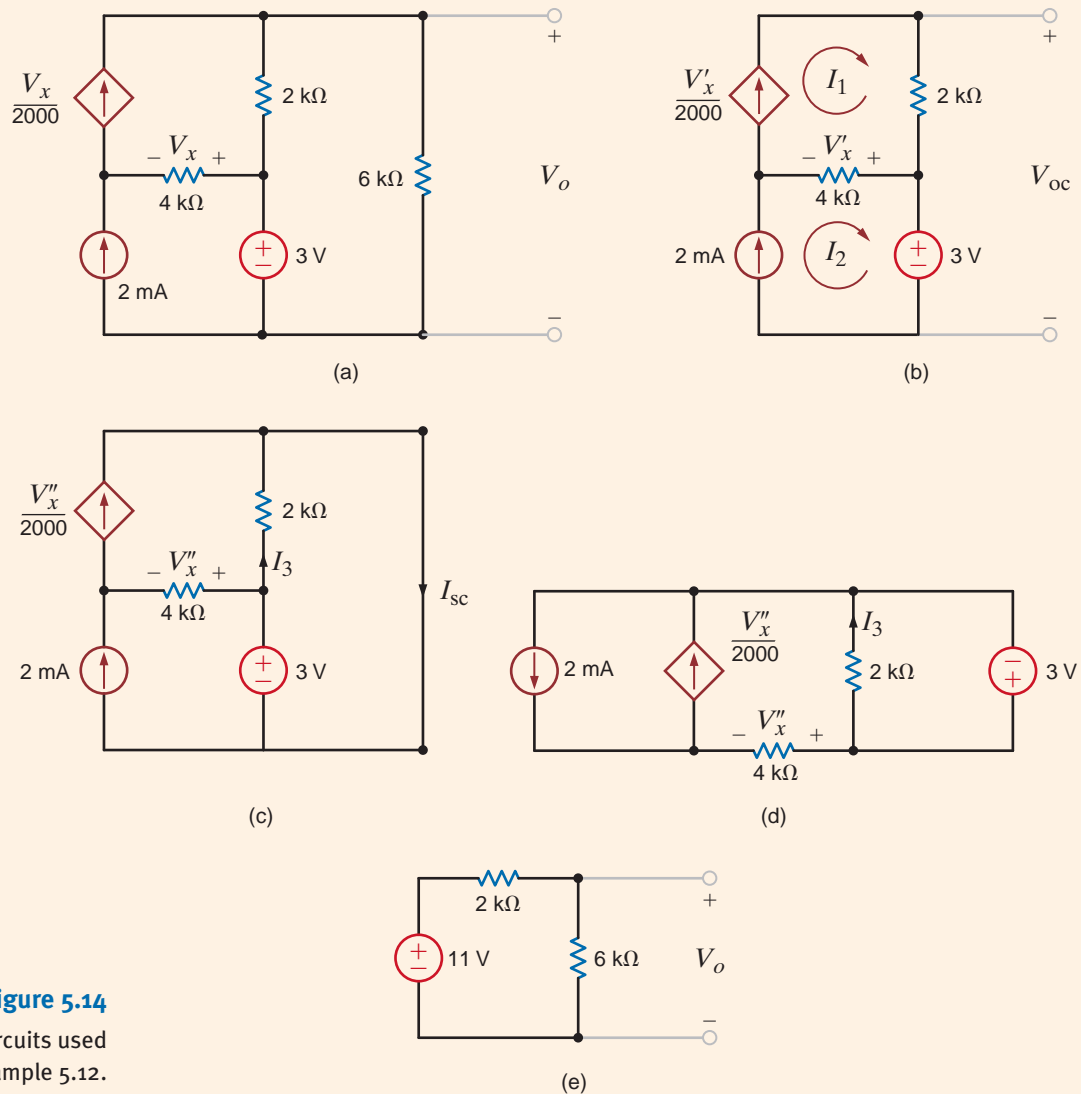
and

$$V'_x = 4k \left( \frac{V'_x}{2k} - 2 \times 10^{-3} \right)$$

Solving these equations yields  $I_1 = 4 \text{ mA}$  and, hence,

$$V_{oc} = 2kI_1 + 3 = 11 \text{ V}$$

$I_{sc}$  is derived from the circuit in Fig. 5.14c. Note that if we collapse the short circuit, the network is reduced to that in Fig. 5.14d. Although we have temporarily lost sight of  $I_{sc}$ , we can



**Figure 5.14**  
Circuits used  
in Example 5.12.



easily find the branch currents and they, in turn, will yield  $I_{sc}$ . KCL at the node at the bottom left of the network is

$$\frac{V_x''}{4k} = \frac{V_x''}{2000} - 2 \times 10^{-3}$$

or

$$V_x'' = 8 \text{ V}$$

Then since

$$I_3 = \frac{3}{2k} = \frac{3}{2} \text{ mA}$$

as shown in Fig. 5.14c,

$$\begin{aligned} I_{sc} &= \frac{V_x''}{2000} + I_3 \\ &= \frac{11}{2} \text{ mA} \end{aligned}$$

Then

$$R_{Th} = \frac{V_{oc}}{I_{sc}} = 2 \text{ k}\Omega$$

Connecting the Thévenin equivalent circuit to the remainder of the original network produces the circuit in Fig. 5.14e. Simple voltage division yields

$$\begin{aligned} V_o &= 11 \left( \frac{6k}{2k + 6k} \right) \\ &= \frac{33}{4} \text{ V} \end{aligned}$$

We will now reexamine a problem that was solved earlier using both nodal and loop analyses. The circuit used in Examples 3.10 and 3.20 is redrawn in Fig. 5.15a. Since a dependent source is present, we will have to find the open-circuit voltage and the short-circuit current in order to employ Thévenin's theorem to determine the output voltage  $V_o$ .

As we begin the analysis, we note that the circuit can be somewhat simplified by first forming a Thévenin equivalent for the leftmost and rightmost branches. Note that these two branches are in parallel and neither branch contains the control variable. Thus, we can simplify the network by reducing these two branches to one via a Thévenin equivalent. For the circuit shown in Fig. 5.15b, the open-circuit voltage is

$$V_{oc1} = \frac{2}{k}(1k) + 4 = 6 \text{ V}$$

And the Thévenin equivalent resistance at the terminals, obtained by looking into the terminals with the sources made zero, is

$$R_{Th1} = 1 \text{ k}\Omega$$

The resultant Thévenin equivalent circuit is now connected to the remaining portion of the circuit producing the network in Fig. 5.15c.

Now we break the network shown in Fig. 5.15c at the output terminals to determine the open-circuit voltage  $V_{oc2}$  as shown in Fig. 5.15d. Because of the presence of the voltage sources, we will use a nodal analysis to find the open-circuit voltage with the help of a supernode. The node equations for this network are

$$\begin{aligned} V_1 &= 3V_x' \\ \frac{V_1 - 6}{1k} + \frac{V_1 - 2V_x'}{1k} &= \frac{2}{k} \end{aligned}$$

## EXAMPLE 5.13

### SOLUTION

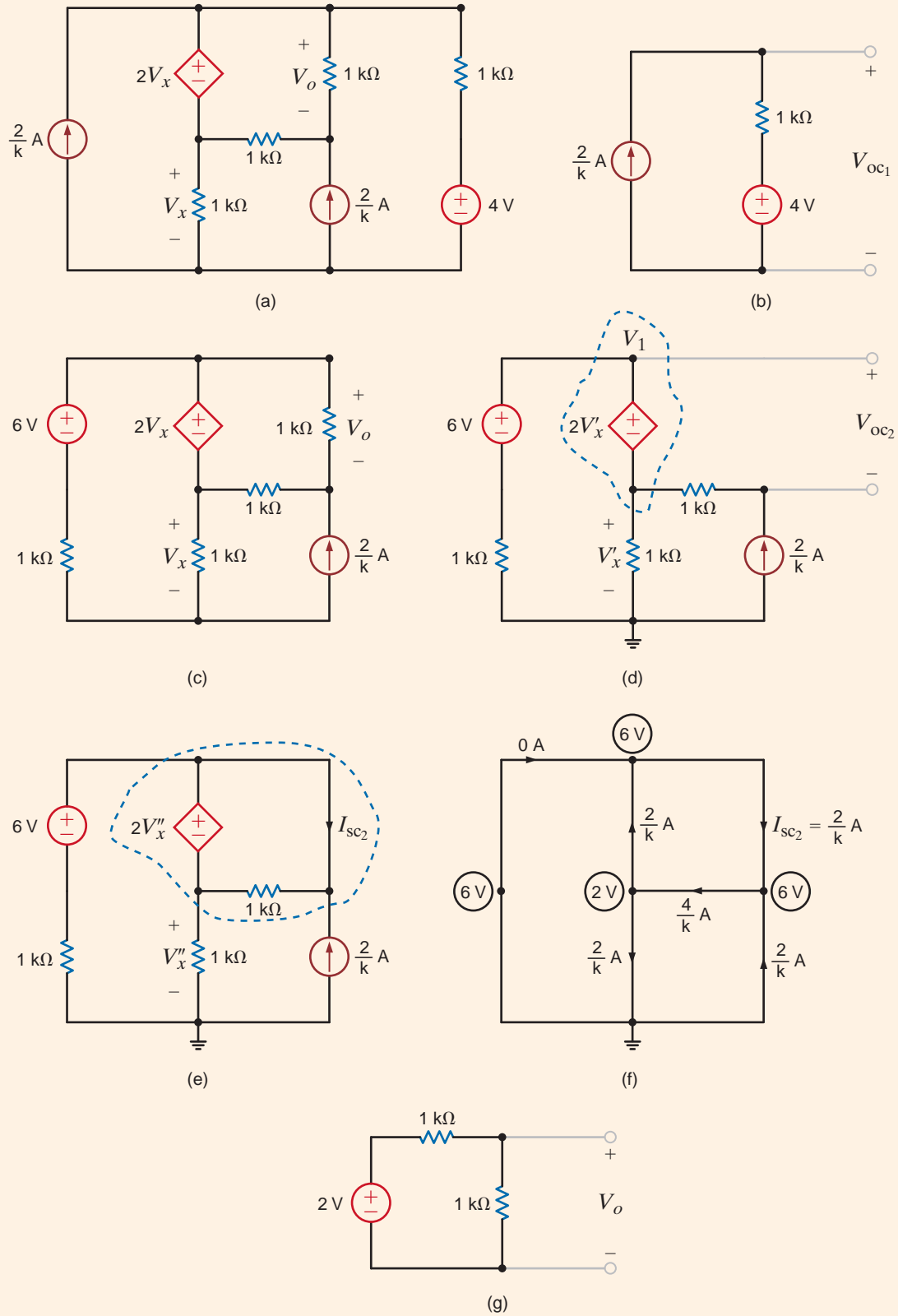


Figure 5.15

Circuits used in Example 5.13.

and thus  $V'_x = 2\text{ V}$  and  $V_1 = 6\text{ V}$ . Then, the open-circuit voltage, obtained using the KVL equation

$$-2V'_x + V_{oc_2} + \frac{2}{k}(1k) = 0$$

is

$$V_{oc_2} = 2\text{ V}$$

The short-circuit current is derived from the network shown in Fig. 5.15e. Once again we employ the supernode, and the network equations are

$$\begin{aligned} V_2 &= 3V''_x \\ \frac{V_2 - 6}{1k} + \frac{V_2 - 2V''_x}{1k} &= \frac{2}{k} \end{aligned}$$

The node voltages obtained from these equations are  $V''_x = 2\text{ V}$  and  $V_2 = 6\text{ V}$ . The line diagram shown in Fig. 5.15f displays the node voltages and the resultant branch currents. (Node voltages are shown in the circles, and branch currents are identified with arrows.) The node voltages and resistors are used to compute the resistor currents, while the remaining currents are derived by KCL. As indicated, the short-circuit current is

$$I_{sc_2} = 2\text{ mA}$$

Then, the Thévenin equivalent resistance is

$$R_{Th_2} = \frac{V_{oc_2}}{I_{sc_2}} = 1\text{ k}\Omega$$

The Thévenin equivalent circuit now consists of a 2-V source in series with a 1-k $\Omega$  resistor. Connecting this Thévenin equivalent circuit to the load resistor yields the network shown in Fig. 5.15g. A simple voltage divider indicates that  $V_o = 1\text{ V}$ .

## Problem-Solving Strategy

- Step 1.** Remove the load and find the voltage across the open-circuit terminals,  $V_{oc}$ . All the circuit analysis techniques presented here can be used to compute this voltage.
- Step 2.** Determine the Thévenin equivalent resistance of the network at the open terminals with the load removed. Three different types of circuits may be encountered in determining the resistance,  $R_{Th}$ .
- (a) If the circuit contains only independent sources, they are made zero by replacing the voltage sources with short circuits and the current sources with open circuits.  $R_{Th}$  is then found by computing the resistance of the purely resistive network at the open terminals.
  - (b) If the circuit contains only dependent sources, an independent voltage or current source is applied at the open terminals and the corresponding current or voltage at these terminals is measured. The voltage/current ratio at the terminals is the Thévenin equivalent resistance. Since there is no energy source, the open-circuit voltage is zero in this case.
  - (c) If the circuit contains both independent and dependent sources, the open-circuit terminals are shorted and the short-circuit current between these terminals is determined. The ratio of the open-circuit voltage to the short-circuit current is the resistance  $R_{Th}$ .
- Step 3.** If the load is now connected to the Thévenin equivalent circuit, consisting of  $V_{oc}$  in series with  $R_{Th}$ , the desired solution can be obtained.

The problem-solving strategy for Norton's theorem is essentially the same as that for Thévenin's theorem with the exception that we are dealing with the short-circuit current instead of the open-circuit voltage.

### Applying Thévenin's Theorem

## Learning Assessment

**E5.10** Find  $V_o$  in the circuit in Fig. E5.10 using Thévenin's theorem.

**ANSWER:**  $V_o = \frac{36}{13} \text{ V}$ .

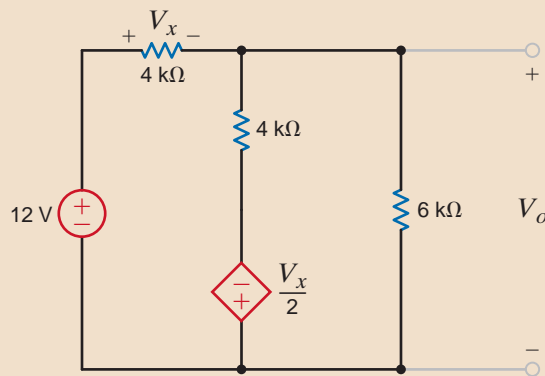


Figure E5.10

**E5.11** Find  $V_o$  in Fig. E5.11 using Thévenin's theorem.

**ANSWER:**  $V_o = 6.29 \text{ V}$ .

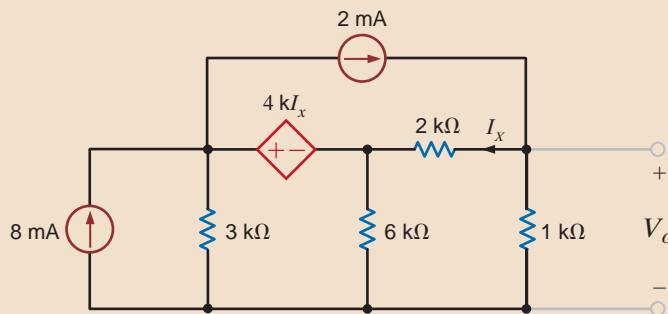


Figure E5.11

**E5.12** Use Thévenin's theorem to find the power supplied by the 12-V source in Fig. E5.12.

**ANSWER:** 8.73 mW.

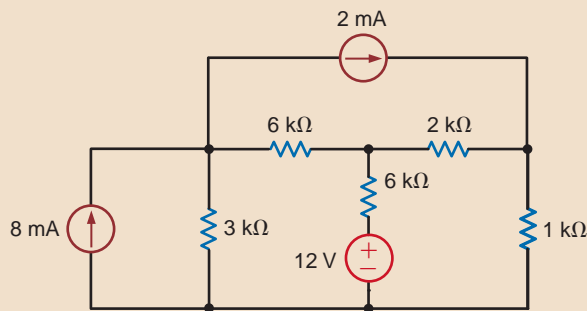


Figure E5.12

**E5.13** Find the Thévenin equivalent of the network at terminals A – B in Fig. E5.13.

**ANSWER:**  $R_{Th} = 1619 \Omega$ .

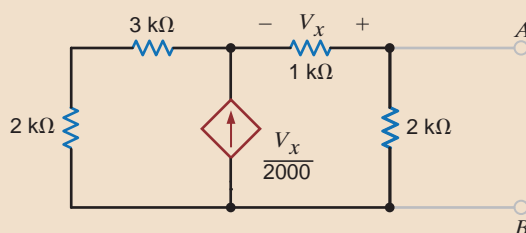


Figure E5.13

Having examined the use of Thévenin's and Norton's theorems in a variety of different types of circuits, it is instructive to look at yet one other aspect of these theorems that we find useful in circuit analysis and design. This additional aspect can be gleaned from the Thévenin equivalent and Norton equivalent circuits.

The relationships specified in Fig. 5.7 and Eq. (5.5) have special significance because they represent what is called a *source transformation* or *source exchange*. What these relationships tell us is that if we have embedded within a network a current source  $i$  in parallel with a resistor  $R$ , we can replace this combination with a voltage source of value  $v = iR$  in series with the resistor  $R$ . The reverse is also true; that is, a voltage source  $v$  in series with a resistor  $R$  can be replaced with a current source of value  $i = v/R$  in parallel with the resistor  $R$ . Parameters within the circuit (e.g., an output voltage) are unchanged under these transformations.

We must emphasize that the two equivalent circuits in Fig. 5.7 are *equivalent only at the two external nodes*. For example, if we disconnect circuit  $B$  from both networks in Fig. 5.7, the equivalent circuit in Fig. 5.7b dissipates power, but the one in Fig. 5.7a does not.

We will now demonstrate how to find  $V_o$  in the circuit in Fig. 5.16a using the repeated application of source transformation.

If we begin at the left end of the network in Fig. 5.16a, the series combination of the 12-V source and 3-k $\Omega$  resistor is converted to a 4-mA current source in parallel with the 3-k $\Omega$  resistor. If we combine this 3-k $\Omega$  resistor with the 6-k $\Omega$  resistor, we obtain the circuit in Fig. 5.16b. Note that at this point we have eliminated one circuit element. Continuing the reduction, we convert the 4-mA source and 2-k $\Omega$  resistor into an 8-V source in series with this same 2-k $\Omega$  resistor. The two 2-k $\Omega$  resistors that are in series are now combined to produce the network in Fig. 5.16c. If we now convert the combination of the 8-V source and 4-k $\Omega$  resistor into a 2-mA source in parallel with the 4-k $\Omega$  resistor and combine the resulting current source with the other 2-mA source, we arrive at the circuit shown in Fig. 5.16d. At this point, we can simply apply current division to the two parallel resistance paths and obtain

$$I_o = (4 \times 10^{-3}) \left( \frac{4k}{4k + 4k + 8k} \right) = 1 \text{ mA}$$

and hence,

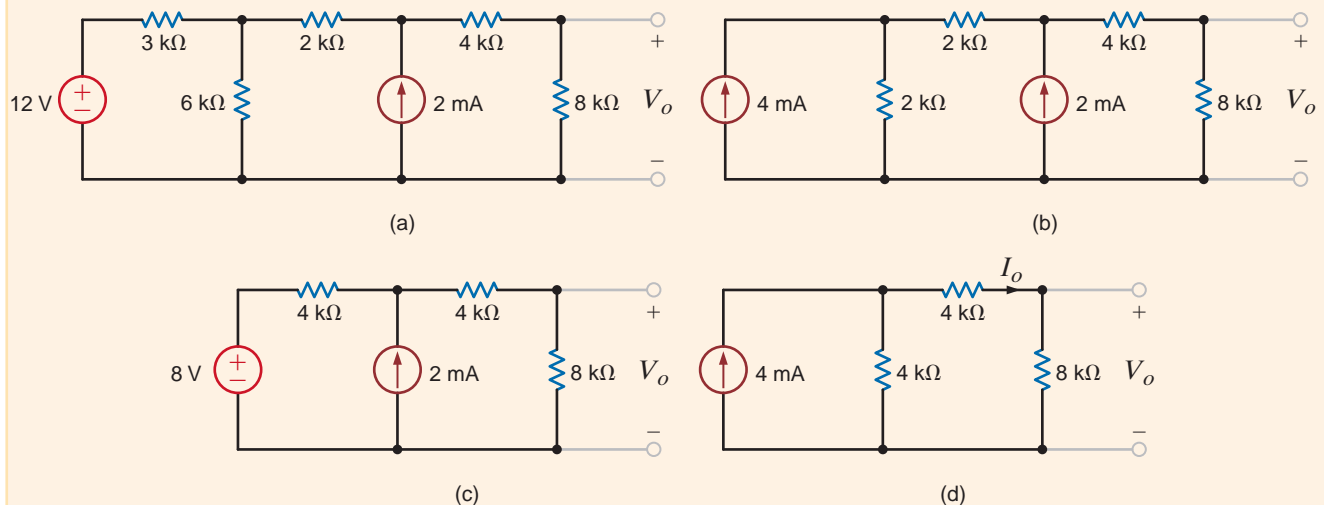
$$V_o = (1 \times 10^{-3})(8k) = 8 \text{ V}$$

The reader is encouraged to consider the ramifications of working this problem using any of the other techniques we have presented.

## EXAMPLE 5.14

### SOLUTION

**Figure 5.16**  
Circuits used in  
Example 5.14.



Note that this systematic, sometimes tedious, transformation allows us to reduce the network methodically to a simpler equivalent form with respect to some other circuit element. However, we should also realize that this technique is worthless for circuits of the form shown in Fig. 5.4. Furthermore, although applicable to networks containing dependent sources, it is not as useful as other techniques, and care must be taken not to transform the part of the circuit that contains the control variable.

## Learning Assessment

**E5.14** Find  $V_o$  in the circuit in Fig. E5.3 using source exchange.

**ANSWER:**  $V_o = \frac{4}{3}$  V.

**E5.15** Find the  $I_o$  in Fig. E5.15 using source transformations.

**ANSWER:**  $I_o = -1.94$  mA.

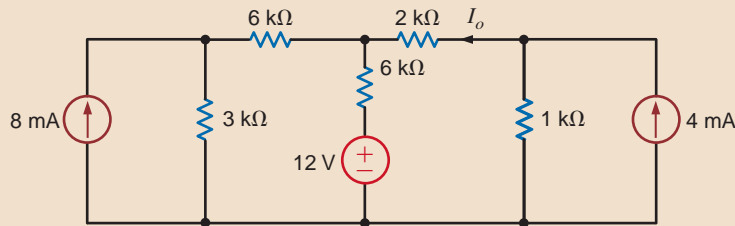


Figure E5.15

At this point let us pause for a moment and reflect on what we have learned; that is, let us compare the use of node or loop analysis with that of the theorems discussed in this chapter. When we examine a network for analysis, one of the first things we should do is count the number of nodes and loops. Next we consider the number of sources. For example, are there a number of voltage sources or current sources present in the network? All these data, together with the information that we expect to glean from the network, give a basis for selecting the simplest approach. With the current level of computational power available to us, we can solve the node or loop equations that define the network in a flash.

With regard to the theorems, we have found that in some cases the theorems do not necessarily simplify the problem and a straightforward attack using node or loop analysis is as good an approach as any. This is a valid point provided that we are simply looking for some particular voltage or current. However, the real value of the theorems is the insight and understanding that they provide about the physical nature of the network. For example, superposition tells us what each source contributes to the quantity under investigation. However, a computer solution of the node or loop equations does not tell us the effect of changing certain parameter values in the circuit. It does not help us understand the concept of loading a network or the ramifications of interconnecting networks or the idea of matching a network for maximum power transfer. The theorems help us to understand the effect of using a transducer at the input of an amplifier with a given input resistance. They help us explain the effect of a load, such as a speaker, at the output of an amplifier. We derive none of this information from a node or loop analysis. In fact, as a simple example, suppose that a network at a specific pair of terminals has a Thévenin equivalent circuit consisting of a voltage source in series with a 2-k $\Omega$  resistor. If we connect a 2- $\Omega$  resistor to the network at these terminals, the voltage across the 2- $\Omega$  resistor will be essentially nothing. This result is fairly obvious using the Thévenin theorem approach; however, a node or loop analysis gives us no clue as to why we have obtained this result.

We have studied networks containing only dependent sources. This is a very important topic because all electronic devices, such as transistors, are modeled in this fashion. Motors in power systems are also modeled in this way. We use these amplification devices for many different purposes, such as speed control for automobiles.

In addition, it is interesting to note that when we employ source transformation as we did in Example 5.14, we are simply converting back and forth between a Thévenin equivalent circuit and a Norton equivalent circuit.

Finally, we have a powerful tool at our disposal that can be used to provide additional insight and understanding for both circuit analysis and design. That tool is Microsoft Excel, and it permits us to study the effects, on a network, of varying specific parameters. The following example will illustrate the simplicity of this approach.

We wish to use Microsoft Excel to plot the Thévenin equivalent parameters  $V_{oc}$  and  $R_{Th}$  for the circuit in Fig. 5.17 over the  $R_x$  range 0 to 10 k $\Omega$ .

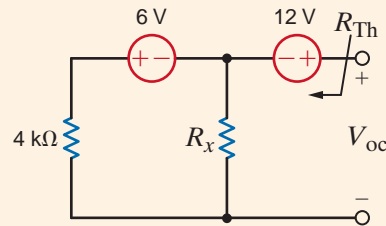


Figure 5.17

Circuit used in Example 5.15.

## EXAMPLE 5.15

The Thévenin resistance is easily found by replacing the voltage sources with short circuits. The result is

$$R_{Th} = 4 // R_x = \frac{4R_x}{4 + R_x} \quad 5.7$$

where  $R_x$  and  $R_{Th}$  are in k $\Omega$ . Superposition can be used effectively to find  $V_{oc}$ . If the 12-V source is replaced by a short circuit

$$V_{oc_1} = -6 \left[ \frac{R_x}{R_x + 4} \right]$$

Applying this same procedure for the 6-V source yields

$$V_{oc_2} = 12$$

and the total open-circuit voltage is

$$V_{oc} = 12 - 6 \left[ \frac{R_x}{R_x + 4} \right] \quad 5.8$$

In Excel we wish to (1) vary  $R_x$  between 0 and 10 k $\Omega$ , (2) calculate  $R_{Th}$  and  $V_{oc}$  at each  $R_x$  value, and (3) plot  $V_{oc}$  and  $R_{Th}$  versus  $R_x$ . We begin by opening Excel and entering column headings as shown in Fig. 5.18a. Next, we enter a zero in the first cell of the  $R_x$  column at column-row location A4. To automatically fill the column with values, go to the Edit menu and select Fill/Series to open the window shown in Fig. 5.18b, which has already been edited appropriately for 101 data points. The result is a series of  $R_x$  values from 0 to 10 k $\Omega$  in 100  $\Omega$  steps. To enter Eq. (5.8), go to location B4 (right under the  $V_{oc}$  heading). Enter the following text and do not forget the equal sign:

$$=12-6*A4/(A4+4)$$

This is Eq. (5.8) with  $R_x$  replaced by the first value for  $R_x$ , which is at column-row location A4. Similarly for  $R_{Th}$ , enter the following expression at C4.

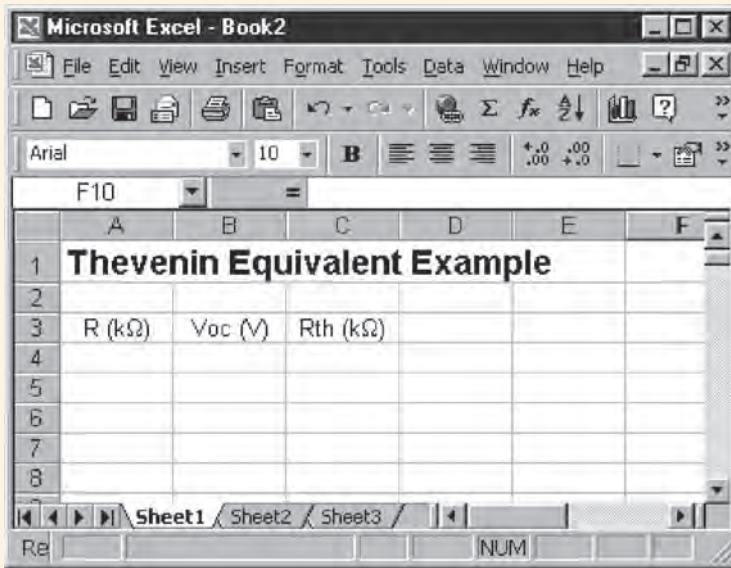
$$=4*A4/(A4+4)$$

To replicate the expression in cell B4 for all  $R_x$  values, select cell B4, grab the lower right corner of the cell, hold and drag down to cell B104, and release. Repeat for  $R_{Th}$  by replicating cell C4.

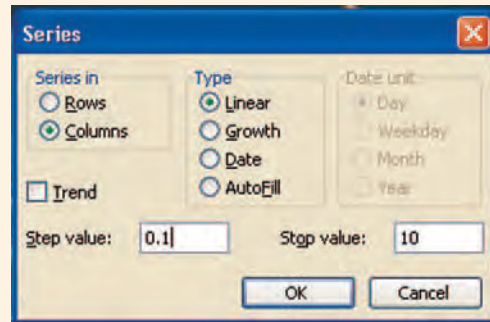
To plot the data, first drag the cursor across all cells between A4 and C104. Next, from the Insert menu, select Chart. We recommend strongly that you choose the XY (Scatter)

## SOLUTION

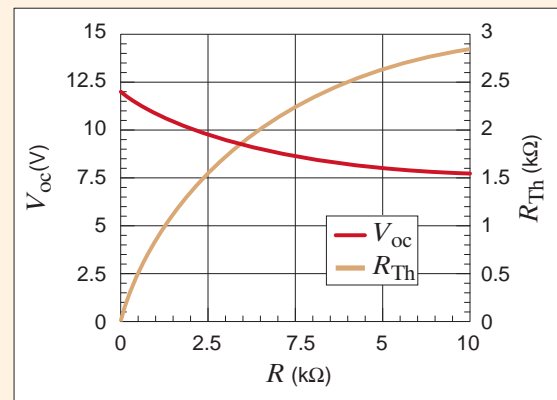
chart type. Excel will take you step by step through the basic formatting of your chart, which, after some manipulations, might look similar to the chart in Fig. 5.18c.



(a)



(b)



(c)

**Figure 5.18**

(a) The Excel spreadsheet for Example 5.15 showing the desired column headings. (b) The Fill/Series window edited for varying  $R_x$  and (c) the final plot of  $V_{oc}$  and  $R_{Th}$ .

## 5.4

### Maximum Power Transfer

In circuit analysis we are sometimes interested in determining the maximum power that can be delivered to a load. By employing Thévenin’s theorem, we can determine the maximum power that a circuit can supply and the manner in which to adjust the load to effect maximum power transfer.

Suppose that we are given the circuit shown in Fig. 5.19. The power that is delivered to the load is given by the expression

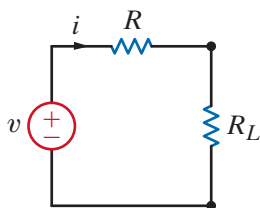
$$P_{load} = i^2 R_L = \left( \frac{v}{R + R_L} \right)^2 R_L$$

We want to determine the value of  $R_L$  that maximizes this quantity. Hence, we differentiate this expression with respect to  $R_L$  and equate the derivative to zero:

$$\frac{dP_{load}}{dR_L} = \frac{(R + R_L)^2 v^2 - 2v^2 R_L (R + R_L)}{(R + R_L)^4} = 0$$

which yields

$$R_L = R$$



**Figure 5.19**

Equivalent circuit for examining maximum power transfer.

In other words, maximum power transfer takes place when the load resistance  $R_L = R$ . Although this is a very important result, we have derived it using the simple network in Fig. 5.19. However, we should recall that  $v$  and  $R$  in Fig. 5.19 could represent the Thévenin equivalent circuit for any linear network



Let us find the value of  $R_L$  for maximum power transfer in the network in Fig. 5.20a and the maximum power that can be transferred to this load.

To begin, we derive the Thévenin equivalent circuit for the network exclusive of the load.  $V_{oc}$  can be calculated from the circuit in Fig. 5.20b. The mesh equations for the network are

$$I_1 = 2 \times 10^{-3}$$

$$3k(I_2 - I_1) + 6kI_2 + 3 = 0$$

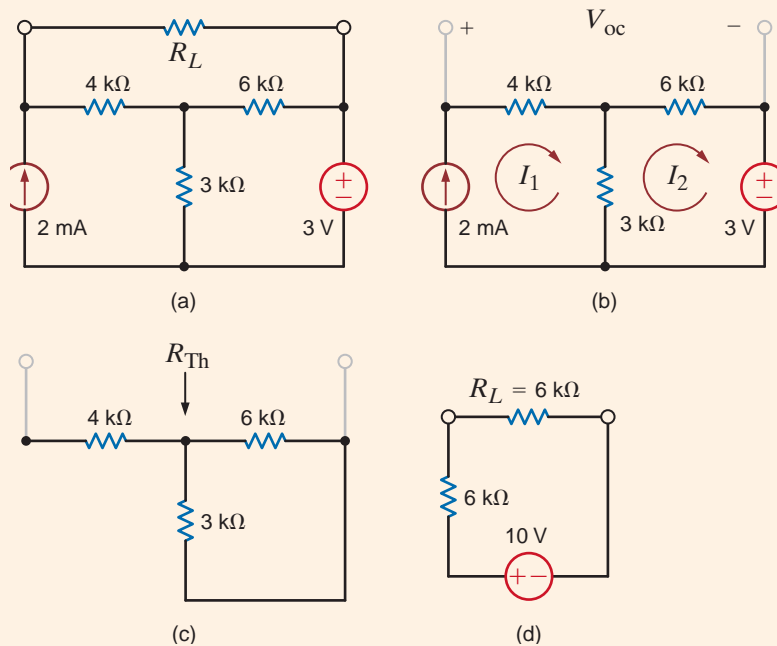
Solving these equations yields  $I_2 = 1/3$  mA and, hence,

$$V_{oc} = 4kI_1 + 6kI_2$$

$$= 10 \text{ V}$$

$R_{Th}$ , shown in Fig. 5.20c, is  $6 \text{ k}\Omega$ ; therefore,  $R_L = R_{Th} = 6 \text{ k}\Omega$  for maximum power transfer. The maximum power transferred to the load in Fig. 5.20d is

$$P_L = \left(\frac{10}{12k}\right)^2 (6k) = \frac{25}{6} \text{ mW}$$



**Figure 5.20**  
Circuits used in  
Example 5.16.

Let us find  $R_L$  for maximum power transfer and the maximum power transferred to this load in the circuit in Fig. 5.21a.

We wish to reduce the network to the form shown in Fig. 5.19. We could form the Thévenin equivalent circuit by breaking the network at the load. However, close examination of the network indicates that our analysis will be simpler if we break the network to the left of the  $4\text{-k}\Omega$  resistor. When we do this, however, we must realize that for maximum power transfer  $R_L = R_{Th} + 4 \text{ k}\Omega$ .  $V_{oc}$  can be calculated from the network in Fig. 5.21b. Forming a supernode around the dependent source and its connecting nodes, the KCL equation for this supernode is

$$\frac{V_{oc} - 2000I'_x}{1k + 3k} + (-4 \times 10^{-3}) + \frac{V_{oc}}{2k} = 0$$

## EXAMPLE 5.17

**SOLUTION**

where

$$I'_x = \frac{V_{oc}}{2k}$$

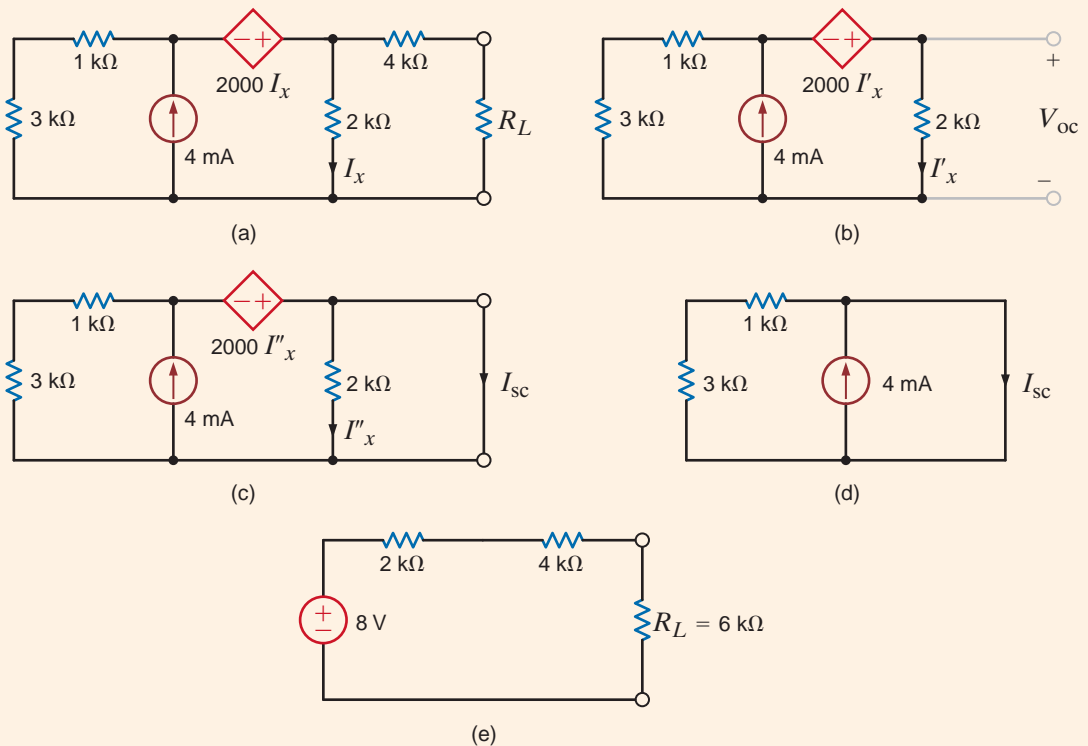
These equations yield  $V_{oc} = 8\text{ V}$ . The short-circuit current can be found from the network in Fig. 5.21c. It is here that we find the advantage of breaking the network to the left of the 4-k $\Omega$  resistor. The short circuit shorts the 2-k $\Omega$  resistor and, therefore,  $I''_x = 0$ . Hence, the circuit is reduced to that in Fig. 5.21d, where clearly  $I_{sc} = 4\text{ mA}$ . Then

$$R_{Th} = \frac{V_{oc}}{I_{sc}} = 2\text{ k}\Omega$$

Connecting the Thévenin equivalent to the remainder of the original circuit produces the network in Fig. 5.21e. For maximum power transfer  $R_L = R_{Th} + 4\text{ k}\Omega = 6\text{ k}\Omega$ , and the maximum power transferred is

$$P_L = \left(\frac{8}{12k}\right)^2 (6k) = \frac{8}{3}\text{ mW}$$

**Figure 5.21**  
Circuits used in  
Example 5.17.

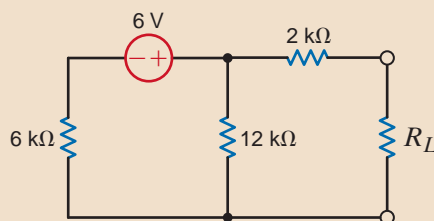


## Learning Assessment

**E5.16** Given the circuit in Fig. E5.16, find  $R_L$  for maximum power transfer and the maximum power transferred.

**ANSWER:**  $R_L = 6\text{ k}\Omega$ ;

$$P_L = \frac{2}{3}\text{ mW}.$$



**Figure E5.16**

**E5.17** Find  $R_L$  for maximum transfer and the maximum power transferred to  $R_L$  in Fig E5.17.

**ANSWER:** 14/9 k $\Omega$ ,  
2/7 mW.

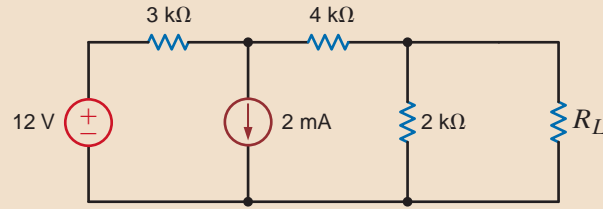


Figure E5.17

**E5.18** Find  $R_L$  for maximum transfer and the maximum power transferred to  $R_L$  in Fig E5.18.

**ANSWER:** 24/13 k $\Omega$ ,  
27/26 mW.

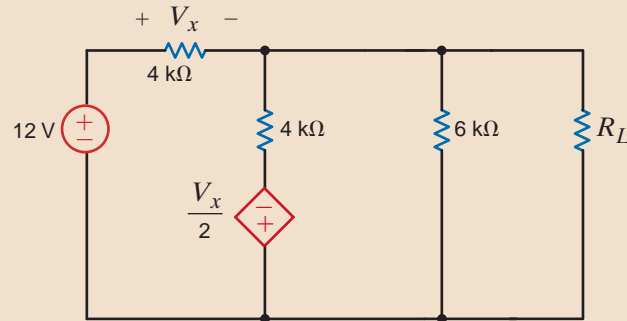


Figure E5.18

Given the network in Fig. 5.22 with  $V_{in} = 5$  V and  $R_1 = 2$   $\Omega$ , let us graphically examine a variety of aspects of maximum power transfer by plotting the parameters  $V_{out}$ ,  $I$ ,  $P_{out}$ ,  $P_{in}$  and the efficiency  $= P_{out}/P_{in}$  as a function of the resistor ratio  $R_2/R_1$ .

## EXAMPLE 5.18

The parameters to be plotted can be determined by simple circuit analysis techniques. By voltage division

**SOLUTION**

$$V_{out} = \left[ \frac{R_2}{R_1 + R_2} \right] V_{in} = \left[ \frac{R_2}{2 + R_2} \right] (5)$$

From Ohm's law

$$I = \frac{V_{in}}{R_1 + R_2} = \frac{5}{2 + R_2}$$

The input and output powers are

$$P_{in} = IV_{in} = \frac{V_{in}^2}{R_1 + R_2} = \frac{25}{2 + R_2} \quad P_{out} = IV_{out} = R_2 \left[ \frac{V_{in}}{R_1 + R_2} \right]^2 = R_2 \left[ \frac{5}{2 + R_2} \right]^2$$

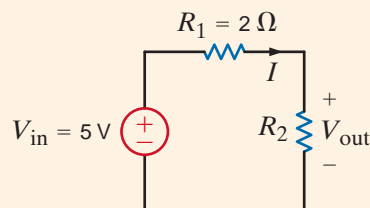


Figure 5.22

Circuit used in maximum power transfer analysis.

Finally, the efficiency is

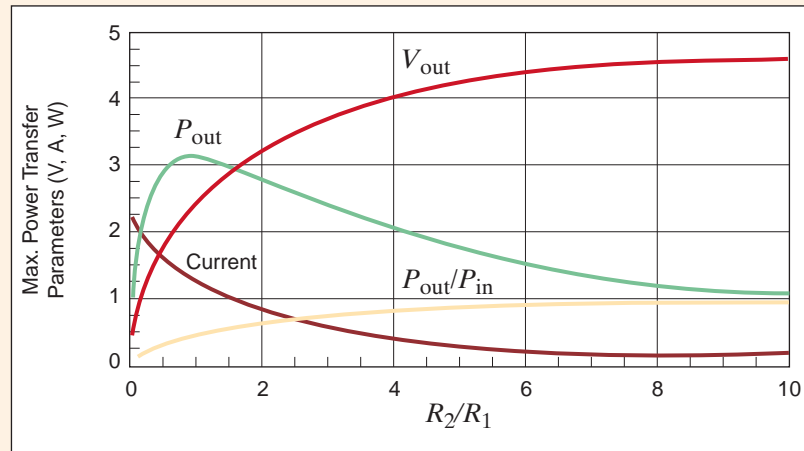
$$\text{efficiency} = \frac{P_{\text{out}}}{P_{\text{in}}} = \frac{R_2}{R_1 + R_2} = \frac{R_2}{2 + R_2}$$

The resulting plots of the various parameters are shown in Fig. 5.23 for  $R_2$  ranging from  $0.1R_1$  to  $10R_1$ . Note that as  $R_2$  increases,  $V_{\text{out}}$  increases toward  $V_{\text{in}}$  (5 V) as dictated by voltage division. Also, the current decreases in accordance with Ohm's law. Thus, for small values of  $R_2$ ,  $V_{\text{out}}$  is small, and when  $R_2$  is large,  $I$  is small. As a result, the output power (the product of these two parameters) has a maximum at  $R_2/R_1 = 1$  as predicted by maximum power transfer theory.

Maximum power does not correspond to maximum output voltage, current, or efficiency. In fact, at maximum power transfer, the efficiency is always 0.5, or 50%. If you are an electric utility supplying energy to your customers, do you want to operate at maximum power transfer? The answer to this question is an obvious "No" because the efficiency is only 50%. The utility would only be able to charge its customers for one-half of the energy produced. It is not uncommon for a large electric utility to spend billions of dollars every year to produce electricity. The electric utility is more interested in operating at maximum efficiency.

**Figure 5.23**

Maximum power transfer parameter plots for the network in Fig. 5.22. (The units for voltage, current, and power have volts, amperes, and watts, respectively.)



## 5.5

### Application Example

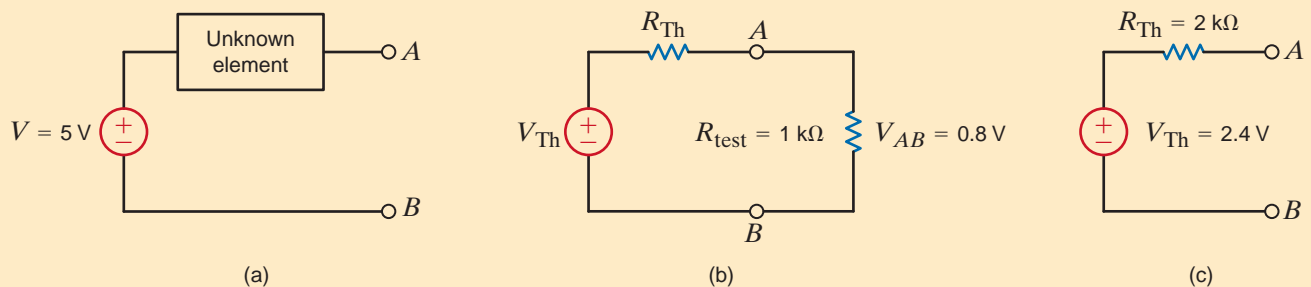
#### APPLICATION EXAMPLE 5.19

On Monday afternoon, Connie suddenly remembers that she has a term paper due Tuesday morning. When she sits at her computer to start typing, she discovers that the computer mouse doesn't work. After disassembly and some inspection, she finds that the mouse contains a printed circuit board that is powered by a 5-V supply contained inside the computer case. Furthermore, the board is found to contain several resistors, some op-amps, and one unidentifiable device, which is connected directly to the computer's 5-V supply as shown in Fig. 5.24a. Using a voltmeter to measure the node voltages, Connie confirms that all resis-

tors and op-amps are functioning properly and the power supply voltage reaches the mouse board. However, without knowing the mystery device's function within the circuit, she cannot determine its condition. A phone call to the manufacturer reveals that the device is indeed linear but is also proprietary. With some persuasion, the manufacturer's representative agrees that if Connie can find the Thévenin equivalent circuit for the element at nodes  $A$ - $B$  with the computer on, he will tell her if it is functioning properly. Armed with a single  $1\text{-k}\Omega$  resistor and a voltmeter, Connie attacks the problem.

To find the Thévenin equivalent for the unknown device, together with the  $5\text{-V}$  source, Connie first isolates nodes  $A$  and  $B$  from the rest of the devices on the board to measure the open-circuit voltage. The resulting voltmeter reading is  $V_{AB} = 2.4\text{ V}$ . Thus, the Thévenin equivalent voltage is  $2.4\text{ V}$ . Then she connects the  $1\text{-k}\Omega$  resistor at nodes  $A$ - $B$  as shown in Fig. 5.24b. The voltmeter reading is now  $V_{AB} = 0.8\text{ V}$ . Using voltage division to express  $V_{AB}$  in terms of  $V_{Th}$ ,  $R_{Th}$ , and  $R_{test}$  in Fig. 5.24b yields the expression

$$0.8 = V_{Th} \left( \frac{1\text{k}}{1\text{k} + R_{Th}} \right)$$

**SOLUTION**

Solving the equations for  $R_{Th}$ , we obtain

$$R_{Th} = 2.0\text{ k}\Omega$$

Therefore, the unknown device and the  $5\text{-V}$  source can be represented at the terminals  $A$ - $B$  by the Thévenin equivalent circuit shown in Fig. 5.24c. When Connie phones the manufacturer with the data, the representative informs her that the device has indeed failed.

**Figure 5.24**

Network used in Example 5.19.

**5.6****Design Examples**

We often find that in the use of electronic equipment, there is a need to adjust some quantity such as voltage, frequency, contrast, or the like. For very accurate adjustments, it is most convenient if coarse and fine-tuning can be separately adjusted. Therefore, let us design a circuit in which two inputs (i.e., coarse and fine voltages) are combined to produce a new voltage of the form

$$V_{\text{tune}} = \left[ \frac{1}{2} \right] V_{\text{coarse}} + \left[ \frac{1}{20} \right] V_{\text{fine}}$$

Because the equation to be realized is the sum of two terms, the solution appears to be an excellent application for superposition. Since the gain factors in the equation (i.e.,  $1/2$  and  $1/20$ )

**DESIGN EXAMPLE 5.20****SOLUTION**

are both less than one, a voltage divider with two inputs would appear to be a logical choice. A typical circuit for this application is shown in Fig. 5.25a. The two superposition subcircuits are shown in Figs. 5.25b and c. Employing voltage division in the network in Fig. 5.25b yields

$$\frac{V_{\text{tune}_C}}{V_{\text{coarse}}} = \left[ \frac{R//R_2}{(R//R_2) + R_1} \right] = \frac{1}{2}$$

and therefore,

$$R//R_2 = R_1$$

In a similar manner, we find that

$$\frac{V_{\text{tune}_F}}{V_{\text{fine}}} = \left[ \frac{R//R_1}{(R//R_1) + R_2} \right] = \frac{1}{20}$$

which requires that

$$R_2 = 19(R//R_1)$$

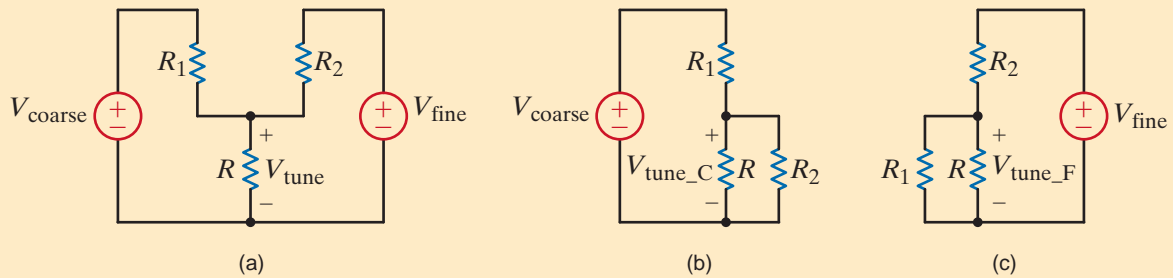


Figure 5.25

(a) The coarse/fine adjustment circuit, (b) with  $V_{\text{fine}}$  set to zero and (c) with  $V_{\text{coarse}}$  set to zero.

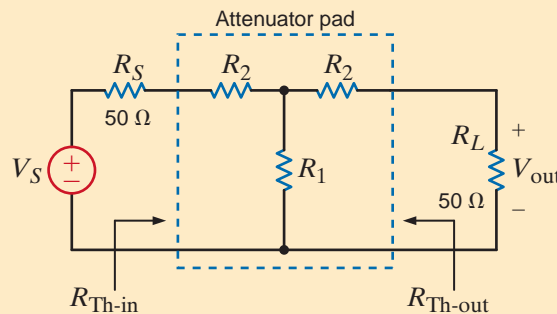
Note that the two constraint equations for the resistors have three unknowns— $R$ ,  $R_1$ , and  $R_2$ . Thus, we must choose one resistor value and then solve for the two remaining values. If we arbitrarily select  $R = 1 \text{ k}\Omega$ , then  $R_1 = 900 \Omega$  and  $R_2 = 9 \text{ k}\Omega$ . This completes the design of the circuit. This example indicates that superposition is not only a useful analysis tool but provides insight into the design of new circuits.

**DESIGN EXAMPLE 5.21**

Coaxial cable is often used in very-high-frequency systems. For example, it is commonly used for signal transmission with cable television. In these systems resistance matching, the kind we use for maximum power transfer, is critical. In the laboratory, a common apparatus used in high-frequency research and development is the attenuator pad. The attenuator pad is basically a voltage divider, but the equivalent resistance at both its input ports is carefully designed for resistance matching. Given the network in Fig. 5.26 in which a source, modeled by  $V_S$  and  $R_S$  ( $50 \Omega$ ), drives an attenuator pad, which is connected to an equivalent load.

Figure 5.26

The model circuit for the attenuator pad design.



Let us design the pad so that it has an equivalent resistance of  $50\ \Omega$  and divides (i.e., attenuates) the input voltage by a factor of 10.

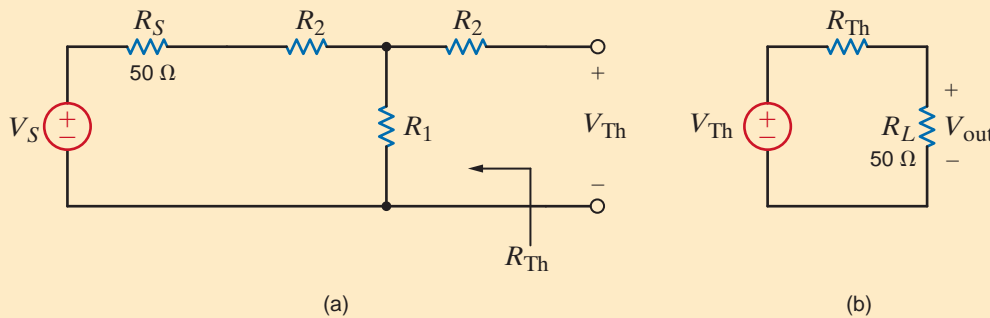
Since the attenuator or “T-Network” must have an equivalent resistance of  $50\ \Omega$ , we require that  $R_{Th-in}$  and  $R_{Th-out}$  be  $50\ \Omega$ . Since these Thévenin resistance values are the same and the circuit is symmetric, we can use the label  $R_2$  twice to indicate that those resistors will be the same value.

$$R_{Th-in} = R_2 + [R_1 // (R_2 + 50)] = 50$$

$$R_{Th-out} = R_2 + [R_1 // (R_2 + 50)] = 50$$

Since the equations are identical, we refer to both Thévenin equivalent resistance parameters simply as  $R_{Th}$ . The Thévenin equivalent voltage,  $V_{Th}$ , can be easily derived from the circuit in Fig. 5.27a using voltage division.

$$V_{Th} = V_S \left[ \frac{R_1}{R_1 + R_2 + 50} \right]$$



**Figure 5.27**

(a) The circuit used in finding  $V_{Th}$  and (b) the resulting model.

From the Thévenin equivalent circuit in Fig. 5.27b, we find

$$V_{out} = V_{Th} \left[ \frac{50}{R_{Th} + 50} \right] = \frac{V_{Th}}{2}$$

Combining these equations yields the attenuation from  $V_S$  to  $V_{out}$

$$\frac{V_{out}}{V_S} = \left[ \frac{V_{out}}{V_{Th}} \right] \left[ \frac{V_{Th}}{V_S} \right] = \frac{1}{2} \left[ \frac{R_1}{R_1 + R_2 + 50} \right] = \frac{1}{10}$$

The Thévenin equivalent resistance equation and this attenuation equation provide us with two equations in the two unknowns  $R_1$  and  $R_2$ . Solving these equations yields  $R_1 = 20.83\ \Omega$  and  $R_2 = 33.33\ \Omega$ . For precise resistance matching, these resistors must be very accurate.

With such low resistor values, the power dissipation can become significant as  $V_S$  is increased. For example, if  $V_S = 10\ \text{V}$ ,  $V_{out} = 1\ \text{V}$  and the power dissipated in the  $R_2$  resistor connected to the input source is 333 mW. To keep the temperature of that resistor at reasonable levels, the power rating of that resistor should be at least 0.5 W.

Let us design a circuit that will realize the following equation:

$$V_o = -3V_S - 2000I_S$$

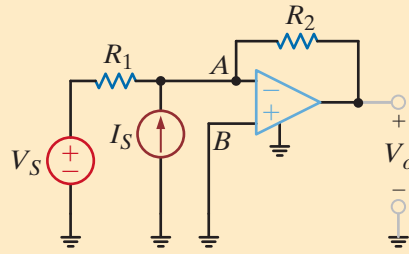
An examination of this equation indicates that we need to add two terms, one of which is from a voltage source and the other from a current source. Since the terms have negative signs, it would appear that the use of an inverting op-amp stage would be useful. Thus, one possible circuit for this application appears to be that shown in Fig. 5.28.

## DESIGN EXAMPLE 5.22

**SOLUTION**

**Figure 5.28**

Circuit used in Example 5.25.

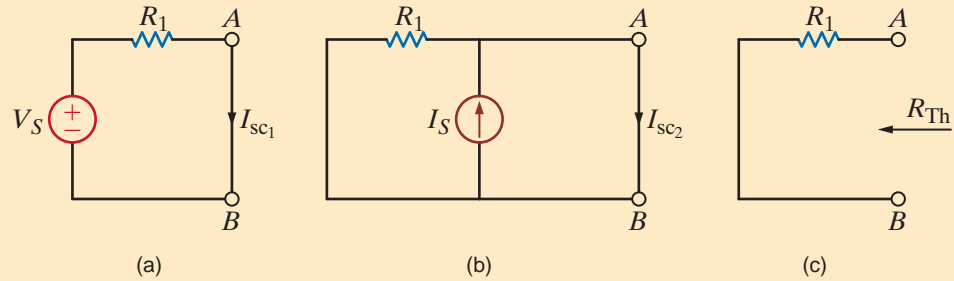


The Norton equivalent circuit at the terminals  $A-B$  will provide a composite view of the op-amp's input. Superposition can also be used in conjunction with the Norton equivalent to simplify the analysis. Using the network in Fig. 5.29a, we can determine the contribution of  $V_S$  to the short-circuit current,  $I_{sc}$ , which we call  $I_{sc1}$ .

$$I_{sc1} = \frac{V_S}{R_1}$$

**Figure 5.29**

Circuits used in deriving a Norton equivalent circuit.



In a similar manner, using Fig. 5.29b, we find that the contribution of  $I_S$  to the short-circuit current is

$$I_{sc2} = I_S$$

Employing superposition, the sum of these two currents yields the actual short-circuit current

$$I_{sc} = \frac{V_S}{R_1} + I_S$$

The Thévenin equivalent resistance at nodes  $A-B$  is obtained from the network in Fig. 5.29c as

$$R_{Th} = R_1$$

The equivalent circuit is now redrawn in Fig. 5.30 where we have employed the ideal op-amp conditions (i.e.,  $V_{in} = 0$ ), and the current into the op-amp terminals is zero. Since  $V_{in}$  is directly across  $R_{Th}$ , the current in this resistor is also zero. Hence, all the current  $I_{sc}$  will flow through  $R_2$ , producing the voltage

$$V_o = -R_2 \left[ \frac{V_S}{R_1} + I_S \right] = -\frac{R_2}{R_1} V_S - I_S R_2$$

A comparison of this equation with the design requirement specifies that

$$\frac{R_2}{R_1} = 3 \quad \text{and} \quad R_2 = 2000 \, \Omega$$

which yields  $R_1 = 667 \, \Omega$ . Combining a  $1\text{-k}\Omega$  and a  $2\text{-k}\Omega$  resistor in parallel will yield the necessary  $667 \, \Omega$  exactly.



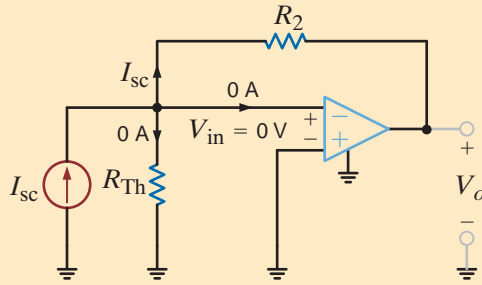


Figure 5.30

The required circuit containing the Norton equivalent.

Fans are frequently needed to keep electronic circuits cool. They vary in size, power requirement, input voltage, and air-flow rate. In a particular application, three fans are connected in parallel to a 24-V source as shown in Fig. 5.31. A number of tests were run on this configuration, and it was found that the air flow, fan current, and input voltage are related by the following equations:

$$F_{\text{CFM}} = 200I_F \quad V_F = 100I_F$$

where  $F_{\text{CFM}}$  represents the air-flow rate in cubic feet per minute,  $V_F$  is the fan voltage in volts, and  $I_F$  is the fan current in amperes. Note that fan current is related to fan speed, which in turn is related to air flow. A popular and inexpensive method for monitoring currents in applications where high accuracy is not critical involves placing a low-value sense resistor in series with the fan to “sense” the current by measuring the sense-resistor’s voltage.

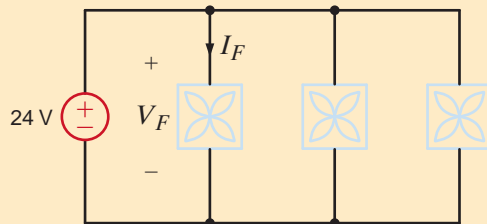


Figure 5.31

A trio of 24-V fans.

We wish to design a circuit that will measure the air flow in this three-fan system. Specifically, we want to

- determine the value of the sense resistor, placed in series with each fan, such that its voltage is 2% of the nominal 24-V fan voltage, and specify a particular 1% component that can be obtained from the Digikey Corporation (Website: [www.digikey.com](http://www.digikey.com)).
- design an op-amp circuit that will produce an output voltage proportional to total air flow, in which 1 V corresponds to 50 CFM.

The fan’s voltage–current relationship specifies that each fan has a resistance of 100  $\Omega$ . Since the voltage across the sense resistor should be 2% of 24 V, or 0.48 V, the fan current, derived from the network in Fig. 5.32, is

$$I_F = \frac{24 - 0.48}{100} = 235.2 \text{ mA}$$

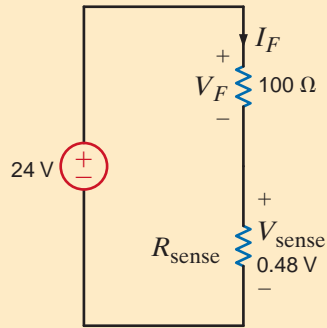
and the required value of the sense resistor is

$$R_{\text{sense}} = \frac{0.48}{0.2352} = 2.04 \text{ } \Omega$$

### SOLUTION

**Figure 5.32**

The equivalent circuit for one fan and its sense resistor.



The power dissipation in this component is only

$$P_{\text{sense}} = I_F^2 R_{\text{sense}} = 0.11 \text{ W}$$

And thus a standard 1/4 W 2-Ω resistor will satisfy the specifications.

The op-amp circuit must be capable of adding the air-flow contributions of all three fans and scaling the result such that 1 V corresponds to 50 CFM. A summing op-amp circuit would appear to be a logical choice in this situation, and thus we select the circuit shown in Fig. 5.33 where the second stage is simply an inverter that corrects for the negative sign resulting from the summer output. In order to determine the summer's gain, we calculate the volts/CFM at the sense resistors. For a single fan, the air flow is

$$F_{\text{CFM}} = 200I_F = 47.04 \text{ CFM}$$

And the volts per CFM at the input to the summer are

$$\frac{0.48 \text{ V}}{47.04 \text{ CFM}} = 0.0102 \text{ V/CFM}$$

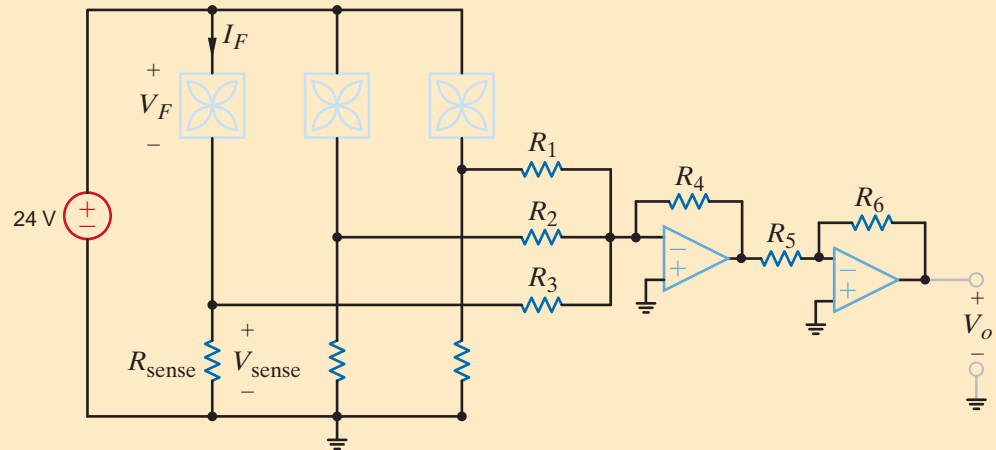
Hence, the gain of the summer op-amp must be

$$\frac{V_o}{V_{\text{sense}}} = \frac{1 \text{ V}/50 \text{ CFM}}{0.0102 \text{ V/CFM}} = 1.96 \text{ V/V}$$

This is a gain close to 2, and therefore we will use resistors that produce a 2:1 ratio, that is, very close to 1.96. At this point, one additional consideration must be addressed. Note that the resistors at the summer input are essentially connected in parallel with the sense resistors. To ensure that all the fan current flows in the sense resistors, we select very large values for the op-amp resistors. Let us choose  $R_1 = R_2 = R_3 = 100 \text{ k}\Omega$  and then  $R_4 = 200 \text{ k}\Omega$ .

**Figure 5.33**

The complete air-flow measurement system.



Finally, the values for  $R_5$  and  $R_6$  can be somewhat arbitrary, as long as they are equal. If we select a value of 100 kΩ, then only two different resistor values are needed for the entire op-amp circuit.

## SUMMARY

- **Linearity:** This property requires both additivity and homogeneity. Using this property, we can determine the voltage or current somewhere in a network by assuming a specific value for the variable and then determining what source value is required to produce it. The ratio of the specified source value to that computed from the assumed value of the variable, together with the assumed value of the variable, can be used to obtain a solution.
- In a linear network containing multiple independent sources, the principle of superposition allows us to compute any current or voltage in the network as the algebraic sum of the individual contributions of each source acting alone.
- Superposition is a linear property and does not apply to nonlinear functions such as power.
- Using Thévenin's theorem, we can replace some portion of a network at a pair of terminals with a voltage source  $V_{oc}$  in series with a resistor  $R_{Th}$ .  $V_{oc}$  is the open-circuit voltage at the terminals, and  $R_{Th}$  is the Thévenin equivalent resistance obtained by looking into the terminals with all independent sources made zero.
- Using Norton's theorem, we can replace some portion of a network at a pair of terminals with a current source  $I_{sc}$  in parallel with a resistor  $R_{Th}$ .  $I_{sc}$  is the short-circuit current at the terminals, and  $R_{Th}$  is the Thévenin equivalent resistance.
- Source transformation permits us to replace a voltage source  $V$  in series with a resistance  $R$  by a current source  $I = V/R$  in parallel with the resistance  $R$ . The reverse is also true. This is an interchange relationship between Thévenin and Norton equivalent circuits.
- Maximum power transfer can be achieved by selecting the load  $R_L$  to be equal to  $R_{Th}$  found by looking into the network from the load terminals.

## PROBLEMS

- 5.1** Use linearity and the assumption that  $V_o = 1$  V to find the actual value of  $V_o$  in Fig. P5.1.

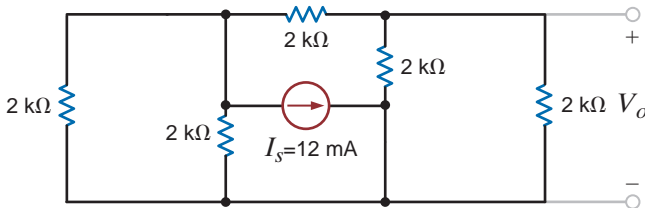


Figure P5.1

- 5.2** Using linearity and the assumption that  $I_o = 1$  mA, find the actual value of  $I_o$  in the network use Fig. P5.2.

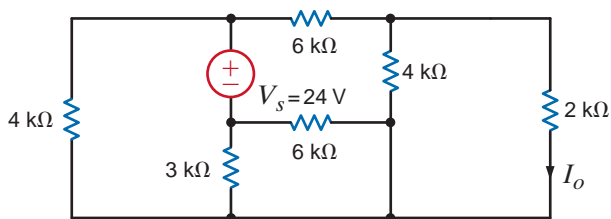


Figure P5.2

- 5.3** Find  $I_o$  in the network in Fig. P5.3 using linearity and the assumption that  $I_o = 1$  mA.

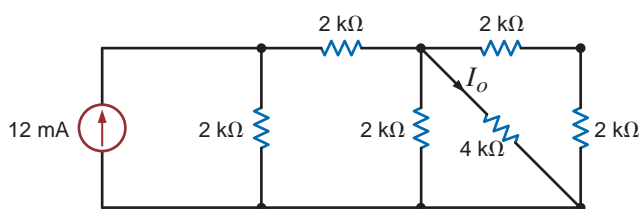


Figure P5.3

- 5.4** Find  $I_o$  in the circuit in Fig. P5.4 using linearity and the assumption that  $I_o = 1$  mA.

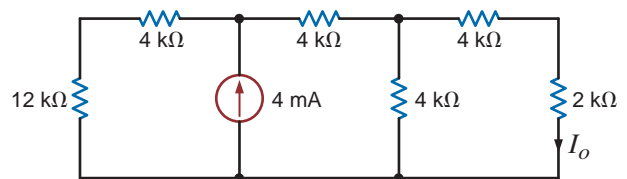


Figure P5.4

- 5.5** Find  $V_o$  in the network in Fig. P5.5 using linearity and the assumption that  $V_o = 1$  V.

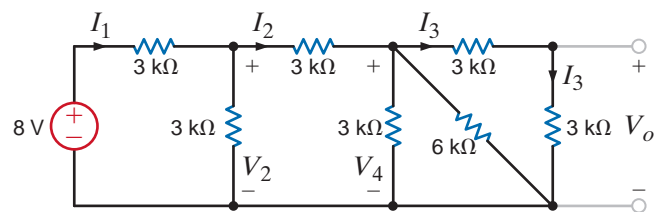


Figure P5.5

- 5.6** Find  $I_o$  in the network in Fig. P5.6 using superposition.

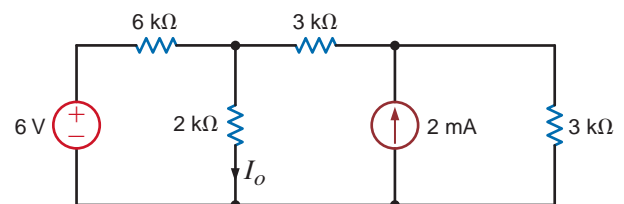


Figure P5.6

5.7 In the network in Fig. P5.7 find  $I_o$  using superposition.

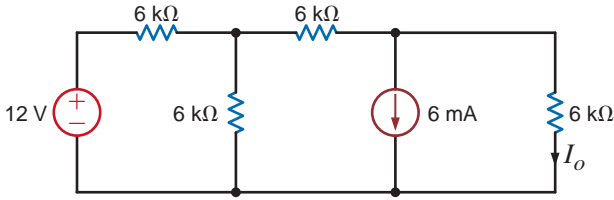


Figure P5.7

5.8 Find  $V_o$  in the network in Fig. P5.8 using superposition.

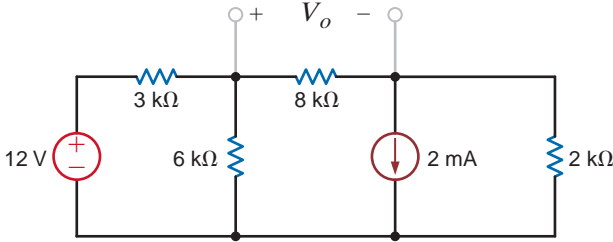


Figure P5.8

5.9 Find  $V_o$  in the network in Fig. P5.9 using superposition.

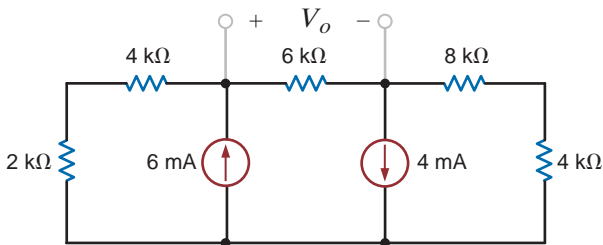


Figure P5.9

5.10 Find  $V_o$  in the network in Fig. P5.10 using superposition.

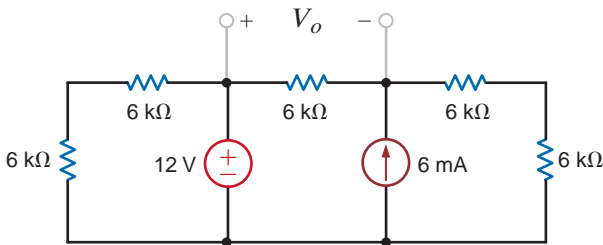


Figure P5.10

5.11 Find  $I_o$  in the network in Fig. P5.11 using superposition.

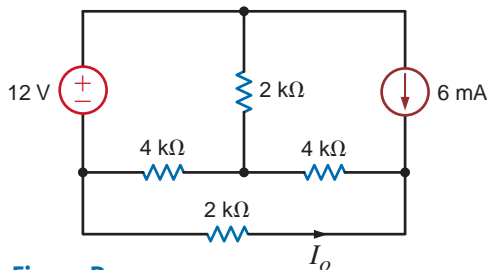


Figure P5.11

5.12 Find  $V_o$  in the circuit in Fig. P5.12 using superposition.

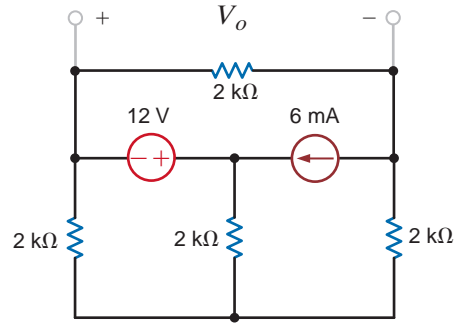


Figure P5.12

5.13 Find  $V_o$  in the circuit in Fig. P5.13 using superposition.

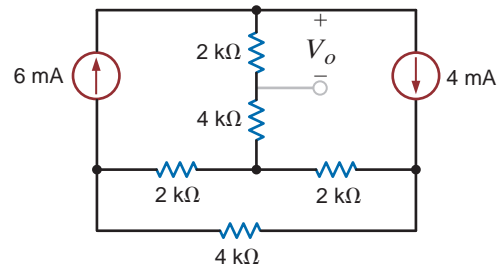


Figure P5.13

5.14 Find  $I_o$  in the circuit in Fig. P5.14 using superposition.

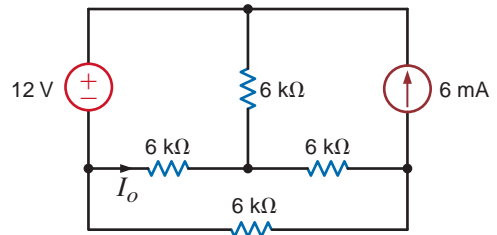


Figure P5.14

5.15 Find  $V_o$  in the circuit in Fig. P5.15 using superposition.

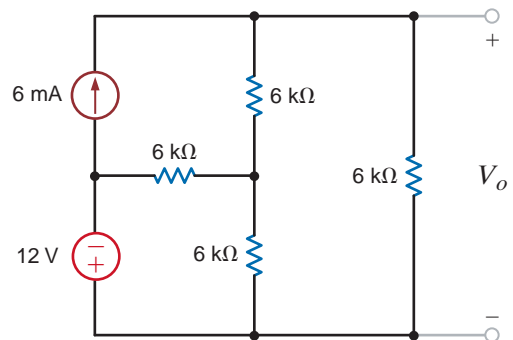


Figure P5.15

**5.16** Find  $I_o$  in the circuit in Fig. P5.16 using superposition.

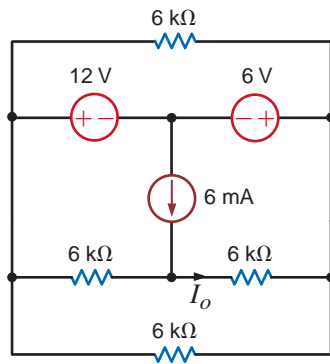


Figure P5.16

**5.17** Use superposition to find  $I_o$  in the circuit in Fig. P5.17.

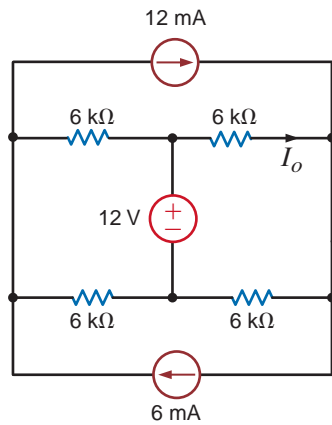


Figure P5.17

**5.18** Use superposition to find  $I_o$  in the network in Fig. P5.18.

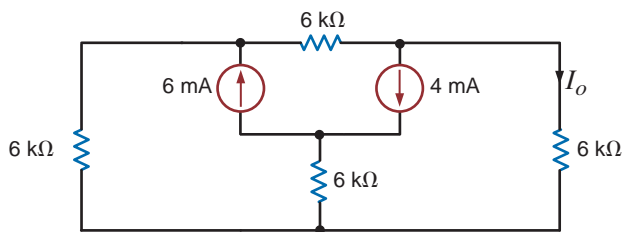


Figure P5.18

**5.19** Use superposition to find  $V_o$  in the circuit in Fig. P5.19.

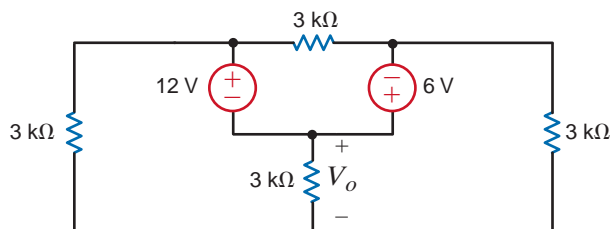


Figure P5.19

**5.20** Use superposition to find  $V_o$  in the network in Fig. P5.20.

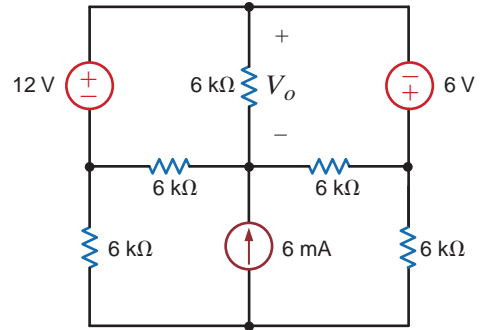


Figure P5.20

**5.21** Use superposition to find  $I_o$  in the circuit in Fig. P5.21.

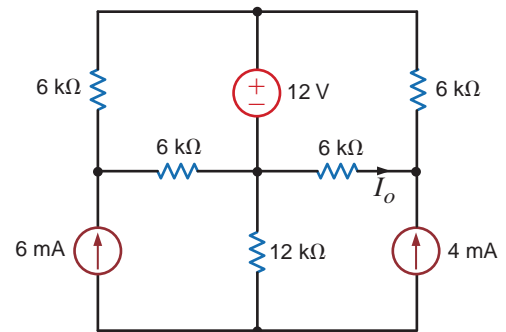


Figure P5.21

**5.22** Use superposition to find  $I_o$  in the network in Fig. P5.22.

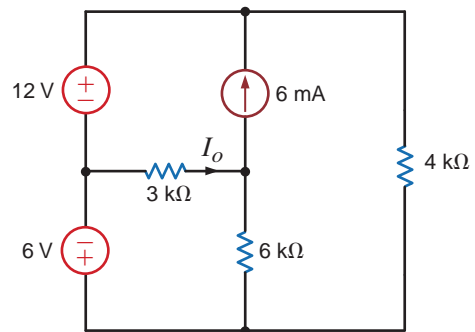


Figure P5.22

**5.23** Use superposition to find  $V_o$  in the circuit in Fig. P5.23.

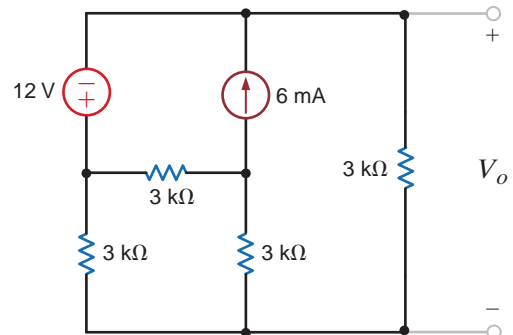


Figure P5.23

5.24 Find  $V_A$  in Fig. P5.24 using superposition.

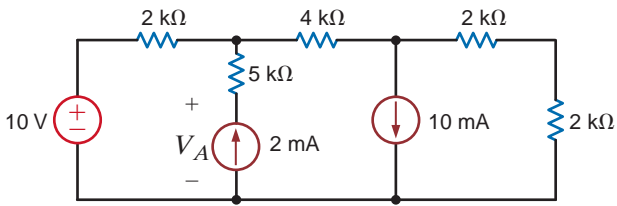


Figure P5.24

5.25 Find  $I_1$  in Fig. P5.25 using superposition.

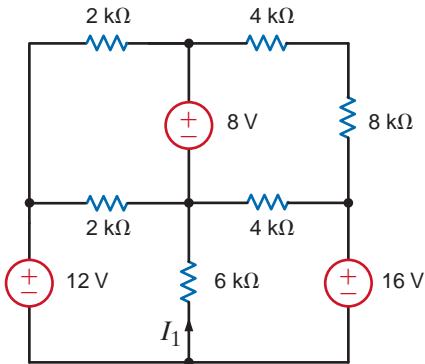


Figure P5.25

5.26 Use superposition to calculate  $I_x$  in Fig. P5.26.

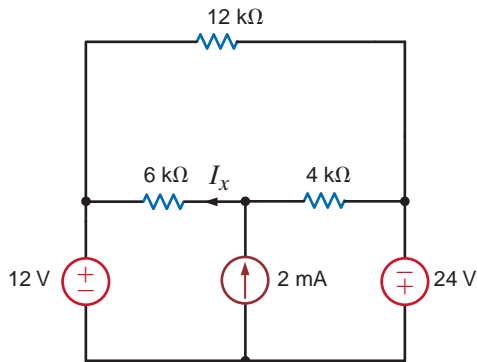


Figure P5.26

5.27 Calculate  $V_o$  in Fig. P5.27 using superposition.

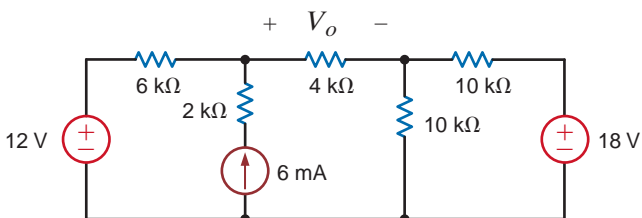


Figure P5.27

5.28 Find  $V_o$  in the circuit in Fig. P5.28 using superposition.

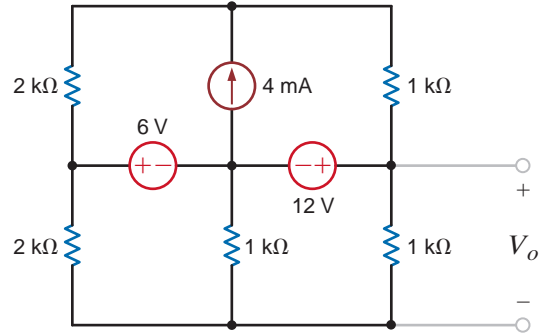


Figure P5.28

5.29 Use superposition to find  $I_o$  in the network in Fig. P5.29.

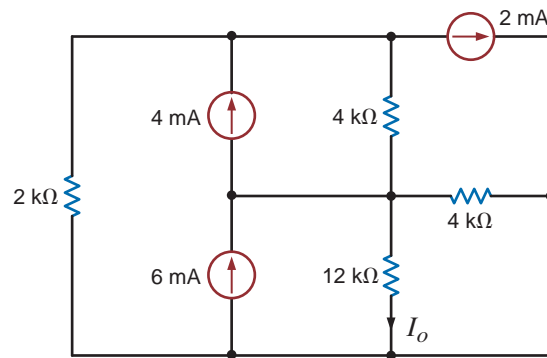


Figure P5.29

5.30 Use superposition to find  $I_o$  in the circuit in Fig. P5.30.

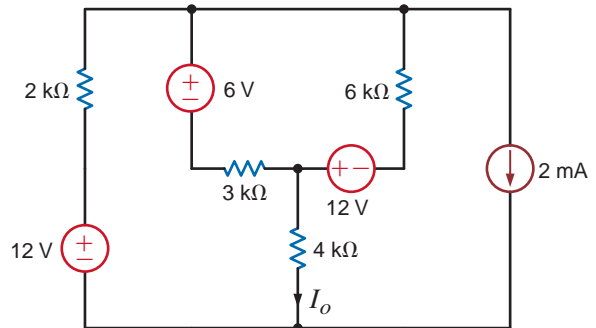


Figure P5.30

5.31 Use superposition to find  $I_o$  in the circuit in Fig. P5.31.

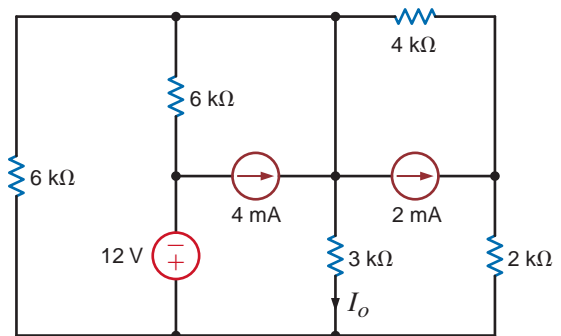


Figure P5.31

5.32 Use Thévenin's theorem to find  $V_o$  in the network in Fig. P5.32.

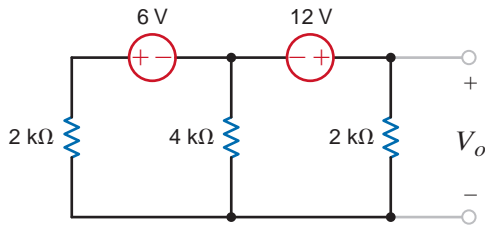


Figure P5.32

5.33 Use Thévenin's theorem to find  $I_o$  in the circuit using Fig. P5.33.

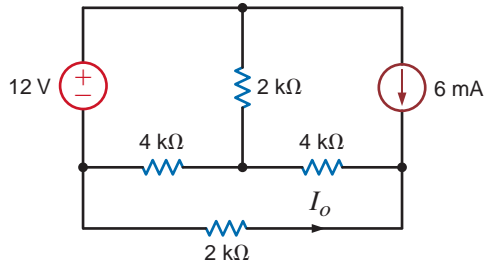


Figure P5.33

5.34 Use Thévenin's theorem to find  $V_o$  in the circuit using Fig. P5.34.

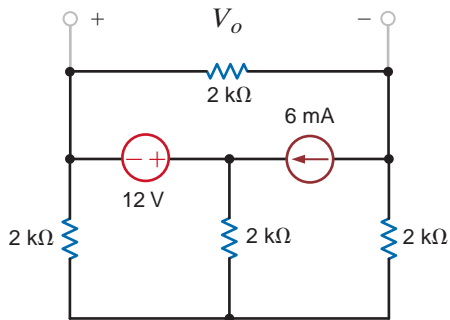


Figure P5.34

5.35 Use Thévenin's theorem to find  $V_o$  in the circuit in Fig. P5.35.

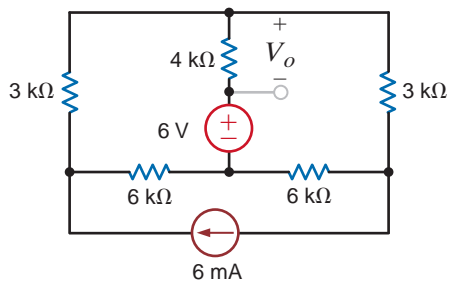


Figure P5.35

5.36 Use Thévenin's theorem to find  $I_o$  in the network in Fig. P5.36.

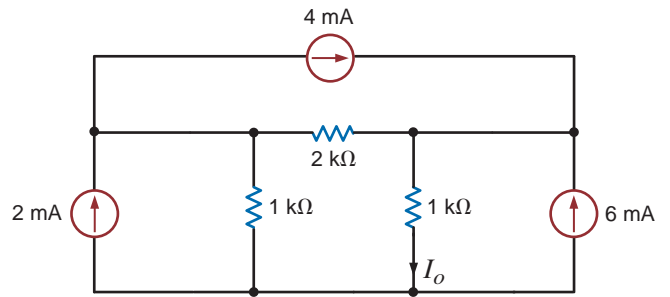


Figure P5.36

5.37 Find  $I_o$  in the network in Fig. P5.37 using Thevenin's theorem.

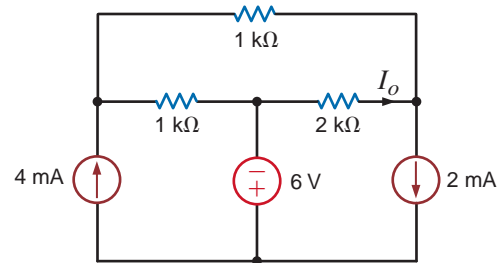


Figure P5.37

5.38 Find  $V_o$  in the circuit in Fig. P5.38 using Thévenin's theorem.

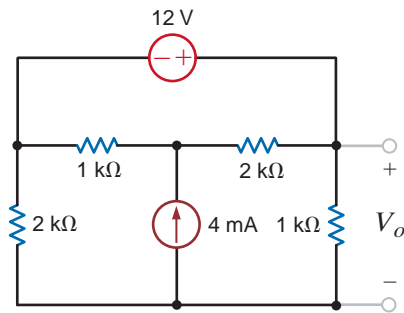


Figure P5.38

5.39 Find  $V_o$  in the circuit in Fig. P5.39 using Thévenin's theorem.

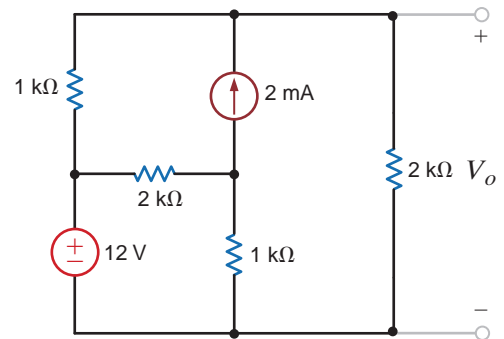


Figure P5.39

**5.40** Find  $I_o$  in the circuit in Fig. P5.40 using Thévenin's theorem.

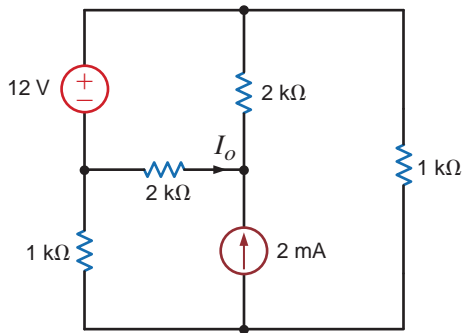


Figure P5.40

**5.43** Use Thévenin's theorem to find  $I_o$  in Fig. P5.43.

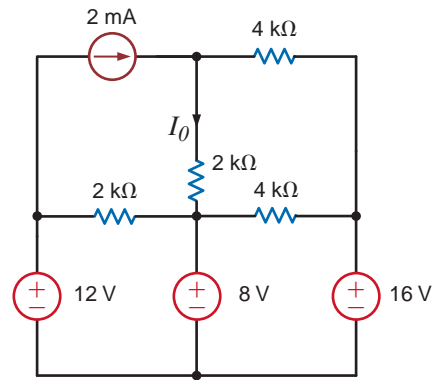


Figure P5.43

**5.41** Find  $V_o$  in the network in Fig. P5.41 using Thévenin's theorem.

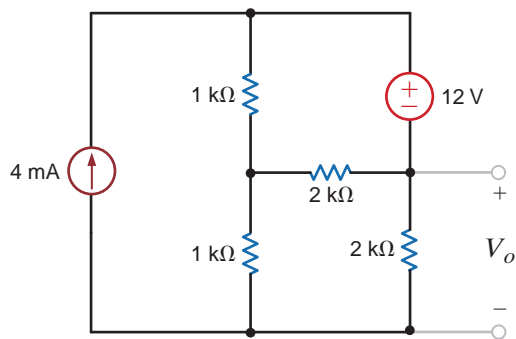


Figure P5.41

**5.44** Calculate  $I_x$  in Fig. P5.44 using Thévenin's theorem.

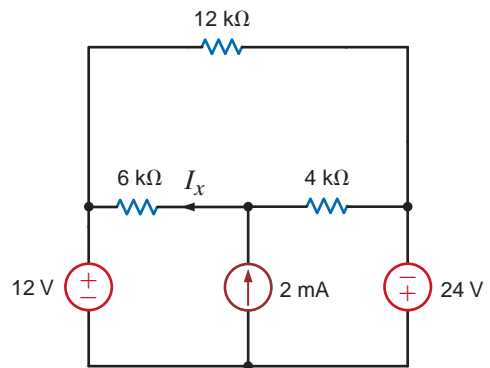


Figure P5.44

**5.42** Find  $I_o$  in the network in Fig. P5.42 using Thévenin's theorem.

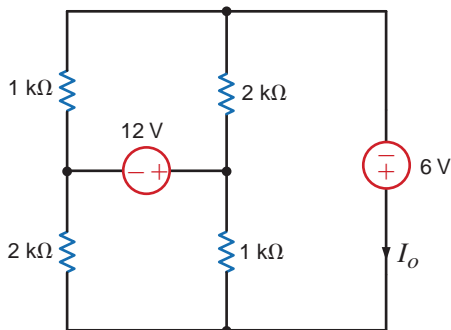


Figure P5.42

**5.45** Find  $I_o$  in the network in Fig. P5.45 using Thévenin's theorem.

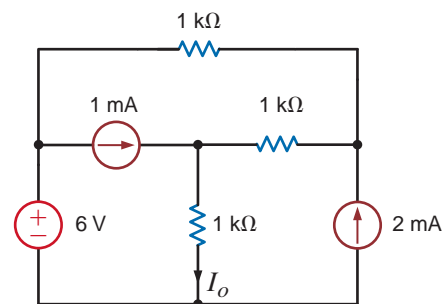


Figure P5.45



5.46 Find  $V_o$  in the network in Fig. P5.46 using Thévenin's theorem.

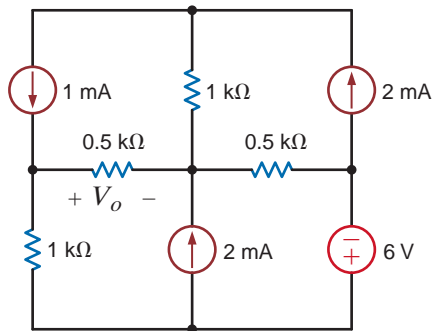


Figure P5.46

5.47 Use Thévenin's theorem to find  $I_o$  in the network in Fig. P5.47.

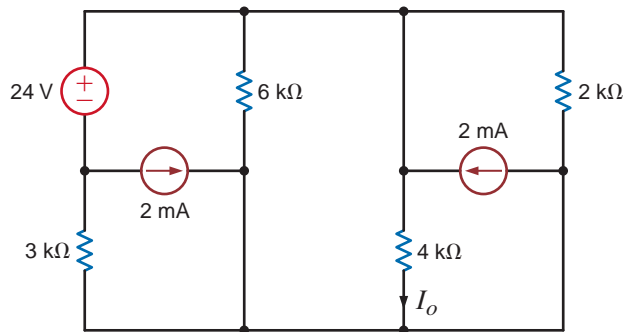


Figure P5.47

5.48 Use Thévenin's theorem to find  $I_o$  in the circuit in Fig. P5.48.

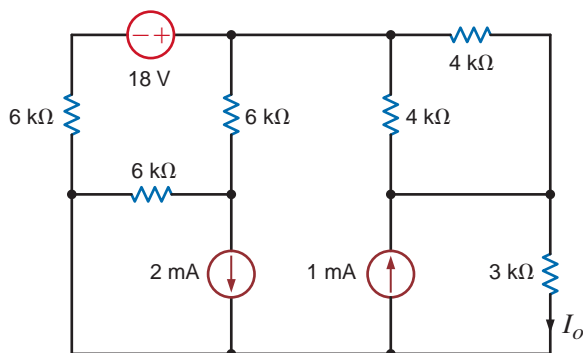


Figure P5.48

5.49 Given the linear circuit in Fig. P5.49, it is known that when a 2-k $\Omega$  load is connected to the terminals A–B, the load current is 10 mA. If a 10-k $\Omega$  load is connected to the terminals, the load current is 6 mA. Find the current in a 20-k $\Omega$  load.

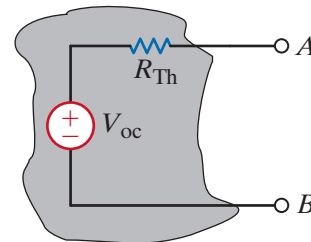


Figure P5.49

5.50 If an 8-k $\Omega$  load is connected to the terminals of the network in Fig. P5.50,  $V_{AB} = 16$  V. If a 2-k $\Omega$  load is connected to the terminals,  $V_{AB} = 8$  V. Find  $V_{AB}$  if a 20-k $\Omega$  load is connected to the terminals.

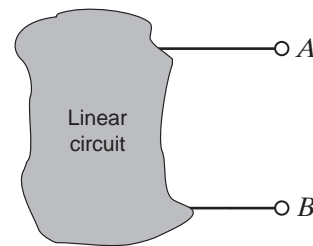


Figure P5.50

5.51 Find  $I_o$  in the network in Fig. P5.51 using Norton's theorem.

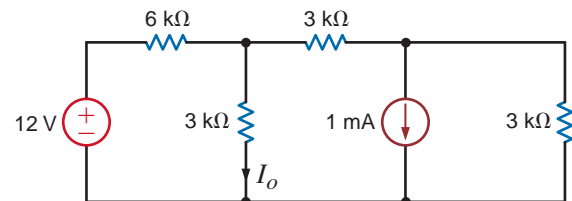


Figure P5.51

5.52 Use Norton's theorem to find  $I_o$  in the circuit in Fig. P5.52.

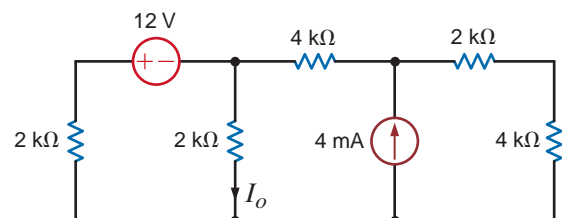


Figure P5.52

**5.53** Find  $I_o$  in the network in Fig. P5.53 using Norton's theorem.

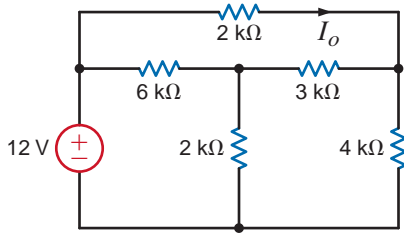


Figure P5.53

**5.54** Use Norton's theorem to find  $V_o$  in the network in Fig. P5.54.

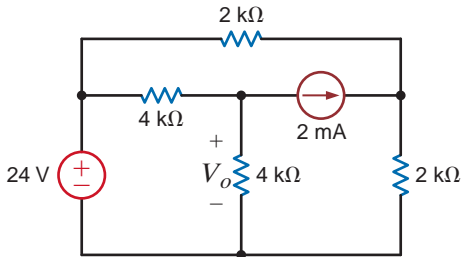


Figure P5.54

**5.55** Use Norton's theorem to find  $I_o$  in the circuit in Fig. P5.55.

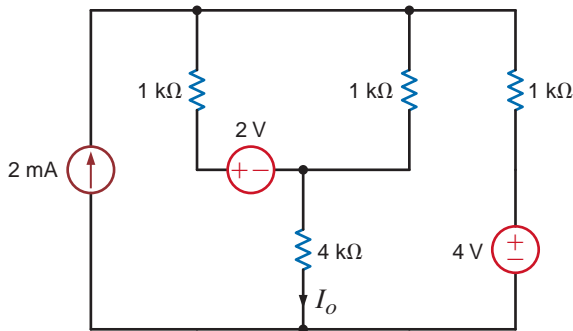


Figure P5.55

**5.56** Find  $V_o$  in the circuit in Fig. P5.56 using Norton's theorem.

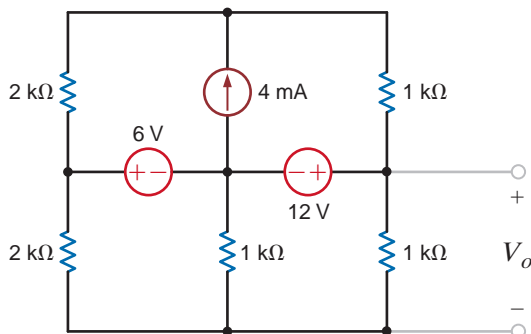


Figure P5.56

**5.57** Use Norton's theorem to find  $I_o$  in the network in Fig. P5.57.

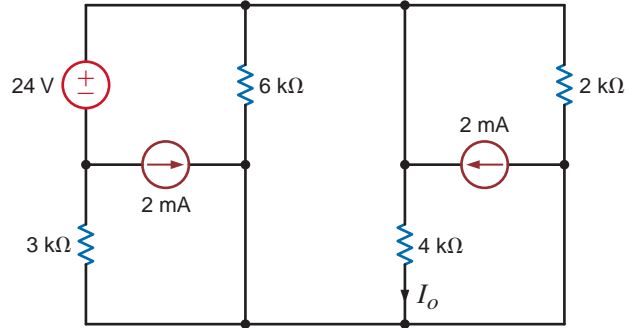


Figure P5.57

**5.58** Use Norton's theorem to find  $I_o$  in the circuit in Fig. P5.58.

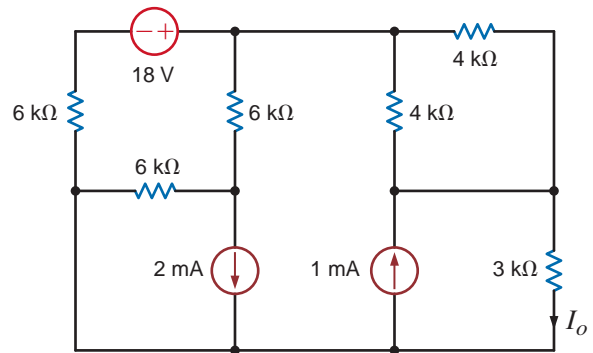


Figure P5.58

**5.59** Find  $V_o$  in the network in Fig. P5.59 using Thévenin's theorem.

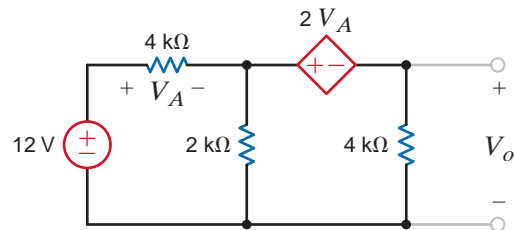


Figure P5.59

**5.60** Use Thévenin's theorem to find  $V_o$  in the circuit in Fig. P5.60.

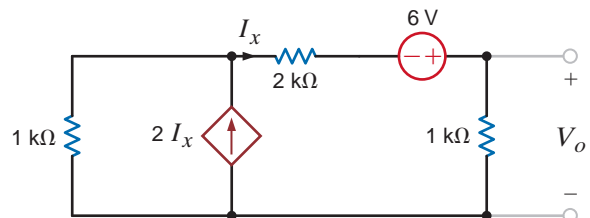


Figure P5.60

5.61 Use Thévenin's theorem to find  $I_o$  in the circuit in Fig. P5.61.

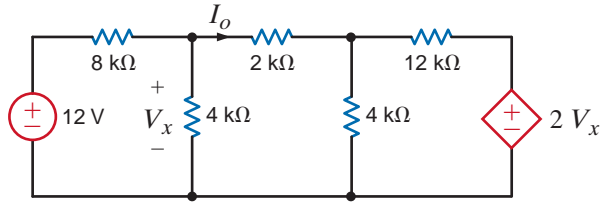


Figure P5.61

5.65 Use Norton's theorem to find  $V_o$  in the network in Fig. P5.65.

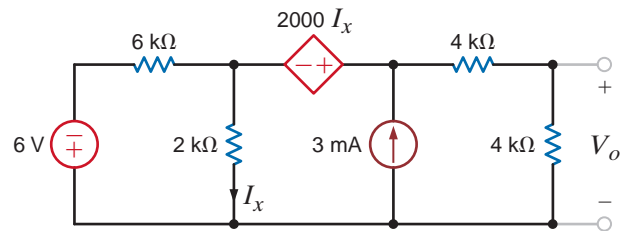


Figure P5.65

5.62 Use Thévenin's theorem to find  $V_o$  in the circuit in Fig. P5.62.

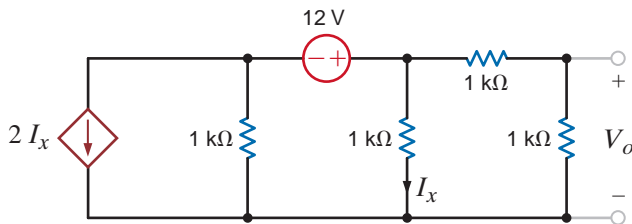


Figure P5.62

5.66 Find  $V_o$  in the circuit in Fig. P5.66 using Thévenin's theorem.

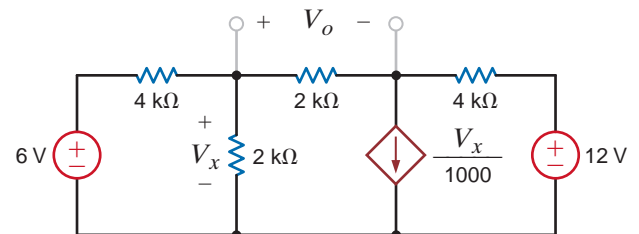


Figure P5.66

5.63 Find  $I_o$  in the circuit in Fig. P5.63 using Thévenin's theorem.

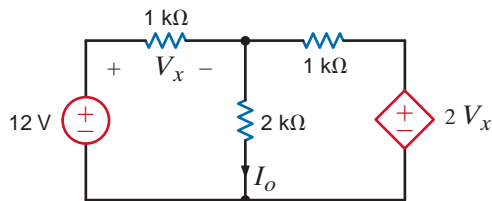


Figure P5.63

5.67 Find  $V_o$  in the network in Fig. P5.67 using Thévenin's theorem.

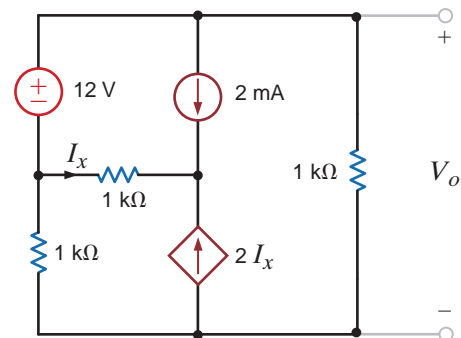


Figure P5.67

5.64 Find  $V_o$  in the network in Fig. P5.64 using Thévenin's theorem.

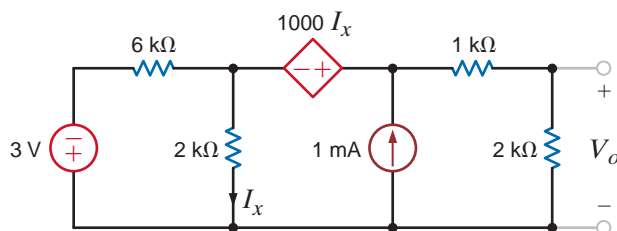


Figure P5.64

5.68 Use Thévenin's theorem to find  $V_o$  in the circuit in Fig. P5.68.

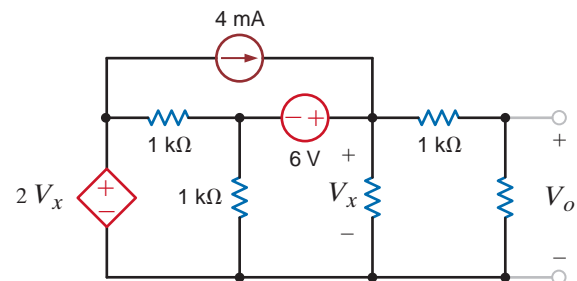


Figure P5.68

**5.69** Use Thévenin's theorem to find  $V_o$  in the circuit in Fig. P5.69.

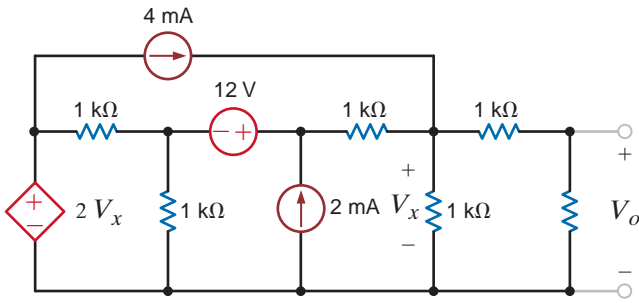


Figure P5.69

**5.70** Use Thévenin's theorem to find  $V_o$  in the network in Fig. P5.70.

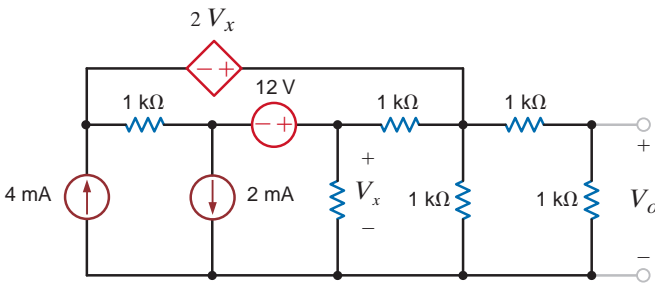


Figure P5.70

**5.71** Find  $V_o$  in the network in Fig. P5.71 using Norton's theorem.

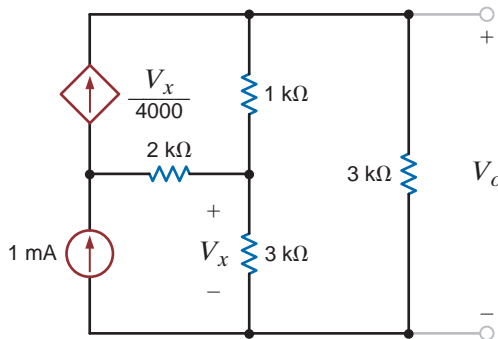


Figure P5.71

**5.72** Find  $I_o$  in the network in Fig. P5.72 using Thévenin's theorem.

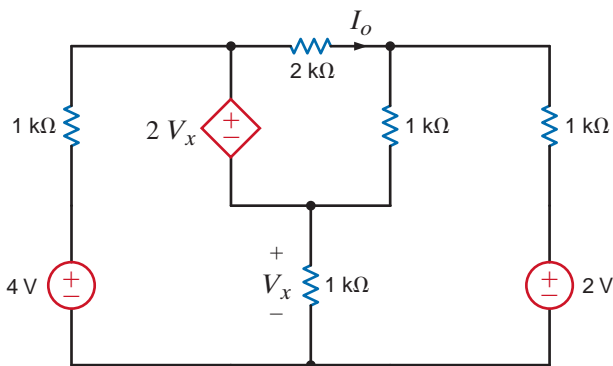


Figure P5.72

**5.73** Find  $V_o$  in the circuit in Fig. P5.73 using Thévenin's theorem.

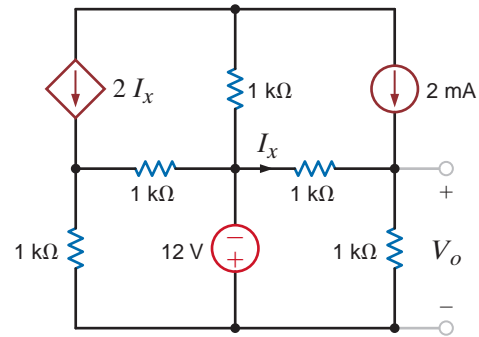


Figure P5.73

**5.74** Find  $V_o$  in the network in Fig. P5.74 using Thévenin's theorem.

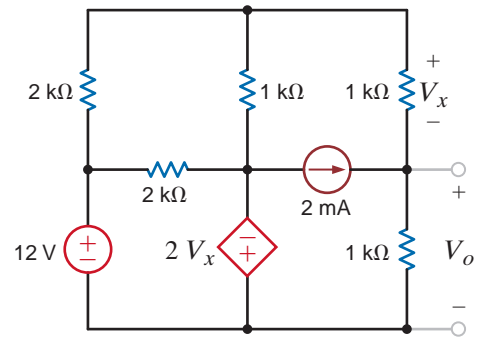


Figure P5.74

**5.75** Find  $V_o$  in the network of Fig. P5.75 using Thévenin's theorem.

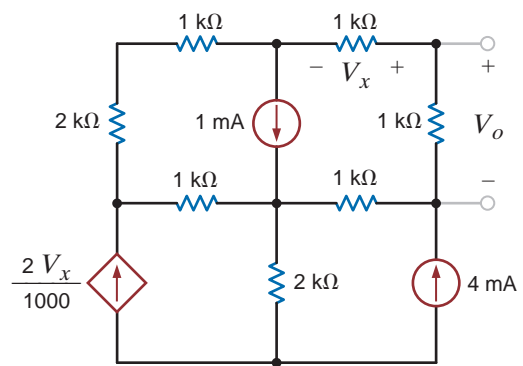


Figure P5.75

**5.76** Use Thévenin's theorem to find  $I_2$  in the circuit in Fig. P5.76.

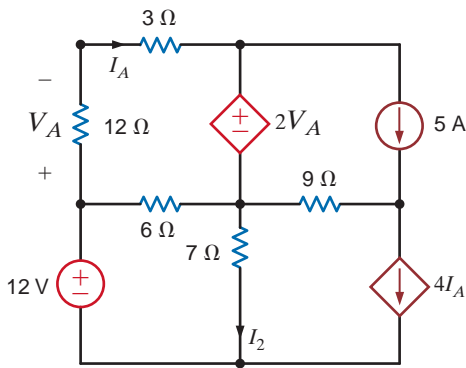


Figure P5.76

**5.77** Use Thévenin's theorem to find  $V_o$  in the circuit in Fig. P5.77.

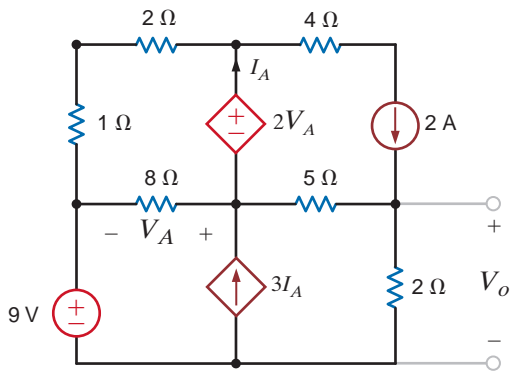


Figure P5.77

**5.78** Use Thévenin's theorem to find  $I_o$  in the network in Fig. P5.78.

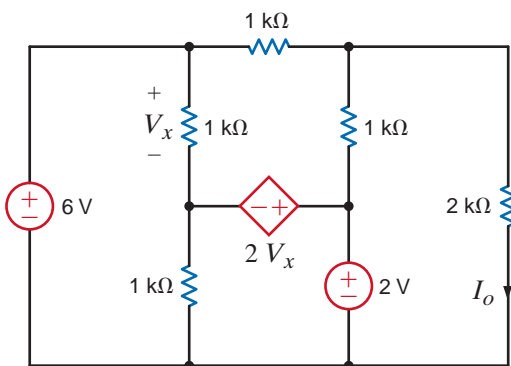


Figure P5.78

**5.79** Use Thévenin's theorem to find  $V_o$  in the network in Fig. P5.79.

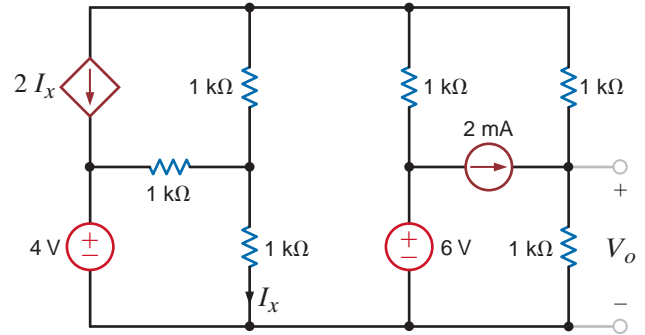


Figure P5.79

**5.80** Find the Thévenin equivalent of the network in Fig. P5.80 at the terminals A-B.

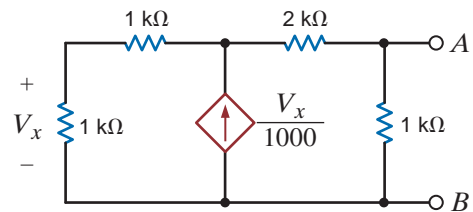


Figure P5.80

**5.81** Find the Thévenin equivalent of the network in Fig. P5.81 at the terminals A-B.

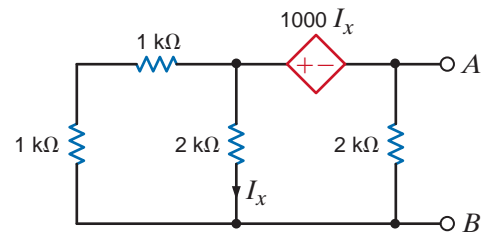


Figure P5.81

**5.82** Find the Thévenin equivalent circuit of the network in Fig. P5.82 at the terminals A-B.

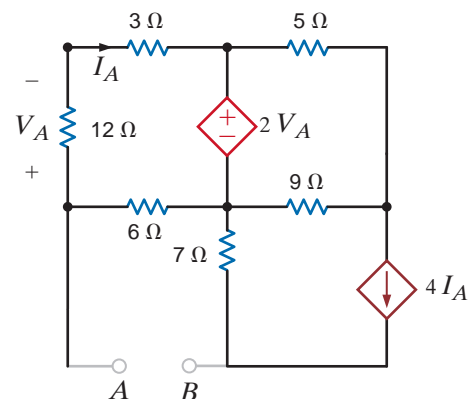


Figure P5.82

**5.83** Find the Thévenin equivalent of the network below at the terminals  $A$ - $B$  in Fig. P5.83.

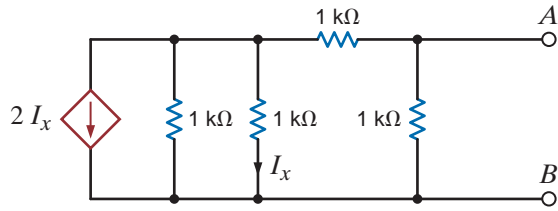


Figure P5.83

**5.84** Find  $I_o$  in the network in Fig. P5.84 using Thévenin's theorem.

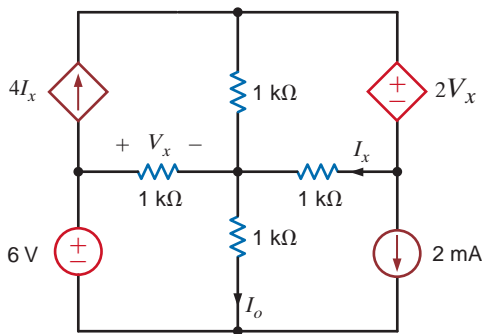


Figure P5.84

**5.85** Use source transformation to find  $V_o$  in the network in Fig. P5.85.

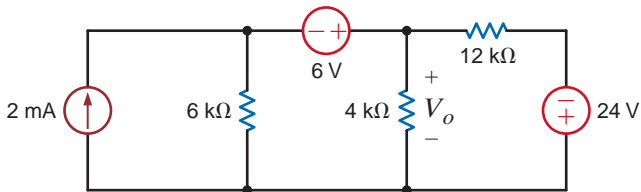


Figure P5.85

**5.86** Find  $I_o$  in the network in Fig. P5.86 using source transformation.

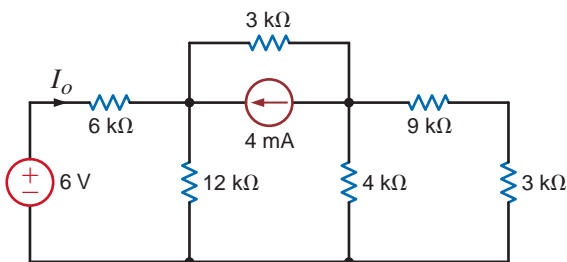


Figure P5.86

**5.87** Find  $V_o$  in the network in Fig. P5.87 using source transformation.

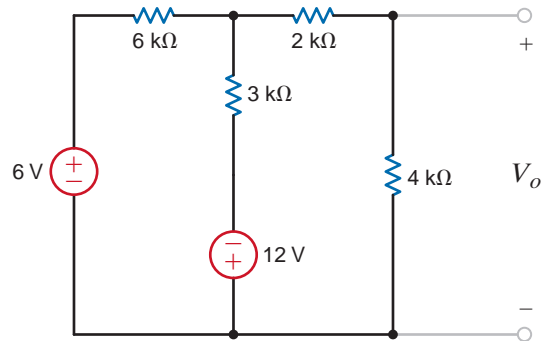


Figure P5.87

**5.88** Use source transformation to find  $I_o$  in the network in Fig. P5.88.

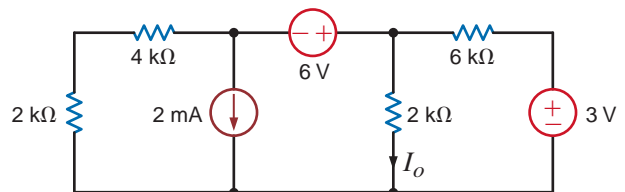


Figure P5.88

**5.89** Find  $V_o$  in the network in Fig. P5.89 using source transformation.

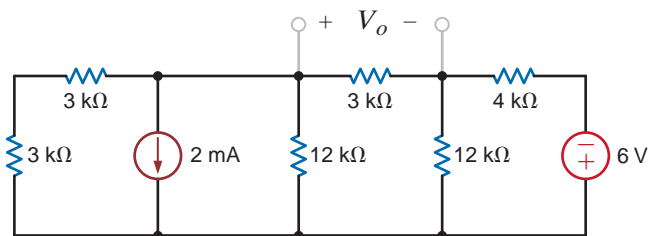


Figure P5.89

**5.90** Find  $I_o$  in the network in Fig. P5.90 using source transformation.

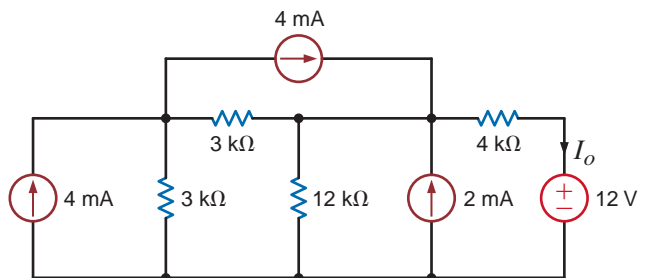


Figure P5.90

5.91 Find  $I_o$  in the circuit in Fig. P5.91 using source transformation.

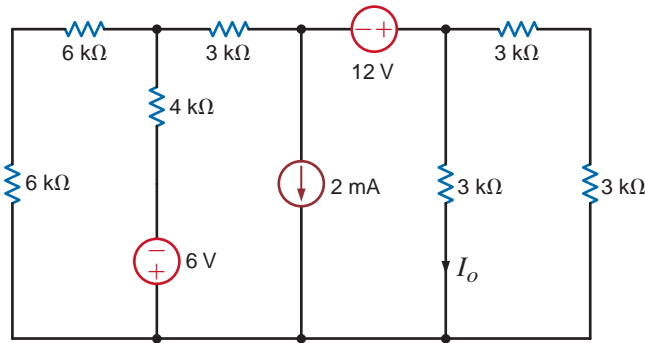


Figure P5.91

5.92 Use source exchange to find  $I_o$  in the network in Fig. P5.92.

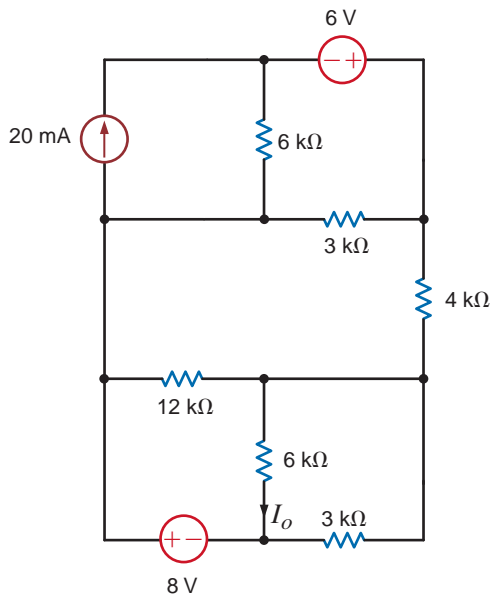


Figure P5.92

5.93 Use a combination of Y-Δ transformation source transformation to find  $I_o$  in the circuit in Fig. P5.93.

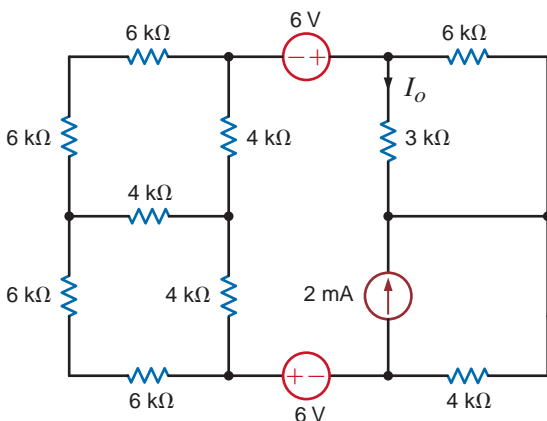


Figure P5.93

5.94 Find  $V_o$  in the network in Fig. P5.94 using source exchange.

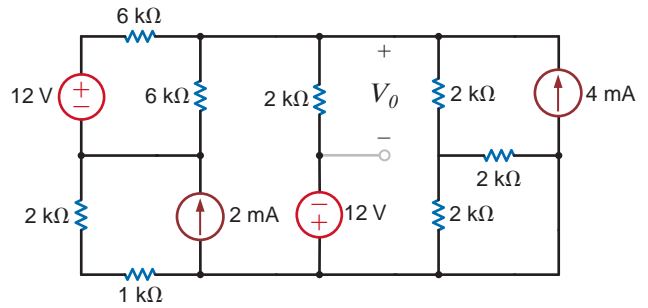


Figure P5.94

5.95 Use source exchange to find  $I_o$  in the circuit in Fig. P5.95.

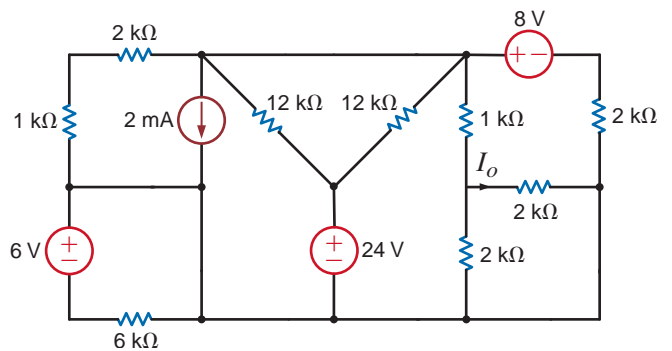


Figure P5.95

5.96 Use source exchange to find  $I_o$  in the network in Fig. P5.96.

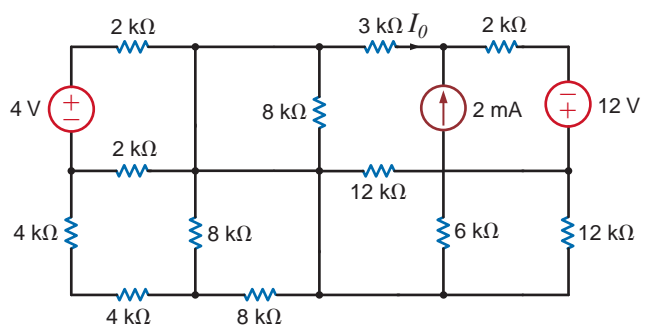


Figure P5.96

**5.97** Use source exchange to find  $I_o$  in the network in Fig. P5.97.

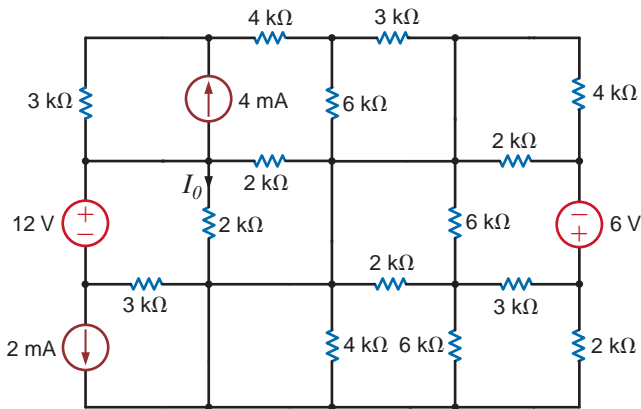


Figure P5.97

**5.98** Use source transformation to find  $I_o$  in the network in Fig. P5.98.

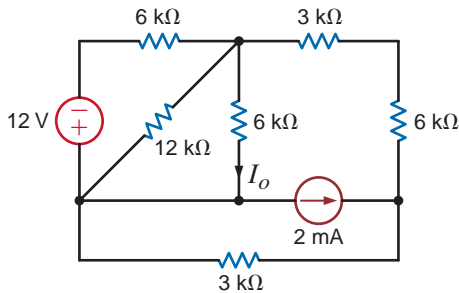


Figure P5.98

**5.99** Using source transformation, find  $V_o$  in the circuit in Fig. P5.99.

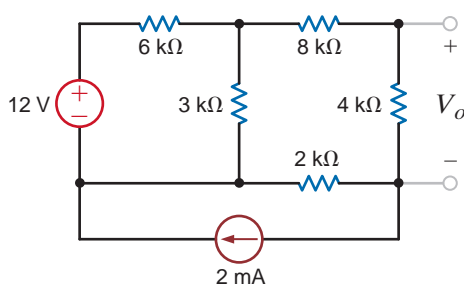


Figure P5.99

**5.100** Using source transformation, find  $I_o$  in the circuit in Fig. P5.100.

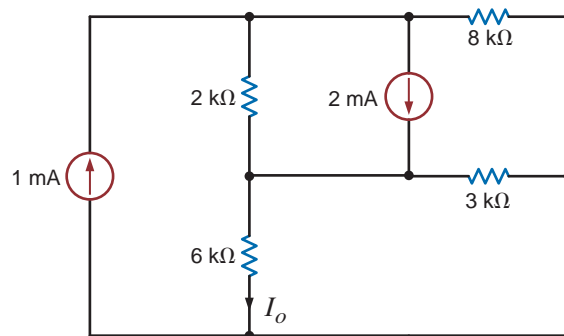


Figure P5.100

**5.101** Use source transformation to find  $I_o$  in the circuit in Fig. P5.101.

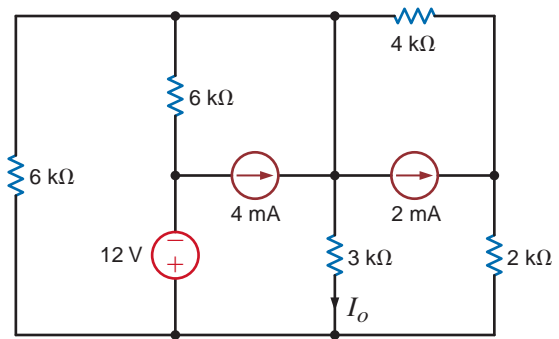


Figure P5.101

**5.102** Using source transformation, find  $I_o$  in the network in Fig. P5.102.

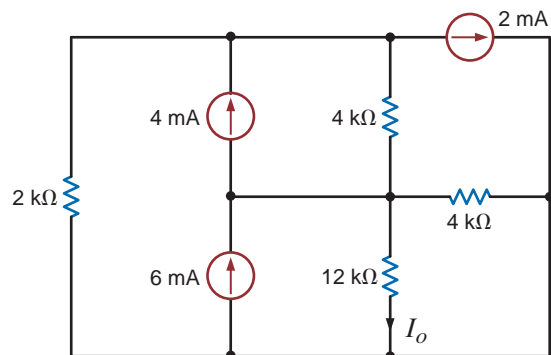


Figure P5.102



**5.103** Use source transformation to find  $I_o$  in the circuit in Fig. P5.103.

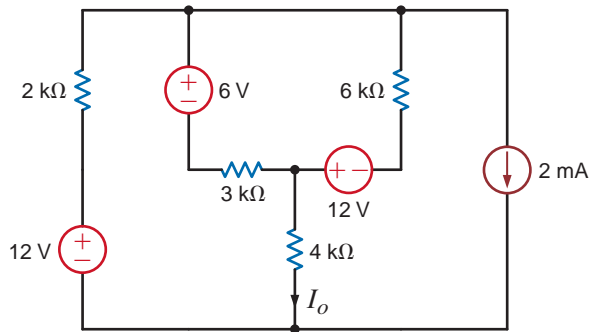


Figure P5.103

**5.104** Use source transformation to find  $I_o$  in the circuit in Fig. P5.104.

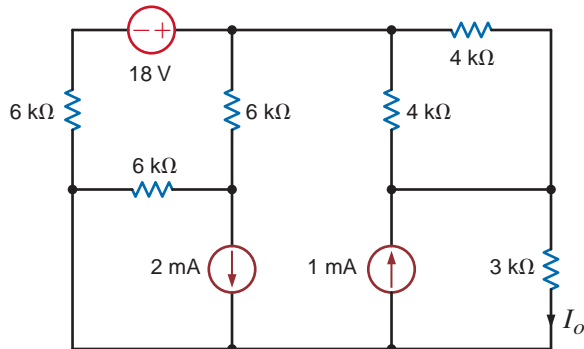


Figure P5.104

**5.105** Using source transformation, find  $I_o$  in the circuit in Fig. P5.105.

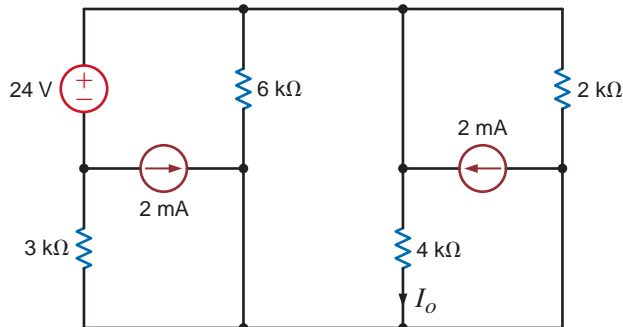


Figure P5.105

**5.106** Find  $R_L$  in the network in Fig. P5.106 in order to achieve maximum power transfer.

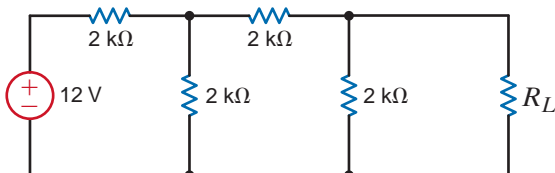


Figure P5.106

**5.107** In the network in Fig. P5.107 find  $R_L$  for maximum power transfer and the maximum power transferred to this load.

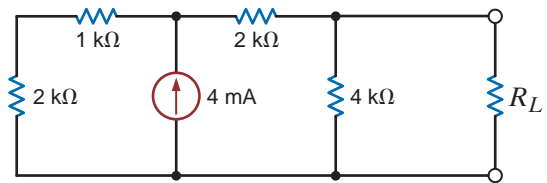


Figure P5.107

**5.108** Find  $R_L$  for maximum power transfer and the maximum power that can be transferred to the load in Fig. P5.108.

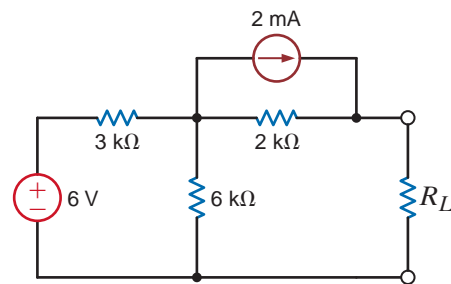


Figure P5.108

**5.109** Calculate the maximum power that can be transferred to  $R_L$  in Fig. P5.109.

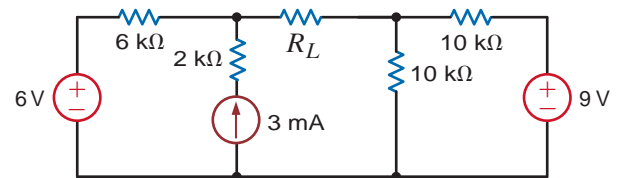


Figure P5.109

**5.110** Find the value of  $R_L$  in Fig. P5.110 for maximum power transfer and the maximum power that can be dissipated in  $R_L$ .

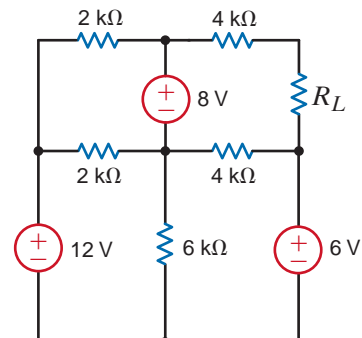


Figure P5.110

**5.111** Determine the value of  $R_L$  in Fig. P5.111 for maximum power transfer. In addition, calculate the power dissipated in  $R_L$  under these conditions.

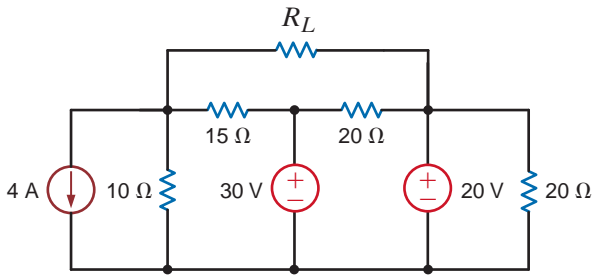


Figure P5.111

**5.112** Determine the value of  $R_L$  in the network in Fig. P5.112 for maximum power transfer.

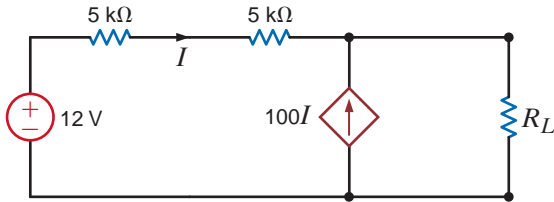


Figure P5.112

**5.113** Find  $R_L$  for maximum power transfer and the maximum power that can be transferred to the load in Fig. P5.113.

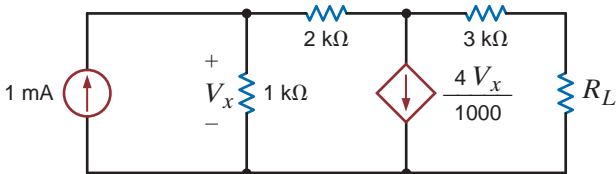


Figure P5.113

**5.114** Find the value of  $R_L$  in the network in Fig. P5.114 for maximum power transfer.

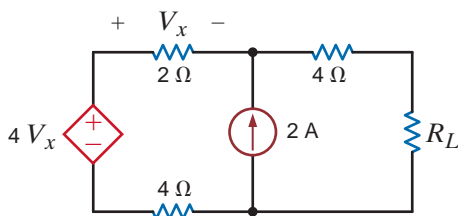


Figure P5.114

**5.115** Find the value of  $R_L$  in Fig. P5.115 for maximum power transfer and the maximum power that can be transferred to  $R_L$ .

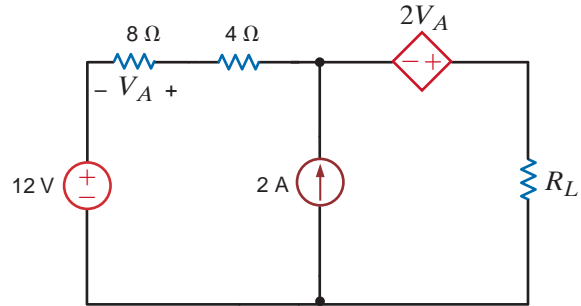


Figure P5.115

**5.116** Find the value of  $R_L$  in Fig. P5.116 for maximum power transfer and the maximum power that can be dissipated in  $R_L$ .

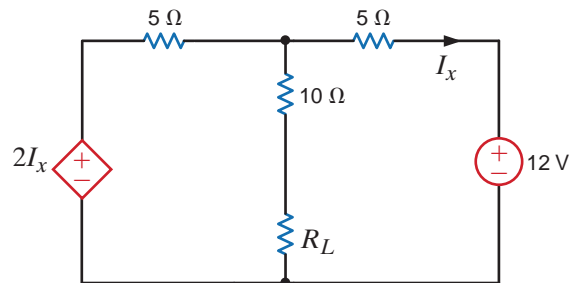


Figure P5.116

**5.117** Find the value of  $R_L$  in Fig. P5.117 for maximum power transfer. In addition, calculate the power dissipated in  $R_L$  under these conditions.

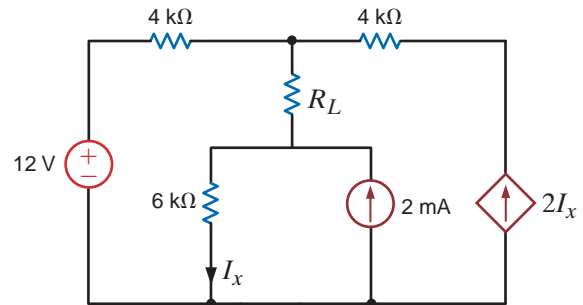


Figure P5.117

**5.118** Find the value of  $R_L$  in Fig. P5.118 for maximum power transfer. In addition, calculate the power dissipated in  $R_L$  under these conditions.

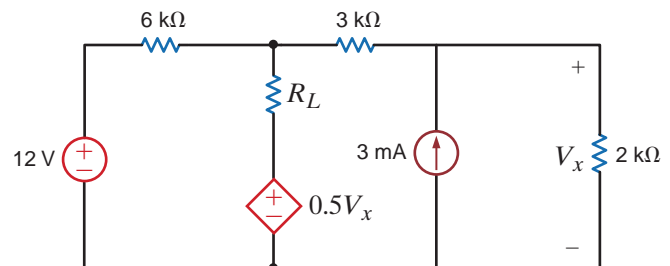


Figure P5.118

**5.119** Calculate the maximum power that can be transferred to  $R_L$  in the circuit in Fig. P5.119.

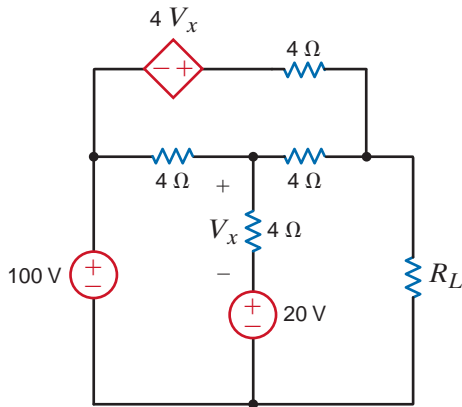


Figure P5.119

**5.120** Find  $R_L$  for maximum power transfer and the maximum power that can be transferred in the network in Fig. P5.120.

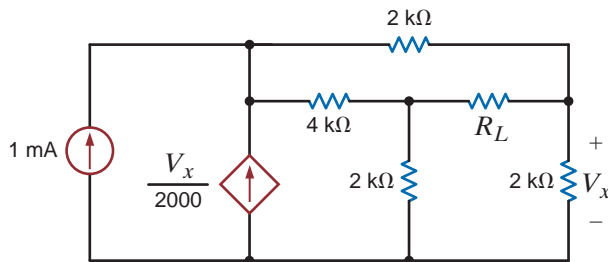


Figure P5.120

**5.121** Find the value of  $R_L$  in Fig. P5.121 for maximum power transfer and the maximum power that can be dissipated in  $R_L$ .

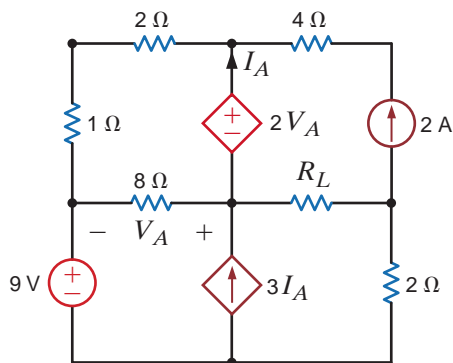


Figure P5.121

**5.122** Solve the remaining problems using computational methods. Find  $I_o$  in the network in Fig. P5.122.

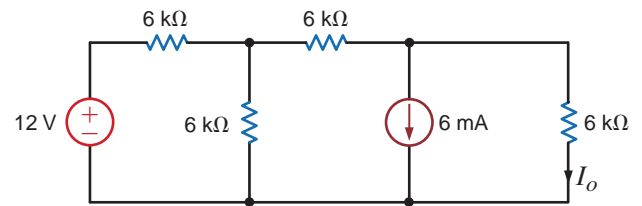


Figure P5.122

**5.123** Find  $V_o$  in the network in Fig. P5.123.

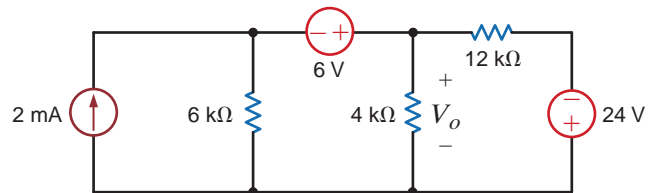


Figure P5.123

**5.124** Find  $I_o$  in the circuit in Fig. P5.124.

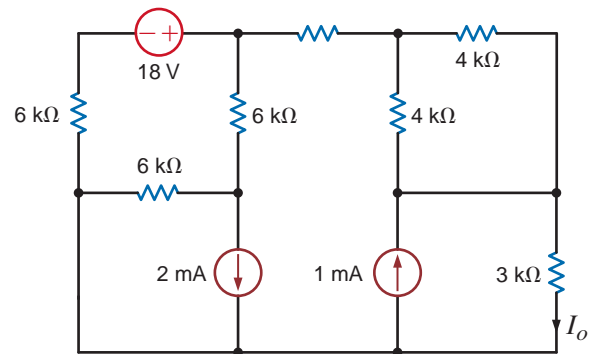


Figure P5.124

**5.125** Find  $V_o$  in the network in Fig. P5.125.

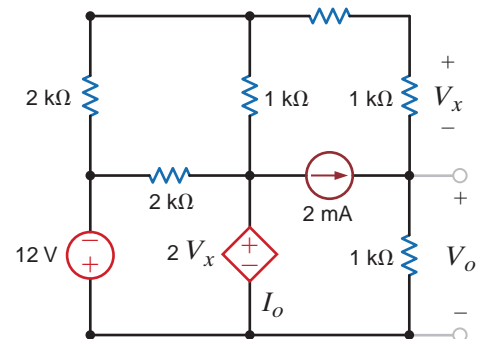


Figure P5.125

**TYPICAL PROBLEMS FOUND ON THE FE EXAM**

**5PFE-1** Determine the maximum power that can be delivered to the load  $R_L$  in the network in Fig. 5PFE-1.

- a. 2 mW
- b. 10 mW
- c. 4 mW
- d. 8 mW

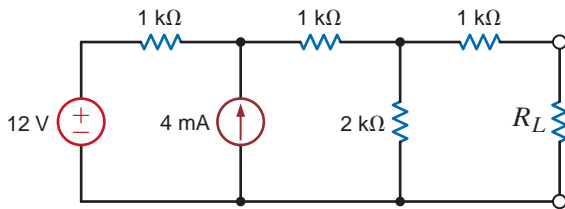


Figure 5PFE-1

**5PFE-2** Find the value of the load  $R_L$  in the network in Fig. 5PFE-2 that will achieve maximum power transfer, and determine that value of the maximum power.

- a. 22.5 mW
- b. 80.4 mW
- c. 64.3 mW
- d. 121.5 mW

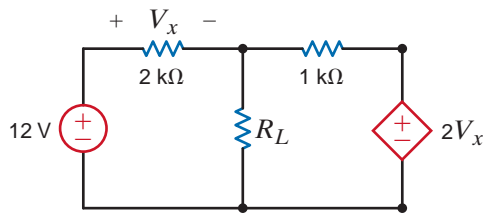


Figure 5PFE-2

**5PFE-3** Find the value of  $R_L$  in the network in Fig. 5PFE-3 for maximum power transfer to this load.

- a. 12.92 Ω
- b. 8.22 Ω
- c. 6.78 Ω
- d. 10.53 Ω

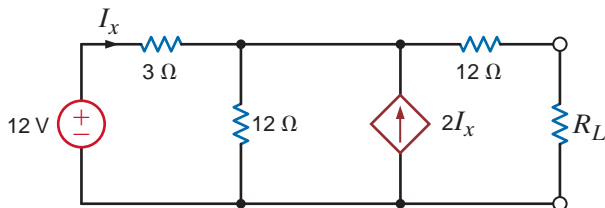


Figure 5PFE-3

**5PFE-4** What is the current  $I$  in Fig. 5PFE-4?

- a. 8 A
- b. -4 A
- c. 0 A
- d. 4 A

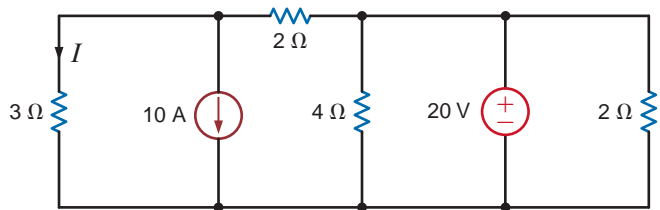


Figure 5PFE-4

**5PFE-5** What is the open-circuit voltage  $V_{oc}$  at terminals  $a$  and  $b$  of the circuit in Fig. 5PFE-5?

- a. 8 V
- b. 12 V
- c. 4 V
- d. 10 V

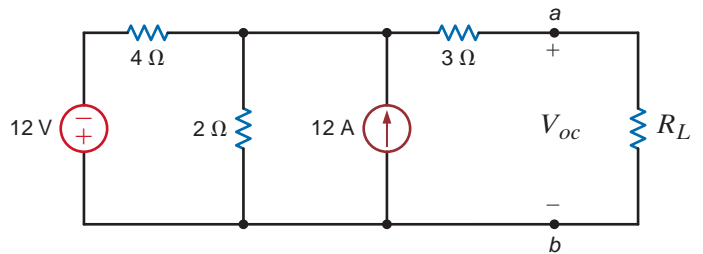


Figure 5PFE-5

# CAPACITANCE AND INDUCTANCE



Courtesy of UPI/Brian Kersey/NewsCom

## THE LEARNING GOALS FOR THIS CHAPTER ARE:

- Know how to use circuit models for inductors and capacitors to calculate voltage, current, and power
- Be able to calculate stored energy for capacitors and inductors
- Understand the concepts of continuity of current for an inductor and continuity of voltage for a capacitor
- Be able to calculate voltages and currents for capacitors and inductors in electric circuits with dc sources
- Know how to combine capacitors and inductors in series and parallel

**Airport Scanners** To be searched or not to be searched is never the question. Air travelers demand security in the skies and today's technology makes it possible with just a 15-to-30 second body scan instead of an intrusive pat-down that can take two to four minutes. Over 99% of airline passengers in major airports across the nation choose to use body scanners when faced with the option. Scanners can spot plastic and ceramic weapons and explosives that evade metal detectors and could eventually replace metal detectors at the nation's 2,000 airport checkpoints.

Most travelers say they welcome any measure that enhances safety, even if it means giving up some privacy. Today's new body scanners depend on millimeter wave technology or backscatter x-ray technology. The first produces an image that resembles a fuzzy photo negative; the second a

chalk etching. Millimeter wave technology emits 10,000 times less radio frequency than a cell phone. Backscatter technology uses high-energy x-rays as it moves through clothing and other materials. In both cases, images used for security are not retained but destroyed immediately.

This chapter introduces two new circuit elements: capacitors and inductors that store energy in electric and magnetic fields. Voltage and current relationships for these components do not follow Ohm's law but instead connect voltages and currents to their derivatives and integrals. Capacitors and inductors are central to the study of alternating current circuits. They are also key components in making body scanners work. The circuit designs behind effective full-body scanners help make everyone safer in the skies. What a feeling.

## 6.1

## Capacitors

A *capacitor* is a circuit element that consists of two conducting surfaces separated by a non-conducting, or *dielectric*, material. A simplified capacitor and its electrical symbol are shown in Fig. 6.1.

There are many different kinds of capacitors, and they are categorized by the type of dielectric material used between the conducting plates. Although any good insulator can serve as a dielectric, each type has characteristics that make it more suitable for particular applications.

For general applications in electronic circuits (e.g., coupling between stages of amplification), the dielectric material may be paper impregnated with oil or wax, mylar, polystyrene, mica, glass, or ceramic.

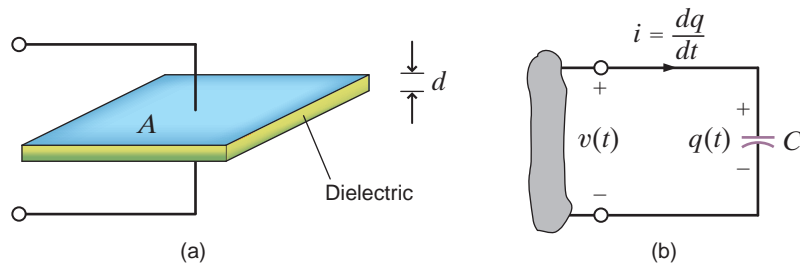
Ceramic dielectric capacitors constructed of barium titanates have a large capacitance-to-volume ratio because of their high dielectric constant. Mica, glass, and ceramic dielectric capacitors will operate satisfactorily at high frequencies.

Aluminum electrolytic capacitors, which consist of a pair of aluminum plates separated by a moistened borax paste electrolyte, can provide high values of capacitance in small volumes. They are typically used for filtering, bypassing, and coupling, and in power supplies and motor-starting applications. Tantalum electrolytic capacitors have lower losses and more stable characteristics than those of aluminum electrolytic capacitors. Fig. 6.2 shows a variety of typical discrete capacitors.

In addition to these capacitors, which we deliberately insert in a network for specific applications, stray capacitance is present any time there is a difference in potential between two conducting materials separated by a dielectric. Because this stray capacitance can cause

Figure 6.1

A capacitor and its electrical symbol.



[hint]

Note the use of the passive sign convention.

Figure 6.2

Some typical capacitors. (Courtesy of Mark Nelms and Jo Ann Loden)



unwanted coupling between circuits, extreme care must be exercised in the layout of electronic systems on printed circuit boards.

Capacitance is measured in coulombs per volt or farads. The unit *farad* (F) is named after Michael Faraday, a famous English physicist. Capacitors may be fixed or variable and typically range from thousands of microfarads ( $\mu\text{F}$ ) to a few picofarads (pF).

Capacitor technology, initially driven by the modern interest in electric vehicles, is rapidly changing, however. For example, the capacitor on the left in the photograph in Fig. 6.3 is a double-layer capacitor, which is rated at 2.5 V and 100 F. An aluminum electrolytic capacitor, rated at 25 V and 68,000  $\mu\text{F}$ , is shown on the right in this photograph. The electrolytic capacitor can store  $0.5 * 6.8 * 10^{-2} * 25^2 = 21.25$  joules (J). The double-layer capacitor can store  $0.5 * 100 * 2.5^2 = 312.5$  J. Let's connect ten of the 100-F capacitors in series for an equivalent 25-V capacitor. The energy stored in this equivalent capacitor is 3125 J. We would need to connect 147 electrolytic capacitors in parallel to store that much energy.

It is interesting to calculate the dimensions of a simple equivalent capacitor consisting of two parallel plates each of area  $A$ , separated by a distance  $d$  as shown in Fig. 6.1. We learned in basic physics that the capacitance of two parallel plates of area  $A$ , separated by distance  $d$ , is

$$C = \frac{\epsilon_0 A}{d}$$

where  $\epsilon_0$ , the permittivity of free space, is  $8.85 * 10^{-12}$  F/m. If we assume the plates are separated by a distance in air of the thickness of one sheet of oil-impregnated paper, which is about  $1.016 * 10^{-4}$  m, then

$$100 \text{ F} = \frac{(8.85 * 10^{-12})A}{1.016 * 10^{-4}}$$

$$A = 1.148 * 10^9 \text{ m}^2$$

and since 1 square mile is equal to  $2.59 * 10^6$  square meters, the area is

$$A \approx 443 \text{ square miles}$$

which is the area of a medium-sized city! It would now seem that the double-layer capacitor in the photograph is much more impressive than it originally appeared. This capacitor is actually constructed using a high surface area material such as powdered carbon which is adhered to a metal foil. There are literally millions of pieces of carbon employed to obtain the required surface area.

Suppose now that a source is connected to the capacitor shown in Fig. 6.1; then positive charges will be transferred to one plate and negative charges to the other. The charge on the capacitor is proportional to the voltage across it such that

$$q = Cv \quad 6.1$$

where  $C$  is the proportionality factor known as the capacitance of the element in farads.

The charge differential between the plates creates an electric field that stores energy. Because of the presence of the dielectric, the conduction current that flows in the wires that connect the capacitor to the remainder of the circuit cannot flow internally between the plates. However, via electromagnetic field theory it can be shown that this conduction current is equal to the displacement current that flows between the plates of the capacitor and is present any time that an electric field or voltage varies with time.

Our primary interest is in the current–voltage terminal characteristics of the capacitor. Since the current is

$$i = \frac{dq}{dt}$$



**Figure 6.3**

A 100-F double-layer capacitor and a 68,000- $\mu\text{F}$  electrolytic capacitor. (Courtesy of Mark Nelms and Jo Ann Loden)

then for a capacitor

$$i = \frac{d}{dt}(Cv)$$

which for constant capacitance is

$$i = C \frac{dv}{dt} \quad 6.2$$

Eq. (6.2) can be rewritten as

$$dv = \frac{1}{C} i dt$$

Now integrating this expression from  $t = -\infty$  to some time  $t$  and assuming  $v(-\infty) = 0$  yields

$$v(t) = \frac{1}{C} \int_{-\infty}^t i(x) dx \quad 6.3$$

where  $v(t)$  indicates the time dependence of the voltage. Eq. (6.3) can be expressed as two integrals, so that

$$\begin{aligned} v(t) &= \frac{1}{C} \int_{-\infty}^{t_0} i(x) dx + \frac{1}{C} \int_{t_0}^t i(x) dx \\ &= v(t_0) + \frac{1}{C} \int_{t_0}^t i(x) dx \end{aligned} \quad 6.4$$

where  $v(t_0)$  is the voltage due to the charge that accumulates on the capacitor from time  $t = -\infty$  to time  $t = t_0$ .

The energy stored in the capacitor can be derived from the power that is delivered to the element. This power is given by the expression

$$p(t) = v(t)i(t) = Cv(t) \frac{dv(t)}{dt} \quad 6.5$$

and hence the energy stored in the electric field is

$$\begin{aligned} w_C(t) &= \int_{-\infty}^t Cv(x) \frac{dv(x)}{dx} dx = C \int_{-\infty}^t v(x) \frac{dv(x)}{dx} dx \\ &= C \int_{v(-\infty)}^{v(t)} v(x) dv(x) = \frac{1}{2} Cv^2(x) \Big|_{v(-\infty)}^{v(t)} \\ &= \frac{1}{2} Cv^2(t) \text{ J} \end{aligned} \quad 6.6$$

since  $v(t = -\infty) = 0$ . The expression for the energy can also be written using Eq. (6.1) as

$$w_C(t) = \frac{1}{2} \frac{q^2(t)}{C} \quad 6.7$$

Eqs. (6.6) and (6.7) represent the energy stored by the capacitor, which, in turn, is equal to the work done by the source to charge the capacitor.

Now let's consider the case of a dc voltage applied across a capacitor. From Eq. (6.2), we see that the current flowing through the capacitor is directly proportional to the time rate of change of the voltage across the capacitor. A dc voltage does not vary with time, so the current flowing through the capacitor is zero. We can say that a capacitor is "an open circuit to



dc” or “blocks dc.” Capacitors are often utilized to remove or filter out an unwanted dc voltage. In analyzing a circuit containing dc voltage sources and capacitors, we can replace the capacitors with an open circuit and calculate voltages and currents in the circuit using our many analysis tools.

Note that the power absorbed by a capacitor, given by Eq. (6.5), is directly proportional to the time rate of change of the voltage across the capacitor. What if we had an instantaneous change in the capacitor voltage? This would correspond to  $dv/dt = \infty$  and infinite power. In Chapter 1, we ruled out the possibility of any sources of infinite power. Since we only have finite power sources, the voltage across a capacitor cannot change instantaneously. This will be a particularly helpful idea in the next chapter when we encounter circuits containing switches. This idea of “continuity of voltage” for a capacitor tells us that the voltage across the capacitor just after a switch moves is the same as the voltage across the capacitor just before that switch moves.

The polarity of the voltage across a capacitor being charged is shown in Fig. 6.1b. In the ideal case, the capacitor will hold the charge for an indefinite period of time, if the source is removed. If at some later time an energy-absorbing device (e.g., a flash bulb) is connected across the capacitor, a discharge current will flow from the capacitor and, therefore, the capacitor will supply its stored energy to the device.

If the charge accumulated on two parallel conductors charged to 12 V is 600 pC, what is the capacitance of the parallel conductors?

Using Eq. (6.1), we find that

$$C = \frac{Q}{V} = \frac{(600)(10^{-12})}{12} = 50 \text{ pF}$$

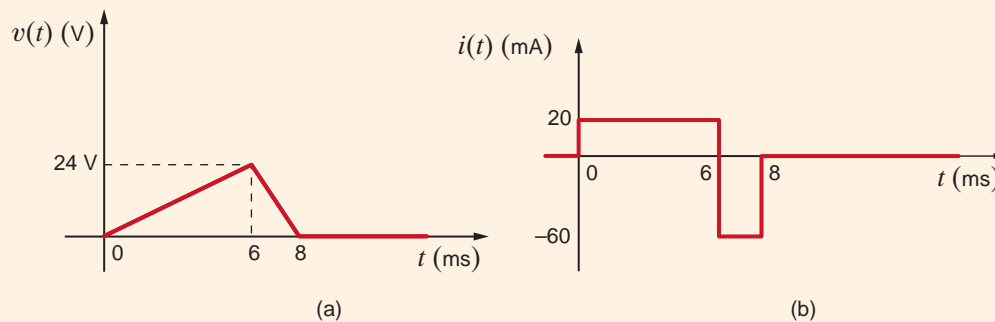
### EXAMPLE 6.1

**SOLUTION**

The voltage across a 5- $\mu\text{F}$  capacitor has the waveform shown in Fig. 6.4a. Determine the current waveform.

Note that

$$\begin{aligned} v(t) &= \frac{24}{6 \times 10^{-3}} t & 0 \leq t \leq 6 \text{ ms} \\ &= \frac{-24}{2 \times 10^{-3}} t + 96 & 6 \leq t < 8 \text{ ms} \\ &= 0 & 8 \text{ ms} \leq t \end{aligned}$$



### EXAMPLE 6.2

**SOLUTION**

**Figure 6.4**

Voltage and current waveforms for a 5- $\mu\text{F}$  capacitor.

Using Eq. (6.2), we find that

$$\begin{aligned} i(t) &= C \frac{dv(t)}{dt} \\ &= 5 \times 10^{-6}(4 \times 10^3) & 0 \leq t \leq 6 \text{ ms} \\ &= 20 \text{ mA} & 0 \leq t \leq 6 \text{ ms} \\ i(t) &= 5 \times 10^{-6}(-12 \times 10^3) & 6 \leq t \leq 8 \text{ ms} \\ &= -60 \text{ mA} & 6 \leq t < 8 \text{ ms} \end{aligned}$$

and

$$i(t) = 0 \quad 8 \text{ ms} \leq t$$

Therefore, the current waveform is as shown in Fig. 6.4b and  $i(t) = 0$  for  $t > 8$  ms.

### EXAMPLE

Determine the energy stored in the electric field of the capacitor in Example 6.2 at  $t = 6$  ms.

## 6.3

**SOLUTION** Using Eq. (6.6), we have

$$w(t) = \frac{1}{2} C v^2(t)$$

At  $t = 6$  ms,

$$\begin{aligned} w(6 \text{ ms}) &= \frac{1}{2} (5 \times 10^{-6})(24)^2 \\ &= 1440 \text{ } \mu\text{J} \end{aligned}$$

## Learning Assessment

**E6.1** A 10- $\mu\text{F}$  capacitor has an accumulated charge of 500 nC. Determine the voltage across the capacitor. **ANSWER:** 0.05 V.

### EXAMPLE

## 6.4

The current in an initially uncharged 4- $\mu\text{F}$  capacitor is shown in Fig. 6.5a. Let us derive the waveforms for the voltage, power, and energy and compute the energy stored in the electric field of the capacitor at  $t = 2$  ms.

**SOLUTION** The equations for the current waveform in the specific time intervals are

$$\begin{aligned} i(t) &= \frac{16 \times 10^{-6}t}{2 \times 10^{-3}} & 0 \leq t \leq 2 \text{ ms} \\ &= -8 \times 10^{-6} & 2 \text{ ms} \leq t \leq 4 \text{ ms} \\ &= 0 & 4 \text{ ms} < t \end{aligned}$$

Since  $v(0) = 0$ , the equation for  $v(t)$  in the time interval  $0 \leq t \leq 2$  ms is

$$v(t) = \frac{1}{(4)(10^{-6})} \int_0^t 8(10^{-3})x \, dx = 10^3 t^2$$

and hence,

$$v(2 \text{ ms}) = 10^3(2 \times 10^{-3})^2 = 4 \text{ mV}$$

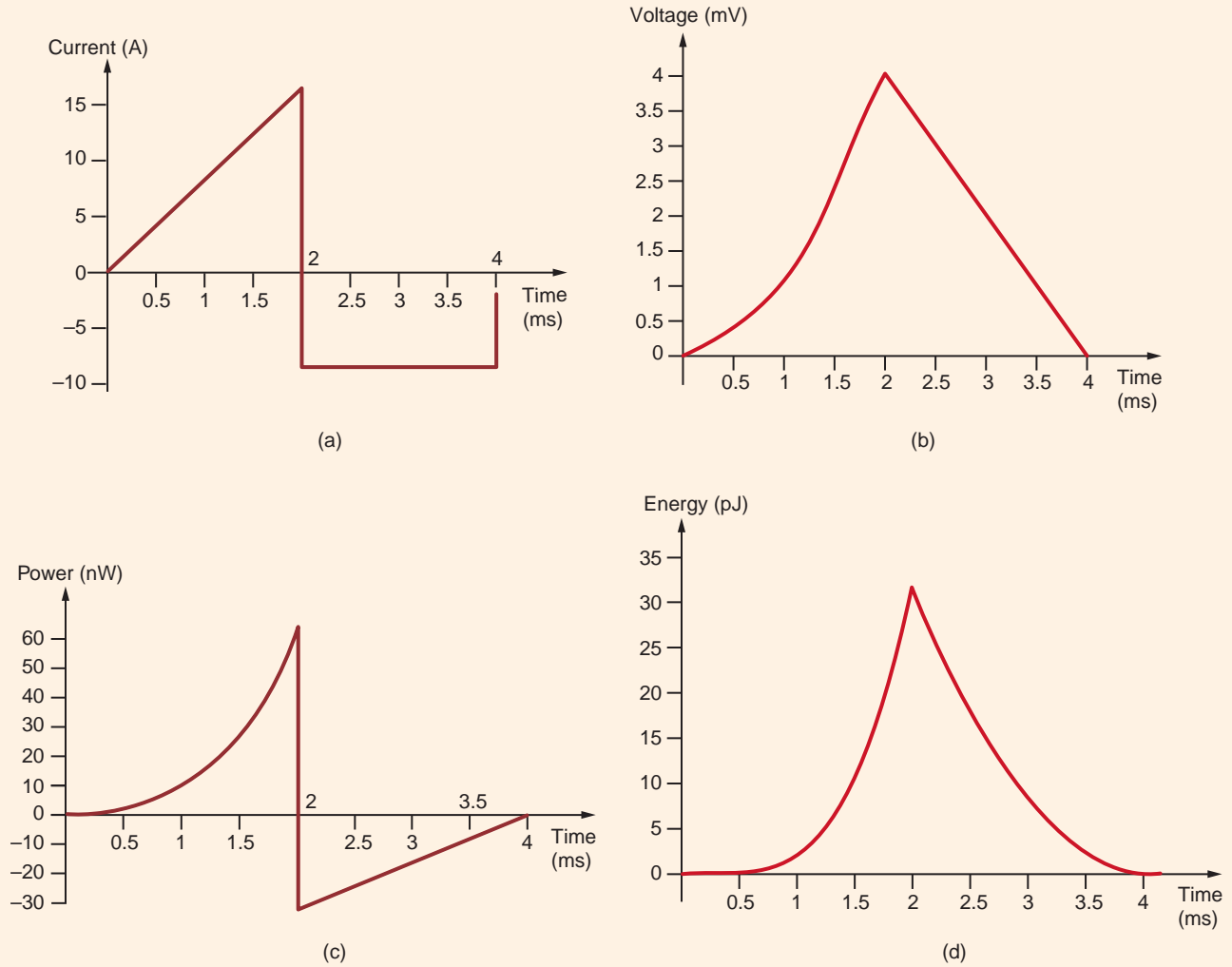


Figure 6.5

Waveforms used in Example 6.4.

In the time interval  $2 \text{ ms} \leq t \leq 4 \text{ ms}$ ,

$$\begin{aligned} v(t) &= \frac{1}{(4)(10^{-6})} \int_{2(10^{-3})}^t - (8)(10^{-6}) dx + (4)(10^{-3}) \\ &= -2t + 8 \times 10^{-3} \end{aligned}$$

The waveform for the voltage is shown in Fig. 6.5b.

Since the power is  $p(t) = v(t)i(t)$ , the expression for the power in the time interval  $0 \leq t \leq 2 \text{ ms}$  is  $p(t) = 8t^3$ . In the time interval  $2 \text{ ms} \leq t \leq 4 \text{ ms}$ , the equation for the power is

$$\begin{aligned} p(t) &= -(8)(10^{-6})(-2t + 8 \times 10^{-3}) \\ &= 16(10^{-6})t - 64(10^{-9}) \end{aligned}$$

The power waveform is shown in Fig. 6.5c. Note that during the time interval  $0 \leq t \leq 2 \text{ ms}$ , the capacitor is absorbing energy and during the interval  $2 \text{ ms} \leq t \leq 4 \text{ ms}$ , it is delivering energy.

The energy is given by the expression

$$w(t) = \int_{t_0}^t p(x) dx + w(t_0)$$

In the time interval  $0 \leq t \leq 2$  ms,

$$w(t) = \int_0^t 8x^3 dx = 2t^4$$

Hence,

$$w(2 \text{ ms}) = 32 \text{ pJ}$$

In the time interval  $2 \leq t \leq 4$  ms,

$$\begin{aligned} w(t) &= \int_{2 \times 10^{-3}}^t [(16 \times 10^{-6})x - (64 \times 10^{-9})] dx + 32 \times 10^{-12} \\ &= [(8 \times 10^{-6})x^2 - (64 \times 10^{-9})x]_{2 \times 10^{-3}}^t + 32 \times 10^{-12} \\ &= (8 \times 10^{-6})t^2 - (64 \times 10^{-9})t + 128 \times 10^{-12} \end{aligned}$$

From this expression we find that  $w(2 \text{ ms}) = 32 \text{ pJ}$  and  $w(4 \text{ ms}) = 0$ . The energy waveform is shown in Fig. 6.5d.

## Learning Assessments

**E6.2** The voltage across a  $2\text{-}\mu\text{F}$  capacitor is shown in Fig. E6.2. Determine the waveform for the capacitor current.

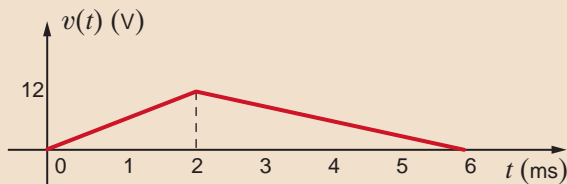
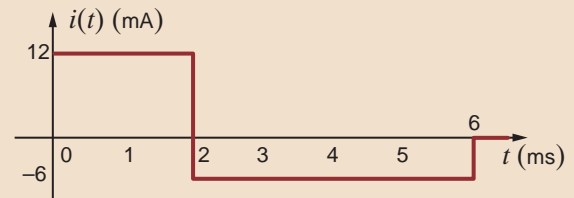


Figure E6.2

**ANSWER:**



**E6.3** Compute the energy stored in the electric field of the capacitor in Learning Assessment E6.2 at  $t = 2$  ms. **ANSWER:**  $w = 144 \text{ }\mu\text{J}$ .

**E6.4** The voltage across a  $5\text{-}\mu\text{F}$  capacitor is shown in Fig. E6.4. Find the waveform for the current in the capacitor. How much energy is stored in the capacitor at  $t = 4$  ms.

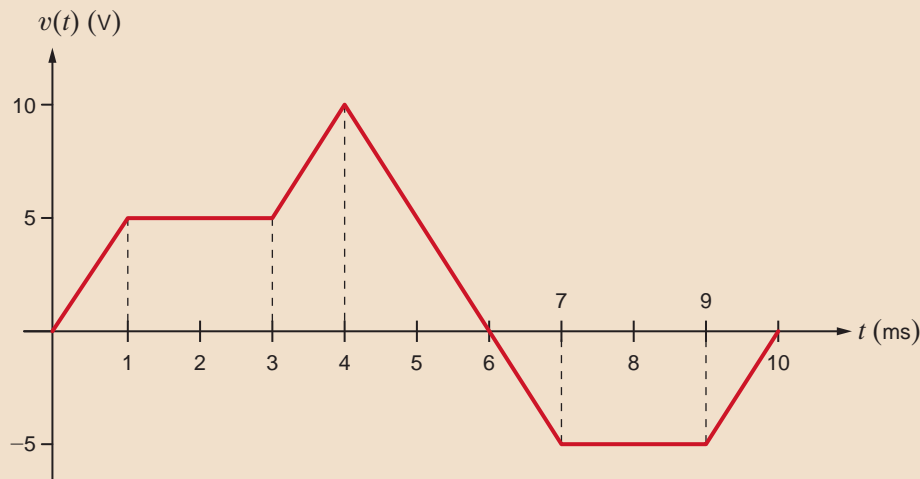
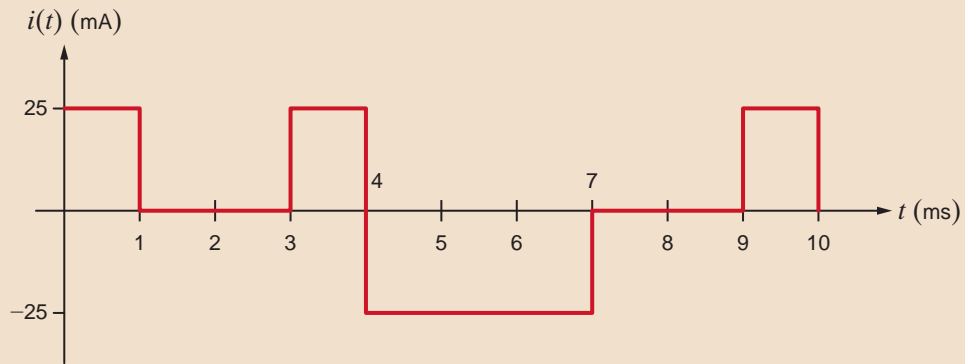


Figure E6.4

**ANSWER:** 250  $\mu\text{J}$ .

**E6.5** The waveform for the current in a 1-nF capacitor is Fig. E6.5. If the capacitor has an initial voltage of  $-5\text{V}$ , determine the waveform for the capacitor voltage. How much energy is stored in the capacitor at  $t = 6\text{ ms}$ ?

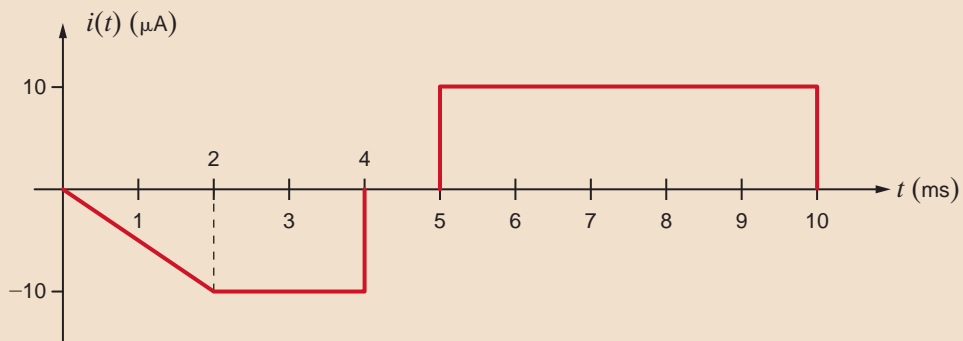
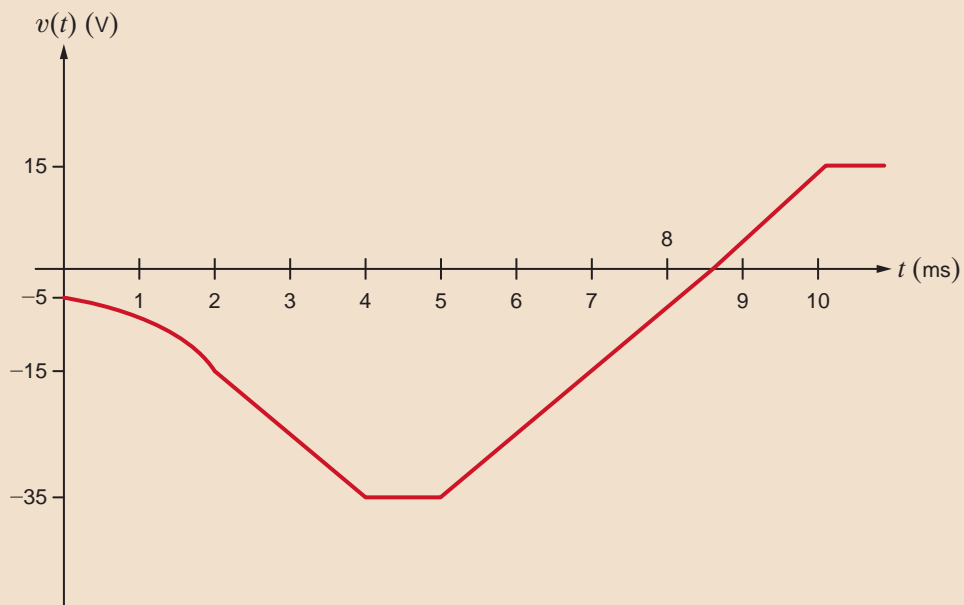


Figure E6.5

**ANSWER:** 312.5 nJ.

## 6.2 Inductors

An *inductor* is a circuit element that consists of a conducting wire usually in the form of a coil. Two typical inductors and their electrical symbol are shown in Fig. 6.6. Inductors are typically categorized by the type of core on which they are wound. For example, the core material may be air or any nonmagnetic material, iron, or ferrite. Inductors made with air or nonmagnetic materials are widely used in radio, television, and filter circuits. Iron-core inductors are used in electrical power supplies and filters. Ferrite-core inductors are widely used in high-frequency applications. Note that in contrast to the magnetic core that confines the flux, as shown in Fig. 6.6b, the flux lines for nonmagnetic inductors extend beyond the inductor itself, as illustrated in Fig. 6.6a. Like stray capacitance, stray inductance can result from any element carrying current surrounded by flux linkages. Fig. 6.7 shows a variety of typical inductors.

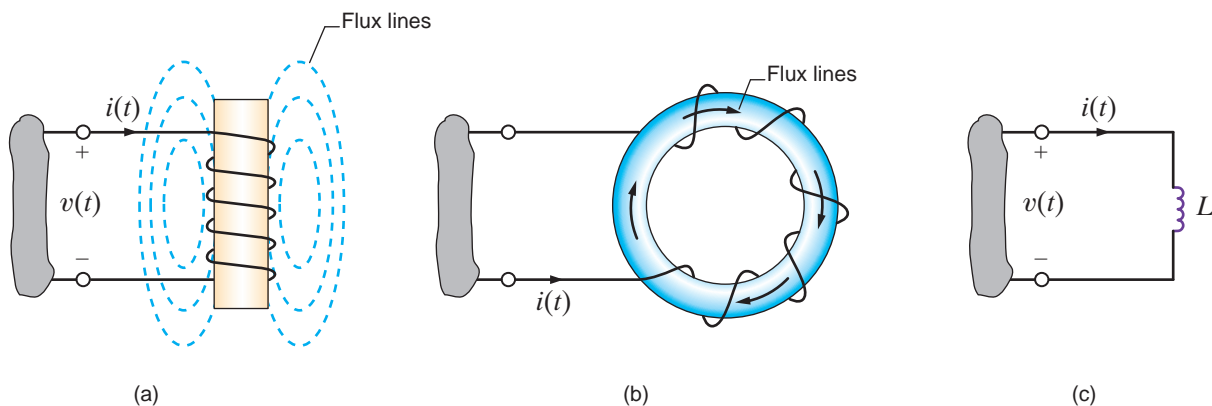
From a historical standpoint, developments that led to the mathematical model we employ to represent the inductor are as follows. It was first shown that a current-carrying conductor would produce a magnetic field. It was later found that the magnetic field and the current that produced it were linearly related. Finally, it was shown that a changing magnetic field produced a voltage that was proportional to the time rate of change of the current that produced the magnetic field; that is,

$$v(t) = L \frac{di(t)}{dt} \quad 6.8$$

The constant of proportionality  $L$  is called the inductance and is measured in the unit *henry*, named after the American inventor Joseph Henry, who discovered the relationship. As seen in Eq. (6.8), 1 henry (H) is dimensionally equal to 1 volt-second per ampere.

Following the development of the mathematical equations for the capacitor, we find that the expression for the current in an inductor is

$$i(t) = \frac{1}{L} \int_{-\infty}^t v(x) dx \quad 6.9$$



**Figure 6.6**

Two inductors and their electrical symbol

**Figure 6.7**

Some typical inductors. (Courtesy of Mark Nelms and Jo Ann Loden)



which can also be written as

$$i(t) = i(t_0) + \frac{1}{L} \int_{t_0}^t v(x) dx \quad 6.10$$

The power delivered to the inductor can be used to derive the energy stored in the element. This power is equal to

$$\begin{aligned} p(t) &= v(t)i(t) \\ &= \left[ L \frac{di(t)}{dt} \right] i(t) \end{aligned} \quad 6.11$$

Therefore, the energy stored in the magnetic field is

$$w_L(t) = \int_{-\infty}^t \left[ L \frac{di(x)}{dx} \right] i(x) dx$$

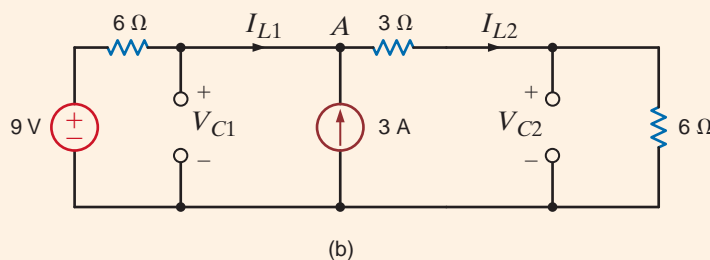
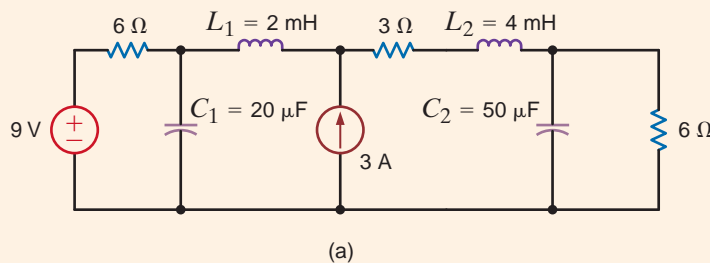
Following the development of Eq. (6.6), we obtain

$$w_L(t) = \frac{1}{2} Li^2(t) \text{ J} \quad 6.12$$

Now let's consider the case of a dc current flowing through an inductor. From Eq. (6.8), we see that the voltage across the inductor is directly proportional to the time rate of change of the current flowing through the inductor. A dc current does not vary with time, so the voltage across the inductor is zero. We can say that an inductor is “a short circuit to dc.” In analyzing a circuit containing dc sources and inductors, we can replace any inductors with short circuits and calculate voltages and currents in the circuit using our many analysis tools.

Note from Eq. (6.11) that an instantaneous change in inductor current would require infinite power. Since we don't have any infinite power sources, the current flowing through an inductor cannot change instantaneously. This will be a particularly helpful idea in the next chapter when we encounter circuits containing switches. This idea of “continuity of current” for an inductor tells us that the current flowing through an inductor just after a switch moves is the same as the current flowing through an inductor just before that switch moves.

Find the total energy stored in the circuit of Fig. 6.8a.



## EXAMPLE 6.5

**Figure 6.8**  
Circuits used in  
Example 6.5.

**SOLUTION** This circuit has only dc sources. Based on our earlier discussions about capacitors and inductors and constant sources, we can replace the capacitors with open circuits and the inductors with short circuits. The resulting circuit is shown in Fig. 6.8b.

This resistive circuit can now be solved using any of the techniques we have learned in earlier chapters. If we apply KCL at node A, we get

$$I_{L2} = I_{L1} + 3$$

Applying KVL around the outside of the circuit yields

$$6I_{L1} + 3I_{L2} + 6I_{L2} = 9$$

Solving these equations yields  $I_{L1} = -1.2$  A and  $I_{L2} = 1.8$  A. The voltages  $V_{C1}$  and  $V_{C2}$  can be calculated from the currents:

$$V_{C1} = -6I_{L1} + 9 = 16.2$$
 V

$$V_{C2} = 6I_{L2} = 6(1.8) = 10.8$$
 V

The total energy stored in the circuit is the sum of the energy stored in the two inductors and two capacitors:

$$w_{L1} = \frac{1}{2}(2 \times 10^{-3})(-1.2)^2 = 1.44$$
 mJ

$$w_{L2} = \frac{1}{2}(4 \times 10^{-3})(1.8)^2 = 6.48$$
 mJ

$$w_{C1} = \frac{1}{2}(20 \times 10^{-6})(16.2)^2 = 2.62$$
 mJ

$$w_{C2} = \frac{1}{2}(50 \times 10^{-6})(10.8)^2 = 2.92$$
 mJ

The total stored energy is 13.46 mJ.

The inductor, like the resistor and capacitor, is a passive element. The polarity of the voltage across the inductor is shown in Fig. 6.6.

Practical inductors typically range from a few microhenrys to tens of henrys. From a circuit design standpoint it is important to note that inductors cannot be easily fabricated on an integrated circuit chip, and therefore chip designs typically employ only active electronic devices, resistors, and capacitors that can be easily fabricated in microcircuit form.

### EXAMPLE 6.6

The current in a 10-mH inductor has the waveform shown in Fig. 6.9a. Determine the voltage waveform.

**SOLUTION** Using Eq. (6.8) and noting that

$$i(t) = \frac{20 \times 10^{-3}t}{2 \times 10^{-3}} \quad 0 \leq t \leq 2 \text{ ms}$$

$$i(t) = \frac{-20 \times 10^{-3}t}{2 \times 10^{-3}} + 40 \times 10^{-3} \quad 2 \leq t \leq 4 \text{ ms}$$

and

$$i(t) = 0 \quad 4 \text{ ms} < t$$

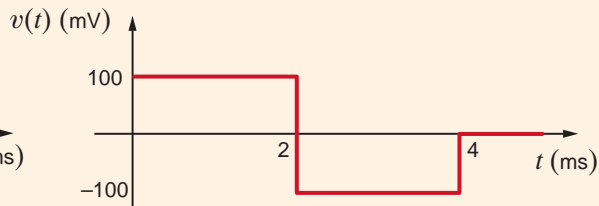
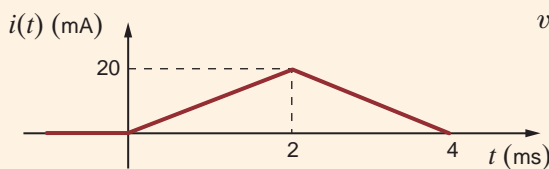


Figure 6.9

Current and voltage waveforms for a 10-mH inductor.

(a)

(b)



we find that

$$\begin{aligned} v(t) &= (10 \times 10^{-3}) \frac{20 \times 10^{-3}}{2 \times 10^{-3}} & 0 \leq t \leq 2 \text{ ms} \\ &= 100 \text{ mV} \end{aligned}$$

and

$$\begin{aligned} v(t) &= (10 \times 10^{-3}) \frac{-20 \times 10^{-3}}{2 \times 10^{-3}} & 2 \leq t \leq 4 \text{ ms} \\ &= -100 \text{ mV} \end{aligned}$$

and  $v(t) = 0$  for  $t > 4$  ms. Therefore, the voltage waveform is shown in Fig. 6.9b.

The current in a 2-mH inductor is

$$i(t) = 2 \sin 377t \text{ A}$$

Determine the voltage across the inductor and the energy stored in the inductor.

### EXAMPLE 6.7

**SOLUTION**

From Eq. (6.8), we have

$$\begin{aligned} v(t) &= L \frac{di(t)}{dt} \\ &= (2 \times 10^{-3}) \frac{d}{dt} (2 \sin 377t) \\ &= 1.508 \cos 377t \text{ V} \end{aligned}$$

and from Eq. (6.12),

$$\begin{aligned} w_L(t) &= \frac{1}{2} Li^2(t) \\ &= \frac{1}{2} (2 \times 10^{-3}) (2 \sin 377t)^2 \\ &= 0.004 \sin^2 377t \text{ J} \end{aligned}$$

The voltage across a 200-mH inductor is given by the expression

$$\begin{aligned} v(t) &= (1 - 3t)e^{-3t} \text{ mV} & t \geq 0 \\ &= 0 & t < 0 \end{aligned}$$

Let us derive the waveforms for the current, energy, and power.

### EXAMPLE 6.8

**SOLUTION**

The waveform for the voltage is shown in Fig. 6.10a. The current is derived from Eq. (6.10) as

$$\begin{aligned} i(t) &= \frac{10^3}{200} \int_0^t (1 - 3x)e^{-3x} dx \\ &= 5 \left\{ \int_0^t e^{-3x} dx - 3 \int_0^t x e^{-3x} dx \right\} \\ &= 5 \left\{ \frac{e^{-3x}}{-3} \Big|_0^t - 3 \left[ -\frac{e^{-3x}}{9} (3x + 1) \right]_0^t \right\} \\ &= 5te^{-3t} \text{ mA} & t \geq 0 \\ &= 0 & t < 0 \end{aligned}$$

A plot of the current waveform is shown in Fig. 6.10b.

The power is given by the expression

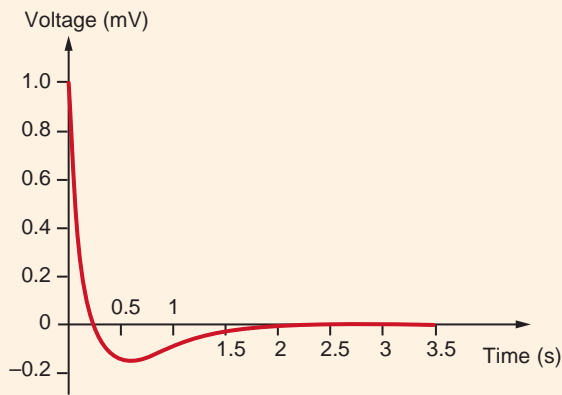
$$\begin{aligned}
 p(t) &= v(t)i(t) \\
 &= 5t(1 - 3t)e^{-6t} \mu\text{W} & t \geq 0 \\
 &= 0 & t < 0
 \end{aligned}$$

The equation for the power is plotted in Fig. 6.10c.

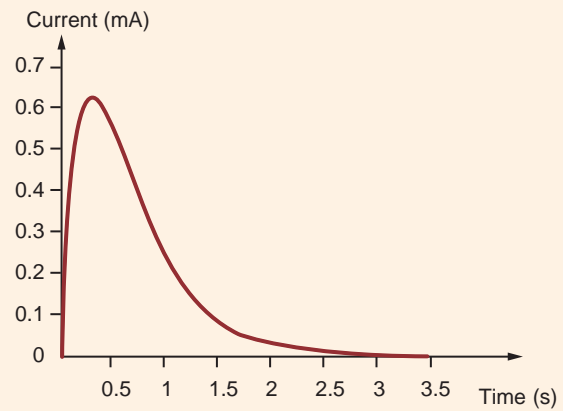
The expression for the energy is

$$\begin{aligned}
 w(t) &= \frac{1}{2} Li^2(t) \\
 &= 2.5t^2e^{-6t} \mu\text{J} & t \geq 0 \\
 &= 0 & t < 0
 \end{aligned}$$

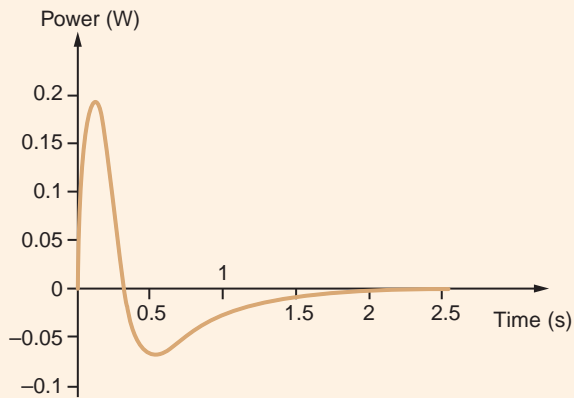
This equation is plotted in Fig. 6.10d.



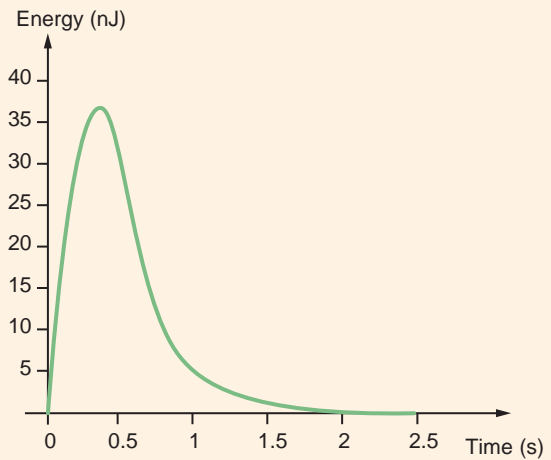
(a)



(b)



(c)



(d)

**Figure 6.10**

Waveforms used in Example 6.8.

## Learning Assessments

**E6.6** The current in a 5-mH inductor has the waveform shown in Fig. E6.6. Compute the waveform for the inductor voltage.

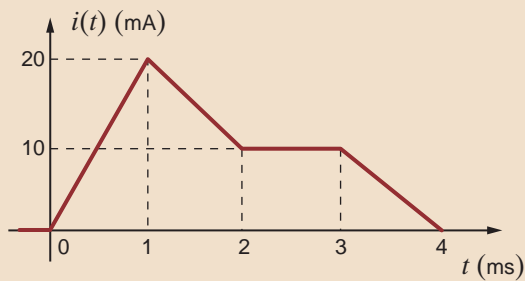
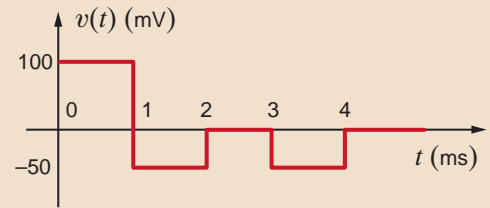


Figure E6.6

**ANSWER:**



**E6.7** Compute the energy stored in the magnetic field of the inductor in Learning Assessment E6.6 at  $t = 1.5$  ms. **ANSWER:**  $W = 562.5$  nJ.

**E6.8** The current in a 2-H inductor is shown in Fig. E6.8. Find the waveform for the inductor voltage. How much energy is stored in the inductor at  $t = 3$  ms?

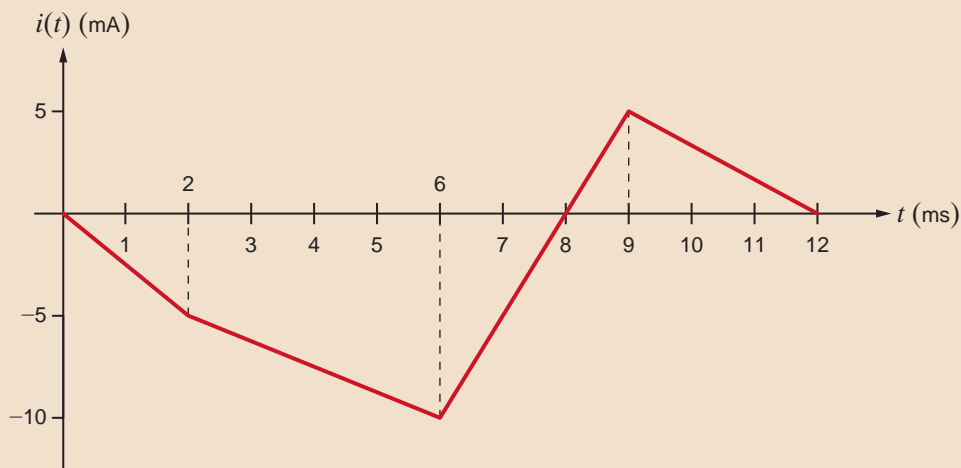
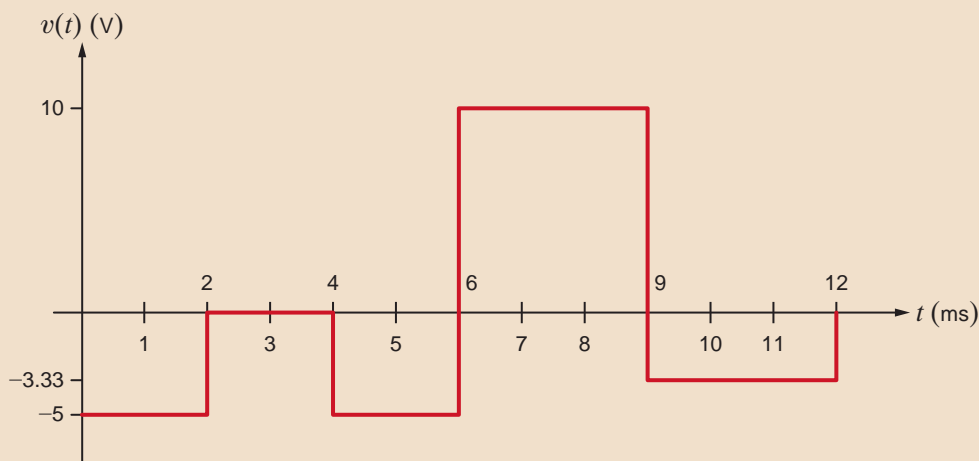


Figure E6.8

**ANSWER:** 25  $\mu$ J.



**E6.9** The voltage across a 0.1-H inductor is shown in Fig. E6.9. Compute the waveform for the current in the inductor if  $i(0) = 0.1\text{A}$ . How much energy is stored in the inductor at  $t = 7\text{ ms}$ ?

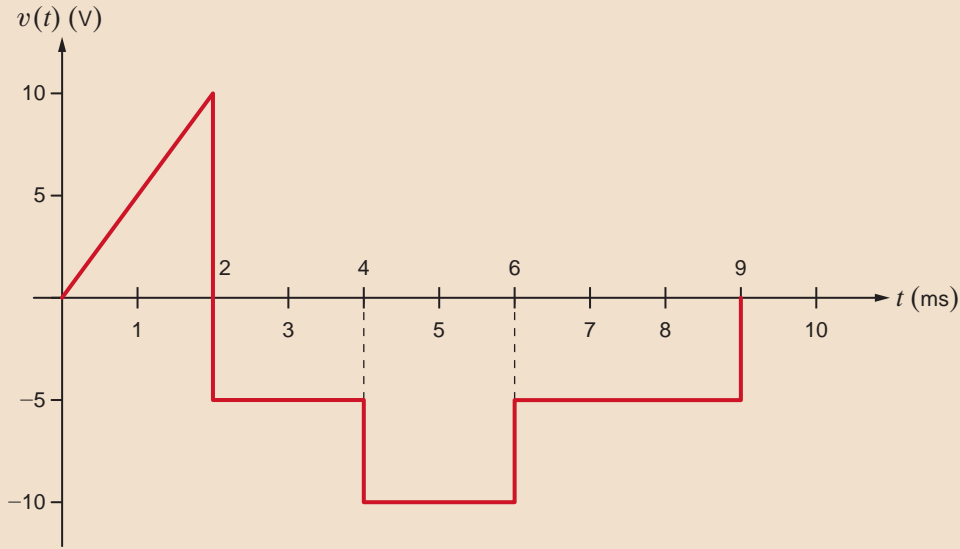
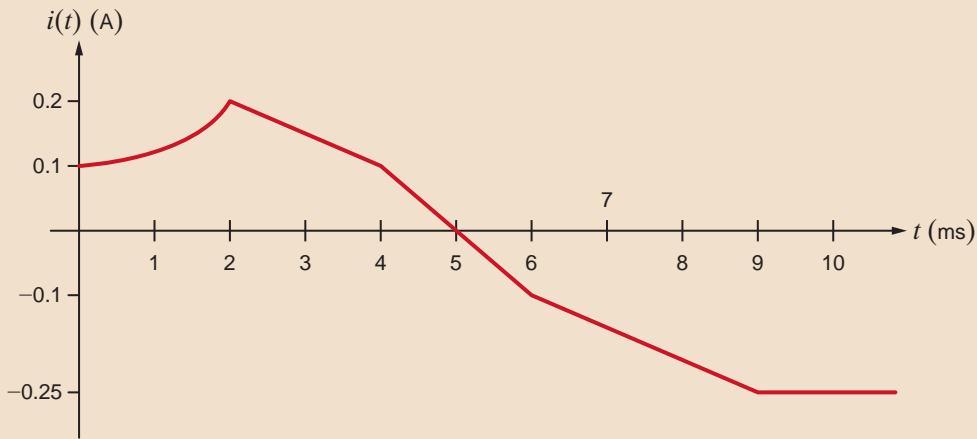


Figure E6.9

**ANSWER:** 1.125 mJ.



**E6.10** Find the energy stored in the capacitor and inductor in Fig. E6.10.

**ANSWER:** 0.72  $\mu\text{J}$ , 0.5  $\mu\text{J}$ .

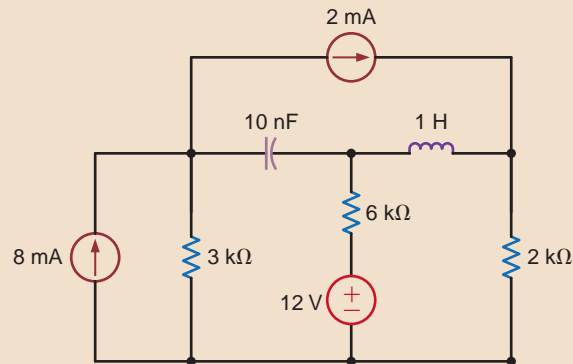


Figure E6.10

**CAPACITOR AND INDUCTOR SPECIFICATIONS** There are a couple of important parameters that are used to specify capacitors and inductors. In the case of capacitors, the capacitance value, working voltage, and tolerance are issues that must be considered in their application. Standard capacitor values range from a few pF to about 50 mF. Capacitors larger than 1 F are available but will not be discussed here. Table 6.1 is a list of standard capacitor values, which are typically given in picofarads or microfarads. Although both smaller and larger ratings are available, the standard working voltage, or dc voltage rating, is typically between 6.3 V and 500 V. Manufacturers specify this working voltage since it is critical to keep the applied voltage below the breakdown point of the dielectric. Tolerance is an adjunct to the capacitance value and is usually listed as a percentage of the nominal value. Standard tolerance values are  $\pm 5\%$ ,  $\pm 10\%$ , and  $\pm 20\%$ . Occasionally, tolerances for single-digit pF capacitors are listed in pF. For example,  $5 \text{ pF} \pm 0.25 \text{ pF}$ .

**TABLE 6.1** Standard capacitor values

pF	pF	pF	pF	$\mu\text{F}$	$\mu\text{F}$	$\mu\text{F}$	$\mu\text{F}$	$\mu\text{F}$	$\mu\text{F}$	$\mu\text{F}$
1	10	100	1000	0.010	0.10	1.0	10	100	1000	10,000
	12	120	1200	0.012	0.12	1.2	12	120	1200	12,000
1.5	15	150	1500	0.015	0.15	1.5	15	150	1500	15,000
	18	180	1800	0.018	0.18	1.8	18	180	1800	18,000
2	20	200	2000	0.020	0.20	2.0	20	200	2000	20,000
	22	220	2200	0.022	0.22	2.2	22	220	2200	22,000
	27	270	2700	0.027	0.27	2.7	27	270	2700	27,000
3	33	330	3300	0.033	0.33	3.3	33	330	3300	33,000
4	39	390	3900	0.039	0.39	3.9	39	390	3900	39,000
5	47	470	4700	0.047	0.47	4.7	47	470	4700	47,000
6	51	510	5100	0.051	0.51	5.1	51	510	5100	51,000
7	56	560	5600	0.056	0.56	5.6	56	560	5600	56,000
8	68	680	6800	0.068	0.68	6.8	68	680	6800	68,000
9	82	820	8200	0.082	0.82	8.2	82	820	8200	82,000

The two principal inductor specifications are inductance and resistance. Standard commercial inductances range from about 1 nH to around 100 mH. Larger inductances can, of course, be custom built for a price. Table 6.2 lists the standard inductor values. The current rating for inductors typically extends from a few dozen mA's to about 1 A. Tolerances are typically 5% or 10% of the specified value.

**TABLE 6.2** Standard inductor values

nH	nH	nH	$\mu\text{H}$	$\mu\text{H}$	$\mu\text{H}$	mH	mH	mH
1	10	100	1.0	10	100	1.0	10	100
1.2	12	120	1.2	12	120	1.2	12	
1.5	15	150	1.5	15	150	1.5	15	
1.8	18	180	1.8	18	180	1.8	18	
2	20	200	2.0	20	200	2.0	20	
2.2	22	220	2.2	22	220	2.2	22	
2.7	27	270	2.7	27	270	2.7	27	
3	33	330	3.3	33	330	3.3	33	
4	39	390	3.9	39	390	3.9	39	
5	47	470	4.7	47	470	4.7	47	
6	51	510	5.1	51	510	5.1	51	
7	56	560	5.6	56	560	5.6	56	
8	68	680	6.8	68	680	6.8	68	
9	82	820	8.2	82	820	8.2	82	

As indicated in Chapter 2, wire-wound resistors are simply coils of wire, and therefore it is only logical that inductors will have some resistance. The major difference between wire-wound resistors and inductors is the wire material. High-resistance materials such as Nichrome are used in resistors, and low-resistance copper is used in inductors. The resistance of the copper wire is dependent on the length and diameter of the wire. Table 6.3 lists the American Wire Gauge (AWG) standard wire diameters and the resulting resistance per foot for copper wire.

**TABLE 6.3** Resistance per foot of solid copper wire

AWG No.	Diameter (in.)	m $\Omega$ /ft
12	0.0808	1.59
14	0.0641	2.54
16	0.0508	4.06
18	0.0400	6.50
20	0.0320	10.4
22	0.0253	16.5
24	0.0201	26.2
26	0.0159	41.6
28	0.0126	66.2
30	0.0100	105
32	0.0080	167
34	0.0063	267
36	0.0049	428
38	0.0039	684
40	0.0031	1094

### EXAMPLE

## 6.9

We wish to find the possible range of capacitance values for a 51-mF capacitor that has a tolerance of 20%.

**SOLUTION** The minimum capacitor value is  $0.8C = 40.8$  mF, and the maximum capacitor value is  $1.2C = 61.2$  mF.

### EXAMPLE

## 6.10

The capacitor in Fig. 6.11a is a 100-nF capacitor with a tolerance of 20%. If the voltage waveform is as shown in Fig. 6.11b, let us graph the current waveform for the minimum and maximum capacitor values.

**SOLUTION** The maximum capacitor value is  $1.2C = 120$  nF, and the minimum capacitor value is  $0.8C = 80$  nF. The maximum and minimum capacitor currents, obtained from the equation

$$i(t) = C \frac{dv(t)}{dt}$$

are shown in Fig. 6.11c.

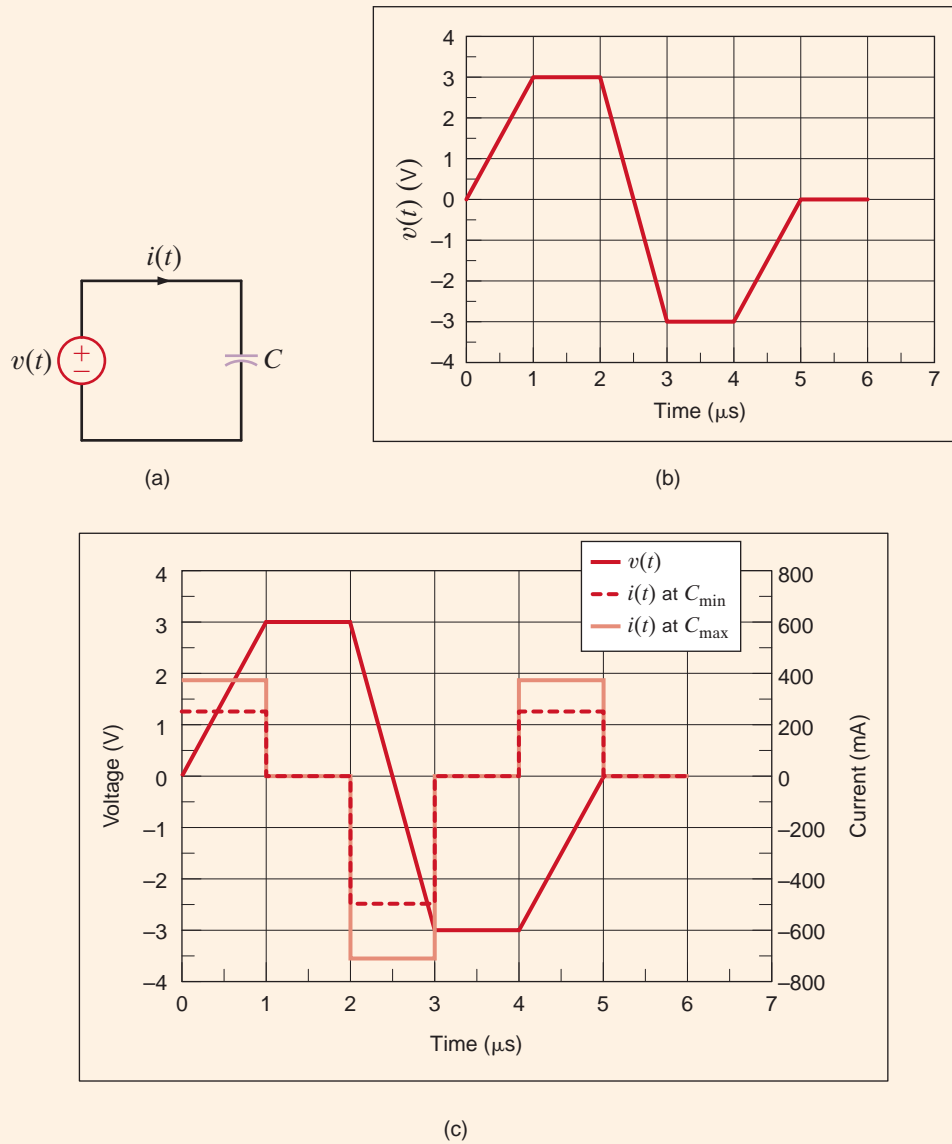


Figure 6.11

Circuit and graphs used  
in Example 6.10.

The inductor in Fig. 6.12a is a  $100\text{-}\mu\text{H}$  inductor with a tolerance of 10%. If the current waveform is as shown in Fig. 6.12b, let us graph the voltage waveform for the minimum and maximum inductor values.

The maximum inductor value is  $1.1L = 110 \mu\text{H}$ , and the minimum inductor value is  $0.9L = 90 \mu\text{H}$ . The maximum and minimum inductor voltages, obtained from the equation

$$v(t) = L \frac{di(t)}{dt}$$

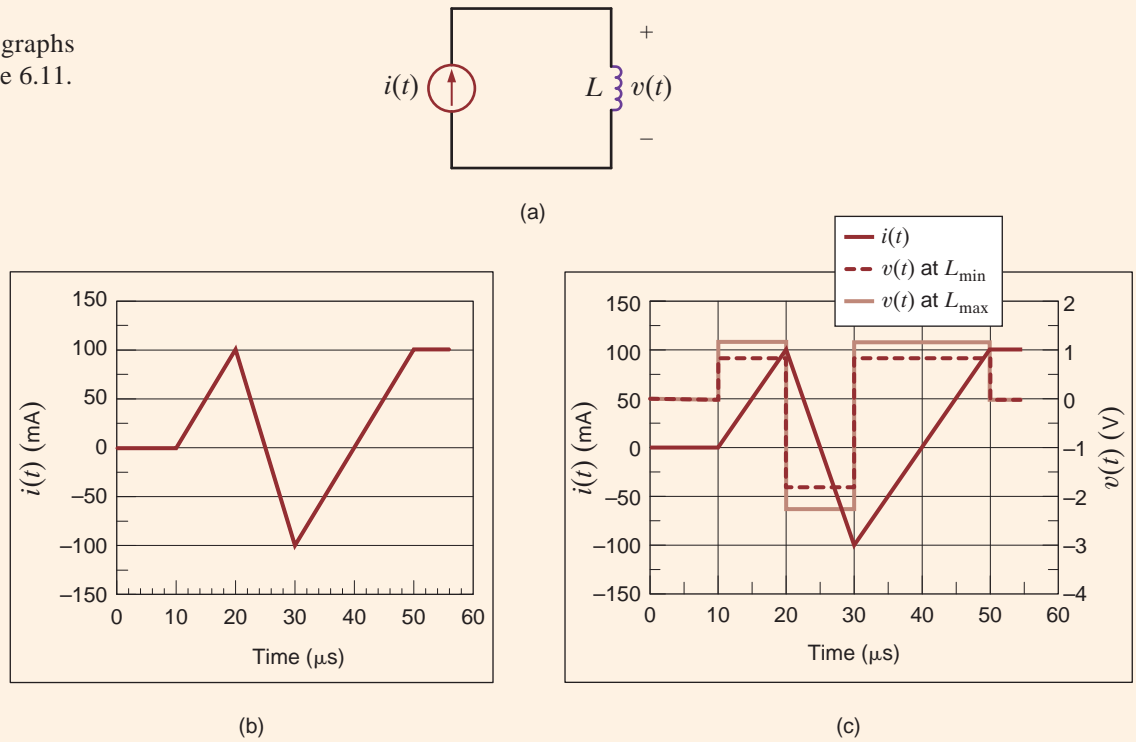
are shown in Fig. 6.12c.

## EXAMPLE 6.11

### SOLUTION

**Figure 6.12**

Circuit and graphs used in Example 6.11.



### 6.3

## Capacitor and Inductor Combinations

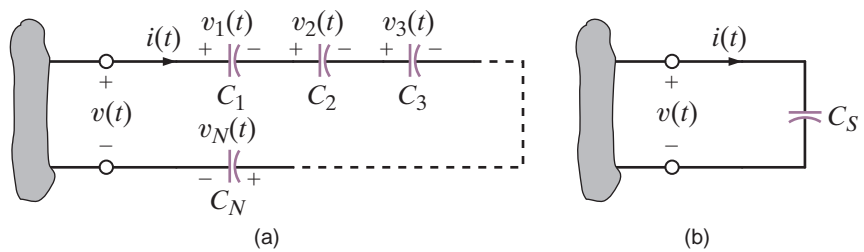
**SERIES CAPACITORS** If a number of capacitors are connected in series, their equivalent capacitance can be calculated using KVL. Consider the circuit shown in Fig. 6.13a. For this circuit

$$v(t) = v_1(t) + v_2(t) + v_3(t) + \dots + v_N(t) \quad 6.13$$

but

$$v_i(t) = \frac{1}{C_i} \int_{t_0}^t i(t) dt + v_i(t_0) \quad 6.14$$

**Figure 6.13**  
Equivalent circuit for  $N$  series-connected capacitors.





Therefore, Eq. (6.13) can be written as follows using Eq. (6.14):

$$v(t) = \left( \sum_{i=1}^N \frac{1}{C_i} \right) \int_{t_0}^t i(t) dt + \sum_{i=1}^N v_i(t_0) \quad 6.15$$

$$= \frac{1}{C_S} \int_{t_0}^t i(t) dt + v(t_0) \quad 6.16$$

where

$$v(t_0) = \sum_{i=1}^N v_i(t_0)$$

and

$$\frac{1}{C_S} = \sum_{i=1}^N \frac{1}{C_i} = \frac{1}{C_1} + \frac{1}{C_2} + \cdots + \frac{1}{C_N} \quad 6.17$$

[hint]

Capacitors in series combine like resistors in parallel.

Thus, the circuit in Fig. 6.13b is equivalent to that in Fig. 6.13a under the conditions stated previously.

It is also important to note that since the same current flows in each of the series capacitors, each capacitor gains the same charge in the same time period. The voltage across each capacitor will depend on this charge and the capacitance of the element.

Determine the equivalent capacitance and the initial voltage for the circuit shown in Fig. 6.14.

Note that these capacitors must have been charged before they were connected in series or else the charge of each would be equal and the voltages would be in the same direction.

The equivalent capacitance is

$$\frac{1}{C_S} = \frac{1}{2} + \frac{1}{3} + \frac{1}{6}$$

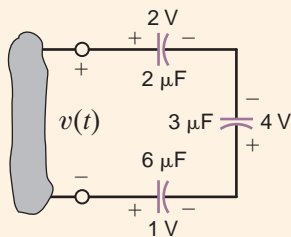
where all capacitance values are in microfarads.

Therefore,  $C_S = 1 \mu\text{F}$  and, as seen from the figure,  $v(t_0) = -3 \text{ V}$ . Note that the total energy stored in the circuit is

$$\begin{aligned} w(t_0) &= \frac{1}{2} [2 \times 10^{-6} (2)^2 + 3 \times 10^{-6} (-4)^2 + 6 \times 10^{-6} (-1)^2] \\ &= 31 \mu\text{J} \end{aligned}$$

However, the energy recoverable at the terminals is

$$\begin{aligned} w_C(t_0) &= \frac{1}{2} C_S v^2(t) \\ &= \frac{1}{2} [1 \times 10^{-6} (-3)^2] \\ &= 4.5 \mu\text{J} \end{aligned}$$



**Figure 6.14**

Circuit containing multiple capacitors with initial voltages.

**EXAMPLE  
SOLUTION 6.12**

**EXAMPLE**  
**6.13**

Two previously uncharged capacitors are connected in series and then charged with a 12-V source. One capacitor is 30  $\mu\text{F}$  and the other is unknown. If the voltage across the 30- $\mu\text{F}$  capacitor is 8 V, find the capacitance of the unknown capacitor.

**SOLUTION** The charge on the 30- $\mu\text{F}$  capacitor is

$$Q = CV = (30 \mu\text{F})(8 \text{ V}) = 240 \mu\text{C}$$

Since the same current flows in each of the series capacitors, each capacitor gains the same charge in the same time period:

$$C = \frac{Q}{V} = \frac{240 \mu\text{C}}{4\text{V}} = 60 \mu\text{F}$$

**PARALLEL CAPACITORS** To determine the equivalent capacitance of  $N$  capacitors connected in parallel, we employ KCL. As can be seen from Fig. 6.15a,

$$i(t) = i_1(t) + i_2(t) + i_3(t) + \dots + i_N(t) \tag{6.18}$$

$$= C_1 \frac{dv(t)}{dt} + C_2 \frac{dv(t)}{dt} + C_3 \frac{dv(t)}{dt} + \dots + C_N \frac{dv(t)}{dt}$$

$$= \left( \sum_{i=1}^N C_i \right) \frac{dv(t)}{dt}$$

$$= C_p \frac{dv(t)}{dt} \tag{6.19}$$

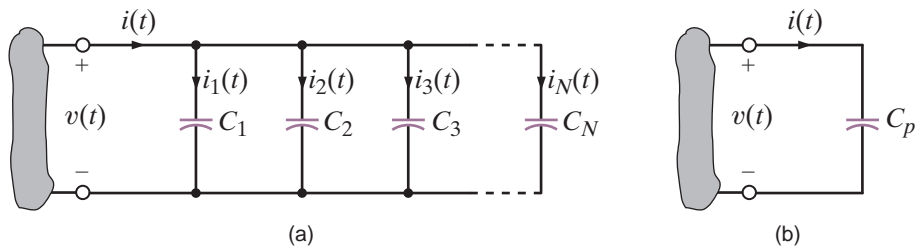
where

$$C_p = C_1 + C_2 + C_3 + \dots + C_N \tag{6.20}$$

[hint]

Capacitors in parallel combine like resistors in series.

**Figure 6.15**  
Equivalent circuit for  $N$  capacitors connected in parallel.



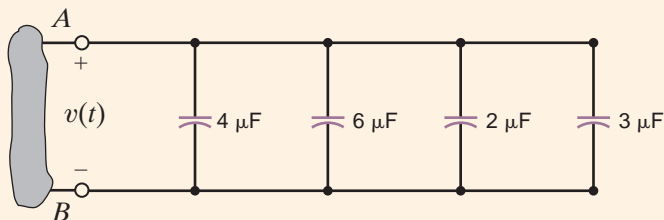
**EXAMPLE**

**6.14 SOLUTION**

Determine the equivalent capacitance at terminals A-B of the circuit shown in Fig. 6.16.

$$C_p = 15 \mu\text{F}$$

**Figure 6.16**  
Circuit containing multiple capacitors in parallel.



## Learning Assessments

**E6.11** Two initially uncharged capacitors are connected as shown in Fig. E6.11. After a period of time, the voltage reaches the value shown. Determine the value of  $C_1$ . **ANSWER:**  $C_1 = 4 \mu\text{F}$ .

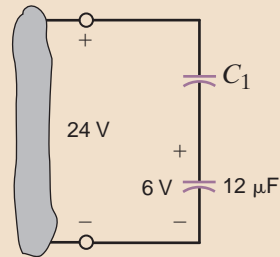


Figure E6.11

**E6.12** Compute the equivalent capacitance of the network in Fig. E6.12.

**ANSWER:**  $C_{\text{eq}} = 1.5 \mu\text{F}$ .

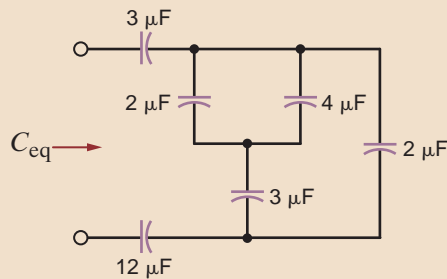


Figure E6.12

**E6.13** Determine  $C_T$  in Fig. E6.13.

**ANSWER:**  $1.667 \mu\text{F}$ .

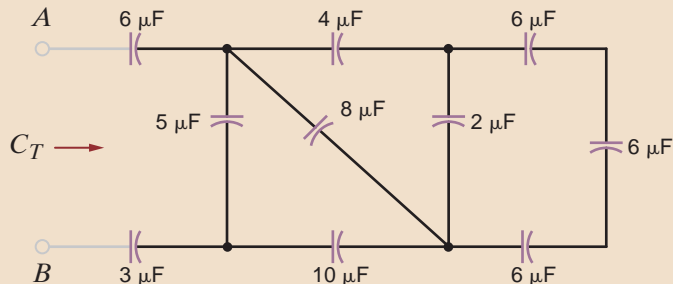


Figure E6.13

**SERIES INDUCTORS** If  $N$  inductors are connected in series, the equivalent inductance of the combination can be determined as follows. Referring to Fig. 6.17a and using KVL, we see that

$$v(t) = v_1(t) + v_2(t) + v_3(t) + \cdots + v_N(t) \quad 6.21$$

and therefore,

$$v(t) = L_1 \frac{di(t)}{dt} + L_2 \frac{di(t)}{dt} + L_3 \frac{di(t)}{dt} + \cdots + L_N \frac{di(t)}{dt} \quad 6.22$$

$$= \left( \sum_{i=1}^N L_i \right) \frac{di(t)}{dt}$$

$$= L_S \frac{di(t)}{dt} \quad 6.23$$

**[hint]**

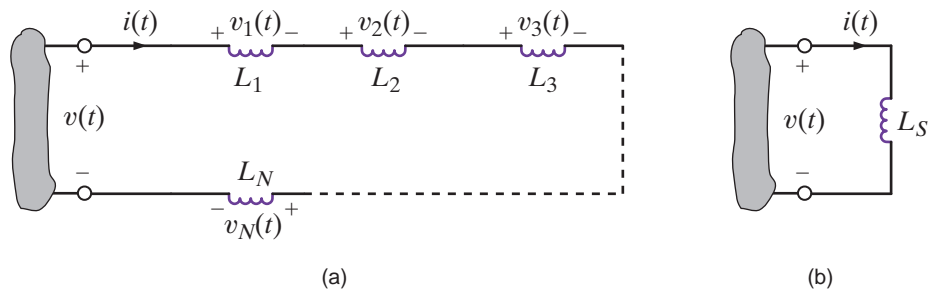
Inductors in series combine like resistors in series.

where

$$L_S = \sum_{i=1}^N L_i = L_1 + L_2 + \cdots + L_N \quad 6.24$$

Therefore, under this condition the network in Fig. 6.17b is equivalent to that in Fig. 6.17a.

**Figure 6.17**  
Equivalent circuit for  $N$  series-connected inductors.

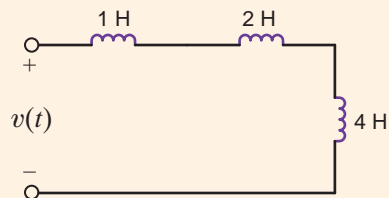

**EXAMPLE**
**6.15 SOLUTION**

Find the equivalent inductance of the circuit shown in Fig. 6.18.

The equivalent inductance of the circuit shown in Fig. 6.18 is

$$\begin{aligned} L_S &= 1\text{H} + 2\text{H} + 4\text{H} \\ &= 7\text{H} \end{aligned}$$

**Figure 6.18**  
Circuit containing multiple inductors.



**PARALLEL INDUCTORS** Consider the circuit shown in Fig. 6.19a, which contains  $N$  parallel inductors. Using KCL, we can write

$$i(t) = i_1(t) + i_2(t) + i_3(t) + \cdots + i_N(t) \quad 6.25$$

However,

$$i_j(t) = \frac{1}{L_j} \int_{t_0}^t v(x) dx + i_j(t_0) \quad 6.26$$

Substituting this expression into Eq. (6.25) yields

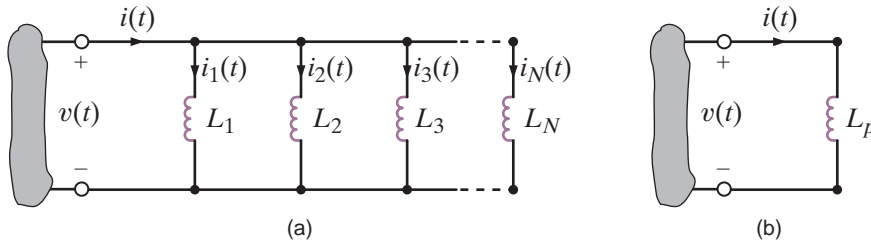
$$i(t) = \left( \sum_{j=1}^N \frac{1}{L_j} \right) \int_{t_0}^t v(x) dx + \sum_{j=1}^N i_j(t_0) \quad 6.27$$

$$= \frac{1}{L_p} \int_{t_0}^t v(x) dx + i(t_0) \quad 6.28$$

where

$$\frac{1}{L_p} = \frac{1}{L_1} + \frac{1}{L_2} + \frac{1}{L_3} + \cdots + \frac{1}{L_N} \quad 6.29$$

and  $i(t_0)$  is equal to the current in  $L_p$  at  $t = t_0$ . Thus, the circuit in Fig. 6.19b is equivalent to that in Fig. 6.19a under the conditions stated previously.



[hint]

Inductors in parallel combine like resistors in parallel.

Figure 6.19

Equivalent circuits for  $N$  inductors connected in parallel.

Determine the equivalent inductance and the initial current for the circuit shown in Fig. 6.20.

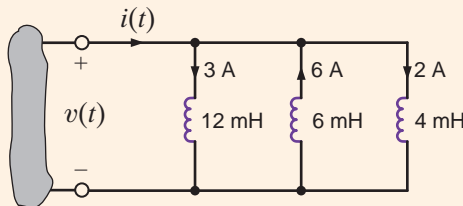
The equivalent inductance is

$$\frac{1}{L_p} = \frac{1}{12} + \frac{1}{6} + \frac{1}{4}$$

where all inductance values are in millihenrys:

$$L_p = 2 \text{ mH}$$

and the initial current is  $i(t_0) = -1 \text{ A}$ .



EXAMPLE

6.16

SOLUTION

Figure 6.20

Circuit containing multiple inductors with initial currents.

The previous material indicates that capacitors combine like conductances, whereas inductances combine like resistances.

## Learning Assessment

**E6.14** Determine the equivalent inductance of the network in Fig. E6.14 if all inductors are 6 mH. **ANSWER:** 9.429 mH.

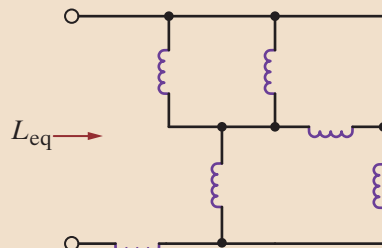
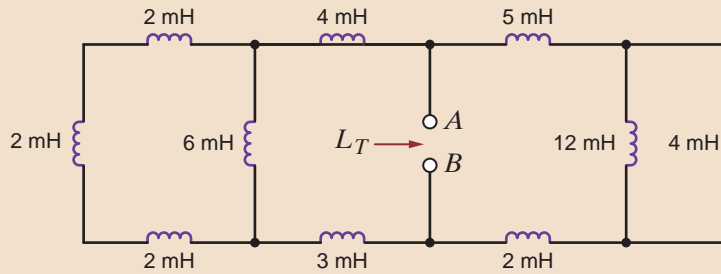


Figure E6.14

**E6.15** Find  $L_T$  in Fig. E6.15.

**ANSWER:** 5 mH.

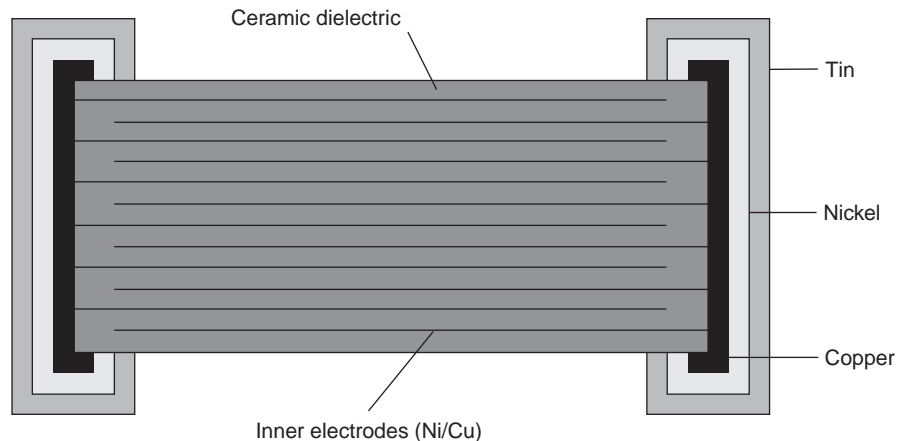


**Figure E6.15**

**CHIP CAPACITORS** In Chapter 2, we briefly discussed the resistors that are used in modern electronic manufacturing. An example of these surface mount devices was shown in Fig. 2.41, together with some typical chip capacitors. As we will indicate in the material that follows, modern electronics employs primarily resistors and capacitors and avoids the use of inductors when possible.

Surface-mounted chip capacitors account for the majority of capacitors used in electronics assembly today. These capacitors have a large range of sizes, from as small as 10 mils on a side up to 250 mils on a side. All ceramic chip capacitors consist of a ceramic dielectric layer between metal plates. The properties of the ceramic and metal layers determine the type of capacitor, its capacitance, and reliability. A cut-away view of a standard chip capacitor is shown in Fig. 6.21. The inner metal electrodes are alternately connected to the opposing sides of the chip where metal terminators are added. These terminators not only make connection to the inner electrodes, but also provide a solder base for attaching these chips to printed

**Figure 6.21**  
Cross section of a multilayer ceramic chip capacitor.



circuit boards. The number of alternating layers, the spacing between them, along with the dielectric constant of the ceramic material, will determine the capacitance value.

We indicated earlier that resistors are normally manufactured in standard sizes with specific power ratings. Chip capacitors are also manufactured in this manner, and Table 6.4 provides a partial listing of these devices.

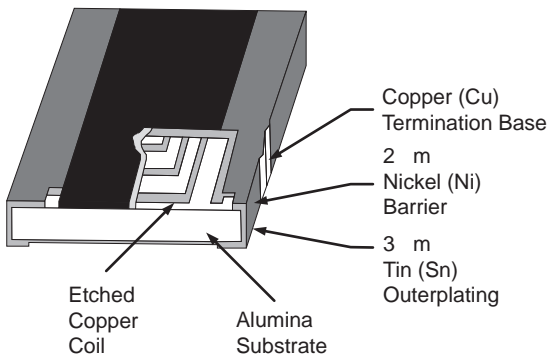
The standard sizes of chip capacitors are shown in Table 6.4.

**TABLE 6.4** Ceramic chip capacitor standard sizes

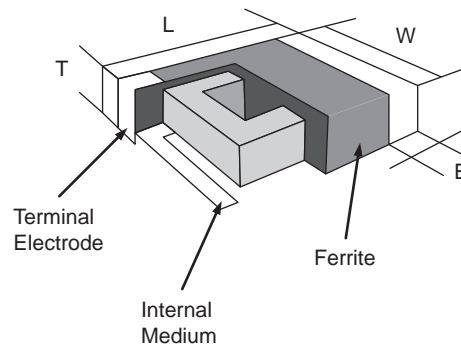
Size Code	Size (Mils)	Power Rating (Watts)
0201	20 × 10	1/20
0402	40 × 20	1/16
0603	60 × 30	1/10
0805	80 × 50	1/8
1206	120 × 60	1/4
2010	200 × 100	1/2
2512	250 × 120	1

**CHIP INDUCTORS** A chip inductor consists of a miniature ceramic substrate with either a wire wrapped around it or a thin film deposited and patterned to form a coil. They can be encapsulated or molded with a material to protect the wire from the elements or left unprotected. Chip inductors are supplied in a variety of types and values, with three typical configurations that conform to the standard “chip” package widely utilized in the printed circuit board (PCB) industry.

The first type is the precision chip inductor where copper is deposited onto the ceramic and patterned to form a coil, as shown in Fig. 6.22.

**Figure 6.22**

Precision chip inductor cross section.

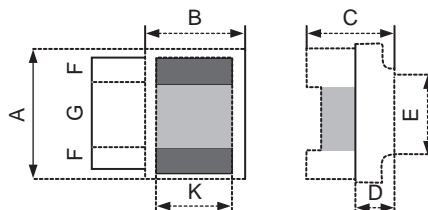
**Figure 6.23**

Ferrite chip inductor cross section

The second type is a ferrite chip inductor, which uses a series of coil patterns stacked between ferrite layers to form a multilayer coil as shown in Fig. 6.23.

The third type is a wire-wound open frame in which a wire is wound around a ceramic substrate to form the inductor coil. The completed structure is shown in Fig. 6.24.

Each of these configurations displays different characteristics, with the wire-wound type providing the highest inductance values (10 nH–4.7 uH)—and reasonable tolerances (1–2%). The ferrite chip inductor gives a wide range of values (47 nH–33 uH) but has tolerances in the 5% range. The precision chip inductor has low inductance values (1–100 nH) but very good tolerances (+/–0.1 nH).

**Figure 6.24**

Wire-wound chip inductor cross section

# 6.4

## RC Operational Amplifier Circuits

### [hint]

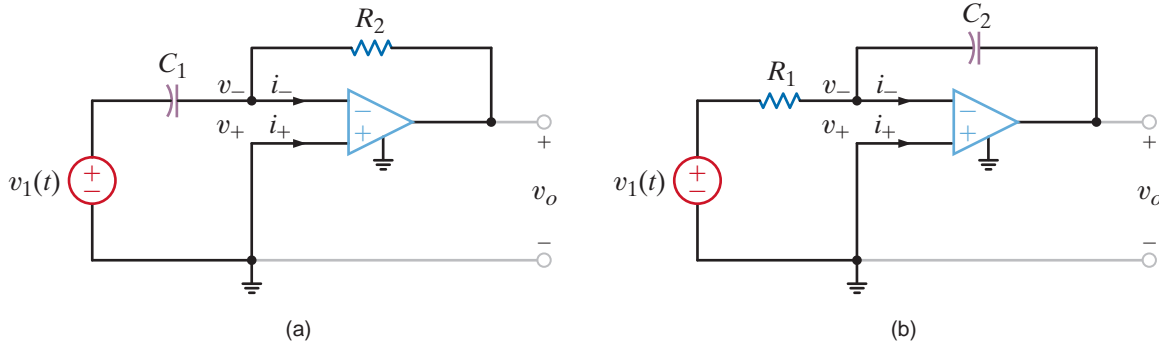
The properties of the ideal op-amp are  $v_+ = v_-$  and  $i_+ = i_- = 0$ .

Two very important RC op-amp circuits are the differentiator and the integrator. These circuits are derived from the circuit for an inverting op-amp by replacing the resistors  $R_1$  and  $R_2$ , respectively, by a capacitor. Consider, for example, the circuit shown in Fig. 6.25a. The circuit equations are

$$C_1 \frac{d}{dt}(v_1 - v_-) + \frac{v_o - v_-}{R_2} = i_-$$

However,  $v_- = 0$  and  $i_- = 0$ . Therefore,

$$v_o(t) = -R_2 C_1 \frac{dv_1(t)}{dt} \tag{6.30}$$



**Figure 6.25** Differentiator and integrator operational amplifier circuits.

Thus, the output of the op-amp circuit is proportional to the derivative of the input. The circuit equations for the op-amp configuration in Fig. 6.25b are

$$\frac{v_1 - v_-}{R_1} + C_2 \frac{d}{dt}(v_o - v_-) = i_-$$

but since  $v_- = 0$  and  $i_- = 0$ , the equation reduces to

$$\frac{v_1}{R_1} = -C_2 \frac{dv_o}{dt}$$

or

$$\begin{aligned} v_o(t) &= \frac{-1}{R_1 C_2} \int_{-\infty}^t v_1(x) dx \\ &= \frac{-1}{R_1 C_2} \int_0^t v_1(x) dx + v_o(0) \end{aligned} \tag{6.31}$$

If the capacitor is initially discharged, then  $v_o(0) = 0$ ; hence,

$$v_o(t) = \frac{-1}{R_1 C_2} \int_0^t v_1(x) dx \tag{6.32}$$

Thus, the output voltage of the op-amp circuit is proportional to the integral of the input voltage.



The waveform in Fig. 6.26a is applied at the input of the differentiator circuit shown in Fig. 6.25a. If  $R_2 = 1 \text{ k}\Omega$  and  $C_1 = 2 \text{ }\mu\text{F}$ , determine the waveform at the output of the op-amp.

## EXAMPLE 6.17

Using Eq. (6.30), we find that the op-amp output is

$$\begin{aligned} v_o(t) &= -R_2 C_1 \frac{dv_1(t)}{dt} \\ &= -(2)10^{-3} \frac{dv_1(t)}{dt} \end{aligned}$$

$dv_1(t)/dt = (2)10^3$  for  $0 \leq t < 5 \text{ ms}$ , and therefore,

$$v_o(t) = -4 \text{ V} \quad 0 \leq t < 5 \text{ ms}$$

$dv_1(t)/dt = -(2)10^3$  for  $5 \leq t < 10 \text{ ms}$ , and therefore,

$$v_o(t) = 4 \text{ V} \quad 5 \leq t < 10 \text{ ms}$$

Hence, the output waveform of the differentiator is shown in Fig. 6.26b.

### SOLUTION

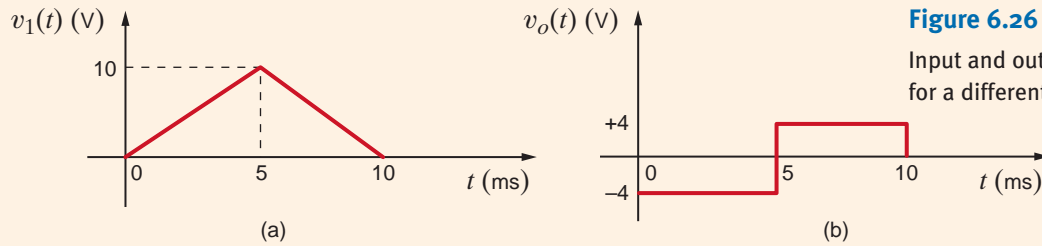


Figure 6.26

Input and output waveforms for a differentiator circuit.

If the integrator shown in Fig. 6.25b has the parameters  $R_1 = 5 \text{ k}\Omega$  and  $C_2 = 0.2 \text{ }\mu\text{F}$ , determine the waveform at the op-amp output if the input waveform is given as in Fig. 6.27a and the capacitor is initially discharged.

## EXAMPLE 6.18

The integrator output is given by the expression

$$v_o(t) = \frac{-1}{R_1 C_2} \int_0^t v_1(x) dx$$

which with the given circuit parameters is

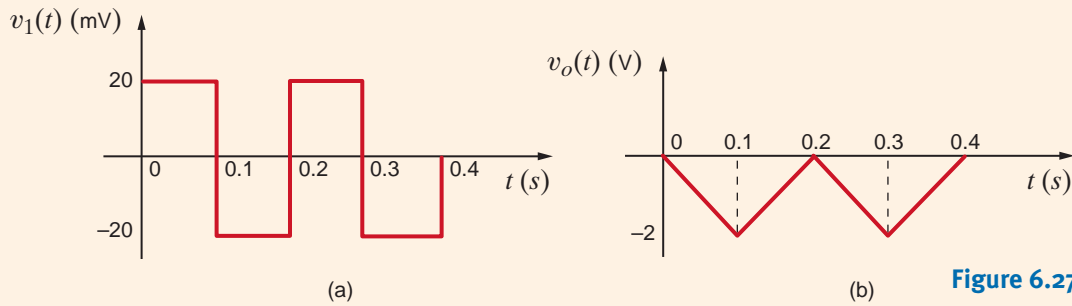
$$v_o(t) = -10^3 \int_0^t v_1(x) dx$$

In the interval  $0 \leq t < 0.1 \text{ s}$ ,  $v_1(t) = 20 \text{ mV}$ . Hence,

$$\begin{aligned} v_o(t) &= -10^3(20)10^{-3}t \quad 0 \leq t < 0.1 \text{ s} \\ &= -20t \end{aligned}$$

### SOLUTION

At  $t = 0.1 \text{ s}$ ,  $v_o(t) = -2 \text{ V}$ . In the interval from 0.1 to 0.2 s, the integrator produces a positive slope output of  $20t$  from  $v_o(0.1) = -2 \text{ V}$  to  $v_o(0.2) = 0 \text{ V}$ . This waveform from  $t = 0$  to  $t = 0.2 \text{ s}$  is repeated in the interval  $t = 0.2$  to  $t = 0.4 \text{ s}$ , and therefore, the output waveform is shown in Fig. 6.27b.

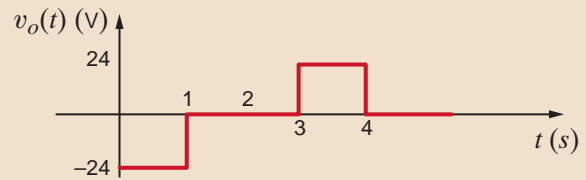
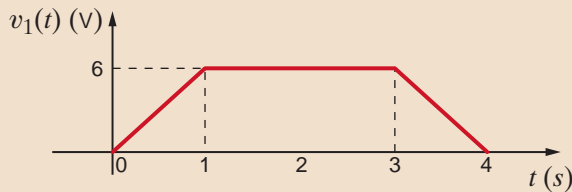


**Figure 6.27**  
Input and output waveforms for an integrator circuit.

## Learning Assessment

**E6.16** The waveform in Fig. E6.16 is applied to the input terminals of the op-amp differentiator circuit. Determine the differentiator output waveform if the op-amp circuit parameters are  $C_1 = 2 \text{ F}$  and  $R_2 = 2 \Omega$ .

**ANSWER:**




**Figure E6.16**

## 6.5

### Application Examples

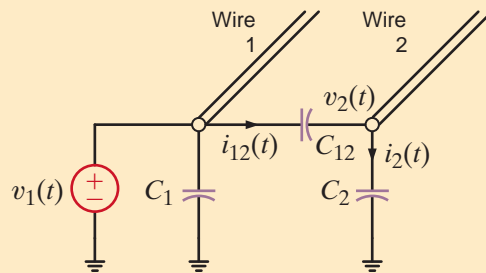
#### APPLICATION EXAMPLE 6.19

In integrated circuits, wires carrying high-speed signals are closely spaced as shown by the micrograph in Fig. 6.28. As a result, a signal on one conductor can “mysteriously” appear on a different conductor. This phenomenon is called *crossstalk*. Let us examine this condition and propose some methods for reducing it.

**Figure 6.28**

SEM Image (Tom Way/Ginger Conly. Courtesy of International Business Machines Corporation. Unauthorized use not permitted.)

The origin of crosstalk is capacitance. In particular, it is undesired capacitance, often called *parasitic capacitance*, that exists between wires that are closely spaced. The simple model in Fig. 6.29 can be used to investigate crosstalk between two long parallel wires. A signal is applied to wire 1. Capacitances  $C_1$  and  $C_2$  are the parasitic capacitances of the conductors with respect to ground, while  $C_{12}$  is the capacitance between the conductors. Recall that we introduced the capacitor as two closely spaced conducting plates. If we stretch those plates into thin wires, certainly the geometry of the conductors would change and thus the amount of capacitance. However, we should still expect some capacitance between the wires.

**SOLUTION****Figure 6.29**

A simple model for investigating crosstalk.

In order to quantify the level of crosstalk, we want to know how much of the voltage on wire 1 appears on wire 2. A nodal analysis at wire 2 yields

$$i_{12}(t) = C_{12} \left[ \frac{dv_1(t)}{dt} - \frac{dv_2(t)}{dt} \right] = i_2(t) = C_2 \left[ \frac{dv_2(t)}{dt} \right]$$

Solving for  $dv_2(t)/dt$ , we find that

$$\frac{dv_2(t)}{dt} = \left[ \frac{C_{12}}{C_{12} + C_2} \right] \frac{dv_1(t)}{dt}$$

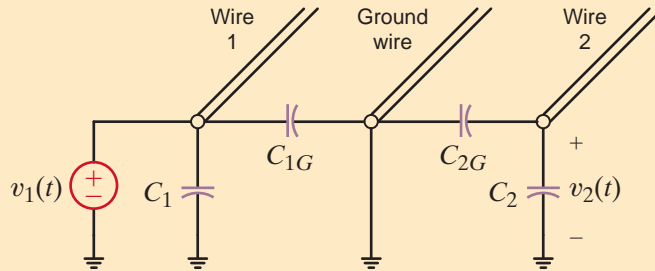
Integrating both sides of this equation yields

$$v_2(t) = \left[ \frac{C_{12}}{C_{12} + C_2} \right] v_1(t)$$

Note that it is a simple capacitance ratio that determines how effectively  $v_1(t)$  is “coupled” into wire 2. Clearly, ensuring that  $C_{12}$  is much less than  $C_2$  is the key to controlling crosstalk. How is this done? First, we can make  $C_{12}$  as small as possible by increasing the spacing between wires. Second, we can increase  $C_2$  by putting it closer to the ground wiring. Unfortunately, the first option takes up more real estate, and the second one slows down the voltage signals in wire 1. At this point, we seem to have a typical engineering tradeoff: to improve one criterion, that is, decreased crosstalk, we must sacrifice another, space or speed. One way to address the space issue would be to insert a ground connection between the signal-carrying wires as shown in Fig. 6.30. However, any advantage achieved with grounded wires must be traded off against the increase in space, since inserting grounded wires between adjacent conductors would nearly double the width consumed without them.

**Figure 6.30**

Use of a ground wire in the crosstalk model.

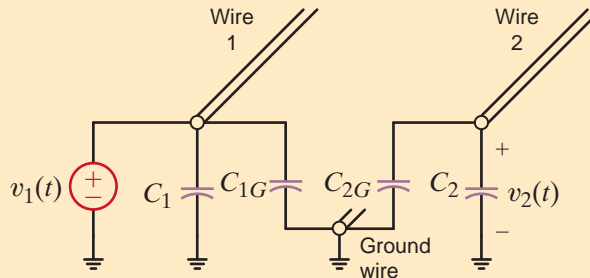


Redrawing the circuit in Fig. 6.31 immediately indicates that wires 1 and 2 are now electrically isolated and there should be no crosstalk whatsoever—a situation that is highly unlikely. Thus, we are prompted to ask the question, “Is our model accurate enough to model crosstalk?” A more accurate model for the crosstalk reduction scheme is shown in Fig. 6.32 where the capacitance between signal wires 1 and 2 is no longer ignored. Once again, we will determine the amount of crosstalk by examining the ratio  $v_2(t)/v_1(t)$ . Employing nodal analysis at wire 2 in the circuit in Fig. 6.33 yields

$$i_{12}(t) = C_{12} \left[ \frac{dv_1(t)}{dt} - \frac{dv_2(t)}{dt} \right] = i_2(t) = (C_2 + C_{2G}) \left[ \frac{dv_2(t)}{dt} \right]$$

**Figure 6.31**

Electrical isolation using a ground wire in crosstalk model.



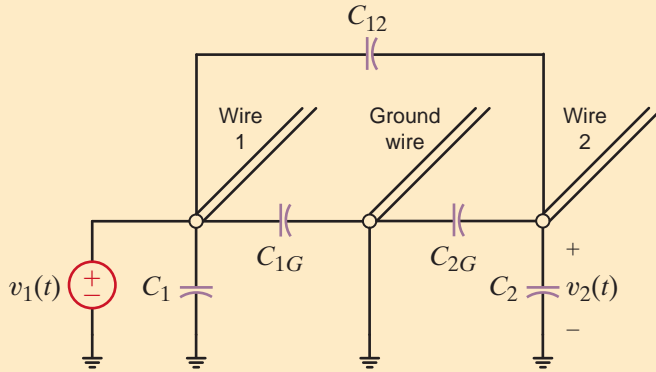
Solving for  $dv_2(t)/dt$ , we obtain

$$\frac{dv_2(t)}{dt} = \left[ \frac{C_{12}}{C_{12} + C_2 + C_{2G}} \right] \frac{dv_1(t)}{dt}$$

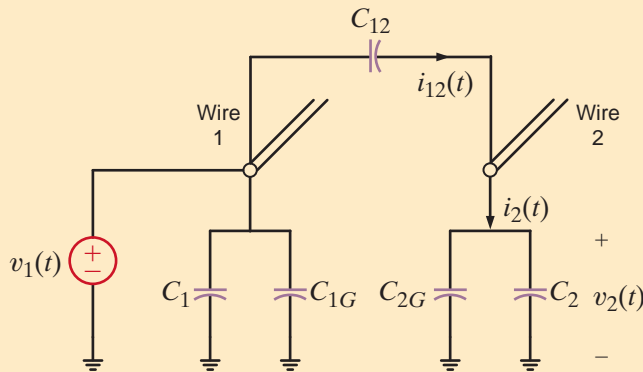
Integrating both sides of this equation yields

$$v_2(t) = \left[ \frac{C_{12}}{C_{12} + C_2 + C_{2G}} \right] v_1(t)$$

Note that this result is very similar to our earlier result with the addition of the  $C_{2G}$  term. Two benefits in this situation reduce crosstalk. First,  $C_{12}$  is smaller because adding the ground wire moves wires 1 and 2 farther apart. Second,  $C_{2G}$  makes the denominator of the crosstalk equation bigger. If we assume that  $C_{2G} = C_2$  and that  $C_{12}$  has been halved by the extra spacing, we can expect the crosstalk to be reduced by a factor of roughly 4.



**Figure 6.32**  
A more accurate crosstalk model.



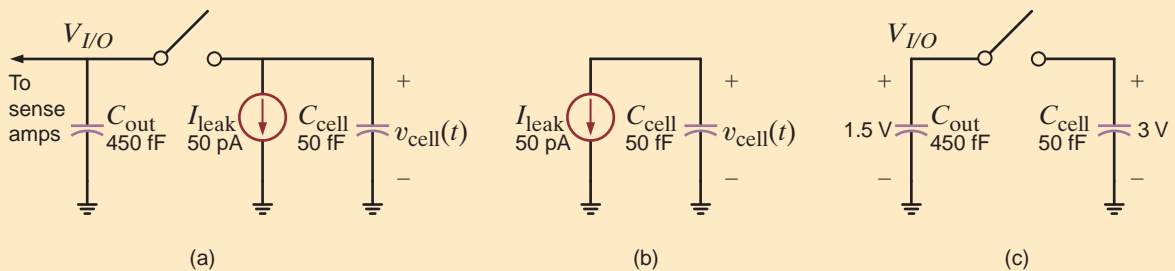
**Figure 6.33**  
A redrawn version of the more accurate crosstalk model.

An excellent example of capacitor operation is the memory inside a personal computer. This memory, called dynamic random access memory (DRAM), contains as many as 4 billion data storage sites called cells (circa 2007). Expect this number to roughly double every 2 years for the next decade or two. Let us examine in some detail the operation of a single DRAM cell.

**APPLICATION EXAMPLE 6.20**

Fig. 6.34a shows a simple model for a DRAM cell. Data are stored on the cell capacitor in true/false (or 1/0) format, where a large-capacitor voltage represents a true condition and a

**SOLUTION**



**Figure 6.34**  
A simple circuit model showing (a) the DRAM memory cell, (b) the effect of charge leakage from the cell capacitor, and (c) cell conditions at the beginning of a read operation.

low voltage represents a false condition. The switch closes to allow access from the processor to the DRAM cell. Current source  $I_{leak}$  is an unintentional, or parasitic, current that models charge leakage from the capacitor. Another parasitic model element is the capacitance,  $C_{out}$ , the capacitance of the wiring connected to the output side of the cell. Both  $I_{leak}$  and  $C_{out}$  have enormous impacts on DRAM performance and design.

Consider storing a true condition in the cell. A high voltage of 3.0 V is applied at node I/O and the switch is closed, causing the voltage on  $C_{cell}$  to quickly rise to 3.0 V. We open

the switch and the data are stored. During the store operation the charge, energy, and number of electrons,  $n$ , used are

$$\begin{aligned} Q &= CV = (50 \times 10^{-15})(3) = 150 \text{ fC} \\ W &= \frac{1}{2}CV^2 = (0.5)(50 \times 10^{-15})(3^2) = 225 \text{ fJ} \\ n &= Q/q = 150 \times 10^{-15}/(1.6 \times 10^{-19}) = 937,500 \text{ electrons} \end{aligned}$$

Once data are written, the switch opens and the capacitor begins to discharge through  $I_{\text{leak}}$ . A measure of DRAM quality is the time required for the data voltage to drop by half, from 3.0 V to 1.5 V. Let us call this time  $t_H$ . For the capacitor, we know

$$v_{\text{cell}}(t) = \frac{1}{C_{\text{cell}}} \int i_{\text{cell}} dt \text{ V}$$

where, from Fig. 6.34b,  $i_{\text{cell}}(t) = -I_{\text{leak}}$ . Performing the integral yields

$$v_{\text{cell}}(t) = \frac{1}{C_{\text{cell}}} \int (-I_{\text{leak}}) dt = -\frac{I_{\text{leak}}}{C_{\text{cell}}} t + K$$

We know that at  $t = 0$ ,  $v_{\text{cell}} = 3$  V. Thus,  $K = 3$  and the cell voltage is

$$v_{\text{cell}}(t) = 3 - \frac{I_{\text{leak}}}{C_{\text{cell}}} t \text{ V} \quad \mathbf{6.33}$$

Substituting  $t = t_H$  and  $v_{\text{cell}}(t_H) = 1.5$  V into Eq. (6.33) and solving for  $t_H$  yields  $t_H = 15$  ms. Thus, the cell data are gone in only a few milliseconds! The solution is rewriting the data before it can disappear. This technique, called *refresh*, is a must for all DRAM using this one-transistor cell.

To see the effect of  $C_{\text{out}}$ , consider reading a fully charged ( $v_{\text{cell}} = 3.0$  V) true condition. The I/O line is usually precharged to half the data voltage. In this example, that would be 1.5 V as seen in Fig. 6.34c. (To isolate the effect of  $C_{\text{out}}$ , we have removed  $I_{\text{leak}}$ .) Next, the switch is closed. What happens next is best viewed as a conservation of charge. Just before the switch closes, the total stored charge in the circuit is

$$\begin{aligned} Q_T &= Q_{\text{out}} + Q_{\text{cell}} = V_{\text{I/O}} C_{\text{out}} + V_{\text{cell}} C_{\text{cell}} \\ Q_T &= (1.5)(450 \times 10^{-15}) + (3)(50 \times 10^{-15}) = 825 \text{ fC} \end{aligned}$$

When the switch closes, the capacitor voltages are the same (let us call it  $V_o$ ) and the total charge is unchanged:

$$Q_T = 825 \text{ fC} = V_o C_{\text{out}} + V_o C_{\text{cell}} = V_o (450 \times 10^{-15} + 50 \times 10^{-15})$$

and

$$V_o = 1.65 \text{ V}$$

Thus, the change in voltage at  $V_{\text{I/O}}$  during the read operation is only 0.15 V. A very sensitive amplifier is required to quickly detect such a small change. In DRAMs, these amplifiers are called *sense amps*. How can  $v_{\text{cell}}$  change instantaneously when the switch closes? It cannot. In an actual DRAM cell, a transistor, which has a small equivalent resistance, acts as the switch. The resulting  $RC$  time constant is very small, indicating a very fast circuit. Recall that we are not analyzing the cell's speed—only the final voltage value,  $V_o$ . As long as the power lost in the switch is small compared to the capacitor energy, we can be comfortable in neglecting the switch resistance. By the way, if a false condition (zero volts) were read from the cell, then  $V_o$  would drop from its precharged value of 1.5 V to 1.35 V—a negative change of 0.15 V. This symmetric voltage change is the reason for precharging the I/O node to half the data voltage. Review the effects of  $I_{\text{leak}}$  and  $C_{\text{out}}$ . You will find that eliminating them would greatly simplify the refresh requirement and improve the voltage swing at node I/O when reading data. DRAM designers earn a very good living trying to do just that.

## 6.6

## Design Examples

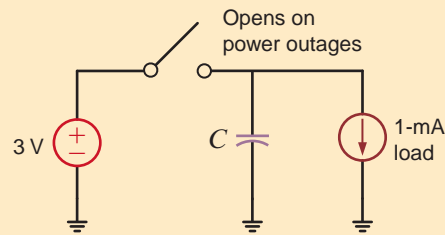
We have all undoubtedly experienced a loss of electrical power in our office or our home. When this happens, even for a second, we typically find that we have to reset all of our digital alarm clocks. Let's assume that such a clock's internal digital hardware requires a current of 1 mA at a typical voltage level of 3.0 V, but the hardware will function properly down to 2.4 V. Under these assumptions, we wish to design a circuit that will "hold" the voltage level for a short duration, for example, 1 second.

**DESIGN EXAMPLE 6.21**

We know that the voltage across a capacitor cannot change instantaneously, and hence its use appears to be viable in this situation. Thus, we model this problem using the circuit in Fig. 6.35 where the capacitor is employed to hold the voltage and the 1-mA source represents the 1-mA load.

**SOLUTION**

As the circuit indicates, when the power fails, the capacitor must provide all the power for the digital hardware. The load, represented by the current source, will discharge the capacitor linearly in accordance with the expression



**Figure 6.35**  
A simple model for a power outage ride-through circuit.

$$v(t) = 3.0 - \frac{1}{C} \int i(t) dt$$

After 1 second,  $v(t)$  should be at least 2.4 V, that is, the minimum functioning voltage, and hence

$$2.4 = 3.0 - \frac{1}{C} \int_0^1 (0.001) dt$$

Solving this equation for  $C$  yields

$$C = 1670 \mu\text{F}$$

Thus, from the standard capacitor values in Table 6.1, connecting three 560- $\mu\text{F}$  capacitors in parallel produces 1680  $\mu\text{F}$ . Although three 560- $\mu\text{F}$  capacitors in parallel will satisfy the design requirements, this solution may require more space than is available. An alternate solution involves the use of "double-layer capacitors" or what are known as Supercaps. A Web search of this topic will indicate that a company by the name of Elna America, Inc. is a major supplier of double-layer capacitors. An investigation of their product listing indicates that their DCK series of small coin-shaped supercaps is a possible alternative in this situation. In particular, the DCK3R3224 supercap is a 220-mF capacitor rated at 3.3 V with a diameter of 7 mm, or about 1/4 inch, and a thickness of 2.1 mm. Since only one of these items is required, this is a very compact solution from a space standpoint. However, there is yet another factor of importance and that is cost. To minimize cost, we may need to look for yet another alternate solution.

**DESIGN EXAMPLE 6.22**

Let us design an op-amp circuit in which the relationship between the output voltage and two inputs is

$$v_o(t) = 5 \int v_1(t) dt - 2v_2(t)$$

**SOLUTION**

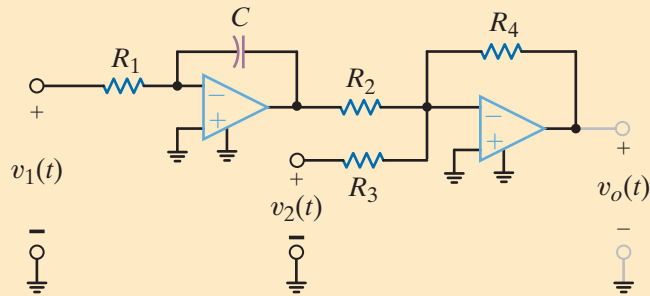
In order to satisfy the output voltage equation, we must add two inputs, one of which must be integrated. Thus, the design equation calls for an integrator and a summer as shown in Fig. 6.36.

Using the known equations for both the integrator and summer, we can express the output voltage as

$$v_o(t) = -v_2(t) \left[ \frac{R_4}{R_3} \right] - \left[ \frac{R_4}{R_2} \right] \left\{ -\frac{1}{R_1 C} \int v_1(t) dt \right\} = \frac{R_4}{R_1 R_2 C} \int v_1(t) dt - \left[ \frac{R_4}{R_3} \right] v_2(t)$$

**Figure 6.36**

Op-amp circuit with integrator and summer.



If we now compare this equation to our design requirement, we find that the following equalities must hold:

$$\frac{R_4}{R_1 R_2 C} = 5 \quad \frac{R_4}{R_3} = 2$$

Note that we have five variables and two constraint equations. Thus, we have some flexibility in our choice of components. First, we select  $C = 2 \mu\text{F}$ , a value that is neither large nor small. If we arbitrarily select  $R_4 = 20 \text{ k}\Omega$ , then  $R_3$  must be  $10 \text{ k}\Omega$  and furthermore

$$R_1 R_2 = 2 \times 10^9$$

If our third choice is  $R_1 = 100 \text{ k}\Omega$ , then  $R_2 = 20 \text{ k}\Omega$ . If we employ standard op-amps with supply voltages of approximately  $\pm 10 \text{ V}$ , then all currents will be less than  $1 \text{ mA}$ , which are reasonable values.

**SUMMARY**

- The important (dual) relationships for capacitors and inductors are as follows:

$$q = Cv$$

$$i(t) = C \frac{dv(t)}{dt} \quad v(t) = L \frac{di(t)}{dt}$$

$$v(t) = \frac{1}{C} \int_{-\infty}^t i(x) dx \quad i(t) = \frac{1}{L} \int_{-\infty}^t v(x) dx$$

$$p(t) = Cv(t) \frac{dv(t)}{dt} \quad p(t) = Li(t) \frac{di(t)}{dt}$$

$$w_C(t) = \frac{1}{2} Cv^2(t) \quad w_L(t) = \frac{1}{2} Li^2(t)$$

- The passive sign convention is used with capacitors and inductors.
- In dc steady state, a capacitor looks like an open circuit and an inductor looks like a short circuit.



- The voltage across a capacitor and the current flowing through an inductor cannot change instantaneously.
- Leakage resistance is present in practical capacitors.
- When capacitors are interconnected, their equivalent capacitance is determined as follows: capacitors in series combine like resistors in parallel, and capacitors in parallel combine like resistors in series.

- When inductors are interconnected, their equivalent inductance is determined as follows: inductors in series combine like resistors in series, and inductors in parallel combine like resistors in parallel.
- *RC* operational amplifier circuits can be used to differentiate or integrate an electrical signal.

## PROBLEMS

- 6.1** An uncharged 100- $\mu\text{F}$  capacitor is charged by a constant current of 1 mA. Find the voltage across the capacitor after 4 s.
- 6.2** A 12- $\mu\text{F}$  capacitor has an accumulated charge of 480  $\mu\text{C}$ . Determine the voltage across the capacitor.
- 6.3** A capacitor has an accumulated charge of 600  $\mu\text{C}$  with 5 V across it. What is the value of capacitance?
- 6.4** A 25- $\mu\text{F}$  capacitor initially charged to  $-10$  V is charged by a constant current of 2.5  $\mu\text{A}$ . Find the voltage across the capacitor after  $2\frac{1}{2}$  min.
- 6.5** The energy that is stored in a 25- $\mu\text{F}$  capacitor is  $w(t) = 12 \sin^2 377t$ . Find the current in the capacitor.
- 6.6** A capacitor is charged by a constant current of 2 mA and results in a voltage increase of 12 V in a 10-s interval. What is the value of the capacitance?
- 6.7** The current in a 100- $\mu\text{F}$  capacitor is shown in Fig. P6.7. Determine the waveform for the voltage across the capacitor if it is initially uncharged.

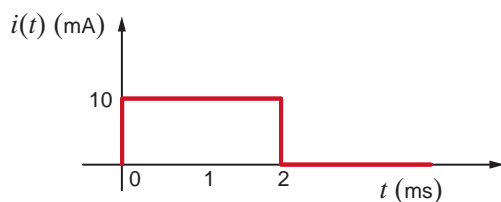


Figure P6.7

- 6.8** The voltage across a 10- $\mu\text{F}$  capacitor is shown in Fig. P6.8. Determine the waveform for the current in the capacitor.

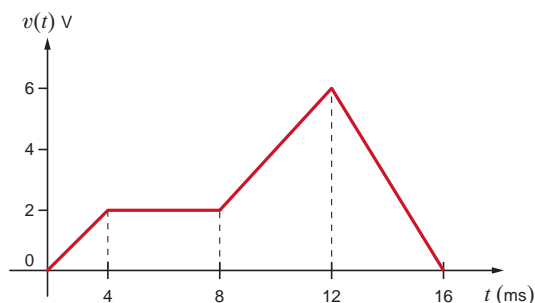


Figure P6.8

- 6.9** The voltage across a 20- $\mu\text{F}$  capacitor is shown in Fig. P6.9. Determine the waveform for the current in the capacitor.

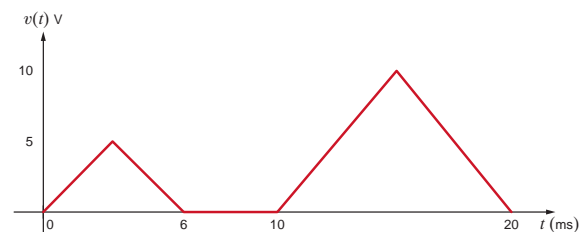


Figure P6.9

- 6.10** Derive the waveform for the current in a 50- $\mu\text{F}$  capacitor in the voltage across the capacitor as shown in Fig. P6.10.

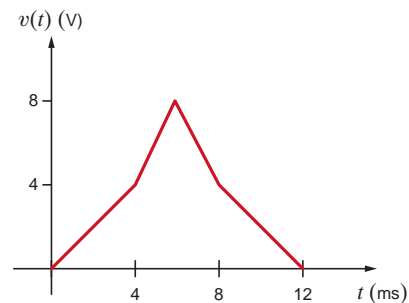


Figure P6.10

- 6.11** If the voltage waveform across a 100- $\mu\text{F}$  capacitor is shown in Fig. P6.11, determine the waveform for the current.

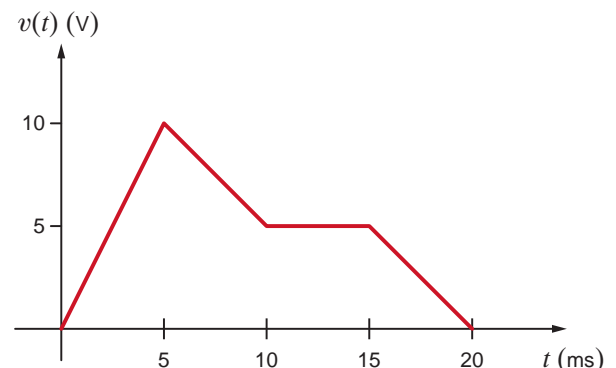


Figure P6.11

**6.12** The voltage waveform across a  $100\text{-}\mu\text{F}$  capacitor is shown in Fig. P6.12. Derive the waveform for the current.

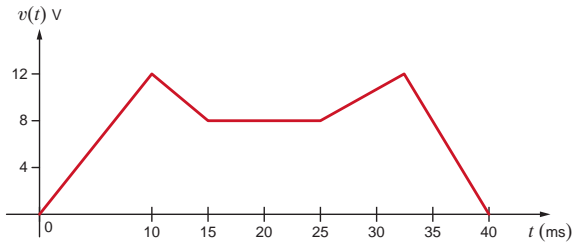



Figure P6.12

 **6.13** The current flowing through a  $5\text{-}\mu\text{F}$  capacitor is shown in Fig. P6.13. Find the energy stored in the capacitor at  $t = 1.4\text{ ms}$ ,  $t = 3.3\text{ ms}$ ,  $t = 4.3\text{ ms}$ ,  $t = 6.7\text{ ms}$ , and  $t = 8.5\text{ ms}$ .

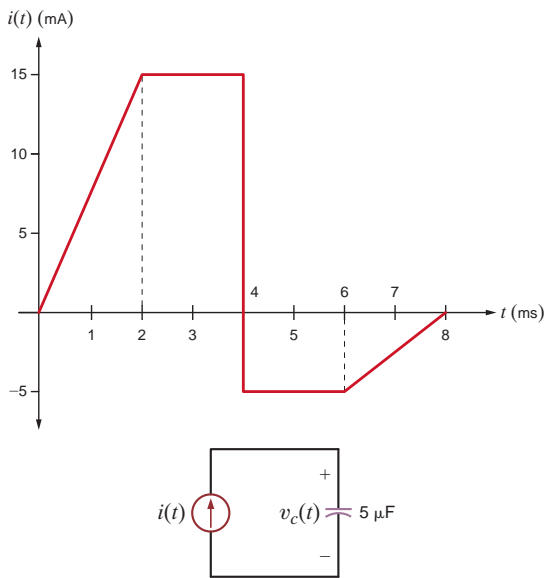


Figure P6.13

**6.14** The voltage across a  $25\text{-}\mu\text{F}$  capacitor is shown in Fig. P6.14. Determine the current waveform.

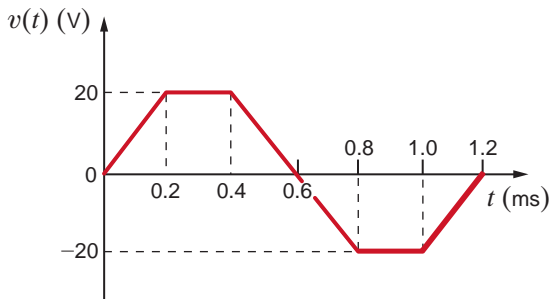


Figure P6.14

**6.15** The voltage across a  $2\text{-F}$  capacitor is given by the waveform in Fig. P6.15. Find the waveform for the current in the capacitor.

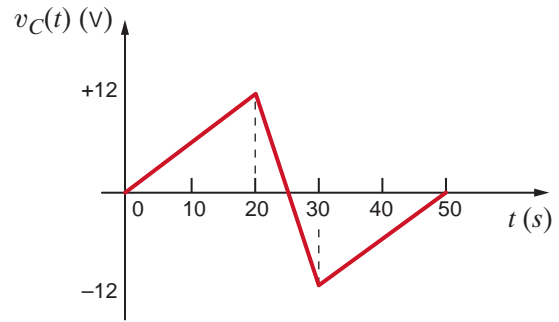


Figure P6.15

**6.16** The voltage across a  $2\text{-}\mu\text{F}$  capacitor is given by the waveform in Fig. P6.16. Compute the current waveform.

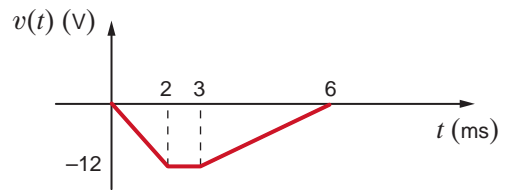


Figure P6.16

**6.17** Draw the waveform for the current in a  $24\text{-}\mu\text{F}$  capacitor when the capacitor voltage is as described in Fig. P6.17.

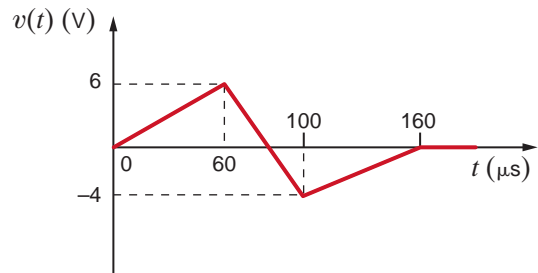


Figure P6.17

**6.18** The voltage across a  $10\text{-}\mu\text{F}$  capacitor is given by the waveform in Fig. P6.18. Plot the waveform for the capacitor current.

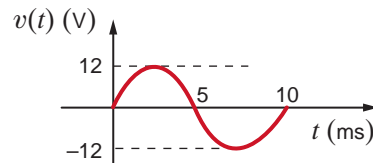


Figure P6.18

**6.19** The waveform for the current in a 50- $\mu\text{F}$  capacitor is shown in Fig. P6.19. Determine the waveform for the capacitor voltage.

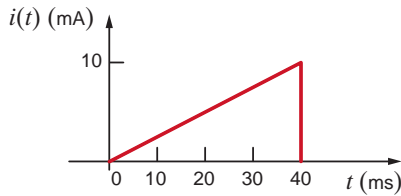


Figure P6.19

**6.20** The waveform for the current in a 50- $\mu\text{F}$  initially uncharged capacitor is shown in Fig. P6.20. Determine the waveform for the capacitor's voltage.

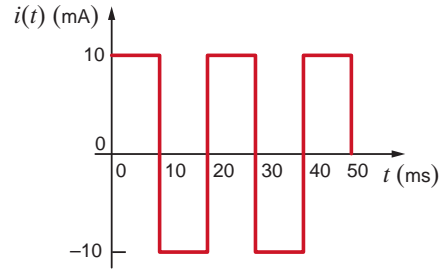


Figure P6.20

**6.21** The waveform for the voltage across 100- $\mu\text{F}$  capacitor shown Fig. 6.21a is given in Fig. 6.21b. Determine the following quantities: (a) the energy stored in the capacitor at  $t = 2.5$  ms, (b) the energy stored in the capacitor at  $t = 5.5$  ms, (c)  $i_c(t)$  at  $t = 1.5$  ms, (d)  $i_c(t)$  at  $t = 4.75$  ms, and (e)  $i_c(t)$  at  $t = 7.5$  ms.

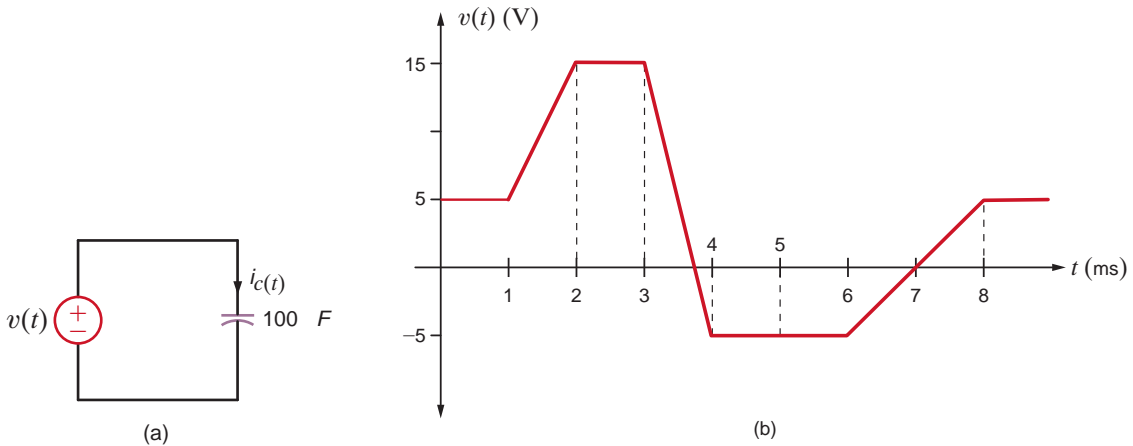


Figure P6.21

**6.22** The current in an inductor changed from 0 to 200 mA in 4 ms and induces a voltage of 100 mV. What is the value of the inductor?

**6.23** The current in a 100-mH inductor is  $i(t) = 2 \sin 377t$  A. Find (a) the voltage across the inductor and (b) the expression for the energy stored in the element.

**6.24** If the current  $i(t) = 1.5t$  A flows through a 2-H inductor, find the energy stored at  $t = 2$  s.

**6.25** The current in a 25-mH inductor is given by the expressions

$$i(t) = 0 \quad t < 0$$

$$i(t) = 10(1 - e^{-t}) \text{ mA} \quad t > 0$$

Find (a) the voltage across the inductor and (b) the expression for the energy stored in it.

**6.26** Given the data in the previous problem, find the voltage across the inductor and the energy stored in it after 1 s.

**6.27** The voltage across a 2-H inductor is given by the waveform shown in Fig. P6.27. Find the waveform for the current in the inductor.

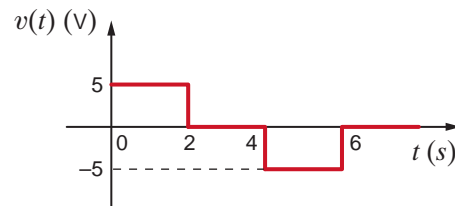


Figure P6.27

**6.28** The voltage across a 4-H inductor is given by the waveform shown in Fig. P6.28. Find the waveform for the current in the inductor.  $v(t) = 0, t < 0$ .

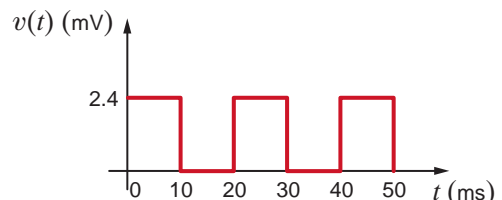


Figure P6.28

**6.29** The current in a 30-mH inductor is shown in Fig. P6.29. Derive the waveform for the inductor voltage.

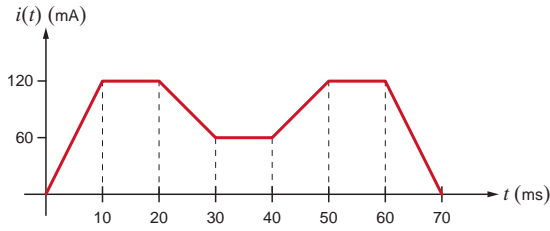


Figure P6.29

**6.30** The current waveform in a 40-mH inductor is shown in Fig. P6.30. Derive the waveform for the inductor voltage.

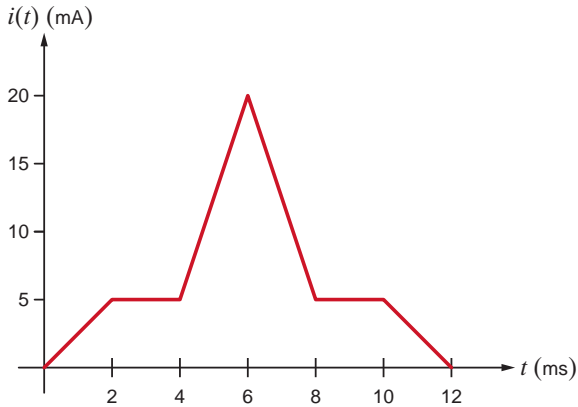


Figure P6.30

**6.31** If the current in a 60-mH inductor is given by the waveform in Fig. P6.31, compute the waveform for the inductor voltage.

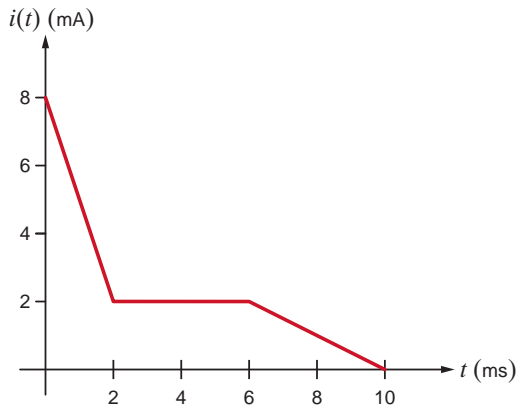


Figure P6.31

**6.32** The current in a 200-mH inductor is shown in Fig. P6.32. Determine the waveform for the inductor voltage.

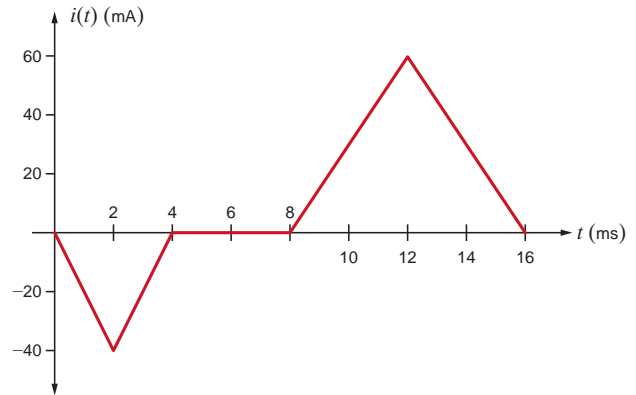


Figure P6.32

**6.33** The waveform for the current flowing through a 0.5-H inductor is shown in the plot in Fig. P6.33. Accurately sketch the inductor voltage versus time. Determine the following quantities: (a) the energy stored in the inductor at  $t = 1.7$  ms, (b) the energy stored in the inductor at  $t = 4.2$  ms, and (c) the power absorbed by the inductor at  $t = 1.2$  ms,  $t = 2.8$  ms, and  $t = 5.3$  ms.

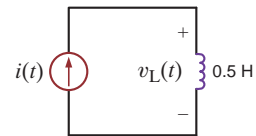
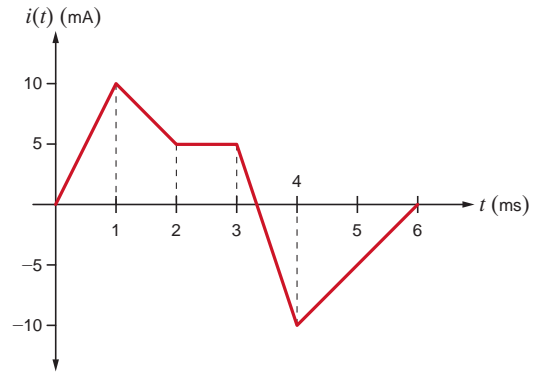


Figure P6.33

**6.34** The current in a 10-mH inductor is shown in Fig. P6.34. Determine the waveform for the voltage across the inductor.

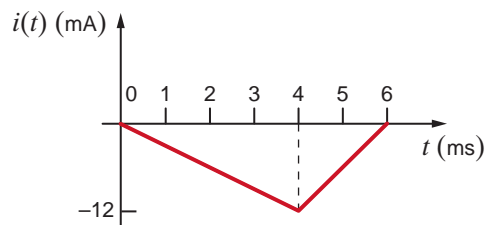


Figure P6.34

**6.35** The current in a 50-mH inductor is given in Fig. P6.35. Sketch the inductor voltage.

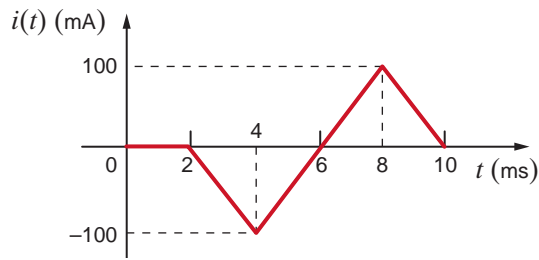


Figure P6.35

**6.36** The current in a 50-mH inductor is shown in Fig. P6.36. Find the voltage across the inductor.

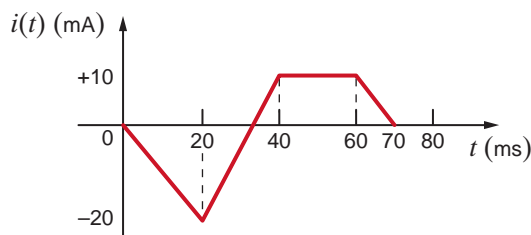



Figure P6.36

 **6.37** Draw the waveform for the voltage across a 24-mH inductor when the inductor current is given by the waveform shown in Fig. P6.37.

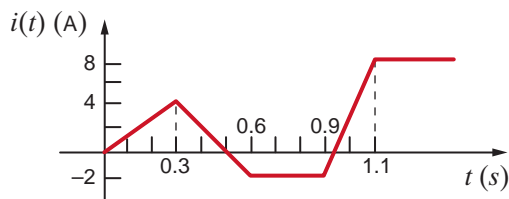


Figure P6.37

**6.38** The current in a 4-mH inductor is given by the waveform in Fig. P6.38. Plot the voltage across the inductor.

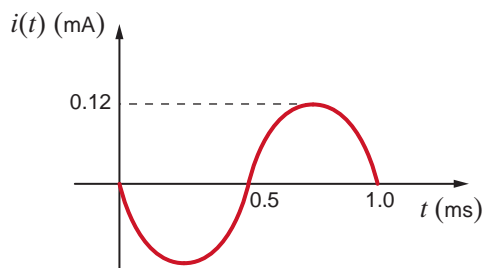


Figure P6.38

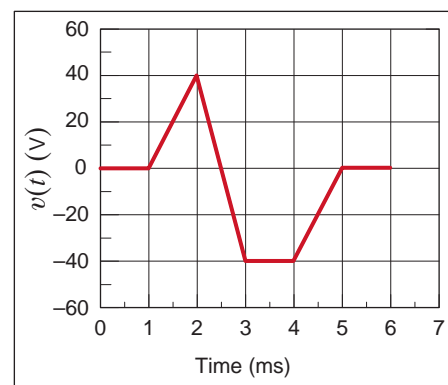
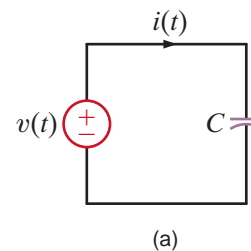
**6.39** Find the possible capacitance range of the following capacitors.

- (a) 0.0068  $\mu\text{F}$  with a tolerance of 10%.
- (b) 120 pF with a tolerance of 20%.
- (c) 39  $\mu\text{F}$  with a tolerance of 20%.

**6.40** Find the possible inductance range of the following inductors.

- (a) 10 mH with a tolerance of 10%.
- (b) 2.0 nH with a tolerance of 5%.
- (c) 68  $\mu\text{H}$  with a tolerance of 10%.

**6.41** The capacitor in Fig. P6.41a is 51 nF with a tolerance of 10%. Given the voltage waveform in Fig. 6.41b, graph the current  $i(t)$  for the minimum and maximum capacitor values.



(b)

Figure P6.41

**6.42** The inductor in Fig. P6.42a is  $4.7 \mu\text{H}$  with a tolerance of 20%. Given the current waveform in Fig. 6.42b, graph the voltage  $v(t)$  for the minimum and maximum inductor values.

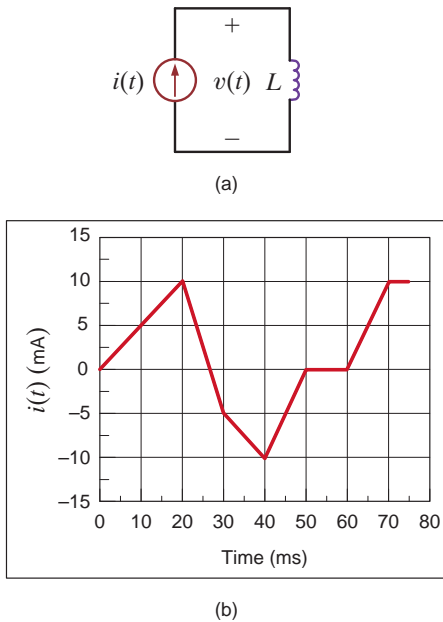


Figure P6.42

**6.43** If the total energy stored in the circuit in Fig. P6.43 is 80 mJ, what is the value of  $L$ ?

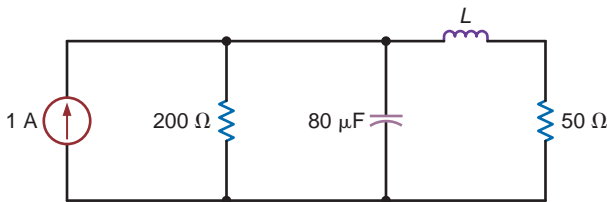


Figure P6.43

**6.44** Find the value of  $C$  if the energy stored in the capacitor in Fig. P6.44 equals the energy stored in the inductor.

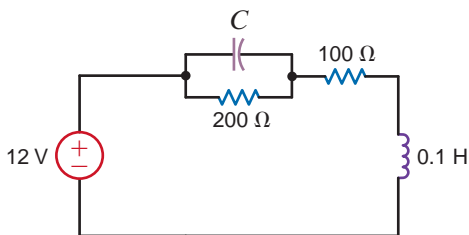


Figure P6.44

**6.45** Given the network in Fig. P6.45, find the power dissipated in the  $3\text{-}\Omega$  resistor and the energy stored in the capacitor.

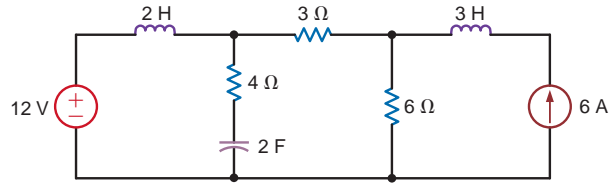


Figure P6.45

**6.46** Calculate the energy stored in the inductor in the circuit shown in Fig. P6.46.

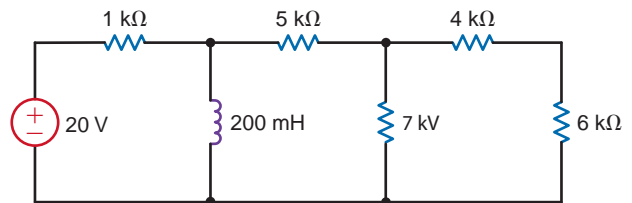


Figure P6.46

**6.47** Calculate the energy stored in both the inductor and the capacitor shown in Fig. P6.47.

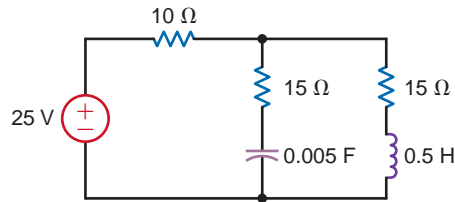


Figure P6.47

**6.48** Given a 1-, 3-, and 4- $\mu\text{F}$  capacitor, can they be interconnected to obtain an equivalent 2- $\mu\text{F}$  capacitor?

**6.49** Find the total capacitance  $C_T$  of the network in Fig. P6.49.

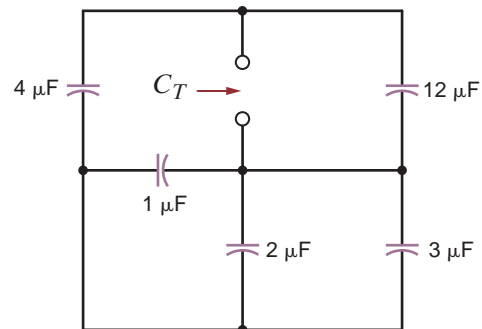


Figure P6.49

6.50 Find the total capacitance  $C_T$  of the network in Fig. P6.50.

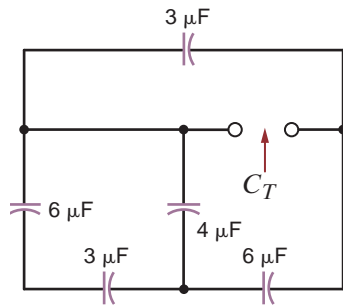


Figure P6.50

6.51 Find  $C_T$  in the network shown in Fig. P6.51.

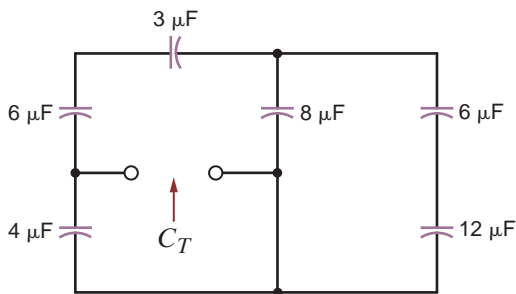


Figure P6.51

6.52 Find  $C_T$  in the circuit in Fig. P6.52.

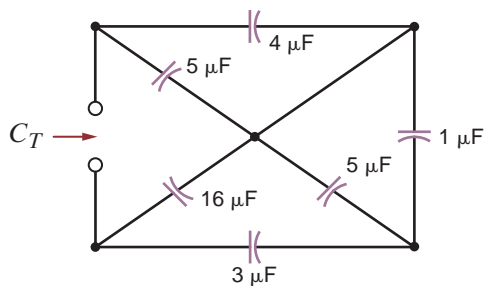


Figure P6.52

6.53 Determine the value of  $C_T$  in the circuit in Fig. P6.53.

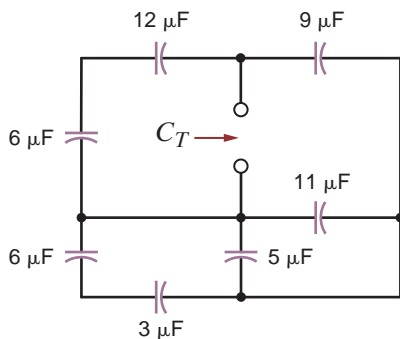


Figure P6.53

6.54 Find  $C_T$  in the network in Fig. P6.54.

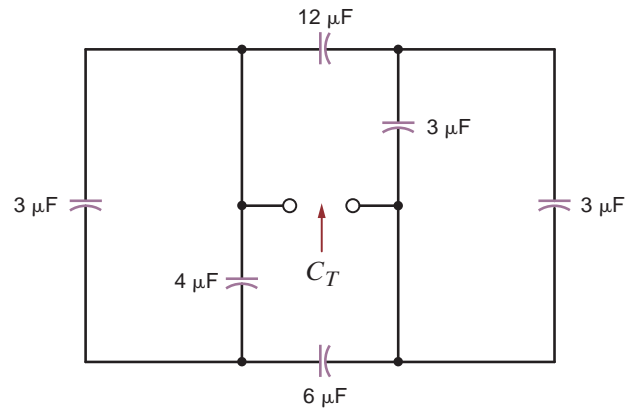


Figure P6.54

6.55 Determine  $C_T$  in the circuit in Fig. P6.55 if all capacitors in the network are  $6 \mu\text{F}$ .

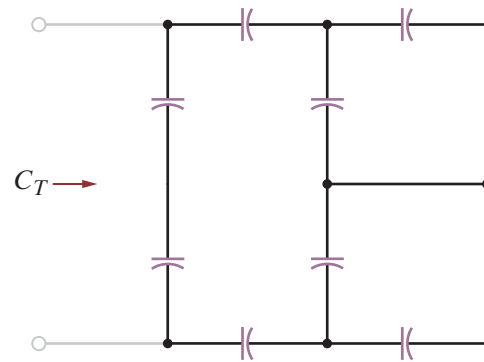


Figure P6.55

6.56 Find  $C_T$  in the circuit in Fig. P6.56 if all capacitors are  $6 \mu\text{F}$ .

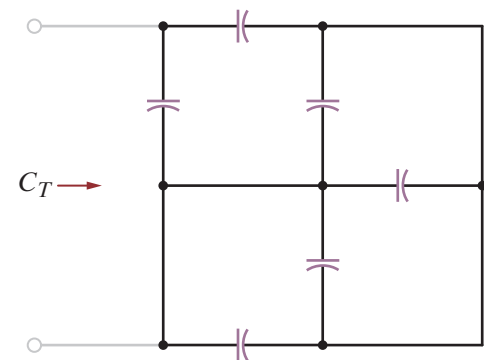


Figure P6.56

**6.57** Determine the value of  $C_T$  in the circuit in Fig. P6.57 if all capacitors are  $12\ \mu\text{F}$ .

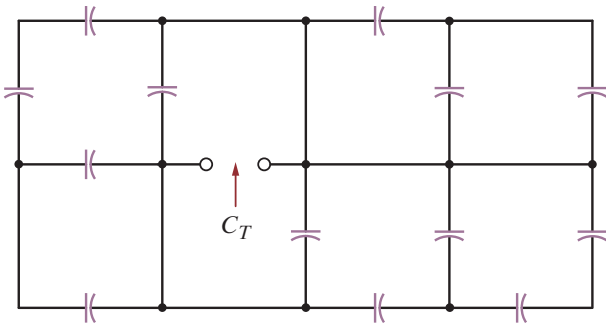


Figure P6.57

**6.58** If the total capacitance of the network in Fig. P6.58 is  $10\ \mu\text{F}$ , find the value of  $C_T$ .

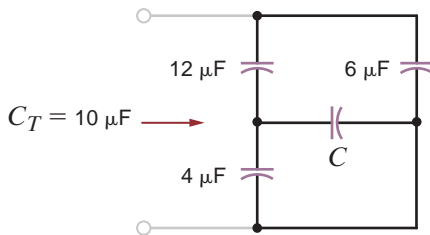


Figure P6.58

**6.59** In the network in Fig. 6.59, if  $C_T = 4\ \mu\text{F}$ , find the value of  $C$ .

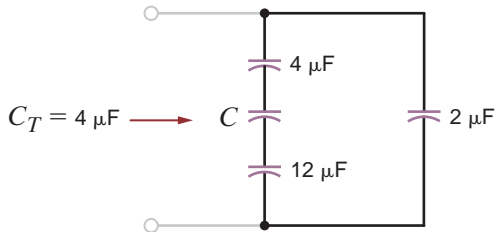


Figure P6.59

**6.60** Find the value of  $C$  in Fig. 6.60.

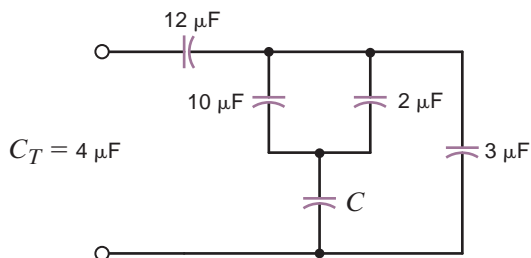


Figure P6.60

**6.61** If  $C_{eq} = 4\ \mu\text{F}$  in the circuit in Fig. P6.61, calculate  $C$ .

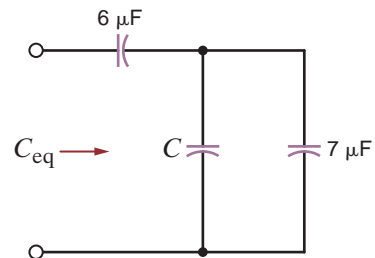


Figure P6.61

**6.62** Find the total capacitance  $C_T$  shown in the network in Fig. P6.62.

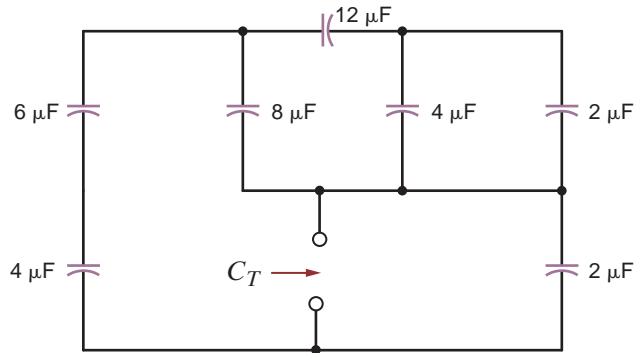


Figure P6.62

**6.63** In the network in Fig. P6.63, find the capacitance  $C_T$  if (a) the switch is open and (b) the switch is closed.

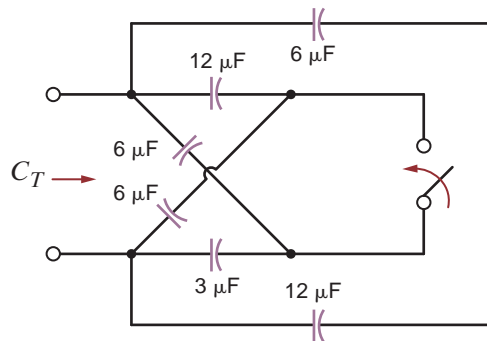
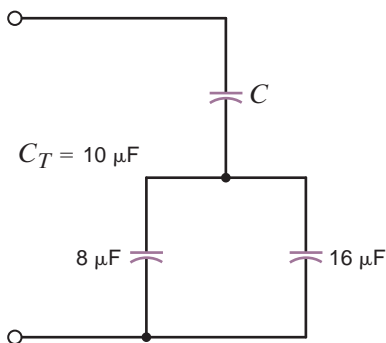


Figure P6.63

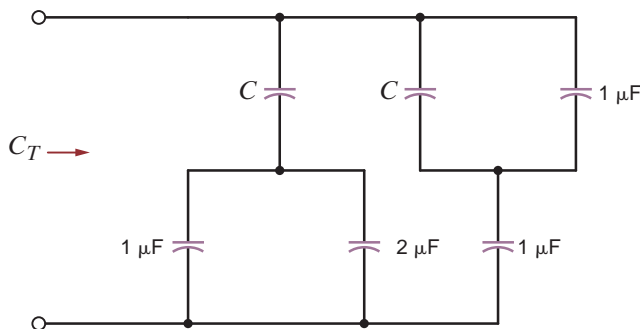


**6.64** Select the value of  $C$  to produce the desired total capacitance of  $C_T = 10 \mu\text{F}$  in the circuit in Fig. P6.64.



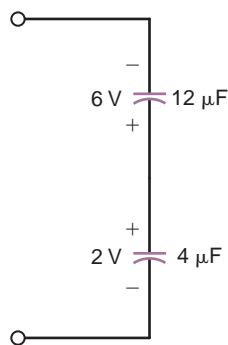
**Figure P6.64**

**6.65** Select the value of  $C$  to produce the desired total capacitance of  $C_T = 1 \mu\text{F}$  in the circuit in Fig. P6.65.



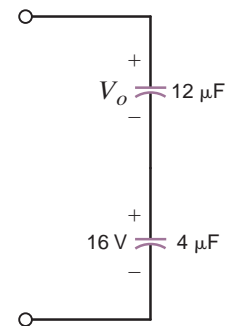
**Figure P6.65**

**6.66** The two capacitors in Fig. P6.66 were charged and then connected as shown. Determine the equivalent capacitance, the initial voltage at the terminals, and the total energy stored in the network.



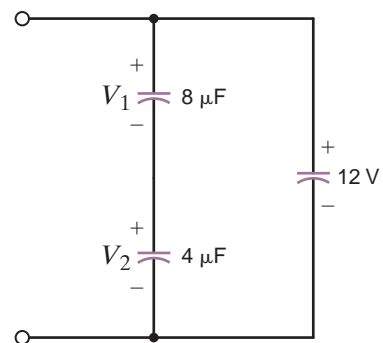
**Figure P6.66**

**6.67** The two capacitors shown in Fig. P6.67 have been connected for some time and have reached their present values. Find  $V_0$ .



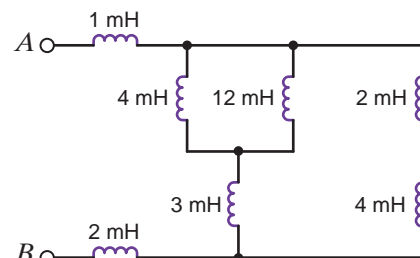
**Figure P6.67**

**6.68** The three capacitors shown in Fig. P6.68 have been connected for some time and have reached their present values. Find  $V_1$  and  $V_2$ .



**Figure P6.68**

**6.69** Determine the inductance at terminals  $A$ - $B$  in the network in Fig. P6.69.



**Figure P6.69**

**6.70** Find the total inductance at the terminals of the network in Fig. P6.70.

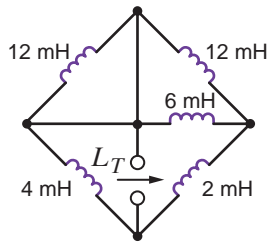


Figure P6.70

**6.73** Find  $L_T$  in the circuit in Fig. P6.73. All inductors are  $12 \mu\text{H}$ .

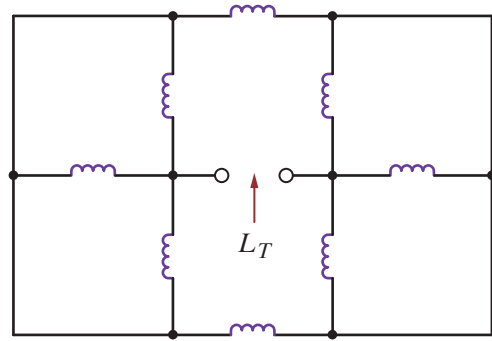


Figure P6.73

**6.71** Find  $L_T$  in the circuit in Fig. P6.71.

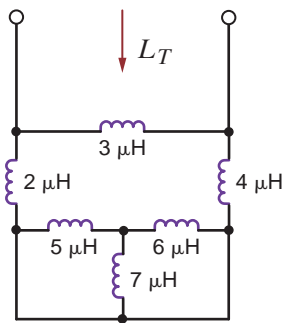


Figure P6.71

**6.74** Find  $L_T$  in the circuit in Fig. P6.74.

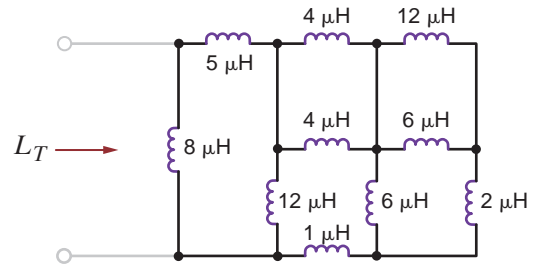


Figure P6.74

**6.72** Find  $L_T$  in the circuit in Fig. P6.72.

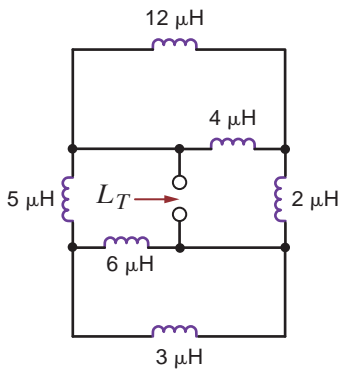


Figure P6.72

**6.75** Find  $L_T$  in the circuit in Fig. P6.75.

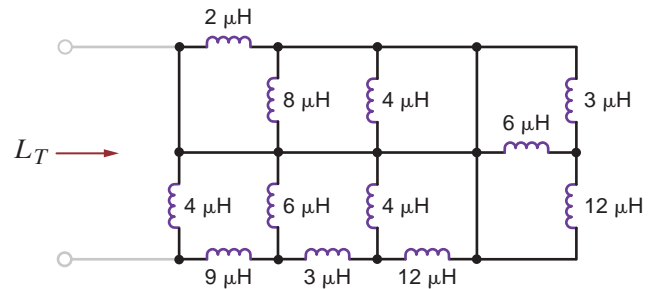


Figure P6.75



**6.76** If the total inductance,  $L_T$ , in the network in Fig. P6.76 is  $5 \mu\text{H}$ , find the value of  $L$ .

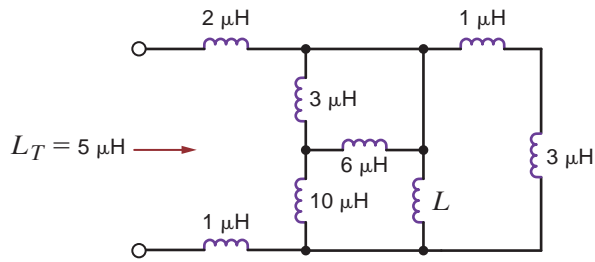


Figure P6.76

**6.79** Given the network shown in Fig. P6.79, find (a) the equivalent inductance at terminals  $A-B$  with terminals  $C-D$  short circuited, and (b) the equivalent inductance at terminals  $C-D$  with terminals  $A-B$  open circuited.

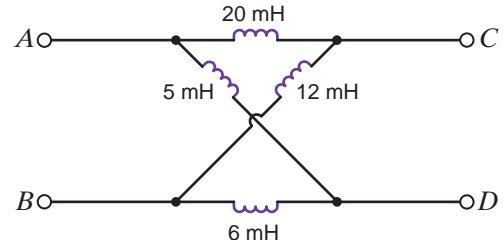


Figure P6.79

**6.77** If the total inductance,  $L_T$ , of the network in Fig. P6.77 is  $6 \mu\text{H}$ , find the value of  $L$ .

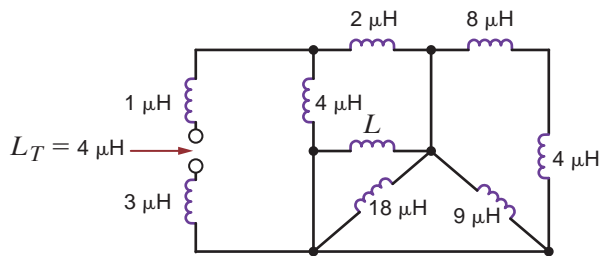


Figure P6.77

**6.80** Find the value of  $L$  in the network in Fig. P6.80 so that the total inductance,  $L_T$ , will be  $2 \text{ mH}$ .

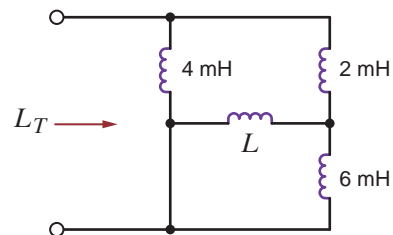


Figure P6.80

**6.78** Find  $L_T$  in the network in Fig. P6.78 (a) with the switch open and (b) with the switch closed. All inductors are  $12 \text{ mH}$ .

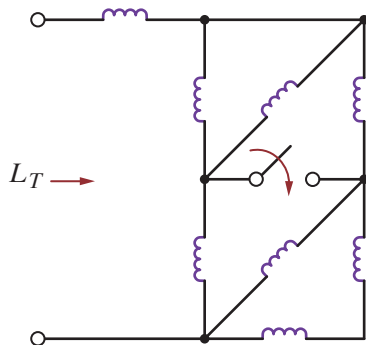


Figure P6.78

**6.81** A  $20\text{-mH}$  inductor and a  $12\text{-mH}$  inductor are connected in series with a  $1\text{-A}$  current source. Find (a) the equivalent inductance and (b) the total energy stored.

**6.82** If the capacitors shown in Fig. P6.82 have been connected for some time and have reached their present values, determine (a) the voltage  $V_0$  and (b) the total energy stored in the capacitors.

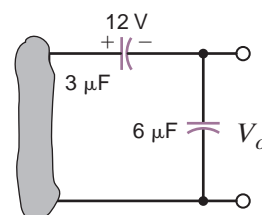


Figure P6.82

**6.83** If the capacitors in the circuit in Fig. P6.83 have been connected for some time and have reached their present values, calculate (a) the voltage  $V_1$  and (b) the total energy stored in the capacitors.

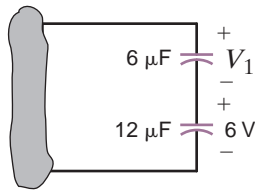


Figure P6.83

**6.84** If the capacitors shown in Fig. P6.84 have been connected for some time and the voltage has reached its present value, determine (a) the voltages  $V_1$  and  $V_2$  and (b) the total energy stored in the capacitors.

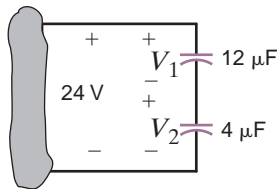


Figure P6.84

**6.85** If the capacitors shown in Fig. P6.85 have been connected for some time and the voltage has reached its present value, find (a) the voltages  $V_1$  and  $V_2$  and (b) the total energy stored in the capacitors.

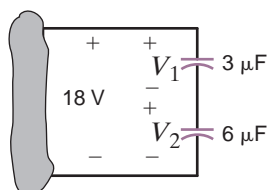


Figure P6.85

**6.86** If the capacitors in the circuit in Fig. P6.86 have been connected for some time and have reached their present values, (a) calculate the voltages  $V_1$  and  $V_2$  and (b) determine the total energy stored in the capacitors.

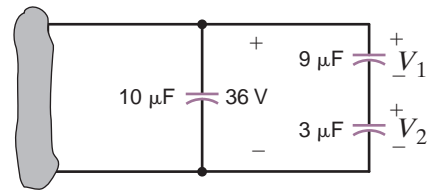


Figure P6.86

**6.87** For the network in Fig. P6.87  $v_{S_1}(t) = 80 \cos 377t$  V and  $v_{S_2}(t) = 40 \cos 377t$  V. Find  $v_o(t)$ .

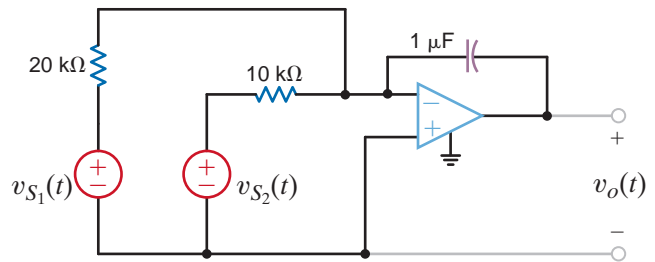


Figure P6.87

**6.88** If the input to the network shown in Fig. P6.88a is given by the waveform in Fig. P6.88b, determine the output waveform  $v_o(t)$  if  $v_o(0) = 0$ .

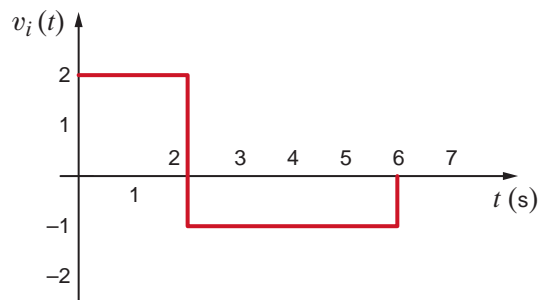
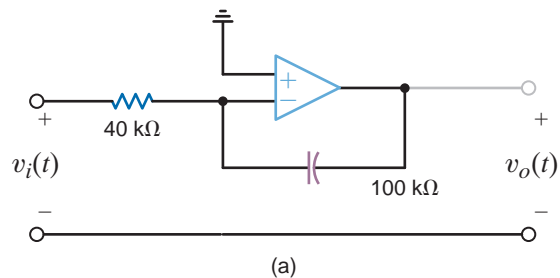
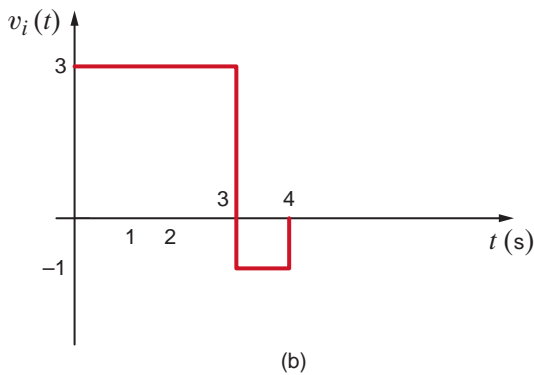
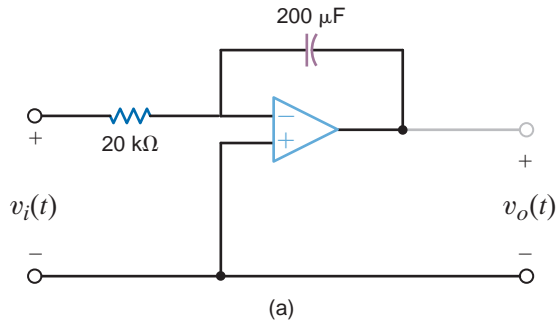


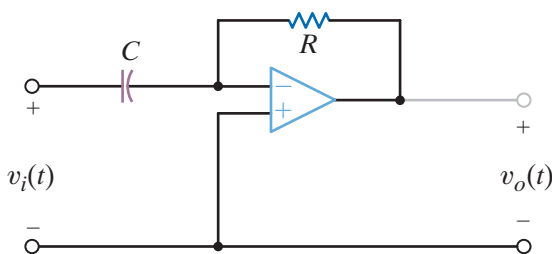
Figure P6.88

**6.89** The input to the network shown in Fig. P6.89a is shown in Fig. P6.89b. Derive the waveform for the output voltage  $v_o(t)$  if  $v_o(0) = 0$ .



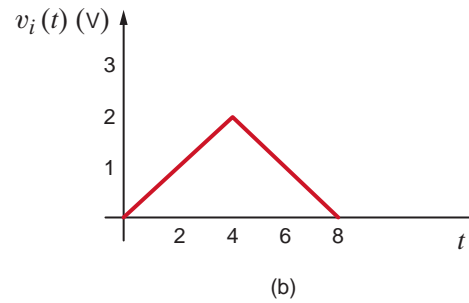
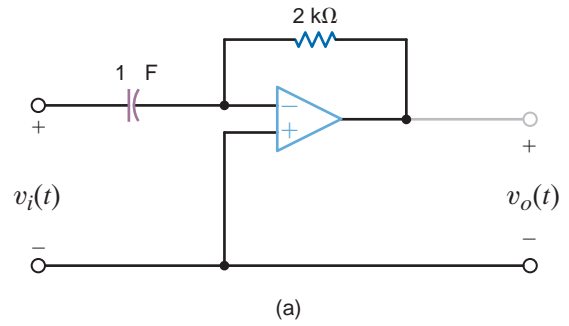
**Figure P6.89**

**6.90** Show that the circuit shown in Fig. P6.90 acts like a differentiator with an output voltage of  $v_o(t) = -RC \frac{dv_i(t)}{dt}$ . Assume an ideal op-amp.



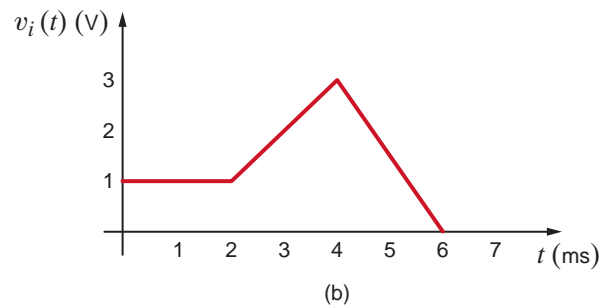
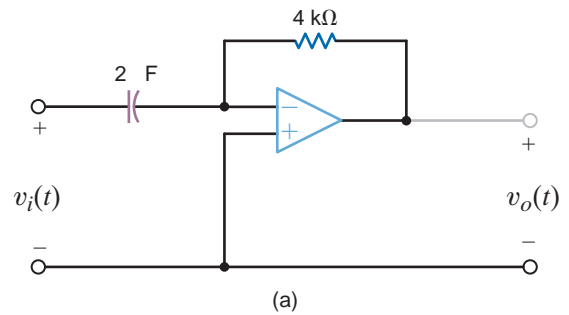
**Figure P6.90**

**6.91** Sketch the output voltage of the network in Fig. P6.91a if the input is given by the waveform in Fig. 6.91b.



**Figure P6.91**

**6.92** Sketch the output voltage of the network in Fig. P6.92a if the input is given by the waveform in Fig. P6.92b.



**Figure P6.92**

6.93 Given the network in Fig. P6.93a,

(a) Determine the equation for the closed-loop gain

$$|G| = \left| \frac{v_o}{v_i} \right|.$$

(b) Sketch the magnitude of the closed-loop gain as a function of frequency if  $R_1 = 1 \text{ k}\Omega$ ,  $R_2 = 10 \text{ k}\Omega$ , and  $C = 2 \text{ }\mu\text{F}$ .

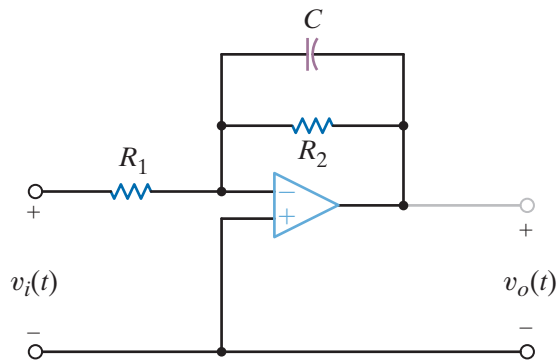


Figure P6.93

6.94 An integrator is required that has the following performance:

$$v_o(t) = 10^6 \int v_s dt$$

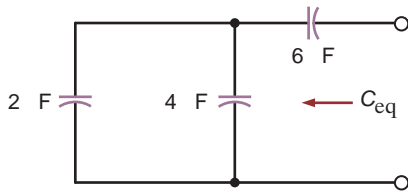
where the capacitor values must be greater than 10 nF and the resistor values must be greater than 10 k $\Omega$ .

- (a) Design the integrator.
- (b) If  $\pm 10\text{-V}$  supplies are used, what are the maximum and minimum values of  $v_o$ ?
- (c) Suppose  $v_s = 1 \text{ V}$ . What is the rate of change of  $v_o$ ?

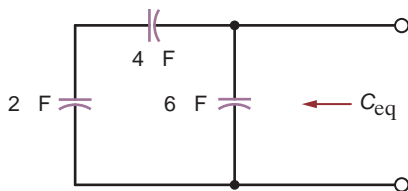
### TYPICAL PROBLEMS FOUND ON THE FE EXAM

6PFE-1 Given three capacitors with values 2- $\mu\text{F}$ , 4- $\mu\text{F}$ , and 6- $\mu\text{F}$ , can the capacitors be interconnected so that the combination is an equivalent 3- $\mu\text{F}$  capacitor?

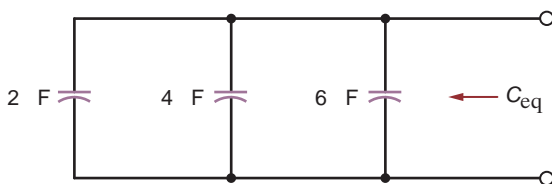
a. Yes. The capacitors should be connected as shown.



b. Yes. The capacitors should be connected as shown.



c. Yes. The capacitors should be connected as shown.



d. No. An equivalent capacitance of 3  $\mu\text{F}$  is not possible with the given capacitors.

6PFE-2 The current pulse shown in Fig. 6PFE-2 is applied to a 1- $\mu\text{F}$  capacitor. What is the energy stored in the electric field of the capacitor?

$$\text{a. } w(t) = \begin{cases} 0 \text{ J, } t \leq 0 \\ 10 \times 10^6 t^2 \text{ J, } 0 < t \leq 1 \text{ }\mu\text{s} \\ 10 \text{ }\mu\text{J, } t > 1 \text{ }\mu\text{s} \end{cases}$$

$$\text{b. } w(t) = \begin{cases} 0 \text{ J, } t \leq 0 \\ 6 \times 10^6 t \text{ J, } 0 < t \leq 1 \text{ }\mu\text{s} \\ 6 \text{ }\mu\text{J, } t > 1 \text{ }\mu\text{s} \end{cases}$$

$$\text{c. } w(t) = \begin{cases} 0 \text{ J, } t \leq 0 \\ 18 \times 10^6 t^2 \text{ J, } 0 < t \leq 1 \text{ }\mu\text{s} \\ 18 \text{ }\mu\text{J, } t > 1 \text{ }\mu\text{s} \end{cases}$$

$$\text{d. } w(t) = \begin{cases} 0 \text{ J, } t \leq 0 \\ 30 \times 10^6 t \text{ J, } 0 < t \leq 1 \text{ }\mu\text{s} \\ 30 \text{ }\mu\text{J, } t > 1 \text{ }\mu\text{s} \end{cases}$$

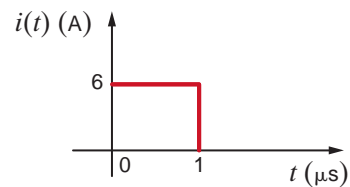


Figure 6PFE-2

**6PFE-3** The two capacitors shown in Fig. 6PFE-3 have been connected for some time and have reached their present values. Determine the unknown capacitor  $C_x$ .

- a.  $20 \mu F$
- b.  $30 \mu F$
- c.  $10 \mu F$
- d.  $90 \mu F$

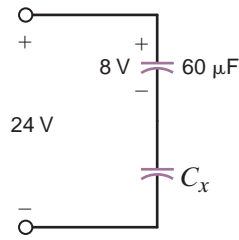


Figure 6PFE-3

**6PFE-4** What is the equivalent inductance of the network in Fig. 6PFE-4?

- a. 9.5 mH
- b. 2.5 mH
- c. 6.5 mH
- d. 3.5 mH

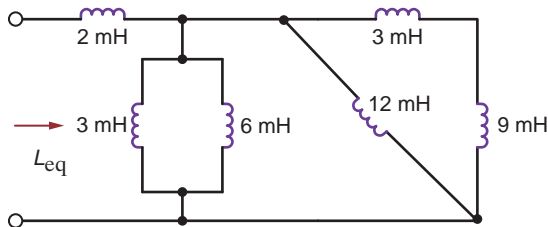


Figure 6PFE-4

**6PFE-5** The current source in the circuit in Fig. 6PFE-5 has the following operating characteristics:

$$i(t) = \begin{cases} 0 \text{ A}, & t < 0 \\ 20te^{-2t} \text{ A}, & t > 0 \end{cases}$$

What is the voltage across the 10-mH inductor expressed as a function of time?

- a.  $v(t) = \begin{cases} 0 \text{ V}, & t < 0 \\ 0.2e^{-2t} - 4te^{-2t} \text{ V}, & t > 0 \end{cases}$
- b.  $v(t) = \begin{cases} 0 \text{ V}, & t < 0 \\ 2e^{-2t} + 4te^{-2t} \text{ V}, & t > 0 \end{cases}$
- c.  $v(t) = \begin{cases} 0 \text{ V}, & t < 0 \\ -0.2te^{-2t} + 0.4e^{-2t} \text{ V}, & t > 0 \end{cases}$
- d.  $v(t) = \begin{cases} 0 \text{ V}, & t < 0 \\ -2te^{-2t} \text{ V}, & t > 0 \end{cases}$

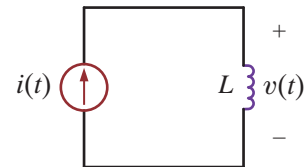


Figure 6PFE-5

# FIRST- AND SECOND-ORDER TRANSIENT CIRCUITS

## THE LEARNING GOALS FOR THIS CHAPTER ARE:

- Be able to calculate initial values for inductor currents and capacitor voltages in transient circuits
- Know how to calculate voltages and currents in first-order transient circuits
- Know how to calculate voltages and currents in second-order transient circuits



E.S.A./SIPA/NewsCom

**Sea Ice Measurements** Data clearly demonstrate an ongoing rise in global temperature. NASA's Goddard Institute for Space Studies has reported that we have just experienced the warmest decade (2000 to 2009) on record. Measuring the environmental impact of this change – and deciding how to respond to it – is a major challenge facing scientists and policymakers today and will be for years to come.

Electronic devices are essential to efforts to measure impacts such as the reduction in polar ice. Polar ice regulates global climate because it reflects about 80% of the incoming sunlight. Radar altimetry data from satellites is being used to measure the effect of warming on polar glaciers. Low-flying aircraft making repeated runs across Arctic, Antarctic, and Greenland ice beds are

using radar backscatter to map transitions in sea ice thickness. Sea ice growth and melt measurements from radar during all summer-to-winter seasons confirm that the ice is disappearing.

This chapter describes voltage and current transitions in circuits resulting from switching of constant-level sources from one value to another. Capacitors, inductors, and resistors are connected in series or parallel, modeling transitions for simple to more complex circuits. Extending to a square-wave pulse voltage source demonstrates multiple switching dynamics. The transitions in circuit voltages and currents that you will study in this chapter are principles that you can see applied in a wide array of devices. While some seem mundane, others, such as those that measure sea ice, have a major impact on our future.



## 7.1

## Introduction

In this chapter we perform what is normally referred to as a transient analysis. We begin our analysis with first-order circuits—that is, those that contain only a single storage element. When only a single storage element is present in the network, the network can be described by a first-order differential equation.

Our analysis involves an examination and description of the behavior of a circuit as a function of time after a sudden change in the network occurs due to switches opening or closing. Because of the presence of one or more storage elements, the circuit response to a sudden change will go through a transition period prior to settling down to a steady-state value. It is this transition period that we will examine carefully in our transient analysis.

One of the important parameters that we will examine in our transient analysis is the circuit's time constant. This is a very important network parameter because it tells us how fast the circuit will respond to changes. We can contrast two very different systems to obtain a feel for the parameter. For example, consider the model for a room air-conditioning system and the model for a single-transistor stage of amplification in a computer chip. If we change the setting for the air conditioner from 70 degrees to 60 degrees, the unit will come on and the room will begin to cool. However, the temperature measured by a thermometer in the room will fall very slowly and, thus, the time required to reach the desired temperature is long. However, if we send a trigger signal to a transistor to change state, the action may take only a few nanoseconds. These two systems will have vastly different time constants.

Our analysis of first-order circuits begins with the presentation of two techniques for performing a transient analysis: the differential equation approach, in which a differential equation is written and solved for each network, and a step-by-step approach, which takes advantage of the known form of the solution in every case. In the second-order case, both an inductor and a capacitor are present simultaneously, and the network is described by a second-order differential equation. Although the *RLC* circuits are more complicated than the first-order single storage circuits, we will follow a development similar to that used in the first-order case.

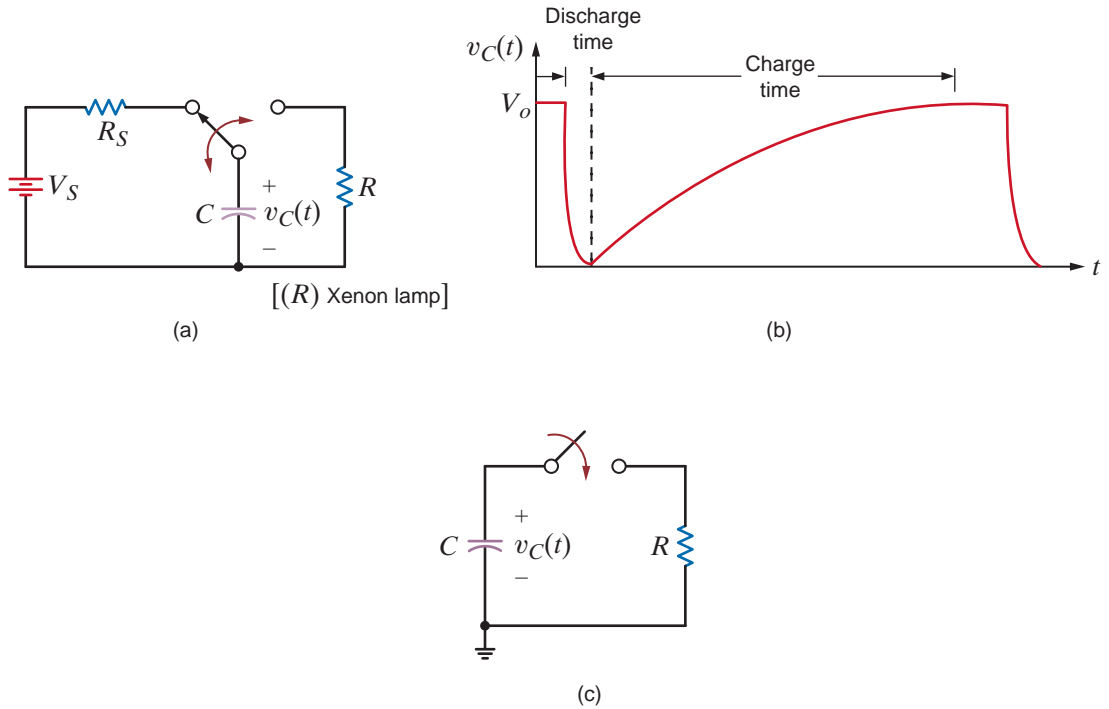
Our presentation will deal only with very simple circuits, since the analysis can quickly become complicated for networks that contain more than one loop or one nonreference node. Furthermore, we will demonstrate a much simpler method for handling these circuits when we cover the Laplace transform later in this book. We will analyze several networks in which the parameters have been chosen to illustrate the different types of circuit response. Finally, a number of application-oriented examples are presented and discussed.

We begin our discussion by recalling that in Chapter 6 we found that capacitors and inductors were capable of storing electric energy. In the case of a charged capacitor, the energy is stored in the electric field that exists between the positively and negatively charged plates. This stored energy can be released if a circuit is somehow connected across the capacitor that provides a path through which the negative charges move to the positive charges. As we know, this movement of charge constitutes a current. The rate at which the energy is discharged is a direct function of the parameters in the circuit that is connected across the capacitor's plates.

As an example, consider the flash circuit in a camera. Recall that the operation of the flash circuit, from a user standpoint, involves depressing the push button on the camera that triggers both the shutter and the flash and then waiting a few seconds before repeating the process to take the next picture. This operation can be modeled using the circuit in Fig. 7.1a. The voltage source and resistor  $R_S$  model the batteries that power the camera and flash. The capacitor models the energy storage, the switch models the push button, and finally the resistor  $R$  models the xenon flash lamp. Thus, if the capacitor is charged, when the switch is closed, the capacitor voltage drops and energy is released through the xenon lamp, producing the flash. In practice this energy release takes about a millisecond, and the discharge time is a function of the elements in the circuit. When the push button is released and the switch is then opened, the battery begins to recharge the capacitor. Once again, the time required to charge the capacitor is a function of the circuit elements. The discharge and charge cycles are graphically illustrated in Fig. 7.1b. Although the discharge time is very fast, it is not instantaneous. To provide further insight into this phenomenon, consider what

**Figure 7.1**

Diagrams used to describe a camera's flash circuit.



we might call a *free-body diagram* of the right half of the network in Fig. 7.1a, as shown in Fig. 7.1c (that is, a charged capacitor that is discharged through a resistor). When the switch is closed, KCL for the circuit is

$$C \frac{dv_C(t)}{dt} + \frac{v_C(t)}{R} = 0$$

or

$$\frac{dv_C(t)}{dt} + \frac{1}{RC} v_C(t) = 0$$

In the next section we will demonstrate that the solution of this equation is

$$v_C(t) = V_o e^{-t/RC}$$

Note that this function is a decaying exponential and the rate at which it decays is a function of the values of  $R$  and  $C$ . The product  $RC$  is a very important parameter, and we will give it a special name in the following discussions.

## 7.2

### First-Order Circuits

**GENERAL FORM OF THE RESPONSE EQUATIONS** In our study of first-order transient circuits we will show that the solution of these circuits (i.e., finding a voltage or current) requires us to solve a first-order differential equation of the form

$$\frac{dx(t)}{dt} + ax(t) = f(t) \tag{7.1}$$

Although a number of techniques may be used for solving an equation of this type, we will obtain a general solution that we will then employ in two different approaches to transient analysis.

A fundamental theorem of differential equations states that if  $x(t) = x_p(t)$  is any solution to Eq. (7.1), and  $x(t) = x_c(t)$  is any solution to the homogeneous equation

$$\frac{dx(t)}{dt} + ax(t) = 0 \tag{7.2}$$

then

$$x(t) = x_p(t) + x_c(t) \quad 7.3$$

is a solution to the original Eq. (7.1). The term  $x_p(t)$  is called *the particular integral solution*, or forced response, and  $x_c(t)$  is called the *complementary solution*, or natural response.

At the present time we confine ourselves to the situation in which  $f(t) = A$  (i.e., some constant). The general solution of the differential equation then consists of two parts that are obtained by solving the two equations

$$\frac{dx_p(t)}{dt} + ax_p(t) = A \quad 7.4$$

$$\frac{dx_c(t)}{dt} + ax_c(t) = 0 \quad 7.5$$

Since the right-hand side of Eq. (7.4) is a constant, it is reasonable to assume that the solution  $x_p(t)$  must also be a constant. Therefore, we assume that

$$x_p(t) = K_1 \quad 7.6$$

Substituting this constant into Eq. (7.4) yields

$$K_1 = \frac{A}{a} \quad 7.7$$

Examining Eq. (7.5), we note that

$$\frac{dx_c(t)/dt}{x_c(t)} = -a \quad 7.8$$

This equation is equivalent to

$$\frac{d}{dt} [\ln x_c(t)] = -a$$

Hence,

$$\ln x_c(t) = -at + c$$

and therefore,

$$x_c(t) = K_2 e^{-at} \quad 7.9$$

Thus, a solution of Eq. (7.1) is

$$\begin{aligned} x(t) &= x_p(t) + x_c(t) \\ &= \frac{A}{a} + K_2 e^{-at} \end{aligned} \quad 7.10$$

The constant  $K_2$  can be found if the value of the independent variable  $x(t)$  is known at one instant of time.

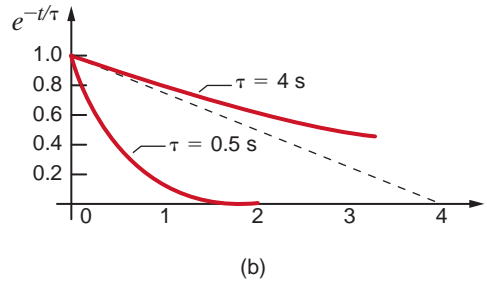
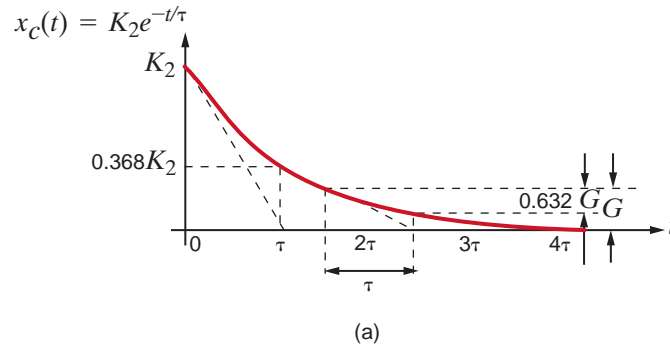
Eq. (7.10) can be expressed in general in the form

$$x(t) = K_1 + K_2 e^{-t/\tau} \quad 7.11$$

Once the solution in Eq. (7.11) is obtained, certain elements of the equation are given names that are commonly employed in electrical engineering. For example, the term  $K_1$  is referred to as the *steady-state solution*: the value of the variable  $x(t)$  as  $t \rightarrow \infty$  when the second term becomes negligible. The constant  $\tau$  is called the *time constant* of the circuit. Note that the second term in Eq. (7.11) is a decaying exponential that has a value, if  $\tau > 0$ , of  $K_2$  for  $t = 0$  and a value of 0 for  $t = \infty$ . The rate at which this exponential decays is determined by the time constant  $\tau$ . A graphical picture of this effect is shown in Fig. 7.2a. As can be seen from the figure, the value of  $x_c(t)$  has fallen from  $K_2$  to a value of  $0.368K_2$  in one time constant, a drop of 63.2%. In two time constants the value of  $x_c(t)$  has fallen to  $0.135K_2$ ,

**Figure 7.2**

Time-constant illustrations.



a drop of 63.2% from the value at time  $t = \tau$ . This means that the gap between a point on the curve and the final value of the curve is closed by 63.2% each time constant. Finally, after five time constants,  $x_c(t) = 0.0067K_2$ , which is less than 1%.

An interesting property of the exponential function shown in Fig. 7.2a is that the initial slope of the curve intersects the time axis at a value of  $t = \tau$ . In fact, we can take any point on the curve, not just the initial value, and find the time constant by finding the time required to close the gap by 63.2%. Finally, the difference between a small time constant (i.e., fast response) and a large time constant (i.e., slow response) is shown in Fig. 7.2b. These curves indicate that if the circuit has a small time constant, it settles down quickly to a steady-state value. Conversely, if the time constant is large, more time is required for the circuit to settle down or reach steady state. In any case, note that the circuit response essentially reaches steady state within five time constants (i.e.,  $5\tau$ ).

Note that the previous discussion has been very general in that no particular form of the circuit has been assumed—except that it results in a first-order differential equation.

### ANALYSIS TECHNIQUES

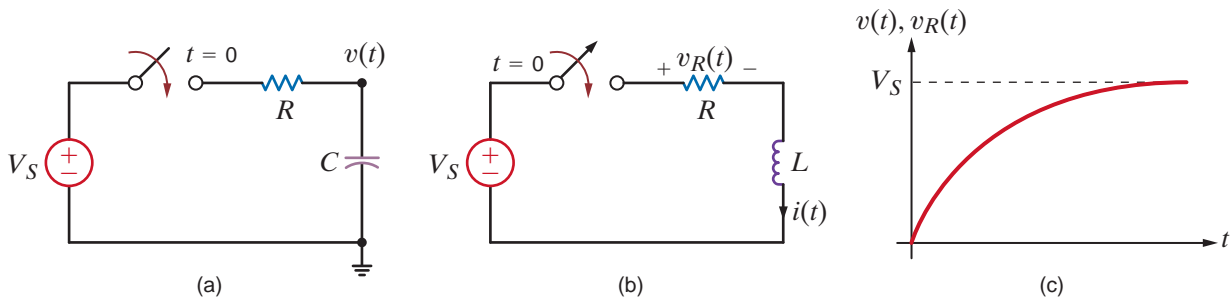
**The Differential Equation Approach** Eq. (7.11) defines the general form of the solution of first-order transient circuits; that is, it represents the solution of the differential equation that describes an unknown current or voltage *anywhere in the network*. One of the ways that we can arrive at this solution is to solve the equations that describe the network behavior using what is often called the *state-variable approach*. In this technique we write the equation for the voltage across the capacitor and/or the equation for the current through the inductor. Recall from Chapter 6 that these quantities cannot change instantaneously. Let us first illustrate this technique in the general sense and then examine two specific examples.

Consider the circuit shown in Fig. 7.3a. At time  $t = 0$ , the switch closes. The KCL equation that describes the capacitor voltage for time  $t > 0$  is

$$C \frac{dv(t)}{dt} + \frac{v(t) - V_S}{R} = 0$$

or

$$\frac{dv(t)}{dt} + \frac{v(t)}{RC} = \frac{V_S}{RC}$$

**Figure 7.3**

(a)  $RC$  circuit, (b)  $RL$  circuit, (c) plot of the capacitor voltage in (a) and resistor voltage in (b).

From our previous development, we assume that the solution of this first-order differential equation is of the form

$$v(t) = K_1 + K_2 e^{-t/\tau}$$

Substituting this solution into the differential equation yields

$$-\frac{K_2}{\tau} e^{-t/\tau} + \frac{K_1}{RC} + \frac{K_2}{RC} e^{-t/\tau} = \frac{V_S}{RC}$$

Equating the constant and exponential terms, we obtain

$$\begin{aligned} K_1 &= V_S \\ \tau &= RC \end{aligned}$$

Therefore,

$$v(t) = V_S + K_2 e^{-t/RC}$$

where  $V_S$  is the steady-state value and  $RC$  is the network's time constant.  $K_2$  is determined by the initial condition of the capacitor. For example, if the capacitor is initially uncharged (that is, the voltage across the capacitor is zero at  $t = 0$ ), then

$$0 = V_S + K_2$$

or

$$K_2 = -V_S$$

Hence, the complete solution for the voltage  $v(t)$  is

$$v(t) = V_S - V_S e^{-t/RC}$$

The circuit in Fig. 7.3b can be examined in a similar manner. The KVL equation that describes the inductor current for  $t > 0$  is

$$L \frac{di(t)}{dt} + Ri(t) = V_S$$

A development identical to that just used yields

$$i(t) = \frac{V_S}{R} + K_2 e^{-\left(\frac{R}{L}\right)t}$$

where  $V_S/R$  is the steady-state value and  $L/R$  is the circuit's time constant. If there is no initial current in the inductor, then at  $t = 0$

$$0 = \frac{V_S}{R} + K_2$$

and

$$K_2 = -\frac{V_S}{R}$$

Hence,

$$i(t) = \frac{V_S}{R} - \frac{V_S}{R} e^{-\frac{R}{L}t}$$

is the complete solution. Note that if we wish to calculate the voltage across the resistor, then

$$\begin{aligned} v_R(t) &= Ri(t) \\ &= V_S \left(1 - e^{-\frac{R}{L}t}\right) \end{aligned}$$

Therefore, we find that the voltage across the capacitor in the  $RC$  circuit and the voltage across the resistor in the  $RL$  circuit have the same general form. A plot of these functions is shown in Fig. 7.3c.

### EXAMPLE 7.1

Consider the circuit shown in Fig. 7.4a. Assuming that the switch has been in position 1 for a long time, at time  $t = 0$  the switch is moved to position 2. We wish to calculate the current  $i(t)$  for  $t > 0$ .

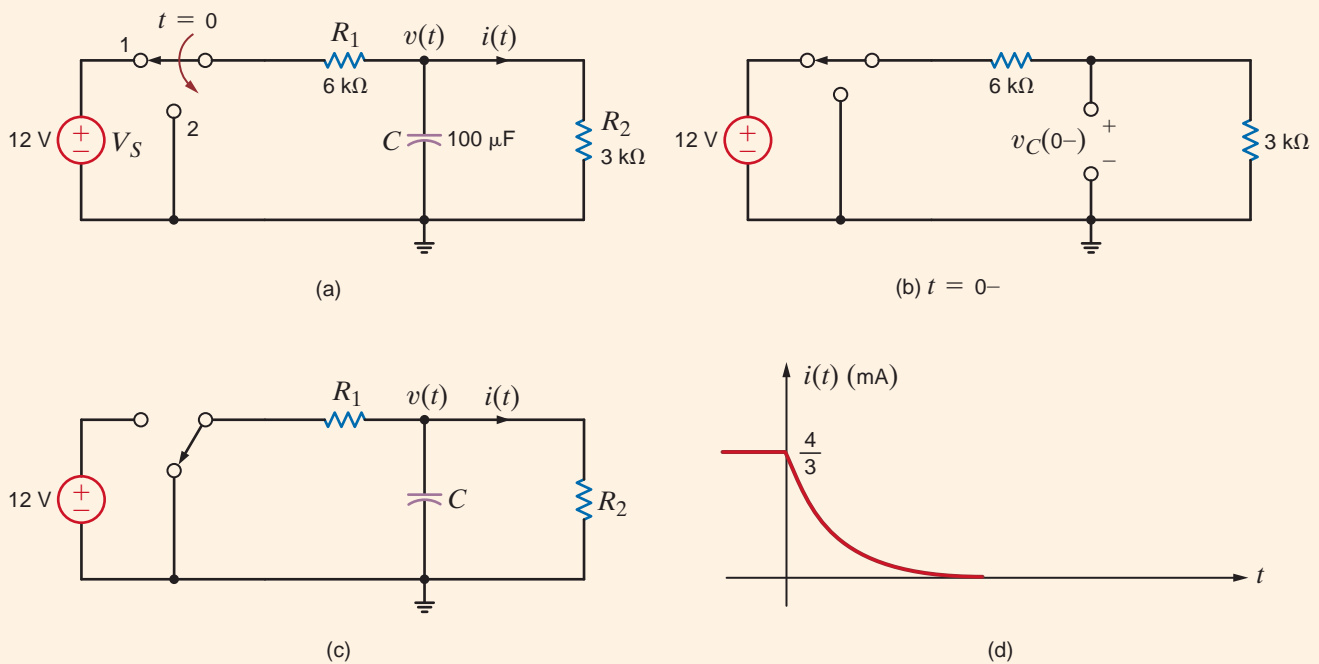


Figure 7.4

Analysis of  $RC$  circuits.

**SOLUTION** At  $t = 0^-$  the capacitor is fully charged and conducts no current since the capacitor acts like an open circuit to dc. The initial voltage across the capacitor can be found using voltage division. As shown in Fig. 7.4b,

$$v_C(0^-) = 12 \left( \frac{3\text{k}}{6\text{k} + 3\text{k}} \right) = 4 \text{ V}$$

The network for  $t > 0$  is shown in Fig. 7.4c. The KCL equation for the voltage across the capacitor is

$$\frac{v(t)}{R_1} + C \frac{dv(t)}{dt} + \frac{v(t)}{R_2} = 0$$

Using the component values, the equation becomes

$$\frac{dv(t)}{dt} + 5v(t) = 0$$

The form of the solution to this homogeneous equation is

$$v(t) = K_2 e^{-t/\tau}$$

If we substitute this solution into the differential equation, we find that  $\tau = 0.2$  s. Thus,

$$v(t) = K_2 e^{-t/0.2} \text{ V}$$

Using the initial condition  $v_C(0^-) = v_C(0^+) = 4$  V, we find that the complete solution is

$$v(t) = 4e^{-t/0.2} \text{ V}$$

Then  $i(t)$  is simply

$$i(t) = \frac{v(t)}{R_2}$$

or

$$i(t) = \frac{4}{3} e^{-t/0.2} \text{ mA}$$

The switch in the network in Fig. 7.5a opens at  $t = 0$ . Let us find the output voltage  $v_o(t)$  for  $t > 0$ .

At  $t = 0^-$  the circuit is in steady state and the inductor acts like a short circuit. The initial current through the inductor can be found in many ways; however, we will form a Thévenin equivalent for the part of the network to the left of the inductor, as shown in Fig. 7.5b. From this network we find that  $I_1 = 4$  A and  $V_{oc} = 4$  V. In addition,  $R_{Th} = 1 \Omega$ . Hence,  $i_L(0^-)$  obtained from Fig. 7.5c is  $i_L(0^-) = 4/3$  A.

The network for  $t > 0$  is shown in Fig. 7.5d. Note that the 4-V independent source and the 2-ohm resistor in series with it no longer have any impact on the resulting circuit. The KVL equation for the circuit is

$$-V_{S_1} + R_1 i(t) + L \frac{di(t)}{dt} + R_3 i(t) = 0$$

which with the component values reduces to

$$\frac{di(t)}{dt} + 2i(t) = 6$$

The solution to this equation is of the form

$$i(t) = K_1 + K_2 e^{-t/\tau}$$

which when substituted into the differential equation yields

$$K_1 = 3$$

$$\tau = 1/2$$

Therefore,

$$i(t) = (3 + K_2 e^{-2t}) \text{ A}$$

Evaluating this function at the initial condition, which is

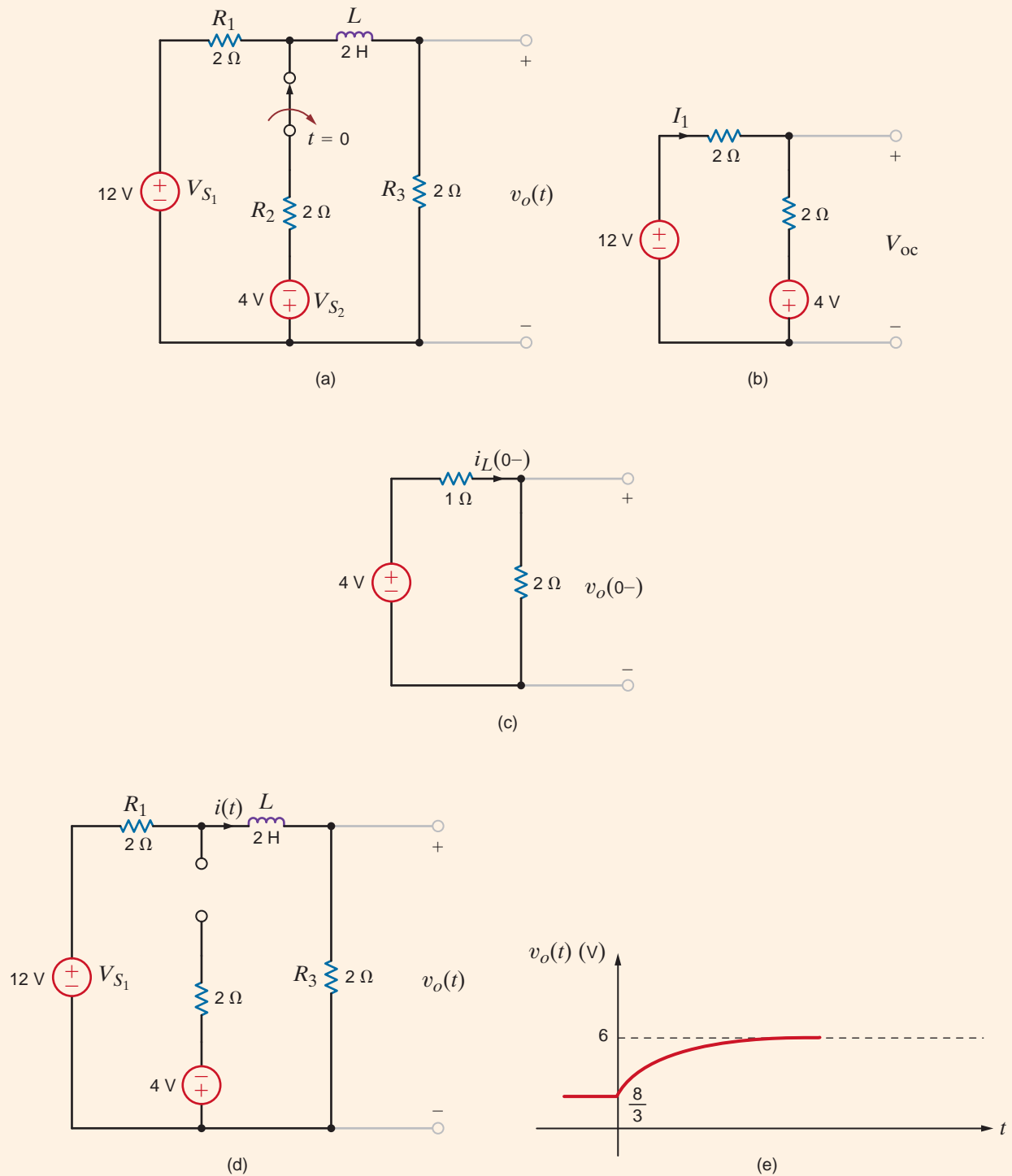
$$i_L(0^-) = i_L(0^+) = i(0) = 4/3 \text{ A}$$

we find that

$$K_2 = \frac{-5}{3}$$

## EXAMPLE 7.2

### SOLUTION



**Figure 7.5**  
Analysis of an  $RL$  circuit.

Hence,

$$i(t) = \left( 3 - \frac{5}{3} e^{-2t} \right) \text{ A}$$

and then

$$v_o(t) = 6 - \frac{10}{3} e^{-2t} \text{ V}$$

A plot of the voltage  $v_o(t)$  is shown in Fig. 7.5e.



## Learning Assessments

**E7.1** Find  $v_C(t)$  for  $t > 0$  in the circuit shown in Fig. E7.1.

**ANSWER:**  
 $v_C(t) = 8e^{-t/0.6}$  V.

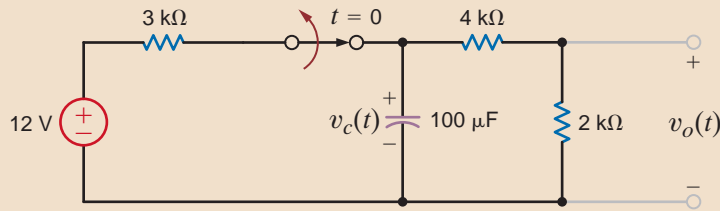


Figure E7.1

**E7.2** Use the differential equation approach to find  $v_o(t)$  for  $t > 0$  in Fig. E7.2. Plot the response.

**ANSWER:**  $v_o(t) = 12 - 5e^{-t/0.015}$  V.

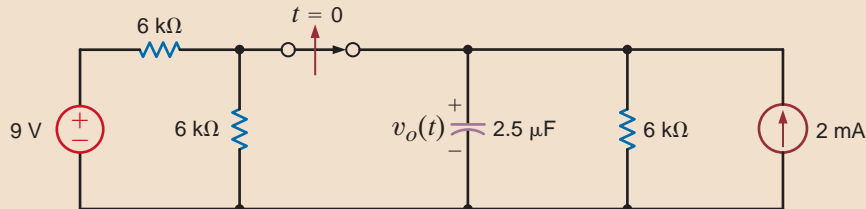


Figure E7.2

**E7.3** In the circuit shown in Fig. E7.3, the switch opens at  $t = 0$ . Find  $i_1(t)$  for  $t > 0$ .

**ANSWER:**  
 $i_1(t) = 1e^{-9t}$  A.

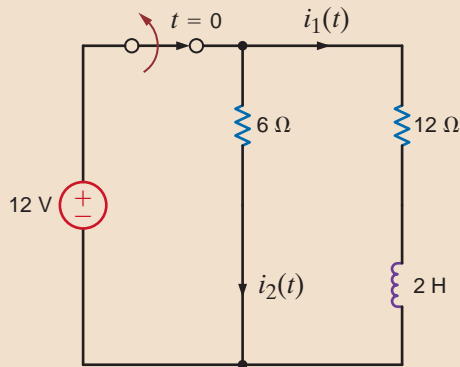


Figure E7.3

**E7.4** Use the differential equation approach to find  $i(t)$  for  $t > 0$  in Fig. E7.4.

**ANSWER:**  $i(t) = -2 + 6e^{-t/5 \times 10^{-6}}$  mA.

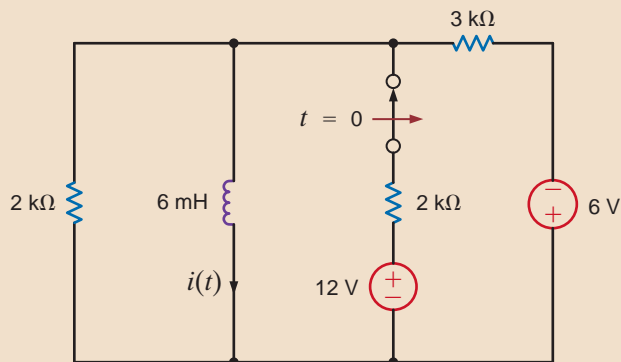


Figure E7.4

**The Step-by-Step Approach** In the previous analysis technique, we derived the differential equation for the capacitor voltage or inductor current, solved the differential equation, and used the solution to find the unknown variable in the network. In the very methodical technique that we will now describe, we will use the fact that Eq. (7.11) is the form of the solution and we will employ circuit analysis to determine the constants  $K_1$ ,  $K_2$ , and  $\tau$ .

From Eq. (7.11) we note that as  $t \rightarrow \infty$ ,  $e^{-at} \rightarrow 0$  and  $x(t) = K_1$ . Therefore, if the circuit is solved for the variable  $x(t)$  in steady state (i.e.,  $t \rightarrow \infty$ ) with the capacitor replaced by an open circuit [ $v$  is constant and therefore  $i = C(dv/dt) = 0$ ] or the inductor replaced by a short circuit [ $i$  is constant and therefore  $v = L(di/dt) = 0$ ], then the variable  $x(t) = K_1$ . Note that since the capacitor or inductor has been removed, the circuit is a dc circuit with constant sources and resistors, and therefore only dc analysis is required in the steady-state solution.

The constant  $K_2$  in Eq. (7.11) can also be obtained via the solution of a dc circuit in which a capacitor is replaced by a voltage source or an inductor is replaced by a current source. The value of the voltage source for the capacitor or the current source for the inductor is a known value at one instant of time. In general, we will use the initial condition value since it is generally the one known, but the value at any instant could be used. This value can be obtained in numerous ways and is often specified as input data in a statement of the problem. However, a more likely situation is one in which a switch is thrown in the circuit and the initial value of the capacitor voltage or inductor current is determined from the previous circuit (i.e., the circuit before the switch is thrown). It is normally assumed that the previous circuit has reached steady state, and therefore the voltage across the capacitor or the current through the inductor can be found in exactly the same manner as was used to find  $K_1$ .

Finally, the value of the time constant can be found by determining the Thévenin equivalent resistance at the terminals of the storage element. Then  $\tau = R_{Th}C$  for an  $RC$  circuit, and  $\tau = L/R_{Th}$  for an  $RL$  circuit.

Let us now reiterate this procedure in a step-by-step fashion.

## Problem-Solving Strategy

### Using the Step-by-Step Approach

- Step 1.** We assume a solution for the variable  $x(t)$  of the form  $x(t) = K_1 + K_2e^{-t/\tau}$ .
- Step 2.** Assuming that the original circuit has reached steady state before a switch was thrown (thereby producing a new circuit), draw this previous circuit with the capacitor replaced by an open circuit or the inductor replaced by a short circuit. Solve for the voltage across the capacitor,  $v_C(0^-)$ , or the current through the inductor,  $i_L(0^-)$ , prior to switch action.
- Step 3.** Recall from Chapter 6 that voltage across a capacitor and the current flowing through an inductor cannot change in zero time. Draw the circuit valid for  $t = 0^+$  with the switches in their new positions. Replace a capacitor with a voltage source  $v_C(0^+) = v_C(0^-)$  or an inductor with a current source of value  $i_L(0^+) = i_L(0^-)$ . Solve for the initial value of the variable  $x(0^+)$ .
- Step 4.** Assuming that steady state has been reached after the switches are thrown, draw the equivalent circuit, valid for  $t > 5\tau$ , by replacing the capacitor by an open circuit or the inductor by a short circuit. Solve for the steady-state value of the variable

$$x(t)|_{t>5\tau} \doteq x(\infty)$$

- Step 5.** Since the time constant for all voltages and currents in the circuit will be the same, it can be obtained by reducing the entire circuit to a simple series circuit containing a voltage source, resistor, and a storage element (i.e., capacitor or inductor) by forming a simple Thévenin equivalent circuit at the terminals of

the storage element. This Thévenin equivalent circuit is obtained by looking into the circuit from the terminals of the storage element. The time constant for a circuit containing a capacitor is  $\tau = R_{Th} C$ , and for a circuit containing an inductor it is  $\tau = L/R_{Th}$ .

**Step 6.** Using the results of steps 3, 4, and 5, we can evaluate the constants in step 1 as

$$\begin{aligned}x(0+) &= K_1 + K_2 \\x(\infty) &= K_1\end{aligned}$$

Therefore,  $K_1 = x(\infty)$ ,  $K_2 = x(0+) - x(\infty)$ , and hence the solution is

$$x(t) = x(\infty) + [x(0+) - x(\infty)]e^{-t/\tau}$$

Keep in mind that this solution form applies only to a first-order circuit having dc sources. If the sources are not dc, the forced response will be different. Generally, the forced response is of the same form as the forcing functions (sources) and their derivatives.

Consider the circuit shown in Fig. 7.6a. The circuit is in steady state prior to time  $t = 0$ , when the switch is closed. Let us calculate the current  $i(t)$  for  $t > 0$ .

## EXAMPLE 7.3

### SOLUTION

**Step 1.**  $i(t)$  is of the form  $K_1 + K_2 e^{-t/\tau}$ .

**Step 2.** The initial voltage across the capacitor is calculated from Fig. 7.6b as

$$\begin{aligned}v_c(0-) &= 36 - (2)(2) \\ &= 32 \text{ V}\end{aligned}$$

**Step 3.** The new circuit, valid only for  $t = 0+$ , is shown in Fig. 7.6c. The value of the voltage source that replaces the capacitor is  $v_c(0-) = v_c(0+) = 32 \text{ V}$ . Hence,

$$\begin{aligned}i(0+) &= \frac{32}{6\text{k}} \\ &= \frac{16}{3} \text{ mA}\end{aligned}$$

**Step 4.** The equivalent circuit, valid for  $t > 5\tau$ , is shown in Fig. 7.6d. The current  $i(\infty)$  caused by the 36-V source is

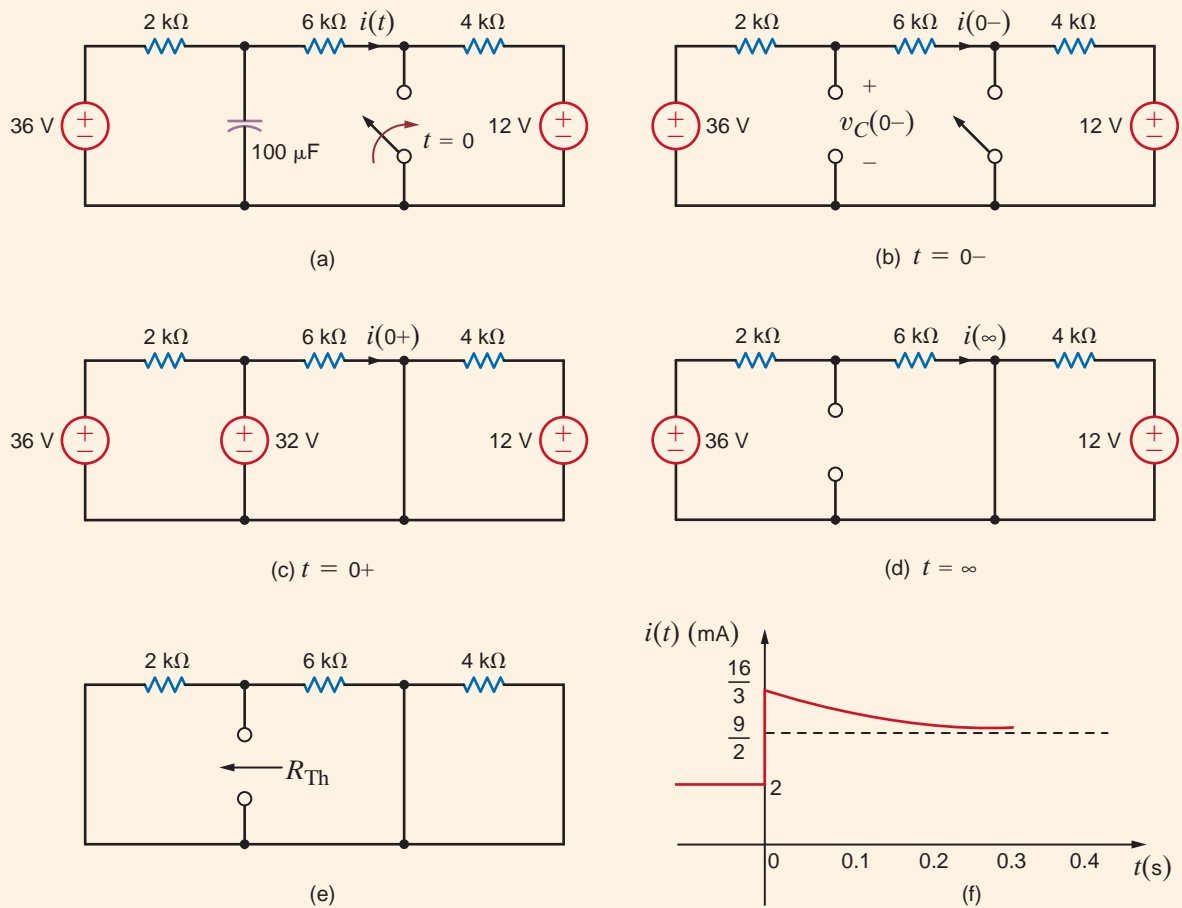
$$\begin{aligned}i(\infty) &= \frac{36}{2\text{k} + 6\text{k}} \\ &= \frac{9}{2} \text{ mA}\end{aligned}$$

**Step 5.** The Thévenin equivalent resistance, obtained by looking into the open-circuit terminals of the capacitor in Fig. 7.6e, is

$$R_{Th} = \frac{(2\text{k})(6\text{k})}{2\text{k} + 6\text{k}} = \frac{3}{2} \text{ k}\Omega$$

Therefore, the circuit time constant is

$$\begin{aligned}\tau &= R_{Th}C \\ &= \left(\frac{3}{2}\right)(10^3)(100)(10^{-6}) \\ &= 0.15 \text{ s}\end{aligned}$$



**Figure 7.6** Analysis of an RC transient circuit with a constant forcing function.

### Step 6.

$$K_1 = i(\infty) = \frac{9}{2} \text{ mA}$$

$$\begin{aligned} K_2 &= i(0^+) - i(\infty) = i(0^+) - K_1 \\ &= \frac{16}{3} - \frac{9}{2} \\ &= \frac{5}{6} \text{ mA} \end{aligned}$$

Therefore,

$$i(t) = \frac{36}{8} + \frac{5}{6} e^{-t/0.15} \text{ mA}$$

The plot is shown in Fig. 7.7 and can be compared to the sketch in Fig. 7.6f. Examination of Fig. 7.6f indicates once again that although the voltage across the capacitor is continuous at  $t = 0$ , the current  $i(t)$  in the 6-k $\Omega$  resistor jumps at  $t = 0$  from 2 mA to 5 1/3 mA, and finally decays to 4 1/2 mA.

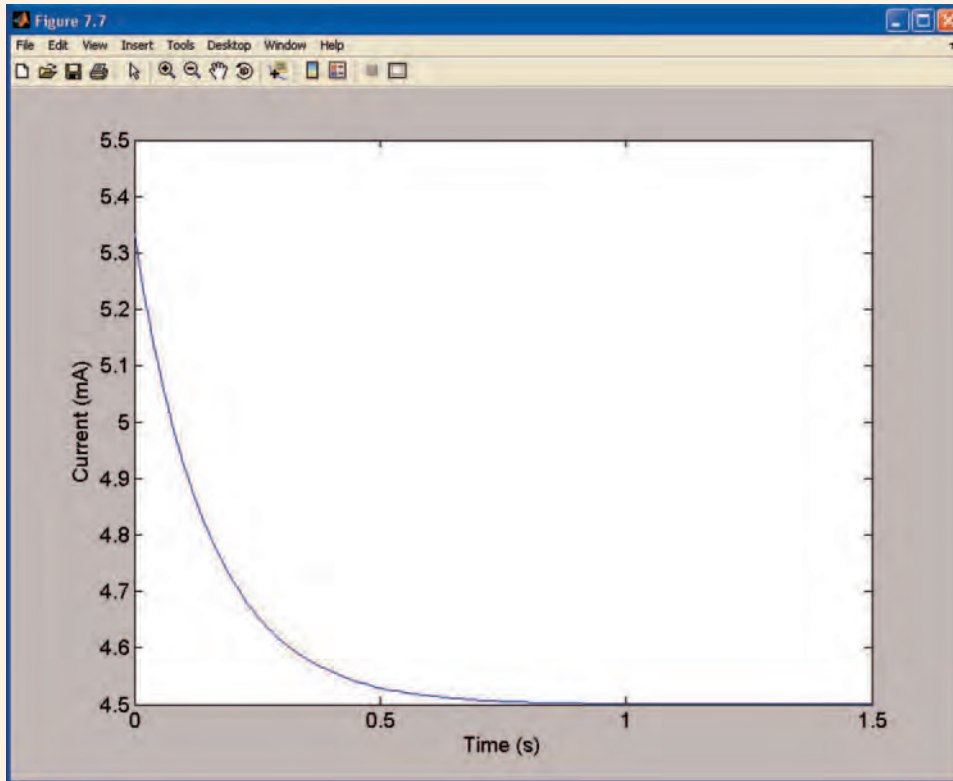


Figure 7.7

Plot for Example 7.3.

The circuit shown in Fig. 7.8a is assumed to have been in a steady-state condition prior to switch closure at  $t = 0$ . We wish to calculate the voltage  $v(t)$  for  $t > 0$ .

**Step 1.**  $v(t)$  is of the form  $K_1 + K_2e^{-t/\tau}$ .

**Step 2.** In Fig. 7.8b we see that

$$\begin{aligned} i_L(0^-) &= \frac{24}{4 + \frac{(6)(3)}{6+3}} \left( \frac{6}{6+3} \right) \\ &= \frac{8}{3} \text{ A} \end{aligned}$$

**Step 3.** The new circuit, valid only for  $t = 0+$ , is shown in Fig. 7.8c, which is equivalent to the circuit shown in Fig. 7.8d. The value of the current source that replaces the inductor is  $i_L(0^-) = i_L(0^+) = 8/3 \text{ A}$ . The node voltage  $v_1(0^+)$  can be determined from the circuit in Fig. 7.8d using a single-node equation, and  $v(0^+)$  is equal to the difference between the source voltage and  $v_1(0^+)$ . The equation for  $v_1(0^+)$  is

$$\frac{v_1(0^+) - 24}{4} + \frac{v_1(0^+)}{6} + \frac{8}{3} + \frac{v_1(0^+)}{12} = 0$$

or

$$v_1(0^+) = \frac{20}{3} \text{ V}$$

**EXAMPLE**  
**SOLUTION 7.4**

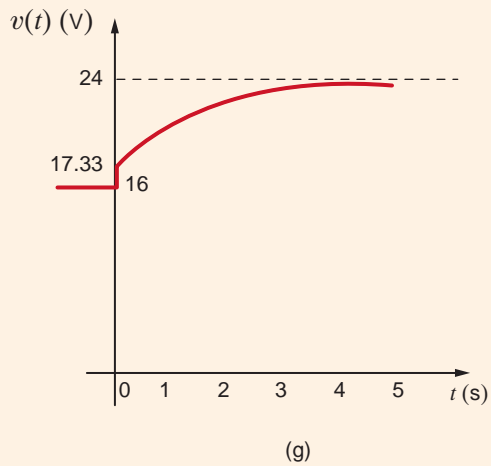
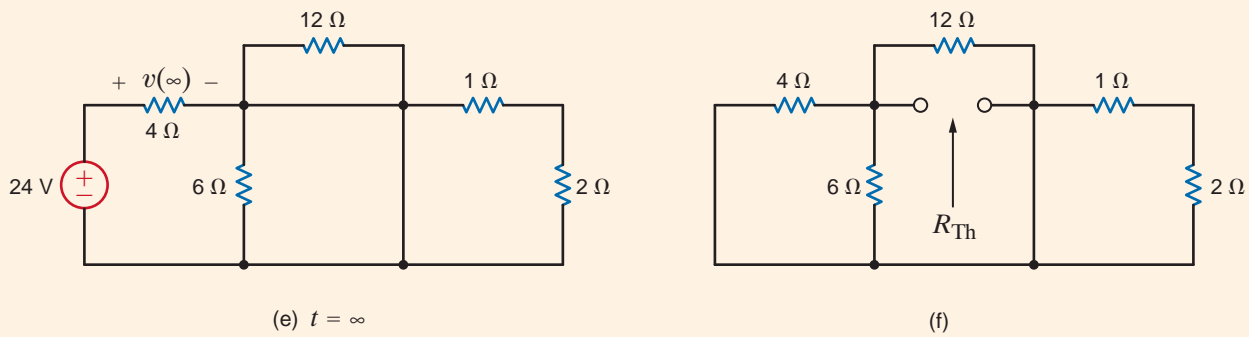
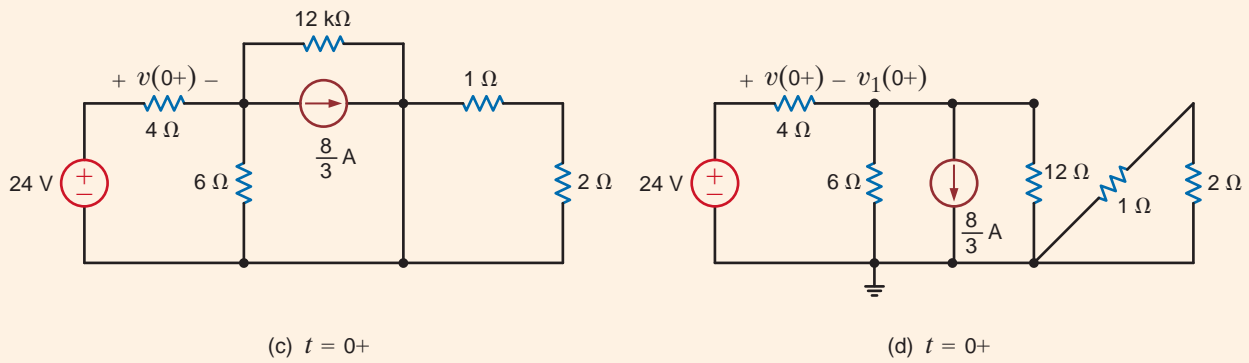
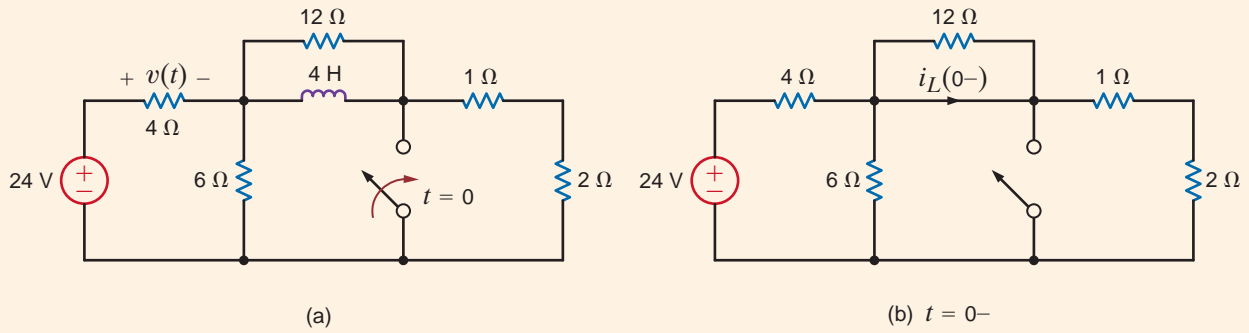


Figure 7.8 Analysis of an RL transient circuit with a constant forcing function.

Then

$$\begin{aligned} v(0+) &= 24 - v_1(0+) \\ &= \frac{52}{3} \text{ V} \end{aligned}$$

**Step 4.** The equivalent circuit for the steady-state condition after switch closure is given in Fig. 7.8e. Note that the 6-, 12-, 1-, and 2- $\Omega$  resistors are shorted, and therefore  $v(\infty) = 24 \text{ V}$ .

**Step 5.** The Thévenin equivalent resistance is found by looking into the circuit from the inductor terminals. This circuit is shown in Fig. 7.8f. Note carefully that  $R_{Th}$  is equal to the 4-, 6-, and 12- $\Omega$  resistors in parallel. Therefore,  $R_{Th} = 2 \Omega$ , and the circuit time constant is

$$\tau = \frac{L}{R_{Th}} = \frac{4}{2} = 2 \text{ s}$$

**Step 6.** From the previous analysis we find that

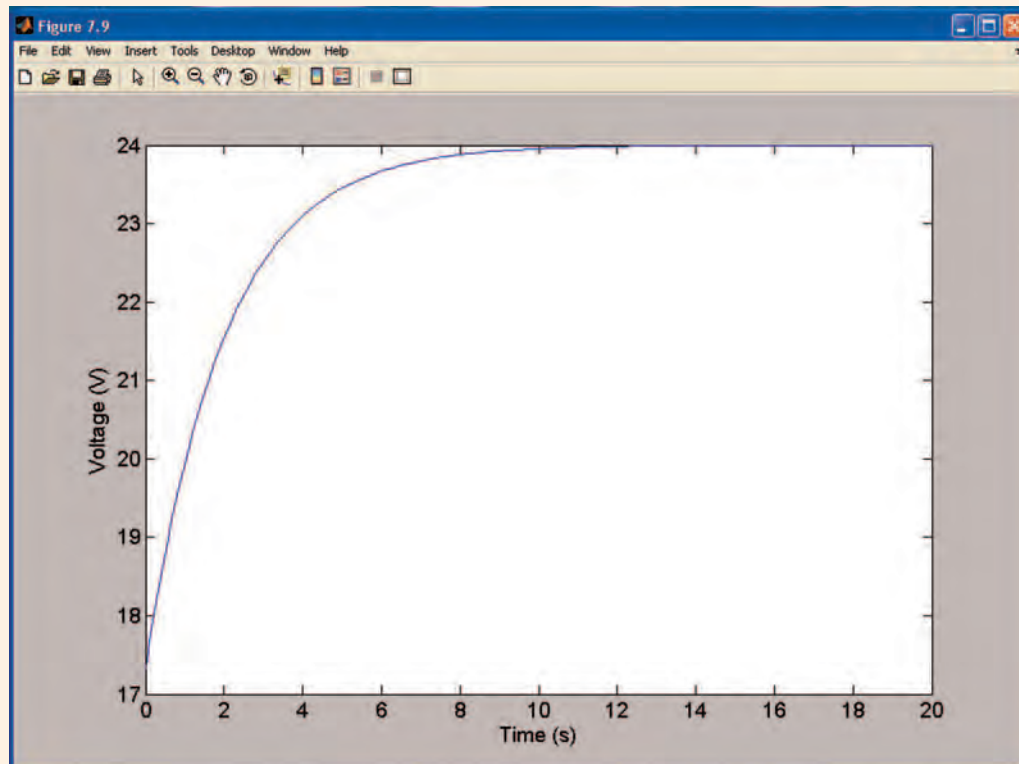
$$\begin{aligned} K_1 &= v(\infty) = 24 \\ K_2 &= v(0+) - v(\infty) = -\frac{20}{3} \end{aligned}$$

and hence that

$$v(t) = 24 - \frac{20}{3} e^{-t/2} \text{ V}$$

From Fig. 7.8b we see that the value of  $v(t)$  before switch closure is 16 V. This value jumps to 17.33 V at  $t = 0$ .

A plot of this function for  $t > 0$  is shown in Fig. 7.9.



**Figure 7.9**

Plot for Example 7.4.

## Learning Assessments

**E7.5** Consider the network in Fig. E7.5. The switch opens at  $t = 0$ . Find  $v_o(t)$  for  $t > 0$ .

**ANSWER:**

$$v_o(t) = \frac{24}{5} + \frac{1}{5} e^{-(5/8)t} \text{ V.}$$

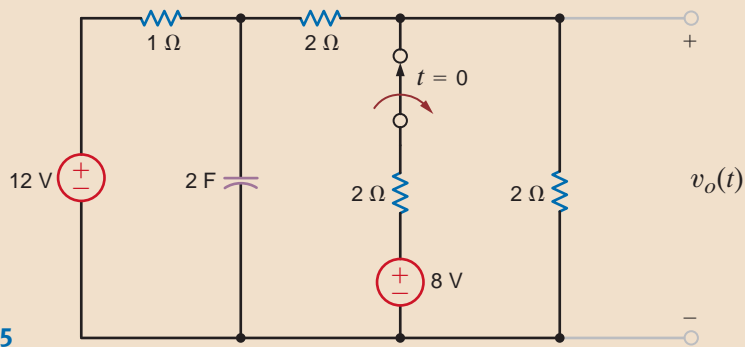


Figure E7.5

**E7.6** Consider the network in Fig. E7.6. If the switch opens at  $t = 0$ , find the output voltage  $v_o(t)$  for  $t > 0$ .

**ANSWER:**

$$v_o(t) = 6 - \frac{10}{3} e^{-2t} \text{ V.}$$

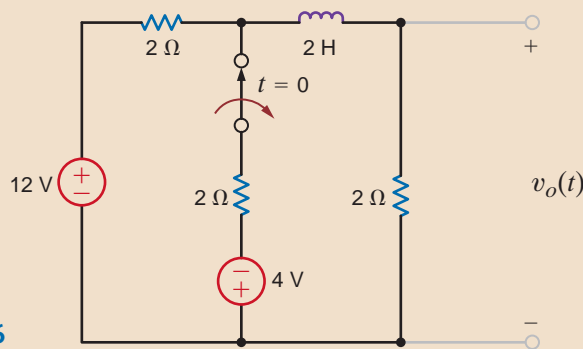


Figure E7.6

**E7.7** Find  $v_o(t)$  for  $t > 0$  in Fig. E7.7 using the step-by-step method.

**ANSWER:**

$$v_o(t) = -3.33 e^{-t/0.06} \text{ V.}$$

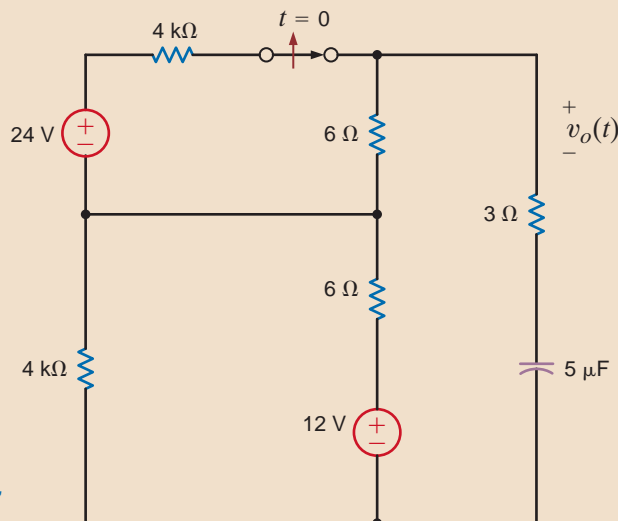


Figure E7.7



**E7.8** Find  $i_o(t)$  for  $t > 0$  Fig. E7.8 using the step-by-step method.

**ANSWER:**

$$i_o(t) = 2.1 - 0.6e^{-t/0.001} \text{ A.}$$

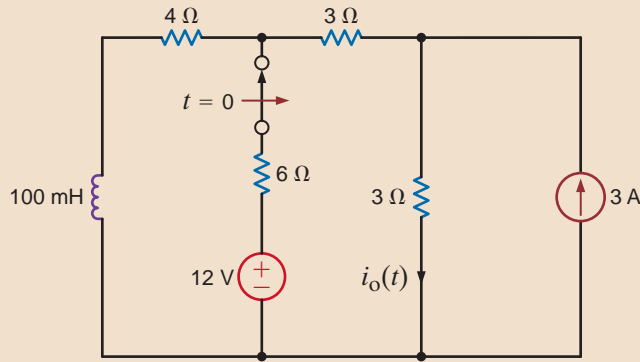


Figure E7.8

The circuit shown in Fig. 7.10a has reached steady state with the switch in position 1. At time  $t = 0$  the switch moves from position 1 to position 2. We want to calculate  $v_o(t)$  for  $t > 0$ .

## EXAMPLE 7.5

**Step 1.**  $v_o(t)$  is of the form  $K_1 + K_2e^{-t/\tau}$ .

**SOLUTION**

**Step 2.** Using the circuit in Fig. 7.10b, we can calculate  $i_L(0^-)$

$$i_A = \frac{12}{4} = 3 \text{ A}$$

Then

$$i_L(0^-) = \frac{12 + 2i_A}{6} = \frac{18}{6} = 3 \text{ A}$$

**Step 3.** The new circuit, valid only for  $t = 0^+$ , is shown in Fig. 7.10c. The value of the current source that replaces the inductor is  $i_L(0^-) = i_L(0^+) = 3 \text{ A}$ . Because of the current source

$$v_o(0^+) = (3)(6) = 18 \text{ V}$$

**Step 4.** The equivalent circuit, for the steady-state condition after switch closure, is given in Fig. 7.10d. Using the voltages and currents defined in the figure, we can compute  $v_o(\infty)$  in a variety of ways. For example, using node equations we can find  $v_o(\infty)$  from

$$\begin{aligned} \frac{v_B - 36}{2} + \frac{v_B}{4} + \frac{v_B + 2i'_A}{6} &= 0 \\ i'_A &= \frac{v_B}{4} \\ v_o(\infty) &= v_B + 2i'_A \end{aligned}$$

or, using loop equations,

$$\begin{aligned} 36 &= 2(i_1 + i_2) + 4i_1 \\ 36 &= 2(i_1 + i_2) + 6i_2 - 2i_1 \\ v_o(\infty) &= 6i_2 \end{aligned}$$

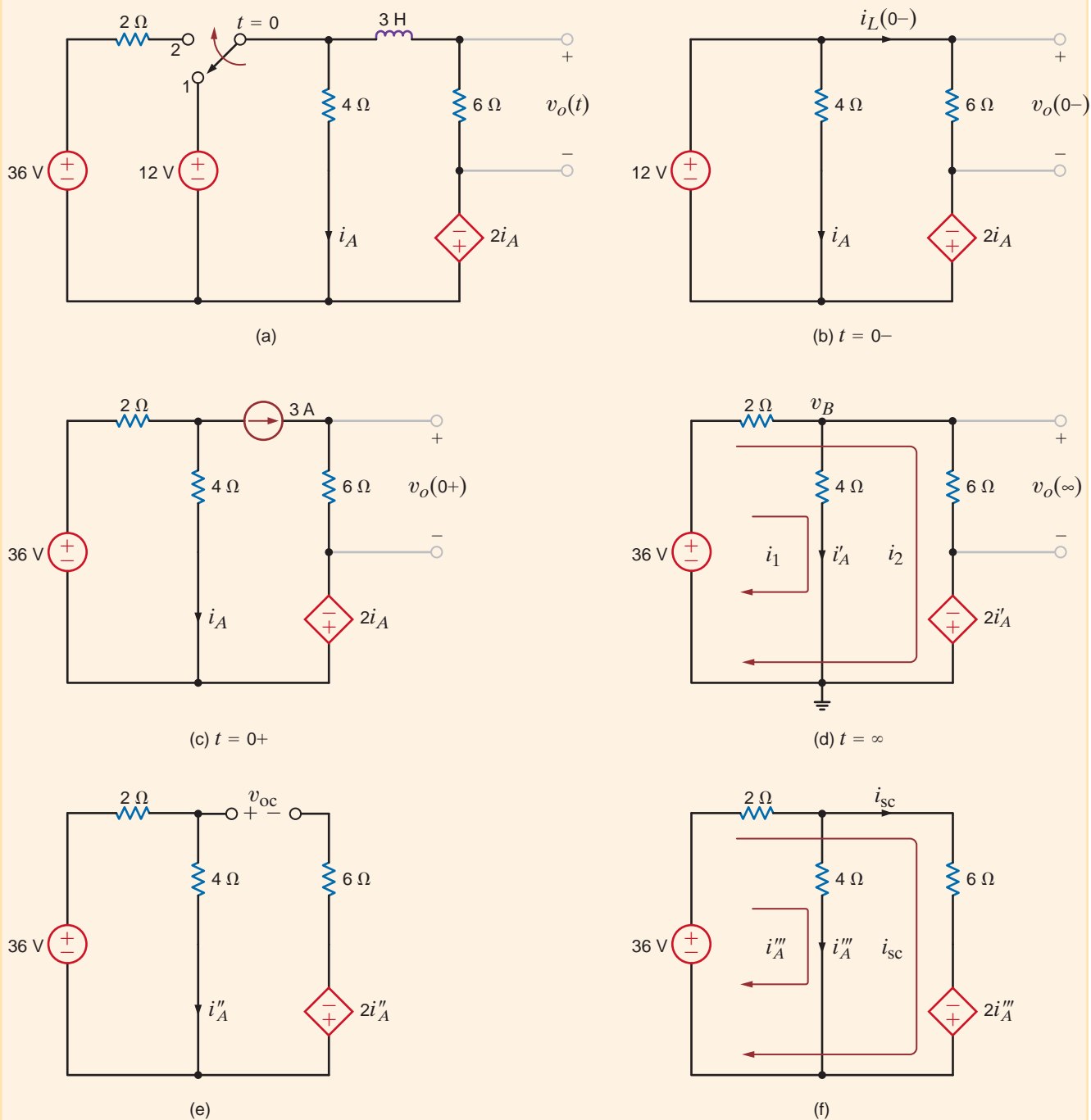
Using either approach, we find that  $v_o(\infty) = 27 \text{ V}$ .

**Step 5.** The Thévenin equivalent resistance can be obtained via  $v_{oc}$  and  $i_{sc}$  because of the presence of the dependent source. From Fig. 7.10e we note that

$$i_A'' = \frac{36}{2 + 4} = 6 \text{ A}$$

Therefore,

$$\begin{aligned} v_{oc} &= (4)(6) + 2(6) \\ &= 36 \text{ V} \end{aligned}$$



**Figure 7.10**

Analysis of an  $RL$  transient circuit containing a dependent source.

From Fig. 7.10f we can write the following loop equations:

$$36 = 2(i_A''' + i_{sc}) + 4i_A'''$$

$$36 = 2(i_A''' + i_{sc}) + 6i_{sc} - 2i_A'''$$

Solving these equations for  $i_{sc}$  yields

$$i_{sc} = \frac{9}{2} \text{ A}$$

Therefore,

$$R_{Th} = \frac{v_{oc}}{i_{sc}} = \frac{36}{9/2} = 8 \Omega$$

Hence, the circuit time constant is

$$\tau = \frac{L}{R_{Th}} = \frac{3}{8} \text{ s}$$

**Step 6.** Using the information just computed, we can derive the final equation for  $v_o(t)$ :

$$K_1 = v_o(\infty) = 27$$

$$K_2 = v_o(0+) - v_o(\infty) = 18 - 27 = -9$$

Therefore,

$$v_o(t) = 27 - 9e^{-t/(3/8)} \text{ V}$$

## Learning Assessments

**E7.9** If the switch in the network in Fig. E7.9 closes at  $t = 0$ , find  $v_o(t)$  for  $t > 0$ .

**ANSWER:**

$$v_o(t) = 24 + 36e^{-(t/12)} \text{ V.}$$

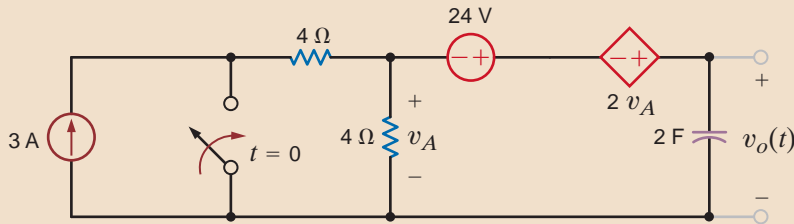


Figure E7.9

**E7.10** Find  $i_o(t)$  for  $t > 0$  in Fig. E7.10 using the step-by-step method.

**ANSWER:**

$$i_o(t) = 1.5 + 0.2143e^{-t/0.7} \text{ mA.}$$

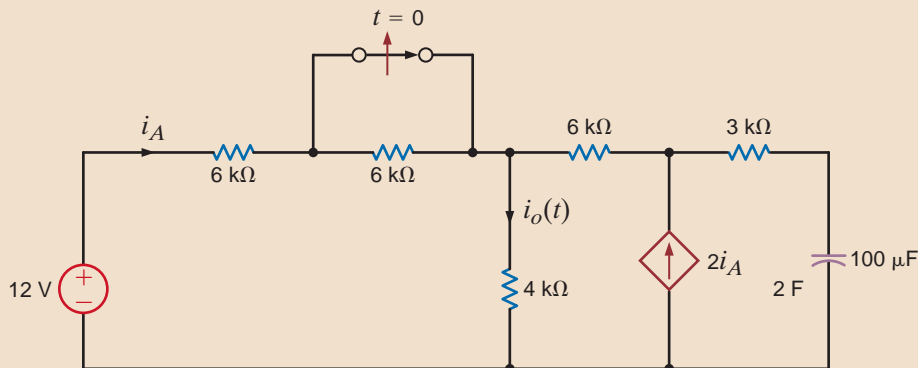


Figure E7.10

At this point, it is appropriate to state that not all switch action will always occur at time  $t = 0$ . It may occur at any time  $t_0$ . In this case the results of the step-by-step analysis yield the following equations:

$$x(t_0) = K_1 + K_2$$

$$x(\infty) = K_1$$

and

$$x(t) = x(\infty) + [x(t_0) - x(\infty)]e^{-(t-t_0)/\tau} \quad t > t_0$$

The function is essentially time-shifted by  $t_0$  seconds.

Finally, note that if more than one independent source is present in the network, we can simply employ superposition to obtain the total response.

**PULSE RESPONSE** Thus far we have examined networks in which a voltage or current source is suddenly applied. As a result of this sudden application of a source, voltages or currents in the circuit are forced to change abruptly. A forcing function whose value changes in a discontinuous manner or has a discontinuous derivative is called a *singular function*. Two such singular functions that are very important in circuit analysis are the unit impulse function and the unit step function. We will defer a discussion of the unit impulse function until a later chapter and concentrate on the unit step function.

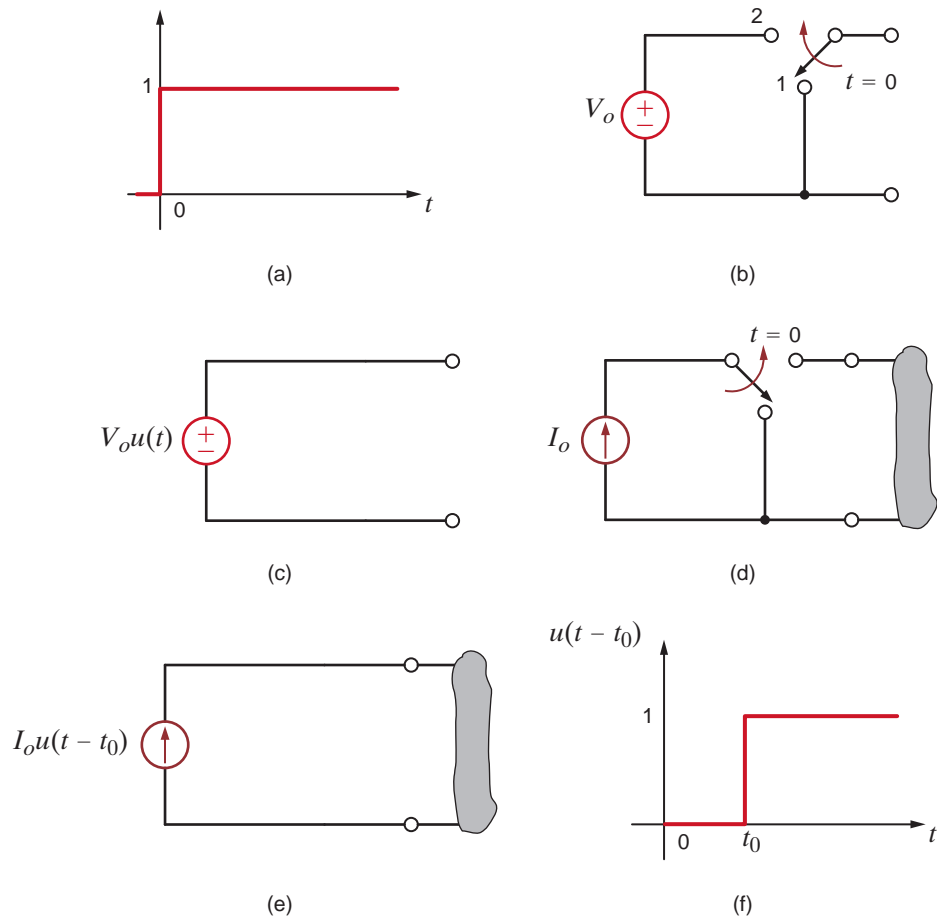
The *unit step function* is defined by the following mathematical relationship:

$$u(t) = \begin{cases} 0 & t < 0 \\ 1 & t > 0 \end{cases}$$

In other words, this function, which is dimensionless, is equal to zero for negative values of the argument and equal to 1 for positive values of the argument. It is undefined for a zero argument where the function is discontinuous. A graph of the unit step is shown in Fig. 7.11 a.

Figure 7.11

Graphs and models of the unit step function.



The unit step is dimensionless, and therefore a voltage step of  $V_o$  volts or a current step of  $I_o$  amperes is written as  $V_o u(t)$  and  $I_o u(t)$ , respectively. Equivalent circuits for a voltage step are shown in Figs. 7.11b and c. Equivalent circuits for a current step are shown in Figs. 7.11d and e. If we use the definition of the unit step, it is easy to generalize this function by replacing the argument  $t$  by  $t - t_0$ . In this case

$$u(t - t_0) = \begin{cases} 0 & t < t_0 \\ 1 & t > t_0 \end{cases}$$

A graph of this function is shown in Fig. 7.11f. Note that  $u(t - t_0)$  is equivalent to delaying  $u(t)$  by  $t_0$  seconds, so that the abrupt change occurs at time  $t = t_0$ .

Step functions can be used to construct one or more pulses. For example, the voltage pulse shown in Fig. 7.12a can be formulated by initiating a unit step at  $t = 0$  and subtracting one that starts at  $t = T$ , as shown in Fig. 7.12b. The equation for the pulse is

$$v(t) = A[u(t) - u(t - T)]$$

If the pulse is to start at  $t = t_0$  and have width  $T$ , the equation would be

$$v(t) = A\{u(t - t_0) - u[t - (t_0 + T)]\}$$

Using this approach, we can write the equation for a pulse starting at any time and ending at any time. Similarly, using this approach, we could write the equation for a series of pulses, called a *pulse train*, by simply forming a summation of pulses constructed in the manner illustrated previously.

The following example will serve to illustrate many of the concepts we have just presented.

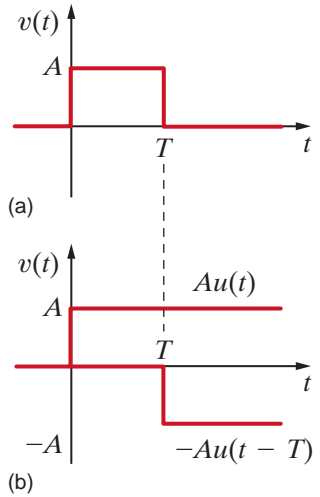
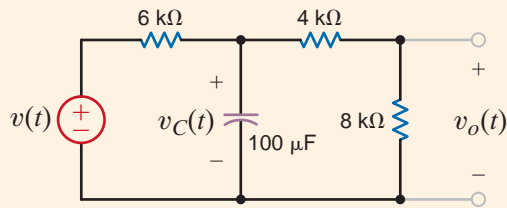


Figure 7.12

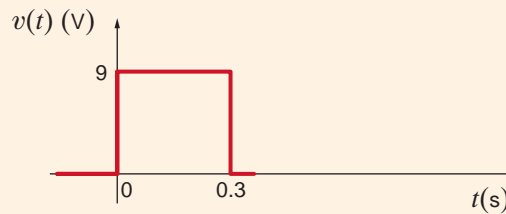
Construction of a pulse via two step functions.

Consider the circuit shown in Fig. 7.13a. The input function is the voltage pulse shown in Fig. 7.13b. Since the source is zero for all negative time, the initial conditions for the

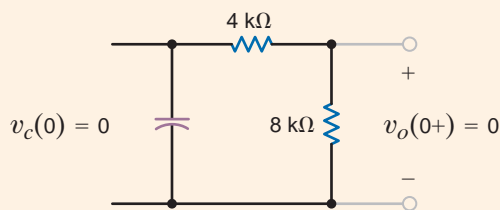
## EXAMPLE 7.6



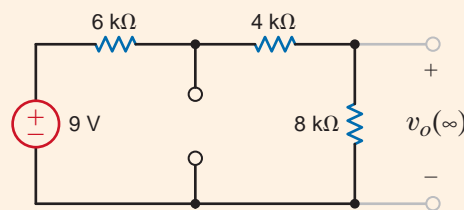
(a)



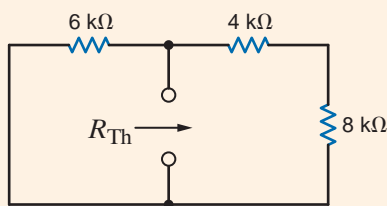
(b)



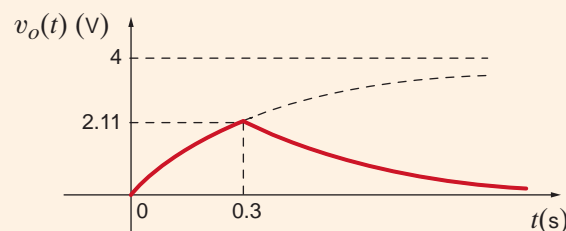
(c)  $t = 0$



(d)



(e)



(f)

Figure 7.13  
Pulse response of a network.

network are zero [i.e.,  $v_C(0^-) = 0$ ]. The response  $v_o(t)$  for  $0 < t < 0.3$  s is due to the application of the constant source at  $t = 0$  and is not influenced by any source changes that will occur later. At  $t = 0.3$  s the forcing function becomes zero, and therefore  $v_o(t)$  for  $t > 0.3$  s is the source-free or natural response of the network.

Let us determine the expression for the voltage  $v_o(t)$ .

**SOLUTION** Since the output voltage  $v_o(t)$  is a voltage division of the capacitor voltage, and the initial voltage across the capacitor is zero, we know that  $v_o(0^+) = 0$ , as shown in Fig. 7.13c.

If no changes were made in the source after  $t = 0$ , the steady-state value of  $v_o(t)$  [i.e.,  $v_o(\infty)$ ] due to the application of the unit step at  $t = 0$  would be

$$\begin{aligned} v_o(\infty) &= \frac{9}{6\text{k} + 4\text{k} + 8\text{k}} \quad (8\text{k}) \\ &= 4 \text{ V} \end{aligned}$$

as shown in Fig. 7.13d.

The Thévenin equivalent resistance is

$$\begin{aligned} R_{Th} &= \frac{(6\text{k})(12\text{k})}{6\text{k} + 12\text{k}} \\ &= 4 \text{ k}\Omega \end{aligned}$$

as illustrated in Fig. 7.13e.

Therefore, the circuit time constant  $\tau$  is

$$\begin{aligned} \tau &= R_{Th}C \\ &= (4)(10^3)(100)(10^{-6}) \\ &= 0.4 \text{ s} \end{aligned}$$

Therefore, the response  $v_o(t)$  for the period  $0 < t < 0.3$  s is

$$v_o(t) = 4 - 4e^{-t/0.4} \text{ V} \quad 0 < t < 0.3 \text{ s}$$

The capacitor voltage can be calculated by realizing that using voltage division,  $v_o(t) = 2/3 v_C(t)$ . Therefore,

$$v_C(t) = \frac{3}{2}(4 - 4e^{-t/0.4}) \text{ V}$$

Since the capacitor voltage is continuous,

$$v_C(0.3^-) = v_C(0.3^+)$$

and therefore,

$$\begin{aligned} v_o(0.3^+) &= \frac{2}{3}v_C(0.3^-) \\ &= 4(1 - e^{-0.3/0.4}) \\ &= 2.11 \text{ V} \end{aligned}$$

Since the source is zero for  $t > 0.3$  s, the final value for  $v_o(t)$  as  $t \rightarrow \infty$  is zero. Therefore, the expression for  $v_o(t)$  for  $t > 0.3$  s is

$$v_o(t) = 2.11e^{-(t-0.3)/0.4} \text{ V} \quad t > 0.3 \text{ s}$$

The term  $e^{-(t-0.3)/0.4}$  indicates that the exponential decay starts at  $t = 0.3$  s. The complete solution can be written by means of superposition as

$$v_o(t) = 4(1 - e^{-t/0.4})u(t) - 4(1 - e^{-(t-0.3)/0.4})u(t - 0.3) \text{ V}$$

or, equivalently, the complete solution is

$$v_o(t) = \begin{cases} 0 & t < 0 \\ 4(1 - e^{-t/0.4}) \text{ V} & 0 < t < 0.3 \text{ s} \\ 2.11e^{-(t-0.3)/0.4} \text{ V} & 0.3 \text{ s} < t \end{cases}$$

which in mathematical form is

$$v_o(t) = 4(1 - e^{-t/0.4})[u(t) - u(t - 0.3)] + 2.11e^{-(t-0.3)/0.4} u(t - 0.3) \text{ V}$$

Note that the term  $[u(t) - u(t - 0.3)]$  acts like a gating function that captures only the part of the step response that exists in the time interval  $0 < t < 0.3 \text{ s}$ . The output as a function of time is shown in Fig. 7.13f.

## Learning Assessments

**E7.11** The voltage source in the network in Fig. E7.11a is shown in Fig. E7.11b. The initial current in the inductor must be zero. (Why?) Determine the output voltage  $v_o(t)$  for  $t > 0$ .

**ANSWER:**  $v_o(t) = 0$  for  $t < 0$ ,  $4(1 - e^{-(3/2)t}) \text{ V}$  for  $0 \leq t \leq 1 \text{ s}$ , and  $3.11e^{-(3/2)(t-1)} \text{ V}$  for  $1 \text{ s} < t$ .

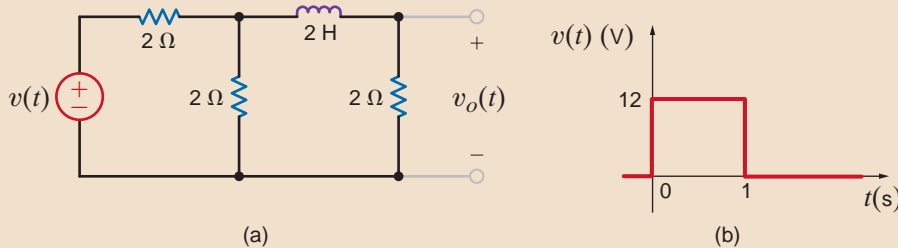


Figure E7.11

**THE BASIC CIRCUIT EQUATION** To begin our development, let us consider the two basic RLC circuits shown in Fig. 7.14. We assume that energy may be initially stored in both the inductor and capacitor. The node equation for the parallel RLC circuit is

$$\frac{v}{R} + \frac{1}{L} \int_{t_0}^t v(x) dx + i_L(t_0) + C \frac{dv}{dt} = i_S(t)$$

Similarly, the loop equation for the series RLC circuit is

$$Ri + \frac{1}{C} \int_{t_0}^t i(x) dx + v_C(t_0) + L \frac{di}{dt} = v_S(t)$$

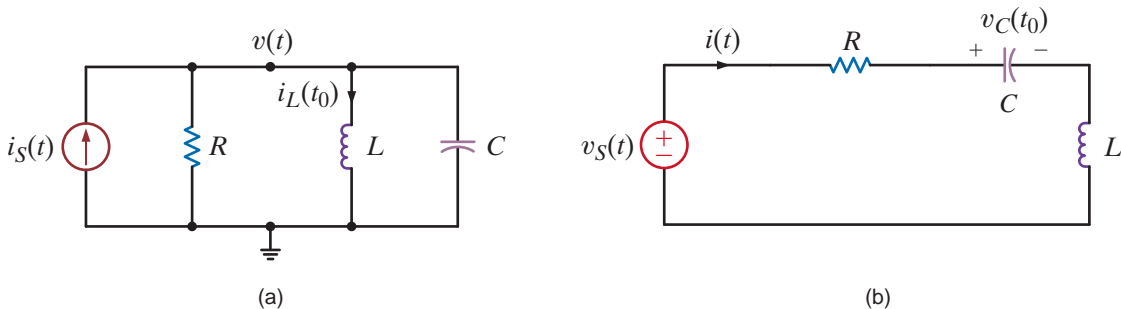


Figure 7.14 Parallel and series RLC circuits.

## 7.3

### Second-Order Circuits

Note that the equation for the node voltage in the parallel circuit is of the same form as that for the loop current in the series circuit. Therefore, the solution of these two circuits is dependent on solving one equation. If the two preceding equations are differentiated with respect to time, we obtain

$$C \frac{d^2v}{dt^2} + \frac{1}{R} \frac{dv}{dt} + \frac{v}{L} = \frac{di_s}{dt}$$

and

$$L \frac{d^2i}{dt^2} + R \frac{di}{dt} + \frac{i}{C} = \frac{dv_s}{dt}$$

Since both circuits lead to a second-order differential equation with constant coefficients, we will concentrate our analysis on this type of equation.

**THE RESPONSE EQUATIONS** In concert with our development of the solution of a first-order differential equation that results from the analysis of either an  $RL$  or an  $RC$  circuit as outlined earlier, we will now employ the same approach here to obtain the solution of a second-order differential equation that results from the analysis of  $RLC$  circuits. As a general rule, for this case we are confronted with an equation of the form

$$\frac{d^2x(t)}{dt^2} + a_1 \frac{dx(t)}{dt} + a_2x(t) = f(t) \quad 7.12$$

Once again we use the fact that if  $x(t) = x_p(t)$  is a solution to Eq. (7.12), and if  $x(t) = x_c(t)$  is a solution to the homogeneous equation

$$\frac{d^2x(t)}{dt^2} + a_1 \frac{dx(t)}{dt} + a_2x(t) = 0$$

then

$$x(t) = x_p(t) + x_c(t)$$

is a solution to the original Eq. (7.12). If we again confine ourselves to a constant forcing function [i.e.,  $f(t) = A$ ], the development at the beginning of this chapter shows that the solution of Eq. (7.12) will be of the form

$$x(t) = \frac{A}{a_2} + x_c(t) \quad 7.13$$

Let us now turn our attention to the solution of the homogeneous equation

$$\frac{d^2x(t)}{dt^2} + a_1 \frac{dx(t)}{dt} + a_2x(t) = 0$$

where  $a_1$  and  $a_2$  are constants. For simplicity we will rewrite the equation in the form

$$\frac{d^2x(t)}{dt^2} + 2\zeta\omega_0 \frac{dx(t)}{dt} + \omega_0^2x(t) = 0 \quad 7.14$$

where we have made the following simple substitutions for the constants  $a_1 = 2\zeta\omega_0$  and  $a_2 = \omega_0^2$ .

Following the development of a solution for the first-order homogeneous differential equation earlier in this chapter, the solution of Eq. (7.14) must be a function whose first- and second-order derivatives have the same form, so that the left-hand side of Eq. (7.14) will become identically zero for all  $t$ . Again we assume that

$$x(t) = Ke^{st}$$

Substituting this expression into Eq. (7.14) yields

$$s^2Ke^{st} + 2\zeta\omega_0sKe^{st} + \omega_0^2Ke^{st} = 0$$



Dividing both sides of the equation by  $Ke^{st}$  yields

$$s^2 + 2\zeta\omega_0s + \omega_0^2 = 0 \quad 7.15$$

This equation is commonly called the *characteristic equation*;  $\zeta$  is called the *exponential damping ratio*, and  $\omega_0$  is referred to as the *undamped natural frequency*. The importance of this terminology will become clear as we proceed with the development. If this equation is satisfied, our assumed solution  $x(t) = Ke^{st}$  is correct. Employing the quadratic formula, we find that Eq. (7.15) is satisfied if

$$\begin{aligned} s &= \frac{-2\zeta\omega_0 \pm \sqrt{4\zeta^2\omega_0^2 - 4\omega_0^2}}{2} \\ &= -\zeta\omega_0 \pm \omega_0\sqrt{\zeta^2 - 1} \end{aligned} \quad 7.16$$

Therefore, two values of  $s$ ,  $s_1$  and  $s_2$ , satisfy Eq. (7.15):

$$\begin{aligned} s_1 &= -\zeta\omega_0 + \omega_0\sqrt{\zeta^2 - 1} \\ s_2 &= -\zeta\omega_0 - \omega_0\sqrt{\zeta^2 - 1} \end{aligned} \quad 7.17$$

In general, then, the complementary solution of Eq. (7.14) is of the form

$$x_c(t) = K_1e^{s_1t} + K_2e^{s_2t} \quad 7.18$$

$K_1$  and  $K_2$  are constants that can be evaluated via the initial conditions  $x(0)$  and  $dx(0)/dt$ . For example, since

$$x(t) = K_1e^{s_1t} + K_2e^{s_2t}$$

then

$$x(0) = K_1 + K_2$$

and

$$\left. \frac{dx(t)}{dt} \right|_{t=0} = \frac{dx(0)}{dt} = s_1K_1 + s_2K_2$$

Hence,  $x(0)$  and  $dx(0)/dt$  produce two simultaneous equations, which when solved yield the constants  $K_1$  and  $K_2$ .

Close examination of Eqs. (7.17) and (7.18) indicates that the form of the solution of the homogeneous equation is dependent on the value  $\zeta$ . For example, if  $\zeta > 1$ , the roots of the characteristic equation,  $s_1$  and  $s_2$ , also called the *natural frequencies* because they determine the natural (unforced) response of the network, are real and unequal; if  $\zeta < 1$ , the roots are complex numbers; and finally, if  $\zeta = 1$ , the roots are real and equal.

Let us now consider the three distinct forms of the unforced response—that is, the response due to an initial capacitor voltage or initial inductor current.

**Case 1,  $\zeta > 1$**  This case is commonly called *overdamped*. The natural frequencies  $s_1$  and  $s_2$  are real and unequal; therefore, the natural response of the network described by the second-order differential equation is of the form

$$x_c(t) = K_1e^{-(\zeta\omega_0 - \omega_0\sqrt{\zeta^2 - 1})t} + K_2e^{-(\zeta\omega_0 + \omega_0\sqrt{\zeta^2 - 1})t} \quad 7.19$$

where  $K_1$  and  $K_2$  are found from the initial conditions. This indicates that the natural response is the sum of two decaying exponentials.

**Case 2,  $\zeta < 1$**  This case is called *underdamped*. Since  $\zeta < 1$ , the roots of the characteristic equation given in Eq. (7.17) can be written as

$$\begin{aligned}s_1 &= -\zeta\omega_0 + j\omega_0\sqrt{1-\zeta^2} = -\sigma + j\omega_d \\s_2 &= -\zeta\omega_0 - j\omega_0\sqrt{1-\zeta^2} = -\sigma - j\omega_d\end{aligned}$$

where  $j = \sqrt{-1}$ ,  $\sigma = \zeta\omega_0$ , and  $\omega_d = \omega_0\sqrt{1-\zeta^2}$ . Thus, the natural frequencies are complex numbers (briefly discussed in the Appendix). The natural response is then of the form

$$x_c(t) = e^{-\zeta\omega_0 t}(A_1 \cos \omega_0 \sqrt{1-\zeta^2} t + A_2 \sin \omega_0 \sqrt{1-\zeta^2} t) \quad 7.20$$

where  $A_1$  and  $A_2$ , like  $K_1$  and  $K_2$ , are constants, which are evaluated using the initial conditions  $x(0)$  and  $dx(0)/dt$ . This illustrates that the natural response is an exponentially damped oscillatory response.

**Case 3,  $\zeta = 1$**  This case, called *critically damped*, results in

$$s_1 = s_2 = -\zeta\omega_0$$

In the case where the characteristic equation has repeated roots, the general solution is of the form

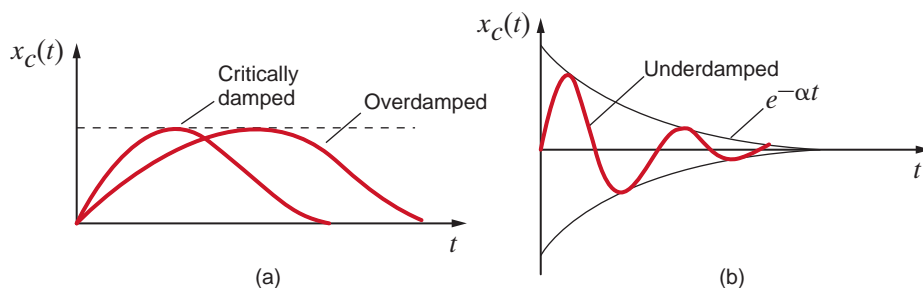
$$x_c(t) = B_1 e^{-\zeta\omega_0 t} + B_2 t e^{-\zeta\omega_0 t} \quad 7.21$$

where  $B_1$  and  $B_2$  are constants derived from the initial conditions.

It is informative to sketch the natural response for the three cases we have discussed: overdamped, Eq. (7.19); underdamped, Eq. (7.20); and critically damped, Eq. (7.21). Figure 7.15 graphically illustrates the three cases for the situations in which  $x_c(0) = 0$ . Note that the critically damped response peaks and decays faster than the overdamped response. The underdamped response is an exponentially damped sinusoid whose rate of decay is dependent on the factor  $\zeta$ . Actually, the terms  $\pm e^{-\zeta\omega_0 t}$  define what is called the *envelope* of the response, and the damped oscillations (i.e., the oscillations of decreasing amplitude) exhibited by the waveform in Fig. 7.15b are called *ringing*.

**Figure 7.15**

Comparison of overdamped, critically damped, and underdamped responses.



## Learning Assessments

**E7.12** A parallel  $RLC$  circuit has the following circuit parameters:  $R = 1 \Omega$ ,  $L = 2 \text{ H}$ , and  $C = 2 \text{ F}$ . Compute the damping ratio and the undamped natural frequency of this network.

**ANSWER:**  $\zeta = 0.5$ ;  
 $\omega_0 = 0.5 \text{ rad/s}$ .

**E7.13** A series  $RLC$  circuit consists of  $R = 2 \Omega$ ,  $L = 1 \text{ H}$ , and a capacitor. Determine the type of response exhibited by the network if (a)  $C = 1/2 \text{ F}$ , (b)  $C = 1 \text{ F}$ , and (c)  $C = 2 \text{ F}$ .

**ANSWER:**  
(a) underdamped;  
(b) critically damped;  
(c) overdamped.

**THE NETWORK RESPONSE** We will now analyze a number of simple  $RLC$  networks that contain both nonzero initial conditions and constant forcing functions. Circuits that exhibit overdamped, underdamped, and critically damped responses will be considered.

## Problem-Solving Strategy

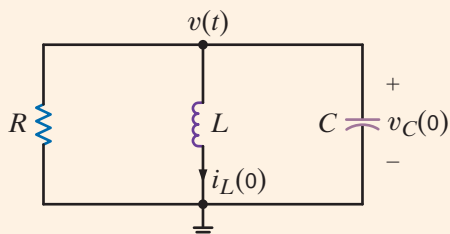
- Step 1.** Write the differential equation that describes the circuit.
- Step 2.** Derive the characteristic equation, which can be written in the form  $s^2 + 2\zeta\omega_0s + \omega_0^2 = 0$ , where  $\zeta$  is the damping ratio and  $\omega_0$  is the undamped natural frequency.
- Step 3.** The two roots of the characteristic equation will determine the type of response. If the roots are real and unequal (i.e.,  $\zeta > 1$ ), the network response is overdamped. If the roots are real and equal (i.e.,  $\zeta = 1$ ), the network response is critically damped. If the roots are complex (i.e.,  $\zeta < 1$ ), the network response is underdamped.
- Step 4.** The damping condition and corresponding response for the aforementioned three cases outlined are as follows:—  
 Overdamped:  $x(t) = K_1e^{-(\zeta\omega_0-\omega_0\sqrt{\zeta^2-1})t} + K_2e^{-(\zeta\omega_0+\omega_0\sqrt{\zeta^2-1})t}$   
 Critically damped:  $x(t) = B_1e^{-\zeta\omega_0t} + B_2te^{-\zeta\omega_0t}$   
 Underdamped:  $x(t) = e^{-\sigma t}(A_1 \cos \omega_d t + A_2 \sin \omega_d t)$ , where  $\sigma = \zeta\omega_0$ , and  $\omega_d = \omega_0\sqrt{1-\zeta^2}$
- Step 5.** Two initial conditions, either given or derived, are required to obtain the two unknown coefficients in the response equation.

### Second-Order Transient Circuits

The following examples will demonstrate the analysis techniques.

Consider the parallel  $RLC$  circuit shown in Fig. 7.16. The second-order differential equation that describes the voltage  $v(t)$  is

$$\frac{d^2v}{dt^2} + \frac{1}{RC} \frac{dv}{dt} + \frac{v}{LC} = 0$$



A comparison of this equation with Eqs. (7.14) and (7.15) indicates that for the parallel  $RLC$  circuit the damping term is  $1/2 RC$  and the undamped natural frequency is  $1/\sqrt{LC}$ . If the circuit parameters are  $R = 2 \Omega$ ,  $C = 1/5 \text{ F}$ , and  $L = 5 \text{ H}$ , the equation becomes

$$\frac{d^2v}{dt^2} + 2.5 \frac{dv}{dt} + v = 0$$

Let us assume that the initial conditions on the storage elements are  $i_L(0) = -1 \text{ A}$  and  $v_C(0) = 4 \text{ V}$ . Let us find the node voltage  $v(t)$  and the inductor current.

The characteristic equation for the network is

$$s^2 + 2.5s + 1 = 0$$

and the roots are

$$\begin{aligned} s_1 &= -2 \\ s_2 &= -0.5 \end{aligned}$$

### EXAMPLE 7.7

**Figure 7.16**  
Parallel  $RLC$  circuit.

### SOLUTION

Since the roots are real and unequal, the circuit is overdamped, and  $v(t)$  is of the form

$$v(t) = K_1 e^{-2t} + K_2 e^{-0.5t}$$

The initial conditions are now employed to determine the constants  $K_1$  and  $K_2$ . Since  $v(t) = v_C(t)$ ,

$$v_C(0) = v(0) = 4 = K_1 + K_2$$

The second equation needed to determine  $K_1$  and  $K_2$  is normally obtained from the expression

$$\frac{dv(t)}{dt} = -2K_1 e^{-2t} - 0.5K_2 e^{-0.5t}$$

However, the second initial condition is not  $dv(0)/dt$ . If this were the case, we would simply evaluate the equation at  $t = 0$ . This would produce a second equation in the unknowns  $K_1$  and  $K_2$ . We can, however, circumvent this problem by noting that the node equation for the circuit can be written as

$$C \frac{dv(t)}{dt} + \frac{v(t)}{R} + i_L(t) = 0$$

or

$$\frac{dv(t)}{dt} = \frac{-1}{RC} v(t) - \frac{i_L(t)}{C}$$

At  $t = 0$ ,

$$\begin{aligned} \frac{dv(0)}{dt} &= \frac{-1}{RC} v(0) - \frac{1}{C} i_L(0) \\ &= -2.5(4) - 5(-1) \\ &= -5 \end{aligned}$$

However, since

$$\frac{dv(t)}{dt} = -2K_1 e^{-2t} - 0.5K_2 e^{-0.5t}$$

then when  $t = 0$

$$-5 = -2K_1 - 0.5K_2$$

This equation, together with the equation

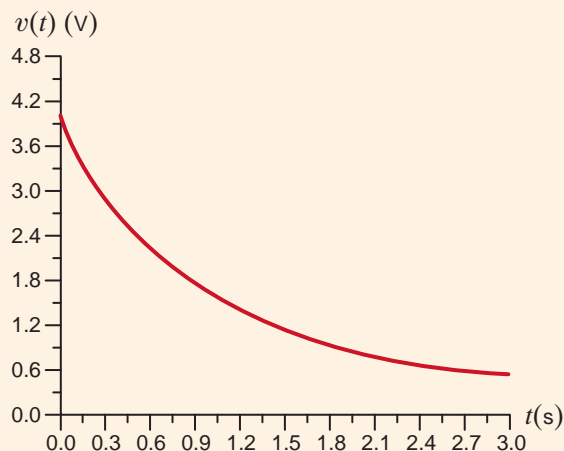
$$4 = K_1 + K_2$$

produces the constants  $K_1 = 2$  and  $K_2 = 2$ . Therefore, the final equation for the voltage is

$$v(t) = 2e^{-2t} + 2e^{-0.5t} \text{ V}$$

Note that the voltage equation satisfies the initial condition  $v(0) = 4 \text{ V}$ . The response curve for this voltage  $v(t)$  is shown in Fig. 7.17.

**Figure 7.17**  
Overdamped response.



The inductor current is related to  $v(t)$  by the equation

$$i_L(t) = \frac{1}{L} \int v(t) dt$$

Substituting our expression for  $v(t)$  yields

$$i_L(t) = \frac{1}{5} \int [2e^{-2t} + 2e^{-0.5t}] dt$$

or

$$i_L(t) = -\frac{1}{5}e^{-2t} - \frac{4}{5}e^{-0.5t} \text{ A}$$

Note that in comparison with the  $RL$  and  $RC$  circuits, the response of this  $RLC$  circuit is controlled by two time constants. The first term has a time constant of  $1/2$  s, and the second term has a time constant of 2 s.

The series  $RLC$  circuit shown in Fig. 7.18 has the following parameters:  $C = 0.04$  F,  $L = 1$  H,  $R = 6 \Omega$ ,  $i_L(0) = 4$  A, and  $v_C(0) = -4$  V. The equation for the current in the circuit is given by the expression

$$\frac{d^2i}{dt^2} + \frac{R}{L} \frac{di}{dt} + \frac{i}{LC} = 0$$

A comparison of this equation with Eqs. (7.14) and (7.15) illustrates that for a series  $RLC$  circuit the damping term is  $R/2L$  and the undamped natural frequency is  $1/\sqrt{LC}$ . Substituting the circuit element values into the preceding equation yields

$$\frac{d^2i}{dt^2} + 6 \frac{di}{dt} + 25i = 0$$

Let us determine the expression for both the current and the capacitor voltage.

The characteristic equation is then

$$s^2 + 6s + 25 = 0$$

and the roots are

$$s_1 = -3 + j4$$

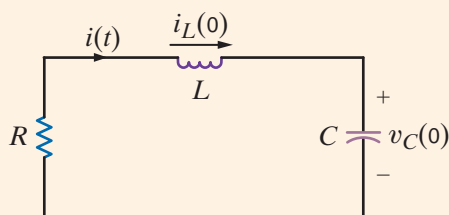
$$s_2 = -3 - j4$$

Since the roots are complex, the circuit is underdamped, and the expression for  $i(t)$  is

$$i(t) = K_1 e^{-3t} \cos 4t + K_2 e^{-3t} \sin 4t$$

Using the initial conditions, we find that

$$i(0) = 4 = K_1$$



## EXAMPLE 7.8

### SOLUTION

**Figure 7.18**  
Series  $RLC$  circuit.

and

$$\frac{di}{dt} = -4K_1 e^{-3t} \sin 4t - 3K_1 e^{-3t} \cos 4t + 4K_2 e^{-3t} \cos 4t - 3K_2 e^{-3t} \sin 4t$$

and thus

$$\frac{di(0)}{dt} = -3K_1 + 4K_2$$

Although we do not know  $di(0)/dt$ , we can find it via KVL. From the circuit we note that

$$Ri(0) + L \frac{di(0)}{dt} + v_c(0) = 0$$

or

$$\begin{aligned} \frac{di(0)}{dt} &= -\frac{R}{L} i(0) - \frac{v_c(0)}{L} \\ &= -\frac{6}{1}(4) + \frac{4}{1} \\ &= -20 \end{aligned}$$

Therefore,

$$-3K_1 + 4K_2 = -20$$

and since  $K_1 = 4$ ,  $K_2 = -2$ , the expression then for  $i(t)$  is

$$i(t) = 4e^{-3t} \cos 4t - 2e^{-3t} \sin 4t \text{ A}$$

Note that this expression satisfies the initial condition  $i(0) = 4$ . The voltage across the capacitor could be determined via KVL using this current:

$$Ri(t) + L \frac{di(t)}{dt} + v_c(t) = 0$$

or

$$v_c(t) = -Ri(t) - L \frac{di(t)}{dt}$$

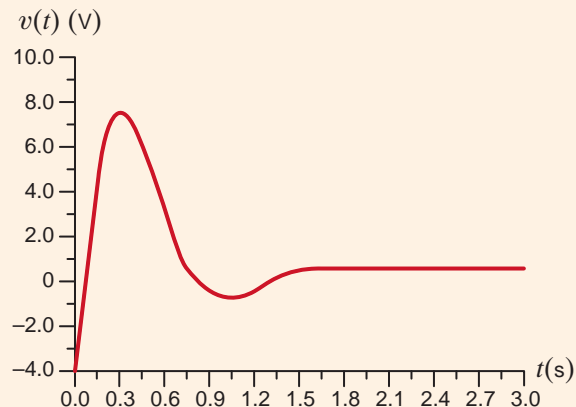
Substituting the preceding expression for  $i(t)$  into this equation yields

$$v_c(t) = -4e^{-3t} \cos 4t + 22e^{-3t} \sin 4t \text{ V}$$

Note that this expression satisfies the initial condition  $v_c(0) = -4 \text{ V}$ . A plot of the function is shown in Fig. 7.1.9:

**Figure 7.19**

Underdamped response.



Let us examine the circuit in Fig. 7.20, which is slightly more complicated than the two we have already considered.

**EXAMPLE****7.9****SOLUTION**

The two equations that describe the network are

$$L \frac{di(t)}{dt} + R_1 i(t) + v(t) = 0$$

$$i(t) = C \frac{dv(t)}{dt} + \frac{v(t)}{R_2}$$

Substituting the second equation into the first yields

$$\frac{d^2 v}{dt^2} + \left( \frac{1}{R_2 C} + \frac{R_1}{L} \right) \frac{dv}{dt} + \frac{R_1 + R_2}{R_2 L C} v = 0$$

If the circuit parameters and initial conditions are

$$R_1 = 10 \, \Omega \quad C = \frac{1}{8} \text{ F} \quad v_C(0) = 1 \text{ V}$$

$$R_2 = 8 \, \Omega \quad L = 2 \text{ H} \quad i_L(0) = \frac{1}{2} \text{ A}$$

the differential equation becomes

$$\frac{d^2 v}{dt^2} + 6 \frac{dv}{dt} + 9v = 0$$

We wish to find expressions for the current  $i(t)$  and the voltage  $v(t)$ .

The characteristic equation is then

$$s^2 + 6s + 9 = 0$$

and hence the roots are

$$s_1 = -3$$

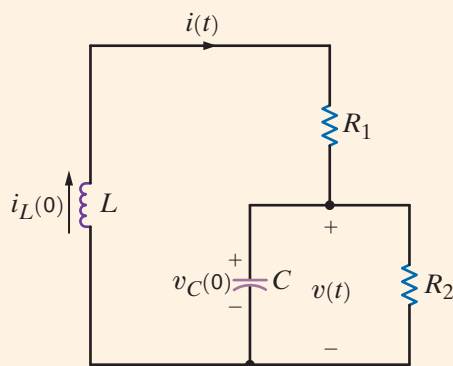
$$s_2 = -3$$

Since the roots are real and equal, the circuit is critically damped. The term  $v(t)$  is then given by the expression

$$v(t) = K_1 e^{-3t} + K_2 t e^{-3t}$$

Since  $v(t) = v_C(t)$ ,

$$v(0) = v_C(0) = 1 = K_1$$



**Figure 7.20**  
Series-parallel  
RLC circuit.

In addition,

$$\frac{dv(t)}{dt} = -3K_1e^{-3t} + K_2e^{-3t} - 3K_2te^{-3t}$$

However,

$$\frac{dv(t)}{dt} = \frac{i(t)}{C} - \frac{v(t)}{R_2C}$$

Setting these two expressions equal to one another and evaluating the resultant equation at  $t = 0$  yields

$$\begin{aligned} \frac{1/2}{1/8} - \frac{1}{1} &= -3K_1 + K_2 \\ 3 &= -3K_1 + K_2 \end{aligned}$$

$K_1 = 1$ ,  $K_2 = 6$ , and the expression for  $v(t)$  is

$$v(t) = e^{-3t} + 6te^{-3t} \text{ V}$$

Note that the expression satisfies the initial condition  $v(0) = 1$ .

The current  $i(t)$  can be determined from the nodal analysis equation at  $v(t)$ :

$$i(t) = C \frac{dv(t)}{dt} + \frac{v(t)}{R_2}$$

Substituting  $v(t)$  from the preceding equation, we find

$$i(t) = \frac{1}{8} [-3e^{-3t} + 6e^{-3t} - 18te^{-3t}] + \frac{1}{8} [e^{-3t} + 6te^{-3t}]$$

or

$$i(t) = \frac{1}{2}e^{-3t} - \frac{3}{2}te^{-3t} \text{ A}$$

If this expression for the current is employed in the circuit equation,

$$v(t) = -L \frac{di(t)}{dt} - R_1i(t)$$

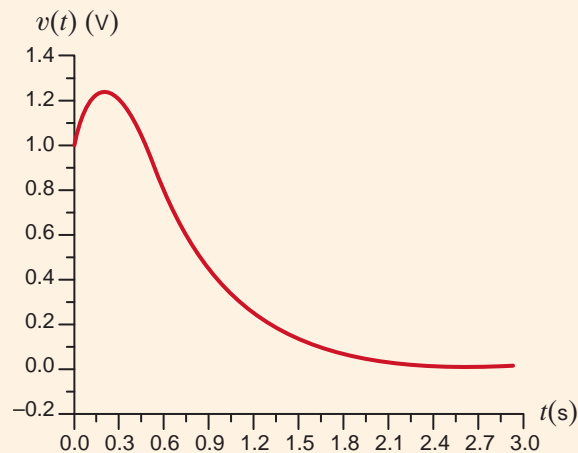
we obtain

$$v(t) = e^{-3t} + 6te^{-3t} \text{ V}$$

which is identical to the expression derived earlier.

A plot of this critically damped function is shown in Fig. 7.21.

**Figure 7.21**  
Critically damped  
response.





## Learning Assessments

**E7.14** The switch in the network in Fig. E7.14 opens at  $t = 0$ . Find  $i(t)$  for  $t > 0$ .

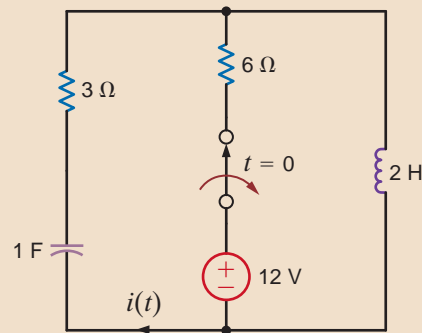


Figure E7.14

**ANSWER:**

$$i(t) = -2e^{-t/2} + 4e^{-t} \text{ A.}$$

**E7.15** The switch in the network in Fig. E7.15 moves from position 1 to position 2 at  $t = 0$ . Find  $v_o(t)$  for  $t > 0$ .

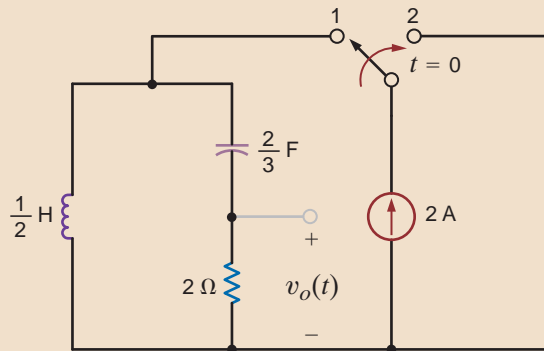


Figure E7.15

**ANSWER:**

$$v_o(t) = 2(e^{-t} - 3e^{-3t}) \text{ V.}$$

**E7.16** Find  $v_C(t)$  for  $t > 0$  in Fig. E7.16.

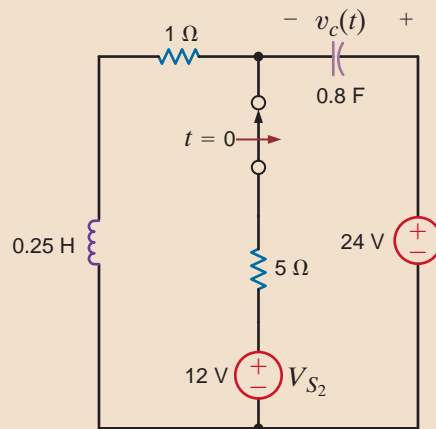


Figure E7.16

**ANSWER:**  $v_C(t) = -2e^{-2t} \cos t - 1.5e^{-2t} \sin t + 24 \text{ V.}$

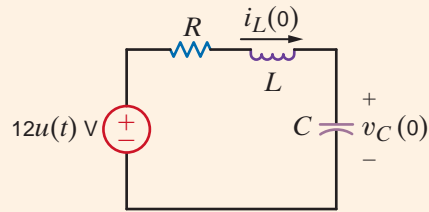
Consider the circuit shown in Fig. 7.22. This circuit is the same as the one analyzed in Example 7.8, except that a constant forcing function is present. The circuit parameters are the same as those used in Example 7.8:

$$\begin{aligned} C &= 0.04 \text{ F} & i_L(0) &= 4 \text{ A} \\ L &= 1 \text{ H} & v_C(0) &= -4 \text{ V} \\ R &= 6 \Omega \end{aligned}$$

### EXAMPLE 7.10

**Figure 7.22**

Series RLC circuit with a step function input.



We want to find an expression for  $v_C(t)$  for  $t > 0$ .

**SOLUTION**

From our earlier mathematical development we know that the general solution of this problem will consist of a particular solution plus a complementary solution. From Example 7.8 we know that the complementary solution is of the form  $K_3e^{-3t} \cos 4t + K_4e^{-3t} \sin 4t$ . The particular solution is a constant, since the input is a constant and therefore the general solution is

$$v_C(t) = K_3e^{-3t} \cos 4t + K_4e^{-3t} \sin 4t + K_5$$

An examination of the circuit shows that in the steady state, the final value of  $v_C(t)$  is 12 V, since in the steady-state condition, the inductor is a short circuit and the capacitor is an open circuit. Thus,  $K_5 = 12$ . The steady-state value could also be immediately calculated from the differential equation. The form of the general solution is then

$$v_C(t) = K_3e^{-3t} \cos 4t + K_4e^{-3t} \sin 4t + 12$$

The initial conditions can now be used to evaluate the constants  $K_3$  and  $K_4$ :

$$\begin{aligned} v_C(0) &= -4 = K_3 + 12 \\ -16 &= K_3 \end{aligned}$$

Since the derivative of a constant is zero, the results of Example 7.8 show that

$$\frac{dv_C(0)}{dt} = \frac{i(0)}{C} = 100 = -3K_3 + 4K_4$$

and since  $K_3 = -16$ ,  $K_4 = 13$ . Therefore, the general solution for  $v_C(t)$  is

$$v_C(t) = 12 - 16e^{-3t} \cos 4t + 13e^{-3t} \sin 4t \text{ V}$$

Note that this equation satisfies the initial condition  $v_C(0) = -4$  and the final condition  $v_C(\infty) = 12$  V.

## EXAMPLE 7.11

Let us examine the circuit shown in Fig. 7.23. A close examination of this circuit will indicate that it is identical to that shown in Example 7.9 except that a constant forcing function is present. We assume the circuit is in steady state at  $t = 0^-$ . The equations that describe the circuit for  $t > 0$  are

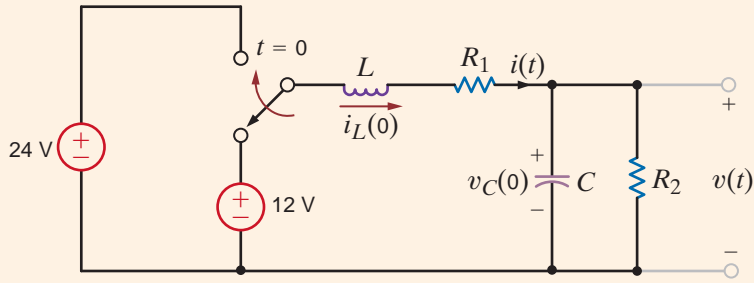
$$\begin{aligned} L \frac{di(t)}{dt} + R_1 i(t) + v(t) &= 24 \\ i(t) &= C \frac{dv(t)}{dt} + \frac{v(t)}{R_2} \end{aligned}$$

Combining these equations, we obtain

$$\frac{d^2v(t)}{dt^2} + \left( \frac{1}{R_2C} + \frac{R_1}{L} \right) \frac{dv(t)}{dt} + \frac{R_1 + R_2}{R_2LC} v(t) = \frac{24}{LC}$$

If the circuit parameters are  $R_1 = 10 \Omega$ ,  $R_2 = 2 \Omega$ ,  $L = 2$  H, and  $C = 1/4$  F, the differential equation for the output voltage reduces to

$$\frac{d^2v(t)}{dt^2} + 7 \frac{dv(t)}{dt} + 12v(t) = 48$$

**Figure 7.23**

Series-parallel  $RLC$  circuit with a constant forcing function.

Let us determine the output voltage  $v(t)$ .

The characteristic equation is

$$s^2 + 7s + 12 = 0$$

and hence the roots are

$$s_1 = -3$$

$$s_2 = -4$$

The circuit response is overdamped, and therefore the general solution is of the form

$$v(t) = K_1 e^{-3t} + K_2 e^{-4t} + K_3$$

The steady-state value of the voltage,  $K_3$ , can be computed from Fig. 7.24a. Note that

$$v(\infty) = 4 \text{ V} = K_3$$

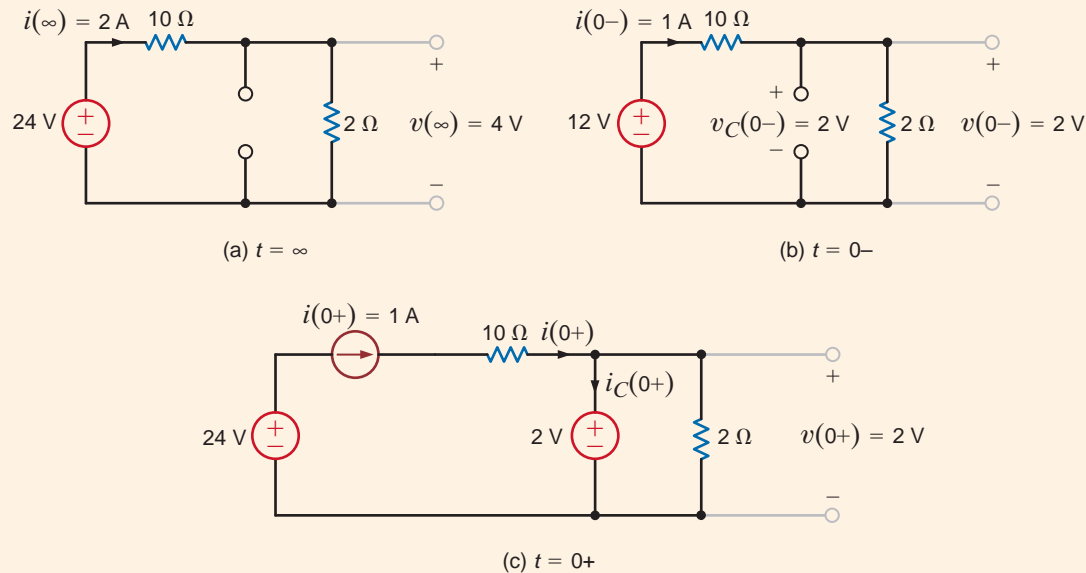
The initial conditions can be calculated from Figs. 7.24b and c, which are valid at  $t = 0^-$  and  $t = 0^+$ , respectively. Note that  $v(0^+) = 2 \text{ V}$  and, hence, from the response equation

$$v(0^+) = 2 \text{ V} = K_1 + K_2 + 4$$

$$-2 = K_1 + K_2$$

Fig. 7.24c illustrates that  $i(0^+) = 1$ . From the response equation we see that

$$\frac{dv(0)}{dt} = -3K_1 - 4K_2$$

**Figure 7.24** Equivalent circuits at  $t = \infty$ ,  $t = 0^-$ , and  $t = 0^+$  for the circuit in Fig. 7.23.

and since

$$\begin{aligned}\frac{dv(0)}{dt} &= \frac{i(0)}{C} - \frac{v(0)}{R_2 C} \\ &= 4 - 4 \\ &= 0\end{aligned}$$

then

$$0 = -3K_1 - 4K_2$$

Solving the two equations for  $K_1$  and  $K_2$  yields  $K_1 = -8$  and  $K_2 = 6$ . Therefore, the general solution for the voltage response is

$$v(t) = 4 - 8e^{-3t} + 6e^{-4t} \text{ V}$$

Note that this equation satisfies both the initial and final values of  $v(t)$ .

## Learning Assessments

**E7.17** The switch in the network in Fig. E7.17 moves from position 1 to position 2 at  $t = 0$ . Compute  $i_o(t)$  for  $t > 0$  and use this current to determine  $v_o(t)$  for  $t > 0$ .

**ANSWER:**

$$\begin{aligned}i_o(t) &= -\frac{11}{6}e^{-3t} + \frac{14}{6}e^{-6t} \text{ A;} \\ v_o(t) &= 12 + 18i_o(t) \text{ V.}\end{aligned}$$

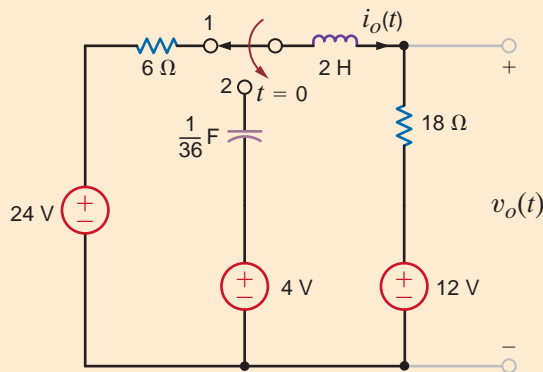


Figure E7.17

**E7.18** Find  $i(t)$  for  $t > 0$  in Fig. E7.18.

**ANSWER:**  $i(t) = 0.4144e^{-17.07t} - 2.414e^{-2.93t} + 3 \text{ A.}$

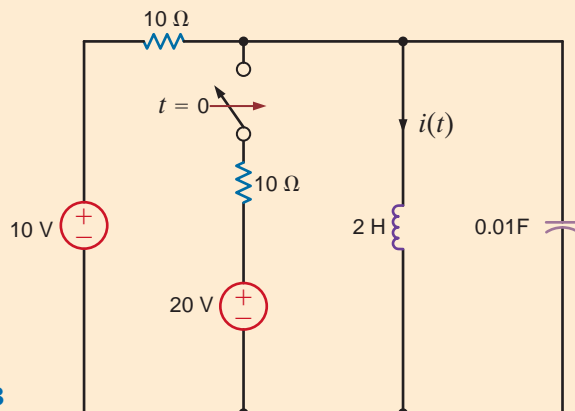


Figure E7.18

There are a wide variety of applications for transient circuits. The following examples demonstrate some of them.

## 7.4

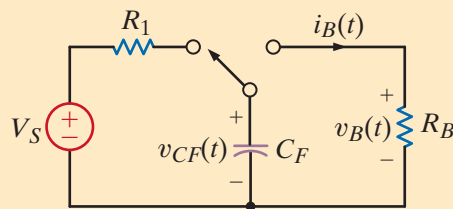
## Application Examples

Let us return to the camera flash circuit, redrawn in Fig. 7.25, which was discussed in the introduction of this chapter. The Xenon flash has the following specifications:

$$\text{Voltage required for successful flash: } \begin{cases} \text{minimum } 50 \text{ V} \\ \text{maximum } 70 \text{ V} \end{cases}$$

$$\text{Equivalent resistance: } 80 \Omega$$

For this particular application, a time constant of 1 ms is required during flash time. In addition, to minimize the physical size of the circuit, the resistor  $R_1$  must dissipate no more than 100-mW peak power. We want to determine values for  $V_S$ ,  $C_F$ , and  $R_1$ . Furthermore, we wish to determine the recharge time, the flash bulb's voltage, current, power, and total energy dissipated during the flash.



## APPLICATION EXAMPLE 7.12

Figure 7.25

A model for a camera flash charging circuit.

We begin by selecting the source voltage,  $V_S$ . Since the capacitor is applied directly to the Xenon bulb during flash, and since at least 50 V is required to flash, we should set  $V_S$  higher than 50 V. We will somewhat arbitrarily split the difference in the bulb's required voltage range and select 60 V for  $V_S$ .

Now we consider the time constant during the flash time. From Fig. 7.25, during flash, the time constant is simply

$$\tau_F = R_B C_F \quad 7.22$$

Given  $t_F = 1 \text{ ms}$  and  $R_B = 80 \Omega$ , we find  $C_F = 12.5 \mu\text{F}$ .

Next, we turn to the value of  $R_1$ . At the beginning of the charge time, the capacitor voltage is zero and both the current and power in  $R_1$  are at their maximum values. Setting the power to the maximum allowed value of 100 mW, we can write

$$P_{R_{\max}} = \frac{V_S^2}{R_1} = \frac{3600}{R_1} = 0.1 \quad 7.23$$

and find that  $R_1 = 36 \text{ k}\Omega$ . The recharge time is the time required for the capacitor to charge from zero up to at least 50 V. At that point the flash can be successfully discharged. We will define  $t = 0$  as the point at which the switch moves from the bulb back to  $R_1$ . At  $t = 0$ , the capacitor voltage is zero, and at  $t = \infty$ , the capacitor voltage is 60 V; the time constant is simply  $R_1 C_F$ . The resulting equation for the capacitor voltage during recharge is

$$v_{CF}(t) = K_1 + K_2 e^{-t/\tau} = 60 - 60 e^{-t/R_1 C_F} \text{ V} \quad 7.24$$

At  $t = t_{\text{charge}}$ ,  $v_{CF}(t) = 50 \text{ V}$ . Substituting this and the values of  $R_1$  and  $C_F$  into Eq. (7.24) yields a charge time of  $t_{\text{charge}} = 806 \text{ ms}$ —just less than a second. As a point of interest, let us

## SOLUTION

reconsider our choice for  $V_S$ . What happens if  $V_S$  is decreased to only 51 V? First, from Eq. (7.23),  $R_1$  changes to 26.01 k $\Omega$ . Second, from Eq. (7.24), the charge time increases only slightly to 1.28 s. Therefore, it appears that selection of  $V_S$  will not have much effect on the flash unit's performance, and thus there exists some flexibility in the design.

Finally, we consider the waveforms for the flash bulb itself. The bulb and capacitor voltage are the same during flash and are given by the decaying exponential function

$$v_B(t) = 60e^{-1000t} \text{ V} \quad 7.25$$

where the time constant is defined in Eq. (7.22), and we have assumed that the capacitor is allowed to charge fully to  $V_S$  (i.e., 60 V). Since the bulb's equivalent resistance is 80  $\Omega$ , the bulb current must be

$$i_B(t) = \frac{60e^{-1000t}}{80} = 750e^{-1000t} \text{ mA} \quad 7.26$$

As always, the power is the  $v$ - $i$  product.

$$p_B(t) = v_B(t)i_B(t) = 45e^{-2000t} \text{ W} \quad 7.27$$

Finally, the total energy consumed by the bulb during flash is only

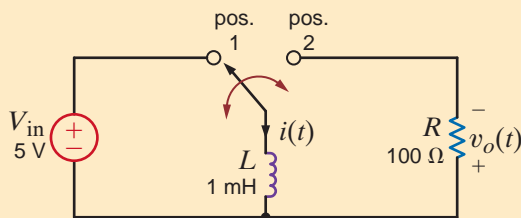
$$w_B(t) = \int_0^\infty p_B(t) dt = \int_0^\infty 45e^{-2000t} dt = \frac{45}{2000} e^{-2000t} \Big|_0^\infty = \frac{45}{2000} = 22.5 \text{ mJ} \quad 7.28$$

### APPLICATION EXAMPLE 7.13

One very popular application for inductors is storing energy in the present for release in the future. This energy is in the form of a magnetic field, and current is required to maintain the field. In an analogous situation, the capacitor stores energy in an electric field, and a voltage across the capacitor is required to maintain it. As an application of the inductor's energy storage capability, let us consider the high-voltage pulse generator circuit shown in Fig. 7.26. This circuit is capable of producing high-voltage pulses from a small dc voltage. Let's see if this circuit can produce an output voltage peak of 500 V every 2 ms, that is, 500 times per second.

**Figure 7.26**

A simple high-voltage pulse generator.



### SOLUTION

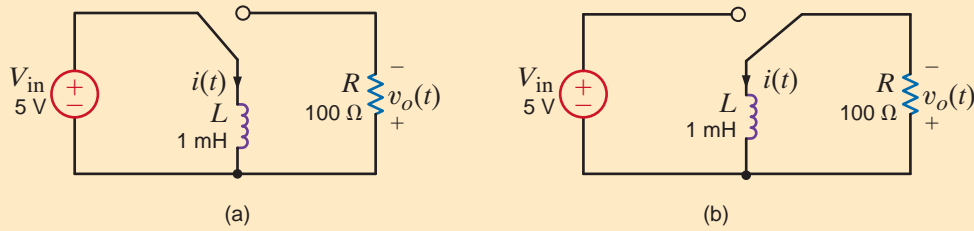
At the heart of this circuit is a single-pole, double-throw switch—that is, a single switch (single-pole) with two electrically connected positions (double-throw), 1 and 2. As shown in Fig. 7.27a, when in position 1, the inductor current grows linearly in accordance with the equation

$$i(t) = \frac{1}{L} \int_0^{T_1} V_{in} dt$$

Then the switch moves from position 1 to position 2 at time  $T_1$ . The peak inductor current is

$$i_p(t) = \frac{V_{in} T_1}{L}$$

While at position 1, the resistor is isolated electrically, and therefore its voltage is zero.



**Figure 7.27** (a) Pulse generator with switch in position 1. Inductor is energized. (b) Switch in position 2. As energy is drained from the inductor, the voltage and current decay toward zero.

At time  $t > T_1$ , when the switch is in position 2, as shown in Fig. 7.27b, the inductor current flows into the resistor producing the voltage

$$v_o(t - T_1) = i(t - T_1)R \quad t > T_1$$

At this point, we know that the form of the voltage  $v_o(t)$ , in the time interval  $t > T_1$ , is

$$v_o(t) = Ke^{-(t-T_1)/\tau} \quad t > T_1$$

And  $\tau = L/R$ . The initial value of  $v_o(t)$  in the time interval  $t > T_1$  is  $K$  since at time  $T_1$  the exponential term is 1. According to the design specifications, this initial value is 500 and therefore  $K = 500$ .

Since this voltage is created by the peak inductor current  $I_p$  flowing in  $R$ ,

$$K = 500 = (V_{in}T_1R)/L = 5T_1(100)/10^{-3}$$

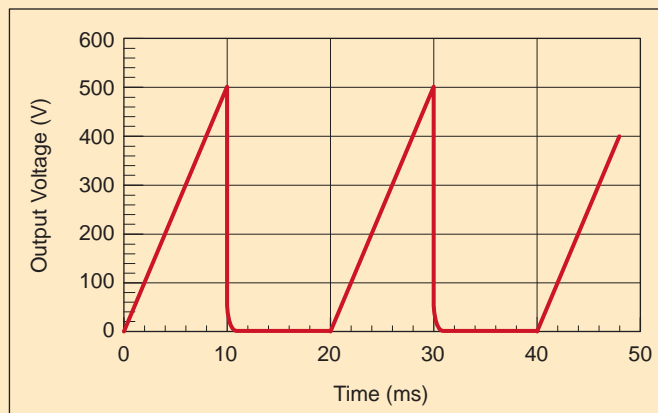
and thus  $T_1$  is 1 ms and  $I_p$  is 5 A.

The equation for the voltage in the time interval  $t > T_1$ , or  $t > 1$  ms, is

$$v_o(t - 1 \text{ ms}) = 500e^{-100,000(t-1 \text{ ms})} \text{ V}$$

At the end of the 2-ms period, that is, at  $t = 2$  ms, the voltage is  $500e^{-100}$  or essentially zero. The complete waveform for the voltage is shown in Fig. 7.28.

It is instructive at this point to consider the ratings of the various components used in this pulse generator circuit. First, 500 V is a rather high voltage, and thus each component's voltage rating should be at least 600 V in order to provide some safety margin. Second, the inductor's peak current rating should be at least 6 A. Finally, at peak current, the power losses in the resistor are 2500 W! This resistor will have to be physically large to handle this power load without getting too hot. Fortunately, the resistor power is pulsed rather than continuous; thus, a lower power rated resistor will work fine, perhaps 500 W. In later chapters we will address the issue of power in much more detail.



**Figure 7.28**

The output voltage of the pulse generator.

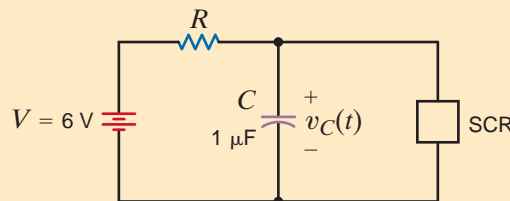
## APPLICATION EXAMPLE 7.14

A heart pacemaker circuit is shown in Fig. 7.29. An SCR (silicon-controlled rectifier) is a solid-state device that has two distinct modes of operation. When the voltage across the SCR is increasing but less than 5 V, the SCR behaves like an open circuit, as shown in Fig. 7.30a. Once the voltage across the SCR reaches 5 V, the device functions like a current source, as shown in Fig. 7.30b. This behavior will continue as long as the SCR voltage remains above 0.2 V. At this voltage, the SCR shuts off and again becomes an open circuit.

Assume that at  $t = 0$ ,  $v_C(t)$  is 0 V and the  $1\text{-}\mu\text{F}$  capacitor begins to charge toward the 6-V source voltage. Find the resistor value such that  $v_C(t)$  will equal 5 V (the SCR firing voltage) at 1 s. At  $t = 1$  s, the SCR fires and begins discharging the capacitor. Find the time required for  $v_C(t)$  to drop from 5 V to 0.2 V. Finally, plot  $v_C(t)$  for the three cycles.

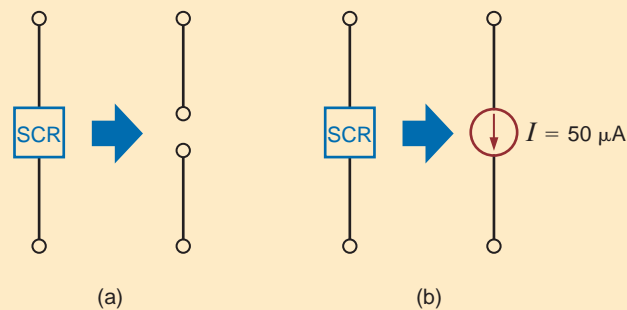
**Figure 7.29**

Heart pacemaker equivalent circuit.



**Figure 7.30**

Equivalent circuits for an SCR.



**SOLUTION** For  $t < 1$  s, the equivalent circuit for the pacemaker is shown in Fig. 7.31. As indicated earlier, the capacitor voltage has the form

$$v_C(t) = 6 - 6e^{-t/RC} \text{ V}$$

A voltage of 0.2 V occurs at

$$t_1 = 0.034RC$$

whereas a voltage of 5 V occurs at

$$t_2 = 1.792RC$$

We desire that  $t_2 - t_1 = 1$  s. Therefore,

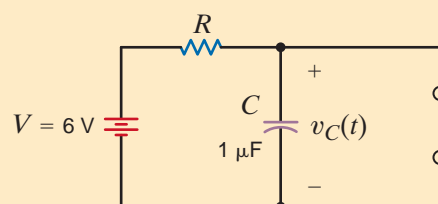
$$t_2 - t_1 = 1.758RC = 1 \text{ s}$$

and

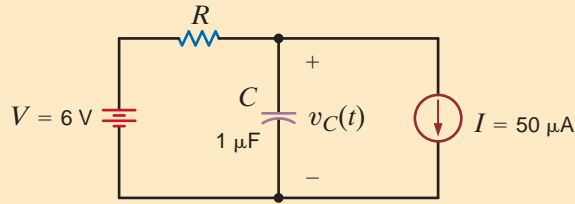
$$RC = 0.569 \text{ s} \quad \text{and} \quad R = 569 \text{ k}\Omega$$

**Figure 7.31**

Pacemaker equivalent network during capacitor charge cycle.





**Figure 7.32**

Pacemaker equivalent network during capacitor discharge cycle.

At  $t = 1$  s the SCR fires and the pacemaker is modeled by the circuit in Fig. 7.32. The form of the discharge waveform is

$$v(t) = K_1 + K_2 e^{-(t-1)/RC}$$

The term  $(t - 1)$  appears in the exponential to shift the function 1 s, since during that time the capacitor was charging. Just after the SCR fires at  $t = 1^+$  s,  $v_C(t)$  is still 5 V, whereas at  $t = \infty$ ,  $v_C(t) = 6 - IR$ . Therefore,

$$K_1 + K_2 = 5 \quad \text{and} \quad K_1 = 6 - IR$$

Our solution, then, is of the form

$$v_C(t) = 6 - IR + (IR - 1)e^{-(t-1)/RC}$$

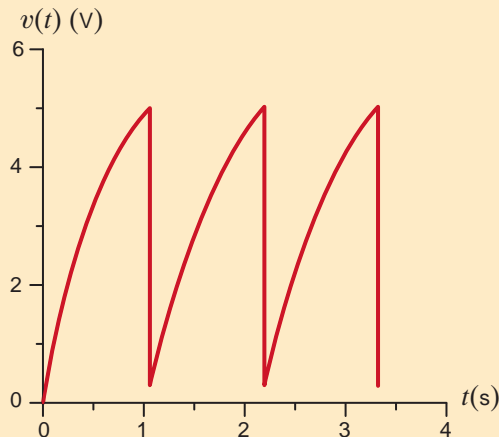
Let  $T$  be the time beyond 1 s necessary for  $v(t)$  to drop to 0.2 V. We write

$$v_C(T + 1) = 6 - IR + (IR - 1)e^{-T/RC} = 0.2$$

Substituting for  $I$ ,  $R$ , and  $C$ , we find

$$T = 0.11 \text{ s}$$

The output waveform is shown in Fig. 7.33.

**Figure 7.33**

Heart pacemaker output voltage waveform.

Consider the simple  $RL$  circuit, shown in Fig. 7.34, which forms the basis for essentially every dc power supply in the world. The switch opens at  $t = 0$ .  $V_S$  and  $R$  have been chosen simply to create a 1-A current in the inductor prior to switching. Let us find the peak voltage across the inductor and across the switch.

### APPLICATION EXAMPLE 7.15

**SOLUTION**

We begin the analysis with an expression for the inductor current. At  $t = 0$ , the inductor current is 1 A. At  $t = \infty$ , the current is 0. The time constant is simply  $L/R$ , but when the switch is open,  $R$  is infinite and the time constant is zero! As a result, the inductor current is

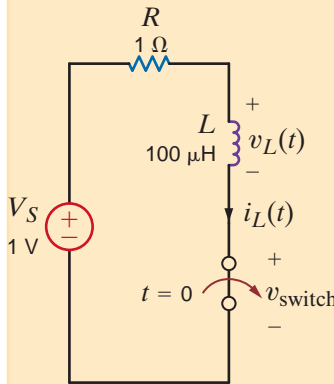
$$i_L(t) = 1e^{-\alpha t} \text{ A} \quad 7.29$$

where  $\alpha$  is infinite. The resulting inductor voltage is

$$v_L(t) = L \frac{di_L(t)}{dt} = -\alpha e^{-\alpha t} \quad 7.30$$

At  $t = 0$ , the peak inductor voltage is negative infinity! This voltage level is caused by the attempt to disrupt the inductor current instantaneously, driving  $di/dt$  through the roof. Employing KVL, the peak switch voltage must be positive infinity (give or take the supply voltage). This phenomenon is called *inductive kick*, and it is the nemesis of power supply designers.

Given this situation, we naturally look for a way to reduce this excessive voltage and, more importantly, predict and control it. Let's look at what we have and what we know. We have a transient voltage that grows very quickly without bound. We also have an initial current in the inductor that must go somewhere. We know that capacitor voltages cannot change quickly and resistors consume energy. Therefore, let's put an  $RC$  network around the switch, as shown in Fig. 7.35, and examine the performance that results from this change.

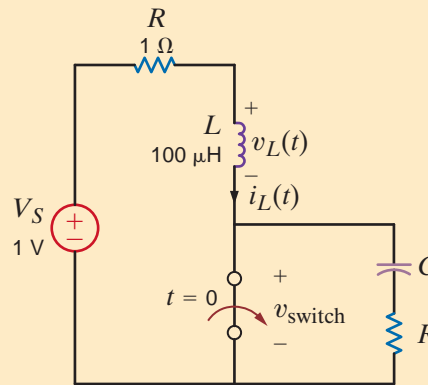


**Figure 7.34**

The switched inductor network at the heart of modern power supplies.

**Figure 7.35**

Conversion of a switched inductor circuit to an  $RLC$  network in an attempt to control inductive kick.



The addition of the  $RC$  network yields a series circuit. We need the characteristic equation of this series  $RLC$  network when the switch is open. From Eq. (7.15), we know that the characteristic equation for the series  $RLC$  circuit is

$$s^2 + 2\zeta\omega_0 s + \omega_0^2 = s^2 + \left[ \frac{R+1}{L} \right] s + \frac{1}{LC} = 0 \quad 7.31$$

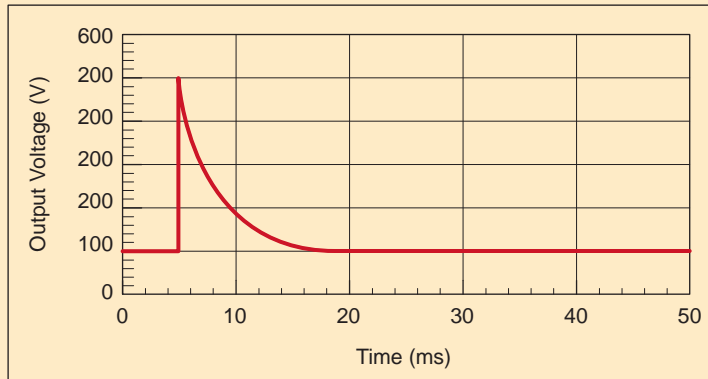
To retain some switching speed, we will somewhat arbitrarily choose a critically damped system where  $\zeta = 1$  and  $\omega_0 = 10^6$  rad/s. This choice for  $\omega_0$  should allow the system to stabilize in a few microseconds. From Eq. (7.31) we can now write expressions for  $C$  and  $R$ .

$$\omega_0^2 = 10^{12} = \frac{1}{LC} = \frac{1}{10^{-4}C} \quad 2\zeta\omega_0 = 2 \times 10^6 = \frac{R+1}{L} = \frac{R+1}{10^{-4}} \quad 7.32$$

Solving these equations yields the parameter values  $C = 10$  nF and  $R = 199 \Omega$ . Now we can focus on the peak switch voltage. When the switch opens, the inductor current, set at 1 A by the dc source and the 1- $\Omega$  resistor, flows through the  $RC$  circuit. Since the capacitor was previously discharged by the closed switch, its voltage cannot change immediately and

its voltage remains zero for an instant. The resistor voltage is simply  $I_L R$  where  $I_L$  is the initial inductor current. Given our  $I_L$  and  $R$  values, the resistor voltage just after opening the switch is 199 V. The switch voltage is then just the sum of the capacitor and resistor voltages (i.e., 199 V). This is a tremendous improvement over the first scenario!

A plot of the switch voltage, shown in Fig. 7.36, clearly agrees with our analysis. This plot illustrates the effectiveness of the  $RC$  network in reducing the inductive kick generated by opening the switch. Note that the switch voltage is controlled at a 199-V peak value and the system is critically damped; that is, there is little or no overshoot, having stabilized in less than 5  $\mu$ s. Because of its importance, this  $R$ - $C$  network is called a *snubber* and is the engineer's solution of choice for controlling inductive kick.



**Figure 7.36**

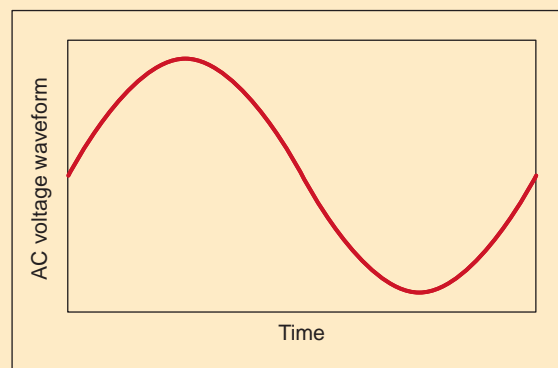
Plot of the switch voltage when the snubber circuit is employed to reduce inductive kick.

One of the most common and necessary subcircuits that appears in a wide variety of electronic systems—for example, stereos, TVs, radios, and computers—is a quality dc voltage source or power supply. The standard wall socket supplies an alternating current (ac) voltage waveform shown in Fig. 7.37a, and the conversion of this voltage to a desired dc level is done as illustrated in Fig. 7.37b. The ac waveform is converted to a quasi-dc voltage by an inexpensive ac–dc converter whose output contains remnants of the ac input and is unregulated. A higher quality dc output is created by a switching dc–dc converter. Of the several versions of dc–dc converters, we will focus on a topology called the boost converter, shown in Fig. 7.38. Let us develop an equation relating the output voltage to the switching characteristics.

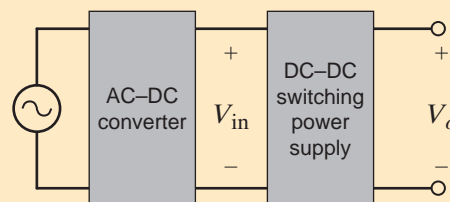
## APPLICATION EXAMPLE 7.16

**Figure 7.37**

(a) The ac voltage waveform at a standard wall outlet and (b) a block diagram of a modern dc power supply.



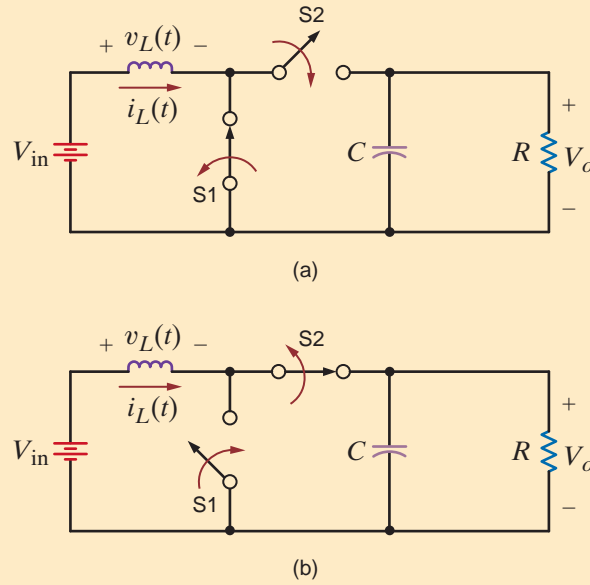
(a)



(b)

**Figure 7.38**

The boost converter with switch settings for time intervals (a)  $t_{\text{on}}$  and (b)  $t_{\text{off}}$ .


**SOLUTION**

Consider the boost converter in Fig. 7.38a, where switch 1 (S1) is closed and S2 is open for a time interval  $t_{\text{on}}$ . This isolates the inductor from the capacitor, creating two subcircuits that can be analyzed independently. Note that during  $t_{\text{on}}$  the inductor current and stored energy are increasing while at the output node, the capacitor voltage discharges exponentially into the load. If the capacitor's time constant ( $\tau = RC$ ) is large, then the output voltage will decrease slowly. Thus, during  $t_{\text{on}}$  energy is stored in the inductor and the capacitor provides energy to the load.

Next, we change both switch positions so that S1 is open and S2 is closed for a time interval  $t_{\text{off}}$ , as seen in Fig. 7.38b. Since the inductor current cannot change instantaneously, current flows into the capacitor and the load, recharging the capacitor. During  $t_{\text{off}}$  the energy that was added to the inductor during  $t_{\text{on}}$  is used to recharge the capacitor and drive the load. When  $t_{\text{off}}$  has elapsed, the cycle is repeated.

Note that the energy added to the inductor during  $t_{\text{on}}$  must go to the capacitor and load during  $t_{\text{off}}$ ; otherwise, the inductor energy would increase to the point that the inductor would fail. This requires that the energy stored in the inductor must be the same at the end of each switching cycle. Recalling that the inductor energy is related to the current by

$$w(t) = \frac{1}{2} Li^2(t)$$

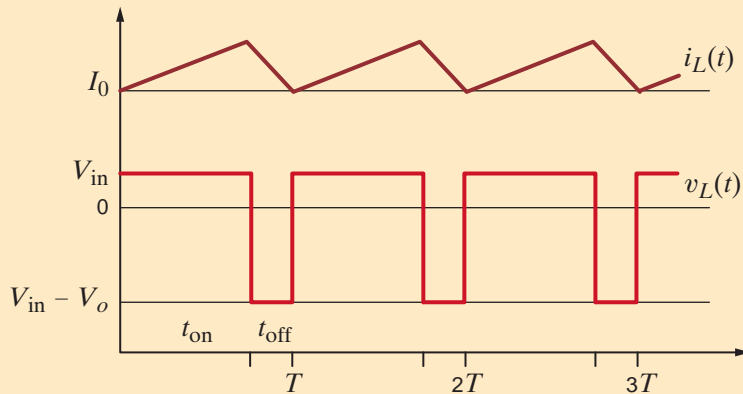
we can state that the inductor current must also be the same at the end of each switching cycle, as shown in Fig. 7.39. The inductor current during  $t_{\text{on}}$  and  $t_{\text{off}}$  can be written as

$$i_L(t) = \frac{1}{L} \int_0^{t_{\text{on}}} v_L(t) dt = \frac{1}{L} \int_0^{t_{\text{on}}} V_{\text{in}} dt = \left[ \frac{V_{\text{in}}}{L} \right] t_{\text{on}} + I_0 \quad 0 < t < t_{\text{on}}$$

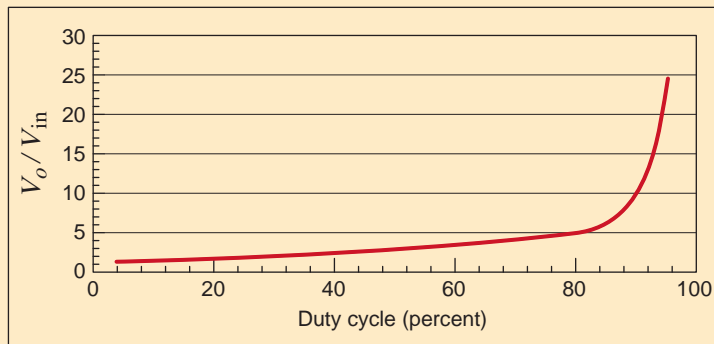
$$i_L(t) = \frac{1}{L} \int_{t_{\text{on}}}^{t_{\text{on}}+t_{\text{off}}} v_L(t) dt = \frac{1}{L} \int_{t_{\text{on}}}^{t_{\text{on}}+t_{\text{off}}} (V_{\text{in}} - V_o) dt = \left[ \frac{V_{\text{in}} - V_o}{L} \right] t_{\text{off}} + I_0 \quad t_{\text{on}} < t < t_{\text{off}} \quad 7.33$$

where  $I_0$  is the initial current at the beginning of each switching cycle. If the inductor current is the same at the beginning and end of each switching cycle, then the integrals in Eq. (7.33) must sum to zero. Or

$$V_{\text{in}} t_{\text{on}} = (V_o - V_{\text{in}}) t_{\text{off}} = (V_o - V_{\text{in}})(T - t_{\text{on}})$$



**Figure 7.39**  
Waveform sketches for the inductor voltage and current.



**Figure 7.40**  
Effect of duty cycle on boost converter gain.

where  $T$  is the period ( $T = t_{\text{on}} + t_{\text{off}}$ ). Solving for  $V_o$  yields

$$V_o = V_{\text{in}} \left[ \frac{T}{T - t_{\text{on}}} \right] = V_{\text{in}} \left[ \frac{1}{(T - t_{\text{on}})/T} \right] = V_{\text{in}} \left[ \frac{1}{(1 - t_{\text{on}}/T)} \right] = V_{\text{in}} \left[ \frac{1}{1 - D} \right]$$

where  $D$  is the duty cycle ( $D = t_{\text{on}}/T$ ). Thus, by controlling the duty cycle, we control the output voltage. Since  $D$  is always a positive fraction,  $V_o$  is always bigger than  $V_{\text{in}}$ —thus the name boost converter. A plot of  $V_o/V_{\text{in}}$  versus duty cycle is shown in Fig. 7.40.

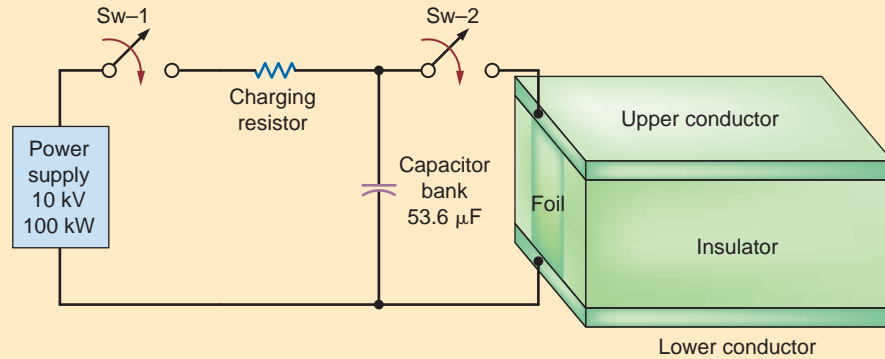
An experimental schematic for a railgun is shown in Fig. 7.41. With switch Sw-2 open, switch Sw-1 is closed and the power supply charges the capacitor bank to 10 kV. Then switch Sw-1 is opened. The railgun is fired by closing switch Sw-2. When the capacitor discharges, the current causes the foil at the end of the gun to explode, creating a hot plasma that accelerates down the tube. The voltage drop in vaporizing the foil is negligible, and, therefore, more than 95% of the energy remains available for accelerating the plasma. The current flow establishes a magnetic field, and the force on the plasma caused by the magnetic field, which is proportional to the square of the current at any instant of time, accelerates the plasma. A higher initial voltage will result in more acceleration.

The circuit diagram for the discharge circuit is shown in Fig. 7.42. The resistance of the bus (a heavy conductor) includes the resistance of the switch. The resistance of the foil and resultant plasma is negligible; therefore, the current flowing between the upper and lower conductors is dependent on the remaining circuit components in the closed path, as specified in Fig. 7.41.

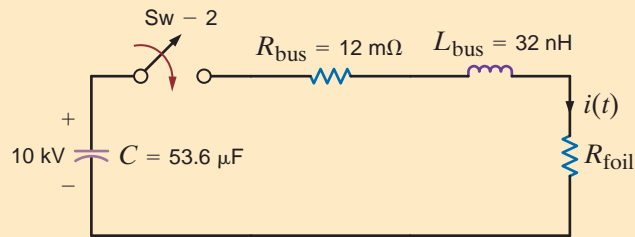
## APPLICATION EXAMPLE 7.17

**Figure 7.41**

Experimental schematic for a railgun.


**Figure 7.42**

Railgun discharge circuit.



The differential equation for the natural response of the current is

$$\frac{d^2 i(t)}{dt^2} + \frac{R_{\text{bus}}}{L_{\text{bus}}} \frac{di(t)}{dt} + \frac{i(t)}{L_{\text{bus}} C} = 0$$

Let us use the characteristic equation to describe the current waveform.

**SOLUTION** Using the circuit values, the characteristic equation is

$$s^2 + 37.5 \times 10^4 s + 58.3 \times 10^{10} = 0$$

and the roots of the equation are

$$s_1, s_2 = (-18.75 \pm j74) \times 10^4$$

and hence the network is underdamped.

The roots of the characteristic equation illustrate that the damped resonant frequency is

$$\omega_d = 740 \text{ krad/s}$$

Therefore,

$$f_d = 118 \text{ kHz}$$

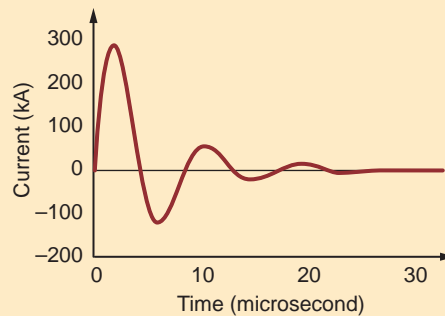
and the period of the waveform is

$$T = \frac{1}{f_d} = 8.5 \mu\text{s}$$

An actual plot of the current is shown in Fig. 7.43, and this plot verifies that the period of the damped response is indeed  $8.5 \mu\text{s}$ .

**Figure 7.43**

Load current with a capacitor bank charged to 10 kV.



## 7.5

## Design Examples

We wish to design an efficient electric heater that operates from a 24-V dc source and creates heat by driving a 1- $\Omega$  resistive heating element. For the temperature range of interest, the power absorbed by the heating element should be between 100 and 400 W. An experienced engineer has suggested that two quite different techniques be examined as possible solutions: a simple voltage divider and a switched inductor circuit.

In the first case, the required network is shown in Fig. 7.44. The variable resistance element is called a rheostat. Potentiometers are variable resistors that are intended for low power (i.e., less than 1 W) operation. Rheostats, on the other hand, are devices used at much higher power levels.

We know from previous work that the heating element voltage is

$$V_o = V_S \frac{R_{\text{he}}}{R_{\text{he}} + R_{\text{adj}}} \quad 7.34$$

Changing  $R_{\text{adj}}$  will change the voltage across, and the power dissipated by, the heating element. The power can be expressed as

$$P_o = \frac{V_o^2}{R_{\text{he}}} = V_S^2 \frac{R_{\text{he}}}{(R_{\text{he}} + R_{\text{adj}})^2} \quad 7.35$$

By substituting the maximum and minimum values of the output power into Eq. (7.35), we can determine the range of resistance required for the rheostat:

$$R_{\text{adj, min}} = \sqrt{\frac{V_S^2 R_{\text{he}}}{P_{o, \text{max}}}} - R_{\text{he}} = \sqrt{\frac{(24^2)(1)}{400}} - 1 = 0.2 \, \Omega$$

$$R_{\text{adj, max}} = \sqrt{\frac{V_S^2 R_{\text{he}}}{P_{o, \text{min}}}} - R_{\text{he}} = \sqrt{\frac{(24^2)(1)}{100}} - 1 = 1.4 \, \Omega \quad 7.36$$

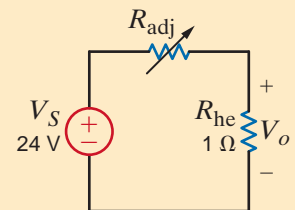
So, a 2- $\Omega$  rheostat should work just fine. But what about the efficiency of our design? How much power is lost in the rheostat? The rheostat power can be expressed as

$$P_{\text{adj}} = \frac{(V_S - V_o)^2}{R_{\text{adj}}} = V_S^2 \frac{R_{\text{adj}}}{(R_{\text{he}} + R_{\text{adj}})^2} \quad 7.37$$

We know from our studies of maximum power transfer that the value of  $R_{\text{adj}}$  that causes maximum power loss, and thus the worst-case efficiency for the circuit, occurs when  $R_{\text{adj}} = R_{\text{he}} = 1 \, \Omega$ . Obviously, the resistances consume the same power, and the efficiency is only 50%.

Now that we understand the capability of this voltage-divider technique, let's explore the alternative solution. At this point, it would at least appear that the use of a switched inductor is a viable alternative since this element consumes no power. So, if we could set up a current in an inductor, switch it into the heating element, and repeat this operation fast enough, the heating element would respond to the average power delivered to it and maintain a constant temperature.

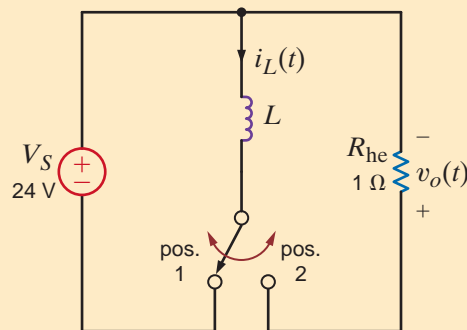
Consider the circuit in Fig. 7.45, where the switch moves back and forth, energizing the inductor with current, and then directing that current to the heating element. Let's examine this concept to determine its effectiveness. We begin by assuming that the inductor current

**DESIGN  
EXAMPLE 7.18****SOLUTION****Figure 7.44**

A simple circuit for varying the temperature of a heating element.

**Figure 7.45**

A switched inductor solution to varying the heating element's temperature.



is zero and the switch has just moved to position 1. The inductor current will begin to grow *linearly* in accordance with the fundamental equation

$$i_L(t) = \frac{1}{L} \int v_L(t) dt = \frac{1}{L} \int V_S dt = \frac{V_S}{L} t \quad 7.38$$

Note that  $V_S/L$  is the slope of the linear growth. Since  $V_S$  is set at 24 V, we can control the slope with our selection for  $L$ . The inductor current increases until the switch moves at time  $t = t_1$ , at which point the peak current is

$$I_{\text{peak}} = \frac{V_S}{L} t_1 \quad 7.39$$

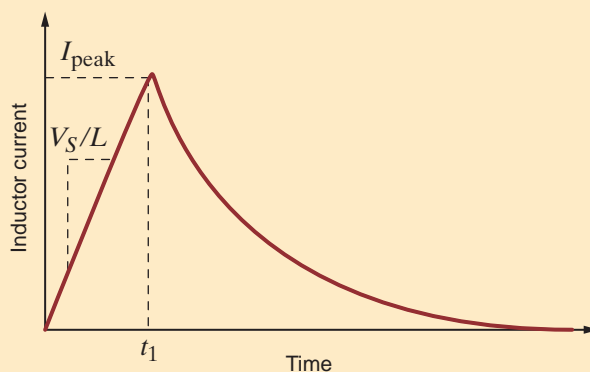
This inductor current will discharge exponentially through the heating element according to the equation

$$i_L(t') = I_{\text{peak}} e^{-t'/\tau} \quad 7.40$$

where  $t'$  is zero when the switch moves to position 2 and  $\tau = L/R_{\text{he}}$ . If the switch is maintained in position 2 for about 5 time constants, the inductor current will essentially reach zero and the switch can return to position 1 under the initial condition—zero inductor current. A sketch of the inductor current over a single switching cycle is shown in Fig. 7.46. Repeated switching cycles will transfer power to the heating element. If the switching period is much shorter than the element's thermal time constant—a measure of how quickly the element heats up—then the element's temperature will be determined by the average power. This is a concept we don't understand at this point. However, we will present Average Power in Chapter 9, and this example provides at least some motivation for its examination. Nevertheless, we should recognize two things: the load current is just the exponential decaying portion of the inductor current, and the initial value of that exponential is  $I_{\text{peak}}$ , as defined in Eq. (7.39). Increasing  $I_{\text{peak}}$  will increase the element's power and temperature. As Eq. (7.39) indicates, this is easily done by controlling  $t_1$ ! It is impossible to proceed with the design until we can accurately predict the average power at the load.

**Figure 7.46**

A single switching cycle for the inductor-based solution. The value of  $I_{\text{peak}}$  is directly proportional to  $t_1$ .

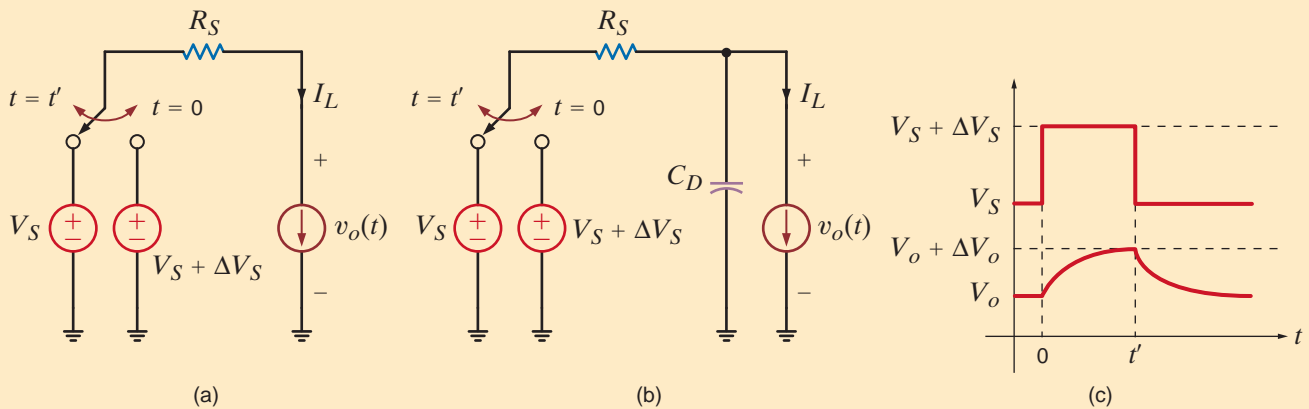




Returning to our original concern, have we improved the efficiency at all? Note that there are no power-consuming components in our new circuit other than the heating element itself. Therefore, ignoring resistance in the inductor and the switch, we find that our solution is 100% efficient! In actuality, efficiencies approaching 95% are attainable. This is a drastic improvement over the other alternative, which employs a rheostat.

Consider the circuit in Fig. 7.47a, where a dc power supply, typically fed from a wall outlet, is modeled as a dc voltage source in series with a resistor  $R_S$ . The load draws a constant current and is modeled as a current source. We wish to design the simplest possible circuit that will isolate the load device from disturbances in the power supply voltage. In effect, our task is to improve the performance of the power supply at very little additional cost.

A standard solution to this problem involves the use of a capacitor  $C_D$ , as shown in Fig. 7.47b. The two voltage sources and the single-pole double-throw switch model the input disturbance sketched in Fig. 7.47c. Engineers call  $C_D$  a *decoupling capacitor* since it decouples disturbances in the input voltage from the output voltage. In typical electronic circuits, we find liberal use of these decoupling capacitors. Thus, our task is to develop a design equation for  $C_D$  in terms of  $R_S$ ,  $V_S$ ,  $V_o$ ,  $\Delta V_S$ ,  $\Delta V_o$ , and  $t'$ . Our result will be applicable to any scenario that can be modeled by the circuit in Fig. 7.47b.



**Figure 7.47** (a) A simple dc circuit that models disturbances in the source voltage. (b) The use of a decoupling capacitor to reduce disturbances in the load voltage. (c) Definitions of the input and output voltage disturbances.

The voltage across  $C_D$  can be expressed in the standard form as

$$v_o(t) = K_1 + K_2 e^{-t/\tau} \quad 7.41$$

Equivalent circuits for  $t = 0$  and  $t = \infty$  are shown in Fig. 7.48a and b, respectively. At these two time extremes we find

$$v_o(0) = K_1 + K_2 = V_S - I_L R_S$$

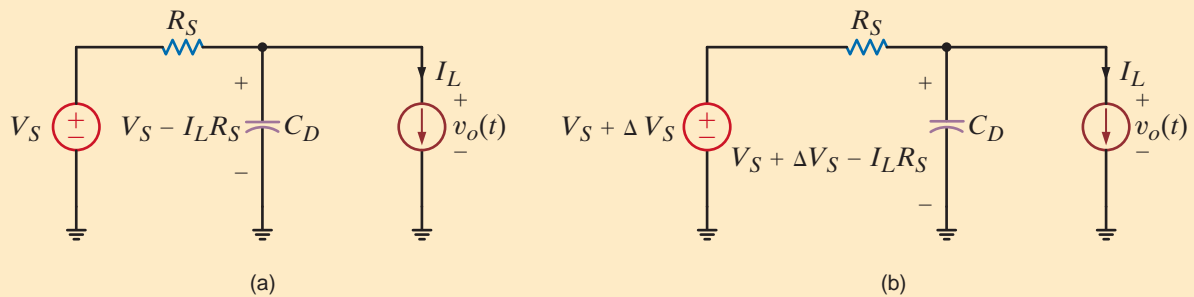
$$v_o(\infty) = K_1 = V_S + \Delta V_S - I_L R_S \quad 7.42$$

To determine the time constant's equivalent resistance, we return to the circuit in Fig. 7.48b, reduce all independent sources to zero, and view the resulting circuit from the capacitor's terminals. It is easy to see that the time constant is simply  $R_S C_D$ . Thus,

$$v_o(t) = V_S + \Delta V_S - I_L R_S - \Delta V_S e^{-t/R_S C_D} \quad 7.43$$

## DESIGN EXAMPLE 7.19

## SOLUTION



**Figure 7.48** The circuit in Fig. 7.47b at  $t = 0$  just after the switch has moved. (b) The same circuit at  $t = \infty$ .

At exactly  $t = t'$ , the output voltage is its original value,  $V_o(0)$  plus  $\Delta V_o$ . Substituting this condition into Eq. (7.43) yields

$$v_o(t') = V_S - I_L R_S + \Delta V_o = V_S + \Delta V_S - I_L R_S - \Delta V_S e^{-t'/R_S C_D}$$

which can be reduced to the expression

$$\Delta V_S - \Delta V_o = \Delta V_S e^{-t'/R_S C_D} \quad 7.44$$

Notice that the value of  $C_D$  depends not on the input and output voltages, but rather on the *changes* in those voltages! This makes Eq. (7.44) very versatile indeed. A simple algebraic manipulation of Eq. (7.44) yields the design equation for  $C_D$ :

$$C_D = \frac{t'}{R_S \ln \left[ \frac{\Delta V_S}{\Delta V_S - \Delta V_o} \right]} \quad 7.45$$

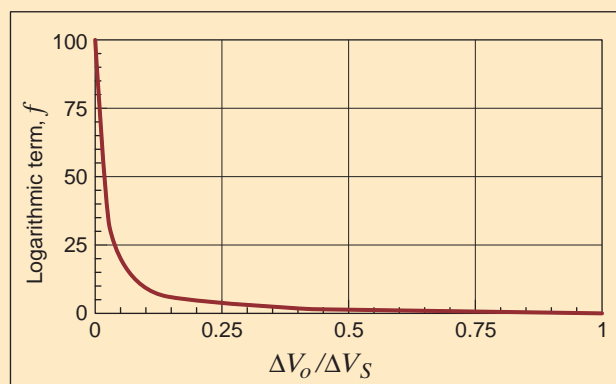
Examining this expression, we see that  $C_D$  is directly related to  $t'$  and inversely related to  $R_S$ . If  $t'$  doubles or if  $R_S$  is halved, then  $C_D$  will double as well. This result is not very surprising. The dependence on the voltage changes is more complex. Let us isolate this term and express it as

$$f = \frac{1}{\ln \left[ \frac{\Delta V_S}{\Delta V_S - \Delta V_o} \right]} = \frac{1}{\ln \left[ \frac{1}{1 - \Delta V_o/\Delta V_S} \right]} = \frac{-1}{\ln \left[ 1 - \frac{\Delta V_o}{\Delta V_S} \right]} \quad 7.46$$

Figure 7.49 shows a plot of this term versus the ratio  $\Delta V_o/\Delta V_S$ . Note that for very small  $\Delta V_o$  (i.e., a large degree of decoupling), this term is very large. Since this term is multiplied with  $t'$  in Eq. (7.45), we find that the price for excellent decoupling is a very large capacitance.

**Figure 7.49**

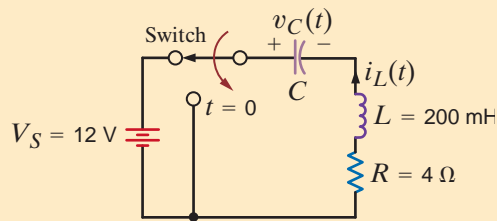
A plot of the function  $f$  versus  $\Delta V_o/\Delta V_S$ .



Finally, as an example, consider the scenario in which  $V_S$  is 5 V,  $R_S$  is  $20\ \Omega$ , and the input disturbance is characterized by  $\Delta V_S = 1\ \text{V}$  and  $t' = 0.5\ \text{ms}$ . If the output changes are to be limited to only 0.2 V, the required capacitance would be  $C_D = 112.0\ \mu\text{F}$ . Such a capacitor rated for operation at up to 16 V costs less than \$0.20 and should be slightly smaller than a peanut M&M.

This very simple, but very important, application demonstrates how an engineer can apply his or her basic circuit analysis skills to attack and describe a practical application in such a way that the result is broadly applicable. Remember, the key to this entire exercise is the creation of a circuit model for the decoupling scenario.

The network in Fig. 7.50 models an automobile ignition system. The voltage source represents the standard 12-V battery. The inductor is the ignition coil, which is magnetically coupled to the starter (not shown). The inductor's internal resistance is modeled by the resistor, and the switch is the keyed ignition switch. Initially, the switch connects the ignition circuitry to the battery, and thus the capacitor is charged to 12 V. To start the motor, we close the switch, thereby discharging the capacitor through the inductor. Assuming that optimum starter operation requires an overdamped response for  $i_L(t)$  that reaches at least 1 A within 100 ms after switching and remains above 1 A for between 1 and 1.5 s, let us find a value for the capacitor that will produce such a current waveform. In addition, let us plot the response, including the time interval just prior to moving the switch, and verify our design.



## DESIGN EXAMPLE 7.20

Figure 7.50

Circuit model for ignition system.

Before the switch is moved at  $t = 0$ , the capacitor looks like an open circuit, and the inductor acts like a short circuit. Thus,

$$i_L(0^-) = i_L(0^+) = 0\ \text{A} \quad \text{and} \quad v_C(0^-) = v_C(0^+) = 12\ \text{V}$$

After switching, the circuit is a series  $RLC$  unforced network described by the characteristic equation

$$s^2 + \frac{R}{L}s + \frac{1}{LC} = 0$$

with roots at  $s = -s_1$  and  $-s_2$ . The characteristic equation is of the form

$$(s + s_1)(s + s_2) = s^2 + (s_1 + s_2)s + s_1s_2 = 0$$

Comparing the two expressions, we see that

$$\frac{R}{L} = s_1 + s_2 = 20$$

and

$$\frac{1}{LC} = s_1s_2$$

## SOLUTION

Since the network must be overdamped, the inductor current is of the form

$$i_L(t) = K_1 e^{-s_1 t} + K_2 e^{-s_2 t}$$

Just after switching,

$$i_L(0^+) = K_1 + K_2 = 0$$

or

$$K_2 = -K_1$$

Also, at  $t = 0^+$ , the inductor voltage equals the capacitor voltage because  $i_L = 0$  and therefore  $i_L R = 0$ . Thus, we can write

$$v_L(0^+) = L \frac{di_L(0^+)}{dt} \Rightarrow -s_1 K_1 + s_2 K_1 = \frac{12}{L}$$

or

$$K_1 = \frac{60}{s_2 - s_1}$$

At this point, let us arbitrarily choose  $s_1 = 3$  and  $s_2 = 17$ , which satisfies the condition  $s_1 + s_2 = 20$ , and furthermore,

$$K_1 = \frac{60}{s_2 - s_1} = \frac{60}{14} = 4.29$$

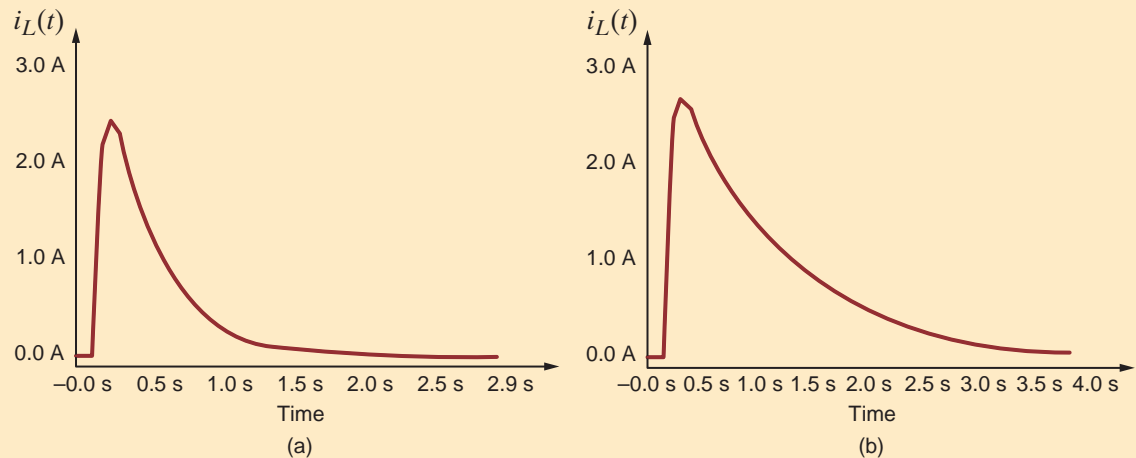
$$C = \frac{1}{L s_1 s_2} = \frac{1}{(0.2)(3)(17)} = 98 \text{ mF}$$

Hence,  $i_L(t)$  is

$$i_L(t) = 4.29[e^{-3t} - e^{-17t}] \text{ A}$$

Figure 7.51a shows a plot of  $i_L(t)$ . At 100 ms, the current has increased to 2.39 A, which meets the initial magnitude specifications. However, 1 second later, at  $t = 1.1$  s,  $i_L(t)$  has fallen to only 0.16 A—well below the magnitude-over-time requirement. Simply put, the current falls too quickly. To make an informed estimate for  $s_1$  and  $s_2$ , let us investigate the effect the roots exhibit on the current waveform when  $s_2 > s_1$ .

Since  $s_2 > s_1$ , the exponential associated with  $s_2$  will decay to zero faster than that associated with  $s_1$ . This causes  $i_L(t)$  to rise—the larger the value of  $s_2$ , the faster the rise. After  $5(1/s_2)$  seconds have elapsed, the exponential associated with  $s_2$  is approximately zero and  $i_L(t)$  decreases exponentially with a time constant of  $\tau = 1/s_1$ . Thus, to slow the fall of



**Figure 7.51** Ignition current as a function of time.

$i_L(t)$ , we should reduce  $s_1$ . Hence, let us choose  $s_1 = 1$ . Since  $s_1 + s_2$  must equal 20,  $s_2 = 19$ . Under these conditions

$$C = \frac{1}{Ls_1s_2} = \frac{1}{(0.2)(1)(19)} = 263 \text{ mF}$$

and

$$K_1 = \frac{60}{s_2 - s_1} = \frac{60}{18} = 3.33$$

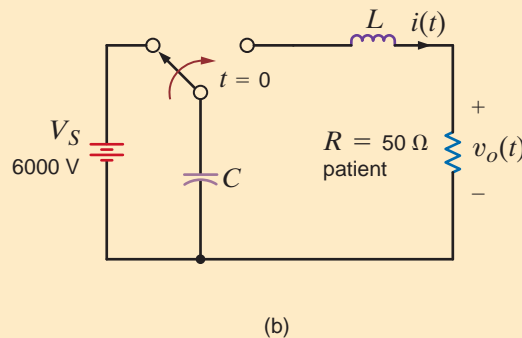
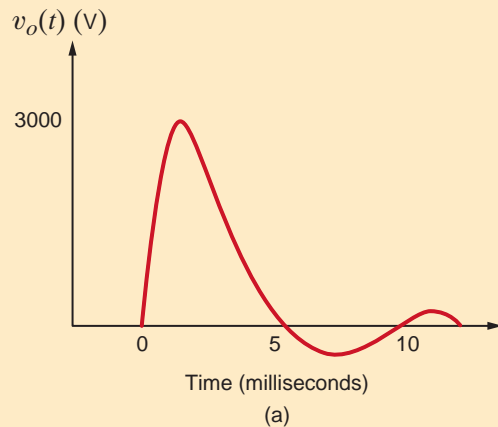
Thus, the current is

$$i_L(t) = 3.33[e^{-t} - e^{-19t}] \text{ A}$$

which is shown in Fig. 7.51b. At 100 ms the current is 2.52 A. Also, at  $t = 1.1$  s, the current is 1.11 A—above the 1-A requirement. Therefore, the choice of  $C = 263$  mF meets all starter specifications.

A defibrillator is a device that is used to stop heart fibrillations—erratic uncoordinated quivering of the heart muscle fibers—by delivering an electric shock to the heart. The Lown defibrillator was developed by Dr. Bernard Lown in 1962. Its key feature, shown in Fig. 7.52a, is its voltage waveform. A simplified circuit diagram that is capable of producing the Lown waveform is shown in Fig. 7.52b. Let us find the necessary values for the inductor and capacitor.

## DESIGN EXAMPLE 7.21



**Figure 7.52** Lown defibrillator waveform and simplified circuit. Reprinted with permission from John Wiley & Sons, Inc., *Introduction to Biomedical Equipment Technology*.

Since the Lown waveform is oscillatory in nature, we know that the circuit is underdamped ( $\zeta < 1$ ) and the voltage applied to the patient is of the form

## SOLUTION

$$v_o(t) = K_1 e^{-\zeta\omega_o t} \sin[\omega t]$$

where

$$\zeta\omega_o = \frac{R}{2L}$$

$$\omega = \omega_o \sqrt{1 - \zeta^2}$$

and

$$\omega_o = \frac{1}{\sqrt{LC}}$$

for the series  $RLC$  circuit. From Fig. 7.52a, we see that the period of the sine function is

$$T = 10 \text{ ms}$$

Thus, we have one expression involving  $\omega_o$  and  $\zeta$

$$\omega = \frac{2\pi}{T} = \omega_o \sqrt{1 - \zeta^2} = 200\pi \text{ rad/s}$$

A second expression can be obtained by solving for the ratio of  $v_o(t)$  at  $t = T/4$  to that at  $t = 3T/4$ . At these two instants of time, the sine function is equal to  $+1$  and  $-1$ , respectively. Using values from Fig. 7.52a, we can write

$$\frac{v_o(t/4)}{-v_o(3T/4)} = \frac{K_1 e^{-\zeta\omega_o(T/4)}}{K_1 e^{-\zeta\omega_o(3T/4)}} = e^{\zeta\omega_o(T/2)} \approx \frac{3000}{250} = 12$$

or

$$\zeta\omega_o = 497.0$$

Given  $R = 50 \Omega$ , the necessary inductor value is

$$L = 50.3 \text{ mH}$$

Using our expression for  $\omega$ ,

$$\omega^2 = (200\pi)^2 = \omega_o^2 - (\zeta\omega_o)^2$$

or

$$= (200\pi)^2 = \frac{1}{LC} - (497.0)^2$$

Solving for the capacitor value, we find

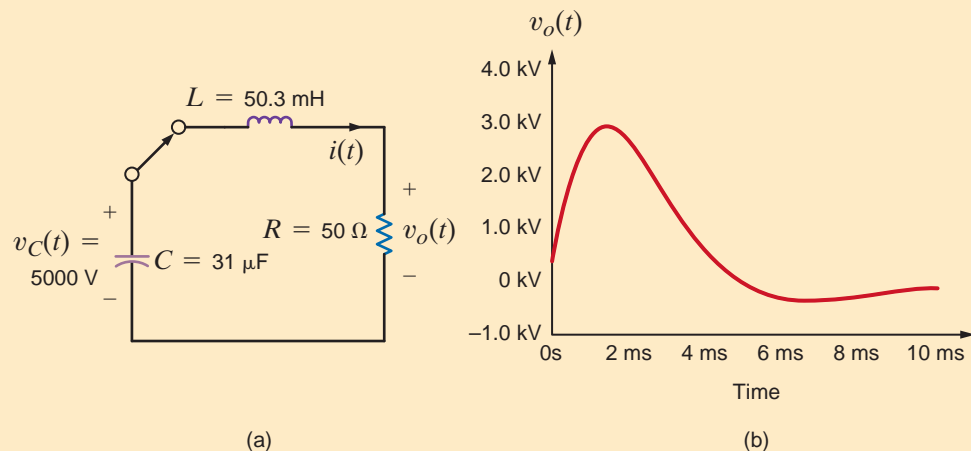
$$C = 31.0 \mu\text{F}$$

Let us verify our design using the circuit shown in Fig. 7.53a. The output voltage plot shown in Fig. 7.53b matches the Lown waveform in Fig. 7.52a; thus, we can consider the design to be a success.

While this solution is viable, it is not the only one. Like many design problems, there are often various ways to satisfy the design specifications.

**Figure 7.53**

Circuit and output plot for the Lown defibrillator.



## SUMMARY

### First-Order Circuits

- An  $RC$  or  $RL$  transient circuit is said to be first order if it contains only a single capacitor or single inductor. The voltage or current anywhere in the network can be obtained by solving a first-order differential equation.
- The form of a first-order differential equation with a constant forcing function is

$$\frac{dx(t)}{dt} + \frac{x(t)}{\tau} = A$$

and the solution is

$$x(t) = A\tau + K_2e^{-t/\tau}$$

where  $A\tau$  is referred to as the steady-state solution and  $\tau$  is called the time constant.

- The function  $e^{-t/\tau}$  decays to a value that is less than 1% of its initial value after a period of  $5\tau$ . Therefore, the time constant,  $\tau$ , determines the time required for the circuit to reach steady state.
- The time constant for an  $RC$  circuit is  $R_{Th}C$  and for an  $RL$  circuit is  $L/R_{Th}$ , where  $R_{Th}$  is the Thévenin equivalent resistance looking into the circuit at the terminals of the storage element (i.e., capacitor or inductor).
- The two approaches proposed for solving first-order transient circuits are the differential equation approach and the step-by-step method. In the former case, the differential equation that describes the dynamic behavior of the circuit is solved to determine the desired solution. In the latter case, the initial conditions and the steady-state value of the voltage across the capacitor or current in the inductor are used in conjunction with the circuit's time constant and the known form of the desired variable to obtain a solution.

- The response of a first-order transient circuit to an input pulse can be obtained by treating the pulse as a combination of two step-function inputs.

### Second-Order Circuits

- The voltage or current in an  $RLC$  transient circuit can be described by a constant coefficient differential equation of the form

$$\frac{d^2x(t)}{dt^2} + 2\zeta\omega_0\frac{dx(t)}{dt} + \omega_0^2x(t) = f(t)$$

where  $f(t)$  is the network forcing function.

- The characteristic equation for a second-order circuit is  $s^2 + 2\zeta\omega_0s + \omega_0^2 = 0$ , where  $\zeta$  is the damping ratio and  $\omega_0$  is the undamped natural frequency.
- If the two roots of the characteristic equation are
  - real and unequal, then  $\zeta > 1$  and the network response is overdamped
  - real and equal, then  $\zeta = 1$  and the network response is critically damped
  - complex conjugates, then  $\zeta < 1$  and the network response is underdamped
- The three types of damping together with the corresponding network response are as follows:
  1. Overdamped:  $x(t) = K_1e^{-(\zeta\omega_0 - \omega_0\sqrt{\zeta^2 - 1})t} + K_2e^{-(\zeta\omega_0 + \omega_0\sqrt{\zeta^2 - 1})t}$
  2. Critically damped:  $x(t) = B_1e^{-\zeta\omega_0t} + B_2te^{-\zeta\omega_0t}$
  3. Underdamped:  $x(t) = e^{-\sigma t}(A_1\cos\omega_d t + A_2\sin\omega_d t)$ , where  $\sigma = \zeta\omega_0$  and  $\omega_d = \omega_0\sqrt{1 - \zeta^2}$
- Two initial conditions are required to derive the two unknown coefficients in the network response equations.

## PROBLEMS

- 7.1** Use the differential equation approach to find  $i(t)$  for  $t > 0$  in the network in Fig. P7.1.

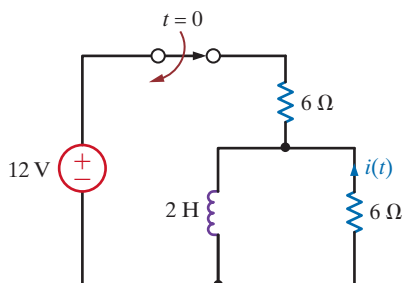


Figure P7.1

- 7.2** Use the differential equation approach to find  $i_o(t)$  for  $t > 0$  in the network in Fig. P7.2.

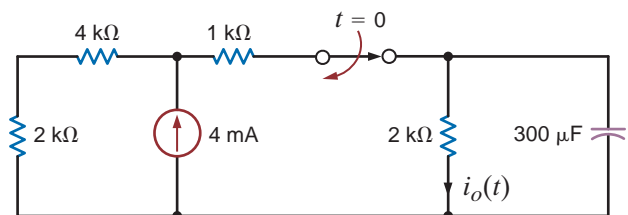


Figure P7.2

**7.3** Use the differential equation approach to find  $v_o(t)$  for  $t > 0$  in the circuit in Fig. P7.3 and plot the response including the time interval just prior to switch action.

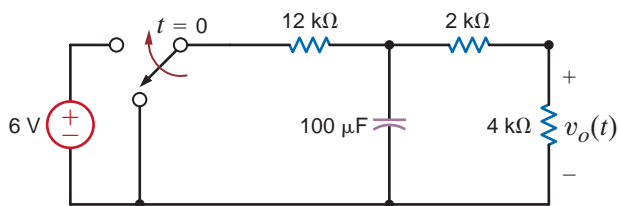


Figure P7.3

**7.4** Use the differential equation approach to find  $v_C(t)$  for  $t > 0$  in the circuit in Fig. P7.4.

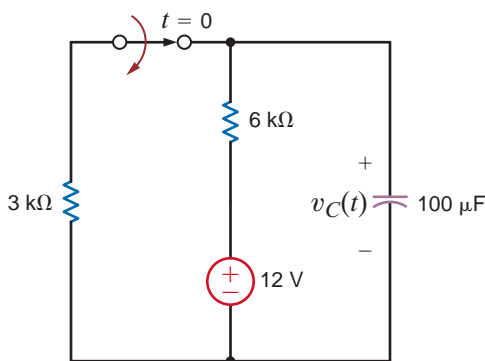


Figure P7.4

**7.5** Use the differential equation approach to find  $v_C(t)$  for  $t > 0$  in the circuit in Fig. P7.5.

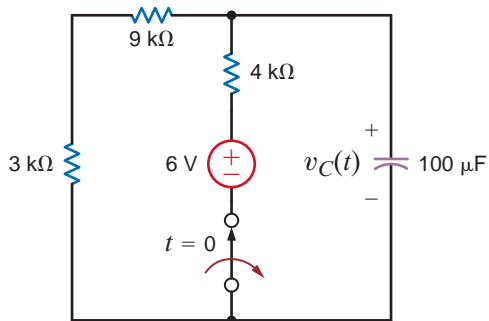


Figure P7.5

**7.6** Use the differential equation approach to find  $v_C(t)$  for  $t > 0$  in the circuit in Fig. P7.6 and plot the response including the time interval just prior to closing the switch.

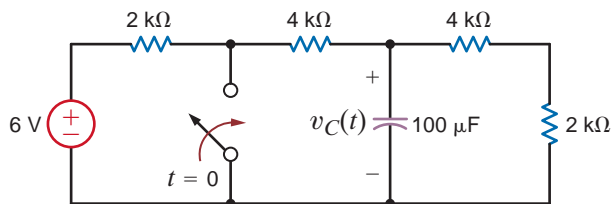


Figure P7.6

**7.7** Use the differential equation approach to find  $i_o(t)$  for  $t > 0$  in the circuit in Fig. P7.7 and plot the response including the time interval just prior to opening the switch.

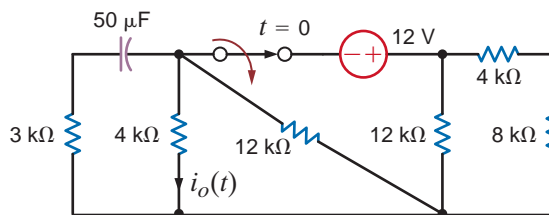


Figure P7.7

**7.8** Use the differential equation approach to find  $i_o(t)$  for  $t > 0$  in the circuit in Fig. P7.8 and plot the response including the time interval just prior to closing the switch.

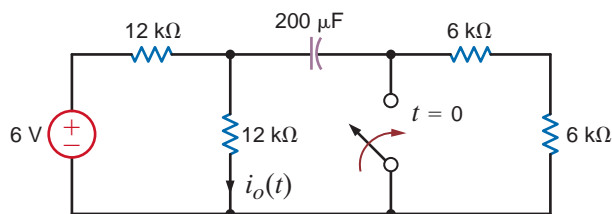


Figure P7.8

**7.9** Use the differential equation approach to find  $v_o(t)$  for  $t > 0$  in the circuit in Fig. P7.9 and plot the response including the time interval just prior to opening the switch.

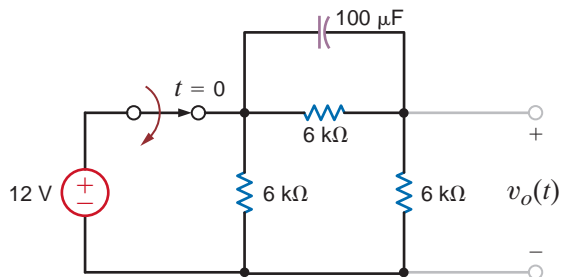


Figure P7.9

**7.10** In the network in Fig. P7.10, find  $i_o(t)$  for  $t > 0$  using the differential equation approach.

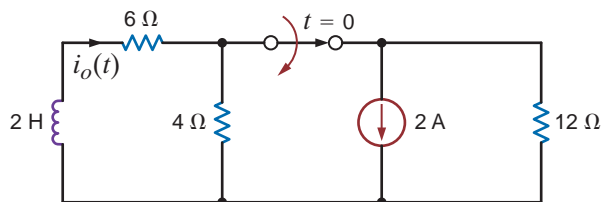


Figure P7.10



**7.11** Use the differential equation approach to find  $i_L(t)$  for  $t > 0$  in the circuit in Fig. P7.11 and plot the response, including the time interval just prior to opening the switch.

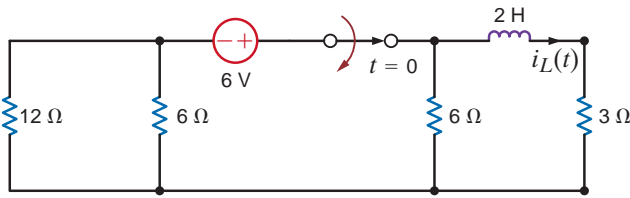


Figure P7.11

**7.12** Use the differential equation approach to find  $v_o(t)$  for  $t > 0$  in the circuit in Fig. P7.12 and plot the response, including the time interval just prior to opening the switch.

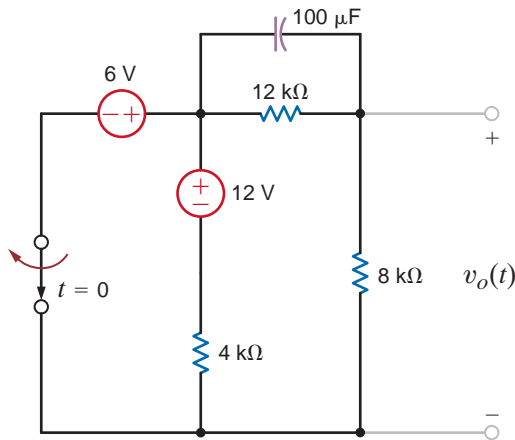


Figure P7.12

**7.13** Use the differential equation approach to find  $i(t)$  for  $t > 0$  in the circuit in Fig. P7.13 and plot the response, including the time interval just prior to opening the switch.

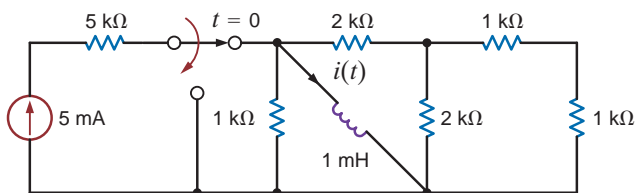


Figure P7.13

**7.14** Using the differential equation approach, find  $i_o(t)$  for  $t > 0$  in the circuit in Fig. P7.14 and plot the response, including the time interval just prior to opening the switch.

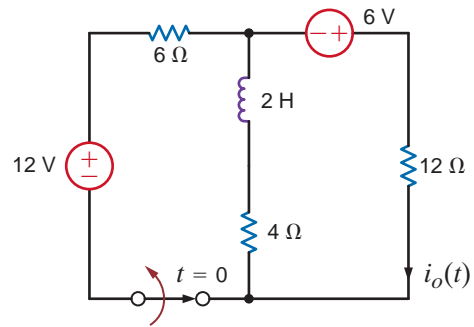


Figure P7.14

**7.15** Use the step-by-step technique to find  $i_o(t)$  for  $t > 0$  in the network in Fig. P7.15.

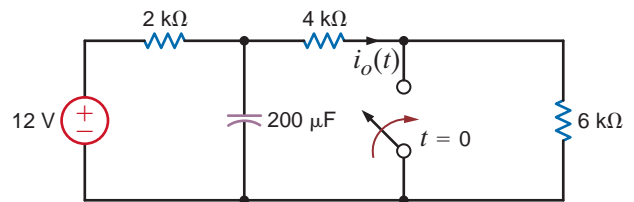


Figure P7.15

**7.16** Use the step-by-step method to find  $i_o(t)$  for  $t > 0$  in the circuit in Fig. P7.16.

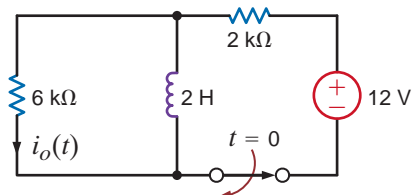


Figure P7.16

**7.17** Find  $v_o(t)$  for  $t > 0$  in the network in Fig. P7.17.

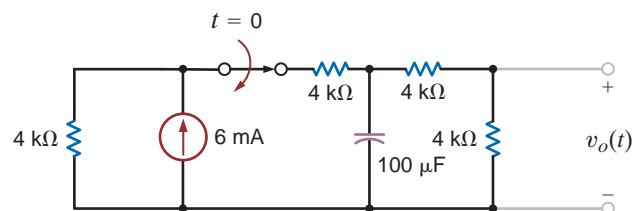


Figure P7.17

7.18 Find  $v_o(t)$  for  $t > 0$  in the network in Fig. P7.18.

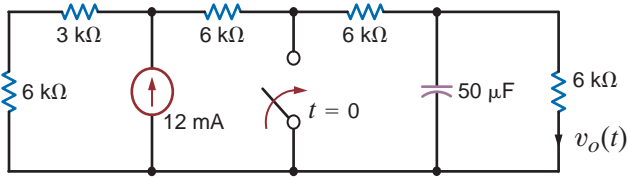


Figure P7.18

7.19 Use the step-by-step method to find  $i_o(t)$  for  $t > 0$  in the circuit in Fig. P7.19.

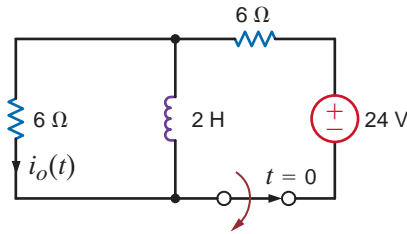


Figure P7.19

7.20 Use the step-by-step method to find  $i_o(t)$  for  $t > 0$  in the circuit in Fig. P7.20.

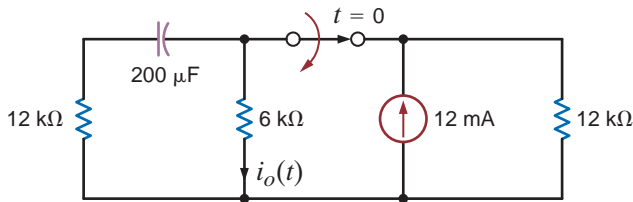


Figure P7.20

7.21 Find  $v_o(t)$  for  $t > 0$  in the circuit in Fig. P7.21.

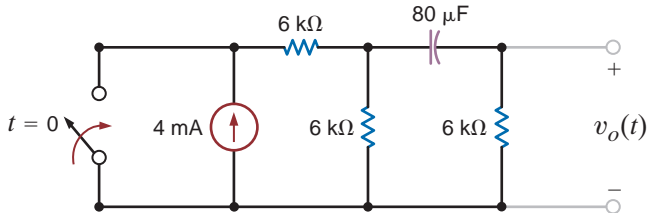


Figure P7.21

7.22 Find  $v_o(t)$  for  $t > 0$  in the circuit in Fig. P7.22.

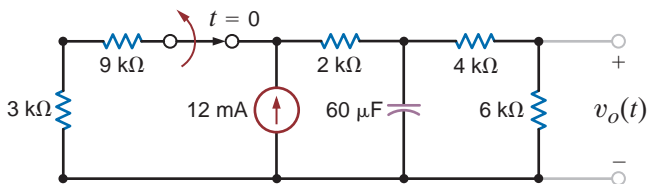


Figure P7.22

7.23 Find  $v_o(t)$  for  $t > 0$  in the circuit in Fig. P7.23.

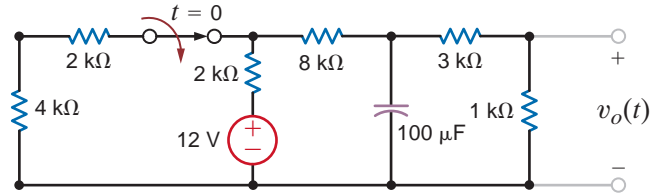


Figure P7.23

7.24 Find  $v_o(t)$  for  $t > 0$  in the network in Fig. P7.24.

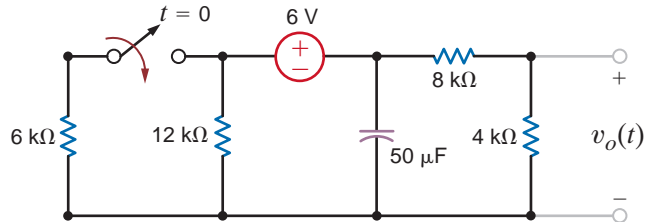


Figure P7.24

7.25 Use the step-by-step technique to find  $i_o(t)$  for  $t > 0$  in the network in Fig. P7.25.

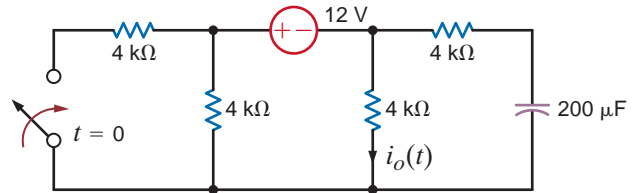


Figure P7.25

7.26 Use the step-by-step method to find  $v_o(t)$  for  $t > 0$  in the network in Fig. P7.26.

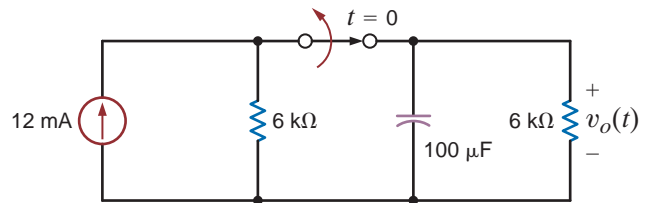


Figure P7.26

7.27 Find  $i_o(t)$  for  $t > 0$  in the circuit in Fig. P7.27.

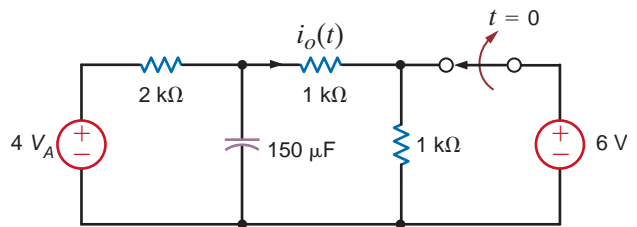
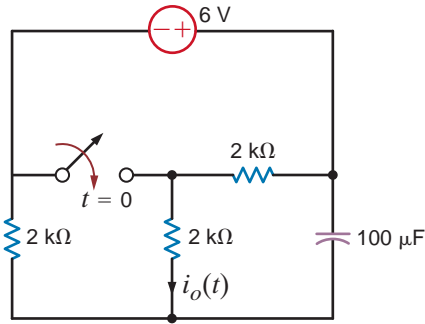


Figure P7.27

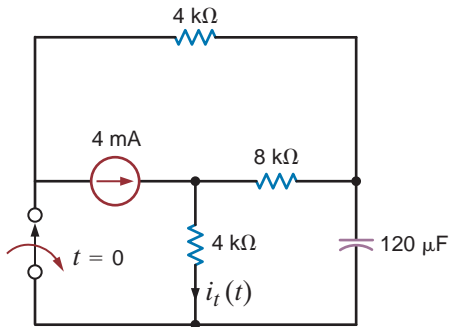


**7.28** Find  $i_o(t)$  for  $t > 0$  in the circuit in Fig. P7.28.



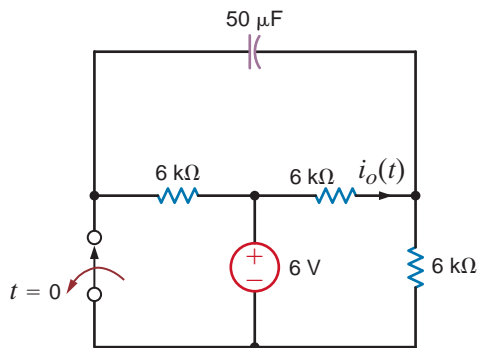
**Figure P7.28**

**7.29** Find  $i_t(t)$  for  $t > 0$  in the circuit in Fig. P7.29.



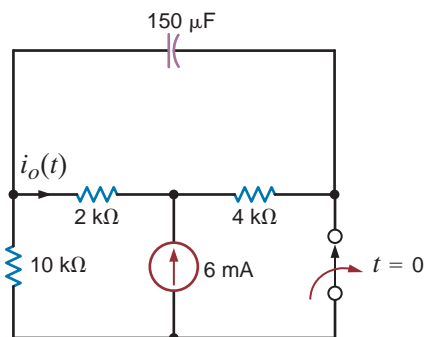
**Figure P7.29**

**7.30** Find  $i_o(t)$  for  $t > 0$  in the network in Fig. P7.30.



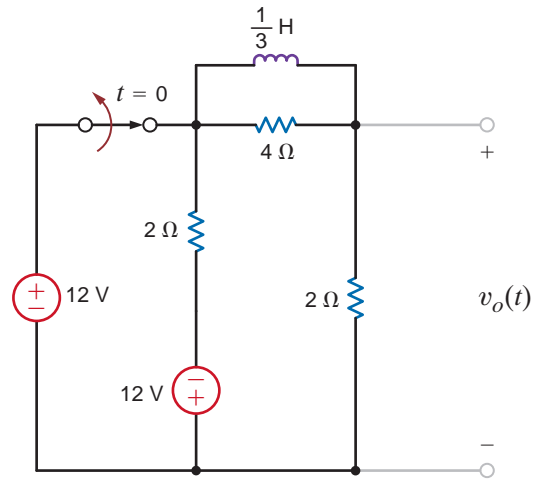
**Figure P7.30**

**7.31** Find  $i_o(t)$  for  $t > 0$  in the circuit in Fig. P7.31.



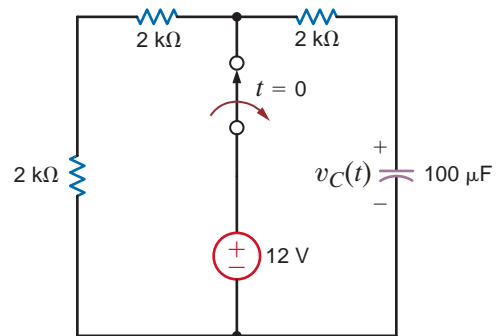
**Figure P7.31**

**7.32** Use the step-by-step method to find  $v_o(t)$  for  $t > 0$  in the network in Fig. P7.32.



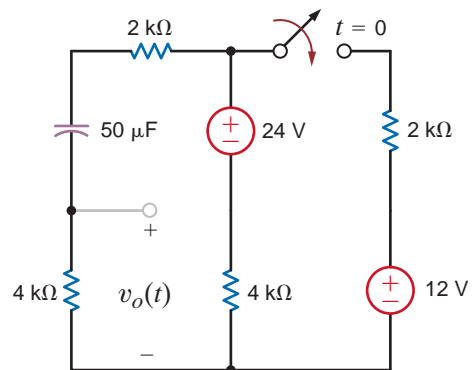
**Figure P7.32**

**7.33** Find  $v_C(t)$  for  $t > 0$  in the network in Fig. P7.33 using the step-by-step method.



**Figure P7.33**

**7.34** Find  $v_o(t)$  for  $t > 0$  in the network in Fig. P7.34 using the step-by-step method.



**Figure P7.34**

**7.35** Find  $v_o(t)$  for  $t > 0$  in the circuit in Fig. P7.35 using the step-by-step method.

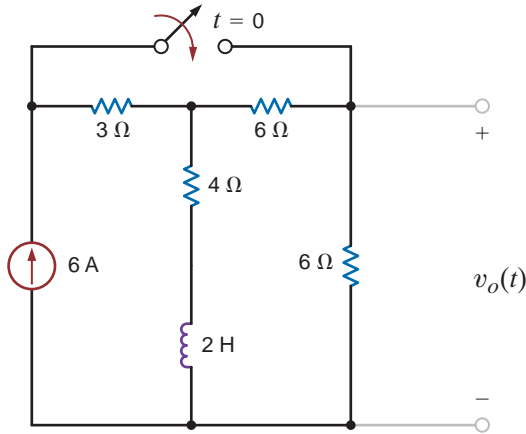


Figure P7.35

**7.36** Use the step-by-step method to find  $i_o(t)$  for  $t > 0$  in the circuit in Fig. P7.36.

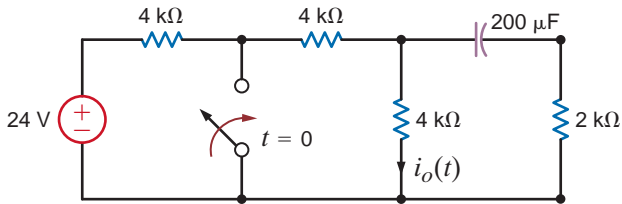


Figure P7.36

**7.37** Find  $v_o(t)$  for  $t > 0$  in the network in Fig. P7.37 using the step-by-step technique.

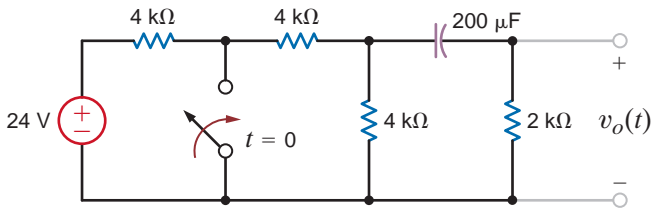


Figure P7.37

**7.41** The switch in Fig. P7.41 closes at  $t = 0$ . Find  $v_o(t)$  for  $t > 0$ .

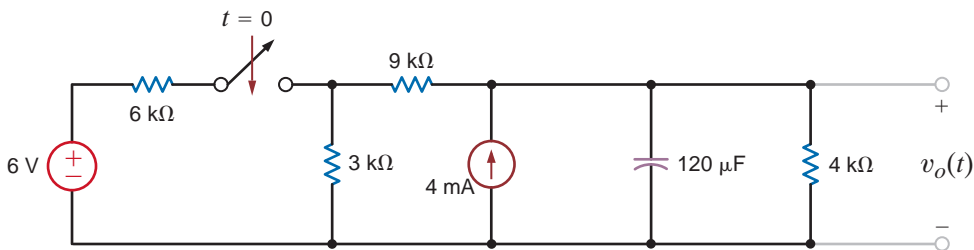


Figure P7.41

**7.38** Find  $v_o(t)$  for  $t > 0$  in the circuit in Fig. P7.38 using the step-by-step method.

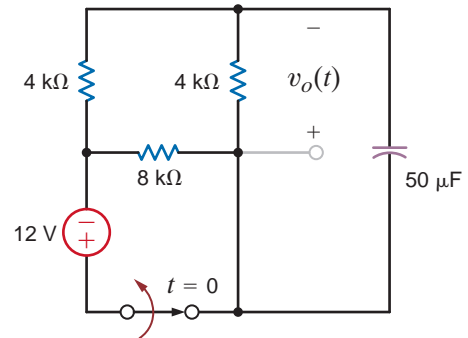


Figure P7.38

**7.39** The switch in the circuit in Fig. P7.39 is opened at  $t = 0$ . Find  $i(t)$  for  $t > 0$ .

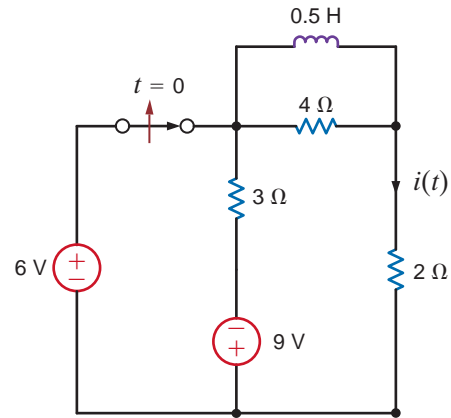


Figure P7.39

**7.40** The switch in the circuit in Fig. P7.40 is moved at  $t = 0$ . Find  $i_o(t)$  for  $t > 0$ .

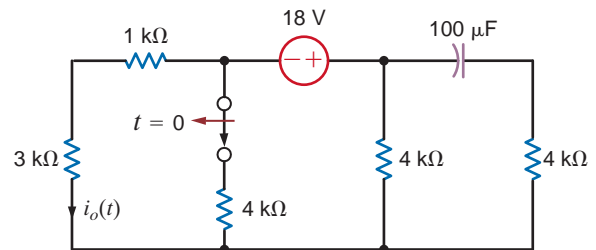


Figure P7.40

**7.42** The switch in the circuit in Fig. P7.42 has been closed for a long time and is opened at  $t = 0$ . Find  $i(t)$  for  $t > 0$ .

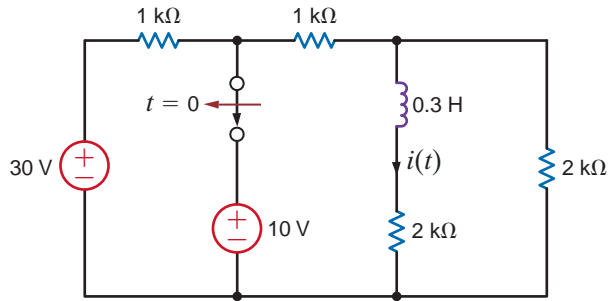


Figure P7.42

**7.43** The switch in the circuit in Fig. P7.43 has been closed for a long time and is moved at  $t = 0$ . Find  $i_o(t)$  for  $t > 0$ .

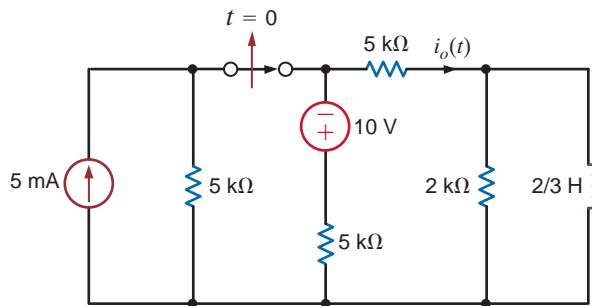


Figure P7.43

**7.44** The switch in the circuit in Fig. P7.44 has been in position A for a long time and is moved to position B at  $t = 0$ . Calculate  $v_o(t)$  for  $t > 0$ .

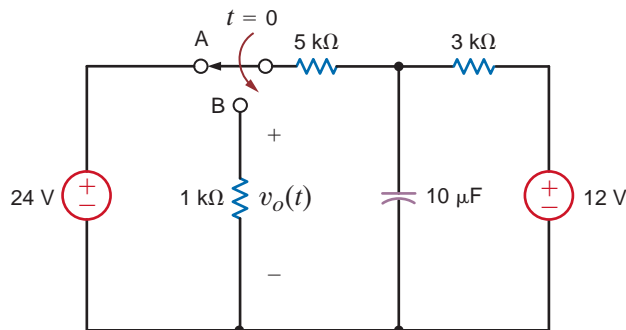


Figure P7.44

**7.45** The switch in the circuit in Fig. P7.45 has been closed for a long time and is opened at  $t = 0$ . Determine  $v_C(t)$  for  $t > 0$ .

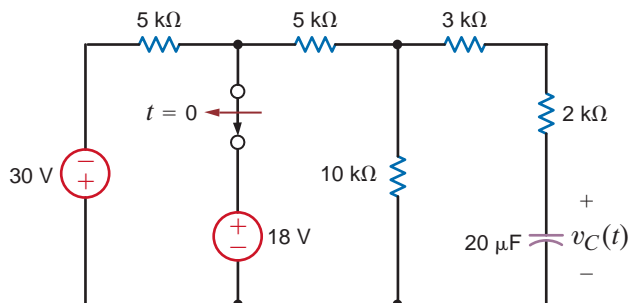


Figure P7.45

**7.46** Find  $i_o(t)$  for  $t > 0$  in the network in Fig. P7.46 using the step-by-step method.

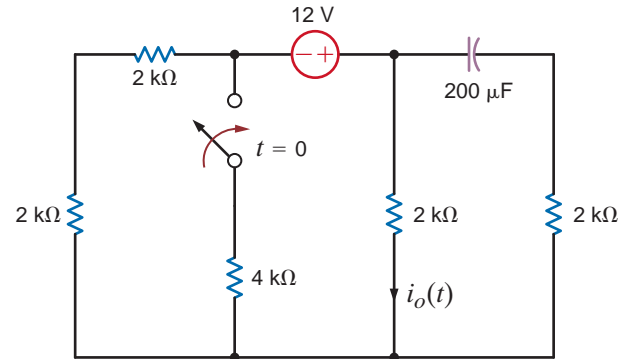


Figure P7.46

**7.47** Use the step-by-step method to find  $i_o(t)$  for  $t > 0$  in the network in Fig. P7.47.

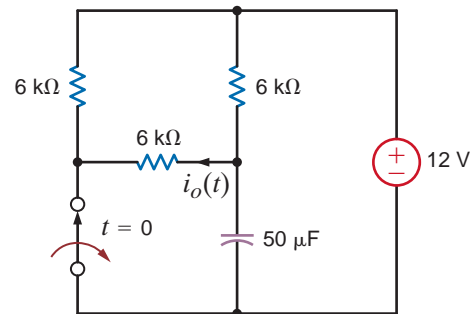


Figure P7.47

**7.48** Find  $v_o(t)$  for  $t > 0$  in the network in Fig. P7.48.

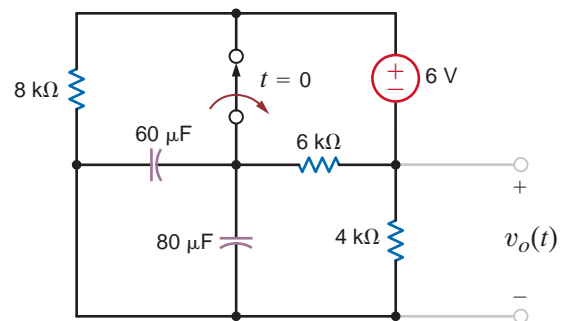


Figure P7.48

**7.49** Find  $v_o(t)$  for  $t > 0$  in the network in Fig. P7.49.

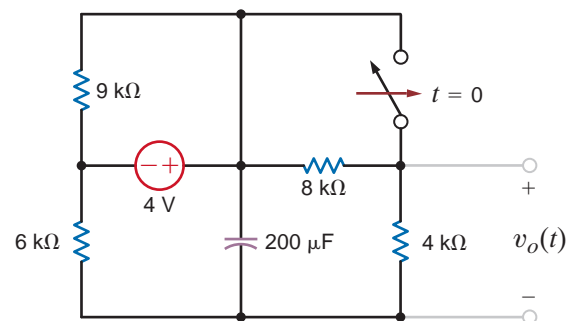


Figure P7.49

**7.50** Find  $v_o(t)$  for  $t > 0$  in the network in fig. P7.50.

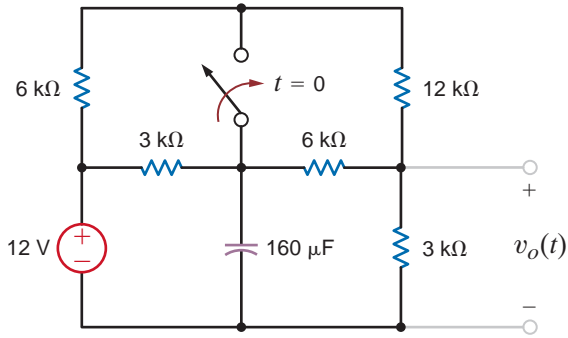


Figure P7.50

**7.51** Determine  $v_o(t)$  for  $t > 0$  in the network in Fig. P7.51

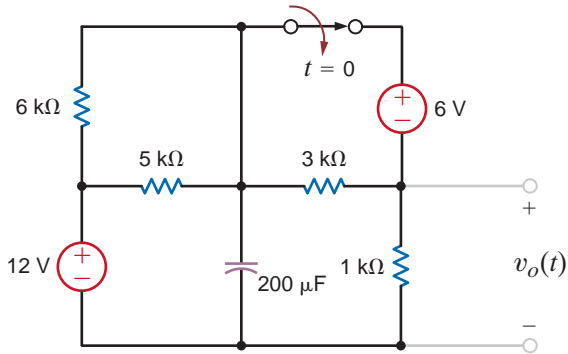


Figure P7.51

**7.52** Find  $v_o(t)$  for  $t > 0$  in the circuit in Fig. P7.52.

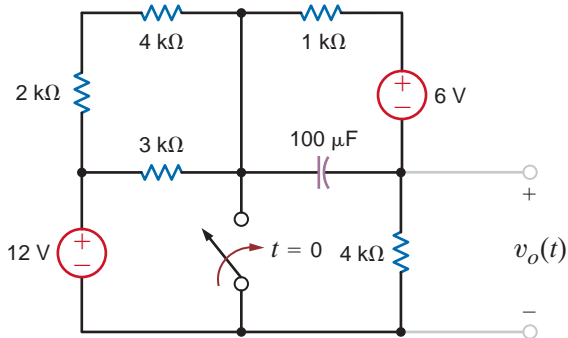


Figure P7.52

**7.53** Find  $v_o(t)$  for  $t > 0$  in the network in Fig. P7.53.

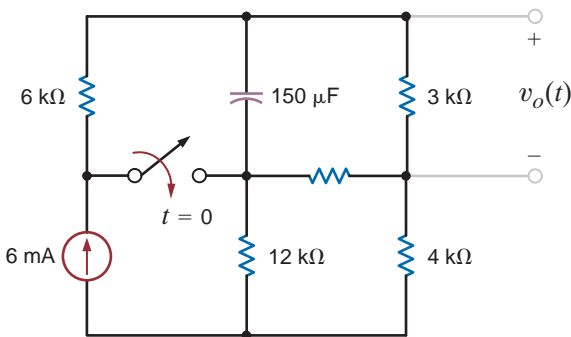


Figure P7.53

**7.54** Find  $v_o(t)$  for  $t > 0$  in the network in Fig. P7.54.

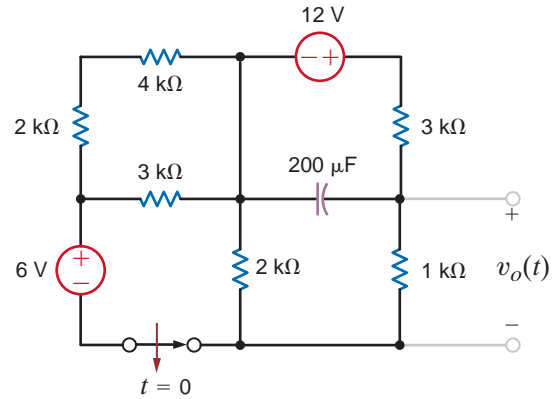


Figure P7.54

**7.55** Use the step-by-step technique to find  $v_o(t)$  for  $t > 0$  in the circuit in Fig. P7.55.

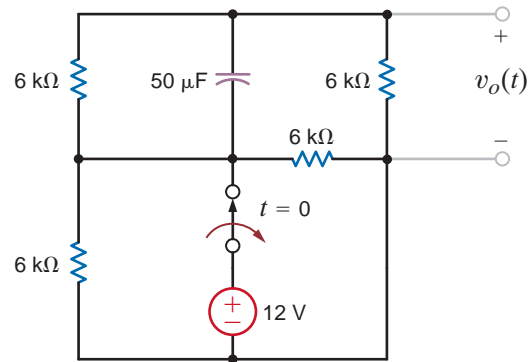


Figure P7.55

**7.56** Use the step-by-step technique to find  $i_o(t)$  for  $t > 0$  in the network in Fig. P7.56.

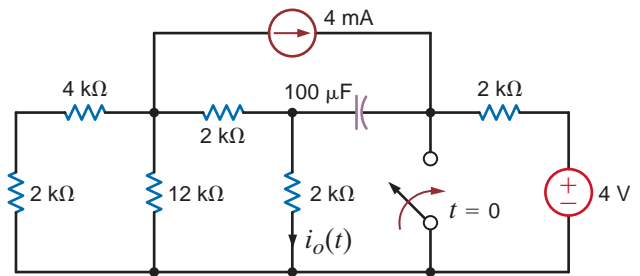


Figure P7.56

**7.57** Find  $v_o(t)$  for  $t > 0$  in the network in Fig. P7.57 using the step-by-step technique.

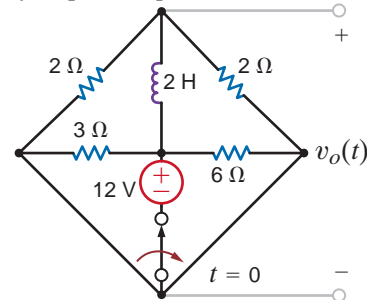
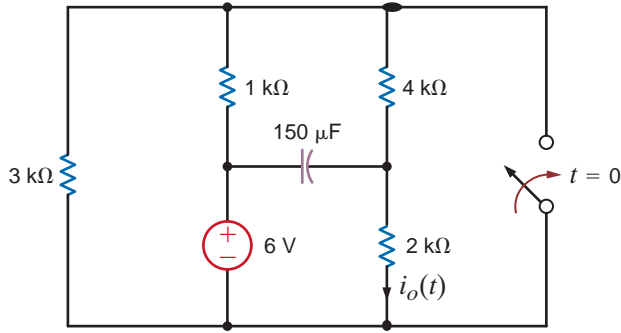


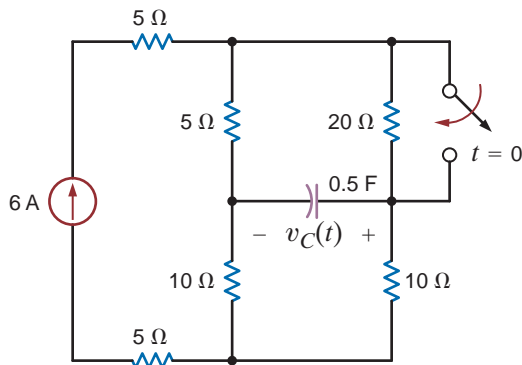
Figure P7.57

**7.58** Find  $i_o(t)$  for  $t > 0$  in the network in Fig. P7.58.



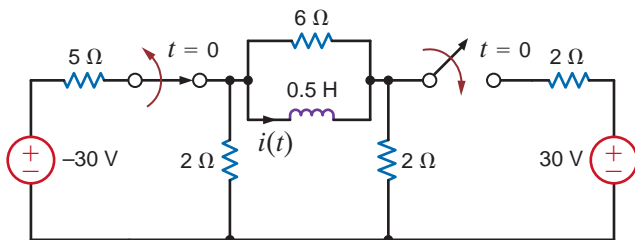
**Figure P7.58**

**7.59** Find  $v_c(t)$  for  $t > 0$  in the circuit in Fig. P7.59 using the step-by-step method.



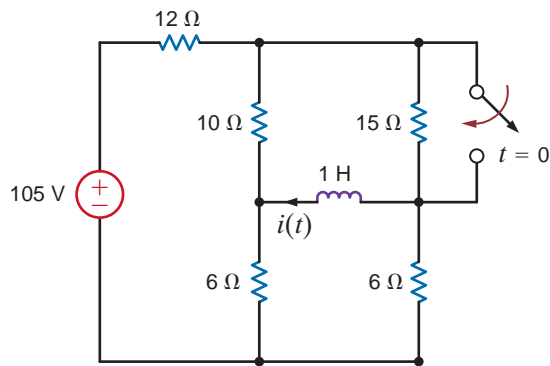
**Figure P7.59**

**7.60** Find  $i(t)$  for  $t > 0$  in the circuit in Fig. P7.60 using the step-by-step method.



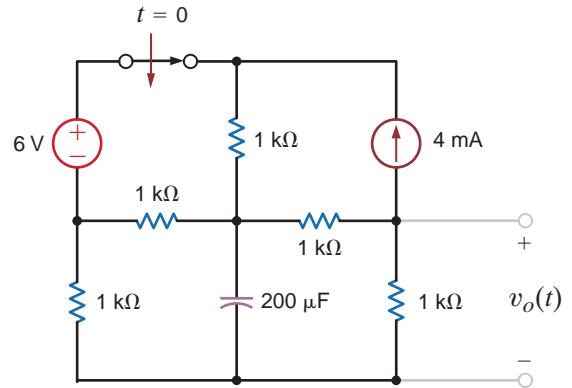
**Figure P7.60**

**7.61** Find  $i(t)$  for  $t > 0$  in the circuit in Fig. P7.61 using the step-by-step method.



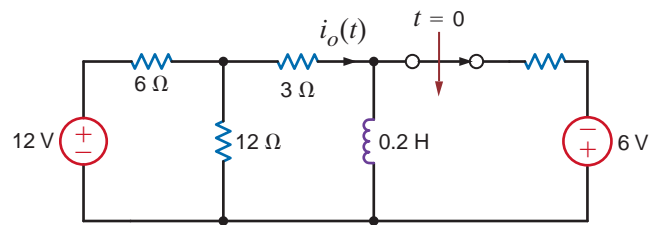
**Figure P7.61**

**7.62** Find  $v_o(t)$  for  $t > 0$  in the circuit in Fig. P7.62.



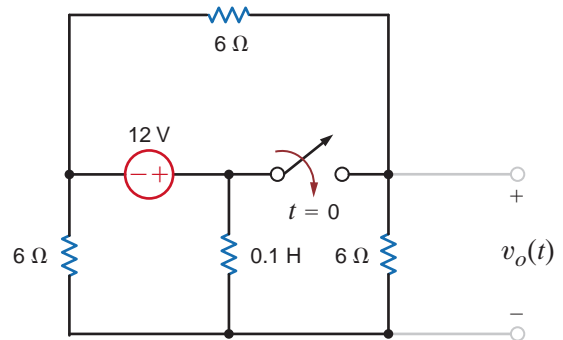
**Figure P7.62**

**7.63** Find  $i_o(t)$  for  $t > 0$  in the network in Fig. P7.63.



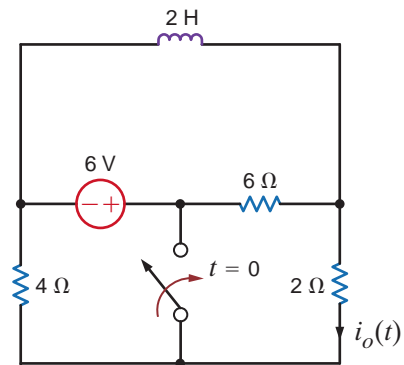
**Figure P7.63**

**7.64** Find  $v_o(t)$  for  $t > 0$  in the circuit in Fig. P7.64.



**Figure P7.64**

**7.65** Find  $i_o(t)$  for  $t > 0$  in the circuit in Fig. P7.65.



**Figure P7.65**

7.66 Find  $i_o(t)$  for  $t > 0$  in the network in Fig. P7.66.

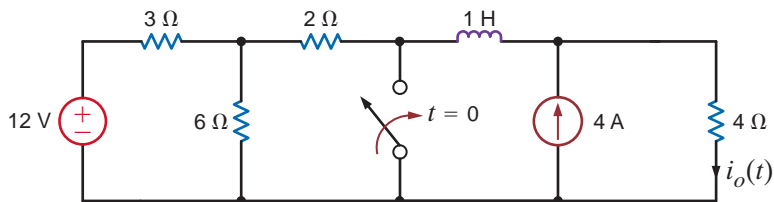


Figure P7.66

7.67 Find  $i_o(t)$  for  $t > 0$  in the circuit in Fig. P7.67.

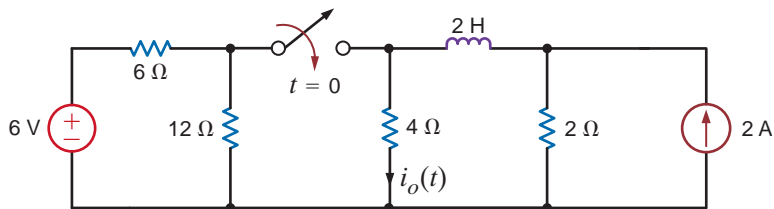


Figure P7.67

7.68 Find  $v_o(t)$  for  $t > 0$  in the network in Fig. P7.68.

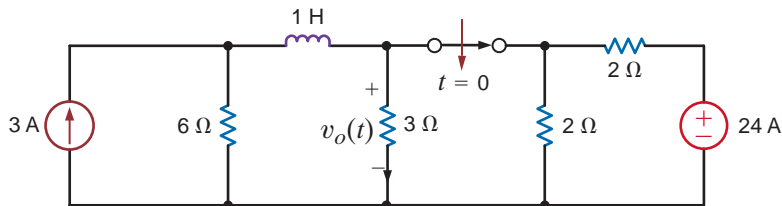


Figure P7.68

7.69 Find  $i_o(t)$  for  $t > 0$  in the circuit in Fig. P7.69.

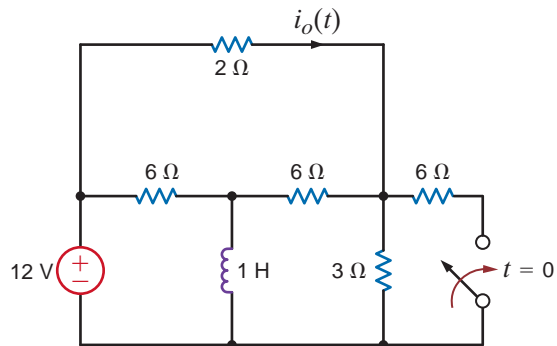


Figure P7.69

7.70 Use the step-by-step method to find  $i_o(t)$  for  $t > 0$  in the network in Fig. P7.70.

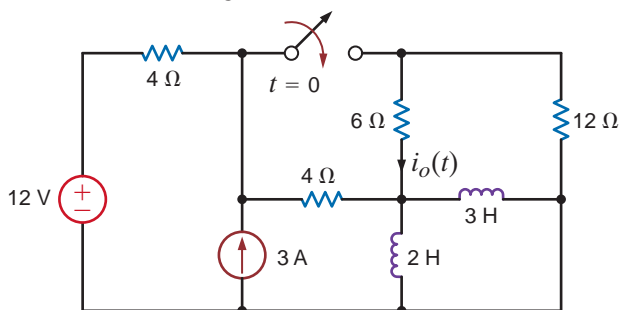


Figure P7.70

7.71 Use the step-by-step method to find  $v_o(t)$  for  $t > 0$  in the network in Fig. P7.71.

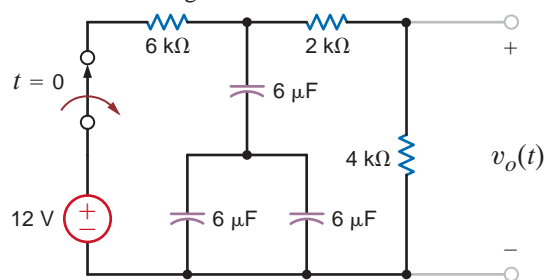


Figure P7.71

7.72 Find  $i_L(t)$  for  $t > 0$  in the circuit in Fig. P7.72 using the step-by-step method.

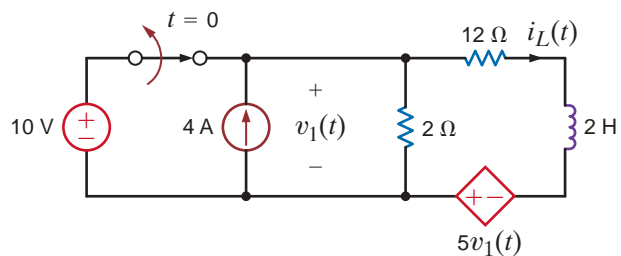


Figure P7.72



**7.73** Find  $i_o(t)$  for  $t > 0$  in the network in Fig. P7.73 using the step-by-step method.

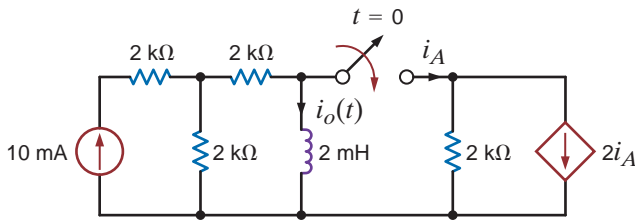


Figure P7.73

**7.74** Use the step-by-step technique to find  $v_o(t)$  for  $t > 0$  in the network in Fig. P7.74.

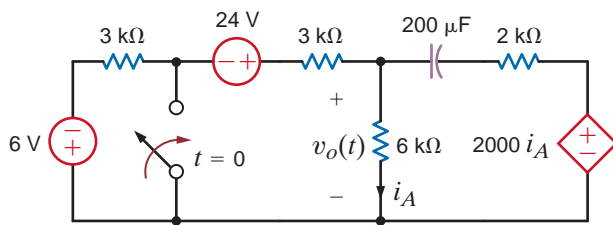
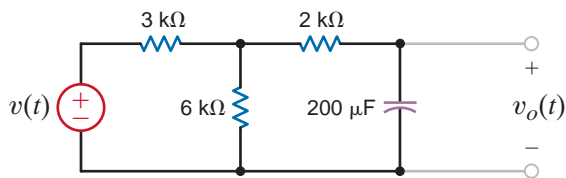
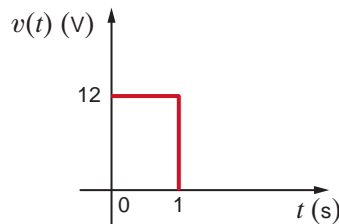


Figure P7.74

**7.75** Determine the equation for the voltage  $v_o(t)$  for  $t > 0$  in Fig. P7.75a when subjected to the input pulse shown in Fig. P7.75b.



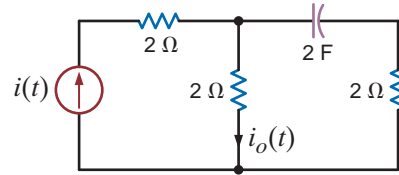
(a)



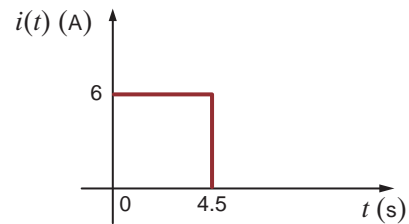
(b)

Figure P7.75

**7.76** The current source in the network in Fig. P7.76a is defined in Fig. P7.76b. The initial voltage across the capacitor must be zero. (Why?) Determine the current  $i_o(t)$  for  $t > 0$ .



(a)

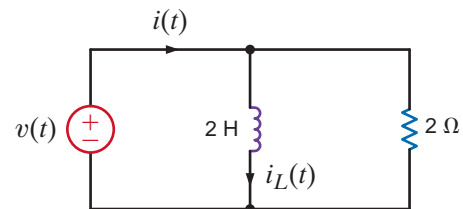


(b)

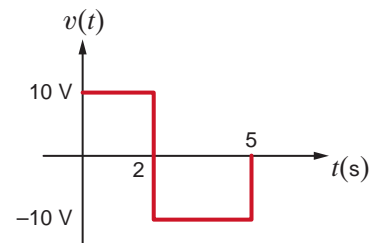
Figure P7.76

**7.77** The voltage  $v(t)$  shown in Fig. P7.77a is given by the graph shown in Fig. P7.77b. If  $i_L(0) = 0$ , answer the following questions:

- (a) How much energy is stored in the inductor at  $t = 3$  s?
- (b) How much power is supplied by the source at  $t = 4$  s?
- (c) What is  $i(t = 6$  s)?
- (d) How much power is absorbed by the inductor at  $t = 3$  s?



(a)



(b)

Figure P7.77

**7.78** Find the output voltage  $v_o(t)$  in the network in Fig. P7.78 if the input voltage is  $v_i(t) = 5(u(t) - u(t - 0.05))\text{V}$ .

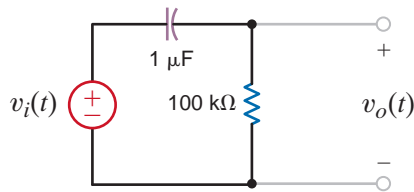


Figure P7.78

**7.79** Given that  $v_{C1}(0^-) = -10\text{ V}$  and  $v_{C2}(0^-) = 20\text{ V}$  in the circuit in Fig. P7.79, find  $i(0^+)$ .

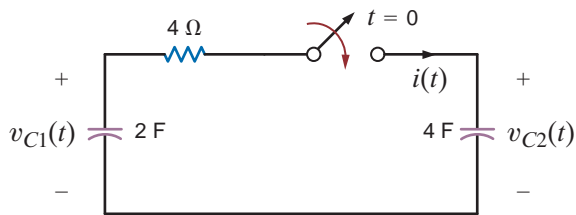


Figure P7.79

**7.80** In the network in Fig. P7.80, find  $i(t)$  for  $t > 0$ . If  $v_{C1}(0^-) = -10\text{ V}$ , calculate  $v_{C2}(0^-)$ .

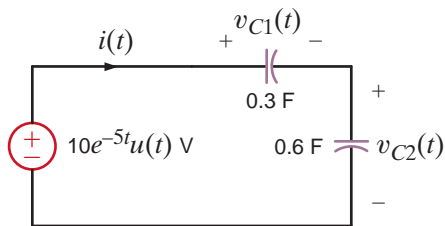


Figure P7.80

**7.81** In the circuit in Fig. P7.81,  $v_R(t) = 100e^{-400t}\text{ V}$  for  $t < 0$ . Find  $v_R(t)$  for  $t > 0$ .

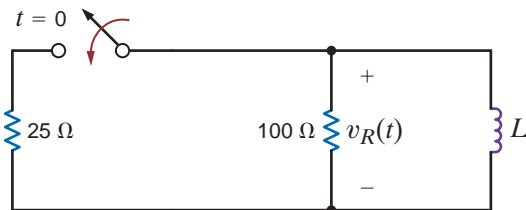


Figure P7.81

**7.82** The switch in the circuit in Fig. P7.82 is closed at  $t = 0$ . If  $i_1(0^-) = 2\text{ A}$ , determine  $i_2(0^+)$ ,  $v_R(0^+)$ , and  $i_1(t = \infty)$ .

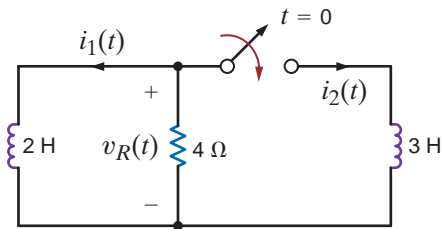


Figure P7.82

**7.83** The switch in the circuit in Fig. P7.83 has been closed for a long time and is opened at  $t = 0$ . If  $v_C(t) = 20 - 8e^{-0.05t}\text{ V}$ , find  $R_1$ ,  $R_2$ , and  $C$ .

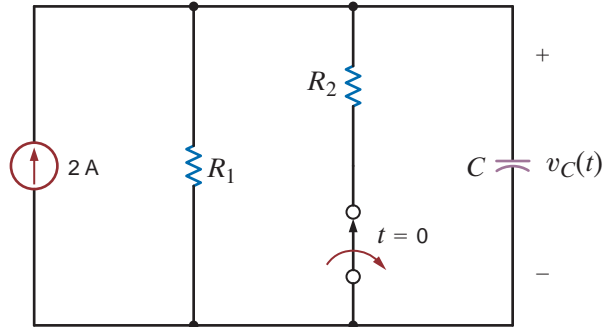


Figure P7.83

**7.84** Given that  $i(t) = 2.5 + 1.5e^{-4t}\text{ A}$  for  $t > 0$  in the circuit in Fig. P7.84, find  $R_1$ ,  $R_2$ , and  $L$ .

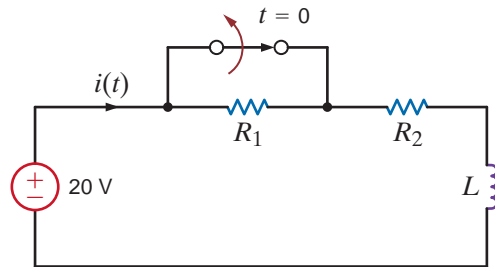


Figure P7.84

**7.85** Given that  $i(t) = 13.33e^{-t} - 8.33e^{-0.5t}\text{ A}$  for  $t > 0$  in the network in Fig. P7.85, find the following:

- (a)  $v_c(0)$ ,
- (b)  $v_c(t = 1\text{ s})$ ,
- (c) the capacitance  $C$ .

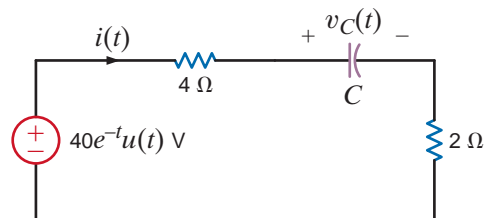


Figure P7.85

**7.86** The differential equation that describes the current  $i_o(t)$  in a network is

$$\frac{d^2 i_o(t)}{dt^2} + 6 \frac{di_o(t)}{dt} + 4i_o(t) = 0$$

Find

- (a) the characteristic equation of the network,
- (b) the network's natural frequencies
- (c) the expression for  $i_o(t)$ .

**7.87** The voltage  $v_1(t)$  in a network is defined by the equation

$$\frac{d^2 v_1(t)}{dt^2} + 4 \frac{dv_1(t)}{dt} + 5v_1(t) = 0$$

Find

- (a) the characteristic equation of the network
- (b) the circuit's natural frequencies
- (c) the expression for  $v_1(t)$ .

**7.88** The voltage  $v_1(t)$  in a network is defined by the equation

$$\frac{d^2 v_1(t)}{dt^2} + 2 \left[ \frac{dv_1(t)}{dt} \right] + 5v_1(t) = 0$$

Find

- (a) the characteristic equation of the network.
- (b) the circuit's natural frequencies.
- (c) the expression for  $v_1(t)$ .

**7.89** A parallel RLC circuit contains a resistor  $R = 1 \Omega$  and an inductor  $L = 2\text{H}$ . Select the value of the capacitor so that the circuit is critically damped.

**7.90** A series RLC circuit contains a resistor of  $R = 2 \Omega$  and a capacitor  $C = 1/2 \text{ F}$ . Select the value of the inductor so that the circuit is critically damped.

**7.91** In the critically damped circuit shown in Fig. P7.91, the initial conditions on the storage elements are  $i_L(0) = 2 \text{ A}$  and  $v_C(0) = 5 \text{ V}$ . Determine the voltage  $v(t)$ .

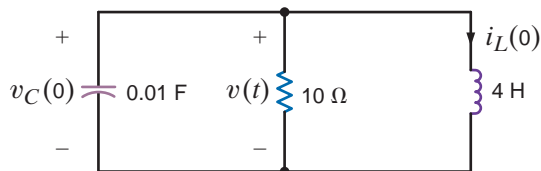


Figure P7.91

**7.92** For the underdamped circuit shown in Fig. P7.92, determine the voltage  $v(t)$  if the initial conditions on the storage elements are  $i_L(0) = 1 \text{ A}$  and  $v_C(0) = 10 \text{ V}$ .

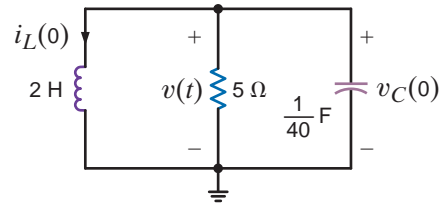


Figure P7.92

**7.93** Find  $v_C(t)$  for  $t > 0$  in the circuit in Fig. P7.93.

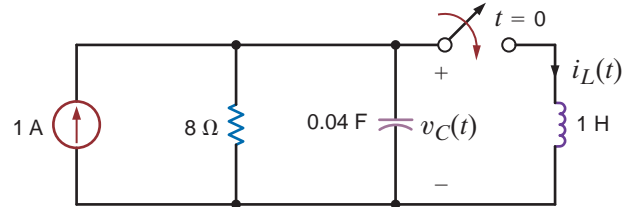


Figure P7.93

**7.94** Find  $v_C(t)$  for  $t > 0$  in the circuit in Fig. P7.94 if  $v_C(0) = 0$ .

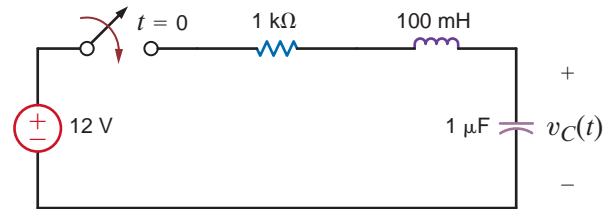


Figure P7.94

**7.95** Find  $v_o(t)$  for  $t > 0$  in the circuit in Fig. P7.95 and plot the response, including the time interval just prior to closing the switch.

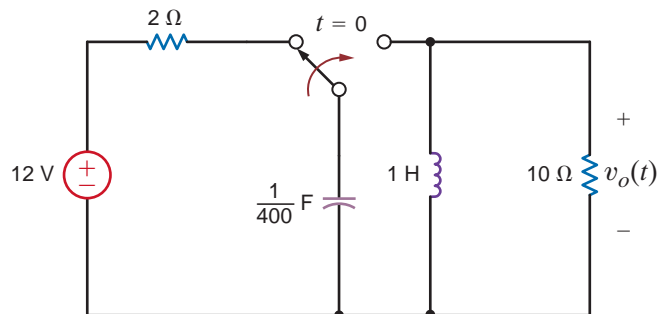
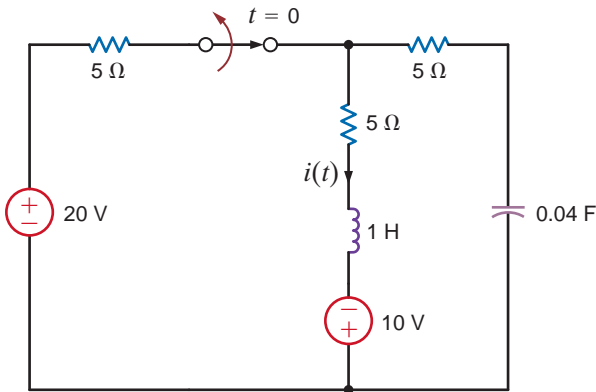


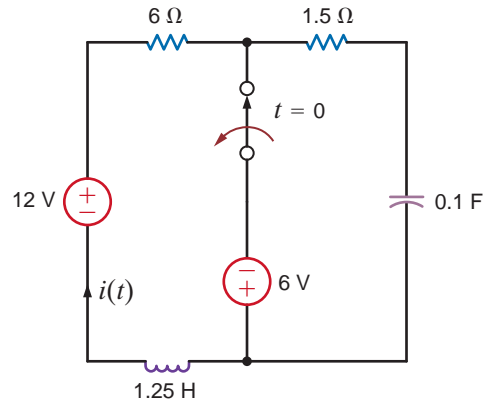
Figure P7.95

**7.96** The switch in the circuit in Fig. P7.96 has been closed for a long time and is opened at  $t = 0$ . Find  $i(t)$  for  $t > 0$ .



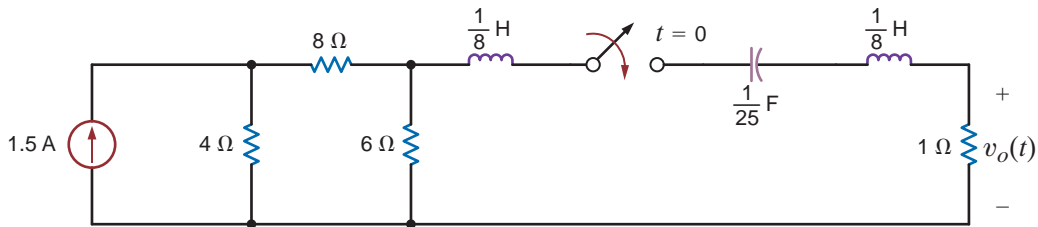
**Figure P7.96**

**7.97** The switch in the circuit in Fig P7.97 has been closed for a long time and is opened at  $t = 0$ . Find  $i(t)$  for  $t > 0$ .



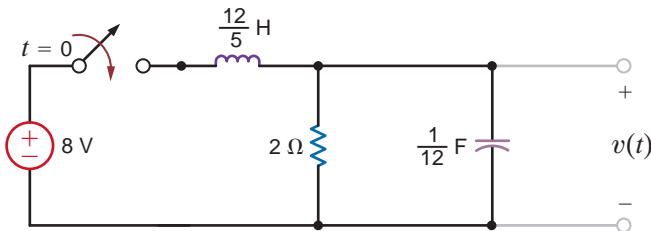
**Figure P7.97**

**7.98** Find  $v_o(t)$  for  $t > 0$  in the circuit in Fig. P7.98 and plot the response, including the time interval just prior to closing the switch.



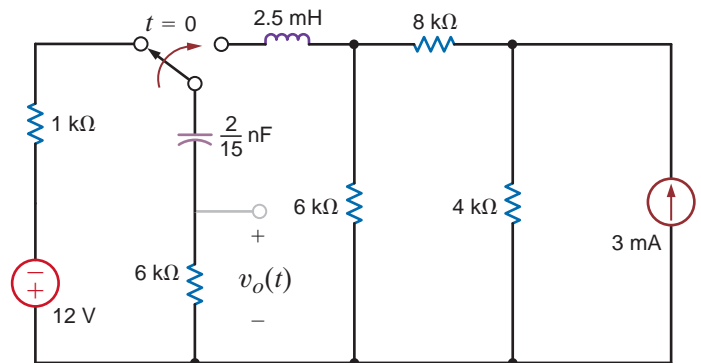
**Figure P7.98**

**7.99** In the circuit shown in Fig. P7.99, find  $v(t) > 0$ .



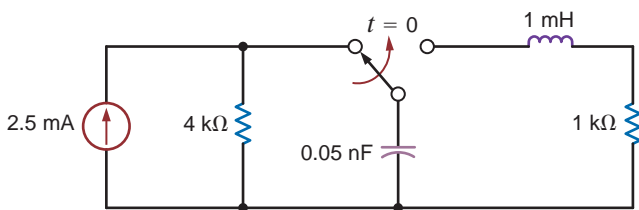
**Figure P7.99**

**7.101** Find  $v_o(t)$  for  $t > 0$  in the circuit in Fig. P7.101 and plot the response, including the time interval just prior to moving the switch.



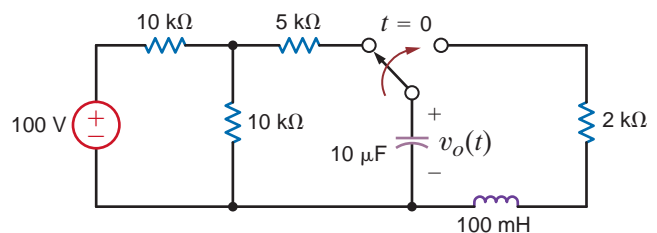
**Figure P7.101**

**7.100** Find  $v_o(t)$  for  $t > 0$  in the circuit in Fig. P7.100 and plot the response, including the time interval just prior to moving the switch.



**Figure P7.100**

**7.102** Find  $v_o(t)$  for  $t > 0$  in the network in Fig. P7.102 and plot the response, including the time interval just prior to moving the switch.



**Figure P7.102**

**7.103** Find  $v_o(t)$  for  $t > 0$  in the circuit in Fig. P7.103 and plot the response, including the time interval just prior to moving the switch.

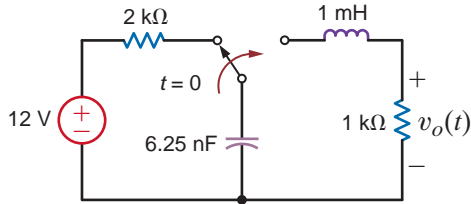


Figure P7.103

Solve the remaining problems using computational methods.

**7.106** Given the network in Fig. P7.106 to plot  $v_o(t)$  over a 10-s interval starting at  $t = 0$ , using a 100-ms step size.

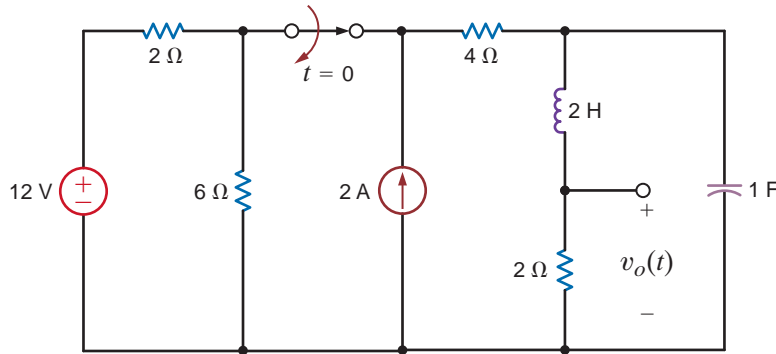


Figure P7.106

**7.107** Given the network in Fig. P7.107, plot  $v_o(t)$  over a 10-s interval starting at  $t = 0$ , using a 100-ms step size.

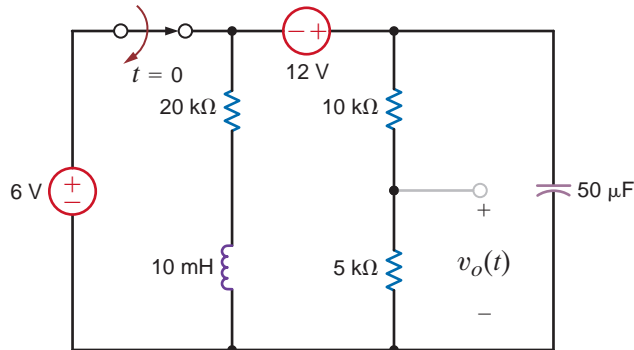


Figure P7.107

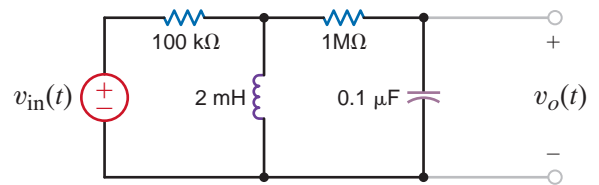
**7.104** Design a parallel  $RLC$  circuit with  $R \geq 1 \text{ k}\Omega$  that has the characteristic equation

$$s^2 + 4 \times 10^7 s + 3 \times 10^{14} = 0$$

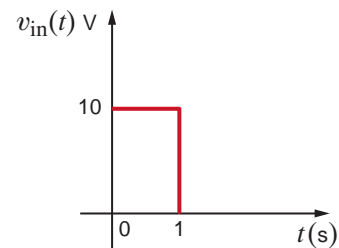
**7.105** Design a parallel  $RLC$  circuit with  $R \geq 1 \text{ k}\Omega$  that has the characteristic equation

$$s^2 + 4 \times 10^7 s + 4 \times 10^{14} = 0$$

**7.108** Given the network in Fig. P7.108a and the input voltage shown in Fig. P7.108b, plot the voltage  $v_o(t)$  over the interval  $0 \leq t \leq 4 \text{ s}$ , using a 20-ms step size.



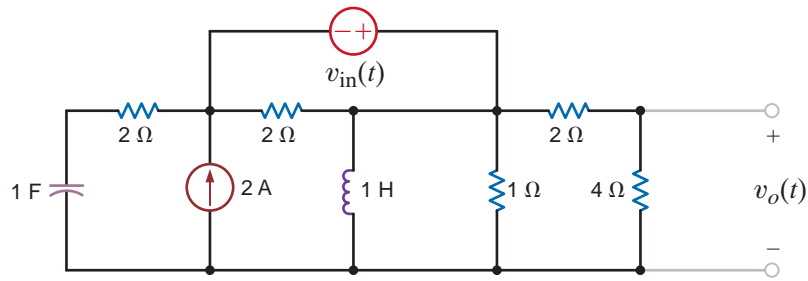
(a)



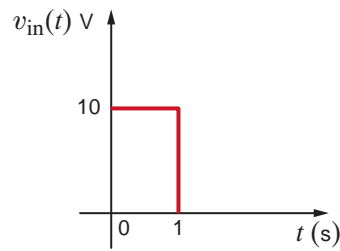
(b)

Figure P7.108

**7.109** Given the network in Fig. P7.109a, and the input voltage shown in Fig. P7.109b, plot  $v_o(t)$  over the interval  $0 \leq t \leq 10$  s, using a 100-ms step size.



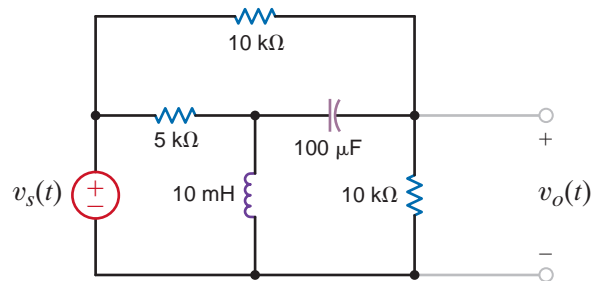
(a)



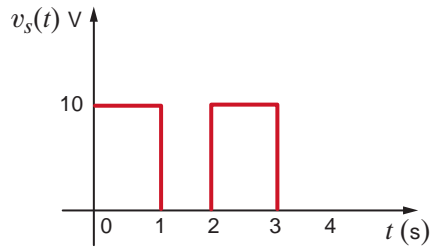
(b)

**Figure P7.109**

**7.110** Given the network in Fig. P7.110a and the input in Fig. P7.110b, plot  $v_o(t)$  in the interval  $0 \leq t \leq 4$  s, using a 20-ms step size.



(a)



(b)

**Figure P7.110**

## TYPICAL PROBLEMS FOUND ON THE FE EXAM

**7PFE-1** In the circuit in Fig. 7PFE-1, the switch, which has been closed for a long time, opens at  $t = 0$ . Find the value of the capacitor voltage  $v_C(t)$  at  $t = 2\text{ s}$ .

- 0.936 V
- 0.756 V
- 0.264 V
- 0.462 V

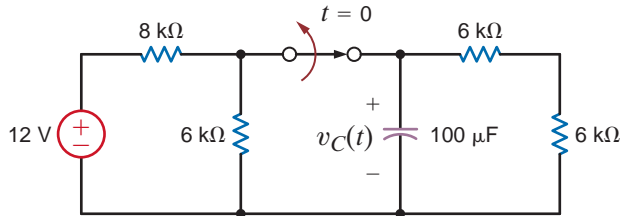


Figure 7PFE-1

**7PFE-2** In the network in Fig. 7PFE-2, the switch closes at  $t = 0$ . Find  $v_o(t)$  at  $t = 1\text{ s}$ .

- 5.62 V
- 1.57 V
- 4.25 V
- 3.79 V

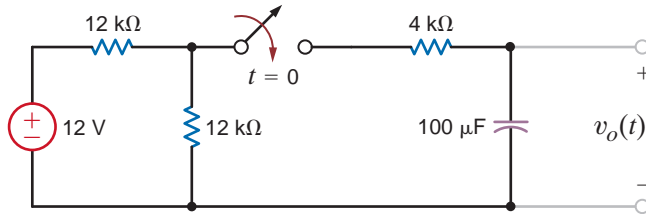


Figure 7PFE-2

**7PFE-3** Assume that the switch in the network Fig. 7PFE-3 has been closed for some time. At  $t = 0$  the switch opens. Determine the time required for the capacitor voltage to decay to one-half of its initially charged value.

- 0.416 s
- 0.625 s
- 0.235 s
- 0.143 s

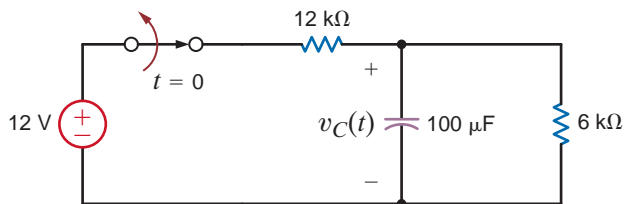


Figure 7PFE-3

**7PFE-4** Find the inductor current  $i_L(t)$  for  $t > 0$  in the circuit in Fig. 7PFE-4.

- $i_L(t) = 3 - 2e^{-t/6}$  A,  $t > 0$
- $i_L(t) = 1 + 2e^{-2t/3}$  A,  $t > 0$
- $i_L(t) = 6 - e^{-t/6}$  A,  $t > 0$
- $i_L(t) = 3 - e^{-2t/3}$  A,  $t > 0$

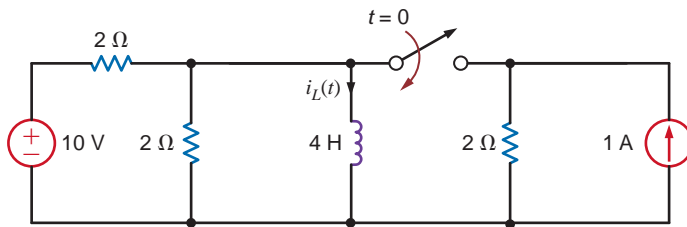


Figure 7PFE-4

**7PFE-5** Find the inductor current  $i_L(t)$  for  $t > 0$  in the circuit in Fig. 7PFE-5.

- $i_L(t) = 1.4 + 0.4e^{-4t/3}$  A,  $t > 0$
- $i_L(t) = 1.2 + 0.4e^{-5t/3}$  A,  $t > 0$
- $i_L(t) = 0.4 + 0.2e^{-4t/3}$  A,  $t > 0$
- $i_L(t) = 2.4 + 0.6e^{-5t/3}$  A,  $t > 0$

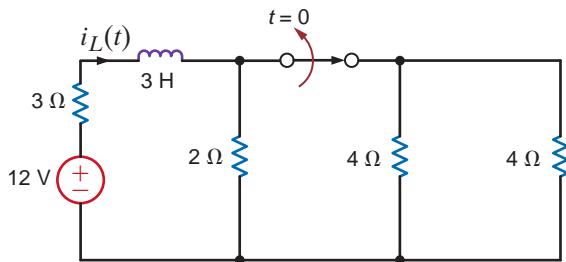


Figure 7PFE-5



# AC STEADY-STATE ANALYSIS



TebNad/iStockphoto

## THE LEARNING GOALS FOR THIS CHAPTER ARE:

- Understand the basic characteristics of sinusoidal functions
- Be able to perform phasor and inverse phasor transformations and draw phasor diagrams
- Know how to calculate impedance and admittance for our basic circuit elements:  $R$ ,  $L$ ,  $C$
- Be able to combine impedances and admittances in series and parallel
- Be able to draw the frequency-domain circuit for a given circuit with a sinusoidal source
- Know how to apply our circuit analysis techniques to frequency-domain circuits

**Smart Power Grids** What makes a power grid smart? It takes a two-way communication between the electric power generator and the consumer. For providers, a smart grid gives rapid information about power quality and alerts them when blackouts occur. For consumers, it promotes the efficient use of electricity by letting them know the time of day when power is more available and less expensive. The aim of the smart power grid is to interconnect the nation within this decade in an efficient power distribution system that includes conventional and large-scale renewable power sources. Real-time pricing is expected to become commonplace.

Smart power grids allocate available power to meet higher priorities. Wireless sensors, software, and microprocessors are key components in this intelligent digital network. As demand for elec-

tricity continues to increase, a smarter grid that provides electricity more efficiently also helps in the fight against global warming.

This chapter introduces ac signals—alternating voltages and currents—which is the form of electricity that the power grid delivers to the end user. Your background in differential equations, needed in the last chapter, will again become highly important in finding steady-state voltages and currents for linear circuits having power sources described by cosine waveforms. A compact notation called phasors will be introduced, and you will perform calculations involving complex numbers. Remarkably, dc circuit analysis techniques that you studied earlier can now be applied directly using phasors for ac circuit analysis. Ac circuits can be analyzed using every basic method—nodal, mesh, superposition, and others.

## 8.1

## Sinusoids

Let us begin our discussion of sinusoidal functions by considering the sine wave

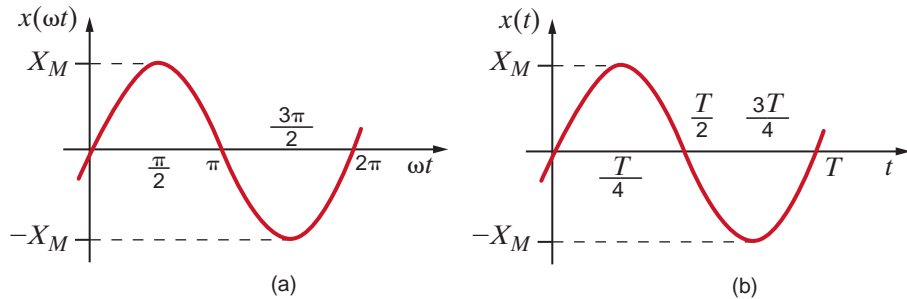
$$x(t) = X_M \sin \omega t \quad 8.1$$

where  $x(t)$  could represent either  $v(t)$  or  $i(t)$ .  $X_M$  is the *amplitude, maximum value, or peak value*;  $\omega$  is the *radian or angular frequency*; and  $\omega t$  is the *argument* of the sine function. A plot of the function in Eq. (8.1) as a function of its argument is shown in Fig. 8.1a. Obviously, the function repeats itself every  $2\pi$  radians. This condition is described mathematically as  $x(\omega t + 2\pi) = x(\omega t)$  or in general for period  $T$ , as

$$x[\omega(t + T)] = x(\omega t) \quad 8.2$$

meaning that the function has the same value at time  $t + T$  as it does at time  $t$ .

**Figure 8.1**  
Plots of a sine wave as a function of both  $\omega t$  and  $t$ .



The waveform can also be plotted as a function of time, as shown in Fig. 8.1b. Note that this function goes through one period every  $T$  seconds. In other words, in 1 second it goes through  $1/T$  periods or cycles. The number of cycles per second, called Hertz, is the frequency  $f$ , where

$$f = \frac{1}{T} \quad 8.3$$

Now since  $\omega T = 2\pi$ , as shown in Fig. 8.1a, we find that

$$\omega = \frac{2\pi}{T} = 2\pi f \quad 8.4$$

which is, of course, the general relationship among period in seconds, frequency in Hertz, and radian frequency.

Now that we have discussed some of the basic properties of a sine wave, let us consider the following general expression for a sinusoidal function:

$$x(t) = X_M \sin(\omega t + \theta) \quad 8.5$$

In this case  $(\omega t + \theta)$  is the argument of the sine function, and  $\theta$  is called the *phase angle*. A plot of this function is shown in Fig. 8.2, together with the original function in Eq. (8.1) for comparison. Because of the presence of the phase angle, any point on the waveform  $X_M \sin(\omega t + \theta)$  occurs  $\theta$  radians earlier in time than the corresponding point on the waveform  $X_M \sin \omega t$ . Therefore, we say that  $X_M \sin \omega t$  *lags*  $X_M \sin(\omega t + \theta)$  by  $\theta$  radians. In the more general situation, if

$$x_1(t) = X_{M_1} \sin(\omega t + \theta)$$

and

$$x_2(t) = X_{M_2} \sin(\omega t + \phi)$$

## [hint]

The relationship between frequency and period

## [hint]

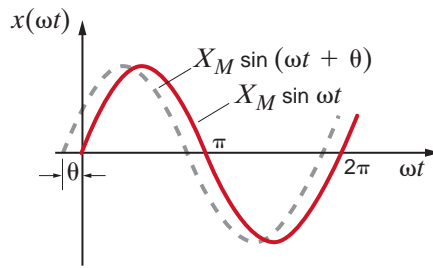
The relationship between frequency, period, and radian frequency

## [hint]

Phase lag defined

## [hint]

In phase and out of phase defined

**Figure 8.2**

Graphical illustration of  $X_M \sin(\omega t + \theta)$  leading  $X_M \sin \omega t$  by  $\theta$  radians.

then  $x_1(t)$  leads  $x_2(t)$  by  $\theta - \phi$  radians and  $x_2(t)$  lags  $x_1(t)$  by  $\theta - \phi$  radians. If  $\theta = \phi$ , the waveforms are identical and the functions are said to be *in phase*. If  $\theta \neq \phi$ , the functions are *out of phase*.

The phase angle is normally expressed in degrees rather than radians. Therefore, at this point we will simply state that we will use the two forms interchangeably; that is,

$$x(t) = X_M \sin\left(\omega t + \frac{\pi}{2}\right) = X_M \sin(\omega t + 90^\circ) \quad 8.6$$

Rigorously speaking, since  $\omega t$  is in radians, the phase angle should be as well. However, it is common practice and convenient to use degrees for phase; therefore, that will be our practice in this text.

In addition, it should be noted that adding to the argument integer multiples of either  $2\pi$  radians or  $360^\circ$  does not change the original function. This can easily be shown mathematically but is visibly evident when examining the waveform, as shown in Fig. 8.2.

Although our discussion has centered on the sine function, we could just as easily have used the cosine function, since the two waveforms differ only by a phase angle; that is,

$$\cos \omega t = \sin\left(\omega t + \frac{\pi}{2}\right) \quad 8.7$$

$$\sin \omega t = \cos\left(\omega t - \frac{\pi}{2}\right) \quad 8.8$$

We are often interested in the phase difference between two sinusoidal functions. Three conditions must be satisfied before we can determine the phase difference: (1) the frequency of both sinusoids must be the same, (2) the amplitude of both sinusoids must be positive, and (3) both sinusoids must be written as sine waves or cosine waves. Once in this format, the phase angle between the functions can be computed as outlined previously. Two other trigonometric identities that normally prove useful in phase angle determination are

$$-\cos(\omega t) = \cos(\omega t \pm 180^\circ) \quad 8.9$$

$$-\sin(\omega t) = \sin(\omega t \pm 180^\circ) \quad 8.10$$

Finally, the angle-sum and angle-difference relationships for sines and cosines may be useful in the manipulation of sinusoidal functions. These relations are

$$\begin{aligned} \sin(\alpha + \beta) &= \sin \alpha \cos \beta + \cos \alpha \sin \beta \\ \cos(\alpha + \beta) &= \cos \alpha \cos \beta - \sin \alpha \sin \beta \\ \sin(\alpha - \beta) &= \sin \alpha \cos \beta - \cos \alpha \sin \beta \\ \cos(\alpha - \beta) &= \cos \alpha \cos \beta + \sin \alpha \sin \beta \end{aligned} \quad 8.11$$

[hint]

Phase lead graphically illustrated

[hint]

A very important point

[hint]

Some trigonometric identities that are useful in phase angle calculations

## EXAMPLE 8.1

We wish to plot the waveforms for the following functions:

- $v(t) = 1 \cos(\omega t + 45^\circ)$ ,
- $v(t) = 1 \cos(\omega t + 225^\circ)$  and
- $v(t) = 1 \cos(\omega t - 315^\circ)$ .

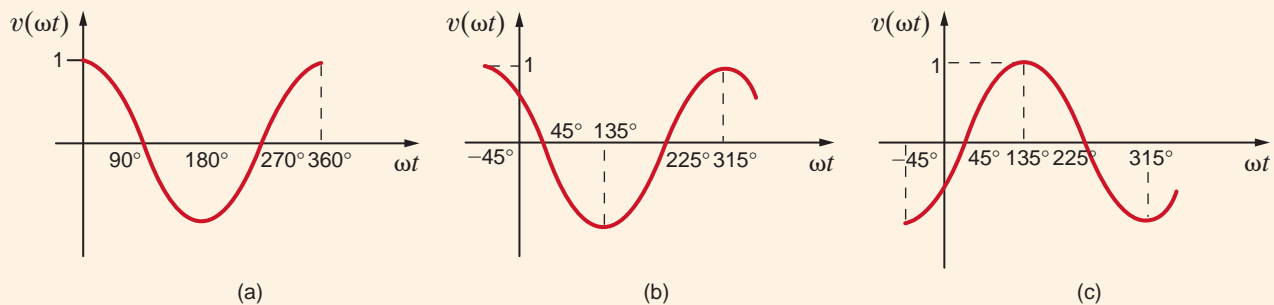
**SOLUTION** Figure 8.3a shows a plot of the function  $v(t) = 1 \cos \omega t$ . Figure 8.3b is a plot of the function  $v(t) = 1 \cos(\omega t + 45^\circ)$ . Figure 8.3c is a plot of the function  $v(t) = 1 \cos(\omega t + 225^\circ)$ . Note that since

$$v(t) = 1 \cos(\omega t + 225^\circ) = 1 \cos(\omega t + 45^\circ + 180^\circ)$$

this waveform is  $180^\circ$  out of phase with the waveform in Fig. 8.3b; that is,  $\cos(\omega t + 225^\circ) = -\cos(\omega t + 45^\circ)$  and Fig. 8.3c is the negative of Fig. 8.3b. Finally, since the function

$$v(t) = 1 \cos(\omega t - 315^\circ) = 1 \cos(\omega t - 315^\circ + 360^\circ) = 1 \cos(\omega t + 45^\circ)$$

this function is identical to that shown in Fig. 8.3b.



**Figure 8.3**  
Cosine waveforms with  
various phase angles.

## EXAMPLE 8.2

Determine the frequency and the phase angle between the two voltages  $v_1(t) = 12 \sin(1000t + 60^\circ)$  V and  $v_2(t) = -6 \cos(1000t + 30^\circ)$  V.

**SOLUTION** The frequency in Hertz (Hz) is given by the expression

$$f = \frac{\omega}{2\pi} = \frac{1000}{2\pi} = 159.2 \text{ Hz}$$

Using Eq. (8.9),  $v_2(t)$  can be written as

$$v_2(t) = -6 \cos(\omega t + 30^\circ) = 6 \cos(\omega t + 210^\circ) \text{ V}$$

Then employing Eq. (8.7), we obtain

$$6 \sin(\omega t + 300^\circ) \text{ V} = 6 \sin(\omega t - 60^\circ) \text{ V}$$

Now that both voltages of the same frequency are expressed as sine waves with positive amplitudes, the phase angle between  $v_1(t)$  and  $v_2(t)$  is  $60^\circ - (-60^\circ) = 120^\circ$ ; that is,  $v_1(t)$  leads  $v_2(t)$  by  $120^\circ$  or  $v_2(t)$  lags  $v_1(t)$  by  $120^\circ$ .

## Learning Assessments

**E8.1** Given the voltage  $v(t) = 120 \cos(314t + \pi/4)$  V, determine the frequency of the voltage in Hertz and the phase angle in degrees.

**ANSWER:**  $f = 50$  Hz;  
 $\theta = 45^\circ$ .

**E8.2** Three branch currents in a network are known to be

$$\begin{aligned}i_1(t) &= 2 \sin(377t + 45^\circ) \text{ A} \\i_2(t) &= 0.5 \cos(377t + 10^\circ) \text{ A} \\i_3(t) &= -0.25 \sin(377t + 60^\circ) \text{ A}\end{aligned}$$

**ANSWER:**  $i_1$  leads  $i_2$   
by  $-55^\circ$ ;  $i_1$  leads  $i_3$  by  $165^\circ$ .

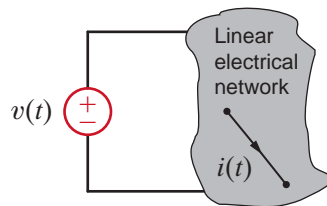
Determine the phase angles by which  $i_1(t)$  leads  $i_2(t)$  and  $i_1(t)$  leads  $i_3(t)$ .

In the preceding chapters we applied a constant forcing function to a network and found that the steady-state response was also constant.

In a similar manner, if we apply a sinusoidal forcing function to a linear network, the steady-state voltages and currents in the network will also be sinusoidal. This should also be clear from the KVL and KCL equations. For example, if one branch voltage is a sinusoid of some frequency, the other branch voltages must be sinusoids of the same frequency if KVL is to apply around any closed path. This means, of course, that the forced solutions of the differential equations that describe a network with a sinusoidal forcing function are sinusoidal functions of time. For example, if we assume that our input function is a voltage  $v(t)$  and our output response is a current  $i(t)$ , as shown in Fig. 8.4, then if  $v(t) = A \sin(\omega t + \theta)$ ,  $i(t)$  will be of the form  $i(t) = B \sin(\omega t + \phi)$ . The critical point here is that we know the form of the output response, and therefore the solution involves simply determining the values of the two parameters  $B$  and  $\phi$ .

## 8.2

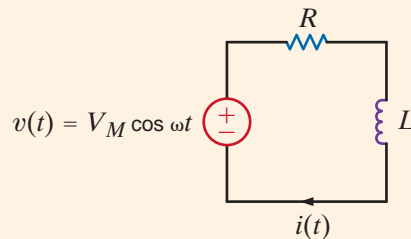
### Sinusoidal and Complex Forcing Functions



**Figure 8.4**

Current response to an applied voltage in an electrical network.

Consider the circuit in Fig. 8.5. Let us derive the expression for the current.



### EXAMPLE 8.3

**Figure 8.5**

A simple  $RL$  circuit.

The KVL equation for this circuit is

$$L \frac{di(t)}{dt} + Ri(t) = V_M \cos \omega t$$

**SOLUTION**

Since the input forcing function is  $V_M \cos \omega t$ , we assume that the forced response component of the current  $i(t)$  is of the form

$$i(t) = A \cos(\omega t + \phi)$$

which can be written using Eq. (8.11) as

$$\begin{aligned} i(t) &= A \cos \phi \cos \omega t - A \sin \phi \sin \omega t \\ &= A_1 \cos \omega t + A_2 \sin \omega t \end{aligned}$$

Note that this is, as we observed in Chapter 7, of the form of the forcing function  $\cos \omega t$  and its derivative  $\sin \omega t$ . Substituting this form for  $i(t)$  into the preceding differential equation yields

$$L \frac{d}{dt}(A_1 \cos \omega t + A_2 \sin \omega t) + R(A_1 \cos \omega t + A_2 \sin \omega t) = V_M \cos \omega t$$

Evaluating the indicated derivative produces

$$-A_1 \omega L \sin \omega t + A_2 \omega L \cos \omega t + R A_1 \cos \omega t + R A_2 \sin \omega t = V_M \cos \omega t$$

By equating coefficients of the sine and cosine functions, we obtain

$$\begin{aligned} -A_1 \omega L + A_2 R &= 0 \\ A_1 R + A_2 \omega L &= V_M \end{aligned}$$

that is, two simultaneous equations in the unknowns  $A_1$  and  $A_2$ . Solving these two equations for  $A_1$  and  $A_2$  yields

$$\begin{aligned} A_1 &= \frac{R V_M}{R^2 + \omega^2 L^2} \\ A_2 &= \frac{\omega L V_M}{R^2 + \omega^2 L^2} \end{aligned}$$

Therefore,

$$i(t) = \frac{R V_M}{R^2 + \omega^2 L^2} \cos \omega t + \frac{\omega L V_M}{R^2 + \omega^2 L^2} \sin \omega t$$

which, using the last identity in Eq. (8.11), can be written as

$$i(t) = A \cos(\omega t + \phi)$$

where  $A$  and  $\phi$  are determined as follows:

$$\begin{aligned} A \cos \phi &= \frac{R V_M}{R^2 + \omega^2 L^2} \\ A \sin \phi &= \frac{-\omega L V_M}{R^2 + \omega^2 L^2} \end{aligned}$$

Hence,

$$\tan \phi = \frac{A \sin \phi}{A \cos \phi} = -\frac{\omega L}{R}$$

and therefore,

$$\phi = -\tan^{-1} \frac{\omega L}{R}$$

and since

$$\begin{aligned} (A \cos \phi)^2 + (A \sin \phi)^2 &= A^2(\cos^2 \phi + \sin^2 \phi) = A^2 \\ A^2 &= \frac{R^2 V_M^2}{(R^2 + \omega^2 L^2)^2} + \frac{(\omega L)^2 V_M^2}{(R^2 + \omega^2 L^2)^2} \\ &= \frac{V_M^2}{R^2 + \omega^2 L^2} \\ A &= \frac{V_M}{\sqrt{R^2 + \omega^2 L^2}} \end{aligned}$$

Hence, the final expression for  $i(t)$  is

$$i(t) = \frac{V_M}{\sqrt{R^2 + \omega^2 L^2}} \cos\left(\omega t - \tan^{-1} \frac{\omega L}{R}\right)$$

The preceding analysis indicates that  $\phi$  is zero if  $L = 0$  and hence  $i(t)$  is in phase with  $v(t)$ . If  $R = 0$ ,  $\phi = -90^\circ$ , and the current lags the voltage by  $90^\circ$ . If  $L$  and  $R$  are both present, the current lags the voltage by some angle between  $0^\circ$  and  $90^\circ$ .

This example illustrates an important point: solving even a simple one-loop circuit containing one resistor and one inductor is very complicated compared to the solution of a single-loop circuit containing only two resistors. Imagine for a moment how laborious it would be to solve a more complicated circuit using the procedure employed in Example 8.3. To circumvent this approach, we will establish a correspondence between sinusoidal time functions and complex numbers. We will then show that this relationship leads to a set of algebraic equations for currents and voltages in a network (e.g., loop currents or node voltages) in which the coefficients of the variables are complex numbers. Hence, once again we will find that determining the currents or voltages in a circuit can be accomplished by solving a set of algebraic equations; however, in this case, their solution is complicated by the fact that variables in the equations have complex, rather than real, coefficients.

The vehicle we will employ to establish a relationship between time-varying sinusoidal functions and complex numbers is Euler's equation, which for our purposes is written as

$$e^{j\omega t} = \cos \omega t + j \sin \omega t \quad 8.12$$

This complex function has a real part and an imaginary part:

$$\begin{aligned} \operatorname{Re}(e^{j\omega t}) &= \cos \omega t \\ \operatorname{Im}(e^{j\omega t}) &= \sin \omega t \end{aligned} \quad 8.13$$

where  $\operatorname{Re}(\cdot)$  and  $\operatorname{Im}(\cdot)$  represent the real part and the imaginary part, respectively, of the function in the parentheses. Recall that  $j = \sqrt{-1}$ .

Now suppose that we select as our forcing function in Fig. 8.4 the nonrealizable voltage

$$v(t) = V_M e^{j\omega t} \quad 8.14$$

which because of Euler's identity can be written as

$$v(t) = V_M \cos \omega t + jV_M \sin \omega t \quad 8.15$$

The real and imaginary parts of this function are each realizable. We think of this complex forcing function as two forcing functions, a real one and an imaginary one, and as a consequence of linearity, the principle of superposition applies and thus the current response can be written as

$$i(t) = I_M \cos(\omega t + \phi) + jI_M \sin(\omega t + \phi) \quad 8.16$$

where  $I_M \cos(\omega t + \phi)$  is the response due to  $V_M \cos \omega t$  and  $jI_M \sin(\omega t + \phi)$  is the response due to  $jV_M \sin \omega t$ . This expression for the current containing both a real and an imaginary term can be written via Euler's equation as

$$i(t) = I_M e^{j(\omega t + \phi)} \quad 8.17$$

Because of the preceding relationships, we find that rather than apply the forcing function  $V_M \cos \omega t$  and calculate the response  $I_M \cos(\omega t + \phi)$ , we can apply the complex forcing function  $V_M e^{j\omega t}$  and calculate the response  $I_M e^{j(\omega t + \phi)}$ , the real part of which is the desired response  $I_M \cos(\omega t + \phi)$ . Although this procedure may initially appear to be more complicated, it is not. It is through this technique that we will convert the differential equation to an algebraic equation that is much easier to solve.

## EXAMPLE

### 8.4

#### SOLUTION

Once again, let us determine the current in the  $RL$  circuit examined in Example 8.3. However, rather than apply  $V_M \cos \omega t$ , we will apply  $V_M e^{j\omega t}$ .

The forced response will be of the form

$$i(t) = I_M e^{j(\omega t + \phi)}$$

where only  $I_M$  and  $\phi$  are unknown. Substituting  $v(t)$  and  $i(t)$  into the differential equation for the circuit, we obtain

$$RI_M e^{j(\omega t + \phi)} + L \frac{d}{dt} (I_M e^{j(\omega t + \phi)}) = V_M e^{j\omega t}$$

Taking the indicated derivative, we obtain

$$RI_M e^{j(\omega t + \phi)} + j\omega LI_M e^{j(\omega t + \phi)} = V_M e^{j\omega t}$$

Dividing each term of the equation by the common factor  $e^{j\omega t}$  yields

$$RI_M e^{j\phi} + j\omega LI_M e^{j\phi} = V_M$$

which is an algebraic equation with complex coefficients. This equation can be written as

$$I_M e^{j\phi} = \frac{V_M}{R + j\omega L}$$

Converting the right-hand side of the equation to exponential or polar form produces the equation

$$I_M e^{j\phi} = \frac{V_M}{\sqrt{R^2 + \omega^2 L^2}} e^{j[-\tan^{-1}(\omega L/R)]}$$

(A quick refresher on complex numbers is given in the Appendix for readers who need to sharpen their skills in this area.) The preceding form clearly indicates that the magnitude and phase of the resulting current are

$$I_M = \frac{V_M}{\sqrt{R^2 + \omega^2 L^2}}$$

and

$$\phi = -\tan^{-1} \frac{\omega L}{R}$$

### [hint]

Summary of complex number relationships:

$$x + jy = r e^{j\theta}$$

$$r = \sqrt{x^2 + y^2}$$

$$\theta = \tan^{-1} \frac{y}{x}$$

$$x = r \cos \theta$$

$$y = r \sin \theta$$

$$\frac{1}{e^{j\theta}} = e^{-j\theta}$$



However, since our actual forcing function was  $V_M \cos \omega t$  rather than  $V_M e^{j\omega t}$ , our actual response is the real part of the complex response:

$$\begin{aligned} i(t) &= I_M \cos(\omega t + \phi) \\ &= \frac{V_M}{\sqrt{R^2 + \omega^2 L^2}} \cos\left(\omega t - \tan^{-1} \frac{\omega L}{R}\right) \end{aligned}$$

Note that this is identical to the response obtained in the previous example by solving the differential equation for the current  $i(t)$ .

Once again let us assume that the forcing function for a linear network is of the form

$$v(t) = V_M e^{j\omega t}$$

Then every steady-state voltage or current in the network will have the same form and the same frequency  $\omega$ ; for example, a current  $i(t)$  will be of the form  $i(t) = I_M e^{j(\omega t + \phi)}$ .

As we proceed in our subsequent circuit analyses, we will simply note the frequency and then drop the factor  $e^{j\omega t}$  since it is common to every term in the describing equations. Dropping the term  $e^{j\omega t}$  indicates that every voltage or current can be fully described by a magnitude and phase. For example, a voltage  $v(t)$  can be written in exponential form as

$$v(t) = V_M \cos(\omega t + \theta) = \operatorname{Re}[V_M e^{j(\omega t + \theta)}] \quad \mathbf{8.18}$$

or as a complex number

$$v(t) = \operatorname{Re}(V_M \angle \theta e^{j\omega t}) \quad \mathbf{8.19}$$

Since we are working with a complex forcing function, the real part of which is the desired answer, and each term in the equation will contain  $e^{j\omega t}$ , we can drop  $\operatorname{Re}(\cdot)$  and  $e^{j\omega t}$  and work only with the complex number  $V_M \angle \theta$ . This complex representation is commonly called a *phasor*. As a distinguishing feature, phasors will be written in boldface type. In a completely identical manner a voltage  $v(t) = V_M \cos(\omega t + \theta) = \operatorname{Re}[V_M e^{j(\omega t + \theta)}]$  and a current  $i(t) = I_M \cos(\omega t + \phi) = \operatorname{Re}[I_M e^{j(\omega t + \phi)}]$  are written in phasor notation as  $\mathbf{V} = V_M \angle \theta$  and  $\mathbf{I} = I_M \angle \phi$ , respectively. Note that it is common practice to express phasors with positive magnitudes.

## 8.3

### Phasors

#### [hint]

If  $v(t) = V_M \cos(\omega t + \theta)$  and  $i(t) = I_M \cos(\omega t + \phi)$ , then in phasor notation

$$\mathbf{V} = V_M \angle \theta$$

and

$$\mathbf{I} = I_M \angle \phi$$

Again, we consider the  $RL$  circuit in Example 8.3. Let us use phasors to determine the expression for the current.

The differential equation is

$$L \frac{di(t)}{dt} + Ri(t) = V_M \cos \omega t$$

The forcing function can be replaced by a complex forcing function that is written as  $\mathbf{V} e^{j\omega t}$  with phasor  $\mathbf{V} = V_M \angle 0^\circ$ . Similarly, the forced response component of the current  $i(t)$  can be replaced by a complex function that is written as  $\mathbf{I} e^{j\omega t}$  with phasor  $\mathbf{I} = I_M \angle \phi$ . From our previous discussions we recall that the solution of the differential equation is the real part of this current.

### EXAMPLE

## 8.5

#### SOLUTION

Using the complex forcing function, we find that the differential equation becomes

$$L \frac{d}{dt} (\mathbf{I}e^{j\omega t}) + R\mathbf{I}e^{j\omega t} = \mathbf{V}e^{j\omega t}$$

$$j\omega L\mathbf{I}e^{j\omega t} + R\mathbf{I}e^{j\omega t} = \mathbf{V}e^{j\omega t}$$

Note that  $e^{j\omega t}$  is a common factor and, as we have already indicated, can be eliminated, leaving the phasors; that is,

$$j\omega L\mathbf{I} + R\mathbf{I} = \mathbf{V}$$

Therefore,

$$\mathbf{I} = \frac{\mathbf{V}}{R + j\omega L} = I_M \angle \phi = \frac{V_M}{\sqrt{R^2 + \omega^2 L^2}} \angle -\tan^{-1} \frac{\omega L}{R}$$

Thus,

$$i(t) = \frac{V_M}{\sqrt{R^2 + \omega^2 L^2}} \cos\left(\omega t - \tan^{-1} \frac{\omega L}{R}\right)$$

which once again is the function we obtained earlier.

### [hint]

The differential equation is reduced to a phasor equation.

We define relations between phasors after the  $e^{j\omega t}$  term has been eliminated as “phasor, or frequency domain, analysis.” Thus, we have transformed a set of differential equations with sinusoidal forcing functions in the time domain into a set of algebraic equations containing complex numbers in the frequency domain. In effect, we are now faced with solving a set of algebraic equations for the unknown phasors. The phasors are then simply transformed back to the time domain to yield the solution of the original set of differential equations. In addition, we note that the solution of sinusoidal steady-state circuits would be relatively simple if we could write the phasor equation directly from the circuit description. In Section 8.4 we will lay the groundwork for doing just that.

Note that in our discussions we have tacitly assumed that sinusoidal functions would be represented as phasors with a phase angle based on a cosine function. Therefore, if sine functions are used, we will simply employ the relationship in Eq. (8.7) to obtain the proper phase angle.

In summary, while  $v(t)$  represents a voltage in the time domain, the phasor  $\mathbf{V}$  represents the voltage in the frequency domain. The phasor contains only magnitude and phase information, and the frequency is implicit in this representation. The transformation from the time domain to the frequency domain, as well as the reverse transformation, is shown in Table 8.1. Recall that the phase angle is based on a cosine function and, therefore, if a sine function is involved, a  $90^\circ$  shift factor must be employed, as shown in the table.

**TABLE 8.1** Phasor representation

TIME DOMAIN	FREQUENCY DOMAIN
$A \cos(\omega t \pm \theta)$	$A \angle \pm \theta$
$A \sin(\omega t \pm \theta)$	$A \angle \pm \theta - 90^\circ$

## Problem-Solving Strategy

### Phasor Analysis

- Step 1.** Using phasors, transform a set of differential equations in the time domain into a set of algebraic equations in the frequency domain.
- Step 2.** Solve the algebraic equations for the unknown phasors.
- Step 3.** Transform the now-known phasors back to the time domain.

However, if a network contains only sine sources, there is no need to perform the  $90^\circ$  shift. We simply perform the normal phasor analysis, and then the *imaginary* part of the time-varying complex solution is the desired response. Simply put, cosine sources generate a cosine response, and sine sources generate a sine response.

## Learning Assessments

**E8.3** Convert the following voltage functions to phasors.

$$v_1(t) = 12 \cos(377t - 425^\circ) \text{ V}$$

$$v_2(t) = 18 \sin(2513t + 4.2^\circ) \text{ V}$$

**ANSWER:**  $\mathbf{V}_1 = 12 \angle -425^\circ \text{ V}$ ;  
 $\mathbf{V}_2 = 18 \angle -85.8^\circ \text{ V}$ .

**E8.4** Convert the following phasors to the time domain if the frequency is 400 Hz.

$$\mathbf{V}_1 = 10 \angle 20^\circ \text{ V}$$

$$\mathbf{V}_2 = 12 \angle -60^\circ \text{ V}$$

**ANSWER:**

$$v_1(t) = 10 \cos(800\pi t + 20^\circ) \text{ V};$$

$$v_2(t) = 12 \cos(800\pi t - 60^\circ) \text{ V}.$$

As we proceed in our development of the techniques required to analyze circuits in the sinusoidal steady state, we are now in a position to establish the phasor relationships between voltage and current for the three passive elements  $R$ ,  $L$ , and  $C$ .

In the case of a resistor as shown in Fig. 8.6a, the voltage–current relationship is known to be

$$v(t) = Ri(t) \quad 8.20$$

Applying the complex voltage  $V_M e^{j(\omega t + \theta_v)}$  results in the complex current  $I_M e^{j(\omega t + \theta_i)}$ , and therefore Eq. (8.20) becomes

$$V_M e^{j(\omega t + \theta_v)} = RI_M e^{j(\omega t + \theta_i)}$$

which reduces to

$$V_M e^{j\theta_v} = RI_M e^{j\theta_i} \quad 8.21$$

Equation (8.21) can be written in phasor form as

$$\mathbf{V} = R\mathbf{I} \quad 8.22$$

where

$$\mathbf{V} = V_M e^{j\theta_v} = V_M \angle \theta_v \quad \text{and} \quad \mathbf{I} = I_M e^{j\theta_i} = I_M \angle \theta_i$$

From Eq. (8.21) we see that  $\theta_v = \theta_i$  and thus the current and voltage for this circuit are *in phase*.

Historically, complex numbers have been represented as points on a graph in which the  $x$ -axis represents the real axis and the  $y$ -axis the imaginary axis. The line segment connecting the origin with the point provides a convenient representation of the magnitude and angle when the complex number is written in a polar form. A review of the Appendix will indicate how these complex numbers or line segments can be added, subtracted, and so on. Since phasors are complex numbers, it is convenient to represent the phasor voltage and current graphically as line segments. A plot of the line segments representing the phasors is called a *phasor diagram*. This pictorial representation of phasors provides immediate information on the relative magnitude of one phasor with another, the angle between two phasors, and the relative position of one phasor with respect to another (i.e., leading or lagging). A phasor diagram and the sinusoidal waveforms for the resistor are shown in Figs. 8.6c and d, respectively. A phasor diagram will be drawn for each of the other circuit elements in the remainder of this section.

## 8.4

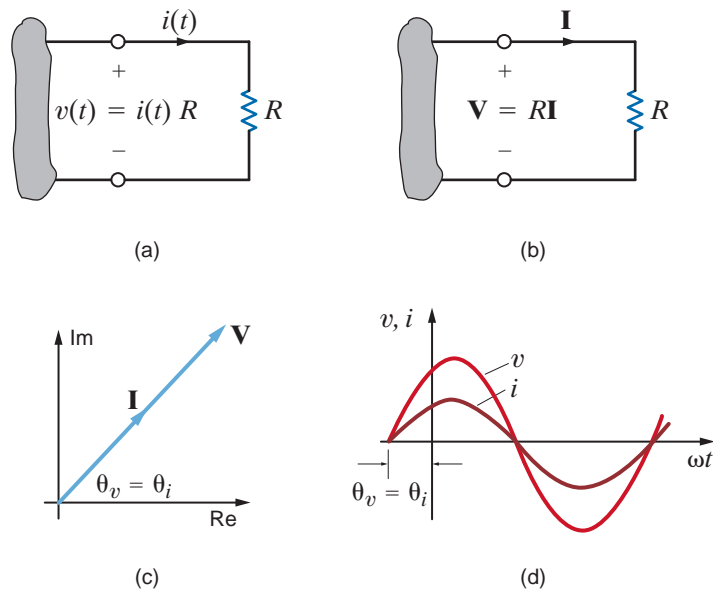
### Phasor Relationships for Circuit Elements

#### [hint]

Current and voltage are in phase.

**Figure 8.6**

Voltage–current relationships for a resistor.

**EXAMPLE****8.6**

If the voltage  $v(t) = 24 \cos(377t + 75^\circ)$  V is applied to a  $6\text{-}\Omega$  resistor as shown in Fig. 8.6a, we wish to determine the resultant current.

**SOLUTION**

Since the phasor voltage is

$$\mathbf{V} = 24 \angle 75^\circ \text{ V}$$

the phasor current from Eq. (8.22) is

$$\mathbf{I} = \frac{24 \angle 75^\circ}{6} = 4 \angle 75^\circ \text{ A}$$

which in the time domain is

$$i(t) = 4 \cos(377t + 75^\circ) \text{ A}$$

## Learning Assessment

**E8.5** The current in a  $4\text{-}\Omega$  resistor is known to be  $\mathbf{I} = 12 \angle 60^\circ$  A. Express the voltage across the resistor as a time function if the frequency of the current is 4 kHz.

**ANSWER:**

$$v(t) = 48 \cos(8000\pi t + 60^\circ) \text{ V.}$$

The voltage–current relationship for an inductor, as shown in Fig. 8.7a, is

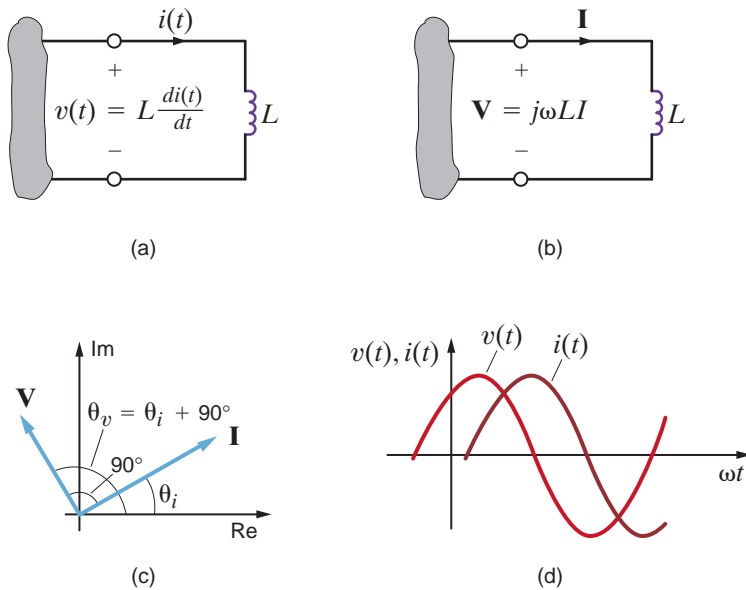
$$v(t) = L \frac{di(t)}{dt} \quad 8.23$$

Substituting the complex voltage and current into this equation yields

$$V_M e^{j(\omega t + \theta_v)} = L \frac{d}{dt} I_M e^{j(\omega t + \theta_i)}$$

which reduces to

$$V_M e^{j\theta_v} = j\omega L I_M e^{j\theta_i} \quad 8.24$$

**Figure 8.7**

Voltage–current relationships for an inductor.

Equation (8.24) in phasor notation is

$$\mathbf{V} = j\omega L \mathbf{I} \quad 8.25$$

Note that the differential equation in the time domain (8.23) has been converted to an algebraic equation with complex coefficients in the frequency domain. This relationship is shown in Fig. 8.7b. Since the imaginary operator  $j = 1e^{j90^\circ} = 1/\underline{90^\circ} = \sqrt{-1}$  Eq. (8.24) can be written as

$$V_M e^{j\theta_v} = \omega L I_M e^{j(\theta_i + 90^\circ)} \quad 8.26$$

Therefore, the voltage and current are  $90^\circ$  out of phase, and in particular the voltage leads the current by  $90^\circ$  or the current lags the voltage by  $90^\circ$ . The phasor diagram and the sinusoidal waveforms for the inductor circuit are shown in Figs. 8.7c and d, respectively.

[hint]

The derivative process yields a frequency-dependent function.

[hint]

The voltage leads the current or the current lags the voltage.

The voltage  $v(t) = 12 \cos(377t + 20^\circ)$  V is applied to a 20-mH inductor as shown in Fig. 8.7a. Find the resultant current.

The phasor current is

$$\begin{aligned} \mathbf{I} &= \frac{\mathbf{V}}{j\omega L} = \frac{12 \angle 20^\circ}{\omega L \angle 90^\circ} \\ &= \frac{12 \angle 20^\circ}{(377)(20 \times 10^{-3}) \angle 90^\circ} \\ &= 1.59 \angle -70^\circ \text{ A} \end{aligned}$$

or

$$i(t) = 1.59 \cos(377t - 70^\circ) \text{ A}$$

### EXAMPLE

## SOLUTION 8.7

[hint]

Applying  $\mathbf{V} = j\omega L \mathbf{I}$

$$\frac{x_1 \angle \theta_1}{x_2 \angle \theta_2} = \frac{x_1}{x_2} \angle \theta_1 - \theta_2$$

## Learning Assessment

**E8.6** The current in a 0.05-H inductor is  $\mathbf{I} = 4 \angle -30^\circ$  A. If the frequency of the current is 60 Hz, determine the voltage across the inductor.

**ANSWER:**

$$v_L(t) = 75.4 \cos(377t + 60^\circ) \text{ V.}$$

The voltage–current relationship for our last passive element, the capacitor, as shown in Fig. 8.8a, is

$$i(t) = C \frac{dv(t)}{dt} \quad 8.27$$

Once again employing the complex voltage and current, we obtain

$$I_M e^{j(\omega t + \theta_i)} = C \frac{d}{dt} V_M e^{j(\omega t + \theta_v)}$$

which reduces to

$$I_M e^{j\theta_i} = j\omega C V_M e^{j\theta_v} \quad 8.28$$

In phasor notation this equation becomes

$$\mathbf{I} = j\omega C \mathbf{V} \quad 8.29$$

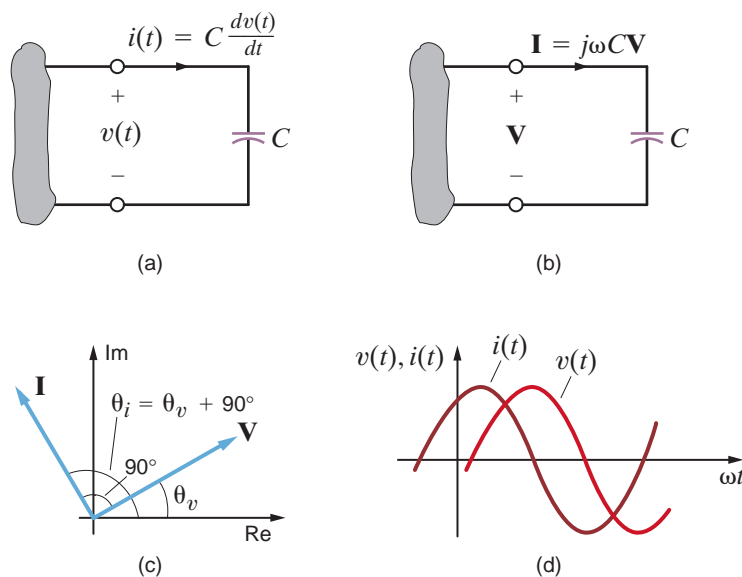
Eq. (8.27), a differential equation in the time domain, has been transformed into Eq. (8.29), an algebraic equation with complex coefficients in the frequency domain. The phasor relationship is shown in Fig. 8.8b. Substituting  $j = 1e^{j90^\circ}$  into Eq. (8.28) yields

$$I_M e^{j\theta_i} = \omega C V_M e^{j(\theta_v + 90^\circ)} \quad 8.30$$

Note that the voltage and current are  $90^\circ$  out of phase. Eq. (8.30) states that the current leads the voltage by  $90^\circ$  or the voltage lags the current by  $90^\circ$ . The phasor diagram and the sinusoidal waveforms for the capacitor circuit are shown in Figs. 8.8c and d, respectively.

**Figure 8.8**

Voltage–current relationships for a capacitor.



The voltage  $v(t) = 100 \cos(314t + 15^\circ)$  V is applied to a 100- $\mu$ F capacitor as shown in Fig. 8.8a. Find the current.

The resultant phasor current is

$$\begin{aligned} \mathbf{I} &= j\omega C(100 \angle 15^\circ) \\ &= (314)(100 \times 10^{-6} \angle 90^\circ)(100 \angle 15^\circ) \\ &= 3.14 \angle 105^\circ \text{ A} \end{aligned}$$

Therefore, the current written as a time function is

$$i(t) = 3.14 \cos(314t + 105^\circ) \text{ A}$$

## EXAMPLE 8.8

### SOLUTION

[hint]

Applying  $\mathbf{I} = j\omega C\mathbf{V}$

## Learning Assessment

**E8.7** The current in a 150- $\mu$ F capacitor is  $\mathbf{I} = 3.6 \angle -145^\circ$  A. If the frequency of the current is 60 Hz, determine the voltage across the capacitor.

**ANSWER:**

$$v_c(t) = 63.66 \cos(377t - 235^\circ) \text{ V.}$$

We have examined each of the circuit elements in the frequency domain on an individual basis. We now wish to treat these passive circuit elements in a more general fashion. We define the two-terminal input *impedance*  $\mathbf{Z}$ , also referred to as the driving point impedance, in exactly the same manner in which we defined resistance earlier. Later we will examine another type of impedance, called transfer impedance.

Impedance is defined as the ratio of the phasor voltage  $\mathbf{V}$  to the phasor current  $\mathbf{I}$ :

$$\mathbf{Z} = \frac{\mathbf{V}}{\mathbf{I}} \quad 8.31$$

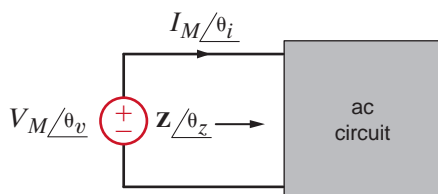
at the two terminals of the element related to one another by the passive sign convention, as illustrated in Fig. 8.9. Since  $\mathbf{V}$  and  $\mathbf{I}$  are complex, the impedance  $\mathbf{Z}$  is complex and

$$\mathbf{Z} = \frac{V_M \angle \theta_v}{I_M \angle \theta_i} = \frac{V_M}{I_M} \angle \theta_v - \theta_i = Z \angle \theta_z \quad 8.32$$

Since  $\mathbf{Z}$  is the ratio of  $\mathbf{V}$  to  $\mathbf{I}$ , the units of  $\mathbf{Z}$  are ohms. Thus, impedance in an ac circuit is analogous to resistance in a dc circuit. In rectangular form, impedance is expressed as

$$\mathbf{Z}(\omega) = R(\omega) + jX(\omega) \quad 8.33$$

where  $R(\omega)$  is the real, or resistive, component and  $X(\omega)$  is the imaginary, or reactive, component. In general, we simply refer to  $R$  as the resistance and  $X$  as the reactance. It is



**Figure 8.9**  
General impedance  
relationship.

## 8.5

### Impedance and Admittance

important to note that  $R$  and  $X$  are real functions of  $\omega$  and therefore  $\mathbf{Z}(\omega)$  is frequency dependent. Equation (8.33) clearly indicates that  $\mathbf{Z}$  is a complex number; however, it is not a phasor, since phasors denote sinusoidal functions.

Equations (8.32) and (8.33) indicate that

$$\mathbf{Z} / \theta_z = R + jX \quad 8.34$$

Therefore,

$$\begin{aligned} Z &= \sqrt{R^2 + X^2} \\ \theta_z &= \tan^{-1} \frac{X}{R} \end{aligned} \quad 8.35$$

where

$$\begin{aligned} R &= Z \cos \theta_z \\ X &= Z \sin \theta_z \end{aligned}$$

For the individual passive elements the impedance is as shown in Table 8.2. However, just as it was advantageous to know how to determine the equivalent resistance in dc circuits, we want to learn how to determine the equivalent impedance in ac circuits.

**TABLE 8.2** Passive element impedance

PASSIVE ELEMENT	IMPEDANCE
$R$	$\mathbf{Z} = R$
$L$	$\mathbf{Z} = j\omega L = jX_L = \omega L \angle 90^\circ, X_L = \omega L$
$C$	$\mathbf{Z} = \frac{1}{j\omega C} = jX_C = -\frac{1}{\omega C} \angle 90^\circ, X_C = -\frac{1}{\omega C}$

KCL and KVL are both valid in the frequency domain. We can use this fact, as was done in Chapter 2 for resistors, to show that impedances can be combined using the same rules that we established for resistor combinations. That is, if  $\mathbf{Z}_1, \mathbf{Z}_2, \mathbf{Z}_3, \dots, \mathbf{Z}_n$  are connected in series, the equivalent impedance  $\mathbf{Z}_s$  is

$$\mathbf{Z}_s = \mathbf{Z}_1 + \mathbf{Z}_2 + \mathbf{Z}_3 + \cdots + \mathbf{Z}_n \quad 8.36$$

and if  $\mathbf{Z}_1, \mathbf{Z}_2, \mathbf{Z}_3, \dots, \mathbf{Z}_n$  are connected in parallel, the equivalent impedance is given by

$$\frac{1}{\mathbf{Z}_p} = \frac{1}{\mathbf{Z}_1} + \frac{1}{\mathbf{Z}_2} + \frac{1}{\mathbf{Z}_3} + \cdots + \frac{1}{\mathbf{Z}_n} \quad 8.37$$

## EXAMPLE 8.9

Determine the equivalent impedance of the network shown in Fig. 8.10 if the frequency is  $f = 60$  Hz. Then compute the current  $i(t)$  if the voltage source is  $v(t) = 50 \cos(\omega t + 30^\circ)$  V. Finally, calculate the equivalent impedance if the frequency is  $f = 400$  Hz.



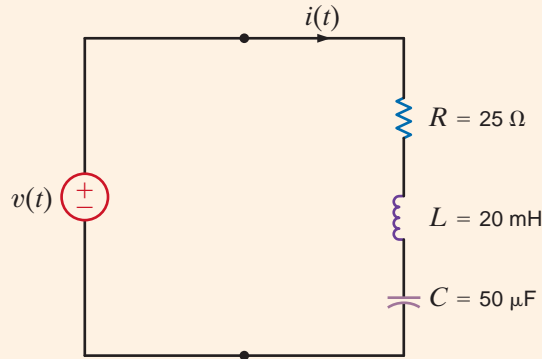


Figure 8.10

Series ac circuit.

The impedances of the individual elements at 60 Hz are

$$\mathbf{Z}_R = 25 \Omega$$

$$\mathbf{Z}_L = j\omega L = j(2\pi \times 60)(20 \times 10^{-3}) = j7.54 \Omega$$

$$\mathbf{Z}_C = \frac{-j}{\omega C} = \frac{-j}{(2\pi \times 60)(50 \times 10^{-6})} = -j53.05 \Omega$$

Since the elements are in series,

$$\begin{aligned} \mathbf{Z} &= \mathbf{Z}_R + \mathbf{Z}_L + \mathbf{Z}_C \\ &= 25 - j45.51 \Omega \end{aligned}$$

The current in the circuit is given by

$$\mathbf{I} = \frac{\mathbf{V}}{\mathbf{Z}} = \frac{50 \angle 30^\circ}{25 - j45.51} = \frac{50 \angle 30^\circ}{51.93 \angle -61.22^\circ} = 0.96 \angle 91.22^\circ \text{ A}$$

or in the time domain,  $i(t) = 0.96 \cos(377t + 91.22^\circ) \text{ A}$ .

If the frequency is 400 Hz, the impedance of each element is

$$\mathbf{Z}_R = 25 \Omega$$

$$\mathbf{Z}_L = j\omega L = j50.27 \Omega$$

$$\mathbf{Z}_C = \frac{-j}{\omega C} = -j7.96 \Omega$$

The total impedance is then

$$\mathbf{Z} = 25 + j42.31 = 49.14 \angle 59.42^\circ \Omega$$

At the frequency  $f = 60 \text{ Hz}$ , the reactance of the circuit is capacitive; that is, if the impedance is written as  $R + jX$ ,  $X < 0$ . However, at  $f = 400 \text{ Hz}$  the reactance is inductive since  $X > 0$ .

**SOLUTION****Problem-Solving Strategy**

- Step 1.** Express  $v(t)$  as a phasor and determine the impedance of each passive element.
- Step 2.** Combine impedances and solve for the phasor  $\mathbf{I}$ .
- Step 3.** Convert the phasor  $\mathbf{I}$  to  $i(t)$ .

**Basic AC Analysis**

## Learning Assessment

**E8.8** Find the current  $i(t)$  in the network in Fig. E8.8.

**ANSWER:**

$$i(t) = 3.88 \cos(377t - 39.2^\circ) \text{ A.}$$

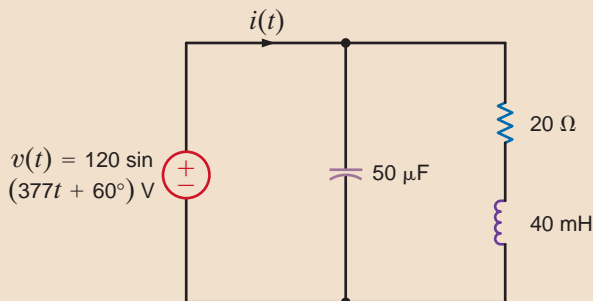


Figure E8.8

Another quantity that is very useful in the analysis of ac circuits is the two-terminal input *admittance*, which is the reciprocal of impedance; that is,

$$\mathbf{Y} = \frac{1}{\mathbf{Z}} = \frac{\mathbf{I}}{\mathbf{V}} \quad 8.38$$

The units of  $\mathbf{Y}$  are siemens, and this quantity is analogous to conductance in resistive dc circuits. Since  $\mathbf{Z}$  is a complex number,  $\mathbf{Y}$  is also a complex number.

$$\mathbf{Y} = Y_M \angle \theta_y \quad 8.39$$

which is written in rectangular form as

$$\mathbf{Y} = G + jB \quad 8.40$$

where  $G$  and  $B$  are called *conductance* and *susceptance*, respectively. Because of the relationship between  $\mathbf{Y}$  and  $\mathbf{Z}$ , we can express the components of one quantity as a function of the components of the other. From the expression

$$G + jB = \frac{1}{R + jX} \quad 8.41$$

we can show that

$$G = \frac{R}{R^2 + X^2}, \quad B = \frac{-X}{R^2 + X^2} \quad 8.42$$

and in a similar manner, we can show that

$$R = \frac{G}{G^2 + B^2}, \quad X = \frac{-B}{G^2 + B^2} \quad 8.43$$

It is very important to note that in general  $R$  and  $G$  are *not* reciprocals of one another. The same is true for  $X$  and  $B$ . The purely resistive case is an exception. In the purely reactive case, the quantities are negative reciprocals of one another.

The admittance of the individual passive elements are

$$\begin{aligned} \mathbf{Y}_R &= \frac{1}{R} = G \\ \mathbf{Y}_L &= \frac{1}{j\omega L} = -\frac{1}{\omega L} \angle 90^\circ \\ \mathbf{Y}_C &= j\omega C = \omega C \angle 90^\circ \end{aligned} \quad 8.44$$

### [hint]

Technique for taking the reciprocal:

$$\begin{aligned} \frac{1}{R + jX} &= \frac{R - jX}{(R + jX)(R - jX)} \\ &= \frac{R - jX}{R^2 + X^2} \end{aligned}$$

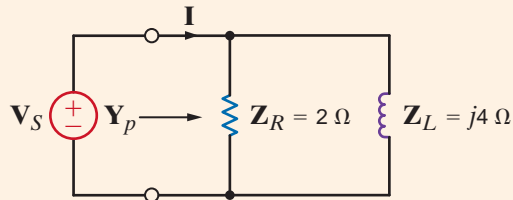
Once again, since KCL and KVL are valid in the frequency domain, we can show, using the same approach outlined in Chapter 2 for conductance in resistive circuits, that the rules for combining admittances are the same as those for combining conductances; that is, if  $\mathbf{Y}_1, \mathbf{Y}_2, \mathbf{Y}_3, \dots, \mathbf{Y}_n$  are connected in parallel, the equivalent admittance is

$$\mathbf{Y}_p = \mathbf{Y}_1 + \mathbf{Y}_2 + \dots + \mathbf{Y}_n \quad 8.45$$

and if  $\mathbf{Y}_1, \mathbf{Y}_2, \dots, \mathbf{Y}_n$  are connected in series, the equivalent admittance is

$$\frac{1}{\mathbf{Y}_s} = \frac{1}{\mathbf{Y}_1} + \frac{1}{\mathbf{Y}_2} + \dots + \frac{1}{\mathbf{Y}_n} \quad 8.46$$

Calculate the equivalent admittance  $\mathbf{Y}_p$  for the network in Fig. 8.11 and use it to determine the current  $\mathbf{I}$  if  $\mathbf{V}_s = 60 \angle 45^\circ \text{ V}$ .



From Fig. 8.11 we note that

$$\mathbf{Y}_R = \frac{1}{\mathbf{Z}_R} = \frac{1}{2} \text{ S}$$

$$\mathbf{Y}_L = \frac{1}{\mathbf{Z}_L} = \frac{-j}{4} \text{ S}$$

Therefore,

$$\mathbf{Y}_p = \frac{1}{2} - j \frac{1}{4} \text{ S}$$

and hence,

$$\begin{aligned} \mathbf{I} &= \mathbf{Y}_p \mathbf{V}_s \\ &= \left( \frac{1}{2} - j \frac{1}{4} \right) (60 \angle 45^\circ) \\ &= 33.5 \angle 18.43^\circ \text{ A} \end{aligned}$$

### EXAMPLE 8.10

Figure 8.11

Example parallel circuit.

### SOLUTION

[hint]

Admittances add in parallel.

## Learning Assessments

**E8.9** Find the current  $\mathbf{I}$  in the network in Fig. E8.9.

**ANSWER:**  $\mathbf{I} = 9.01 \angle 53.7^\circ \text{ A}$ .

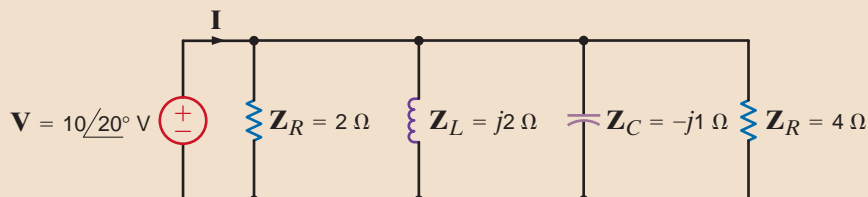
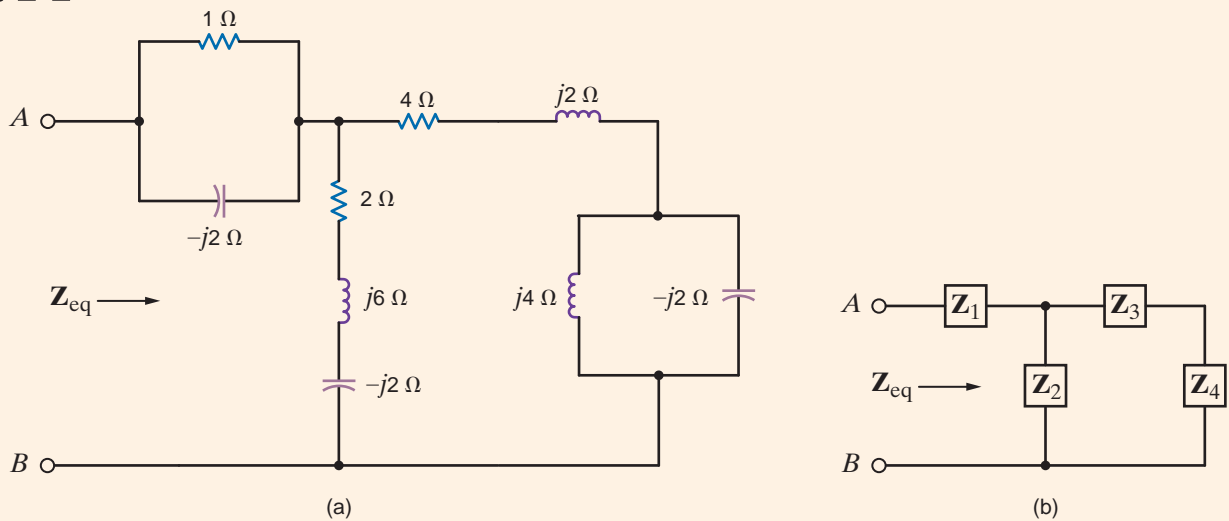


Figure E8.9

As a prelude to our analysis of more general ac circuits, let us examine the techniques for computing the impedance or admittance of circuits in which numerous passive elements are interconnected. The following example illustrates that our technique is analogous to our earlier computations of equivalent resistance.

### EXAMPLE 8.11

Consider the network shown in Fig. 8.12a. The impedance of each element is given in the figure. We wish to calculate the equivalent impedance of the network  $\mathbf{Z}_{\text{eq}}$  at terminals A–B.



**Figure 8.12** Example circuit for determining equivalent impedance in two steps.

**SOLUTION** The equivalent impedance  $\mathbf{Z}_{\text{eq}}$  could be calculated in a variety of ways; we could use only impedances, or only admittances, or a combination of the two. We will use the latter. We begin by noting that the circuit in Fig. 8.12a can be represented by the circuit in Fig. 8.12b.

Note that

$$\begin{aligned}\mathbf{Y}_4 &= \mathbf{Y}_L + \mathbf{Y}_C \\ &= \frac{1}{j4} + \frac{1}{-j2} \\ &= j\frac{1}{4}\text{ S}\end{aligned}$$

Therefore,

$$\mathbf{Z}_4 = -j4\ \Omega$$

Now

$$\begin{aligned}\mathbf{Z}_{34} &= \mathbf{Z}_3 + \mathbf{Z}_4 \\ &= (4 + j2) + (-j4) \\ &= 4 - j2\ \Omega\end{aligned}$$

and hence,

$$\begin{aligned}\mathbf{Y}_{34} &= \frac{1}{\mathbf{Z}_{34}} \\ &= \frac{1}{4 - j2} \\ &= 0.20 + j0.10\text{ S}\end{aligned}$$

Since

$$\begin{aligned}\mathbf{Z}_2 &= 2 + j6 - j2 \\ &= 2 + j4 \Omega\end{aligned}$$

then

$$\begin{aligned}\mathbf{Y}_2 &= \frac{1}{2 + j4} \\ &= 0.10 - j0.20 \text{ S} \\ \mathbf{Y}_{234} &= \mathbf{Y}_2 + \mathbf{Y}_{34} \\ &= 0.30 - j0.10 \text{ S}\end{aligned}$$

The reader should carefully note our approach: we are adding impedances in series and adding admittances in parallel.

From  $\mathbf{Y}_{234}$  we can compute  $\mathbf{Z}_{234}$  as

$$\begin{aligned}\mathbf{Z}_{234} &= \frac{1}{\mathbf{Y}_{234}} \\ &= \frac{1}{0.30 - j0.10} \\ &= 3 + j1 \Omega\end{aligned}$$

Now

$$\begin{aligned}\mathbf{Y}_1 &= \mathbf{Y}_R + \mathbf{Y}_C \\ &= \frac{1}{1} + \frac{1}{-j2} \\ &= 1 + j\frac{1}{2} \text{ S}\end{aligned}$$

and then

$$\begin{aligned}\mathbf{Z}_1 &= \frac{1}{1 + j\frac{1}{2}} \\ &= 0.8 - j0.4 \Omega\end{aligned}$$

Therefore,

$$\begin{aligned}\mathbf{Z}_{\text{eq}} &= \mathbf{Z}_1 + \mathbf{Z}_{234} \\ &= 0.8 - j0.4 + 3 + j1 \\ &= 3.8 + j0.6 \Omega\end{aligned}$$

## Problem-Solving Strategy

- Step 1.** Add the admittances of elements in parallel.
- Step 2.** Add the impedances of elements in series.
- Step 3.** Convert back and forth between admittance and impedance in order to combine neighboring elements.

**Combining  
Impedances and  
Admittances**

## Learning Assessments

**E8.10** Compute the impedance  $Z_T$  in the network in Fig. E8.10.

**ANSWER:**

$$Z_T = 3.38 + j1.08 \Omega.$$

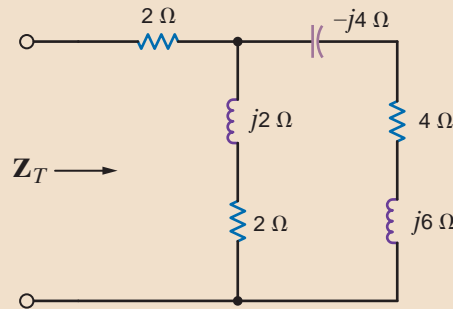


Figure E8.10

**E8.11** Find  $Z$  in Fig. E8.11.

**ANSWER:**

$$Z = 1.95 + j0.29 \Omega.$$

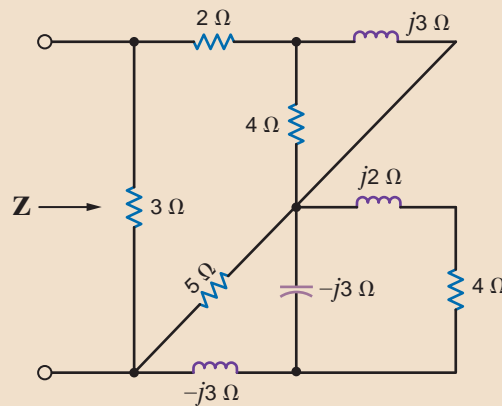


Figure E8.11

## 8.6

### Phasor Diagrams

Impedance and admittance are functions of frequency, and therefore their values change as the frequency changes. These changes in  $Z$  and  $Y$  have a resultant effect on the current–voltage relationships in a network. This impact of changes in frequency on circuit parameters can be easily seen via a phasor diagram. The following examples will serve to illustrate these points.

### EXAMPLE

## 8.12

Let us sketch the phasor diagram for the network shown in Fig. 8.13.

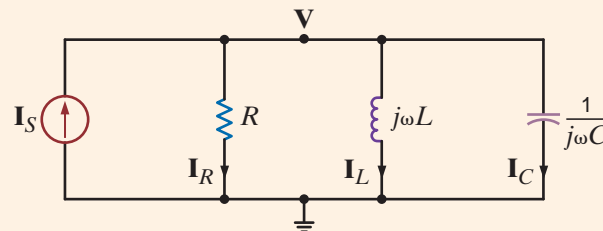


Figure 8.13

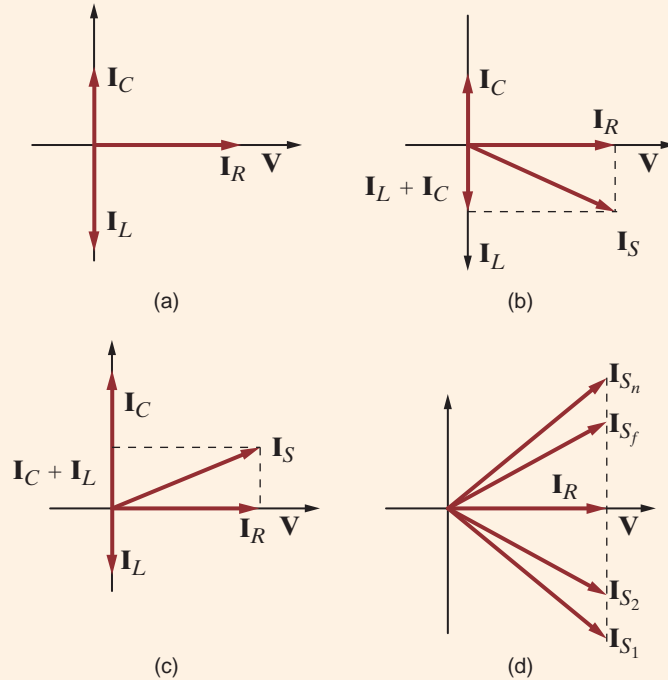
Example parallel circuit.

### SOLUTION

The pertinent variables are labeled on the figure. For convenience in forming a phasor diagram, we select  $V$  as a reference phasor and arbitrarily assign it a  $0^\circ$  phase angle. We will, therefore, measure all currents with respect to this phasor. We suffer no loss of generality by assigning  $V$  a  $0^\circ$  phase angle, since if it is actually  $30^\circ$ , for example, we will simply rotate the entire phasor diagram by  $30^\circ$  because all the currents are measured with respect to this phasor.

At the upper node in the circuit KCL is

$$I_S = I_R + I_L + I_C = \frac{V}{R} + \frac{V}{j\omega L} + \frac{V}{1/j\omega C}$$



**Figure 8.14**  
Phasor diagrams for the circuit in Fig. 8.13.

Since  $\mathbf{V} = V_M \angle 0^\circ$ , then

$$\mathbf{I}_S = \frac{V_M \angle 0^\circ}{R} + \frac{V_M \angle -90^\circ}{\omega L} + V_M \omega C \angle 90^\circ$$

The phasor diagram that illustrates the phase relationship between  $\mathbf{V}$ ,  $\mathbf{I}_R$ ,  $\mathbf{I}_L$  and  $\mathbf{I}_C$  is shown in Fig. 8.14a. For small values of  $\omega$  such that the magnitude of  $\mathbf{I}_L$  is greater than that of  $\mathbf{I}_C$ , the phasor diagram for the currents is shown in Fig. 8.14b. In the case of large values of  $\omega$ —that is, those for which  $\mathbf{I}_C$  is greater than  $\mathbf{I}_L$ —the phasor diagram for the currents is shown in Fig. 8.14c. Note that as  $\omega$  increases, the phasor  $\mathbf{I}_S$  moves from  $\mathbf{I}_{S_1}$  to  $\mathbf{I}_{S_n}$  along a locus of points specified by the dashed line shown in Fig. 8.14d.

Note that  $\mathbf{I}_S$  is in phase with  $\mathbf{V}$  when  $\mathbf{I}_C = \mathbf{I}_L$  or, in other words, when  $\omega L = 1/\omega C$ . Hence, the node voltage  $\mathbf{V}$  is in phase with the current source  $\mathbf{I}_S$  when

$$\omega = \frac{1}{\sqrt{LC}}$$

This can also be seen from the KCL equation

$$\mathbf{I} = \left[ \frac{1}{R} + j \left( \omega C - \frac{1}{\omega L} \right) \right] \mathbf{V}$$

[hint]

From a graphical standpoint, phasors can be manipulated like vectors.

Let us determine the phasor diagram for the series circuit shown in Fig. 8.15a.

KVL for this circuit is of the form

$$\begin{aligned} \mathbf{V}_S &= \mathbf{V}_R + \mathbf{V}_L + \mathbf{V}_C \\ &= \mathbf{I}R + \omega L \mathbf{I} \angle 90^\circ + \frac{\mathbf{I}}{\omega C} \angle -90^\circ \end{aligned}$$

**EXAMPLE**  
**8.13**  
**SOLUTION**

If we select  $\mathbf{I}$  as a reference phasor so that  $\mathbf{I} = I_M/0^\circ$ , then if  $\omega LI_M > I_M/\omega C$ , the phasor diagram will be of the form shown in Fig. 8.15b. Specifically, if  $\omega = 377$  rad/s (i.e.,  $f = 60$  Hz), then  $\omega L = 6$  and  $1/\omega C = 2$ . Under these conditions, the phasor diagram is as shown in Fig. 8.15c. If, however, we select  $\mathbf{V}_S$  as reference with, for example,

$$v_s(t) = 12\sqrt{2} \cos(377t + 90^\circ) \text{ V}$$

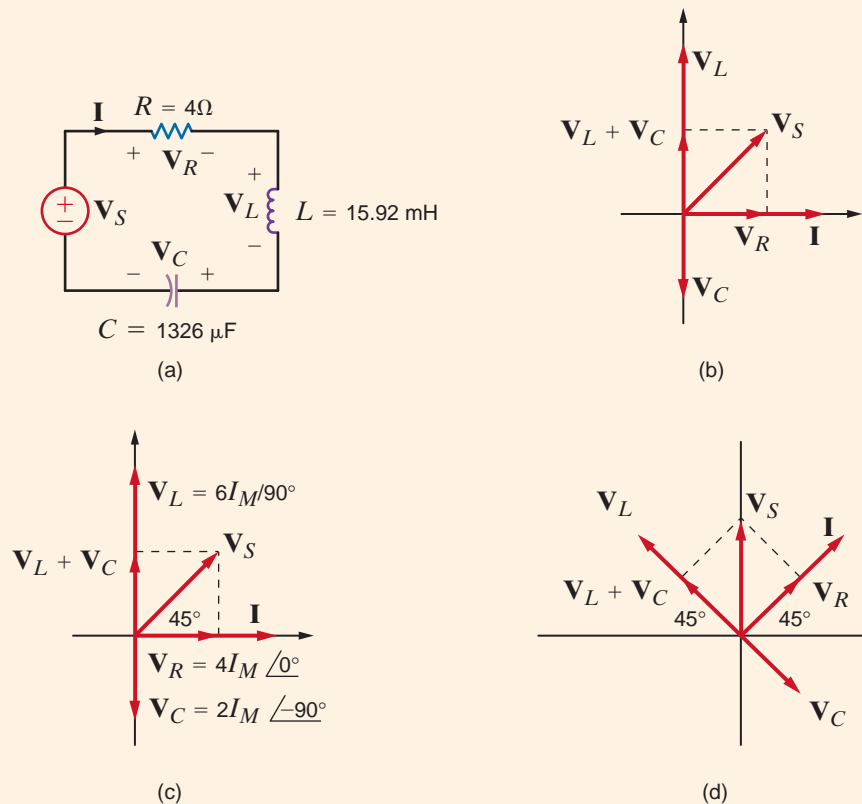
then

$$\begin{aligned} \mathbf{I} &= \frac{\mathbf{V}}{\mathbf{Z}} = \frac{12\sqrt{2} \angle 90^\circ}{4 + j6 - j2} \\ &= \frac{12\sqrt{2} \angle 90^\circ}{4\sqrt{2} \angle 45^\circ} \\ &= 3 \angle 45^\circ \text{ A} \end{aligned}$$

and the entire phasor diagram, as shown in Figs. 8.15b and c, is rotated  $45^\circ$ , as shown in Fig. 8.15d.

**Figure 8.15**

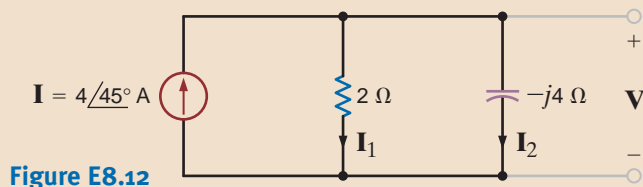
Series circuit and certain specific phasor diagrams (plots are not drawn to scale).



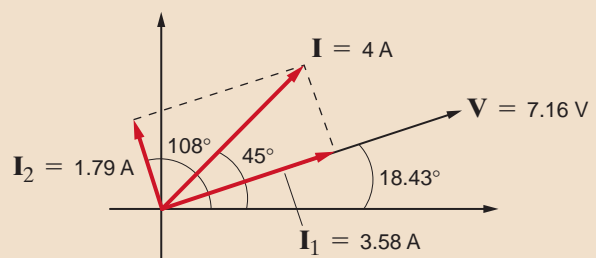
## Learning Assessments

**E8.12** Draw a phasor diagram to illustrate all currents and voltages for the network in Fig. E8.12.

**ANSWER:**



**Figure E8.12**





**E8.13** Find the value of  $C$  such that  $v(t)$  and  $i(t)$  are in phase in Fig. E8.13.

**ANSWER:**  $C = 400 \mu\text{F}$

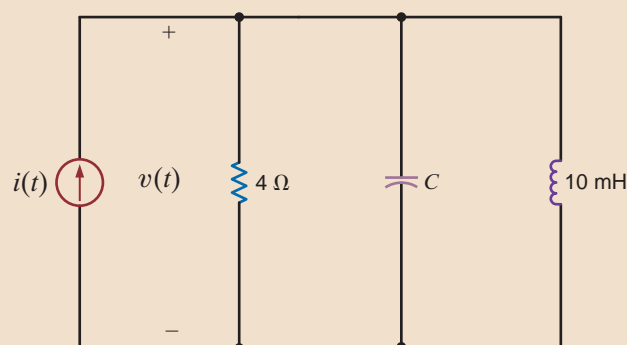


Figure E8.13

We have shown that Kirchhoff's laws apply in the frequency domain, and therefore they can be used to compute steady-state voltages and currents in ac circuits. This approach involves expressing these voltages and currents as phasors, and once this is done, the ac steady-state analysis employing phasor equations is performed in an identical fashion to that used in the dc analysis of resistive circuits. Complex number algebra is the tool that is used for the mathematical manipulation of the phasor equations, which, of course, have complex coefficients. We will begin by illustrating that the techniques we have applied in the solution of dc resistive circuits are valid in ac circuit analysis also—the only difference being that in steady-state ac circuit analysis the algebraic phasor equations have complex coefficients.

## 8.7

### Basic Analysis Using Kirchhoff's Laws

## Problem-Solving Strategy

- For relatively simple circuits (e.g., those with a single source), use
  - Ohm's law for ac analysis—that is,  $\mathbf{V} = \mathbf{IZ}$
  - The rules for combining  $\mathbf{Z}_s$  and  $\mathbf{Y}_p$
  - KCL and KVL
  - Current and voltage division
- For more complicated circuits with multiple sources, use
  - Nodal analysis
  - Loop or mesh analysis
  - Superposition
  - Source exchange
  - Thévenin's and Norton's theorems

### AC Steady-State Analysis

At this point, it is important for the reader to understand that in our manipulation of algebraic phasor equations with complex coefficients we will, for the sake of simplicity, normally carry only two digits to the right of the decimal point. In doing so, we will introduce round-off errors in our calculations. Nowhere are these errors more evident than when two or more approaches are used to solve the same problem, as is done in the following example.

## EXAMPLE

## 8.14 SOLUTION

We wish to calculate all the voltages and currents in the circuit shown in Fig. 8.16a.

Our approach will be as follows. We will calculate the total impedance seen by the source  $\mathbf{V}_S$ . Then we will use this to determine  $\mathbf{I}_1$ . Knowing  $\mathbf{I}_1$ , we can compute  $\mathbf{V}_1$  using KVL. Knowing  $\mathbf{V}_1$ , we can compute  $\mathbf{I}_2$  and  $\mathbf{I}_3$ , and so on.

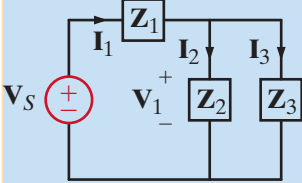
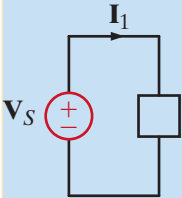
The total impedance seen by the source  $\mathbf{V}_S$  is

$$\begin{aligned} \mathbf{Z}_{\text{eq}} &= 4 + \frac{(j6)(8 - j4)}{j6 + 8 - j4} \\ &= 4 + \frac{24 + j48}{8 + j2} \\ &= 4 + 4.24 + j4.94 \\ &= 9.61 / 30.94^\circ \Omega \end{aligned}$$

## [hint]

## Technique

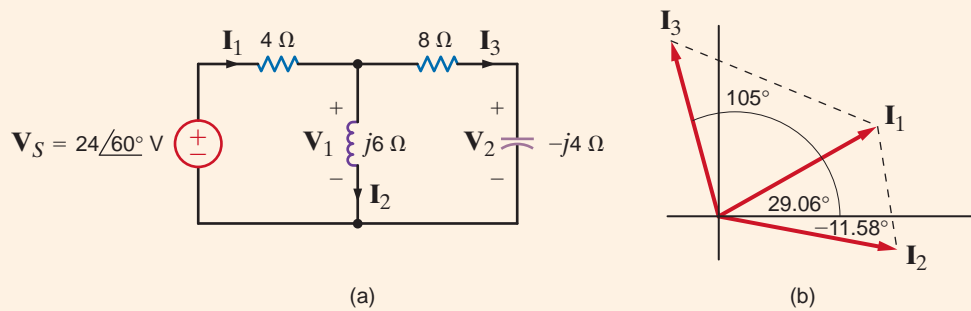
1. Compute  $\mathbf{I}_1$ .



2. Determine  $\mathbf{V}_1 = \mathbf{V}_S - \mathbf{I}_1 \mathbf{Z}_1$

Then  $\mathbf{I}_2 = \frac{\mathbf{V}_1}{\mathbf{Z}_2}$  and  $\mathbf{I}_3 = \frac{\mathbf{V}_1}{\mathbf{Z}_3}$

Current and voltage division are also applicable.



**Figure 8.16** (a) Example ac circuit, (b) phasor diagram for the currents (plots are not drawn to scale).

Then

$$\begin{aligned} \mathbf{I}_1 &= \frac{\mathbf{V}_S}{\mathbf{Z}_{\text{eq}}} = \frac{24 / 60^\circ}{9.61 / 30.94^\circ} \\ &= 2.5 / 29.06^\circ \text{ A} \end{aligned}$$

$\mathbf{V}_1$  can be determined using KVL:

$$\begin{aligned} \mathbf{V}_1 &= \mathbf{V}_S - 4\mathbf{I}_1 \\ &= 24 / 60^\circ - 10 / 29.06^\circ \\ &= 3.26 + j15.93 \\ &= 16.26 / 78.43^\circ \text{ V} \end{aligned}$$

Note that  $\mathbf{V}_1$  could also be computed via voltage division:

$$\mathbf{V}_1 = \frac{\mathbf{V}_S \frac{(j6)(8 - j4)}{j6 + 8 - j4}}{4 + \frac{(j6)(8 - j4)}{j6 + 8 - j4}} \text{ V}$$

which from our previous calculation is

$$\begin{aligned}\mathbf{V}_1 &= \frac{(24 \angle 60^\circ)(6.51 \angle 49.36^\circ)}{9.61 \angle 30.94^\circ} \\ &= 16.26 \angle 78.42^\circ \text{ V}\end{aligned}$$

Knowing  $\mathbf{V}_1$ , we can calculate both  $\mathbf{I}_2$  and  $\mathbf{I}_3$ :

$$\begin{aligned}\mathbf{I}_2 &= \frac{\mathbf{V}_1}{j6} = \frac{16.26 \angle 78.43^\circ}{6 \angle 90^\circ} \\ &= 2.71 \angle -11.58^\circ \text{ A}\end{aligned}$$

and

$$\begin{aligned}\mathbf{I}_3 &= \frac{\mathbf{V}_1}{8 - j4} \\ &= 1.82 \angle 105^\circ \text{ A}\end{aligned}$$

Note that  $\mathbf{I}_2$  and  $\mathbf{I}_3$  could have been calculated by current division. For example,  $\mathbf{I}_2$  could be determined by

$$\begin{aligned}\mathbf{I}_2 &= \frac{\mathbf{I}_1(8 - j4)}{8 - j4 + j6} \\ &= \frac{(2.5 \angle 29.06^\circ)(8.94 \angle -26.57^\circ)}{8 + j2} \\ &= 2.71 \angle -11.55^\circ \text{ A}\end{aligned}$$

Finally,  $\mathbf{V}_2$  can be computed as

$$\begin{aligned}\mathbf{V}_2 &= \mathbf{I}_3(-j4) \\ &= 7.28 \angle 15^\circ \text{ V}\end{aligned}$$

This value could also have been computed by voltage division. The phasor diagram for the currents  $\mathbf{I}_1$ ,  $\mathbf{I}_2$ , and  $\mathbf{I}_3$  is shown in Fig. 8.16b and is an illustration of KCL.

Finally, the reader is encouraged to work the problem in reverse; that is, given  $\mathbf{V}_2$ , find  $\mathbf{V}_s$ . Note that if  $\mathbf{V}_2$  is known,  $\mathbf{I}_3$  can be computed immediately using the capacitor impedance. Then  $\mathbf{V}_2 + \mathbf{I}_3(8)$  yields  $\mathbf{V}_1$ . Knowing  $\mathbf{V}_1$  we can find  $\mathbf{I}_2$ . Then  $\mathbf{I}_2 + \mathbf{I}_3 = \mathbf{I}_1$ , and so on. Note that this analysis, which is the subject of Learning Assessment E8.12, involves simply a repeated application of Ohm's law, KCL, and KVL.

## Learning Assessments

**E8.14** Find  $v_A(t)$  in Fig. E8.14.

**ANSWER:**  $v_A(t) = 95.83 \cos(50t + 24.1^\circ) \text{ V}$ .

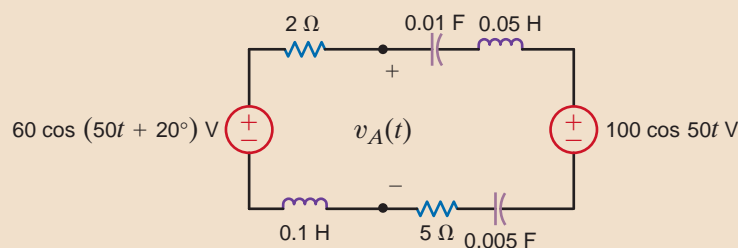


Figure E8.14

**E8.15** Find  $V_o$  in Fig. E8.15.

**ANSWER:**

$$V_o = 2.98 \angle -153.43^\circ \text{ V.}$$

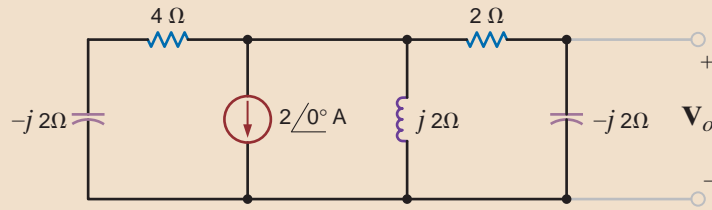


Figure E8.15

**E8.16** In the network in Fig. E8.16,  $V_o$  is known to be  $8 \angle 45^\circ \text{ V}$ . Compute  $V_S$ .

**ANSWER:**

$$V_S = 17.89 \angle -18.43^\circ \text{ V.}$$

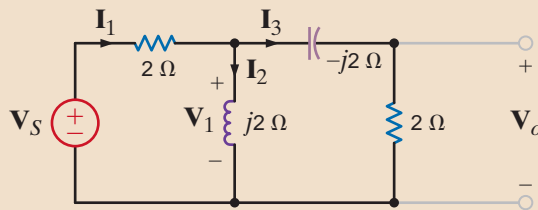


Figure E8.16

## 8.8

### Analysis Techniques

In this section we revisit the circuit analysis methods that were successfully applied earlier to dc circuits and illustrate their applicability to ac steady-state analysis. The vehicle we employ to present these techniques is examples in which all the theorems, together with nodal analysis and loop analysis, are used to obtain a solution.

### EXAMPLE 8.15

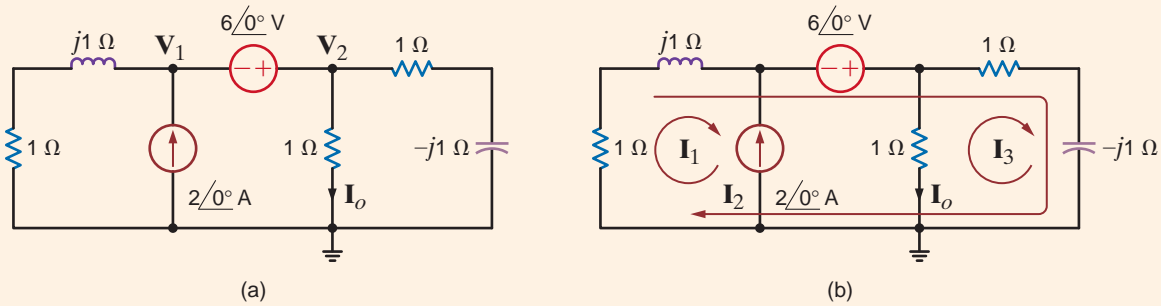
Let us determine the current  $I_o$  in the network in Fig. 8.17a using nodal analysis, loop analysis, superposition, source exchange, Thévenin's theorem, and Norton's theorem.

**SOLUTION** 1. *Nodal Analysis* We begin with a nodal analysis of the network. The KCL equation for the supernode that includes the voltage source is

$$\frac{V_1}{1+j} - 2 \angle 0^\circ + \frac{V_2}{1} + \frac{V_2}{1-j} = 0$$

[hint]

Summing the current, leaving the supernode. Outbound currents have a positive sign.



**Figure 8.17** Circuits used in Example 8.15 for node and loop analysis.

and the associated KVL constraint equation is

$$\mathbf{V}_1 + 6\angle 0^\circ = \mathbf{V}_2$$

Solving for  $\mathbf{V}_1$  in the second equation and using this value in the first equation yields

$$\frac{\mathbf{V}_2 - 6\angle 0^\circ}{1 + j} - 2\angle 0^\circ + \mathbf{V}_2 + \frac{\mathbf{V}_2}{1 - j} = 0$$

or

$$\mathbf{V}_2 \left[ \frac{1}{1 + j} + 1 + \frac{1}{1 - j} \right] = \frac{6 + 2 + 2j}{1 + j}$$

Solving for  $\mathbf{V}_2$ , we obtain

$$\mathbf{V}_2 = \left( \frac{4 + j}{1 + j} \right) \text{V}$$

Therefore,

$$\mathbf{I}_o = \frac{4 + j}{1 + j} = \left( \frac{5}{2} - \frac{3}{2}j \right) \text{A}$$

- 2. Loop Analysis** The network in Fig. 8.17b is used to perform a loop analysis. Note that one loop current is selected that passes through the independent current source. The three loop equations are

$$\mathbf{I}_1 = -2\angle 0^\circ$$

$$1(\mathbf{I}_1 + \mathbf{I}_2) + j1(\mathbf{I}_1 + \mathbf{I}_2) - 6\angle 0^\circ + 1(\mathbf{I}_2 + \mathbf{I}_3) - j1(\mathbf{I}_2 + \mathbf{I}_3) = 0$$

$$1\mathbf{I}_3 + 1(\mathbf{I}_2 + \mathbf{I}_3) - j1(\mathbf{I}_2 + \mathbf{I}_3) = 0$$

Combining the first two equations yields

$$\mathbf{I}_2(2) + \mathbf{I}_3(1 - j) = 8 + 2j$$

The third loop equation can be simplified to the form

$$\mathbf{I}_2(1 - j) + \mathbf{I}_3(2 - j) = 0$$

Solving this last equation for  $\mathbf{I}_2$  and substituting the value into the previous equation yields

$$\mathbf{I}_3 \left[ \frac{-4 + 2j}{1 - j} + 1 - j \right] = 8 + 2j$$

or

$$\mathbf{I}_3 = \frac{-10 + 6j}{4}$$

### [hint]

Just as in a dc analysis, the loop equations assume that a decrease in potential level is + and an increase is -.

and finally

$$\mathbf{I}_o = -\mathbf{I}_3 = \left( \frac{5}{2} - \frac{3}{2}j \right) \text{ A}$$

### [hint]

In applying superposition in this case, each source is applied independently, and the results are added to obtain the solution.

3. **Superposition** In using superposition, we apply one independent source at a time. The network in which the current source acts alone is shown in Fig. 8.18a. By combining the two parallel impedances on each end of the network, we obtain the circuit in Fig. 8.18b, where

$$\mathbf{Z}' = \frac{(1+j)(1-j)}{(1+j) + (1-j)} = 1 \Omega$$

Therefore, using current division,

$$\mathbf{I}'_o = 1 \angle 0^\circ \text{ A}$$

The circuit in which the voltage source acts alone is shown in Fig. 8.18c. The voltage  $\mathbf{V}'_1$  obtained using voltage division is

$$\begin{aligned} \mathbf{V}'_1 &= \frac{(6 \angle 0^\circ) \left[ \frac{1(1-j)}{1+1-j} \right]}{1+j + \left[ \frac{1(1-j)}{1+1-j} \right]} \\ &= \frac{6(1-j)}{4} \text{ V} \end{aligned}$$

and hence,

$$\mathbf{I}''_o = \frac{6}{4}(1-j) \text{ A}$$

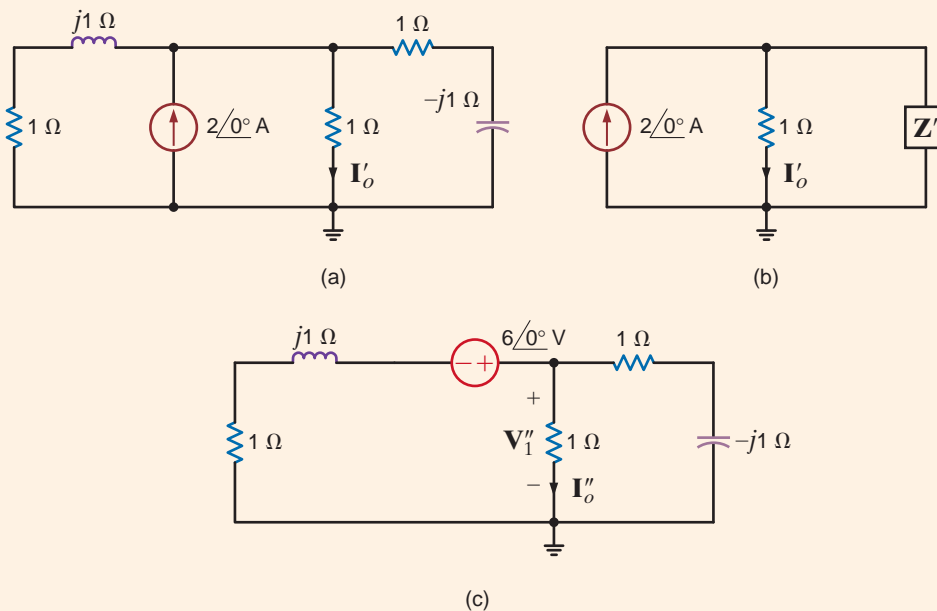
Then

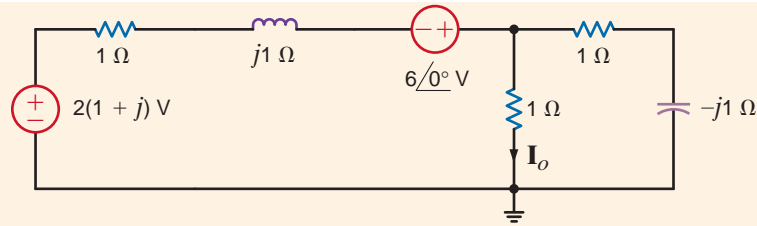
$$\mathbf{I}_o = \mathbf{I}'_o + \mathbf{I}''_o = 1 + \frac{6}{4}(1-j) = \left( \frac{5}{2} - \frac{3}{2}j \right) \text{ A}$$

4. **Source Exchange** As a first step in the source exchange approach, we exchange the current source and parallel impedance for a voltage source in series with the impedance, as shown in Fig. 8.19a.

**Figure 8.18**

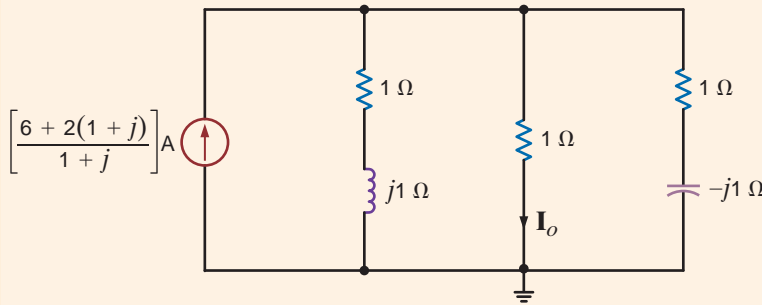
Circuits used in Example 8.15 for a superposition analysis.



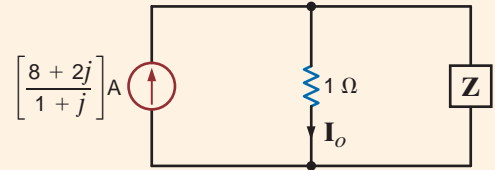


(a)

**Figure 8.19**  
Circuits used in  
Example 8.15  
for a source  
exchange  
analysis.



(b)



(c)

Adding the two voltage sources and transforming them and the series impedance into a current source in parallel with that impedance are shown in Fig. 8.19b.

Combining the two impedances that are in parallel with the 1-Ω resistor produces the network in Fig. 8.19c, where

$$\mathbf{Z} = \frac{(1+j)(1-j)}{1+j+1-j} = 1\ \Omega$$

Therefore, using current division,

$$\begin{aligned} \mathbf{I}_o &= \left( \frac{8+2j}{1+j} \right) \left( \frac{1}{2} \right) = \frac{4+j}{1+j} \\ &= \left( \frac{5}{2} - \frac{3}{2}j \right) \text{ A} \end{aligned}$$

- 5. Thévenin Analysis** In applying Thévenin's theorem to the circuit in Fig. 8.17a, we first find the open-circuit voltage,  $\mathbf{V}_{oc}$ , as shown in Fig. 8.20a. To simplify the analysis, we perform a source exchange on the left end of the network, which results in the circuit in Fig. 8.20b. Now using voltage division,

$$\mathbf{V}_{oc} = [6 + 2(1+j)] \left[ \frac{1-j}{1-j+1+j} \right]$$

or

$$\mathbf{V}_{oc} = (5 - 3j) \text{ V}$$

The Thévenin equivalent impedance,  $\mathbf{Z}_{Th}$ , obtained at the open-circuit terminals when the current source is replaced with an open circuit and the voltage source is replaced with a short circuit is shown in Fig. 8.20c and calculated to be

$$\mathbf{Z}_{Th} = \frac{(1+j)(1-j)}{1+j+1-j} = 1\ \Omega$$

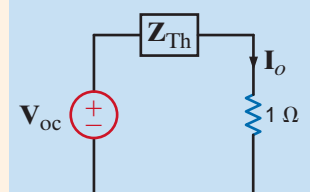
## [hint]

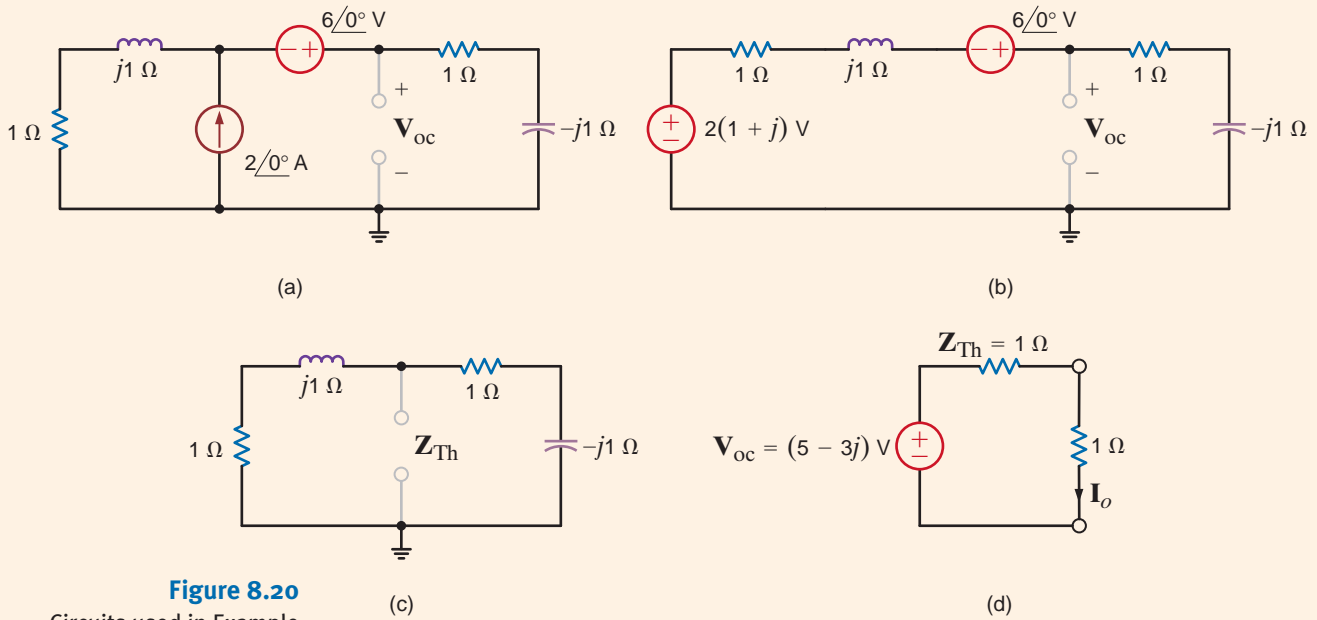
In source exchange, a voltage source in series with an impedance can be exchanged for a current source in parallel with the impedance and vice versa. Repeated application systematically reduces the number of circuit elements.

## [hint]

In this Thévenin analysis,

1. Remove the 1-Ω load and find the voltage across the open terminals,  $\mathbf{V}_{oc}$ .
2. Determine the impedance  $\mathbf{Z}_{Th}$  at the open terminals with all sources made zero.
3. Construct the following circuit and determine  $\mathbf{I}_o$ .





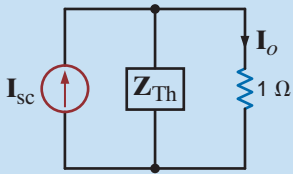
**Figure 8.20**

Circuits used in Example 8.15 for a Thévenin analysis.

[hint]

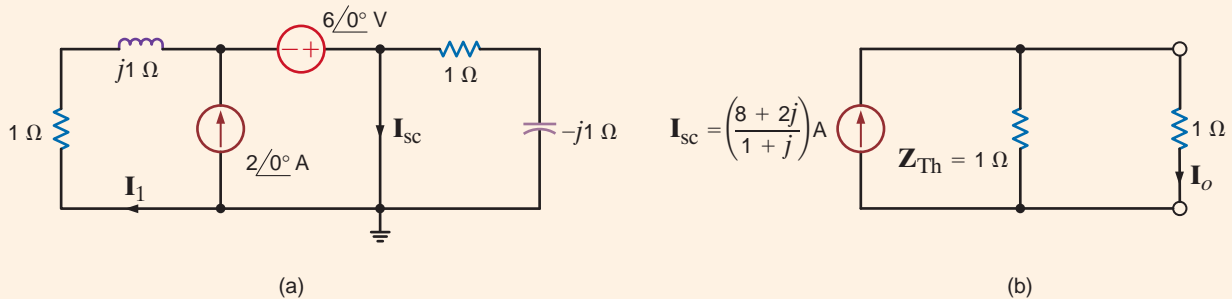
In this Norton analysis,

1. Remove the 1-Ω load and find the current  $I_{sc}$  through the short-circuited terminals.
2. Determine the impedance  $Z_{Th}$  at the open load terminals with all sources made zero.
3. Construct the following circuit and determine  $I_o$ .



**Figure 8.21**

Circuits used in Example 8.15 for a Norton analysis.



Connecting the Thévenin equivalent circuit to the 1-Ω resistor containing  $I_o$  in the original network yields the circuit in Fig. 8.20d. The current  $I_o$  is then

$$I_o = \left( \frac{5}{2} - \frac{3}{2}j \right) \text{ A}$$

6. **Norton Analysis** Finally, in applying Norton's theorem to the circuit in Fig. 8.17a, we calculate the short-circuit current,  $I_{sc}$ , using the network in Fig. 8.21a. Note that because of the short circuit, the voltage source is directly across the impedance in the left-most branch. Therefore,

$$I_1 = \frac{6\angle 0^\circ}{1 + j}$$

Then, using KCL,

$$\begin{aligned} I_{sc} &= I_1 + 2\angle 0^\circ = 2 + \frac{6}{1 + j} \\ &= \left( \frac{8 + 2j}{1 + j} \right) \text{ A} \end{aligned}$$



The Thévenin equivalent impedance,  $\mathbf{Z}_{Th}$ , is known to be  $1\ \Omega$  and, therefore, connecting the Norton equivalent to the  $1\text{-}\Omega$  resistor containing  $\mathbf{I}_o$  yields the network in Fig. 8.21b. Using current division, we find that

$$\begin{aligned}\mathbf{I}_o &= \frac{1}{2} \left( \frac{8 + 2j}{1 + j} \right) \\ &= \left( \frac{5}{2} - \frac{3}{2}j \right) \text{ A}\end{aligned}$$

Let us now consider an example containing a dependent source

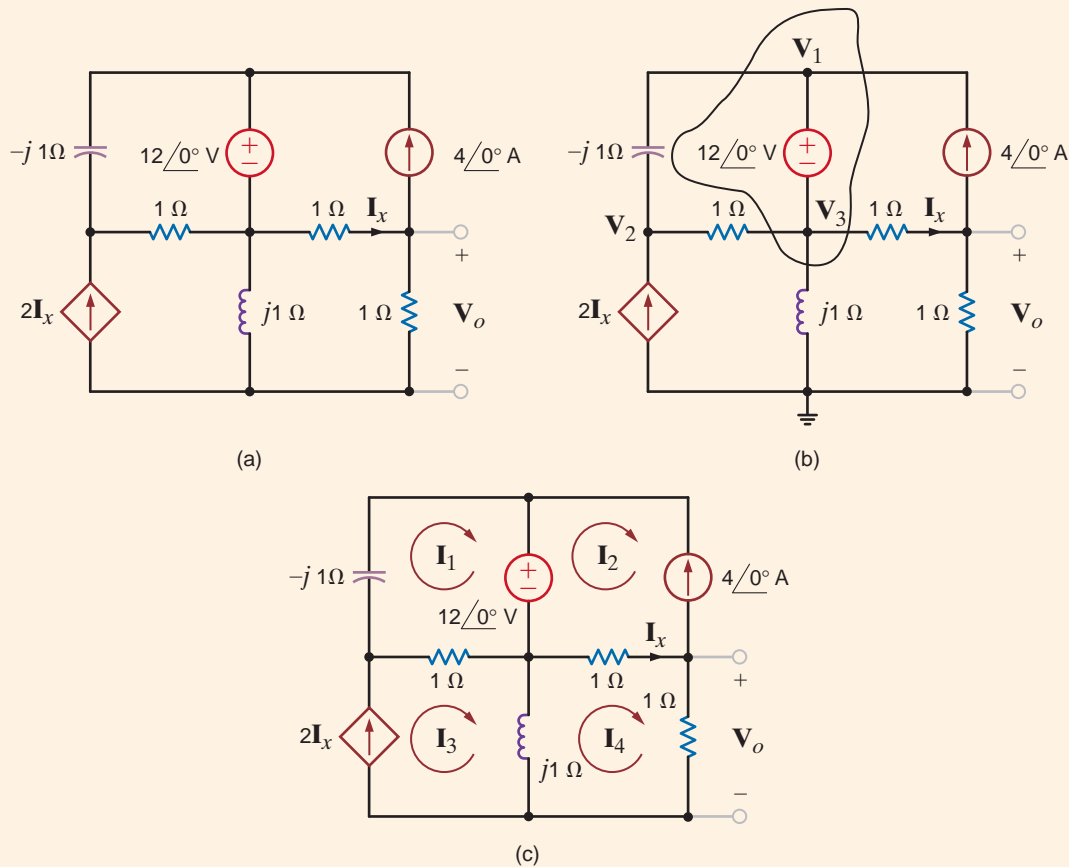
Let us determine the voltage  $\mathbf{V}_o$  in the circuit in Fig. 8.22a. In this example we will use node equations, loop equations, Thévenin's theorem, and Norton's theorem. We will omit the techniques of superposition and source transformation. Why?

## EXAMPLE 8.16

**1. Nodal Analysis** To perform a nodal analysis, we label the node voltages and identify the supernode as shown in Fig. 8.22b. The constraint equation for the supernode is

**SOLUTION**

$$\mathbf{V}_3 + 12\angle 0^\circ = \mathbf{V}_1$$



**Figure 8.22** Circuits used in Example 8.16 for nodal and loop analysis.

**[hint]**

How does the presence of a dependent source affect superposition and source exchange?

and the KCL equations for the nodes of the network are

$$\begin{aligned}\frac{\mathbf{V}_1 - \mathbf{V}_2}{-j1} + \frac{\mathbf{V}_3 - \mathbf{V}_2}{1} - 4\angle 0^\circ + \frac{\mathbf{V}_3 - \mathbf{V}_o}{1} + \frac{\mathbf{V}_3}{j1} &= 0 \\ \frac{\mathbf{V}_2 - \mathbf{V}_1}{-j1} + \frac{\mathbf{V}_2 - \mathbf{V}_3}{1} - 2\left(\frac{\mathbf{V}_3 - \mathbf{V}_o}{1}\right) &= 0 \\ 4\angle 0^\circ + \frac{\mathbf{V}_o - \mathbf{V}_3}{1} + \frac{\mathbf{V}_o}{1} &= 0\end{aligned}$$

At this point we can solve the foregoing equations using a matrix analysis or, for example, substitute the first and last equations into the remaining two equations, which yields

$$\begin{aligned}3\mathbf{V}_o - (1 + j)\mathbf{V}_2 &= -(4 + j12) \\ -(4 + j2)\mathbf{V}_o + (1 + j)\mathbf{V}_2 &= 12 + j16\end{aligned}$$

Solving these equations for  $\mathbf{V}_o$  yields

$$\begin{aligned}\mathbf{V}_o &= \frac{-(8 + j4)}{1 + j2} \\ &= +4\angle 143.13^\circ \text{ V}\end{aligned}$$

- 2. Loop Analysis** The mesh currents for the network are defined in Fig. 8.22c. The constraint equations for the circuit are

$$\begin{aligned}\mathbf{I}_2 &= -4\angle 0^\circ \\ \mathbf{I}_x &= \mathbf{I}_4 - \mathbf{I}_2 = \mathbf{I}_4 + 4\angle 0^\circ \\ \mathbf{I}_3 &= 2\mathbf{I}_x = 2\mathbf{I}_4 + 8\angle 0^\circ\end{aligned}$$

The KVL equations for mesh 1 and mesh 4 are

$$\begin{aligned}-j1\mathbf{I}_1 + 1(\mathbf{I}_1 - \mathbf{I}_3) &= -12\angle 0^\circ \\ j1(\mathbf{I}_4 - \mathbf{I}_3) + 1(\mathbf{I}_4 - \mathbf{I}_2) + 1\mathbf{I}_4 &= 0\end{aligned}$$

Note that if the constraint equations are substituted into the second KVL equation, the only unknown in the equation is  $\mathbf{I}_4$ . This substitution yields

$$\mathbf{I}_4 = +4\angle 143.13^\circ \text{ A}$$

and hence,

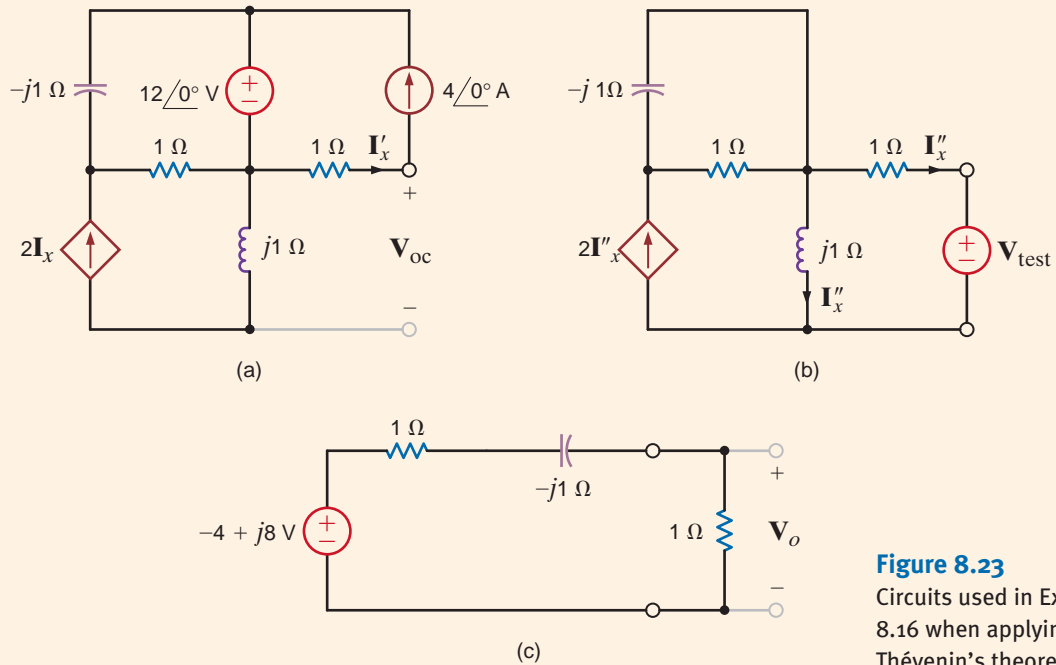
$$\mathbf{V}_o = +4\angle 143.13^\circ \text{ V}$$

- 3. Thévenin's Theorem** In applying Thévenin's theorem, we will find the open-circuit voltage and then determine the Thévenin equivalent impedance using a test source at the open-circuit terminals. We could determine the Thévenin equivalent impedance by calculating the short-circuit current; however, we will determine this current when we apply Norton's theorem.

The open-circuit voltage is determined from the network in Fig. 8.23a. Note that  $\mathbf{I}'_x = 4\angle 0^\circ \text{ A}$  and since  $2\mathbf{I}'_x$  flows through the inductor, the open-circuit voltage  $\mathbf{V}_{oc}$  is

$$\begin{aligned}\mathbf{V}_{oc} &= -1(4\angle 0^\circ) + j1(2\mathbf{I}'_x) \\ &= -4 + j8 \text{ V}\end{aligned}$$

To determine the Thévenin equivalent impedance, we turn off the independent sources, apply a test voltage source to the output terminals, and compute the current leaving the test source. As shown in Fig. 8.23b, since  $\mathbf{I}''_x$  flows in the test source, KCL requires



**Figure 8.23**  
Circuits used in Example 8.16 when applying Thévenin's theorem.

that the current in the inductor be  $\mathbf{I}_x''$  also. KVL around the mesh containing the test source indicates that

$$j1\mathbf{I}_x'' - 1\mathbf{I}_x'' - \mathbf{V}_{\text{test}} = 0$$

Therefore,

$$\mathbf{I}_x'' = \frac{-\mathbf{V}_{\text{test}}}{1 - j}$$

Then

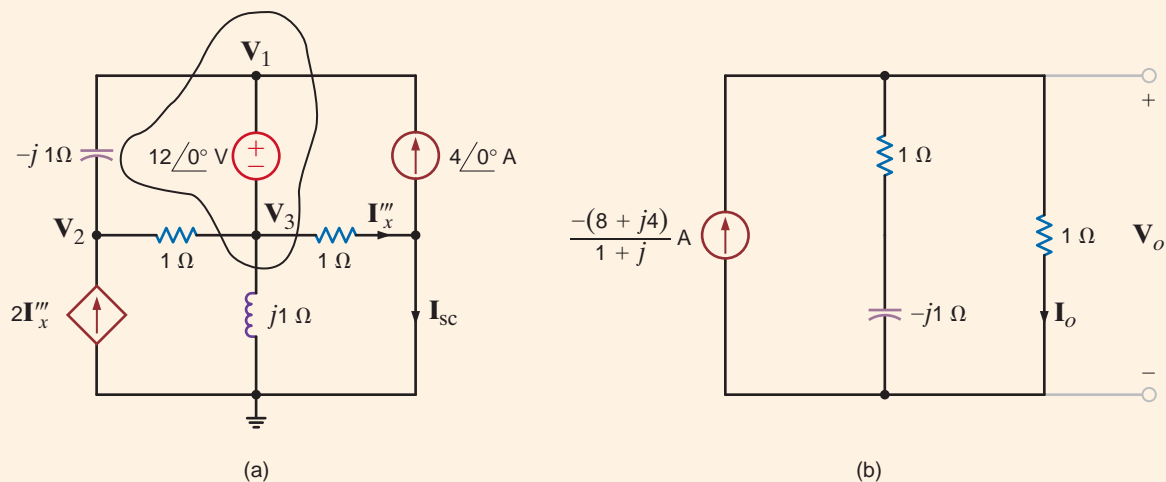
$$\begin{aligned} \mathbf{Z}_{\text{Th}} &= \frac{\mathbf{V}_{\text{test}}}{-\mathbf{I}_x''} \\ &= 1 - j \Omega \end{aligned}$$

If the Thévenin equivalent network is now connected to the load, as shown in Fig. 8.23c, the output voltage  $\mathbf{V}_o$  is found to be

$$\begin{aligned} \mathbf{V}_o &= \frac{-4 + 8j}{2 - j1} (1) \\ &= +4 / 143.13^\circ \text{ V} \end{aligned}$$

- 4. Norton's Theorem** In using Norton's theorem, we will find the short-circuit current from the network in Fig. 8.24a. Once again, using the supernode, the constraint and KCL equations are

$$\begin{aligned} \mathbf{V}_3 + 12 \angle 0^\circ &= \mathbf{V}_1 \\ \frac{\mathbf{V}_2 - \mathbf{V}_1}{-j1} + \frac{\mathbf{V}_2 - \mathbf{V}_3}{1} - 2\mathbf{I}_x''' &= 0 \\ \frac{\mathbf{V}_1 - \mathbf{V}_2}{-j1} + \frac{\mathbf{V}_3 - \mathbf{V}_2}{1} - 4 \angle 0^\circ + \frac{\mathbf{V}_3}{j1} + \mathbf{I}_x''' &= 0 \\ \mathbf{I}_x''' &= \frac{\mathbf{V}_3}{1} \end{aligned}$$



**Figure 8.24** Circuits used in Example 8.16 when applying Norton's theorem.

Substituting the first and last equations into the remaining equations yields

$$\begin{aligned}(1+j)\mathbf{V}_2 - (3+j)\mathbf{I}_x''' &= j12 \\ -(1+j)\mathbf{V}_2 + (2)\mathbf{I}_x''' &= 4 - j12\end{aligned}$$

Solving these equations for  $\mathbf{I}_x'''$  yields

$$\mathbf{I}_x''' = \frac{-4}{1+j} \text{ A}$$

The KCL equation at the right-most node in the network in Fig. 8.24a is

$$\mathbf{I}_x''' = 4\angle 0^\circ + \mathbf{I}_{sc}$$

Solving for  $\mathbf{I}_{sc}$ , we obtain

$$\mathbf{I}_{sc} = \frac{-(8+j4)}{1+j} \text{ A}$$

The Thévenin equivalent impedance was found earlier to be

$$\mathbf{Z}_{Th} = 1 - j\ \Omega$$

Using the Norton equivalent network, the original network is reduced to that shown in Fig. 8.24b. The voltage  $\mathbf{V}_o$  is then

$$\begin{aligned}\mathbf{V}_o &= \frac{-(8+j4)}{1+j} \left[ \frac{(1)(1-j)}{1+1-j} \right] \\ &= -4 \left[ \frac{3-j}{3+j} \right] \\ &= +4\angle +143.13^\circ \text{ V}\end{aligned}$$

## Learning Assessments

**E8.17** Use nodal analysis to find  $V_o$  in the network in Fig. E8.17.

**ANSWER:**  
 $V_o = 2.12 \angle 75^\circ \text{ V}$ .

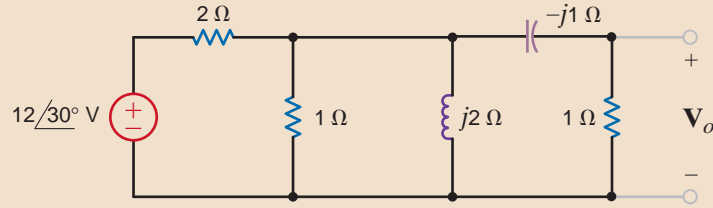


Figure E8.17

**E8.18** Find  $I_1$  in Fig. E8.18 using nodal analysis.

**ANSWER:**  
 $I_1 = 0.7781 \angle -161.9^\circ \text{ A}$ .

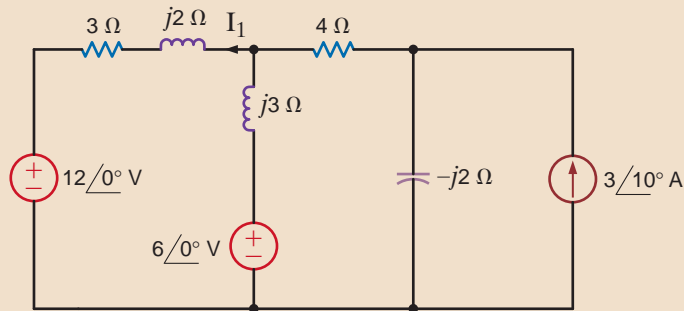


Figure E8.18

**E8.19** Find  $V_x$  in Fig. E8.19 using (a) nodal analysis and (b) mesh analysis.

**ANSWER:**  
 $V_x = 17.4 \angle -21.62^\circ \text{ V}$ .

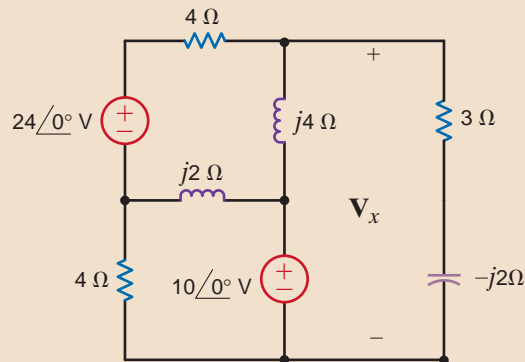


Figure E8.19

**E8.20** Use (a) mesh equations and (b) Thévenin's theorem to find  $V_o$  in the network in the network in Fig. E8.20.

**ANSWER:**  
 $V_o = 10.88 \angle 36^\circ \text{ V}$ .

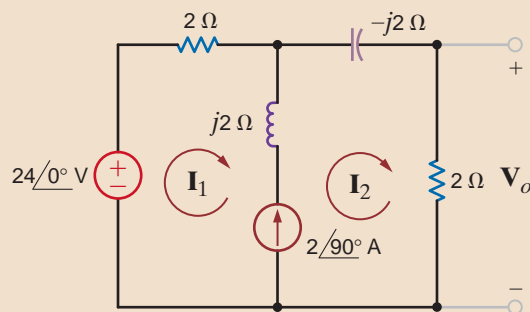


Figure E8.20

**E8.21** Find  $V_o$  in Fig. E8.21 using mesh analysis.

**ANSWER:**

$$V_o = 1.4654 \angle -12.34^\circ \text{ V.}$$

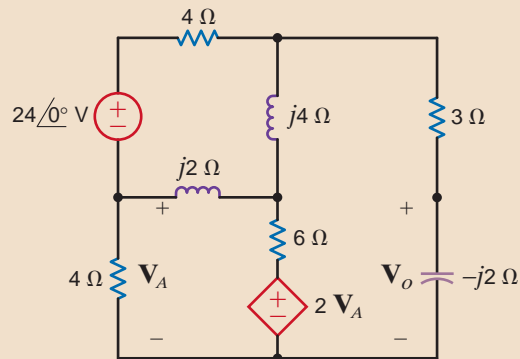


Figure E8.21

**E8.22** Find  $I_1$  in Fig. E8.18 using superposition

**ANSWER:**

$$I_1 = 0.7781 \angle -161.9^\circ \text{ V.}$$

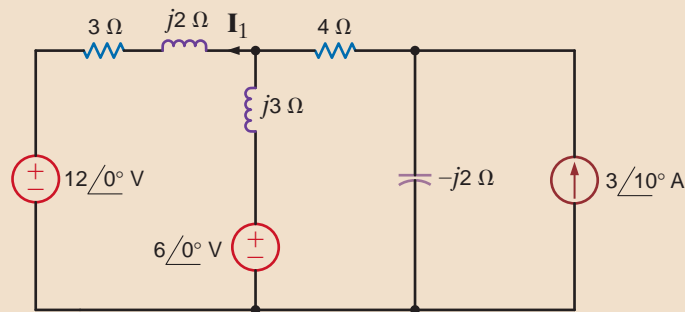


Figure E8.22

**E8.23** Use (a) superposition, (b) source transformation, and (c) Norton's theorem to find  $V_o$  in the network in Fig. E8.23. **ANSWER:**  $V_o = 12 \angle 90^\circ \text{ V.}$

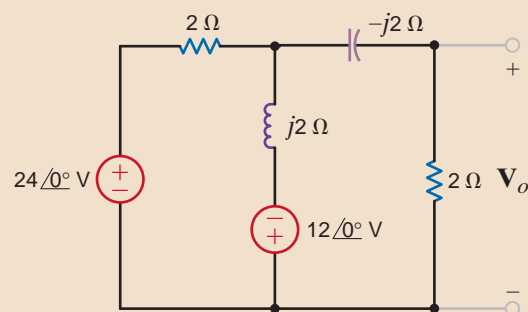


Figure E8.23

**E8.24** Find  $V_o$  in Figure E8.24 using Thevenin's theorem.

**ANSWER:**

$$V_o = 1.4654 \angle -12.34^\circ \text{ V.}$$

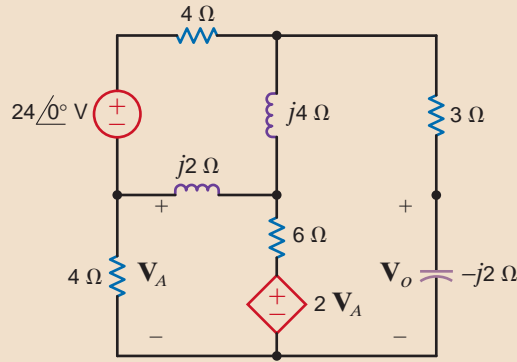
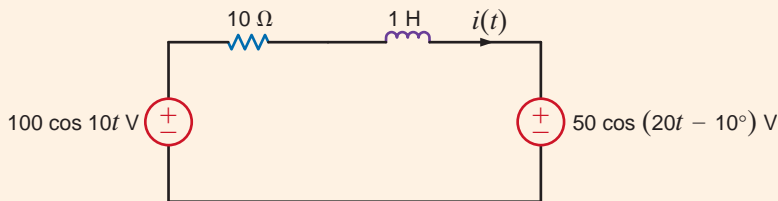


Figure E8.24

Let's solve for the current  $i(t)$  in the circuit in Fig. 8.25. At first glance, this appears to be a simple single-loop circuit. A more detailed observation reveals that the two sources operate at different frequencies. The radian frequency for the source on the left is 10 rad/s, while the source on the right operates at a radian frequency of 20 rad/s. If we draw a frequency-domain circuit, which frequency do we use? How can we solve this problem?

Recall that the principle of superposition tells us that we can analyze the circuit with each source operating alone. The circuit responses to each source acting alone are then added together to give us the response with both sources active. Let's use the principle of superposition to solve this problem. First, calculate the response  $i'(t)$  from the source on the left using the circuit shown in Fig. 8.26a. Now we can draw a frequency-domain circuit for  $\omega = 10$  rad/s.



Then  $\mathbf{I}' = \frac{100 \angle 0^\circ}{10 + j10} = 7.07 \angle -45^\circ$  A. Therefore,  $i'(t) = 7.07 \cos(10t - 45^\circ)$  A.

The response due to the source on the right can be determined using the circuit in Fig. 8.27. Note that  $i''(t)$  is defined in the opposite direction to  $i(t)$  in the original circuit. The frequency-domain circuit for  $\omega = 20$  rad/s is also shown in Fig. 8.27b.

The current  $\mathbf{I}'' = \frac{50 \angle -10^\circ}{10 + j20} = 2.24 \angle -73.43^\circ$  A. Therefore,  $i''(t) = 2.24 \cos(20t - 73.43^\circ)$  A.

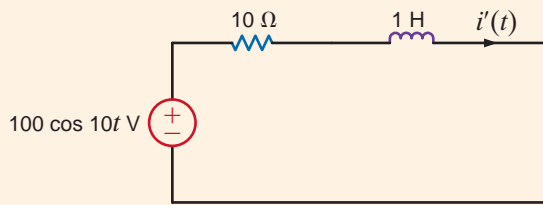
The current  $i(t)$  can now be calculated as  $i'(t) - i''(t) = 7.07 \cos(10t - 45^\circ) - 2.24 \cos(20t - 73.43^\circ)$  A.

## EXAMPLE 8.17

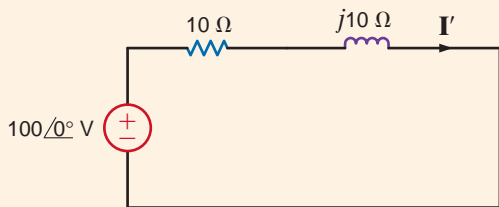
### SOLUTION

Figure 8.25

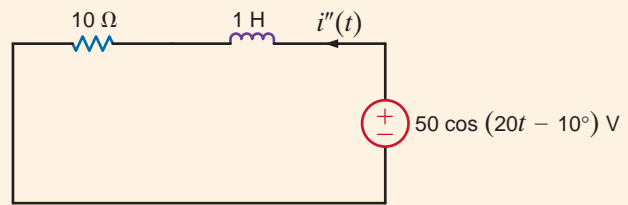
Circuit used in Example 8.17.



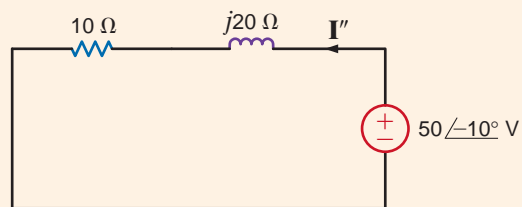
(a)



(b)

**Figure 8.26** Circuits used to illustrate superposition.

(a)



(b)

**Figure 8.27** Circuits used to illustrate superposition.

## 8.9

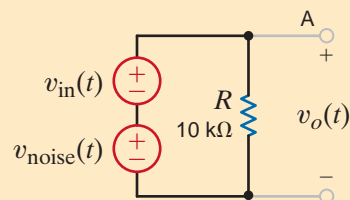
### Application Examples

#### APPLICATION EXAMPLE 8.18

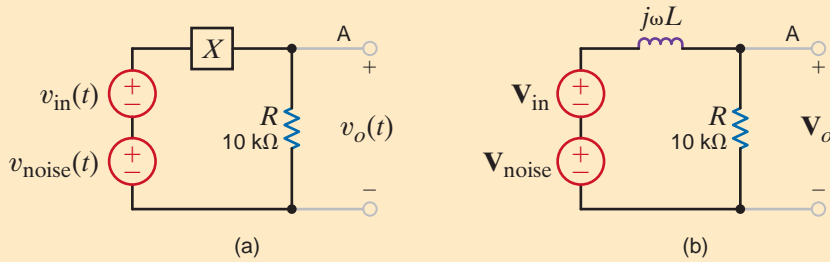
The network in Fig. 8.28 models an unfortunate situation that is all too common. Node A, which is the voltage  $v_{in}(t)$  at the output of a temperature sensor, has “picked-up” a high-frequency voltage,  $v_{noise}(t)$ , caused by a nearby AM radio station. The noise frequency is 700 kHz. In this particular scenario, the sensor voltage, like temperature, tends to vary slowly. Our task then is to modify the circuit to reduce the noise at the output without disturbing the desired signal,  $v_{in}(t)$ .

**Figure 8.28**

Modeling radio frequency noise pickup.





**Figure 8.29**

(a) Model used to reject  $\mathbf{V}_{\text{noise}}$  and (b) the required component.

Consider the network in Fig. 8.29a. If component  $X$  has a high impedance—that is, much greater than  $R$  at 700 kHz and an impedance of zero at dc—we should be able to alleviate the problem. Using voltage division to obtain  $\mathbf{V}_o$  in Fig. 8.29b, we find

$$\mathbf{V}_o = \left[ \frac{R}{R + j\omega L} \right] \mathbf{V}_1$$

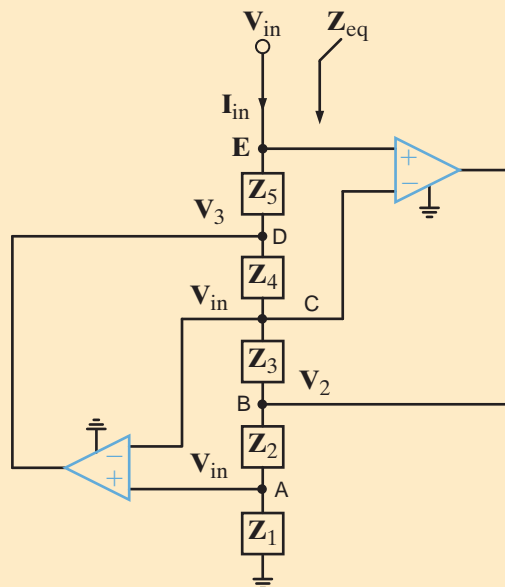
where  $V_1$  and  $\omega$  are either  $\mathbf{V}_{\text{in}}$  and 0, or  $\mathbf{V}_{\text{noise}}$  and  $2\pi(700 \times 10^3)$ . At dc,  $\omega = 0$ , the inductor's impedance is zero, the voltage division ratio is unity,  $\mathbf{V}_1$  is  $\mathbf{V}_{\text{in}}$  and  $\mathbf{V}_o$  equals  $\mathbf{V}_{\text{in}}$ . But at 700 kHz,  $\mathbf{V}_1$  is  $\mathbf{V}_{\text{noise}}$  and the desired voltage division ratio should be very small; that is, the inductor impedance must be much greater than  $R$ , so that  $\mathbf{V}_o$  becomes nearly zero. If we choose to reduce the noise at the output by 90%, we find

$$\left| \frac{R}{R + j\omega L} \right| = \frac{1}{10} \quad \text{at } f = 700 \text{ kHz}$$

Solving this equation yields  $L = 22.6 \text{ mH}$ , which is close to a standard inductor value.

**SOLUTION**

The circuit in Fig. 8.30 is called a General Impedance Converter (GIC). We wish to develop an expression for the impedance  $\mathbf{Z}_{\text{eq}}$  in terms of  $\mathbf{Z}_1, \mathbf{Z}_2, \mathbf{Z}_3, \mathbf{Z}_4$  and  $\mathbf{Z}_5$ , and then using resistors of equal value and a 1- $\mu\text{F}$  capacitor, create a 1-H equivalent inductance.

**APPLICATION EXAMPLE 8.19****Figure 8.30**

The general impedance converter.

**SOLUTION** We simply employ the ideal op-amp assumptions; that is, there is no current entering any op-amp input, and the voltage across any op-amp's input terminals is zero. As a result, the voltage at both nodes A and C are  $V_{in}$ . Next, we apply KCL at each op-amp input. At node A

$$\frac{V_2 - V_{in}}{Z_2} = \frac{V_{in}}{Z_1}$$

which yields

$$V_2 = V_{in} \left[ 1 + \frac{Z_2}{Z_1} \right] \quad 8.47$$

At node C, we find

$$\frac{V_3 - V_{in}}{Z_4} = \frac{V_{in} - V_2}{Z_3}$$

Solving for  $V_3$  yields

$$V_3 = V_{in} \left[ 1 + \frac{Z_4}{Z_3} \right] - V_2 \left[ \frac{Z_4}{Z_3} \right]$$

Substituting our results from Eq. (8.47), we can express  $V_3$  as

$$V_3 = V_{in} \left[ 1 - \frac{Z_2 Z_4}{Z_1 Z_3} \right] \quad 8.48$$

At node E, we write

$$I_{in} = \frac{V_{in} - V_3}{Z_5}$$

Then using our expression for  $V_3$  in Eq. (8.48), we find that

$$I_{in} = V_{in} \left[ \frac{Z_2 Z_4}{Z_1 Z_3 Z_5} \right]$$

Finally, the impedance of interest is

$$Z_{eq} = \frac{V_{in}}{I_{in}} = \left[ \frac{Z_1 Z_3 Z_5}{Z_2 Z_4} \right] \quad 8.49$$

Now, if  $Z_1 = Z_3 = Z_5 = Z_2 = R$  and  $Z_4 = 1/j\omega C$ , then  $Z_{eq}$  becomes

$$Z_{eq} = j\omega CR^2 = j\omega L_{eq}$$

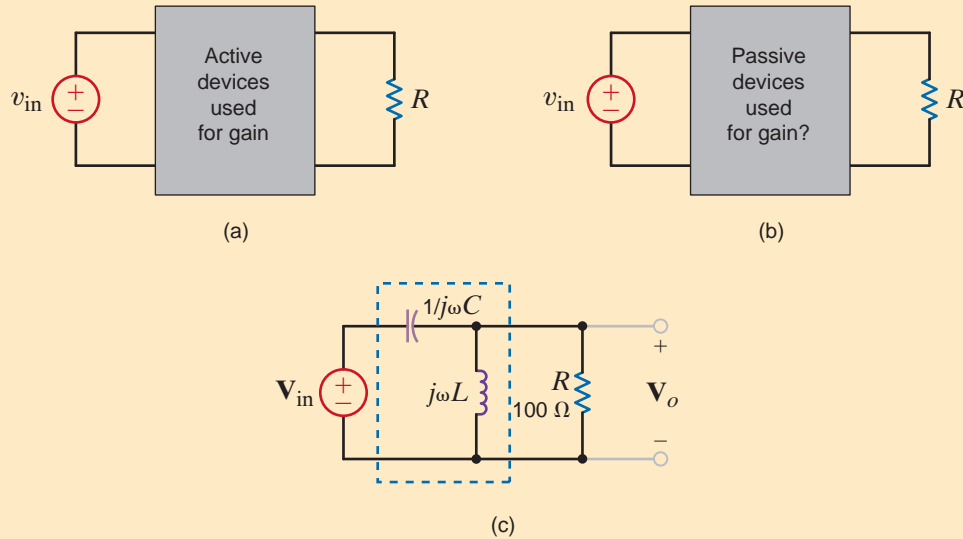
Hence, the value of  $R$  necessary to yield a 1-H inductance is 1000  $\Omega$ . At this point, we must address the question: why go to all this trouble just to make inductance? The answer is size and weight. A 1-H inductor would be very large and heavy. The GIC is easy to construct with integrated circuit components, requires very little space, and weighs only a few grams!

## 8.10

### Design Examples

#### DESIGN EXAMPLE 8.20

In Chapter 4 we found that the op-amp provided us with an easy and effective method of producing controllable voltage gain. From these earlier studies, we have come to expect gain from these “active” devices in a configuration like that shown in Fig. 8.31a. However,

**Figure 8.31**

Circuit configurations used in Example 8.20.

an experienced engineer has suggested that we could achieve some gain from the proper configuration of “passive” elements as illustrated in Fig. 8.31b, and has proposed the circuit in Fig. 8.31c. Therefore, let us use this suggested configuration in an attempt to design for a gain of 10 at 1 kHz if the load is 100  $\Omega$ .

The voltage gain of the network in Fig. 8.31c can be expressed as

$$\frac{\mathbf{V}_o}{\mathbf{V}_{in}} = \left[ \frac{\mathbf{Z}}{\mathbf{Z} + \frac{1}{j\omega C}} \right]$$

where

$$\mathbf{Z} = \frac{(j\omega L)R}{j\omega L + R}$$

Combining these two equations and rearranging the terms yields the expression

$$\frac{\mathbf{V}_o}{\mathbf{V}_{in}} = \left[ \frac{j\omega L}{j \left[ \omega L - \frac{1}{\omega C} \right] + \frac{L}{CR}} \right]$$

We know that in order to achieve amplification, the denominator must be less than the numerator. In addition, the denominator will be reduced if the reactances of the inductor and capacitor are made equal in magnitude, since they are opposite in sign. Thus, by selecting the parameters such that  $\omega^2 LC = 1$ , the reactance of the inductor will cancel that of the capacitor. Under this condition, the gain is reduced to

$$\frac{\mathbf{V}_o}{\mathbf{V}_{in}} = j\omega RC$$

For the given load and frequency values, a capacitor value of 15.9  $\mu\text{F}$  will provide the required gain. The inductor value can then be obtained from the constraint

$$\omega^2 LC = 1$$

which yields  $L = 1.59$  mH. It should be noted that if the frequency changes, the impedance of both the inductor and capacitor will also change, thus altering the gain. Finally, we will find in a later chapter that the equation  $\omega^2 LC = 1$  is an extremely important expression and one that can have a dramatic effect on circuits.

**SOLUTION**

## DESIGN EXAMPLE 8.21

A sinusoidal signal,  $v_1(t) = 2.5 \cos(\omega t)$  when added to a dc level of  $V_2 = 2.5$  V, provides a 0- to 5-V clock signal used to control a microprocessor. If the oscillation frequency of the signal is to be 1 GHz, let us design the appropriate circuit.

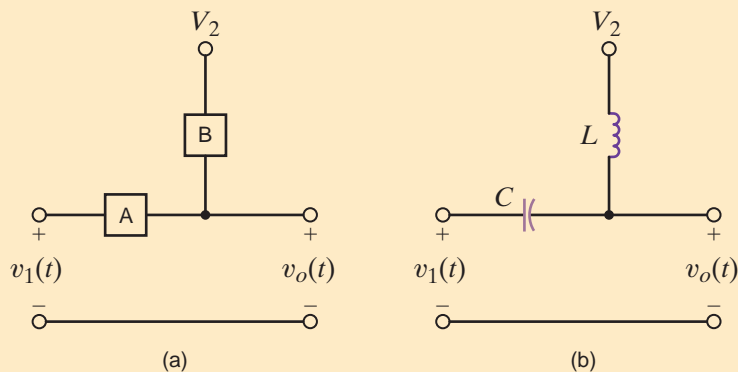
### SOLUTION

As we found in Chapter 4, this application appears to be a natural application for an op-amp summer. However, the frequency of oscillation (1 GHz) is much higher than the maximum frequency most op-amps can handle—typically less than 200 MHz. Since no amplification is required in this case, we should be able to design an op-amp-less summer that, while not precise, should get the job done.

Consider the circuit in Fig. 8.32a where inputs  $v_1(t)$  and  $V_2$  are connected to yield the output  $v_o(t)$ . For this application, component A should block any dc component in  $v_1(t)$  from reaching the output but permit the 1-GHz signal to pass right through. Similarly, component B should pass  $V_2$  while blocking any high-frequency signal. Thus, the impedance of component A should be infinite at dc but very low at 1 GHz. And the impedance of component B should be zero at dc but very high at high frequency. Our earlier studies indicate that component A must be a capacitor and component B an inductor. The resulting circuit, called a *bias T*, is shown in Fig. 8.32b.

Figure 8.32

(a) A simple passive summer circuit; (b) a solution—the bias T.



The values for  $C$  and  $L$  are dependent on both the signal frequency and the precision required in the summing operation, and can be easily seen by using superposition to investigate the contribution of each input to  $v_o(t)$ . In Fig. 8.33a, the dc voltage  $V_2$  has been reduced to zero and an ac circuit has been drawn at a frequency of 1 GHz—that is, the frequency of  $v_1(t)$ . Using voltage division, we can express the output voltage as

$$\mathbf{V}_{o1} = \left[ \frac{j\omega L}{j\omega L - \frac{j}{\omega C}} \right] \mathbf{V}_1 = \left[ \frac{\omega^2 LC}{\omega^2 LC - 1} \right] \mathbf{V}_1 \quad 8.50$$

Note that in order to achieve a perfect summer, the voltage division ratio must be unity. However, such a voltage division ratio requires the impractical condition  $\omega^2 LC$  equal infinity.

Instead, we will approach the problem by choosing values for the inductive and capacitive reactances. As stated earlier, the capacitive reactance should be small; we choose 1  $\Omega$ . And the inductive reactance should be large—let's say 10 k $\Omega$ . The resulting  $L$  and  $C$  values are

$$C = \frac{1}{\omega X_C} = \frac{1}{2\pi \times 10^9} = 159 \text{ pF}$$

and

$$L = \frac{X_L}{\omega} = 1.59 \text{ } \mu\text{H}$$

Now we consider  $V_2$ . In Fig. 8.33b,  $v_1(t)$  has been reduced to zero and an ac circuit has been drawn at dc—the frequency of  $V_2$ . Again, voltage division could be used to express the

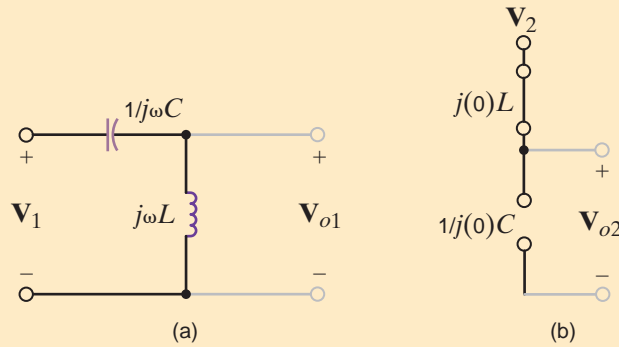


Figure 8.33

Exploring the bias-T by steady-state ac superposition with (a)  $V_2 = 0$  and (b)  $v_1(t) = 0$

output voltage. However, we see that the impedances of the capacitor and inductor are infinity and unity, respectively. As a result, the output is *exactly* equal to  $V_2$ , regardless of the values of  $C$  and  $L$ ! Thus, the output consists of two voltages—one at dc and the other at 1 GHz. The dc component is just  $V_2 = 2.5$  V. From Eq. (8.50), the ac component at 1 GHz is

$$\mathbf{V}_{o1} = \left[ \frac{j10,000}{j10,000 - j1} \right] 2.5 \angle 0^\circ = 2.50025 \angle 0^\circ \text{ V}$$

Back in the time domain, the output voltage is, to three significant digits,

$$v_o(t) = 2.5 + 2.5 \cos[2\pi(10^9)t] \text{ V}$$

## SUMMARY

- **The sinusoidal function definition** The sinusoidal function  $x(t) = X_M \sin(\omega t + \theta)$  has an amplitude of  $X_M$ , a radian frequency of  $\omega$ , a period of  $2\pi/\omega$ , and a phase angle of  $\theta$ .
  - **The phase lead and phase lag definitions** If  $x_1(t) = X_{M1} \sin(\omega t + \theta)$  and  $x_2(t) = X_{M2} \sin(\omega t + \phi)$ ,  $x_1(t)$  leads  $x_2(t)$  by  $\theta - \phi$  radians and  $x_2(t)$  lags  $x_1(t)$  by  $\theta - \phi$  radians.
  - **The phasor definition** The sinusoidal voltage  $v(t) = V_M \cos(\omega t + \theta)$  can be written in exponential form as  $v(t) = \text{Re}[V_M e^{j(\omega t + \theta)}]$  and in phasor form as  $\mathbf{V} = V_M \angle \theta$ .
  - **The phase relationship in  $\theta_v$  and  $\theta_i$  for elements  $R$ ,  $L$ , and  $C$**  If  $\theta_v$  and  $\theta_i$  represent the phase angles of the voltage across and the current through a circuit element, then  $\theta_i = \theta_v$  if the element is a resistor,  $\theta_i$  lags  $\theta_v$  by  $90^\circ$  if the element is an inductor,  $\theta_i$  leads  $\theta_v$  by  $90^\circ$  if the element is a capacitor.
  - **The impedances of  $R$ ,  $L$ , and  $C$**  Impedance,  $\mathbf{Z}$ , is defined as the ratio of the phasor voltage,  $\mathbf{V}$ , to the phasor current,  $\mathbf{I}$ , where  $\mathbf{Z} = R$  for a resistor,  $\mathbf{Z} = j\omega L$  for an inductor, and  $\mathbf{Z} = 1/j\omega C$  for a capacitor.
  - **The phasor diagrams** Phasor diagrams can be used to display the magnitude and phase relationships of various voltages and currents in a network.
- ### Frequency-domain analysis
1. Represent all voltages,  $v_i(t)$ , and all currents,  $i_j(t)$ , as phasors and represent all passive elements by their impedance or admittance.
  2. Solve for the unknown phasors in the frequency ( $\omega$ ) domain.
  3. Transform the now-known phasors back to the time domain.
- **Solution techniques for ac steady-state problems**

    - Ohm's law
    - KCL and KVL
    - Nodal and loop analysis
    - Superposition and source exchange
    - Thévenin's theorem
    - Norton's theorem

## PROBLEMS

**8.1** Given  $i(t) = 5 \cos(400t - 120^\circ)$  A, determine the period of the current and the frequency in Hertz.

**8.2** Determine the relative phase relationship of the two waves

$$v_1(t) = 10 \cos(377t - 30^\circ) \text{ V}$$

$$v_2(t) = 10 \cos(377t + 90^\circ) \text{ V}$$

**8.3** Given the following voltage and current:

$$i(t) = 5 \sin(377t - 20^\circ) \text{ V}$$

$$v(t) = 10 \cos(377t + 30^\circ) \text{ V}$$

Determine the phase relationship between  $i(t)$  and  $v(t)$ .

**8.4** Determine the phase angles by which  $v_1(t)$  leads  $i_1(t)$  and  $v_1(t)$  leads  $i_2(t)$ , where

$$v_1(t) = 4 \sin(377t + 25^\circ) \text{ V}$$

$$i_1(t) = 0.05 \cos(377t - 20^\circ) \text{ A}$$

$$i_2(t) = -0.1 \sin(377t + 45^\circ) \text{ A}$$

**8.5** Calculate the current in the capacitor shown in Fig. P8.5 if the voltage input is

(a)  $v_1(t) = 10 \cos(377t - 30^\circ) \text{ V}$ .

(b)  $v_2(t) = 12 \sin(377t + 60^\circ) \text{ V}$ .

Give the answers in both the time and frequency domains.

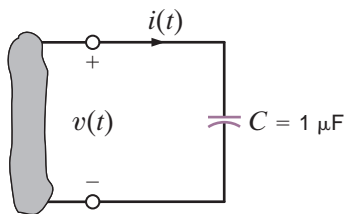


Figure P8.5

**8.6** Find the frequency-domain impedance,  $\mathbf{Z}$ , as shown in Fig. P8.6.

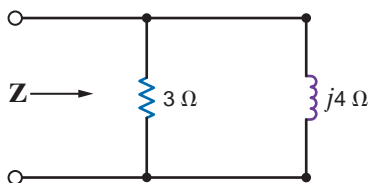


Figure P8.6

**8.7** Find the impedance,  $\mathbf{Z}$ , shown in Fig. P8.7 at a frequency of 60 Hz.

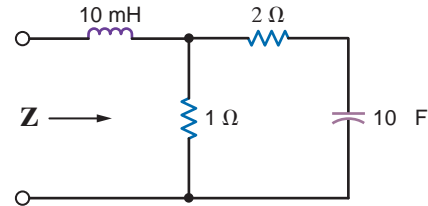


Figure P8.7

**8.8** Find the equivalent admittance for the circuit in Fig. P8.8, if  $\omega = 10$  radians/second.

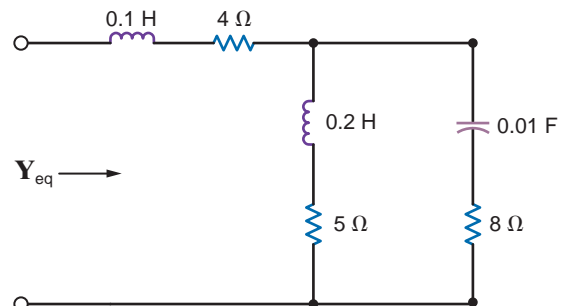


Figure P8.8

**8.9** Find the equivalent impedance for the circuit in Fig. P8.9.

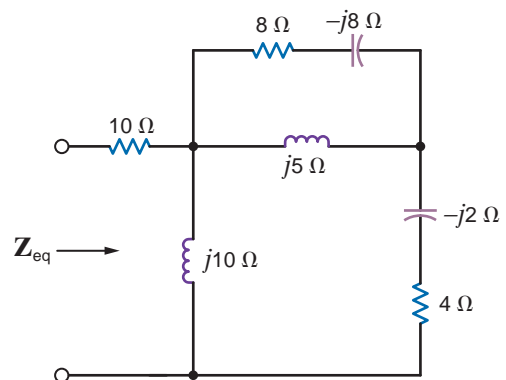


Figure P8.9

8.10 Find the frequency-domain impedance,  $Z$ , shown in Fig. P8.10.

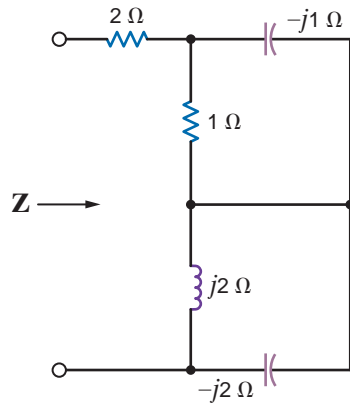


Figure P8.10

8.11 Find  $Z$  in the network in Fig. P8.11.

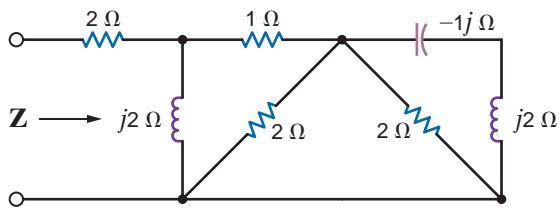


Figure P8.11

8.12 Find the impedance,  $Z$ , shown in Fig. P8.12 at a frequency of 400 Hz.

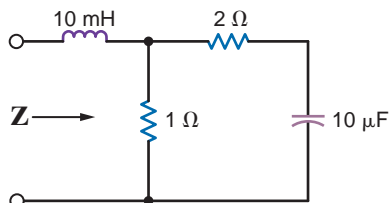


Figure P8.12

8.13 Find the impedance,  $Z$ , shown in Fig. P8.13 at a frequency of 60 Hz.

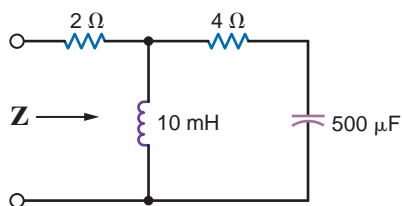


Figure P8.13

8.14 Find the frequency-domain impedance,  $Z$ , shown in Fig. P8.14.

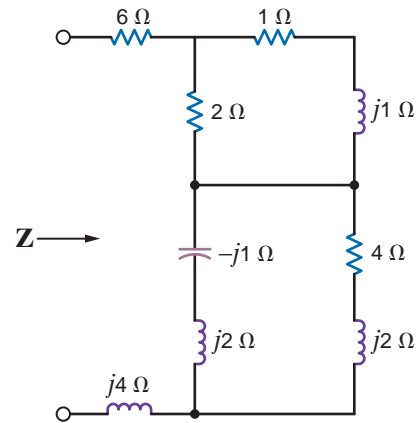


Figure P8.14

8.15 In the circuit shown in Fig. P8.15, determine the value of the inductance such that the current is in phase with the source voltage.

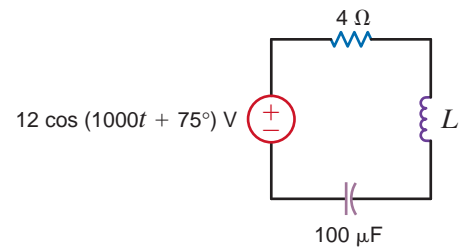


Figure P8.15

8.16 Find the value of  $C$  in the circuit shown in Fig. P8.16 so that  $Z$  is purely resistive at a frequency of 60 Hz.

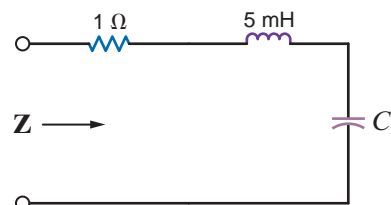


Figure P8.16

8.17 Find the value of the capacitance,  $C$ , shown in the circuit in Fig. P8.17 so that  $i(t)$  will be in phase with the source voltage.

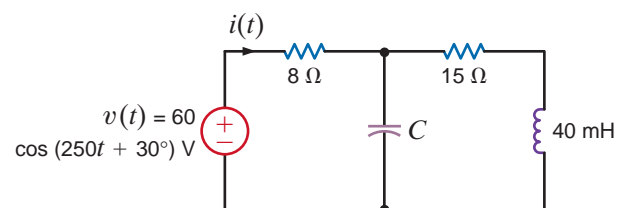


Figure P8.17



- 8.18** The impedance of the network in Fig. P8.18 is found to be purely real at  $f = 400$  Hz. What is the value of  $C$ ?

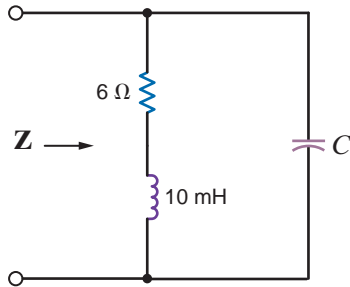


Figure P8.18

- 8.19** Find the frequency at which the circuit shown in Fig. P8.19 is purely resistive.

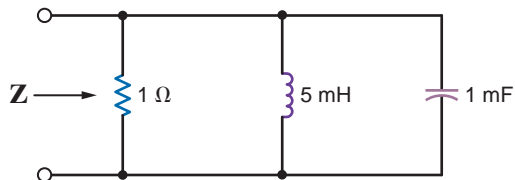


Figure P8.19

- 8.20** At  $\omega = 100$  rad/s, the equivalent admittance for the circuit in Fig. P8.20 is  $0.1 + j0.2$  S. Calculate values for  $R$  and  $C$ .

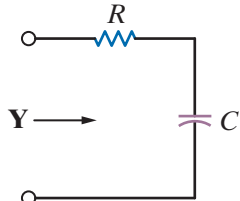


Figure P8.20

- 8.21** The admittance of the box in Fig. P8.21 is  $0.1 + j0.2$  S at 500 rad/s. What is the impedance at 300 rad/s?

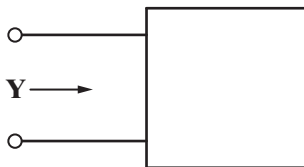


Figure P8.21

- 8.22** The impedance of the box in Fig. P8.22 is  $5 + j4$   $\Omega$  at 1000 rad/s. What is the impedance at 1300 rad/s?

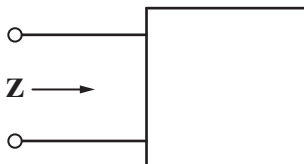


Figure P8.22

- 8.23** In the diagram in Fig. P8.23,  $v(t) = 50 \cos(10t + 10^\circ)$  V and  $i(t) = 25 \cos(10t + 41^\circ)$  A. Is the impedance of the BOX inductive or capacitive? Explain your answer.

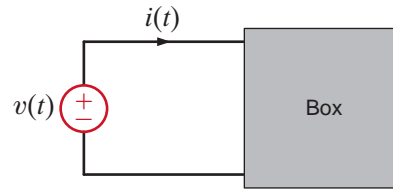


Figure P8.23

- 8.24** Determine the value of  $\omega$  in Fig. 8.24 such that the peak value of  $i(t)$  is 2 A.

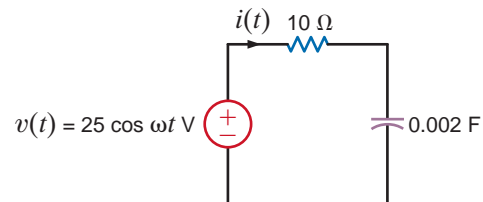


Figure P8.24

- 8.25** In the diagram in Fig. P8.25 when  $v(t) = 5 \cos 500t$  V,  $i(t) = 0.4 \cos(500t - 30^\circ)$  A. Calculate  $i(t)$  if  $v(t) = 5 \cos 1000t$  V.

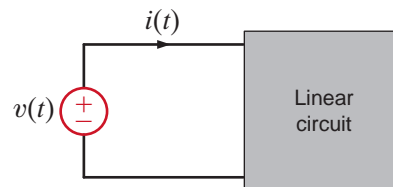


Figure P8.25

- 8.26** Draw the frequency-domain network and calculate  $v_o(t)$  in the circuit shown in Fig. P8.26 if  $i_1(t)$  is  $200 \cos(10^5t + 60^\circ)$  mA,  $i_2(t)$  is  $100 \sin(10^5t + 90^\circ)$  mA, and  $v_s(t) = 10 \sin(10^5t)$  V. Also, use a phasor diagram to determine  $v_C(t)$ .

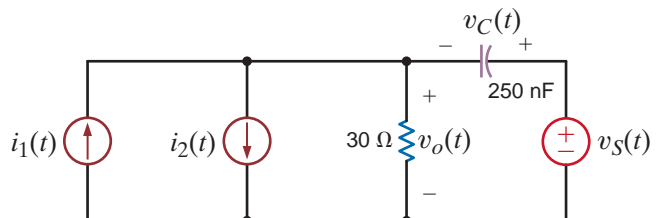


Figure P8.26



8.27 Find  $v_x(t)$  and  $v_R(t)$  in the circuit in Fig. P8.27 if  $v(t) = 50 \cos 10t$  V.

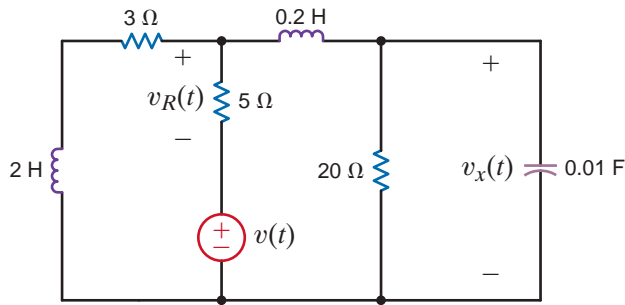


Figure P8.27

8.28 Calculate  $v_c(t)$  in Fig. P8.28.

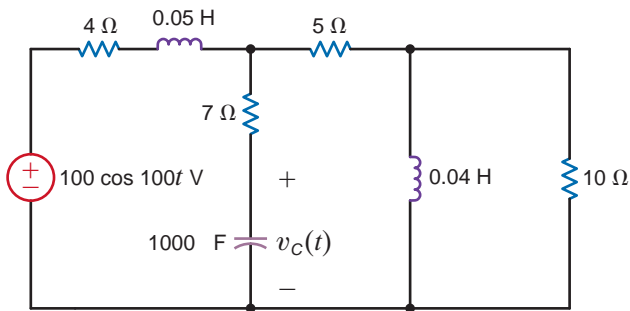


Figure P8.28

8.29 Find  $i_o(t)$  in the circuit in Fig. P8.29 if  $v(t) = 50 \cos 100t$  V.

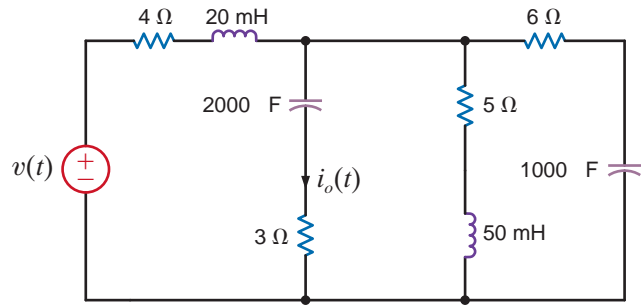


Figure P8.29

8.30 Find  $v_o(t)$  and  $i_o(t)$  in Fig. P8.30.

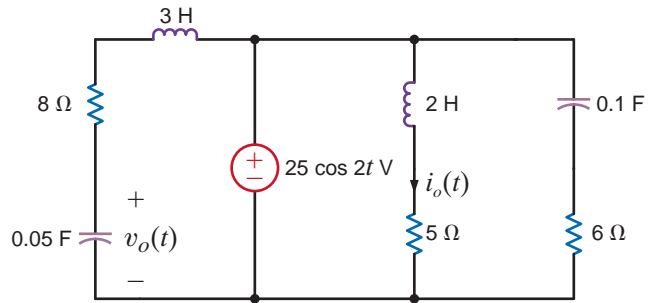


Figure P8.30

8.31 Calculate  $v_1(t)$  if  $i_1(t) = 7 \cos 100t$  A and  $i_2(t) = 3 \cos(100t + 45^\circ)$  in Fig. P8.31.

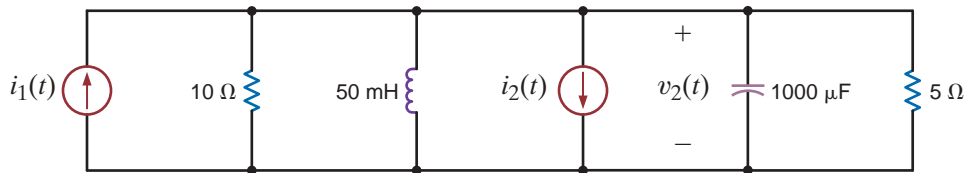


Figure P8.31

8.32 Calculate  $v_o(t)$  in Fig. P8.32.

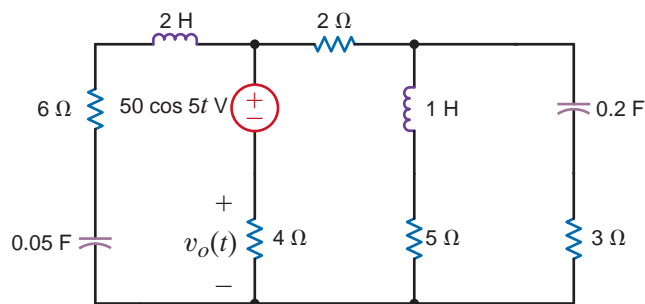


Figure P8.32

**8.33** Calculate  $v_x(t)$  in the circuit in Fig. 8.33 if  $v(t) = 50 \cos(10t - 30^\circ)$  V.

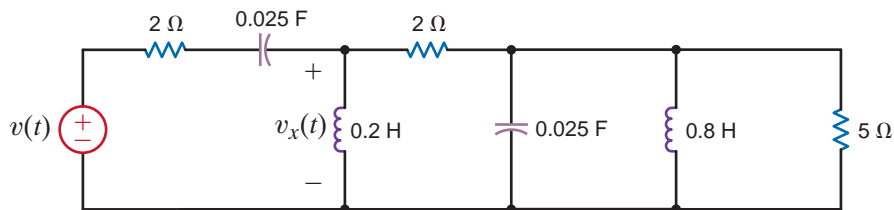


Figure P8.33

**8.34** Calculate  $i_1(t)$ ,  $i_2(t)$ , and  $v_x(t)$  in Fig. P8.34.

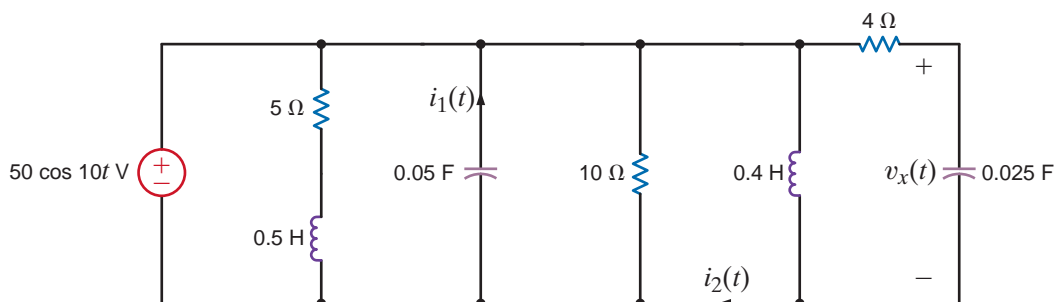


Figure P8.34

**8.35** Calculate  $i_1(t)$  and  $i_2(t)$  in Fig. P8.35.

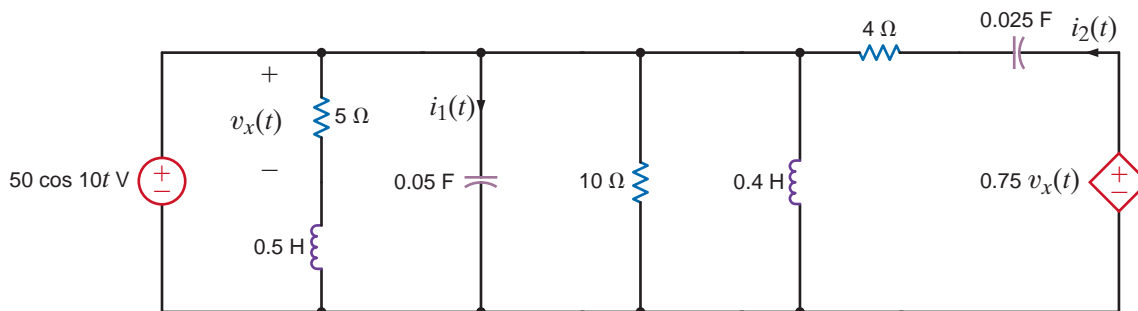


Figure P8.35

**8.36** Find  $v_x(t)$  in the circuit in Fig. P8.36.

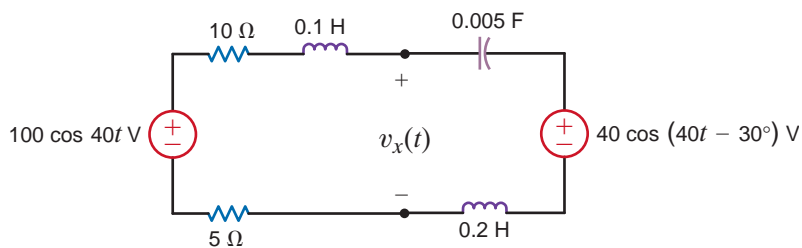


Figure P8.36

**8.37** Find  $v_o(t)$  in the network in Fig. P8.37.

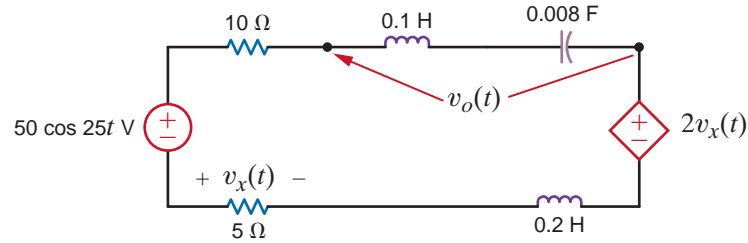


Figure P8.37

**8.38** Find  $v_1(t)$  and  $v_2(t)$  in the circuit in Fig. P8.38.

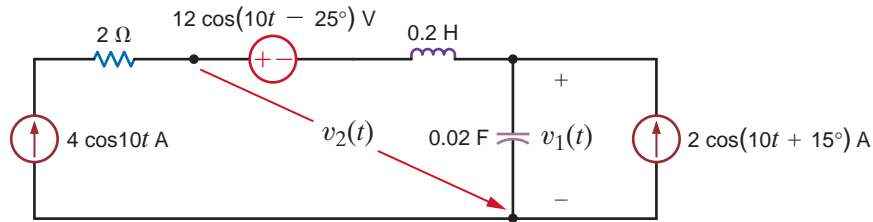


Figure P8.38

**8.39** Find the voltage  $\mathbf{V}$  shown in Fig. P8.39.

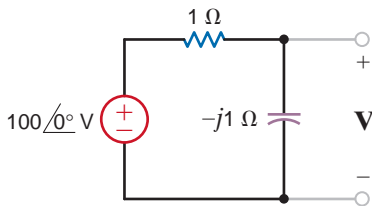


Figure P8.39

**8.42** Find  $\mathbf{V}_o$  in the network in Fig. P8.42.

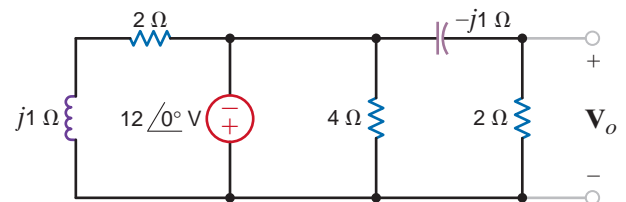


Figure P8.42

**8.40** Find the voltage  $\mathbf{V}_o$  shown in Fig. P8.40.

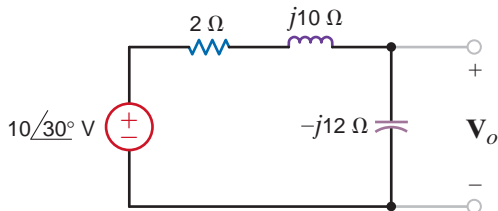


Figure P8.40

**8.43** Find  $\mathbf{V}_o$  in the network in Fig. P8.43.

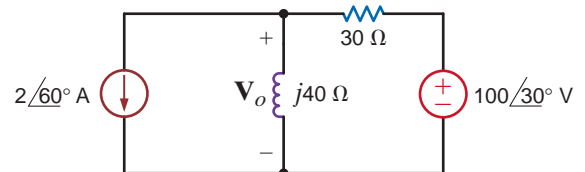


Figure P8.43

**8.41** Find the frequency-domain voltage  $\mathbf{V}_o$  shown in Fig. P8.41.

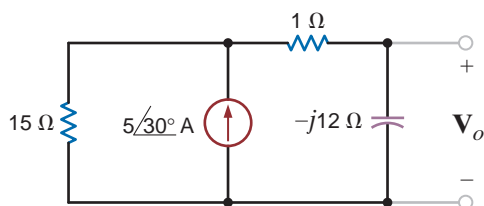


Figure P8.41

**8.44** Given the network in Fig. P8.44, determine the value of  $\mathbf{V}_o$  if  $\mathbf{V}_s = 24 \angle 0^\circ \text{V}$ .

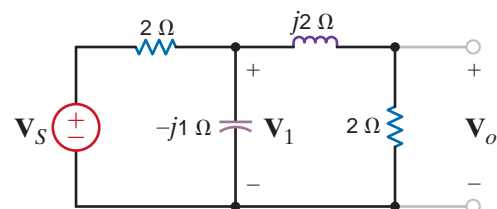


Figure P8.44

8.45 If  $V_1 = 4 \angle 0^\circ \text{ V}$ , find  $I_o$  in Fig. P8.45.

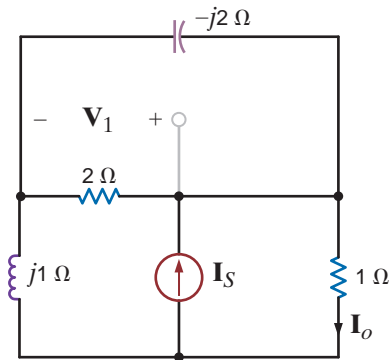


Figure P8.45

8.46 Find  $V_S$  in the network in Fig. P8.46, if  $V_1 = 4 \angle 0^\circ \text{ V}$ .

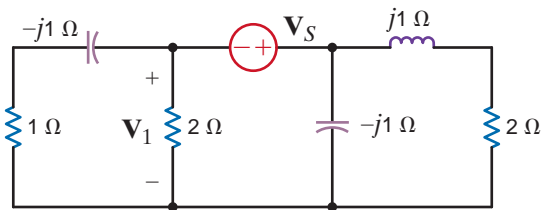


Figure P8.46

8.47 In the network in Fig. P8.47,  $V_o$  is known to be  $4 \angle 45^\circ \text{ V}$ . Find  $Z$ .

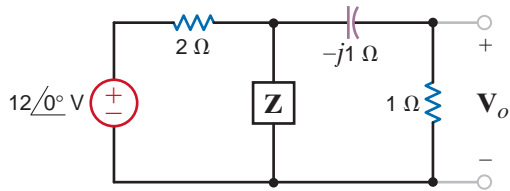


Figure P8.47

8.48 In the network in Fig. P8.48,  $I_o = 4 \angle 0^\circ \text{ A}$ . Find  $I_x$ .

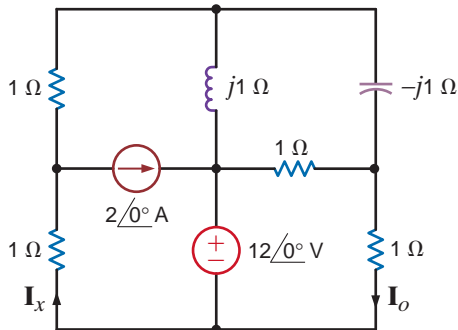


Figure P8.48

8.49 If  $I_o = 4 \angle 0^\circ \text{ A}$  in the circuit in Fig. P8.49, find  $I_x$ .

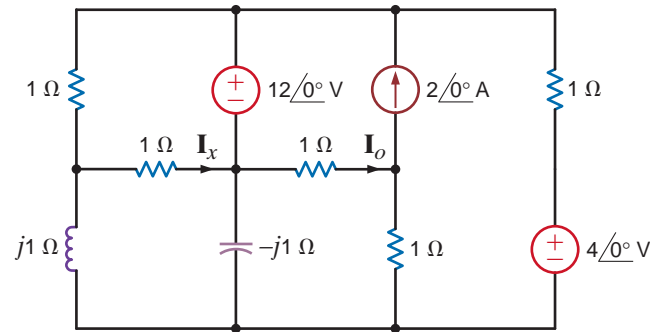


Figure P8.49

8.50 If  $I_o = 4 \angle 0^\circ \text{ A}$  in the network in Fig. P8.50, find  $I_x$ .

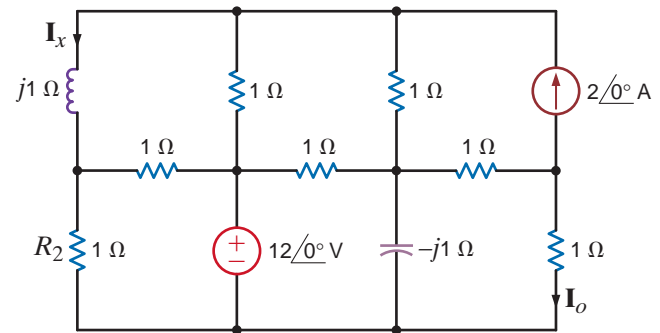


Figure P8.50

8.51 Using nodal analysis, find  $I_o$  in the circuit in Fig. P8.51.

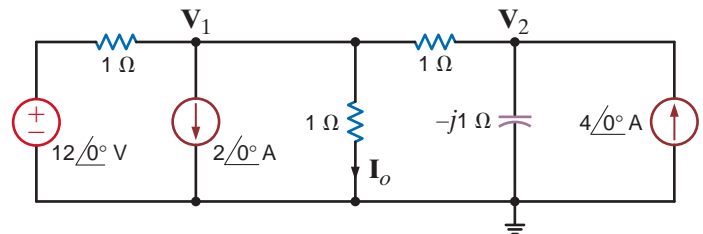


Figure P8.51

8.52 Use nodal analysis to find  $I_o$  in the circuit in Fig. P8.52.

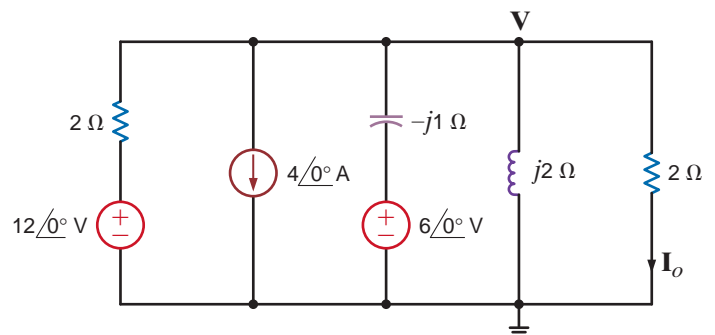


Figure P8.52

8.53 Find  $V_o$  in the network in Fig. P8.53 using nodal analysis.

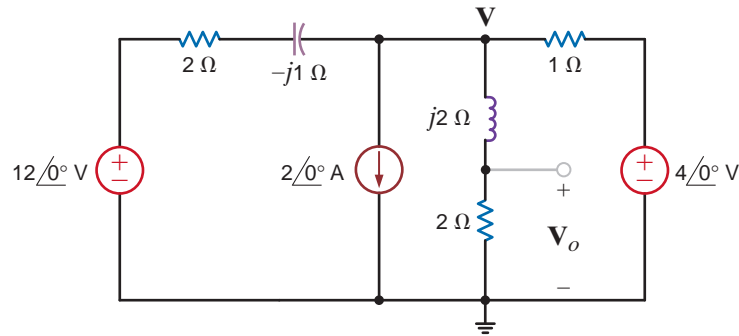


Figure P8.53

8.54 Use the supernode technique to find  $I_o$  in the circuit in Fig. P8.54.

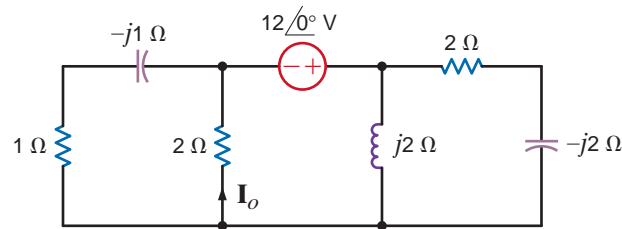


Figure P8.54

8.55 Use nodal analysis to find  $V_o$  in the circuit in Fig. P8.55.

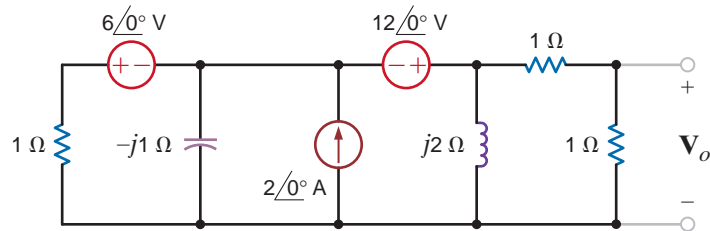


Figure P8.55

8.56 Find  $I_o$  in the circuit in Fig. P8.56 using nodal analysis.

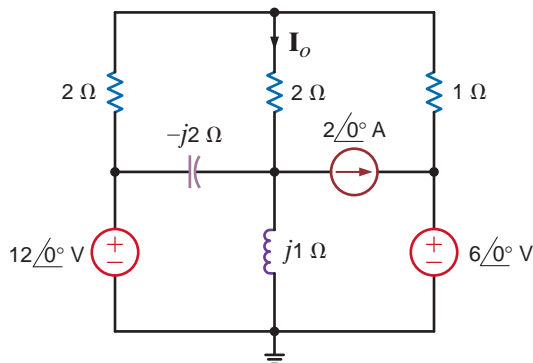


Figure P8.56

8.57 Use nodal analysis to find  $I_o$  in the circuit in Fig. P8.57.

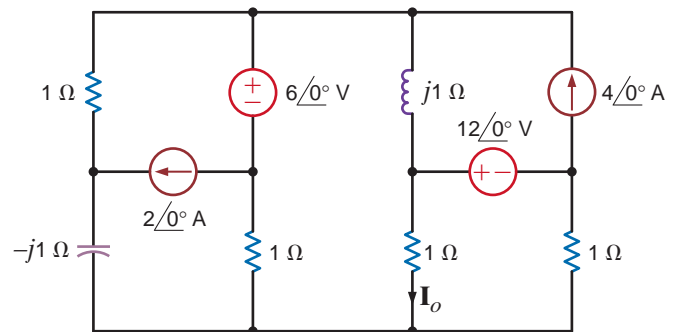


Figure P8.57

**8.58** Use nodal analysis to find  $V_o$  in the circuit in Fig. P8.58.

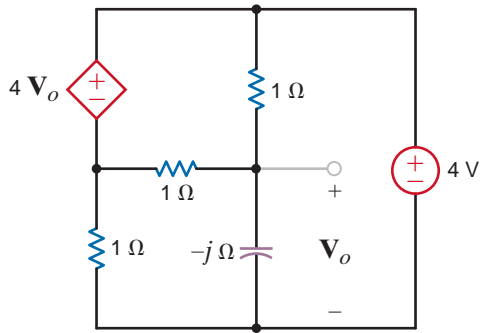


Figure P8.58

**8.62** Use nodal analysis to find  $V_o$  in the network in Fig. 8.62.

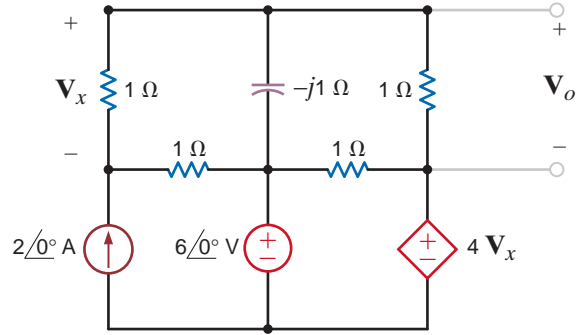


Figure P8.62

**8.59** Use nodal analysis to find  $V_o$  in the network in Fig. P8.59.

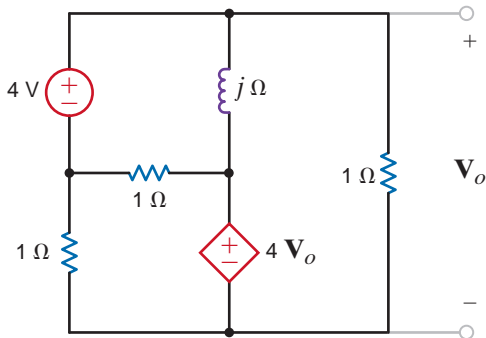


Figure P8.59

**8.63** Use nodal analysis to find  $V_o$  in the circuit in Fig. P8.63.

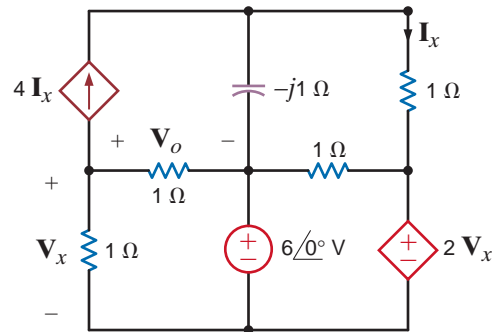


Figure P8.63

**8.60** Use nodal analysis to find  $V_o$  in the circuit in Fig. P8.60.

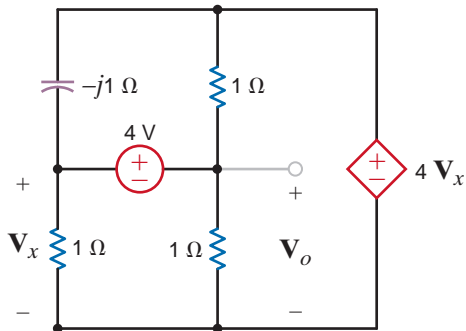


Figure P8.60

**8.64** Use nodal analysis to find  $V_o$  in the circuit in Fig. P8.64.

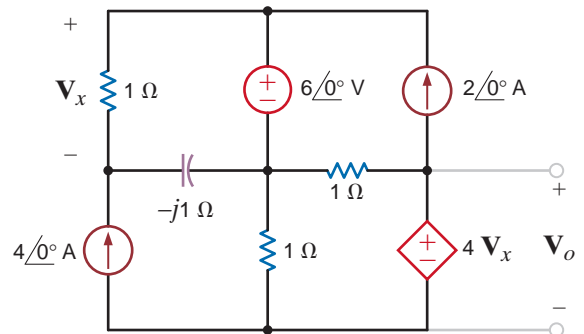


Figure P8.64

**8.61** Use nodal analysis to find  $V_o$  in the circuit in Fig. P8.61.

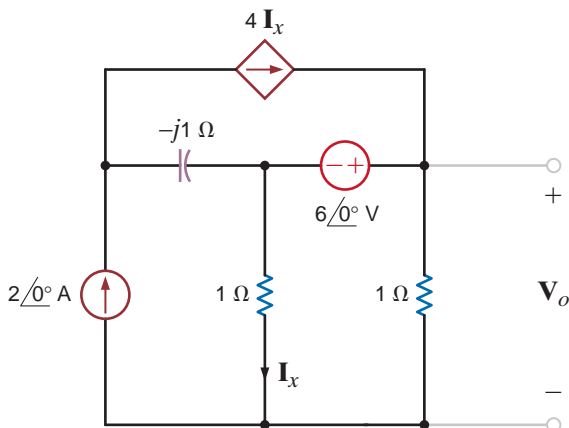


Figure P8.61

**8.65** Use nodal analysis to find  $I_o$  in the circuit in Fig. P8.65.

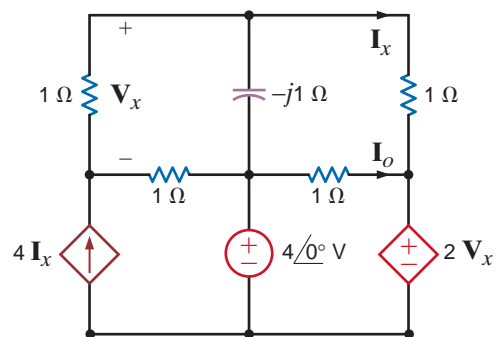


Figure P8.65

8.66 Use nodal analysis to find  $V_x$  in the circuit in Fig. P8.66.

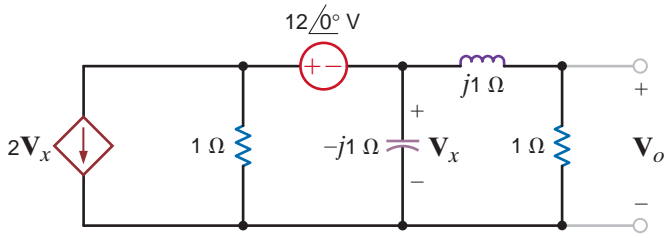


Figure P8.66

8.70 Use loop analysis to find  $V_o$  in the circuit in Fig. P8.70.

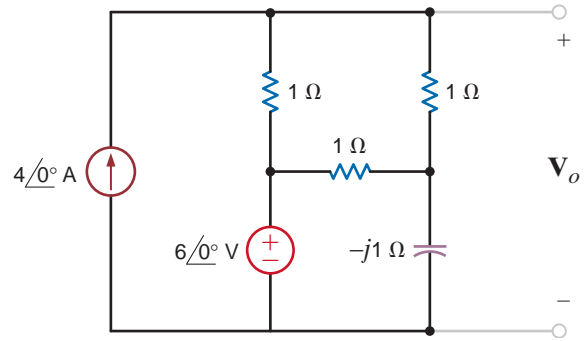


Figure P8.70

8.67 Find the voltage across the inductor in the circuit shown in Fig. P8.67 using nodal analysis.

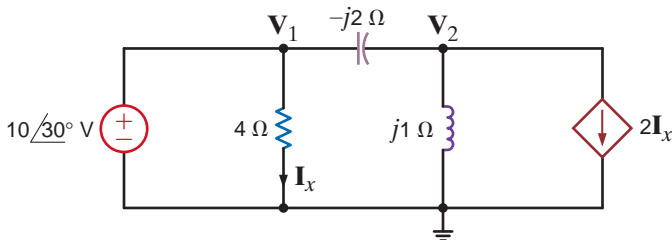


Figure P8.67

8.71 Use loop analysis, to find  $V_o$  in the circuit in Fig. P8.71.

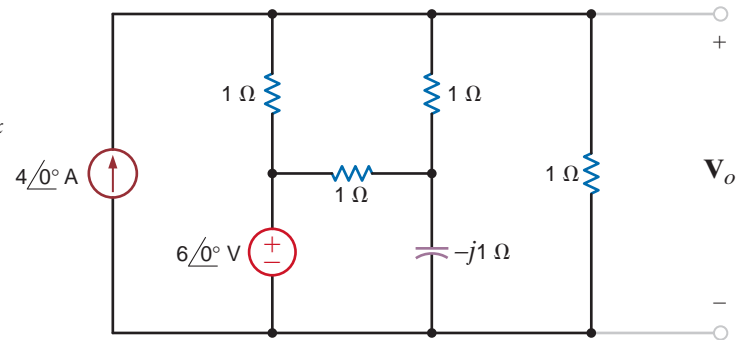


Figure P8.71

8.68 Use mesh analysis to find  $V_o$  in the circuit shown in Fig. P8.68.

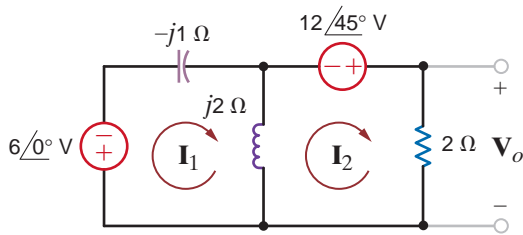


Figure P8.68

8.72 Using loop analysis, find  $I_o$  in the network in Fig. P8.72.

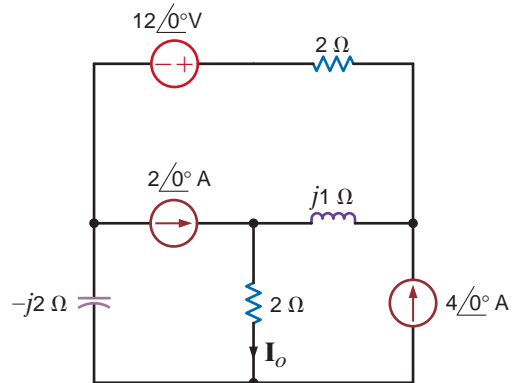


Figure P8.72

8.69 Use mesh analysis to find  $V_o$  in the circuit shown in Fig. P8.69.

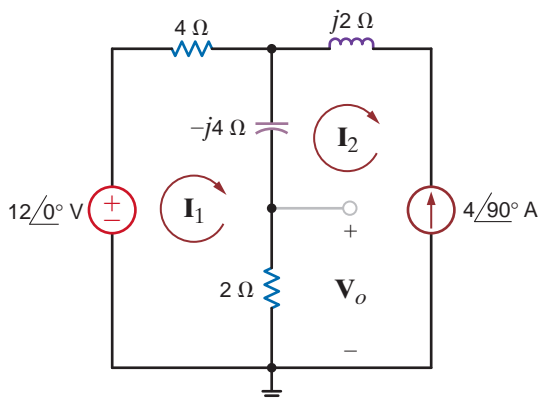


Figure P8.69

8.73 Find  $V_o$  in the circuit in Fig. P8.73 using mesh analysis.

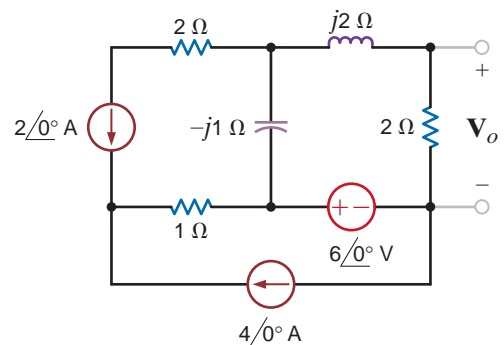


Figure P8.73

8.74 Use mesh analysis to find  $V_o$  in the circuit in Fig. P8.74.

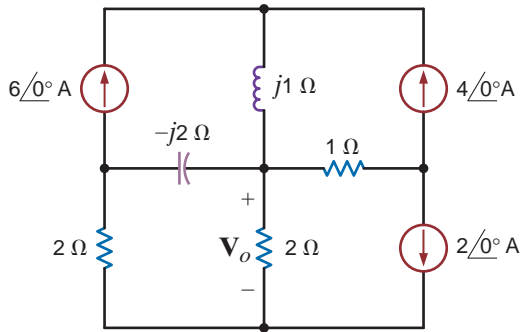


Figure P8.74

8.78 Find  $V_o$  in the network in Fig. P8.78.

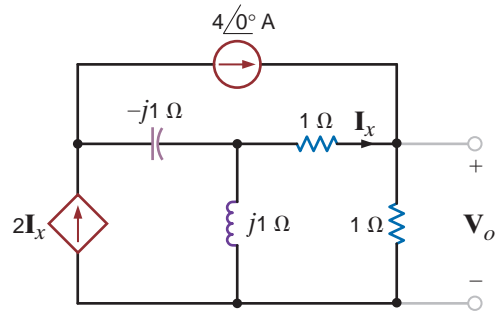


Figure P8.78

8.75 Use loop analysis to find  $I_o$  in the network in Fig. P8.75.

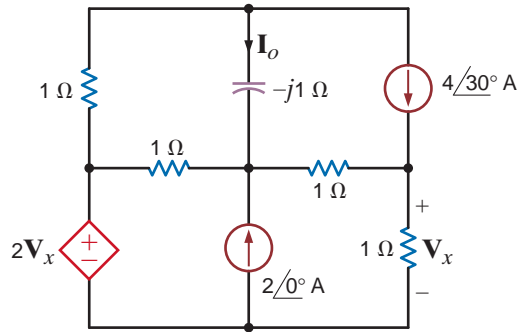


Figure P8.75

8.79 Use loop analysis to find  $V_o$  in the network in Fig. P8.79.

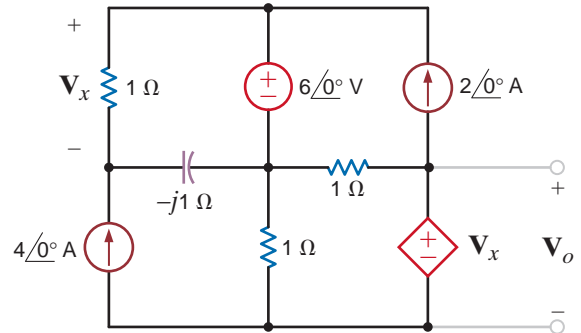


Figure P8.79

8.76 Find  $V_o$  in the network in Fig. P8.76.

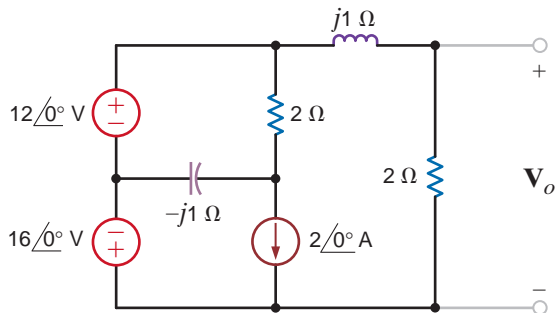


Figure P8.76

8.80 Use loop analysis to find  $V_o$  in the circuit in Fig. P8.80.

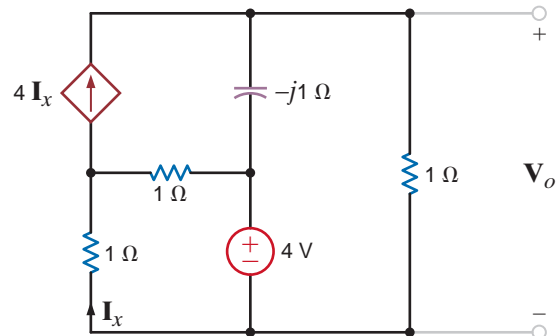


Figure P8.80

8.77 Determine  $V_o$  in the circuit in Fig. P8.77.

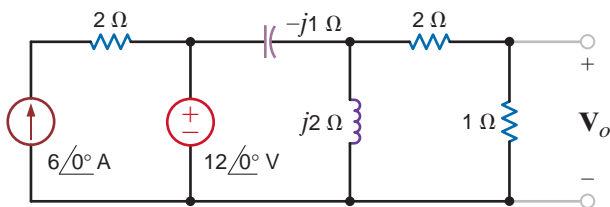


Figure P8.77

8.81 Use loop analysis to find  $V_o$  in the network in Fig. P8.81.

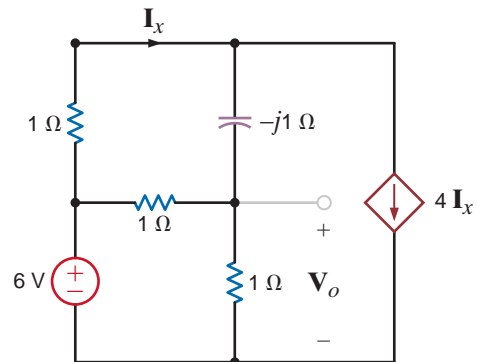
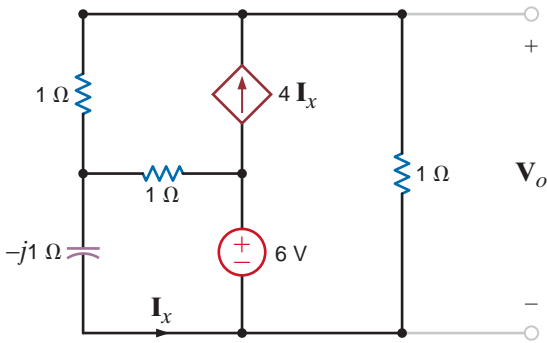


Figure P8.81



**8.82** Use loop analysis to find  $V_o$  in the circuit in Fig. P8.82.

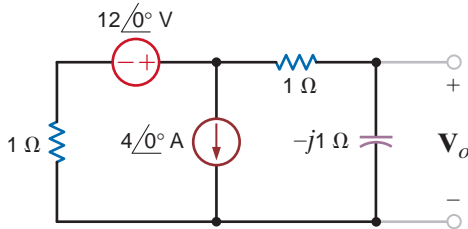


**Figure P8.82**

**8.83** Use loop analysis to find  $V_o$  in the circuit in Fig. P8.59.

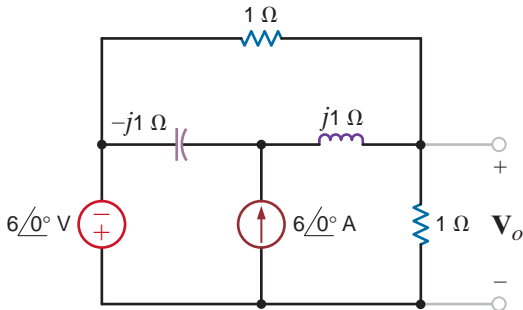
**8.84** Use loop analysis to find  $V_o$  in the network in Fig. P8.63.

**8.85** Use superposition to find  $V_o$  in the network in Fig. P8.85.



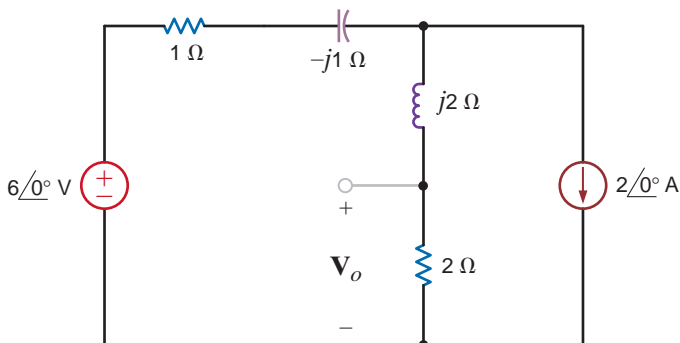
**Figure P8.85**

**8.86** Use superposition to determine  $V_o$  in the circuit in Fig. 8.86.



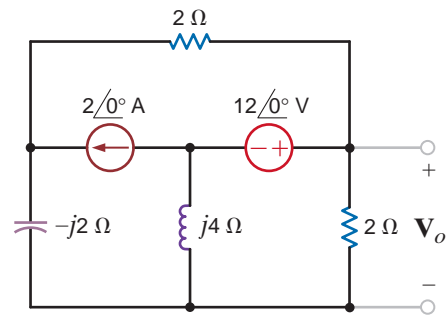
**Figure P8.86**

**8.87** Using superposition, find  $V_o$  in the circuit in Fig. P8.87.



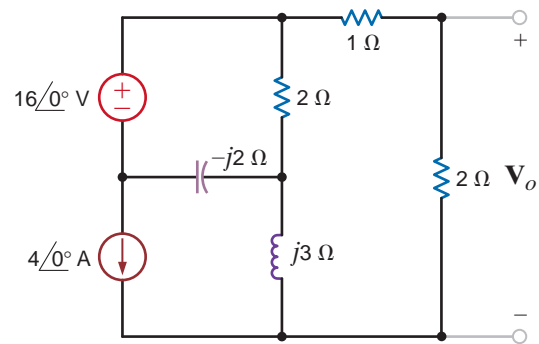
**Figure P8.87**

**8.88** Find  $V_o$  in the network in Fig. P8.88 using superposition.



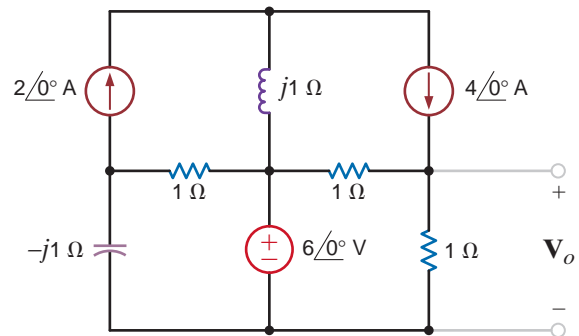
**Figure P8.88**

**8.89** Find  $V_o$  in the network in Fig. P8.89 using superposition.



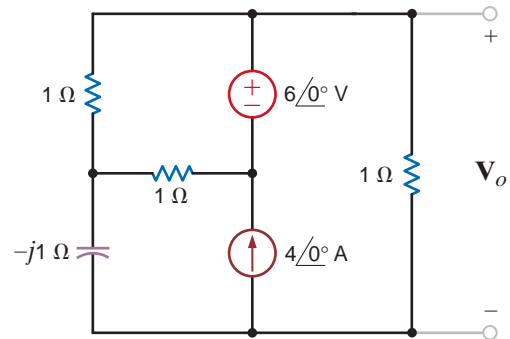
**Figure P8.89**

**8.90** Use superposition to find  $V_o$  in the circuit in Fig. P8.90.



**Figure P8.90**

**8.91** Use superposition to find  $V_o$  in the network in Fig. 8.91.



**Figure P8.91**

**8.92** Use superposition to find  $V_o$  in the circuit in Fig. P8.92.

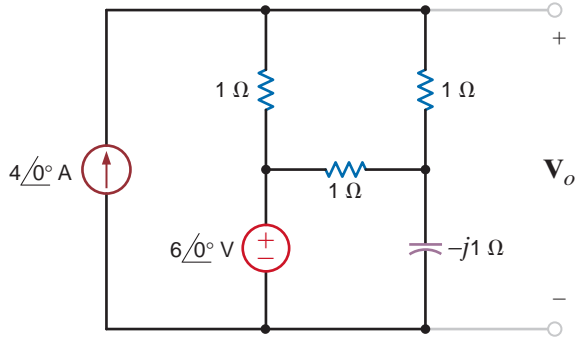


Figure P8.92

**8.93** Use source exchange to find the current  $I_o$  in the network in Fig. P8.93.

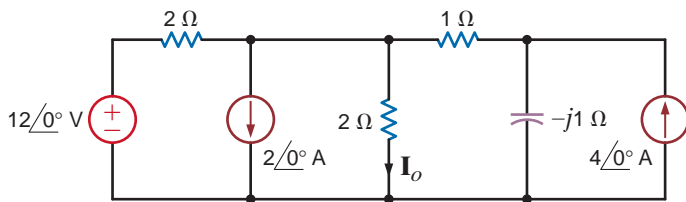


Figure P8.93

**8.94** Use source transformation to determine  $I_o$  in the network in Fig. P8.94.

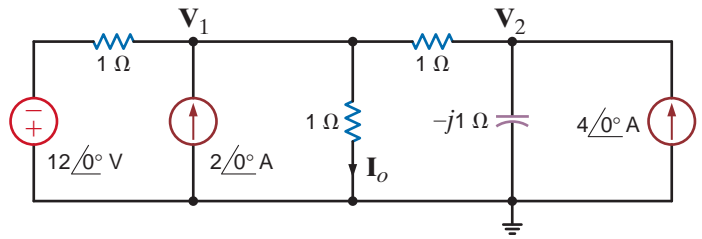


Figure P8.94

**8.95** Use source exchange to determine  $V_o$  in the network in Fig. P8.95.

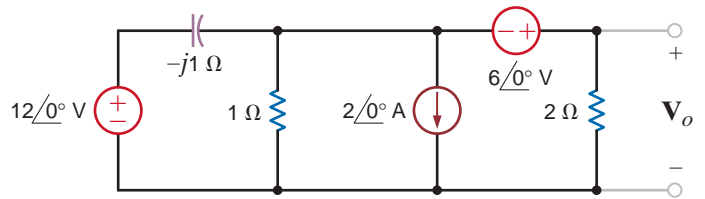


Figure P8.95

**8.96** Use source transformation to determine  $I_o$  in the network in Fig. P8.96.

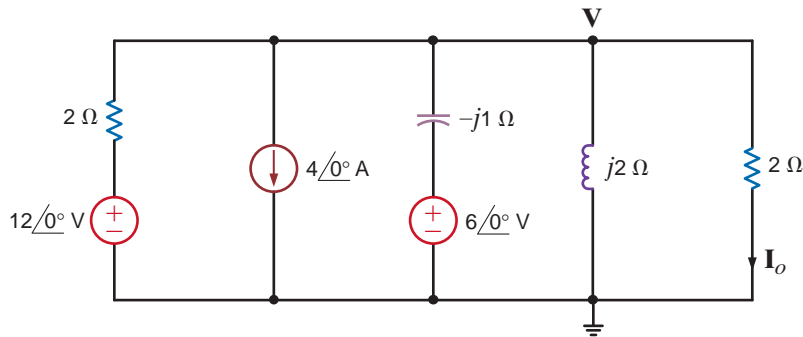


Figure P8.96

**8.97** Use source transformation to find  $V_o$  in the circuit in Fig. P8.97.

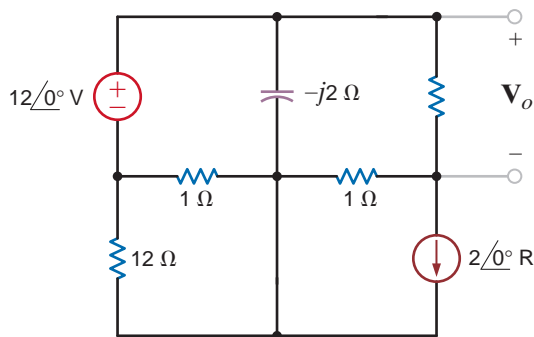


Figure P8.97

**8.98** Use source transformation to find  $V_o$  in the circuit in Fig. P8.98.

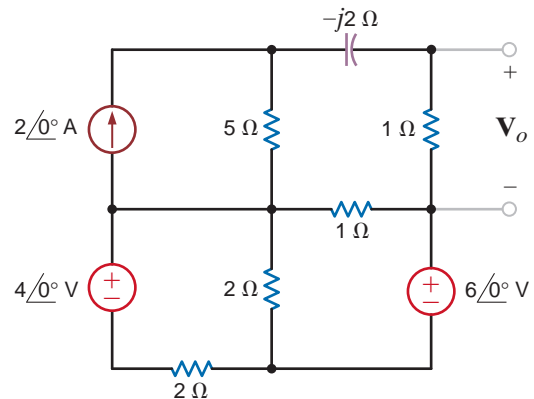


Figure P8.98

**8.99** Use source transformation to find  $I_o$  in the circuit in Fig. P8.99.

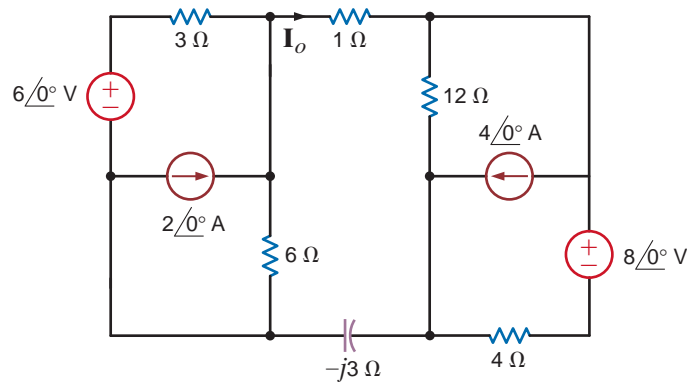


Figure P8.99

**8.100** Use source transformation to find  $I_o$  in the network in Fig. P8.100.

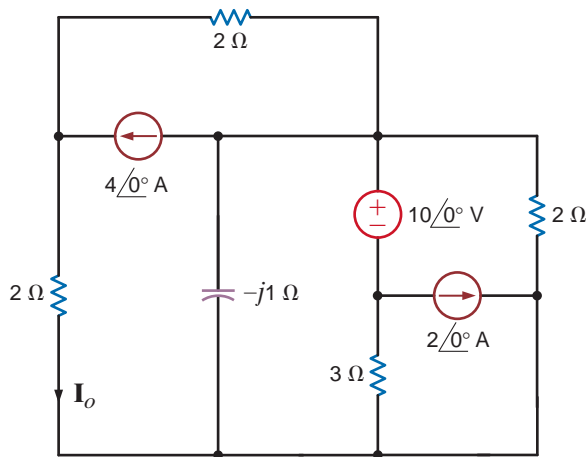


Figure P8.100

**8.101** Use Thevenin's theorem to find  $V_o$  in the circuit in Fig. P8.101.

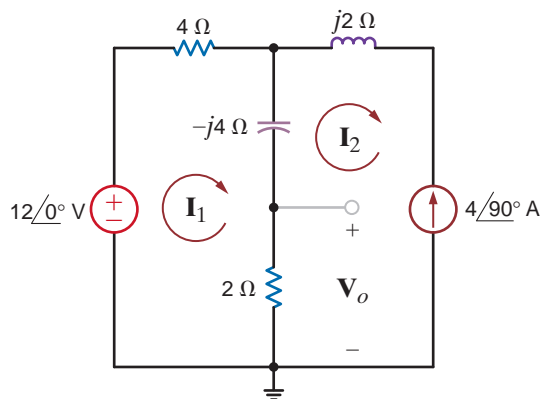


Figure P8.101

**8.102** Apply Thévenin's theorem twice to find  $V_o$  in the circuit in Fig. P8.102.

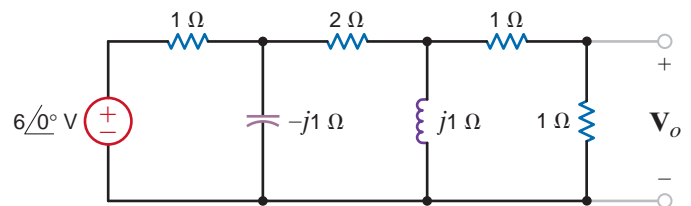


Figure P8.102

**8.103** Use Thévenin's theorem to find  $I_o$  in the network in Fig. P8.103.

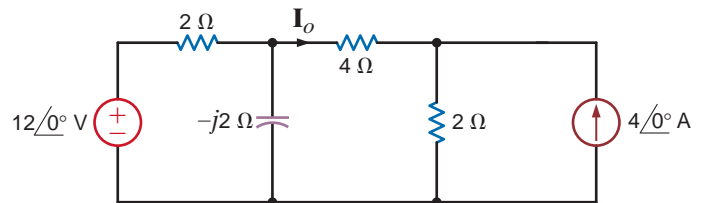


Figure P8.103

**8.104** Use Thévenin's theorem to determine  $I_o$  in the circuit in Fig. P8.104.

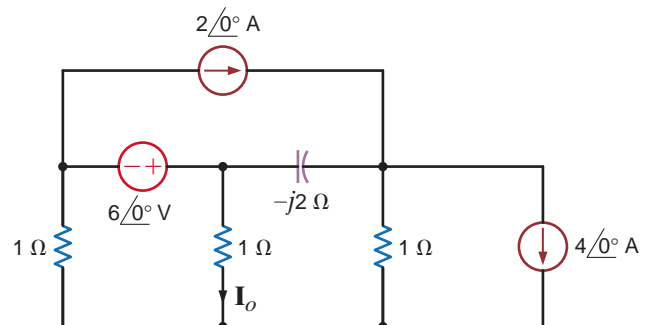


Figure P8.104

**8.105** Use Thévenin's theorem to find  $V_o$  in the circuit in Fig. P8.105.

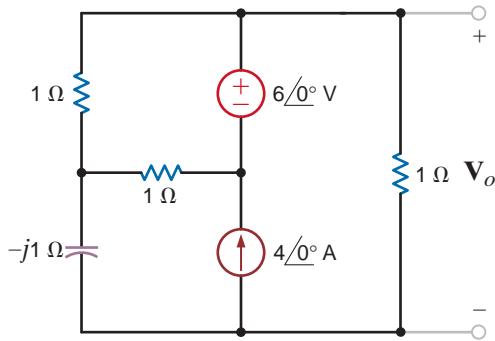


Figure P8.105

**8.106** Use Thévenin's theorem to find  $V_o$  in the network in Fig. P8.106.

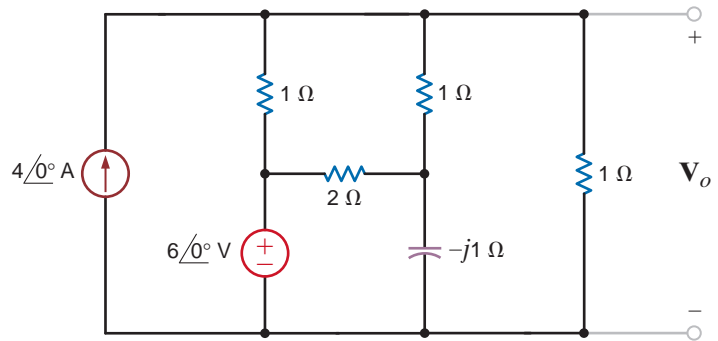


Figure P8.106

**8.107** Use Thévenin's theorem to find  $V_o$  in the network in Fig. P8.107.

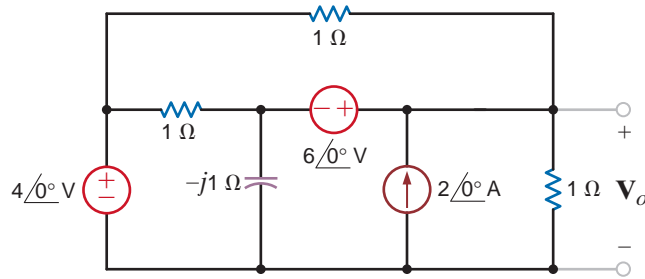


Figure P8.107

**8.108** Use Thévenin's theorem to find  $I_o$  in the network in Fig. P8.108.

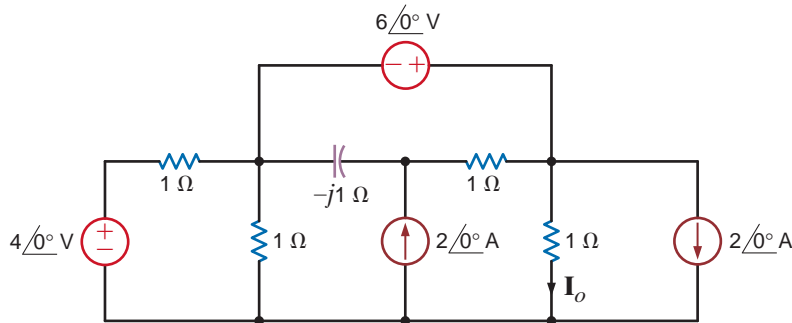


Figure P8.108

**8.109** Use Thévenin's theorem to find  $V_o$  in the network in Fig. P8.109.

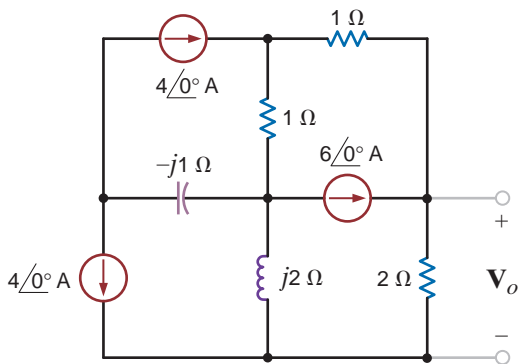


Figure P8.109

**8.110** Given the network in Fig. P8.110, find the Thévenin's equivalent of the network at terminals A–B.

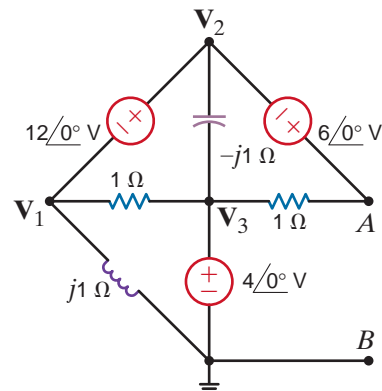


Figure P8.110

**8.111** Find  $V_o$  in the network in Fig. P8.111 using Thévenin's theorem.

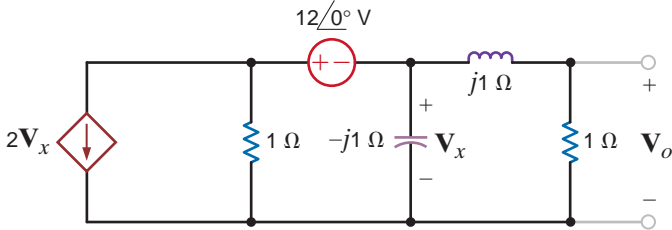


Figure P8.111

**8.117** Use Norton's theorem to find  $V_o$  in the network in Fig. P8.105.

**8.118** Use Norton's theorem to find  $V_o$  in the circuit in Fig. P8.107.

**8.119** Use Norton's theorem to find  $I_o$  in the circuit in Fig. P8.108.

**8.120** Use Norton's theorem to find  $V_o$  in the network in Fig. P8.120.



**8.112** Find the Thévenin's equivalent for the network in Fig. P8.112 at terminals A–B.

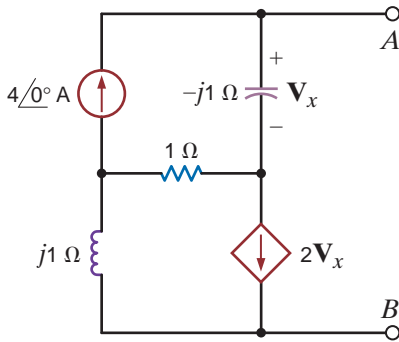


Figure P8.112

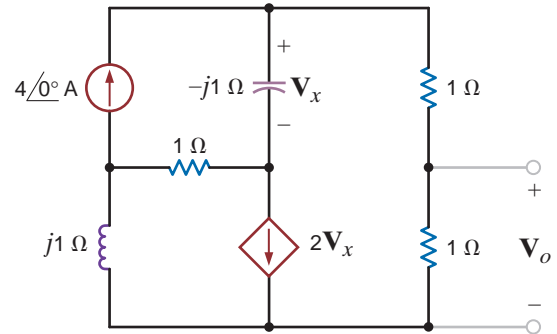


Figure P8.120

**8.113** Find  $V_x$  in the circuit in Fig. P8.113 using Norton's theorem.

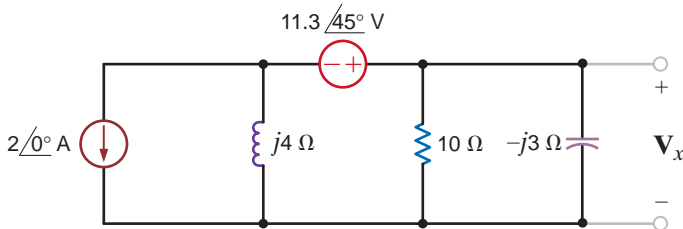


Figure P8.113

**8.121** Find  $V_o$  using Norton's theorem for the circuit in Fig. P8.121.

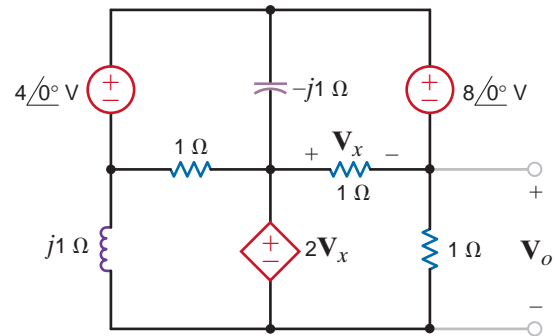


Figure P8.121

**8.114** Find  $I_o$  in the network in Fig. P8.114 using Norton's theorem.

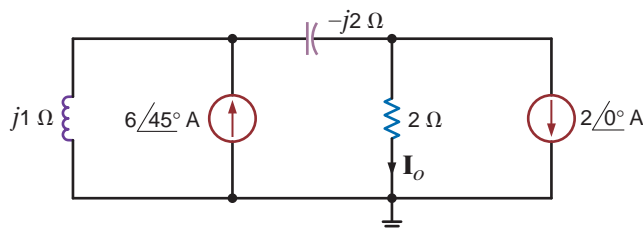


Figure P8.114

**8.122** Use Norton's theorem to find  $V_o$  in the circuit in Fig. P8.122.

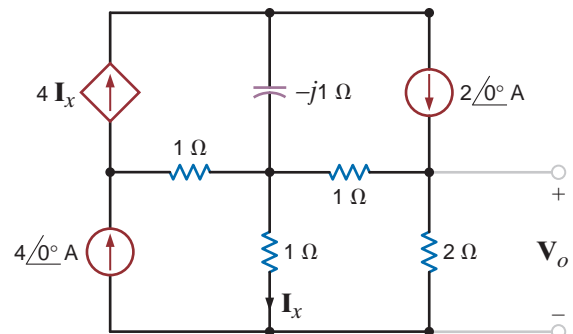


Figure P8.122

**8.115** Use Norton's theorem to find  $I_o$  in the circuit in Fig. P8.103.

**8.116** Use Norton's theorem to find  $I_o$  in the circuit in Fig. P8.104.

**8.123** Use Norton's theorem to find  $V_o$  in the circuit in Fig. P8.61.



**8.124** Use source transformation to find  $V_o$  in the circuit in Fig. P8.124.

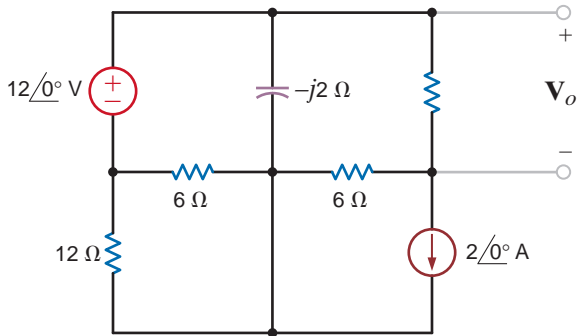


Figure P8.124

**8.125** Calculate the Thévenin equivalent impedance  $Z_{Th}$  in the circuit shown in Fig. P8.125.

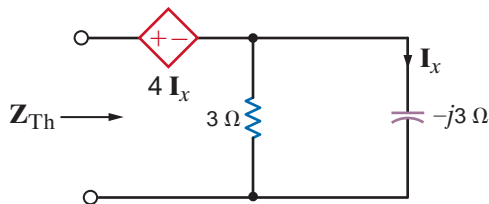


Figure P8.125

**8.126** Find the Thévenin equivalent for the network in Fig. P8.126 at terminals A–B.

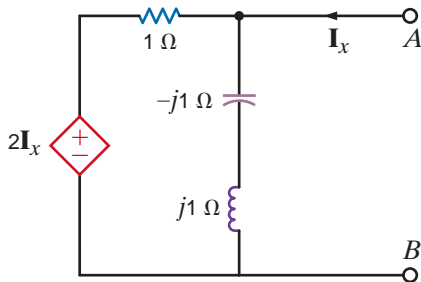


Figure P8.126

**8.127** Find the Thévenin equivalent of the network in Fig. P8.127 at terminals A–B.

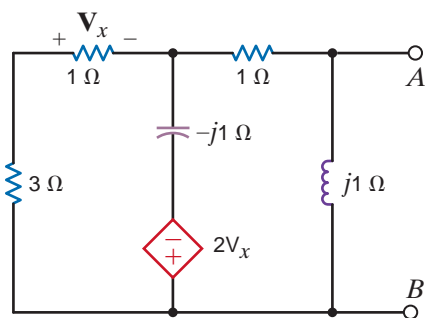


Figure P8.127

Solve the remaining problems using computational methods.

**8.128** Apply Norton's theorem to find  $V_o$  in the network in Fig. P8.128.

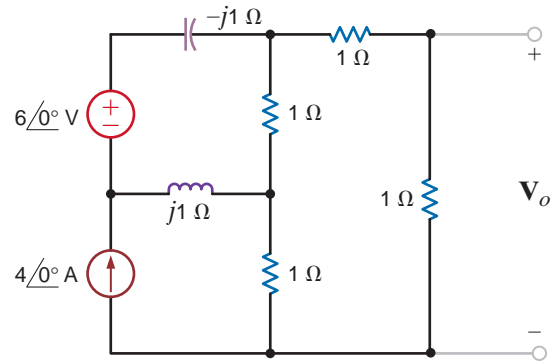


Figure P8.128

**8.129** Find  $V_o$  in the circuit in Fig. P8.129.

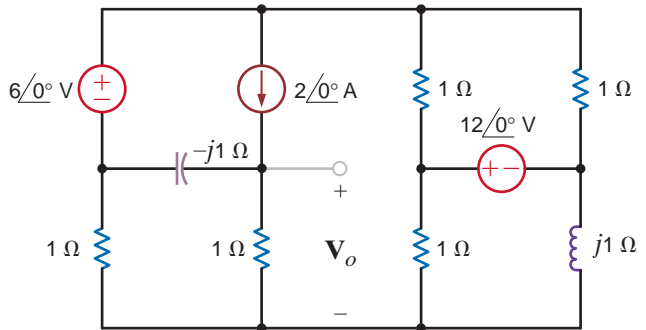


Figure P8.129

**8.130** Find the node voltages in the network in Fig. P8.130.

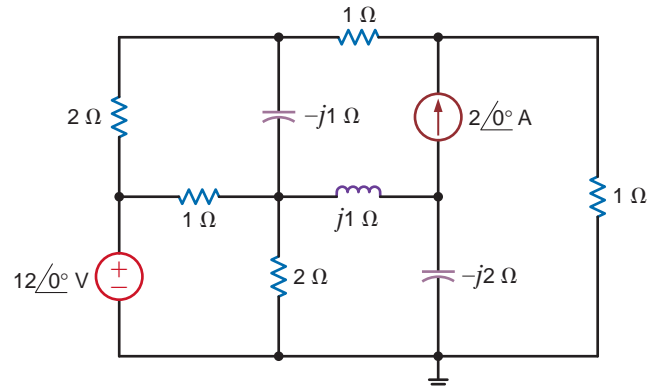


Figure P8.130

**8.131** Determine  $V_o$  in the network in Fig. P8.131.

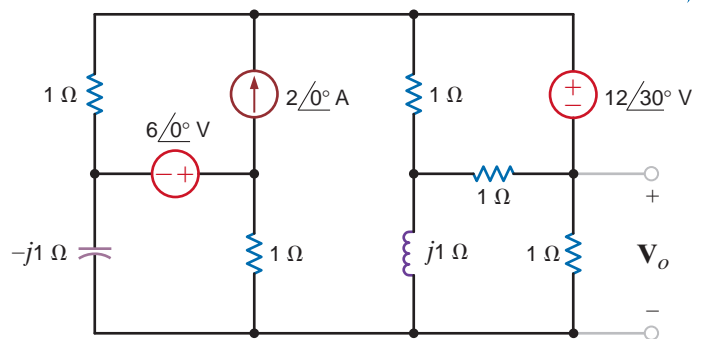


Figure P8.131

**8.132** Use Thévenin's theorem, to determine  $I_o$  in the network in Fig. P8.132.

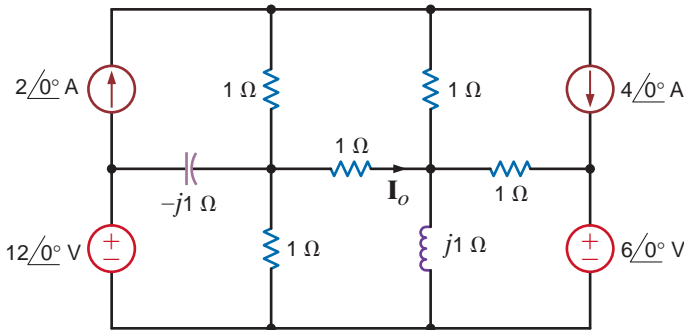


Figure P8.132

**8.136** If the network in Fig. P8.136 operates at  $f = 400$  Hz, find the current  $I_o$ .

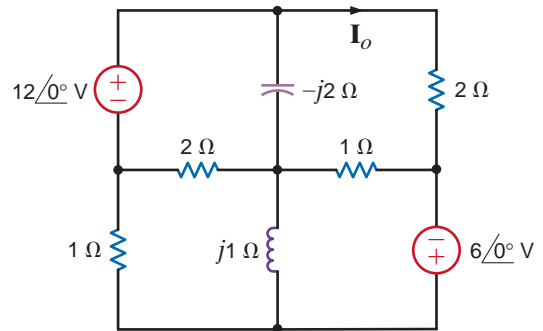


Figure P8.136

**8.133** Find  $I_o$  in the network in Fig. P8.133.

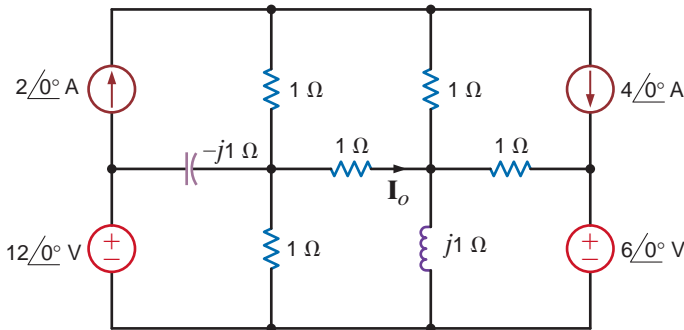


Figure P8.133

**8.137** The network in Fig. P8.137 operates at  $f = 60$  Hz. Find the voltage  $V_o$ .

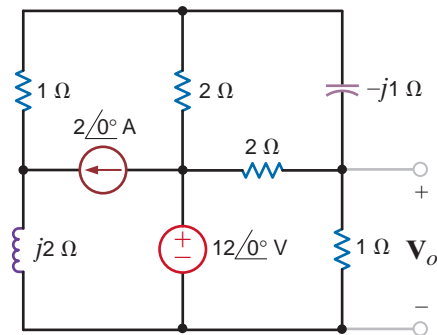


Figure P8.137

**8.134** Use both nodal analysis and loop analysis to find  $I_o$  in the network in Fig. P8.134.

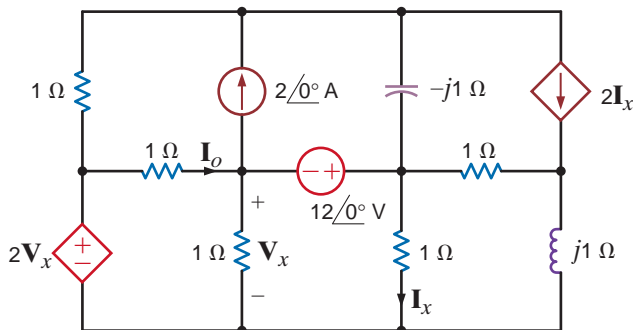


Figure P8.134

**8.138** Find  $I_o$  in the network in Fig. P8.138.

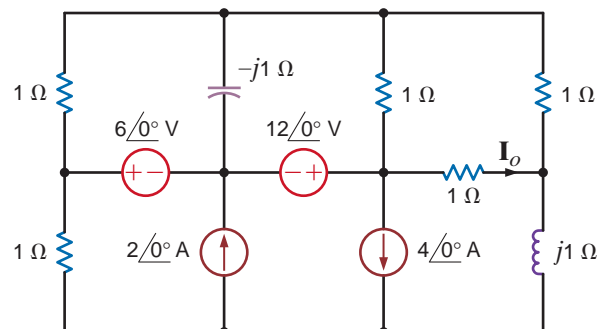


Figure P8.138

**8.135** Given the circuit in Fig. P8.135, at what frequency are the magnitudes of  $i_C(t)$  and  $i_L(t)$  equal?

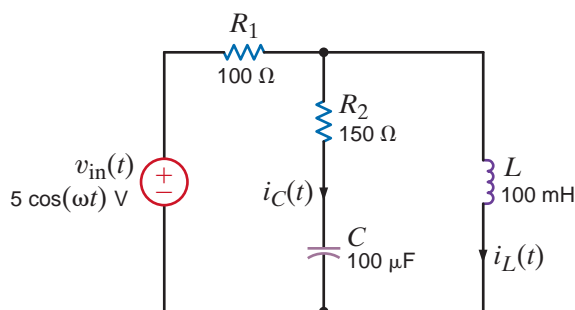


Figure P8.135

**8.139** Find  $I_o$  in the network in Fig. P8.139.

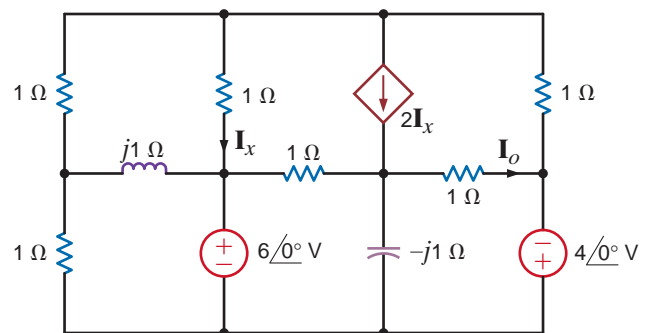


Figure P8.139

**8.140** Determine  $\mathbf{I}_o$  in the network in Fig. P8.140.

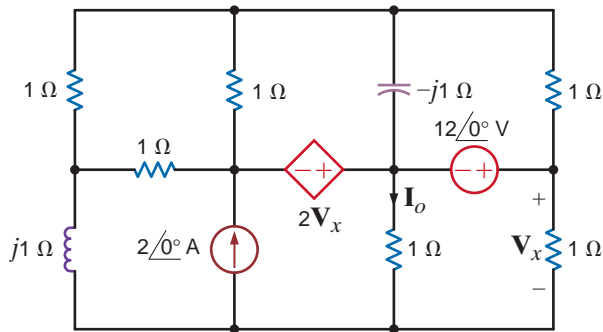


Figure P8.140

**8.141** Find  $\mathbf{I}_o$  in the circuit in Fig. P8.141.

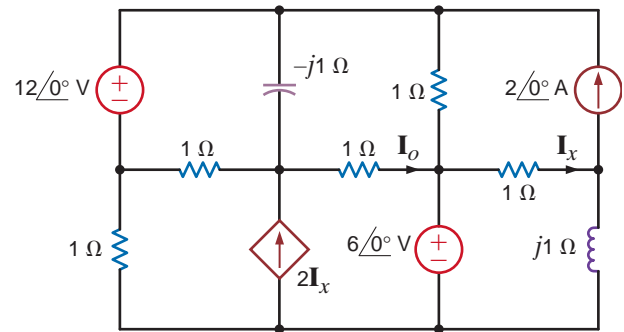


Figure P8.141

**8.142** Find  $v_o(t)$  in the network in Fig. P8.142.

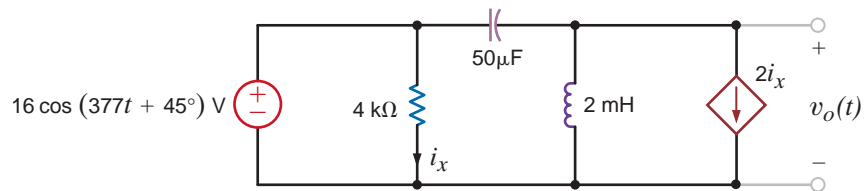


Figure P8.142

**8.143** The network in Fig. P8.143 operates at 60 Hz. Find the currents  $\mathbf{I}_o$  and  $\mathbf{I}_x$ .

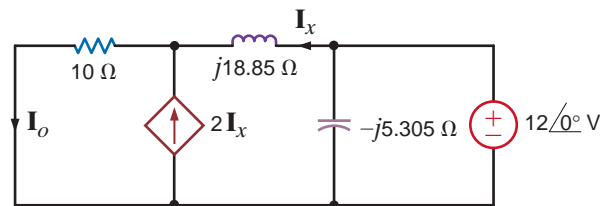


Figure P8.143

**8.144** Find  $v_o(t)$  in the network in Fig. P8.144.

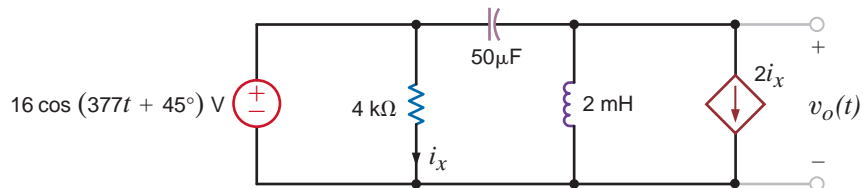


Figure P8.144

**8.145** The network in Fig. P8.145 operates at 60 Hz. Find the currents  $\mathbf{I}_o$  and  $\mathbf{I}_x$ .

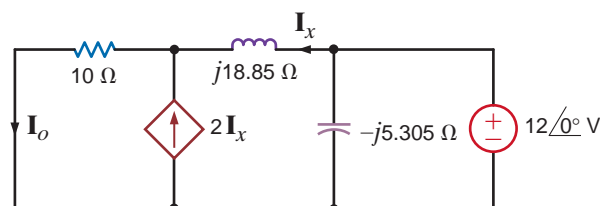


Figure P8.145



**TYPICAL PROBLEMS FOUND ON THE FE EXAM**

**8PFE-1** Find  $V_o$  in the network in Fig. 8PFE-1.

- a.  $4.62\angle 30.4^\circ$  V
- b.  $7.16\angle -26.6^\circ$  V
- c.  $3.02\angle 24.3^\circ$  V
- d.  $5.06\angle -71.6^\circ$  V

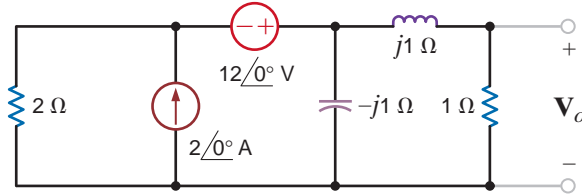


Figure 8PFE-1

**8PFE-2** Find  $V_o$  in the circuit in Fig. 8PFE-2.

- a.  $25.4\angle 10.25^\circ$  V
- b.  $20.1\angle 4.63^\circ$  V
- c.  $30.8\angle 8.97^\circ$  V
- d.  $18.3\angle 12.32^\circ$  V

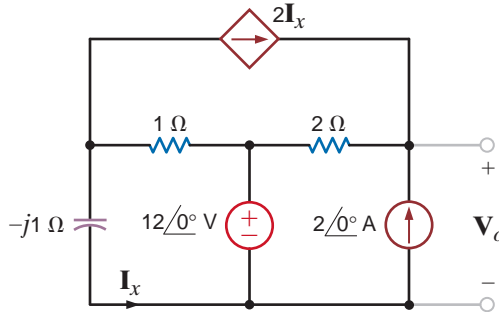


Figure 8PFE-2

**8PFE-3** Find  $V_o$  in the network in Fig. 8PFE-3.

- a.  $8.24\angle -30.96^\circ$  V
- b.  $2.06\angle 20.84^\circ$  V
- c.  $16.96\angle 45^\circ$  V
- d.  $10.42\angle 30^\circ$  V

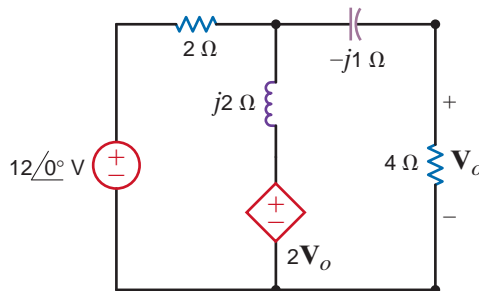


Figure 8PFE-3

**8PFE-4** Determine the midband (where the coupling capacitors can be ignored) gain of the single-stage transistor amplifier shown in Fig. 8PFE-4.

- 110.25
- 133.33
- 26.67
- 95.75

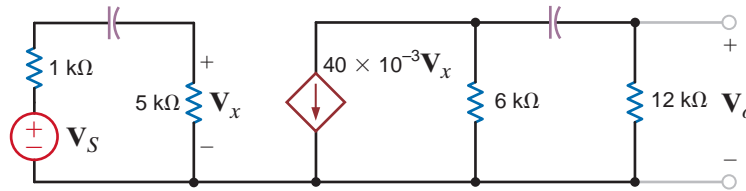


Figure 8PFE-4

**8PFE-5** What is the current  $I_o$  in the circuit in Fig. 8PFE-5?

- $6.32 \angle 30.31^\circ$  A
- $2.75 \angle 21.43^\circ$  A
- $1.48 \angle 32.92^\circ$  A
- $5.23 \angle 40.15^\circ$  A

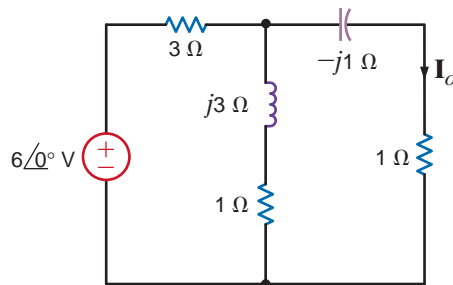


Figure 8PFE-5

# STEADY-STATE POWER ANALYSIS



Mlenny Photography/Alexander Hafemann/  
iStockphoto

## THE LEARNING GOALS FOR THIS CHAPTER ARE:

- Know how to calculate instantaneous and average power in ac circuits
- Be able to calculate the maximum average power transfer for a load in an ac circuit
- Know how to calculate the effective or rms value for a periodic waveform
- Know how to calculate real power, reactive power, complex power, and power factor in ac circuits
- Understand how to correct the power factor in ac circuits
- Understand the importance of safety and the consequences of ignoring it when working with power

**Solar mirror arrays** Enough solar energy strikes Earth every day to power our homes and businesses for almost 30 years. However, today's solar power systems are able to capture only a miniscule fraction of that energy. The ongoing challenge in the solar power industry is to develop collection technologies that convert more of the sun's energy into usable power.

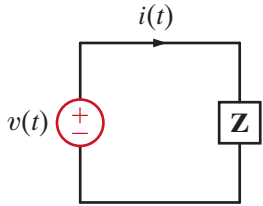
Three technologies that strive to capture solar power more efficiently are parabolic troughs, tower systems, and dish/engine systems. Trough systems use mirrors to multiply the sun's energy from 30 to 60 times its normal intensity to a receiver pipe containing synthetic oil at the focal line. Power towers focus thousands of mirrors onto a receiver at the top of the tower. Solar Two near Barstow, CA is the world's largest solar power tower. Dish/engine systems use a mirrored array to give 30% conversion efficiencies—higher

than other solar technology. Aligning this mirror's direction using feedback control can maximize the effective sun's rays seen by the mirrors, even on cloudy days.

This chapter is aimed at filling a gap in your study of circuit analysis: finding the average power supplied or absorbed by each element in ac circuits. This average real power is the product of effective values of sinusoidal voltages and currents—as expected—but also a power factor that depends on their phase differences. Leading and lagging power factors are discussed, and complex power is introduced as a common term in power distribution. Whatever the generation source, ac power can be delivered more efficiently by improving the power factor. Getting a handle on power factors is far from an academic exercise; it is central to understanding how to wring more power out of the sun.

## 9.1

## Instantaneous Power



**Figure 9.1**  
Simple ac network.

By employing the sign convention adopted in the earlier chapters, we can compute the instantaneous power supplied or absorbed by any device as the product of the instantaneous voltage across the device and the instantaneous current through it.

Consider the circuit shown in Fig. 9.1. In general, the steady-state voltage and current for the network can be written as

$$v(t) = V_M \cos(\omega t + \theta_v) \quad 9.1$$

$$i(t) = I_M \cos(\omega t + \theta_i) \quad 9.2$$

The instantaneous power is then

$$\begin{aligned} p(t) &= v(t)i(t) \\ &= V_M I_M \cos(\omega t + \theta_v) \cos(\omega t + \theta_i) \end{aligned} \quad 9.3$$

Employing the following trigonometric identity,

$$\cos \phi_1 \cos \phi_2 = \frac{1}{2} [\cos(\phi_1 - \phi_2) + \cos(\phi_1 + \phi_2)] \quad 9.4$$

we find that the instantaneous power can be written as

$$p(t) = \frac{V_M I_M}{2} [\cos(\theta_v - \theta_i) + \cos(2\omega t + \theta_v + \theta_i)] \quad 9.5$$

Note that the instantaneous power consists of two terms. The first term is a constant (i.e., it is time independent), and the second term is a cosine wave of twice the excitation frequency. We will examine this equation in more detail in Section 9.2.

## EXAMPLE

## 9.1

The circuit in Fig. 9.1 has the following parameters:  $v(t) = 4 \cos(\omega t + 60^\circ)$  V and  $Z = 2 \angle 30^\circ \Omega$ . We wish to determine equations for the current and the instantaneous power as a function of time and plot these functions with the voltage on a single graph for comparison.

## SOLUTION

Since

$$\begin{aligned} \mathbf{I} &= \frac{4 \angle 60^\circ}{2 \angle 30^\circ} \\ &= 2 \angle 30^\circ \text{ A} \end{aligned}$$

then

$$i(t) = 2 \cos(\omega t + 30^\circ) \text{ A}$$

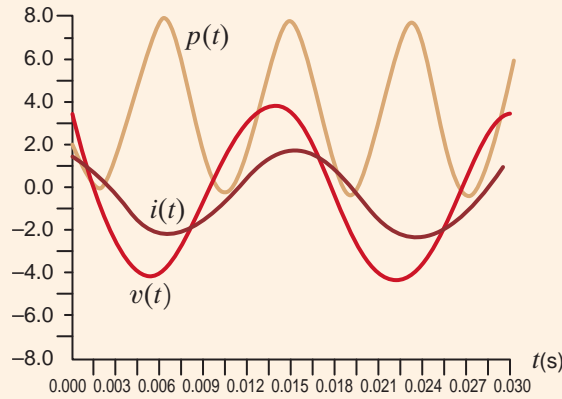
From Eq. (9.5),

$$\begin{aligned} p(t) &= 4 [\cos(30^\circ) + \cos(2\omega t + 90^\circ)] \\ &= 3.46 + 4 \cos(2\omega t + 90^\circ) \text{ W} \end{aligned}$$

A plot of this function, together with plots of the voltage and current, is shown in Fig. 9.2. As can be seen in this figure, the instantaneous power has a dc or constant term and a second term whose frequency is twice that of the voltage or current.

## [hint]

Note that  $p(t)$  contains a dc term and a cosine wave with twice the frequency of  $v(t)$  and  $i(t)$ .

**Figure 9.2**

Plots of  $v(t)$ ,  $i(t)$ , and  $p(t)$  for the circuit in Example 9.1 using  $f = 60$  Hz.

The average value of any periodic waveform (e.g., a sinusoidal function) can be computed by integrating the function over a complete period and dividing this result by the period. Therefore, if the voltage and current are given by Eqs. (9.1) and (9.2), respectively, the average power is

$$\begin{aligned} P &= \frac{1}{T} \int_{t_0}^{t_0+T} p(t) dt \\ &= \frac{1}{T} \int_{t_0}^{t_0+T} V_M I_M \cos(\omega t + \theta_v) \cos(\omega t + \theta_i) dt \end{aligned} \quad 9.6$$

where  $t_0$  is arbitrary,  $T = 2\pi/\omega$  is the period of the voltage or current, and  $P$  is measured in watts. Actually, we may average the waveform over any integral number of periods so that Eq. (9.6) can also be written as

$$P = \frac{1}{nT} \int_{t_0}^{t_0+nT} V_M I_M \cos(\omega t + \theta_v) \cos(\omega t + \theta_i) dt \quad 9.7$$

where  $n$  is a positive integer.

Employing Eq. (9.5) for the expression in (9.6), we obtain

$$P = \frac{1}{T} \int_{t_0}^{t_0+T} \frac{V_M I_M}{2} [\cos(\theta_v - \theta_i) + \cos(2\omega t + \theta_v + \theta_i)] dt \quad 9.8$$

We could, of course, plod through the indicated integration; however, with a little forethought we can determine the result by inspection. The first term is independent of  $t$ , and therefore a constant in the integration. Integrating the constant over the period and dividing by the period simply results in the original constant. The second term is a cosine wave. It is well known that the average value of a cosine wave over one complete period or an integral number of periods is zero, and therefore the second term in Eq. (9.8) vanishes. In view of this discussion, Eq. (9.8) reduces to

$$P = \frac{1}{2} V_M I_M \cos(\theta_v - \theta_i) \quad 9.9$$

Note that since  $\cos(-\theta) = \cos(\theta)$ , the argument for the cosine function can be either  $\theta_v - \theta_i$  or  $\theta_i - \theta_v$ . In addition, note that  $\theta_v - \theta_i$  is the angle of the circuit impedance as shown in Fig. 9.1. Therefore, for a purely resistive circuit,

$$P = \frac{1}{2} V_M I_M \quad 9.10$$

## 9.2

### Average Power

#### [hint]

A frequently used equation for calculating the average power.

and for a purely reactive circuit,

$$\begin{aligned} P &= \frac{1}{2} V_M I_M \cos(90^\circ) \\ &= 0 \end{aligned}$$

Because purely reactive impedances absorb no average power, they are often called *lossless elements*. The purely reactive network operates in a mode in which it stores energy over one part of the period and releases it over another.

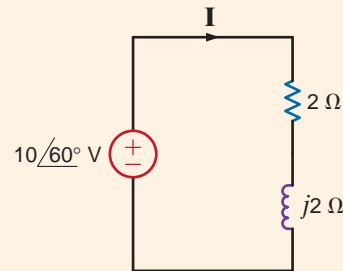
### EXAMPLE

## 9.2

Figure 9.3

Example RL circuit.

We wish to determine the average power absorbed by the impedance shown in Fig. 9.3.



**SOLUTION** From the figure we note that

$$\mathbf{I} = \frac{\mathbf{V}}{\mathbf{Z}} = \frac{V_M \angle \theta_v}{2 + j2} = \frac{10 \angle 60^\circ}{2.83 \angle 45^\circ} = 3.53 \angle 15^\circ \text{ A}$$

Therefore,

$$I_M = 3.53 \text{ A} \quad \text{and} \quad \theta_i = 15^\circ$$

Hence,

$$\begin{aligned} P &= \frac{1}{2} V_M I_M \cos(\theta_v - \theta_i) \\ &= \frac{1}{2} (10)(3.53) \cos(60^\circ - 15^\circ) \\ &= 12.5 \text{ W} \end{aligned}$$

Since the inductor absorbs no power, we can employ Eq. (9.10), provided that  $V_M$  in that equation is the voltage across the resistor. Using voltage division, we obtain

$$\mathbf{V}_R = \frac{(10 \angle 60^\circ)(2)}{2 + j2} = 7.07 \angle 15^\circ \text{ V}$$

and therefore,

$$\begin{aligned} P &= \frac{1}{2} (7.07)(3.53) \\ &= 12.5 \text{ W} \end{aligned}$$

In addition, using Ohm's law, we could also employ the expressions

$$P = \frac{1}{2} \frac{V_M^2}{R}$$

or

$$P = \frac{1}{2} I_M^2 R$$

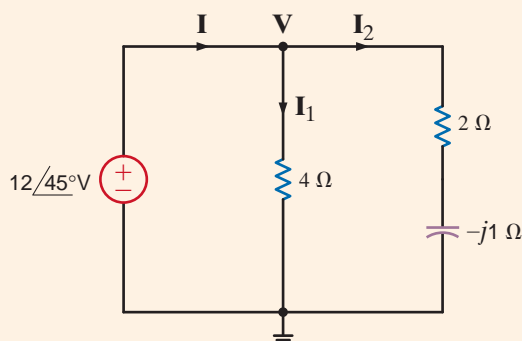
where once again we must be careful that the  $V_M$  and  $I_M$  in these equations refer to the voltage across the resistor and the current through it, respectively.

For the circuit shown in Fig. 9.4, we wish to determine both the total average power absorbed and the total average power supplied.

## EXAMPLE 9.3

**Figure 9.4**

Example circuit for illustrating a power balance.



From the figure we note that

$$\mathbf{I}_1 = \frac{12 \angle 45^\circ}{4} = 3 \angle 45^\circ \text{ A}$$

$$\mathbf{I}_2 = \frac{12 \angle 45^\circ}{2 - j1} = \frac{12 \angle 45^\circ}{2.24 \angle -26.57^\circ} = 5.36 \angle 71.57^\circ \text{ A}$$

and therefore,

$$\begin{aligned} \mathbf{I} &= \mathbf{I}_1 + \mathbf{I}_2 \\ &= 3 \angle 45^\circ + 5.36 \angle 71.57^\circ \\ &= 8.15 \angle 62.10^\circ \text{ A} \end{aligned}$$

The average power absorbed in the 4-Ω resistor is

$$P_4 = \frac{1}{2} V_M I_M = \frac{1}{2} (12)(3) = 18 \text{ W}$$

The average power absorbed in the 2-Ω resistor is

$$P_2 = \frac{1}{2} I_M^2 R = \frac{1}{2} (5.34)^2 (2) = 28.7 \text{ W}$$

Therefore, the total average power absorbed is

$$P_A = 18 + 28.7 = 46.7 \text{ W}$$

Note that we could have calculated the power absorbed in the 2-Ω resistor using  $1/2 V_M^2/R$  if we had first calculated the voltage across the 2-Ω resistor.

The total average power supplied by the source is

$$\begin{aligned} P_S &= \frac{1}{2} V_M I_M \cos(\theta_v - \theta_i) \\ &= \frac{1}{2} (12)(8.15) \cos(45^\circ - 62.10^\circ) \\ &= 46.7 \text{ W} \end{aligned}$$

Thus, the total average power supplied is, of course, equal to the total average power absorbed.

## SOLUTION

## Learning Assessments

**Eg.1** Find the average power absorbed by each resistor in the network in Fig. E9.1.

**ANSWER:**  $P_{2\Omega} = 7.20$  W;  
 $P_{4\Omega} = 7.20$  W.

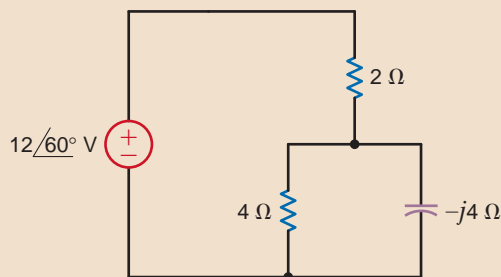


Figure E9.1

**Eg.2** Given the network in Fig. E9.2, find the average power absorbed by each passive circuit element and the total average power supplied by the current source.

**ANSWER:**  $P_{3\Omega} = 56.60$  W;  
 $P_{4\Omega} = 33.96$  W;  $P_L = 0$ ;  
 $P_{CS} = 90.50$  W.

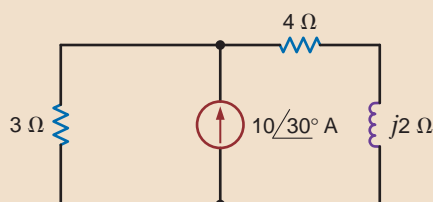


Figure E9.2

**Eg.3** Find the power supplied and the power absorbed by each element in Fig. E9.3.

**ANSWER:**  $P_C = 0$  W;  
 $P_L = 0$  W;  $P_{4\Omega} = 1.78$  W;  
 $P_{2\Omega} = 2.22$  W;  $P_{CS} = -4$  W.

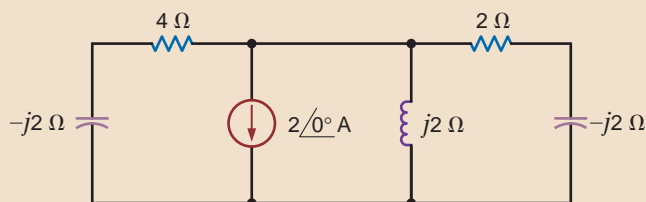


Figure E9.3

### [hint]

Superposition is not applicable to power. Why?

When determining average power, if more than one source is present in a network, we can use any of our network analysis techniques to find the necessary voltage and/or current to compute the power. However, we must remember that in general we cannot apply superposition to power.

### EXAMPLE

## 9.4

**SOLUTION** From the figure we note that

$$\mathbf{I}_2 = \frac{12 \angle 30^\circ}{2} = 6 \angle 30^\circ \text{ A}$$

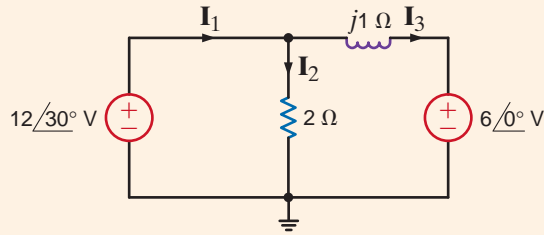
and

$$\mathbf{I}_3 = \frac{12 \angle 30^\circ - 6 \angle 0^\circ}{j1} = \frac{4.39 + j6}{j1} = 7.44 \angle -36.21^\circ \text{ A}$$

The power absorbed by the 2-Ω resistor is

$$P_2 = \frac{1}{2} V_M I_M = \frac{1}{2} (12)(6) = 36 \text{ W}$$

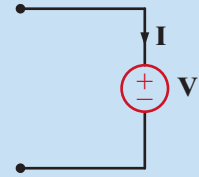




**Figure 9.5**  
Example  $RL$  circuit with  
two sources.

[hint]

Under the following condition:



if  $P = IV$  is positive, power is being absorbed.

If  $P = IV$  is negative, power is being generated.

According to the direction of  $\mathbf{I}_3$ , the  $6\angle 0^\circ$ -V source is absorbing power. The power it absorbs is given by

$$\begin{aligned} P_{6\angle 0^\circ} &= \frac{1}{2} V_M I_M \cos(\theta_v - \theta_i) \\ &= \frac{1}{2} (6)(7.44) \cos[0^\circ - (-36.21^\circ)] \\ &= 18 \text{ W} \end{aligned}$$

At this point an obvious question arises: how do we know whether the  $6\angle 0^\circ$ -V source is supplying power to the remainder of the network or absorbing it? The answer to this question is actually straightforward. If we employ our passive sign convention that was adopted in the earlier chapters—that is, if the current reference direction enters the positive terminal of the source and the answer is positive—the source is absorbing power. If the answer is negative, the source is supplying power to the remainder of the circuit. A generator sign convention could have been used, and under this condition the interpretation of the sign of the answer would be reversed. Note that once the sign convention is adopted and used, the sign for average power will be negative only if the angle difference is greater than  $90^\circ$  (i.e.,  $|\theta_v - \theta_i| > 90^\circ$ ).

To obtain the power supplied to the network, we compute  $\mathbf{I}_1$  as

$$\begin{aligned} \mathbf{I}_1 &= \mathbf{I}_2 + \mathbf{I}_3 \\ &= 6\angle 30^\circ + 7.44\angle -36.21^\circ \\ &= 11.29\angle -7.10^\circ \text{ A} \end{aligned}$$

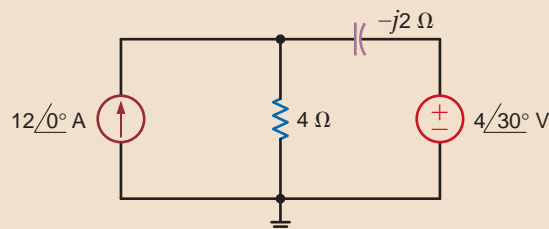
Therefore, the power supplied by the  $12\angle 30^\circ$ -V source using the generator sign convention is

$$\begin{aligned} P_S &= \frac{1}{2} (12)(11.29) \cos(30^\circ + 7.10^\circ) \\ &= 54 \text{ W} \end{aligned}$$

and hence the power absorbed is equal to the power supplied.

## Learning Assessments

**E9.4** Determine the total average power absorbed and supplied by each element in the network in Fig. E9.4.



**Figure E9.4**

**ANSWER:**

$$P_{CS} = -69.4 \text{ W};$$

$$P_{VS} = 19.8 \text{ W};$$

$$P_{4\Omega} = 49.6 \text{ W}; P_C = 0.$$

**E9.5** Given the network in Fig. E9.5, determine the total average power absorbed or supplied by each element.

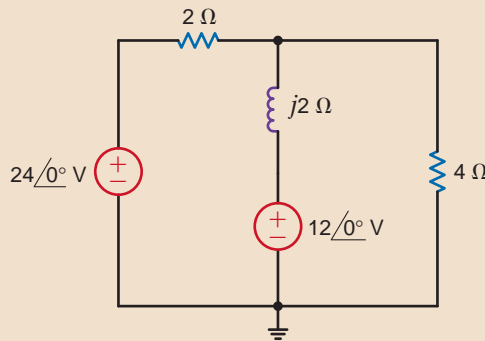


Figure E9.5

**ANSWER:**

$$P_{24\angle 0^\circ} = -55.4 \text{ W};$$

$$P_{12\angle 0^\circ} = 5.5 \text{ W};$$

$$P_{2\Omega} = 22.2 \text{ W};$$

$$P_{4\Omega} = 27.7 \text{ W}; P_L = 0.$$

**E9.6** Determine the average power absorbed by the 4-Ω and 3-Ω resistors in Fig. E9.6.

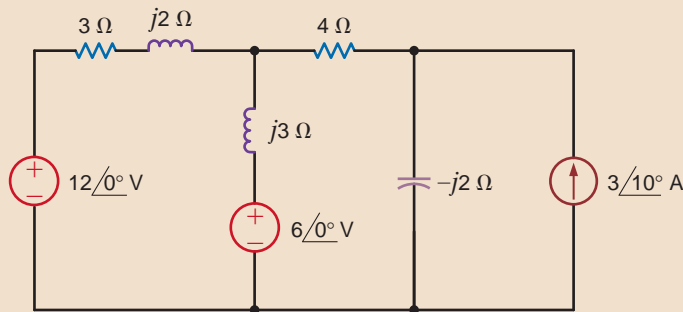


Figure E9.6

**ANSWER:**  $P_{4\Omega} = 9.86 \text{ W};$   
 $P_{3\Omega} = 0.91 \text{ W}.$

## 9.3

### Maximum Average Power Transfer

In our study of resistive networks, we addressed the problem of maximum power transfer to a resistive load. We showed that if the network excluding the load was represented by a Thévenin equivalent circuit, maximum power transfer would result if the value of the load resistor was equal to the Thévenin equivalent resistance (i.e.,  $R_L = R_{Th}$ ). We will now reexamine this issue within the present context to determine the load impedance for the network shown in Fig. 9.6 that will result in maximum average power being absorbed by the load impedance  $Z_L$ .

The equation for average power at the load is

$$P_L = \frac{1}{2} V_L I_L \cos(\theta_{v_L} - \theta_{i_L}) \tag{9.11}$$

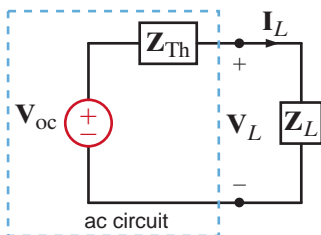


Figure 9.6

Circuit used to examine maximum average power transfer.

The phasor current and voltage at the load are given by the expressions

$$I_L = \frac{V_{oc}}{Z_{Th} + Z_L} \tag{9.12}$$

$$V_L = \frac{V_{oc} Z_L}{Z_{Th} + Z_L} \tag{9.13}$$

where

$$Z_{Th} = R_{Th} + jX_{Th} \tag{9.14}$$

and

$$Z_L = R_L + jX_L \tag{9.15}$$

The magnitude of the phasor current and voltage are given by the expressions

$$I_L = \frac{V_{oc}}{[(R_{Th} + R_L)^2 + (X_{Th} + X_L)^2]^{1/2}} \quad 9.16$$

$$V_L = \frac{V_{oc}(R_L^2 + X_L^2)^{1/2}}{[(R_{Th} + R_L)^2 + (X_{Th} + X_L)^2]^{1/2}} \quad 9.17$$

The phase angles for the phasor current and voltage are contained in the quantity  $(\theta_{v_L} - \theta_{i_L})$ . Note also that  $\theta_{v_L} - \theta_{i_L} = \theta_{Z_L}$  and, in addition,

$$\cos \theta_{Z_L} = \frac{R_L}{(R_L^2 + X_L^2)^{1/2}} \quad 9.18$$

Substituting Eqs. (9.16) to (9.18) into Eq. (9.11) yields

$$P_L = \frac{1}{2} \frac{V_{oc}^2 R_L}{(R_{Th} + R_L)^2 + (X_{Th} + X_L)^2} \quad 9.19$$

which could, of course, be obtained directly from Eq. (9.16) using  $P_L = \frac{1}{2} I_L^2 R_L$ . Once again, a little forethought will save us some work. From the standpoint of maximizing  $P_L$ ,  $V_{oc}$  is a constant. The quantity  $(X_{Th} + X_L)$  absorbs no power, and therefore any nonzero value of this quantity only serves to reduce  $P_L$ . Hence, we can eliminate this term by selecting  $X_L = -X_{Th}$ . Our problem then reduces to maximizing

$$P_L = \frac{1}{2} \frac{V_{oc}^2 R_L}{(R_L + R_{Th})^2} \quad 9.20$$

However, this is the same quantity we maximized in the purely resistive case by selecting  $R_L = R_{Th}$ . Therefore, for maximum average power transfer to the load shown in Fig. 9.6,  $Z_L$  should be chosen so that

$$Z_L = R_L + jX_L = R_{Th} - jX_{Th} = Z_{Th}^* \quad 9.21$$

Finally, if the load impedance is purely resistive (i.e.,  $X_L = 0$ ), the condition for maximum average power transfer can be derived via the expression

$$\frac{dP_L}{dR_L} = 0$$

where  $P_L$  is the expression in Eq. (9.19) with  $X_L = 0$ . The value of  $R_L$  that maximizes  $P_L$  under the condition  $X_L = 0$  is

$$R_L = \sqrt{R_{Th}^2 + X_{Th}^2} \quad 9.22$$

## [hint]

This impedance-matching concept is an important issue in the design of high-speed computer chips and motherboards. For today's high-speed chips with internal clocks running at about 3 GHz and motherboards with a bus speed above 1 GHz, impedance matching is necessary in order to obtain the required speed for signal propagation. Although this high-speed transmission line is based on a distributed circuit (discussed later in electrical engineering courses), the impedance-matching technique for the transmission line is the same as that of the lumped parameter circuit for maximum average power transfer.

## Problem-Solving Strategy

**Step 1.** Remove the load  $Z_L$  and find the Thévenin equivalent for the remainder of the circuit.

**Step 2.** Construct the circuit shown in Fig. 9.6.

**Step 3.** Select  $Z_L = Z_{Th}^* = R_{Th} - jX_{Th}$ , and then  $I_L = V_{oc}/2 R_{Th}$  and the maximum

$$\text{average power transfer} = \frac{1}{2} I_L^2 R_{Th} = V_{oc}^2/8 R_{Th}.$$

### Maximum Average Power Transfer

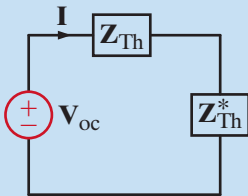
## EXAMPLE 9.5

### SOLUTION

### [hint]

In this Thévenin analysis,

1. Remove  $Z_L$  and find the voltage across the open terminals,  $V_{oc}$ .
2. Determine the impedance  $Z_{Th}$  at the open terminals with all independent sources made zero.
3. Construct the following circuit and determine  $I$  and  $P_L$ .



Given the circuit in Fig. 9.7a, we wish to find the value of  $Z_L$  for maximum average power transfer. In addition, we wish to find the value of the maximum average power delivered to the load.

To solve the problem, we form a Thévenin equivalent at the load. The circuit in Fig. 9.7b is used to compute the open-circuit voltage

$$V_{oc} = \frac{4 \angle 0^\circ (2)}{6 + j1} (4) = 5.26 \angle -9.46^\circ \text{ V}$$

The Thévenin equivalent impedance can be derived from the circuit in Fig. 9.7c. As shown in the figure,

$$Z_{Th} = \frac{4(2 + j1)}{6 + j1} = 1.41 + j0.43 \Omega$$

Therefore,  $Z_L$  for maximum average power transfer is

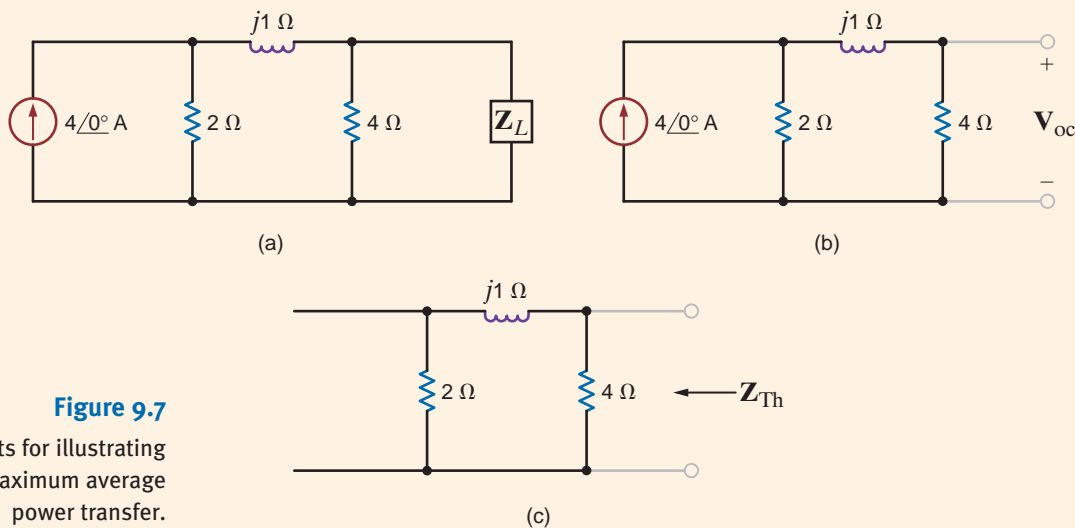
$$Z_L = 1.41 - j0.43 \Omega$$

With  $Z_L$  as given previously, the current in the load is

$$I = \frac{5.26 \angle -9.46^\circ}{2.82} = 1.87 \angle -9.46^\circ \text{ A}$$

Therefore, the maximum average power transferred to the load is

$$P_L = \frac{1}{2} I_M^2 R_L = \frac{1}{2} (1.87)^2 (1.41) = 2.47 \text{ W}$$



**Figure 9.7**  
Circuits for illustrating  
maximum average  
power transfer.

## EXAMPLE 9.6

### SOLUTION

For the circuit shown in Fig. 9.8a, we wish to find the value of  $Z_L$  for maximum average power transfer. In addition, let us determine the value of the maximum average power delivered to the load.

We will first reduce the circuit, with the exception of the load, to a Thévenin equivalent circuit. The open-circuit voltage can be computed from Fig. 9.8b. The equations for the circuit are

$$\begin{aligned} V'_x + 4 &= (2 + j4)I_1 \\ V'_x &= -2I_1 \end{aligned}$$

Solving for  $\mathbf{I}_1$ , we obtain

$$\mathbf{I}_1 = \frac{1 \angle -45^\circ}{\sqrt{2}}$$

The open-circuit voltage is then

$$\begin{aligned} \mathbf{V}_{oc} &= 2\mathbf{I}_1 - 4 \angle 0^\circ \\ &= \sqrt{2} \angle -45^\circ - 4 \angle 0^\circ \\ &= -3 - j1 \\ &= +3.16 \angle -161.57^\circ \text{ V} \end{aligned}$$

The short-circuit current can be derived from Fig. 9.8c. The equations for this circuit are

$$\begin{aligned} \mathbf{V}_x'' + 4 &= (2 + j4)\mathbf{I} - 2\mathbf{I}_{sc} \\ -4 &= -2\mathbf{I} + (2 - j2)\mathbf{I}_{sc} \\ \mathbf{V}_x'' &= -2(\mathbf{I} - \mathbf{I}_{sc}) \end{aligned}$$

Solving these equations for  $\mathbf{I}_{sc}$  yields

$$\mathbf{I}_{sc} = -(1 + j2) \text{ A}$$

The Thévenin equivalent impedance is then

$$\mathbf{Z}_{Th} = \frac{\mathbf{V}_{oc}}{\mathbf{I}_{sc}} = \frac{3 + j1}{1 + j2} = 1 - j1 \Omega$$

Therefore, for maximum average power transfer the load impedance should be

$$\mathbf{Z}_L = 1 + j1 \Omega$$

The current in this load  $\mathbf{Z}_L$  is then

$$\mathbf{I}_L = \frac{\mathbf{V}_{oc}}{\mathbf{Z}_{Th} + \mathbf{Z}_L} = \frac{-3 - j1}{2} = 1.58 \angle -161.57^\circ \text{ A}$$

Hence, the maximum average power transferred to the load is

$$\begin{aligned} P_L &= \frac{1}{2}(1.58)^2(1) \\ &= 1.25 \text{ W} \end{aligned}$$

[hint]

When there is a dependent source, both  $\mathbf{V}_{oc}$  and  $\mathbf{I}_{sc}$  must be found and  $\mathbf{Z}_{Th}$  computed from the equation

$$\mathbf{Z}_{Th} = \frac{\mathbf{V}_{oc}}{\mathbf{I}_{sc}}$$

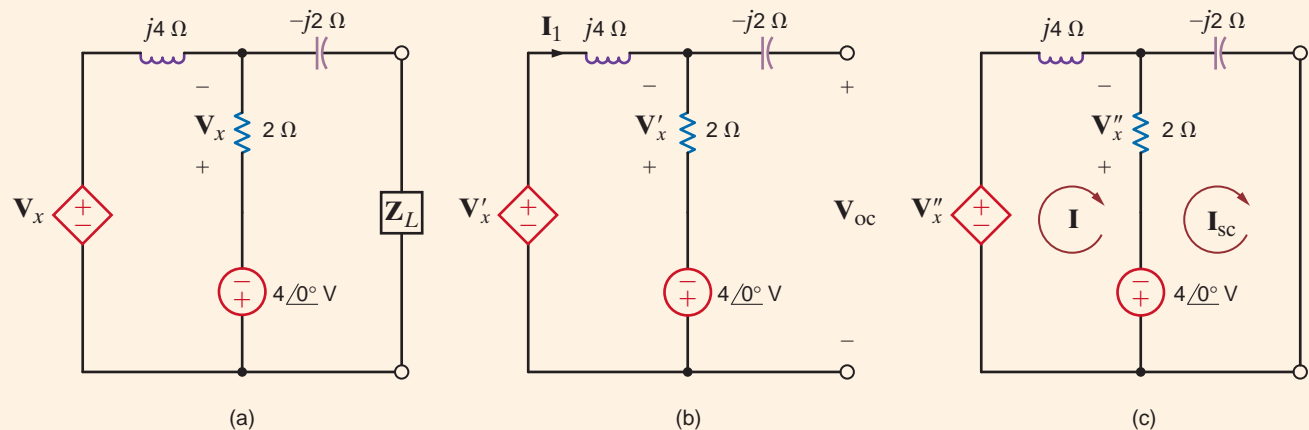


Figure 9.8

Circuits for illustrating maximum average power transfer.

## Learning Assessments

**Eg.7** Given the network in Fig. E9.7, find  $Z_L$  for maximum average power transfer and the maximum average power transferred to the load.

**ANSWER:**  $Z_L = 1 + j1 \Omega$ ;  
 $P_L = 45 \text{ W}$ .

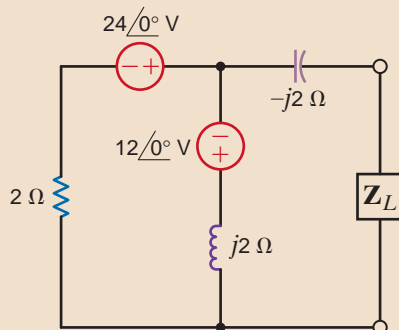


Figure E9.7

**Eg.8** Find  $Z_L$  for maximum average power transfer and the maximum average power transferred to the load in the network in Fig. E9.8.

**ANSWER:**  $Z_L = 2 - j2 \Omega$ ;  
 $P_L = 45 \text{ W}$ .

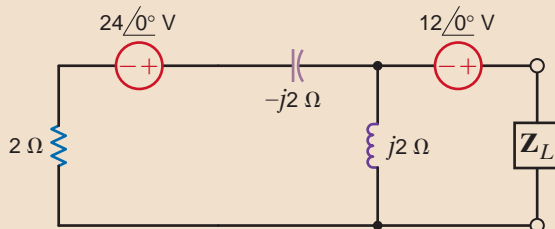


Figure E9.8

**Eg.9** Determine  $Z_L$  for maximum average power transfer and the value of the maximum average power transferred to  $Z_L$  in Fig. E9.9.

**ANSWER:**  
 $Z_L = 4.79 - j1.68 \Omega$ ;  
 $P_L = 14.26 \text{ W}$ .

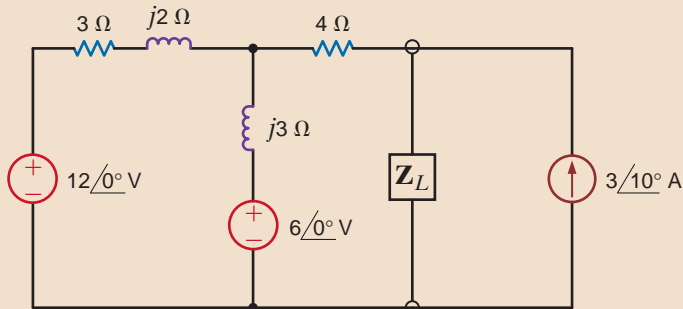


Figure E9.9

**Eg.10** Find  $Z_L$  for maximum average power transfer and the value of the maximum average power transferred to  $Z_L$  in Fig. E9.10.

**ANSWER:**  
 $Z_L = 5.67 - j2.2 \Omega$ ;  
 $P_L = 9.29 \text{ W}$ .

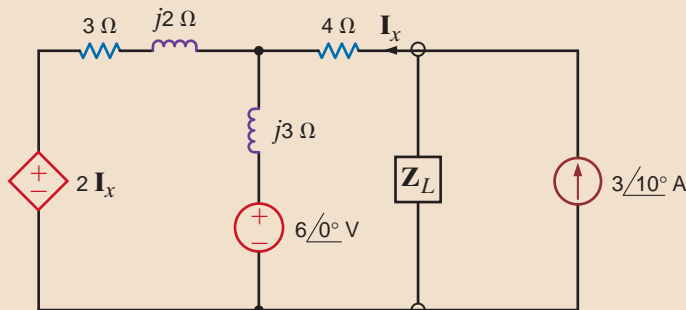


Figure E9.10

## 9.4

## Effective or rms Values

In the preceding sections of this chapter, we have shown that the average power absorbed by a resistive load is directly dependent on the type, or types, of sources that are delivering power to the load. For example, if the source was dc, the average power absorbed was  $I^2R$ , and if the source was sinusoidal, the average power was  $1/2 I_M^2 R$ . Although these two types of waveforms are extremely important, they are by no means the only waveforms we will encounter in circuit analysis. Therefore, a technique by which we can compare the *effectiveness* of different sources in delivering power to a resistive load would be quite useful.

To accomplish this comparison, we define what is called the *effective value of a periodic waveform*, representing either voltage or current. Although either quantity could be used, we will employ current in the definition. Hence, we define the effective value of a periodic current as a constant or dc value, which as current would deliver the same average power to a resistor  $R$ . Let us call the constant current  $I_{\text{eff}}$ . Then the average power delivered to a resistor as a result of this current is

$$P = I_{\text{eff}}^2 R$$

Similarly, the average power delivered to a resistor by a periodic current  $i(t)$  is

$$P = \frac{1}{T} \int_{t_0}^{t_0+T} i^2(t) R dt$$

Equating these two expressions, we find that

$$I_{\text{eff}} = \sqrt{\frac{1}{T} \int_{t_0}^{t_0+T} i^2(t) dt} \quad 9.23$$

Note that this effective value is found by first determining the *square* of the current, then computing the average or *mean* value, and finally taking the square *root*. Thus, in “reading” the mathematical Eq. (9.23), we are determining the root mean square, which we abbreviate as rms, and therefore  $I_{\text{eff}}$  is called  $I_{\text{rms}}$ .

Since dc is a constant, the rms value of dc is simply the constant value. Let us now determine the rms value of other waveforms. The most important waveform is the sinusoid, and therefore, we address this particular one in the following example.

We wish to compute the rms value of the waveform  $i(t) = I_M \cos(\omega t - \theta)$ , which has a period of  $T = 2\pi/\omega$ .

Substituting these expressions into Eq. (9.23) yields

$$I_{\text{rms}} = \left[ \frac{1}{T} \int_0^T I_M^2 \cos^2(\omega t - \theta) dt \right]^{1/2}$$

Using the trigonometric identity

$$\cos^2\phi = \frac{1}{2} + \frac{1}{2} \cos 2\phi$$

we find that the preceding equation can be expressed as

$$I_{\text{rms}} = I_M \left\{ \frac{\omega}{2\pi} \int_0^{2\pi/\omega} \left[ \frac{1}{2} + \frac{1}{2} \cos(2\omega t - 2\theta) \right] dt \right\}^{1/2}$$

Since we know that the average or mean value of a cosine wave is zero,

$$\begin{aligned} I_{\text{rms}} &= I_M \left( \frac{\omega}{2\pi} \int_0^{2\pi/\omega} \frac{1}{2} dt \right)^{1/2} \\ &= I_M \left[ \frac{\omega}{2\pi} \left( \frac{t}{2} \right) \Big|_0^{2\pi/\omega} \right]^{1/2} = \frac{I_M}{\sqrt{2}} \end{aligned} \quad 9.24$$

## EXAMPLE

## 9.7

## SOLUTION

Therefore, the rms value of a sinusoid is equal to the maximum value divided by  $\sqrt{2}$ . Hence, a sinusoidal current with a maximum value of  $I_M$  delivers the same average power to a resistor  $R$  as a dc current with a value of  $I_M/\sqrt{2}$ . Recall that earlier a phasor  $\mathbf{X}$  was defined as  $X_M \angle \theta$  for a sinusoidal wave of the form  $X_M \cos(\omega t + \theta)$ . This phasor can also be represented as  $X_M/\sqrt{2} \angle \theta$  if the units are given in rms. For example,  $120 \angle 30^\circ$  V rms is equivalent to  $170 \angle 30^\circ$  V.

On using the rms values for voltage and current, the average power can be written, in general, as

$$P = V_{\text{rms}} I_{\text{rms}} \cos(\theta_v - \theta_i) \quad 9.25$$

The power absorbed by a resistor  $R$  is

$$P = I_{\text{rms}}^2 R = \frac{V_{\text{rms}}^2}{R} \quad 9.26$$

In dealing with voltages and currents in numerous electrical applications, it is important to know whether the values quoted are maximum, average, rms, or what. We are familiar with the 120-V ac electrical outlets in our home. In this case, the 120 V is the rms value of the voltage in our home. The maximum or peak value of this voltage is  $120\sqrt{2} = 170$  V. The voltage at our electrical outlets could be written as  $170 \cos 377t$  V. The maximum or peak value must be given if we write the voltage in this form. There should be no question in our minds that this is the peak value. It is common practice to specify the voltage rating of ac electrical devices in terms of the rms voltage. For example, if you examine an incandescent light bulb, you will see a voltage rating of 120 V, which is the rms value. For now we will add an rms to our voltages and currents to indicate that we are using rms values in our calculations.

### EXAMPLE

## 9.8

### SOLUTION

Determine the rms value of the current waveform in Fig. 9.9 and use this value to compute the average power delivered to a  $2\text{-}\Omega$  resistor through which this current is flowing.

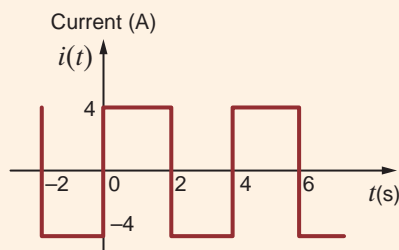
The current waveform is periodic with a period of  $T = 4$  s. The rms value is

$$\begin{aligned} I_{\text{rms}} &= \left\{ \frac{1}{4} \left[ \int_0^2 (4)^2 dt + \int_2^4 (-4)^2 dt \right] \right\}^{1/2} \\ &= \left[ \frac{1}{4} \left( 16t \Big|_0^2 + 16t \Big|_2^4 \right) \right]^{1/2} \\ &= 4 \text{ A} \end{aligned}$$

The average power delivered to a  $2\text{-}\Omega$  resistor with this current is

$$P = I_{\text{rms}}^2 R = (4)^2(2) = 32 \text{ W}$$

**Figure 9.9**  
Waveform used to  
illustrate rms values.





We wish to compute the rms value of the voltage waveform shown in Fig. 9.10.

**EXAMPLE**

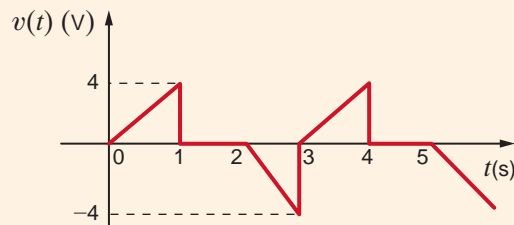
The waveform is periodic with period  $T = 3$  s. The equation for the voltage in the time frame  $0 \leq t \leq 3$  s is

**SOLUTION 9.9**

$$v(t) = \begin{cases} 4t \text{ V} & 0 < t \leq 1 \text{ s} \\ 0 \text{ V} & 1 < t \leq 2 \text{ s} \\ -4t + 8 \text{ V} & 2 < t \leq 3 \text{ s} \end{cases}$$

The rms value is

$$\begin{aligned} V_{\text{rms}} &= \left\{ \frac{1}{3} \left[ \int_0^1 (4t)^2 dt + \int_1^2 (0)^2 dt + \int_2^3 (8 - 4t)^2 dt \right] \right\}^{1/2} \\ &= \left[ \frac{1}{3} \left( \frac{16t^3}{3} \Big|_0^1 + \left( 64t - \frac{64t^2}{2} + \frac{16t^3}{3} \right) \Big|_2^3 \right) \right]^{1/2} \\ &= 1.89 \text{ V} \end{aligned}$$



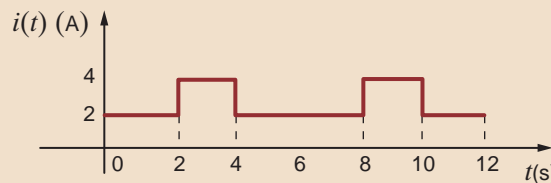
**Figure 9.10**

Waveform used to illustrate rms values.

## Learning Assessments

**Eg.11** The current waveform in Fig. E9.11 is flowing through a  $4\text{-}\Omega$  resistor. Compute the average power delivered to the resistor.

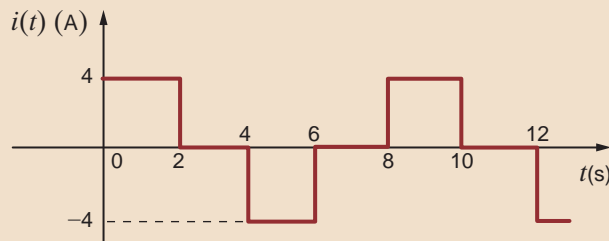
**ANSWER:**  $P = 32 \text{ W}$ .



**Figure E9.11**

**Eg.12** The current waveform in Fig. E9.12 is flowing through a  $10\text{-}\Omega$  resistor. Determine the average power delivered to the resistor.

**ANSWER:**  $P = 80 \text{ W}$ .



**Figure E9.12**

**E9.13** The voltage across a 2-W resistor is given by the waveform in Fig. E9.13. Find the average power absorbed by the resistor.

**ANSWER:**  $P = 38.22$  W.

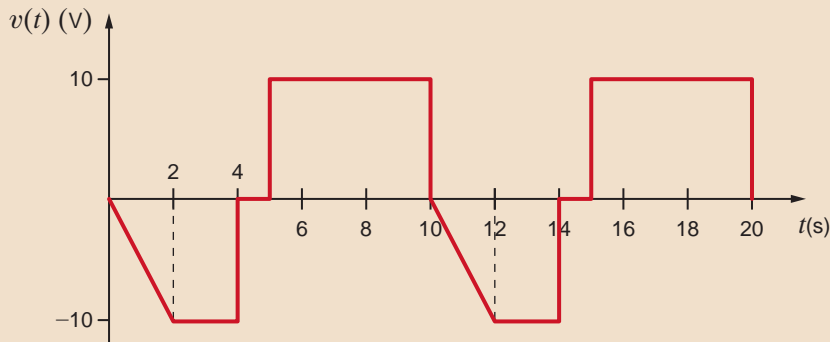


Figure E9.13

**E9.14** Compute the rms value of the voltage waveform shown in Fig. E9.14.

**ANSWER:**

$$V_{\text{rms}} = 1.633 \text{ V.}$$

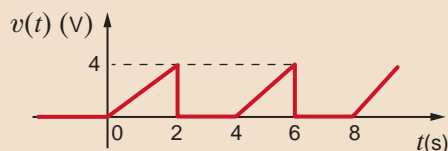


Figure E9.14

## 9.5

### The Power Factor

The power factor is a very important quantity. Its importance stems in part from the economic impact it has on industrial users of large amounts of power. In this section we carefully define this term and then illustrate its significance via some practical examples.

In Section 9.4 we showed that a load operating in the ac steady state is delivered an average power of

$$P = V_{\text{rms}} I_{\text{rms}} \cos(\theta_v - \theta_i)$$

We will now further define the terms in this important equation. The product  $V_{\text{rms}} I_{\text{rms}}$  is referred to as the *apparent power*. Although the term  $\cos(\theta_v - \theta_i)$  is a dimensionless quantity, and the units of  $P$  are watts, apparent power is normally stated in volt-amperes (VA) or kilovolt-amperes (kVA) to distinguish it from average power.

We now define the *power factor* (pf) as the ratio of the average power to the apparent power; that is,

$$\text{pf} = \frac{P}{V_{\text{rms}} I_{\text{rms}}} = \cos(\theta_v - \theta_i) \quad 9.27$$

where

$$\cos(\theta_v - \theta_i) = \cos\theta_{Z_L} \quad 9.28$$

The angle  $\theta_v - \theta_i = \theta_{Z_L}$  is the phase angle of the load impedance and is often referred to as the *power factor angle*. The two extreme positions for this angle correspond to a purely resistive load where  $\theta_{Z_L} = 0$  and the pf is 1, and the purely reactive load where  $\theta_{Z_L} = \pm 90^\circ$  and the pf is 0. It is, of course, possible to have a unity pf for a load containing  $R$ ,  $L$ , and  $C$  elements if the values of the circuit elements are such that a zero phase angle is obtained at the particular operating frequency.

There is, of course, a whole range of power factor angles between  $\pm 90^\circ$  and  $0^\circ$ . If the load is an equivalent  $RC$  combination, then the pf angle lies between the limits  $-90^\circ < \theta_{Z_L} < 0^\circ$ . On the other hand, if the load is an equivalent  $RL$  combination, then the pf angle lies between the limits  $0 < \theta_{Z_L} < 90^\circ$ . Obviously, confusion in identifying the type of load could result, due to the fact that  $\cos\theta_{Z_L} = \cos(-\theta_{Z_L})$ . To circumvent this problem, the pf is said to be either *leading* or *lagging*, where these two terms refer to the phase of the current with respect to the voltage. Since the current leads the voltage in an  $RC$  load, the load has a leading pf.

In a similar manner, an  $RL$  load has a lagging pf; therefore, load impedances of  $\mathbf{Z}_L = 1 - j1 \Omega$  and  $\mathbf{Z}_L = 2 + j1 \Omega$  have power factors of  $\cos(-45^\circ) = 0.707$  leading and  $\cos(26.57^\circ) = 0.894$  lagging, respectively.

An industrial load consumes 88 kW at a pf of 0.707 lagging from a 480-V rms line. The transmission line resistance from the power company's transformer to the plant is  $0.08 \Omega$ . Let us determine the power that must be supplied by the power company (a) under present conditions and (b) if the pf is somehow changed to 0.90 lagging. (It is economically advantageous to have a power factor as close to one as possible.)

- a. The equivalent circuit for these conditions is shown in Fig. 9.11. Using Eq. (9.27), we obtain the magnitude of the rms current into the plant:

$$\begin{aligned} I_{\text{rms}} &= \frac{P_L}{(\text{pf})(V_{\text{rms}})} \\ &= \frac{(88)(10^3)}{(0.707)(480)} \\ &= 259.3 \text{ A rms} \end{aligned}$$

The power that must be supplied by the power company is

$$\begin{aligned} P_S &= P_L + (0.08)I_{\text{rms}}^2 \\ &= 88,000 + (0.08)(259.3)^2 \\ &= 93.38 \text{ kW} \end{aligned}$$

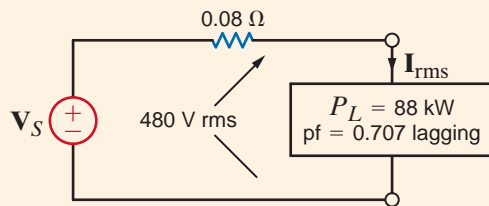
- b. Suppose now that the pf is somehow changed to 0.90 lagging but the voltage remains constant at 480 V. The rms load current for this condition is

$$\begin{aligned} I_{\text{rms}} &= \frac{P_L}{(\text{pf})(V_{\text{rms}})} \\ &= \frac{(88)(10^3)}{(0.90)(480)} \\ &= 203.7 \text{ A rms} \end{aligned}$$

Under these conditions, the power company must generate

$$\begin{aligned} P_S &= P_L + (0.08)I_{\text{rms}}^2 \\ &= 88,000 + (0.08)(203.7)^2 \\ &= 91.32 \text{ kW} \end{aligned}$$

Note carefully the difference between the two cases. A simple change in the pf of the load from 0.707 lagging to 0.90 lagging has had an interesting effect. Note that in the first case the power company must generate 93.38 kW in order to supply the plant with 88 kW of power because the low power factor means that the line losses will be high—5.38 kW. However, in the second case the power company need only generate 91.32 kW in order to supply the plant with its required power, and the corresponding line losses are only 3.32 kW.



## EXAMPLE 9.10

### SOLUTION

#### [hint]

Technique

1. Given  $P_L$ , pf, and  $V_{\text{rms}}$ , determine  $I_{\text{rms}}$ .
2. Then  $P_S = P_L + I_{\text{rms}}^2 R_{\text{line}}$ , where  $R_{\text{line}}$  is the line resistance.

**Figure 9.11**

Example circuit for examining changes in power factor.

Example 9.10 clearly indicates the economic impact of the load's power factor. The cost of producing electricity for a large electric utility can easily be in the billions of dollars. A low power factor at the load means that the utility generators must be capable of carrying more current at constant voltage, and they must also supply power for higher  $I_{\text{rms}}^2 R_{\text{line}}$  losses than would be required if the load's power factor were high. Since line losses represent energy expended in heat and benefit no one, the utility will insist that a plant maintain a high pf, typically 0.9 lagging, and adjust the rate it charges a customer that does not conform to this requirement. We will demonstrate a simple and economical technique for achieving this power factor correction in a future section.

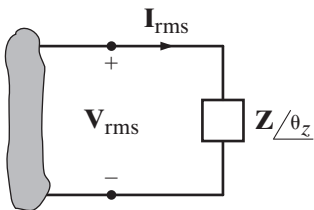
## Learning Assessment

**Eg.15** An industrial load consumes 100 kW at 0.707 pf lagging. The 60-Hz line voltage at the load is  $480 \angle 0^\circ$  V rms. The transmission-line resistance between the power company transformer and the load is  $0.1 \Omega$ . Determine the power savings that could be obtained if the pf is changed to 0.94 lagging.

**ANSWER:** Power saved is 3.771 kW.

## 9.6

### Complex Power



**Figure 9.12**

Circuit used to explain power relationships.

In our study of ac steady-state power, it is convenient to introduce another quantity, which is commonly called *complex power*. To develop the relationship between this quantity and others we have presented in the preceding sections, consider the circuit shown in Fig. 9.12.

The complex power is defined to be

$$\mathbf{S} = \mathbf{V}_{\text{rms}} \mathbf{I}_{\text{rms}}^* \quad 9.29$$

where  $\mathbf{I}_{\text{rms}}^*$  refers to the complex conjugate of  $\mathbf{I}_{\text{rms}}$ ; that is, if  $\mathbf{I}_{\text{rms}} = I_{\text{rms}} \angle \theta_i = I_R + jI_I$ , then  $\mathbf{I}_{\text{rms}}^* = I_{\text{rms}} \angle -\theta_i = I_R - jI_I$ . Complex power is then

$$\mathbf{S} = V_{\text{rms}} \angle \theta_v I_{\text{rms}} \angle -\theta_i = V_{\text{rms}} I_{\text{rms}} \angle \theta_v - \theta_i \quad 9.30$$

or

$$\mathbf{S} = V_{\text{rms}} I_{\text{rms}} \cos(\theta_v - \theta_i) + jV_{\text{rms}} I_{\text{rms}} \sin(\theta_v - \theta_i) \quad 9.31$$

where, of course,  $\theta_v - \theta_i = \theta_Z$ . We note from Eq. (9.31) that the real part of the complex power is simply the *real* or *average power*. The imaginary part of  $\mathbf{S}$  we call the *reactive* or *quadrature power*. Therefore, complex power can be expressed in the form

$$\mathbf{S} = P + jQ \quad 9.32$$

where

$$P = \text{Re}(\mathbf{S}) = V_{\text{rms}} I_{\text{rms}} \cos(\theta_v - \theta_i) \quad 9.33$$

$$Q = \text{Im}(\mathbf{S}) = V_{\text{rms}} I_{\text{rms}} \sin(\theta_v - \theta_i) \quad 9.34$$

As shown in Eq. (9.31), the magnitude of the complex power is what we have called the *apparent power*, and the phase angle for complex power is simply the power factor angle. Complex power, like apparent power, is measured in volt-amperes, real power is measured in watts, and to distinguish  $Q$  from the other quantities, which in fact have the same dimensions, it is measured in volt-amperes reactive, or var.

Now let's examine the expressions in Eqs. (9.33) and (9.34) in more detail for our three basic circuit elements:  $R$ ,  $L$ , and  $C$ . For a resistor,  $\theta_v - \theta_i = 0^\circ$ ,  $\cos(\theta_v - \theta_i) = 1$ , and

$\sin(\theta_v - \theta_i) = 0$ . As a result, a resistor absorbs real power ( $P > 0$ ) but does not absorb any reactive power ( $Q = 0$ ). For an inductor,  $\theta_v - \theta_i = 90^\circ$  and

$$\begin{aligned} P &= V_{\text{rms}} I_{\text{rms}} \cos(90^\circ) = 0 \\ Q &= V_{\text{rms}} I_{\text{rms}} \sin(90^\circ) > 0 \end{aligned}$$

An inductor absorbs reactive power but does not absorb real power. Repeating for a capacitor, we get  $\theta_v - \theta_i = -90^\circ$  and

$$\begin{aligned} P &= V_{\text{rms}} I_{\text{rms}} \cos(-90^\circ) = 0 \\ Q &= V_{\text{rms}} I_{\text{rms}} \sin(-90^\circ) < 0 \end{aligned}$$

A capacitor does not absorb any real power; however, the reactive power is now negative. How do we interpret the negative reactive power? Refer to Fig. 9.12 and note that the voltage and current are specified such that they satisfy the passive sign convention. In this case, the product of the voltage and current gives us the power absorbed by the impedance in that figure. If the reactive power absorbed by the capacitor is negative, then the capacitor must be supplying reactive power. The fact that capacitors are a source of reactive power will be utilized in the next section, on power factor correction.

We see that resistors absorb only real power, while inductors and capacitors absorb only reactive power. What is a fundamental difference between these elements? Resistors only absorb energy. On the other hand, capacitors and inductors store energy and then release it back to the circuit. Since inductors and capacitors absorb only reactive power and not real power, we can conclude that reactive power is related to energy storage in these elements.

Now let's substitute  $\mathbf{V}_{\text{rms}} = \mathbf{I}_{\text{rms}} * \mathbf{Z}$  into Eq. (9.29). Multiplying  $\mathbf{I}_{\text{rms}} * \mathbf{I}_{\text{rms}}^* = I_{\text{rms}} \angle \theta_i * I_{\text{rms}} \angle -\theta_i$  yields  $I_{\text{rms}}^2$ . The complex power absorbed by an impedance can be obtained by multiplying the square of the rms magnitude of the current flowing through that impedance by the impedance.

$$\mathbf{S} = \mathbf{V}_{\text{rms}} \mathbf{I}_{\text{rms}}^* = (\mathbf{I}_{\text{rms}} \mathbf{Z}) \mathbf{I}_{\text{rms}}^* = \mathbf{I}_{\text{rms}} \mathbf{I}_{\text{rms}}^* \mathbf{Z} = I_{\text{rms}}^2 \mathbf{Z} = I_{\text{rms}}^2 (R + jX) = P + jQ \quad 9.35$$

Instead of substituting for  $\mathbf{V}_{\text{rms}}$  in Eq. (9.29), let's substitute for  $\mathbf{I}_{\text{rms}}$ :

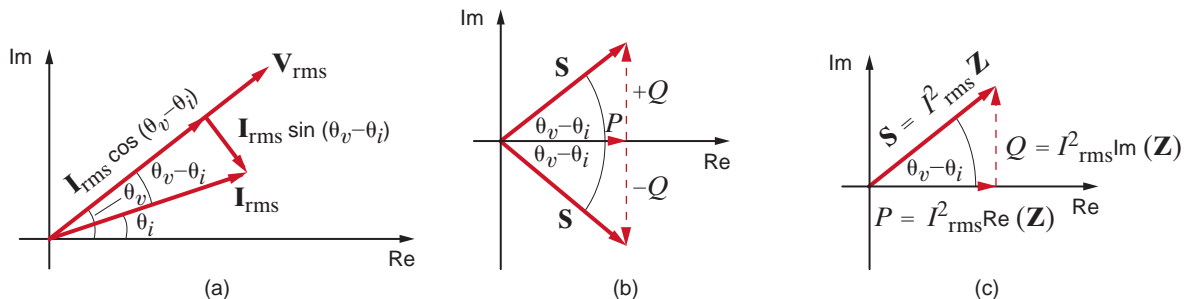
$$\mathbf{S} = \mathbf{V}_{\text{rms}} \mathbf{I}_{\text{rms}}^* = \mathbf{V}_{\text{rms}} \left( \frac{\mathbf{V}_{\text{rms}}}{\mathbf{Z}} \right)^* = \frac{V_{\text{rms}}^2}{\mathbf{Z}^*} = V_{\text{rms}}^2 \mathbf{Y}^* = V_{\text{rms}}^2 (G + jB)^* = P + jQ \quad 9.36$$

This expression tells us that we can calculate the complex power absorbed by an admittance by multiplying the square of the rms magnitude of the voltage across the admittance by the conjugate of the admittance. Suppose the box in Fig. 9.12 contains a capacitor. The admittance for a capacitor is  $j\omega C$ . Plugging into the equation above yields

$$\mathbf{S} = V_{\text{rms}}^2 (j\omega C)^* = -j\omega C V_{\text{rms}}^2 \quad 9.37$$

Note the negative sign on the complex power. This agrees with our previous statement that a capacitor does not absorb real power but is a source of reactive power.

The diagrams in Fig. 9.13 further explain the relationships among the various quantities of power. As shown in Fig. 9.13a, the phasor current can be split into two components: one



**Figure 9.13**

Diagram for illustrating power relationships.

that is in phase with  $\mathbf{V}_{\text{rms}}$  and one that is  $90^\circ$  out of phase with  $\mathbf{V}_{\text{rms}}$ . Eqs. (9.33) and (9.34) illustrate that the in-phase component produces the real power, and the  $90^\circ$  component, called the *quadrature component*, produces the reactive or quadrature power. In addition, Eqs. (9.33) and (9.34) indicate that

$$\tan(\theta_v - \theta_i) = \frac{Q}{P} \quad 9.38$$

which relates the pf angle to  $P$  and  $Q$  in what is called the *power triangle*.

The relationships among  $\mathbf{S}$ ,  $P$ , and  $Q$  can be expressed via the diagrams shown in Figs. 9.13b and c. In Fig. 9.13b we note the following conditions. If  $Q$  is positive, the load is inductive, the power factor is lagging, and the complex number  $\mathbf{S}$  lies in the first quadrant. If  $Q$  is negative, the load is capacitive, the power factor is leading, and the complex number  $\mathbf{S}$  lies in the fourth quadrant. If  $Q$  is zero, the load is resistive, the power factor is unity, and the complex number  $\mathbf{S}$  lies along the positive real axis. Fig. 9.13c illustrates the relationships expressed by Eqs. (9.35) to (9.37) for an inductive load.

In Chapter 1, we introduced Tellegen's theorem, which states that the sum of the powers absorbed by all elements in an electrical network is zero. Based on this theorem, we can also state that complex power is conserved in an ac network—the total complex power delivered to any number of individual loads is equal to the sum of the complex powers delivered to the loads, regardless of how loads are interconnected.

## Problem-Solving Strategy

### Determining P or S

If  $v(t)$  and  $i(t)$  are known and we wish to find  $P$  given an impedance  $\mathbf{Z}/\theta = R + jX$ , two viable approaches are as follows:

**Step 1.** Determine  $\mathbf{V}$  and  $\mathbf{I}$  and then calculate

$$P = V_{\text{rms}} I_{\text{rms}} \cos \theta \quad \text{or} \quad P = V_{\text{rms}} I_{\text{rms}} \cos(\theta_v - \theta_i)$$

**Step 2.** Use  $\mathbf{I}$  to calculate the real part of  $\mathbf{S}$ —that is,

$$P = R_e(\mathbf{S}) = I^2 R$$

The latter method may be easier to calculate than the former. However, if the imaginary part of the impedance,  $X$ , is not zero, then

$$P \neq \frac{V^2}{R}$$

which is a common mistake. Furthermore, the  $P$  and  $Q$  portions of  $\mathbf{S}$  are directly related to  $\mathbf{Z}/\theta$  and provide a convenient way in which to relate power, current, and impedance. That is,

$$\tan \theta = \frac{Q}{P}$$

$$\mathbf{S} = I^2 \mathbf{Z}$$

The following example illustrates the usefulness of  $\mathbf{S}$ .

### EXAMPLE 9.11

A load operates at 20 kW, 0.8 pf lagging. The load voltage is  $220 \angle 0^\circ$  V rms at 60 Hz. The impedance of the line is  $0.09 + j0.3 \Omega$ . We wish to determine the voltage and power factor at the input to the line.

**SOLUTION** The circuit diagram for this problem is shown in Fig. 9.14. As illustrated in Fig. 9.13,

$$S = \frac{P}{\cos \theta} = \frac{P}{\text{pf}} = \frac{20,000}{0.8} = 25,000 \text{ VA}$$

Therefore, at the load

$$\mathbf{S}_L = 25,000 \angle \theta = 25,000 \angle 36.87^\circ = 20,000 + j15,000 \text{ VA}$$

Since  $\mathbf{S}_L = \mathbf{V}_L \mathbf{I}_L^*$

$$\begin{aligned} \mathbf{I}_L &= \left[ \frac{25,000 \angle 36.87^\circ}{220 \angle 0^\circ} \right]^* \\ &= 113.64 \angle -36.87^\circ \text{ A rms} \end{aligned}$$

The complex power losses in the line are

$$\begin{aligned} \mathbf{S}_{\text{line}} &= I_L^2 \mathbf{Z}_{\text{line}} \\ &= (113.64)^2 (0.09 + j0.3) \\ &= 1162.26 + j3874.21 \text{ VA} \end{aligned}$$

As stated earlier, complex power is conserved, and, therefore, the complex power at the generator is

$$\begin{aligned} \mathbf{S}_S &= \mathbf{S}_L + \mathbf{S}_{\text{line}} \\ &= 21,162.26 + j18,874.21 \\ &= 28,356.25 \angle 41.73^\circ \text{ VA} \end{aligned}$$

Hence, the generator voltage is

$$\begin{aligned} V_S &= \frac{|\mathbf{S}_S|}{I_L} = \frac{28,356.25}{113.64} \\ &= 249.53 \text{ V rms} \end{aligned}$$

and the generator power factor is

$$\cos(41.73^\circ) = 0.75 \text{ lagging}$$

We could have solved this problem using KVL. For example, we calculated the load current as

$$\mathbf{I}_L = 113.64 \angle -36.87^\circ \text{ A rms}$$

Hence, the voltage drop in the transmission line is

$$\begin{aligned} \mathbf{V}_{\text{line}} &= (113.64 \angle -36.87^\circ)(0.09 + j0.3) \\ &= 35.59 \angle 36.43^\circ \text{ V rms} \end{aligned}$$

Therefore, the generator voltage is

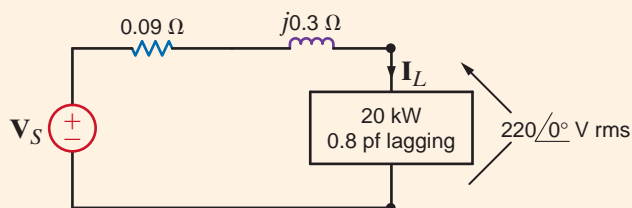
$$\begin{aligned} \mathbf{V}_S &= 220 \angle 0^\circ + 35.59 \angle 36.43^\circ \\ &= 249.53 \angle 4.86^\circ \text{ V rms} \end{aligned}$$

Hence, the generator voltage is 249.53 V rms. In addition,

$$\theta_v - \theta_i = 4.86^\circ - (-36.87^\circ) = 41.73^\circ$$

and therefore,

$$\text{pf} = \cos(41.73^\circ) = 0.75 \text{ lagging}$$



### [hint]

1. Use the given  $P_L$ ,  $\cos \theta$ , and  $V_L$  rms to obtain  $\mathbf{S}_L$  and  $\mathbf{I}_L$  based on Eqs. (9.33) and (9.29), respectively.
2. Use  $\mathbf{I}_L$  and  $\mathbf{Z}_{\text{line}}$  to obtain  $\mathbf{S}_{\text{line}}$  using Eq. (9.35).
3. Use  $\mathbf{S}_S = \mathbf{S}_{\text{line}} + \mathbf{S}_L$ .
4.  $V_S = \mathbf{S}_S / \mathbf{I}_L^*$  yields  $V_S$  and  $\theta_v$ . Since  $\mathbf{V}_S = V_S \angle \theta_v$  and  $\theta_i$  is the phase of  $\mathbf{I}_L$ ,  $\text{pf} = \cos(\theta_v - \theta_i)$ .

**Figure 9.14**

Example circuit for power analysis.

**EXAMPLE**  
**9.12**

Two networks  $A$  and  $B$  are connected by two conductors having a net impedance of  $\mathbf{Z} = 0 + j1 \Omega$ , as shown in Fig. 9.15. The voltages at the terminals of the networks are  $\mathbf{V}_A = 120 \angle 30^\circ \text{ V rms}$  and  $\mathbf{V}_B = 120 \angle 0^\circ \text{ V rms}$ . We wish to determine the average power flow between the networks and identify which is the source and which is the load.

**SOLUTION** As shown in Fig. 9.15,

$$\begin{aligned} \mathbf{I} &= \frac{\mathbf{V}_A - \mathbf{V}_B}{\mathbf{Z}} \\ &= \frac{120 \angle 30^\circ - 120 \angle 0^\circ}{j1} \\ &= 62.12 \angle 15^\circ \text{ A rms} \end{aligned}$$

The power delivered by network  $A$  is

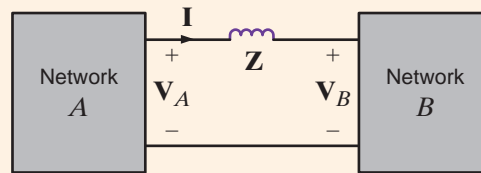
$$\begin{aligned} P_A &= |\mathbf{V}_A| |\mathbf{I}| \cos(\theta_{\mathbf{V}_A} - \theta_{\mathbf{I}}) \\ &= (120)(62.12) \cos(30^\circ - 15^\circ) \\ &= 7200.4 \text{ W} \end{aligned}$$

The power absorbed by network  $B$  is

$$\begin{aligned} P_B &= |\mathbf{V}_B| |\mathbf{I}| \cos(\theta_{\mathbf{V}_B} - \theta_{\mathbf{I}}) \\ &= (120)(62.12) \cos(0^\circ - 15^\circ) \\ &= 7200.4 \text{ W} \end{aligned}$$

If the power flow had actually been from network  $B$  to network  $A$ , the resultant signs on  $P_A$  and  $P_B$  would have been negative.

**Figure 9.15**  
Network used in  
Example 9.12.



## Learning Assessments

**E9.16** An industrial load requires 40 kW at 0.84 pf lagging. The load voltage is  $220 \angle 0^\circ \text{ V rms}$  at 60 Hz. The transmission-line impedance is  $0.1 + j0.25 \Omega$ . Determine the real and reactive power losses in the line and the real and reactive power required at the input to the transmission line.

**ANSWER:**

$$\begin{aligned} P_{\text{line}} &= 4.685 \text{ kW}; \\ Q_{\text{line}} &= 11.713 \text{ kvar}; \\ P_S &= 44.685 \text{ kW}; \\ Q_S &= 37.55 \text{ kvar}. \end{aligned}$$

**E9.17** A load requires 60 kW at 0.85 pf lagging. The 60-Hz line voltage at the load is  $220 \angle 0^\circ \text{ V rms}$ . If the transmission-line impedance is  $0.12 + j0.18 \Omega$ , determine the line voltage and power factor at the input.

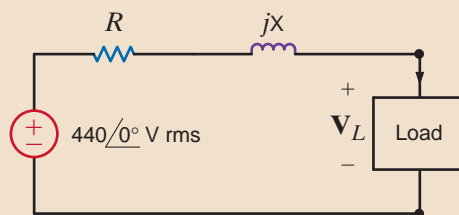
**ANSWER:**

$$\begin{aligned} \mathbf{V}_{\text{in}} &= 284.6 \angle 5.8^\circ \text{ V rms}; \\ \text{pf}_{\text{in}} &= 0.792 \text{ lagging}. \end{aligned}$$

**E9.18** The source in Fig. E9.18 supplies 40 kW at a power factor of 0.9 lagging. The real and reactive losses of the transmission-line feeder are 1.6 kW and 2.1 kvar, respectively. Find the load voltage and the real and reactive power absorbed by the load.

**ANSWER:**

$$\begin{aligned} \mathbf{V}_L &= 416.83 \angle -1.62^\circ \text{ V}; \\ P_L &= 38.4 \text{ kW}; \\ Q_L &= 17.27 \text{ kvar}. \end{aligned}$$

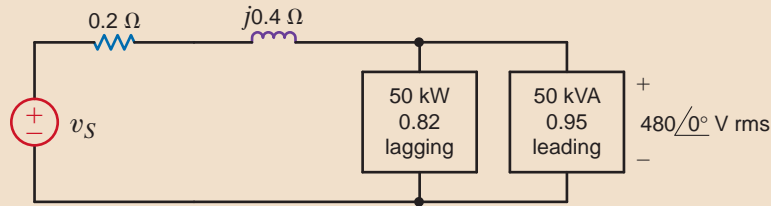


**Figure E9.18**



**Fig. E9.19** Find the power factor of the source and  $v_S(t)$  in Fig. E9.19, if  $f = 60$  Hz.

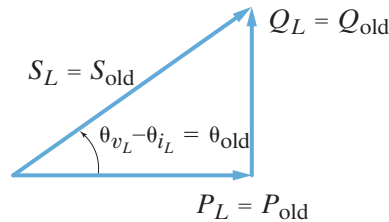
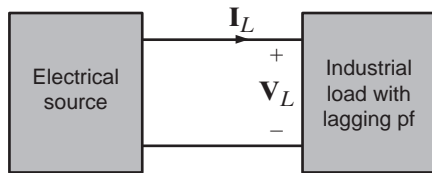
**ANSWER:**  $\text{pf}_{\text{in}} = 0.9457$   
lagging;  $v_S(t) =$   
 $765.94 \cos(377t - 7.77^\circ)$  V.



**Figure E9.19**

Industrial plants that require large amounts of power have a wide variety of loads. However, by nature the loads normally have a lagging power factor. In view of the results obtained in Example 9.10, we are naturally led to ask whether there is any convenient technique for raising the power factor of a load. Since a typical load may be a bank of induction motors or other expensive machinery, the technique for raising the pf should be an economical one to be feasible.

To answer the question we pose, consider the diagram in Fig. 9.16. A typical industrial load with a lagging pf is supplied by an electrical source. Also shown is the power triangle for the load. The load pf is  $\cos(\theta_{\text{old}})$ . If we want to improve the power factor, we need to reduce the angle shown on the power triangle in Fig. 9.16. From Eq. (9.38) we know that the tangent of this angle is equal to the ratio of  $Q$  to  $P$ . We could decrease the angle by increasing  $P$ . This is not an economically attractive solution because our increased power consumption would increase the monthly bill from the electric utility.



**Figure 9.16**

Diagram for power factor correction.

The other option we have to reduce this angle is to decrease  $Q$ . How can we decrease  $Q$ ? Recall from a previous section that a capacitor is a source of reactive power and does not absorb real power. Suppose we connect a capacitor in parallel with our industrial load as shown in Fig. 9.17. The corresponding power triangles for this diagram are also shown in Fig. 9.17. Let's define

$$\mathbf{S}_{\text{old}} = P_{\text{old}} + jQ_{\text{old}} = |\mathbf{S}_{\text{old}}| \angle \theta_{\text{old}} \quad \text{and} \quad \mathbf{S}_{\text{new}} = P_{\text{old}} + jQ_{\text{new}} = |\mathbf{S}_{\text{new}}| \angle \theta_{\text{new}}$$

Then with the addition of the capacitor,

$$\mathbf{S}_{\text{new}} = \mathbf{S}_{\text{old}} + \mathbf{S}_{\text{cap}}$$

Therefore,

$$\begin{aligned} \mathbf{S}_{\text{cap}} &= \mathbf{S}_{\text{new}} - \mathbf{S}_{\text{old}} \\ &= (P_{\text{new}} - jQ_{\text{new}}) - (P_{\text{old}} + jQ_{\text{old}}) \\ &= j(Q_{\text{new}} - Q_{\text{old}}) \\ &= j(Q_{\text{cap}}) \end{aligned}$$

## 9.7

### Power Factor Correction

Recall from Eqs. (9.36) and (9.37) that in general

$$\mathbf{S} = \mathbf{V}_{\text{rms}}^2 / \mathbf{Z}^*$$

and for a capacitor

$$\mathbf{Z}^* = -1/j\omega C$$

so that

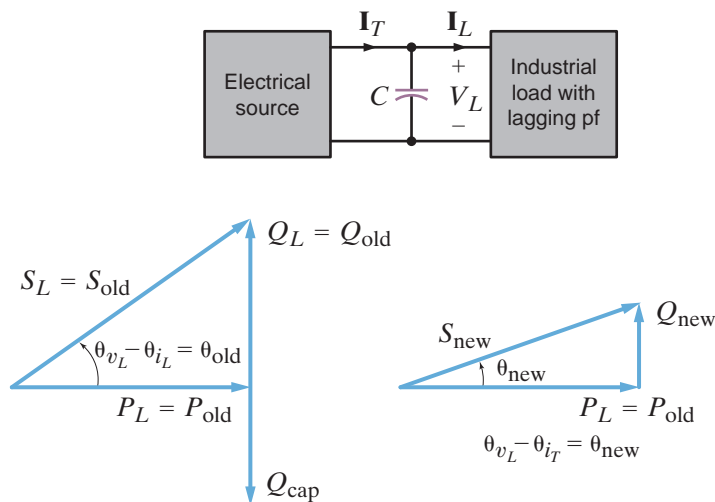
$$\mathbf{S}_{\text{cap}} = \mathbf{Q}_{\text{cap}} = -j\omega C V_{\text{rms}}^2$$

This equation can be used to find the required value of  $C$  in order to achieve the new specified power factor defined by the new power factor angle illustrated in Fig. 9.17.

Hence, we can obtain a particular power factor for the total load (industrial load and capacitor) simply by judiciously selecting a capacitor and placing it in parallel with the original load. In general, we want the power factor to be large, and therefore the power factor angle must be small [i.e., the larger the desired power factor, the smaller the angle  $(\theta_{v_L} - \theta_{i_T})$ ].

**Figure 9.17**

Power factor correction diagram including capacitor.



## EXAMPLE 9.13

Every month our electrical energy provider sends us a bill for the amount of electrical energy that we have consumed. The rate is often expressed in cents per kWh and consists of at least two components: (1) the demand charge, which covers the cost of lines, poles, transformers, and so on, and (2) the energy charge, which covers the cost to produce electric energy at power plants. The energy charge is the subject of the deregulation of the electric utility industry where you, as a customer, choose your energy provider.

It is common for an industrial facility operating at a poor power factor to be charged more by the electric utility providing electrical service. Let's suppose that our industrial facility operates at 277 V rms and requires 500 kW at a power factor of 0.75 lagging. Assume an energy charge of 2¢ per kWh and a demand charge of \$3.50 per kW per month if the power factor is between 0.9 lagging and unity and \$5 per kVA per month if the power factor is less than 0.9 lagging.

The monthly energy charge is  $500 \times 24 \times 30 \times \$0.02 = \$7200$ . Let's calculate the monthly demand charge with the 0.75 lagging power factor. The complex power absorbed by the industrial facility is

$$\mathbf{S}_{\text{old}} = \frac{500}{0.75} \angle \cos^{-1}(0.75) = 666.67 \angle 41.4^\circ = 500 + j441 \text{ kVA}$$

The monthly demand charge is  $666.67 \times \$5 = \$3333.35$ . The total bill from the energy provider is  $\$7200 + \$3333.35 = \$10533.35$  per month.

Let's consider installing a capacitor bank, as shown in Fig. 9.18, to correct the power factor and reduce our demand charge. The demand charge is such that we only need to correct the power factor to 0.9 lagging. The monthly demand charge will be the same whether the power factor is corrected to 0.9 or unity. The complex power absorbed by the industrial facility and capacitor bank will be

$$S_{\text{new}} = \frac{500}{0.9} / \cos^{-1}(0.9) = 555.6 / 25.84^\circ = 500 + j242.2 \text{ kVA}$$

The monthly demand charge for our industrial facility with the capacitor bank is  $500 \times \$3.50 = \$1750$  per month. The average power absorbed by our capacitor bank is negligible compared to the average power absorbed by the industrial facility, so our monthly energy charge remains \$7200 per month. With the capacitor bank installed, the total bill from the energy provider is  $\$7200 + \$1750 = \$8950$  per month.

How many kvars of capacitance do we need to correct the power factor to 0.9 lagging?

$$S_{\text{new}} - S_{\text{old}} = S_{\text{cap}} = (500 + j242.2) - (500 + j441) = -j198.8 \text{ kvar}$$

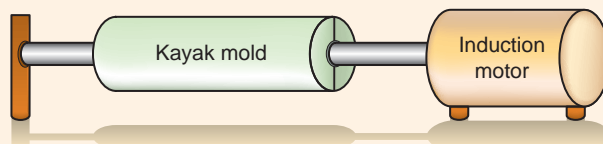
Let's assume that it costs \$100 per kvar to install the capacitor bank at the industrial facility for an installation cost of \$19,880. How long will it take to recover the cost of installing the capacitor bank? The difference in the monthly demand charge without the bank and with the bank is  $\$3333.35 - \$1750 = \$1583.35$ . Dividing this value into the cost of installing the bank yields  $\$19,880 / \$1583.35 = 12.56$  months.



**Figure 9.18**

A bank of capacitors.  
(Courtesy of Jeremy Nelms,  
Talquin Electric Cooperative,  
Inc.)

Plastic kayaks are manufactured using a process called rotomolding, which is diagrammed in Fig. 9.19. Molten plastic is injected into a mold, which is then spun on the long axis of the kayak until the plastic cools, resulting in a hollow one-piece craft. Suppose that the induction motors used to spin the molds consume 50 kW at a pf of 0.8 lagging from a  $220 / 0^\circ$ -V rms, 60-Hz line. We wish to raise the pf to 0.95 lagging by placing a bank of capacitors in parallel with the load.



## EXAMPLE 9.14

**Figure 9.19**

Rotomolding  
manufacturing process.

**SOLUTION** The circuit diagram for this problem is shown in Fig. 9.20.  $P_L = 50$  kW and since  $\cos^{-1}0.8 = 36.87^\circ$ ,  $\theta_{\text{old}} = 36.87^\circ$ . Therefore,

$$Q_{\text{old}} = P_{\text{old}} \tan \theta_{\text{old}} = (50)(10^3)(0.75) = 37.5 \text{ kvar}$$

Hence,

$$\mathbf{S}_{\text{old}} = P_{\text{old}} + jQ_{\text{old}} = 50,000 + j37,500$$

and

$$\mathbf{S}_{\text{cap}} = 0 + jQ_{\text{cap}}$$

Since the required power factor is 0.95,

$$\begin{aligned} \theta_{\text{new}} &= \cos^{-1}(\text{pf}_{\text{new}}) = \cos^{-1}(0.95) \\ &= 18.19^\circ \end{aligned}$$

Then

$$\begin{aligned} Q_{\text{new}} &= P_{\text{old}} \tan \theta_{\text{new}} \\ &= 50,000 \tan(18.19^\circ) \\ &= 16,430 \text{ var} \end{aligned}$$

Hence

$$\begin{aligned} Q_{\text{new}} - Q_{\text{old}} &= Q_{\text{cap}} = -\omega CV^2 \text{ rms} \\ 16,430 - 37,500 &= -\omega CV^2 \text{ rms} \end{aligned}$$

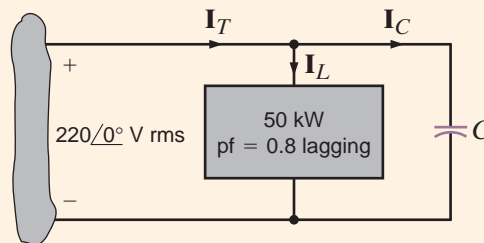
Solving the equation for  $C$  yields

$$\begin{aligned} C &= \frac{21,070}{(377)(220)^2} \\ &= 1155 \mu\text{F} \end{aligned}$$

By using a capacitor of this magnitude in parallel with the industrial load, we create, from the utility's perspective, a load pf of 0.95 lagging. However, the parameters of the actual load remain unchanged. Under these conditions, the current supplied by the utility to the kayak manufacturer is less and therefore they can use smaller conductors for the same amount of power. Or, if the conductor size is fixed, the line losses will be less since these losses are a function of the square of the current.

**Figure 9.20**

Example circuit for power factor correction.



## Problem-Solving Strategy

### Power Factor Correction

**Step 1.** Find  $Q_{\text{old}}$  from  $P_L$  and  $\theta_{\text{old}}$ , or the equivalent  $\text{pf}_{\text{old}}$ .

**Step 2.** Find  $\theta_{\text{new}}$  from the desired  $\text{pf}_{\text{new}}$ .

**Step 3.** Determine  $Q_{\text{new}} = P_{\text{old}} \tan \theta_{\text{new}}$ .

**Step 4.**  $Q_{\text{new}} - Q_{\text{old}} = Q_{\text{cap}} = -\omega CV^2 \text{ rms}$ .

## Learning Assessments

**Eg.20** Compute the value of the capacitor necessary to change the power factor in Learning Assessment E9.16 to 0.95 lagging. **ANSWER:**  $C = 773 \mu\text{F}$ .

**Eg.21** Find the value of capacity to be connected in parallel with the load in Fig. E9.21 to make the source power factor 0.95 leading,  $f = 60 \text{ Hz}$ . **ANSWER:**  $C = 546.2 \mu\text{F}$ .

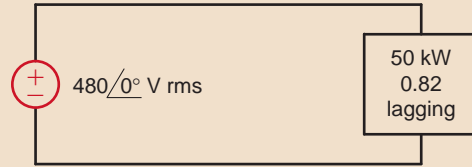


Figure E9.21

The single-phase three-wire ac circuit shown in Fig. 9.21 is an important topic because it is the typical ac power network found in households. Note that the voltage sources are equal; that is,  $\mathbf{V}_{an} = \mathbf{V}_{nb} = \mathbf{V}$ . Thus, the magnitudes are equal and the phases are equal (single phase). The line-to-line voltage  $\mathbf{V}_{ab} = 2\mathbf{V}_{an} = 2\mathbf{V}_{nb} = 2\mathbf{V}$ . Within a household, lights and small appliances are connected from one line to *neutral*  $n$ , and large appliances such as hot water heaters and air conditioners are connected line to line. Lights operate at about 120 V rms and large appliances operate at approximately 240 V rms.

Let us now attach two identical loads to the single-phase three-wire voltage system using perfect conductors as shown in Fig. 9.21b. From the figure we note that

$$\mathbf{I}_{aA} = \frac{\mathbf{V}}{\mathbf{Z}_L}$$

and

$$\mathbf{I}_{bB} = -\frac{\mathbf{V}}{\mathbf{Z}_L}$$

KCL at point  $N$  is

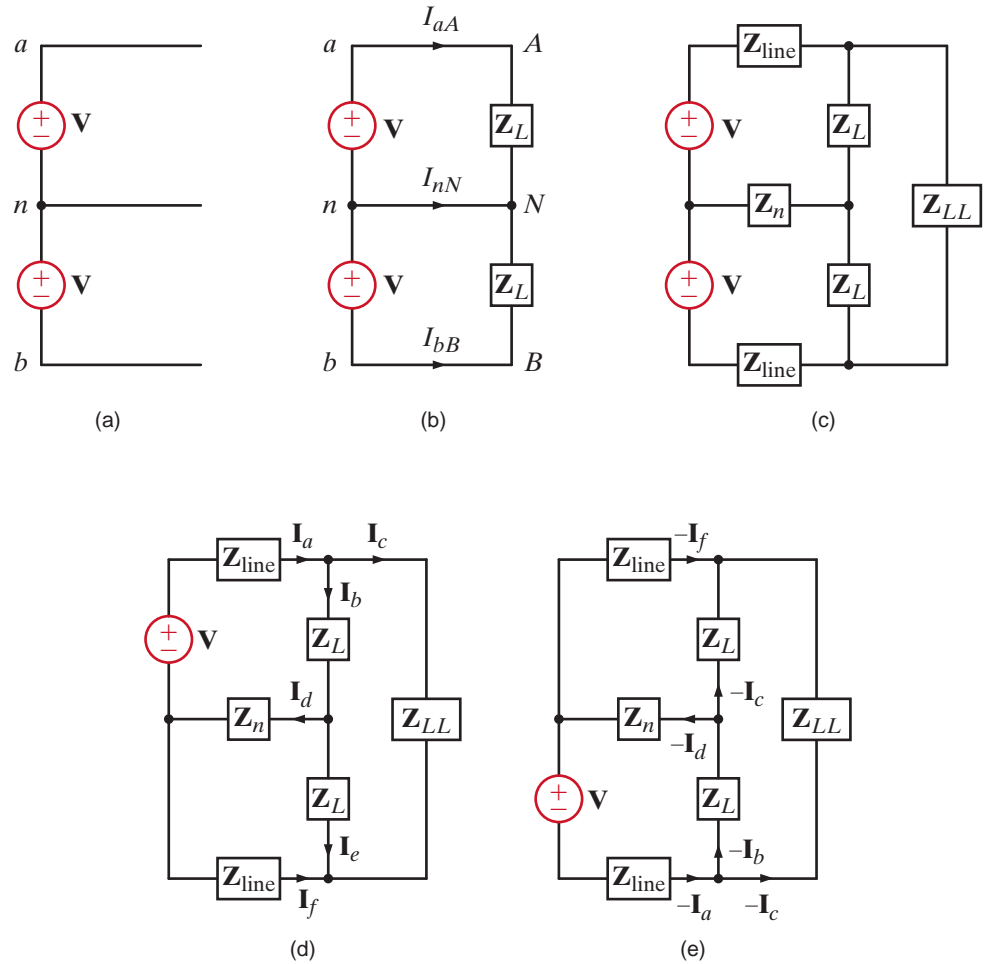
$$\begin{aligned} \mathbf{I}_{nN} &= -(\mathbf{I}_{aA} + \mathbf{I}_{bB}) \\ &= -\left(\frac{\mathbf{V}}{\mathbf{Z}_L} - \frac{\mathbf{V}}{\mathbf{Z}_L}\right) \\ &= 0 \end{aligned}$$

Note that there is no current in the neutral wire, and therefore it could be removed without affecting the remainder of the system; that is, all the voltages and currents would be unchanged. One is naturally led to wonder just how far the simplicity exhibited by this system will extend. For example, what would happen if each line had a line impedance, if the neutral conductor had an impedance associated with it, and if there were a load tied from line to line? To explore these questions, consider the circuit in Fig. 9.21c. Although we could examine this circuit using many of the techniques we have employed in previous chapters, the symmetry of the network suggests that perhaps superposition may lead us to some conclusions without having to resort to a brute-force assault. Employing superposition, we consider the two circuits in Figs. 9.21d and e. The currents in Fig. 9.21d are labeled arbitrarily. Because of the symmetrical relationship between Figs. 9.21d and e, the

## 9.8

### Single-Phase Three-Wire Circuits

**Figure 9.21**  
Single-phase three-wire system.



currents in Fig. 9.21e correspond directly to those in Fig. 9.21d. If we add the two *phasor* currents in each branch, we find that the neutral current is again zero. A neutral current of zero is a direct result of the symmetrical nature of the network. If either the line impedances  $Z_{\text{line}}$  or the load impedances  $Z_L$  are unequal, the neutral current will be nonzero. We will make direct use of these concepts when we study three-phase networks in Chapter 11.

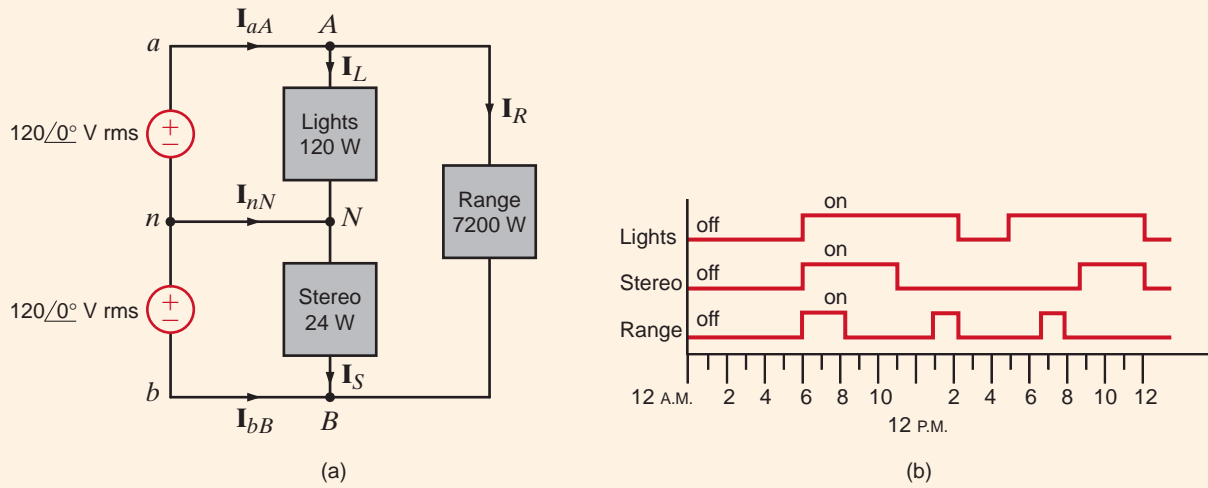
**EXAMPLE**  
**9.15**

A three-wire single-phase household circuit is shown in Fig. 9.22a. Use of the lights, stereo, and range for a 24-hour period is demonstrated in Fig. 9.22b. Let us calculate the energy use over the 24 hours in kilowatt-hours. Assuming that this represents a typical day and that our utility rate is \$0.08/kWh, let us also estimate the power bill for a 30-day month.

**SOLUTION** Applying nodal analysis to Fig. 9.22a yields

$$\begin{aligned} \mathbf{I}_{aA} &= \mathbf{I}_L + \mathbf{I}_R \\ \mathbf{I}_{bB} &= -\mathbf{I}_S - \mathbf{I}_R \\ \mathbf{I}_{nN} &= \mathbf{I}_S - \mathbf{I}_L \end{aligned}$$

The current magnitudes for each load can be found from the corresponding power levels as follows:



$$I_L = \frac{P_L}{V_{an}} = \frac{120}{120} = 1 \text{ A rms}$$

$$I_S = \frac{P_S}{V_{nb}} = \frac{24}{120} = 0.2 \text{ A rms}$$

$$I_R = \frac{P_R}{V_{ab}} = \frac{7200}{240} = 30 \text{ A rms}$$

The energy used is simply the integral of the power delivered by the two sources over the 24-hour period. Since the voltage magnitudes are constants, we can express the energy delivered by the sources as

$$E_{an} = V_{an} \int I_{aA} dt$$

$$E_{nb} = V_{nb} \int -I_{bB} dt$$

The integrals of  $I_{aA}$  and  $I_{bB}$  can be determined graphically from Fig. 9.22b.

$$\int_{12\text{A.M.}}^{12\text{P.M.}} I_{aA} dt = 4I_R + 15I_L = 135$$

$$\int_{12\text{A.M.}}^{12\text{P.M.}} -I_{bB} dt = 8I_S + 4I_R = 121.6$$

Therefore, the daily energy for each source and the total energy is

$$E_{an} = 16.2 \text{ kWh}$$

$$E_{nb} = 14.6 \text{ kWh}$$

$$E_{\text{total}} = 30.8 \text{ kWh}$$

Over a 30-day month, a \$0.08/kWh utility rate results in a power bill of

$$\text{Cost} = (30.8)(30)(0.08) = \$73.92$$

**Figure 9.22**

Household three-wire network and appliance usage.

The energy consumption is typically measured by meters, of the form shown in Fig. 9.23, which are a familiar sight on the outside of our homes.

**Figure 9.23**

Electric meters used to measure home energy consumption.

(Left, Comstock/Punchstock; right, Robert Llewellyn/Workbook Stock/Jupiter Images)



## 9.9

### Safety Considerations

Although this book is concerned primarily with the theory of circuit analysis, we recognize that, by this point in their study, most students will have begun to relate the theory to the electrical devices and systems that they encounter in the world around them. Thus, it seems advisable to depart briefly from the theoretical and spend some time discussing the very practical and important subject of safety. Electrical safety is a very broad and diverse topic that would require several volumes for a comprehensive treatment. Instead, we will limit our discussion to a few introductory concepts and illustrate them with examples.

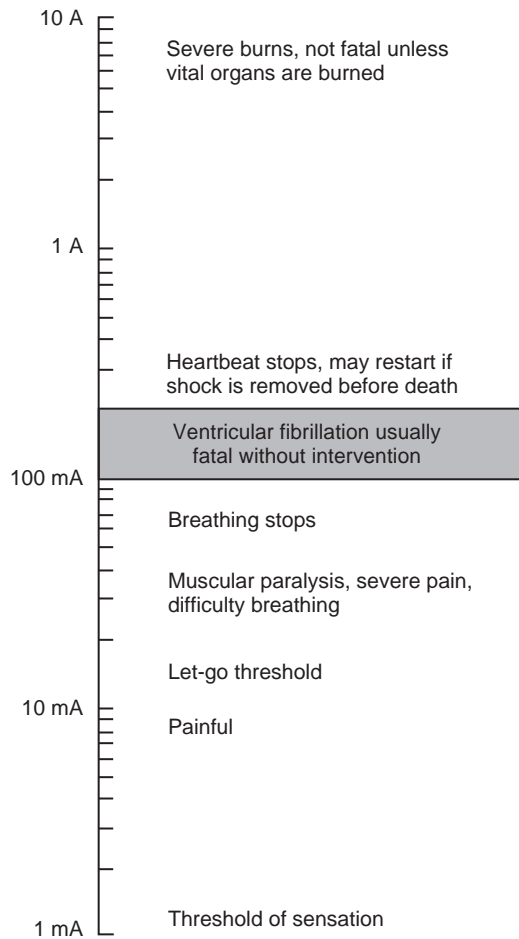
It would be difficult to imagine that anyone in our society could have reached adolescence without having experienced some form of electrical shock. Whether that shock was from a harmless electrostatic discharge or from accidental contact with an energized electrical circuit, the response was probably the same—an immediate and involuntary muscular reaction. In either case, the cause of the reaction is current flowing through the body. The severity of the shock depends on several factors, the most important of which are the magnitude, the duration, and the pathway of the current through the body.

The effect of electrical shock varies widely from person to person. Figure 9.24 shows the general reactions that occur as a result of 60-Hz ac current flow through the body from hand to hand, with the heart in the conduction pathway. Observe that there is an intermediate range of current, from about 0.1 to 0.2 A, which is most likely to be fatal. Current levels in this range are apt to produce ventricular fibrillation, a disruption of the orderly contractions of the heart muscle. Recovery of the heartbeat generally does not occur without immediate medical intervention. Current levels above that fatal range tend to cause the heart muscle to contract severely, and if the shock is removed soon enough, the heart may resume beating on its own.

The voltage required to produce a given current depends on the quality of the contact to the body and the impedance of the body between the points of contact. The electrostatic voltage such as might be produced by sliding across a car seat on a dry winter day may be on the order of 20,000 to 40,000 V, and the current surge on touching the door handle, on the order of 40 A. However, the pathway for the current flow is mainly over the body surface, and its duration is for only a few microseconds. Although that shock could be disastrous for some electronic components, it causes nothing more than mild discomfort and aggravation to a human being.

Electrical appliances found about the home typically require 120 or 240 V rms for operation. Although the voltage level is small compared with that of the electrostatic shock, the potential for harm to the individual and to property is much greater. Accidental contact is more apt to result in current flow either from hand to hand or from hand to foot—either of which will subject the heart to shock. Moreover, the relatively slowly changing (low frequency) 60-Hz current tends to penetrate more deeply into the body as opposed to remaining on the surface as a rapidly changing (high frequency) current would tend to do. In addition, the energy source has the capability of sustaining a current flow without depletion. Thus, subsequent discussion will concentrate primarily on hazards associated with the 60-Hz ac power system.



**Figure 9.24**

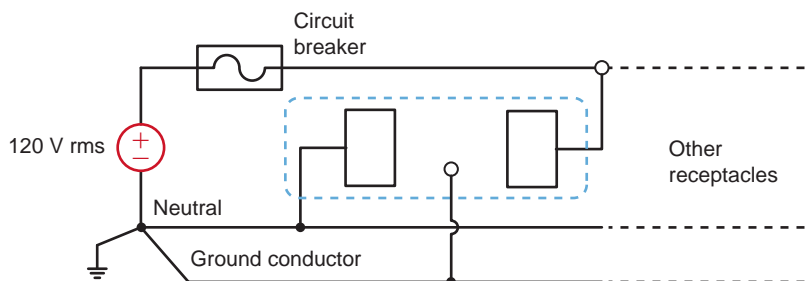
Effects of electrical shock. (From C. F. Dalziel and W. R. Lee, "Lethal Electric Currents," *IEEE Spectrum*, February 1969, pp. 44–50; and C. F. Dalziel, "Electric Shock Hazard," *IEEE Spectrum*, February 1972, pp. 41–50.)

The single-phase three-wire system introduced earlier is commonly, though not exclusively, used for electrical power distribution in residences. Two important aspects of this or any system that relate to safety were not mentioned earlier: circuit fusing and grounding.

Each branch circuit, regardless of the type of load it serves, is protected from excessive current flow by circuit breakers or fuses. Receptacle circuits are generally limited to 20 amps and lighting circuits to 15 amps. Clearly, these cannot protect persons from lethal shock. The primary purpose of these current-limiting devices is to protect equipment.

The neutral conductor of the power system is connected to ground (earth) at a multitude of points throughout the system and, in particular, at the service entrance to the residence. The connection to earth may be by way of a driven ground rod or by contact to a cold water pipe of a buried metallic water system. The 120-V branch circuits radiating from the distribution panel (fuse box) generally consist of three conductors rather than only two, as was shown in Fig. 9.21. The third conductor is the ground wire, as shown in Fig. 9.25.

The ground conductor may appear to be redundant, since it plays no role in the normal operation of a load that might be connected to the receptacle. Its role is illustrated by the following example.

**Figure 9.25**

A household receptacle.

## EXAMPLE 9.16

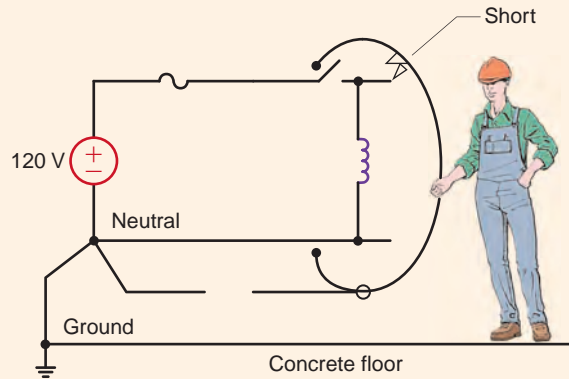
Joe has a workshop in his basement where he uses a variety of power tools such as drills, saws, and sanders. The basement floor is concrete, and being below ground level, it is usually damp. Damp concrete is a relatively good conductor. Unknown to Joe, the insulation on a wire in his electric drill has been nicked, and the wire is in contact with (or shorted to) the metal case of the drill, as shown in Fig. 9.26. Is Joe in any danger when using the drill?

### SOLUTION

Without the ground conductor connected to the metal case of the tool, Joe would receive a severe, perhaps fatal, shock when he attempted to use the drill. The voltage between his hand and his feet would be 120 V, and the current through his body would be limited by the resistance of his body and of the concrete floor. Typically, the circuit breakers would not operate. However, if the ground conductor is present and properly connected to the drill case, the case remains at ground potential, the 120-V source becomes shorted to ground, the circuit breaker operates, and Joe lives to drill another hole.

Figure 9.26

Faulty circuit, when the case of the tool is not grounded through the power cord.



It was mentioned earlier that the circuit breaker or fuse cannot provide effective protection against shock. There is, however, a special type of device called a ground-fault interrupter (GFI) that can provide protection for personnel. This device detects current flow outside the normal circuit. Consider the circuit of Fig. 9.26. In the normal safe operating condition, the current in the neutral conductor must be the same as that in the line conductor. If at any time the current in the line does not equal the current in the neutral, then a secondary path has somehow been established, creating an unsafe condition. This secondary path is called a fault. For example, the fault path in Fig. 9.26 is through Joe and the concrete floor. The GFI detects this fault and opens the circuit in response. Its principle of operation is illustrated by the following example.

## EXAMPLE

## 9.17 SOLUTION

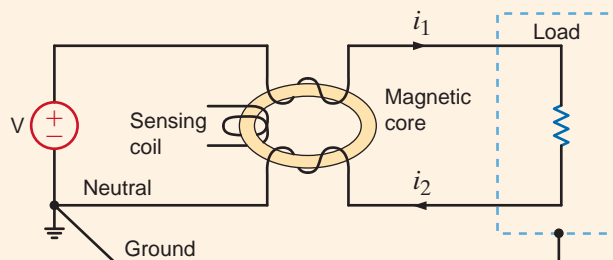
Let us describe the operation of a GFI.

Consider the action of the magnetic circuit in Fig. 9.27. Under normal operating conditions,  $i_1$  and  $i_2$  are equal, and if the coils in the neutral and line conductors are identical, as we learned in basic physics, the magnetic flux in the core will be zero. Consequently, no voltage will be induced in the sensing coil.

If a fault should occur at the load, current will flow in the ground conductor and perhaps in the earth; thus,  $i_1$  and  $i_2$  will no longer be equal, the magnetic flux will not be zero, and a voltage will be induced in the sensing coil. That voltage can be used to activate a circuit breaker. This is the essence of the GFI device.

Figure 9.27

Ground-fault interrupter circuit.



Ground-fault interrupters are available in the form of circuit breakers and also as receptacles. They are now required in branch circuits that serve outlets in areas such as bathrooms, basements, garages, and outdoor sites. The devices will operate at ground-fault currents on the order of a few milliamperes. Unfortunately, the GFI is a relatively new device, and electrical code requirements are generally not retroactive. Thus few older residences have them.

Requirements for the installation and maintenance of electrical systems are meticulously defined by various codes that have been established to provide protection of personnel and property. Installation, alteration, or repair of electrical devices and systems should be undertaken only by qualified persons. The subject matter that we study in circuit analysis does not provide that qualification.

The following examples illustrate the potential hazards that can be encountered in a variety of everyday situations. We begin by revisiting a situation described in a previous example.

Suppose that a man is working on the roof of a mobile home with a hand drill. It is early in the day, the man is barefoot, and dew covers the mobile home. The ground prong on the electrical plug of the drill has been removed. Will the man be shocked if the “hot” electrical line shorts to the case of the drill?

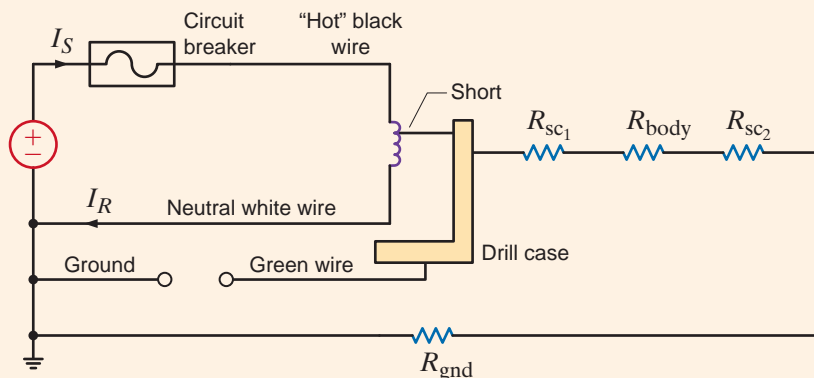
To analyze this problem, we must construct a model that adequately represents the situation described. In his book *Medical Instrumentation* (Boston: Houghton Mifflin, 1978), John G. Webster suggests the following values for resistance of the human body:  $R_{\text{skin}}(\text{dry}) = 15 \text{ k}\Omega$ ,  $R_{\text{skin}}(\text{wet}) = 150 \Omega$ ,  $R_{\text{limb}}(\text{arm or leg}) = 100 \Omega$ , and  $R_{\text{trunk}} = 200 \Omega$ .

The network model is shown in Fig. 9.28. Note that since the ground line is open-circuited, a closed path exists from the hot wire through the short, the human body, the mobile home, and the ground. For the conditions stated previously, we assume that the surface contact resistances  $R_{\text{sc}_1}$  and  $R_{\text{sc}_2}$  are  $150 \Omega$  each. The body resistance,  $R_{\text{body}}$ , consisting of arm, trunk, and leg, is  $400 \Omega$ . The mobile home resistance is assumed to be zero, and the ground resistance,  $R_{\text{gnd}}$ , from the mobile home ground to the actual source ground is assumed to be  $1 \Omega$ . Therefore, the magnitude of the current through the body from hand to foot would be

$$\begin{aligned} I_{\text{body}} &= \frac{120}{R_{\text{sc}_1} + R_{\text{body}} + R_{\text{sc}_2} + R_{\text{gnd}}} \\ &= \frac{120}{701} \\ &= 171 \text{ mA} \end{aligned}$$

A current of this magnitude can easily cause heart failure.

Additional protection would be provided if the circuit breaker were a ground-fault interrupter.



## EXAMPLE 9.18

### SOLUTION

**Figure 9.28**  
Model for Example 9.18.

## EXAMPLE 9.19

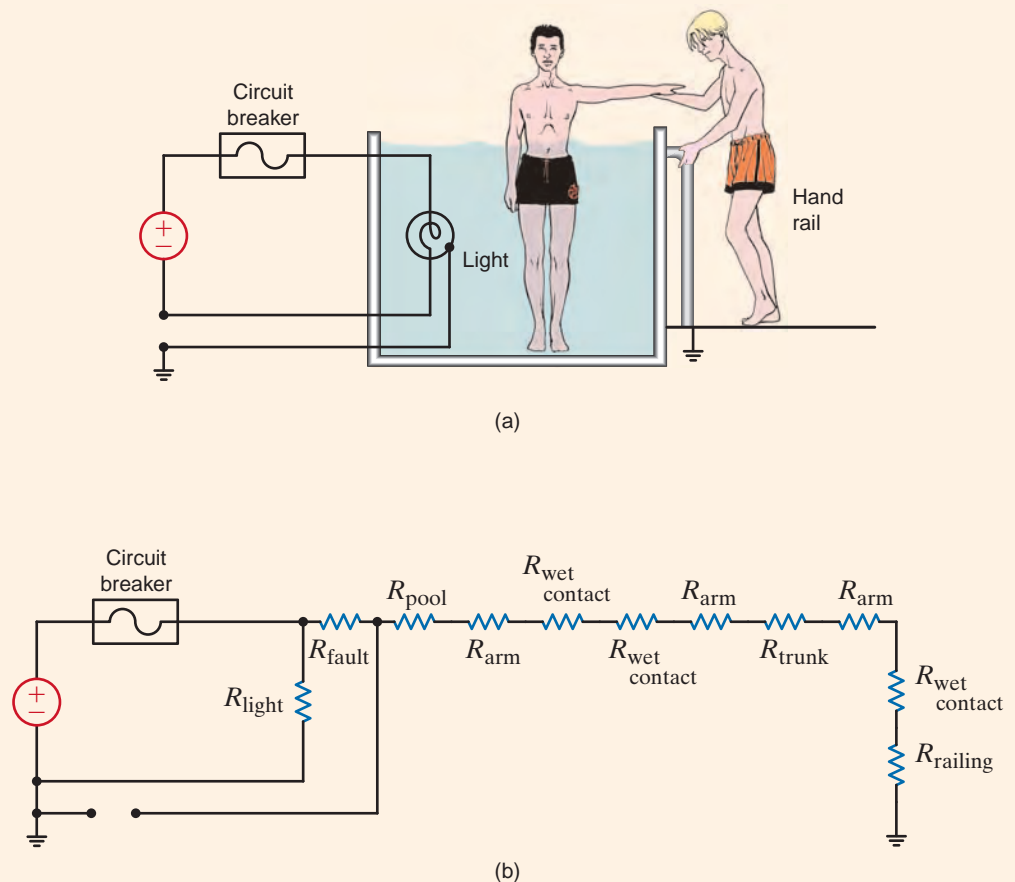
Two boys are playing basketball in their backyard. To cool off, they decide to jump into their pool. The pool has a vinyl lining, so the water is electrically insulated from the earth. Unknown to the boys, there is a ground fault in one of the pool lights. One boy jumps in and while standing in the pool with water up to his chest, reaches up to pull in the other boy, who is holding onto a grounded hand rail, as shown in Fig. 9.29a. What is the impact of this action?

**SOLUTION** The action in Fig. 9.29a is modeled as shown in Fig. 9.29b. Note that since a ground fault has occurred, there exists a current path through the two boys. Assuming that the fault, pool, and railing resistances are approximately zero, the magnitude of the current through the two boys would be

$$\begin{aligned} I &= \frac{120}{(3R_{\text{arm}}) + 3(3R_{\text{wet contact}}) + R_{\text{trunk}}} \\ &= \frac{120}{950} \\ &= 126 \text{ mA} \end{aligned}$$

This current level would cause severe shock in both boys. The boy outside the pool could experience heart failure.

**Figure 9.29**  
Diagrams used in  
Example 9.19.

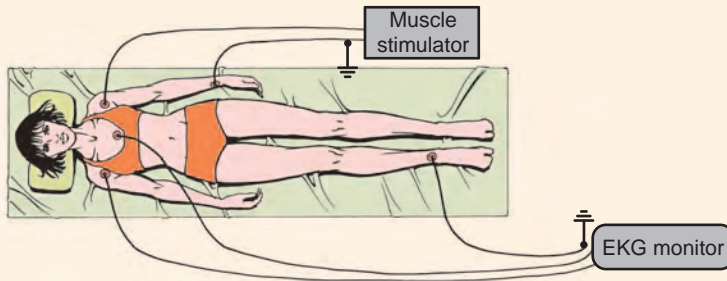


A patient in a medical laboratory has a muscle stimulator attached to her left forearm. Her heart rate is being monitored by an EKG machine with two differential electrodes over the heart and the ground electrode attached to her right ankle. This activity is illustrated in Fig. 9.30a. The stimulator acts as a current source that drives 150 mA through the muscle from the active electrode to the passive electrode. If the laboratory technician mistakenly decides to connect the passive electrode of the stimulator to the ground electrode of the EKG system to achieve a common ground, is there any risk?

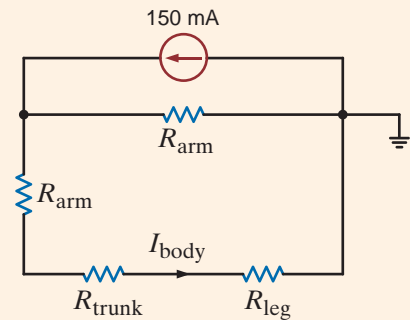
When the passive electrode of the stimulator is connected to the ground electrode of the EKG system, the equivalent network in Fig. 9.30b illustrates the two paths for the stimulator current: one through half an arm and the other through half an arm and the body. Using current division, the body current is

$$\begin{aligned} I_{\text{body}} &= \frac{(150)(10^{-3})(50)}{50 + 50 + 200 + 100} \\ &= 19 \text{ mA} \end{aligned}$$

Therefore, a dangerously high level of current will flow from the stimulator through the body to the EKG ground.



(a)



(b)

## EXAMPLE 9.20

### SOLUTION

Figure 9.30

Diagrams used in Example 9.20.

A cardiac care patient with a pacing electrode has ignored the hospital rules and is listening to a cheap stereo. The stereo has an amplified 60-Hz hum that is very annoying. The patient decides to dismantle the stereo partially in an attempt to eliminate the hum. In the process, while he is holding one of the speaker wires, the other touches the pacing electrode. What are the risks in this situation?

Let us suppose that the patient's skin is damp and that the 60-Hz voltage across the speaker wires is only 10 mV. Then the circuit model in this case would be as shown in Fig. 9.31.

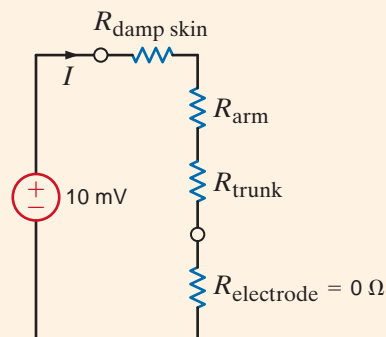


Figure 9.31

Circuit model for Example 9.21.

## EXAMPLE 9.21

### SOLUTION

The current through the heart would be

$$I = \frac{(10)(10^{-3})}{150 + 100 + 200}$$

$$= 22.2 \mu\text{A}$$

It is known that  $10 \mu\text{A}$  delivered directly to the heart is potentially lethal.

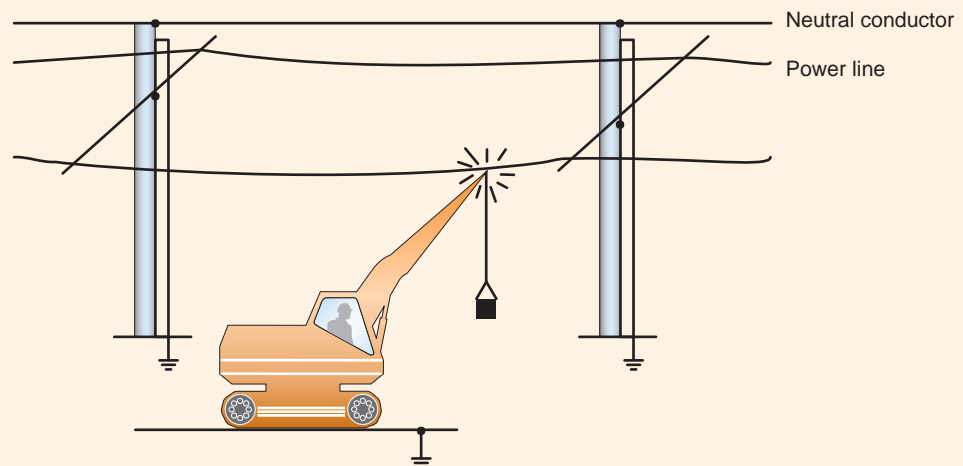
## EXAMPLE 9.22

While maneuvering in a muddy area, a crane operator accidentally touched a high-voltage line with the boom of the crane, as illustrated in Fig. 9.32a. The line potential was 7200 V. The neutral conductor was grounded at the pole. When the crane operator realized what had happened, he jumped from the crane and ran in the direction of the pole, which was approximately 10 m away. He was electrocuted as he ran. Can we explain this very tragic accident?

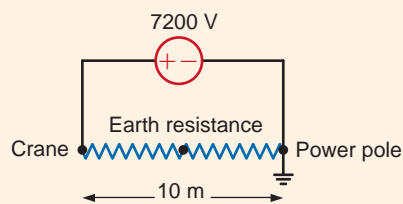
### SOLUTION

The conditions depicted in Fig. 9.32a can be modeled as shown in Fig. 9.32b. The crane was at 7200 V with respect to earth. Therefore, a gradient of 720 V/m existed along the earth between the crane and the power pole. This earth between the crane and the pole is modeled as a resistance. If the man's stride was about 1 m, the difference in potential between his feet was approximately 720 V. A man standing in the same area with his feet together was unharmed.

**Figure 9.32**  
Illustrations used in  
Example 9.22.



(a)



(b)

The examples of this section have been provided in an attempt to illustrate some of the potential dangers that exist when working or playing around electric power. In the worst case, failure to prevent an electrical accident can result in death. However, even nonlethal electrical contacts can cause such things as burns or falls. Therefore, we must always be alert to ensure not only our own safety, but also that of others who work and play with us.

The following guidelines will help minimize the chances of injury:

1. Avoid working on energized electrical systems.
2. Always assume that an electrical system is energized unless you can absolutely verify that it is not.
3. Never make repairs or alterations that are not in compliance with the provisions of the prevailing code.
4. Do not work on potentially hazardous electrical systems alone.
5. If another person is “frozen” to an energized electrical circuit, deenergize the circuit, if possible. If that cannot be done, use nonconductive material such as dry wooden boards, sticks, belts, and articles of clothing to separate the body from the contact. Act quickly but take care to protect yourself.
6. When handling long metallic equipment, such as ladders, antennas, and so on, outdoors, be continuously aware of overhead power lines and avoid any possibility of contact with them.

[hint]

Safety guidelines.

## Learning Assessment

**Eg.22** A woman is driving her car in a violent rainstorm. While she is waiting at an intersection, a power line falls on her car and makes contact. The power line voltage is 7200 V.

- (a) Assuming that the resistance of the car is negligible, what is the potential current through her body if, while holding the door handle with a dry hand, she steps out onto the wet ground?
- (b) If she remained in the car, what would happen?

**ANSWER:** (a)  $I = 463$  mA, extremely dangerous;  
(b) she should be safe.

Safety when working with electric power must always be a primary consideration. Regardless of how efficient or expedient an electrical network is for a particular application, it is worthless if it is also hazardous to human life.

The safety device shown in Fig. 9.33, which is also used for troubleshooting, is a proximity-type sensor that will indicate whether a circuit is energized by simply touching the conductor on the outside of the insulation. This device is typically carried by all electricians and is helpful when working on electric circuits.

In addition to the numerous deaths that occur each year due to electrical accidents, fire damage that results from improper use of electrical wiring and distribution equipment amounts to millions of dollars per year.

To prevent loss of life and damage to property, very detailed procedures and specifications have been established for the construction and operation of electrical systems to ensure their safe operation. The *National Electrical Code* ANSI C1 (ANSI—American National



**Figure 9.33**

A modern safety or troubleshooting device. (Courtesy of Fluke Corporation. Reproduced with permission.)

Standards Institute) is the primary guide. There are other codes, however: for example, the National Electric Safety Code, ANSI C2, which deals with safety requirements for public utilities. Underwriters Laboratory (UL) tests all types of devices and systems to ensure that they are safe for use by the general public. We find the UL label on all types of electrical equipment that is used in the home, such as appliances and extension cords.

Electric energy plays a central role in our lives. It is extremely important to our general health and well-being. However, if not properly used, it can be lethal.

## 9.10

The following application-oriented examples illustrate a practical use of the material studied in this chapter.

### Application Examples

#### APPLICATION EXAMPLE 9.23

For safety reasons the National Electrical Code restricts the circuit-breaker rating in a 120-V household lighting branch circuit to no more than 20 A. Furthermore, the code also requires a 25% safety margin for continuous-lighting loads. Under these conditions, let us determine the number of 100-W lighting fixtures that can be placed in one branch circuit.

**SOLUTION** The model for the branch circuit is shown in Fig. 9.34. The current drawn by each 100-W bulb is

$$I_{\text{bulb}} = 100/120 = 0.833 \text{ A rms}$$

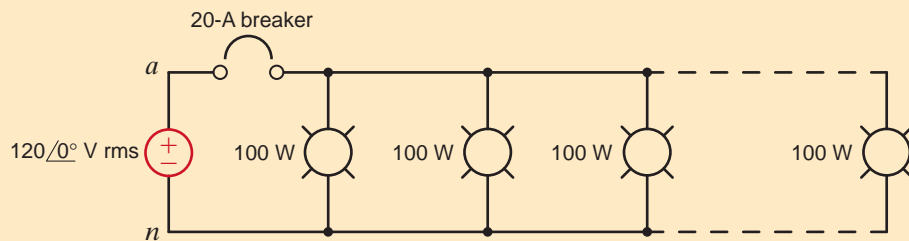
Using the safety margin recommendation, the estimated current drawn by each bulb is 25% higher, or

$$I_{\text{bulb}} = (1.25)(0.83) = 1.04 \text{ A rms}$$

Therefore, the maximum number of fixtures on one circuit breaker is

$$n = 20/1.04 = 19 \text{ fixtures}$$

**Figure 9.34**  
20-A branch circuit for household lighting.



#### APPLICATION EXAMPLE 9.24

An electric lawn mower requires 12 A rms at 120 V rms but will operate down to 110 V rms without damage. At 110 V rms, the current draw is 13.1 A rms, as shown in Fig. 9.35. Give the maximum length extension cord that can be used with a 120-V rms power source if the extension cord is made from

1. 16-gauge wire ( $4 \text{ m}\Omega/\text{ft}$ )
2. 14-gauge wire ( $2.5 \text{ m}\Omega/\text{ft}$ )

**SOLUTION** The voltage drop across the extension cord is

$$V_{\text{cord}} = (2)(13.1)R_{\text{cord}} = 10 \text{ V rms}$$

or

$$R_{\text{cord}} = 0.382 \Omega$$



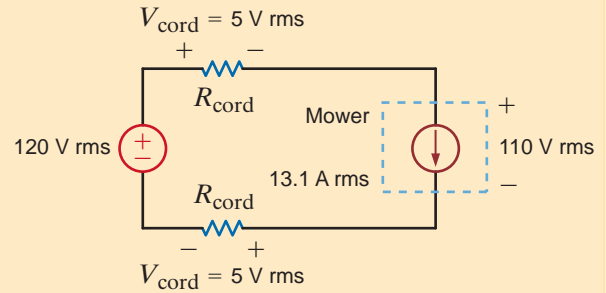
If  $\ell_{\text{cord}}$  is the length of the extension cord, then for 16-gauge wire we find

$$\ell_{\text{cord}} = \frac{R_{\text{cord}}}{0.004} = 95.5 \text{ feet}$$

and for 14-gauge wire

$$\ell_{\text{cord}} = \frac{R_{\text{cord}}}{0.0025} = 152.8 \text{ feet}$$

**Figure 9.35**  
Circuit model in  
Example 9.24.



While sitting in a house reading a book, we notice that every time the air conditioner comes on, the lights momentarily dim. Let us investigate this phenomenon using the single-phase three-wire circuit shown in Fig. 9.36a and some typical current requirements for a 10,000-Btu/h air conditioner, assuming a line resistance of  $0.5 \Omega$ .

The 60-W light bulb can be roughly modeled by its equivalent resistance:

$$P_{\text{bulb}} = \frac{V_{an}^2}{R_{\text{bulb}}}$$

or

$$R_{\text{bulb}} = 240 \Omega$$

When the air conditioner unit first turns on, the current requirement is 40 A, as shown in Fig. 9.36b. As the compressor motor comes up to speed, the current requirement drops quickly to a steady-state value of 10 A, as shown in Fig. 9.36c. We will compare the voltage across the light fixture,  $V_{AN}$ , both at turn-on and in steady state.

Using superposition, let us first find that portion of  $V_{AN}$  caused by the voltage sources. The appropriate circuit is shown in Fig. 9.36d. Using voltage division, we find that

$$V_{AN1} = V_{AN} \left( \frac{R_{\text{bulb}}}{R_{\text{bulb}} + 2R_L} \right)$$

or

$$V_{AN1} = 119.50 \text{ V rms}$$

Figure 9.36e will yield the contribution to  $V_{AN}$  caused by the 10-A steady-state current. Using current division to calculate the current through the light bulb, we find that

$$V_{AN2} = - \left\{ I_{AB} \left( \frac{R_L}{R_{\text{bulb}} + 2R_L} \right) \right\} R_{\text{bulb}}$$

or

$$V_{AN2} = -4.98 \text{ V rms}$$

Therefore, the steady-state value of  $V_{AN}$  is

$$V_{AN} = V_{AN1} + V_{AN2} = 114.52 \text{ V rms}$$

At start-up, our expression for  $V_{AN2}$  can be used with  $I_{AB} = 40 \text{ A}$ , which yields  $V_{AN2} = -19.92 \text{ V rms}$ . The resulting value for  $V_{AN}$  is

$$V_{AN} = V_{AN1} + V_{AN2} = 119.50 - 19.92 = 99.58 \text{ V rms}$$

The voltage delivered to the light fixture at startup is 13% lower than the steady-state value, resulting in a momentary dimming of the lights.

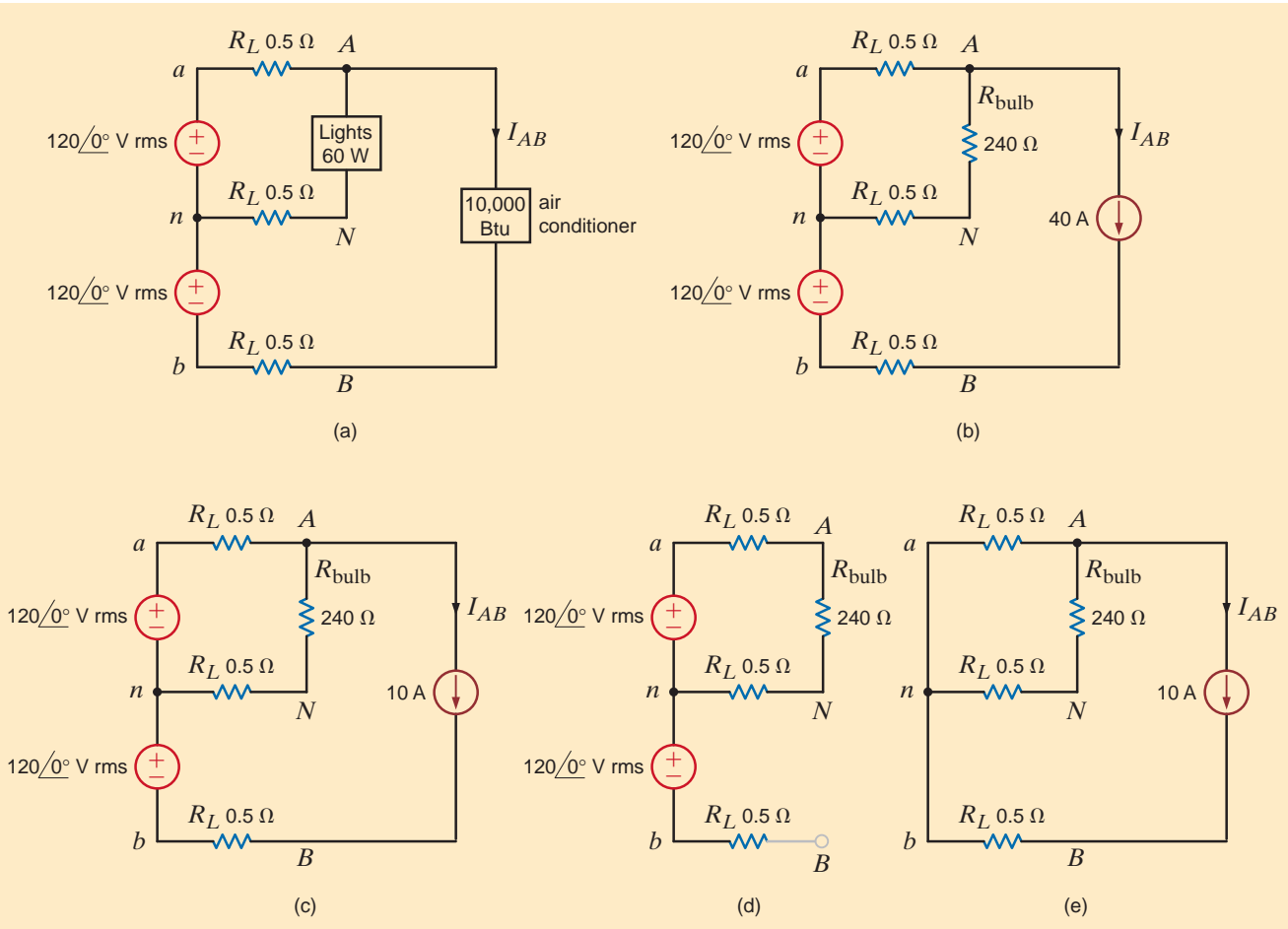
## APPLICATION EXAMPLE 9.25

### SOLUTION

#### [hint]

#### Technique

1. Find the resistance of the light bulb.
2. Use a large current source to represent the transient current of the air conditioner and a small current source to represent the steady-state current.
3. Find the voltage drop across the light bulb during both the transient and steady-state operations.



**Figure 9.36**  
Networks used in  
Example 9.25.

**APPLICATION  
EXAMPLE 9.26**

Most clothes dryers operate from a 240-V rms outlet and have several temperature settings, such as low, medium, and high. Let's examine the manner in which the dryer creates heat for drying and the way in which it regulates the temperature.

**SOLUTION**

First we will consider the heat itself. A simple model for this situation is shown in Fig. 9.37a, where a resistive heating element is connected across the 240-V rms supply. For a particular dryer, the resistance of the element is roughly  $11\ \Omega$ . The current through this element is

$$I_{\text{he}} = \frac{240}{11} = 21.81 \text{ A rms} \tag{9.39}$$

Since the element is resistive, the voltage and current are in phase. The power dissipation is

$$P_{\text{he}} = I_{\text{he}}^2 R_{\text{he}} = (21.81)^2(11) = 5236 \text{ W}$$

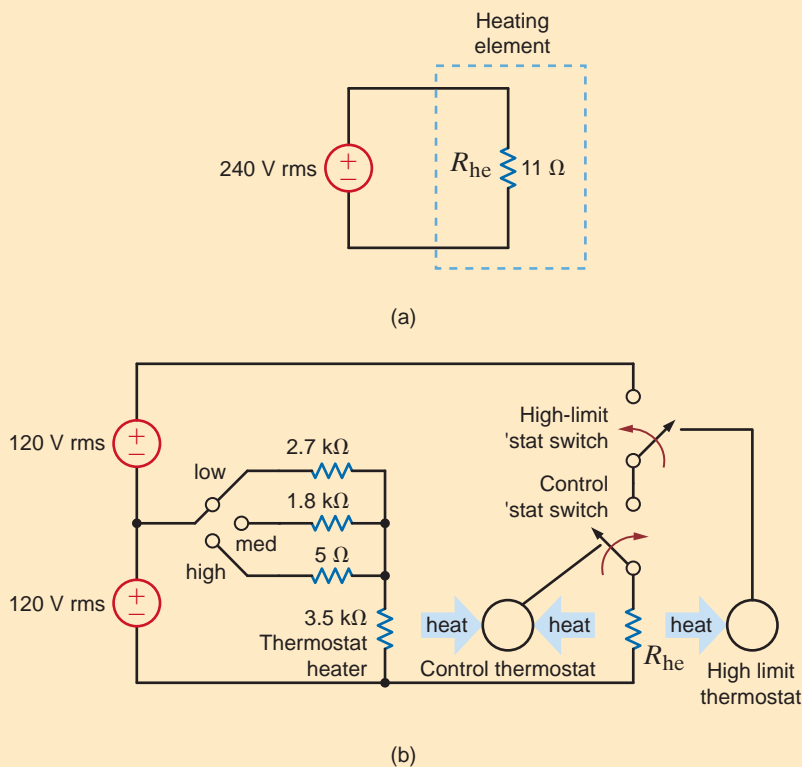
This value, more than 5 kW, is a lot of power! Note, however, that this is the power dissipated under the assumption that the element is connected to the 240-V-rms supply 100% of the time. If we manipulate the percentage of the time the element is energized, we can control the average power and thus the average temperature.

A fairly standard method for temperature control is shown schematically in Fig. 9.37b, where a standard residential single-phase, three-wire service powers the heating element at 240 V rms and the control circuit at 120 V rms. The temperature switch is connected to three resistors. Each temperature setting produces a different current through the thermostat heater, which is just another resistor. Each switch setting will alter the temperature of the thermostat heater that controls the temperature set point. We can calculate the power dissipated in the thermostat heater for each temperature setting. If we let  $R_S$  be the resistance that corresponds to the switch setting, then

$$P_{Th} = I_{Th}^2 R_{Th} = \left( \frac{120}{R_{Th} + R_S} \right)^2 R_{Th} \quad \begin{cases} = 1.3 \text{ W} & \text{for the low setting} \\ = 1.79 \text{ W} & \text{for the medium setting} \\ = 4.1 \text{ W} & \text{for the high setting} \end{cases} \quad 9.40$$

We see that the thermostat heater power dissipation is lowest at the low setting and increases as the switch is moved to the high setting.

Now let us consider the critical issue in the temperature control system. The thermostat heater is located physically adjacent to the control thermostat (very similar to the ones used to control heat and cooling in your homes where you set the temperature manually). In the dryer, the thermostat heater acts as the desired setting. If the temperature at the thermostat exceeds the setting, then the thermostat switch opens, deenergizing the heating element and allowing it to cool off. When the thermostat determines the temperature is too low, the thermostat switch will close, energizing the element and increasing the temperature. In this way, the thermostat switch opens and closes throughout the drying cycle, maintaining the correct temperature as selected by the temperature switch.



**Figure 9.37**

Partial schematics for a residential clothes dryer: (a) the heating element and (b) the control system

Note that all of our calculations have been made for power levels, not temperatures. The exact temperatures of the heating element, the thermostat heater, and the thermostat itself depend on how heat moves about within the dryer—a thermodynamics issue that cannot be addressed with a simple circuit diagram.

Finally, note the high limit thermostat and its associated switch. This thermostat is mounted very close to the heating element. If the control thermostat fails, there is no temperature control and we can expect trouble. The high limit thermostat will detect these excessive temperatures and deenergize the heating element. Once the temperature drops, normal operation can resume. Thus, the high limit thermostat is used to protect the dryer and by extension your home.

## 9.11

The following application-oriented examples illustrate a practical use of the material studied in this chapter.

### Design Examples

#### DESIGN EXAMPLE 9.27

A light-duty commercial single-phase three-wire 60-Hz circuit serves lighting, heating, and motor loads, as shown in Fig. 9.38a. Lighting and heating loads are essentially pure resistance and, hence, unity power factor (pf), whereas motor loads have lagging pf.

We wish to design a balanced configuration for the network and determine its economic viability using the following procedure.

- Compute the phase and neutral currents, as well as the complex power and pf for each source.
- Now move the heating load (panel H) to phase *b*, as shown in Fig. 9.38b. This is called “balancing” the load. Repeat the analysis of (a).
- Assume that the phase and neutral conductor resistances are each  $0.05 \Omega$  and have negligible effect on the results of (a). Evaluate the system line losses for (a) and (b). If the loads in question operate 24 hours per day and 365 days per year, at  $\$0.08/\text{kWh}$ , how much energy (and money) is saved by operating in the balanced mode?

**SOLUTION** a. The magnitudes of the rms currents are

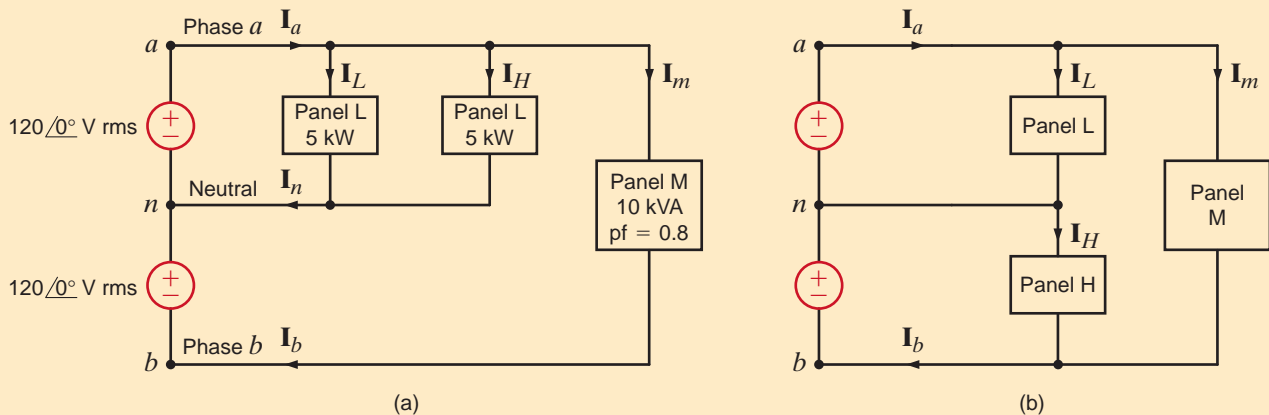
$$I_L = I_H = \frac{P}{V} = \frac{5000}{120} = 41.67 \text{ A rms}$$

$$I_m = \frac{10,000}{240} = 41.67 \text{ A rms}$$

**Figure 9.38**

Single-phase three-wire power distribution system.

and



In addition,

$$\theta_m = \cos^{-1}(0.8) = -36.9^\circ$$

Therefore,

$$\begin{aligned}\mathbf{I}_a &= \mathbf{I}_L + \mathbf{I}_H + \mathbf{I}_m \\ &= 41.67 \angle 0^\circ + 41.67 \angle 0^\circ + 41.67 \angle -36.9^\circ \\ &= 119.4 \angle -12.1^\circ \text{ A rms}\end{aligned}$$

The currents in the neutral and phase  $b$  lines are

$$\begin{aligned}\mathbf{I}_n &= \mathbf{I}_L + \mathbf{I}_H = 83.34 \angle 0^\circ \text{ A rms} \\ \mathbf{I}_b &= 41.67 \angle -36.9^\circ \text{ A rms}\end{aligned}$$

The complex power and power factor for each source are

$$\begin{aligned}\mathbf{S}_a &= \mathbf{V}_{an} \mathbf{I}_a^* = (120 \angle 0^\circ)(119.4 \angle +12.1^\circ) = 14 + j3 \text{ kVA} \\ \text{pf}_a &= \cos(12.1^\circ) = 0.9778 \text{ lagging}\end{aligned}$$

and in a similar manner

$$\begin{aligned}\mathbf{S}_b &= \mathbf{V}_{bn} \mathbf{I}_b^* = 4 + j3 \text{ kVA} \\ \text{pf}_b &= 0.8 \text{ lagging}\end{aligned}$$

**b.** Under the balanced condition

$$\begin{aligned}\mathbf{I}_a &= \mathbf{I}_L + \mathbf{I}_m = 41.67 \angle 0^\circ + 41.67 \angle -36.9^\circ \\ &= 79.06 \angle -18.4^\circ \text{ A rms}\end{aligned}$$

and

$$\begin{aligned}\mathbf{I}_b &= 79.06 \angle -18.4^\circ \text{ A rms} \\ \mathbf{I}_n &= 0\end{aligned}$$

Therefore,

$$\begin{aligned}\mathbf{S}_a &= \mathbf{V}_{na} \mathbf{I}_a^* = 9 + j3 \text{ kVA} \\ \text{pf}_a &= 0.9487 \text{ lagging}\end{aligned}$$

and

$$\begin{aligned}\mathbf{S}_b &= \mathbf{V}_{bn} \mathbf{I}_b^* = 9 + j3 \text{ kVA} \\ \text{pf}_b &= 0.9487 \text{ lagging}\end{aligned}$$

**c.** The power loss in the lines in kW is

$$\begin{aligned}P_{\text{loss}} &= R_a I_a^2 + R_b I_b^2 + R_n I_n^2 \\ &= 0.05(I_a^2 + I_b^2 + I_n^2)/1000\end{aligned}$$

The total energy loss for a year is

$$W_{\text{loss}} = (24)(365)P_{\text{loss}} = 8760 P_{\text{loss}}$$

and the annual cost is

$$\text{Cost} = \$0.08 W_{\text{loss}}$$

A comparison of the unbalanced and balanced cases is shown in the following table:

	UNBALANCED CASE	BALANCED CASE
$P_{\text{loss}}(\text{kW})$	1.147	0.625
$W_{\text{loss}}(\text{kW-hr})$	10,034	5,475
Cost(\$)	804	438

Therefore, the annual savings obtained using the balanced configuration is

$$\text{Annual energy savings} = 10,048 - 5,475 = 4,573 \text{ kWh}$$

$$\text{Annual cost savings} = 804 - 438 = \$366$$

## SUMMARY

- **Instantaneous power** If the current and voltage are sinusoidal functions of time, the instantaneous power is equal to a time-independent average value plus a sinusoidal term that has a frequency twice that of the voltage or current.
- **Average power**  $P = 1/2 VI \cos(\theta_v - \theta_i) = 1/2 VI \cos \theta$ , where  $\theta$  is the phase of the impedance.
- **Resistive load**  $P = 1/2 I^2 R = 1/2 VI$  since  $V$  and  $I$  are in phase.
- **Reactive load**  $P = 1/2 VI \cos(\pm 90^\circ) = 0$
- **Maximum average power transfer** To obtain the maximum average power transfer to a load, the load impedance should be chosen equal to the complex conjugate of the Thévenin equivalent impedance representing the remainder of the network.
- **rms or effective value of a periodic waveform** The effective, or rms, value of a periodic waveform was introduced as a means of measuring the effectiveness of a source in delivering power to a resistive load. The effective value of a periodic waveform is found by determining the root-mean-square value of the

waveform. The rms value of a sinusoidal function is equal to the maximum value of the sinusoid divided by  $\sqrt{2}$ .

- **Power factor** Apparent power is defined as the product  $V_{\text{rms}} I_{\text{rms}}$ . The power factor is defined as the ratio of the average power to the apparent power and is said to be leading when the phase of the current lags the voltage, and lagging when the phase of the current lags the voltage. The power factor of a load with a lagging power factor can be corrected by placing a capacitor in parallel with the load.
- **Complex power** The complex power,  $S$ , is defined as the product  $V_{\text{rms}} I_{\text{rms}}^*$ . The complex power  $S$  can be written as  $S = P + jQ$ , where  $P$  is the real or average power and  $Q$  is the imaginary or quadrature power.

$$S = I^2 Z = I^2 R + jI^2 X$$

- **The single-phase three-wire circuit** The single-phase three-wire circuit is the one commonly used in households. Large appliances are connected line to line and small appliances and lights are connected line to neutral.
- **Safety** Safety must be a primary concern in the design and use of any electrical circuit. The National Electric Code is the primary guide for the construction and operation of electrical systems.

## PROBLEMS

- 9.1 The voltage and current at the input of a network are given by the expressions

$$v(t) = 6 \cos \omega t \text{ V}$$

$$i(t) = 4 \sin \omega t \text{ A}$$

Determine the average power absorbed by the network.

- 9.2 The voltage and current at the input of a circuit are given by the expressions

$$v(t) = 170 \cos(\omega t + 30^\circ) \text{ V}$$

$$i(t) = 5 \cos(\omega t + 45^\circ) \text{ A}$$

Determine the average power absorbed by the circuit.

- 9.3 Determine the equations for the current and the instantaneous power in the network in Fig. P9.3.

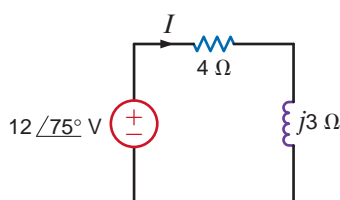


Figure P9.3

- 9.4 Given  $v_s(t) = 100 \cos 100t$  volts, find the average power supplied by the source and the current  $i_2(t)$  in the network in Fig. P9.4.

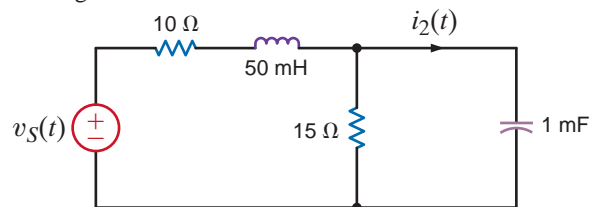


Figure P9.4

- 9.5 Determine the instantaneous power supplied by the source in the circuit in Fig. P9.5.

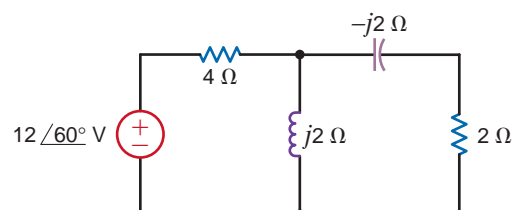


Figure P9.5

9.6 Find the instantaneous power supplied by the source in the network in Fig. P9.6.

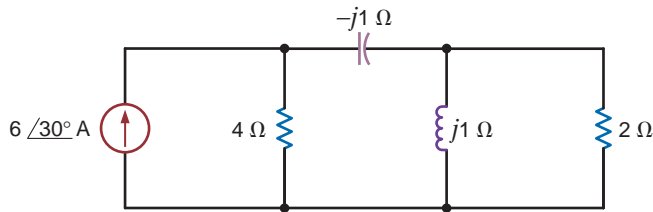


Figure P9.6

9.7 Find the instantaneous power supplied by the source in the network in Fig. P9.7.

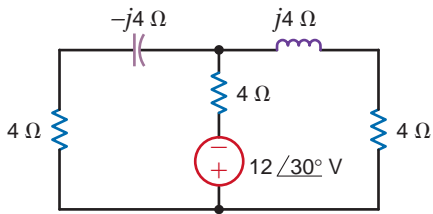


Figure P9.7

9.8 Find the instantaneous power supplied by the source in the network in Fig. P9.8.

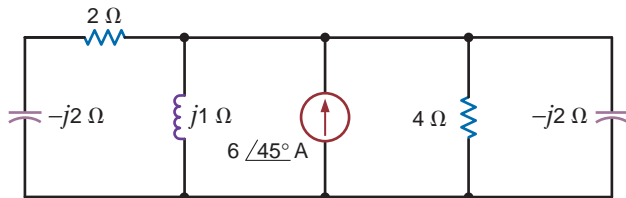


Figure P9.8

9.9 Find the average power absorbed by the resistor in the circuit shown in Fig. P9.9 if  $v_1(t) = 10 \cos(377t + 60^\circ)$  V and  $v_2(t) = 20 \cos(377t + 120^\circ)$  V.

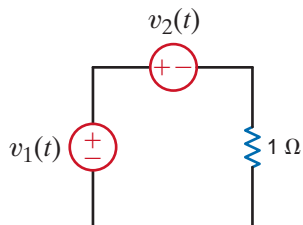


Figure P9.9

9.10 If  $i_g(t) = 0.5 \cos 2000t$  A, find the average power absorbed by each element in the circuit in Fig. P9.10.

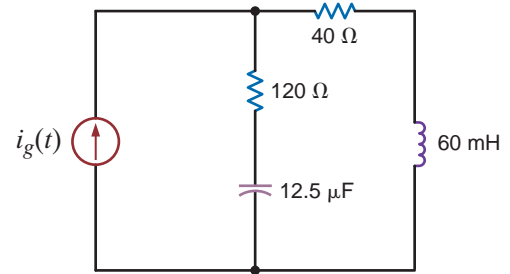


Figure P9.10

9.11 Find the average power absorbed by the network in Fig. P9.11.

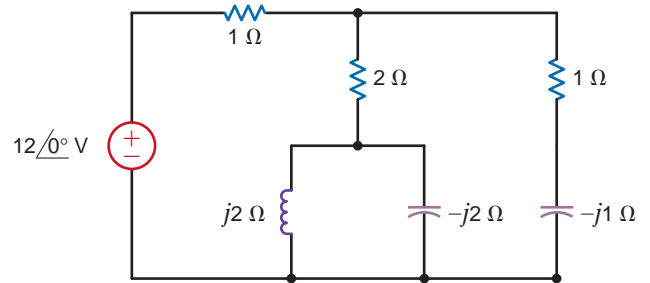


Figure P9.11

9.12 Find the average power absorbed by the 2-Ω resistor in the network in Fig. P9.12 and the total power supplied.

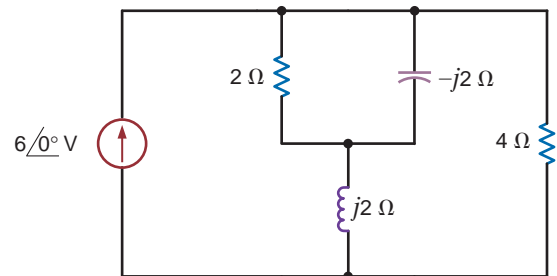


Figure P9.12

9.13 Find the average power absorbed by the 2-Ω resistor in the circuit in Fig. P13 and the total power supplied.

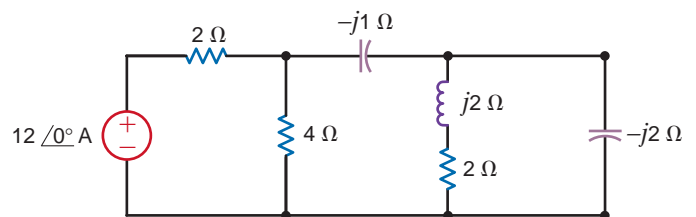


Figure P9.13

**9.14** Find the total average power supplied and the average power absorbed by each element in the network in Fig. P9.14.

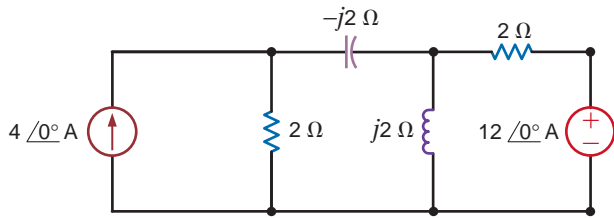


Figure P9.14

**9.19** Given the network in Fig. P9.19, find the power supplied and the average power absorbed by each element.

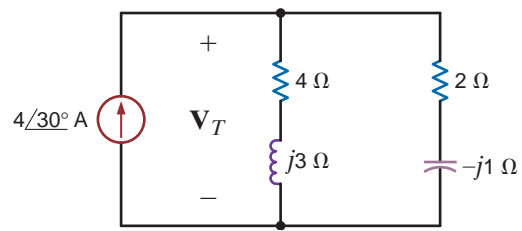


Figure P9.19

**9.15** Calculate the average power supplied by the source in the circuit in Fig. P9.15.

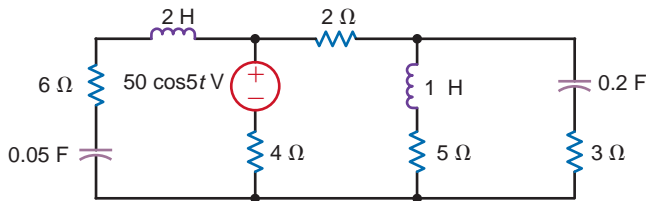


Figure P9.15

**9.20** Given the network in Fig. P9.20, show that the power supplied by the sources is equal to the power absorbed by the passive elements.

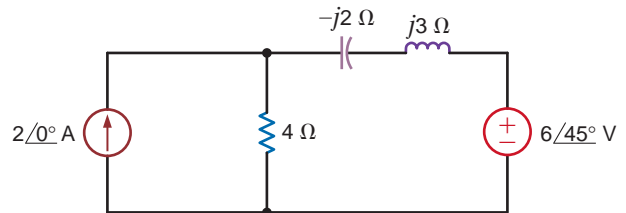


Figure P9.20

**9.16** Compute the average power absorbed by each of the elements to the right of the dashed line in the circuit shown in Fig. P9.16.

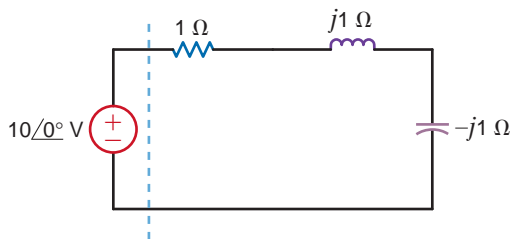


Figure P9.16

**9.17** Find the average power absorbed by the network shown in Fig. P9.17.

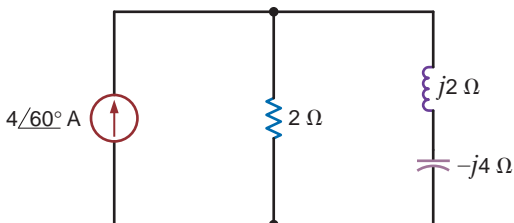


Figure P9.17

**9.18** Determine the average power supplied by each source in the network shown in Fig. P9.18.

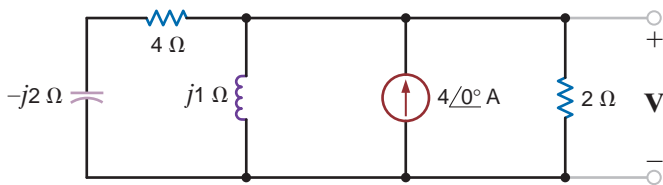


Figure P9.18

**9.21** Given the network in Fig. P9.21, find the average power supplied to the circuit.

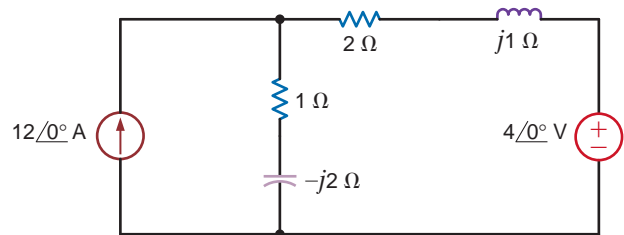


Figure P9.21

**9.22** Calculate the average power absorbed by the 1-Ω resistor in the network shown in Fig. P9.22.

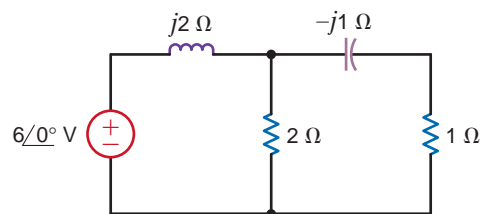


Figure P9.22

**9.23** Determine the average power absorbed by the 4-Ω resistor in the network shown in Fig. P9.23.

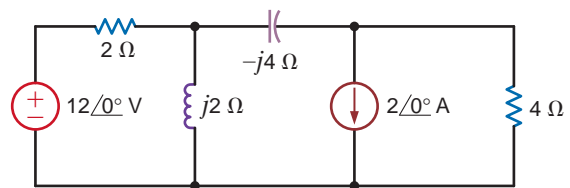


Figure P9.23



**9.24** Determine the average power supplied to the network in Fig. P9.24.

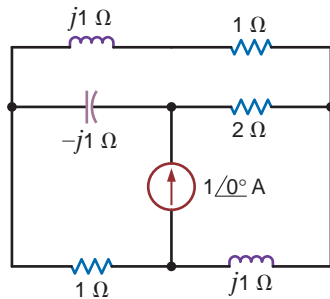


Figure P9.24

**9.25** Determine the average power absorbed by a 2-Ω resistor connected at the output terminals of the network shown in Fig. P9.25.

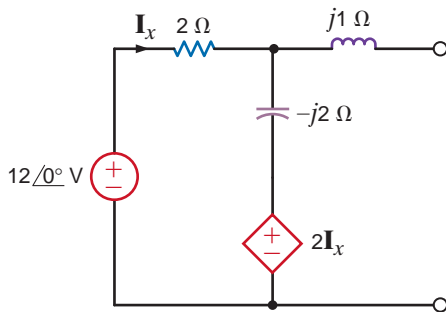


Figure P9.25

**9.26** Find the average power absorbed by the 2-Ω resistor in the circuit shown in Fig. P9.26.

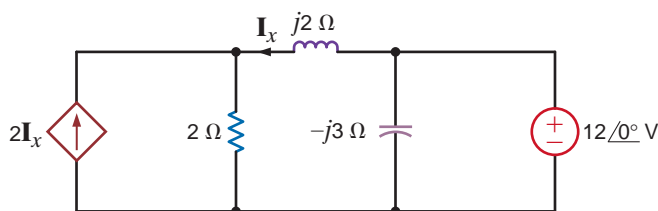


Figure P9.26

**9.27** Determine the average power absorbed by the 4-kΩ resistor in Fig. P9.27.

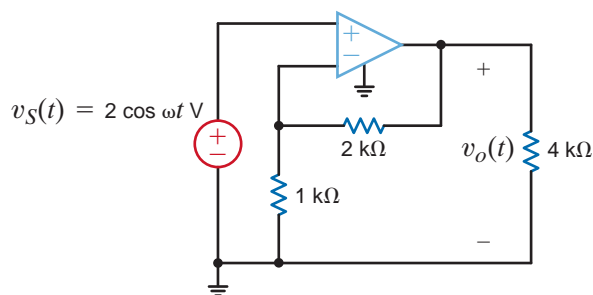


Figure P9.27

**9.28** Determine the average power absorbed by the 2-kΩ output resistor in Fig. P9.28.

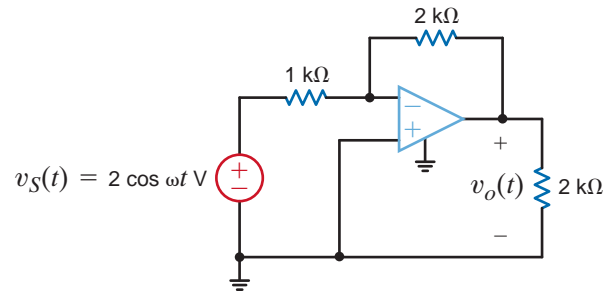


Figure P9.28

**9.29** Determine the impedance  $Z_L$  for maximum average power transfer and the value of the maximum power transferred to  $Z_L$  for the circuit shown in Fig. P9.29.

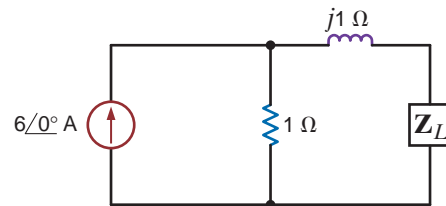


Figure P9.29

**9.30** Determine the impedance  $Z_L$  for maximum average power transfer and the value of the maximum average power transferred to  $Z_L$  for the circuit shown in Fig. P9.30.

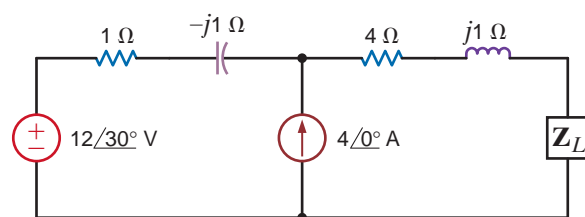


Figure P9.30

**9.31** Determine the impedance  $Z_L$  for maximum average power transfer and the value of the maximum average power absorbed by the load in the network shown in Fig. P9.31.

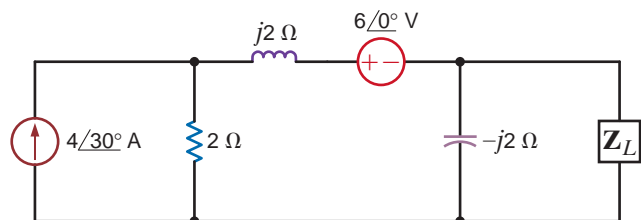


Figure P9.31

- 9.32** Determine the impedance  $Z_L$  for maximum average power transfer and the value of the maximum average power absorbed by the load in the network shown in Fig. P9.32.

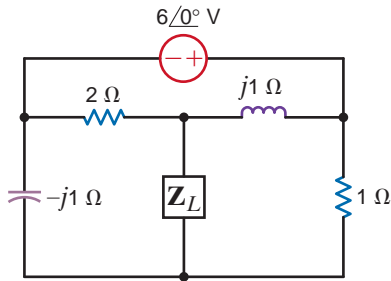


Figure P9.32

- 9.33** Find the value of  $Z_L$  in Fig. P9.33 for maximum average power transfer to the load.

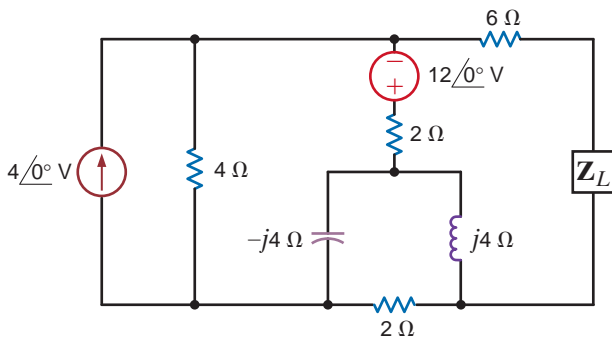


Figure P9.33

- 9.34** Find the value of  $Z_L$  in Fig. P9.34 for maximum average power transfer to the load.

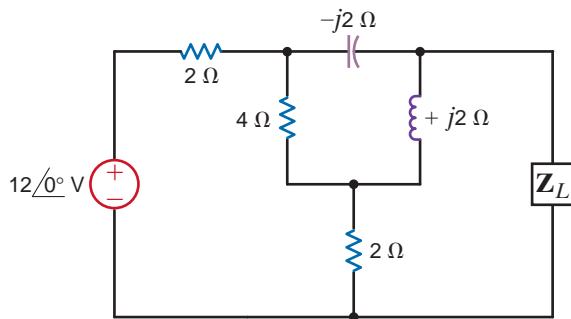


Figure P9.34

- 9.35** Find the value of  $Z_L$  in Fig. P9.35 for maximum average power transfer to the load.

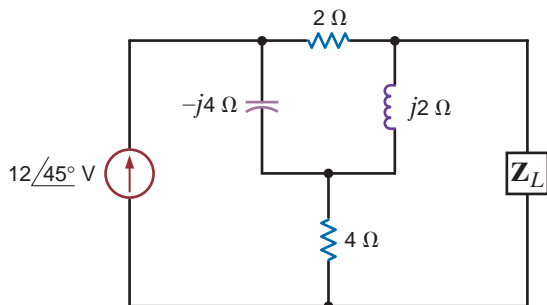


Figure P9.35

- 9.36** Find the value of  $Z_L$  in Fig. P9.36 for maximum average power transfer to the load.

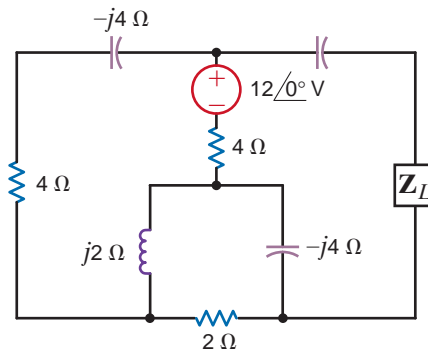


Figure P9.36

- 9.37** Determine the impedance  $Z_L$  for maximum average power transfer and the value of the maximum average power transferred to  $Z_L$  for the circuit shown in Fig. P9.37.

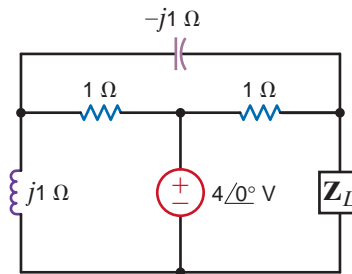


Figure P9.37

- 9.38** In the network in Fig. P9.38, find  $Z_L$  for maximum average power transfer and the maximum average power transferred.

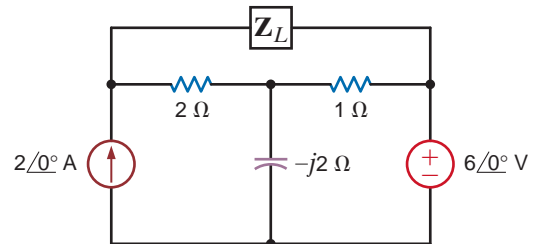


Figure P9.38

- 9.39** In the network in Fig. P9.39, find  $Z_L$  for maximum average power transfer and the maximum average power transferred.

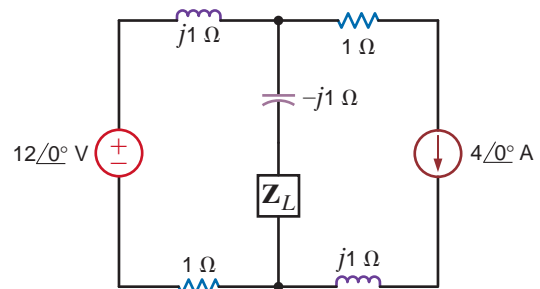


Figure P9.39

- 9.40** Determine the impedance  $Z_L$  for maximum average power transfer and the value of the maximum average power absorbed by the load in the network shown in Fig. P9.40.

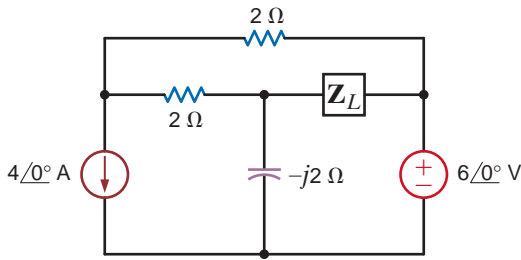


Figure P9.40

- 9.41** Find the impedance  $Z_L$  for maximum average power transfer and the value of the maximum average power transferred to  $Z_L$  for the circuit shown in Fig. P9.41.

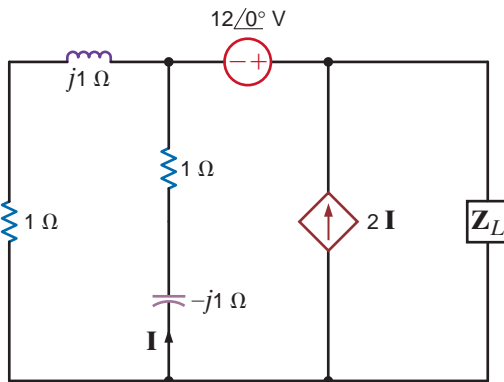


Figure P9.41

- 9.42** Repeat Problem 9.40 for the network in Fig. P9.42.

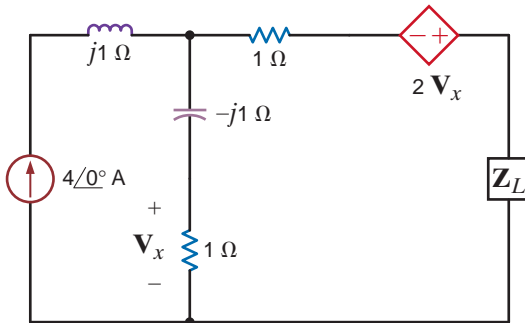


Figure P9.42

- 9.43** Compute the rms value of the voltage given by the expression  $v(t) = 10 + 20 \cos(377t + 30^\circ)$  V.

- 9.44** Compute the rms value of the voltage given by the waveform shown in Fig. P9.44.

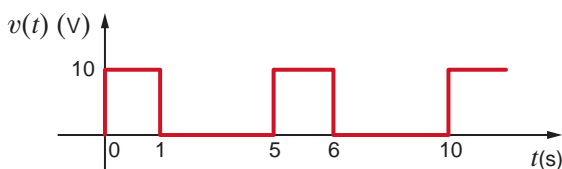


Figure P9.44

- 9.45** Find the rms value of the waveform shown in Fig. P9.45.

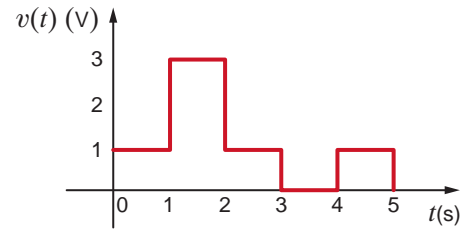


Figure P9.45

- 9.46** Calculate the rms value of the waveform shown in Fig. P9.46.

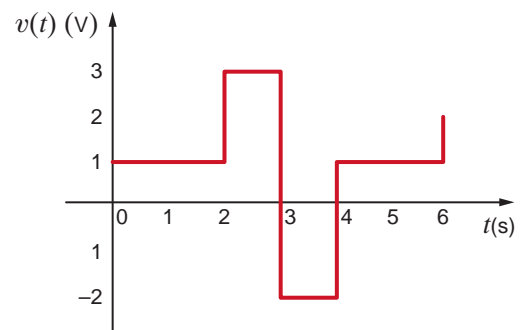


Figure P9.46

- 9.47** Calculate the rms value of the waveform shown in Fig. P9.47.

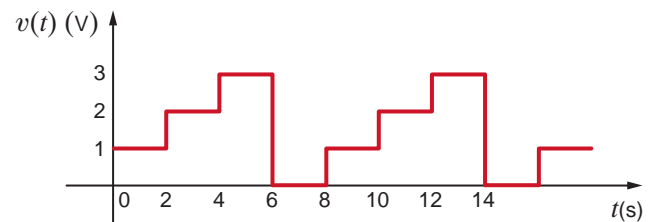


Figure P9.47

- 9.48** Calculate the rms value of the waveform in Fig. P9.48.

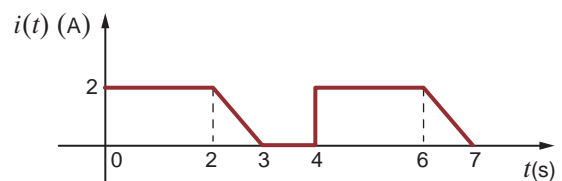


Figure P9.48

9.49 Calculate the rms value of the waveform in Fig. P9.49.

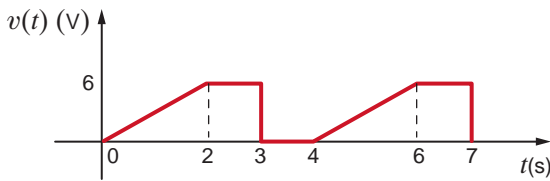


Figure P9.49

9.50 Calculate the rms value of the waveform shown in Fig. P9.50.

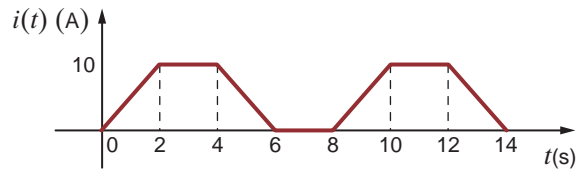


Figure P9.50

9.51 The current waveform shown in Fig. P9.51 is applied to a 4-Ω resistor. Calculate the average power dissipated in the resistor.

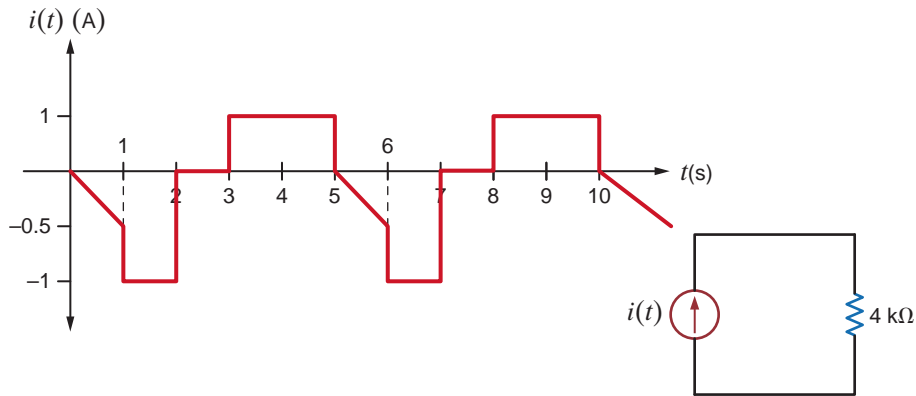


Figure P9.51

9.52 Find the rms value of the waveform shown in Fig. P9.52.

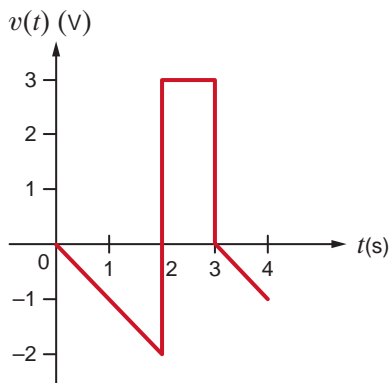


Figure P9.52

9.54 Find the rms value of the waveform shown in Fig. P9.54.

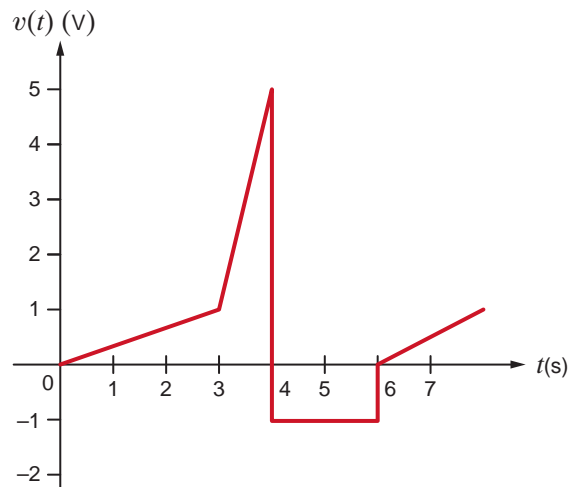


Figure P9.54

9.53 Calculate the rms value of the waveform shown in Fig. P9.53.

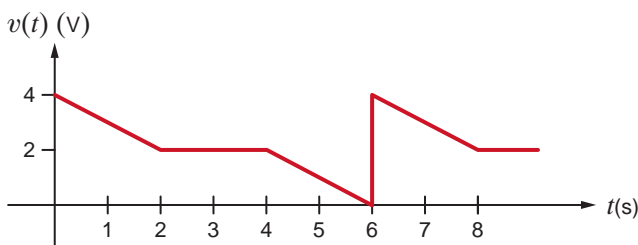


Figure P9.53

9.55 Calculate the rms value of the waveform in Fig. P9.55.

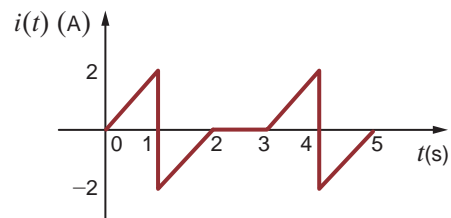


Figure P9.55

9.56 Calculate the rms value of the waveform shown in Fig. P9.56.

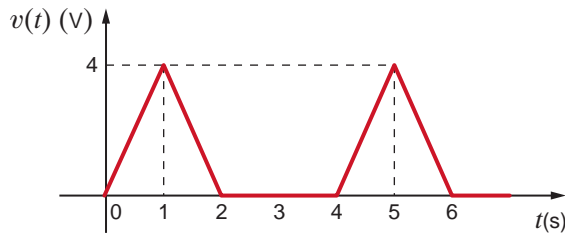


Figure P9.56

9.57 The current waveform in Fig. P9.57 is flowing through a  $5\text{-}\Omega$  resistor. Find the average power absorbed by the resistor.

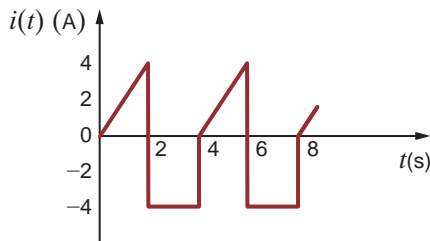


Figure P9.57

9.58 Calculate the rms value of the waveform shown in Fig. P9.58.

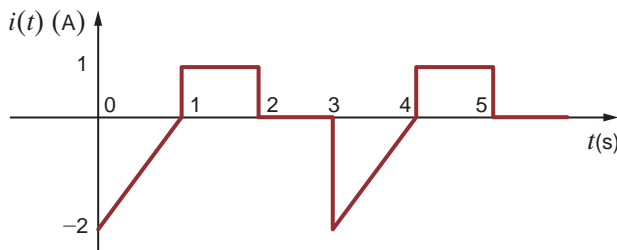


Figure P9.58

9.59 The industrial load in Fig. P9.59 is known to be inductive and consumes 90 kW. The ammeter reading is 260 A rms, and the voltmeter reading is 480 V rms. Determine the power factor of the total.

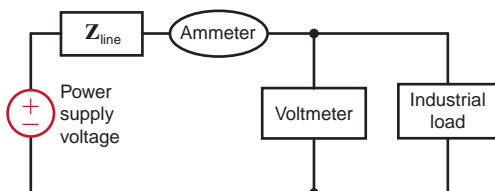


Figure P9.59

9.60 The industrial load in Fig. P9.59 consumes 110 kW at 0.88 of lagging. The ammeter leads 252 A rms. Determine the voltmeter reading.

9.61 The industrial load in Fig. P9.59 consumes 88 kW and the power factor is 0.8 lagging. The power supplied is 96 kW, and the line impedance is  $0.1\ \Omega$ . Determine the readings of the ammeter and voltmeter.

9.62 The power supply in Fig. P9.59 generates 50 kW the line impedance is  $0.095\ \Omega$ . If the load consumes 43 kW and the voltmeter leads 220 V rms, determine the ammeter leading and the power factor of the inductive load.

9.63 A plant consumes 100 kW of power at 0.9 pf lagging. If the load current is 200 A rms, find the load voltage.

9.64 A plant consumes 20 kW of power from a 240-V rms line. If the load power factor is 0.9, what is the angle by which the load voltage leads the load current? What is the load current phasor if the line voltage has a phasor of  $240\ \angle 0^\circ$  V rms?

9.65 A plant draws 250 A rms from a 240-V rms line to supply a load with 50 kW. What is the power factor of the load?

9.66 The power company must generate 100 kW to supply an industrial load with 94 kW through a transmission line with  $0.09\text{-}\Omega$  resistance. If the load power factor is 0.83 lagging, find the load voltage.

9.67 A transmission line with impedance of  $0.08 + j0.25\ \Omega$  is used to deliver power to a load. The load is inductive, and the load voltage is  $220\ \angle 0^\circ$  V rms at 60 Hz. If the load requires 12 kW and the real power loss in the line is 560 W, determine the power factor angle of the load.

9.68 The power company supplies 80 kW to an industrial load. The load draws 220 A rms from the transmission line. If the load voltage is 440 V rms and the load power factor is 0.8 lagging, find the losses in the transmission line.

9.69 The power company supplies 40 kW to an industrial load. The load draws 200 A rms from the transmission line. If the load voltage is 240 V rms and the load power factor is 0.8 lagging, find the losses in the transmission line.

9.70 An industrial load that consumes 40 kW is supplied by the power company, through a transmission line with  $0.1\text{-}\Omega$  resistance, with 44 kW. If the voltage at the load is 240 V rms, find the power factor at the load.

9.71 A transmission line with impedance  $0.1 + j0.2\ \Omega$  is used to deliver power to a load. The load is capacitive and the load voltage is  $240\ \angle 0^\circ$  V rms at 60 Hz. If the load requires 15 kW and the real power loss in the line is 660 W, determine the input voltage to the line.

9.72 An industrial load operates at 30 kW, 0.8 pf lagging. The load voltage is  $240\ \angle 0^\circ$  V rms. The real and reactive power losses in the transmission-line feeder are 1.8 kW and 2.4 kvar, respectively. Find the impedance of the transmission line and the input voltage to the line.

9.73 Find the real and reactive power absorbed by each element in the circuit in Fig. P9.73.

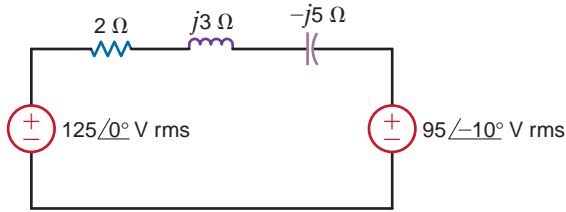


Figure P9.73

9.74 Calculate the real and reactive power absorbed by every element (including the sources) in the circuits in Fig. P9.74.

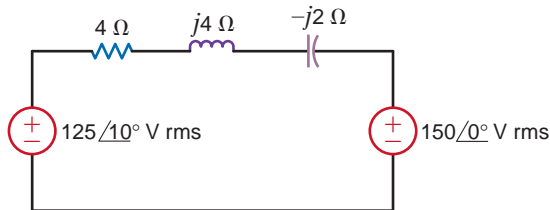


Figure P9.74

9.75 For the network in Fig. P9.75, the complex power absorbed by the source on the right is  $0 + j1582.5$  VA. Find the value of  $R$  and the unknown element and its value if  $f = 60$  Hz. (If the element is a capacitor, give its capacitance; if the element is an inductor, give its inductance.)

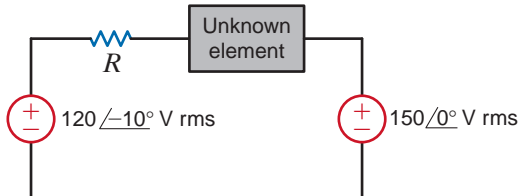


Figure P9.75

9.76 The source in the circuit in Fig. P9.76 supplies 40 kW at a power factor of 0.9 lagging. The real and reactive losses of the transmission-line feeder are 1.6 kW and 2.1 kvar, respectively. Calculate  $R$ ,  $X$ , and the load voltage.

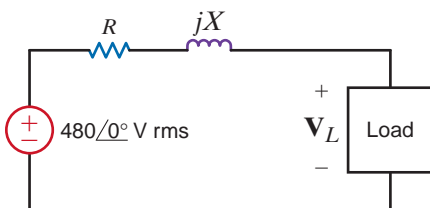


Figure P9.76

9.77 In the circuit shown in Fig. P9.77, calculate  $V_s$ , the complex power supplied by the source, and the power factor of the source.

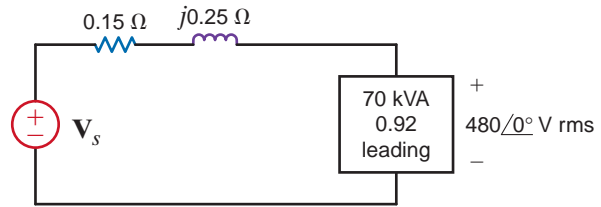


Figure P9.77

9.78 In the circuit shown in Fig. P9.78, calculate  $V_s$ , the complex power supplied by the source, and the power factor of the source.

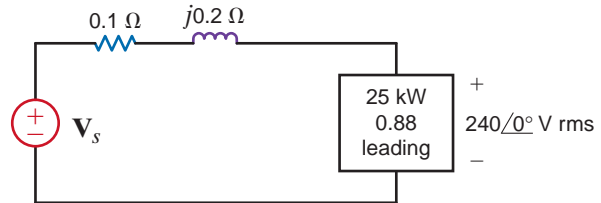


Figure P9.78

9.79 Given the network in Fig. P9.79, find the complex power supplied by the source, the power factor of the source, and the voltage  $v_s(t)$ . The frequency is 60 Hz.

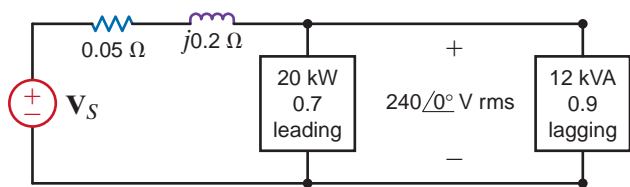


Figure P9.79

9.80 Find the complex power supplied by the source, the power factor of the source, and  $V_s(t)$  if  $f = 60$  Hz in Fig. P9.80

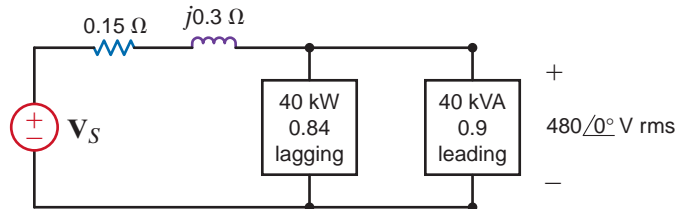


Figure P9.80

9.81 Use Kirchhoff's laws to compute the source voltage of the network shown in Fig. P9.81.

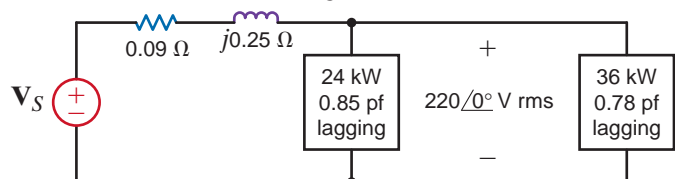


Figure P9.81

**9.82** Given the network in Fig. P9.82, determine the input voltage  $V_S$ .

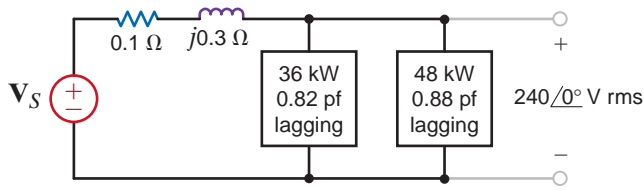


Figure P9.82

**9.83** Given the network in Fig. P9.83, determine the input voltage  $V_S$ .

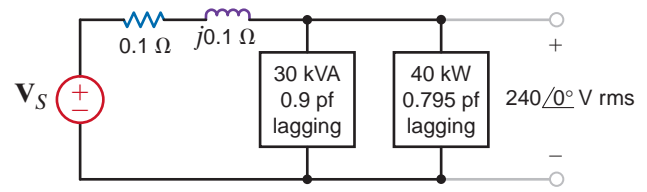


Figure P9.83

**9.84** Given the circuit in Fig. P9.84, find the complex power supplied by the source and the source power factor. If  $f = 60$  Hz, find  $v_s(t)$ .

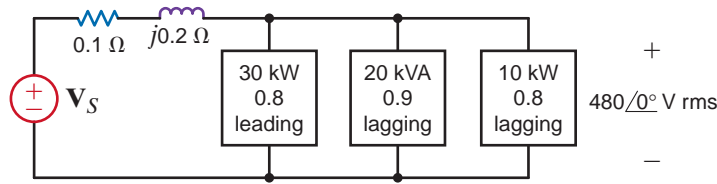


Figure P9.84

**9.85** Given the network in Fig. P9.85, compute the input source voltage and the input power factor.

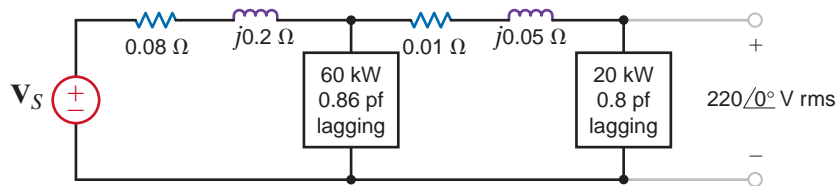


Figure P9.85

**9.86** Given the network in Fig. P9.86, compute the input source voltage and the input power factor.

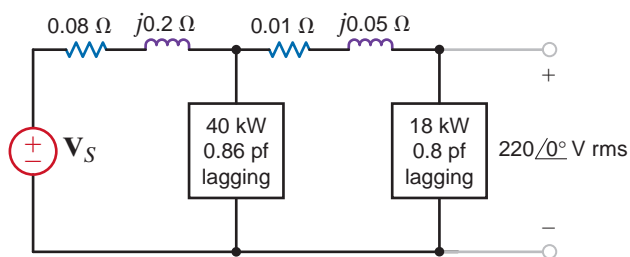


Figure P9.86

**9.87** What value of capacitance must be placed in parallel with the 18-kW load in Problem 9.86 to raise the power factor of this load to 0.9 lagging?

**9.88** An industrial load consumes 44 kW at 0.82 pf lagging from a  $240 \angle 0^\circ$ -V-rms 60-Hz line. A bank of capacitors totaling  $600 \mu\text{F}$  is available. If these capacitors are placed in parallel with the load, what is the new power factor of the total load?

**9.89** A particular load has a pf of 0.8 lagging. The power delivered to the load is 40 kW from a 270-V rms 60-Hz line. What value of capacitance placed in parallel with the load will raise the pf to 0.9 lagging?

**9.90** A particular load has a pf of 0.8 lagging. The power delivered to the load is 40 kW from a 220-V rms 60-Hz line. What value of capacitance placed in parallel with the load will raise the pf to 0.9 lagging?

**9.91** An industrial load is supplied through a transmission line that has a line impedance of  $0.1 + j0.2 \Omega$ . The 60-Hz line voltage at the load is  $480 \angle 0^\circ$  V rms. The load consumes 124 kW at 0.75 pf lagging. What value of capacitance when placed in parallel with the load will change the power factor to 0.9 lagging?

**9.92** The 60-Hz line voltage for a 60-kW, 0.76-pf lagging industrial load is  $240 \angle 0^\circ$  V rms. Find the value of capacitance that when placed in parallel with the load will raise the power factor to 0.9 lagging.

**9.93** A plant consumes 60 kW at a power factor of 0.75 lagging from a 240-V rms 60-Hz line. Determine the value of the capacitor that when placed in parallel with the load will change the load power factor to 0.9 lagging.

**9.94** A bank of induction motors consumes 36 kW at 0.78 pf lagging from a 60-Hz 240  $\angle 0^\circ$ -V rms line. If 200  $\mu\text{F}$  of capacitors are placed in parallel with the load, what is the new power factor of the total load?

**9.95** Calculate the value of capacitance in Fig. P9.95 that must be connected in parallel with the load to correct the source power factor with the load to correct the source power factor to 0.94 lagging. The frequency  $f = 60$  Hz.

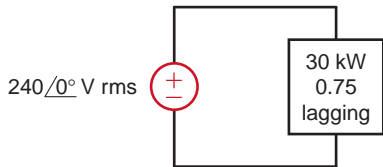


Figure P9.95

**9.96** In the circuit in Fig. P9.96, a load is modeled by an impedance of  $4 + j4 \Omega$ . Determine the value of capacitance that must be connected in parallel with the load to correct the power factor of the combined load and capacitor to 0.95 lagging. The frequency  $f = 60$  Hz.

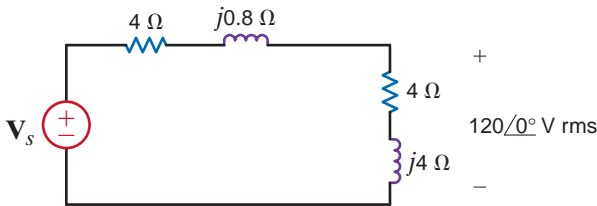


Figure P9.96

**9.97** In the circuit in Fig. P9.97, a load is modeled by an impedance of  $4 + j4 \Omega$ . Determine the value of capacitance which must be connected in parallel in with the load to correct the power factor of the combined load and capacitor to 0.95 lagging. The frequency  $f = 60$  Hz.

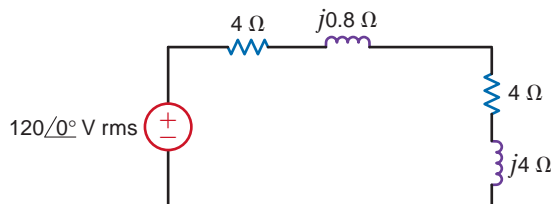


Figure P9.97

**9.98** Determine the value of capacitance in Fig. P9.98 that must be connected in parallel with the load so that the power factor of the combined load and capacitor is unity. Calculate the complex power supplied by the source after the power factor has been corrected to unity. The frequency  $f = 60$  Hz

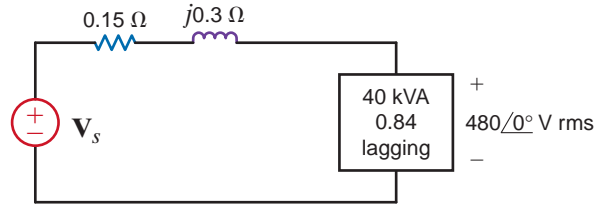


Figure P9.98

**9.99** A 5-kW load operates at 60 Hz, 240-V rms and has a power factor of 0.866 lagging. We wish to create a power factor of at least 0.975 lagging using a single capacitor. Can this requirement be met using a single capacitor from Table 6.1?

**9.100** A 5.1-kW household range is designed to operate on a 240-V rms sinusoidal voltage, as shown in Fig. P9.100a. However, the electrician has mistakenly connected the range to 120 V rms, as shown in Fig. P9.100b. What is the effect of this error?

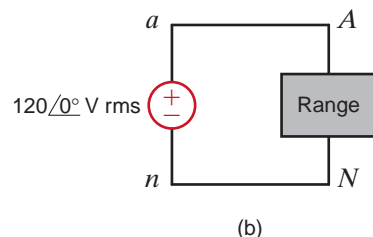
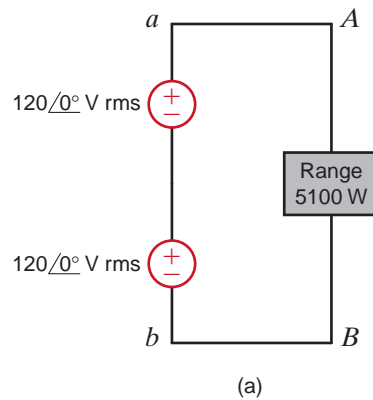
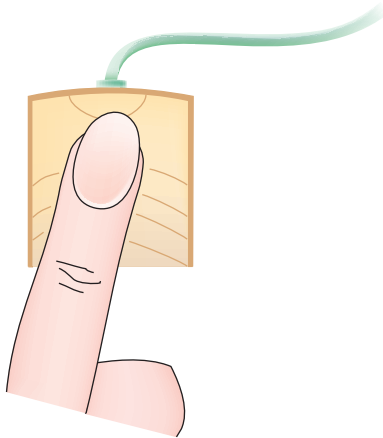


Figure P9.100



**9.101** To test a light socket, a woman, while standing on cushions that insulate her from the ground, sticks her finger into the socket, as shown in Fig. P9.101. The tip of her finger makes contact with one side of the line, and the side of her finger makes contact with the other side of the line. Assuming that any portion of a limb has a resistance of  $95 \Omega$ , is there any current in the body? Is there any current in the vicinity of the heart?



**Figure P9.101**

**9.102** An inexperienced mechanic is installing a 12-V battery in a car. The negative terminal has been connected. He is currently tightening the bolts on the positive terminal. With a tight grip on the wrench, he turns it so that the gold ring on his finger makes contact with the frame of the car. This situation is modeled in Fig. P9.102, where we assume that the resistance of the wrench is negligible and the resistance of the contact is as follows:

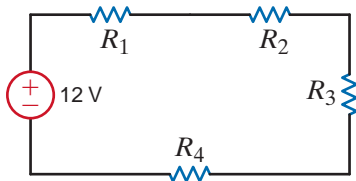
$$R_1 = R_{\text{bolt to wrench}} = 0.012 \Omega$$

$$R_2 = R_{\text{wrench to ring}} = 0.012 \Omega$$

$$R_3 = R_{\text{ring}} = 0.012 \Omega$$

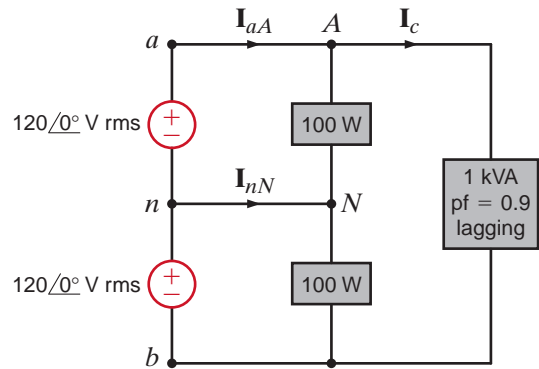
$$R_4 = R_{\text{ring to frame}} = 0.012 \Omega$$

What power is quickly dissipated in the gold ring, and what is the impact of this power dissipation?



**Figure P9.102**

**9.103** A single-phase three-wire 60-Hz circuit serves three loads, as shown in Fig. P9.103. Determine  $I_{aA}$ ,  $I_{nN}$ ,  $I_c$ , and the energy use over a 24-hour period in kilowatt-hours.



**Figure P9.103**

**9.104** A number of 120-V rms household fixtures are to be used to provide lighting for a large room. The total lighting load is 8 kW. The National Electric Code requires that no circuit breaker be larger than 20 A rms with a 25% safety margin. Determine the number of identical branch circuits needed for this requirement.

**9.105** A man and his son are flying a kite. The kite becomes entangled in a 7200-V rms power line close to a power pole. The man crawls up the pole to remove the kite. While trying to remove the kite, the man accidentally touches the 7200-V rms line. Assuming that the power pole is well grounded, what is the potential current through the man's body?

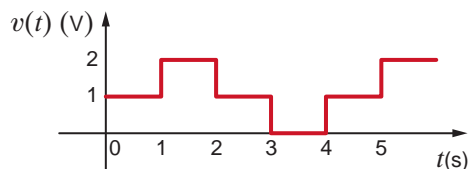
**TYPICAL PROBLEMS FOUND ON THE FE EXAM**

**9PFE-1** An industrial load consumes 120 kW at 0.707 pf lagging and is connected to a  $480 \angle 0^\circ$  V rms 60-Hz line. Determine the value of the capacitor that, when connected in parallel with the load, will raise the power factor to 0.95 lagging.

- a. 642  $\mu$ F
- b. 763  $\mu$ F
- c. 928  $\mu$ F
- d. 471  $\mu$ F

**9PFE-2** Determine the rms value of the following waveform.

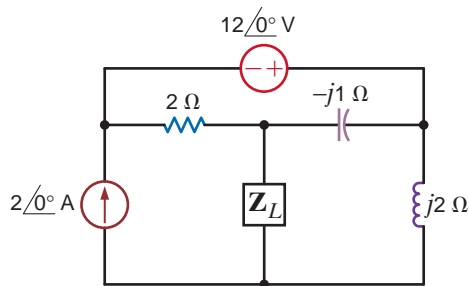
- a. 2.33 V
- b. 1 V
- c. 3.25 V
- d. 1.22 V



**Figure 9PFE-2**

**9PFE-3** Find the impedance  $Z_L$  in the network in Fig. 9PFE-3 for maximum power transfer.

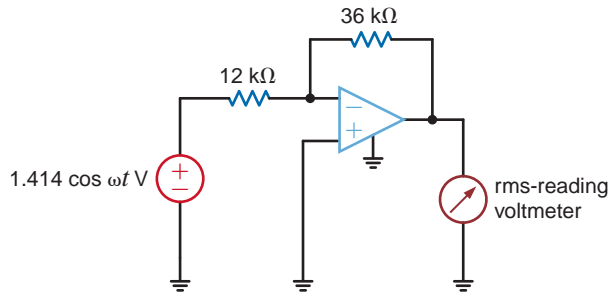
- a.  $0.8 + j2.4 \Omega$
- b.  $0.4 - j1.2 \Omega$
- c.  $0.2 + j1.4 \Omega$
- d.  $0.3 - j1.6 \Omega$



**Figure 9PFE-3**

**9PFE-4** An rms-reading voltmeter is connected to the output of the op-amp shown in Fig. 9PFE-4. Determine the meter reading.

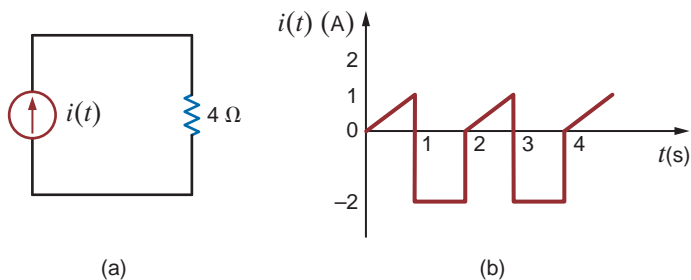
- a. 3 V
- b. 5.2 V
- c. 4.24 V
- d. 2 V



**Figure 9PFE-4**


**9PFE-5** Determine the average power delivered to the resistor in Fig. 9PFE-5a if the current waveform is shown in Fig. 9PFE-5b.

- a. 18.78 W
- b. 8.64 W
- c. 2.82 W
- d. 10.91 W



**Figure 9PFE-5**

# MAGNETICALLY COUPLED NETWORKS



Fudan Li/iStockphoto

## THE LEARNING GOALS FOR THIS CHAPTER ARE:

- Understand the concepts of mutual inductance, coefficient of coupling, and turns ratio
- Know how to calculate voltages and currents in circuits containing mutual inductance
- Know how to calculate voltages and currents in circuits containing ideal transformers

**Magnetic Levitation Train** The Pony Express is to today's electronic mail as the stagecoach of the Old West is to which modern miracle of land transportation? Did you guess a speeding locomotive? Very good, but a better answer is the magnetic levitation train—abbreviated MagLev. These passenger trains—the world's fastest—float on a magnetic field about 10 mm above the guideway, propelled by a linear induction motor. Shanghai Pudong International Airport has a MagLev that reaches speeds over 300 mph, 60% faster than the famed Bullet Trains of Japan. It gives the smoothest ride ever, coasting along under magnetic power.

MagLev trains are used primarily when two large cities are to be connected for passenger service. MagLev systems have several advantages: lower maintenance because there are no moving parts; no friction, only air resistance; an absence of

wheel noises; no exhaust fumes; and amazing speed. The only drawbacks are higher costs and lack of compatibility with existing infrastructure.

This chapter introduces a central concept of MagLev technology: the magnetic effects of mutual coupling in circuits resulting from changing currents. Voltages are induced in nearby branches due to these magnetic fields—this coupling is quantified by mutual inductance terms. Transformers that step up or step down voltages and currents from their primary to secondary sides are useful in several ways, such as transmitting power over long distances or for impedance matching in acoustical equipment. Requiring extremely strong magnetic fields, MagLev trains depend on these same mutual coupling effects for high-speed transportation. It's not magic; it's electromagnetics.

## 10.1

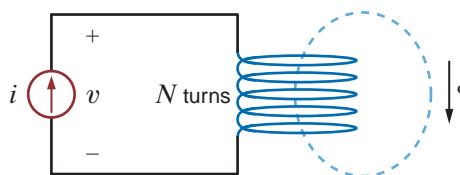
## Mutual Inductance

As we introduce this subject, we feel compelled to remind the reader, once again, that in our analyses we assume that we are dealing with “ideal” elements. For example, we ignore the resistance of the coil used to make an inductor and any stray capacitance that might exist. This approach is especially important in our discussion of mutual inductance because an exact analysis of this topic is quite involved. As is our practice, we will treat the subject in a straightforward manner and ignore issues beyond the scope of this book that only serve to complicate the presentation.

To begin our discussion of mutual inductance, we will recall two important laws: Ampère’s law and Faraday’s law. Ampère’s law predicts that the flow of electric current will create a magnetic field. If the field links an electric circuit, and that field is time-varying, Faraday’s law predicts the creation of a voltage within the linked circuit. Although this occurs to some extent in all circuits, the effect is magnified in coils because the circuit geometry amplifies the linkage effect. With these ideas in mind, consider the ideal situation in Fig. 10.1 in which a current  $i$  flows in an  $N$ -turn coil and produces a magnetic field, represented by magnetic flux  $\phi$ . The flux linkage for this coil is

$$\lambda = N\phi \quad 10.1$$

**Figure 10.1**  
Magnetic flux  $\phi$  linking  
an  $N$ -turn coil.



For the linear systems that we are studying in this textbook, the flux linkage and current are related by

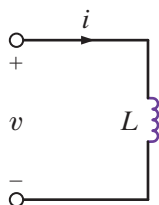
$$\lambda = Li \quad 10.2$$

The constant of proportionality between the flux linkage and current is the inductance, which we studied in Chapter 6. Eqs. (10.1) and (10.2) can be utilized to express the magnetic flux in terms of the current:

$$\phi = \frac{L}{N} i \quad 10.3$$

According to Faraday’s law, the voltage induced in the coil is related to the time rate of change of the flux linkage  $\lambda$ :

$$v = \frac{d\lambda}{dt} \quad 10.4$$



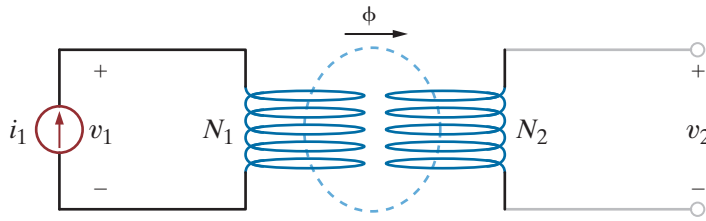
**Figure 10.2**  
An ideal inductor.

Let’s substitute Eq. (10.2) into Eq. (10.4) and use the chain rule to take the derivative:

$$v = \frac{d\lambda}{dt} = \frac{d}{dt} (Li) = L \frac{di}{dt} + i \frac{dL}{dt} \quad 10.5$$

We will not allow our inductances to vary with time, so Eq. (10.5) reduces to the defining equation for the ideal inductor, as shown in Fig. 10.2:

$$v = L \frac{di}{dt} \quad 10.6$$



**Figure 10.3**  
Two coils magnetically coupled.

Note that the voltage and current in this figure satisfy the passive sign convention. Equation (10.6) tells us that a current  $i$  flowing through a coil produces a voltage  $v$  across that coil.

Now let's suppose that a second coil with  $N_2$  turns is moved close enough to an  $N_1$ -turn coil such that the magnetic flux produced by current  $i_1$  links the second coil. No current flows in the second coil as shown in Fig. 10.3. By Faraday's law, a voltage  $v_2$  will be induced because the magnetic flux  $\phi$  links the second coil. The flux linkage for coil 1 is

$$\lambda_1 = N_1\phi = L_1i_1 \quad 10.7$$

Current flowing in coil 1 produces a voltage  $v_1 = \frac{d\lambda_1}{dt} = L_1 \frac{di_1}{dt}$ . We have been referring to  $L_1$  as the inductance. In multiple coil systems, we will refer to  $L_1$  as the self-inductance of coil 1. The flux linkage for coil 2 is  $\lambda_2 = N_2\phi$ , and from Faraday's law, the voltage  $v_2$  is given as

$$v_2 = \frac{d\lambda_2}{dt} = \frac{d}{dt}(N_2\phi) = \frac{d}{dt}\left(N_2\left(\frac{L_1}{N_1}i_1\right)\right) = \frac{N_2}{N_1}L_1 \frac{di_1}{dt} = L_{21} \frac{di_1}{dt} \quad 10.8$$

Note that the voltage  $v_2$  is directly proportional to the time rate of change of  $i_1$ . The constant of proportionality,  $L_{21}$ , is defined as the mutual inductance and is given in units of henrys. We will say that the coils in Fig. 10.3 are magnetically coupled.

Let's connect a current source to the terminals of coil 2 as shown in Fig. 10.4. Both currents contribute to the magnetic flux  $\phi$ . For the coil configuration and current directions shown in this figure, the flux linkages for each coil are

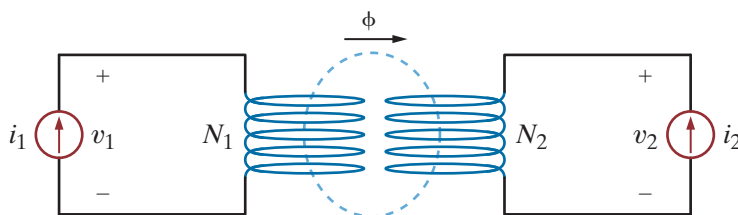
$$\lambda_1 = L_1i_1 + L_{12}i_2 \quad 10.9$$

$$\lambda_2 = L_{21}i_1 + L_2i_2 \quad 10.10$$

Applying Faraday's law,

$$v_1 = \frac{d\lambda_1}{dt} = L_1 \frac{di_1}{dt} + L_{12} \frac{di_2}{dt} \quad 10.11$$

$$v_2 = \frac{d\lambda_2}{dt} = L_{21} \frac{di_1}{dt} + L_2 \frac{di_2}{dt} \quad 10.12$$



**Figure 10.4**  
Two magnetically coupled coils driven by current sources.

Since we have limited our study to linear systems,  $L_{12} = L_{21} = M$ , where  $M$  is the symbol for mutual inductance. From Eqs. (10.11) and (10.12), we can see that the voltage across each coil is composed of two terms: a “self term” due to current flowing in that coil and a “mutual term” due to current flowing in the other coil.

If the direction of  $i_2$  in Fig. 10.4 is reversed, Eqs. (10.9) through (10.12) become

$$\lambda_1 = L_1 i_1 - M i_2 \tag{10.13}$$

$$\lambda_2 = -M i_1 + L_2 i_2 \tag{10.14}$$

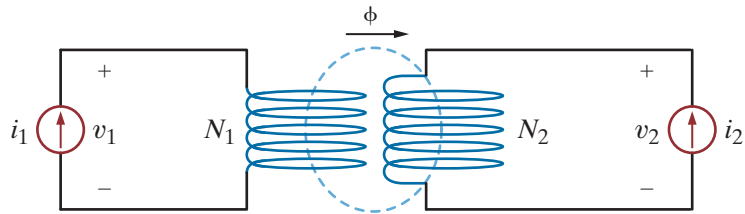
$$v_1 = \frac{d\lambda_1}{dt} = L_1 \frac{di_1}{dt} - M \frac{di_2}{dt} \tag{10.15}$$

$$v_2 = \frac{d\lambda_2}{dt} = -M \frac{di_1}{dt} + L_2 \frac{di_2}{dt} \tag{10.16}$$

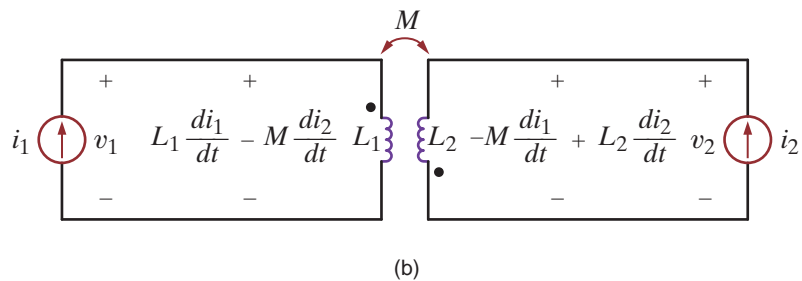
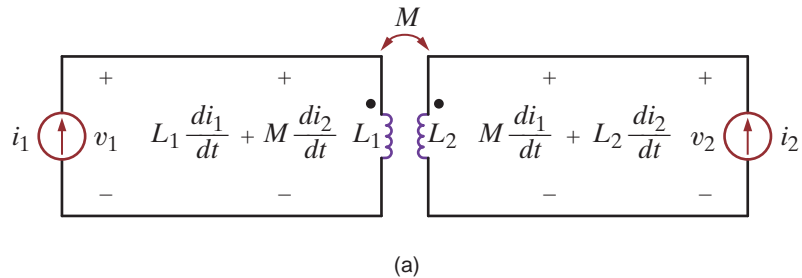
Eqs. (10.13)–(10.16) can also be obtained from the circuit in Fig. 10.5. Note that coil 2 in this figure has a different winding arrangement as compared to coil 2 in Fig. 10.4.

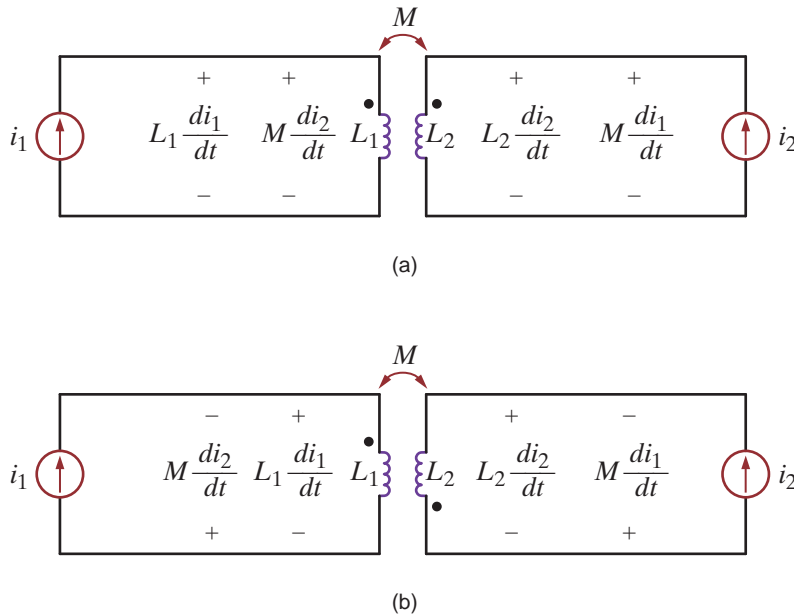
Our circuit diagrams will become quite complex if we have to include details of the winding configuration. The use of the dot convention permits us to maintain these details while simplifying our circuit diagrams. Fig. 10.6a is the circuit diagram for the magnetically coupled coils of Fig. 10.4. The coils are represented by two coupled inductors with self-inductances  $L_1$  and  $L_2$  and mutual inductance  $M$ . Recall that the voltage across each coil consists of two terms: a self term due to current flowing in that coil and a mutual term due to current flowing in the other coil. The self term is the same voltage that we discussed in an earlier chapter. The mutual term results from current flowing in the other coupled coil.

**Figure 10.5**  
Magnetically coupled coils with different winding configuration.



**Figure 10.6**  
Circuit diagrams for magnetically coupled coils.



**Figure 10.7**

Circuit diagrams for magnetically coupled coils showing self and mutual voltage terms.

In Fig. 10.6a, the mutual terms are positive when both currents enter the dots. The opposite is true when one current enters a dot and the other current leaves a dot, as seen in Fig. 10.6b. Let's use this observation to develop a general procedure for writing circuit equations for magnetically coupled inductors. Fig. 10.7a is the same diagram as Fig. 10.6a except that the voltage across the inductors is broken into the self term and the mutual term. The polarity of the self terms— $L_1 di_1/dt$  and  $L_2 di_2/dt$ —are given by the passive sign convention used extensively throughout this text. These terms would be present even if the coils were not magnetically coupled. The mutual terms in Fig. 10.7a have the same polarity as the self terms. Note that both currents are entering the dots in Fig. 10.7a. The opposite is true in Fig. 10.7b. The self terms have the same polarity as before; however, the polarities for the mutual terms are different from those in Fig. 10.7a. We can now make a general statement:

When a current is defined to enter the dotted terminal of a coil, it produces a voltage in the coupled coil which is positive at the dotted terminal. Similarly, when a current is defined to enter the undotted terminal of a coil, it produces a voltage in the coupled coil which is positive at the undotted terminal.

Let's illustrate the use of this statement through some examples.

## Problem-Solving Strategy

- Step 1.** Assign mesh currents. It is usually much easier to write mesh equations for a circuit containing magnetically coupled inductors than nodal equations.
- Step 2.** Write mesh equations by applying KVL. If a defined current enters the dotted terminal on one coil, it produces a voltage in the other coil that is positive at the dotted terminal. If a defined current enters the undotted terminal on one coil, it produces a voltage in the other coil that is positive at the undotted terminal.
- Step 3.** Solve for the mesh currents.

### Magnetically Coupled Inductors

**EXAMPLE**

 Determine the equations for  $v_1(t)$  and  $v_2(t)$  in the circuit shown in Fig. 10.8a.

**10.1 SOLUTION**

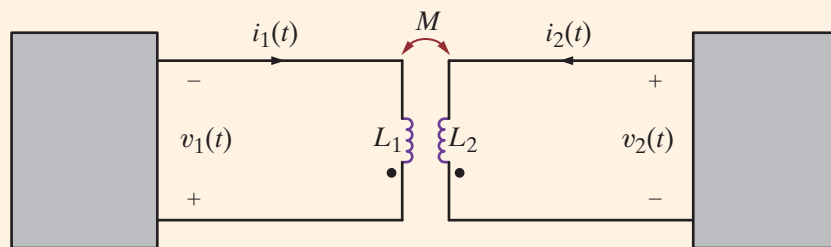
The different voltage terms for the circuit are shown on the circuit diagram in Fig. 10.8b. The polarity of the self terms is given by the passive sign convention. For both coils, the defined currents are entering the undotted terminals on both coils. As a result, the polarity of the voltages produced by these currents is positive at the undotted terminal of the other coils. The equations for  $v_1(t)$  and  $v_2(t)$  are

$$v_1(t) = -L_1 \frac{di_1}{dt} - M \frac{di_2}{dt}$$

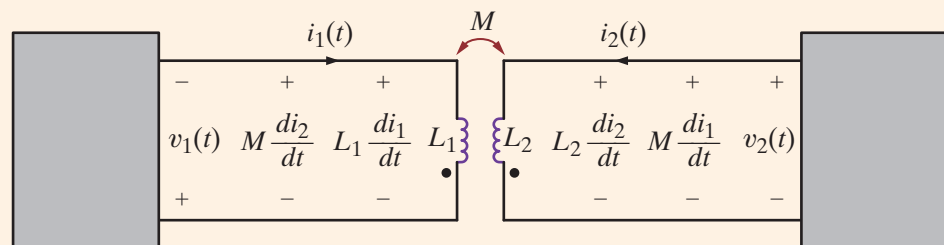
$$v_2(t) = L_2 \frac{di_2}{dt} + M \frac{di_1}{dt}$$

**Figure 10.8a**

Circuit used in Example 10.1.


**Figure 10.8b**

Circuit showing self and mutual voltage terms.


**EXAMPLE**

Write mesh equations for the circuit of Fig. 10.9a using the assigned mesh currents.

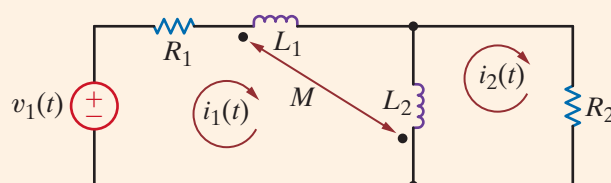
**10.2 SOLUTION**

The circuit in Fig. 10.9b shows the voltage terms for mesh 1. The polarity of the self terms for  $L_1$  and  $L_2$  is determined by the passive sign convention. The current  $(i_2 - i_1)$  enters the dotted terminal of inductor  $L_2$ . This current produces the mutual term shown across inductor  $L_1$ . Current  $i_1$  enters the dotted terminal of  $L_1$  and produces a voltage across  $L_2$  that is positive at its dotted terminal. The equation for this mesh is

$$v_1(t) = R_1 i_1(t) + L_1 \frac{di_1}{dt} + M \frac{d}{dt} (i_2 - i_1) + L_2 \frac{d}{dt} (i_1 - i_2) - M \frac{di_1}{dt}$$

**Figure 10.9a**

Circuit used in Example 10.2.





The voltage terms for the second mesh are shown in Fig. 10.9c. The equation for mesh 2 is

$$\begin{aligned} R_2 i_2(t) + L_2 \frac{d}{dt} (i_2 - i_1) + M \frac{di_1}{dt} = 0 \\ + M \frac{d}{dt} (i_2 - i_1) - \\ + L_1 \frac{di_1}{dt} - \end{aligned}$$

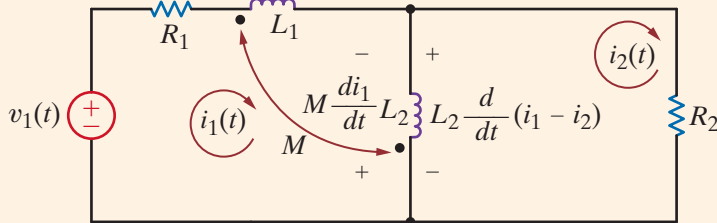


Figure 10.9b

Circuit showing voltage terms for mesh 1.

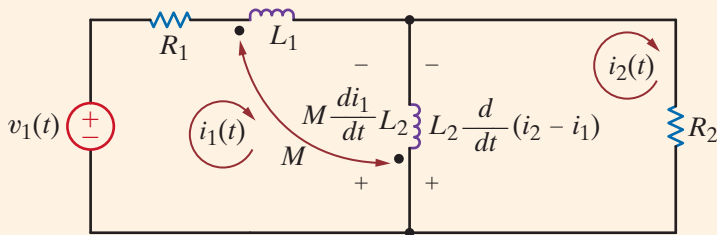


Figure 10.9c

Circuit showing voltage terms for mesh 2.

## Learning Assessment

**E10.1** Write the equations for  $v_1(t)$  and  $v_2(t)$  in the circuit in Fig. E10.1.

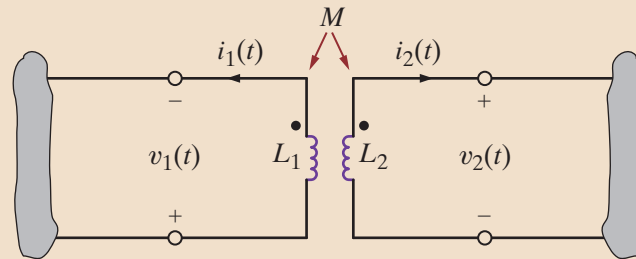


Figure E10.1

**ANSWER:**

$$\begin{aligned} v_1(t) &= L_1 \frac{di_1(t)}{dt} + M \frac{di_2(t)}{dt}; \\ v_2(t) &= -L_2 \frac{di_2(t)}{dt} - M \frac{di_1(t)}{dt}. \end{aligned}$$

Assume that the coupled circuit in Fig. 10.10 is excited with a sinusoidal source. The voltages will be of the form  $\mathbf{V}_1 e^{j\omega t}$  and  $\mathbf{V}_2 e^{j\omega t}$ , and the currents will be of the form  $\mathbf{I}_1 e^{j\omega t}$  and  $\mathbf{I}_2 e^{j\omega t}$ , where  $\mathbf{V}_1$ ,  $\mathbf{V}_2$ ,  $\mathbf{I}_1$ , and  $\mathbf{I}_2$  are phasors. Substituting these voltages and currents into Eqs. (10.11) and (10.12), and using the fact that  $L_{12} = L_{21} = M$ , we obtain

$$\mathbf{V}_1 = j\omega L_1 \mathbf{I}_1 + j\omega M \mathbf{I}_2 \quad 10.17$$

$$\mathbf{V}_2 = j\omega L_2 \mathbf{I}_2 + j\omega M \mathbf{I}_1$$

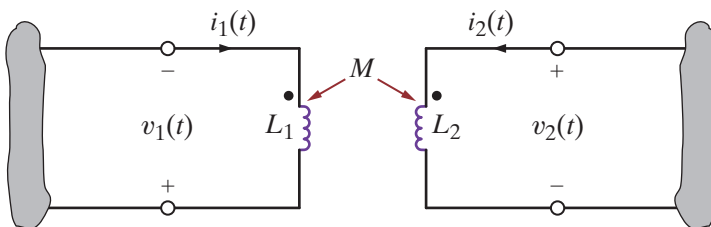


Figure 10.10

Mutually coupled coils.

The model of the coupled circuit in the frequency domain is identical to that in the time domain except for the way the elements and variables are labeled. The sign on the mutual terms is handled in the same manner as is done in the time domain.

### EXAMPLE 10.3

#### SOLUTION

The two mutually coupled coils in Fig. 10.11a can be interconnected in four possible ways. We wish to determine the equivalent inductance of each of the four possible interconnections.

Case 1 is shown in Fig. 10.11b. In this case

$$\begin{aligned} \mathbf{V} &= j\omega L_1 \mathbf{I} + j\omega M \mathbf{I} + j\omega L_2 \mathbf{I} + j\omega M \mathbf{I} \\ &= j\omega L_{\text{eq}} \mathbf{I} \end{aligned}$$

where  $L_{\text{eq}} = L_1 + L_2 + 2M$ .

Case 2 is shown in Fig. 10.11c. Using KVL, we obtain

$$\begin{aligned} \mathbf{V} &= j\omega L_1 \mathbf{I} - j\omega M \mathbf{I} + j\omega L_2 \mathbf{I} - j\omega M \mathbf{I} \\ &= j\omega L_{\text{eq}} \mathbf{I} \end{aligned}$$

where  $L_{\text{eq}} = L_1 + L_2 - 2M$ .

Case 3 is shown in Fig. 10.11d and redrawn in Fig. 10.11e. The two KVL equations are

$$\begin{aligned} \mathbf{V} &= j\omega L_1 \mathbf{I}_1 + j\omega M \mathbf{I}_2 \\ \mathbf{V} &= j\omega M \mathbf{I}_1 + j\omega L_2 \mathbf{I}_2 \end{aligned}$$

Solving these equations for  $\mathbf{I}_1$  and  $\mathbf{I}_2$  yields

$$\begin{aligned} \mathbf{I}_1 &= \frac{\mathbf{V}(L_2 - M)}{j\omega(L_1 L_2 - M^2)} \\ \mathbf{I}_2 &= \frac{\mathbf{V}(L_1 - M)}{j\omega(L_1 L_2 - M^2)} \end{aligned}$$

Using KCL gives us

$$\mathbf{I} = \mathbf{I}_1 + \mathbf{I}_2 = \frac{\mathbf{V}(L_1 + L_2 - 2M)}{j\omega(L_1 L_2 - M^2)} = \frac{\mathbf{V}}{j\omega L_{\text{eq}}}$$

where

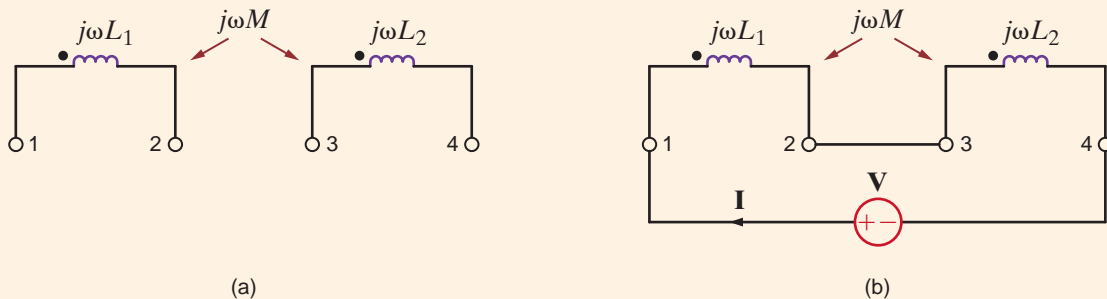
$$L_{\text{eq}} = \frac{L_1 L_2 - M^2}{L_1 + L_2 - 2M}$$

Case 4 is shown in Fig. 10.11f. The voltage equations in this case will be the same as those in case 3 except that the signs of the mutual terms will be negative. Therefore,

$$L_{\text{eq}} = \frac{L_1 L_2 - M^2}{L_1 + L_2 + 2M}$$

**Figure 10.11**

Circuits used in Example 10.3.



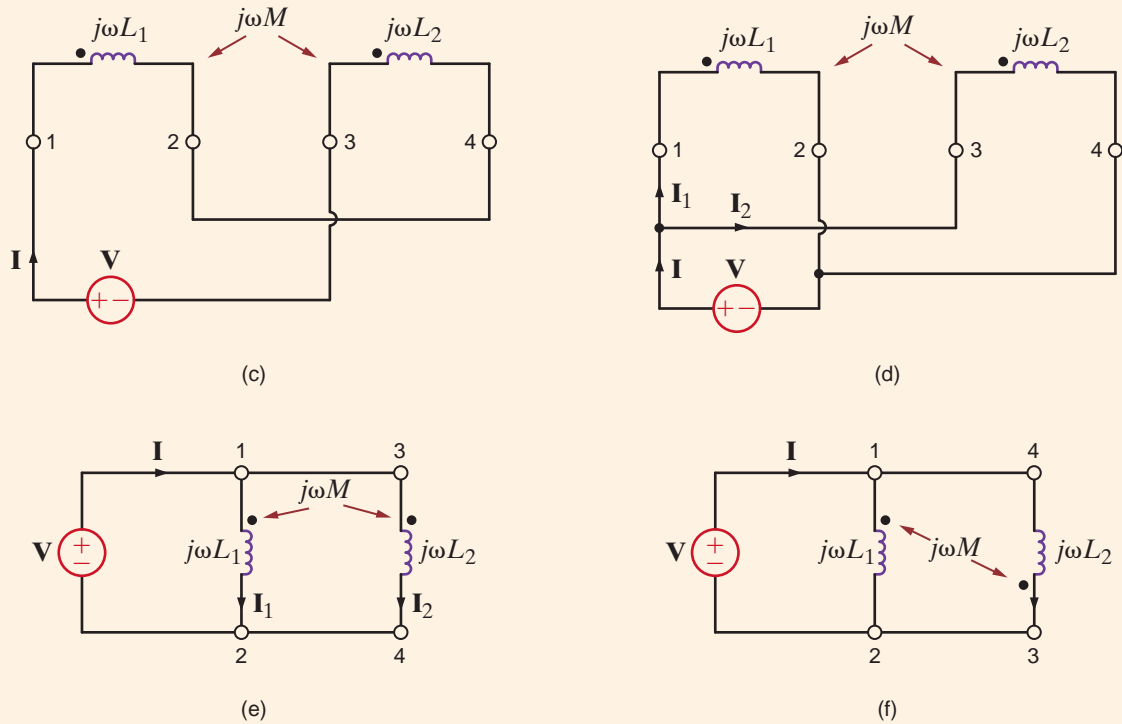


Figure 10.11

(continued)

We wish to determine the output voltage  $V_o$  in the circuit in Fig. 10.12.

The two KVL equations for the network are

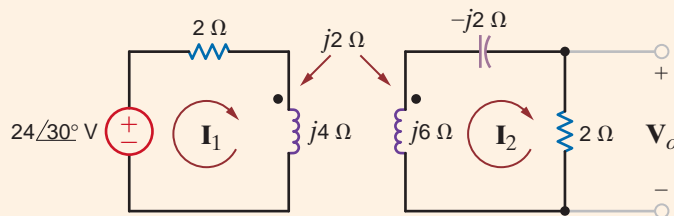
$$\begin{aligned}(2 + j4)\mathbf{I}_1 - j2\mathbf{I}_2 &= 24\angle 30^\circ \\ -j2\mathbf{I}_1 + (2 + j6 - j2)\mathbf{I}_2 &= 0\end{aligned}$$

Solving the equations yields

$$\mathbf{I}_2 = 2.68\angle 3.43^\circ \text{ A}$$

Therefore,

$$\begin{aligned}\mathbf{V}_o &= 2\mathbf{I}_2 \\ &= 5.36\angle 3.43^\circ \text{ V}\end{aligned}$$



## EXAMPLE 10.4

**SOLUTION**

Figure 10.12

Example of a magnetically coupled circuit.

Let us now consider a more complicated example involving mutual inductance.

## EXAMPLE 10.5

### SOLUTION

Consider the circuit in Fig. 10.13. We wish to write the mesh equations for this network.

Because of the multiple currents that are present in the coupled inductors, we must be very careful in writing the circuit equations.

The mesh equations for the phasor network are

$$\begin{aligned} \mathbf{I}_1 R_1 + j\omega L_1(\mathbf{I}_1 - \mathbf{I}_2) + j\omega M(\mathbf{I}_2 - \mathbf{I}_3) + \frac{1}{j\omega C_1}(\mathbf{I}_1 - \mathbf{I}_2) &= \mathbf{V} \\ \frac{1}{j\omega C_1}(\mathbf{I}_2 - \mathbf{I}_1) + j\omega L_1(\mathbf{I}_2 - \mathbf{I}_1) + j\omega M(\mathbf{I}_3 - \mathbf{I}_2) + R_2 \mathbf{I}_2 \\ + j\omega L_2(\mathbf{I}_2 - \mathbf{I}_3) + j\omega M(\mathbf{I}_1 - \mathbf{I}_2) + R_3(\mathbf{I}_2 - \mathbf{I}_3) &= 0 \\ R_3(\mathbf{I}_3 - \mathbf{I}_2) + j\omega L_2(\mathbf{I}_3 - \mathbf{I}_2) + j\omega M(\mathbf{I}_2 - \mathbf{I}_1) \\ + \frac{1}{j\omega C_2} \mathbf{I}_3 + R_4 \mathbf{I}_3 &= 0 \end{aligned}$$

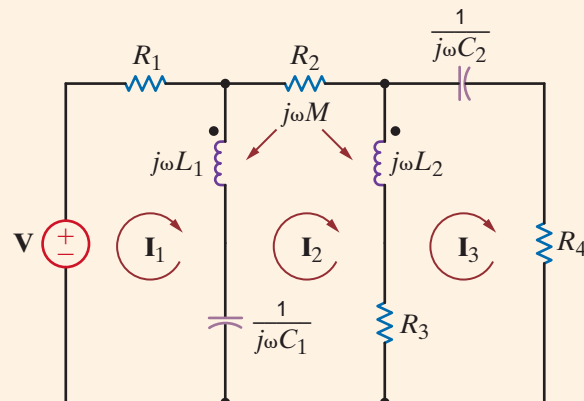
which can be rewritten in the form

$$\begin{aligned} \left(R_1 + j\omega L_1 + \frac{1}{j\omega C_1}\right) \mathbf{I}_1 - \left(j\omega L_1 + \frac{1}{j\omega C_1} - j\omega M\right) \mathbf{I}_2 \\ - j\omega M \mathbf{I}_3 &= \mathbf{V} \\ -\left(j\omega L_1 + \frac{1}{j\omega C_1} - j\omega M\right) \mathbf{I}_1 \\ + \left(\frac{1}{j\omega C_1} + j\omega L_1 + R_2 + j\omega L_2 + R_3 - j2\omega M\right) \mathbf{I}_2 \\ - (j\omega L_2 + R_3 - j\omega M) \mathbf{I}_3 &= 0 \\ -j\omega M \mathbf{I}_1 - (R_3 + j\omega L_2 - j\omega M) \mathbf{I}_2 \\ + \left(R_3 + j\omega L_2 + \frac{1}{j\omega C_2} + R_4\right) \mathbf{I}_3 &= 0 \end{aligned}$$

Note the symmetrical form of these equations.

**Figure 10.13**

Example of a magnetically coupled circuit.



## Learning Assessments

**E10.2** Find the currents  $\mathbf{I}_1$  and  $\mathbf{I}_2$  and the output voltage  $\mathbf{V}_o$  in the network in Fig. E10.2.

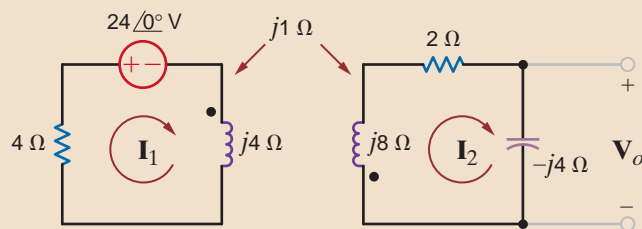


Figure E10.2

**ANSWER:**

$$\mathbf{I}_1 = +4.29 / 137.2^\circ \text{ A};$$

$$\mathbf{I}_2 = 0.96 / -16.26^\circ \text{ A};$$

$$\mathbf{V}_o = 3.84 / -106.26^\circ \text{ V}.$$

**E10.3** Write the KVL equations in standard form for the network in Fig. E10.3.

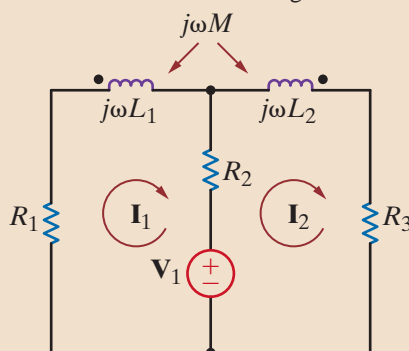


Figure E10.3

**ANSWER:**

$$(R_1 + j\omega L_1 + R_2)\mathbf{I}_1$$

$$- (R_2 + j\omega M)\mathbf{I}_2 = -\mathbf{V}_1;$$

$$- (R_2 + j\omega M)\mathbf{I}_1$$

$$+ (R_2 + j\omega L_2 + R_3)\mathbf{I}_2$$

$$= \mathbf{V}_1.$$

**E10.4** Find  $\mathbf{V}_o$  in Fig. E10.4.

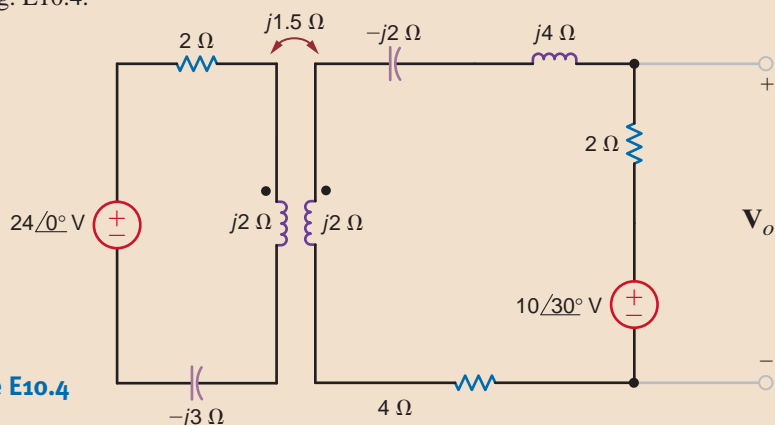


Figure E10.4

**ANSWER:**

$$\mathbf{V}_o = 11.2 / 53.5^\circ \text{ V}.$$

**E10.5** Find  $\mathbf{V}_o$  in Fig. E10.5.

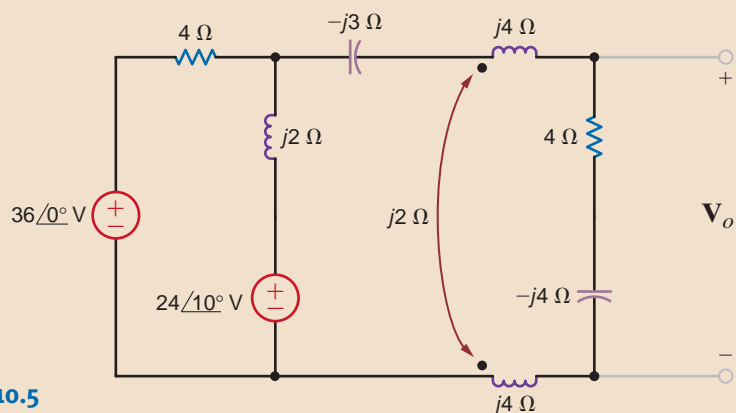


Figure E10.5

**ANSWER:**

$$\mathbf{V}_o = 32.8 / -12.14^\circ \text{ V}.$$

**E10.6** Find  $V_o$  in Fig. E10.6.

**ANSWER:**  
 $V_o = 11.4 \angle 0.334^\circ \text{ V}$ .

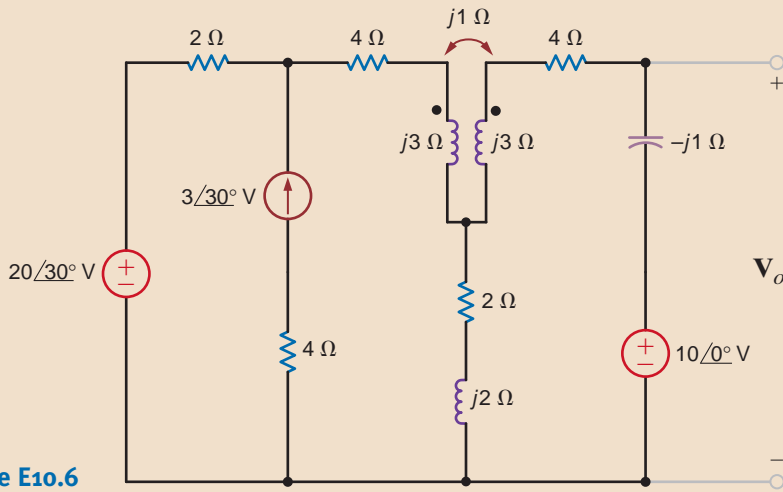


Figure E10.6

**EXAMPLE 10.6**

Given the network in Fig. 10.14 with the parameters  $Z_S = 3 + j1 \Omega$ ,  $j\omega L_1 = j2 \Omega$ ,  $j\omega L_2 = j2 \Omega$ ,  $j\omega M = j1 \Omega$ , and  $Z_L = 1 - j1 \Omega$ , determine the impedance seen by the source  $V_S$ .

**SOLUTION** The mesh equations for the network are

$$\begin{aligned} V_S &= (Z_S + j\omega L_1)I_1 - j\omega M I_2 \\ 0 &= -j\omega M I_1 + (j\omega L_2 + Z_L)I_2 \end{aligned}$$

If we now define  $Z_{11} = Z_S + j\omega L_1$  and  $Z_{22} = j\omega L_2 + Z_L$ , then the second equation yields

$$I_2 = \frac{j\omega M}{Z_{22}} I_1$$

If this secondary mesh equation is substituted into the primary mesh equation, we obtain

$$V_S = Z_{11}I_1 + \frac{\omega^2 M^2}{Z_{22}} I_1$$

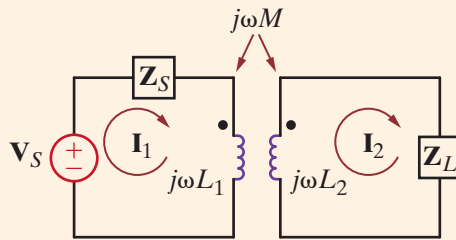


Figure 10.14  
 Circuit employed in Example 10.6.

and therefore

$$\frac{V_S}{I_1} = Z_{11} + \frac{\omega^2 M^2}{Z_{22}}$$

which is the impedance seen by  $V_S$ . Note that the mutual term is squared, and therefore the impedance is independent of the location of the dots.

Using the values of the circuit parameters, we find that

$$\begin{aligned}\frac{\mathbf{V}_s}{\mathbf{I}_1} &= (3 + j1 + j2) + \frac{1}{j2 + 1 - j1} \\ &= 3 + j3 + 0.5 - j0.5 \\ &= 3.5 + j2.5 \Omega\end{aligned}$$

## Learning Assessment

**E10.7** Find the impedance seen by the source in the circuit in Fig. E10.7.

**ANSWER:**

$$\mathbf{Z}_s = 2.25 \angle 20.9^\circ \Omega.$$

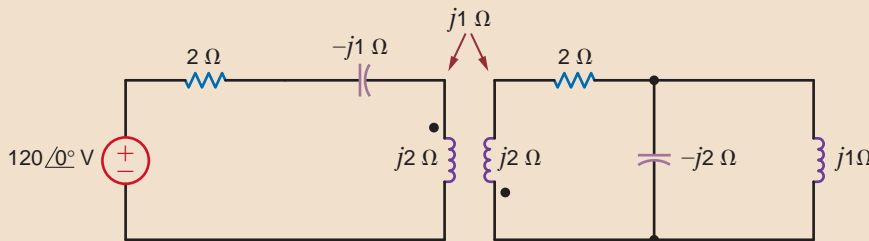


Figure E10.7

We now perform an energy analysis on a pair of mutually coupled inductors, which will yield some interesting relationships for the circuit elements. Our analysis will involve the performance of an experiment on the network shown in Fig. 10.15. Before beginning the experiment, we set all voltages and currents in the circuit equal to zero. Once the circuit is quiescent, we begin by letting the current  $i_1(t)$  increase from zero to some value  $I_1$  with the right-side terminals open circuited. Since the right-side terminals are open,  $i_2(t) = 0$ , and therefore the power entering these terminals is zero. The instantaneous power entering the left-side terminals is

$$p(t) = v_1(t)i_1(t) = \left[ L_1 \frac{di_1(t)}{dt} \right] i_1(t)$$

The energy stored within the coupled circuit at  $t_1$  when  $i_1(t) = I_1$  is then

$$\int_0^{t_1} v_1(t)i_1(t) dt = \int_0^{I_1} L_1 i_1(t) di_1(t) = \frac{1}{2} L_1 I_1^2$$

Continuing our experiment, starting at time  $t_1$ , we let the current  $i_2(t)$  increase from zero to some value  $I_2$  at time  $t_2$  while holding  $i_1(t)$  constant at  $I_1$ . The energy delivered through the right-side terminals is

$$\int_{t_1}^{t_2} v_2(t)i_2(t) dt = \int_0^{I_2} L_2 i_2(t) di_2(t) = \frac{1}{2} L_2 I_2^2$$

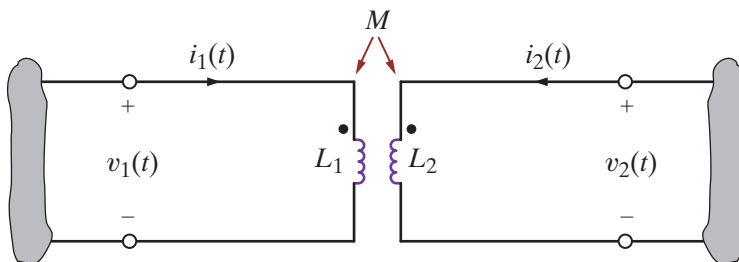


Figure 10.15

Magnetically coupled circuit.

## 10.2

### Energy Analysis

However, during the interval  $t_1$  to  $t_2$  the voltage  $v_1(t)$  is

$$v_1(t) = L_1 \frac{di_1(t)}{dt} + M \frac{di_2(t)}{dt}$$

Since  $i_1(t)$  is a constant  $I_1$ , the energy delivered through the left-side terminals is

$$\begin{aligned} \int_{t_1}^{t_2} v_1(t) i_1(t) dt &= \int_{t_1}^{t_2} M \frac{di_2(t)}{dt} I_1 dt = MI_1 \int_0^{I_2} di_2(t) \\ &= MI_1 I_2 \end{aligned}$$

Therefore, the total energy stored in the network for  $t > t_2$  is

$$w = \frac{1}{2} L_1 I_1^2 + \frac{1}{2} L_2 I_2^2 + MI_1 I_2 \quad 10.18$$

We could, of course, repeat our entire experiment with either the dot on  $L_1$  or  $L_2$ , but not both, reversed, and in this case the sign on the mutual inductance term would be negative, producing

$$w = \frac{1}{2} L_1 I_1^2 + \frac{1}{2} L_2 I_2^2 - MI_1 I_2$$

It is very important for the reader to realize that in our derivation of the preceding equation, by means of the experiment, the values  $I_1$  and  $I_2$  could have been any values at *any time*; therefore, the energy stored in the magnetically coupled inductors at any instant of time is given by the expression

$$w(t) = \frac{1}{2} L_1 [i_1(t)]^2 + \frac{1}{2} L_2 [i_2(t)]^2 \pm Mi_1(t)i_2(t) \quad 10.19$$

The two coupled inductors represent a passive network, and therefore, the energy stored within this network must be nonnegative for any values of the inductances and currents.

The equation for the instantaneous energy stored in the magnetic circuit can be written as

$$w(t) = \frac{1}{2} L_1 i_1^2 + \frac{1}{2} L_2 i_2^2 \pm Mi_1 i_2$$

Adding and subtracting the term  $1/2(M^2/L_2)i_1^2$  and rearranging the equation yields

$$w(t) = \frac{1}{2} \left( L_1 - \frac{M^2}{L_2} \right) i_1^2 + \frac{1}{2} L_2 \left( i_2 + \frac{M}{L_2} i_1 \right)^2$$

From this expression we recognize that the instantaneous energy stored will be nonnegative if

$$M \leq \sqrt{L_1 L_2} \quad 10.20$$

Note that this equation specifies an upper limit on the value of the mutual inductance.

We define the coefficient of coupling between the two inductors  $L_1$  and  $L_2$  as

$$k = \frac{M}{\sqrt{L_1 L_2}} \quad 10.21$$

and we note from Eq. (10.20) that its range of values is

$$0 \leq k \leq 1 \quad 10.22$$

This coefficient is an indication of how much flux in one coil is linked with the other coil; that is, if all the flux in one coil reaches the other coil, then we have 100% coupling and  $k = 1$ . For large values of  $k$  (i.e.,  $k > 0.5$ ), the inductors are said to be tightly coupled, and for small values of  $k$  (i.e.,  $k \leq 0.5$ ), the coils are said to be loosely coupled. If there is no coupling,  $k = 0$ . The previous equations indicate that the value for the mutual inductance is confined to the range

$$0 \leq M \leq \sqrt{L_1 L_2} \quad 10.23$$

and that the upper limit is the geometric mean of the inductances  $L_1$  and  $L_2$ .



The coupled circuit in Fig. 10.16a has a coefficient of coupling of 1 (i.e.,  $k = 1$ ). We wish to determine the energy stored in the mutually coupled inductors at time  $t = 5$  ms.  $L_1 = 2.653$  mH and  $L_2 = 10.61$  mH.

From the data the mutual inductance is

$$M = \sqrt{L_1 L_2} = 5.31 \text{ mH}$$

The frequency-domain equivalent circuit is shown in Fig. 10.16b, where the impedance values for  $X_{L_1}$ ,  $X_{L_2}$ , and  $X_M$  are 1, 4, and 2, respectively. The mesh equations for the network are then

$$\begin{aligned} (2 + j1)\mathbf{I}_1 - j2\mathbf{I}_2 &= 24 \angle 0^\circ \\ -j2\mathbf{I}_1 + (4 + j4)\mathbf{I}_2 &= 0 \end{aligned}$$

Solving these equations for the two mesh currents yields

$$\mathbf{I}_1 = 9.41 \angle -11.31^\circ \text{ A} \quad \text{and} \quad \mathbf{I}_2 = 3.33 \angle +33.69^\circ \text{ A}$$

and therefore,

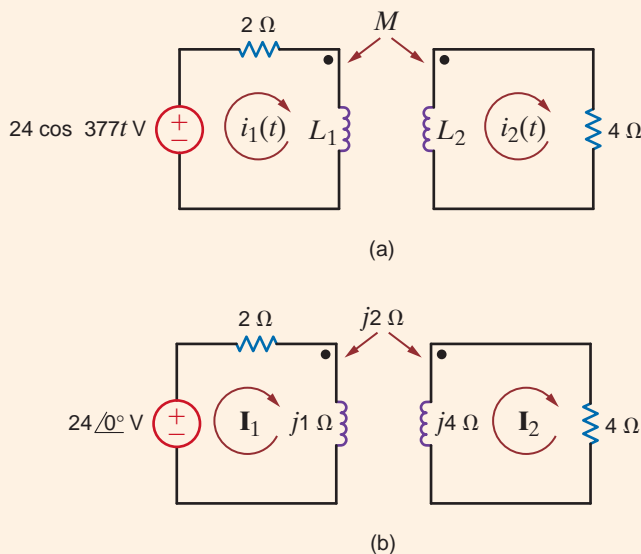
$$\begin{aligned} i_1(t) &= 9.41 \cos(377t - 11.31^\circ) \text{ A} \\ i_2(t) &= 3.33 \cos(377t + 33.69^\circ) \text{ A} \end{aligned}$$

At  $t = 5$  ms,  $377t = 1.885$  radians or  $108^\circ$ , and therefore,

$$\begin{aligned} i_1(t = 5 \text{ ms}) &= 9.41 \cos(108^\circ - 11.31^\circ) = -1.10 \text{ A} \\ i_2(t = 5 \text{ ms}) &= 3.33 \cos(108^\circ + 33.69^\circ) = -2.61 \text{ A} \end{aligned}$$

Therefore, the energy stored in the coupled inductors at  $t = 5$  ms is

$$\begin{aligned} w(t)|_{t=0.005 \text{ s}} &= \frac{1}{2}(2.653)(10^{-3})(-1.10)^2 + \frac{1}{2}(10.61)(10^{-3})(-2.61)^2 \\ &\quad - (5.31)(10^{-3})(-1.10)(-2.61) \\ &= (1.61)(10^{-3}) + (36.14)(10^{-3}) - (15.25)(10^{-3}) \\ &= 22.5 \text{ mJ} \end{aligned}$$



**Figure 10.16**

Example of a magnetically coupled circuit drawn in the time and frequency domains.

## Learning Assessment

**E10.8** The network in Fig. E10.8 operates at 60 Hz. Compute the energy stored in the mutually coupled inductors at time  $t = 10$  ms.

**ANSWER:**  
 $w(10 \text{ ms}) = 39 \text{ mJ}$ .

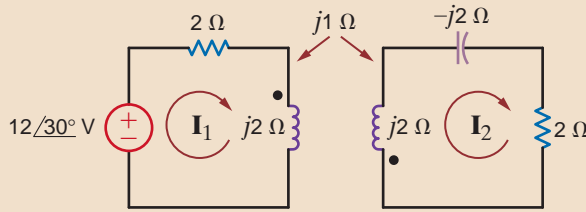


Figure E10.8

### 10.3

#### The Ideal Transformer

Consider the situation illustrated in Fig. 10.17, showing two coils of wire wound around a single closed magnetic core. Assume a core flux  $\phi$ , which links all the turns of both coils. In the ideal case we also neglect wire resistance. Let us now examine the coupling equations under the condition that the same flux goes through each winding and so,

$$v_1(t) = N_1 \frac{d\phi}{dt}$$

and

$$v_2(t) = N_2 \frac{d\phi}{dt}$$

and therefore,

$$\frac{v_1}{v_2} = \frac{N_1 \frac{d\phi}{dt}}{N_2 \frac{d\phi}{dt}} = \frac{N_1}{N_2} \quad 10.24$$

Ampère's law requires that

$$\oint H \cdot dl = i_{\text{enclosed}} = N_1 i_1 + N_2 i_2 \quad 10.25$$

where  $H$  is the magnetic field intensity and the integral is over the closed path traveled by the flux around the transformer core. If  $H = 0$ , which is the case for an ideal magnetic core with infinite permeability, then

$$N_1 i_1 + N_2 i_2 = 0 \quad 10.26$$

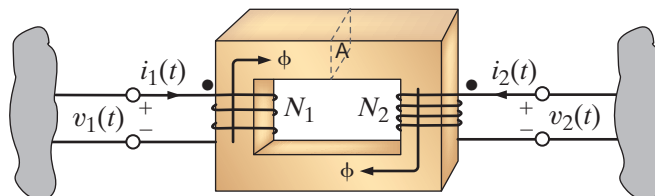
or

$$\frac{i_1}{i_2} = -\frac{N_2}{N_1} \quad 10.27$$

Note that if we divide Eq. (10.26) by  $N_1$  and multiply it by  $v_1$ , we obtain

$$v_1 i_1 + \frac{N_2}{N_1} v_1 i_2 = 0$$

**Figure 10.17**  
 Transformer employing a magnetic core.



However, since  $v_1 = (N_1/N_2)v_2$ ,

$$v_1 i_1 + v_2 i_2 = 0$$

and hence the total power into the device is zero, which means that an ideal transformer is lossless.

The symbol we employ for the ideal transformer is shown in Fig. 10.18a, and the corresponding equations are

$$\frac{v_1}{v_2} = \frac{N_1}{N_2} \quad 10.28$$

$$N_1 i_1 + N_2 i_2 = 0$$

The normal power flow through a transformer occurs from an input current ( $i_1$ ) on the primary to an output current ( $i_2$ ) on the secondary. This situation is shown in Fig. 10.18b, and the corresponding equations are

$$\frac{v_1}{v_2} = \frac{N_1}{N_2} \quad 10.29$$

$$N_1 i_1 = N_2 i_2$$

Note that although the voltage, current, and impedance levels change through a transformer, the power levels do not. The vertical lines between the coils, shown in the figures, represent the magnetic core. Although practical transformers do not use dots per se, they use markings specified by the National Electrical Manufacturers Association (NEMA) that are conceptually equivalent to the dots.

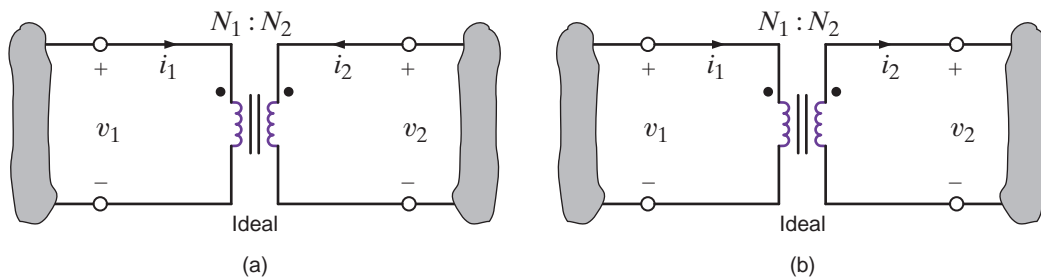
Thus, our model for the ideal transformer is specified by the circuit in Fig. 10.18a and the corresponding Eq. (10.28), or alternatively by the circuit in Fig. 10.18b, together with Eq. (10.29). Therefore, it is important to note carefully that our model specifies the equations as well as the relationship among the voltages, currents, and the position of the dots. In other words, the equations are valid only for the corresponding circuit diagram. Thus, in a direct analogy to our discussion of the mutual inductance equations and their corresponding circuit, if we change the direction of the current or voltage or the position of the dots, we must make a corresponding change in the equations. The following material will clarify this critical issue.

Consider now the circuit shown in Fig. 10.19. If we compare this circuit to that shown in Fig. 10.18b, we find that the direction of both the currents and voltages are the same. Hence the equations for the network are

$$\frac{V_1}{V_2} = \frac{N_1}{N_2}$$

and

$$\frac{I_1}{I_2} = \frac{N_2}{N_1}$$

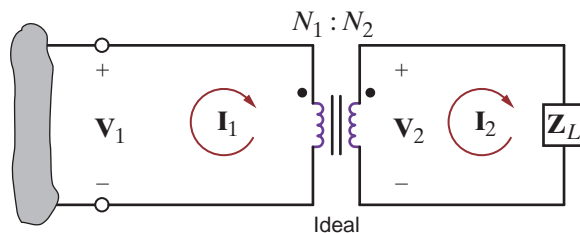


**Figure 10.18**

Symbol for an ideal transformer: (a) primary and secondary currents into the dots; (b) primary current into, and secondary current out of, the dots.

**Figure 10.19**

Ideal transformer circuit used to illustrate input impedance.



These equations can be written as

$$\mathbf{V}_1 = \frac{N_1}{N_2} \mathbf{V}_2 \quad 10.30$$

$$\mathbf{I}_1 = \frac{N_2}{N_1} \mathbf{I}_2$$

Also note that

$$\mathbf{Z}_L = \frac{\mathbf{V}_2}{\mathbf{I}_2}$$

and therefore the input impedance is

$$\mathbf{Z}_1 = \frac{\mathbf{V}_1}{\mathbf{I}_1} = \left( \frac{N_1}{N_2} \right)^2 \mathbf{Z}_L \quad 10.31$$

where  $\mathbf{Z}_L$  is reflected into the primary side by the turns ratio.

If we now define the turns ratio as

$$n = \frac{N_2}{N_1} \quad 10.32$$

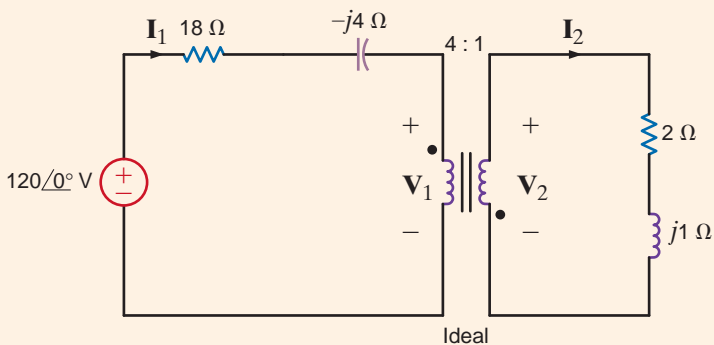
then the defining equations for the *ideal transformer* in this configuration are

$$\begin{aligned} \mathbf{V}_1 &= \frac{\mathbf{V}_2}{n} \\ \mathbf{I}_1 &= n\mathbf{I}_2 \\ \mathbf{Z}_1 &= \frac{\mathbf{Z}_L}{n^2} \end{aligned} \quad 10.33$$

Care must be exercised in using these equations because the signs on the voltages and currents are dependent on the assigned references and their relationship to the dots.

## EXAMPLE 10.8

Given the circuit shown in Fig. 10.20, we wish to determine all indicated voltages and currents.


**Figure 10.20**

Ideal transformer circuit.

### SOLUTION

Because of the relationships between the dots and the currents and voltages, the transformer equations are

$$\mathbf{V}_1 = -\frac{\mathbf{V}_2}{n} \quad \text{and} \quad \mathbf{I}_1 = -n\mathbf{I}_2$$

where  $n = 1/4$ . The reflected impedance at the input to the transformer is

$$\mathbf{Z}_1 = 4^2 \mathbf{Z}_L = 16(2 + j1) = 32 + j16 \Omega$$

Therefore, the current in the source is

$$\mathbf{I}_1 = \frac{120 \angle 0^\circ}{18 - j4 + 32 + j16} = 2.33 \angle -13.5^\circ \text{ A}$$

The voltage across the input to the transformer is then

$$\begin{aligned} \mathbf{V}_1 &= \mathbf{I}_1 \mathbf{Z}_1 \\ &= (2.33 \angle -13.5^\circ)(32 + j16) \\ &= 83.49 \angle 13.07^\circ \text{ V} \end{aligned}$$

Hence,  $\mathbf{V}_2$  is

$$\begin{aligned} \mathbf{V}_2 &= -n \mathbf{V}_1 \\ &= -\frac{1}{4}(83.49 \angle 13.07^\circ) \\ &= 20.87 \angle 193.07^\circ \text{ V} \end{aligned}$$

The current  $\mathbf{I}_2$  is

$$\begin{aligned} \mathbf{I}_2 &= -\frac{\mathbf{I}_1}{n} \\ &= -4(2.33 \angle -13.5^\circ) \\ &= 9.33 \angle 166.50^\circ \text{ A} \end{aligned}$$

## Learning Assessments

**E10.9** Compute the current  $\mathbf{I}_1$  in the network in Fig. E10.9.

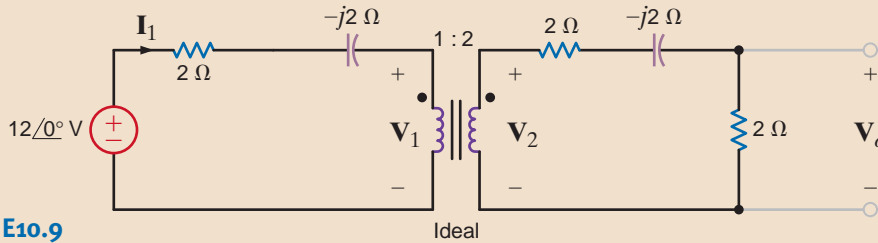


Figure E10.9

**ANSWER:**

$$\mathbf{I}_1 = 3.07 \angle 39.81^\circ \text{ A.}$$

**E10.10** Find  $\mathbf{V}_o$  in the network in Fig. E10.9.

**ANSWER:**

$$\mathbf{V}_o = 3.07 \angle 39.81^\circ \text{ V.}$$

**E10.11** Determine  $\mathbf{I}_1$ ,  $\mathbf{I}_2$ ,  $\mathbf{V}_1$ , and  $\mathbf{V}_2$  in Fig. E10.11.

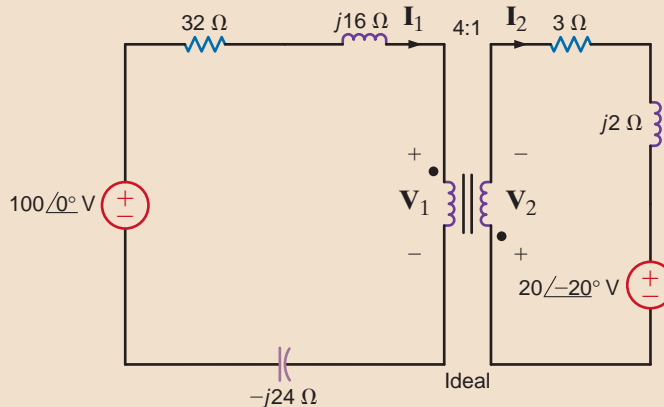


Figure E10.11

**ANSWER:**

$$\begin{aligned} \mathbf{I}_1 &= 2.12 \angle -25.6^\circ \text{ A;} \\ \mathbf{I}_2 &= 8.49 \angle 154.42^\circ \text{ A;} \\ \mathbf{V}_1 &= 64.16 \angle 44.1^\circ \text{ V;} \\ \mathbf{V}_2 &= 16.04 \angle -135.9^\circ \text{ V.} \end{aligned}$$

**E10.12** Determine  $V_o$  in Fig. E10.12.

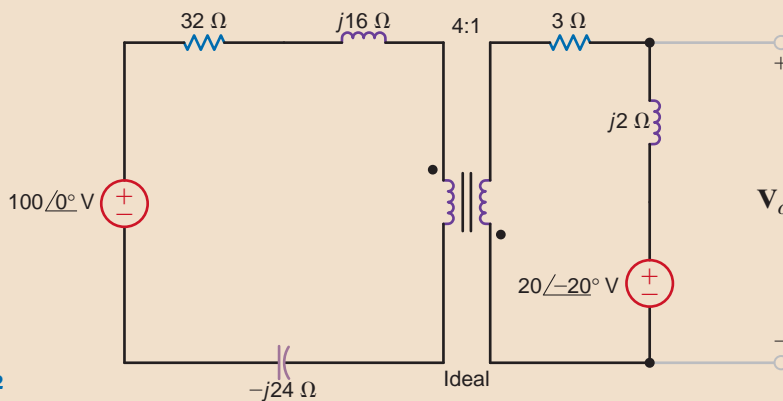


Figure E10.12

**ANSWER:**

$$V_o = 24.95 \angle -62.65^\circ \text{ V.}$$

**E10.13** Determine  $V_o$  in Fig. E10.13.

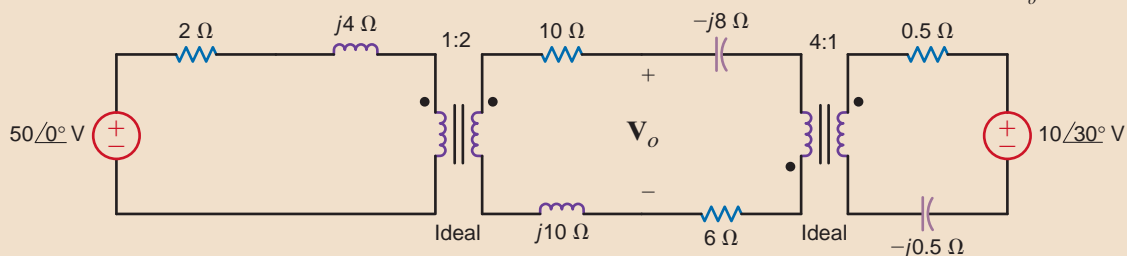


Figure E10.13

**ANSWER:**

$$V_o = 93.68 \angle -83^\circ \text{ V.}$$

**E10.14** If  $V_o = 10 \angle 30^\circ \text{ V}$  in Fig. E10.14, find  $V_S$ .

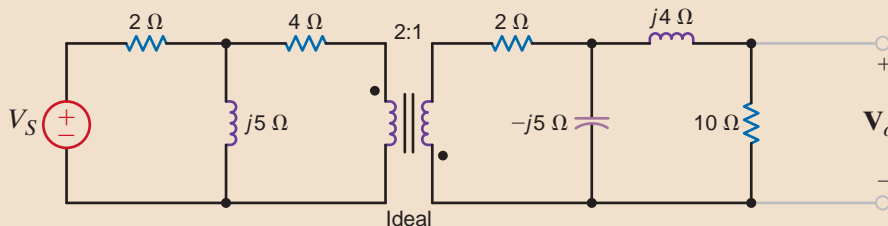


Figure E10.14

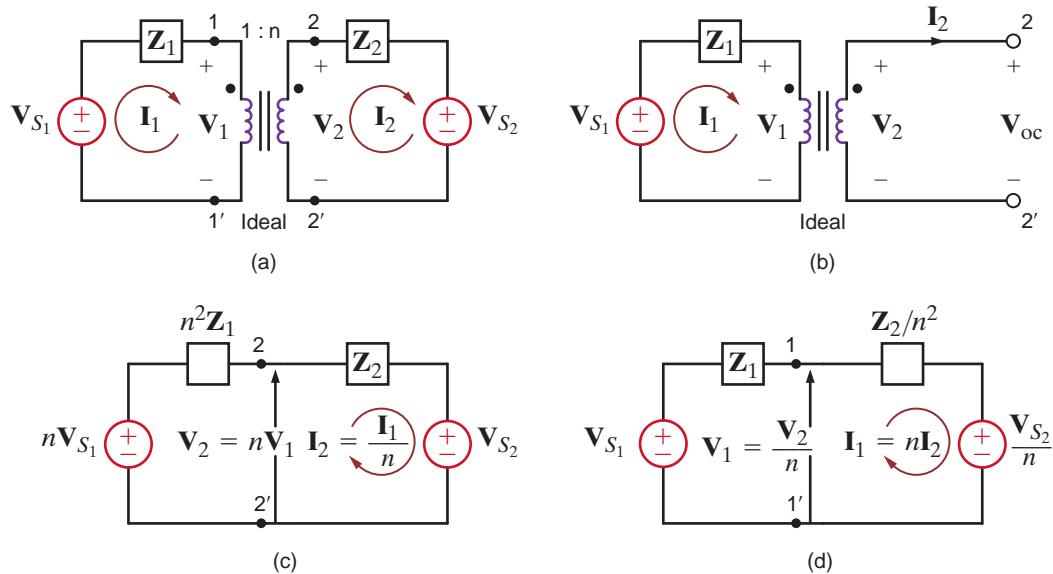
**ANSWER:**

$$V_S = 32.34 \angle -125.3^\circ \text{ V.}$$

Another technique for simplifying the analysis of circuits containing an ideal transformer involves the use of either Thévenin's or Norton's theorem to obtain an equivalent circuit that replaces the transformer and either the primary or secondary circuit. This technique usually requires more effort, however, than the approach presented thus far. Let us demonstrate this approach by employing Thévenin's theorem to derive an equivalent circuit for the transformer and primary circuit of the network shown in Fig. 10.21a. The equations for the transformer in view of the direction of the currents and voltages and the position of the dots are

$$I_1 = nI_2$$

$$V_1 = \frac{V_2}{n}$$

**Figure 10.21**

Circuit containing an ideal transformer and some of its equivalent networks.

Forming a Thévenin equivalent at the secondary terminals  $2 = 2'$ , as shown in Fig. 10.21b, we note that  $I_2 = 0$  and therefore  $I_1 = 0$ . Hence

$$V_{oc} = V_2 = nV_1 = nV_{S_1}$$

The Thévenin equivalent impedance obtained by looking into the open-circuit terminals with  $V_{S_1}$  replaced by a short circuit is  $Z_1$ , which when reflected into the secondary by the turns ratio is

$$Z_{Th} = n^2Z_1$$

Therefore, one of the resulting equivalent circuits for the network in Fig. 10.21a is as shown in Fig. 10.21c. In a similar manner, we can show that replacing the transformer and its secondary circuit by an equivalent circuit results in the network shown in Fig. 10.21d.

It can be shown in general that when developing an equivalent circuit for the transformer and its primary circuit, each primary voltage is multiplied by  $n$ , each primary current is divided by  $n$ , and each primary impedance is multiplied by  $n^2$ . Similarly, when developing an equivalent circuit for the transformer and its secondary circuit, each secondary voltage is divided by  $n$ , each secondary current is multiplied by  $n$ , and each secondary impedance is divided by  $n^2$ . Powers are the same, whether calculated on the primary or secondary side.

Recall from our previous analysis that if either dot on the transformer is reversed, then  $n$  is replaced by  $-n$  in the equivalent circuits. In addition, note that the development of these equivalent circuits is predicated on the assumption that removing the transformer will divide the network into two parts; that is, there are no connections between the primary and secondary other than through the transformer. If any external connections exist, the equivalent circuit technique cannot in general be used. Finally, we point out that if the primary or secondary circuits are more complicated than those shown in Fig. 10.21a, Thévenin's theorem may be applied to reduce the network to that shown in Fig. 10.21a. Also, we can simply reflect the complicated circuit component by component from one side of the transformer to the other.

Given the circuit in Fig. 10.22a, we wish to draw the two networks obtained by replacing the transformer and the primary, and the transformer and the secondary, with equivalent circuits.

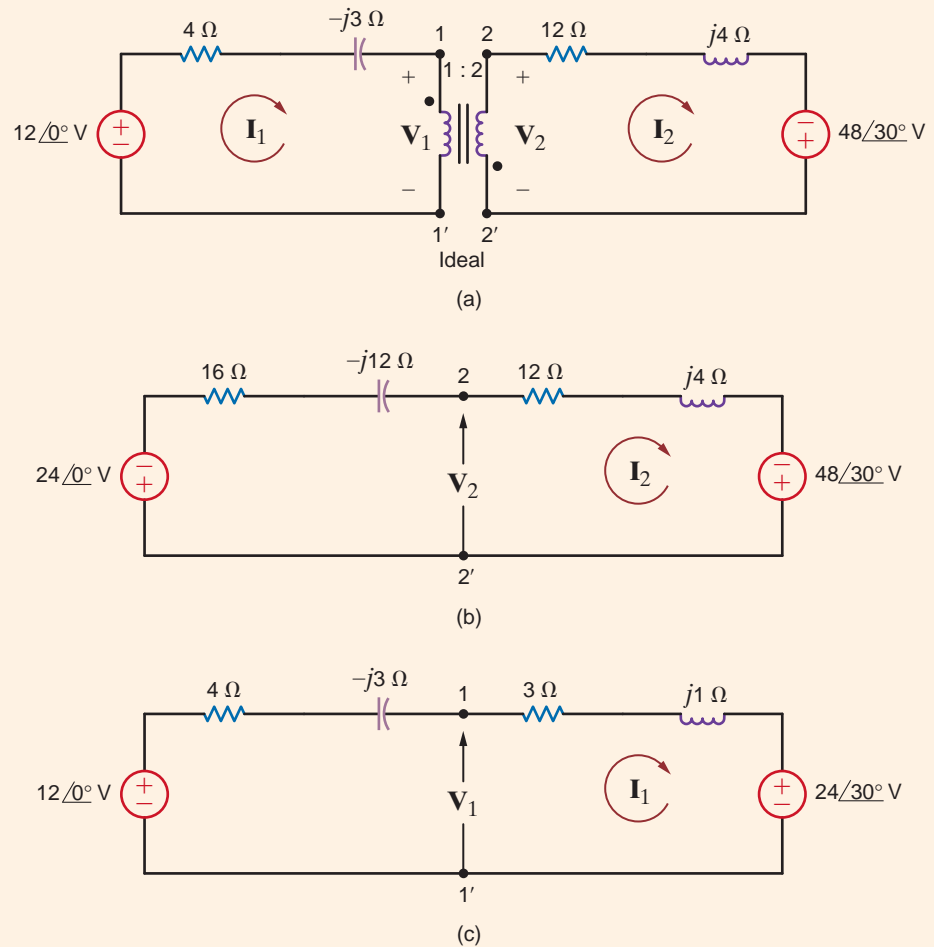
Due to the relationship between the assigned currents and voltages and the location of the dots, the network containing an equivalent circuit for the primary and the network containing an equivalent circuit for the secondary are shown in Figs. 10.22b and c, respectively. The reader should note carefully the polarity of the voltage sources in the equivalent networks.

## EXAMPLE 10.9

**SOLUTION**

**Figure 10.22**

Example circuit and two equivalent circuits.



## Problem-Solving Strategy

### Circuits Containing Ideal Transformers

- Step 1.** Carefully examine the circuit diagram to determine the assigned voltage polarities and current directions in relation to the transformer dots.
- If both voltages are referenced positive at the dotted terminals or undotted terminals, then  $v_1/v_2 = N_1/N_2$ . If this is not true, then  $v_1/v_2 = -N_1/N_2$ .
  - If one current is defined as entering a dotted terminal and the other current is defined as leaving a dotted terminal, then  $N_1 i_1 = N_2 i_2$ . If this condition is not satisfied, then  $N_1 i_1 = -N_2 i_2$ .
- Step 2.** If there are no electrical connections between two transformer windings, reflect all circuit elements on one side of the transformer through to the other side, thus eliminating the ideal transformer. Be careful to apply the statements above when reflecting elements through the transformer. Remember that impedances are scaled in magnitude only. Apply circuit analysis techniques to the circuit that results from eliminating all ideal transformers. After this circuit has been analyzed, reflect voltages and currents back through the appropriate ideal transformers to find the answer.
- Step 3.** As an alternative approach, use Thévenin's or Norton's theorem to simplify the circuit. Typically, calculation of the equivalent circuit eliminates the ideal transformer. Solve the simplified circuit.



**Step 4.** If there are electrical connections between two transformer windings, use nodal analysis or mesh analysis to write equations for the circuits. Solve the equations using the proper relationships between the voltages and currents for the ideal transformer.

Let us determine the output voltage  $V_o$  in the circuit in Fig. 10.23a.

## EXAMPLE 10.10

We begin our attack by forming a Thévenin equivalent for the primary circuit. From Fig. 10.23b we can show that the open-circuit voltage is

**SOLUTION**

$$\begin{aligned} V_{oc} &= \frac{24 \angle 0^\circ}{4 - j4} (-j4) - 4 \angle -90^\circ \\ &= 12 - j8 = 14.42 \angle -33.69^\circ \text{ V} \end{aligned}$$

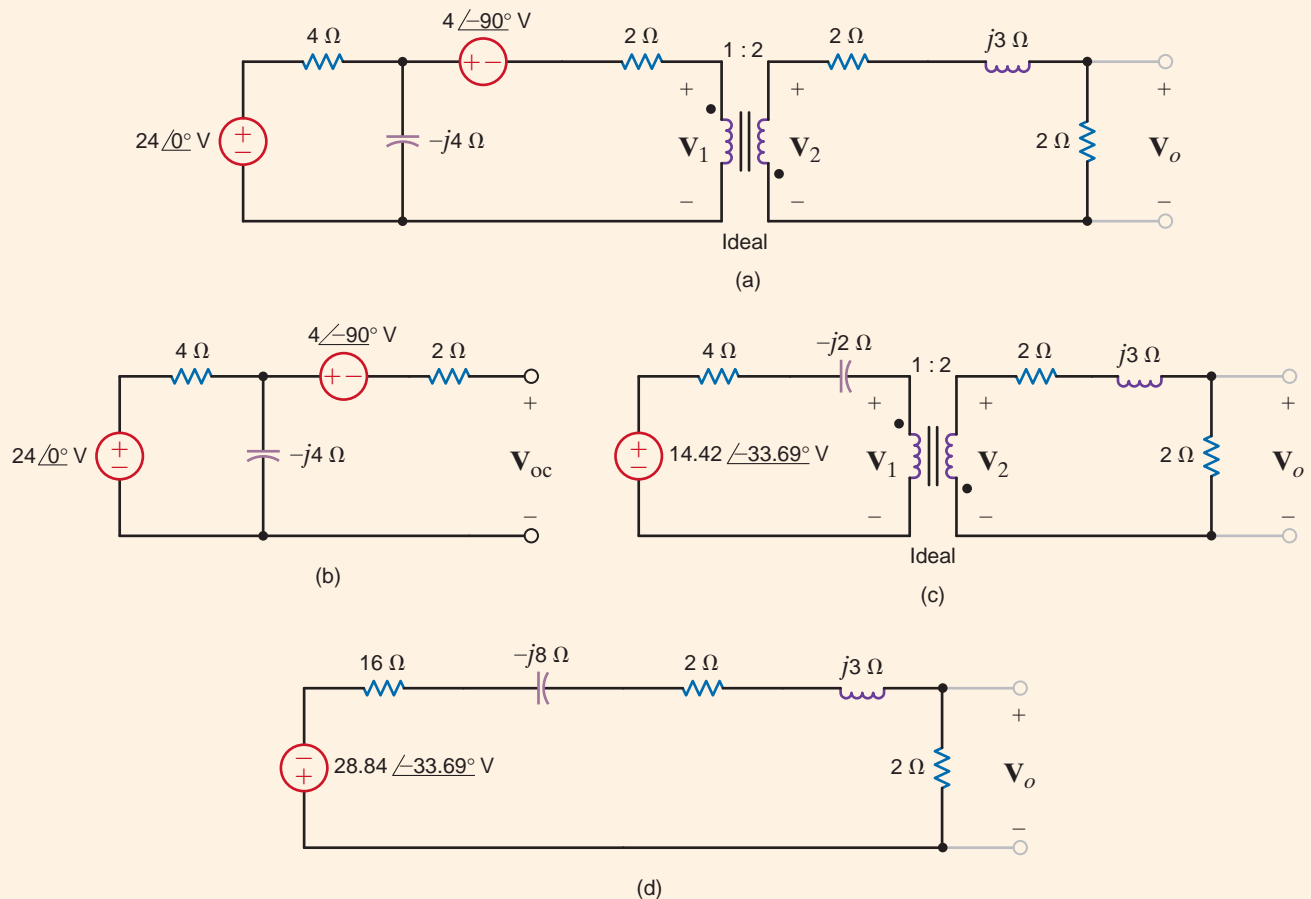
The Thévenin equivalent impedance looking into the open-circuit terminals with the voltage sources replaced by short circuits is

$$\begin{aligned} Z_{Th} &= \frac{(4)(-j4)}{4 - j4} + 2 \\ &= 4 - j2 \Omega \end{aligned}$$

The circuit in Fig. 10.23a thus reduces to that shown in Fig. 10.23c. Forming an equivalent circuit for the transformer and primary results in the network shown in Fig. 10.23d.

**Figure 10.23**

Example network and other circuits used to derive an equivalent network.



Therefore, the voltage  $\mathbf{V}_o$  is

$$\begin{aligned}\mathbf{V}_o &= \frac{-28.84 \angle -33.69^\circ}{20 - j5} \quad (2) \\ &= 2.80 \angle 160.35^\circ \text{ V}\end{aligned}$$

## Learning Assessments

**E10.15** Given the network in Fig. E10.15, form an equivalent circuit for the transformer and secondary, and use the resultant network to compute  $\mathbf{I}_1$ .

**ANSWER:**

$$\mathbf{I}_1 = 13.12 \angle 38.66^\circ \text{ A.}$$

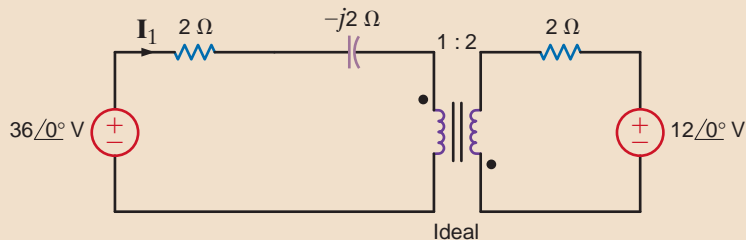


Figure E10.15

**E10.16** Given the network in Fig. E10.16, form an equivalent circuit for the transformer and primary, and use the resultant network to find  $\mathbf{V}_o$ .

**ANSWER:**

$$\mathbf{V}_o = 3.12 \angle 38.66^\circ \text{ V.}$$

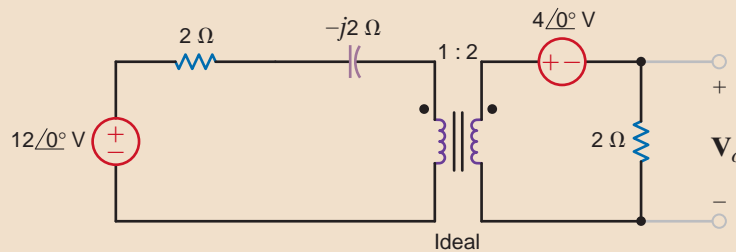


Figure E10.16

### EXAMPLE

## 10.11

### SOLUTION

Determine  $\mathbf{I}_1$ ,  $\mathbf{I}_2$ ,  $\mathbf{V}_1$ , and  $\mathbf{V}_2$  in the network in Fig. 10.24.

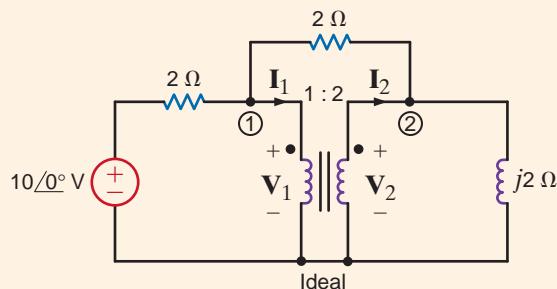
The nodal equations at nodes 1 and 2 are

$$\begin{aligned}\frac{10 - \mathbf{V}_1}{2} &= \frac{\mathbf{V}_1 - \mathbf{V}_2}{2} + \mathbf{I}_1 \\ \mathbf{I}_2 + \frac{\mathbf{V}_1 - \mathbf{V}_2}{2} &= \frac{\mathbf{V}_2}{2j}\end{aligned}$$

The transformer relationships are  $\mathbf{V}_2 = 2\mathbf{V}_1$  and  $\mathbf{I}_1 = 2\mathbf{I}_2$ . The first nodal equation yields  $\mathbf{I}_1 = 5 \text{ A}$  and therefore  $\mathbf{I}_2 = 2.5 \text{ A}$ . The second nodal equation, together with the constraint equations specified by the transformer, yields  $\mathbf{V}_1 = \sqrt{5} \angle 63^\circ \text{ V}$  and  $\mathbf{V}_2 = 2\sqrt{5} \angle 63^\circ \text{ V}$ .

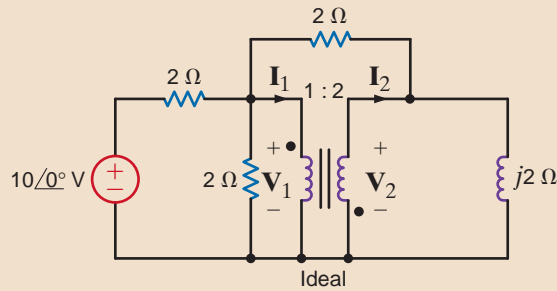
Figure 10.24

Circuit used in Example 10.11.



## Learning Assessment

**E10.17** Determine  $\mathbf{I}_1$ ,  $\mathbf{I}_2$ ,  $\mathbf{V}_1$ , and  $\mathbf{V}_2$  in the network in Fig. E10.17.



**Figure E10.17**

**ANSWER:**

$$\mathbf{I}_1 = 3.08 \angle -13.7^\circ \text{ A};$$

$$\mathbf{I}_2 = 1.54 \angle 166.3^\circ \text{ A};$$

$$\mathbf{V}_1 = 0.85 \angle 20^\circ \text{ V};$$

$$\mathbf{V}_2 = 1.71 \angle -160^\circ \text{ V}.$$

Before we move on to the next topic, let's return to Faraday's law. For the ideal transformer, Faraday's law tells us that  $v_1(t) = N_1 \frac{d\phi}{dt}$  and  $v_2(t) = N_2 \frac{d\phi}{dt}$ . What if a dc voltage is applied to our transformer? In that case, the magnetic flux  $\phi$  is a constant,  $v_1 = v_2 = 0$ , and our transformer is not very useful. What if an ac voltage is applied to our transformer? The magnetic flux is sinusoidal and time-varying. Transformers allow the ac voltage value to be stepped up or down easily and efficiently; it is much more difficult to efficiently step up or down the dc voltage value. The ease with which transformers allow us to change the voltage level is one of the main reasons that ac voltages and currents are utilized to transmit the bulk of the world's electrical power.

Transistors are used extensively in modern electronic equipment to provide a low-voltage power supply. As examples, a common voltage level in computer systems is 5 V dc, portable radios use 9 V dc, and military and airplane equipment operates at 28 V dc. When transformers are used to connect these low-voltage transistor circuits to the power line, there is generally less danger of shock within the system because the transformer provides electrical isolation from the line voltage. However, from a safety standpoint, a transformer, although helpful in many situations, is not an absolute solution. When working with any electrical equipment, we must always be vigilant to minimize the dangers of electrical shock.

In power electronics equipment or power systems, the danger is severe. The problem in these cases is that of high voltage from a low-impedance source, and we must constantly remember that the line voltage in our homes can be lethal.

Consider now the following example, which illustrates a hidden danger that could surprise even the experienced professional, with devastating consequences.

## 10.4

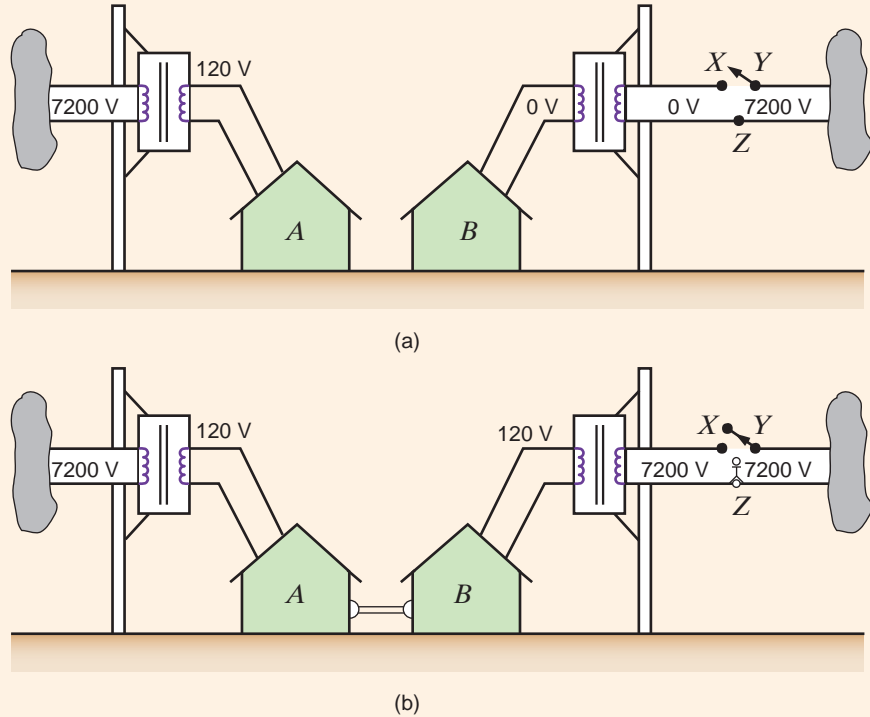
### Safety Considerations

Two adjacent homes, *A* and *B*, are fed from different transformers, as shown in Fig. 10.25a. A surge on the line feeding house *B* has caused the circuit breaker *X-Y* to open. House *B* is now left without power. In an attempt to help his neighbor, the resident of house *A* volunteers to connect a long extension cord between a wall plug in house *A* and a wall plug in house *B*, as shown in Fig. 10.25b. Later, the line technician from the utility company comes to reconnect the circuit breaker. Is the line technician in any danger in this situation?

### EXAMPLE 10.12

**SOLUTION** Unaware of the extension cord connection, the line technician believes that there is no voltage between points *X* and *Z*. However, because of the electrical connection between the two homes, 7200 V rms exists between the two points, and the line technician could be seriously injured or even killed if he comes in contact with this high voltage.

**Figure 10.25**  
Diagrams used  
in Example 10.12  
(voltages in rms).



## 10.5

The following examples demonstrate several applications for transformers.

### Application Examples

#### APPLICATION EXAMPLE 10.13

Consider the problem of transporting 24 MW over a distance of 100 miles (160.9 km) using a two-conductor line. Determine the requisite conductor radius to achieve a transmission efficiency of 95%, considering only the line resistance, if the line operates at (a) 240 V rms or (b) 240 kV rms. Assume that conductor resistivity is  $\rho = 8 \times 10^{-8} \Omega \cdot \text{m}$ .

**SOLUTION** a. At 240 V:

$$I = \frac{P}{V} = \frac{24 \text{ M}}{240} = 100 \text{ kA rms}$$

If

$$\eta = 95\%,$$

$$P_{\text{loss}} = 0.05(24 \text{ M}) = 1.2 \text{ MW} = I^2 R$$

Therefore,

$$R = \frac{P_{\text{loss}}}{I^2} = \frac{1.2 \text{ M}}{(100\text{k})^2} = 1.2 \times 10^{-4} \Omega$$

Since

$$R = \frac{\rho l}{A} = \frac{(8 \times 10^{-8})(2 \times 160.9 \times 10^3)}{A}$$

$$A = \frac{0.25744}{1.2 \times 10^{-4}} = 214.5 \text{ m}^2 = \pi r^2$$

Therefore,

$$r = 8.624 \text{ m}$$

(which is a huge conductor and totally impractical!)

**b.** At 240 kV rms:

$$I = 100 \text{ A rms}$$

and

$$R = \frac{1.2 \times 10^6}{(100)^2} = 120 \Omega$$

$$A = \frac{0.25744}{120} = 2.145 \times 10^{-4} \text{ m}^2$$

and

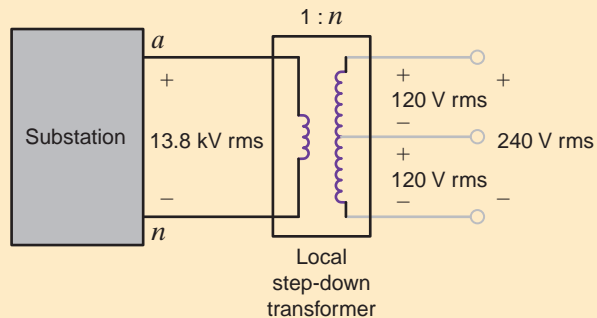
$$r = 0.8264 \text{ cm}$$

(which is a very practical value!)

The point of this example is that practical transmission of bulk electrical energy requires operation at high voltage. What is needed is an economical device that can efficiently convert one voltage level to another. Such a device is, as we have shown, the power transformer.

The local transformer in Fig. 10.26 provides the last voltage stepdown in a power distribution system. A common sight on utility poles in residential areas, it is a single-phase transformer that typically has a 13.8-kV rms line to neutral on its primary coil, and a center tap secondary coil provides both 120 V rms and 240 V rms to service several residences. A typical example of this transformer, often referred to as a “pole pig,” is shown in Fig. 10.27.

## APPLICATION EXAMPLE 10.14



**Figure 10.26**

Local transformer subcircuit with center tap.

Let us find the turns ratio necessary to produce the 240-V rms secondary voltage. Assuming that the transformer provides 200-A rms service to each of 10 houses, let us determine the minimum power rating for the transformer and the maximum current in the primary.

**SOLUTION** The turns ratio is given by

$$n = \frac{V_2}{V_1} = \frac{240}{13,800} = \frac{1}{57.5}$$

If  $I_H$  is the maximum current per household, then the maximum primary current is

$$I_1 = nI_2 = n(10I_H) = 34.78 \text{ A rms}$$

The maximum power delivered to the primary is then

$$S_1 = V_1 I_1 = (13,800)(34.78) = 480 \text{ kVA.}$$

Therefore, the transformer must have a power rating of at least 480 kVA.



**Figure 10.27**  
A residential utility transformer.  
(tomba/iStockphoto)

### APPLICATION EXAMPLE 10.15

Your electric toothbrush sits innocuously in its cradle overnight. Even though there are no direct electrical connections between the cradle and the toothbrush, the internal batteries are being recharged. How can this be?

**SOLUTION** Mutually coupled inductors is the answer! One coil is in the cradle and energized by an ac source. The second coil is in the bottom of the toothbrush itself. When the toothbrush is mounted in the cradle, the two coils are physically close and thus mutually coupled, as shown in Fig. 10.28.

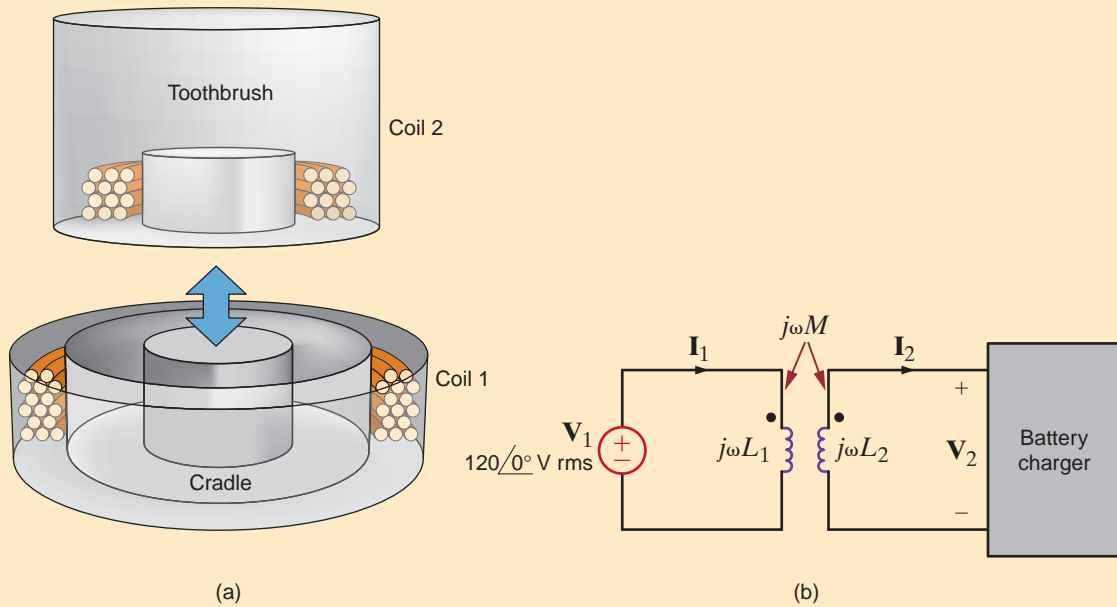
Let's investigate a reasonable design for these coils. First, we assume that the coils are poorly coupled with a coupling coefficient of  $k = 0.25$ . Second, the coil in the cradle is driven at  $120 \angle 0^\circ \text{ V rms}$ . Third, the coil in the toothbrush should generate  $6 \angle 0^\circ \text{ V}$  at 100 mA rms in order to charge the battery. To keep the power "relatively" low, we will limit the primary current to only 0.5 A rms. Finally, to simplify our analysis, we will assume that  $\mathbf{I}_1$  and  $\mathbf{I}_2$  are in phase.

First we develop loop equations for our circuit, which are

$$\begin{aligned} \mathbf{V}_1 &= j\omega L_1 \mathbf{I}_1 - j\omega M \mathbf{I}_2 \\ \mathbf{V}_2 &= j\omega M \mathbf{I}_1 - j\omega L_2 \mathbf{I}_2 \end{aligned} \quad 10.34$$

where  $\mathbf{V}_1 = 120 \angle 0^\circ \text{ V rms}$  and  $\mathbf{V}_2 = 6 \angle 0^\circ \text{ V rms}$ . By defining a new variable  $\alpha$  such that

$$L_2 = \alpha^2 L_1$$

**Figure 10.28**

The electric toothbrush:  
 (a) a nonartist's conceptual drawing and (b) a circuit schematic.

10.35

we can eliminate  $L_2$  in Eq. (10.34). Hence,

$$\begin{aligned} \mathbf{V}_1 &= j\omega L_1 \mathbf{I}_1 - j\omega k \alpha L_1 \mathbf{I}_2 \\ \mathbf{V}_2 &= j\omega k \alpha L_1 \mathbf{I}_1 - j\omega \alpha^2 L_1 \mathbf{I}_2 \end{aligned}$$

Taking the ratio of each side of Eq. (10.35), we can eliminate  $\omega$  and  $L_1$ :

$$\frac{\mathbf{V}_1}{\mathbf{V}_2} = \frac{120}{6} = 20 = \frac{\mathbf{I}_1 - k\alpha \mathbf{I}_2}{k\alpha \mathbf{I}_1 - \alpha^2 \mathbf{I}_2}$$

If we now substitute the design parameter values listed above for  $\mathbf{I}_1$ ,  $\mathbf{I}_2$  and  $k$  and then solve for  $\alpha$ , we find

$$20I_2\alpha^2 - (20kI_1 + kI_2)\alpha + I_1 = 0$$

which yields

$$\alpha = \begin{cases} 0.246 \\ 1.02 \end{cases}$$

(We have used our restriction that  $\mathbf{I}_1$  and  $\mathbf{I}_2$  are in phase to convert current phasors to magnitudes.) Choosing the smaller value for  $\alpha$  is the same as choosing a smaller  $L_2$ . Hence, this is the result we select since the resulting coil will require fewer turns of wire, reducing cost, weight, and size. Next, using Eq. (10.35), we can solve for the product  $\omega L_1$ :

$$V_1 = \omega L_1(0.5) - \omega(0.25)(0.246)L_1(0.1) = 0.494\omega L_1$$

To investigate the effect of  $\omega$  on  $L_1$ , we use the value for  $V_1$  and the relationship between the two inductors, for the given  $\alpha$ . In Table 10.1,  $L_1$  and  $L_2$  have been calculated for a collection of  $\omega$  values. Note that a 60-Hz excitation requires huge values for the inductances

**TABLE 10.1** A listing of frequency choices and the resulting inductances.

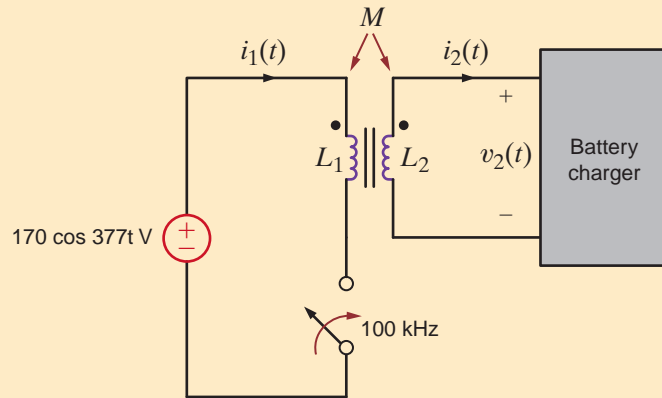
FREQUENCY (Hz)	FREQUENCY (rad/s)	$L_1$	$L_2$
60	377	693 mH	39.0 mH
20k	126k	2.01 mH	117 $\mu$ H
100k	628k	416 $\mu$ H	23.4 $\mu$ H

that are completely impractical. Therefore, the table skips past the entire audible range (there’s no reason to have to listen to your toothbrush recharging) to 20 kHz. Here the inductance values are much more reasonable but still considerable. However, at 100 kHz, the total inductance is just a few hundred microhenrys. These are very reasonable values and ones which we will use.

The final question is this: if we have a 60-Hz sinusoid at the wall outlet, how do we obtain 100 kHz? We add a voltage-controlled switch as shown in Fig. 10.29 that is turned on and off at a rate of 100 kHz. The result is a pulsing voltage applied to the inductor at 100 kHz. Although the result is not exactly a 100-kHz sine wave, it is effective.

**Figure 10.29**

A switch, turned on and off at a 100-kHz rate, can emulate a high-frequency ac input for our toothbrush application.

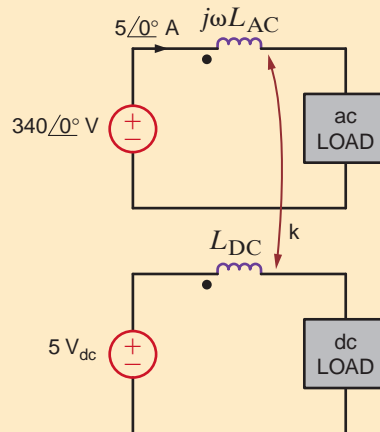


**APPLICATION EXAMPLE 10.16**

As shown in Fig. 10.30, two circuits are placed in close proximity: a high-current ac circuit and a low-current dc circuit. Since each circuit constitutes a loop, we should expect a little inductance in each circuit. Because of their proximity, we could also anticipate some coupling. In this particular situation the inductance in each loop is 10 nH, and the coupling coefficient is  $k = 0.1$ . Let us consider two scenarios. In the first case, the ac circuit contains an ac motor operating at 60 Hz. In the second case, the ac circuit models a FM radio transmitter operating at 100 MHz. We wish to determine the induced noise in the dc circuit for both cases. Which scenario produces the worst inductively coupled noise? Why?

**Figure 10.30**

A circuit model for an ac and a dc circuit that are physically close enough to have mutual coupling.





The voltage induced into the dc circuit is noise and is known to be

$$\mathbf{V}_{\text{noise}} = j\omega \mathbf{M} \mathbf{I}_{\text{AC}} = j\omega k \sqrt{L_{\text{AC}} L_{\text{DC}}} \mathbf{I}_{\text{AC}}$$

We are concerned only with the magnitude of the noise. Given the model parameters listed above, the noise voltage magnitude is

$$V_{\text{noise}} = 2\pi f (0.1)(10^{-8})(5) = 3.14 \times 10^{-8} f \text{ V}$$

For the ac motor scenario,  $f = 60$  Hz and the noise voltage is  $1.88 \mu\text{V}$ —essentially zero when compared against the 5-V dc input. However, when modeling a FM radio transmitter operating at 100 MHz the noise voltage is 3.14 V. That’s more than 60% of the 5-V dc level!

Thus, we find that magnetically-induced noise is much worse for high-frequency situations. It should be no surprise then that great care is taken to magnetically “shield” high-frequency–high-current circuitry.

## SOLUTION

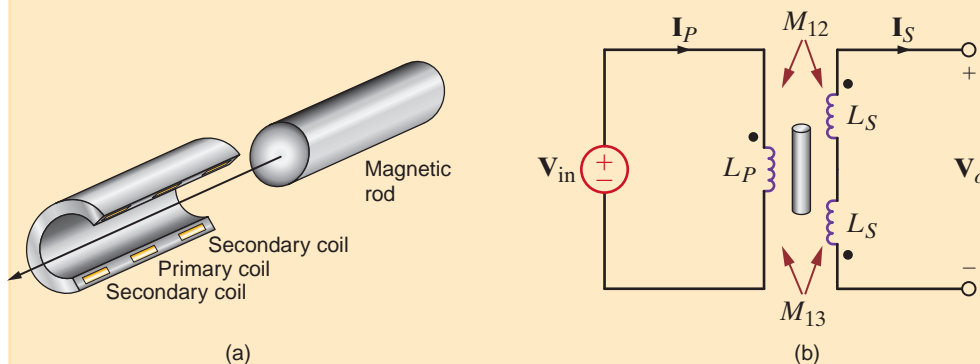
# 10.6

## Design Examples

A linear variable differential transformer (LVDT), is commonly used to measure linear movement. LVDTs are useful in a wide range of applications such as measuring the thickness of thin material sheets and measuring the physical deformation of objects under mechanical load. (A Web search on LVDT will yield a multitude of other example applications with explanations and photographs.) As shown in Figs. 10.31a and b, the LVDT is just a coupled inductor apparatus with one primary winding and two secondaries that are wound and connected such that their induced voltages subtract.

All three windings are contained in a hollow cylinder that receives a rod, usually made of steel or iron, that is physically attached to whatever it is that’s moving. The presence of the rod drastically increases the coupling coefficient between the windings. Let us investigate how the LVDT output voltage is related to displacement and how the LVDT is driven. Then, we will design our own LVDT, driven at 10 V rms, 2 kHz, such that at 100% travel, the output voltage magnitude equals that of the input voltage.

## DESIGN EXAMPLE 10.17



**Figure 10.31**

Two representations of the standard LVDT: (a) the cutaway view and (b) the circuit diagram.

**SOLUTION** Typically, the primary winding of the LVDT is excited by an ac sinusoid in the range of 3 to 30 V rms at frequencies between 400 and 5000 Hz. Since we only need to measure the output voltage directly with a voltmeter, no external load is necessary.

The null position for the rod is dead center between the secondary windings. In that position the coupling between the primary and each secondary is identical, and the output voltage is zero. Should the rod move in either direction, the coupling will change linearly, as will the output voltage magnitude. The direction of travel is indicated by the relative phase of the output.

Our LVDT design begins with the circuit in Fig. 10.31b where the mutual coupling coefficient for each secondary winding varies as shown in Fig. 10.32. To create a linear relationship between displacement and output voltage, we restrict the nominal travel to that portion of Fig. 10.32 where the coupling coefficient is linear with displacement. Therefore, in this design, 100% travel will correspond to a coupling coefficient of 0.8.

Applying KVL to the primary loop yields

$$\mathbf{V}_{in} = j\omega L_P \mathbf{I}_P + j\omega M_{13} \mathbf{I}_S - j\omega M_{12} \mathbf{I}_S \tag{10.36}$$

At the secondary, the KVL equation is

$$2(j\omega L_S) \mathbf{I}_S + j\omega M_{13} \mathbf{I}_P - j\omega M_{12} \mathbf{I}_P + \mathbf{V}_o = 0 \tag{10.37}$$

With no load at the output,  $\mathbf{I}_S = 0$  and Eqs. (10.36) and (10.37) reduce to

$$\mathbf{V}_{in} = j\omega L_P \mathbf{I}_P \quad \text{and} \quad \mathbf{V}_o = \mathbf{I}_P j\omega [M_{12} - M_{13}] \tag{10.38}$$

Solving these for the output voltage and recognizing that  $M_{IX} = k_{IX} [L_P L_S]^{0.5}$ , we obtain

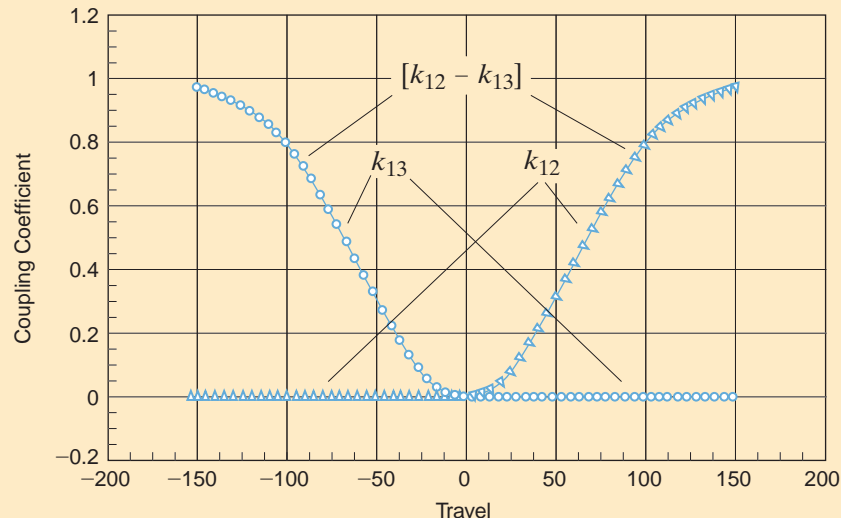
$$\mathbf{V}_o = \mathbf{V}_{in} \sqrt{\frac{L_S}{L_P}} [k_{12} - k_{13}] \tag{10.39}$$

We can express the coupling coefficients for each secondary in terms of the percent of travel:

$$k_{12} = \begin{cases} 0.008x & \text{for } 0 < x < 100 \\ 0 & \text{for } x < 0 \end{cases} \quad k_{13} = \begin{cases} 0.008x & \text{for } -100 < x < 0 \\ 0 & \text{for } x > 0 \end{cases}$$

**Figure 10.32**

Coupling coefficients for each secondary winding and the coupling difference. It is the difference that will determine the output voltage magnitude.



And, finally, assuming that the input voltage has zero phase angle, the output voltage can be expressed as

$$\begin{aligned} \mathbf{V}_o &= \mathbf{V}_{in} \sqrt{\frac{L_S}{L_P}} [0.008x] = \mathbf{V}_{in} \sqrt{\frac{L_S}{L_P}} [0.008x] / \underline{0^\circ} & 0 < x < 100 \\ \mathbf{V}_o &= \mathbf{V}_{in} \sqrt{\frac{L_S}{L_P}} [-0.008x] = \mathbf{V}_{in} \sqrt{\frac{L_S}{L_P}} [+0.008x] / \underline{-180^\circ} & -100 < x < 0 \end{aligned} \quad \mathbf{10.40}$$

Note the phase angle difference for positive versus negative travel.

To complete our analysis, we must determine a value for the secondary to primary inductance ratio. At 100% travel, the magnitudes of the input and output voltages are equal and  $k = 0.8$ . Using this information in Eq. (10.40), we find that the inductor ratio must be  $L_S/L_P = 1.25^2 = 1.5625$ .

To determine actual values for the inductances, we must consider the input current we will tolerate at the primary. We would prefer a relatively small current, because a large current would require large-diameter wire in the primary winding. Let us choose a primary current of 25 mA rms with an excitation of 10 V rms at 2000 Hz. From Eq. (10.38), the primary inductance will be

$$L_P = \frac{V_{in}}{\omega I_P} = \frac{10}{2\pi(2000)(0.025)} = 31.8 \text{ mH}$$

which yields a secondary inductance of

$$L_S = 1.5625L_P = 49.7 \text{ mH}$$

The selection of the two inductances completes this design.

The next example illustrates a technique for employing a transformer in a configuration that will extend the life of a set of Christmas tree lights.

The bulbs in a set of Christmas tree lights normally operate at 120 V rms. However, they last much longer if they are instead connected to 108 V rms. Using a 120 V–12 V transformer, let us design an autotransformer that will provide 108 V rms to the bulbs.

The two-winding transformers we have presented thus far provide electrical isolation between primary and secondary windings, as shown in Fig. 10.33a. It is possible, however, to interconnect primary and secondary windings serially, creating a three-terminal device, known as an autotransformer, as shown in Fig. 10.33b and represented in Fig. 10.33c. As we shall see, this arrangement offers certain practical advantages over the isolated case. Note that the three-terminal arrangement is essentially one continuous winding with an internal tap.

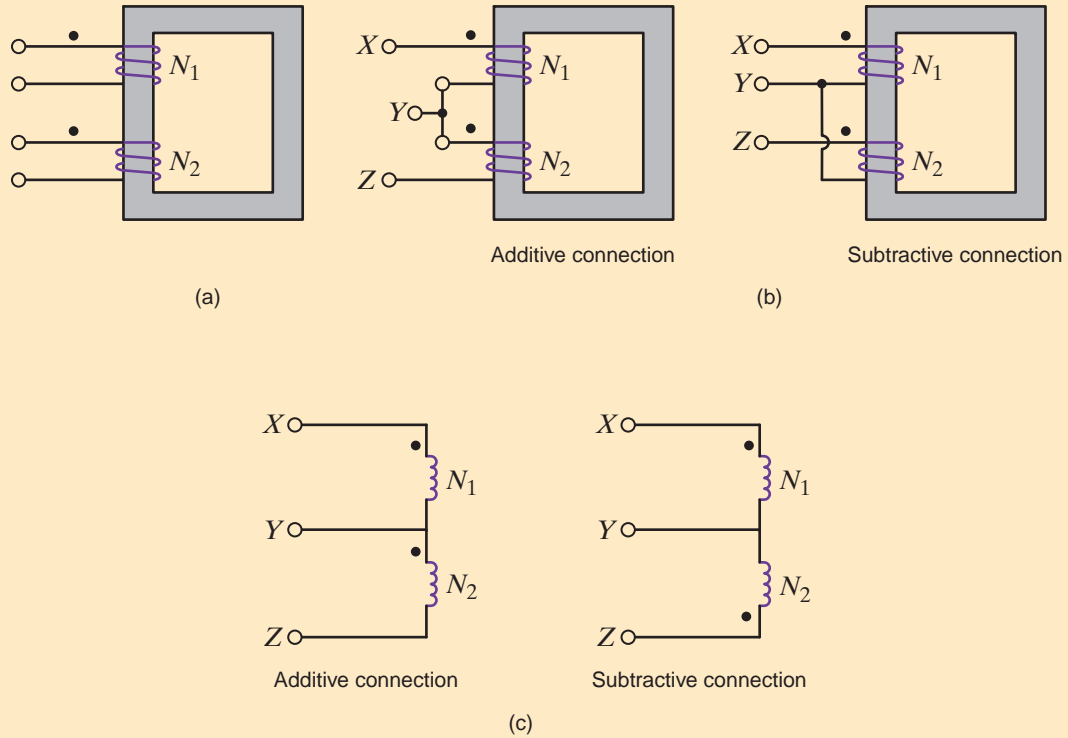
To reduce the voltage from 120 V rms to 108 V rms, the two coils must be connected such that their voltages are in opposition to each other, corresponding to a subtractive connection (in Fig. 10.33b), as shown in Fig. 10.34. In this arrangement, the voltage across both coils is

$$V_o = V_1 - V_2 = 120 - 12 = 108 \text{ V rms}$$

and the lights are simply connected across both coils.

## DESIGN EXAMPLE 10.18

### SOLUTION

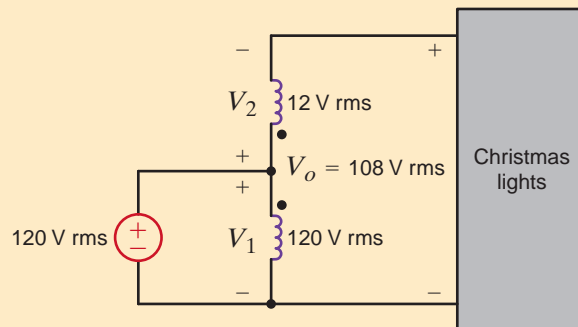


**Figure 10.33**

Autotransformer: (a) normal two-winding transformer with adjacent windings; (b) two-winding transformer interconnected to create a single-winding, three-terminal autotransformer; (c) symbolic representation of (b).

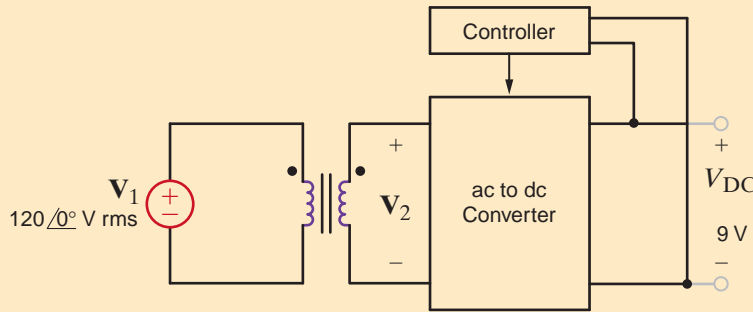
**Figure 10.34**

Autotransformer for low-voltage Christmas tree lights.



**DESIGN EXAMPLE 10.19**

Many electronics products today are powered by low-power ac to dc converters. (These units simply convert an ac signal at the input to a constant dc signal at the output.) They are normally called wall transformers and plug directly into a 120 V rms utility outlet. They typically have dc output voltages in the range of 5 to 18 V. As shown in Fig. 10.35, there are three basic components in a wall transformer: a simple transformer, an ac to dc converter, and a controller. A particular wall transformer is required that has a dc output of 9 V and a maximum power output of 2 W at an efficiency of only 60%. In addition, the ac to dc converter requires a peak ac voltage input of 12 V for proper operation. We wish to design the transformer by selecting its turns ratio and current rating.

**Figure 10.35**

A block diagram for a simple wall transformer. These devices convert ac voltages (typically 120 V rms) to a dc voltage at a fairly low power level.

First we consider the necessary turns ratio for the transformer. We must determine the voltage ratio,  $V_2/V_1$ . From the specifications,  $V_2$  must have a peak value of at least 12 V. We will include some safety margin and design for  $V_2$  around 13.5 V. Since  $V_1$  is 120 V rms, its peak value is 169.7 V. Therefore,

$$n = \frac{V_2}{V_1} = \frac{169.7}{13.5} = 12.6$$

Thus, the  $V_2/V_1$  ratio is 12.6. We will use a turns ratio of 12.5:1, or 25:2. Next we consider the power requirement. The maximum load is 2 W. At an efficiency of 60%, the maximum input power to the unit is

$$P_{\text{in}} = \frac{P_{\text{out}}}{\eta} = \frac{2}{0.6} = 3.33 \text{ W}$$

At 120 V rms, the input current is only

$$I_{\text{in}} = \frac{P_{\text{in}}}{V_{\text{in}}} = \frac{3.33}{120} = 27.8 \text{ mA rms}$$

Therefore, specifying a transformer with a turns ratio of 25:2 and a current rating of 100 mA rms should provide an excellent safety margin.

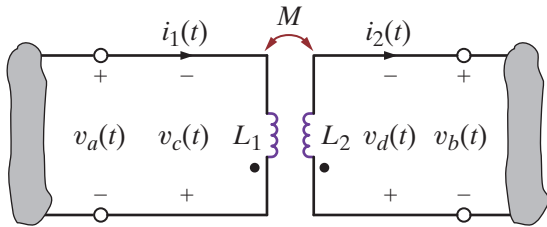
**SOLUTION****SUMMARY**

- **Mutual inductance** Mutual inductance occurs when inductors are placed in close proximity to one another and share a common magnetic flux.
- **The dot convention for mutual inductance** The dot convention governs the sign of the induced voltage in one coil based on the current direction in another.
- **The relationship between the mutual inductance and self-inductance of two coils** An energy analysis indicates that  $M = k\sqrt{L_1 L_2}$ , where  $k$ , the coefficient of coupling, has a value between 0 and 1.
- **The ideal transformer** An ideal transformer has infinite core permeability and winding conductance. The voltage and current can be transformed between the primary and secondary ends based on the ratio of the number of winding turns between the primary and secondary.
- **The dot convention for an ideal transformer** The dot convention for ideal transformers, like that for mutual inductance, specifies the manner in which a current in one winding induces a voltage in another winding.
- **Equivalent circuits involving ideal transformers** Based on the location of the circuits' unknowns, either the primary or secondary can be reflected to the other side of the transformer to form a single circuit containing the desired unknown. The reflected voltages, currents, and impedances are a function of the dot convention and turns ratio.

**PROBLEMS**

**10.1** Given the network in Fig. P10.1,

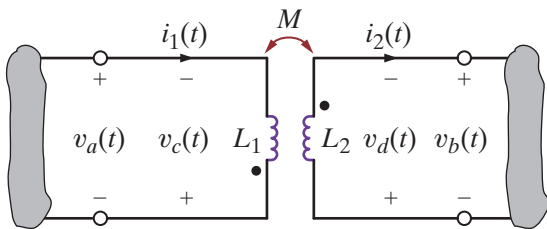
- (a) write the equations for  $v_a(t)$  and  $v_b(t)$ .
- (b) write the equations for  $v_c(t)$  and  $v_d(t)$ .



**Figure P10.1**

**10.2** Given the network in Fig. P10.2,

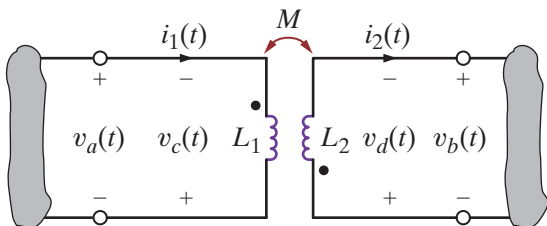
- (a) find the equations for  $v_a(t)$  and  $v_b(t)$ .
- (b) find the equations for  $v_c(t)$  and  $v_d(t)$ .



**Figure P10.2**

**10.3** Given the network in Fig. P10.3,

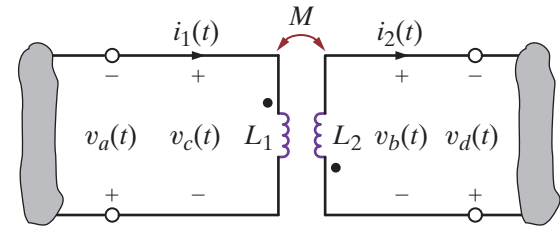
- (a) write the equations for  $v_a(t)$  and  $v_b(t)$ .
- (b) write the equations for  $v_c(t)$  and  $v_d(t)$ .



**Figure P10.3**

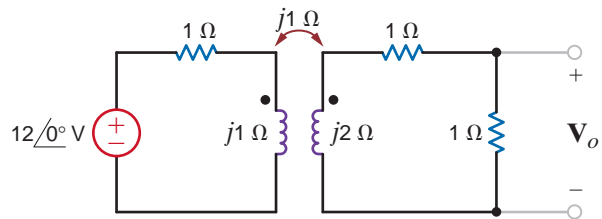
**10.4** Given the network in Fig. P10.4,

- (a) find the equations for  $v_a(t)$  and  $v_b(t)$ .
- (b) find the equations for  $v_c(t)$  and  $v_d(t)$ .



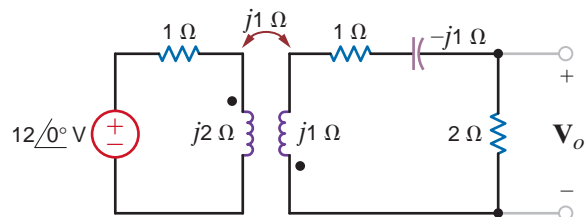
**Figure P10.4**

**10.5** Find  $V_o$  in the network in Fig. P10.5.



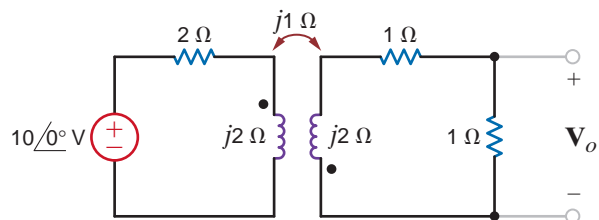
**Figure P10.5**

**10.6** Find  $V_o$  in the network in Fig. P10.6.



**Figure P10.6**

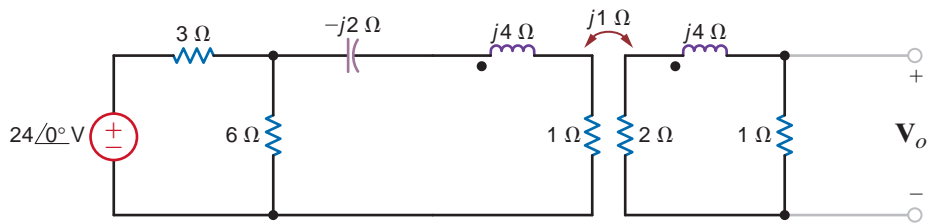
**10.7** Find  $V_o$  in the circuit in Fig. P10.7.



**Figure P10.7**

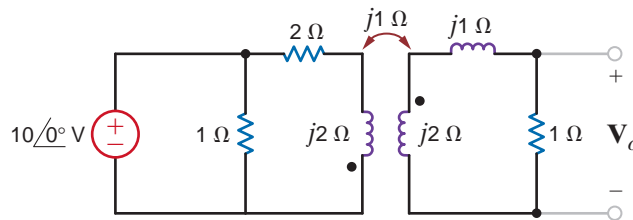


**10.8** Determine  $V_o$  in the network in Fig. P10.8.



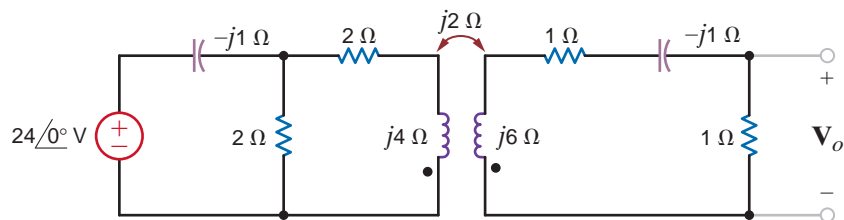
**Figure P10.8**

**10.9** Find  $V_o$  in the circuit in Fig. P10.9.



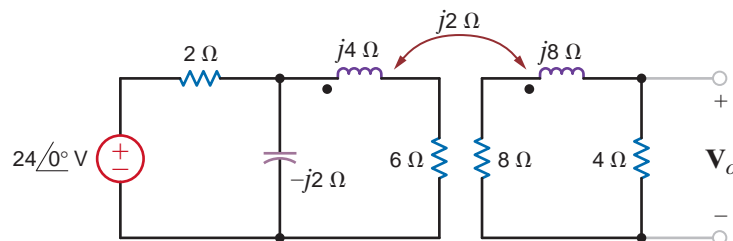
**Figure P10.9**

**10.10** Find  $V_o$  in the network in Fig. P10.10.



**Figure P10.10**

**10.11** Find  $V_o$  in the circuit in Fig. P10.11.



**Figure P10.11**

10.12 Find  $I_o$  in the circuit in Fig. P10.12.

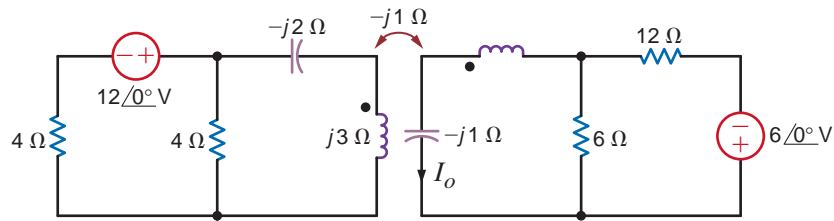


Figure P10.12

10.13 Find  $V_o$  in the network in Fig. P10.13.

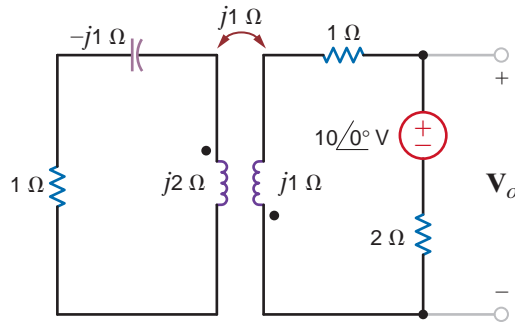


Figure P10.13

10.14 Find  $V_o$  in the circuit in Fig. P10.14.

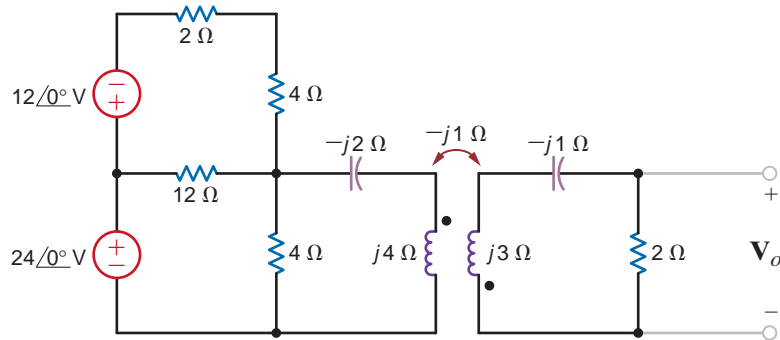


Figure P10.14

10.15 Find  $V_o$  in the network in Fig. P10.15.

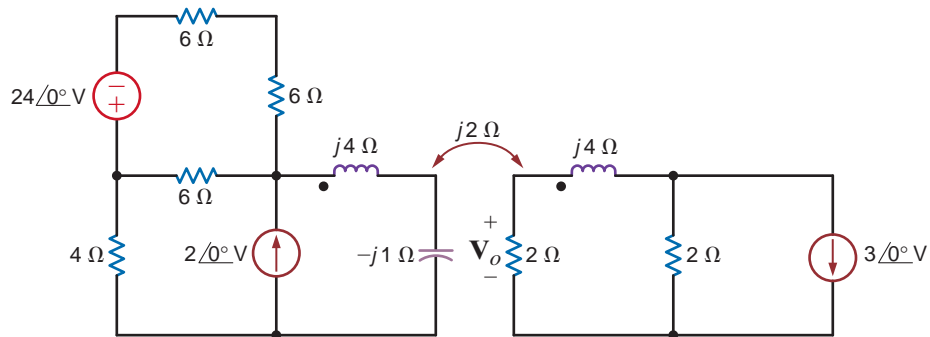
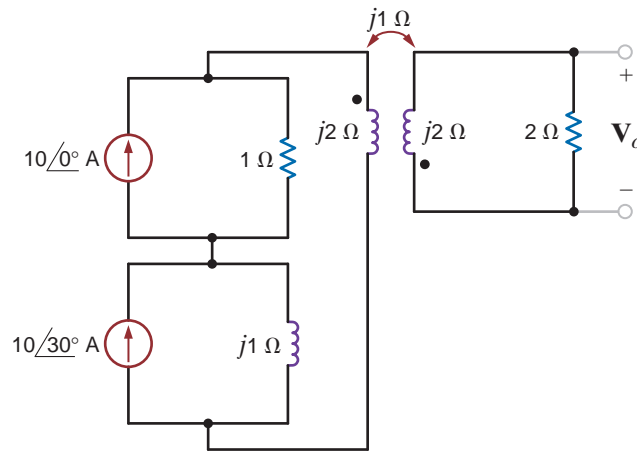


Figure P10.15

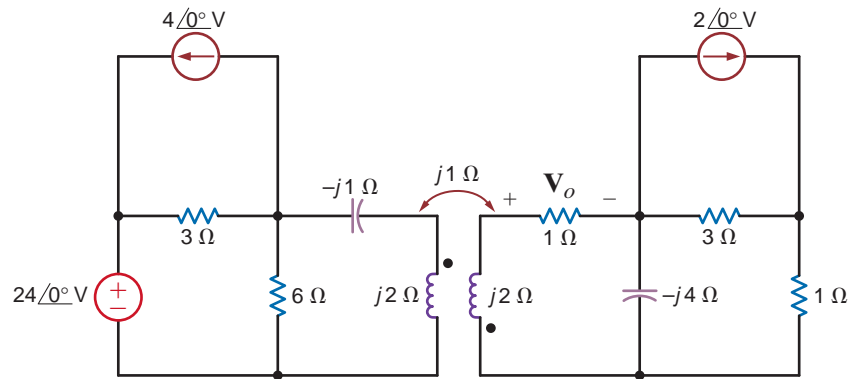


**10.16** Find  $V_o$  in the network in Fig. P10.16.



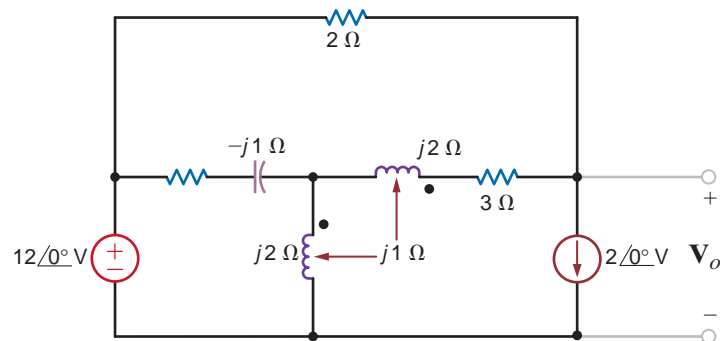
**Figure P10.16**

**10.17** Find  $V_o$  in the network in Fig. P10.17.



**Figure P10.17**

**10.18** Find  $V_o$  in the network in Fig. P10.18.



**Figure P10.18**

10.19 Find  $I_o$  in the circuit in Fig. P10.19.

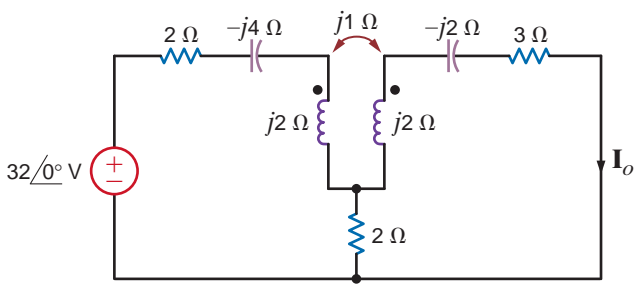


Figure P10.19

10.20 Find  $V_o$  in the network in Fig. P10.20.

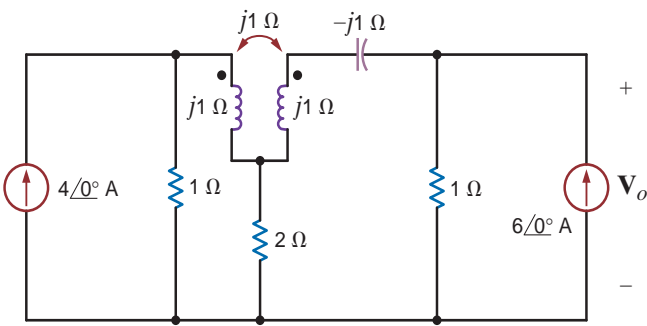


Figure P10.20

10.21 Find  $I_o$  in the circuit in Fig. P10.21.

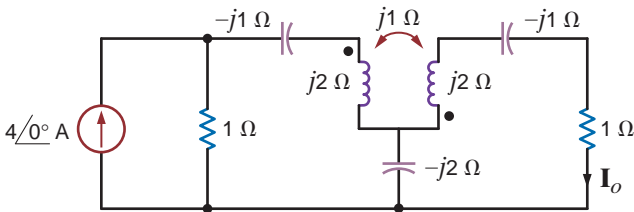


Figure P10.21

10.22 Find  $V_o$  in the circuit in Fig. P10.22.

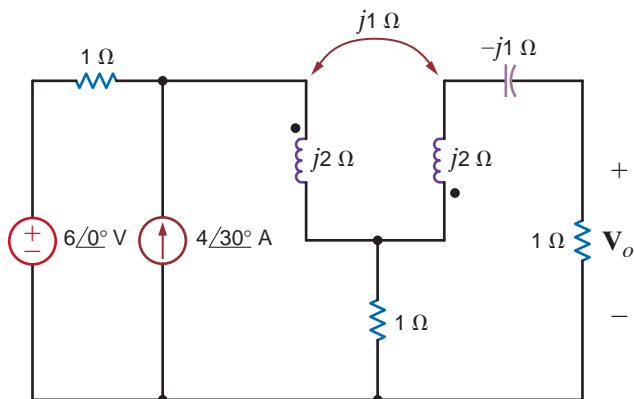


Figure P10.22

10.23 Find  $V_o$  in the network in Fig. P10.23.

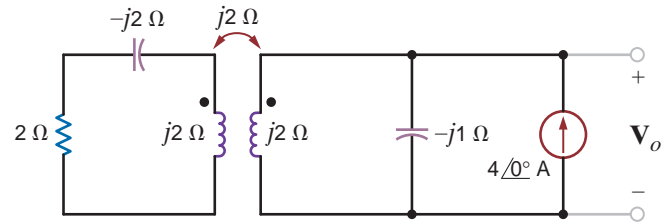


Figure P10.23

10.24 Find  $V_o$  in the network in Fig. P10.24.

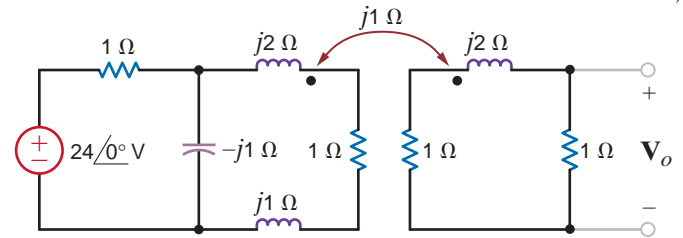


Figure P10.24

10.25 Find  $V_o$  in the network in Fig. P10.25.

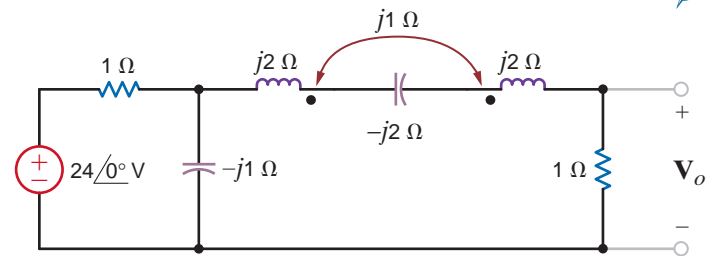


Figure P10.25

10.26 Find  $V_o$  in the network in Fig. P10.26.

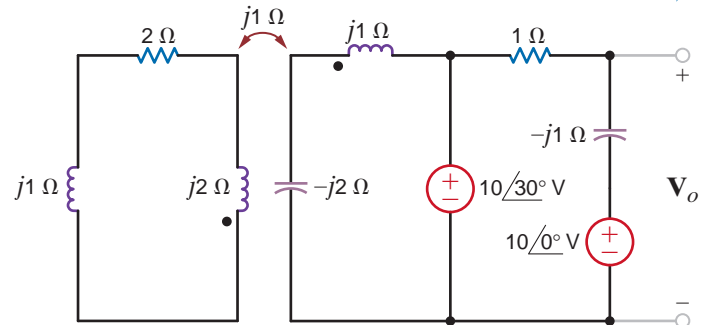


Figure P10.26

10.27 Find  $V_o$  in the network in Fig. P10.27.

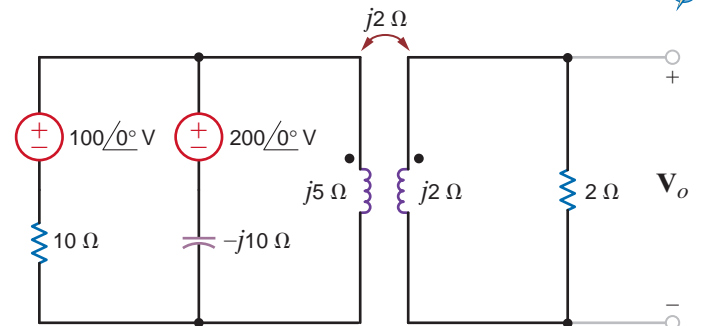


Figure P10.27

**10.28** Determine the impedance seen by the source in the network shown in Fig. P10.28.

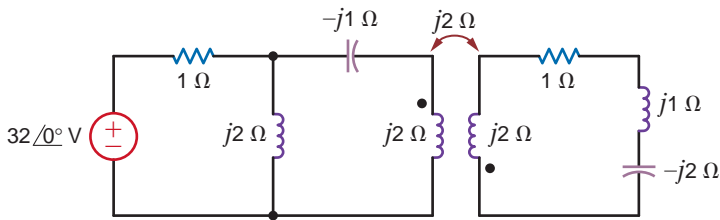


Figure P10.28

**10.29** Determine the impedance seen by the source in the network in Fig. P10.29.

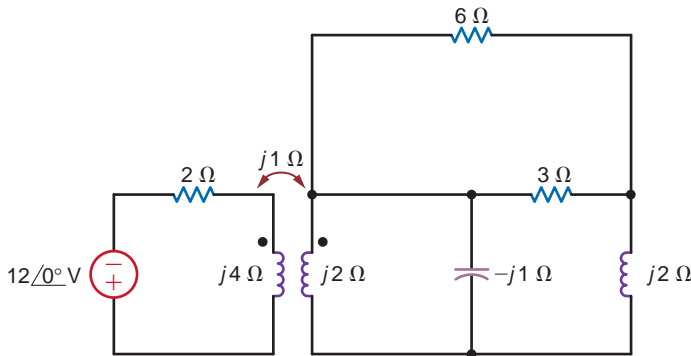


Figure P10.29

**10.30** Determine the input impedance of the network shown in Fig. P10.30.

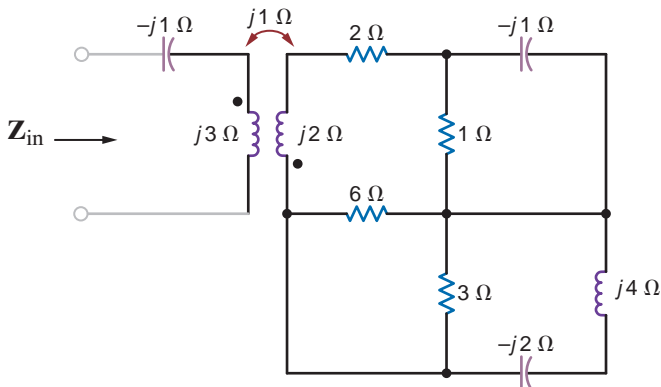


Figure P10.30

**10.31** Determine the input impedance seen by the source in the circuit in Fig. P10.31.

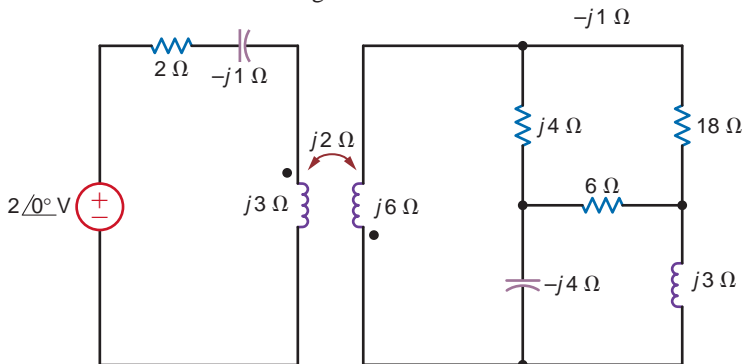


Figure P10.31

**10.32** Determine the input impedance  $Z_{in}$  of the circuit in Fig. P10.32.

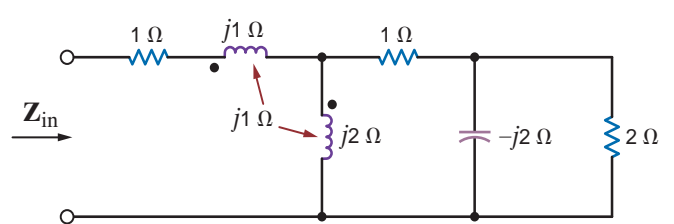


Figure P10.32

**10.33** Determine the input impedance  $Z_{in}$  in the network in Fig. P10.33.

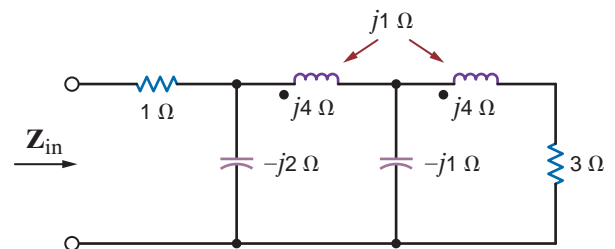


Figure P10.33

**10.34** Analyze the network in Fig. P10.34 and determine whether a value of  $X_C$  can be found such that the output voltage is equal to twice the input voltage.

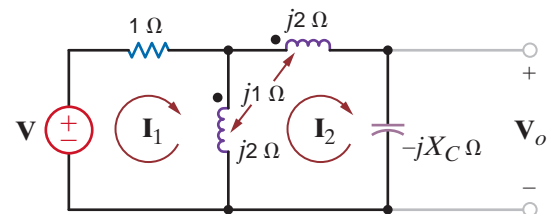


Figure P10.34

**10.35** Given the network shown in Fig. P10.35, determine the value of the capacitor  $C$  that will cause the impedance seen by the  $24 \angle 0^\circ$  V voltage source to be purely resistive,  $f = 60$  Hz.

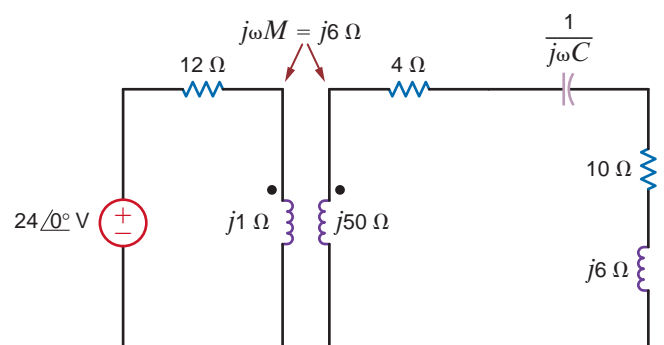


Figure P10.35

**10.36** Two coils in a network are positioned such that there is 100% coupling between them. If the inductance of one coil is 10 mH and the mutual inductance is 6 mH, compute the inductance of the other coil.

**10.37** The currents in the magnetically coupled inductors shown in Fig. P10.37 are known to be  $i_1(t) = 8 \cos(377t - 20^\circ)$  mA and  $i_2(t) = 4 \cos(377t - 50^\circ)$  mA. The inductor values are  $L_1 = 2$  H,  $L_2 = 1$  H, and  $k = 0.6$ . Determine  $v_1(t)$  and  $v_2(t)$ .

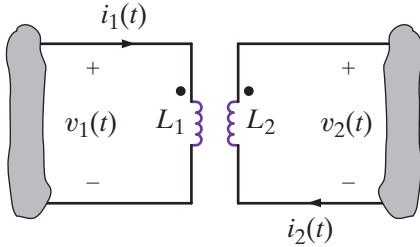


Figure P10.37

**10.38** Determine the energy stored in the coupled inductors in Problem 10.37 at  $t = 1$  ms.

**10.39** The currents in the network in Fig. P10.39 are known to be  $i_1(t) = 10 \cos(377t - 30^\circ)$  mA and  $i_2(t) = 20 \cos(377t - 45^\circ)$  mA. The inductances are  $L_1 = 2$  H,  $L_2 = 2$  H, and  $k = 0.8$ . Determine  $v_1(t)$  and  $v_2(t)$ .

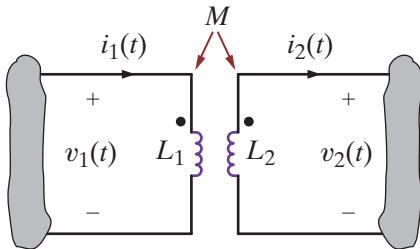


Figure P10.39

**10.40** Determine the energy stored in the coupled inductors in the circuit in Fig. P10.39 at  $t = 1$  ms.

**10.41** Determine  $V_o$  in the circuit in Fig. P10.41.

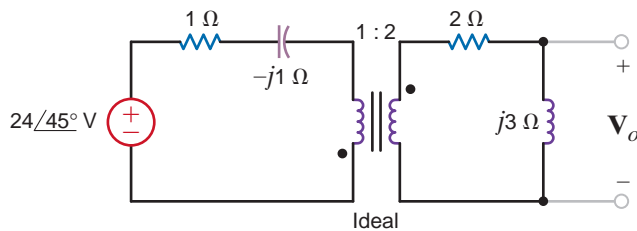


Figure P10.41

**10.42** Find all currents and voltages in the network in Fig. P10.42.

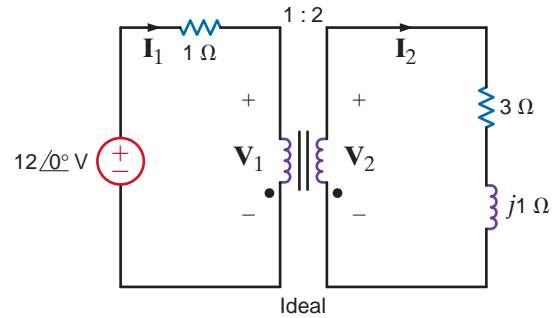


Figure P10.42

**10.43** Determine  $V_o$  in the circuit in Fig. P10.43.

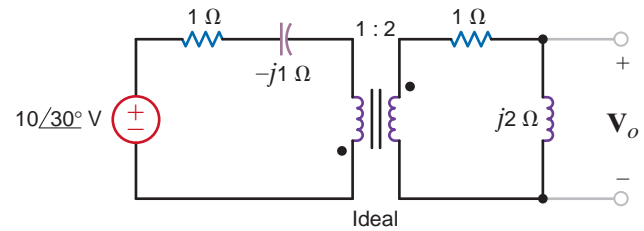


Figure P10.43

**10.44** Determine  $I_1$ ,  $I_2$ ,  $V_1$ , and  $V_2$  in the network in Fig. P10.44.

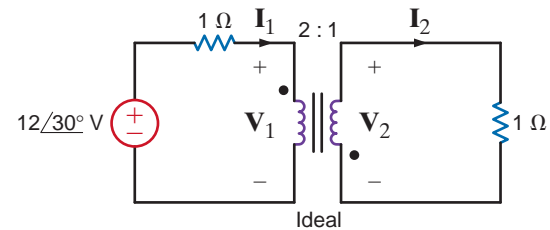


Figure P10.44

**10.45** Determine  $I_1$ ,  $I_2$ ,  $V_1$ , and  $V_2$  in the network in Fig. P10.45.

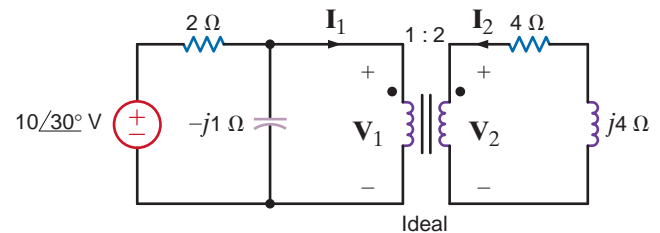


Figure P10.45

**10.46** Find  $V_o$  in the circuit in Fig. P10.46.

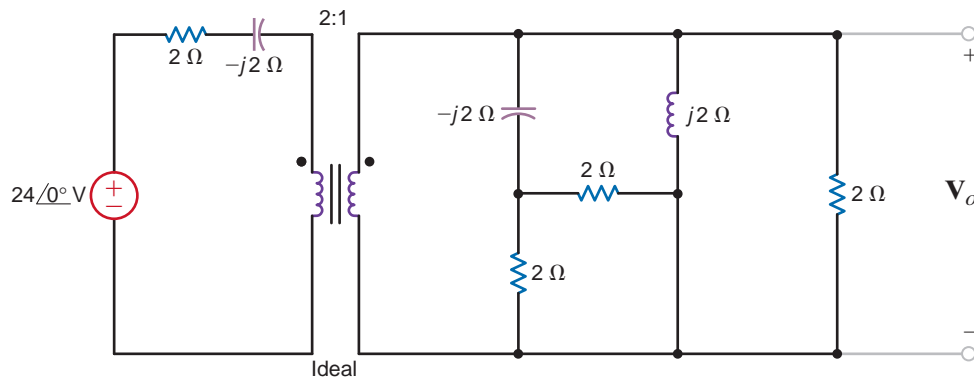


Figure P10.46

**10.47** Find  $I_o$  in the network in Fig. P10.47.

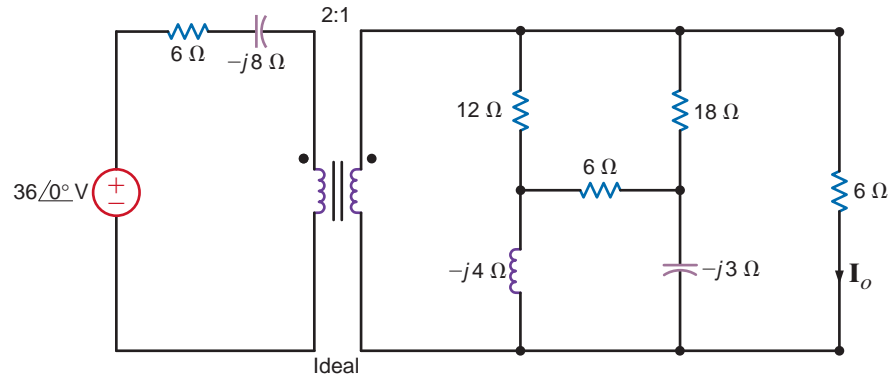


Figure P10.47

**10.48** Find  $V_o$  in the network in Fig. P10.48.

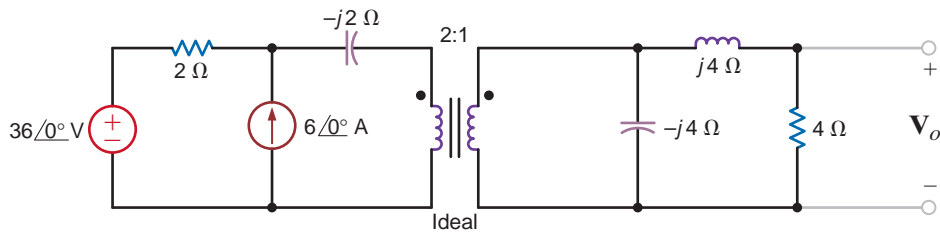


Figure P10.48

**10.49** Find  $I_o$  in the circuit in Fig. P10.49.

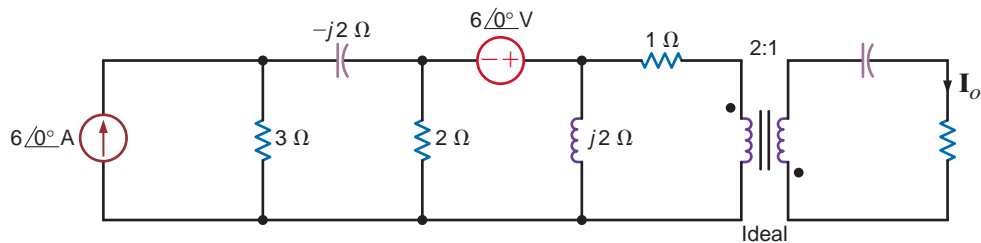


Figure P10.49

10.50 Determine  $I_1$ ,  $I_2$ ,  $V_1$ , and  $V_2$  in the network in Fig. P10.50.

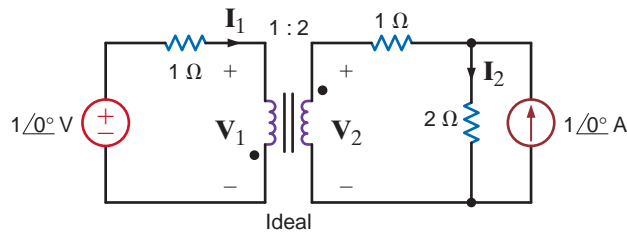


Figure P10.50

10.51 Find  $I_o$  in the circuit in Fig. P10.51.

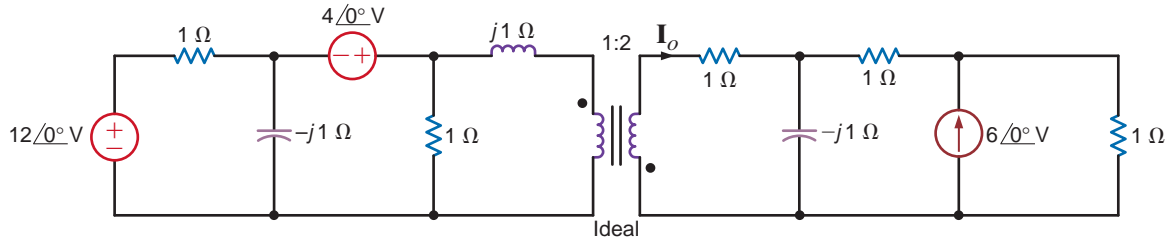


Figure P10.51

10.52 Determine  $I_1$ ,  $I_2$ ,  $V_1$ , and  $V_2$  in the network in Fig. P10.52.

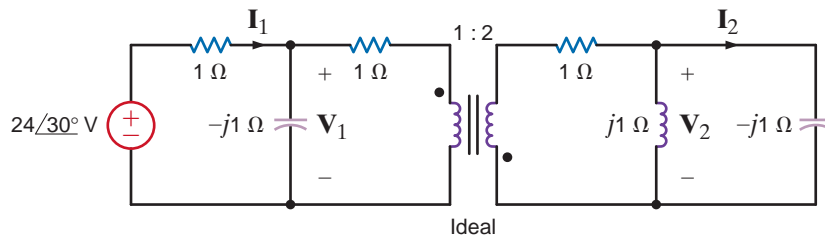


Figure P10.52

10.53 Find  $V_o$  in the network in Fig. P10.53.

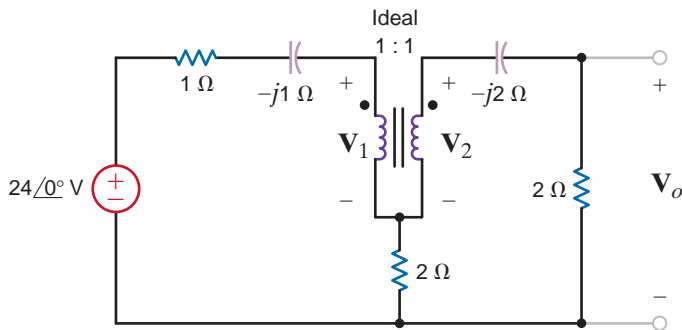


Figure P10.53

10.54 Determine  $I_1$ ,  $I_2$ ,  $V_1$ , and  $V_2$  in the network in Fig. P10.54.

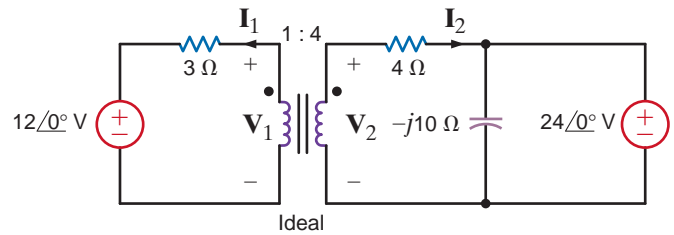
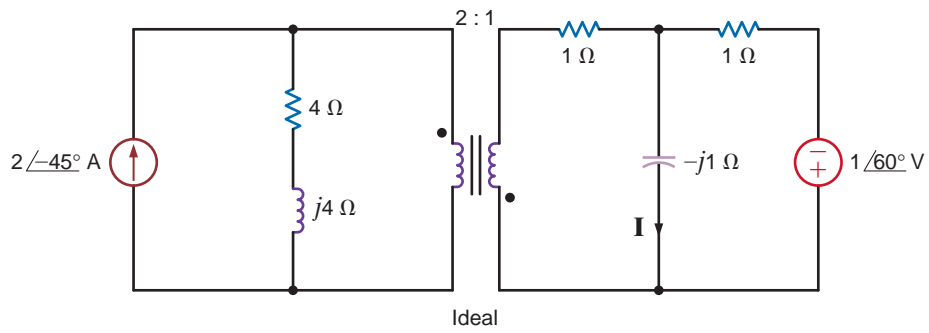


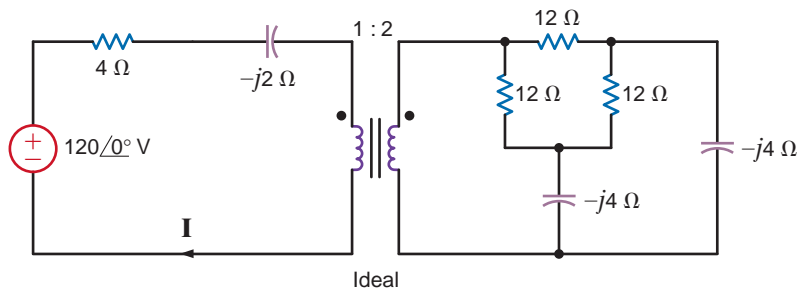
Figure P10.54

**10.55** Find  $I$  in the network in Fig. P10.55.



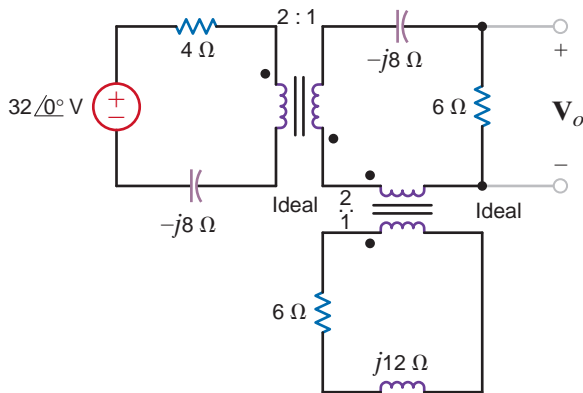
**Figure P10.55**

**10.56** Find the current  $I$  in the network in Fig. P10.56.



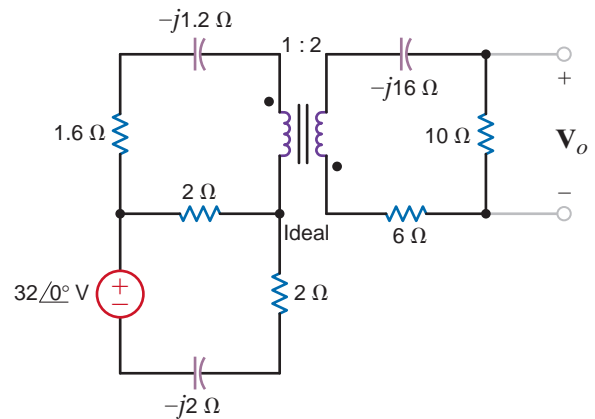
**Figure P10.56**

**10.57** Find  $V_o$  in the network in Fig. P10.57.



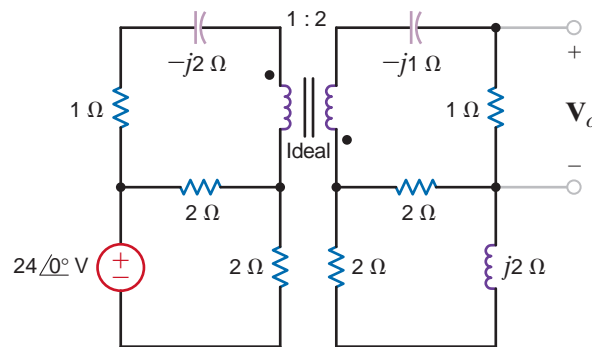
**Figure P10.57**

**10.58** Find  $V_o$  in the circuit in Fig. P10.58.



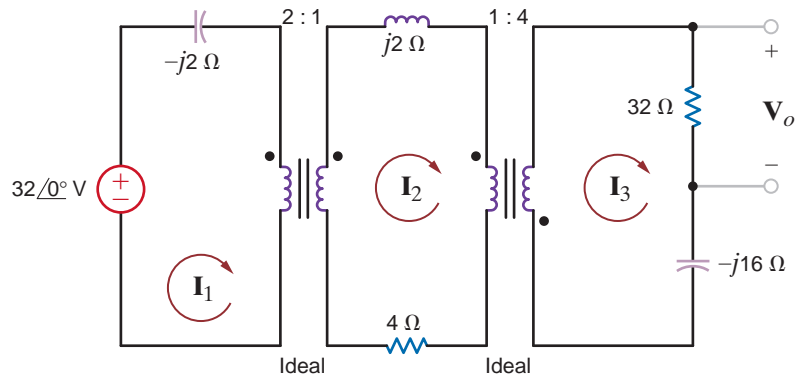
**Figure P10.58**

**10.59** Find  $V_o$  in the circuit in Fig. P10.59.



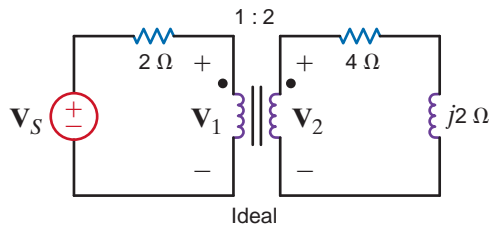
**Figure P10.59**

**10.60** Find the voltage  $V_o$  in the network in Fig. P10.60.



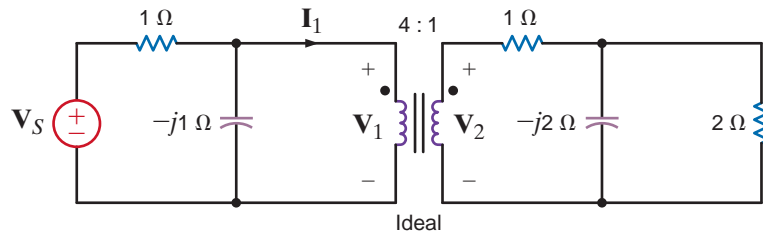
**Figure P10.60**

**10.61** Determine the input impedance seen by the source in the circuit in Fig. P10.61.



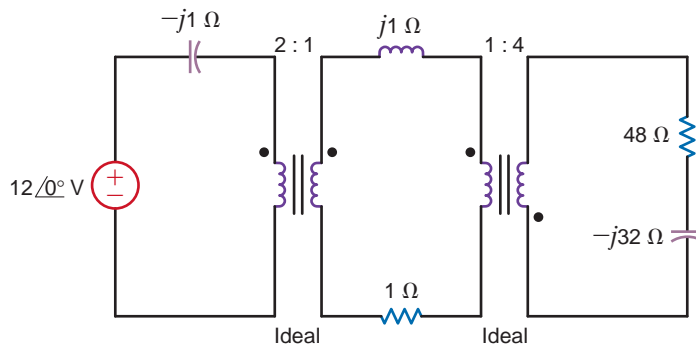
**Figure P10.61**

**10.62** Determine the input impedance seen by the source in the circuit in Fig. P10.62.



**Figure P10.62**

**10.63** Determine the input impedance seen by the source in the network shown in Fig. P10.63.



**Figure P10.63**



**10.64** Determine the input impedance seen by the source in the network shown in Fig. P10.64.

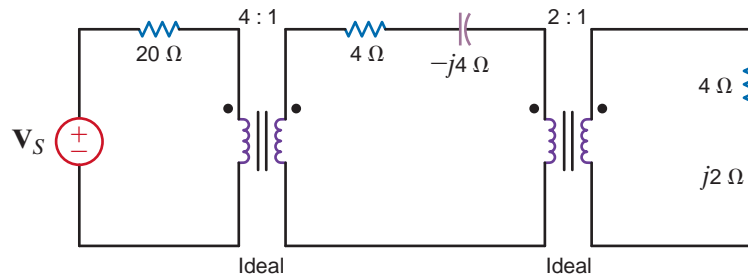


Figure P10.64

**10.65** The output stage of an amplifier in an old radio is to be matched to the impedance of a speaker, as shown in Fig. P10.65. If the impedance of the speaker is  $8 \Omega$  and the amplifier requires a load impedance of  $3.2 \text{ k}\Omega$ , determine the turns ratio of the ideal transformer.

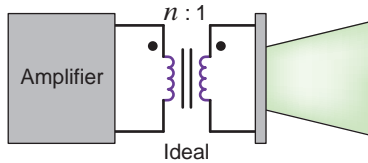


Figure P10.65

**10.66** Given that  $V_o = 48 \angle 30^\circ \text{ V}$  in the circuit shown in Fig. P10.66, determine  $V_S$ .

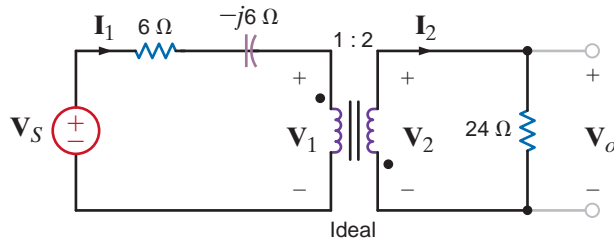


Figure P10.66

**10.67** Determine  $V_S$  in the circuit in Fig. 10.67.

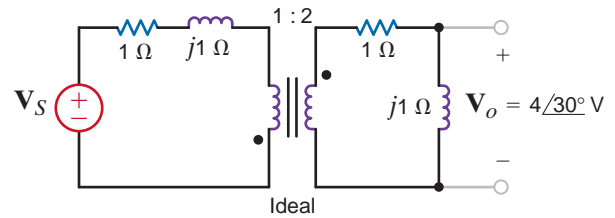


Figure P10.67

**10.68** Determine  $I_S$  in the circuit in Fig. P10.68.

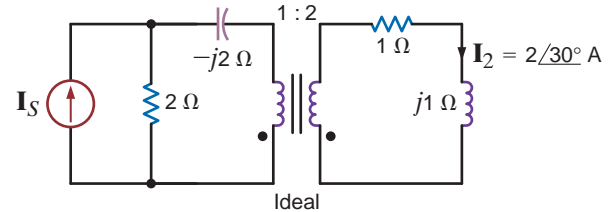


Figure P10.68

**10.69** In the network in Fig. P10.69, if  $I_1 = 4 \angle 0^\circ \text{ A}$ , find  $V_S$ .

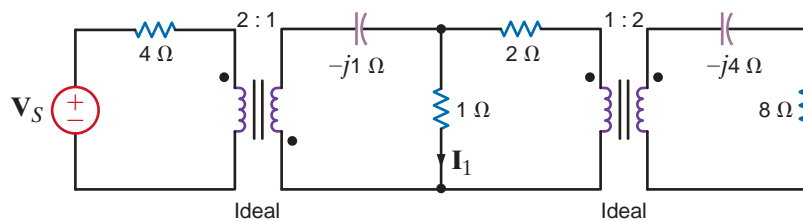


Figure P10.69

**10.70** In the circuit in Fig. P10.70, if  $\mathbf{I}_x = 4\angle 30^\circ$  A, find  $\mathbf{V}_o$ .

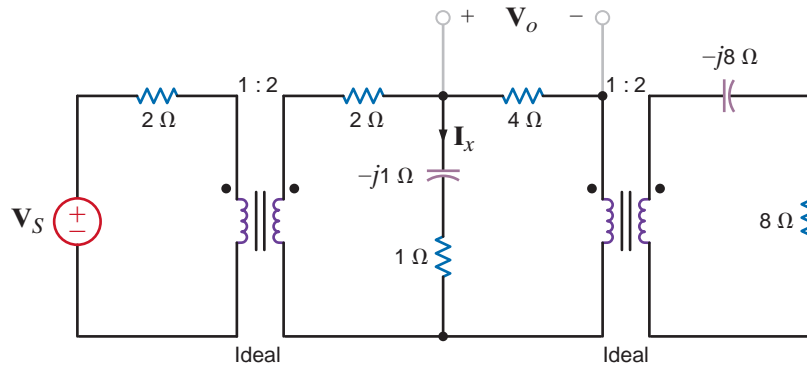


Figure P10.70

**10.71** For maximum power transfer, we desire to match the impedance of the inverting amplifier stage in Fig. P10.71 to the  $50\text{-}\Omega$  equivalent resistance of the ac input source. However, standard op-amps perform best when the resistances around them are at least a few hundred ohms. The gain of the op-amp circuit should be  $-10$ . Design the complete circuit by selecting resistors no smaller than  $1\text{ k}\Omega$  and specifying the turns ratio of the ideal transformer to satisfy both the gain and impedance matching requirements.

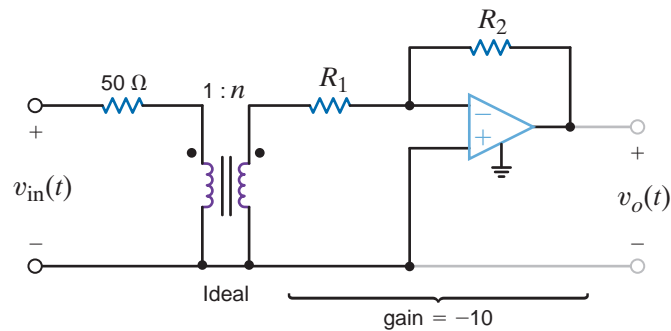


Figure P10.71

**10.72** Digital clocks often divide a  $60\text{-Hz}$  frequency signal to obtain a  $1\text{-second}$ ,  $1\text{-minute}$ , or  $1\text{-hour}$  signal. A convenient source of this  $60\text{-Hz}$  signal is the power line. However,  $120$  volts is too high to be used by the low power electronics. Instead, a  $3\text{-V}$ ,  $60\text{-Hz}$  signal is needed. If a resistive voltage divider is used to drop the voltage from  $120$  to  $3$  V, the heat generated will be unacceptable. In addition, it is costly to use a transformer in this application. Digital clocks are consumer items and must be very inexpensive to be a competitive product. The problem then is to design a circuit that will produce between  $2.5$  V and  $3$  V at  $60$  Hz from the  $120\text{-V}$  ac power line without dissipating any heat or the use of a transformer. The design will interface with a circuit that has an input resistance of  $1200$  ohms.

TYPICAL PROBLEMS FOUND ON THE FE EXAM

**10PFE-1** In the network in Fig. 10PFE-1, find the impedance seen by the source.

- a.  $4.88 \angle 19.75^\circ \Omega$
- b.  $2.56 \angle 31.26^\circ \Omega$
- c.  $5.37 \angle -26.57^\circ \Omega$
- d.  $8.23 \angle -10.61^\circ \Omega$

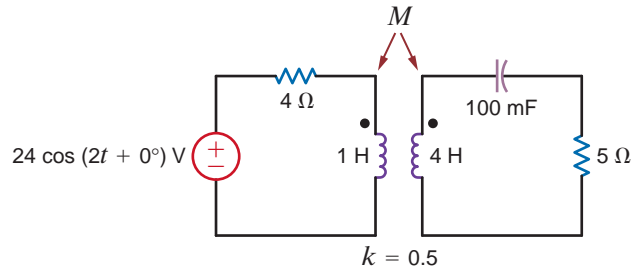


Figure 10PFE-1

**10PFE-2** In the circuit in Fig. 10PFE-2, select the value of the transformer's turns ratio  $n = \frac{N_2}{N_1}$  to achieve impedance matching for maximum power transfer. Using this value of  $n$ , calculate the power absorbed by the 3-Ω resistor.

- a. 100.75 W
- b. 37.5 W
- c. 55.6 W
- d. 75 W

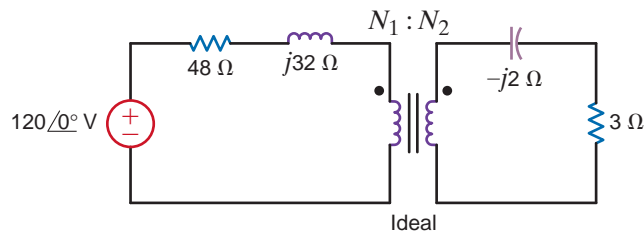


Figure 10PFE-2

**10PFE-3** In the circuit in Fig. 10PFE-3, select the turns ratio of the ideal transformer that will match the output of the transistor amplifier to the speaker represented by the 16-Ω load.

- a. 18
- b. 30
- c. 10
- d. 25

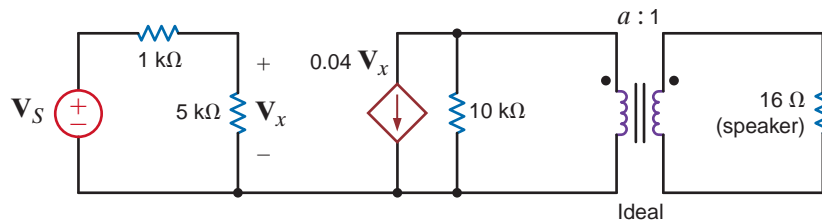
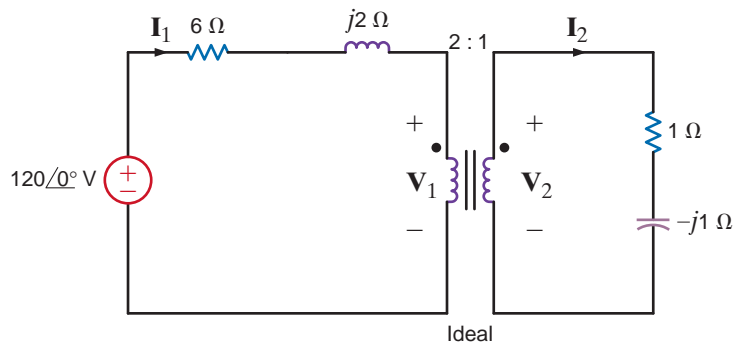


Figure 10PFE-3

**10PFE-4** What is the current  $I_2$  in the circuit shown in Fig. 10PFE-4?

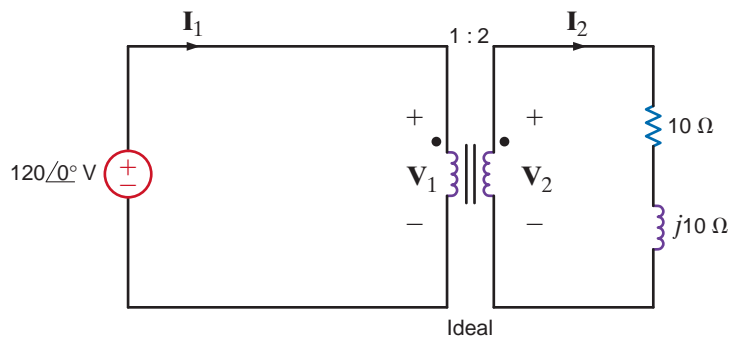
- a.  $11.77 \angle 35.25^\circ$  A
- b.  $5.85 \angle 20.62^\circ$  A
- c.  $23.54 \angle 11.31^\circ$  A
- d.  $15.36 \angle 8.48^\circ$  A



**Figure 10PFE-4**

**10PFE-5** What is the current  $I_2$  in the circuit shown in Fig. 10PFE-5?

- a.  $16.97 \angle -45^\circ$  A
- b.  $10.54 \angle 30^\circ$  A
- c.  $12.02 \angle -15^\circ$  A
- d.  $8.25 \angle 45^\circ$  A



**Figure 10PFE-5**

# POLYPHASE CIRCUITS



Stephen Strathdee/iStockphoto

## THE LEARNING GOALS FOR THIS CHAPTER ARE:

- Know the characteristics of a balanced, three-phase circuit
- Know the basic wye and delta three-phase connections
- Know how to calculate voltage and currents in balanced, three-phase circuits
- Know how to calculate complex power in balanced, three-phase circuits

**Wind Farms** Turning a former waste site into a reliable source of renewable energy seems like a great idea—a real “win-win” for energy and the environment. Denmark has done just that with its Middelgrunden Wind Farm on a natural reef east of the Copenhagen harbor. Established in 2000 as the world’s largest offshore wind farm, it consists of 20 turbines with a total rated power of 40 Megawatts. For more than 200 years, the reef had been a dumping site for harbor sludge and other contaminated waste. Today, airline travelers flying into Copenhagen from the north can view the visual impact of this renewable energy source as a recognizable tribute to Danish ingenuity.

Denmark has more than 6200 wind turbines producing an estimated 89 million kilowatt-hours of electricity each year. One of Denmark’s largest industries, wind turbine manufacturing has a considerable export market worldwide. The environmental

impact of wind farms is remarkable—avoiding tons of chemical pollution that would occur from conventional energy sources.

Renewable power generated by wind farms—despite the variability of wind itself—is added directly to the electric grid or stored in such media as electrochemical batteries or large-capacity capacitors. The final step is providing this power to the customer—a polyphase AC electrical system can deliver more power at less voltage with smaller wires than the single-phase systems you considered earlier. We show in this chapter that a balanced three-phase system provides a constant instantaneous power to its load. Working on a per-phase basis allows you to easily calculate phase and line voltages and currents as well as the power dissipated in the line and power delivered to the load. High efficiency is essential both for wind farm power generation and for power usage by three-phase systems—we strive to minimize power losses in all cases.

## 11.1

### Three-Phase Circuits

In this chapter we add a new dimension to our study of ac steady-state circuits. Up to this point we have dealt with what we refer to as single-phase circuits. Now we extend our analysis techniques to polyphase circuits or, more specifically, three-phase circuits (that is, circuits containing three voltage sources that are one-third of a cycle apart in time).

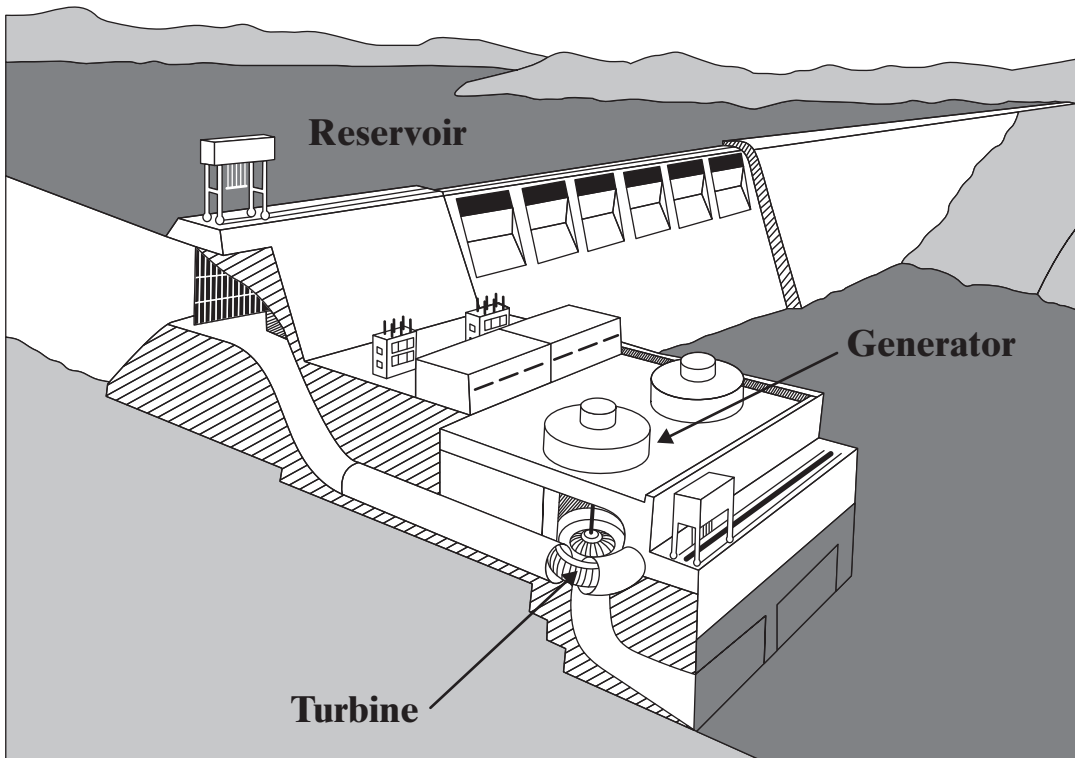
We study three-phase circuits for a number of important reasons. It is more advantageous and economical to generate and transmit electric power in the polyphase mode than with single-phase systems. As a result, most electric power is transmitted in polyphase circuits. In the United States the power system frequency is 60 Hz, whereas in other parts of the world 50 Hz is common.

The generation of electric power in the polyphase mode is accomplished with an electric generator, which converts mechanical energy to electrical energy. This mechanical energy can be produced at a dam or hydroelectric facility as shown in Fig. 11.1. As illustrated in Fig. 11.2, water stored in a reservoir falls through a turbine to the river below. The turbine drives the electric generator to produce three-phase voltages. In the fossil-fuel generating facility in Fig. 11.3, the turbine is driven by steam. In the diagram of Fig. 11.4, fuel and air are combusted in the boiler turning water into steam to drive the turbine. Cooling water is circulated through the condenser to change the steam exhaust from the turbine back to water to complete the cycle. A nuclear generating facility, shown in Fig. 11.5, also utilizes steam to drive the turbine. The heat from fission in the reactor core produces the steam.

Note that all three types of generating facilities are located close to a body of water such as a river and are not often close to the loads that consume the electrical energy. Power transmission lines, such as those shown in Fig. 11.6, are constructed to transport electrical energy from the generating facilities to the loads. The transmission of electrical energy is most efficiently accomplished at very high voltages. Because this voltage can be extremely high in comparison to the level at which it is normally used (e.g., in the household), there is a need to raise and lower the voltage. This can be easily accomplished in ac systems using transformers, which we studied in Chapter 10. An example of a three-phase power transformer is shown in Fig. 11.7.

**Figure 11.1**  
Hydroelectric generating facility. (Courtesy of Mark Nelms)





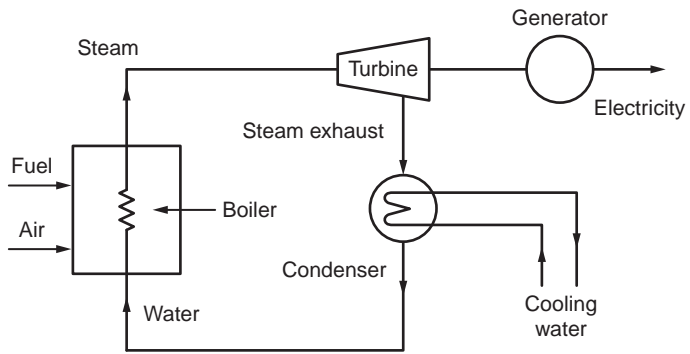
**Figure 11.2** Diagram of a hydroelectric generating facility. (Diagram courtesy of Southern Company)



**Figure 11.3** A fossil-fuel generating facility. (Courtesy of Mark Nelms)

**Figure 11.4**

Conceptual diagram for a fossil-fuel generating facility. (Diagram courtesy of Southern Company)



**Figure 11.5**

A nuclear generating facility. (Stockbyte/SUPERSTOCK)



**Figure 11.6**

Power transmission lines. (Courtesy of Mark Nelms)





**Figure 11.7**

A three-phase power transformer. (Courtesy of Jeremy Nelms, Talquin Electric Cooperative, Inc.)

As the name implies, three-phase circuits are those in which the forcing function is a three-phase system of voltages. If the three sinusoidal voltages have the same magnitude and frequency and each voltage is  $120^\circ$  out of phase with the other two, the voltages are said to be *balanced*. If the loads are such that the currents produced by the voltages are also balanced, the entire circuit is referred to as a *balanced three-phase circuit*.

A balanced set of three-phase voltages can be represented in the frequency domain as shown in Fig. 11.8a, where we have assumed that their magnitudes are 120 V rms. From the figure we note that

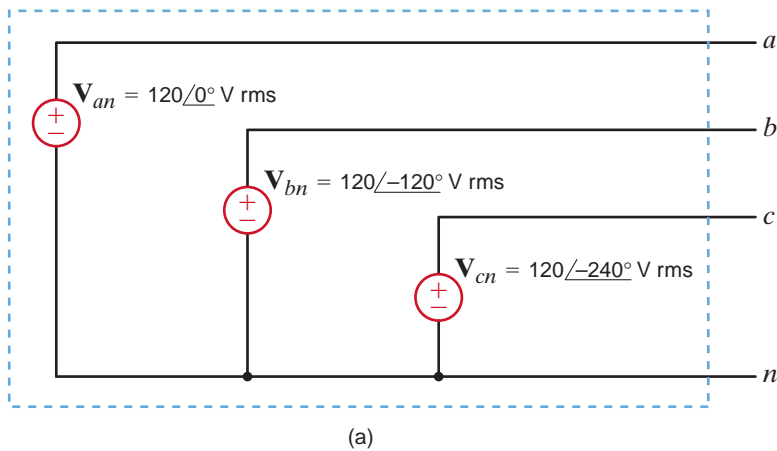
$$\mathbf{V}_{an} = 120 \angle 0^\circ \text{ V rms}$$

$$\mathbf{V}_{bn} = 120 \angle -120^\circ \text{ V rms}$$

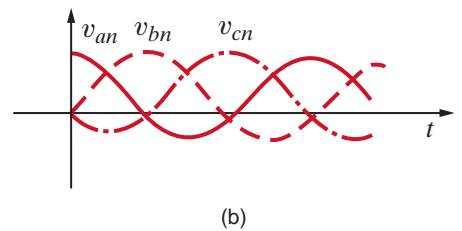
$$\mathbf{V}_{cn} = 120 \angle -240^\circ \text{ V rms}$$

$$= 120 \angle 120^\circ \text{ V rms}$$

11.1

**Figure 11.8**

Balanced three-phase voltages.



Our double-subscript notation is exactly the same as that employed in the earlier chapters; that is,  $\mathbf{V}_{an}$  means the voltage at point  $a$  with respect to point  $n$ . We will also employ the double-subscript notation for currents; that is,  $\mathbf{I}_{an}$  is used to represent the current from  $a$  to  $n$ . However, we must be very careful in this case to describe the precise path, since in a circuit there will be more than one path between the two points. For example, in the case of a single loop the two possible currents in the two paths will be  $180^\circ$  out of phase with each other.

The preceding phasor voltages can be expressed in the time domain as

$$\begin{aligned}v_{an}(t) &= 120\sqrt{2} \cos \omega t \text{ V} \\v_{bn}(t) &= 120\sqrt{2} \cos(\omega t - 120^\circ) \text{ V} \\v_{cn}(t) &= 120\sqrt{2} \cos(\omega t - 240^\circ) \text{ V}\end{aligned}\tag{11.2}$$

These time functions are shown in Fig. 11.8b.

Finally, let us examine the instantaneous power generated by a three-phase system. Assume that the voltages in Fig. 11.8 are

$$\begin{aligned}v_{an}(t) &= V_m \cos \omega t \text{ V} \\v_{bn}(t) &= V_m \cos(\omega t - 120^\circ) \text{ V} \\v_{cn}(t) &= V_m \cos(\omega t - 240^\circ) \text{ V}\end{aligned}\tag{11.3}$$

If the load is balanced, the currents produced by the sources are

$$\begin{aligned}i_a(t) &= I_m \cos(\omega t - \theta) \text{ A} \\i_b(t) &= I_m \cos(\omega t - \theta - 120^\circ) \text{ A} \\i_c(t) &= I_m \cos(\omega t - \theta - 240^\circ) \text{ A}\end{aligned}\tag{11.4}$$

The instantaneous power produced by the system is

$$\begin{aligned}p(t) &= p_a(t) + p_b(t) + p_c(t) \\&= V_m I_m [\cos \omega t \cos(\omega t - \theta) + \cos(\omega t - 120^\circ) \cos(\omega t - \theta - 120^\circ) \\&\quad + \cos(\omega t - 240^\circ) \cos(\omega t - \theta - 240^\circ)]\end{aligned}\tag{11.5}$$

Using the trigonometric identity,

$$\cos \alpha \cos \beta = \frac{1}{2} [\cos(\alpha - \beta) + \cos(\alpha + \beta)]\tag{11.6}$$

Eq. (11.5) becomes

$$\begin{aligned}p(t) &= \frac{V_m I_m}{2} [\cos \theta + \cos(2\omega t - \theta) + \cos \theta \\&\quad + \cos(2\omega t - \theta - 240^\circ) + \cos \theta + \cos(2\omega t - \theta - 480^\circ)]\end{aligned}\tag{11.7}$$

which can be written as

$$\begin{aligned}p(t) &= \frac{V_m I_m}{2} [3 \cos \theta + \cos(2\omega t - \theta) \\&\quad + \cos(2\omega t - \theta - 120^\circ) + \cos(2\omega t - \theta + 120^\circ)]\end{aligned}\tag{11.8}$$

There exists a trigonometric identity that allows us to simplify the preceding expression. The identity, which we will prove later using phasors, is

$$\cos \phi + \cos(\phi - 120^\circ) + \cos(\phi + 120^\circ) = 0\tag{11.9}$$

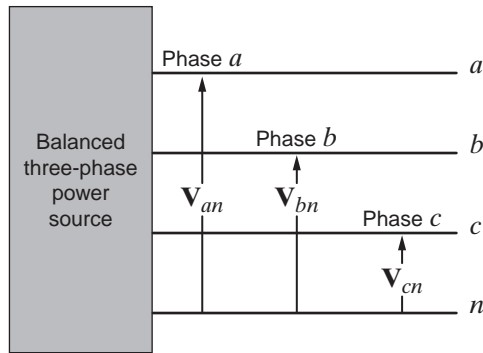
If we employ this identity, the expression for the power becomes

$$p(t) = 3 \frac{V_m I_m}{2} \cos \theta \text{ W}\tag{11.10}$$

Note that this equation indicates that the instantaneous power is always constant in time rather than pulsating, as in the single-phase case. Therefore, power delivery from a three-phase voltage source is very smooth, which is another important reason power is generated in three-phase form.

By far the most important polyphase voltage source is the balanced three-phase source. This source, as illustrated by Fig. 11.9, has the following properties. The phase voltages—that is, the voltage from each line  $a$ ,  $b$ , and  $c$  to the neutral  $n$ —are given by

$$\begin{aligned}\mathbf{V}_{an} &= V_p \angle 0^\circ \\ \mathbf{V}_{bn} &= V_p \angle -120^\circ \\ \mathbf{V}_{cn} &= V_p \angle +120^\circ\end{aligned}\quad 11.11$$



**Figure 11.9**  
Balanced three-phase voltage source.

The phasor diagram for these voltages is shown in Fig. 11.10. The phase sequence of this set is said to be  $abc$  (called positive phase sequence), meaning that  $\mathbf{V}_{bn}$  lags  $\mathbf{V}_{an}$  by  $120^\circ$ .

We will standardize our notation so that we always label the voltages  $\mathbf{V}_{an}$ ,  $\mathbf{V}_{bn}$ , and  $\mathbf{V}_{cn}$  and observe them in the order  $abc$ . Furthermore, we will normally assume with no loss of generality that  $\angle \mathbf{V}_{an} = 0^\circ$ .

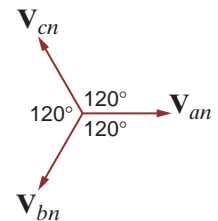
An important property of the balanced voltage set is that

$$\mathbf{V}_{an} + \mathbf{V}_{bn} + \mathbf{V}_{cn} = 0 \quad 11.12$$

This property can easily be seen by resolving the voltage phasors into components along the real and imaginary axes. It can also be demonstrated via Eq. (11.9).

From the standpoint of the user who connects a load to the balanced three-phase voltage source, it is not important how the voltages are generated. It is important to note, however, that if the load currents generated by connecting a load to the power source shown in Fig. 11.9 are also *balanced*, there are two possible equivalent configurations for the load. The equivalent load can be considered as being connected in either a *wye* (Y) or a *delta* ( $\Delta$ ) configuration. The balanced wye configuration is shown in Fig. 11.11a and equivalently in Fig. 11.11b. The delta configuration is shown in Fig. 11.12a and equivalently in Fig. 11.12b. Note that in the case of the delta connection, there is no neutral line. The actual function of the neutral line in the wye connection will be examined, and it will be shown that in a balanced system the neutral line carries no current and, for purposes of analysis, may be omitted.

The wye and delta connections each have their advantages. In the wye case, we have access to two voltages, the line-to-line and line-to-neutral, and it provides a convenient place to connect to ground for system protection. That is, it limits the magnitude of surge voltages. In the delta case, this configuration stays in balance better when serving unbalanced loads, and it is capable of trapping the third harmonic.



**Figure 11.10**  
Phasor diagram for a balanced three-phase voltage source.

## 11.2

### Three-Phase Connections

Figure 11.11

Wye (Y)-connected loads.

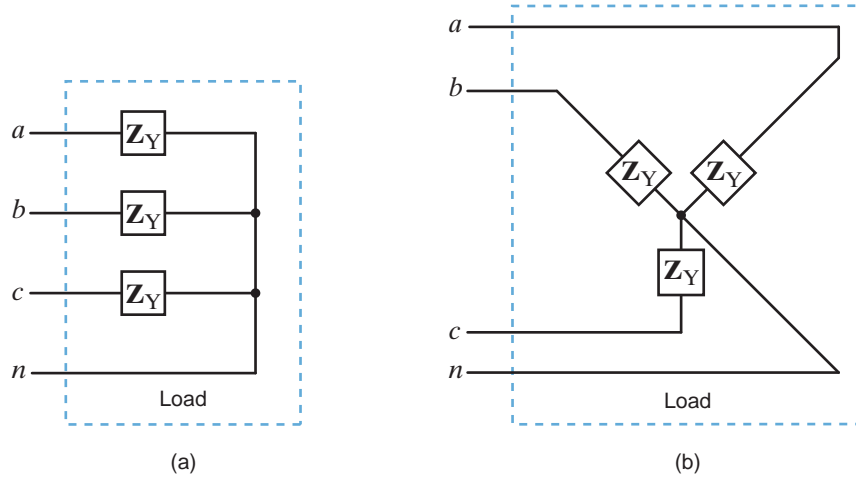
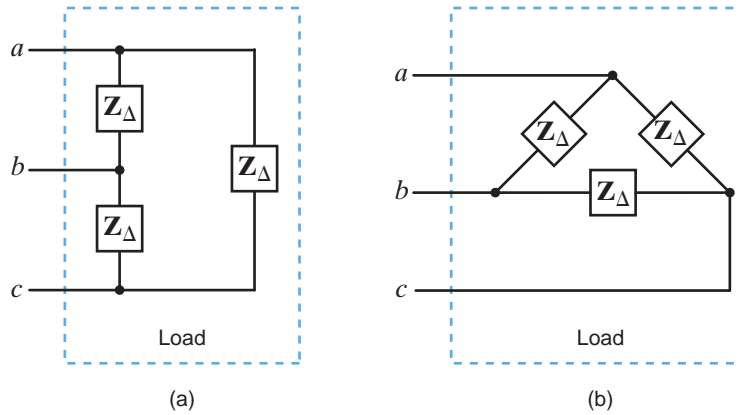


Figure 11.12

Delta ( $\Delta$ )-connected loads.



### 11.3

#### Source/Load Connections

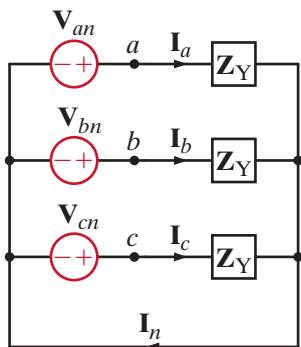


Figure 11.13

Balanced three-phase wye-wye connection.

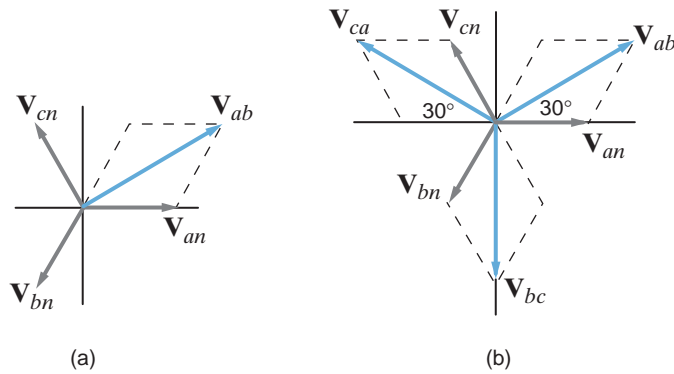
Since the source and the load can each be connected in either Y or  $\Delta$ , three-phase balanced circuits can be connected Y-Y, Y- $\Delta$ ,  $\Delta$ -Y, or  $\Delta$ - $\Delta$ . Our approach to the analysis of all of these circuits will be “Think Y”; therefore, we will analyze the Y-Y connection first.

**BALANCED WYE-WYE CONNECTION** Suppose now that both the source and load are connected in a wye, as shown in Fig. 11.13. The phase voltages with positive phase sequence are

$$\begin{aligned} \mathbf{V}_{an} &= V_p \angle 0^\circ \\ \mathbf{V}_{bn} &= V_p \angle -120^\circ \\ \mathbf{V}_{cn} &= V_p \angle +120^\circ \end{aligned} \tag{11.13}$$

where  $V_p$ , the phase voltage, is the magnitude of the phasor voltage from the neutral to any line. The *line-to-line* voltages or, simply, *line voltages* can be calculated using KVL; for example,

$$\begin{aligned} \mathbf{V}_{ab} &= \mathbf{V}_{an} - \mathbf{V}_{bn} \\ &= V_p \angle 0^\circ - V_p \angle -120^\circ \\ &= V_p - V_p \left[ -\frac{1}{2} - j \frac{\sqrt{3}}{2} \right] \\ &= V_p \left[ \frac{3}{2} + j \frac{\sqrt{3}}{2} \right] \\ &= \sqrt{3} V_p \angle 30^\circ \end{aligned}$$

**Figure 11.14**

Phasor representation of phase and line voltages in a balanced wye-wye system.

The phasor addition is shown in Fig. 11.14a. In a similar manner, we obtain the set of line-to-line voltages as

$$\begin{aligned} \mathbf{V}_{ab} &= \sqrt{3} V_p \angle 30^\circ \\ \mathbf{V}_{bc} &= \sqrt{3} V_p \angle -90^\circ \\ \mathbf{V}_{ca} &= \sqrt{3} V_p \angle -210^\circ \end{aligned} \quad 11.14$$

All the line voltages together with the phase voltages are shown in Fig. 11.14b. We will denote the magnitude of the line voltages as  $V_L$ , and therefore, for a balanced system,

$$V_L = \sqrt{3} V_p \quad 11.15$$

Hence, in a wye-connected system, the line voltage is equal to  $\sqrt{3}$  times the phase voltage.

As shown in Fig. 11.13, the line current for the  $a$  phase is

$$\mathbf{I}_a = \frac{\mathbf{V}_{an}}{\mathbf{Z}_Y} = \frac{V_p \angle 0^\circ}{\mathbf{Z}_Y} \quad 11.16$$

where  $\mathbf{I}_b$  and  $\mathbf{I}_c$  have the same magnitude but lag  $\mathbf{I}_a$  by  $120^\circ$  and  $240^\circ$ , respectively.

The neutral current  $\mathbf{I}_n$  is then

$$\mathbf{I}_n = (\mathbf{I}_a + \mathbf{I}_b + \mathbf{I}_c) = 0 \quad 11.17$$

Since there is no current in the neutral, this conductor could contain any impedance or it could be an open or a short circuit, without changing the results found previously.

As illustrated by the wye-wye connection in Fig. 11.13, the current in the line connecting the source to the load is the same as the phase current flowing through the impedance  $\mathbf{Z}_Y$ . Therefore, in a wye-wye connection,

$$I_L = I_Y \quad 11.18$$

where  $I_L$  is the magnitude of the line current and  $I_Y$  is the magnitude of the current in a wye-connected load.

Although we have a three-phase system composed of three sources and three loads, we can analyze a single phase and use the phase sequence to obtain the voltages and currents in the other phases. This is, of course, a direct result of the balanced condition. We may even have impedances present in the lines; however, as long as the system remains balanced, we need analyze only one phase. If the line impedances in lines  $a$ ,  $b$ , and  $c$  are equal, the system will be balanced. Recall that the balance of the system is unaffected by whatever appears in the neutral line, and since the neutral line impedance is arbitrary, we assume that it is zero (i.e., a short circuit).

### [hint]

Conversion rules:

$$\angle \mathbf{V}_{ab} = \angle \mathbf{V}_{an} + 30^\circ$$

$$V_{ab} = \sqrt{3} V_{an}$$

**EXAMPLE****11.1****SOLUTION**

An *abc*-sequence three-phase voltage source connected in a balanced wye has a line voltage of  $\mathbf{V}_{ab} = 208 \angle -30^\circ$  V rms. We wish to determine the phase voltages.

The magnitude of the phase voltage is given by the expression

$$\begin{aligned} V_p &= \frac{208}{\sqrt{3}} \\ &= 120 \text{ V rms} \end{aligned}$$

The phase relationships between the line and phase voltages are shown in Fig. 11.14. From this figure we note that

$$\mathbf{V}_{an} = 120 \angle -60^\circ \text{ V rms}$$

$$\mathbf{V}_{bn} = 120 \angle -180^\circ \text{ V rms}$$

$$\mathbf{V}_{cn} = 120 \angle +60^\circ \text{ V rms}$$

The magnitudes of these voltages are quite common, and one often hears that the electric service in a building, for example, is three-phase 208/120 V rms.

**[hint]**

The phase of

$$\mathbf{V}_{an} = \angle \mathbf{V}_{an} = \angle \mathbf{V}_{ab} - 30^\circ$$

**EXAMPLE****11.2****SOLUTION**

A three-phase wye-connected load is supplied by an *abc*-sequence balanced three-phase wye-connected source with a phase voltage of 120 V rms. If the line impedance and load impedance per phase are  $1 + j1 \Omega$  and  $20 + j10 \Omega$ , respectively, we wish to determine the value of the line currents and the load voltages.

The phase voltages are

$$\mathbf{V}_{an} = 120 \angle 0^\circ \text{ V rms}$$

$$\mathbf{V}_{bn} = 120 \angle -120^\circ \text{ V rms}$$

$$\mathbf{V}_{cn} = 120 \angle +120^\circ \text{ V rms}$$

The per-phase circuit diagram is shown in Fig. 11.15. The line current for the *a* phase is

$$\begin{aligned} \mathbf{I}_{aA} &= \frac{120 \angle 0^\circ}{21 + j11} \\ &= 5.06 \angle -27.65^\circ \text{ A rms} \end{aligned}$$

The load voltage for the *a* phase, which we call  $\mathbf{V}_{AN}$ , is

$$\begin{aligned} \mathbf{V}_{AN} &= (5.06 \angle -27.65^\circ)(20 + j10) \\ &= 113.15 \angle -1.08^\circ \text{ V rms} \end{aligned}$$

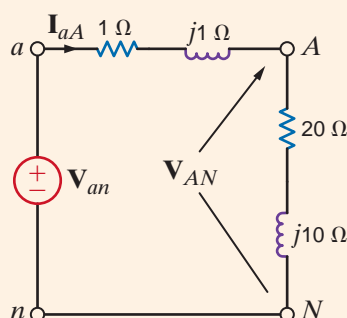
**[hint]**

$$\angle \mathbf{I}_{bB} = \angle \mathbf{I}_{aA} - 120^\circ$$

$$\angle \mathbf{I}_{cC} = \angle \mathbf{I}_{aA} + 120^\circ$$

**Figure 11.15**

Per-phase circuit diagram for the problem in Example 11.2.



The corresponding line currents and load voltages for the  $b$  and  $c$  phases are

$$\mathbf{I}_{bB} = 5.06 \angle -147.65^\circ \text{ A rms} \quad \mathbf{V}_{BN} = 113.15 \angle -121.08^\circ \text{ V rms}$$

$$\mathbf{I}_{cC} = 5.06 \angle -267.65^\circ \text{ A rms} \quad \mathbf{V}_{CN} = 113.15 \angle -241.08^\circ \text{ V rms}$$

To reemphasize and clarify our terminology, phase voltage,  $V_p$ , is the magnitude of the phasor voltage from the neutral to any line, while line voltage,  $V_L$ , is the magnitude of the phasor voltage between any two lines. Thus, the values of  $V_L$  and  $V_p$  will depend on the point at which they are calculated in the system.

## Learning Assessments

**E11.1** The voltage for the  $a$  phase of an  $abc$ -phase-sequence balanced wye-connected source is  $\mathbf{V}_{an} = 120 \angle 90^\circ \text{ V rms}$ . Determine the line voltages for this source.

**ANSWER:**

$$\mathbf{V}_{ab} = 208 \angle 120^\circ \text{ V rms};$$

$$\mathbf{V}_{bc} = 208 \angle 0^\circ \text{ V rms};$$

$$\mathbf{V}_{ca} = 208 \angle -120^\circ \text{ V rms}.$$

**E11.2** An  $abc$ -phase-sequence three-phase voltage source connected in a balanced wye has a line voltage of  $\mathbf{V}_{ab} = 208 \angle 0^\circ \text{ V rms}$ . Determine the phase voltages of the source.

**ANSWER:**

$$\mathbf{V}_{an} = 120 \angle -30^\circ \text{ V rms};$$

$$\mathbf{V}_{bn} = 120 \angle -150^\circ \text{ V rms};$$

$$\mathbf{V}_{cn} = 120 \angle -270^\circ \text{ V rms}.$$

**E11.3** A three-phase wye-connected load is supplied by an  $abc$ -sequence balanced three-phase wye-connected source through a transmission line with an impedance of  $1 + j1 \Omega$  per phase. The load impedance is  $8 + j3 \Omega$  per phase. If the load voltage for the  $a$  phase is  $104.02 \angle 26.6^\circ \text{ V rms}$  (i.e.,  $V_p = 104.02 \text{ V rms}$  at the load end), determine the phase voltages of the source.

**ANSWER:**

$$\mathbf{V}_{an} = 120 \angle 30^\circ \text{ V rms};$$

$$\mathbf{V}_{bn} = 120 \angle -90^\circ \text{ V rms};$$

$$\mathbf{V}_{cn} = 120 \angle -210^\circ \text{ V rms}.$$

**E11.4** A positive-sequence balanced three-phase wye-connected source with a phase voltage of  $277 \text{ V rms}$  supplies power to a balanced wye-connected load. The per-phase load impedance is  $60 - j40 \Omega$ . Determine the line currents in the circuit if the phase angle of  $\mathbf{V}_{an} = 0^\circ$ .

**ANSWER:**

$$\mathbf{I}_{aA} = 3.84 \angle 33.69^\circ \text{ A rms};$$

$$\mathbf{I}_{bB} = 3.84 \angle -86.31^\circ \text{ A rms};$$

$$\mathbf{I}_{cC} = 3.84 \angle 153.69^\circ \text{ A rms}.$$

**E11.5** An  $abc$ -sequence set of voltages feeds a balanced three-phase wye–wye system. The line and load impedances are  $0.5 + j0.75 \Omega$  and  $20 - j24 \Omega$  respectively. If the load voltage of the  $a$ -phase is  $\mathbf{V}_{AN} = 125 \angle 10^\circ \text{ V rms}$ , find the line voltages of the input.

**ANSWER:**

$$\mathbf{V}_{ab} = 214.8 \angle 41.6^\circ \text{ V rms};$$

$$\mathbf{V}_{bc} = 214.8 \angle -78.4^\circ \text{ V rms};$$

$$\mathbf{V}_{ca} = 214.8 \angle 161.6^\circ \text{ V rms}.$$

**E11.6** In a balanced three-phase wye–wye system, the total power in the lines is  $650 \text{ W}$ .  $\mathbf{V}_{AN} = 117 \angle 15^\circ \text{ V rms}$  and the power factor of the load is  $0.88$  leading. If the line impedance is  $1 + j2 \Omega$ , determine the load impedance.

**ANSWER:**

$$\mathbf{Z}_L = 7 - j3.78 \Omega.$$

The previous analysis indicates that we can simply treat a three-phase balanced circuit on a per-phase basis and use the phase relationship to determine all voltages and currents. Let us now examine the situations in which either the source or the load is connected in  $\Delta$ .

**DELTA-CONNECTED SOURCE** Consider the delta-connected source shown in Fig. 11.16a. Note that the sources are connected line to line. We found earlier that the relationship between line-to-line and line-to-neutral voltages was given by Eq. (11.14) and illustrated in Fig. 11.14 for an  $abc$ -phase sequence of voltages. Therefore, if the delta sources are

$$\begin{aligned} \mathbf{V}_{ab} &= V_L \angle 0^\circ \\ \mathbf{V}_{bc} &= V_L \angle -120^\circ \\ \mathbf{V}_{ca} &= V_L \angle +120^\circ \end{aligned} \tag{11.19}$$

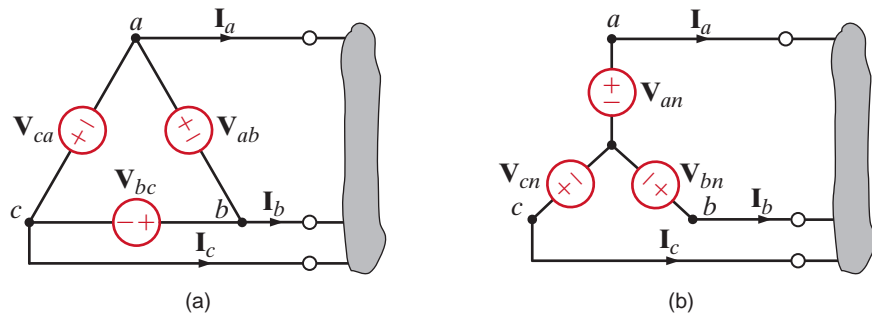
where  $V_L$  is the magnitude of the phase voltage. The equivalent wye sources shown in Fig. 11.16b are

$$\begin{aligned} \mathbf{V}_{an} &= \frac{V_L}{\sqrt{3}} \angle -30^\circ = V_p \angle -30^\circ \\ \mathbf{V}_{bn} &= \frac{V_L}{\sqrt{3}} \angle -150^\circ = V_p \angle -150^\circ \\ \mathbf{V}_{cn} &= \frac{V_L}{\sqrt{3}} \angle -270^\circ = V_p \angle +90^\circ \end{aligned} \tag{11.20}$$

where  $V_p$  is the magnitude of the phase voltage of an equivalent wye-connected source. Therefore, if we encounter a network containing a delta-connected source, we can easily convert the source from delta to wye so that all the techniques we have discussed previously can be applied in an analysis.

**Figure 11.16**

Sources connected in delta and wye.



## Problem-Solving Strategy

### Three-Phase Balanced AC Power Circuits

- Step 1.** Convert the source/load connection to a wye–wye connection if either the source, load, or both are connected in delta since the wye–wye connection can be easily used to obtain the unknown phasors.
- Step 2.** Only the unknown phasors for the  $a$ -phase of the circuit need be determined since the three-phase system is balanced.
- Step 3.** Finally, convert the now known phasors to the corresponding phasors in the original system.



Consider the network shown in Fig. 11.17a. We wish to determine the line currents and the magnitude of the line voltage at the load.

The single-phase diagram for the network is shown in Fig. 11.17b. The line current  $\mathbf{I}_{aA}$  is

$$\begin{aligned}\mathbf{I}_{aA} &= \frac{(208/\sqrt{3})\angle -30^\circ}{12.1 + j4.2} \\ &= 9.38\angle -49.14^\circ \text{ A rms}\end{aligned}$$

and thus  $\mathbf{I}_{bB} = 9.38\angle -169.14^\circ$  V rms and  $\mathbf{I}_{cC} = 9.38\angle 70.86^\circ$  V rms. The voltage  $\mathbf{V}_{AN}$  is then

$$\begin{aligned}\mathbf{V}_{AN} &= (9.38\angle -49.14^\circ)(12 + j4) \\ &= 118.65\angle -30.71^\circ \text{ V rms}\end{aligned}$$

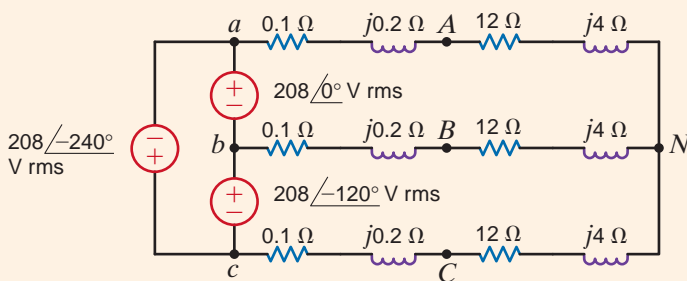
Therefore, the magnitude of the line voltage at the load is

$$\begin{aligned}V_L &= \sqrt{3} (118.65) \\ &= 205.51 \text{ V rms}\end{aligned}$$

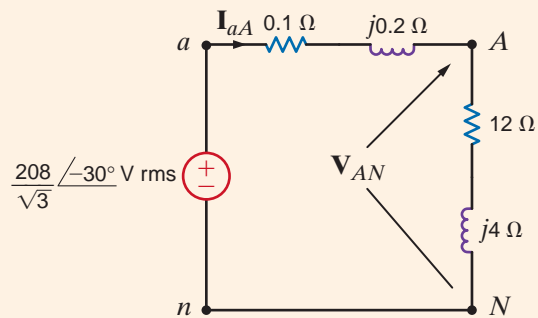
The phase voltage at the source is  $V_p = 208/\sqrt{3} = 120$  V rms, while the phase voltage at the load is  $V_p = 205.51/\sqrt{3} = 118.65$  V rms. Clearly, we must be careful with our notation and specify where the phase or line voltage is taken.

## EXAMPLE 11.3

**SOLUTION**



(a)



(b)

**Figure 11.17**

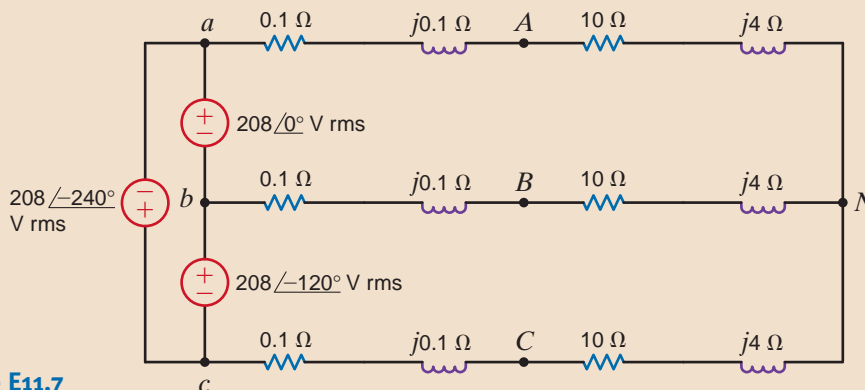
Delta-wye network and an equivalent single-phase (a-phase) diagram.

## Learning Assessments

**E11.7** Consider the network shown in Fig. E11.7. Compute the magnitude of the line voltages at the load.

**ANSWER:**

$$V_L = 205.2 \text{ V rms.}$$



**Figure E11.7**

**E11.8** Find the magnitude of the line voltage at the load in Fig. E11.8.

**ANSWER:**  
 $V_L = 209.2 \text{ V rms.}$

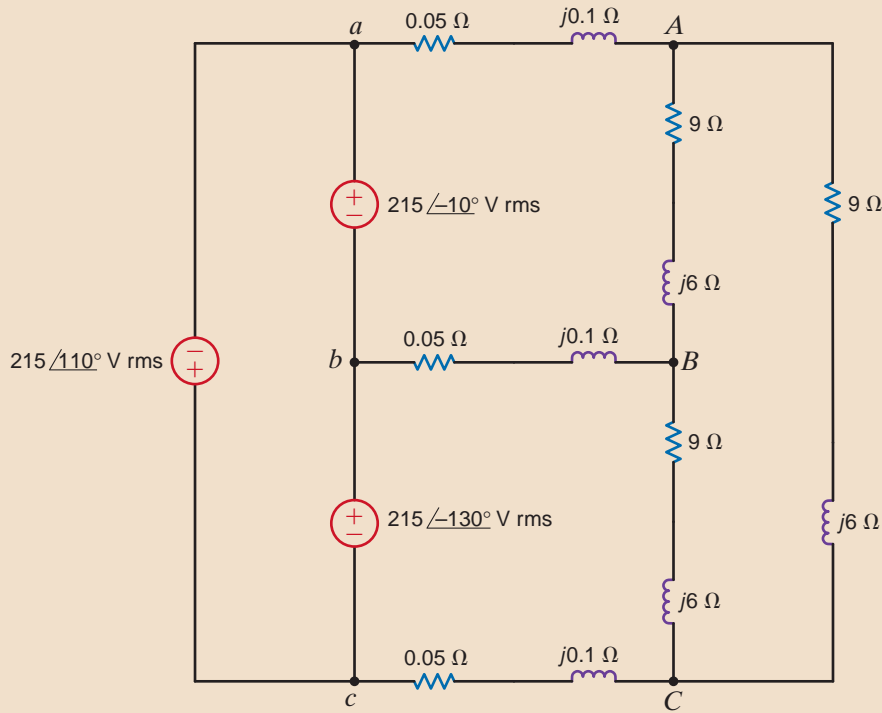


Figure E11.8

**DELTA-CONNECTED LOAD** Consider now the  $\Delta$ -connected load shown in Fig. 11.18. Note that in this connection the line-to-line voltage is the voltage across each load impedance.

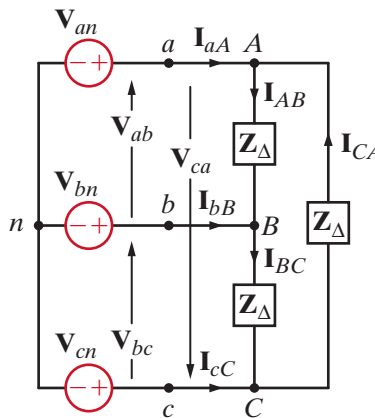
If the phase voltages of the source are

$$\begin{aligned} \mathbf{V}_{an} &= V_p \angle 0^\circ \\ \mathbf{V}_{bn} &= V_p \angle -120^\circ \\ \mathbf{V}_{cn} &= V_p \angle +120^\circ \end{aligned} \tag{11.21}$$

then the line voltages are

$$\begin{aligned} \mathbf{V}_{ab} &= \sqrt{3} V_p \angle 30^\circ = V_L \angle 30^\circ = \mathbf{V}_{AB} \\ \mathbf{V}_{bc} &= \sqrt{3} V_p \angle -90^\circ = V_L \angle -90^\circ = \mathbf{V}_{BC} \\ \mathbf{V}_{ca} &= \sqrt{3} V_p \angle -210^\circ = V_L \angle -210^\circ = \mathbf{V}_{CA} \end{aligned} \tag{11.22}$$

**Figure 11.18**  
 Balanced three-phase  
 wye–delta system.



where  $V_L$  is the magnitude of the line voltage at both the delta-connected load and at the source since there is no line impedance present in the network.

From Fig. 11.18 we note that if  $\mathbf{Z}_\Delta = Z_\Delta / \theta$ , the phase currents at the load are

$$\mathbf{I}_{AB} = \frac{\mathbf{V}_{AB}}{\mathbf{Z}_\Delta} \quad 11.23$$

where  $\mathbf{I}_{BC}$  and  $\mathbf{I}_{CA}$  have the same magnitude but lag  $\mathbf{I}_{AB}$  by  $120^\circ$  and  $240^\circ$ , respectively. KCL can now be employed in conjunction with the phase currents to determine the line currents. For example,

$$\begin{aligned} \mathbf{I}_{aA} &= \mathbf{I}_{AB} + \mathbf{I}_{AC} \\ &= \mathbf{I}_{AB} - \mathbf{I}_{CA} \end{aligned}$$

However, it is perhaps easier to simply convert the balanced  $\Delta$ -connected load to a balanced Y-connected load using the  $\Delta$ -Y transformation. This conversion is possible since the wye-delta and delta-wye transformations outlined in Chapter 2 are also valid for impedance in the frequency domain. In the balanced case, the transformation equations reduce to

$$\mathbf{Z}_Y = \frac{1}{3} \mathbf{Z}_\Delta$$

and then the line current  $\mathbf{I}_{aA}$  is simply

$$\mathbf{I}_{aA} = \frac{\mathbf{V}_{an}}{\mathbf{Z}_Y}$$

Finally, using the same approach as that employed earlier to determine the relationship between the line voltages and phase voltages in a Y-Y connection, we can show that the relationship between the *magnitudes* of the phase currents in the  $\Delta$ -connected load and the line currents is

$$I_L = \sqrt{3} I_\Delta \quad 11.24$$

A balanced delta-connected load contains a  $10\text{-}\Omega$  resistor in series with a  $20\text{-mH}$  inductor in each phase. The voltage source is an *abc*-sequence three-phase  $60\text{-Hz}$ , balanced wye with a voltage  $\mathbf{V}_{an} = 120 \angle 30^\circ \text{ V rms}$ . We wish to determine all  $\Delta$  currents and line currents.

The impedance per phase in the delta load is  $\mathbf{Z}_\Delta = 10 + j7.54 \text{ }\Omega$ . The line voltage  $\mathbf{V}_{ab} = 120\sqrt{3} \angle 60^\circ \text{ V rms}$ . Since there is no line impedance,  $\mathbf{V}_{AB} = \mathbf{V}_{ab} = 120\sqrt{3} \angle 60^\circ \text{ V rms}$ . Hence,

$$\begin{aligned} \mathbf{I}_{AB} &= \frac{120\sqrt{3} \angle 60^\circ}{10 + j7.54} \\ &= 16.60 \angle +22.98^\circ \text{ A rms} \end{aligned}$$

If  $\mathbf{Z}_\Delta = 10 + j7.54 \text{ }\Omega$ , then

$$\begin{aligned} \mathbf{Z}_Y &= \frac{1}{3} \mathbf{Z}_\Delta \\ &= 3.33 + j2.51 \text{ }\Omega \end{aligned}$$

Then the line current

$$\begin{aligned} \mathbf{I}_{aA} &= \frac{\mathbf{V}_{an}}{\mathbf{Z}_Y} = \frac{120 \angle 30^\circ}{3.33 + j2.51} \\ &= \frac{120 \angle 30^\circ}{4.17 \angle 37.01^\circ} \\ &= 28.78 \angle -7.01^\circ \text{ A rms} \end{aligned}$$

## EXAMPLE 11.4

### SOLUTION

Therefore, the remaining phase and line currents are

$$\mathbf{I}_{BC} = 16.60 \angle -97.02^\circ \text{ A rms} \quad \mathbf{I}_{bB} = 28.78 \angle -127.01^\circ \text{ A rms}$$

$$\mathbf{I}_{CA} = 16.60 \angle +142.98^\circ \text{ A rms} \quad \mathbf{I}_{cC} = 28.78 \angle +112.99^\circ \text{ A rms}$$

In summary, the relationship between the line voltage and phase voltage and the line current and phase current for both the Y and Δ configurations are shown in Fig. 11.19. The currents and voltages are shown for one phase. The two remaining phases have the same magnitude but lag by 120° and 240°, respectively.

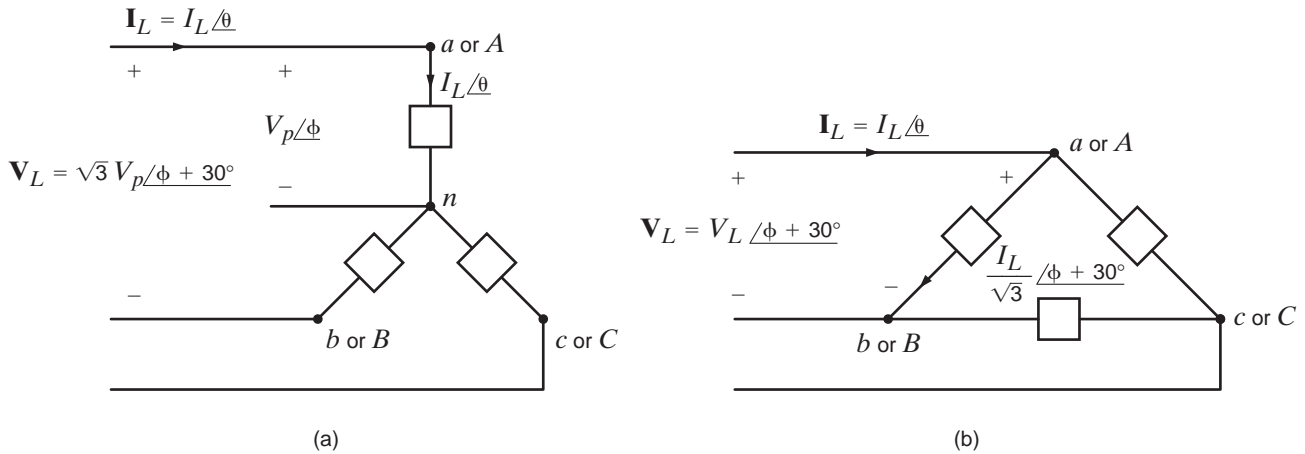


Figure 11.19

Voltage and current relationships for Y and Δ configurations.

Careful observation of Table 11.1 indicates that the following rules apply when solving problems in balanced three-phase systems:

- The phase of the voltages and currents in a Δ connection is 30° ahead of those in a Y connection.
- The magnitude of the line voltage or, equivalently, the Δ-connection phase voltage, is √3 times that of the Y-connection phase voltage.
- The magnitude of the line current or, equivalently, the Y-connection phase current, is √3 times that of the Δ-connection phase current.
- The load impedance in the Y connection is one-third of that in the Δ-connection, and the phase is identical.

TABLE 11.1 The voltage, current, and impedance relationships for Y and Δ configurations

	Y	Δ
Line voltage ( $\mathbf{V}_{ab}$ or $\mathbf{V}_{AB}$ )	$\sqrt{3} V_p / \phi + 30^\circ$ $= V_L / \phi + 30^\circ$	$V_L / \phi + 30^\circ$
Line current $\mathbf{I}_{aA}$	$I_L / \theta$	$I_L / \theta$
Phase voltage	$V_p / \phi$ ( $\mathbf{V}_{an}$ or $\mathbf{V}_{AN}$ )	$\sqrt{3} V_p / \phi + 30^\circ$
Phase current	$I_L / \theta$	$\frac{I_L}{\sqrt{3}} / \theta + 30^\circ$
Load impedance	$\mathbf{Z}_Y / \phi - \theta$	$3 \mathbf{Z}_Y / \phi - \theta$

## Learning Assessments

**E11.9** An  $abc$ -sequence three-phase voltage source connected in a balanced wye supplies power to a balanced delta-connected load. The line current for the  $a$  phase is  $\mathbf{I}_{aA} = 12 \angle 40^\circ$  A rms. Find the phase currents in the delta-connected load.

**ANSWER:**

$$\mathbf{I}_{AB} = 6.93 \angle 70^\circ \text{ A rms};$$

$$\mathbf{I}_{BC} = 6.93 \angle -50^\circ \text{ A rms};$$

$$\mathbf{I}_{CA} = 6.93 \angle -170^\circ \text{ A rms}.$$

**E11.10** Find the line currents and the power absorbed by the delta-connected load in Fig. E11.10.

**ANSWER:**

$$\mathbf{I}_{aA} = 35.76 \angle -34.74^\circ \text{ A rms};$$

$$\mathbf{I}_{bB} = 35.76 \angle -154.74^\circ \text{ A rms};$$

$$\mathbf{I}_{cC} = 35.76 \angle 85.26^\circ \text{ A rms};$$

$$17.29 - j6.92 \text{ kVA}.$$

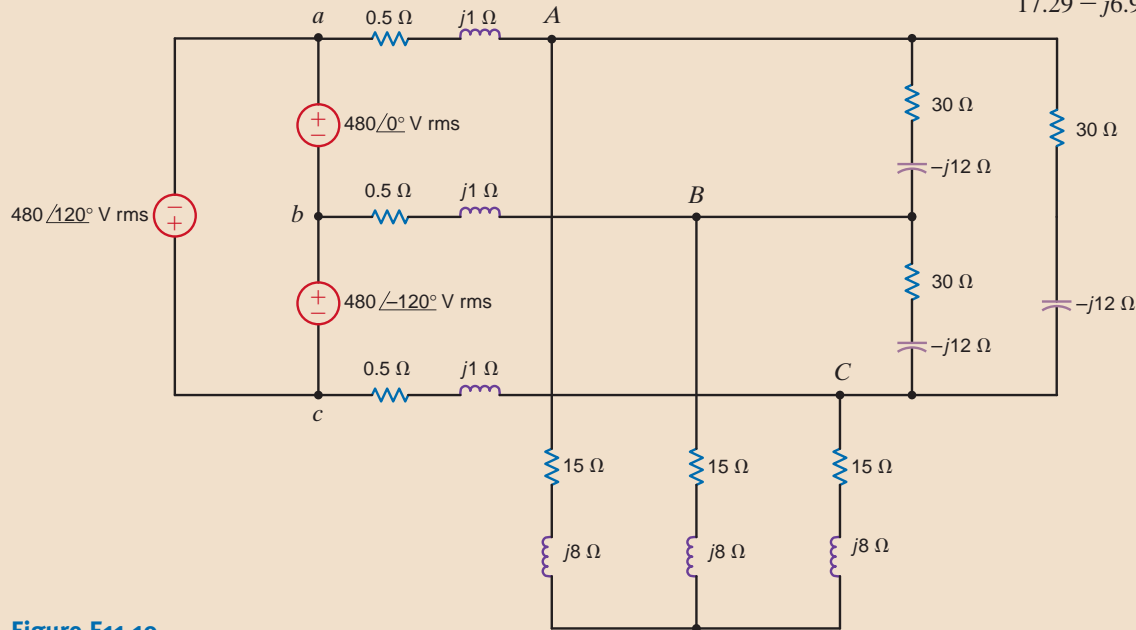


Figure E11.10

Whether the load is connected in a wye or a delta, the real and reactive power per phase is

$$P_p = V_p I_p \cos \theta \quad 11.25$$

$$Q_p = V_p I_p \sin \theta$$

where  $\theta$  is the angle between the phase voltage and the line current. For a Y-connected system,  $I_p = I_L$  and  $V_p = V_L/\sqrt{3}$ , and for a  $\Delta$ -connected system,  $I_p = I_L/\sqrt{3}$  and  $V_p = V_L$ . Therefore,

$$P_p = \frac{V_L I_L}{\sqrt{3}} \cos \theta \quad 11.26$$

$$Q_p = \frac{V_L I_L}{\sqrt{3}} \sin \theta$$

The total real and reactive power for all three phases is then

$$P_T = 3 P_p = \sqrt{3} V_L I_L \cos \theta \quad 11.27$$

$$Q_T = 3 Q_p = \sqrt{3} V_L I_L \sin \theta$$

and, therefore, the magnitude of the complex power (apparent power) is

$$\begin{aligned} S_T &= \sqrt{P_T^2 + Q_T^2} \\ &= \sqrt{3} V_L I_L \end{aligned}$$

and

$$\angle \mathbf{S}_T = \theta$$

## 11.4

### Power Relationships

**EXAMPLE**  
**11.5**

A three-phase balanced wye–delta system has a line voltage of 208 V rms. The total real power absorbed by the load is 1200 W. If the power factor angle of the load is  $20^\circ$  lagging, we wish to determine the magnitude of the line current and the value of the load impedance per phase in the delta.

**SOLUTION** The line current can be obtained from Eq. (11.26). Since the real power per phase is 400 W,

$$400 = \frac{208I_L}{\sqrt{3}} \cos 20^\circ$$

$$I_L = 3.54 \text{ A rms}$$

The magnitude of the current in each leg of the delta-connected load is

$$I_\Delta = \frac{I_L}{\sqrt{3}}$$

$$= 2.05 \text{ A rms}$$

Therefore, the magnitude of the delta impedance in each phase of the load is

$$|Z_\Delta| = \frac{V_L}{I_\Delta}$$

$$= \frac{208}{2.05}$$

$$= 101.46 \Omega$$

Since the power factor angle is  $20^\circ$  lagging, the load impedance is

$$Z_\Delta = 101.46 \angle 20^\circ$$

$$= 95.34 + j34.70 \Omega$$

**EXAMPLE**  
**11.6**

For the circuit in Example 11.2 we wish to determine the real and reactive power per phase at the load and the total real power, reactive power, and complex power at the source.

**SOLUTION** From the data in Example 11.2 the complex power per phase at the load is

$$S_{\text{load}} = \mathbf{VI}^*$$

$$= (113.15 \angle -1.08^\circ)(5.06 \angle 27.65^\circ)$$

$$= 572.54 \angle 26.57^\circ$$

$$= 512.07 + j256.09 \text{ VA}$$

Therefore, the real and reactive power per phase at the load are 512.07 W and 256.09 var, respectively.

The complex power per phase at the source is

$$S_{\text{source}} = \mathbf{VI}^*$$

$$= (120 \angle 0^\circ)(5.06 \angle 27.65^\circ)$$

$$= 607.2 \angle 27.65^\circ$$

$$= 537.86 + j281.78 \text{ VA}$$

Therefore, total real power, reactive power, and apparent power at the source are 1613.6 W, 845.2 var, and 1821.6 VA, respectively.

A balanced three-phase source serves three loads, as follows:

Load 1: 24 kW at 0.6 lagging power factor

Load 2: 10 kW at unity power factor

Load 3: 12 kVA at 0.8 leading power factor

If the line voltage at the loads is 208 V rms at 60 Hz, we wish to determine the line current and the combined power factor of the loads.

From the data we find that

$$\mathbf{S}_1 = 24,000 + j32,000$$

$$\mathbf{S}_2 = 10,000 + j0$$

$$\mathbf{S}_3 = 12,000 / -36.9^\circ = 9600 - j7200$$

Therefore,

$$\mathbf{S}_{\text{load}} = 43,600 + j24,800$$

$$= 50,160 / 29.63^\circ \text{ VA}$$

$$I_L = \frac{|\mathbf{S}_{\text{load}}|}{\sqrt{3} V_L}$$

$$= \frac{50,160}{208\sqrt{3}}$$

$$I_L = 139.23 \text{ A rms}$$

and the combined power factor is

$$\text{pf}_{\text{load}} = \cos 29.63^\circ$$

$$= 0.869 \text{ lagging}$$

## EXAMPLE 11.7

### SOLUTION

[hint]

The sum of three complex powers;

$$\mathbf{S}_{\text{load}} = \mathbf{S}_1 + \mathbf{S}_2 + \mathbf{S}_3$$

Given the three-phase system in Example 11.7, let us determine the line voltage and power factor at the source if the line impedance is  $\mathbf{Z}_{\text{line}} = 0.05 + j0.02 \Omega$ .

The complex power absorbed by the line impedances is

$$\mathbf{S}_{\text{line}} = 3(R_{\text{line}} I_L^2 + jX_{\text{line}} I_L^2)$$

$$= 2908 + j1163 \text{ VA}$$

The complex power delivered by the source is then

$$\mathbf{S}_S = \mathbf{S}_{\text{load}} + \mathbf{S}_{\text{line}}$$

$$= 43,600 + j24,800 + 2908 + j1163$$

$$= 53,264 / 29.17^\circ \text{ VA}$$

The line voltage at the source is then

$$V_{L_s} = \frac{S_S}{\sqrt{3} I_L}$$

$$= 220.87 \text{ V rms}$$

and the power factor at the source is

$$\text{pf}_S = \cos 29.17^\circ$$

$$= 0.873 \text{ lagging}$$

## EXAMPLE 11.8

### SOLUTION

[hint]

Recall that the complex power for all three lines is

$$\mathbf{S}_{\text{line}} = 3I^2 \mathbf{Z}_{\text{line}}$$

## EXAMPLE 11.9

Let's consider the three-phase system shown in Fig. 11.20. Calculate the real power loss in the line resistance for  $V_L = 500$  kV rms and 50 kV rms.

**SOLUTION** For  $V_L = 500$  kV rms,  $I_L = \frac{S_{load}}{\sqrt{3}V_L} = \frac{1000}{\sqrt{3}(500)} = 1.155$  kA rms, and the real power

losses in the line are  $P_{line} = 3I_L^2R_{line} = 3(1.155)^2(0.1) = 0.4$  MW.

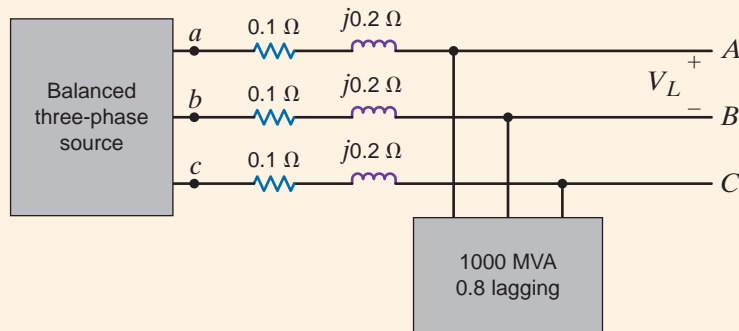
For  $V_L = 50$  kV rms,  $I_L = \frac{1000}{\sqrt{3}(50)} = 11.55$  kA rms and

$P_{line} = 3I_L^2R_{line} = 3(11.55)^2(0.1) = 40$  MW

The line losses at 50 kV rms are 100 times larger than those at 500 kV rms. This example illustrates that power transmission at higher voltages is more efficient because of the reduced losses. The transformer discussed in Chapter 10 allows voltage levels in ac systems to be changed easily. Electric generators at power plants generate line voltages up to 25 kV. Transformers are utilized to step up this voltage for transmission from the plants to the load centers.

**Figure 11.20**

Three-phase system for calculation of line losses for different load voltages.



## Learning Assessments

**E11.11** A three-phase balanced wye–wye system has a line voltage of 208 V rms. The total real power absorbed by the load is 12 kW at 0.8 pf lagging. Determine the per-phase impedance of the load. **ANSWER:**  $Z = 2.88 / \underline{36.87^\circ} \Omega$ .

**E11.12** For the balanced wye–wye system described in Learning Assessment E11.3, determine the real and reactive power and the complex power at both the source and the load. **ANSWER:**  
 $S_{load} = 1186.77 + j444.66$  VA;  
 $S_{source} = 1335.65 + j593.55$  VA.

**E11.13** A 480-V rms line feeds two balanced three-phase loads. If the two loads are rated as follows, **ANSWER:**  
 $I_L = 17.97$  A rms.

Load 1: 5 kVA at 0.8 pf lagging

Load 2: 10 kVA at 0.9 pf lagging

determine the magnitude of the line current from the 480-V rms source.



**E11.14** If the line voltage at the load is 480 V rms in Fig. E11.14, find the line voltage and power factor at the source.

**ANSWER:**  $V_L = 501.7$  V rms,  $pf = 0.9568$  lagging.

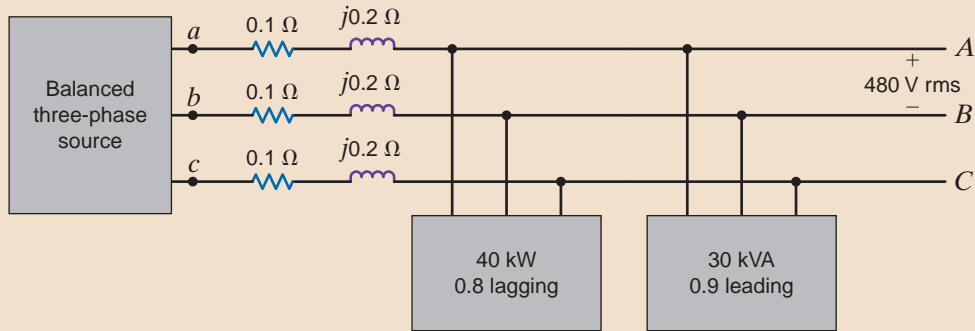


Figure E11.14

In Section 9.7 we illustrated a simple technique for raising the power factor of a load. The method involved judiciously selecting a capacitor and placing it in parallel with the load. In a balanced three-phase system, power factor correction is performed in exactly the same manner. It is important to note, however, that the  $S_{\text{cap}}$  specified in Eq. (9.37) is provided by three capacitors, and in addition,  $V_{\text{rms}}$  in the equation is the voltage across each capacitor. The following example illustrates the technique.

## 11.5

### Power Factor Correction

#### [hint]

Major precautions for three-phase power factor correction:

Must distinguish  $P_T$  and  $P_p$ .  
Must use appropriate V rms for Y- and  $\Delta$ -connections.

In the balanced three-phase system shown in Fig. 11.21, the line voltage is 34.5 kV rms at 60 Hz. We wish to find the values of the capacitors  $C$  such that the total load has a power factor of 0.94 leading.

Following the development outlined in Section 9.7 for single-phase power factor correction, we obtain

$$\begin{aligned} S_{\text{old}} &= 24 / \cos^{-1} 0.78 \text{ MVA} \\ &= 18.72 + j15.02 \text{ MVA} \end{aligned}$$

and

$$\begin{aligned} \theta_{\text{new}} &= -\cos^{-1} 0.94 \\ &= -19.95^\circ \end{aligned}$$

Therefore,

$$\begin{aligned} S_{\text{new}} &= 18.72 + j18.72 \tan(-19.95^\circ) \\ &= 18.72 - j6.80 \text{ MVA} \end{aligned}$$

and

$$\begin{aligned} S_{\text{cap}} &= S_{\text{new}} - S_{\text{old}} \\ &= -j21.82 \text{ MVA} \end{aligned}$$

### EXAMPLE 11.10

#### SOLUTION

#### [hint]

The reactive power to be supplied by  $C$  is derived from the expression

$$jQ_{\text{cap}} = -j\omega CV_{\text{rms}}^2$$

The phase voltage for the Y connection is

$$V_Y = \frac{34.5\text{k}}{\sqrt{3}}$$

However,

$$-j\omega C V_{\text{rms}}^2 = -j21.82 \text{ MVA}$$

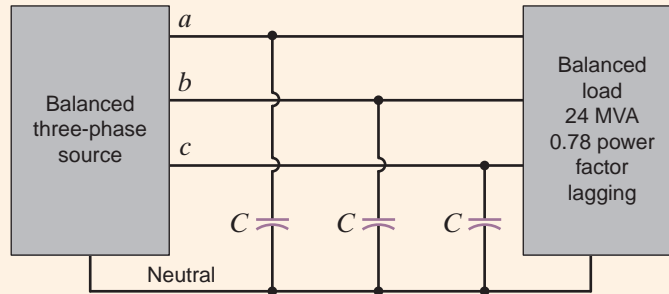
and since the line voltage is 34.5 kV rms, then

$$(377) \left( \frac{34.5\text{k}}{\sqrt{3}} \right)^2 C = \frac{21.82}{3} \text{ M}$$

Hence,

$$C = 48.6 \mu\text{F}$$

**Figure 11.21**  
Network used in  
Example 11.10.



## Learning Assessments

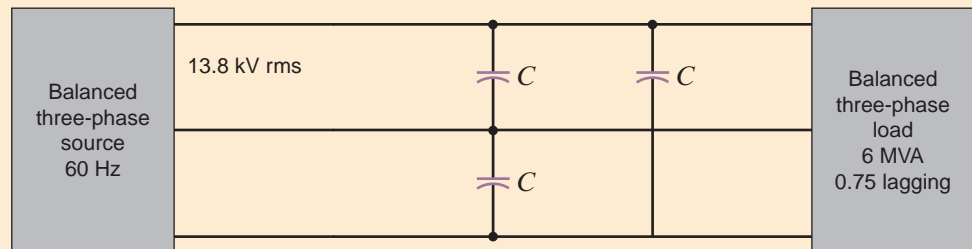
**E11.15** Find  $C$  in Example 11.10 such that the load has a power factor of 0.90 lagging.

**ANSWER:**  $C = 13.26 \mu\text{F}$ .

**E11.16** Find  $C$  in Fig. E11.16 such that the power factor of the source is 0.98 lagging.

**ANSWER:**  $C = 14/\mu\text{F}$ .

**Figure E11.16**



Finally, recall that our entire discussion in this chapter has focused on balanced systems. It is extremely important, however, to point out that in an unbalanced three-phase system the problem is much more complicated because of the mutual inductive coupling between phases in power apparatus.

## 11.6

### Application Examples

The first of the following three examples illustrates the manner in which power flow is measured when utilities are interconnected, answering the question of who is supplying power to whom. The last example demonstrates the actual method in which capacitors are specified by the manufacturer for power factor correction.

Two balanced three-phase systems,  $X$  and  $Y$ , are interconnected with lines having impedance  $\mathbf{Z}_{\text{line}} = 1 + j2 \Omega$ . The line voltages are  $\mathbf{V}_{ab} = 12 \angle 0^\circ$  kV rms and  $\mathbf{V}_{AB} = 12 \angle 5^\circ$  kV rms, as shown in Fig. 11.22a. We wish to determine which system is the source, which is the load, and the average power supplied by the source and absorbed by the load.

### APPLICATION EXAMPLE 11.11

When we draw the per phase circuit for the system as shown in Fig. 11.22b, the analysis will be essentially the same as that of Example 9.12.

### SOLUTION

The network in Fig. 11.22b indicates that

$$\begin{aligned} \mathbf{I}_{aA} &= \frac{\mathbf{V}_{an} - \mathbf{V}_{AN}}{\mathbf{Z}_{\text{line}}} \\ &= \frac{\frac{12,000}{\sqrt{3}} \angle -30^\circ - \frac{12,000}{\sqrt{3}} \angle -25^\circ}{\sqrt{5} \angle 63.43^\circ} \\ &= 270.30 \angle -180.93^\circ \text{ A rms} \end{aligned}$$

The average power absorbed by system  $Y$  is

$$\begin{aligned} P_Y &= \sqrt{3} V_{AB} I_{aA} \cos(\theta_{V_{an}} - \theta_{I_{aA}}) \\ &= \sqrt{3} (12,000)(270.30) \cos(-25^\circ + 180.93^\circ) \\ &= -5.130 \text{ MW} \end{aligned}$$

Note that system  $Y$  is not the load, but rather the source and supplies 5.130 MW.

System  $X$  absorbs the following average power:

$$P_X = \sqrt{3} V_{ab} I_{Aa} \cos(\theta_{V_{an}} - \theta_{I_{Aa}})$$

where

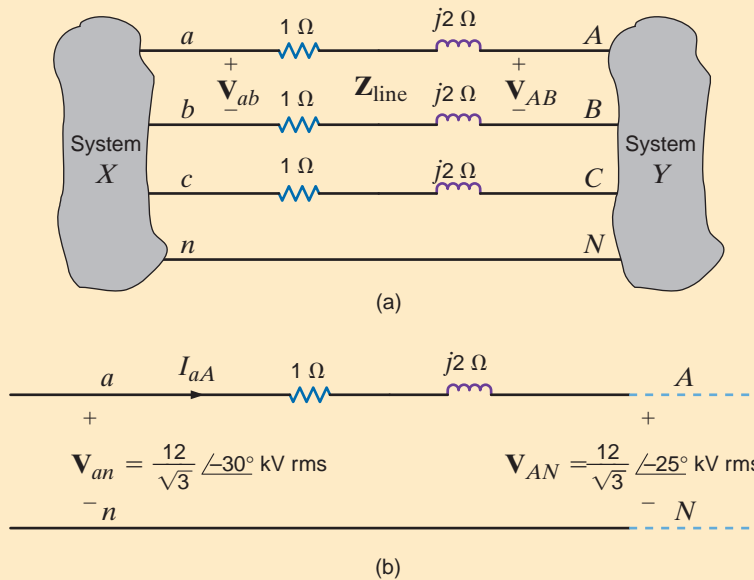
$$\mathbf{I}_{Aa} = -\mathbf{I}_{aA} = 270.30 \angle -0.93^\circ \text{ A rms}$$

Therefore,

$$\begin{aligned} P_X &= \sqrt{3} (12,000)(270.30) \cos(-30^\circ + 0.93^\circ) \\ &= 4.910 \text{ MW} \end{aligned}$$

and hence system  $X$  is the load.

The difference in the power supplied by system  $Y$  and that absorbed by system  $X$  is, of course, the power absorbed by the resistance of the three lines.



**Figure 11.22**

Circuits used in Example 11.11: (a) original three-phase system, (b) per-phase circuit.

The preceding example illustrates an interesting point. Note that the phase difference between the two ends of the power line determines the direction of the power flow. Since the numerous power companies throughout the United States are tied together to form the U.S. power grid, the phase difference across the interconnecting transmission lines reflects the manner in which power is transferred between power companies.

Capacitors for power factor correction are usually specified by the manufacturer in vars rather than in farads. Of course, the supplier must also specify the voltage at which the capacitor is designed to operate, and a frequency of 60 Hz is assumed. The relationship between capacitance and the var rating is

$$Q_R = \frac{V^2}{Z_C}$$

where  $Q_R$  is the var rating,  $V$  is the voltage rating, and  $Z_C$  is the capacitor's impedance at 60 Hz. Thus, a 500-V, 600-var capacitor has a capacitance of

$$C = \frac{Q_R}{\omega V^2} = \frac{600}{(377)(500)^2}$$

or

$$C = 6.37 \mu\text{F}$$

and can be used in any application where the voltage across the capacitor does not exceed the rated value of 500 V.

### APPLICATION EXAMPLE 11.12

Let us examine, in a general sense, the incremental cost of power factor correction; specifically, how much capacitance is required to improve the power factor by a fixed amount, say 0.01?

#### SOLUTION

The answer to this question depends primarily on two factors: the apparent power and the original power factor before correction. This dependence can be illustrated by developing equations for the old and new power factors, and their corresponding power factor angles. We know that

$$pf_{\text{old}} = \cos(\theta_{\text{old}}) \quad \tan(\theta_{\text{old}}) = \frac{Q_{\text{old}}}{P} \quad 11.28$$

$$pf_{\text{new}} = \cos(\theta_{\text{new}}) \quad \tan(\theta_{\text{new}}) = \frac{Q_{\text{old}} - Q_C}{P}$$

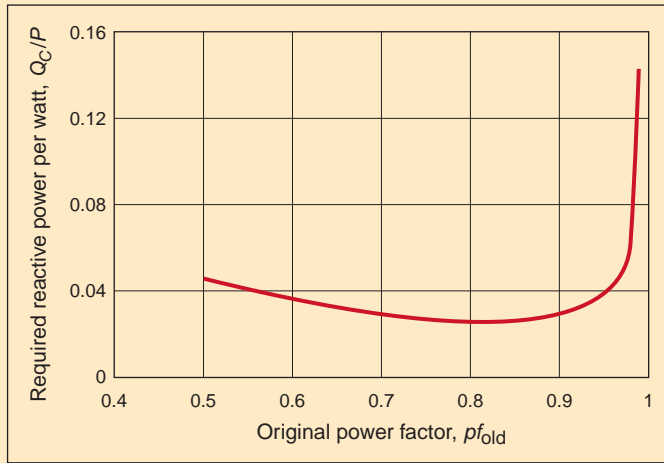
If the difference in the power factors is 0.01, then

$$pf_{\text{new}} - pf_{\text{old}} = 0.01 \quad 11.29$$

Solving for the ratio  $Q_C/P$ , since reactive power and capacitance are proportional to one another will yield the reactive power per watt required to improve the power factor by 0.01. Using Eq. (11.28), we can write

$$\frac{Q_C}{P} = \frac{Q_{\text{old}}}{P} - \tan(\theta_{\text{new}}) = \tan(\theta_{\text{old}}) - \tan(\theta_{\text{new}}) = \tan[\arccos(pf_{\text{old}})] - \tan[\arccos(pf_{\text{old}} + 0.01)] \quad 11.30$$

A plot of Eq. (11.30), shown in Fig. 11.23, has some rather interesting implications. First, the improvement required for a power factor change of 0.01 is at a minimum when the original power factor is about 0.81. Thus, an incremental improvement at that point is least expensive. Second, as the original power factor approaches unity, changes in power factor are more expensive to implement.

**Figure 11.23**

A plot of required reactive power per watt needed to improve the original power factor by 0.01.

Table 11.2 lists the voltage and power ratings for three power factor correction capacitors. Let us determine which of them, if any, can be employed in Example 11.10.

### APPLICATION EXAMPLE 11.13

**TABLE 11.2** Rated voltage and vars for power factor correction capacitors

CAPACITOR	RATED VOLTAGE (kV)	RATED Q (Mvars)
1	10.0	4.0
2	50.0	25.0
3	20.0	7.5

From Fig. 11.21 we see that the voltage across the capacitors is the line-to-neutral voltage, which is

### SOLUTION

$$V_{an} = \frac{V_{ab}}{\sqrt{3}} = \frac{34,500}{\sqrt{3}}$$

or

$$V_{an} = 19.9 \text{ kV}$$

Therefore, only those capacitors with rated voltages greater than or equal to 19.9 kV can be used in this application, which eliminates capacitor 1. Let us now determine the capacitance of capacitors 2 and 3. For capacitor 2,

$$C_2 = \frac{Q}{\omega V^2} = \frac{25 \times 10^6}{(377)(50,000)^2}$$

or

$$C_2 = 26.53 \text{ } \mu\text{F}$$

which is much smaller than the required 48.6  $\mu\text{F}$ . The capacitance of capacitor 3 is

$$C_3 = \frac{Q}{\omega V^2} = \frac{7.5 \times 10^6}{(377)(20,000)^2}$$

or

$$C_3 = 49.7 \text{ } \mu\text{F}$$

which is within 2.5% of the required value. Obviously, capacitor 3 is the best choice.

## 11.7

In the first example in this section, we examine the selection of both the conductor and the capacitor in a practical power factor correction problem.

## Design Examples

**DESIGN  
EXAMPLE  
11.14**

Two stores, as shown in Fig. 11.24, are located at a busy intersection. The stores are fed from a balanced three-phase 60-Hz source with a line voltage of 13.8 kV rms. The power line is constructed of a #4ACSR (aluminum cable steel reinforced) conductor that is rated at 170 A rms.

A third store, shown in Fig. 11.24, wishes to locate at the intersection. Let us determine (1) if the #4ACSR conductor will permit the addition of this store, and (2) the value of the capacitors connected in wye that are required to change the overall power factor for all three stores to 0.92 lagging.

**SOLUTION** 1. The complex power for each of the three loads is

$$S_1 = 700 \angle 36.9^\circ = 560 + j420 \text{ kVA}$$

$$S_2 = 1000 \angle 60^\circ = 500 + j866 \text{ kVA}$$

$$S_3 = 800 \angle 25.8^\circ = 720 + j349 \text{ kVA}$$

Therefore, the total complex power is

$$\begin{aligned} S_T &= S_1 + S_2 + S_3 \\ &= 1780 + j1635 \\ &= 2417 \angle 42.57^\circ \text{ kVA} \end{aligned}$$

Since

$$S_T = \sqrt{3} V_L I_L$$

the line current is

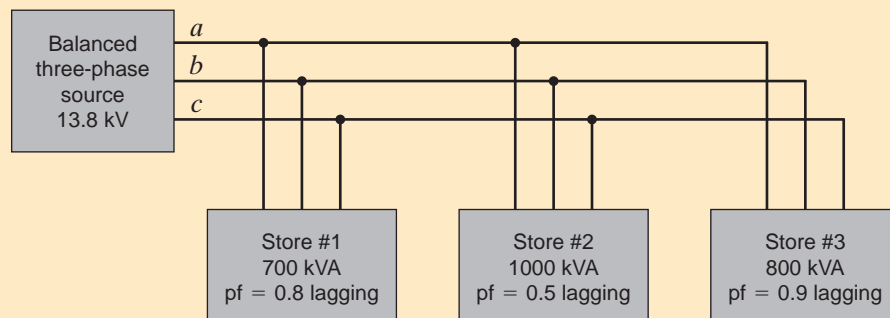
$$\begin{aligned} I_L &= \frac{(2417)(10^3)}{\sqrt{3}(13.8)(10^3)} \\ &= 101.1 \text{ A rms} \end{aligned}$$

Since this value is well below the rated value of 170 A rms, the conductor is sized properly and we can safely add the third store.

2. The combined power factor for the three loads is found from the expression

$$\cos \theta = \text{pf} = \frac{1780}{2417} = 0.7365 \text{ lagging}$$

**Figure 11.24**  
Circuit used in  
Example 11.14.



By adding capacitors we wish to change this power factor to 0.92 lagging. This new power factor corresponds to a  $\theta_{\text{new}}$  of  $23.07^\circ$ . Therefore, the new complex power is

$$\begin{aligned} S_{\text{new}} &= 1780 + j1780 \tan(23.07^\circ) \\ &= 1780 + j758.28 \text{ kVA} \end{aligned}$$

As illustrated in Fig. 9.17, the difference between  $S_{\text{new}}$  and  $S_T$  is that supplied by the purely reactive capacitor and, therefore,

$$S_{\text{cap}} = jQ_C = S_{\text{new}} - S_T$$

or

$$\begin{aligned} jQ_C &= j(758.28 - 1635) \\ &= -j876.72 \text{ kVA} \end{aligned}$$

Thus,

$$-j\omega C V_{\text{rms}}^2 = \frac{-j876.72\text{k}}{3}$$

and

$$377 \left( \frac{13.8 \times 10^3}{\sqrt{3}} \right)^2 C = \frac{876.72}{3} \times 10^3$$

Therefore,

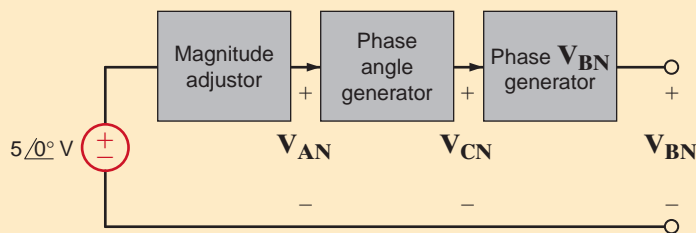
$$C = 12.2 \mu\text{F}$$

Hence, three capacitors of this value connected in wye at the load will yield a total power factor of 0.92 lagging.

Control circuitry for high-voltage, three-phase equipment usually operates at much lower voltages. For example, a 10-kW power supply might operate at a line voltage of 480 V rms, while its control circuit is powered by internal dc power supplies at  $\pm 5$  V. Lower voltages are not only safer to operate but also permit engineers to easily incorporate op-amps and digital electronics into the control system. It is a great convenience to test the control circuit without having to connect it directly to a 480-V rms three-phase source. Therefore, let us design a low-power, three-phase emulator that simulates a three-phase system at low voltage and low cost and provides a test bed for the control circuitry. The emulator should generate proper phasing but with a magnitude that is adjustable between 1 and 4 volts peak.

Our design, shown in Fig. 11.25, will consist of three parts: a magnitude adjustment, a phase angle generator, and a phase B generator. The ac input is a 60-Hz sine wave with a peak of about 5 V. This voltage can be generated from a standard 120 V rms wall outlet using a step-down transformer with a turns ratio of

$$n = \frac{120\sqrt{2}}{5} = 34:1$$



The potentiometer circuit shown in Fig. 11.26a can be used to provide magnitude adjustment. Resistors  $R_1$  and  $R_2$  provide the voltage limits of 1 and 4 V. We can use simple

## DESIGN EXAMPLE 11.15

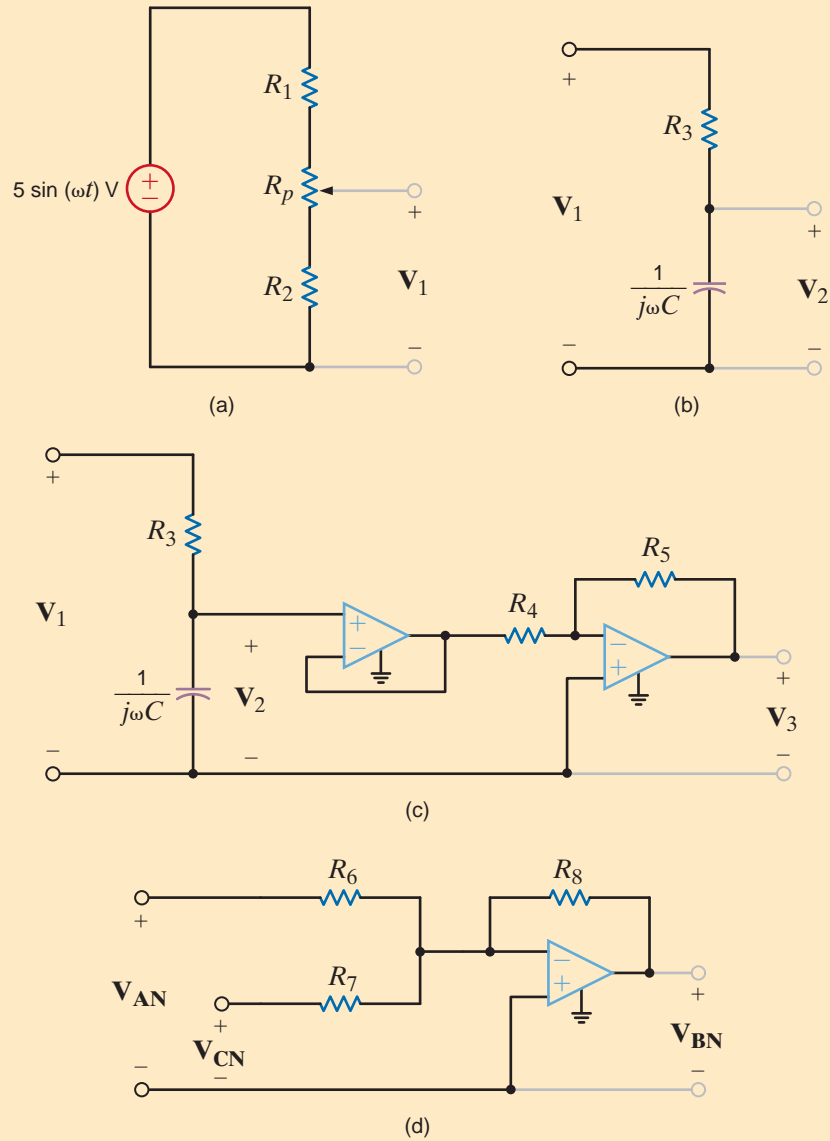
### SOLUTION

**Figure 11.25**

A block diagram for a three-phase emulator.

**Figure 11.26**

Subcircuits within the three-phase emulator: (a) the magnitude adjustor, (b) the  $R$ - $C$  portion of the phase angle generator, (c) the complete phase angle generator, and (d) the generator for phase  $V_{BN}$ .



voltage division to determine the relationships between  $R_1$ ,  $R_2$ , and  $R_p$ . When the pot's wiper arm is at the bottom of the pot in Fig. 11.26a, we have

$$V_1 = 1 = 5 \left[ \frac{R_2}{R_1 + R_2 + R_p} \right] \Rightarrow R_1 + R_p = 4R_2 \quad 11.31$$

and when the wiper is at the top,

$$V_1 = 4 = 5 \left[ \frac{R_2 + R_p}{R_1 + R_2 + R_p} \right] \Rightarrow R_2 + R_p = 4R_1 \quad 11.32$$

Solving Eqs. (11.31) and (11.32) yields the requirements that  $R_1 = R_2 = R_p/3$ . To obtain values for these resistors we must simply choose one of them. We know that resistors are available in a wide variety of values in small increments. Potentiometers on the other hand are not. Typical potentiometer values are 10, 20, 50, 100, 200, 500, ...10k ... 100k, 200k, 500k, ... up to about 10 M $\Omega$ . Since the potentiometer offers fewer options, we will choose its value to be 10 k $\Omega$ , which yields  $R_1 = R_2 = 3.3$  k $\Omega$ —a standard resistor value. We will set  $V_1$  as the phase voltage  $V_{AN}$ .



Next we consider the phase angle generator. Since capacitors are generally smaller physically than inductors, we will use the simple  $RC$  network in Fig. 11.26b to shift the phase of  $\mathbf{V}_1$ . Assigning a phase angle of  $0^\circ$  to  $\mathbf{V}_1$ , we know that the phase of  $\mathbf{V}_2$  must be between  $0$  and  $-90$  degrees. Unfortunately, in order to generate  $\mathbf{V}_{CN}$  we need a phase angle of  $+120^\circ$ . If we create a phase angle of  $-60^\circ$  and invert the resulting sine wave, we will produce an equivalent phase angle of  $+120^\circ$ ! The inversion can be performed by an inverting op-amp configuration. To produce a  $-60^\circ$  phase angle at  $\mathbf{V}_2$  requires

$$\omega CR_3 = \tan(60^\circ) = 1.732 \quad \Rightarrow \quad R_3 C = 4.59 \times 10^{-3}$$

We will choose a standard value of  $120 \text{ nF}$  for  $C$ , which yields  $R_3 = 38.3 \text{ k}\Omega$ . This is a standard value at 1% tolerance. Using these values,  $\mathbf{V}_2$  will be

$$\mathbf{V}_2 = \mathbf{V}_1 \left[ \frac{1}{1 + j\omega CR_3} \right] = \frac{\mathbf{V}_1}{2.0} \angle -60^\circ \quad 11.33$$

From Eq. (11.33) we see that our inverter should also have a gain of 2 to restore the magnitude of  $\mathbf{V}_2$ . The complete phase angle generator circuit is shown in Fig. 11.26c, where  $R_4 = 10 \text{ k}\Omega$  and  $R_5 = 20 \text{ k}\Omega$  have been chosen to produce the required gain. Now  $\mathbf{V}_3$  is used to represent  $\mathbf{V}_{CN}$ . The additional unity gain buffer stage isolates the resistances associated with the inverter from the  $R$ - $C$  phase generator. That way the inverter will not alter the phase angle.

Finally, we must create the phase voltage  $\mathbf{V}_{BN}$ . Since the sum of the three-phase voltages is zero, we can write

$$\mathbf{V}_{BN} = -\mathbf{V}_{AN} - \mathbf{V}_{CN}$$

The simple op-amp summer in Fig. 11.26d will perform this mathematical operation. For the summer

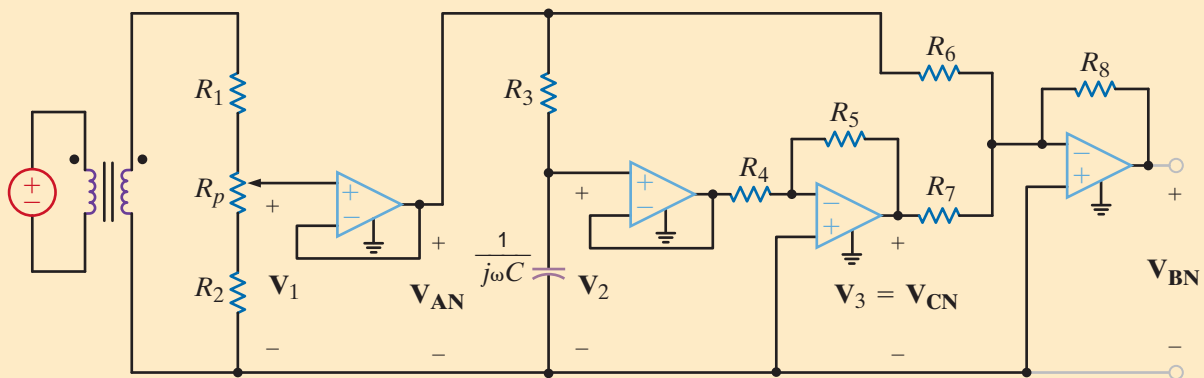
$$\mathbf{V}_{BN} = -\left[ \frac{R_8}{R_6} \right] \mathbf{V}_{AN} - \left[ \frac{R_8}{R_7} \right] \mathbf{V}_{CN}$$

We require  $R_6 = R_7 = R_8$ . Since we are already using some  $10\text{-k}\Omega$  resistors anyway, we just use three more here. The complete circuit is shown in Fig. 11.27 where one more unity gain buffer has been added at the potentiometer. This one isolates the  $R$ - $C$  phase angle generator from the magnitude adjustment resistors.

It may seem that we have used op-amps too liberally, requiring a total of four. However, most op-amp manufacturers package their op-amps in single (one op-amp), dual (two op-amps), and quad (four op-amps) packages. Using a quad op-amp, we see that our circuit will require just one integrated circuit. As a final note, the op-amp power supply voltages must exceed the maximum input or output voltages at the op-amp terminals, which is  $4 \text{ V}$ . Therefore, we will specify  $+10 \text{ V}$  supplies.

**Figure 11.27**

The complete three-phase emulator with variable voltage magnitude.



**SUMMARY**

- An important advantage of the balanced three-phase system is that it provides very smooth power delivery.
- Because of the balanced condition, it is possible to analyze a circuit on a per-phase basis, thereby providing a significant computational shortcut to a solution.
- A balanced three-phase voltage source has three sinusoidal voltages of the same magnitude and frequency, and each voltage is 120° out of phase with the others. A positive-phase-sequence balanced voltage source is one in which  $V_{bn}$  lags  $V_{an}$  by 120° and  $V_{cn}$  lags  $V_{bn}$  by 120°.
- The relationships between wye- and delta-connected sources are shown in Table 11.1.
- The three-phase terminology is shown in Table 11.3.
- In a balanced system the voltages and currents sum to zero.

$$V_{an} + V_{bn} + V_{cn} = 0$$

$$I_a + I_b + I_c = 0 \quad (\text{no current in the neutral line})$$

and

$$V_{ab} + V_{bc} + V_{ca} = 0$$

$$I_{ab} + I_{bc} + I_{ca} = 0$$

- The steps recommended for solving balanced three-phase ac circuits are as follows:

**TABLE 11.3** Three-phase terminology

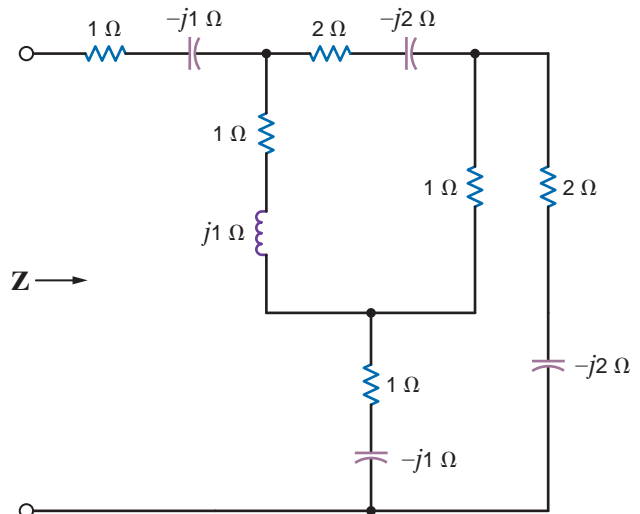
QUANTITY	WYE	DELTA
	Line current ( $I_L$ )	
$I_a, I_b, I_c$	Phase current ( $I_p$ )	
	Line-to-neutral voltage ( $V_p$ )	
$V_{an}, V_{bn}, V_{cn}$	Phase voltage ( $V_p$ )	
$V_{ab}, V_{bc}, V_{ca}$	Line-to-line, phase-to-phase, line voltage ( $V_L$ )	
		Phase voltage ( $V_p$ )
$I_{ab}, I_{bc}, I_{ca}$		Phase current ( $I_p$ )

1. If the source/load connection is not wye–wye, then transform the system to a wye–wye connection.
  2. Determine the unknown phasors in the wye–wye connection and deal only with the phase *a*.
  3. Convert the now-known phasors back to the corresponding phasors in the original connection.
- Power factor correction in a balanced three-phase environment is performed in the same manner as in the single-phase case. Three capacitors are put in parallel with the load to reduce the lagging phase caused by the three-phase load.

**PROBLEMS**

- 11.1 Sketch a phasor representation of an *abc*-sequence balanced three-phase Y-connected source, including  $V_{an}$ ,  $V_{bn}$ , and  $V_{cn}$  if  $V_{an} = 120 \angle 15^\circ$  V rms.
- 11.2 Sketch a phasor representation of a balanced three-phase system containing both phase voltages and line voltages if  $V_{an} = 120 \angle 90^\circ$  V rms. Label all magnitudes and assume an *abc*-phase sequence.
- 11.3 Sketch a phasor representation of a balanced three-phase system containing both phase voltages and line voltages if  $V_{an} = 100 \angle 45^\circ$  V rms. Label all magnitudes and assume an *abc*-phase sequence.
- 11.4 Sketch a phasor representation of a balanced three-phase system containing both phase voltages and line voltages if  $V_{ab} = 208 \angle 60^\circ$  V rms. Label all phasors and assume an *abc*-phase sequence.
- 11.5 A positive-sequence three-phase balanced wye voltage source has a phase voltage of  $V_{an} = 240 \angle 90^\circ$  V rms. Determine the line voltages of the source.

- 11.6 Find the equivalent  $Z$  of the network in Fig. P11.6.



**Figure P11.6**

11.7 Find the equivalent impedances  $Z_{ab}$ ,  $Z_{bc}$ , and  $Z_{ca}$  in the network in Fig. P11.7.

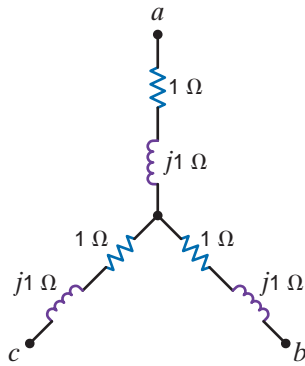


Figure P11.7

11.8 Find the equivalent  $Z$  of the network in Fig. P11.8.

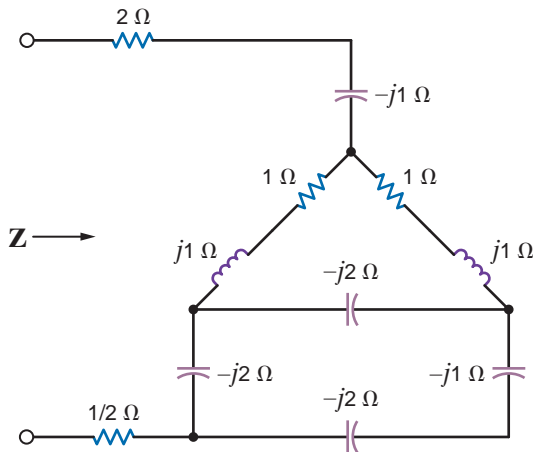


Figure P11.8

11.9 Find the equivalent  $Z$  of the network in Fig. P11.9.

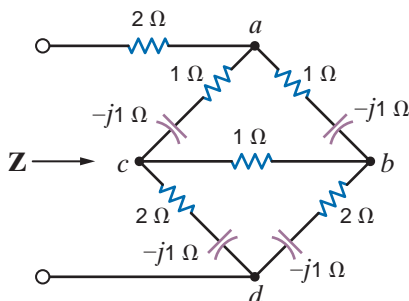


Figure P11.9

11.10 A positive-sequence balanced three-phase wye-connected source with a phase voltage of 120 V rms supplies power to a balanced wye-connected load. The per-phase load impedance is  $40 + j10 \Omega$ . Determine the line currents in the circuit if  $\angle V_{an} = 0^\circ$ .

11.11 A positive-sequence balanced three-phase wye-connected source supplies power to a balanced wye-connected load. The magnitude of the line voltages is 208 V rms. If the load impedance per phase is  $36 + j12 \Omega$ , determine the line currents if  $\angle V_{an} = 0^\circ$ .

11.12 In a three-phase balanced wye-wye system, the source is an  $abc$ -sequence set of voltages with  $V_{an} = 120 \angle 60^\circ$  rms. The per phase impedance of the load is  $12 + j16 \Omega$ . If the line impedance per phase is  $0.8 + j1.4 \Omega$ , find the line currents and the voltages.

11.13 An  $abc$ -sequence set of voltages feeds a balanced three-phase wye-wye system. If the line current in the  $a$  phase is 16.78  $\angle 20.98^\circ$  A rms, the line impedance is  $1.2 + j1.8 \Omega$ , and the input voltage  $V_{ab} = 440 \angle 70^\circ$  V rms. find the load impedance.

11.14 An  $abc$ -phase-sequence three-phase balanced wye-connected source supplies a balanced delta-connected load. The impedance per phase in the delta load is  $12 + j9 \Omega$ . The line voltage at the source is  $V_{ab} = 120 \sqrt{3} \angle 40^\circ$  V rms. If the line impedance is zero, find the line currents in the balanced wye-delta system.

11.15 An  $abc$ -phase-sequence three-phase balanced wye-connected 60-Hz source supplies a balanced delta-connected load. The phase impedance in the load consists of a 20  $\Omega$  resistor in series with a 50-mH inductor, and the phase voltage at the source is  $V_{an} = 120 \angle 20^\circ$  V rms. If the line impedance is zero, find the line currents in the system.

11.16 An  $abc$ -phase-sequence three-phase balanced wye-connected source supplies power to a balanced wye-connected load. The impedance per phase in the load is  $14 + j12 \Omega$ . If the source voltage for the  $a$  phase is  $V_{an} = 120 \angle 80^\circ$  V rms, and the line impedance is zero, find the phase currents in the wye-connected source.

11.17 An  $abc$ -sequence balanced three-phase wye-connected source supplies power to a balanced wye-connected load. The line impedance per phase is  $1 + j5 \Omega$ , and the load impedance per phase is  $25 + j25 \Omega$ . If the source line voltage  $V_{ab} = 208 \angle 0^\circ$  V rms find the line currents.

11.18 An  $abc$ -sequence balanced three-phase wye-connected source supplies power to a balanced wye-connected load. The line impedance per phase is  $1 + j0 \Omega$ , and the load impedance per phase is  $20 + j20 \Omega$ . If the source line voltage  $V_{ab}$  is 100  $\angle 0^\circ$  V rms, find the line currents.

11.19 An  $abc$ -sequence set of voltages feeds a balanced three-phase wye-wye system. The line and load impedances are  $1 + j1 \Omega$  and  $10 + j10 \Omega$ , respectively. If the load voltage on the  $\alpha$  phase is  $V_{AN} = 110 \angle 30^\circ$  V rms, determine the line voltages of the input.

**11.20** In a balanced three-phase wye–wye system, the source is an *abc*-sequence set of voltages. The load voltage on the *a* phase is  $\mathbf{V}_{AN} = 108.58 \angle 79.81^\circ$  V rms,  $\mathbf{Z}_{\text{line}} = 1 + j1.4 \Omega$ , and  $\mathbf{Z}_{\text{load}} = 10 + j13 \Omega$ . Determine the input sequence of voltages.

**11.21** A balanced *abc*-sequence of voltages feeds a balanced three-phase wye–wye system. The line and load impedance are  $0.6 + j0.9 \Omega$  and  $8 + j12 \Omega$ , respectively. The load voltage on the *a* phase is  $\mathbf{V}_{AN} = 116.63 \angle 10^\circ$  V rms. Find the line voltage  $\mathbf{V}_{ab}$ .


**11.22** In a balanced three-phase wye–wye system, the source is an *abc*-sequence set of voltages. The load voltage on the *a* phase is  $\mathbf{V}_{AN} = 110 \angle 80^\circ$  V rms,  $\mathbf{Z}_{\text{line}} = 1 + j1.4 \Omega$ , and  $\mathbf{Z}_{\text{load}} = 10 + j13 \Omega$ . Determine the input sequence of the line-to-neutral voltages.

**11.23** In a balanced three-phase wye–wye system, the source is an *abc*-sequence set of voltages. The load voltage on the *a* phase is  $\mathbf{V}_{AN} = 120 \angle 60^\circ$  V rms,  $\mathbf{Z}_{\text{line}} = 2 + j1.4 \Omega$ , and  $\mathbf{Z}_{\text{load}} = 10 + j10 \Omega$ . Determine the input voltages.

**11.24** In a balanced three-phase wye–wye system, the source is an *abc*-sequence set of voltages.  $\mathbf{Z}_{\text{line}} = 1 + j1 \Omega$ ,  $\mathbf{Z}_{\text{load}} = 14 + j12 \Omega$ , and the load voltage on the *a* phase is  $\mathbf{V}_{AN} = 440 \angle 30^\circ$  V rms. Find the line voltage  $\mathbf{V}_{ab}$ .


**11.25** A balanced *abc*-sequence of voltages feeds a balanced three-phase wye–wye system. The line and load impedance are  $0.6 + j0.9 \Omega$  and  $8 + j12 \Omega$  respectively. The load voltage on the *a* phase is  $\mathbf{V}_{AN} = 116.63 \angle 10^\circ$  V rms. Find the line voltage  $\mathbf{V}_{ab}$ .


**11.26** In a balanced three-phase wye–wye system, the source is an *abc*-sequence set of voltages.  $\mathbf{Z}_{\text{line}} = 1 + j1.8 \Omega$ ,  $\mathbf{Z}_{\text{load}} = 14 + j12 \Omega$ , and the load voltage on the *a* phase is  $\mathbf{V}_{AN} = 398.1 \angle 17.99^\circ$  V rms. Find the line voltage  $\mathbf{V}_{ab}$ .


 **11.27** In a balanced three-phase wye–delta system the source has an *abc* phase sequence and  $\mathbf{V}_{an} = 120 \angle 40^\circ$  V rms. The line and load impedances are  $0.5 + j0.4 \Omega$  and  $24 + j18 \Omega$ , respectively. Find the delta currents in the load.

**11.28** In a balanced three-phase wye–wye system, the load impedance is  $8 + j4 \Omega$ . The source has phase sequence *abc* and  $\mathbf{V}_{an} = 120 \angle 0^\circ$  V rms. If the load voltage is  $\mathbf{V}_{AN} = 111.62 \angle -1.33^\circ$  V rms, determine the line impedance.

**11.29** In a balanced three-phase wye–wye system, the total power loss in the lines is 400 W.  $\mathbf{V}_{AN} = 105.28 \angle 31.56^\circ$  V rms and the power factor of the load is 0.77 lagging. If the line impedance is  $2 + j1 \Omega$ , determine the load impedance.

**11.30** In a balanced three-phase wye–wye system, the load impedance is  $10 + j1 \Omega$ . The source has phase sequence *abc* and the line voltage  $\mathbf{V}_{ab} = 220 \angle 30^\circ$  V rms. If the load voltage  $\mathbf{V}_{AN} = 120 \angle 0^\circ$  V rms, determine the line impedance. 

**11.31** In a balanced three-phase wye–wye system, the load impedance is  $20 + j12 \Omega$ . The source has an *abc*-phase sequence and  $\mathbf{V}_{an} = 120 \angle 0^\circ$  V rms. If the load voltage is  $\mathbf{V}_{AN} = 111.49 \angle -0.2^\circ$  V rms, determine the magnitude of the line current if the load is suddenly short-circuited. 

**11.32** In a balanced three-phase wye–wye system, the source is an *abc*-sequence set of voltages and  $\mathbf{V}_{an} = 120 \angle 40^\circ$  V rms. If the *a*-phase line current and line impedance are known to be  $7.10 \angle -10.28^\circ$  A rms and  $0.8 + j1 \Omega$ , respectively, find the load impedance. 

**11.33** In a balanced three-phase wye–wye system, the source is an *abc*-sequence set of voltages and  $\mathbf{V}_{an} = 120 \angle 50^\circ$  V rms. The load voltage on the *a* phase is  $110.65 \angle 29.03^\circ$  V rms and the load impedance is  $16 + j20 \Omega$ . Find the line impedance.

**11.34** An *abc*-sequence set of voltages feeds a balanced three-phase wye–wye system. If the input voltage  $\mathbf{V}_{an} = 440 \angle 10^\circ$  V rms, the load voltage on the *a* phase is  $\mathbf{V}_{AN} = 398.32 \angle 8.72^\circ$  V rms, and  $\mathbf{Z}_{\text{load}} = 20 + j24 \Omega$ , find the line impedance.






**11.35** An *abc*-phase-sequence balanced three-phase source feeds a balanced load. The system is wye–wye connected. The load impedance is  $10 + j6 \Omega$ , the line impedance is  $1 + j0.5 \Omega$ , and  $\angle \mathbf{V}_{AN} = 60^\circ$ . The total power loss in the lines is 470.44 W. Find  $\mathbf{V}_{AN}$  and the magnitude of the source voltage.

**11.36** An *abc*-sequence balanced three-phase source feeds a balanced wye–wye system.  $\mathbf{Z}_{\text{line}} = 0.8 + j0.2 \Omega$ ,  $\mathbf{Z}_{\text{load}} = 12 + j6 \Omega$ ,  $\angle \mathbf{V}_{AN} = 30^\circ$ . The total power absorbed by the load is 2 kW. Determine the total power loss in the lines.


**11.37** An *abc*-phase-sequence three-phase balanced wye-connected 60-Hz source supplies a balanced delta-connected load. The phase impedance in the load consists of a 20- $\Omega$  resistor series with a 20-mH inductor, and the phase voltage at the source is  $\mathbf{V}_{an} = 120 \angle 30^\circ$  V rms. If the line impedance is zero, find the line currents in the system.

**11.38** In a three-phase balanced system, a delta-connected source supplies power to a wye-connected load. If the line impedance is  $0.2 + j0.4 \Omega$ , the load impedance  $3 + j2 \Omega$ , and the source phase voltage  $\mathbf{V}_{ab} = 208 \angle 10^\circ$  V rms, find the magnitude of the line voltage at the load.


**11.39** In a balanced three-phase wye–wye system, the source is an *abc*-sequence set of voltages and  $\mathbf{V}_{an} = 120 \angle 50^\circ$  V rms. The load voltage on the *a* phase is  $110 \angle 50^\circ$  V rms, and the load impedance is  $16 + j20 \Omega$ . Find the line impedance.

-  **11.40** In a balanced three-phase wye–wye system, the source is an *abc*-sequence set of voltages and  $\mathbf{V}_{an} = 120 \angle 40^\circ$  V rms. If the *a*-phase line current and line impedance are known to be  $6 \angle 15^\circ$  A rms and  $1 + j1 \Omega$ , respectively, find the load impedance.
- 11.41** An *abc*-phase-sequence three-phase balanced wye-connected source supplies a balanced delta-connected load. The impedance per phase in the delta load is  $12 + j6 \Omega$ . The line voltage at the source is  $\mathbf{V}_{ab} = 120 \sqrt{3} \angle 40^\circ$  V rms. If the line impedance is zero, find the line currents in the balanced wye–delta system.
- 11.42** In a balanced three-phase delta–wye system, the source has an *abc*-phase sequence. The line and load impedances are  $0.6 + j0.3 \Omega$  and  $12 + j7 \Omega$ , respectively. If the line current  $\mathbf{I}_{aA} = 9.6 \angle -20^\circ$  A rms, determine the phase voltages of the source.
- 11.43** In a three-phase balanced system, a delta-connected source supplies power to a wye-connected load. If the line impedance is  $0.2 + j0.4 \Omega$ , the load impedance  $6 + j4 \Omega$ , and the source phase voltage  $\mathbf{V}_{ab} = 210 \angle 40^\circ$  V rms, find the magnitude of the line voltage at the load.
-  **11.44** An *abc*-sequence set of voltages feeds a balanced three-phase wye–wye system. If  $\mathbf{V}_{an} = 440 \angle 30^\circ$  V rms,  $\mathbf{V}_{AN} = 413.28 \angle 29.78^\circ$  V rms, and  $\mathbf{Z}_{\text{line}} = 2 + j1.5 \Omega$ , find the load impedance.
- 11.45** An *abc*-phase-sequence three-phase balanced wye-connected source supplies a balanced delta-connected load. The impedance per phase of the delta load is  $20 + j4 \Omega$ . If  $\mathbf{V}_{AB} = 115 \angle 35^\circ$  V rms, find the line current.
- 11.46** An *abc*-phase-sequence three-phase balanced wye-connected source supplies power to a balanced delta-connected load. The impedance per phase in the load is  $14 + j7 \Omega$ . If the source voltage for the *a* phase is  $\mathbf{V}_{an} = 120 \angle 80^\circ$  V rms and the line impedance is zero, find the phase currents in the wye-connected source.
-  **11.47** In a three-phase balanced delta–delta system, the source has an *abc*-phase sequence. The line and load impedances are  $0.3 + j0.2 \Omega$  and  $9 + j6 \Omega$ , respectively. If the load current in the delta is  $\mathbf{I}_{AB} = 15 \angle 40^\circ$  A rms, find the phase voltages of the source.
- 11.48** An *abc*-phase-sequence three-phase balanced wye-connected source supplies a balanced delta-connected load. The impedance per phase of the delta load is  $10 + j8 \Omega$ . If the line impedance is zero and the line current in the *a* phase is known to be  $\mathbf{I}_{aA} = 28.10 \angle -28.66^\circ$  A rms, find the load voltage  $\mathbf{V}_{AB}$ .
- 11.49** In a balanced three-phase wye–delta system, the source has an *abc*-phase sequence and  $\mathbf{V}_{an} = 120 \angle 0^\circ$  V rms. If the line impedance is zero and the line current  $\mathbf{I}_{aA} = 5 \angle 20^\circ$  A rms, find the load impedance per phase in the delta.
- 11.50** A three-phase load impedance consists of a balanced wye in parallel with a balanced delta. What is the equivalent wye load and what is the equivalent delta load if the phase impedances of the wye and delta are  $6 + j3 \Omega$  and  $15 + j10 \Omega$ , respectively?
- 11.51** In a balanced three-phase system, the *abc*-phase-sequence source is wye connected and  $\mathbf{V}_{an} = 120 \angle 20^\circ$  V rms. The load consists of two balanced wyes with phase impedances of  $8 + j2 \Omega$  and  $12 + j3 \Omega$ . If the line impedance is zero, find the line currents and the phase current in each load.
- 11.52** In a balanced three-phase delta–delta system, the source has an *abc*-phase sequence. The phase angle for the source voltage is  $\angle \mathbf{V}_{ab} = 40^\circ$  and  $\mathbf{I}_{ab} = 4 \angle 15^\circ$  A rms. If the total power absorbed by the load is 1400 W, find the load impedance.
- 11.53** In a balanced three-phase system, the source is a balanced wye with an *abc*-phase sequence and  $\mathbf{V}_{ab} = 215 \angle 50^\circ$  V rms. The load is a balanced wye in parallel with a balanced delta. The phase impedance of the wye is  $5 + j3 \Omega$ , and the phase impedance of the delta is  $18 + j12 \Omega$ . If the line impedance is  $1 + j0.8 \Omega$ , find the line currents and the phase currents in the loads. 
- 11.54** In a balanced three-phase system, the source is a balanced wye with an *abc*-phase sequence and  $\mathbf{V}_{ab} = 208 \angle 60^\circ$  V rms. The load consists of a balanced wye with a phase impedance of  $8 + j5 \Omega$  in parallel with a balanced delta with a phase impedance of  $21 + j12 \Omega$ . If the line impedance is  $1.2 + j1 \Omega$ , find the phase currents in the balanced wye load.
- 11.55** In a balanced three-phase system, the source has an *abc*-phase sequence and is connected in delta. There are two loads connected in parallel. The line connecting the source to the loads has an impedance of  $0.2 + j0.1 \Omega$ . Load 1 is connected in wye, and the phase impedance is  $4 + j2 \Omega$ . Load 2 is connected in delta, and the phase impedance is  $12 + j9 \Omega$ . The current  $\mathbf{I}_{AB}$  in the delta load is  $16 \angle 45^\circ$  A rms. Find the phase voltage of the source. 
- 11.56** In a balanced three-phase system, the source has an *abc*-phase sequence and is connected in delta. There are two parallel wye-connected loads. The phase impedance of load 1 and load 2 is  $4 + j4 \Omega$  and  $10 + j4 \Omega$ , respectively. The line impedance connecting the source to the loads is  $0.3 + j0.2 \Omega$ . If the current in the *a* phase of load 1 is  $\mathbf{I}_{AN_1} = 10 \angle 20^\circ$  A rms, find the delta currents in the source.
- 11.57** An *abc*-phase-sequence balanced three-phase source feeds a balanced load. The system is connected wye–wye and  $\angle \mathbf{V}_{an} = 0^\circ$ . The line impedance is  $0.5 + j0.2 \Omega$ , the load impedance is  $16 + j10 \Omega$ , and the total power absorbed by the load is 2000 W. Determine the magnitude of the source voltage  $\mathbf{V}_{an}$ .

**11.58** A balanced three-phase delta-connected source supplies power to a load consisting of a balanced delta in parallel with a balanced wye. The phase impedance of the delta is  $24 + j12 \Omega$ , and the phase impedance of the wye is  $12 + j8 \Omega$ . The *abc*-phase-sequence source voltages are  $\mathbf{V}_{ab} = 440 \angle 60^\circ \text{ V rms}$ ,  $\mathbf{V}_{bc} = 440 \angle -60^\circ \text{ V rms}$ , and  $\mathbf{V}_{ca} = 440 \angle -180^\circ \text{ V rms}$ , and the line impedance per phase is  $1 + j0.08 \Omega$ . Find the line currents and the power absorbed by the wye-connected load.

 **11.59** The magnitude of the complex power (apparent power) supplied by a three-phase balanced wye–wye system is 3600 VA. The line voltage is 208 V rms. If the line impedance is negligible and the power factor angle of the load is  $25^\circ$ , determine the load impedance.

**11.60** An *abc*-sequence wye-connected source having a phase-a voltage of  $120 \angle 0^\circ \text{ V rms}$  is attached to a wye-connected load having a per-phase impedance of  $100 \angle 70^\circ \Omega$ . If the line impedance is  $1 \angle 20^\circ \Omega$ , determine the total complex power produced by the voltage sources and the real and reactive power dissipated by the load.

 **11.61** A three-phase balanced wye–wye system has a line voltage of 208 V rms. The line current is 6 A rms and the total real power absorbed by the load is 1800 W. Determine the load impedance per-phase, if the line impedance is negligible.

**11.62** A three-phase *abc*-sequence wye-connected source supplies 14 kVA with a power factor of 0.75 lagging to a delta load. If the delta load consumes 12 kVA at a power factor of 0.7 lagging and has a phase current of  $10 \angle -30^\circ \text{ A rms}$ , determine the per-phase impedance of the load and the line.

**11.63** A balanced three-phase source serves the following loads:

- Load 1: 60 kVA at 0.8 pf lagging
- Load 2: 30 kVA at 0.75 pf lagging

The line voltage at the load is 208 V rms at 60 Hz. Determine the line current and the combined power factor at the load.

**11.64** A balanced three-phase source serves two loads:


- Load 1: 36 kVA at 0.8 pf lagging
- Load 2: 18 kVA at 0.6 pf lagging

The line voltage at the load is 208 V rms at 60 Hz. Find the line current and the combined power factor at the load.

**11.65** The following loads are served by a balanced three-phase source:

- Load 1: 18 kVA at 0.8 pf lagging
- Load 2: 8 kVA at 0.8 pf leading
- Load 3: 12 kVA at 0.75 pf lagging

The load voltage is 208 V rms at 60 Hz. If the line impedance is negligible, find the power factor at the source.

**11.66** A balanced three-phase source serves the following loads: 

- Load 1: 20 kVA at 0.8 pf lagging
- Load 2: 10 kVA at 0.7 pf leading
- Load 3: 10 kW at unity pf
- Load 4: 16 kVA at 0.6 pf lagging

The line voltage at the load is 208 V rms at 60 Hz, and the line impedance is  $0.02 + j0.04 \Omega$ . Find the line voltage and power factor at the source.

**11.67** A small shopping center contains three stores that represent three balanced three-phase loads. The power lines to the shopping center represent a three-phase source with a line voltage of 13.8 kV rms. The three loads are

- Load 1: 400 kVA at 0.9 pf lagging
- Load 2: 200 kVA at 0.85 pf lagging
- Load 3: 100 kVA at 0.90 pf lagging

Find the power line current.

**11.68** The following loads are served by a balanced three-phase source:


- Load 1: 20 kVA at 0.8 pf lagging
- Load 2: 4 kVA at 0.8 pf leading
- Load 3: 10 kVA at 0.75 pf lagging

The load voltage is 208 V rms at 60 Hz. If the line impedance is negligible, find the power factor at the source.

**11.69** A balanced three-phase source supplies power to three loads:

- Load 1: 30 kVA at 0.8 pf lagging
- Load 2: 24 kW at 0.6 pf leading
- Load 3: unknown

If the line voltage and total complex power at the load are 208 V rms and  $60 \angle 0^\circ \text{ kVA}$ , respectively, find the unknown load.

**11.70** A balanced three-phase source supplies power to three loads. The loads are 

- Load 1: 24 kVA at 0.6 pf lagging
- Load 2: 10 kW at 0.75 pf lagging
- Load 3: unknown

If the line voltage at the load is 208 V rms, the magnitude of the total complex power is 35.52 kVA, and the combined power factor at the load is 0.88 lagging, find the unknown load.

**11.71** A balanced three-phase source supplies power to three loads:

- Load 1: 18 kVA at 0.8 pf lagging
- Load 2: 10 kW at 0.6 pf leading
- Load 3: unknown

If the line voltage at the loads is 208 V rms, the line current at the source is 116.39 A rms, and the combined power factor at the load is 0.86 lagging, find the unknown load.

**11.72** A balanced three-phase source supplies power to three loads:

- Load 1: 30 kVA at 0.8 pf lagging
- Load 2: 24 kW at 0.6 pf leading
- Load 3: unknown

The line voltage at the load and line current at the source are 208 V rms and 166.8 A rms, respectively. If the combined power factor at the load is unity, find the unknown load.

**11.73** A balanced three-phase source supplies power to three loads:

- Load 1: 24 kW at 0.8 pf lagging
- Load 2: 10 kVA at 0.7 pf leading
- Load 3: unknown

If the line voltage at the load is 208 V rms, the magnitude of the total complex power is 41.93 kVA, and the combined power factor at the load is 0.86 lagging, find the unknown load.

**11.74** A three-phase *abc*-sequence wye-connected source with  $V_{an} = 220 \angle 0^\circ$  V rms supplies power to a wye-connected load that consumes 50 kW of power in each phase at a pf of 0.8 lagging. Three capacitors are found that each have an impedance of  $-j2.0 \Omega$ , and they are connected in parallel with the load in a wye configuration. Determine the power factor of the combined load as seen by the source.

**11.75** If the three capacitors in the network in Problem 11.74 are connected in a delta configuration, determine the power factor of the combined load as seen by the source.

**11.76** Find  $C$  in the network in Fig. P11.76 such that the total load has a power factor of 0.87 leading.

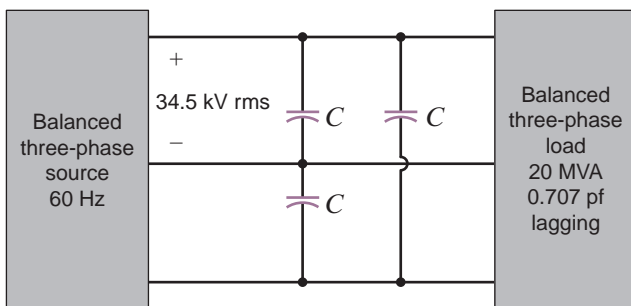


Figure P11.76

**11.77** Find  $C$  in the network in Fig. P11.77 such that the total load has a power factor of 0.9 lagging.

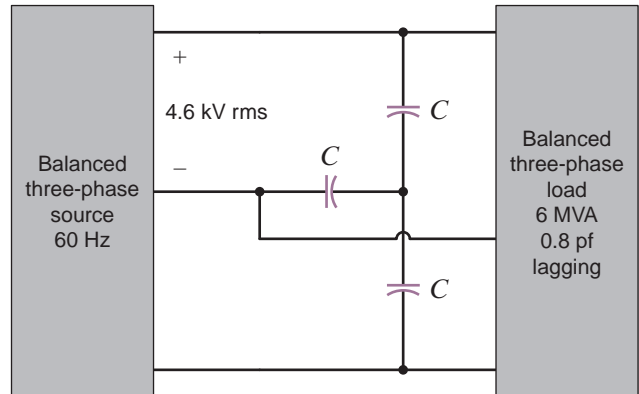


Figure P11.77

**11.78** Find the value of  $C$  in Fig. P11.78 such that the total load has a power factor of 0.87 lagging.

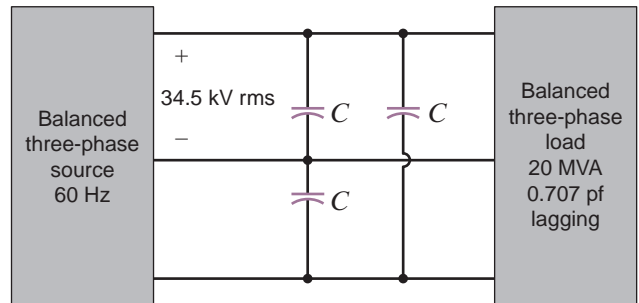


Figure P11.78

**11.79** Find  $C$  in the network in Fig. P11.79 so that the total load has a power factor of 0.9 leading.

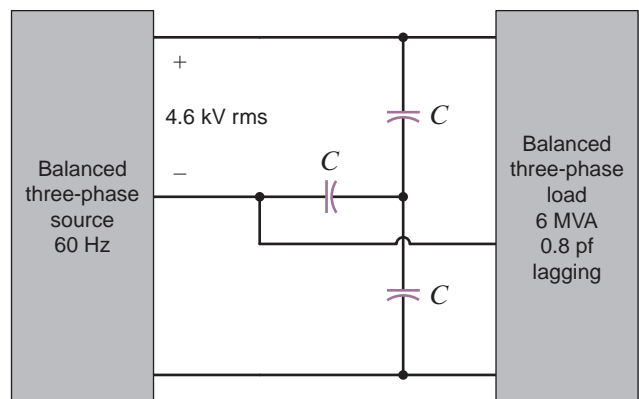


Figure P11.79

- 11.80** A standard practice for utility companies is to divide customers into single-phase users and three-phase users. The utility must provide three-phase users, typically industries, with all three phases. However, single-phase users, residential and light commercial, are connected to only one phase. To reduce cable costs, all single-phase users in a neighborhood are connected together. This means that even if the three-phase users present perfectly balanced loads to the power grid, the single-phase loads will never be in balance, resulting in current flow in the neutral connection. Consider the 60-Hz,  $abc$ -sequence network in Fig. P11.80. With a line voltage of  $416 \angle 30^\circ$  V rms, phase  $a$  supplies the single-phase users on A Street, phase  $b$  supplies B Street, and phase  $c$  supplies C Street. Furthermore, the three-phase industrial load, which is connected in delta, is balanced. Find the neutral current.

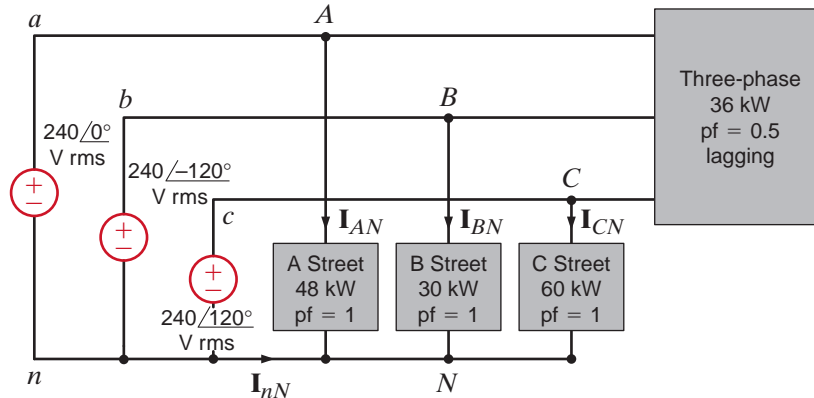


Figure P11.80

## TYPICAL PROBLEMS FOUND ON THE FE EXAM

- 11PFE-1** A wye-connected load consists of a series  $RL$  impedance. Measurements indicate that the rms voltage across each element is 84.85 V. If the rms line current is 6A, find the total complex power for the three-phase load configuration.
- $1.25 \angle -45^\circ$  kVA
  - $4.32 \angle 30^\circ$  kVA
  - $3.74 \angle 60^\circ$  kVA
  - $2.16 \angle 45^\circ$  kVA
- 11PFE-2** A balanced three-phase delta-connected load consists of an impedance of  $12 + j12 \Omega$ . If the line voltage at the load is measured to be 230 V rms, find the total real power absorbed by the three-phase configuration.
- 6.62 kW
  - 2.42 kW
  - 3.36 kW
  - 5.82 kW
- 11PFE-3** Two balanced three-phase loads are connected in parallel. One load with a phase impedance of  $24 + j18 \Omega$  is connected in delta, and the other load has a phase impedance of  $6 + j4 \Omega$  and is connected in wye. If the line-to-line voltage is 208 V rms, determine the line current.
- $15.84 \angle -60.25^\circ$  A rms
  - $28.63 \angle -35.02^\circ$  A rms
  - $40.49 \angle 30.27^\circ$  A rms
  - $35.32 \angle 90.53^\circ$  A rms
- 11PFE-4** The total complex power at the load of a three-phase balanced system is  $24 \angle 30^\circ$  kVA. Find the real power per phase.
- 3.24 kW
  - 4.01 kW
  - 6.93 kW
  - 8.25 kW
- 11PFE-5** A balanced three-phase load operates at 90 kW with a line voltage at the load of  $480 \angle 0^\circ$  V rms at 60 Hz. The apparent power of the three-phase load is 100 kVA. It is known that the load has a lagging power factor. What is the total three-phase reactive power of the load?
- 22.43 kvar
  - 30.51 kvar
  - 25.35 kvar
  - 43.59 kvar



# VARIABLE-FREQUENCY NETWORK PERFORMANCE



David Redfern/Redferns/Getty Images, Inc.

## THE LEARNING GOALS FOR THIS CHAPTER ARE:

- Understand the variable-frequency performance of the basic circuit elements:  $R$ ,  $L$ , and  $C$
- Learn the different types of network functions and the definition of poles and zeros
- Be able to sketch a Bode plot for a network function
- Know how to create a Bode plot
- Know how to analyze series and parallel resonant circuits
- Be introduced to the concepts of magnitude and frequency scaling
- Learn the characteristics of basic filters such low-pass, high-pass, band-pass, and band rejection
- Know how to analyze basic passive and active filters

**Music and Frequency** Time and frequency are two sides of the same coin, describing signals in two ways. We hear music, for example, as a time signal but the sampling rate for its digital recording, mastering, and manufacturing depends on signal bandwidth—a frequency description. We utilize both “languages”—time and frequency—to design recording and playback equipment. For iPods and MP3 players on laptops, the bandwidth has to be large enough to reproduce music in frequency ranges from bass to violin and from tuba to flute. For reference, concert flutes have frequencies from 262 Hz to over 2 kHz (middle C to three octaves above).

Your hearing must have a bandwidth that extends to frequencies at least as high as the highest frequency present in the musical signal. Voice or other signals can be modulated to a band of much higher frequencies, so high in some cases that they can be heard only by dogs or Superman. High-frequency hearing tends to deteriorate as you get older. This can be an advantage when you’re young. For example, you can download high-frequency ringtones that are inaudible to the average professor. On the other hand, some convenience stores discourage loitering by broadcasting high-frequency signals that most adults can’t hear, but that are very irritating to teenagers.

Variable frequency is as important in electric circuits as it is in describing musical signals. Frequency response plots of voltage transfer functions show magnitude in decibels and phase in degrees on linear scales versus radian frequency on a logarithmic scale. Filter design using variable frequency techniques results in series or parallel circuits that yield

desired frequency spectra—low-pass, high-pass, or band-pass—for recording, communication, and radar systems. Your cell phone, television, and iPod or MP3 player use these principles. The music beat delivered from high quality recordings and the clear tones of live performances both uplift the listener—provided the bandwidth is adequate.

## 12.1

### Variable Frequency-Response Analysis

In previous chapters we investigated the response of  $RLC$  networks to sinusoidal inputs. In particular, we considered 60-Hz sinusoidal inputs. In this chapter we allow the frequency of excitation to become a variable and evaluate network performance as a function of frequency. To begin, let us consider the effect of varying frequency on elements with which we are already quite familiar—the resistor, inductor, and capacitor. The frequency-domain impedance of the resistor shown in Fig. 12.1a is

$$\mathbf{Z}_R = R = R \angle 0^\circ$$

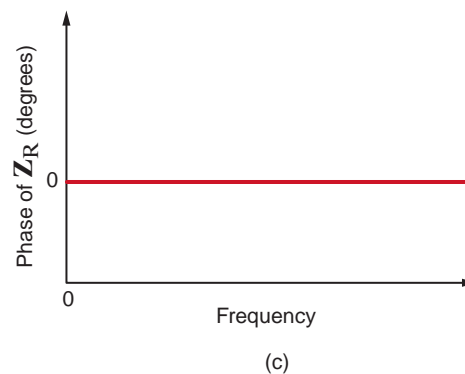
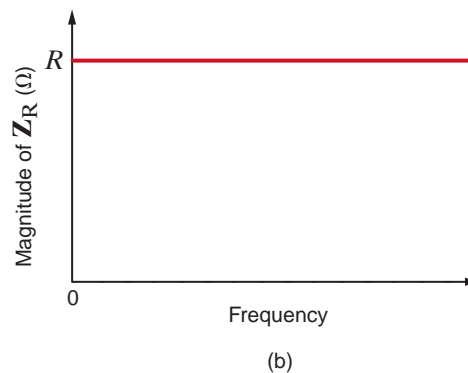
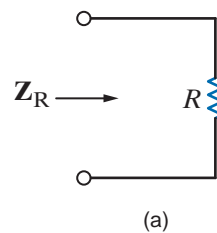
The magnitude and phase are constant and independent of frequency. Sketches of the magnitude and phase of  $\mathbf{Z}_R$  are shown in Figs. 12.1b and c. Obviously, this is a very simple situation.

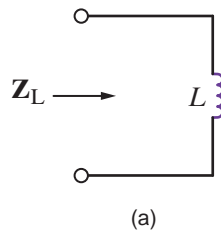
For the inductor in Fig. 12.2a, the frequency-domain impedance  $\mathbf{Z}_L$  is

$$\mathbf{Z}_L = j\omega L = \omega L \angle 90^\circ$$

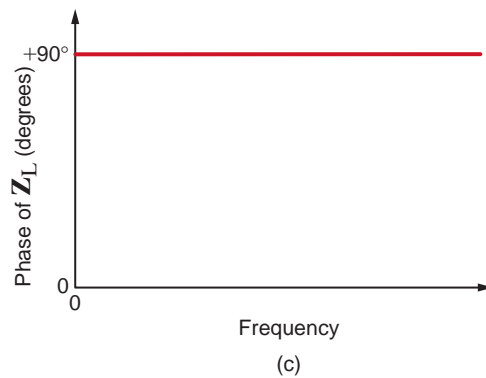
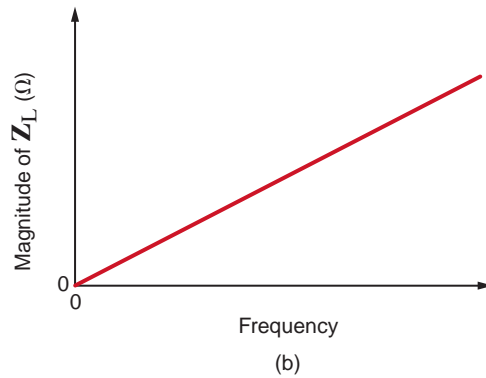
**Figure 12.1**

Frequency-independent impedance of a resistor.



**Figure 12.2**

Frequency-dependent impedance of an inductor.



The phase is constant at  $90^\circ$ , but the magnitude of  $\mathbf{Z}_L$  is directly proportional to frequency. Figs. 12.2b and c show sketches of the magnitude and phase of  $\mathbf{Z}_L$  versus frequency. Note that at low frequencies the inductor's impedance is quite small. In fact, at dc,  $\mathbf{Z}_L$  is zero, and the inductor appears as a short circuit. Conversely, as frequency increases, the impedance also increases.

Next consider the capacitor of Fig. 12.3a. The impedance is

$$\mathbf{Z}_C = \frac{1}{j\omega C} = \frac{1}{\omega C} \angle -90^\circ$$

Once again the phase of the impedance is constant, but now the magnitude is inversely proportional to frequency, as shown in Figs. 12.3b and c. Note that the impedance approaches infinity, or an open circuit, as  $\omega$  approaches zero and  $\mathbf{Z}_C$  approaches zero as  $\omega$  approaches infinity.

Now let us investigate a more complex circuit: the *RLC* series network in Fig. 12.4a. The equivalent impedance is

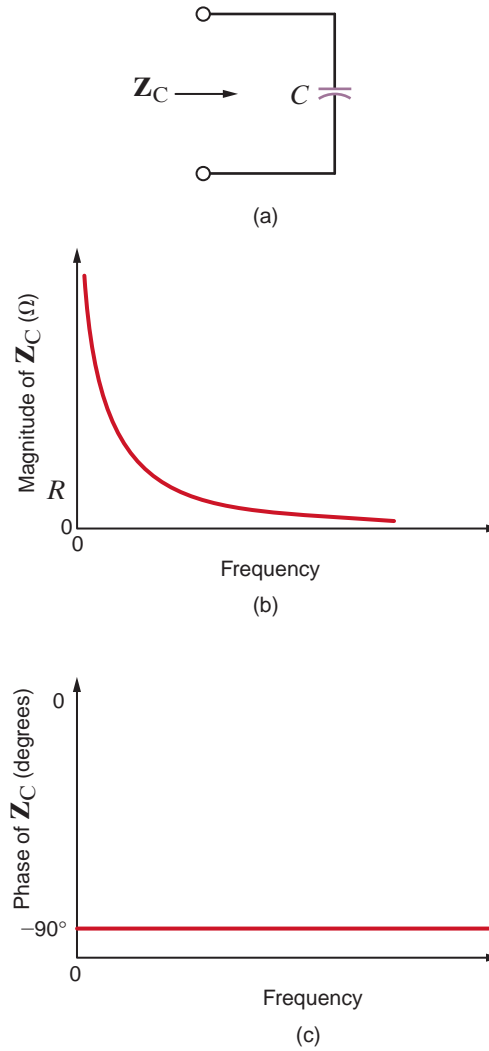
$$\mathbf{Z}_{\text{eq}} = R + j\omega L + \frac{1}{j\omega C}$$

or

$$\mathbf{Z}_{\text{eq}} = \frac{(j\omega)^2 LC + j\omega RC + 1}{j\omega C}$$

**Figure 12.3**

Frequency-dependent impedance of a capacitor.



Sketches of the magnitude and phase of this function are shown in Figs. 12.4b and c.

Note that at very low frequencies, the capacitor appears as an open circuit, and, therefore, the impedance is very large in this range. At high frequencies, the capacitor has very little effect and the impedance is dominated by the inductor, whose impedance keeps rising with frequency.

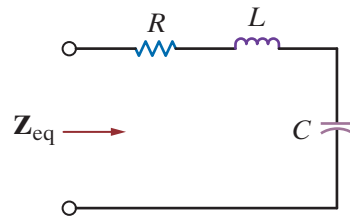
As the circuits become more complicated, the equations become more cumbersome. In an attempt to simplify them, let us make the substitution  $j\omega = s$ . (This substitution has a more important meaning, which we will describe in later chapters.) With this substitution, the expression for  $\mathbf{Z}_{\text{eq}}$  becomes

$$\mathbf{Z}_{\text{eq}} = \frac{s^2LC + sRC + 1}{sC}$$

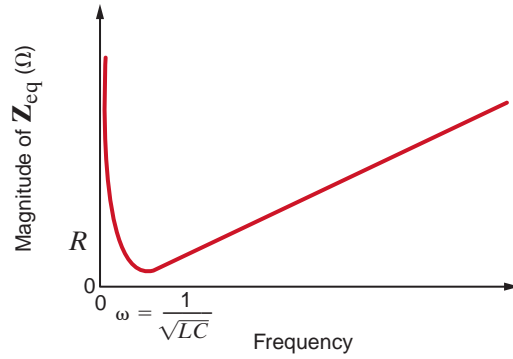
If we review the four circuits we investigated thus far, we will find that in every case the impedance is the ratio of two polynomials in  $s$  and is of the general form

$$\mathbf{Z}(s) = \frac{N(s)}{D(s)} = \frac{a_m s^m + a_{m-1} s^{m-1} + \cdots + a_1 s + a_0}{b_n s^n + b_{n-1} s^{n-1} + \cdots + b_1 s + b_0} \tag{12.1}$$

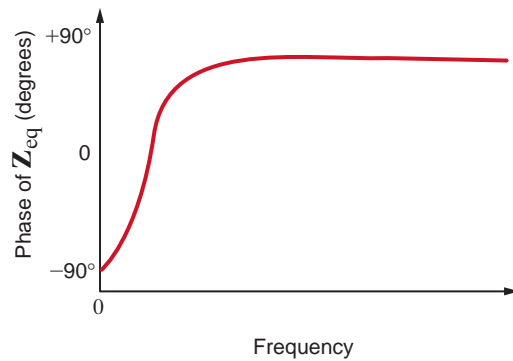
where  $N(s)$  and  $D(s)$  are polynomials of order  $m$  and  $n$ , respectively. An extremely important aspect of Eq. (12.1) is that it holds not only for impedances but also for all voltages, currents, admittances, and gains in the network. The only restriction is that the values of all circuit elements (resistors, capacitors, inductors, and dependent sources) must be real numbers.



(a)



(b)



(c)

Let us now demonstrate the manner in which the voltage across an element in a series  $RLC$  network varies with frequency.

Consider the network in Fig. 12.5a. We wish to determine the variation of the output voltage as a function of frequency over the range from 0 to 1 kHz.

Using voltage division, we can express the output as

$$\mathbf{V}_o = \left( \frac{R}{R + j\omega L + \frac{1}{j\omega C}} \right) \mathbf{V}_s$$

or, equivalently,

$$\mathbf{V}_o = \left( \frac{j\omega CR}{(j\omega)^2 LC + j\omega CR + 1} \right) \mathbf{V}_s$$

Using the element values, we find that the equation becomes

$$\mathbf{V}_o = \left( \frac{(j\omega)(37.95 \times 10^{-3})}{(j\omega)^2(2.53 \times 10^{-4}) + j\omega(37.95 \times 10^{-3}) + 1} \right) 10 \angle 0^\circ$$

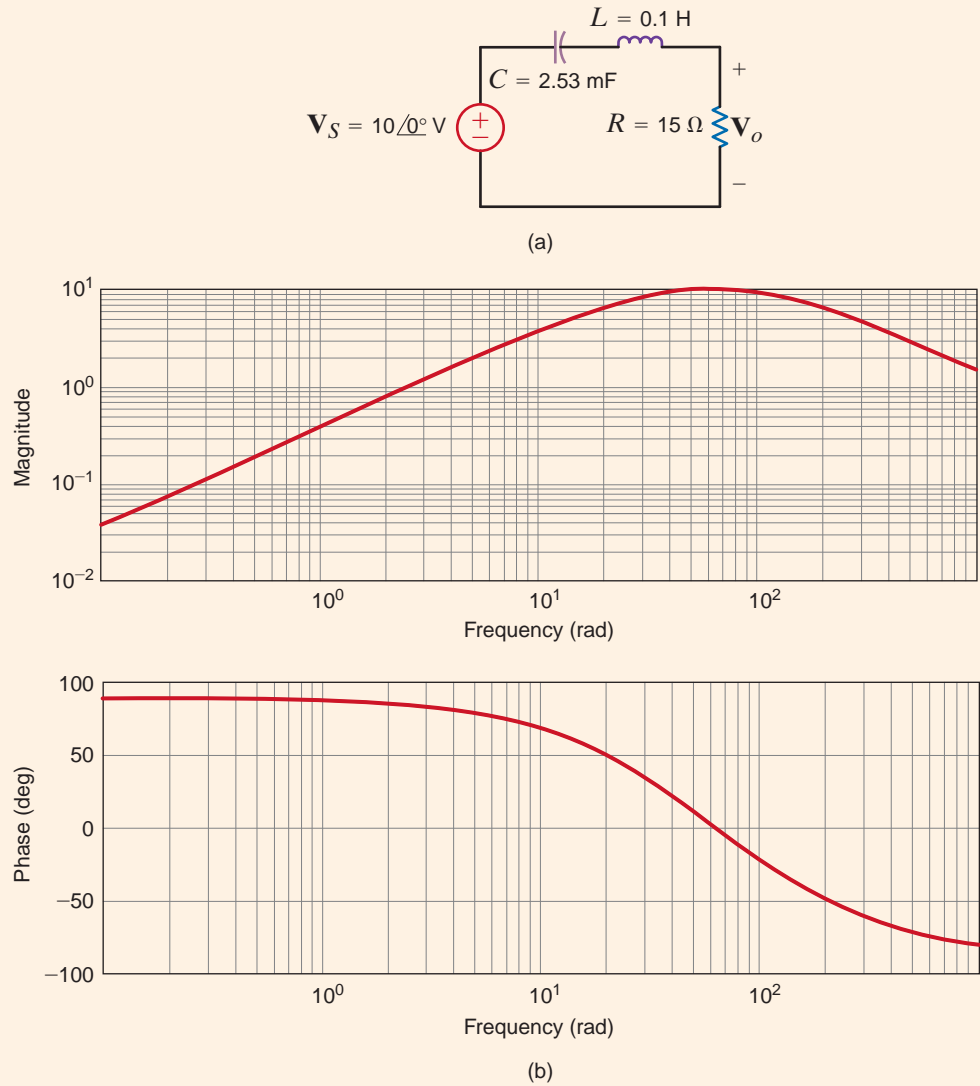
**Figure 12.4**

Frequency-dependent impedance of an  $RLC$  series network.

**EXAMPLE****12.1****SOLUTION**

**Figure 12.5**

(a) Network and (b) its frequency-response simulation.



The resultant magnitude and phase characteristics are semilog plots in which the frequency is displayed on the log axis. The plots for the function  $V_o$  are shown in Fig. 12.5b.

In subsequent sections we will illustrate that the use of a semilog plot is a very useful tool in deriving frequency-response information.

As an introductory application of variable frequency-response analysis and characterization, let us consider a stereo amplifier. In particular, we should consider first the frequency range over which the amplifier must perform and then exactly what kind of performance we desire. The frequency range of the amplifier must exceed that of the human ear, which is roughly 50 Hz to 15,000 Hz. Accordingly, typical stereo amplifiers are designed to operate in the frequency range from 50 Hz to 20,000 Hz. Furthermore, we want to preserve the fidelity of the signal as it passes through the amplifier. Thus, the output signal should be an exact duplicate of the input signal times a gain factor. This requires that the gain be independent of frequency over the specified frequency range of 50 Hz to 20,000 Hz. An ideal sketch of this requirement for a gain of 1000 is shown in Fig. 12.6, where the midband region is defined as

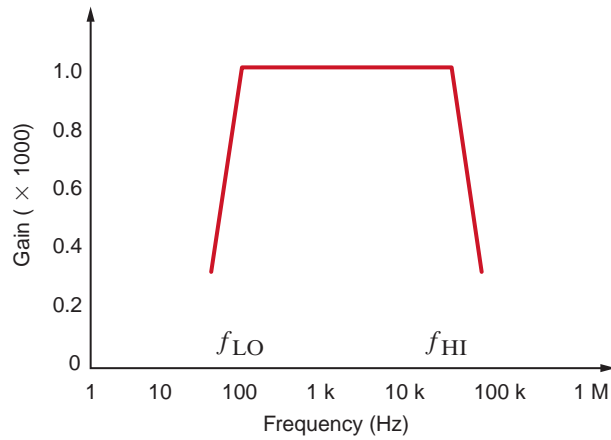


Figure 12.6

Amplifier frequency-response requirements.

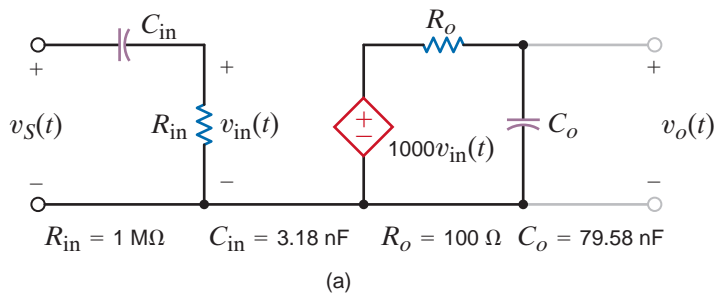
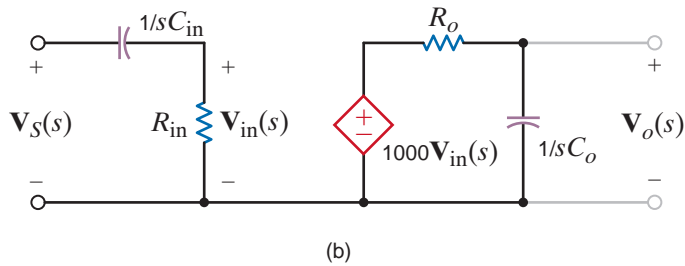


Figure 12.7

Amplifier equivalent network.



that portion of the plot where the gain is constant and is bounded by two points, which we will refer to as  $f_{LO}$  and  $f_{HI}$ . Notice once again that the frequency axis is a log axis and, thus, the frequency response is displayed on a semilog plot.

A model for the amplifier described graphically in Fig. 12.6 is shown in Fig. 12.7a, with the frequency-domain equivalent circuit in Fig. 12.7b.

If the input is a steady-state sinusoid, we can use frequency-domain analysis to find the gain

$$\mathbf{G}_v(j\omega) = \frac{\mathbf{V}_o(j\omega)}{\mathbf{V}_S(j\omega)}$$

which with the substitution  $s = j\omega$  can be expressed as

$$\mathbf{G}_v(s) = \frac{\mathbf{V}_o(s)}{\mathbf{V}_S(s)}$$

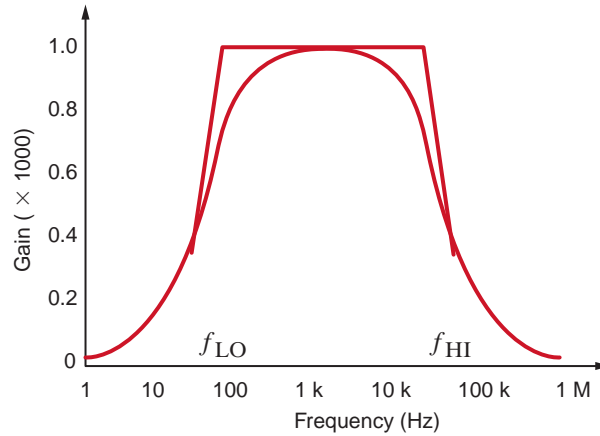
Using voltage division, we find that the gain is

$$\mathbf{G}_v(s) = \frac{\mathbf{V}_o(s)}{\mathbf{V}_S(s)} = \frac{\mathbf{V}_{in}(s)}{\mathbf{V}_S(s)} \frac{\mathbf{V}_o(s)}{\mathbf{V}_{in}(s)} = \left[ \frac{R_{in}}{R_{in} + 1/sC_{in}} \right] (1000) \left[ \frac{1/sC_o}{R_o + 1/sC_o} \right]$$

or

$$\mathbf{G}_v(s) = \left[ \frac{sC_{in}R_{in}}{1 + sC_{in}R_{in}} \right] (1000) \left[ \frac{1}{1 + sC_oR_o} \right]$$

**Figure 12.8**  
Exact and approximate  
amplifier gain versus  
frequency plots.



Using the element values in Fig. 12.7a,

$$\mathbf{G}_v(s) = \left[ \frac{s}{s + 100\pi} \right] (1000) \left[ \frac{40,000\pi}{s + 40,000\pi} \right]$$

where  $100\pi$  and  $40,000\pi$  are the radian equivalents of 50 Hz and 20,000 Hz, respectively. Since  $s = j\omega$ , the network function is indeed complex. An exact plot of  $\mathbf{G}_v(s)$  is shown in Fig. 12.8 superimposed over the sketch of Fig. 12.6. The exact plot exhibits smooth transitions at  $f_{LO}$  and  $f_{HI}$ ; otherwise the plots match fairly well.

Let us examine our expression for  $\mathbf{G}_v(s)$  more closely with respect to the plot in Fig. 12.8. Assume that  $f$  is well within the midband frequency range; that is,

$$f_{LO} \ll f \ll f_{HI}$$

or

$$100\pi \ll |s| \ll 40,000\pi$$

Under these conditions, the network function becomes

$$\mathbf{G}_v(s) \approx \left[ \frac{s}{s} \right] (1000) \left[ \frac{1}{1 + 0} \right]$$

or

$$\mathbf{G}_v(s) = 1000$$

Thus, well within midband, the gain is constant. However, if the frequency of excitation decreases toward  $f_{LO}$ , then  $|s|$  is comparable to  $100\pi$  and

$$\mathbf{G}_v(s) \approx \left[ \frac{s}{s + 100\pi} \right] (1000)$$

Since  $R_{in}C_{in} = 1/100\pi$ , we see that  $C_{in}$  causes the rolloff in gain at low frequencies. Similarly, when the frequency approaches  $f_{HI}$ , the gain rolloff is due to  $C_o$ .

Through this amplifier example, we have introduced the concept of frequency-dependent networks and have demonstrated that frequency-dependent network performance is caused by the reactive elements in a network.

**NETWORK FUNCTIONS** In the previous section, we introduced the term *voltage gain*,  $\mathbf{G}_v(s)$ . This term is actually only one of several network functions, designated generally as  $\mathbf{H}(s)$ , which define the ratio of response to input. Since the function describes a reaction due to an excitation at some other point in the circuit, network functions are also called *transfer functions*. Furthermore, transfer functions are not limited to voltage ratios. Since in electrical networks inputs and outputs can be either voltages or currents, there are four possible network functions, as listed in Table 12.1.

There are also *driving point functions*, which are impedances or admittances defined at a single pair of terminals. For example, the input impedance of a network is a driving point function.



**TABLE 12.1** Network transfer functions

INPUT	OUTPUT	TRANSFER FUNCTION	SYMBOL
Voltage	Voltage	Voltage gain	$\mathbf{G}_v(s)$
Current	Voltage	Transimpedance	$\mathbf{Z}(s)$
Current	Current	Current gain	$\mathbf{G}_i(s)$
Voltage	Current	Transadmittance	$\mathbf{Y}(s)$

We wish to determine the transfer admittance  $[\mathbf{I}_2(s)/\mathbf{V}_1(s)]$  and the voltage gain of the network shown in Fig. 12.9.

The mesh equations for the network are

$$\begin{aligned}(R_1 + sL)\mathbf{I}_1(s) - sL\mathbf{I}_2(s) &= \mathbf{V}_1(s) \\ -sL\mathbf{I}_1(s) + \left(R_2 + sL + \frac{1}{sC}\right)\mathbf{I}_2(s) &= 0 \\ \mathbf{V}_2(s) &= \mathbf{I}_2(s)R_2\end{aligned}$$

Solving the equations for  $\mathbf{I}_2(s)$  yields

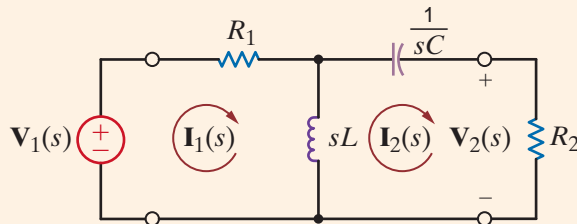
$$\mathbf{I}_2(s) = \frac{sL\mathbf{V}_1(s)}{(R_1 + sL)(R_2 + sL + 1/sC) - s^2L^2}$$

Therefore, the transfer admittance  $[\mathbf{I}_2(s)/\mathbf{V}_1(s)]$  is

$$\mathbf{Y}_T(s) = \frac{\mathbf{I}_2(s)}{\mathbf{V}_1(s)} = \frac{LCs^2}{(R_1 + R_2)LCs^2 + (L + R_1R_2C)s + R_1}$$

and the voltage gain is

$$\mathbf{G}_v(s) = \frac{\mathbf{V}_2(s)}{\mathbf{V}_1(s)} = \frac{LCR_2s^2}{(R_1 + R_2)LCs^2 + (L + R_1R_2C)s + R_1}$$



## EXAMPLE 12.2

### SOLUTION

**Figure 12.9**  
Circuit employed in  
Example 12.2.

**POLES AND ZEROS** As we have indicated, the network function can be expressed as the ratio of the two polynomials in  $s$ . In addition, we note that since the values of our circuit elements, or controlled sources, are real numbers, the coefficients of the two polynomials will be real. Therefore, we will express a network function in the form

$$\mathbf{H}(s) = \frac{N(s)}{D(s)} = \frac{a_m s^m + a_{m-1} s^{m-1} + \cdots + a_1 s + a_0}{b_n s^n + b_{n-1} s^{n-1} + \cdots + b_1 s + b_0} \quad 12.2$$

where  $N(s)$  is the numerator polynomial of degree  $m$  and  $D(s)$  is the denominator polynomial of degree  $n$ . Equation (12.2) can also be written in the form

$$\mathbf{H}(s) = \frac{K_0(s - z_1)(s - z_2)\cdots(s - z_m)}{(s - p_1)(s - p_2)\cdots(s - p_n)} \quad 12.3$$

where  $K_0$  is a constant,  $z_1, \dots, z_m$  are the roots of  $N(s)$ , and  $p_1, \dots, p_n$  are the roots of  $D(s)$ . Note that if  $s = z_1$ , or  $z_2, \dots, z_m$ , then  $\mathbf{H}(s)$  becomes zero and hence  $z_1, \dots, z_m$  are called zeros of the transfer function. Similarly, if  $s = p_1$ , or  $p_2, \dots, p_n$ , then  $\mathbf{H}(s)$  becomes infinite and, therefore,  $p_1, \dots, p_n$  are called poles of the function. The zeros or poles may actually be complex. However, if they are complex, they must occur in conjugate pairs since the coefficients of the polynomial are real. The representation of the network function specified in Eq. (12.3) is extremely important and is generally employed to represent any linear time-invariant system. The importance of this form lies in the fact that the dynamic properties of a system can be gleaned from an examination of the system poles.

## Learning Assessments

**E12.1** Find the driving-point impedance at  $\mathbf{V}_s(s)$  in the amplifier shown in Fig. 12.7b.

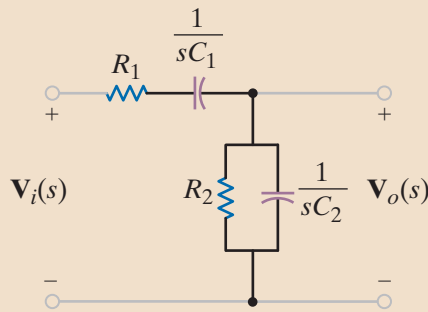
**ANSWER:**

$$\begin{aligned} \mathbf{Z}(s) &= R_{\text{in}} + \frac{1}{sC_{\text{in}}} \\ &= \left[ 1 + \left( \frac{100\pi}{s} \right) \right] \text{M}\Omega. \end{aligned}$$

**E12.2** Find the pole and zero locations in hertz and the value of  $K_0$  for the amplifier network in Fig. 12.7.

**ANSWER:**  $z_1 = 0$  Hz (dc);  
 $p_1 = -50$  Hz;  
 $p_2 = -20,000$  Hz;  
 $K_0 = (4 \times 10^7) \pi$ .

**E12.3** Determine the voltage transfer function  $\mathbf{V}_o(s)/\mathbf{V}_i(s)$  as a function of  $s$  in Fig. PE12.3.



**ANSWER:**

$$\frac{s}{R_1 C_2 \left[ s^2 + \frac{C_1 R_2 + C_2 R_2 + C_1 R_1}{R_1 R_2 C_1 C_2} s + \frac{1}{R_1 R_2 C_1 C_2} \right]}$$

Figure E12.3

## 12.2

### Sinusoidal Frequency Analysis

Although in specific cases a network operates at only one frequency (e.g., a power system network), in general we are interested in the behavior of a network as a function of frequency. In a sinusoidal steady-state analysis, the network function can be expressed as

$$\mathbf{H}(j\omega) = M(\omega)e^{j\phi(\omega)} \tag{12.4}$$

where  $M(\omega) = |\mathbf{H}(j\omega)|$  and  $\phi(\omega)$  is the phase. A plot of these two functions, which are commonly called the *magnitude* and *phase characteristics*, displays the manner in which the response varies with the input frequency  $\omega$ . We will now illustrate the manner in which to perform a frequency-domain analysis by simply evaluating the function at various frequencies within the range of interest.

**FREQUENCY RESPONSE USING A BODE PLOT** If the network characteristics are plotted on a semilog scale (that is, a linear scale for the ordinate and a logarithmic scale for the abscissa), they are known as *Bode plots* (named after Hendrik W. Bode). This graph is a

powerful tool in both the analysis and design of frequency-dependent systems and networks such as filters, tuners, and amplifiers. In using the graph, we plot  $20 \log_{10} M(\omega)$  versus  $\log_{10}(\omega)$  instead of  $M(\omega)$  versus  $\omega$ . The advantage of this technique is that rather than plotting the characteristic point by point, we can employ straight-line approximations to obtain the characteristic very efficiently. The ordinate for the magnitude plot is the decibel (dB). This unit was originally employed to measure the ratio of powers; that is,

$$\text{number of dB} = 10 \log_{10} \frac{P_2}{P_1} \quad 12.5$$

If the powers are absorbed by two equal resistors, then

$$\begin{aligned} \text{number of dB} &= 10 \log_{10} \frac{|\mathbf{V}_2|^2/R}{|\mathbf{V}_1|^2/R} = 10 \log_{10} \frac{|\mathbf{I}_2|^2 R}{|\mathbf{I}_1|^2 R} \\ &= 20 \log_{10} \frac{|\mathbf{V}_2|}{|\mathbf{V}_1|} = 20 \log_{10} \frac{|\mathbf{I}_2|}{|\mathbf{I}_1|} \end{aligned} \quad 12.6$$

The term dB has become so popular that it is now used for voltage and current ratios, as illustrated in Eq. (12.6), without regard to the impedance employed in each case.

In the sinusoidal steady-state case,  $\mathbf{H}(j\omega)$  in Eq. (12.3) can be expressed in general as

$$\mathbf{H}(j\omega) = \frac{K_0(j\omega)^{\pm N}(1 + j\omega\tau_1)[1 + 2\zeta_3(j\omega\tau_3) + (j\omega\tau_3)^2] \cdots}{(1 + j\omega\tau_a)[1 + 2\zeta_b(j\omega\tau_b) + (j\omega\tau_b)^2] \cdots} \quad 12.7$$

Note that this equation contains the following typical factors:

1. A frequency-independent factor  $K_0 > 0$
2. Poles or zeros at the origin of the form  $j\omega$ ; that is,  $(j\omega)^{+N}$  for zeros and  $(j\omega)^{-N}$  for poles
3. Poles or zeros of the form  $(1 + j\omega\tau)$
4. Quadratic poles or zeros of the form  $1 + 2\zeta(j\omega\tau) + (j\omega\tau)^2$

Taking the logarithm of the magnitude of the function  $\mathbf{H}(j\omega)$  in Eq. (12.7) yields

$$\begin{aligned} 20 \log_{10} |\mathbf{H}(j\omega)| &= 20 \log_{10} K_0 \pm 20N \log_{10} |j\omega| \\ &\quad + 20 \log_{10} |1 + j\omega\tau_1| \\ &\quad + 20 \log_{10} |1 + 2\zeta_3(j\omega\tau_3) + (j\omega\tau_3)^2| \\ &\quad + \cdots - 20 \log_{10} |1 + j\omega\tau_a| \\ &\quad - 20 \log_{10} |1 + 2\zeta_b(j\omega\tau_b) + (j\omega\tau_b)^2| \cdots \end{aligned} \quad 12.8$$

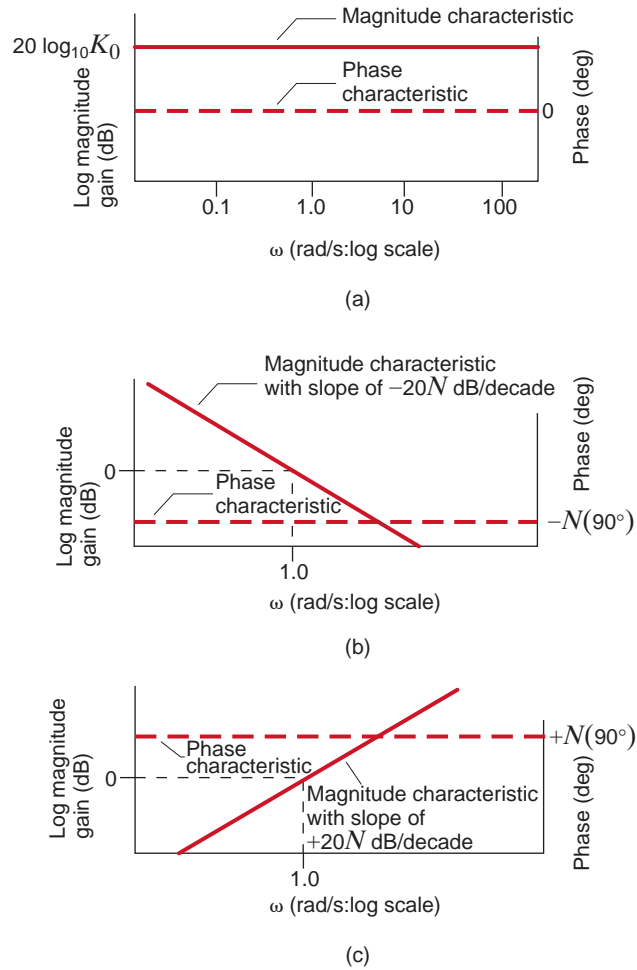
Note that we have used the fact that the log of the product of two or more terms is equal to the sum of the logs of the individual terms, the log of the quotient of two terms is equal to the difference of the logs of the individual terms, and  $\log_{10} A^n = n \log_{10} A$ .

The phase angle for  $\mathbf{H}(j\omega)$  is

$$\begin{aligned} \angle \mathbf{H}(j\omega) &= 0 \pm N(90^\circ) + \tan^{-1} \omega\tau_1 + \tan^{-1} \left( \frac{2\zeta_3 \omega\tau_3}{1 - \omega^2\tau_3^2} \right) \\ &\quad + \cdots - \tan^{-1} \omega\tau_a - \tan^{-1} \left( \frac{2\zeta_b \omega\tau_b}{1 - \omega^2\tau_b^2} \right) \cdots \end{aligned} \quad 12.9$$

**Figure 12.10**

Magnitude and phase characteristics for a constant term and poles and zeros at the origin.



As Eqs. (12.8) and (12.9) indicate, we will simply plot each factor individually on a common graph and then sum them algebraically to obtain the total characteristic. Let us examine some of the individual terms and illustrate an efficient manner in which to plot them on the Bode diagram.

**Constant Term** The term  $20 \log_{10} K_0$  represents a constant magnitude with zero phase shift, as shown in Fig. 12.10a.

**Poles or Zeros at the Origin** Poles or zeros at the origin are of the form  $(j\omega)^{\pm N}$ , where  $+$  is used for a zero and  $-$  is used for a pole. The magnitude of this function is  $\pm 20N \log_{10} \omega$ , which is a straight line on semilog paper with a slope of  $\pm 20N$  dB/decade; that is, the value will change by  $20N$  each time the frequency is multiplied by 10, and the phase of this function is a constant  $\pm N(90^\circ)$ . The magnitude and phase characteristics for poles and zeros at the origin are shown in Figs. 12.10b and c, respectively.

**Simple Pole or Zero** Linear approximations can be employed when a simple pole or zero of the form  $(1 + j\omega\tau)$  is present in the network function. For  $\omega\tau \ll 1$ ,  $(1 + j\omega\tau) \approx 1$ , and therefore,  $20 \log_{10}|(1 + j\omega\tau)| = 20 \log_{10} 1 = 0$  dB. Similarly, if  $\omega\tau \gg 1$ , then  $(1 + j\omega\tau) \approx j\omega\tau$ , and hence  $20 \log_{10}|(1 + j\omega\tau)| \approx 20 \log_{10} \omega\tau$ . Therefore, for  $\omega\tau \ll 1$  the response is 0 dB and for  $\omega\tau \gg 1$  the response has a slope that is the same as that of a simple pole or zero at the origin. The intersection of these two asymptotes, one for  $\omega\tau \ll 1$  and one for  $\omega\tau \gg 1$ , is the point where  $\omega\tau = 1$  or  $\omega = 1/\tau$ , which is called the *break frequency*. At this break frequency, where  $\omega = 1/\tau$ ,  $20 \log_{10}|(1 + j1)| = 20 \log_{10}(2)^{1/2} = 3$  dB. Therefore, the actual curve deviates from the asymptotes by 3 dB at the break frequency. It can be shown that at

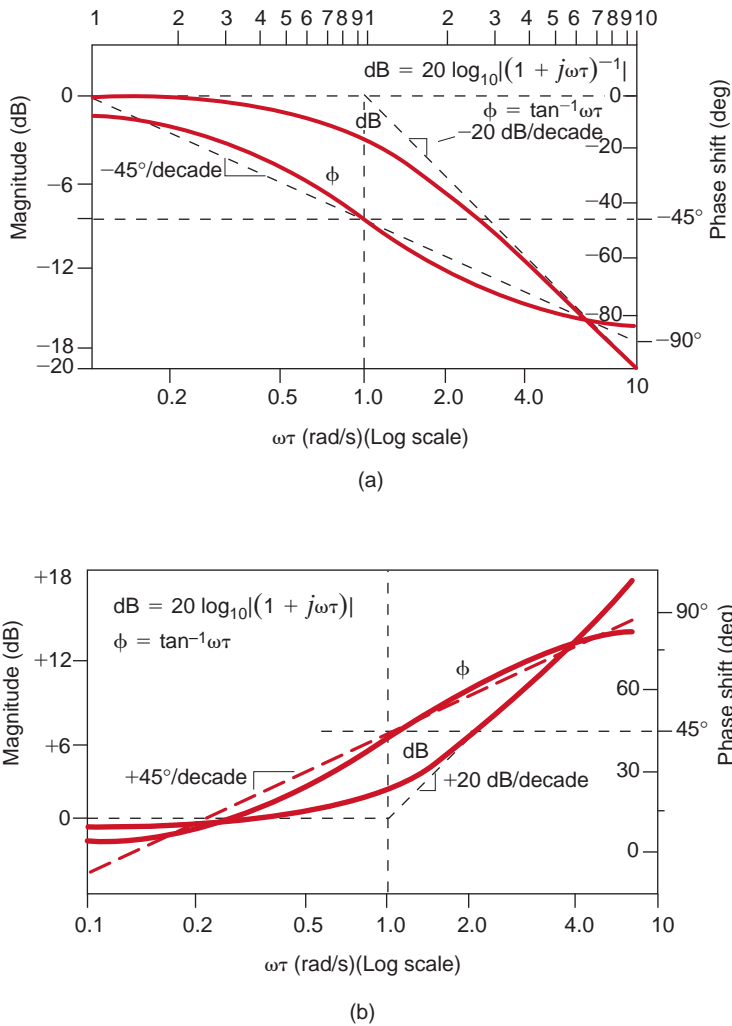


Figure 12.11

Magnitude and phase plot (a) for a simple pole, and (b) for a simple zero.

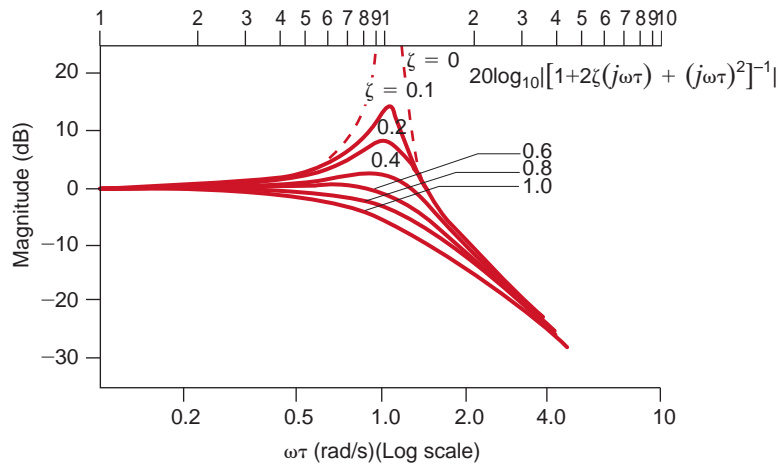
one-half and twice the break frequency, the deviations are 1 dB. The phase angle associated with a simple pole or zero is  $\phi = \tan^{-1} \omega\tau$ , which is a simple arctangent curve. Therefore, the phase shift is  $45^\circ$  at the break frequency and  $26.6^\circ$  and  $63.4^\circ$  at one-half and twice the break frequency, respectively. The actual magnitude curve for a pole of this form is shown in Fig. 12.11a. For a zero the magnitude curve and the asymptote for  $\omega\tau \gg 1$  have a positive slope, and the phase curve extends from  $0^\circ$  to  $+90^\circ$ , as shown in Fig. 12.11b. If multiple poles or zeros of the form  $(1 + j\omega\tau)^N$  are present, then the slope of the high-frequency asymptote is multiplied by  $N$ , the deviation between the actual curve and the asymptote at the break frequency is  $3N$  dB, and the phase curve extends from 0 to  $N(90^\circ)$  and is  $N(45^\circ)$  at the break frequency.

**Quadratic Poles or Zeros** Quadratic poles or zeros are of the form  $1 + 2\zeta(j\omega\tau) + (j\omega\tau)^2$ . This term is a function not only of  $\omega$  but also of the dimensionless term  $\zeta$ , which is called the *damping ratio*. If  $\zeta > 1$  or  $\zeta = 1$ , the roots are real and unequal or real and equal, respectively, and these two cases have already been addressed. If  $\zeta < 1$ , the roots are complex conjugates, and it is this case that we will examine now. Following the preceding argument for a simple pole or zero, the log magnitude of the quadratic factor is 0 dB for  $\omega\tau \ll 1$ . For  $\omega\tau \gg 1$ ,

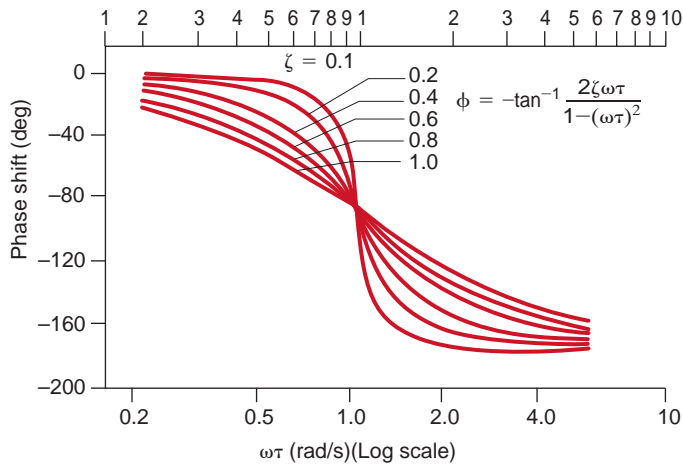
$$20 \log_{10} |1 - (\omega\tau)^2 + 2j\zeta(\omega\tau)| \approx 20 \log_{10} |(\omega\tau)^2| = 40 \log_{10} |\omega\tau|$$

and therefore, for  $\omega\tau \gg 1$ , the slope of the log magnitude curve is  $+40$  dB/decade for a quadratic zero and  $-40$  dB/decade for a quadratic pole. Between the two extremes,  $\omega\tau \ll 1$

**Figure 12.12**  
Magnitude and phase characteristics for quadratic poles.



(a)



(b)

and  $\omega\tau \gg 1$ , the behavior of the function is dependent on the damping ratio  $\zeta$ . Fig. 12.12a illustrates the manner in which the log magnitude curve for a quadratic *pole* changes as a function of the damping ratio. The phase shift for the quadratic factor is  $\tan^{-1} 2\zeta\omega\tau/[1 - (\omega\tau)^2]$ . The phase plot for quadratic *poles* is shown in Fig. 12.12b. Note that in this case the phase changes from  $0^\circ$  at frequencies for which  $\omega\tau \ll 1$  to  $-180^\circ$  at frequencies for which  $\omega\tau \gg 1$ . For quadratic zeros the magnitude and phase curves are inverted; that is, the log magnitude curve has a slope of  $+40$  db/decade for  $\omega\tau \gg 1$ , and the phase curve is  $0^\circ$  for  $\omega\tau \ll 1$  and  $+180^\circ$  for  $\omega\tau \gg 1$ .

**EXAMPLE**  
**12.3**

We want to generate the magnitude and phase plots for the transfer function

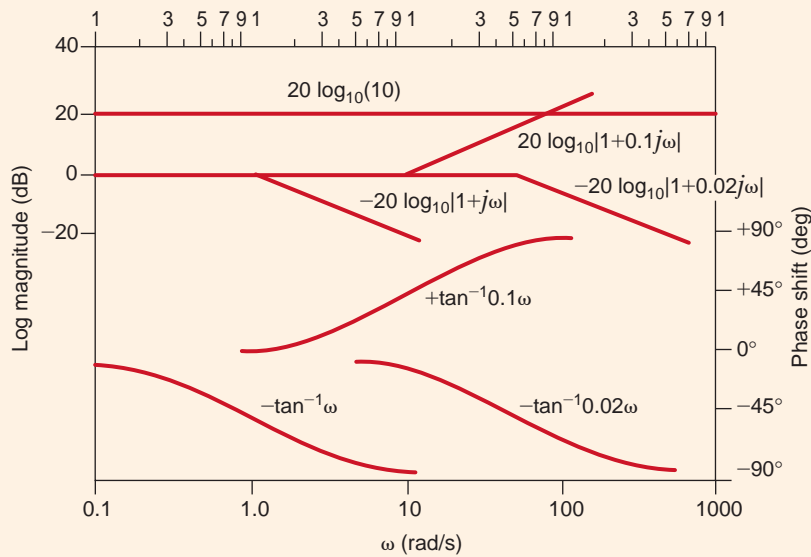
$$G_v(j\omega) = \frac{10(0.1j\omega + 1)}{(j\omega + 1)(0.02j\omega + 1)}$$

**SOLUTION**

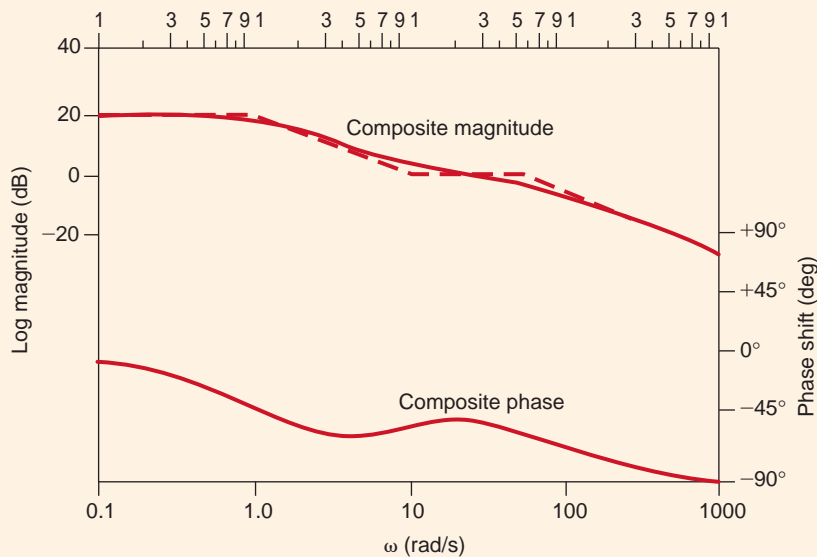
Note that this function is in standard form, since every term is of the form  $(j\omega\tau + 1)$ . To determine the composite magnitude and phase characteristics, we will plot the individual asymptotic terms and then add them as specified in Eqs. (12.8) and (12.9). Let us consider the magnitude plot first. Since  $K_0 = 10$ ,  $20 \log_{10} 10 = 20$  dB, which is a constant independent of

frequency, as shown in Fig. 12.13a. The zero of the transfer function contributes a term of the form  $+20 \log_{10}|1 + 0.1j\omega|$ , which is 0 dB for  $0.1\omega \ll 1$ , has a slope of +20 dB/decade for  $0.1\omega \gg 1$ , and has a break frequency at  $\omega = 10$  rad/s. The poles have break frequencies at  $\omega = 1$  and  $\omega = 50$  rad/s. The pole with break frequency at  $\omega = 1$  rad/s contributes a term of the form  $-20 \log_{10}|1 + j\omega|$ , which is 0 dB for  $\omega \ll 1$  and has a slope of  $-20$  dB/decade for  $\omega \gg 1$ . A similar argument can be made for the pole that has a break frequency at  $\omega = 50$  rad/s. These factors are all plotted individually in Fig. 12.13a.

Consider now the individual phase curves. The term  $K_0$  is not a function of  $\omega$  and does not contribute to the phase of the transfer function. The phase curve for the zero is  $+\tan^{-1}0.1\omega$ , which is an arctangent curve that extends from  $0^\circ$  for  $0.1\omega \ll 1$  to  $+90^\circ$  for  $0.1\omega \gg 1$  and has a phase of  $+45^\circ$  at the break frequency. The phase curves for the two poles are  $-\tan^{-1}\omega$  and  $-\tan^{-1}0.02\omega$ . The term  $-\tan^{-1}\omega$  is  $0^\circ$  for  $\omega \ll 1$ ,  $-90^\circ$  for  $\omega \gg 1$ , and  $-45^\circ$  at the break frequency  $\omega = 1$  rad/s. The phase curve for the remaining pole is plotted in a similar fashion. All the individual phase curves are shown in Fig. 12.13a.



(a)



(b)

**Figure 12.13**

(a) Magnitude and phase components for the poles and zeros of the transfer function in Example 12.3; (b) Bode plot for the transfer function in Example 12.3.

As specified in Eqs. (12.8) and (12.9), the composite magnitude and phase of the transfer function are obtained simply by adding the individual terms. The composite curves are plotted in Fig. 12.13b. Note that the actual magnitude curve (solid line) differs from the straight-line approximation (dashed line) by 3 dB at the break frequencies and 1 dB at one-half and twice the break frequencies.

**EXAMPLE 12.4**

Let us draw the Bode plot for the following transfer function:

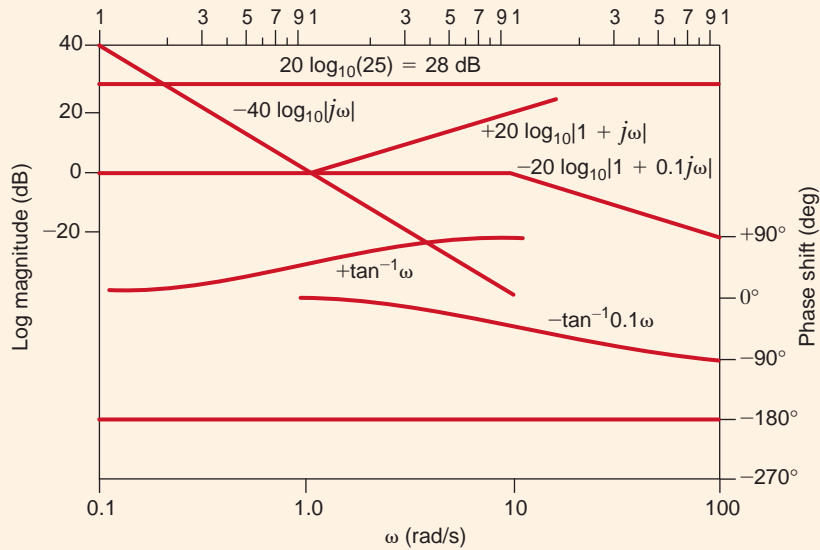
$$G_v(j\omega) = \frac{25(j\omega + 1)}{(j\omega)^2(0.1j\omega + 1)}$$

**SOLUTION**

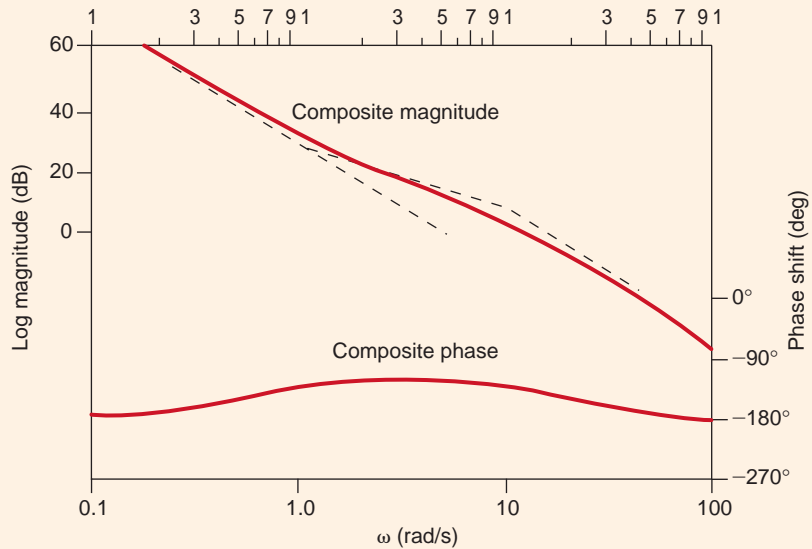
Once again all the individual terms for both magnitude and phase are plotted in Fig. 12.14a. The straight line with a slope of  $-40$  dB/decade is generated by the double pole at the

**Figure 12.14**

(a) Magnitude and phase components for the poles and zeros of the transfer function in Example 12.4;  
 (b) Bode plot for the transfer function in Example 12.4.



(a)



(b)



origin. This line is a plot of  $-40 \log_{10} \omega$  versus  $\omega$  and therefore passes through 0 dB at  $\omega = 1$  rad/s. The phase for the double pole is a constant  $-180^\circ$  for all frequencies. The remainder of the terms are plotted as illustrated in Example 12.3.

The composite plots are shown in Fig. 12.14b. Once again they are obtained simply by adding the individual terms in Fig. 12.14a. Note that for frequencies for which  $\omega \ll 1$ , the slope of the magnitude curve is  $-40$  dB/decade. At  $\omega = 1$  rad/s, which is the break frequency of the zero, the magnitude curve changes slope to  $-20$  dB/decade. At  $\omega = 10$  rad/s, which is the break frequency of the pole, the slope of the magnitude curve changes back to  $-40$  dB/decade.

The composite phase curve starts at  $-180^\circ$  due to the double pole at the origin. Since the first break frequency encountered is a zero, the phase curve shifts toward  $-90^\circ$ . However, before the composite phase reaches  $-90^\circ$ , the pole with break frequency  $\omega = 10$  rad/s begins to shift the composite curve back toward  $-180^\circ$ .

Example 12.4 illustrates the manner in which to plot directly terms of the form  $K_0/(j\omega)^N$ . For terms of this form, the initial slope of  $-20N$  dB/decade will intersect the 0-dB axis at a frequency of  $(K_0)^{1/N}$  rad/s; that is,  $-20 \log_{10} |K_0/(j\omega)^N| = 0$  dB implies that  $K_0/(j\omega)^N = 1$ , and therefore,  $\omega = (K_0)^{1/N}$  rad/s. Note that the projected slope of the magnitude curve in Example 12.4 intersects the 0-dB axis at  $\omega = (25)^{1/2} = 5$  rad/s.

Similarly, it can be shown that for terms of the form  $K_0(j\omega)^N$ , the initial slope of  $+20N$  dB/decade will intersect the 0-dB axis at a frequency of  $\omega = (1/K_0)^{1/N}$  rad/s; that is,  $+20 \log_{10} |K_0/(j\omega)^N| = 0$  dB implies that  $K_0/(j\omega)^N = 1$ , and therefore  $\omega = (1/K_0)^{1/N}$  rad/s.

By applying the concepts we have just demonstrated, we can normally plot the log magnitude characteristic of a transfer function directly in one step.

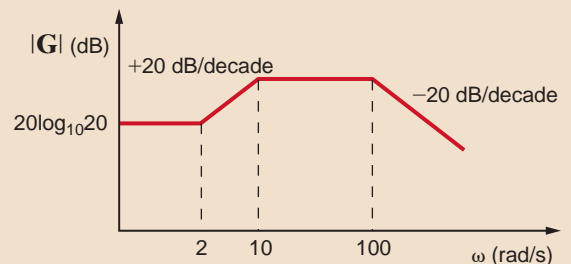
## Learning Assessments

**E12.4** Sketch the magnitude characteristic of the Bode plot, labeling all critical slopes and points for the function

$$\mathbf{G}(j\omega) = \frac{10^4(j\omega + 2)}{(j\omega + 10)(j\omega + 100)}$$

Figure E12.4

**ANSWER:**

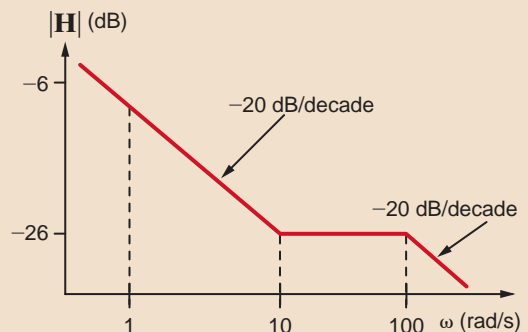


**E12.5** Sketch the magnitude characteristic of the Bode plot for the transfer function:

$$\mathbf{H}(j\omega) = \frac{5(j\omega + 10)}{j\omega(j\omega + 100)}$$

Figure E12.5

**ANSWER:**



**E12.6** Sketch the magnitude characteristic of the Bode plot, labeling all critical slopes and points for the function

$$G(j\omega) = \frac{100(0.02j\omega + 1)}{(j\omega)^2}$$

**ANSWER:**

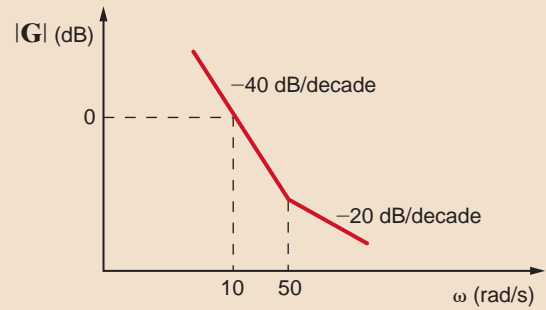


Figure E12.6

**E12.7** Sketch the magnitude characteristic of the Bode plot, labeling all critical slopes and points for the function

$$G(j\omega) = \frac{10j\omega}{(j\omega + 1)(j\omega + 10)}$$

**ANSWER:**

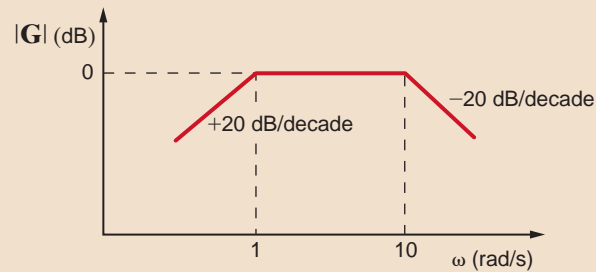


Figure E12.7

### EXAMPLE 12.5

We wish to generate the Bode plot for the following transfer function:

$$G_v(j\omega) = \frac{25j\omega}{(j\omega + 0.5)[(j\omega)^2 + 4j\omega + 100]}$$

**SOLUTION** Expressing this function in standard form, we obtain

$$G_v(j\omega) = \frac{0.5j\omega}{(2j\omega + 1)[(j\omega/10)^2 + j\omega/25 + 1]}$$

The Bode plot is shown in Fig. 12.15. The initial low-frequency slope due to the zero at the origin is +20 dB/decade, and this slope intersects the 0-dB line at  $\omega = 1/K_0 = 2$  rad/s. At  $\omega = 0.5$  rad/s the slope changes from +20 dB/decade to 0 dB/decade due to the presence of the pole with a break frequency at  $\omega = 0.5$  rad/s. The quadratic term has a center frequency of  $\omega = 10$  rad/s (i.e.,  $\tau = 1/10$ ). Since

$$2\zeta\tau = \frac{1}{25}$$

and

$$\tau = 0.1$$

then

$$\zeta = 0.2$$

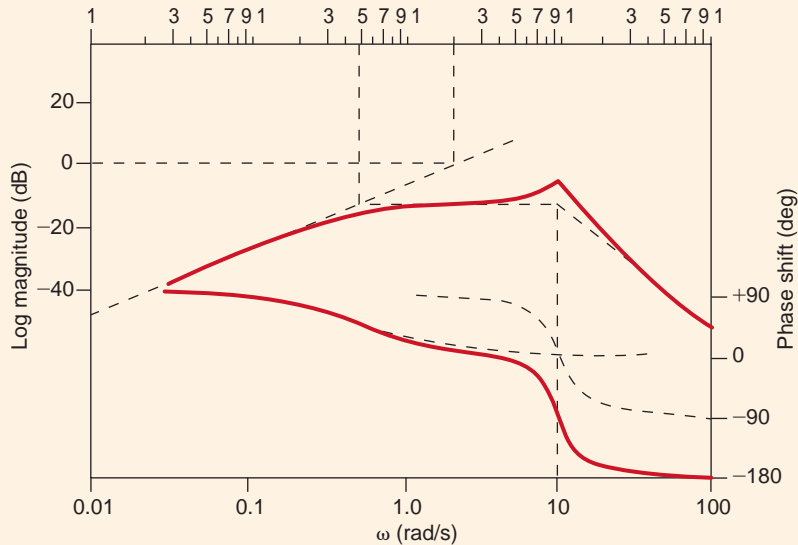


Figure 12.15

Bode plot for the transfer function in Example 12.5.

Plotting the curve in Fig. 12.12a with a damping ratio of  $\zeta = 0.2$  at the center frequency  $\omega = 10$  rad/s completes the composite magnitude curve for the transfer function.

The initial low-frequency phase curve is  $+90^\circ$ , due to the zero at the origin. This curve and the phase curve for the simple pole and the phase curve for the quadratic term, as defined in Fig. 12.12b, are combined to yield the composite phase curve.

## Learning Assessment

**E12.8** Given the following function  $\mathbf{G}(j\omega)$ , sketch the magnitude characteristic of the Bode plot, labeling all critical slopes and points:

$$\mathbf{G}(j\omega) = \frac{0.2(j\omega + 1)}{j\omega[(j\omega/12)^2 + j\omega/36 + 1]}$$

**ANSWER:**

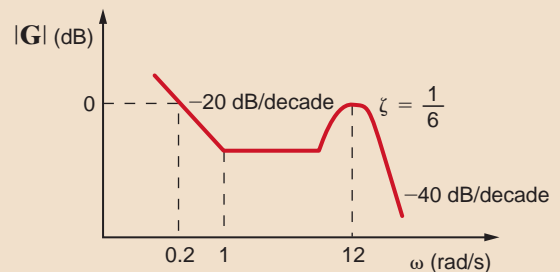


Figure E12.8

**DERIVING THE TRANSFER FUNCTION FROM THE BODE PLOT** The following example will serve to demonstrate the derivation process.

Given the asymptotic magnitude characteristic shown in Fig. 12.16, we wish to determine the transfer function  $\mathbf{G}_v(j\omega)$ .

Since the initial slope is 0 dB/decade, and the level of the characteristic is 20 dB, the factor  $K_0$  can be obtained from the expression

**EXAMPLE**  
**SOLUTION** **12.6**

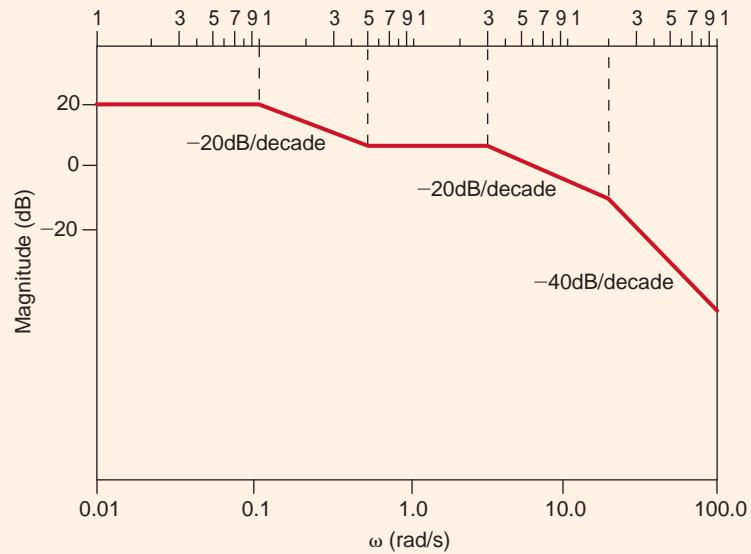
and hence

$$20 \text{ dB} = 20 \log_{10} K_0$$

$$K_0 = 10$$

**Figure 12.16**

Straight-line magnitude plot employed in Example 12.6.



The  $-20\text{-dB/decade}$  slope starting at  $\omega = 0.1 \text{ rad/s}$  indicates that the first pole has a break frequency at  $\omega = 0.1 \text{ rad/s}$ , and therefore one of the factors in the denominator is  $(10j\omega + 1)$ . The slope changes by  $+20 \text{ dB/decade}$  at  $\omega = 0.5 \text{ rad/s}$ , indicating that there is a zero present with a break frequency at  $\omega = 0.5 \text{ rad/s}$ , and therefore the numerator has a factor of  $(2j\omega + 1)$ . Two additional poles are present with break frequencies at  $\omega = 2 \text{ rad/s}$  and  $\omega = 20 \text{ rad/s}$ . Therefore, the composite transfer function is

$$G_v(j\omega) = \frac{10(2j\omega + 1)}{(10j\omega + 1)(0.5j\omega + 1)(0.05j\omega + 1)}$$

Note carefully the ramifications of this example with regard to network design.

## Learning Assessments

**E12.9** Determine the transfer function  $G(j\omega)$  if the straight-line magnitude characteristic approximation for this function is as shown in Fig. E12.9.



**Figure E12.9**

**ANSWER:**

$$G(j\omega) = \frac{5\left(\frac{j\omega}{5} + 1\right)\left(\frac{j\omega}{50} + 1\right)}{j\omega\left(\frac{j\omega}{20} + 1\right)\left(\frac{j\omega}{100} + 1\right)}$$

**E12.10** Find  $\mathbf{H}(j\omega)$  if its magnitude characteristic is shown in Fig. E12.10.

**ANSWER:**

$$\mathbf{H}(j\omega) = \frac{0.3162 \left( \frac{j\omega}{5} + 1 \right)}{\left( \frac{j\omega}{12} + 1 \right) \left( \frac{j\omega}{25} + 1 \right) \left( \frac{j\omega}{40} + 1 \right)}$$

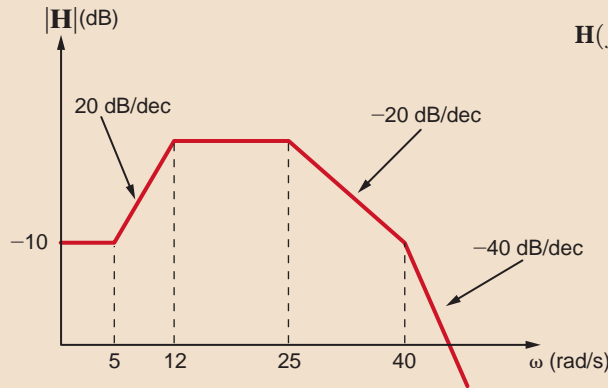


Figure E12.10

**SERIES RESONANCE** A circuit with extremely important frequency characteristics is shown in Fig. 12.17. The input impedance for the series  $RLC$  circuit is

$$\mathbf{Z}(j\omega) = R + j\omega L + \frac{1}{j\omega C} = R + j\left(\omega L - \frac{1}{\omega C}\right)$$

12.10

## 12.3 Resonant Circuits

The imaginary term will be zero if

$$\omega L = \frac{1}{\omega C}$$

The value of  $\omega$  that satisfies this equation is

$$\omega_0 = \frac{1}{\sqrt{LC}}$$

and at this value of  $\omega$  the impedance becomes

$$\mathbf{Z}(j\omega_0) = R$$

12.11

12.12

This frequency  $\omega_0$ , at which the impedance of the circuit is purely real, is also called the *resonant frequency*, and the circuit itself at this frequency is said to be *in resonance*. Resonance is a very important consideration in engineering design. For example, engineers designing the attitude control system for the Saturn vehicles had to ensure that the control system frequency did not excite the body bending (resonant) frequencies of the vehicle. Excitation of the bending frequencies would cause oscillations that, if continued unchecked, would result in a buildup of stress until the vehicle would finally break apart.

Resonance is also a benefit, providing string and wind musical instruments with volume and rich tones.

At resonance the voltage and current are in phase and, therefore, the phase angle is zero and the power factor is unity. At resonance the impedance is a minimum and, therefore, the current is maximum for a given voltage. Fig. 12.18 illustrates the frequency response of the series  $RLC$  circuit. Note that at low frequencies the impedance of the series circuit is dominated by the capacitive term, and at high frequencies the impedance is dominated by the inductive term.

Resonance can be viewed from another perspective—that of the phasor diagram. In the series circuit the current is common to every element. Therefore, the current is employed as reference. The phasor diagram is shown in Fig. 12.19 for the three frequency values  $\omega < \omega_0$ ,  $\omega = \omega_0$ ,  $\omega > \omega_0$ .

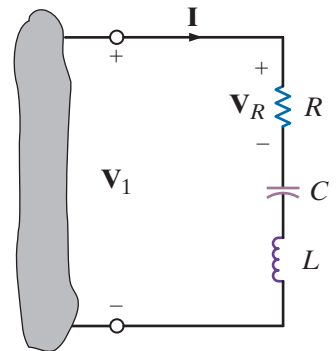


Figure 12.17

Series  $RLC$  circuit.

When  $\omega < \omega_0$ ,  $V_C > V_L$ ,  $\theta_Z$  is negative and the voltage  $V_1$  lags the current. If  $\omega = \omega_0$ ,  $V_L = V_C$ ,  $\theta_Z$  is zero, and the voltage  $V_1$  is in phase with the current. If  $\omega > \omega_0$ ,  $V_L > V_C$ ,  $\theta_Z$  is positive, and the voltage  $V_1$  leads the current.

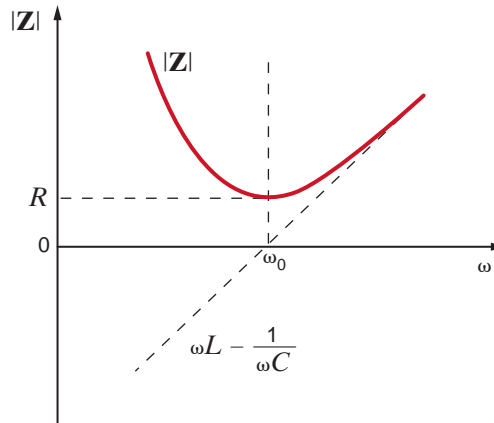
For the series circuit we define what is commonly called the *quality factor*  $Q$  as

$$Q = \frac{\omega_0 L}{R} = \frac{1}{\omega_0 C R} = \frac{1}{R} \sqrt{\frac{L}{C}} \quad 12.13$$

$Q$  is a very important factor in resonant circuits, and its ramifications will be illustrated throughout the remainder of this section.

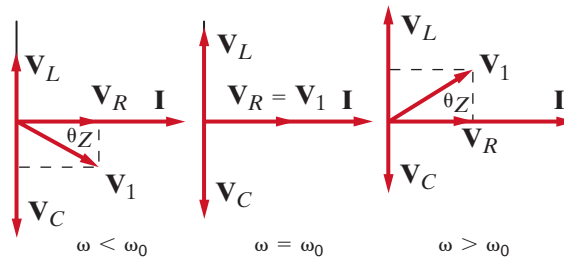
**Figure 12.18**

Frequency response of a series  $RLC$  circuit.



**Figure 12.19**

Phasor diagrams for the series  $RLC$  circuit.



### EXAMPLE

## 12.7

### SOLUTION

Consider the network shown in Fig. 12.20. Let us determine the resonant frequency, the voltage across each element at resonance, and the value of the quality factor.

The resonant frequency is obtained from the expression

$$\begin{aligned} \omega_0 &= \frac{1}{\sqrt{LC}} \\ &= \frac{1}{\sqrt{(25)(10^{-3})(10)(10^{-6})}} \\ &= 2000 \text{ rad/s} \end{aligned}$$

At this resonant frequency

$$\mathbf{I} = \frac{\mathbf{V}}{\mathbf{Z}} = \frac{\mathbf{V}}{R} = 5 \angle 0^\circ \text{ A}$$

Therefore,

$$\mathbf{V}_R = (5 \angle 0^\circ)(2) = 10 \angle 0^\circ \text{ V}$$

$$\mathbf{V}_L = j\omega_0 L \mathbf{I} = 250 \angle 90^\circ \text{ V}$$

$$\mathbf{V}_C = \frac{\mathbf{I}}{j\omega_0 C} = 250 \angle -90^\circ \text{ V}$$

Note the magnitude of the voltages across the inductor and capacitor with respect to the input voltage. Note also that these voltages are equal and are  $180^\circ$  out of phase with one another. Therefore, the phasor diagram for this condition is shown in Fig. 12.19 for  $\omega = \omega_0$ . The quality factor  $Q$  derived from Eq. (12.13) is

$$Q = \frac{\omega_0 L}{R} = \frac{(2)(10^3)(25)(10^{-3})}{2} = 25$$

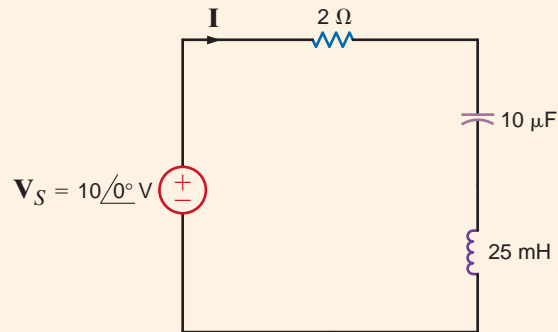
The voltages across the inductor and capacitor can be written in terms of  $Q$  as

$$|\mathbf{V}_L| = \omega_0 L |\mathbf{I}| = \frac{\omega_0 L}{R} |\mathbf{V}_S| = Q |\mathbf{V}_S|$$

and

$$|\mathbf{V}_C| = \frac{|\mathbf{I}|}{\omega_0 C} = \frac{1}{\omega_0 C R} |\mathbf{V}_S| = Q |\mathbf{V}_S|$$

This analysis indicates that for a given current there is a resonant voltage rise across the inductor and capacitor that is equal to the product of  $Q$  and the applied voltage.

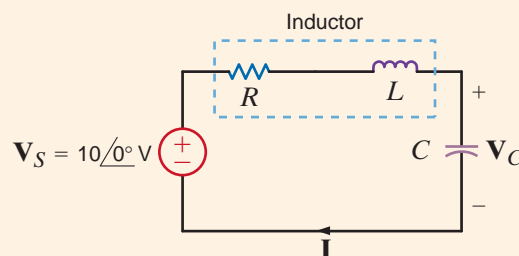


**Figure 12.20**

Series circuit.

In an undergraduate circuits laboratory, students are asked to construct an  $RLC$  network that will demonstrate resonance at  $f = 1000$  Hz given a  $0.02$  H inductor that has a  $Q$  of  $200$ . One student produced the circuit shown in Fig. 12.21, where the inductor's internal resistance is represented by  $R$ .

If the capacitor chosen to demonstrate resonance was an oil-impregnated paper capacitor rated at  $300$  V, let us determine the network parameters and the effect of this choice of capacitor.



**Figure 12.21**

$RLC$  series resonant network.

## EXAMPLE 12.8

**SOLUTION** For resonance at 1000 Hz, the student found the required capacitor value using the expression

$$\omega_0 = 2\pi f_0 = \frac{1}{\sqrt{LC}}$$

which yields

$$C = 1.27 \mu\text{F}$$

The student selected an oil-impregnated paper capacitor rated at 300 V. The resistor value was found using the expression for  $Q$

$$Q = \frac{\omega_0 L}{R} = 200$$

or

$$R = 1.59 \Omega$$

At resonance, the current would be

$$\mathbf{I} = \frac{\mathbf{V}_s}{R}$$

or

$$\mathbf{I} = 6.28 \angle 0^\circ \text{ A}$$

When constructed, the current was measured to be only

$$\mathbf{I} \sim 1 \angle 0^\circ \text{ mA}$$

This measurement clearly indicated that the impedance seen by the source was about 10 k $\Omega$  of resistance instead of 1.59  $\Omega$ —quite a drastic difference. Suspecting that the capacitor that was selected was the source of the trouble, the student calculated what the capacitor voltage should be. If operated as designed, then at resonance,

$$\mathbf{V}_C = \frac{\mathbf{V}_s}{R} \left( \frac{1}{j\omega C} \right) = Q\mathbf{V}_s$$

or

$$\mathbf{V}_C = 2000 \angle -90^\circ \text{ V}$$

which is more than six times the capacitor's rated voltage! This overvoltage had damaged the capacitor so that it did not function properly. When a new capacitor was selected and the source voltage reduced by a factor of 10, the network performed properly as a high  $Q$  circuit.

## Learning Assessments

**E12.11** Given the network in Fig. E12.11, find the value  $C$  that will place the circuit in resonance at 1800 rad/s. **ANSWER:**  $C = 3.09 \mu\text{F}$ .

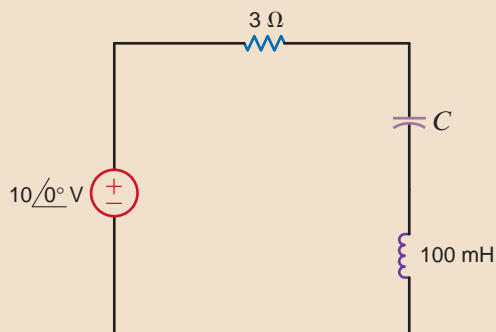


Figure E12.11



**E12.12** Given the network in E12.12, determine the  $Q$  of the network and the magnitude of the voltage across the capacitor.

**ANSWER:**  
 $Q = 60, |V_C| = 600 \text{ V}.$

**E12.13** If the resonant frequency of the network in Fig. E12.13 is  $10,000 \text{ rad/s}$ , find  $L$ . Also compute the current at resonance,  $\omega_0/3$ , and  $3\omega_0$ .

**ANSWER:**  
 $L = 100 \mu\text{H}; 6 \cos 10,000t \text{ A};$   
 $5.294 \cos (3,333t + 28.07^\circ) \text{ A};$   
 $5.294 \cos (30,000t - 28.07^\circ) \text{ A}.$

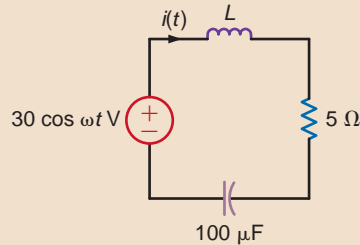


Figure E12.13

Let us develop a general expression for the ratio of  $\mathbf{V}_R/\mathbf{V}_1$  for the network in Fig. 12.17 in terms of  $Q$ ,  $\omega$ , and  $\omega_0$ . The impedance of the circuit, given by Eq. (12.10), can be used to determine the admittance, which can be expressed as

$$\begin{aligned} \mathbf{Y}(j\omega) &= \frac{1}{R[1 + j(1/R)(\omega L - 1/\omega C)]} \\ &= \frac{1}{R[1 + j(\omega L/R - 1/\omega CR)]} \\ &= \frac{1}{R[1 + jQ(\omega L/RQ - 1/\omega CRQ)]} \end{aligned} \quad 12.14$$

Using the fact that  $Q = \omega_0 L/R = 1/\omega_0 CR$  Eq. (12.14) becomes

$$\mathbf{Y}(j\omega) = \frac{1}{R[1 + jQ(\omega/\omega_0 - \omega_0/\omega)]} \quad 12.15$$

Since  $\mathbf{I} = \mathbf{Y}\mathbf{V}_1$  and the voltage across the resistor is  $\mathbf{V}_R = \mathbf{I}R$ , then

$$\frac{\mathbf{V}_R}{\mathbf{V}_1} = \mathbf{G}_v(j\omega) = \frac{1}{1 + jQ(\omega/\omega_0 - \omega_0/\omega)} \quad 12.16$$

and the magnitude and phase are

$$M(\omega) = \frac{1}{[1 + Q^2(\omega/\omega_0 - \omega_0/\omega)^2]^{1/2}} \quad 12.17$$

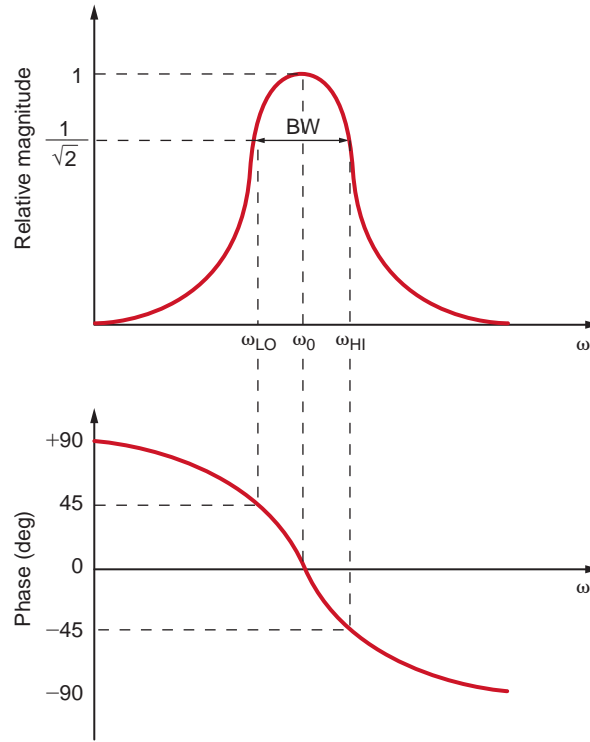
and

$$\phi(\omega) = -\tan^{-1} Q \left( \frac{\omega}{\omega_0} - \frac{\omega_0}{\omega} \right) \quad 12.18$$

The sketches for these functions are shown in Fig. 12.22. Note that the circuit has the form of a band-pass filter. The bandwidth is defined as the difference between the two half-power frequencies. Since power is proportional to the square of the magnitude, these two frequencies may be derived by setting the magnitude  $M(\omega) = 1/\sqrt{2}$ ; that is,

$$\left| \frac{1}{1 + jQ(\omega/\omega_0 - \omega_0/\omega)} \right| = \frac{1}{\sqrt{2}}$$

**Figure 12.22**  
Magnitude and phase curves for Eqs. (12.17) and (12.18).



Therefore,

$$Q\left(\frac{\omega}{\omega_0} - \frac{\omega_0}{\omega}\right) = \pm 1 \tag{12.19}$$

Solving this equation, we obtain four frequencies,

$$\omega = \pm \frac{\omega_0}{2Q} \pm \omega_0 \sqrt{\left(\frac{1}{2Q}\right)^2 + 1} \tag{12.20}$$

Taking only the positive values, we obtain

$$\omega_{LO} = \omega_0 \left[ -\frac{1}{2Q} + \sqrt{\left(\frac{1}{2Q}\right)^2 + 1} \right] \tag{12.21}$$

$$\omega_{HI} = \omega_0 \left[ \frac{1}{2Q} + \sqrt{\left(\frac{1}{2Q}\right)^2 + 1} \right]$$

Subtracting these two equations yields the bandwidth as shown in Fig. 12.22:

$$BW = \omega_{HI} - \omega_{LO} = \frac{\omega_0}{Q} \tag{12.22}$$

and multiplying the two equations yields

$$\omega_0^2 = \omega_{LO}\omega_{HI} \tag{12.23}$$

which illustrates that the resonant frequency is the geometric mean of the two half-power frequencies. Recall that the half-power frequencies are the points at which the log-magnitude curve is down 3 dB from its maximum value. Therefore, the difference between the 3-dB frequencies, which is, of course, the bandwidth, is often called the 3-dB bandwidth.

[hint]

Half-power frequencies and their dependence on  $\omega_0$  and  $Q$  are outlined in these equations.

[hint]

The bandwidth is the difference between the half-power frequencies and a function of  $\omega_0$  and  $Q$ .

## Learning Assessment

**E12.14** For the network in Fig. E12.11, compute the two half-power frequencies and the bandwidth of the network.

**ANSWER:**

$$\begin{aligned}\omega_{\text{HI}} &= 1815 \text{ rad/s;} \\ \omega_{\text{LO}} &= 1785 \text{ rad/s;} \\ \text{BW} &= 30 \text{ rad/s.}\end{aligned}$$

Eq. (12.13) indicates the dependence of  $Q$  on  $R$ . A high- $Q$  series circuit has a small value of  $R$ .

Eq. (12.22) illustrates that the bandwidth is inversely proportional to  $Q$ . Therefore, the frequency selectivity of the circuit is determined by the value of  $Q$ . A high- $Q$  circuit has a small bandwidth, and, therefore, the circuit is very selective. The manner in which  $Q$  affects the frequency selectivity of the network is graphically illustrated in Fig. 12.23. Hence, if we pass a signal with a wide frequency range through a high- $Q$  circuit, only the frequency components within the bandwidth of the network will not be attenuated; that is, the network acts like a band-pass filter.

$Q$  has a more general meaning that we can explore via an energy analysis of the series resonant circuit. Let's excite a series  $RLC$  circuit at its resonant frequency as shown in Fig. 12.24. Recall that the impedance of the  $RLC$  circuit at resonance is just  $R$ . Therefore, the current  $i(t) = (V_m/R)\cos\omega_0 t$  A. The capacitor voltage is

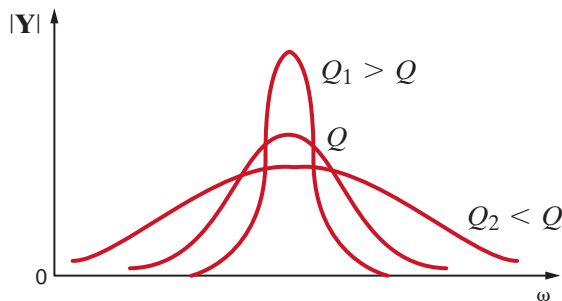
$$\mathbf{V}_C = \frac{1}{j\omega_0 C} \mathbf{I} = \frac{1}{j\omega_0 C} \frac{V_m}{R} \angle 0^\circ = \frac{V_m}{\omega_0 RC} \angle -90^\circ \quad 12.24$$

and  $v_C(t) = \frac{V_m}{\omega_0 RC} \cos(\omega_0 t - 90^\circ) = \frac{V_m}{\omega_0 RC} \sin\omega_0 t$  volts. Recall from Chapter 6 that the energy stored in an inductor is  $(1/2)Li^2$  and the energy stored in a capacitor is  $(1/2)Cv^2$ . For the inductor:

$$w_L(t) = \frac{1}{2}Li^2(t) = \frac{1}{2}L\left(\frac{V_m}{R}\cos\omega_0 t\right)^2 = \frac{V_m^2 L}{2R^2}\cos^2\omega_0 t \text{ J} \quad 12.25$$

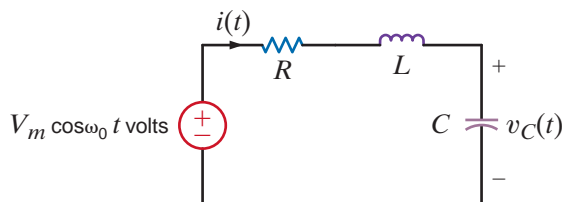
and for the capacitor:

$$w_C(t) = \frac{1}{2}Cv_C^2(t) = \frac{1}{2}C\left(\frac{V_m}{\omega_0 RC}\sin\omega_0 t\right)^2 = \frac{V_m^2}{2\omega_0^2 R^2 C}\sin^2\omega_0 t \text{ J} \quad 12.26$$



**Figure 12.23**

Network frequency response as a function of  $Q$ .



**Figure 12.24**

Series  $RLC$  circuit excited at its resonant frequency.

At resonance,  $\omega_0^2 = 1/LC$ , so the energy stored in the capacitor can be rewritten as

$$w_C(t) = \frac{V_m^2}{2\left(\frac{1}{LC}\right)R^2C} \sin^2 \omega_0 t = \frac{V_m^2 L}{2R^2} \sin^2 \omega_0 t \quad 12.27$$

The total energy stored in the circuit is  $w_L(t) + w_C(t) = \frac{V_m^2 L}{2R^2} (\cos^2 \omega_0 t + \sin^2 \omega_0 t)$ . From trigonometry, we know that  $\cos^2 \omega_0 t + \sin^2 \omega_0 t = 1$ , so the total energy stored is a constant:  $\frac{V_m^2 L}{2R^2}$  J.

Now that we have determined that the total energy stored in the resonant circuit is a constant, let's examine the energy stored in the inductor and capacitor. Fig. 12.25 is a plot of the normalized energy stored in each element over two periods. Eq. (12.25) and (12.27) have been divided by  $\frac{V_m^2 L}{2R^2}$  to yield the normalized energy. When a circuit is in resonance, there is a continuous exchange of energy between the magnetic field of the inductor and the electric field of the capacitor. This energy exchange is like the motion of a pendulum. The energy stored in the inductor starts at a maximum value, falls to zero, and then returns to a maximum; the energy stored in the capacitor starts at zero, increases to a maximum, and then returns to zero. Note that when the energy stored in the inductor is a maximum, the energy stored in the capacitor is zero and vice versa. In the first half-cycle, the capacitor absorbs energy as fast as the inductor gives it up; the opposite happens in the next half-cycle. Even though the energy stored in each element is continuously varying, the total energy stored in the resonant circuit is constant and therefore not changing with time.

The maximum energy stored in the  $RLC$  circuit at resonance is  $W_S = \frac{V_m^2 L}{2R^2}$ . Let's calculate the energy dissipated per cycle in this series resonant circuit, which is

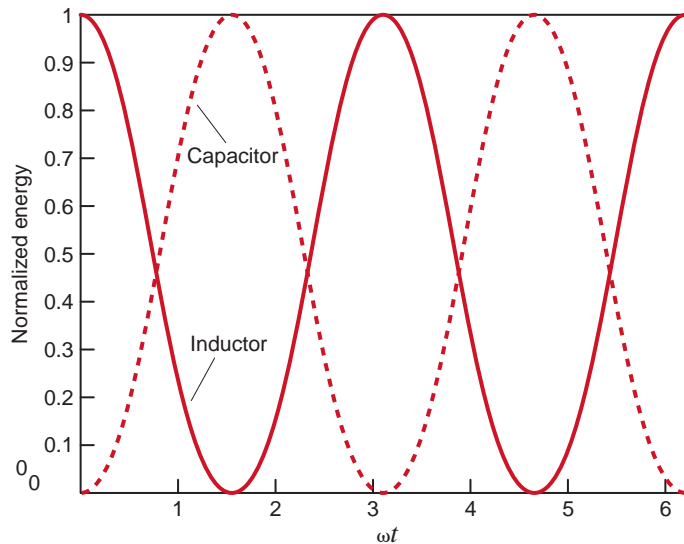
$$W_D = \int_0^T p_R dt = \int_0^T i^2(t)R dt = \int_0^T \left(\frac{V_m}{R} \cos^2 \omega_0 t\right)^2 R dt = \frac{V_m^2 T}{2R} \quad 12.28$$

The ratio of  $W_S$  to  $W_D$  is

$$\frac{W_S}{W_D} = \frac{\frac{V_m^2 L}{2R^2}}{\frac{V_m^2 T}{2R}} = \frac{L}{RT} = \frac{L}{R} \frac{\omega_0}{2\pi} = \frac{\omega_0 L}{R(2\pi)} \quad 12.29$$

**Figure 12.25**

Energy transfer in a resonant circuit.



Earlier in this chapter, we defined  $Q$  to be  $\omega_0 L/R$ , so the equation above can be rewritten as

$$Q = 2\pi \frac{W_S}{W_D} \quad 12.30$$

The importance of this expression for  $Q$  stems from the fact that this expression is applicable to acoustic, electrical, and mechanical systems and therefore is generally considered to be the basic definition of  $Q$ .

Given a series circuit with  $R = 2 \Omega$ ,  $L = 2 \text{ mH}$ , and  $C = 5 \mu\text{F}$ , we wish to determine the resonant frequency, the quality factor, and the bandwidth for the circuit. Then we will determine the change in  $Q$  and the BW if  $R$  is changed from 2 to 0.2  $\Omega$ .

## EXAMPLE 12.9

Using Eq. (12.11), we have

$$\begin{aligned} \omega_0 &= \frac{1}{\sqrt{LC}} = \frac{1}{[(2)(10^{-3})(5)(10^{-6})]^{1/2}} \\ &= 10^4 \text{ rad/s} \end{aligned}$$

and therefore, the resonant frequency is  $10^4/2\pi = 1592 \text{ Hz}$ .

The quality factor is

$$\begin{aligned} Q &= \frac{\omega_0 L}{R} = \frac{(10^4)(2)(10^{-3})}{2} \\ &= 10 \end{aligned}$$

and the bandwidth is

$$\begin{aligned} \text{BW} &= \frac{\omega_0}{Q} = \frac{10^4}{10} \\ &= 10^3 \text{ rad/s} \end{aligned}$$

If  $R$  is changed to  $R = 0.2 \Omega$ , the new value of  $Q$  is 100, and therefore the new BW is  $10^2 \text{ rad/s}$ .

## SOLUTION

## Learning Assessments

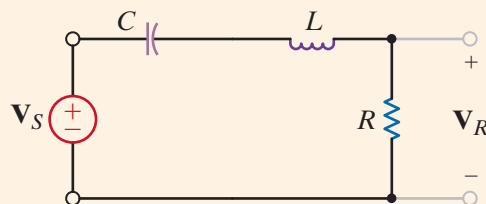
**E12.15** A series circuit is composed of  $R = 2 \Omega$ ,  $L = 40 \text{ mH}$ , and  $C = 100 \mu\text{F}$ . Determine the bandwidth of this circuit and its resonant frequency.

**ANSWER:** BW = 50 rad/s;  
 $\omega_0 = 500 \text{ rad/s}$ .

**E12.16** A series  $RLC$  circuit has the following properties:  $R = 4 \Omega$ ,  $\omega_0 = 4000 \text{ rad/s}$ , and the BW = 100 rad/s. Determine the values of  $L$  and  $C$ .

**ANSWER:**  $L = 40 \text{ mH}$ ;  
 $C = 1.56 \mu\text{F}$ .

We wish to determine the parameters  $R$ ,  $L$ , and  $C$  so that the circuit shown in Fig. 12.26 operates as a band-pass filter with an  $\omega_0$  of 1000 rad/s and a bandwidth of 100 rad/s.



## EXAMPLE 12.10

**Figure 12.26**  
Series  $RLC$  circuit.

**SOLUTION** The voltage gain for the network is

$$\mathbf{G}_v(j\omega) = \frac{(R/L)j\omega}{(j\omega)^2 + (R/L)j\omega + 1/LC}$$

Hence,

$$\omega_0 = \frac{1}{\sqrt{LC}}$$

and since  $\omega_0 = 10^3$ ,

$$\frac{1}{LC} = 10^6$$

The bandwidth is

$$\text{BW} = \frac{\omega_0}{Q}$$

Then

$$\begin{aligned} Q &= \frac{\omega_0}{\text{BW}} = \frac{1000}{100} \\ &= 10 \end{aligned}$$

However,

$$Q = \frac{\omega_0 L}{R}$$

Therefore,

$$\frac{1000L}{R} = 10$$

Note that we have two equations in the three unknown circuit parameters  $R$ ,  $L$ , and  $C$ . Hence, if we select  $C = 1 \mu\text{F}$ , then

$$L = \frac{1}{10^6 C} = 1 \text{ H}$$

and

$$\frac{1000(1)}{R} = 10$$

yields

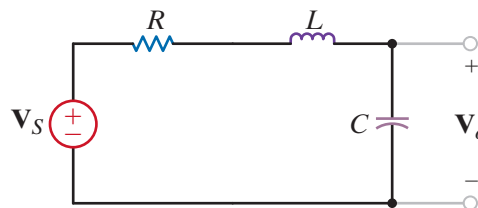
$$R = 100 \Omega$$

Therefore, the parameters  $R = 100 \Omega$ ,  $L = 1 \text{ H}$ , and  $C = 1 \mu\text{F}$  will produce the proper filter characteristics.

In Examples 12.7 and 12.8 we found that the voltage across the capacitor or inductor in the series resonant circuit could be quite high. In fact, it was equal to  $Q$  times the magnitude of the source voltage. With this in mind, let us reexamine this network as shown in Fig. 12.27. The output voltage for the network is

$$\mathbf{V}_o = \left( \frac{1/j\omega C}{R + j\omega L + 1/j\omega C} \right) \mathbf{V}_s$$

**Figure 12.27**  
Series resonant circuit.



which can be written as

$$\mathbf{V}_o = \frac{\mathbf{V}_s}{1 - \omega^2 LC + j\omega CR}$$

The magnitude of this voltage can be expressed as

$$|\mathbf{V}_o| = \frac{|\mathbf{V}_s|}{\sqrt{(1 - \omega^2 LC)^2 + (\omega CR)^2}} \quad 12.31$$

In view of the previous discussion, we might assume that the maximum value of the output voltage would occur at the resonant frequency  $\omega_0$ . Let us see whether this assumption is correct. The frequency at which  $|\mathbf{V}_o|$  is maximum is the nonzero value of  $\omega$ , which satisfies the equation

$$\frac{d|\mathbf{V}_o|}{d\omega} = 0 \quad 12.32$$

If we perform the indicated operation and solve for the nonzero  $\omega_{\max}$ , we obtain

$$\omega_{\max} = \sqrt{\frac{1}{LC} - \frac{1}{2} \left(\frac{R}{L}\right)^2} \quad 12.33$$

By employing the relationships  $\omega_0^2 = 1/LC$  and  $Q = \omega_0 L/R$ , the expression for  $\omega_{\max}$  can be written as

$$\begin{aligned} \omega_{\max} &= \sqrt{\omega_0^2 - \frac{1}{2} \left(\frac{\omega_0}{Q}\right)^2} \\ &= \omega_0 \sqrt{1 - \frac{1}{2Q^2}} \end{aligned} \quad 12.34$$

Clearly,  $\omega_{\max} \neq \omega_0$ ; however,  $\omega_0$  closely approximates  $\omega_{\max}$  if the  $Q$  is high. In addition, if we substitute Eq. (12.34) into Eq. (12.31) and use the relationships  $\omega_0^2 = 1/LC$  and  $\omega_0^2 C^2 R^2 = 1/Q^2$ , we find that

$$|\mathbf{V}_o|_{\max} = \frac{Q|\mathbf{V}_s|}{\sqrt{1 - 1/4Q^2}} \quad 12.35$$

Again, we see that  $|\mathbf{V}_o|_{\max} \approx Q|\mathbf{V}_s|$  if the network has a high  $Q$ .

Given the network in Fig. 12.27, we wish to determine  $\omega_0$  and  $\omega_{\max}$  for  $R = 50 \Omega$  and  $R = 1 \Omega$  if  $L = 50 \text{ mH}$  and  $C = 5 \mu\text{F}$ .

The network parameters yield

$$\begin{aligned} \omega_0 &= \frac{1}{\sqrt{LC}} \\ &= \frac{1}{\sqrt{(5)(10^{-2})(5)(10^{-6})}} \\ &= 2000 \text{ rad/s} \end{aligned}$$

If  $R = 50 \Omega$ , then

$$\begin{aligned} Q &= \frac{\omega_0 L}{R} \\ &= \frac{(2000)(0.05)}{50} \\ &= 2 \end{aligned}$$

## EXAMPLE 12.11

### SOLUTION

and

$$\begin{aligned}\omega_{\max} &= \omega_0 \sqrt{1 - \frac{1}{2Q^2}} \\ &= 2000 \sqrt{1 - \frac{1}{8}} \\ &= 1871 \text{ rad/s}\end{aligned}$$

If  $R = 1 \Omega$ , then  $Q = 100$  and  $\omega_{\max} = 2000 \text{ rad/s}$ .

We can plot the frequency response of the network transfer function for  $R = 50 \Omega$  and  $R = 1 \Omega$ . The transfer function is

$$\frac{V_o}{V_s} = \frac{1}{2.5 \times 10^{-7}(j\omega)^2 + 2.5 \times 10^{-4}(j\omega) + 1}$$

for  $R = 50 \Omega$  and

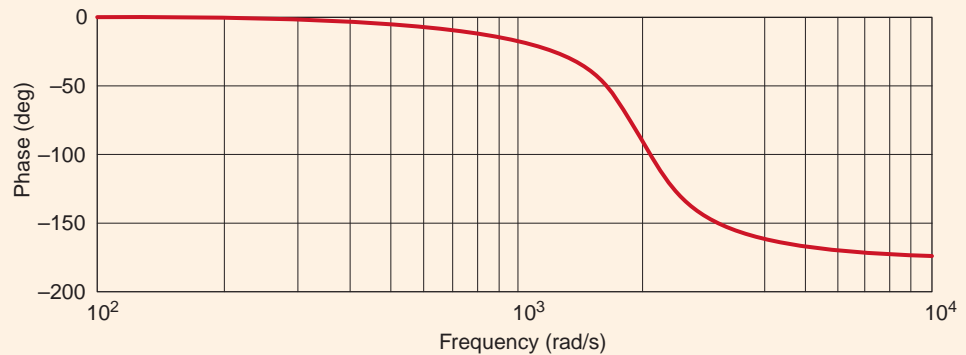
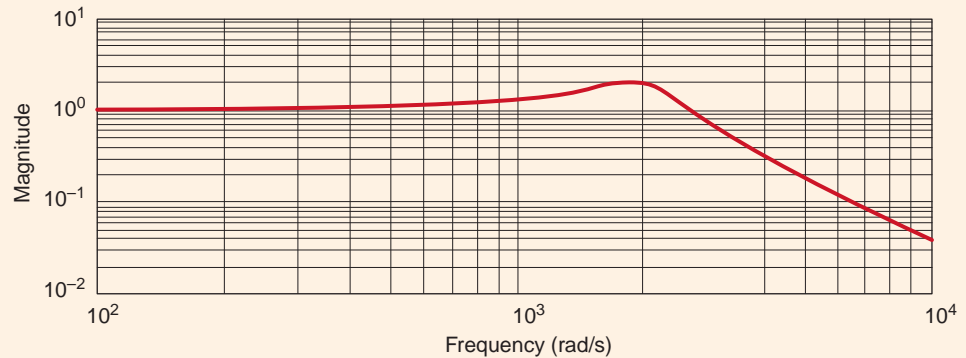
$$\frac{V_o}{V_s} = \frac{1}{2.5 \times 10^{-7}(j\omega)^2 + 5 \times 10^{-6}(j\omega) + 1}$$

for  $R = 1 \Omega$ . The magnitude and phase characteristics for the network with  $R = 50 \Omega$  and  $R = 1 \Omega$  are shown in Figs. 12.28a and b, respectively.

Note that when the  $Q$  of the network is small, the frequency response is not selective and  $\omega_0 \neq \omega_{\max}$ . However, if the  $Q$  is large, the frequency response is very selective and  $\omega_0 \approx \omega_{\max}$ .

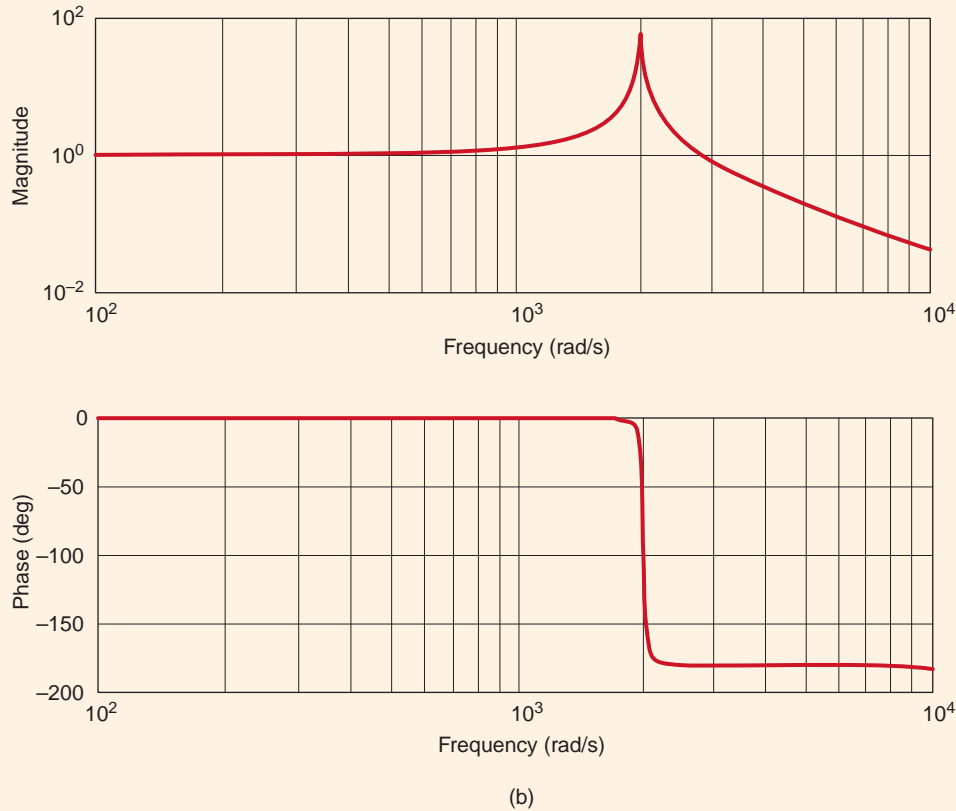
**Figure 12.28**

Frequency response plots for the network in Fig. 12.27 with (a)  $R = 50 \Omega$  and (b)  $R = 1 \Omega$ .



(a)





**Figure 12.28**  
(continued)

On July 1, 1940, the third longest bridge in the nation, the Tacoma Narrows Bridge, was opened to traffic across Puget Sound in Washington. On November 7, 1940, the structure collapsed in what has become the most celebrated structural failure of that century. A photograph of the bridge, taken as it swayed back and forth just before breaking apart, is shown in Fig. 12.29. Explaining the disaster in quantitative terms is a feat for civil engineers and structures experts, and several theories have been presented. However, the one common denominator in each explanation is that wind blowing across the bridge caused the entire structure to resonate to such an extent that the bridge tore itself apart. One can theorize that the wind, fluctuating at a frequency near the natural frequency of the bridge (0.2 Hz), drove the structure into resonance. Thus, the bridge can be roughly modeled as a second-order system. Let us design an *RLC* resonance network to demonstrate the bridge's vertical movement and investigate the effect of the wind's frequency.

The *RLC* network shown in Fig. 12.30 is a second-order system in which  $v_{in}(t)$  is analogous to vertical deflection of the bridge's roadway (1 volt = 1 foot). The values of  $C$ ,  $L$ ,  $R_A$ , and  $R_B$  can be derived from the data taken at the site and from scale models, as follows:

$$\begin{aligned} \text{vertical deflection at failure} &\approx 4 \text{ feet} \\ \text{wind speed at failure} &\approx 42 \text{ mph} \\ \text{resonant frequency} &= f_0 \approx 0.2 \text{ Hz} \end{aligned}$$

## EXAMPLE 12.12

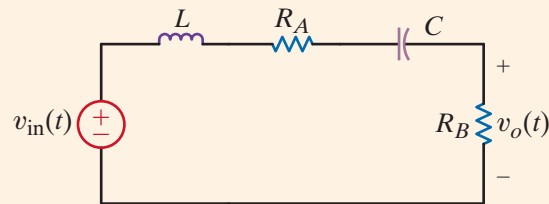
### SOLUTION

**Figure 12.29**

Tacoma Narrows Bridge on the verge of collapse. (University of Washington Libraries Special Collections, UW21413.)

**Figure 12.30**

RLC resonance network for a simple Tacoma Narrows Bridge simulation.



The output voltage can be expressed as

$$\mathbf{V}_o(j\omega) = \frac{j\omega \left( \frac{R_B}{L} \right) \mathbf{V}_{in}(j\omega)}{-\omega^2 + j\omega \left( \frac{R_A + R_B}{L} \right) + \frac{1}{LC}}$$

from which we can easily extract the following expressions:

$$\omega_0 = \frac{1}{\sqrt{LC}} = 2\pi(0.2) \text{ rad/s}$$

$$2\zeta\omega_0 = \frac{R_A + R_B}{L}$$

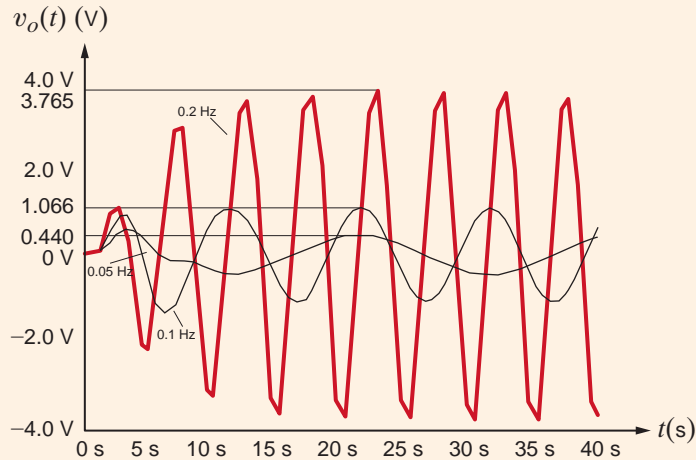
and

$$\frac{\mathbf{V}_o(j\omega_0)}{\mathbf{V}_{in}(j\omega_0)} = \frac{R_B}{R_A + R_B} \approx \frac{4 \text{ feet}}{42 \text{ mph}}$$

Let us choose  $R_B = 1 \Omega$  and  $R_A = 9.5 \Omega$ . Having no data for the damping ratio,  $\zeta$ , we will select  $L = 20 \text{ H}$ , which yields  $\zeta = 0.209$  and  $Q = 2.39$ , which seem reasonable for such a large structure. Given the aforementioned choices, the required capacitor value is  $C = 31.66 \text{ mF}$ . Using these circuit values, we now simulate the effect of 42 mph winds fluctuating at 0.05 Hz, 0.1 Hz, and 0.2 Hz using an ac analysis at the three frequencies of interest.

The results are shown in Fig. 12.31. Note that at 0.05 Hz the vertical deflection (1 ft/V) is only 0.44 feet, whereas at 0.1 Hz the bridge undulates about 1.07 feet. Finally, at the bridge's resonant frequency of 0.2 Hz, the bridge is oscillating 3.77 feet—catastrophic failure.

Clearly, we have used an extremely simplistic approach to modeling something as complicated as the Tacoma Narrows Bridge. However, we will revisit this event in Chapter 14 and examine it more closely with a more accurate model (K. Y. Billah and R. H. Scanlan, “Resonance, Tacoma Narrows Bridge Failure, and Undergraduate Physics Textbooks,” *American Journal of Physics*, 1991, vol. 59, no. 2, pp. 118–124).



**Figure 12.31**

Simulated vertical deflection (1 volt = 1 foot) for the Tacoma Narrows Bridge for wind shift frequencies of 0.05, 0.1, and 0.2 Hz.

**PARALLEL RESONANCE** In our presentation of resonance thus far, we have focused our discussion on the series resonant circuit. Of course, resonance and all its ramifications still apply if the  $RLC$  elements are arranged in parallel. In fact, the series and parallel resonant circuits possess many similarities and a few differences.

Consider the network shown in Fig. 12.32. The source current  $\mathbf{I}_S$  can be expressed as

$$\begin{aligned}\mathbf{I}_S &= \mathbf{I}_G + \mathbf{I}_C + \mathbf{I}_L \\ &= \mathbf{V}_S G + j\omega C \mathbf{V}_S + \frac{\mathbf{V}_S}{j\omega L} \\ &= \mathbf{V}_S \left[ G + j \left( \omega C - \frac{1}{\omega L} \right) \right]\end{aligned}$$

When the network is in resonance,

$$\mathbf{I}_S = G \mathbf{V}_S \quad 12.36$$

The input admittance for the parallel  $RLC$  circuit is

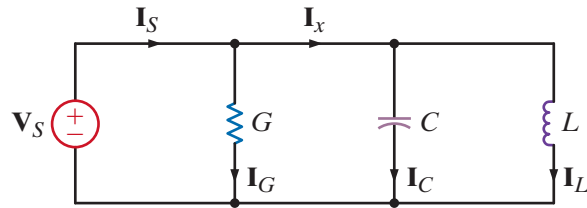
$$\mathbf{Y}(j\omega) = G + j\omega C + \frac{1}{j\omega L} \quad 12.37$$

and the admittance of the parallel circuit, at resonance, is

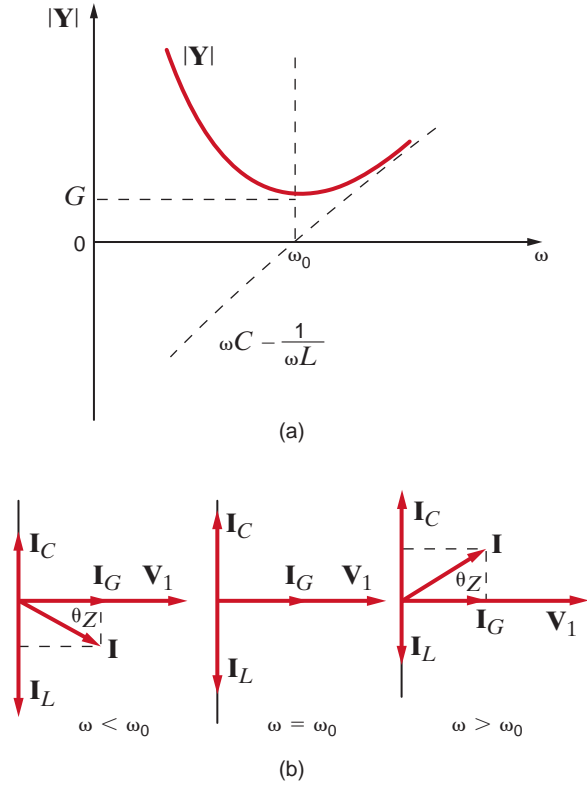
$$\mathbf{Y}(j\omega_0) = G \quad 12.38$$

that is, all the source current flows through the conductance  $G$ . Does this mean that there is no current in  $L$  or  $C$ ? Definitely not!  $\mathbf{I}_C$  and  $\mathbf{I}_L$  are equal in magnitude but  $180^\circ$  out of phase with one another. Therefore,  $\mathbf{I}_x$ , as shown in Fig. 12.32, is zero. In addition, if  $G = 0$ , the source current is zero. What is actually taking place, however, is an energy exchange between the electric field of the capacitor and the magnetic field of the inductor. As one increases, the other decreases and vice versa.

**Figure 12.32**  
Parallel RLC circuit.



**Figure 12.33**  
(a) The frequency plot of the admittance and (b) the phasor diagram for the parallel resonant circuit.



Analogous to the series resonant case, the frequency response, shown in Fig. 12.33a, for the parallel resonant circuit reveals that the admittance is dominated by the inductive term at low frequencies and by the capacitive term at high frequencies. Similarly, the phasor diagram for the parallel resonant circuit, shown in Figure 12.33b, again has much in common with that of the series circuit. For  $\omega < \omega_0$ , the impedance phase angle,  $\theta_Z$ , is positive, again indicating that inductance dominates in the parallel circuit at low frequencies. For  $\omega > \omega_0$ ,  $\theta_Z$  is negative, and the capacitance dominates.

Applying the general definition of resonance in Fig. 12.22 to the parallel resonant circuit yields an interesting result

$$Q = \frac{R}{\omega_0 L} = \frac{1}{G\omega_0 L} = R\omega_0 C = \frac{\omega_0 C}{G} \tag{12.39}$$

This result appears to be the reciprocal of  $Q$  for the series case. However, the RLC currents in the parallel case mimic the voltages in the series case:

$$|I_C| = Q|I_S|$$

and

$$|I_L| = Q|I_S|$$

The network in Fig. 12.32 has the following parameters:

$$\begin{aligned} \mathbf{V}_s &= 120 \angle 0^\circ \text{ V}, & G &= 0.01 \text{ S}, \\ C &= 600 \mu\text{F}, & \text{and } L &= 120 \text{ mH} \end{aligned}$$

## EXAMPLE 12.13

If the source operates at the resonant frequency of the network, compute all the branch currents.

The resonant frequency for the network is

### SOLUTION

$$\begin{aligned} \omega_0 &= \frac{1}{\sqrt{LC}} \\ &= \frac{1}{\sqrt{(120)(10^{-3})(600)(10^{-6})}} \\ &= 117.85 \text{ rad/s} \end{aligned}$$

At this frequency

$$\mathbf{Y}_C = j\omega_0 C = j7.07 \times 10^{-2} \text{ S}$$

and

$$\mathbf{Y}_L = -j\left(\frac{1}{\omega_0 L}\right) = -j7.07 \times 10^{-2} \text{ S}$$

The branch currents are then

$$\mathbf{I}_G = G\mathbf{V}_s = 1.2 \angle 0^\circ \text{ A}$$

$$\mathbf{I}_C = \mathbf{Y}_C \mathbf{V}_s = 8.49 \angle 90^\circ \text{ A}$$

$$\mathbf{I}_L = \mathbf{Y}_L \mathbf{V}_s = 8.49 \angle -90^\circ \text{ A}$$

and

$$\begin{aligned} \mathbf{I}_s &= \mathbf{I}_G + \mathbf{I}_C + \mathbf{I}_L \\ &= \mathbf{I}_G = 1.2 \angle 0^\circ \text{ A} \end{aligned}$$

As the analysis indicates, the source supplies only the losses in the resistive element. In addition, the source voltage and current are in phase and, therefore, the power factor is unity.

Given the parallel  $RLC$  circuit in Fig. 12.34,

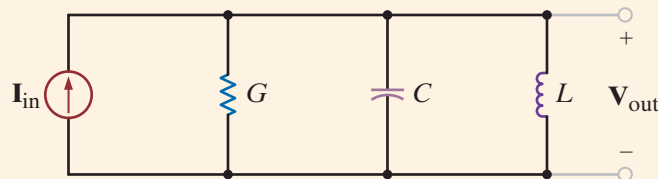
- Derive the expression for the resonant frequency, the half-power frequencies, the bandwidth, and the quality factor for the transfer characteristic  $\mathbf{V}_{\text{out}}/\mathbf{I}_{\text{in}}$  in terms of the circuit parameters  $R$ ,  $L$ , and  $C$ .
- Compute the quantities in part (a) if  $R = 1 \text{ k}\Omega$ ,  $L = 10 \text{ mH}$ , and  $C = 100 \mu\text{F}$ .

## EXAMPLE 12.14

- The output voltage can be written as

### SOLUTION

$$\mathbf{V}_{\text{out}} = \frac{\mathbf{I}_{\text{in}}}{\mathbf{Y}_T}$$



**Figure 12.34**  
Circuit used in  
Example 12.14.

and, therefore, the magnitude of the transfer characteristic can be expressed as

$$\left| \frac{\mathbf{V}_{\text{out}}}{\mathbf{I}_{\text{in}}} \right| = \frac{1}{\sqrt{(1/R^2) + (\omega C - 1/\omega L)^2}}$$

The transfer characteristic is a maximum at the resonant frequency

$$\omega_0 = \frac{1}{\sqrt{LC}} \quad 12.41$$

and at this frequency

$$\left| \frac{\mathbf{V}_{\text{out}}}{\mathbf{I}_{\text{in}}} \right|_{\text{max}} = R \quad 12.42$$

As demonstrated earlier, at the half-power frequencies the magnitude is equal to  $1/\sqrt{2}$  of its maximum value, and hence the half-power frequencies can be obtained from the expression

$$\frac{1}{\sqrt{(1/R^2) + (\omega C - 1/\omega L)^2}} = \frac{R}{\sqrt{2}}$$

Solving this equation and taking only the positive values of  $\omega$  yields

$$\omega_{\text{LO}} = -\frac{1}{2RC} + \sqrt{\frac{1}{(2RC)^2} + \frac{1}{LC}} \quad 12.43$$

and

$$\omega_{\text{HI}} = \frac{1}{2RC} + \sqrt{\frac{1}{(2RC)^2} + \frac{1}{LC}} \quad 12.44$$

Subtracting these two half-power frequencies yields the bandwidth

$$\begin{aligned} \text{BW} &= \omega_{\text{HI}} - \omega_{\text{LO}} \\ &= \frac{1}{RC} \end{aligned} \quad 12.45$$

Therefore, the quality factor is

$$\begin{aligned} Q &= \frac{\omega_0}{\text{BW}} \\ &= \frac{RC}{\sqrt{LC}} \\ &= R\sqrt{\frac{C}{L}} \end{aligned} \quad 12.46$$

Using Eqs. (12.41), (12.45), and (12.46), we can write Eqs. (12.43) and (12.44) as

$$\omega_{\text{LO}} = \omega_0 \left[ \frac{-1}{2Q} + \sqrt{\frac{1}{(2Q)^2} + 1} \right] \quad 12.47$$

$$\omega_{\text{HI}} = \omega_0 \left[ \frac{1}{2Q} + \sqrt{\frac{1}{(2Q)^2} + 1} \right] \quad 12.48$$

**b.** Using the values given for the circuit components, we find that

$$\omega_0 = \frac{1}{\sqrt{(10^{-2})(10^{-4})}} = 10^3 \text{ rad/s}$$

The half-power frequencies are

$$\omega_{LO} = \frac{-1}{(2)(10^3)(10^{-4})} + \sqrt{\frac{1}{[(2)(10^{-1})]^2} + 10^6}$$

$$= 995 \text{ rad/s}$$

and

$$\omega_{HI} = 1005 \text{ rad/s}$$

Therefore, the bandwidth is

$$BW = \omega_{HI} - \omega_{LO} = 10 \text{ rad/s}$$

and

$$Q = 10^3 \sqrt{\frac{10^{-4}}{10^{-2}}}$$

$$= 100$$

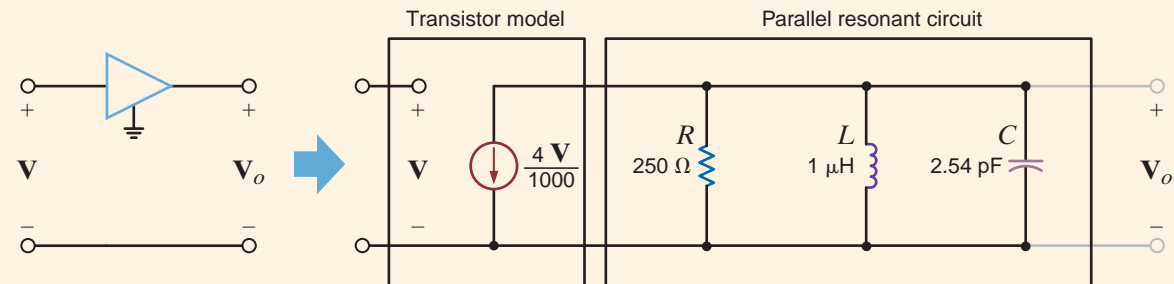
Two radio stations, WHEW and WHAT, broadcast in the same listening area: WHEW broadcasts at 100 MHz and WHAT at 98 MHz. A single-stage tuned amplifier, such as that shown in Fig. 12.35, can be used as a tuner to filter out one of the stations. However, single-stage tuned amplifiers have poor selectivity due to their wide bandwidths. To reduce the bandwidth (increase the quality factor) of single-stage tuned amplifiers, designers employ a technique called synchronous tuning. In this process, identical tuned amplifiers are cascaded. To demonstrate this phenomenon, let us generate a Bode plot for the amplifier shown in Fig. 12.35 when it is tuned to WHEW (100 MHz), using one, two, three, and four stages of amplification.

## EXAMPLE 12.15

Using the circuit for a single-stage amplifier shown in Fig. 12.35, we can cascade the stages to form a four-stage synchronously tuned amplifier. If we now plot the frequency response over the range from 90 MHz to 110 MHz, we obtain the Bode plot shown in Fig. 12.36.

### SOLUTION

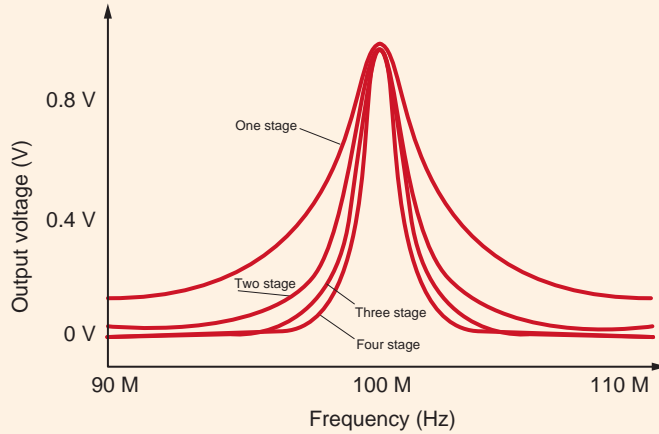
From the Bode plot in Fig. 12.36 we see that increasing the number of stages does indeed decrease the bandwidth without altering the center frequency. As a result, the quality factor and selectivity increase. Accordingly, as we add stages, the gain at 98 MHz (WHAT's frequency) decreases, and that station is "tuned out."



**Figure 12.35**  
Single-stage tuned amplifier.

**Figure 12.36**

Bode plots for one-, two-, three-, and four-stage tuned amplifiers.



## Learning Assessments

**E12.17** A parallel  $RLC$  circuit has the following parameters:  $R = 2 \text{ k}\Omega$ ,  $L = 20 \text{ mH}$ , and  $C = 150 \text{ }\mu\text{F}$ . Determine the resonant frequency, the  $Q$ , and the bandwidth of the circuit.

**ANSWER:**

$\omega_0 = 577 \text{ rad/s}$ ;  $Q = 173$ ; and  $\text{BW} = 3.33 \text{ rad/s}$ .

**E12.18** A parallel  $RLC$  circuit has the following parameters:  $R = 6 \text{ k}\Omega$ ,  $\text{BW} = 1000 \text{ rad/s}$ , and  $Q = 120$ . Determine the values of  $L$ ,  $C$ , and  $\omega_0$ .

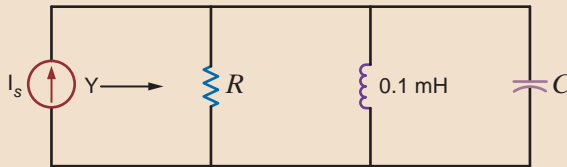
**ANSWER:**

$L = 417.5 \text{ }\mu\text{H}$ ;  
 $C = 0.167 \text{ }\mu\text{F}$ ; and  
 $\omega_0 = 119,760 \text{ rad/s}$ .

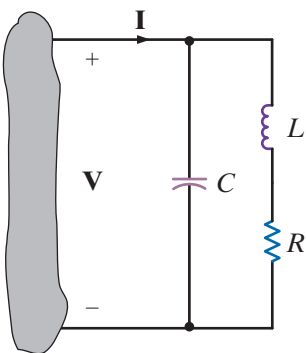
**E12.19** The parallel  $RLC$  resonant circuit in Fig. E12.19 has a resonant frequency of 12,000  $\text{rad/s}$  and an admittance of 5  $\text{mS}$  at resonance. Find  $R$  and  $C$ .

**ANSWER:**

$R = 200 \text{ }\Omega$ ,  $C = 69.44 \text{ nF}$ .



**Figure E12.19**



**Figure 12.37**

Practical parallel resonant circuit.

In general, the resistance of the winding of an inductor cannot be neglected, and hence a more practical parallel resonant circuit is the one shown in Fig. 12.37. The input admittance of this circuit is

$$\begin{aligned} Y(j\omega) &= j\omega C + \frac{1}{R + j\omega L} \\ &= j\omega C + \frac{R - j\omega L}{R^2 + \omega^2 L^2} \\ &= \frac{R}{R^2 + \omega^2 L^2} + j\left(\omega C - \frac{\omega L}{R^2 + \omega^2 L^2}\right) \end{aligned}$$

The frequency at which the admittance is purely real is

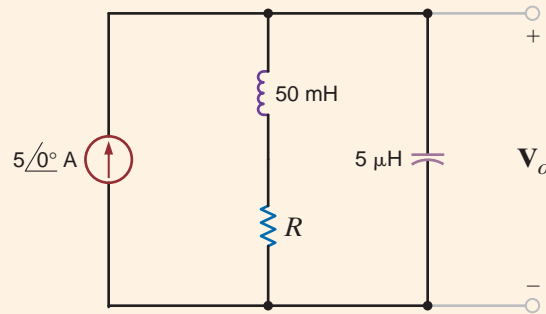
$$\omega_r C - \frac{\omega_r L}{R^2 + \omega_r^2 L^2} = 0$$

$$\omega_r = \sqrt{\frac{1}{LC} - \frac{R^2}{L^2}}$$

12.49



Given the tank circuit in Fig. 12.38, let us determine  $\omega_0$  and  $\omega_r$  for  $R = 50 \Omega$  and  $R = 5 \Omega$ .



## EXAMPLE 12.16

**Figure 12.38**

Tank circuit used in Example 12.16.

Using the network parameter values, we obtain

$$\begin{aligned}\omega_0 &= \frac{1}{\sqrt{LC}} \\ &= \frac{1}{\sqrt{(0.05)(5)(10^{-6})}} \\ &= 2000 \text{ rad/s} \\ f_0 &= 318.3 \text{ Hz}\end{aligned}$$

If  $R = 50 \Omega$ , then

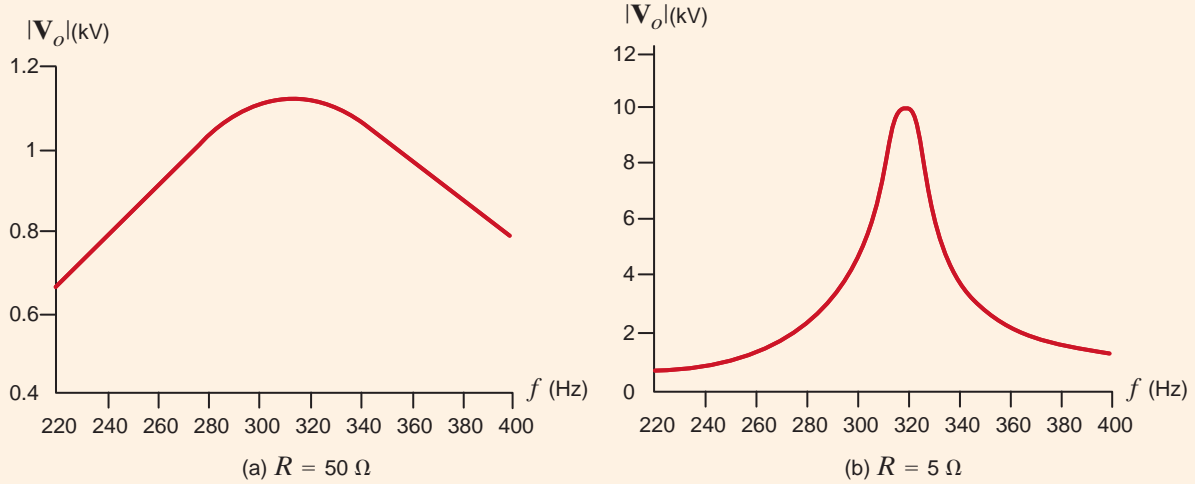
$$\begin{aligned}\omega_r &= \sqrt{\frac{1}{LC} - \frac{R^2}{L^2}} \\ &= \sqrt{\frac{1}{(0.05)(5)(10^{-6})} - \left(\frac{50}{0.05}\right)^2} \\ &= 1732 \text{ rad/s} \\ f_r &= 275.7 \text{ Hz}\end{aligned}$$

If  $R = 5 \Omega$ , then

$$\begin{aligned}\omega_r &= \sqrt{\frac{1}{(0.05)(5)(10^{-6})} - \left(\frac{5}{0.05}\right)^2} \\ &= 1997 \text{ rad/s} \\ f_r &= 317.9 \text{ Hz}\end{aligned}$$

Note that as  $R \rightarrow 0$ ,  $\omega_r \rightarrow \omega_0$ . This fact is also illustrated in the frequency-response curves in Figs. 12.39a and b, where we have plotted  $|V_o|$  versus frequency for  $R = 50 \Omega$  and  $R = 5 \Omega$ , respectively.

## SOLUTION



**Figure 12.39**  
Frequency-response curves for Example 12.16.

Let us now try to relate some of the things we have learned about resonance to the Bode plots we presented earlier. The admittance for the series resonant circuit is

$$\begin{aligned} \mathbf{Y}(j\omega) &= \frac{1}{R + j\omega L + 1/j\omega C} \\ &= \frac{j\omega C}{(j\omega)^2 LC + j\omega CR + 1} \end{aligned} \tag{12.50}$$

The standard form for the quadratic factor is

$$(j\omega\tau)^2 + 2\zeta\omega\tau j + 1$$

where  $\tau = 1/\omega_0$ , and hence in general the quadratic factor can be written as

$$\frac{(j\omega)^2}{\omega_0^2} + \frac{2\zeta\omega}{\omega_0} j + 1 \tag{12.51}$$

If we now compare this form of the quadratic factor with the denominator of  $\mathbf{Y}(j\omega)$ , we find that

$$\omega_0^2 = \frac{1}{LC}$$

$$\frac{2\zeta}{\omega_0} = CR$$

and therefore,

$$\zeta = \frac{R}{2} \sqrt{\frac{C}{L}}$$

However, from Eq. (12.13),

$$Q = \frac{1}{R} \sqrt{\frac{L}{C}}$$

and hence,

$$Q = \frac{1}{2\zeta} \tag{12.52}$$

To illustrate the significance of this equation, consider the Bode plot for the function  $\mathbf{Y}(j\omega)$ . The plot has an initial slope of +20 dB/decade due to the zero at the origin. If  $\zeta > 1$ , the poles represented by the quadratic factor in the denominator will simply roll off the fre-

frequency response, as illustrated in Fig. 12.12a, and at high frequencies the slope of the composite characteristic will be  $-20$  dB/decade. If  $0 < \zeta < 1$ , the frequency response will peak as shown in Fig. 12.12a, and the sharpness of the peak will be controlled by  $\zeta$ . If  $\zeta$  is very small, the peak of the frequency response is very narrow, the  $Q$  of the network is very large, and the circuit is very selective in filtering the input signal. Eq. (12.52) and Fig. 12.23 illustrate the connections among the frequency response, the  $Q$ , and the  $\zeta$  of a network.

Throughout this book we have employed a host of examples to illustrate the concepts being discussed. In many cases the actual values of the parameters were unrealistic in a practical sense, even though they may have simplified the presentation. In this section we illustrate how to *scale* the circuits to make them more realistic.

There are two ways to scale a circuit: *magnitude* or *impedance scaling* and *frequency scaling*. To magnitude scale a circuit, we simply multiply the impedance of each element by a scale factor  $K_M$ . Therefore, a resistor  $R$  becomes  $K_MR$ . Multiplying the impedance of an inductor  $j\omega L$  by  $K_M$  yields a new inductor  $K_M L$ , and multiplying the impedance of a capacitor  $1/j\omega C$  by  $K_M$  yields a new capacitor  $C/K_M$ . Therefore, in magnitude scaling,

$$\begin{aligned} R' &\rightarrow K_M R \\ L' &\rightarrow K_M L \\ C' &\rightarrow \frac{C}{K_M} \end{aligned} \quad 12.53$$

since

$$\omega'_0 = \frac{1}{\sqrt{L'C'}} = \frac{1}{\sqrt{K_M LC/K_M}} = \omega_0$$

and  $Q'$  is

$$Q' = \frac{\omega_0 L'}{R'} = \frac{\omega_0 K_M L}{K_M R} = Q$$

The resonant frequency, the quality factor, and therefore the bandwidth are unaffected by magnitude scaling.

In frequency scaling the scale factor is denoted as  $K_F$ . The resistor is frequency independent and, therefore, unaffected by this scaling. The new inductor  $L'$ , which has the same impedance at the scaled frequency  $\omega'_1$ , must satisfy the equation

$$j\omega_1 L = j\omega'_1 L'$$

where  $\omega'_1 = k_F \omega_1$ . Therefore,

$$j\omega_1 L = jK_F \omega_1 L'$$

Hence, the new inductor value is

$$L' = \frac{L}{K_F}$$

Using a similar argument, we find that

$$C' = \frac{C}{K_F}$$

Therefore, to frequency scale by a factor  $K_F$ ,

$$\begin{aligned} R' &\rightarrow R \\ L' &\rightarrow \frac{L}{K_F} \\ C' &\rightarrow \frac{C}{K_F} \end{aligned} \quad 12.54$$

## 12.4

### Scaling

[hint]

Magnitude or impedance scaling.

[hint]

Frequency scaling.

Note that

$$\omega'_0 = \frac{1}{\sqrt{(L/K_F)(C/K_F)}} = K_F \omega_0$$

and

$$Q' = \frac{K_F \omega_0 L}{R K_F} = Q$$

and therefore,

$$BW' = K_F(BW)$$

Hence, the resonant frequency and bandwidth of the circuit are affected by frequency scaling.

### EXAMPLE 12.17

If the values of the circuit parameters in Fig 12.37 are  $R = 2 \Omega$ ,  $L = 1 \text{ H}$ , and  $C = 1/2 \text{ F}$ , let us determine the values of the elements if the circuit is magnitude scaled by a factor  $K_M = 10^2$  and frequency scaled by a factor  $K_F = 10^2$ .

**SOLUTION** The magnitude scaling yields

$$R' = 2K_M = 200 \Omega$$

$$L' = (1)K_M = 100 \text{ H}$$

$$C' = \frac{1}{2} \frac{1}{K_M} = \frac{1}{200} \text{ F}$$

Applying frequency scaling to these values yields the final results:

$$R'' = 200 \Omega$$

$$L'' = \frac{100}{K_F} = 100 \mu\text{H}$$

$$C'' = \frac{1}{200} \frac{1}{K_F} = 0.005 \mu\text{F}$$

## Learning Assessment

**E12.20** An  $RLC$  network has the following parameter values:  $R = 10 \Omega$ ,  $L = 1 \text{ H}$ , and  $C = 2 \text{ F}$ . Determine the values of the circuit elements if the circuit is magnitude scaled by a factor of 100 and frequency scaled by a factor of 10,000. **ANSWER:**  $R = 1 \text{ k}\Omega$ ;  $L = 10 \text{ mH}$ ;  $C = 2 \mu\text{F}$ .

## 12.5

### Filter Networks

**PASSIVE FILTERS** A filter network is generally designed to pass signals with a specific frequency range and reject or attenuate signals whose frequency spectrum is outside this pass-band. The most common filters are *low-pass* filters, which pass low frequencies and reject high frequencies; *high-pass* filters, which pass high frequencies and block low frequencies; *band-pass* filters, which pass some particular band of frequencies and reject all frequencies outside the range; and *band-rejection* filters, which are specifically designed to reject a particular band of frequencies and pass all other frequencies.

The ideal frequency characteristic for a low-pass filter is shown in Fig. 12.40a. Also shown is a typical or physically realizable characteristic. Ideally, we would like the low-pass filter to pass all frequencies to some frequency  $\omega_0$  and pass no frequency above that value; however, it is not possible to design such a filter with linear circuit elements. Hence, we must be content to employ filters that we can actually build in the laboratory, and these filters have frequency characteristics that are simply not ideal.

A simple low-pass filter network is shown in Fig. 12.40b. The voltage gain for the network is

$$\mathbf{G}_v(j\omega) = \frac{1}{1 + j\omega RC} \quad 12.55$$

which can be written as

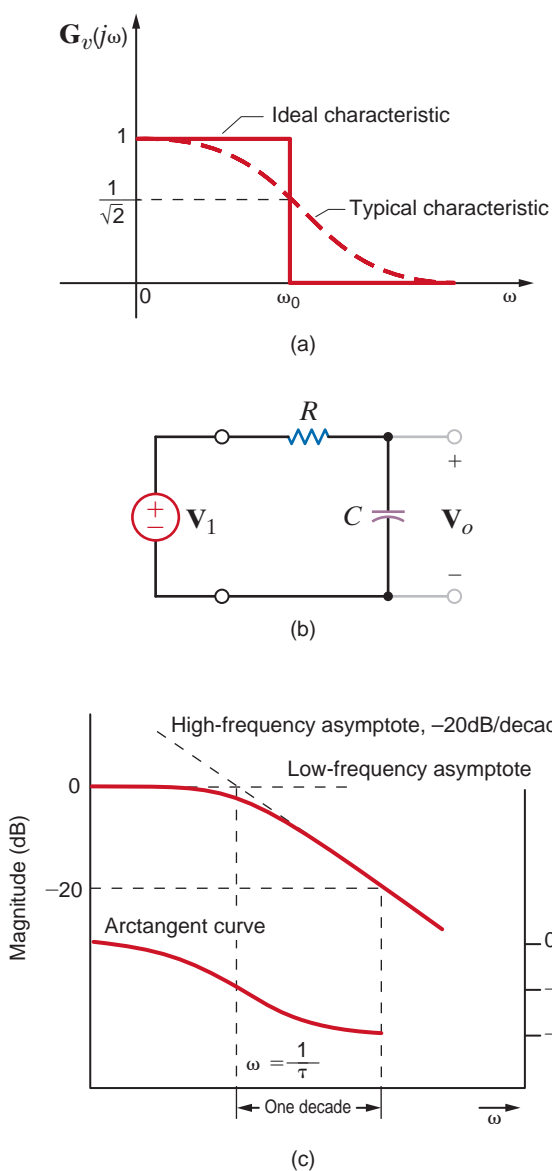
$$\mathbf{G}_v(j\omega) = \frac{1}{1 + j\omega\tau} \quad 12.56$$

where  $\tau = RC$ , the time constant. The amplitude characteristic is

$$M(\omega) = \frac{1}{[1 + (\omega\tau)^2]^{1/2}} \quad 12.57$$

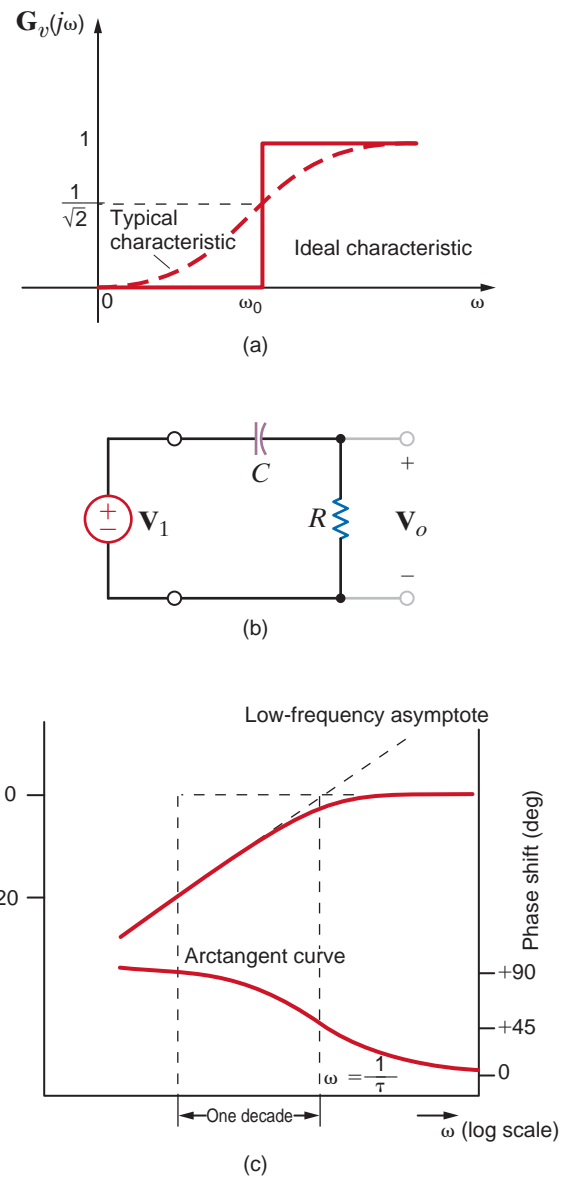
and the phase characteristic is

$$\phi(\omega) = -\tan^{-1} \omega\tau \quad 12.58$$



**Figure 12.40**

Low-pass filter circuit and its frequency characteristics.



**Figure 12.41**

High-pass filter circuit and its frequency characteristics.

Note that at the break frequency,  $\omega = \frac{1}{\tau}$ , the amplitude is

$$M\left(\omega = \frac{1}{\tau}\right) = \frac{1}{\sqrt{2}} \quad 12.59$$

The break frequency is also commonly called the *half-power frequency*. This name is derived from the fact that if the voltage or current is  $1/\sqrt{2}$  of its maximum value, then the power, which is proportional to the square of the voltage or current, is one-half its maximum value.

The magnitude, in decibels, and phase curves for this simple low-pass circuit are shown in Fig. 12.40c. Note that the magnitude curve is flat for low frequencies and rolls off at high frequencies. The phase shifts from  $0^\circ$  at low frequencies to  $-90^\circ$  at high frequencies.

The ideal frequency characteristic for a high-pass filter is shown in Fig. 12.41a, together with a typical characteristic that we could achieve with linear circuit components. Ideally, the high-pass filter passes all frequencies above some frequency  $\omega_0$  and no frequencies below that value.

A simple high-pass filter network is shown in Fig. 12.41b. This is the same network as shown in Fig. 12.40b, except that the output voltage is taken across the resistor. The voltage gain for this network is

$$\mathbf{G}_v(j\omega) = \frac{j\omega\tau}{1 + j\omega\tau} \quad 12.60$$

where once again  $\tau = RC$ . The magnitude of this function is

$$M(\omega) = \frac{\omega\tau}{[1 + (\omega\tau)^2]^{1/2}} \quad 12.61$$

and the phase is

$$\phi(\omega) = \frac{\pi}{2} - \tan^{-1}\omega\tau \quad 12.62$$

The half-power frequency is  $\omega = 1/\tau$ , and the phase at this frequency is  $45^\circ$ .

The magnitude and phase curves for this high-pass filter are shown in Fig. 12.41c. At low frequencies the magnitude curve has a slope of  $+20$  dB/decade due to the term  $\omega\tau$  in the numerator of Eq. (12.61). Then at the break frequency the curve begins to flatten out. The phase curve is derived from Eq. (12.62).

Ideal and typical amplitude characteristics for simple band-pass and band-rejection filters are shown in Figs. 12.42a and b, respectively. Simple networks that are capable of realizing the typical characteristics of each filter are shown below as characteristics in Figs. 12.42c and d.  $\omega_0$  is the center frequency of the pass or rejection band and the frequency at which the maximum or minimum amplitude occurs.  $\omega_{LO}$  and  $\omega_{HI}$  are the lower and upper break frequencies or *cutoff frequencies*, where the amplitude is  $1/\sqrt{2}$  of the maximum value. The width of the pass or rejection band is called *bandwidth*, and hence

$$BW = \omega_{HI} - \omega_{LO} \quad 12.63$$

To illustrate these points, let us consider the band-pass filter. The voltage transfer function is

$$\mathbf{G}_v(j\omega) = \frac{R}{R + j(\omega L - 1/\omega C)}$$

and, therefore, the amplitude characteristic is

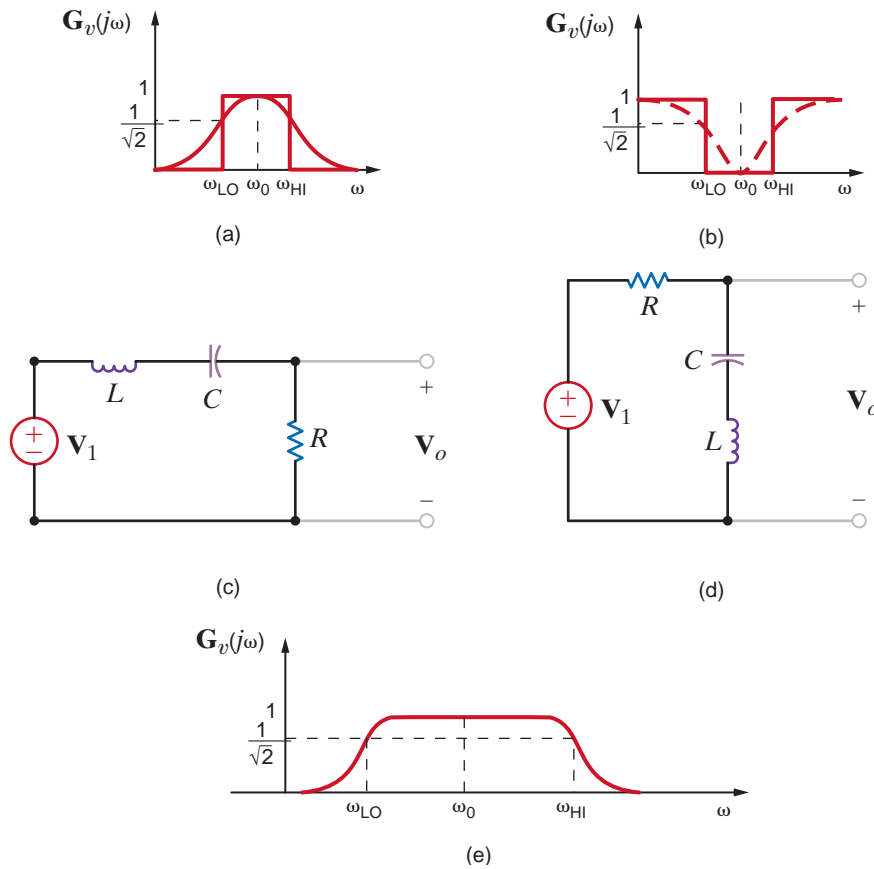
$$M(\omega) = \frac{RC\omega}{\sqrt{(RC\omega)^2 + (\omega^2 LC - 1)^2}}$$

At low frequencies

$$M(\omega) \approx \frac{RC\omega}{1} \approx 0$$

At high frequencies

$$M(\omega) \approx \frac{RC\omega}{\omega^2 LC} \approx \frac{R}{\omega L} \approx 0$$

**Figure 12.42**

Band-pass and band-rejection filters and characteristics.

In the midfrequency range  $(RC\omega)^2 \gg (\omega^2 LC - 1)^2$ , and thus  $M(\omega) \approx 1$ . Therefore, the frequency characteristic for this filter is shown in Fig. 12.42e. The center frequency is  $\omega_0 = 1/\sqrt{LC}$ . At the lower cutoff frequency

$$\omega^2 LC - 1 = -RC\omega$$

or

$$\omega^2 + \frac{R\omega}{L} - \omega_0^2 = 0$$

Solving this expression for  $\omega_{LO}$ , we obtain

$$\omega_{LO} = \frac{-(R/L) + \sqrt{(R/L)^2 + 4\omega_0^2}}{2}$$

At the upper cutoff frequency

$$\omega^2 LC - 1 = +RC\omega$$

or

$$\omega^2 - \frac{R}{L}\omega - \omega_0^2 = 0$$

Solving this expression for  $\omega_{HI}$ , we obtain

$$\omega_{HI} = \frac{+(R/L) + \sqrt{(R/L)^2 + 4\omega_0^2}}{2}$$

Therefore, the bandwidth of the filter is

$$\text{BW} = \omega_{HI} - \omega_{LO} = \frac{R}{L}$$

## EXAMPLE 12.18

Consider the frequency-dependent network in Fig. 12.43. Given the following circuit parameter values:  $L = 159 \mu\text{H}$ ,  $C = 159 \mu\text{F}$ , and  $R = 10 \Omega$ , let us demonstrate that this one network can be used to produce a low-pass, high-pass, or band-pass filter.

**SOLUTION** The voltage gain  $\mathbf{V}_R/\mathbf{V}_S$  is found by voltage division to be

$$\begin{aligned}\frac{\mathbf{V}_R}{\mathbf{V}_S} &= \frac{R}{j\omega L + R + 1/(j\omega C)} = \frac{j\omega\left(\frac{R}{L}\right)}{(j\omega)^2 + j\omega\left(\frac{R}{L}\right) + \frac{1}{LC}} \\ &= \frac{(62.9 \times 10^3)j\omega}{-\omega^2 + (62.9 \times 10^3)j\omega + 39.6 \times 10^6}\end{aligned}$$

which is the transfer function for a band-pass filter. At resonance,  $\omega^2 = 1/LC$ , and hence

$$\frac{\mathbf{V}_R}{\mathbf{V}_S} = 1$$

Now consider the gain  $\mathbf{V}_L/\mathbf{V}_S$ :

$$\begin{aligned}\frac{\mathbf{V}_L}{\mathbf{V}_S} &= \frac{j\omega L}{j\omega L + R + 1/(j\omega C)} = \frac{-\omega^2}{(j\omega)^2 + j\omega\left(\frac{R}{L}\right) + \frac{1}{LC}} \\ &= \frac{-\omega^2}{-\omega^2 + (62.9 \times 10^3)j\omega + 39.6 \times 10^6}\end{aligned}$$

which is a second-order high-pass filter transfer function. Again, at resonance,

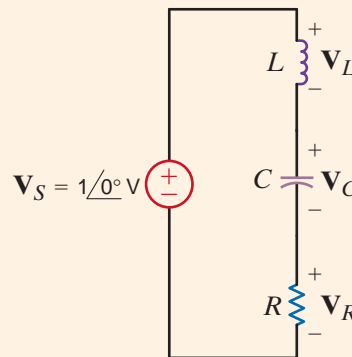
$$\frac{\mathbf{V}_L}{\mathbf{V}_S} = \frac{j\omega L}{R} = jQ = j0.1$$

Similarly, the gain  $\mathbf{V}_C/\mathbf{V}_S$  is

$$\begin{aligned}\frac{\mathbf{V}_C}{\mathbf{V}_S} &= \frac{1/(j\omega C)}{j\omega L + R + 1/(j\omega C)} = \frac{\frac{1}{LC}}{(j\omega)^2 + j\omega\left(\frac{R}{L}\right) + \frac{1}{LC}} \\ &= \frac{39.6 \times 10^6}{-\omega^2 + (62.9 \times 10^3)j\omega + 39.6 \times 10^6}\end{aligned}$$

which is a second-order low-pass filter transfer function. At the resonant frequency,

$$\frac{\mathbf{V}_C}{\mathbf{V}_S} = \frac{1}{j\omega CR} = -jQ = -j0.1$$



**Figure 12.43**  
Circuit used in  
Example 12.18.

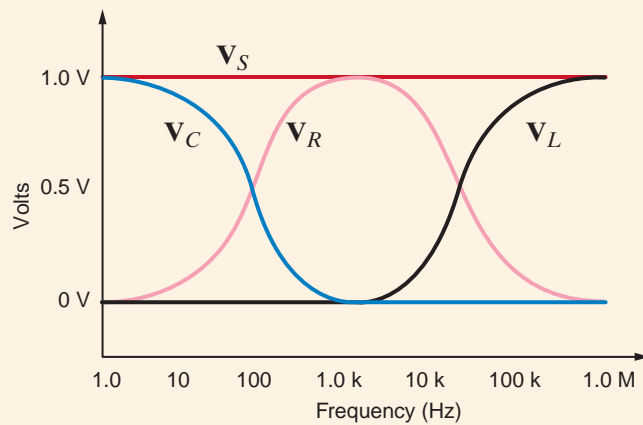


Thus, one circuit produces three different filters depending on where the output is taken. This can be seen in the Bode plot for each of the three voltages in Fig. 12.44, where  $\mathbf{V}_S$  is set to  $1/0^\circ$  V.

We know that Kirchhoff's voltage law must be satisfied at all times. Note from the Bode plot that the  $\mathbf{V}_R + \mathbf{V}_C + \mathbf{V}_L$  also equals  $\mathbf{V}_S$  at all frequencies! Finally, let us demonstrate KVL by adding  $\mathbf{V}_R$ ,  $\mathbf{V}_L$ , and  $\mathbf{V}_C$ :

$$\mathbf{V}_L + \mathbf{V}_R + \mathbf{V}_C = \frac{\left( (j\omega)^2 + j\omega\left(\frac{R}{L}\right) + \frac{1}{\sqrt{LC}} \right) \mathbf{V}_S}{(j\omega)^2 + j\omega\left(\frac{R}{L}\right) + \frac{1}{\sqrt{LC}}} = \mathbf{V}_S$$

Thus, even though  $\mathbf{V}_S$  is distributed between the resistor, capacitor, and inductor based on frequency, the sum of the three voltages completely reconstructs  $\mathbf{V}_S$ .



**Figure 12.44**

Bode plots for network in Fig. 12.43.

A telephone transmission system suffers from 60-Hz interference caused by nearby power utility lines. Let us use the network in Fig. 12.45 to design a simple notch filter to eliminate the 60-Hz interference.

## EXAMPLE 12.19

The resistor  $R_{\text{eq}}$  represents the equivalent resistance of the telephone system to the right of the  $LC$  combination. The  $LC$  parallel combination has an equivalent impedance of

### SOLUTION

$$\mathbf{Z} = (j\omega L) // (1/j\omega C) = \frac{(L/C)}{j\omega L + 1/(j\omega C)}$$

Now the voltage transfer function is

$$\frac{\mathbf{V}_o}{\mathbf{V}_{\text{in}}} = \frac{R_{\text{eq}}}{R_{\text{eq}} + \mathbf{Z}} = \frac{R_{\text{eq}}}{R_{\text{eq}} + \frac{(L/C)}{j\omega L + (1/j\omega C)}}$$

which can be written

$$\frac{\mathbf{V}_o}{\mathbf{V}_{\text{in}}} = \frac{(j\omega)^2 + \frac{1}{LC}}{(j\omega)^2 + \left(\frac{j\omega}{R_{\text{eq}}C}\right) + \frac{1}{LC}}$$

Note that at resonance, the numerator and thus  $V_o$  go to zero. We want resonance to occur at 60 Hz. Thus,

$$\omega_0 = \frac{1}{\sqrt{LC}} = 2\pi(60) = 120\pi$$

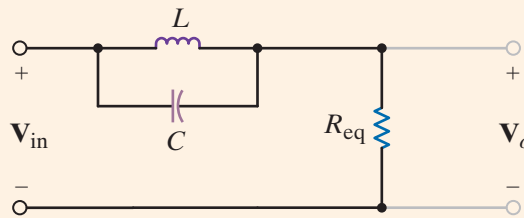
If we select  $C = 100 \mu\text{F}$ , then the required value for  $L$  is 70.3 mH—both are reasonable values. To demonstrate the effectiveness of the filter, let the input voltage consist of a 60-Hz sinusoid and a 1000-Hz sinusoid of the form

$$v_{in}(t) = 1 \sin[(2\pi)60t] + 0.2 \sin[(2\pi)1000t]$$

The input and output waveforms are both shown in Fig. 12.46. Note that the output voltage, as desired, contains none of the 60-Hz interference.

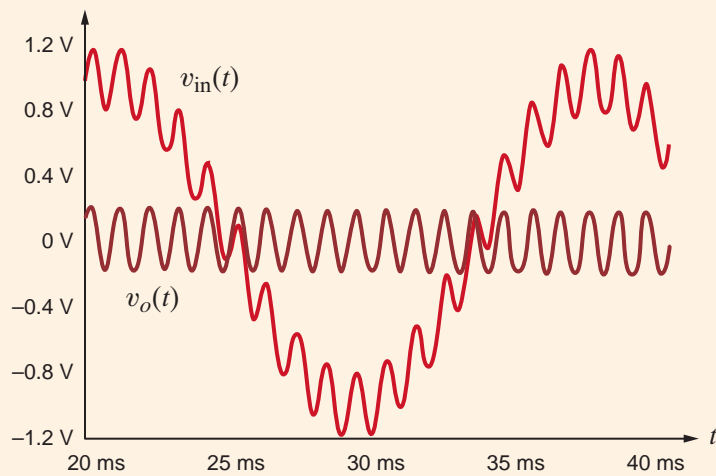
**Figure 12.45**

Circuit used in Example 12.19.



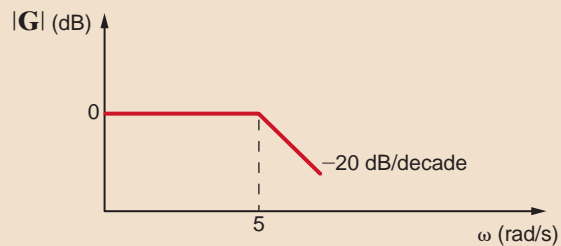
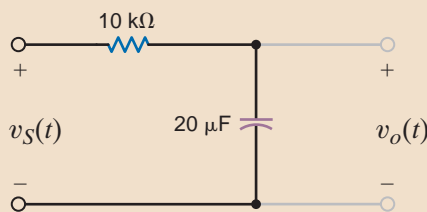
**Figure 12.46**

Transient analysis of the network in Fig. 12.45.



## Learning Assessments

**E12.21** Given the filter network shown in Fig. E12.21, sketch the magnitude characteristic of the Bode plot for  $G_v(j\omega)$ . **ANSWER:**



**Figure E12.21**

**E12.22** Given the filter network in Fig. E12.22, sketch the magnitude characteristic of the Bode plot for  $G_v(j\omega)$ .

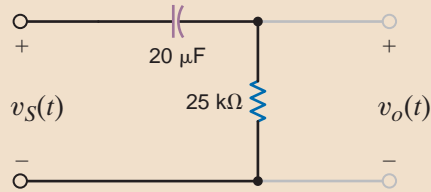
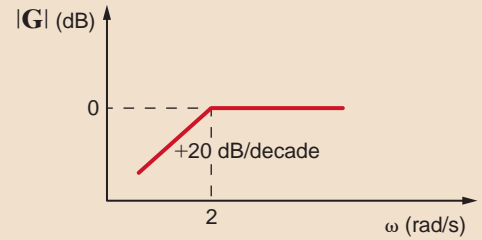


Figure E12.22

**ANSWER:**



**E12.23** A band-pass filter network is shown in Fig. E12.23. Sketch the magnitude characteristic of the Bode plot for  $G_v(j\omega)$ .

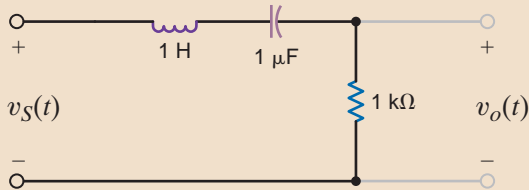
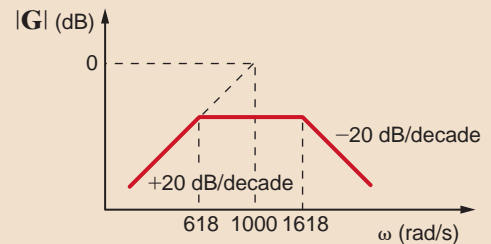


Figure E12.23

**ANSWER:**



**E12.24** Determine what type of filter the network shown in Fig. E12.24 represents by determining the voltage transfer function.

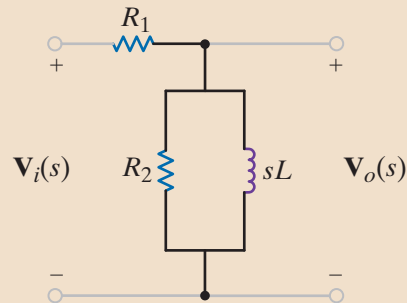


Figure E12.24

**ANSWER:**

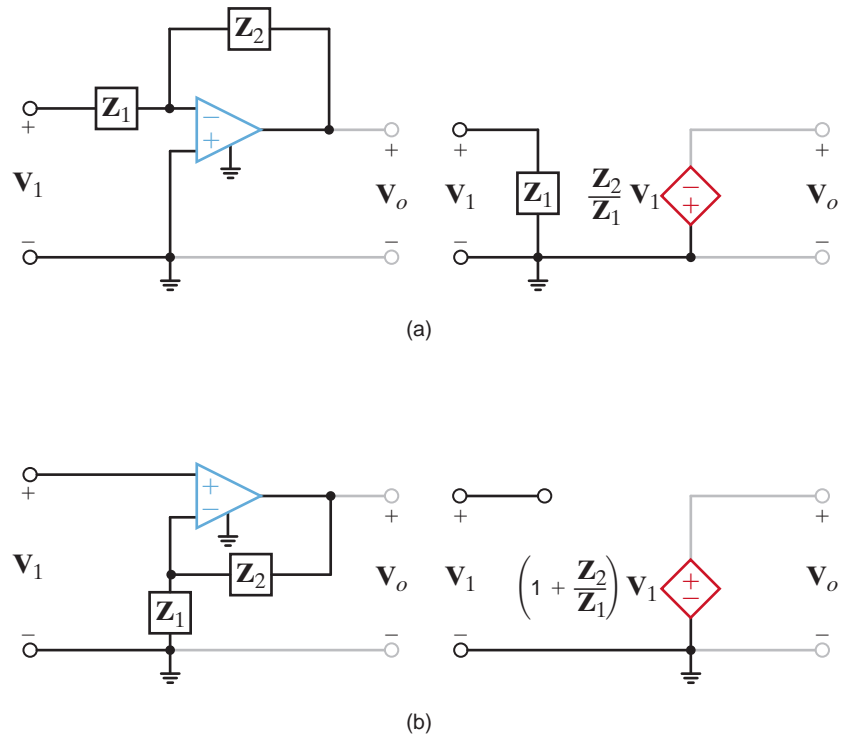
$$\frac{s \left( \frac{L}{R_1} \right)}{s \left[ \frac{(R_1 + R_2)L}{R_1 R_2} \right]} + 1; \text{ This is a high-pass filter.}$$

**ACTIVE FILTERS** In the preceding section we saw that the four major classes of filters (*low pass*, *high pass*, *band pass*, and *band rejection*) are realizable with simple, passive element circuits. However, passive filters have some serious drawbacks. One obvious problem is the inability to generate a network with a gain  $> 1$  since a purely passive network cannot add energy to a signal. Another serious drawback of passive filters is the need in many topologies for inductive elements. Inductors are generally expensive and are not usually available in precise values. In addition, inductors usually come in odd shapes (toroids, bobbins, E-cores, etc.) and are not easily handled by existing automated printed circuit board assembly machines. By applying operational amplifiers in linear feedback circuits, one can generate all of the primary filter types using only resistors, capacitors, and the op-amp integrated circuits themselves.

The equivalent circuits for the operational amplifiers derived in Chapter 4 are also valid in the sinusoidal steady-state case, when we replace the attendant resistors with impedances. The equivalent circuits for the basic inverting and noninverting op-amp circuits are shown in Figs. 12.47a and b, respectively. Particular filter characteristics are obtained by judiciously selecting the impedances  $Z_1$  and  $Z_2$ .

**Figure 12.47**

Equivalent circuits for the (a) inverting and (b) noninverting operational amplifier circuits.



**EXAMPLE 12.20**

**SOLUTION**

Let us determine the filter characteristics of the network shown in Fig. 12.48.

The impedances as illustrated in Fig. 12.47a are

$$Z_1 = R_1$$

and

$$Z_2 = \frac{R_2/j\omega C}{R_2 + 1/j\omega C} = \frac{R_2}{j\omega R_2 C + 1}$$

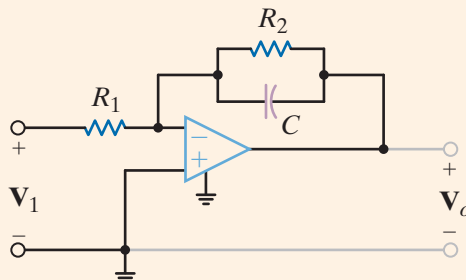
Therefore, the voltage gain of the network is

$$G_v(j\omega) = \frac{V_o(j\omega)}{V_1(j\omega)} = \frac{-R_2/R_1}{j\omega R_2 C + 1}$$

Note that the transfer function is that of a low-pass filter.

**Figure 12.48**

Operational amplifier filter circuit.



We will show that the amplitude characteristic for the filter network in Fig. 12.49a is as shown in Fig. 12.49b.

Comparing this network with that in Fig. 12.47b, we see that

$$\mathbf{Z}_1 = \frac{1}{j\omega C_1}$$

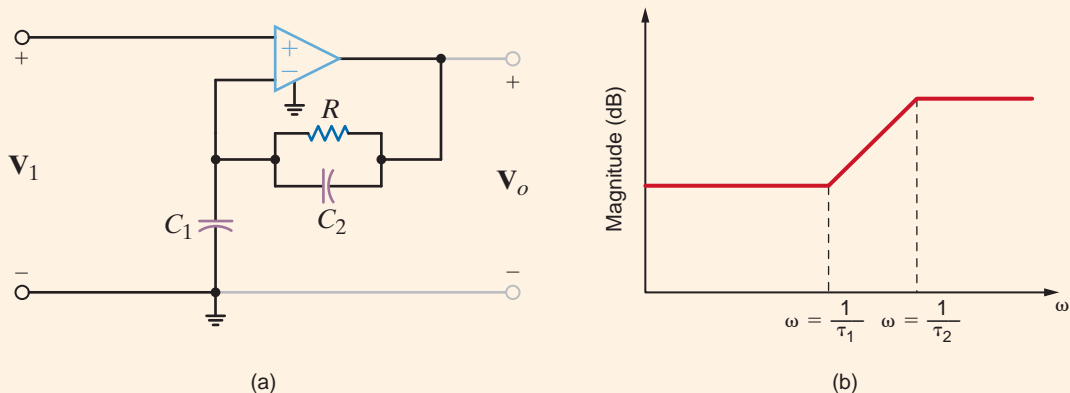
and

$$\mathbf{Z}_2 = \frac{R}{j\omega RC_2 + 1}$$

Therefore, the voltage gain for the network as a function of frequency is

$$\begin{aligned} G_v(j\omega) &= \frac{\mathbf{V}_o(j\omega)}{\mathbf{V}_1(j\omega)} = 1 + \frac{R/(j\omega RC_2 + 1)}{1/j\omega C_1} \\ &= \frac{j\omega(RC_1 + RC_2) + 1}{j\omega RC_2 + 1} \\ &= \frac{j\omega\tau_1 + 1}{j\omega\tau_2 + 1} \end{aligned}$$

where  $\tau_1 = R(C_1 + C_2)$  and  $\tau_2 = RC_2$ . Since  $\tau_1 > \tau_2$ , the amplitude characteristic is of the form shown in Fig. 12.49b. Note that the low frequencies have a gain of 1; however, the high frequencies are amplified. The exact amount of amplification is determined through selection of the circuit parameters.



**Figure 12.49**

Operational amplifier circuit and its amplitude characteristic.

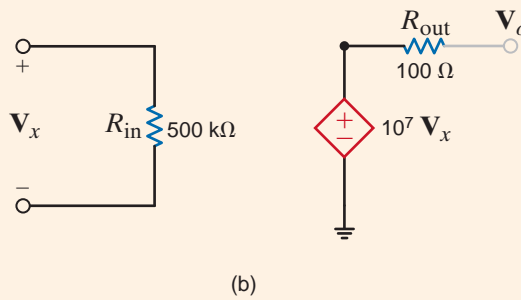
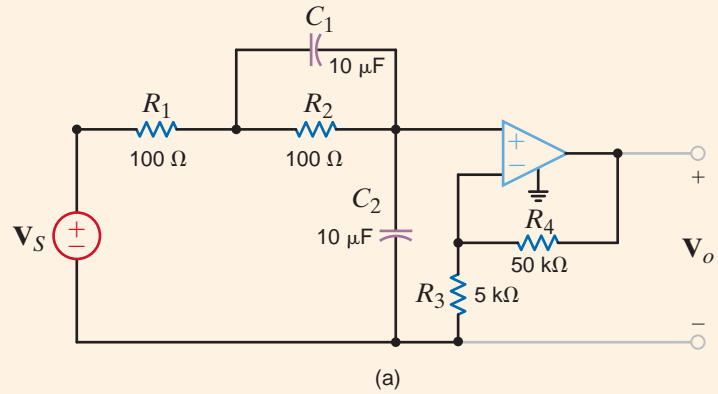
A low-pass filter is shown in Fig. 12.50, together with the op-amp subcircuit. We wish to plot the frequency response of the filter over the range from 1 to 10,000 Hz.

The frequency-response plot, which can be determined by any convenient method, is shown in Fig. 12.51.

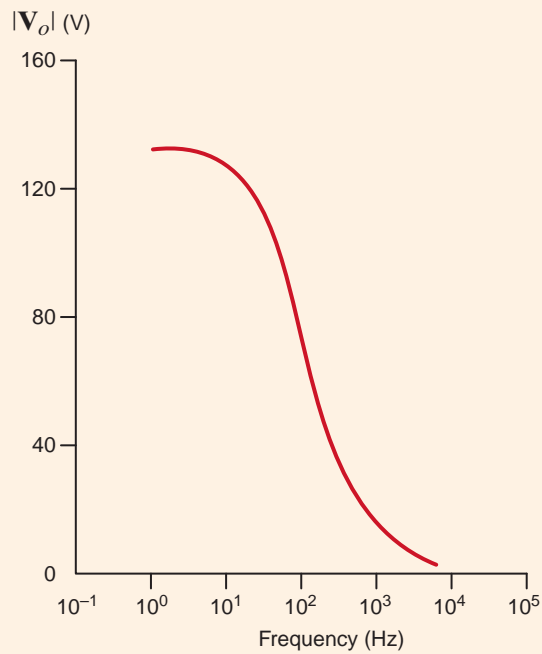
## EXAMPLE 12.22

**SOLUTION**

**Figure 12.50**  
 Circuit used in  
 Example 12.22:  
 (a) low-pass filter;  
 (b) op-amp subcircuit.

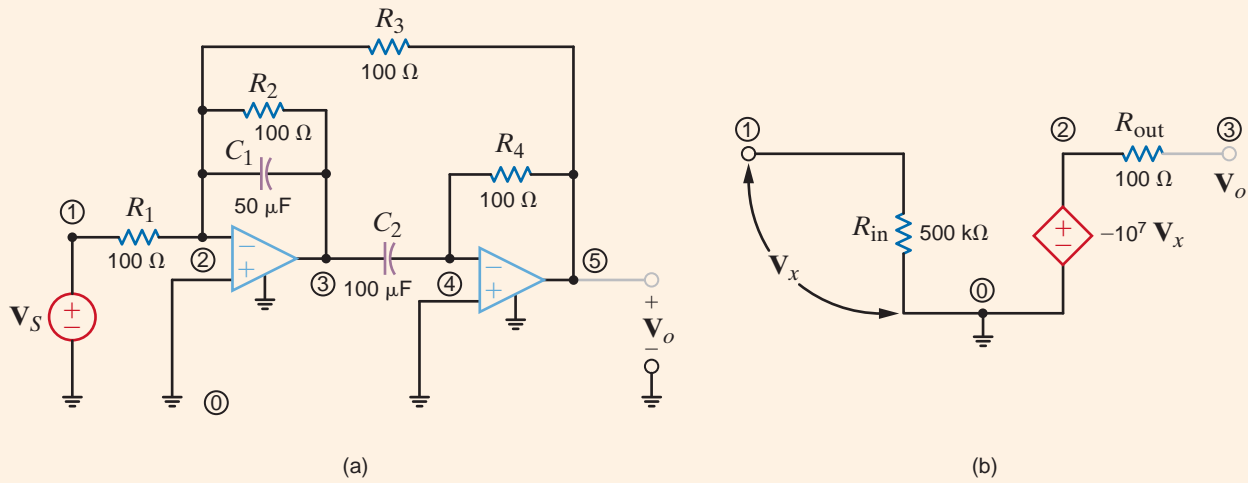


**Figure 12.51**  
 Frequency-response plot  
 for the network in  
 Example 12.22.



A high-pass filter network is shown in Fig. 12.52 together with the op-amp subcircuit. We wish to plot the frequency response of the filter over the range from 1 to 100 kHz.

## EXAMPLE 12.23

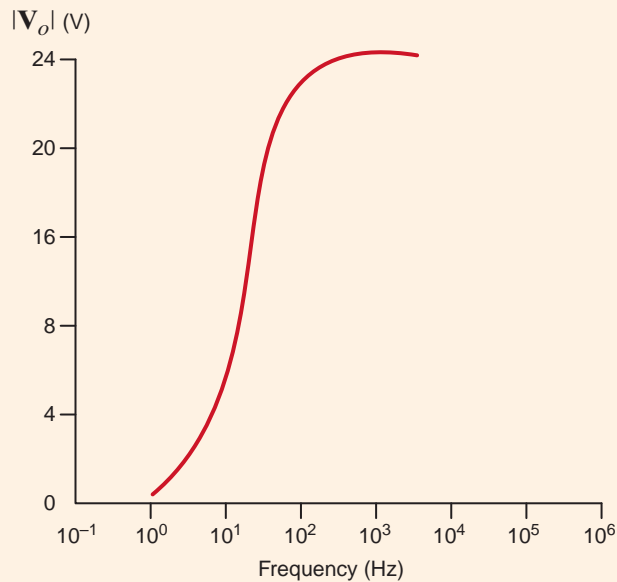


**Figure 12.52**

Circuits used in Example 12.23: (a) high-pass filter; (b) op-amp subcircuit.

The frequency-response plot for this high-pass filter is shown in Fig. 12.53.

## SOLUTION



**Figure 12.53**

Frequency-response plot for the network in Example 12.23.

# Learning Assessment

**E12.25** Given the filter network shown in Fig. E12.25, determine the transfer function  $G_v(j\omega)$ , sketch the magnitude characteristic of the Bode plot for  $G_v(j\omega)$ , and identify the filter characteristics of the network.

**ANSWER:**  $G_v(j\omega) = \frac{-j\omega CR_2}{1 + j\omega CR_1}$ ; this is a high-pass filter.

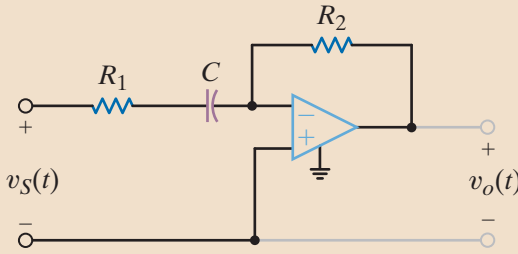
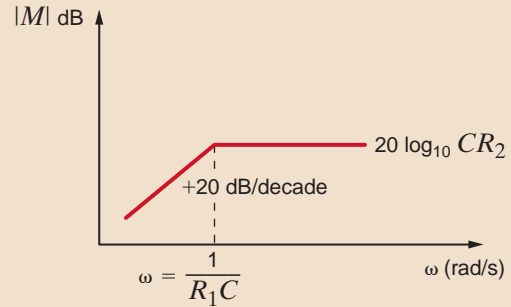


Figure E12.25



All the circuits considered so far in this section have been first-order filters. In other words, they all had no more than one pole and/or one zero. In many applications, it is desired to generate a circuit with a frequency selectivity greater than that afforded by first-order circuits. The next logical step is to consider the class of second-order filters. For most active-filter applications, if an order greater than two is desired, one usually takes two or more active filter circuits and places them in series so that the total response is the desired higher-order response. This is done because first- and second-order filters are well understood and easily obtained with single op-amp circuits.

In general, second-order filters will have a transfer function with a denominator containing quadratic poles of the form  $s^2 + As + B$ . For high-pass and low-pass circuits,  $B = \omega_c^2$  and  $A = 2\zeta\omega_c$ . For these circuits,  $\omega_c$  is the cutoff frequency, and  $\zeta$  is the damping ratio discussed earlier.

For band-pass circuits,  $B = \omega_0^2$  and  $A = \omega_0/Q$ , where  $\omega_0$  is the center frequency and  $Q$  is the quality factor for the circuit. Notice that  $Q = 1/2\zeta$ .  $Q$  is a measure of the selectivity of these circuits. The bandwidth is  $\omega_0/Q$ , as discussed previously.

The transfer function of the second-order low-pass active filter can generally be written as

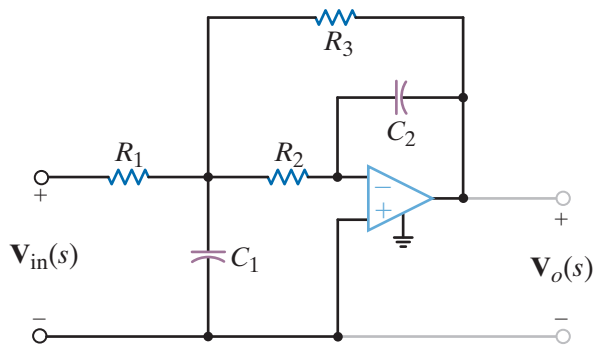
$$\mathbf{H}(s) = \frac{H_0\omega_c^2}{s^2 + 2\zeta\omega_c s + \omega_c^2} \tag{12.64}$$

where  $H_0$  is the dc gain. A circuit that exhibits this transfer function is illustrated in Fig. 12.54 and has the following transfer function:

$$\mathbf{H}(s) = \frac{\mathbf{V}_o(s)}{\mathbf{V}_{in}(s)} = \frac{-\left(\frac{R_3}{R_1}\right)\left(\frac{1}{R_3R_2C_1C_2}\right)}{s^2 + s\left(\frac{1}{R_1C_1} + \frac{1}{R_2C_1} + \frac{1}{R_3C_1}\right) + \frac{1}{R_3R_2C_1C_2}} \tag{12.65}$$

Figure 12.54

Second-order low-pass filter.





We wish to determine the damping ratio, cutoff frequency, and dc gain  $H_o$  for the network in Fig. 12.54 if  $R_1 = R_2 = R_3 = 5 \text{ k}\Omega$  and  $C_1 = C_2 = 0.1 \text{ }\mu\text{F}$ .

Comparing Eqs. (12.64) and (12.65), we find that

$$\omega_c = \frac{1}{\sqrt{R_3 R_2 C_1 C_2}}$$

$$2\zeta\omega_c = \frac{1}{C_1} \left( \frac{1}{R_1} + \frac{1}{R_2} + \frac{1}{R_3} \right)$$

and therefore,

$$\zeta = \frac{1}{2} \sqrt{\frac{C_2}{C_1}} \left( \frac{1}{R_1} + \frac{1}{R_2} + \frac{1}{R_3} \right) \sqrt{R_2 R_3}$$

In addition, we note that

$$H_o = -\frac{R_3}{R_1}$$

Substituting the given parameter values into the preceding equation yields

$$\omega_0 = 2000 \text{ rad/s}$$

$$\zeta = 1.5$$

and

$$H_o = -1$$

## EXAMPLE 12.24

SOLUTION

We wish to vary the capacitors  $C_1$  and  $C_2$  in Example 12.24 to achieve damping ratios of 1.0, 0.75, 0.50, and 0.25 while maintaining  $\omega_c$  constant at 2000 rad/s.

As shown in the cutoff-frequency equation in Example 12.24, if  $\omega_c$  is to remain constant at 2000 rad/s, the product of  $C_1$  and  $C_2$  must remain constant. Using the capacitance values in Example 12.24, we have

$$C_1 C_2 = (10)^{-14}$$

or

$$C_2 = \frac{(10)^{-14}}{C_1}$$

Substituting this expression into the equation for the damping ratio yields

$$\zeta = \frac{\sqrt{10^{-14}}}{\sqrt{C_1} \sqrt{C_1}} \left[ \frac{1}{2} \left( \frac{1}{R_1} + \frac{1}{R_2} + \frac{1}{R_3} \right) \right] \sqrt{R_2 R_3}$$

$$= \frac{(0.15)(10^{-6})}{C_1}$$

or

$$C_1 = \frac{(0.15)(10^{-6})}{\zeta}$$

Therefore, for  $\zeta = 1.0, 0.75, 0.50,$  and  $0.25$ , the corresponding values for  $C_1$  are  $0.15, 0.20, 0.30,$  and  $0.6 \text{ }\mu\text{F}$ , respectively. The values of  $C_2$  that correspond to these values of  $C_1$  are  $67, 50, 33,$  and  $17 \text{ nF}$ , respectively.

## EXAMPLE 12.25

SOLUTION

This example illustrates that we can adjust the network parameters to achieve a specified transient response while maintaining the cutoff frequency of the filter constant. In fact, as a general rule, we design filters with specific characteristics through proper manipulation of the network parameters.

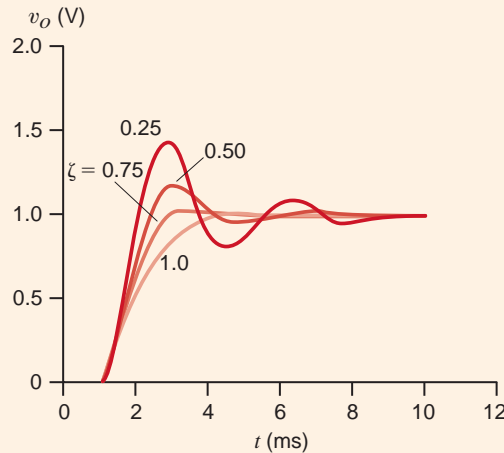
## EXAMPLE 12.26

We will now demonstrate that the transient response of the circuits generated in Example 12.25 will exhibit increasing overshoot and ringing as  $\zeta$  is decreased. We will apply a  $-1\text{-V}$  step function to the input of the network and employ the op-amp model with  $R_i = \infty \Omega$ ,  $R_o = 0 \Omega$ , and  $A = 10^5$ .

**SOLUTION** The transient response for the four cases of damping, including the associated values for the capacitors, can be computed using any convenient method.

The results are shown in Fig. 12.55. The curves indicate that a  $\zeta = 0.75$  might be a good design compromise between rapid step response and minimum overshoot.

**Figure 12.55**  
Transient analysis of  
Example 12.25.



## Learning Assessment

**E12.26** Verify that Eq. (12.65) is the transfer function for the network in Fig. 12.54.

The general transfer function for the second-order band-pass filter is

$$\frac{\mathbf{V}_o(s)}{\mathbf{V}_s(s)} = \frac{sH_o}{s^2 + \frac{\omega_0}{Q}s + \omega_0^2} \quad 12.66$$

As discussed earlier,  $\omega_0$  is the center frequency of the band-pass characteristic and  $Q$  is the quality factor. Recall that for low-pass filters,  $H_o$  was the passband or dc gain. For a band-pass filter, the gain is maximum at the center frequency,  $\omega_0$ . To find this maximum gain we substitute  $s = j\omega_0$  in the preceding expression to obtain

$$\begin{aligned} \frac{\mathbf{V}_o(j\omega_0)}{\mathbf{V}_s(j\omega_0)} &= \frac{j\omega_0 H_o}{-\omega_0^2 + j\omega_0(\omega_0/Q) + \omega_0^2} \\ &= \frac{QH_o}{\omega_0} \end{aligned} \quad 12.67$$

In addition, the difference between the high and low half-power frequencies (i.e.,  $\omega_{\text{HI}} - \omega_{\text{LO}}$ ) is, of course, the bandwidth

$$\omega_{\text{HI}} - \omega_{\text{LO}} = \text{BW} = \frac{\omega_0}{Q} \quad 12.68$$

$Q$  is a measure of the selectivity of the band-pass filter, and as the equation indicates, as  $Q$  is increased, the bandwidth is decreased.

An op-amp implementation of a band-pass filter is shown in Fig. 12.56. The transfer function for this network is

$$\frac{\mathbf{V}_o(s)}{\mathbf{V}_s(s)} = \frac{-\left(\frac{1}{R_1 C_1}\right)s}{s^2 + \left(\frac{1}{R_2 C_1} + \frac{1}{R_2 C_2}\right)s + \frac{1 + R_1/R_3}{R_1 R_2 C_1 C_2}} \quad 12.69$$

Comparing this expression to the more general expression for the band-pass filter yields the following definitions:

$$\begin{aligned} \omega_0 &= \left(\frac{1 + R_1/R_3}{R_1 R_2 C_1 C_2}\right)^{1/2} \\ \frac{Q}{\omega_0} &= \frac{R_2 C_1 C_2}{C_1 + C_2} \\ \frac{Q}{\omega_0} \omega_0 &= \frac{R_2 C_1 C_2}{C_1 + C_2} \left(\frac{1 + R_1/R_3}{R_1 R_2 C_1 C_2}\right)^{1/2} \end{aligned} \quad 12.70$$

These expressions can be simplified to yield

$$Q = \frac{(1 + R_1/R_3)^{1/2}}{1 + C_1/C_2} \left(\frac{R_2 C_1}{R_1 C_2}\right)^{1/2} \quad 12.71$$

$$\text{BW} = \frac{\omega_0}{Q} = \frac{1}{R_2} \left(\frac{1}{C_1} + \frac{1}{C_2}\right) \quad 12.72$$

and

$$\left.\frac{\mathbf{V}_o}{\mathbf{V}_s}\right|_{\omega=\omega_0} = \frac{QH_o}{\omega_0} = -\frac{R_2}{R_1} \left(\frac{1}{1 + C_1/C_2}\right) \quad 12.73$$

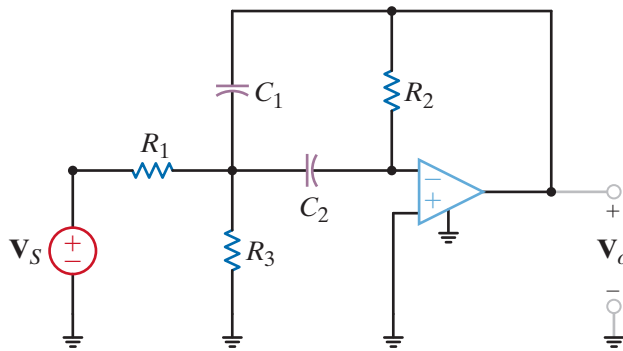


Figure 12.56

Second-order band-pass filter.

We wish to find a new expression for Eqs. (12.70) to (12.73) under the condition  $C_1 = C_2 = C$ .

Using the condition, we find that the equations reduce to

$$\begin{aligned} \omega_0 &= \frac{1}{C} \sqrt{\frac{1 + R_1/R_3}{R_1 R_2}} \\ Q &= \frac{1}{2} \sqrt{\frac{R_2}{R_1}} \sqrt{1 + \frac{R_1}{R_3}} \\ \text{BW} &= \frac{2}{R_2 C} \end{aligned}$$

and

$$\left.\frac{\mathbf{V}_o}{\mathbf{V}_s}\right|_{\omega=\omega_0} = -\frac{R_2}{2R_1}$$

## EXAMPLE 12.27

### SOLUTION

## EXAMPLE 12.28

Let us use the equations in Example 12.27 to design a band-pass filter of the form shown in Fig. 12.56 with a  $BW = 2000$  rad/s,  $(V_o/V_s)(\omega_0) = -5$ , and  $Q = 3$ . Use  $C = 0.1$   $\mu$ F, and determine the center frequency of the filter.

**SOLUTION** Using the filter equations, we find that

$$BW = \frac{2}{R_2 C}$$

$$2000 = \frac{2}{R_2 (10)^{-7}}$$

$$R_2 = 10 \text{ k}\Omega$$

$$\frac{V_o}{V_s}(\omega_0) = -\frac{R_2}{2R_1}$$

$$-5 = -\frac{10,000}{2R_1}$$

$$R_1 = 1 \text{ k}\Omega$$

and

$$Q = \frac{1}{2} \sqrt{\frac{R_2}{R_1}} \sqrt{1 + \frac{R_1}{R_3}}$$

$$3 = \frac{1}{2} \sqrt{\frac{10,000}{1000}} \sqrt{1 + \frac{1000}{R_3}}$$

or

$$R_3 = 385 \Omega$$

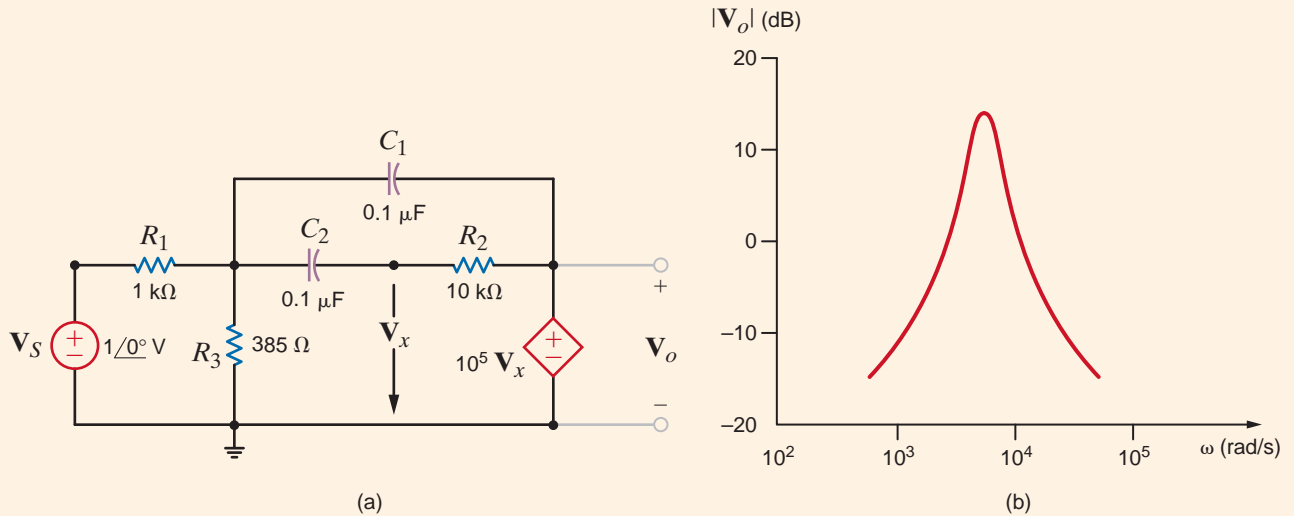
Therefore,  $R_1 = 1$  k $\Omega$ ,  $R_2 = 10$  k $\Omega$ ,  $R_3 = 385$   $\Omega$ , and  $C = 0.1$   $\mu$ F completely define the band-pass filter shown in Fig. 12.56. The center frequency of the filter is

$$\begin{aligned} \omega_0 &= \frac{1}{C} \sqrt{\frac{1 + R_1/R_3}{R_1 R_2}} \\ &= \frac{1}{10^{-7}} \sqrt{\frac{1 + (1000/385)}{(1000)(10,000)}} \\ &= 6000 \text{ rad/s} \end{aligned}$$

## EXAMPLE 12.29

We wish to obtain the Bode plot for the filter designed in Example 12.28. We will employ the op-amp model, in which  $R_i = \infty$ ,  $R_o = 0$ , and  $A = 10^5$ , and plot over the frequency range from 600 to 60 kHz.

**SOLUTION** The equivalent circuit for the filter is shown in Fig. 12.57a. The Bode plot is shown in Fig. 12.57b. As can be seen from the plot, the center frequency is 6 krad/s and  $BW = 2$  krad/s.

**Figure 12.57**

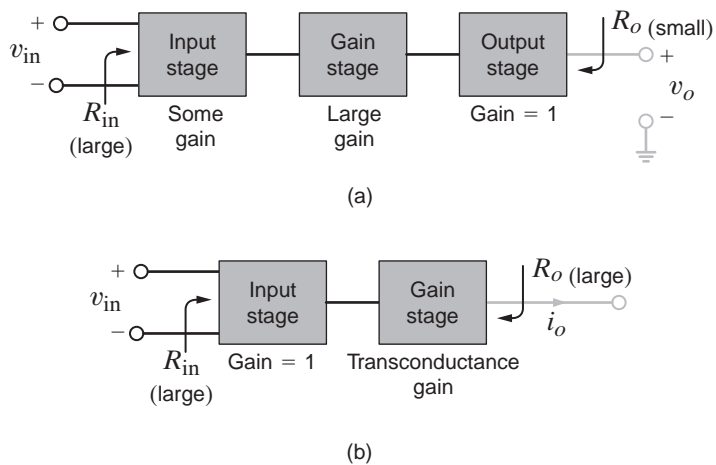
Figures employed in Example 12.29: (a) band-pass filter equivalent circuit; (b) Bode plot.

## Learning Assessment

**E12.27** Verify that Eq. (12.69) is the transfer function for the band-pass filter in Fig. 12.56.

Although op-amps are very popular and extremely useful in a wide variety of filter applications, they are not always the best choices as a result of limitations associated with their internal circuitry. Two examples are high-frequency active filters and low-voltage ( $< 3\text{ V}$ ) circuitry. Given the evolution of the wireless market (cell phones, pagers, etc.), these applications will only grow in prominence. There is, however, an op-amp variant called the *operational transconductance amplifier*, or OTA, that performs excellently in these scenarios, allowing, for example, very advanced filters to be implemented on a single chip. In this text, we will introduce OTA fundamentals and applications, including analog multipliers, automatic gain control amplifiers, and the aforementioned filters.

Advantages of the OTA over the op-amp can be deduced from the diagrams in Fig. 12.58. In the three-stage op-amp model, the input stage provides the large-input resistance, converts

**Figure 12.58**

Block diagrams depicting the physical construction of the (a) op-amp and (b) OTA.

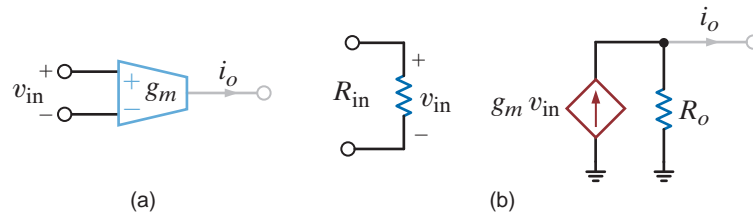


Figure 12.59

The OTA schematic symbol (a) and simple model (b).

the differential input voltage  $v_{in}(t)$  to a single-ended (referenced to ground) voltage, and produces some voltage gain. The gain stage provides the bulk of the op-amp's voltage gain. Finally, the output stage has little if any voltage gain but produces a low-output resistance. This three-stage model accurately depicts the physical design of most op-amps.

Now consider the two-stage OTA model. As in the op-amp, the input stage provides a large-input resistance, but its voltage gain is minimal. Unlike the op-amp, the gain stage produces a current output rather than a voltage. Since the output signal is a current, the gain is amps per volt, or transconductance, in A/V or siemen. With no output stage, the OTA is more compact and consumes less power than the op-amp and has an overall output resistance of  $R_o$ —a large value. Having all of the OTA's gain in a single stage further simplifies the internal design, resulting in a simple, fast, compact amplifier that can be efficiently replicated many times on a single silicon chip. The schematic symbol for the OTA and a simpler model are shown in Figs. 12.59a and b, respectively.

To compare the performance of the op-amp and OTA, consider the circuits in Fig. 12.60. For the op-amp, the overall voltage gain is

$$A = \frac{v_o}{v_{in}} = \left[ \frac{R_{in}}{R_S + R_{in}} \right] A_V \left[ \frac{R_L}{R_L + R_o} \right] \quad 12.74$$

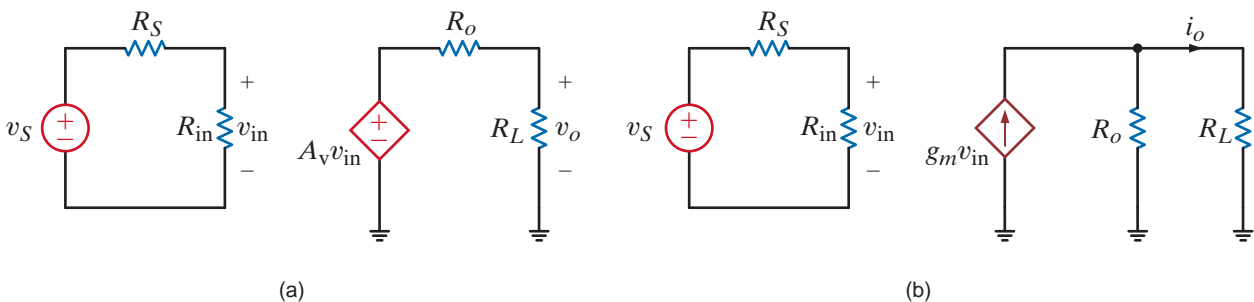


Figure 12.60

Simple circuits that demonstrate the relative strengths of the op-amp (a) and OTA (b).

Ideally,  $R_{in} \rightarrow \infty$ ,  $R_o \rightarrow 0$ , and the output voltage is independent of external components  $R_S$  and  $R_L$ . The overall gain of the OTA is

$$G_m = \frac{i_o}{v_{in}} = \left[ \frac{R_{in}}{R_S + R_{in}} \right] g_m \left[ \frac{R_o}{R_L + R_o} \right] \quad 12.75$$

For an ideal OTA, both  $R_{in}$  and  $R_o \rightarrow \infty$ , yielding a transconductance that is independent of  $R_S$  and  $R_L$ . Similarities and differences between ideal OTAs and ideal op-amps are listed in Table 12.2.

**TABLE 12.2** A comparison of ideal op-amps and OTA features

AMPLIFIER TYPE	IDEAL $R_{in}$	IDEAL $R_o$	IDEAL GAIN	INPUT CURRENTS	INPUT VOLTAGE
Op-amp	$\infty$	0	$\infty$	0	0
OTA	$\infty$	$\infty$	$g_m$	0	nonzero

As with op-amps, OTAs can be used to create mathematical circuits. We will focus on three OTA circuits used extensively in active filters: the integrator, the simulated resistor, and the summer. To simplify our analyses, we assume the OTA is ideal with infinite input and output resistances. The integrator in Fig. 12.61, which forms the heart of our OTA active filters, can be analyzed as follows:

$$i_o = g_m v_1 \quad v_o = \frac{1}{C} \int i_o dt \quad v_o = \frac{g_m}{C} \int v_1 dt \quad 12.76$$

Or, in the frequency domain,

$$\mathbf{I}_o = g_m \mathbf{V}_1 \quad \mathbf{V}_o = \frac{\mathbf{I}_o}{j\omega C} \quad \mathbf{V}_o = \frac{g_m}{j\omega C} \mathbf{V}_1 \quad 12.77$$

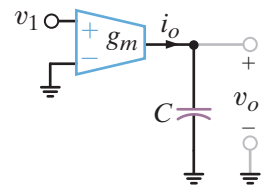
An interesting aspect of IC fabrication is that resistors (especially large-valued resistors, that is,  $> 10 \text{ k}\Omega$ ) are physically very large compared to other devices such as transistors. In addition, producing accurate values is quite difficult. This has motivated designers to use OTAs to simulate resistors. One such circuit is the grounded resistor, shown in Fig. 12.62. Applying the ideal OTA equations in Table 12.2,

$$i_o = g_m(0 - v_{in}) = -g_m v_{in} \quad i_{in} = -i_o \quad R_{eq} = \frac{v_{in}}{i_{in}} = \frac{1}{g_m} \quad 12.78$$

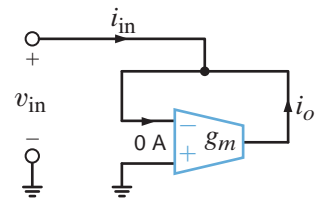
A simple summer circuit is shown in Fig. 12.63a, where OTA 3 is a simulated resistor. Based on Eq. (12.78), we produce the equivalent circuit in Fig. 12.63b. The analysis is straightforward.

$$i_{o1} = g_{m1} v_1 \quad i_{o2} = g_{m2} v_2 \quad i_o = i_{o1} + i_{o2} \quad v_o = \frac{i_o}{g_{m3}} = \frac{g_{m1}}{g_{m3}} v_1 + \frac{g_{m2}}{g_{m3}} v_2 \quad 12.79$$

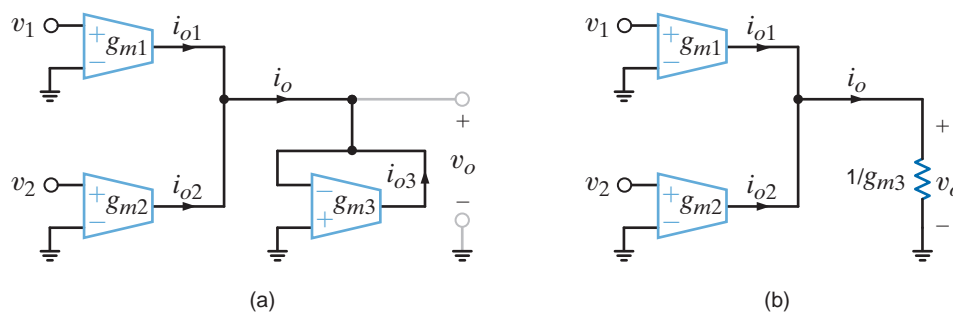
At this point, we introduce our last important feature of the OTA: programmability. The transconductance,  $g_m$ , is linearly controlled by a current called the amplifier bias current, or  $I_{ABC}$ , as seen in Fig. 12.64a. Unfortunately, the  $I_{ABC}$  input is not part of the schematic symbol. The sensitivity of  $g_m$  to  $I_{ABC}$  is typically 20 S/A, but the range of  $g_m$  and its maximum value depend on the OTA design. Typical values are 10 mS for the maximum  $g_m$  and 3 to 7 powers of ten, or decades, for the transconductance range. For example, if the maximum  $g_m$  were 10 mS and the range were 4 decades, then the minimum  $g_m$  would be 1  $\mu\text{S}$  and the usable range of  $I_{ABC}$  would be 0.05  $\mu\text{A}$  to 0.5 mA.

**Figure 12.61**

The OTA integrator.

**Figure 12.62**

The OTA simulated resistor.

**Figure 12.63**

An OTA voltage summer.

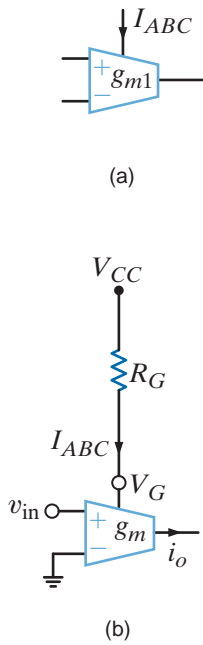


Fig. 12.64b shows a simple means for setting  $I_{ABC}$ . The gain set resistor,  $R_G$ , limits  $I_{ABC}$ :

$$I_{ABC} = \frac{V_{CC} - V_G}{R_G} \tag{12.80}$$

where  $V_{CC}$  is the positive power supply. If the voltage at the pin labeled  $V_G$  is known, then  $I_{ABC}$  can be set by  $R_G$ . Unfortunately, different manufacturers design their OTAs with different  $V_G$  values, which are listed in the amplifier's data sheet. For our work, we will assume that  $V_G$  is zero volts.

$$I_{ABC} = \frac{V_{CC}}{R_G} \tag{12.81}$$

**Figure 12.64**

A modified OTA schematic symbol showing (a) the amplifier input bias current and (b) setting  $I_{ABC}$  with a single resistor.

**EXAMPLE 12.30**

An ideal OTA has a  $g_m - I_{ABC}$  sensitivity of 20, a maximum  $g_m$  of 4 mS, and a  $g_m$  range of 4 decades. Using the circuit in Fig. 12.62, produce an equivalent resistance of 25 k $\Omega$ , giving both  $g_m$  and  $I_{ABC}$ .

**SOLUTION**

From Eq. (12.78), the equivalent resistance is  $R_{eq} = 1/g_m = 25 \text{ k}\Omega$ , yielding  $g_m = 40 \mu\text{S}$ . Since  $g_m = 20I_{ABC}$ , the required amplifier bias current is  $I_{ABC} = 2 \mu\text{A}$ .

**EXAMPLE 12.31**

The circuit in Fig. 12.65 is a floating simulated resistor. For an ideal OTA, find an expression for  $R_{eq} = v_1/i_1$ . Using the OTA described in Example 12.30, produce an 80-k $\Omega$  resistance. Repeat for a 10-M $\Omega$  resistor.

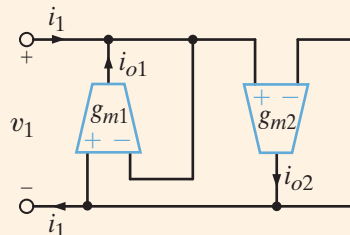
**SOLUTION**

For OTA 1, we have  $i_{o1} = g_{m1}(-v_1)$  and  $i_1 = -i_{o1}$ . Thus,  $R_{eq} = v_1/i_1 = 1/g_{m1}$ . We must also consider the return current that is contributed by OTA 2, where  $i_{o2} = g_{m2}(v_1)$  and  $i_{o2} = i_1$ . Now  $R_{eq} = v_1/i_1 = 1/g_{m2}$ . For proper operation, we must ensure that  $g_{m1} = g_{m2}$ .

For  $R_{eq} = 1/g_m = 80 \text{ k}\Omega$ , we have  $g_{m1} = g_{m2} = g_m = 12.5 \mu\text{S}$ . Since  $g_m = 20I_{ABC}$ , the required bias current for both OTAs is  $I_{ABC} = 0.625 \mu\text{A}$ . Changing to  $R_{eq} = 1/g_m = 10 \text{ M}\Omega$ , the transconductance becomes  $g_m = 0.1 \mu\text{S}$ . However, the minimum  $g_m$  for these OTAs is specified at 0.4  $\mu\text{S}$ . We must find either suitable OTAs or a better circuit.

**Figure 12.65**

The floating simulated resistor.





Using the summer in Fig. 12.63 and the OTAs specified in Example 12.30, produce the following function:

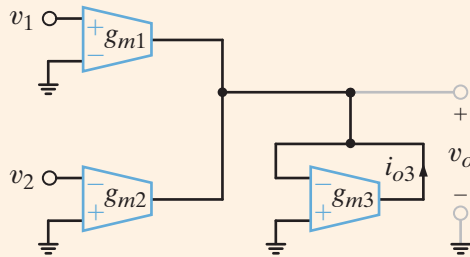
$$v_o = 10v_1 + 2v_2$$

Repeat for the function

$$v_o = 10v_1 - 2v_2$$

Comparing Eq. (12.79) with the desired function, we see that  $g_{m1}/g_{m3} = 10$  and  $g_{m2}/g_{m3} = 2$ . With only two equations and three unknowns, we must choose one  $g_m$  value. Arbitrarily selecting  $g_{m3} = 0.1$  mS yields  $g_{m1} = 1$  mS and  $g_{m2} = 0.2$  mS. The corresponding bias currents are  $I_{ABC1} = 50$   $\mu$ A,  $I_{ABC2} = 10$   $\mu$ A, and  $I_{ABC3} = 5$   $\mu$ A.

For the second case, we simply invert the sign of  $v_2$  as shown in Fig. 12.66. This is yet another advantage of OTA versus op-amps. Again choosing  $g_{m3} = 0.1$  mS yields the same bias current as the first case.



### SOLUTION

**Figure 12.66**

A slight modification of the adder in Fig. 12.63 yields this subtracting circuit.

Since the gain of the OTA is controlled by  $I_{ABC}$ , is it possible to design an analog multiplier whose output is the product of two voltages? This is shown in Fig. 12.67 where the output current can be written as

$$i_o = v_1 g_m = v_1 (20I_{ABC}) = 20v_1 \left[ \frac{v_2}{R_G} \right] \quad 12.82$$

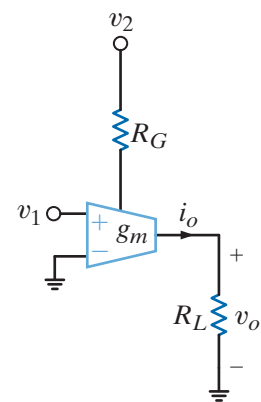
and the output voltage as

$$v_o = i_o R_L = 20 \left[ \frac{R_L}{R_G} \right] v_1 v_2 \quad 12.83$$

The resistor ratio is used to set the scale factor for the output voltage. Using  $\pm$  supply voltages,  $V_{CC}$  and  $V_{EE}$ , we see that the multiplier can support positive and negative voltages at  $v_1$  and at  $v_o$ . However,  $v_2$  must supply positive  $I_{ABC}$  into the bias current pin. Thus,  $v_2$  must be positive. This kind of multiplier, where only one input can be positive or negative, is called a two-quadrant multiplier. When both inputs can be of either sign, the classification is a four-quadrant multiplier.

Consider a Sunday drive through the city out to the countryside and back again. You happen to pass the antenna for the very same FM radio station you're listening to on your car radio. You know that your car antenna receives a larger signal when you are nearer the antenna, but the radio's volume is the same whether you are near to or far from it. How does the car know?

Of course, the car has no idea where the station antenna is. Instead, the amplification between the car's antenna and its speakers is controlled based on the strength of the received signal—a technique called automatic gain control, or AGC. The circuit in Fig. 12.68 shows how this can be implemented with OTAs. There are two critical features here. First, the gain of OTA 1 is dependent on its own output voltage such that an increase in  $v_o$  causes a decrease in gain. This is called automatic gain control. Second,  $g_{m1}$  should be a function of the magnitude of  $v_o$  rather than its instantaneous value. A subcircuit called a peak detector performs this function. Although its internal workings are beyond our scope, we should understand the necessity of it.

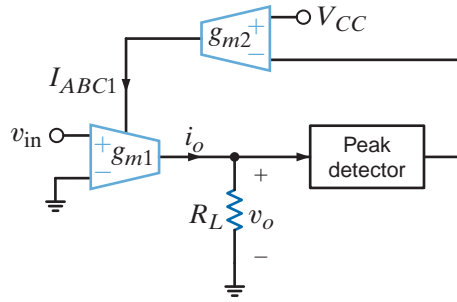


**Figure 12.67**

A two-quadrant analog multiplier.

**Figure 12.68**

An amplifier with automatic gain control implemented using two OTAs. A third OTA could be used to realize the load resistor if desired.



While OTA1 provides variable gain, OTA2 adjusts the gain to yield an output voltage dependent on itself:

$$v_o = i_o R_L = v_{in} g_{m1} R_L = v_{in} R_L (20 I_{ABC1}) = 20 v_{in} R_L g_{m2} (V_{CC} - |v_o|) = A v_{in} - B v_{in} |v_o| \quad 12.84$$

We see that the output voltage has two terms, both of which are proportional to  $v_{in}$ . It is in the second term, where the proportionality constant depends on  $v_o$  itself, that automatic gain control occurs. Solving Eq. (12.84) for  $v_o$  shows the impact of AGC more clearly. (To facilitate the point we are making, we have dropped the absolute value operator for now. The peak detector is, of course, still required.)

$$v_o = \frac{A v_{in}}{1 + B v_{in}} \quad 12.85$$

When the received signal  $v_{in}$  is small (we are far from the station’s antenna), the denominator approaches unity and the output is approximately  $A v_{in}$ . However, as we get nearer to the antenna,  $v_{in}$  increases and the denominator grows until  $B v_{in} \gg 1$ . Now  $v_o$  approaches the ratio  $A/B$ , essentially independent of the received signal, and the radio volume is less sensitive to our distance from the antenna!

Using the subcircuits in Figs. 12.61 and 12.62, we can create active filters called OTA-C filters, which contain only OTAs and capacitors. The lack of resistors makes OTA-C filters ideal for single-chip, or monolithic, implementations. As an introduction, consider the circuit in Fig. 12.69. For ideal OTAs, the transfer function can be determined as follows:

$$I_{o1} = g_{m1} V_{i1} \quad I_{o2} = -g_{m2} V_o \quad I_C = V_o(j\omega C) = I_{o1} + I_{o2} \quad V_o = \frac{I_{o1} + I_{o2}}{j\omega C} = \frac{g_{m1}}{j\omega C} V_{i1} - \frac{g_{m2}}{j\omega C} V_o$$

Solving the transfer function yields the low-pass function

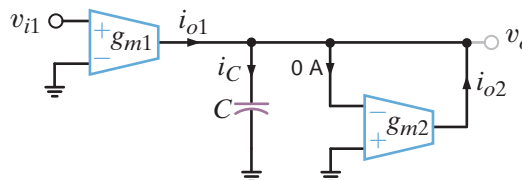
$$\frac{V_o}{V_{i1}} = \frac{g_{m1}/g_{m2}}{\frac{j\omega C}{g_{m2}} + 1} \quad 12.86$$

From Eq. (12.86), the circuit is a first-order low-pass filter with the asymptotic Bode plot shown in Fig. 12.70. Both the corner frequency,  $f_c = g_{m2}/(2\pi C)$ , and dc gain,  $A_{DC} = g_{m1}/g_{m2}$ , are programmable.

In monolithic OTA-C filters, the capacitors and OTAs are fabricated on a single chip. Typical OTA capacitor values range from about 1 pF up to 50 pF.

**Figure 12.69**

A simple first-order low-pass OTA-C filter.



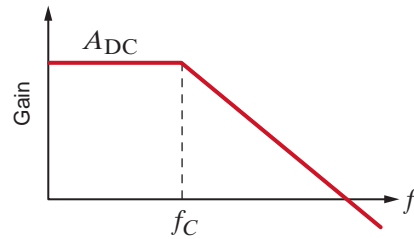


Figure 12.70

Asymptotic Bode plot for a first-order low-pass filter.

The low-pass filter in Fig. 12.69 is implemented using a 25-pF capacitor and OTAs with a  $g_m - I_{ABC}$  sensitivity of 20, a maximum  $g_m$  of 1 mS, and 3 decades of range. Find the required bias currents for the filter transfer function:

$$\frac{V_o}{V_{in}} = \frac{4}{\frac{j\omega}{2\pi(10^5)} + 1} \quad 12.87$$

Comparing Eq. (12.86) to the desired function,  $g_{m2}/C = (2\pi)10^5$ . For  $C = 25$  pF,  $g_{m2} = 15.7 \mu\text{S}$ . Since  $g_m = 20I_{ABC}$ , the bias current for OTA 2 is  $I_{ABC2} = 0.785 \mu\text{A}$ . Finally,  $g_{m1}/g_{m2} = 4$  yields  $I_{ABC1} = 3.14 \mu\text{A}$ .

## EXAMPLE 12.33

### SOLUTION

Of the dozens of OTA filter topologies, a very popular one is the two-integrator biquad filter. The term *biquad* is short for biquadratic, which, in filter terminology, means the filter gain is a ratio of two quadratic functions such as

$$\frac{V_o}{V_{in}} = \frac{A(j\omega)^2 + B(j\omega) + C}{(j\omega)^2 + \frac{\omega_0}{Q}(j\omega) + \omega_0^2} \quad 12.88$$

By selecting appropriate values for A, B, and C, low-pass, band-pass, and high-pass functions can be created, as listed in Table 12.3. Figure 12.71 shows the most popular two-integrator biquad used in practice—the Tow-Thomas filter. Assuming ideal OTAs, we can derive the filter's transfer function. For OTA 1, an integrator,

$$\frac{V_{o1}}{V_{i1} - V_{o2}} = \frac{g_{m1}}{j\omega C_1}$$

TABLE 12.3 Various Tow-Thomas biquad filter possibilities

FILTER TYPE	A	B	C
Low-pass	o	o	nonzero
Band-pass	o	nonzero	o
High-pass	nonzero	o	o

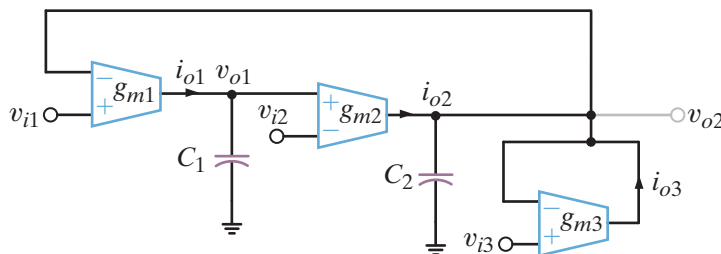


Figure 12.71

The Tow-Thomas OTA-C biquad filter.

The output current of OTA 2 is

$$I_{O2} = g_{m2}[V_{O1} - V_{i2}]$$

Applying KCL at the second output node, we find

$$I_{O3} + I_{O2} = (j\omega C_2)V_{O2}$$

where

$$I_{O3} = [V_{i3} - V_{O2}]g_{m3}$$

Solving for  $V_{O1}$  and  $V_{O2}$  yields

$$V_{O1} = \frac{\left[ \frac{j\omega C_2}{g_{m2}} + \frac{g_{m3}}{g_{m2}} \right] V_{i1} + V_{i2} - \left[ \frac{g_{m3}}{g_{m2}} \right] V_{i3}}{\left[ \frac{C_1 C_2}{g_{m1} g_{m2}} \right] (j\omega)^2 + \left[ \frac{g_{m3} C_1}{g_{m2} g_{m1}} \right] (j\omega) + 1}$$

and

$$V_{O2} = \frac{V_{i1} - \left[ \frac{j\omega C_1}{g_{m1}} \right] V_{i2} + \left[ \frac{j\omega C_1 g_{m3}}{g_{m1} g_{m2}} \right] V_{i3}}{\left[ \frac{C_1 C_2}{g_{m1} g_{m2}} \right] (j\omega)^2 + \left[ \frac{g_{m3} C_1}{g_{m2} g_{m1}} \right] (j\omega) + 1} \tag{12.89}$$

Note that this single circuit can implement both low-pass and band-pass filters depending on where the input is applied! Table 12.4 lists the possibilities. Comparing Eqs. (12.88) and (12.89), design equations for  $\omega_0$ ,  $Q$ , and the bandwidth can be written as

$$\omega_0 = \sqrt{\frac{g_{m1} g_{m2}}{C_1 C_2}} \quad \frac{\omega_0}{Q} = BW = \frac{g_{m3}}{C_2} \quad Q = \sqrt{\frac{g_{m1} g_{m2}}{g_{m3}^2}} \sqrt{\frac{C_2}{C_1}} \tag{12.90}$$

Consider a Tow-Thomas band-pass filter. From Eq. (12.90), if  $g_{m1} = g_{m2} = g_m$  and  $C_1 = C_2 = C$ , the following relationships are easily derived:

$$\omega_0 = \frac{g_m}{C} = \frac{k}{C} I_{ABC} \quad \frac{\omega_0}{Q} = BW = \frac{g_{m3}}{C} = \frac{k}{C} I_{ABC3} \quad Q = \frac{g_m}{g_{m3}} = \frac{I_{ABC}}{I_{ABC3}} \tag{12.91}$$

where  $k$  is the  $g_m - I_{ABC}$  sensitivity. Based on Eq. (12.91), we have efficient control over the filter characteristics. In particular, tuning  $I_{ABC}$  with  $I_{ABC3}$  fixed scales both the center frequency and  $Q$  directly without affecting bandwidth. Tuning  $I_{ABC3}$  only changes the bandwidth but not the center frequency. Finally, tuning all three bias currents scales both the center frequency and bandwidth proportionally, producing a constant  $Q$  factor.

**TABLE 12.4** Low-pass and band-pass combinations for the Tow-Thomas biquad filter in Figure 12.72

FILTER TYPE	INPUT	OUTPUT	SIGN
Low-pass	$v_{i2}$	$v_{o1}$	positive
	$v_{i3}$	$v_{o1}$	negative
Band-pass	$v_{i1}$	$v_{o2}$	positive
	$v_{i2}$	$v_{o2}$	negative
	$v_{i3}$	$v_{o2}$	positive

**EXAMPLE**  
**12.34**

**SOLUTION**

Using the OTA's specifications from Example 12.30 and 5-pF capacitors, design a Tow-Thomas low-pass filter with a corner frequency of 6 MHz,  $Q = 5$ , and dc gain of 1.

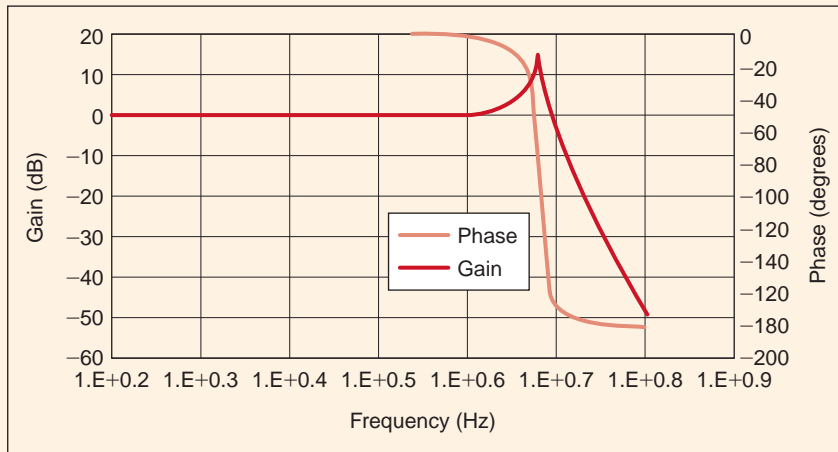
Using the  $v_{i1} - v_{o2}$  input-output pair with  $g_{m1} = g_{m2} = g_m$  and  $C_1 = C_2$  allows us to use Eq. (12.91):

$$g_m = \omega_0 C = (2\pi)(6 \times 10^6)(5 \times 10^{-12}) = 188.5 \mu\text{S} \quad g_{m3} = \frac{g_m}{Q} = 37.7 \mu\text{S}$$

The required bias currents are

$$I_{ABC1} = I_{ABC2} = \frac{g_m}{20} = 9.425 \mu\text{A} \quad I_{ABC3} = \frac{g_{m3}}{20} = 1.885 \mu\text{A}$$

From the Bode plot shown in Fig. 12.72 we see that the corner frequency is indeed 6 MHz.



**Figure 12.72**

Bode plot of the Tow-Thomas low-pass filter of Example 12.34.

## 12.6

### Application Examples

The ac-dc converter in Fig. 12.73a is designed for use with a hand-held calculator. Ideally, the circuit should convert a 120-V rms sinusoidal voltage to a 9-V dc output. In actuality the output is

$$v_o(t) = 9 + 0.5 \sin 377t \text{ V}$$

Let us use a low-pass filter to reduce the 60-Hz component of  $v_o(t)$ .

The Thévenin equivalent circuit for the converter is shown in Fig. 12.73b. By placing a capacitor across the output terminals, as shown in Fig. 12.73c, we create a low-pass filter at the output. The transfer function of the filtered converter is

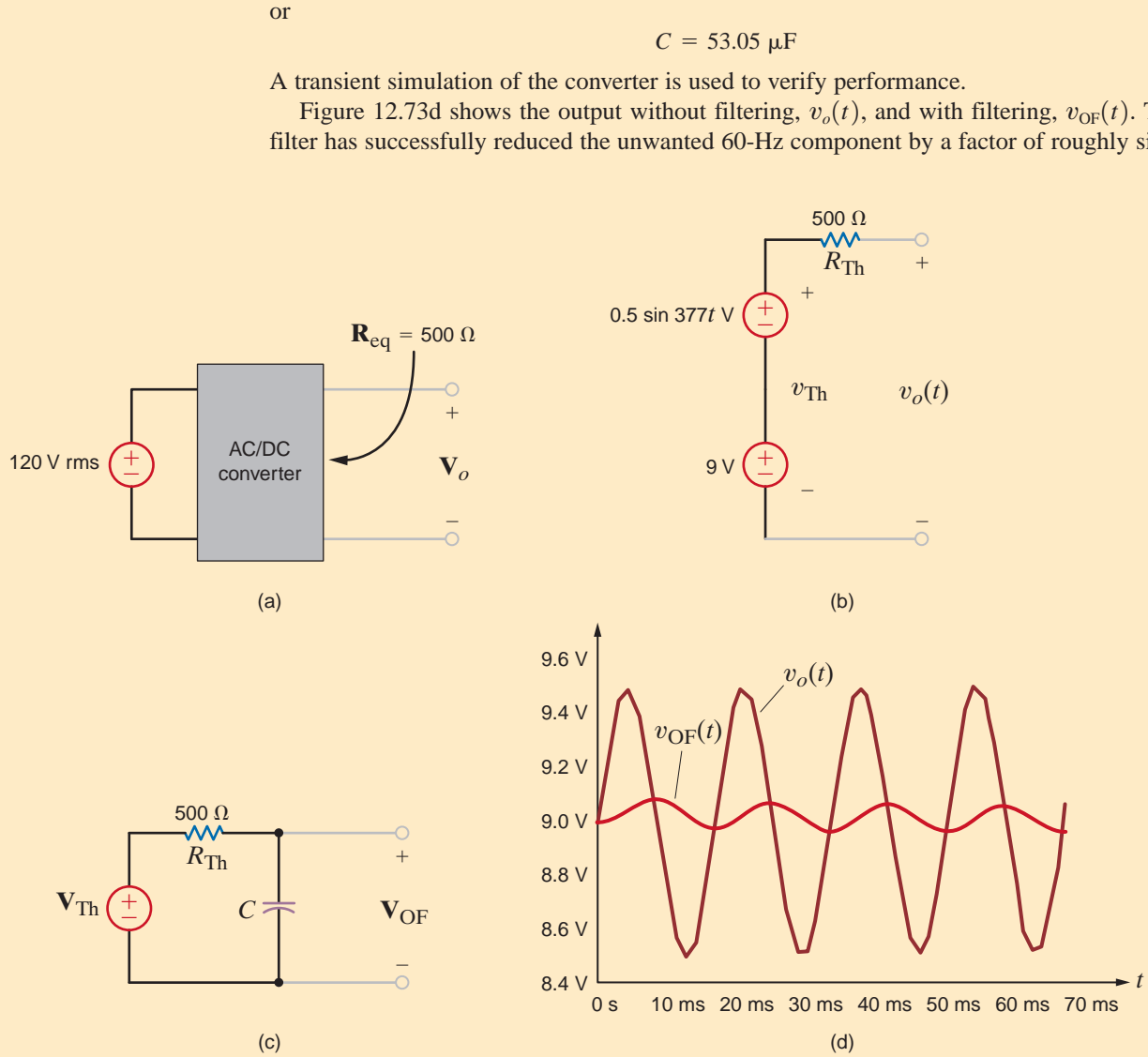
$$\frac{\mathbf{V}_{\text{OF}}}{\mathbf{V}_{\text{Th}}} = \frac{1}{1 + sR_{\text{Th}}C}$$

which has a pole at a frequency of  $f = 1/2\pi R_{\text{Th}}C$ . To obtain significant attenuation at 60 Hz, we choose to place the pole at 6 Hz, yielding the equation

$$\frac{1}{2\pi R_{\text{Th}}C} = 6$$

### APPLICATION EXAMPLE 12.35

#### SOLUTION



**Figure 12.73**  
Circuits and output plots for ac/dc converter.

**APPLICATION  
EXAMPLE 12.36**

The antenna of an FM radio picks up stations across the entire FM frequency range—approximately 87.5 MHz to 108 MHz. The radio’s circuitry must have the capability to first reject all of the stations except the one that the listener wants to hear and then to boost the minute antenna signal. A tuned amplifier incorporating parallel resonance can perform both tasks simultaneously.

The network in Fig. 12.74a is a circuit model for a single-stage tuned transistor amplifier where the resistor, capacitor, and inductor are discrete elements. Let us find the transfer function  $V_o(s)/V_A(s)$ , where  $V_A(s)$  is the antenna voltage and the value of  $C$  for maximum gain at 91.1 MHz. Finally, we will simulate the results.

Since  $\mathbf{V}(s) = \mathbf{V}_A(s)$ , the transfer function is

$$\frac{\mathbf{V}_o(s)}{\mathbf{V}_A(s)} = -\frac{4}{1000} \left[ R // sL // \frac{1}{sC} \right]$$

$$\frac{\mathbf{V}_o(s)}{\mathbf{V}_A(s)} = -\frac{4}{1000} \left[ \frac{s/C}{s^2 + \frac{s}{RC} + \frac{1}{LC}} \right]$$

The parallel resonant network is actually a band-pass filter. Maximum gain occurs at the center frequency,  $f_0$ . This condition corresponds to a minimum value in the denominator. Isolating the denominator polynomial,  $D(s)$ , and letting  $s = j\omega$ , we have

$$\mathbf{D}(j\omega) = \frac{R}{LC} - \omega^2 + \frac{j\omega}{C}$$

which has a minimum value when the real part goes to zero, or

$$\frac{1}{LC} - \omega_0^2 = 0$$

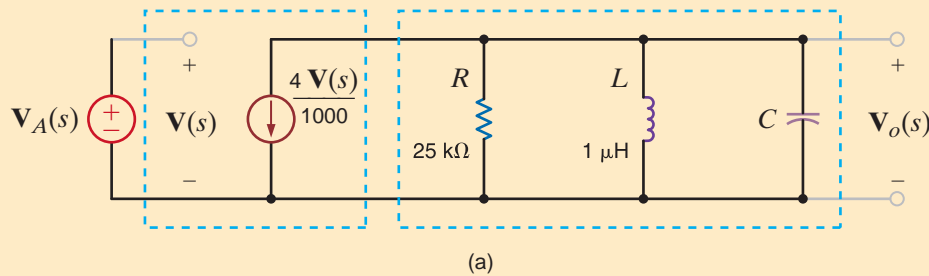
yielding a center frequency of

$$\omega_0 = \frac{1}{\sqrt{LC}}$$

Thus, for a center frequency of 91.1 MHz, we have

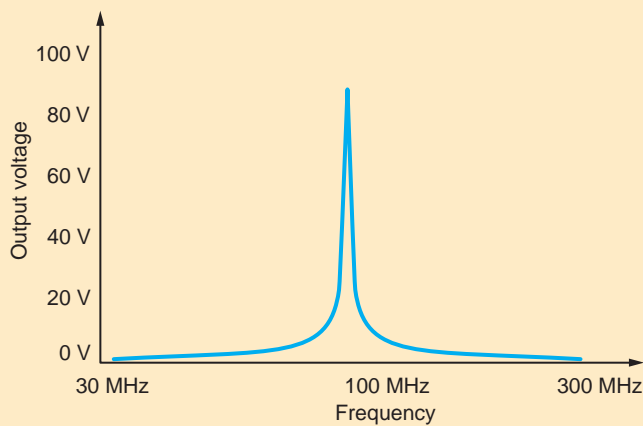
$$2\pi(91.1 \times 10^6) = \frac{1}{\sqrt{LC}}$$

## SOLUTION



**Figure 12.74**

Circuit and Bode plot for the parallel resonant tuned amplifier.



and the required capacitor value is

$$C = 3.05 \text{ pF}$$

The Bode plot for the tuned amplifier, as shown in Fig. 12.74b, confirms the design, since the center frequency is 91.1 MHz, as specified.

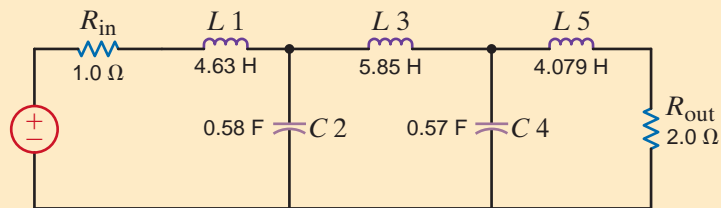
As we have seen in our study of filters thus far, inductors play a fundamental role. However, these elements are typically large and heavy, especially when compared with IC chips. Therefore, circuit designers often use electronic components, such as op-amps and OTAs, to circumvent the use of inductors. This redesign may actually take more components, but the trade-off is well worth it, because resistors, capacitors, and these electronic elements are easily implemented in large-scale integrated circuits.

### APPLICATION EXAMPLE 12.37

Consider the ladder network in Fig. 12.75. This circuit is actually a prototype of a fifth-order Chebyshev low-pass filter with a pass-band frequency of  $\omega_0 = 1 \text{ rad/s}$ . The frequency response of the filter is shown in Fig. 12.76.

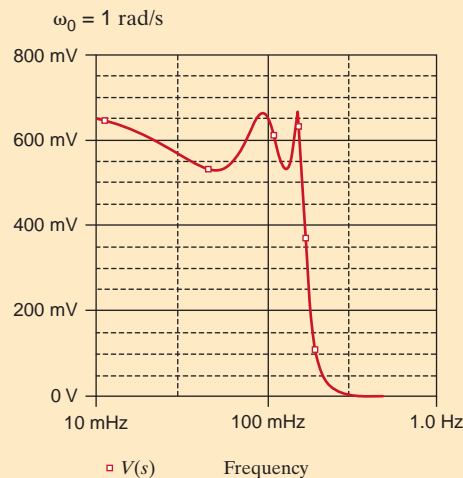
**Figure 12.75**

A prototype fifth-order low-pass Chebyshev filter.



**Figure 12.76**

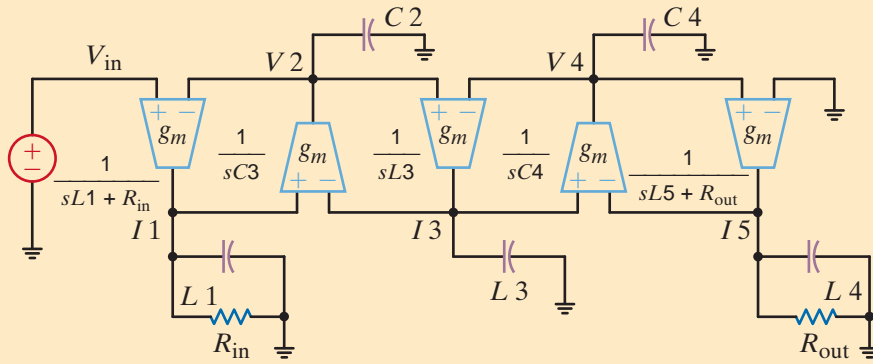
Frequency response of the filter shown in Fig. 12.75.



Note that this filter contains three inductors. Therefore, we would like to have an implementation of this filter that does not contain these elements. The filter was redesigned using OTAs, and the circuit implementation of this equivalent filter is shown in Fig. 12.77.

After frequency scaling the filter from  $\omega_0 = 1 \text{ rad/s}$  to  $1 \text{ M rad/s}$  and magnitude scaling the input and output resistance from  $1 \Omega$  to  $1 \text{ k}\Omega$ , the resultant element values are shown in Table 12.5. Note that in OTA implementations inductors are replaced by capacitors and they have the same numerical values, but the units are farads instead of henrys.



**Figure 12.77**

Inductorless implementation of the fifth-order low-pass Chebyshev filter shown in Fig. 12.75 using OTAs.

**TABLE 12.5** The set of values for the filter in Example 12.37

LC PROTOTYPE	PROTOTYPE WITH OTA	FINAL DESIGN
$R_{in} = 1 \Omega$	$R_{in} = 1 \Omega$	$R_{in} = 1 \text{ k} \Omega$
$L_1 = 4.626548 \text{ H}$	$L_1 = 4.626548 \text{ F}$	$L_1 = 4.626548 \text{ n F}$
$C_1 = 0.58354 \text{ F}$	$L_1 = 0.58354 \text{ F}$	$L_1 = 0.58354 \text{ n F}$
$L_3 = 5.850298 \text{ H}$	$L_3 = 5.850298 \text{ F}$	$L_3 = 5.850298 \text{ n F}$
$L_4 = 0.569797 \text{ F}$	$L_4 = 0.569797 \text{ F}$	$L_4 = 0.569797 \text{ n F}$
$L_5 = 4.078996 \text{ H}$	$L_5 = 4.078996 \text{ F}$	$L_5 = 4.078996 \text{ n F}$
$R_{out} = 2 \Omega$	$R_{out} = 2 \Omega$	$R_{out} = 2 \text{ k} \Omega$

Throughout this chapter we have presented a number of design examples. In this section we consider some additional ones that also have practical ramifications.

## 12.7

### Design Examples

Compact discs (CDs) have become a very popular medium for recording and playing music. CDs store information in a digital manner; that is, the music is sampled at a very high rate, and the samples are recorded on the disc. The trick is to sample so quickly that the reproduction sounds continuous. The industry standard sampling rate is 44.1 kHz—one sample every 22.7  $\mu\text{s}$ .

One interesting aspect regarding the analog-to-digital conversion that takes place inside the unit recording a CD is called the Nyquist criterion. This criterion states that in the analog conversion, any signal components at frequencies above half the sampling rate (22.05 kHz in this case) cannot be faithfully reproduced. Therefore, recording technicians filter these frequencies out before any sampling occurs, yielding higher fidelity to the listener.

Let us design a series of low-pass filters to perform this task.

Suppose, for example, that our specification for the filter is unity gain at dc and 20 dB of attenuation at 22.05 kHz. Let us consider first the simple  $RC$  filter in Fig. 12.78.

The transfer function is easily found to be

$$\mathbf{G}_{v1}(s) = \frac{\mathbf{V}_{o1}}{\mathbf{V}_{in}} = \frac{1}{1 + sRC}$$

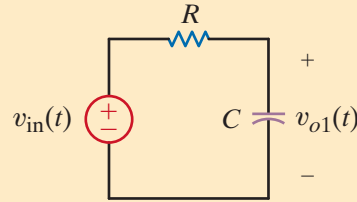
Since a single-pole transfer function attenuates at 20 dB/decade, we should place the pole frequency one decade before the  $-20$  dB point of 22.05 kHz.

### DESIGN EXAMPLE 12.38

#### SOLUTION

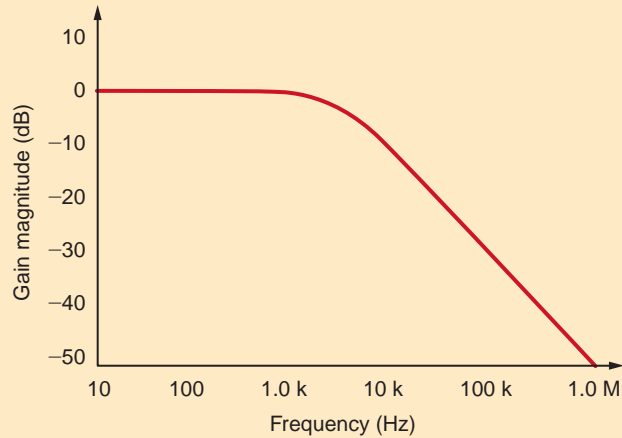
**Figure 12.78**

Single-pole low-pass filter.



**Figure 12.79**

Bode plot for single-pole filter.



Thus,

$$f_p = \frac{1}{2\pi RC} = 2.205 \text{ kHz}$$

If we arbitrarily choose  $C = 1 \text{ nF}$ , the resulting value for  $R$  is  $72.18 \text{ k}\Omega$ , which is reasonable. A Bode plot of the magnitude of  $\mathbf{G}_{v1}(s)$  is shown in Fig. 12.79. All specifications are met but at the cost of severe attenuation in the audible frequency range. This is undesirable.

An improved filter is shown in Fig. 12.80. It is a two-stage low-pass filter with identical filter stages separated by a unity-gain buffer.

The presence of the op-amp permits us to consider the stages independently. Thus, the transfer function becomes

$$\mathbf{G}_{v2}(s) = \frac{\mathbf{V}_{o2}}{\mathbf{V}_{in}} = \frac{1}{[1 + sRC]^2}$$

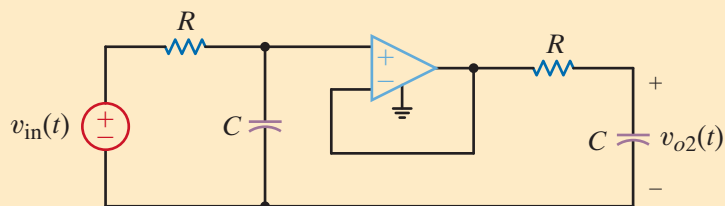
To find the required pole frequencies, let us employ the equation for  $\mathbf{G}_{v2}(s)$  at  $22.05 \text{ kHz}$ , since we know that the gain must be  $0.1$  (attenuated  $20 \text{ dB}$ ) at that frequency. Using the substitution  $s = j\omega$ , we can express the magnitude of  $\mathbf{G}_{v2}(s)$  as

$$|\mathbf{G}_{v2}| = \left\{ \frac{1}{1 + (22,050/f_p)^2} \right\} = 0.1$$

and the pole frequency is found to be  $7.35 \text{ kHz}$ . The corresponding resistor value is  $21.65 \text{ k}\Omega$ . Bode plots for  $\mathbf{G}_{v1}$  and  $\mathbf{G}_{v2}$  are shown in Fig. 12.81. Note that the two-stage filter has a wider bandwidth, which improves the fidelity of the recording.

**Figure 12.80**

Two-stage buffered filter.



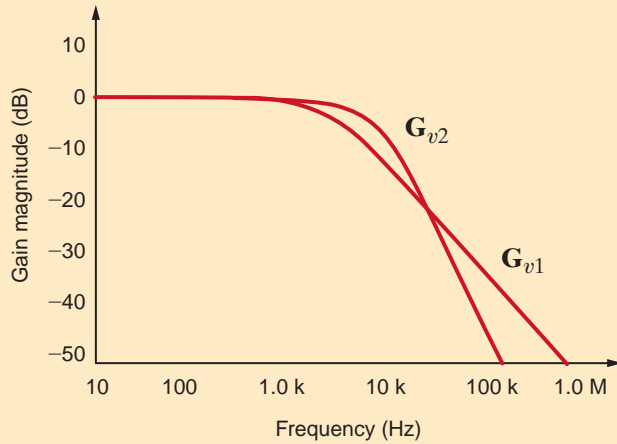


Figure 12.81

Bode plot for single- and two-stage filters.

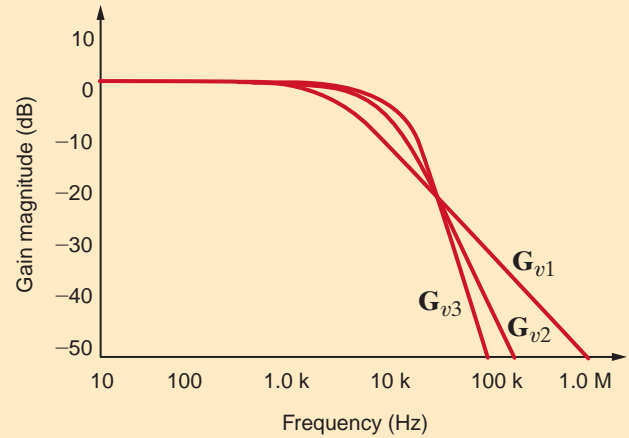


Figure 12.82

Bode plots for single-, two-, and four-stage filters.

Let us try one more improvement—expanding the two-stage filter to a four-stage filter. Again, the gain magnitude is 0.1 at 22.05 kHz and can be written

$$|G_{v3}| = \left\{ \frac{1}{[1 + (22,050/f_p)^2]^2} \right\} = 0.1$$

The resulting pole frequencies are at 15 kHz, and the required resistor value is 10.61 k $\Omega$ . Figure 12.82 shows all three Bode plots. Obviously, the four-stage filter, having the widest bandwidth, is the best option (discounting any extra cost associated with the additional active and passive circuit elements).

The circuit in Fig. 12.83a is called a notch filter. From a sketch of its Bode plot in Fig. 12.83b, we see that at the notch frequency,  $f_n$ , the transfer function gain is zero, while at frequencies above and below  $f_n$  the gain is unity. Let us design a notch filter to remove an annoying 60-Hz hum from the output voltage of a cassette tape player and generate its Bode plot.

Fig. 12.83c shows a block diagram for the filter implementation. The tape output contains both the desired music and the undesired hum. After filtering, the voltage  $V_{amp}$  will have no 60-Hz component as well as some attenuation at frequencies around 60 Hz. An equivalent circuit for the block diagram including a Thévenin equivalent for the tape deck and an equivalent resistance for the power amp is shown in Fig. 12.83d. Applying voltage division, we find the transfer function to be

$$\frac{V_{amp}}{V_{tape}} = \frac{R_{amp}}{R_{amp} + R_{tape} + \left( sL // \frac{1}{Cs} \right)}$$

After some manipulation, the transfer function can be written as

$$\frac{V_{amp}}{V_{tape}} = \frac{R_{amp}}{R_{amp} + R_{tape}} \left[ \frac{s^2 LC + 1}{s^2 LC + s \left( \frac{L}{R_{tape} + R_{amp}} \right) + 1} \right]$$

## DESIGN EXAMPLE 12.39

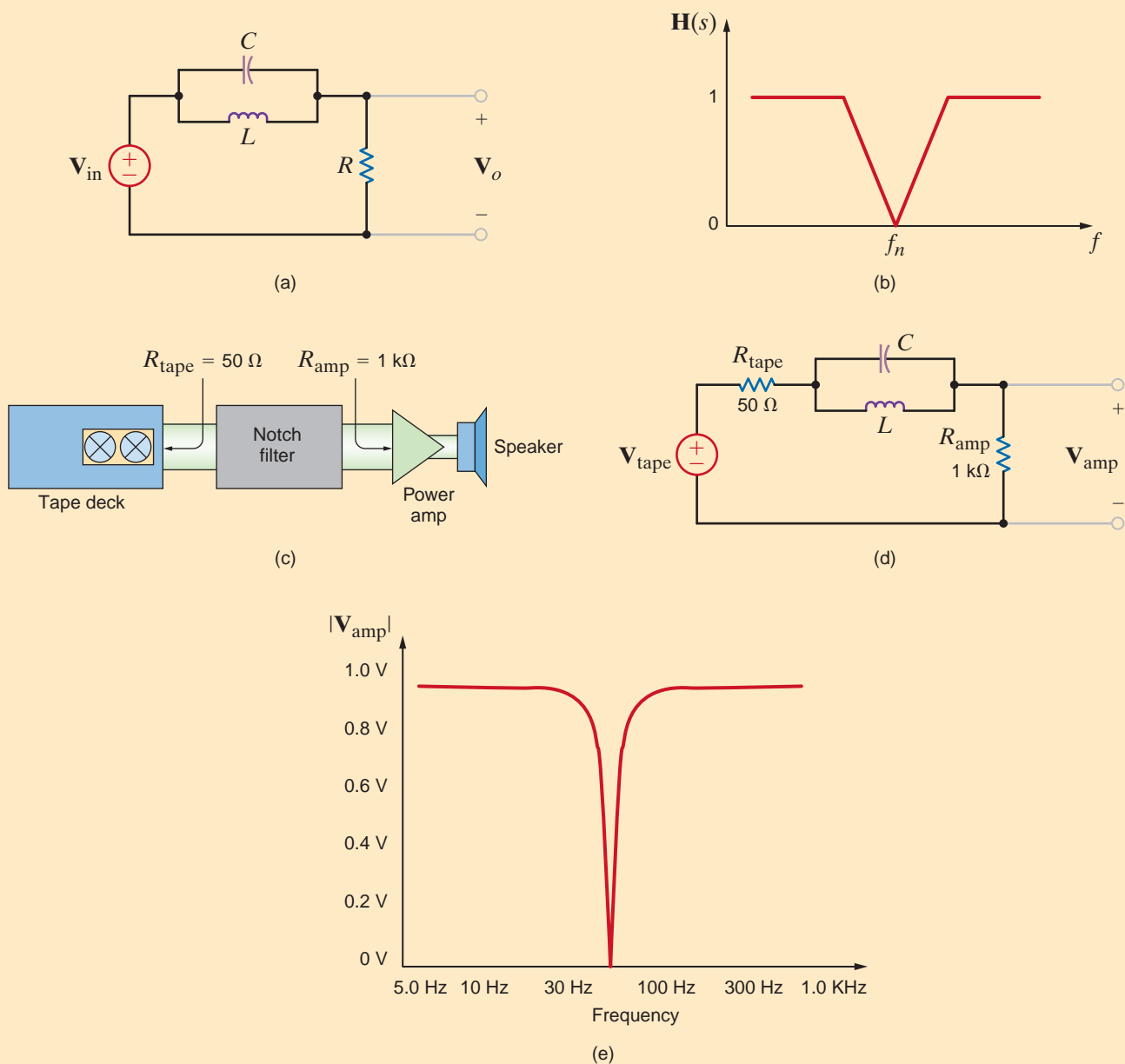
### SOLUTION

We see that the transfer function contains two zeros and two poles. Letting  $s = j\omega$ , the zero frequencies,  $\omega_z$ , are found to be at

$$\omega_z = \pm \frac{1}{\sqrt{LC}}$$

Obviously, we would like the zero frequencies to be at 60 Hz. If we arbitrarily choose  $C = 10 \mu\text{F}$ , then  $L = 0.704 \text{ H}$ .

The Bode plot, shown in Fig. 12.83e, confirms that there is indeed zero transmission at 60 Hz.



**Figure 12.83**

Circuits and Bode plots for 60-Hz notch filter.

A fast-growing field within electrical engineering is mixed-mode circuitry, which combines digital and analog networks to create a larger system. A key component in these systems is the analog-to-digital converter, or ADC. It “measures” an analog voltage and converts it to a digital representation. If these conversions are done quickly enough, the result is a sequence of data points, as shown in Fig. 12.84a. Connecting the dots reveals the original analog signal,  $v_A(t)$ . Unfortunately, as seen in Fig. 12.84b, undesired signals such as  $v_B(t)$  at higher frequencies can also have the same set of data points. This phenomenon is called aliasing and can be avoided by employing a low-pass filter, called an anti-aliasing filter, before the ADC as shown in Fig. 12.84c. In general, the half-power frequency of the filter should be greater than the frequency of the signals you wish to convert but less than those you want to reject.

We wish to design an anti-aliasing filter, with a half-power frequency at 100 Hz, that will permit us to acquire a 60-Hz signal. In this design we will assume the ADC has infinite input resistance.

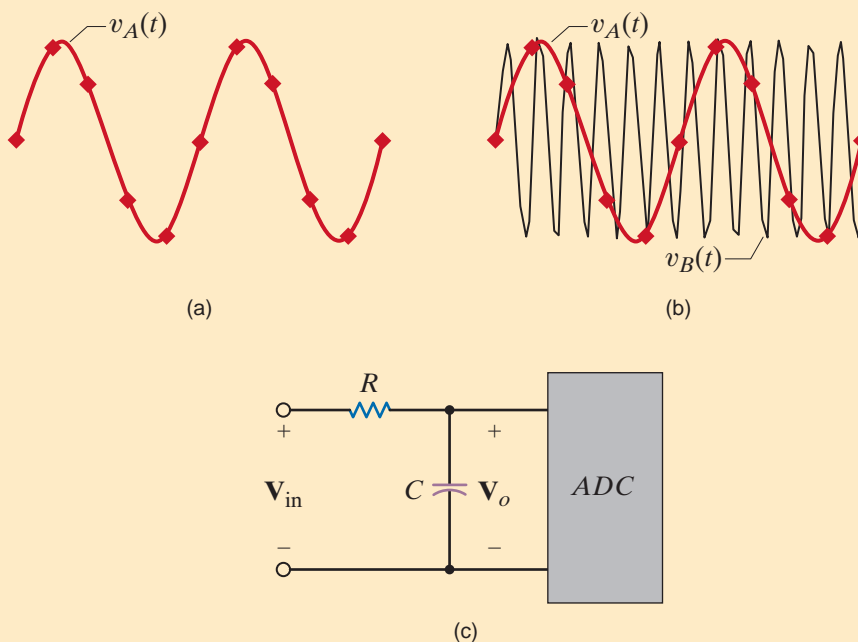
Assuming the ADC has infinite input resistance, we find that the transfer function for the filter is quite simple:

$$\frac{V_o}{V_{in}} = \frac{\frac{1}{j\omega C}}{R + \frac{1}{j\omega C}} = \frac{1}{1 + j\omega RC}$$

The half-power frequency is

$$f_p = \frac{1}{2\pi RC} = 100 \text{ Hz}$$

If we somewhat arbitrarily choose  $C$  at 100 nF, a little larger than the resistor but smaller than the ADC integrated circuit in size, the resulting resistor value is 15.9 k $\Omega$ .



## DESIGN EXAMPLE 12.40

### SOLUTION

**Figure 12.84**

A brief explanation of ADC basics. (a) The ADC samples are like data points on the acquired waveform. (b) Higher frequency signals can have the same data points. After acquisition, it appears that  $v_B(t)$  has been shifted to a lower frequency, an effect called aliasing. (c) The solution, an anti-aliasing low-pass filter.

**DESIGN  
EXAMPLE 12.41**

The circuit in Fig. 12.85a is an inexpensive “bass boost” amplifier that amplifies only low-frequency audio signals, as illustrated by the Bode plot sketch in Fig. 12.85b. We wish to derive the transfer function  $\mathbf{V}_o/\mathbf{V}_{in}$  when the switch is open. Then, from this transfer function and Fig. 12.85b, select appropriate values for  $R_1$  and  $R_2$ . What is the resulting value of  $f_p$ ?

**SOLUTION** With the switch open, we can use the classic noninverting op-amp configuration expression to write the transfer function as

$$\frac{\mathbf{V}_o}{\mathbf{V}_{in}} = 1 + \frac{\mathbf{Z}_2}{\mathbf{Z}_1}$$

where  $\mathbf{Z}_1 = R_1$  and  $\mathbf{Z}_2$  is the parallel combination of the  $R_2$  and  $1/j\omega C$ .  $\mathbf{Z}_2$  can be written as

$$\mathbf{Z}_2 = R_2 // \frac{1}{j\omega C} = \frac{R_2}{1 + j\omega R_2 C}$$

and the transfer function as

$$\frac{\mathbf{V}_o}{\mathbf{V}_{in}} = 1 + \frac{R_2}{R_1(1 + j\omega R_2 C)} = \frac{R_1 + R_2 + j\omega R_1 R_2 C}{R_1(1 + j\omega R_2 C)} = \left[ \frac{R_1 + R_2}{R_1} \right] \left[ \frac{1 + j\omega R_p C}{1 + j\omega R_2 C} \right] \quad 12.92$$

where  $R_p = R_1 // R_2$ . The network has one zero at  $1/R_p C$  and one pole at  $1/R_2 C$ . Since  $R_p$  must be less than  $R_2$ , the zero frequency must be greater than the pole frequency, and the sketch in Fig. 12.85b is appropriate.

Now let us determine the component values. At dc ( $\omega = 0$ ) the gain must be 6 dB or a factor of 2. From Eq. (12.92).

$$\frac{\mathbf{V}_o}{\mathbf{V}_{in}}(j0) = \frac{R_1 + R_2}{R_1} = 2$$

Thus,  $R_1 = R_2$  and  $R_p = R_1/2$ . From Fig. 12.85b, the zero frequency is 500 Hz, and given this information we can determine  $R_p$  as

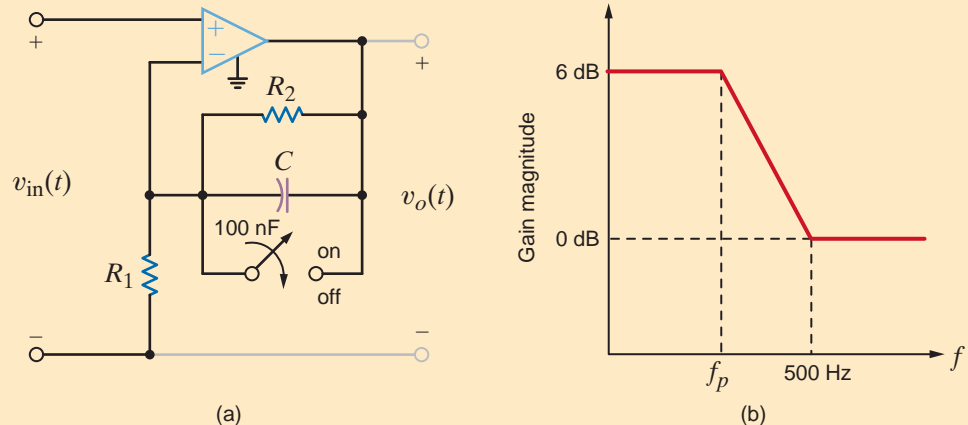
$$\frac{1}{R_p C} = 2\pi(500) \Rightarrow R_p = \frac{1}{1000\pi C} = 3.18 \text{ k}\Omega$$

Of course,  $R_1 = R_2 = 2R_p = 6.37 \text{ k}\Omega$ . Finally, the pole frequency is

$$\frac{1}{2\pi R_2 C} = 250 \text{ Hz}$$

**Figure 12.85**

A “bass boost” circuit (a) and a sketch of its magnitude Bode plot (b).



An audiophile has discovered that his tape player has the limited high-frequency response shown in Fig. 12.86a. Anxious to the point of sleeplessness, he decides to insert a “treble boost” circuit between the tape deck and the main amplifier that has the transfer function shown in Fig. 12.86b. Passing the tape audio through the boost should produce a “flat” response out to about 20 kHz. The circuit in Fig. 12.86c is his design. Show that the circuit’s transfer function has the correct form and select  $R_1$  and  $R_2$  for proper operation.

## DESIGN EXAMPLE 12.42

Recognizing the circuit as a noninverting gain configuration, the transfer is

$$\frac{V_o}{V_{in}} = 1 + \frac{Z_2}{Z_1} \quad 12.93$$

where  $Z_2$  is  $R_2$  and  $Z_1$  is the series combination of  $R_1$  and  $1/j\omega C$ . Substituting these values into Eq. (12.93) yields

$$\frac{V_o}{V_{in}} = 1 + \frac{R_2}{R_1 + \frac{1}{j\omega C}} = \frac{1 + j\omega C(R_1 + R_2)}{1 + j\omega CR_1}$$

Since the pole frequency should be 20 kHz,

$$f_p = 2 \times 10^4 = \frac{1}{2\pi CR_1} \Rightarrow R_1 = 7.96 \text{ k}\Omega$$

The zero frequency is at 8 kHz, and thus

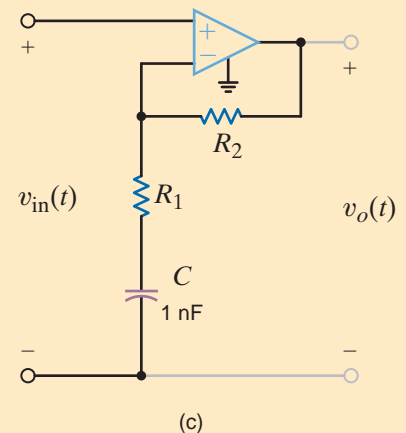
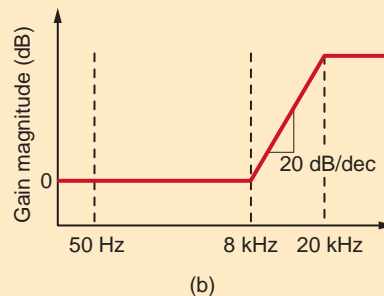
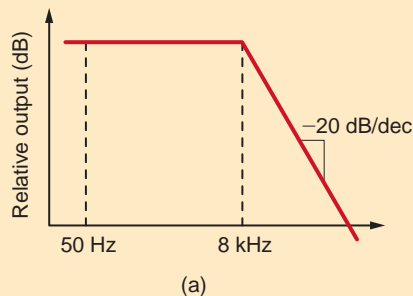
$$f_z = 8 \times 10^3 = \frac{1}{2\pi C(R_1 + R_2)} \Rightarrow R_1 + R_2 = 19.9 \text{ k}\Omega$$

Therefore,  $R_2$  is then 12.0 k $\Omega$ .

## SOLUTION

Figure 12.86

Correcting a deficient audio response. (a) The original response, (b) the corrective transfer function, and (c) the circuit implementation.



## SUMMARY

■ There are four types of network or transfer functions:

1.  $Z(j\omega)$ : the ratio of the input voltage to the input current
2.  $Y(j\omega)$ : the ratio of the output current to the input voltage
3.  $G_v(j\omega)$ : the ratio of the output voltage to the input voltage
4.  $G_i(j\omega)$ : the ratio of the output current to the input current

■ Driving point functions are impedances or admittances defined at a single pair of terminals, such as the input impedance of a network.

■ When the network function is expressed in the form

$$\mathbf{H}(s) = \frac{N(s)}{D(s)}$$

the roots of  $N(s)$  cause  $\mathbf{H}(s)$  to become zero and are called zeros of the function, and the roots of  $D(s)$  cause  $\mathbf{H}(s)$  to become infinite and are called poles of the function.

- Bode plots are semilog plots of the magnitude and phase of a transfer function as a function of frequency. Straight-line approximations can be used to sketch quickly the magnitude characteristic. The error between the actual characteristic and the straight-line approximation can be calculated when necessary.
- The resonant frequency, given by the expression

$$\omega_0 = \frac{1}{\sqrt{LC}}$$

is the frequency at which the impedance of a series  $RLC$  circuit or the admittance of a parallel  $RLC$  circuit is purely real.

- The quality factor is a measure of the sharpness of the resonant peak. A higher  $Q$  yields a sharper peak.

For series  $RLC$  circuits,  $Q = (1/R)\sqrt{L/C}$ . For parallel  $RLC$  circuits,  $Q = R\sqrt{C/L}$ .

- The half-power, cutoff, or break frequencies are the frequencies at which the magnitude characteristic of the Bode plot is  $1/\sqrt{2}$  of its maximum value.
- The parameter values for passive circuit elements can be both magnitude and frequency scaled.
- The four common types of filters are low-pass, high-pass, band-pass, and band rejection.
- The bandwidth of a band-pass or band-rejection filter is the difference in frequency between the half-power points; that is,

$$BW = \omega_{HI} - \omega_{LO}$$

For a series  $RLC$  circuit,  $BW = R/L$ . For a parallel  $RLC$  circuit,  $BW = 1/RC$ .

## PROBLEMS

- 12.1** Determine the driving point impedance at the input terminals of the network shown in Fig. P12.1 as a function of  $s$ .

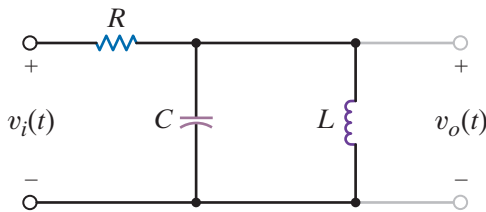


Figure P12.1

- 12.4** Find the driving point impedance at the input terminals of the circuit in Fig. P12.4 as a function of  $s$ .

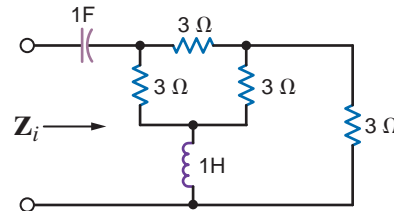


Figure P12.4

- 12.2** Determine the driving point impedance at the input terminals of the network shown in Fig. P12.2 as a function of  $s$ .

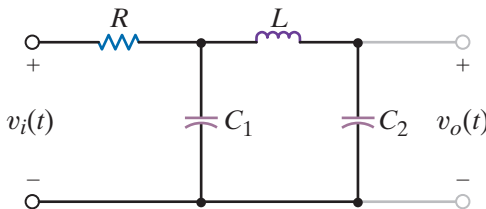


Figure P12.2

- 12.5** Determine the driving point impedance at the input terminals 1–2 or the network shown in Fig. P12.5 as a function of  $s$ , if (a) terminals 3–4 are open and (b) terminals 3–4 are stocked.

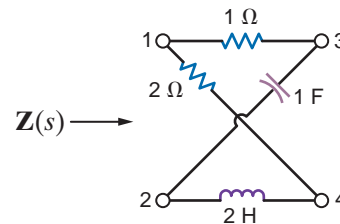


Figure P12.5

- 12.3** Determine the voltage transfer function  $V_o(s)/V_i(s)$  as a function of  $s$  for the network shown in Fig. P12.3.

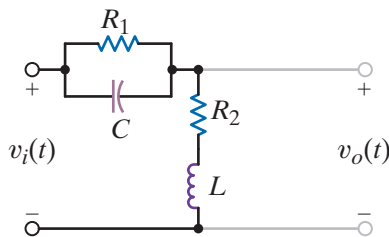


Figure P12.3

- 12.6** Repeat Problem P12.5 with a 2-ohm resistor connected between terminals 3 and 4 in Fig. P12.6.

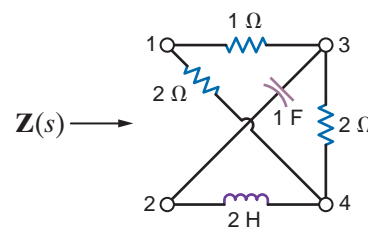


Figure P12.6



- 12.7** Determine the driving point impedance at the input terminals of the network shown in Fig. P12.7 as a function of  $s$ .

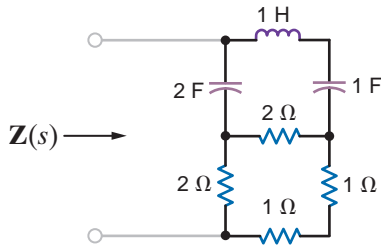


Figure P12.7

- 12.8** Find the transfer impedance  $V_o(s)/I_s(s)$  for the network shown in Fig. P12.8.

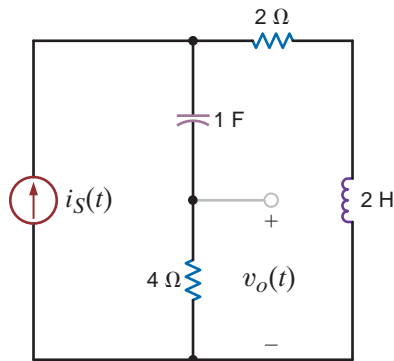


Figure P12.8

- 12.9** Draw the Bode plot for the network function

$$H(j\omega) = \frac{j\omega 4 + 1}{j\omega 20 + 1}$$

- 12.10** Draw the Bode plot for the network function

$$H(j\omega) = \frac{j\omega}{(j\omega + 1)(0.1j\omega + 1)}$$

- 12.11** Sketch the magnitude characteristic of the Bode plot for the transfer function

$$H(j\omega) = \frac{100(j\omega)}{(j\omega + 1)(j\omega + 10)(j\omega + 50)}$$

- 12.12** Draw the Bode plot for the network function

$$H(j\omega) = \frac{10j\omega + 1}{j\omega(0.01j\omega + 1)}$$

- 12.13** Sketch the magnitude characteristic of the Bode plot for the transfer function

$$H(j\omega) = \frac{20(0.1j\omega + 1)}{j\omega(j\omega + 1)(0.01j\omega + 1)}$$

- 12.14** Draw the Bode plot for the network function

$$H(j\omega) = \frac{100}{(j\omega)^2(j\omega 2 + 1)}$$

- 12.15** Sketch the magnitude characteristic of the Bode plot for the transfer function

$$G(j\omega) = \frac{400(j\omega + 2)(j\omega + 50)}{-\omega^2(j\omega + 100)^2}$$

- 12.16** Sketch the magnitude characteristic of the Bode plot for the transfer function

$$G(j\omega) = \frac{10j\omega}{(j\omega + 1)(j\omega + 10)^2}$$

- 12.17** Sketch the magnitude characteristic of the Bode plot for the transfer function

$$G(j\omega) = \frac{-\omega^2 10^4}{(j\omega + 1)^2(j\omega + 10)(j\omega + 100)^2}$$

- 12.18** Sketch the magnitude characteristic of the Bode plot for the transfer function

$$G(j\omega) = \frac{-\omega^2}{(j\omega + 1)^3}$$

- 12.19** Sketch the magnitude characteristic of the Bode plot for the transfer function

$$H(j\omega) = \frac{+6.4}{(j\omega + 1)(-\omega^2 + 8j\omega + 16)}$$

- 12.20** Sketch the magnitude characteristic of the Bode plot for the transfer function

$$H(j\omega) = \frac{10j\omega + 1}{(j\omega + 1)(0.1j\omega + 1)}$$

- 12.21** Sketch the magnitude characteristic of the Bode plot for the transfer function

$$H(j\omega) = \frac{10(5j\omega + 1)}{(100j\omega + 1)(0.02j\omega + 1)}$$

- 12.22** Sketch the magnitude characteristic of the Bode plot for the transfer function

$$H(j\omega) = \frac{0.1(2j\omega + 1)}{j\omega(0.1j\omega + 1)(0.01j\omega + 1)}$$

- 12.23** Sketch the magnitude characteristic of the Bode plot for the transfer function

$$H(j\omega) = \frac{0.5(10j\omega + 1)(j\omega + 1)}{j\omega(0.1j\omega + 1)(0.01j\omega + 1)^2}$$

- 12.24** Sketch the magnitude of the Bode plot for the transfer function

$$H(j\omega) = \frac{250(j\omega + 10)}{(j\omega)^2(j\omega + 100)^2}$$

- 12.25** Sketch the magnitude characteristic of the Bode plot for the transfer function

$$G(j\omega) = \frac{10(j\omega + 2)(j\omega + 100)}{j\omega(-\omega^2 + 4j\omega + 100)}$$

**12.26** Sketch the magnitude characteristic of the Bode plot for the transfer function

$$H(j\omega) = \frac{+6.4(j\omega)}{(j\omega + 1)(-\omega^2 + 8j\omega + 64)}$$

**12.27** Find  $H(j\omega)$  if its magnitude characteristic is shown in Fig. P12.27.

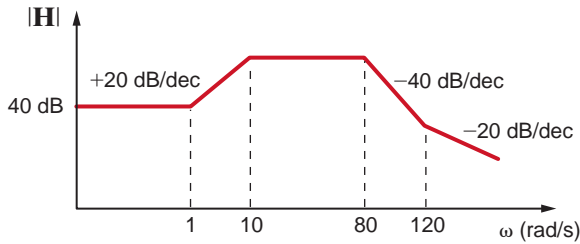


Figure P12.27

**12.28** Determine  $H(j\omega)$  from the magnitude characteristic shown in Fig. P12.28.

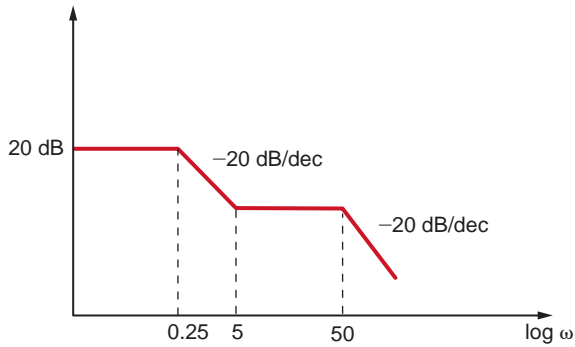


Figure P12.28

**12.29** Determine  $H(j\omega)$  from the magnitude characteristic of the Bode plot shown in Fig. P12.29.

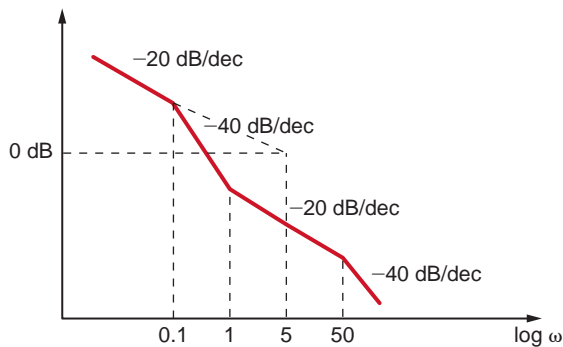


Figure P12.29

**12.30** Determine  $H(j\omega)$  from the magnitude characteristic of the Bode plot shown in Fig. P12.30.

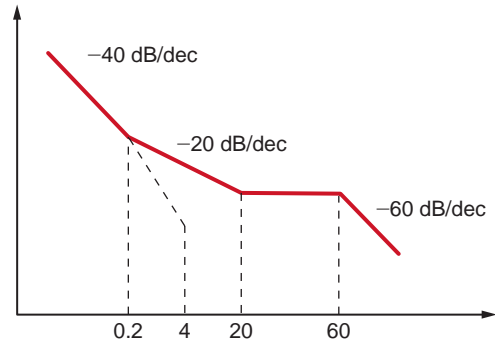


Figure P12.30

**12.31** The magnitude characteristic of a band-elimination filter is shown in Fig. P12.31. Determine  $H(j\omega)$ .

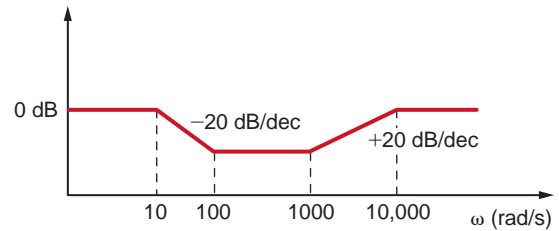


Figure P12.31

**12.32** Given the magnitude characteristic in Fig. P12.32, find  $H(j\omega)$ .

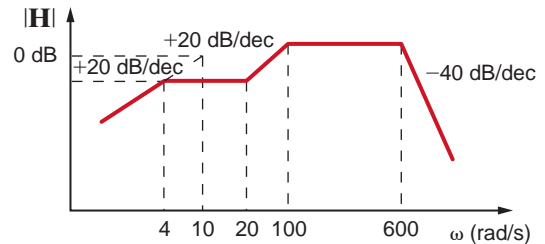


Figure P12.32

**12.33** Find  $H(j\omega)$  if its magnitude characteristic is shown in Fig. P12.33.

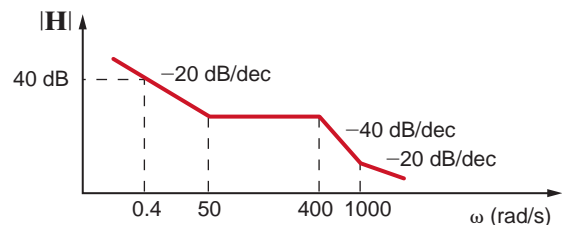


Figure P12.33

- 12.34** Find  $\mathbf{H}(j\omega)$  if its amplitude characteristic is shown in Fig. P12.34.

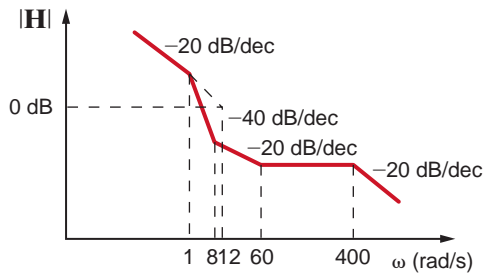


Figure P12.34

- 12.35** Determine  $\mathbf{H}(j\omega)$  if its magnitude characteristic is shown in Fig. P12.35.

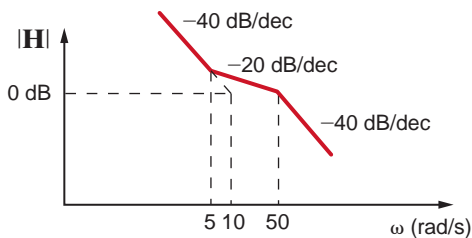


Figure P12.35

- 12.36** Find  $\mathbf{G}(j\omega)$  for the magnitude characteristic shown in Fig. P12.36.

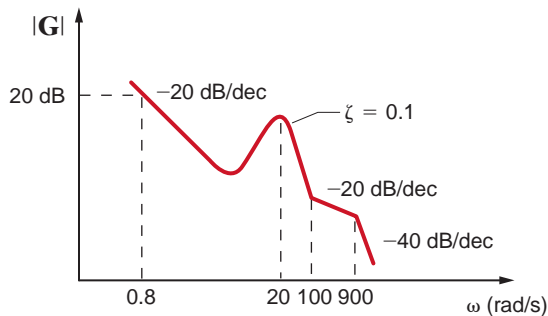


Figure P12.36

- 12.37** The series  $RLC$  circuit in Fig. P12.37 is driven by a variable-frequency source. If the resonant frequency of the network is selected as  $\omega_0 = 1600$  rad/s, find the value of  $C$ . In addition, compute the current at resonance and at  $\omega_0/4$  and  $4\omega_0$ .

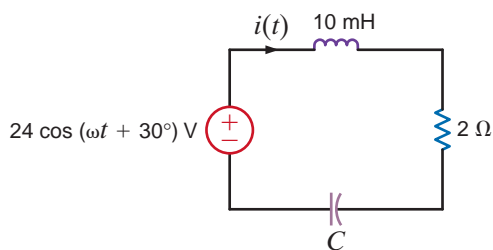


Figure P12.37

- 12.38** Given the network in Fig. P12.38, determine the change necessary in the variable resistor to cut the bandwidth of the circuit in half. What is the new bandwidth?

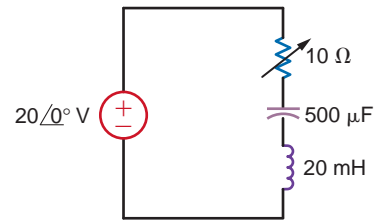


Figure P12.38

- 12.39** A series  $RLC$  circuit resonates at 1000 rad/s. If  $C = 20\mu\text{F}$ , and it is known that the impedance at resonance is  $2.4\ \Omega$ , compute the value of  $L$ , the  $Q$  of the circuit, and the bandwidth.

- 12.40** Given the series  $RLC$  circuit in Fig. P12.40, (a) derive the expression for the half-power frequencies, the resonant frequency, the bandwidth, and the quality factor for the transfer characteristic  $\mathbf{I}/\mathbf{V}_{in}$  in terms of  $R$ ,  $L$ , and  $C$ , (b) compute the quantities in part (a) if  $R = 10\ \Omega$ ,  $L = 50\ \text{mH}$ , and  $C = 10\ \mu\text{F}$ .

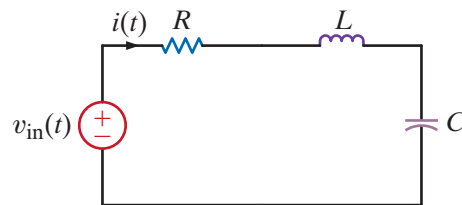


Figure P12.40

- 12.41** A series resonant circuit has a  $Q$  of 120 and a resonant frequency of 10,000 rad/s. Determine the half-power frequencies and the bandwidth of the circuit.

- 12.42** Given the network in Fig. P12.42, find  $\omega_0$ ,  $Q$ ,  $\omega_{\max}$ , and  $|\mathbf{V}_o|_{\max}$ .

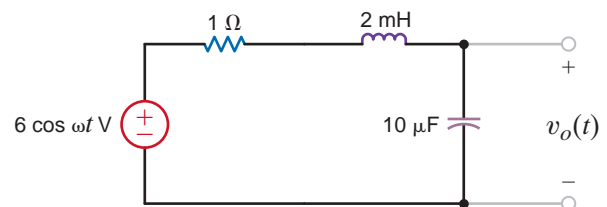


Figure P12.42

- 12.43** A variable-frequency voltage source drives the network in Fig. P12.43. Determine the resonant frequency,  $Q$ , BW, and the average power dissipated by the network at resonance.

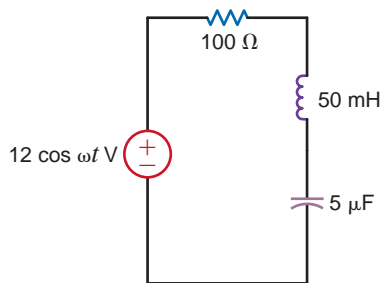


Figure P12.43

- 12.44** In the network in Fig. P12.44, the inductor value is 10 mH, and the circuit is driven by a variable-frequency source. If the magnitude of the current at resonance is 12 A,  $\omega_0 = 1000$  rad/s, and  $L = 10$  mH, find  $C$ ,  $Q$ , and the bandwidth of the circuit.

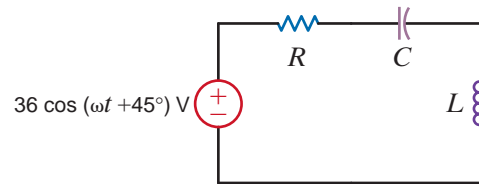


Figure P12.44

- 12.45** The network in Fig. P12.45 operates at 200 c/s. Determine the manner in which the resistor bank should be connected to maximize the voltage  $V_o$  and determine the value of the maximum voltage ( $R_1 = 12 \Omega$ ,  $R_2 = 6 \Omega$ ,  $R_3 = 4 \Omega$ ).

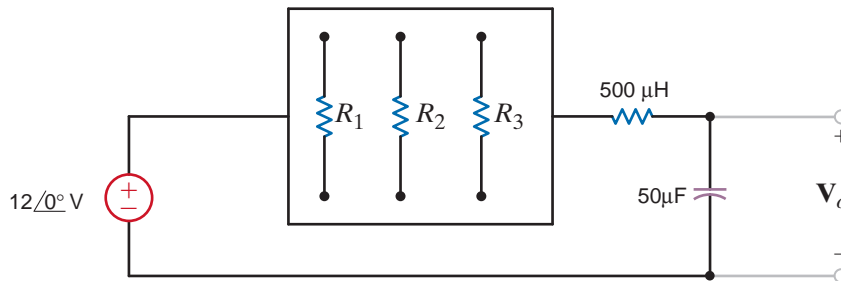


Figure P12.45

- 12.46** A series  $RLC$  circuit is driven by a signal generator. The resonant frequency of the network is known to be 1600 rad/s and at that frequency the impedance seen by the signal generator is  $5 \Omega$ . If  $C = 20 \mu\text{F}$ , find  $L$ ,  $Q$ , and the bandwidth.
- 12.47** A parallel  $RLC$  resonant circuit has a resistance of  $200 \Omega$ . If it is known that the bandwidth is 80 rad/s and the lower half-power frequency is 800 rad/s, find the values of the parameters  $L$  and  $C$ .
- 12.48** A parallel  $RLC$  resonant circuit with a resonant frequency of 20,000 rad/s has an admittance at resonance of 1 mS. If the capacitance of the network is  $2 \mu\text{F}$ , find the values of  $R$  and  $L$ .
- 12.49** A parallel  $RLC$  circuit, which is driven by a variable frequency 2-A current source, has the following values:  $R = 1 \text{ k}\Omega$ ,  $L = 100 \text{ mH}$ , and  $C = 10 \mu\text{F}$ . Find the bandwidth of the network, the half-power frequencies, and the voltage across the network at the half-power frequencies.
- 12.50** A parallel  $RLC$  circuit, which is driven by a variable frequency 2-A current source, has the following values:  $R = 1 \text{ k}\Omega$ ,  $L = 400 \text{ mH}$ , and  $C = 10 \mu\text{F}$ . Find the bandwidth of the network, the half-power frequencies, and the voltage across the network at the half-power frequencies.
- 12.51** Determine the parameters of a parallel resonant circuit that has the following properties:  $\omega_0 = 2 \text{ Mrad/s}$ ,  $\text{BW} = 20 \text{ rad/s}$ , and an impedance at resonance of  $2000 \Omega$ .

- 12.52** The source in the network in Fig. P12.52 is  $i_S(t) = \cos 1000t + \cos 1500t$  A.  $R = 200 \Omega$  and  $C = 500 \mu\text{F}$ . If  $\omega_0 = 1000$  rad/s, find  $L$ ,  $Q$ , and the BW. Compute the output voltage  $v_o(t)$  and discuss the magnitude of the output voltage at the two input frequencies.

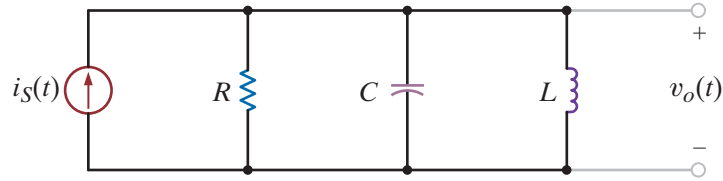


Figure P12.52

- 12.53** Consider the network in Fig. P12.53. If  $R = 1 \text{ k}\Omega$ ,  $L = 20 \text{ mH}$ ,  $C = 50 \mu\text{F}$ , and  $R_S = \infty$ , determine the resonant frequency  $\omega_0$  the  $Q$  of the network, and the bandwidth of the network. What impact does an  $R_S$  of  $10 \text{ k}\Omega$  have on the quantities determined?

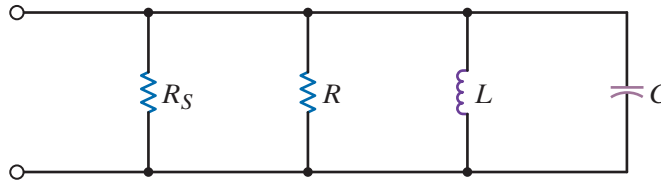


Figure P12.53

- 12.54** Determine the value of  $C$  in the network shown in Fig. P12.54 for the circuit to be in resonance.

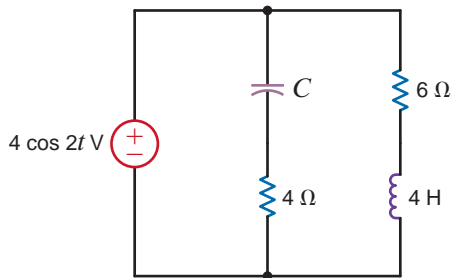


Figure P12.54

- 12.55** Determine the equation for the nonzero resonant frequency of the impedance shown in Fig. P12.55.

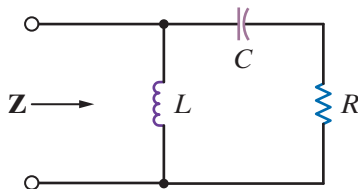


Figure P12.55

- 12.56** Determine the new parameters of the network in Fig. P12.56 if  $\omega_{\text{new}} = 10^4 \omega_{\text{old}}$ .

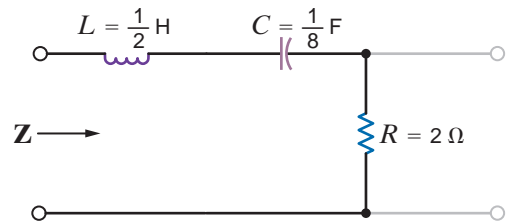


Figure P12.56

- 12.57** Determine the new parameters of the network shown in Fig. P12.57 if  $Z_{\text{new}} = 10^4 Z_{\text{old}}$ .

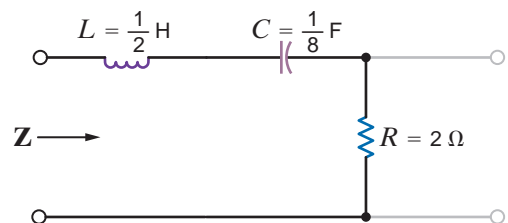


Figure P12.57

- 12.58** Sketch the magnitude characteristic of the Bode plot for the transfer function of the network in Fig. P12.58. What type of filter is this?

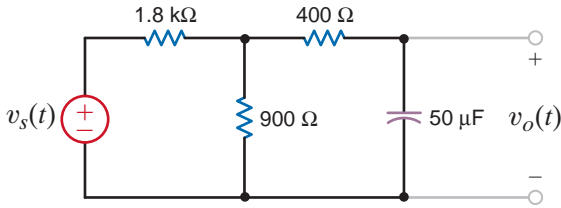


Figure P12.58

- 12.59** Given the network in Fig. P12.59, sketch the magnitude characteristic of the transfer function

$$G_v(j\omega) = \frac{V_o}{V_i}(j\omega)$$

Identify the type of filter.

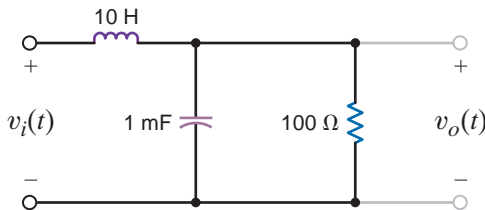


Figure P12.59

- 12.60** Determine what type of filter the network shown in Fig. P12.60 represents by determining the voltage transfer function.

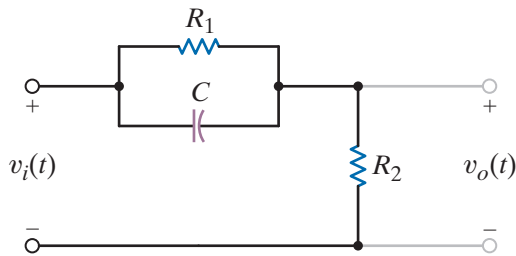


Figure P12.60

- 12.64** The circuit in Fig. P12.64 is a dual-T notch filter. It has an advantage over the filter in Example 12.36 in that it contains no inductors, which tend to be bulky and heavy. Derive the transfer function for this filter and verify your work for the component values  $C = 100 \text{ nF}$  and  $R = 1590 \text{ } \Omega$ .

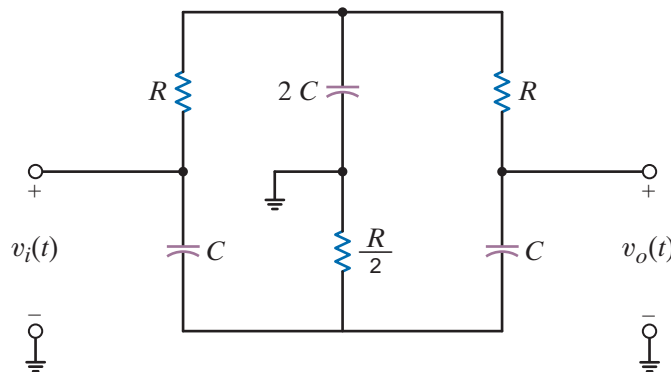


Figure P12.64

- 12.61** Determine what type of filter the network shown in Fig. P12.61 represents by determining the voltage transfer function.

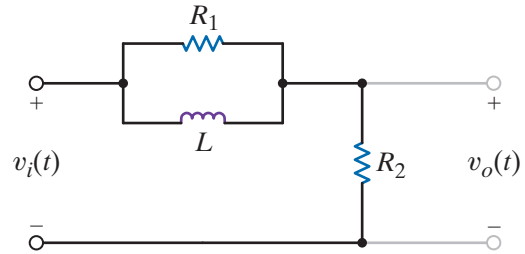


Figure P12.61

- 12.62** Given the network in Fig. P12.62, sketch the magnitude characteristic of the transfer function

$$G_v(j\omega) = \frac{V_o}{V_i}(j\omega)$$

Identify the type of filter.

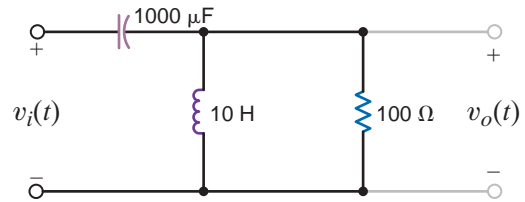


Figure P12.62

- 12.63** Given the lattice network shown in Fig. P12.63, determine what type of filter this network represents by determining the voltage transfer function.

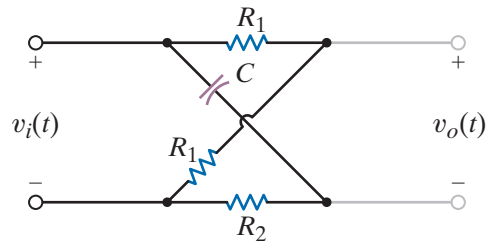


Figure P12.63

**12.65** Given the network in Fig. P12.65, find the transfer function

$$\frac{V_o}{V_i}(j\omega)$$

and determine what type of filter the network represents.

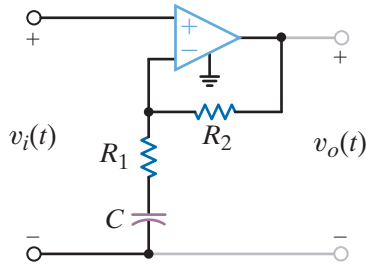


Figure P12.65

**12.66** Determine the value of  $L$  in the circuit in Fig. P12.66 that will place the network in resonance.

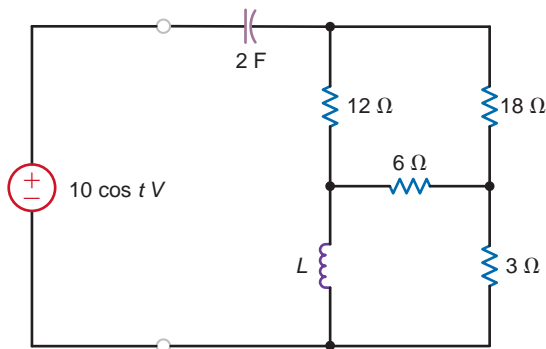


Figure P12.66

**12.67** Determine the voltage transfer function and its magnitude characteristic for the network shown in Fig. P12.67 and identify the filter properties.

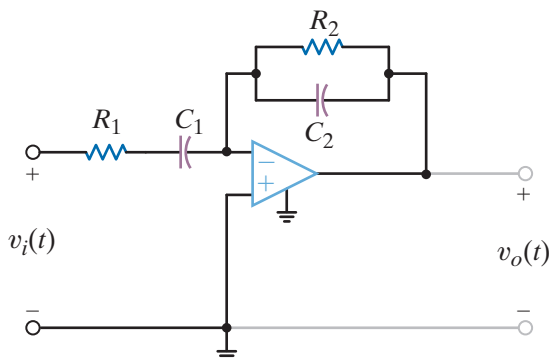


Figure P12.67

**12.68** Repeat Problem 12.67 for the network shown in Fig. P12.68.

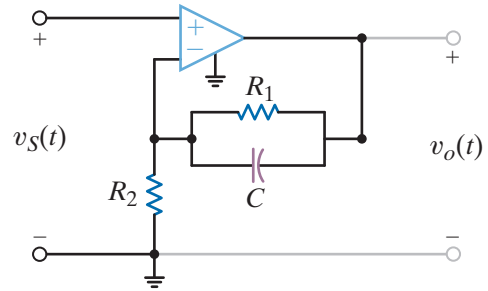


Figure P12.68

**12.69** An OTA with a transconductance of 1 mS is required. A 5-V supply is available, and the sensitivity of  $g_m$  to  $I_{ABC}$  is 20.

- (a) What values of  $I_{ABC}$  and  $R_G$  do you recommend?
- (b) If  $R_G$  has a tolerance of +5%, what is the possible range of  $g_m$  in the final circuit?

**12.70** The OTA and 5-V source described in Problem 12.69 are used to create a transconductance of 2.5 mS.

- (a) What resistor value is required?
- (b) If the input voltage to the amplifier is  $v_{in}(t) = 1.5 \cos(\omega t)$  V, what is the output current function?

**12.71** A particular OTA has a maximum transconductance of 5 mS with a range of 6 decades.

- (a) What is the minimum possible transconductance?
- (b) What is the range of  $I_{ABC}$ ?
- (c) Using a 5-V power supply and resistor to set  $I_{ABC}$ , what is the range of values for the resistor and the power it consumes?

**12.72** A circuit is required that can double the frequency of a sinusoidal voltage.

- (a) If  $v_{in}(t) = 1 \sin(\omega t)$  V, show that the multiplier circuit in Fig. P12.72 can produce an output that contains a sinusoid at frequency  $2\omega$ .
- (b) We want the magnitude of the double-frequency sinusoid to be 1 V. Determine values for  $R_G$  and  $R_L$  if the transconductance range is limited between 10  $\mu$ S and 10 mS.

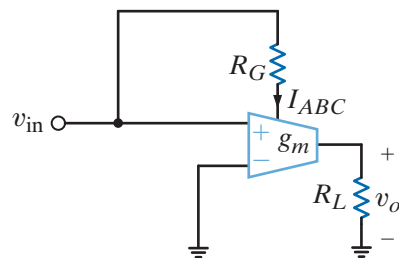


Figure P12.72

- 12.73** The automatic gain control circuit in Fig. 12.73 is used to limit the transconductance,  $i_o/v_{in}$ .
- Find an expression for  $v_o$  in terms of  $v_{in}$ ,  $R_G$ , and  $R_L$ .
  - Express the asymptotic transconductance,  $i_o/v_{in}$ , in terms of  $R_G$  and  $R_L$  at  $v_{in} = 0$  and as  $v_{in}$  approaches infinity. Given  $R_L$  and  $R_G$  values in the circuit diagram, what are the values of the asymptotic transconductance?
  - What are the consequences of your results in (b)?
  - If  $v_{in}$  must be no more than  $V_{CC}$  for proper operation, what is the minimum transconductance for the functional circuit?

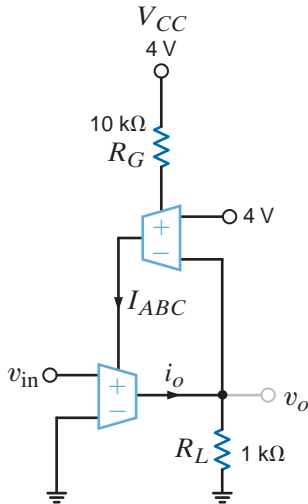


Figure P12.73

- 12.74** In Fig. P12.74,  $V_x$  is a dc voltage. The circuit is intended to be a dc wattmeter where the output voltage value equals the power consumed by  $R_L$  in watts.
- The  $g_m - I_{ABC}$  sensitivity is 20 S/A. Find  $R_G$  such that  $I_x/I_1 = 10^4$ .
  - Choose  $R_L$  such that 1 V at  $V_o$  corresponds to 1 W dissipated in  $R_L$ .

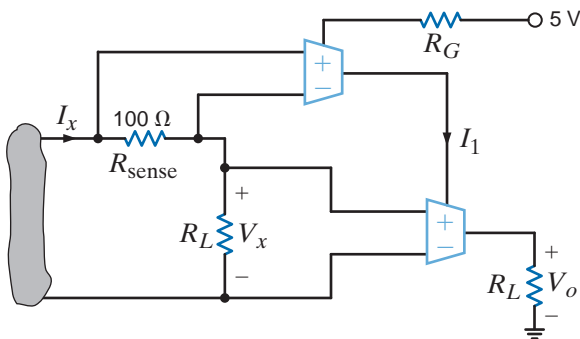


Figure P12.74

- Design a low-pass filter with a cutoff frequency between 15 and 16 kHz.
- Design a low-pass filter using one resistor and one capacitor that will produce a 4.24-volt output at 159 Hz when 6 volts at 159 Hz are applied at the input.

**12.77** Design a high-pass filter with a half-power frequency between 159 and 161 kHz.

**12.78** Design a band-pass filter with a low cutoff frequency of approximately 4535 Hz and a high cutoff frequency of approximately 5535 Hz.

**12.79** Given the circuit in Fig. P12.67, design a second-order band-pass filter with a center frequency gain of  $-5$ ,  $\omega_0 = 50$  krad/s, and a  $BW = 10$  krad/s. Let  $C_1 = C_2 = C$  and  $R_1 = 1$  kΩ. What is the  $Q$  of this filter? Sketch the Bode plot for the filter. Use the ideal op-amp model.

**12.80** Referring to Example 12.39, design a notch filter for the tape deck for use in Europe, where power utilities generate at 50 Hz.

**12.81** An engineer has proposed the circuit shown in Fig. P12.81 to filter out high-frequency noise. Determine the values of the capacitor and resistor to achieve a 3-dB voltage drop at 23.16 kHz.

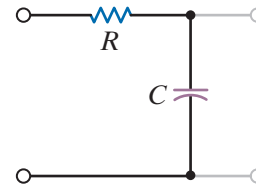


Figure P12.81

**12.82** For the high-pass active filter in Fig. P12.82, choose  $C$ ,  $R_1$ , and  $R_2$  such that  $H_o = 5$  and  $f_c = 3$  kHz.

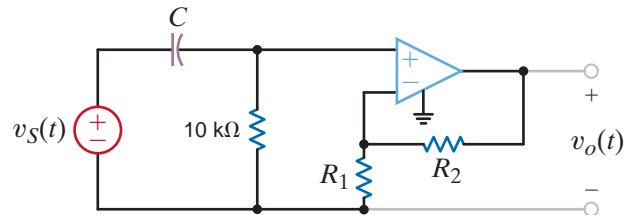


Figure P12.82

**12.83** For the low-pass active filter in Fig. P12.83, choose  $R_2$  and  $C$  such that  $H_o = -7$  and  $f_c = 10$  kHz.

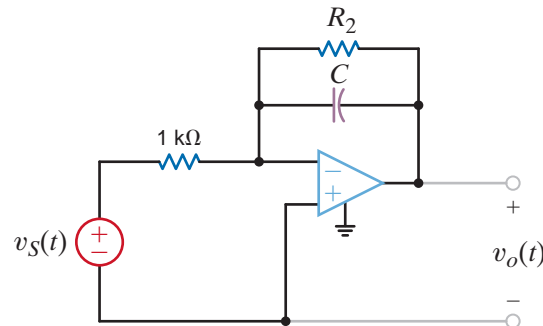


Figure P12.83



- 12.84** The second-order low-pass filter shown in Fig. P12.84 has the transfer function

$$\frac{V_o(s)}{V_1(s)} = \frac{-R_3 \left( \frac{1}{R_2 R_3 C_1 C_2} \right)}{s^2 + \frac{s}{C_1} \left( \frac{1}{R_1} + \frac{1}{R_2} + \frac{1}{R_3} \right) + \frac{1}{R_2 R_3 C_1 C_2}}$$

Design a filter with  $H_o = -10$  and  $f_c = 500$  Hz, assuming that  $C_1 = C_2 = 10$  nF and  $R_1 = 1$  k $\Omega$ .

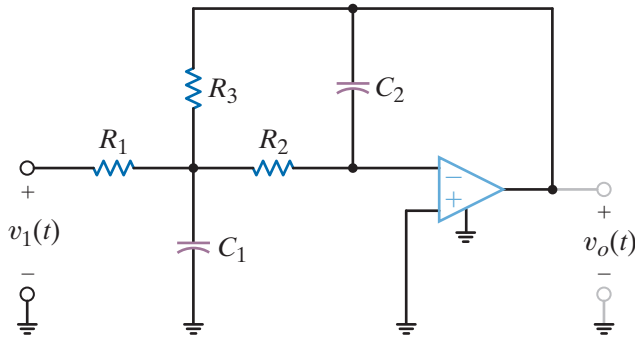


Figure P12.84

- 12.85** Given the second-order low-pass filter in Fig. P12.85, design a filter that has  $H_o = 100$  and  $f_c = 5$  kHz. Set  $R_1 = R_3 = 1$  k $\Omega$ , and let  $R_2 = R_4$  and  $C_1 = C_2$ . Use an op-amp model with  $R_i = \infty$ ,  $R_o = 0$ , and  $A = (2)10^5$ .

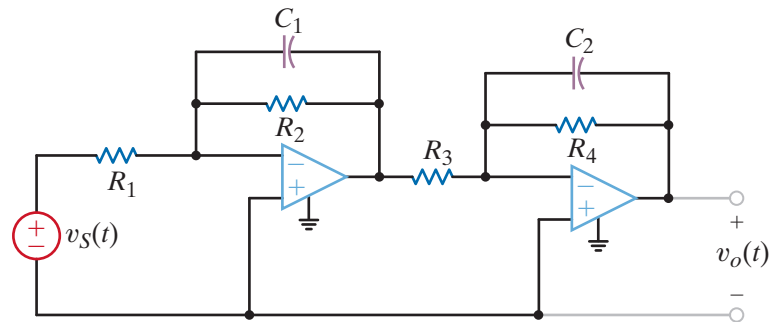


Figure P12.85

**TYPICAL PROBLEMS FOUND ON THE FE EXAM**

**12PFE-1** Determine the voltage  $V_0$  at resonance in the circuit in Fig. 12PFE-1.

- a.  $60\angle-90^\circ$  V
- b.  $35\angle60^\circ$  V
- c.  $40\angle-60^\circ$  V
- d.  $30\angle45^\circ$  V

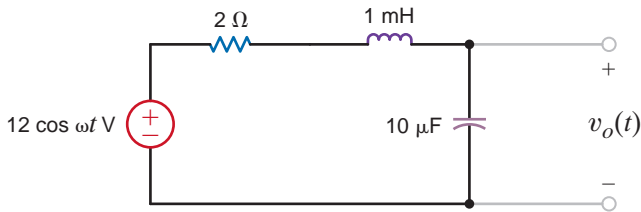


Figure 12PFE-1

**12PFE-2** Given the series circuit in Fig. 12PFE-2, find the value of  $R$  so that the BW of the network about the resonant frequency is 200 rad/s.

- a. 8 Ω
- b. 2 Ω
- c. 4 Ω
- d. 6 Ω

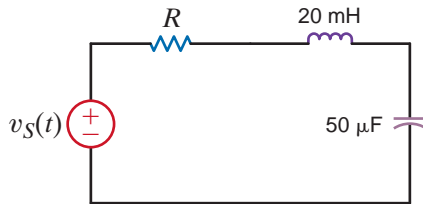


Figure 12PFE-2

**12PFE-3** Given the low-pass filter circuit shown in Fig. 12PFE-3, find the frequency in Hz at which the output is down 3 dB from the dc, or very low frequency, output.

- a. 26 Hz
- b. 60 Hz
- c. 47 Hz
- d. 32 Hz

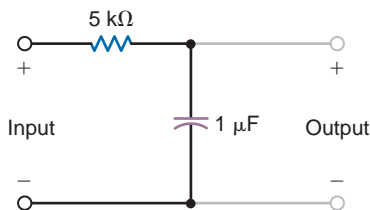


Figure 12PFE-3

**12PFE-4** Given the band-pass filter shown in Fig. 12PFE-4, find the value of  $R$  necessary to provide a resonant frequency of 1000 rad/s and a BW of 100 rad/s.

- a. 2 Ω
- b. 10 Ω
- c. 6 Ω
- d. 5 Ω

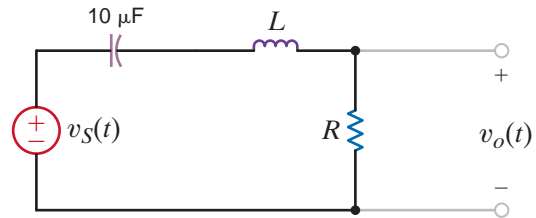


Figure 12PFE-4

**12PFE-5** Given the low-pass filter shown in Fig. 12PFE-5, find the half-power frequency of this circuit, if the source frequency is 8 Hz.

- a. 8 Hz
- b. 2 Hz
- c. 12 Hz
- d. 4 Hz

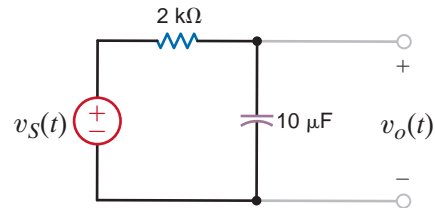



Figure 12PFE-5

# THE LAPLACE TRANSFORM



Courtesy of Lin Chi Mak and the UNSW MAVSTAR team 2009

## THE LEARNING GOALS FOR THIS CHAPTER ARE:

- Be able to determine the Laplace transform of signals common to electric circuits
- Know how to perform an inverse Laplace transform using partial fraction expansion
- Be introduced to the concept of convolution
- Be able to apply the initial-value and final-value theorems
- Know how to use the Laplace transform to analyze transient circuits

**Micro-Aerial Robots or Tiny UAVs** The size of a toy but far more than a toy, the tiny, powerful UAV—unmanned aerial vehicle or micro-aerial robot—finds its niche in such roles as advancing military missions, fighting wildfires in our national forests, or averting terrorist attacks. The UAV comes in many forms: it may be a miniature helicopter, a robo-hummingbird, or a Wasp Micro Air Vehicle. Some carry a GPS for location, a microprocessor to keep flight stable, and a color video camera. With over 5000 in operation today, Raven drones are the most popular small UAVs in the US military fleet. While they once

required heavy, briefcase-sized control units, today's drones can be controlled with an iPhone.

Identified at times as a bird, a bee, or a giant mosquito, the Micro Flying Robot developed in Japan and weighing only 8 grams is driven by four micro-actuators that control two rotors and stabilizing units. Swarms of tiny UAVs can link up to form an airborne network for monitoring work too dangerous for humans, such as tracking hurricanes or mapping hazardous chemical plumes.

Mathematical models of these micro-aerial robots require time-domain or transform techniques to describe their dynamic

behavior. In this chapter, we present the basic operations of the Laplace transform – its pairs and properties, its relationship to convolution in the time domain. You worked with these transforms in your differential equations course and now will

learn how to apply the results to circuit analysis. These tools are essential in finding circuit voltages and currents and in the analysis of much more complicated robots—of any size—which are a challenge to design and operate.

## 13.1

### Definition

The Laplace transform of a function  $f(t)$  is defined by the equation

$$\mathcal{L}[f(t)] = \mathbf{F}(s) = \int_0^{\infty} f(t)e^{-st} dt \quad 13.1$$

where  $s$  is the complex frequency

$$s = \sigma + j\omega \quad 13.2$$

and the function  $f(t)$  is assumed to possess the property that

$$f(t) = 0 \quad \text{for } t < 0$$

Note that the Laplace transform is unilateral ( $0 \leq t < \infty$ ), in contrast to the Fourier transform (see Chapter 15), which is bilateral ( $-\infty < t < \infty$ ). In our analysis of circuits using the Laplace transform, we will focus our attention on the time interval  $t \geq 0$ . It is the initial conditions that account for the operation of the circuit prior to  $t = 0$ ; therefore, our analyses will describe the circuit operation for  $t \geq 0$ .

For a function  $f(t)$  to possess a Laplace transform, it must satisfy the condition

$$\int_0^{\infty} e^{-\sigma t} |f(t)| dt < \infty \quad 13.3$$

for some real value of  $\sigma$ . Because of the convergence factor  $e^{-\sigma t}$ , a number of important functions have Laplace transforms, even though Fourier transforms for these functions do not exist. All of the inputs we will apply to circuits possess Laplace transforms. Functions that do not have Laplace transforms (e.g.,  $e^{t^2}$ ) are of no interest to us in circuit analysis.

The inverse Laplace transform, which is analogous to the inverse Fourier transform, is defined by the relationship

$$\mathcal{L}^{-1}[\mathbf{F}(s)] = f(t) = \frac{1}{2\pi j} \int_{\sigma_1 - j\infty}^{\sigma_1 + j\infty} \mathbf{F}(s)e^{st} ds \quad 13.4$$

where  $\sigma_1$  is real and  $\sigma_1 > \sigma$  in Eq. (13.3).

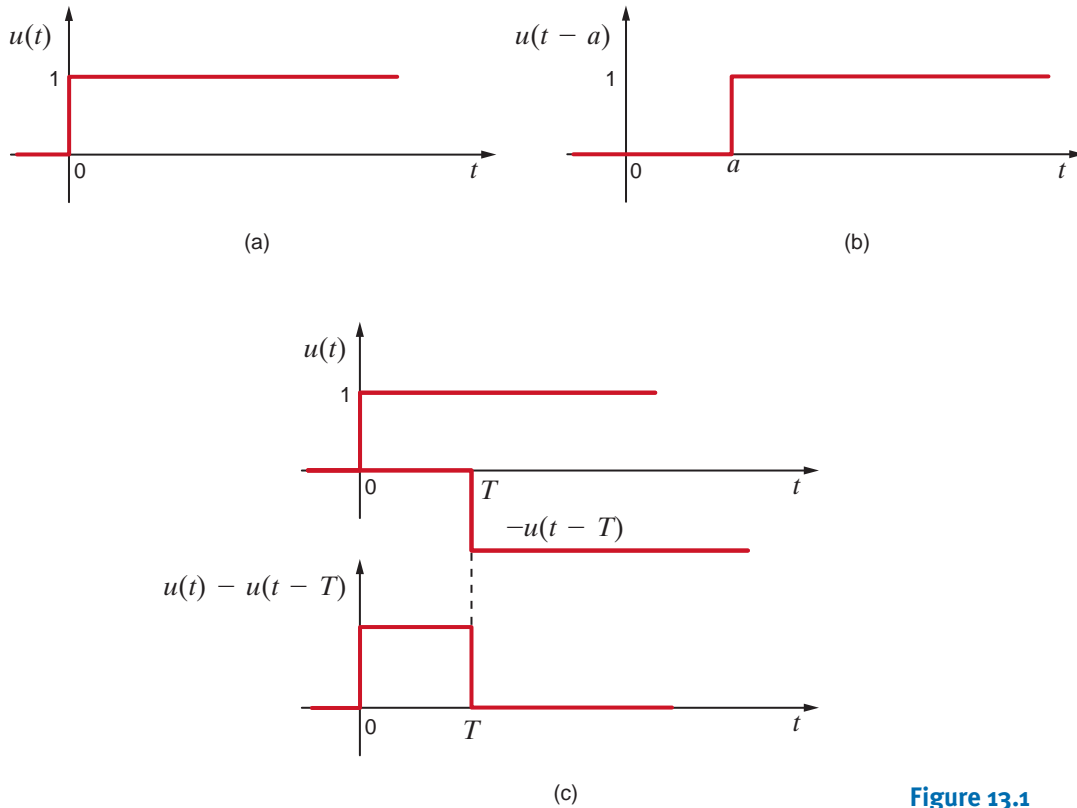
Since evaluation of this integral is based on complex variable theory, we will avoid its use. How then will we be able to convert our solution in the complex frequency domain back to the time domain? The Laplace transform has a uniqueness property: for a given  $f(t)$ , there is a unique  $\mathbf{F}(s)$ . In other words, two different functions  $f_1(t)$  and  $f_2(t)$  cannot have the same  $\mathbf{F}(s)$ . Our procedure then will be to use Eq. (13.1) to determine the Laplace transform for a number of functions common to electric circuits and store them in a table of transform pairs. We will use a partial fraction expansion to break our complex frequency-domain solution into a group of terms for which we can utilize our table of transform pairs to identify a time function corresponding to each term.

Two singularity functions are very important in circuit analysis: (1) the unit step function,  $u(t)$ , discussed in Chapter 7, and (2) the unit impulse or delta function,  $\delta(t)$ . They are called *singularity functions* because they are either not finite or they do not possess finite derivatives everywhere. They are mathematical models for signals that we employ in circuit analysis.

The *unit step function*  $u(t)$  shown in Fig. 13.1a was defined in Section 7.2 as

$$u(t) = \begin{cases} 0 & t < 0 \\ 1 & t > 0 \end{cases}$$

Recall that the physical analogy of this function, as illustrated earlier, corresponds to closing a switch at  $t = 0$  and connecting a voltage source of 1 V or a current source of 1 A to a given circuit. The following example illustrates the calculation of the Laplace transform for unit step functions.



**Figure 13.1**  
Representations of the  
unit step function.

Let us determine the Laplace transform for the waveforms in Fig. 13.1.

The Laplace transform for the unit step function in Fig. 13.1a is

$$\begin{aligned} \mathbf{F}(s) &= \int_0^{\infty} u(t)e^{-st} dt \\ &= \int_0^{\infty} 1e^{-st} dt \end{aligned}$$

**EXAMPLE**  
**13.1**  
**SOLUTION**

$$\begin{aligned}
 &= -\frac{1}{s} e^{-st} \Big|_0^\infty \\
 &= \frac{1}{s} \quad \sigma > 0
 \end{aligned}$$

Therefore,

$$\mathcal{L}[u(t)] = \mathbf{F}(s) = \frac{1}{s}$$

The Laplace transform of the time-shifted unit step function shown in Fig. 13.1b is

$$\mathbf{F}(s) = \int_0^\infty u(t - a)e^{-st} dt$$

Note that

$$u(t - a) = \begin{cases} 1 & a < t < \infty \\ 0 & t < a \end{cases}$$

Therefore,

$$\begin{aligned}
 \mathbf{F}(s) &= \int_a^\infty e^{-st} dt \\
 &= \frac{e^{-as}}{s} \quad \sigma > 0
 \end{aligned}$$

Finally, the Laplace transform of the pulse shown in Fig. 13.1c is

$$\begin{aligned}
 \mathbf{F}(s) &= \int_0^\infty [u(t) - u(t - T)]e^{-st} dt \\
 &= \frac{1 - e^{-Ts}}{s} \quad \sigma > 0
 \end{aligned}$$

The unit impulse function can be represented in the limit by the rectangular pulse shown in Fig. 13.2a as  $a \rightarrow 0$ . The function is defined by the following:

$$\delta(t - t_0) = 0 \quad t \neq t_0$$

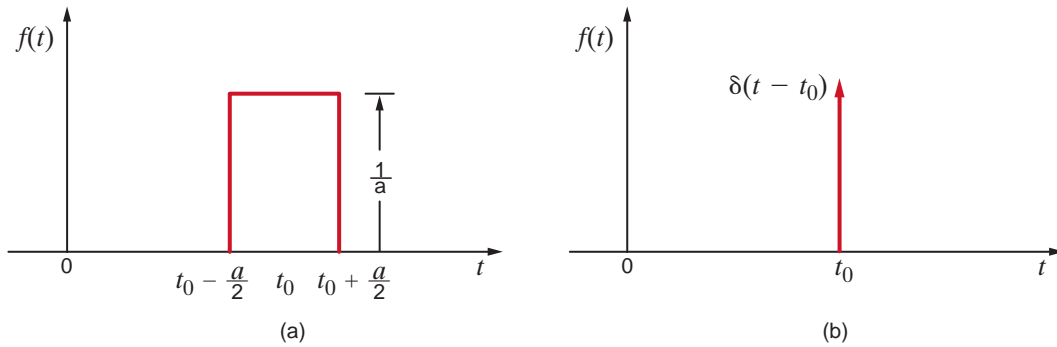
$$\int_{t_0-\varepsilon}^{t_0+\varepsilon} \delta(t - t_0) dt = 1 \quad \varepsilon > 0$$

The unit impulse is zero except at  $t = t_0$ , where it is undefined, but it has unit area (sometimes referred to as *strength*). We represent the unit impulse function on a plot as shown in Fig. 13.2b.

An important property of the unit impulse function is what is often called the *sampling property*, which is exhibited by the following integral:

$$\int_{t_1}^{t_2} f(t)\delta(t - t_0) dt = \begin{cases} f(t_0) & t_1 < t_0 < t_2 \\ 0 & t_0 < t_1, t_0 > t_2 \end{cases}$$

for a finite  $t_0$  and any  $f(t)$  continuous at  $t_0$ . Note that the unit impulse function simply samples the value of  $f(t)$  at  $t = t_0$ .



**Figure 13.2**  
Representations of the unit impulse.

Now that we have defined the unit impulse function, let's consider the following question: why introduce the unit impulse function? We certainly cannot produce a voltage or current signal with zero width and infinite height in a physical system. For engineers, the unit impulse function is a convenient mathematical function that can be utilized to model a physical process. For example, a lightning stroke is a short-duration event. If we were analyzing a system that was struck by lightning, we might consider modeling the lightning stroke as a unit impulse function. Another example is the process of sampling where an analog-to-digital converter (ADC) is utilized to convert a time signal into values that can be used in a computer. The ADC captures the value of the time signal at certain instants of time. The sampling property of the unit impulse function described above is very useful in modeling the sampling process.

Let us determine the Laplace transform of an impulse function.

The Laplace transform of the impulse function is

$$\mathbf{F}(s) = \int_0^{\infty} \delta(t - t_0) e^{-st} dt$$

Using the sampling property of the delta function, we obtain

$$\mathcal{L}[\delta(t - t_0)] = e^{-t_0 s}$$

In the limit as  $t_0 \rightarrow 0$ ,  $e^{-t_0 s} \rightarrow 1$ , and therefore

$$\mathcal{L}[\delta(t)] = \mathbf{F}(s) = 1$$

### EXAMPLE

### SOLUTION 13.2

We will now illustrate the development of a number of basic transform pairs that are very useful in circuit analysis.

## 13.3

### Transform Pairs

Let us find the Laplace transform of  $f(t) = t$ .

The Laplace transform of the function  $f(t) = t$  is

$$\mathbf{F}(s) = \int_0^{\infty} t e^{-st} dt$$

Integrating the function by parts, we let

$$u = t \quad \text{and} \quad dv = e^{-st} dt$$

Then

$$du = dt \quad \text{and} \quad v = \int e^{-st} dt = -\frac{1}{s} e^{-st}$$

### EXAMPLE

### SOLUTION 13.3

[hint]

$$t \leftrightarrow \frac{1}{s^2}$$

Therefore,

$$\begin{aligned} \mathbf{F}(s) &= \frac{-t}{s} e^{-st} \Big|_0^\infty + \int_0^\infty \frac{e^{-st}}{s} dt \\ &= \frac{1}{s^2} \quad \sigma > 0 \end{aligned}$$

**EXAMPLE**  
**13.4**

Let us determine the Laplace transform of the cosine function.

**SOLUTION** The Laplace transform for the cosine function is

$$\begin{aligned} \mathbf{F}(s) &= \int_0^\infty \cos \omega t e^{-st} dt \\ &= \int_0^\infty \frac{e^{+j\omega t} + e^{-j\omega t}}{2} e^{-st} dt \\ &= \int_0^\infty \frac{e^{-(s-j\omega)t} + e^{-(s+j\omega)t}}{2} dt \\ &= \frac{1}{2} \left( \frac{1}{s-j\omega} + \frac{1}{s+j\omega} \right) \quad \sigma > 0 \\ &= \frac{s}{s^2 + \omega^2} \end{aligned}$$

[hint]

$$\cos \omega t \leftrightarrow \frac{s}{s^2 + \omega^2}$$

A short table of useful Laplace transform pairs is shown in Table 13.1.

Once the transform pairs are known, we can easily move back and forth between the time domain and the complex frequency domain without having to use Eqs. (13.1) and (13.4).

**TABLE 13.1** Short table of Laplace transform pairs

$f(t)$	$\mathbf{F}(s)$
$\delta(t)$	1
$u(t)$	$\frac{1}{s}$
$e^{-at}$	$\frac{1}{s+a}$
$t$	$\frac{1}{s^2}$
$\frac{t^n}{n!}$	$\frac{1}{s^{n+1}}$
$te^{-at}$	$\frac{1}{(s+a)^2}$
$\frac{t^n e^{-at}}{n!}$	$\frac{1}{(s+a)^{n+1}}$
$\sin bt$	$\frac{b}{s^2 + b^2}$
$\cos bt$	$\frac{s}{s^2 + b^2}$
$e^{-at} \sin bt$	$\frac{b}{(s+a)^2 + b^2}$
$e^{-at} \cos bt$	$\frac{s+a}{(s+a)^2 + b^2}$



## Learning Assessments

**E13.1** If  $f(t) = e^{-at}$ , show that  $\mathbf{F}(s) = 1/(s + a)$ .

**E13.2** If  $f(t) = \sin \omega t$ , show that  $\mathbf{F}(s) = \omega/(s^2 + \omega^2)$ .

A number of useful theorems describe important properties of the Laplace transform. We will first demonstrate a couple of these theorems, provide a concise listing of a number of them, and, finally, illustrate their usefulness via several examples.

The *time-scaling theorem* states that

$$\mathcal{L}[f(at)] = \frac{1}{a} \mathbf{F}\left(\frac{s}{a}\right) \quad a > 0 \quad 13.5$$

The Laplace transform of  $f(at)$  is

$$\mathcal{L}[f(at)] = \int_0^{\infty} f(at)e^{-st} dt$$

Now let  $\lambda = at$  and  $d\lambda = a dt$ . Then

$$\begin{aligned} \mathcal{L}[f(at)] &= \int_0^{\infty} f(\lambda)e^{-(\lambda/a)s} \frac{d\lambda}{a} \\ &= \frac{1}{a} \int_0^{\infty} f(\lambda)e^{-(s/a)\lambda} d\lambda \\ &= \frac{1}{a} \mathbf{F}\left(\frac{s}{a}\right) \quad a > 0 \end{aligned}$$

The *time-shifting theorem* states that

$$\mathcal{L}[f(t - t_0)u(t - t_0)] = e^{-t_0 s} \mathbf{F}(s) \quad t_0 \geq 0 \quad 13.6$$

This theorem is illustrated as follows:

$$\begin{aligned} \mathcal{L}[f(t - t_0)u(t - t_0)] &= \int_0^{\infty} f(t - t_0)u(t - t_0)e^{-st} dt \\ &= \int_{t_0}^{\infty} f(t - t_0)e^{-st} dt \end{aligned}$$

If we now let  $\lambda = t - t_0$  and  $d\lambda = dt$ , then

$$\begin{aligned} \mathcal{L}[f(t - t_0)u(t - t_0)] &= \int_0^{\infty} f(\lambda)e^{-s(\lambda+t_0)} d\lambda \\ &= e^{-t_0 s} \int_0^{\infty} f(\lambda)e^{-s\lambda} d\lambda \\ &= e^{-t_0 s} \mathbf{F}(s) \quad t_0 \geq 0 \end{aligned}$$

The *frequency-shifting, or modulation, theorem* states that

$$\mathcal{L}[e^{-at}f(t)] = \mathbf{F}(s + a) \quad 13.7$$

## 13.4

### Properties of the Transform

By definition,

$$\begin{aligned}\mathcal{L}[e^{-at}f(t)] &= \int_0^{\infty} e^{-at}f(t)e^{-st} dt \\ &= \int_0^{\infty} f(t)e^{-(s+a)t} dt \\ &= \mathbf{F}(s + a)\end{aligned}$$

The three theorems we have demonstrated, together with a number of other important properties, are listed in a concise manner in Table 13.2. Let us now provide several simple examples that illustrate how these properties can be used.

**TABLE 13.2** Some useful properties of the Laplace transform

PROPERTY NUMBER	$f(t)$	$\mathbf{F}(s)$
1. Magnitude scaling	$Af(t)$	$A\mathbf{F}(s)$
2. Addition/subtraction	$f_1(t) \pm f_2(t)$	$\mathbf{F}_1(s) \pm \mathbf{F}_2(s)$
3. Time scaling	$f(at)$	$\frac{1}{a}\mathbf{F}\left(\frac{s}{a}\right), a > 0$
4. Time shifting	$f(t - t_0)u(t - t_0), t_0 \geq 0$ $f(t)u(t - t_0)$	$e^{-t_0s}\mathbf{F}(s)$ $e^{-t_0s}\mathcal{L}[f(t + t_0)]$
5. Frequency shifting	$e^{-at}f(t)$	$\mathbf{F}(s + a)$
6. Differentiation	$\frac{d^n f(t)}{dt^n}$	$s^n \mathbf{F}(s) - s^{n-1}f(0) - s^{n-2}f'(0) \cdots - s^0 f^{(n-1)}(0)$
7. Multiplication by $t$	$tf(t)$	$-\frac{d\mathbf{F}(s)}{ds}$
	$t^n f(t)$	$(-1)^n \frac{d^n \mathbf{F}(s)}{ds^n}$
8. Division by $t$	$\frac{f(t)}{t}$	$\int_s^{\infty} \mathbf{F}(\lambda) d\lambda$
9. Integration	$\int_0^t f(\lambda) d\lambda$	$\frac{1}{s}\mathbf{F}(s)$
10. Convolution	$\int_0^t f_1(\lambda)f_2(t - \lambda) d\lambda$	$\mathbf{F}_1(s)\mathbf{F}_2(s)$

### EXAMPLE

## 13.5

### SOLUTION

Use the Laplace transform of  $\cos \omega t$  to find the Laplace transform of  $e^{-at} \cos \omega t$ .

Since the Laplace transform of  $\cos \omega t$  is known to be

$$\mathcal{L}[\cos \omega t] = \frac{s}{s^2 + \omega^2}$$

then using property number 5,

$$\mathcal{L}[e^{-at} \cos \omega t] = \frac{s + a}{(s + a)^2 + \omega^2}$$

Let us demonstrate property number 8.

If  $f(t) = te^{-at}$ , then

$$\mathbf{F}(\lambda) = \frac{1}{(\lambda + a)^2}$$

Therefore,

$$\int_s^\infty \mathbf{F}(\lambda) d\lambda = \int_s^\infty \frac{1}{(\lambda + a)^2} d\lambda = \frac{-1}{\lambda + a} \Big|_s^\infty = \frac{1}{s + a}$$

Hence,

$$f_1(t) = \frac{f(t)}{t} = \frac{te^{-at}}{t} = e^{-at} \quad \text{and} \quad \mathbf{F}_1(s) = \frac{1}{s + a}$$

**EXAMPLE****SOLUTION 13.6**

Let us employ the Laplace transform to solve the equation

$$\frac{dy(t)}{dt} + 2y(t) + \int_0^t y(\lambda)e^{-2(t-\lambda)} d\lambda = 10u(t) \quad y(0) = 0$$

Applying property numbers 6 and 10, we obtain

$$s\mathbf{Y}(s) + 2\mathbf{Y}(s) + \frac{\mathbf{Y}(s)}{s + 2} = \frac{10}{s}$$

$$\mathbf{Y}(s) \left( s + 2 + \frac{1}{s + 2} \right) = \frac{10}{s}$$

$$\mathbf{Y}(s) = \frac{10(s + 2)}{s(s^2 + 4s + 5)}$$

This is the solution of the linear constant-coefficient integrodifferential equation in the  $s$ -domain. However, we want the solution  $y(t)$  in the time domain.  $y(t)$  is obtained by performing the inverse transform, which is the topic of the next section, and the solution  $y(t)$  is derived in Example 13.9.

**EXAMPLE****13.6****SOLUTION**

## Learning Assessments

**E13.3** Find  $\mathbf{F}(s)$  if  $f(t) = \frac{1}{2}(t - 4e^{-2t})$ .

**ANSWER:**

$$\mathbf{F}(s) = \frac{1}{2s^2} - \frac{2}{s + 2}$$

**E13.4** If  $f(t) = te^{-(t-1)}u(t-1) - e^{-(t-1)}u(t-1)$ , determine  $\mathbf{F}(s)$  using the time-shifting theorem.

**ANSWER:**

$$\mathbf{F}(s) = \frac{e^{-s}}{(s + 1)^2}$$

**E13.5** Find  $\mathbf{F}(s)$  if  $f(t) = e^{-4t}(t - e^{-t})$ . Use property number 2.

**ANSWER:**

$$\mathbf{F}(s) = \frac{1}{(s + 4)^2} - \frac{1}{s + 5}$$

## 13.5

## Performing the Inverse Transform

As we begin our discussion of this topic, let us outline the procedure we will use in applying the Laplace transform to circuit analysis. First, we will transform the problem from the time domain to the complex frequency domain (that is,  $s$ -domain). Next, we will solve the circuit equations algebraically in the complex frequency domain. Finally, we will transform the solution from the  $s$ -domain back to the time domain. It is this latter operation that we discuss now.

The algebraic solution of the circuit equations in the complex frequency domain results in a rational function of  $s$  of the form

$$\mathbf{F}(s) = \frac{\mathbf{P}(s)}{\mathbf{Q}(s)} = \frac{a_m s^m + a_{m-1} s^{m-1} + \cdots + a_1 s + a_0}{b_n s^n + b_{n-1} s^{n-1} + \cdots + b_1 s + b_0} \quad 13.8$$

The roots of the polynomial  $\mathbf{P}(s)$  (i.e.,  $-z_1, -z_2, \dots, -z_m$ ) are called the *zeros* of the function  $\mathbf{F}(s)$  because at these values of  $s$ ,  $\mathbf{F}(s) = 0$ . Similarly, the roots of the polynomial  $\mathbf{Q}(s)$  (i.e.,  $-p_1, -p_2, \dots, -p_n$ ) are called *poles* of  $\mathbf{F}(s)$ , since at these values of  $s$ ,  $\mathbf{F}(s)$  becomes infinite.

If  $\mathbf{F}(s)$  is a proper rational function of  $s$ , then  $n > m$ . However, if this is not the case, we simply divide  $\mathbf{P}(s)$  by  $\mathbf{Q}(s)$  to obtain a quotient and a remainder; that is,

$$\frac{\mathbf{P}(s)}{\mathbf{Q}(s)} = C_{m-n} s^{m-n} + \cdots + C_2 s^2 + C_1 s + C_0 + \frac{\mathbf{P}_1(s)}{\mathbf{Q}(s)} \quad 13.9$$

Now  $\mathbf{P}_1(s)/\mathbf{Q}(s)$  is a proper rational function of  $s$ . Let us examine the possible forms of the roots of  $\mathbf{Q}(s)$ :

1. If the roots are simple,  $\mathbf{P}_1(s)/\mathbf{Q}(s)$  can be expressed in partial fraction form as

$$\frac{\mathbf{P}_1(s)}{\mathbf{Q}(s)} = \frac{K_1}{s + p_1} + \frac{K_2}{s + p_2} + \cdots + \frac{K_n}{s + p_n} \quad 13.10$$

2. If  $\mathbf{Q}(s)$  has simple complex roots, they will appear in complex-conjugate pairs, and the partial fraction expansion of  $\mathbf{P}_1(s)/\mathbf{Q}(s)$  for each pair of complex-conjugate roots will be of the form

$$\frac{\mathbf{P}_1(s)}{\mathbf{Q}_1(s)(s + \alpha - j\beta)(s + \alpha + j\beta)} = \frac{K_1}{s + \alpha - j\beta} + \frac{K_1^*}{s + \alpha + j\beta} + \cdots \quad 13.11$$

where  $\mathbf{Q}(s) = \mathbf{Q}_1(s)(s + a - j\beta)(s + \alpha + j\beta)$  and  $K_1^*$  is the complex conjugate of  $K_1$ .

3. If  $\mathbf{Q}(s)$  has a root of multiplicity  $r$ , the partial fraction expansion for each such root will be of the form

$$\frac{\mathbf{P}_1(s)}{\mathbf{Q}_1(s)(s + p_1)^r} = \frac{K_{11}}{(s + p_1)} + \frac{K_{12}}{(s + p_1)^2} + \cdots + \frac{K_{1r}}{(s + p_1)^r} + \cdots \quad 13.12$$

The importance of these partial fraction expansions stems from the fact that once the function  $\mathbf{F}(s)$  is expressed in this form, the individual inverse Laplace transforms can be obtained from known and tabulated transform pairs. The sum of these inverse Laplace transforms then yields the desired time function,  $f(t) = \mathcal{L}^{-1}[\mathbf{F}(s)]$ .

**SIMPLE POLES** Let us assume that all the poles of  $\mathbf{F}(s)$  are simple, so that the partial fraction expansion of  $\mathbf{F}(s)$  is of the form

$$\mathbf{F}(s) = \frac{\mathbf{P}(s)}{\mathbf{Q}(s)} = \frac{K_1}{s + p_1} + \frac{K_2}{s + p_2} + \cdots + \frac{K_n}{s + p_n} \quad 13.13$$

Then the constant  $K_i$  can be computed by multiplying both sides of this equation by  $(s + p_i)$  and evaluating the equation at  $s = -p_i$ ; that is,

$$\frac{(s + p_i)\mathbf{P}(s)}{\mathbf{Q}(s)} \Big|_{s=-p_i} = 0 + \cdots + 0 + K_i + 0 + \cdots + 0 \quad i = 1, 2, \dots, n \quad 13.14$$

Once all of the  $K_i$  terms are known, the time function  $f(t) = \mathcal{L}^{-1}[\mathbf{F}(s)]$  can be obtained using the Laplace transform pair:

$$\mathcal{L}^{-1}\left[\frac{1}{s + a}\right] = e^{-at} \quad 13.15$$

Given that

$$\mathbf{F}(s) = \frac{12(s + 1)(s + 3)}{s(s + 2)(s + 4)(s + 5)}$$

let us find the function  $f(t) = \mathcal{L}^{-1}[\mathbf{F}(s)]$ .

Expressing  $\mathbf{F}(s)$  in a partial fraction expansion, we obtain

$$\frac{12(s + 1)(s + 3)}{s(s + 2)(s + 4)(s + 5)} = \frac{K_0}{s} + \frac{K_1}{s + 2} + \frac{K_2}{s + 4} + \frac{K_3}{s + 5}$$

To determine  $K_0$ , we multiply both sides of the equation by  $s$  to obtain the equation

$$\frac{12(s + 1)(s + 3)}{(s + 2)(s + 4)(s + 5)} = K_0 + \frac{K_1 s}{s + 2} + \frac{K_2 s}{s + 4} + \frac{K_3 s}{s + 5}$$

Evaluating the equation at  $s = 0$  yields

$$\frac{(12)(1)(3)}{(2)(4)(5)} = K_0 + 0 + 0 + 0$$

or

$$K_0 = \frac{36}{40}$$

Similarly,

$$(s + 2)\mathbf{F}(s) \Big|_{s=-2} = \frac{12(s + 1)(s + 3)}{s(s + 4)(s + 5)} \Big|_{s=-2} = K_1$$

or

$$K_1 = 1$$

Using the same approach, we find that  $K_2 = \frac{36}{8}$  and  $K_3 = -\frac{32}{5}$ . Hence  $\mathbf{F}(s)$  can be written as

$$\mathbf{F}(s) = \frac{36/40}{s} + \frac{1}{s + 2} + \frac{36/8}{s + 4} - \frac{32/5}{s + 5}$$

Then  $f(t) = \mathcal{L}^{-1}[\mathbf{F}(s)]$  is

$$f(t) = \left( \frac{36}{40} + 1e^{-2t} + \frac{36}{8}e^{-4t} - \frac{32}{5}e^{-5t} \right) u(t)$$

## EXAMPLE 13.8

### SOLUTION

## Learning Assessments

**E13.6** Find  $f(t)$  if  $\mathbf{F}(s) = 10(s + 6)/(s + 1)(s + 3)$ .

**ANSWER:**

$$f(t) = (25e^{-t} - 15e^{-3t})u(t).$$

**E13.7** If  $\mathbf{F}(s) = 12(s + 2)/s(s + 1)$ , find  $f(t)$ .

**ANSWER:**

$$f(t) = (24 - 12e^{-t})u(t).$$

**E13.8** Given  $\mathbf{F}(s) = \frac{s^2 + 5s + 1}{s(s + 1)(s + 4)}$ , find  $f(t)$ .

**ANSWER:**

$$f(t) = (0.25 + e^{-t} - 0.25e^{-4t})u(t).$$

**COMPLEX-CONJUGATE POLES** Let us assume that  $\mathbf{F}(s)$  has one pair of complex-conjugate poles. The partial fraction expansion of  $\mathbf{F}(s)$  can then be written as

$$\mathbf{F}(s) = \frac{\mathbf{P}_1(s)}{\mathbf{Q}_1(s)(s + \alpha - j\beta)(s + \alpha + j\beta)} = \frac{K_1}{s + \alpha - j\beta} + \frac{K_1^*}{s + \alpha + j\beta} + \dots \quad 13.16$$

The constant  $K_1$  can then be determined using the procedure employed for simple poles; that is,

$$(s + \alpha - j\beta)\mathbf{F}(s) \Big|_{s=-\alpha+j\beta} = K_1 \quad 13.17$$

In this case  $K_1$  is in general a complex number that can be expressed as  $|K_1|/\underline{\theta}$ . Then  $K_1^* = |K_1|/\underline{-\theta}$ . Hence, the partial fraction expansion can be expressed in the form

$$\begin{aligned} \mathbf{F}(s) &= \frac{|K_1|/\underline{\theta}}{s + \alpha - j\beta} + \frac{|K_1|/\underline{-\theta}}{s + \alpha + j\beta} + \dots \\ &= \frac{|K_1|e^{j\theta}}{s + \alpha - j\beta} + \frac{|K_1|e^{-j\theta}}{s + \alpha + j\beta} + \dots \end{aligned} \quad 13.18$$

The corresponding time function is then of the form

$$\begin{aligned} f(t) &= \mathcal{L}^{-1}[\mathbf{F}(s)] = |K_1|e^{j\theta}e^{-(\alpha-j\beta)t} + |K_1|e^{-j\theta}e^{-(\alpha+j\beta)t} + \dots \\ &= |K_1|e^{-\alpha t}[e^{j(\beta t + \theta)} + e^{-j(\beta t + \theta)}] + \dots \\ &= 2|K_1|e^{-\alpha t} \cos(\beta t + \theta) + \dots \end{aligned} \quad 13.19$$

### [hint]

Recall that

$$\cos x = \frac{e^{jx} + e^{-jx}}{2}$$

### EXAMPLE 13.9

Let us determine the time function  $y(t)$  for the function

$$\mathbf{Y}(s) = \frac{10(s + 2)}{s(s^2 + 4s + 5)}$$

**SOLUTION** Expressing the function in a partial fraction expansion, we obtain

$$\begin{aligned} \frac{10(s + 2)}{s(s + 2 - j1)(s + 2 + j1)} &= \frac{K_0}{s} + \frac{K_1}{s + 2 - j1} + \frac{K_1^*}{s + 2 + j1} \end{aligned}$$

$$\frac{10(s + 2)}{s^2 + 4s + 5} \Big|_{s=0} = K_0$$

$$4 = K_0$$

In a similar manner,

$$\frac{10(s+2)}{s(s+2+j1)} \Big|_{s=-2+j1} = K_1$$

$$2.236 \angle -153.43^\circ = K_1$$

Therefore,

$$2.236 \angle 153.43^\circ = K_1^*$$

The partial fraction expansion of  $\mathbf{Y}(s)$  is then

$$\mathbf{Y}(s) = \frac{4}{s} + \frac{2.236 \angle -153.43^\circ}{s+2-j1} + \frac{2.236 \angle 153.43^\circ}{s+2+j1}$$

and therefore,

$$y(t) = [4 + 4.472e^{-2t} \cos(t - 153.43^\circ)]u(t)$$

## Learning Assessments

**E13.9** Determine  $f(t)$  if  $\mathbf{F}(s) = s/(s^2 + 4s + 8)$ .

**ANSWER:**

$$f(t) = 1.41e^{-2t} \cos(2t + 45^\circ)u(t).$$

**E13.10** Given  $\mathbf{F}(s) = \frac{4(s+3)}{(s+1)(s^2+2s+5)}$ , find  $f(t)$ .

**ANSWER:**

$$f(t) = (2e^{-t} + 2\sqrt{2}e^{-t}\cos(2t - 135^\circ))u(t).$$

**MULTIPLE POLES** Let us suppose that  $\mathbf{F}(s)$  has a pole of multiplicity  $r$ . Then  $\mathbf{F}(s)$  can be written in a partial fraction expansion of the form

$$\mathbf{F}(s) = \frac{\mathbf{P}_1(s)}{\mathbf{Q}_1(s)(s+p_1)^r}$$

$$= \frac{K_{11}}{s+p_1} + \frac{K_{12}}{(s+p_1)^2} + \cdots + \frac{K_{1r}}{(s+p_1)^r} + \cdots \quad 13.20$$

Employing the approach for a simple pole, we can evaluate  $K_{1r}$  as

$$(s+p_1)^r \mathbf{F}(s) \Big|_{s=-p_1} = K_{1r} \quad 13.21$$

To evaluate  $K_{1r-1}$  we multiply  $\mathbf{F}(s)$  by  $(s+p_1)^r$  as we did to determine  $K_{1r}$ ; however, prior to evaluating the equation at  $s = -p_1$ , we take the derivative with respect to  $s$ . The proof that this will yield  $K_{1r-1}$  can be obtained by multiplying both sides of Eq. (13.20) by  $(s+p_1)^r$  and then taking the derivative with respect to  $s$ . Now when we evaluate the equation at  $s = -p_1$ , the only term remaining on the right side of the equation is  $K_{1r-1}$ , and therefore,

$$\frac{d}{ds} [(s+p_1)^r \mathbf{F}(s)] \Big|_{s=-p_1} = K_{1r-1} \quad 13.22$$

$K_{1r-2}$  can be computed in a similar fashion, and in that case the equation is

$$\frac{d^2}{ds^2} [(s+p_1)^r \mathbf{F}(s)] \Big|_{s=-p_1} = (2!)K_{1r-2} \quad 13.23$$

The general expression for this case is

$$K_{1j} = \frac{1}{(r-j)!} \frac{d^{r-j}}{ds^{r-j}} [(s+p_1)^r \mathbf{F}(s)] \Big|_{s=-p_1} \quad 13.24$$

Let us illustrate this procedure with an example.

### EXAMPLE 13.10

Given the following function  $\mathbf{F}(s)$ , let us determine the corresponding time function  $f(t) = \mathcal{L}^{-1}[\mathbf{F}(s)]$ .

$$\mathbf{F}(s) = \frac{10(s+3)}{(s+1)^3(s+2)}$$

**SOLUTION** Expressing  $\mathbf{F}(s)$  as a partial fraction expansion, we obtain

$$\begin{aligned} \mathbf{F}(s) &= \frac{10(s+3)}{(s+1)^3(s+2)} \\ &= \frac{K_{11}}{s+1} + \frac{K_{12}}{(s+1)^2} + \frac{K_{13}}{(s+1)^3} + \frac{K_2}{s+2} \end{aligned}$$

Then

$$\begin{aligned} (s+1)^3 \mathbf{F}(s) \Big|_{s=-1} &= K_{13} \\ 20 &= K_{13} \end{aligned}$$

$K_{12}$  is now determined by the equation

$$\begin{aligned} \frac{d}{ds} [(s+1)^3 \mathbf{F}(s)] \Big|_{s=-1} &= K_{12} \\ \frac{-10}{(s+2)^2} \Big|_{s=-1} &= -10 = K_{12} \end{aligned}$$

In a similar fashion  $K_{11}$  is computed from the equation

$$\begin{aligned} \frac{d^2}{ds^2} [(s+1)^3 \mathbf{F}(s)] \Big|_{s=-1} &= 2K_{11} \\ \frac{20}{(s+2)^3} \Big|_{s=-1} &= 20 = 2K_{11} \end{aligned}$$

Therefore,

$$10 = K_{11}$$

In addition,

$$\begin{aligned} (s+2) \mathbf{F}(s) \Big|_{s=-2} &= K_2 \\ -10 &= K_2 \end{aligned}$$

Hence,  $\mathbf{F}(s)$  can be expressed as

$$\mathbf{F}(s) = \frac{10}{s+1} - \frac{10}{(s+1)^2} + \frac{20}{(s+1)^3} - \frac{10}{s+2}$$

Now we employ the transform pair

$$\mathcal{L}^{-1} \left[ \frac{1}{(s+a)^{n+1}} \right] = \frac{t^n}{n!} e^{-at}$$

and hence,

$$f(t) = (10e^{-t} - 10te^{-t} + 10t^2e^{-t} - 10e^{-2t})u(t)$$



## Learning Assessments

**E13.11** Determine  $f(t)$  if  $\mathbf{F}(s) = s/(s + 1)^2$ .

**ANSWER:**

$$f(t) = (e^{-t} - te^{-t})u(t).$$

**E13.12** If  $\mathbf{F}(s) = (s + 2)/s^2(s + 1)$ , find  $f(t)$ .

**ANSWER:**

$$f(t) = (-1 + 2t + e^{-t})u(t).$$

**E13.13** Given  $\mathbf{F}(s) = \frac{100}{s^3(s + 5)}$ , find  $f(t)$ .

**ANSWER:**

$$f(t) = (0.8 - 4t + 10t^2 - 0.8e^{-5t})u(t).$$

Back in Chapter 7 we discussed the characteristic equation for a second-order transient circuit. The polynomial  $\mathbf{Q}(s) = 0$  is the characteristic equation for our circuit. The roots of the characteristic equation, also called the poles of  $\mathbf{F}(s)$ , determine the time response for our circuit. If  $\mathbf{Q}(s) = 0$  has simple roots, then the time response will be characterized by decaying exponential functions. Multiple roots produce a time response that contains decaying exponential terms such as  $e^{-at}$ ,  $te^{-at}$ , and  $t^2e^{-at}$ . The time response for simple complex-conjugate roots is a sinusoidal function whose amplitude decays exponentially. Note that all of these time responses decay to zero with time. Suppose our circuit response contained a term such as  $3e^{2t}$ . A quick plot of this function reveals that it increases without bound for  $t > 0$ . Certainly, if our circuit was characterized by this type of response, we would need eye protection as our circuit destructed before us!

Earlier, in Eq. (13.8), we defined  $\mathbf{F}(s)$  as the ratio of two polynomials. Let's suppose that  $m = n$  in this equation. In this case, only  $C_0$  is nonzero in Eq. (13.9). Recall that we perform a partial fraction expansion on  $\mathbf{P}_1(s)/\mathbf{Q}(s)$  and use our table of Laplace transform pairs to determine the corresponding time function for each term in the expansion. What do we do with this constant  $C_0$ ? Looking at our table of transform pairs in Table 13.1, we note that the Laplace transform of the unit impulse function is a constant. As a result, our circuit response would contain a unit impulse function. Earlier we noted that unit impulse functions don't exist in physical systems; therefore,  $m < n$  for physical systems.

Convolution is a very important concept and has wide application in circuit and systems analysis. We first illustrate the connection that exists between the convolution integral and the Laplace transform. We then indicate the manner in which the convolution integral is applied in circuit analysis.

Property number 10 in Table 13.2 states the following.

If

$$f(t) = f_1(t) \otimes f_2(t) = \int_0^t f_1(t - \lambda)f_2(\lambda) d\lambda = \int_0^t f_1(\lambda)f_2(t - \lambda) d\lambda \quad 13.25$$

and

$$\mathcal{L}[f(t)] = \mathbf{F}(s), \mathcal{L}[f_1(t)] = \mathbf{F}_1(s) \quad \text{and} \quad \mathcal{L}[f_2(t)] = \mathbf{F}_2(s)$$

then

$$\mathbf{F}(s) = \mathbf{F}_1(s)\mathbf{F}_2(s) \quad 13.26$$

Our demonstration begins with the definition

$$\mathcal{L}[f(t)] = \int_0^\infty \left[ \int_0^t f_1(t - \lambda)f_2(\lambda) d\lambda \right] e^{-st} dt$$

## 13.6

### Convolution Integral

We now force the function into the proper format by introducing into the integral within the brackets the unit step function  $u(t - \lambda)$ . We can do this because

$$u(t - \lambda) = \begin{cases} 1 & \text{for } \lambda < t \\ 0 & \text{for } \lambda > t \end{cases} \quad \mathbf{13.27}$$

The first condition in Eq. (13.27) ensures that the insertion of the unit step function has no impact within the limits of integration. The second condition in Eq. (13.27) allows us to change the upper limit of integration from  $t$  to  $\infty$ . Therefore,

$$\mathcal{L}[f(t)] = \int_0^\infty \left[ \int_0^\infty f_1(t - \lambda)u(t - \lambda)f_2(\lambda)d\lambda \right] e^{-st} dt$$

which can be written as

$$\mathcal{L}[f(t)] = \int_0^\infty f_2(\lambda) \left[ \int_0^\infty f_1(t - \lambda)u(t - \lambda)e^{-st} dt \right] d\lambda$$

Note that the integral within the brackets is the time-shifting theorem illustrated in Eq. (13.6). Hence, the equation can be written as

$$\begin{aligned} \mathcal{L}[f(t)] &= \int_0^\infty f_2(\lambda)\mathbf{F}_1(s)e^{-s\lambda} d\lambda \\ &= \mathbf{F}_1(s) \int_0^\infty f_2(\lambda)e^{-s\lambda} d\lambda \\ &= \mathbf{F}_1(s)\mathbf{F}_2(s) \end{aligned}$$

Note that convolution in the time domain corresponds to multiplication in the frequency domain.

Let us now illustrate the use of this property in the evaluation of an inverse Laplace transform.

**EXAMPLE  
13.11**

The transfer function for a network is given by the expression

$$\mathbf{H}(s) = \frac{\mathbf{V}_o(s)}{\mathbf{V}_s(s)} = \frac{10}{s + 5}$$

The input is a unit step function  $\mathbf{V}_s(s) = \frac{1}{s}$ . Let us use convolution to determine the output voltage  $v_o(t)$ .

**SOLUTION**

Since  $\mathbf{H}(s) = \frac{10}{(s + 5)}$ ,  $h(t) = 10e^{-5t}$  and therefore

$$\begin{aligned} v_o(t) &= \int_0^t 10u(\lambda)e^{-5(t-\lambda)} d\lambda \\ &= 10e^{-5t} \int_0^t e^{5\lambda} d\lambda \\ &= \frac{10e^{-5t}}{5} [e^{5t} - 1] \\ &= 2[1 - e^{-5t}]u(t) \text{ V} \end{aligned}$$

For comparison, let us determine  $v_o(t)$  from  $\mathbf{H}(s)$  and  $\mathbf{V}_s(s)$  using the partial fraction expansion method.  $\mathbf{V}_o(s)$  can be written as

$$\begin{aligned}\mathbf{V}_o(s) &= \mathbf{H}(s)\mathbf{V}_s(s) \\ &= \frac{10}{s(s+5)} = \frac{K_0}{s} + \frac{K_1}{s+5}\end{aligned}$$

Evaluating the constants, we obtain  $K_0 = 2$  and  $K_1 = -2$ . Therefore,

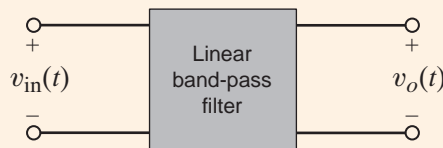
$$\mathbf{V}_o(s) = \frac{2}{s} - \frac{2}{s+5}$$

and hence

$$v_o(t) = 2[1 - e^{-5t}]u(t) \text{ V}$$

Although we can employ convolution to derive an inverse Laplace transform, the example, though quite simple, illustrates that this is a very poor approach. If the function  $\mathbf{F}(s)$  is very complicated, the mathematics can become unwieldy. Convolution is, however, a very powerful and useful tool. For example, if we know the impulse response of a network, we can use convolution to determine the network's response to an input that may be available only as an experimental curve obtained in the laboratory. Thus, convolution permits us to obtain the network response to inputs that cannot be written as analytical functions but can be simulated on a digital computer. In addition, we can use convolution to model a circuit, which is completely unknown to us, and use this model to determine the circuit's response to some input signal.

To demonstrate the power of convolution, we will create a model for a “black-box” linear band-pass filter, shown as a block in Fig. 13.3. We have no details about the filter circuitry at all—no circuit diagram, no component list, no component values. As a result, our filter model must be based solely on measurements. Using our knowledge of convolution and the Laplace transform, let us discuss appropriate measurement techniques, the resulting model, and how to employ the model in subsequent simulations.



Because the filter is linear,  $v_o(t)$  can be written

$$v_o(t) = h(t) \otimes v_{in}(t) \quad 13.28$$

Thus, the function  $h(t)$  will be our model for the filter. To determine  $h(t)$ , we must input some  $v_{in}(t)$ , measure the response,  $v_o(t)$ , and perform the appropriate mathematics. One obvious option for  $v_{in}(t)$  is the impulse function,  $\delta(t)$ , then  $\mathbf{V}_{in}(s)$  is 1, and the output is the desired model,  $h(t)$ :

$$v_o(t) = h(t)$$

Unfortunately, creating an adequate impulse, infinite amplitude, and zero width in the laboratory is nontrivial. It is much easier, and more common, to apply a step function such as  $10u(t)$ . Then  $\mathbf{V}_{in}(s)$  is  $10/s$ , and the output can be expressed in the  $s$ -domain as

$$\mathbf{V}_o(s) = \mathbf{H}(s) \left[ \frac{10}{s} \right]$$

## EXAMPLE 13.12

Figure 13.3

Conceptual diagram for a band-pass filter.

## SOLUTION

or

$$\mathbf{H}(s) = \left[ \frac{s}{10} \right] \mathbf{V}_o(s)$$

Since multiplication by  $s$  is equivalent to the time derivative, we have for  $h(t)$

$$h(t) = \left[ \frac{1}{10} \right] \frac{dv_o(t)}{dt} \tag{13.29}$$

Thus,  $h(t)$  can be obtained from the derivative of the filter response to a step input!

In the laboratory, the input  $10 u(t)$  was applied to the filter and the output voltage was measured using a digital oscilloscope. Data points for time and  $v_o(t)$  were acquired every  $50 \mu\text{s}$  over the interval 0 to 50 ms, that is, 1,000 data samples. The digital oscilloscope formats the data as a text file, which can be transferred to a personal computer where the data can be processed. [In other words, we can find our derivative in Eq. (13.29),  $dv_o(t)/dt$ .] The results are shown in Table 13.3. The second and third columns in the table show the elapsed time and the output voltage for the first few data samples. To produce  $h(t)$ , the derivative was approximated in software using the simple algorithm,

$$\frac{dv_o(t)}{dt} \approx \frac{\Delta V_o}{\Delta t} = \frac{V_o[(n + 1)T_s] - V_o[nT_s]}{T_s}$$

where  $T_s$  is the sample time,  $50 \mu\text{s}$ , and  $n$  is the sample number. Results for  $h(t)$  are shown in the fourth column of the table. At this point,  $h(t)$  exists as a table of data points and the filter is now modeled.

**TABLE 13.3** The first five data samples of the step response and the evaluation of  $h(t)$

N	TIME(s)	STEP RESPONSE (V)	$h(t)$
0	0.00E+00	0.00E+00	3.02E+02
1	5.00E-05	1.51E-01	8.98E+02
2	1.00E-04	6.00E-01	9.72E+02
3	1.50E-04	1.09E+00	9.56E+02
4	2.00E-04	1.56E+00	9.38E+02

To test our model,  $h(t)$ , we let the function  $v_{in}(t)$  contain a combination of dc and sinusoid components such as

$$v_{in}(t) = \begin{cases} 1 \sin[(2\pi)100t] + 1 \sin[(2\pi)1234t] + 4 & 0 \leq t < 25 \text{ ms} \\ 0 & t \geq 25 \text{ ms} \end{cases} \tag{13.30}$$

How will the filter perform? What will the output voltage look like? To find out, we must convolve  $h(t)$  and  $v_{in}(t)$ . A data file for  $v_{in}(t)$  can be created by simply evaluating the function in Eq. (13.30) every  $50 \mu\text{s}$ . This convolution can be performed using any convenient computational method.

Plots of the resulting  $v_o(t)$  and  $v_{in}(t)$  are shown in Fig. 13.4. An examination of the output waveform indicates that the 100-Hz component of  $v_{in}(t)$  is amplified, whereas the dc and 1234-Hz components are attenuated. That is,  $v_o(t)$  has an amplitude of approximately 3 V and an average value of near zero. Indeed, the circuit performs as a band-pass filter. Remember that these waveforms are not measured; they are simulation results obtained from our model,  $h(t)$ .

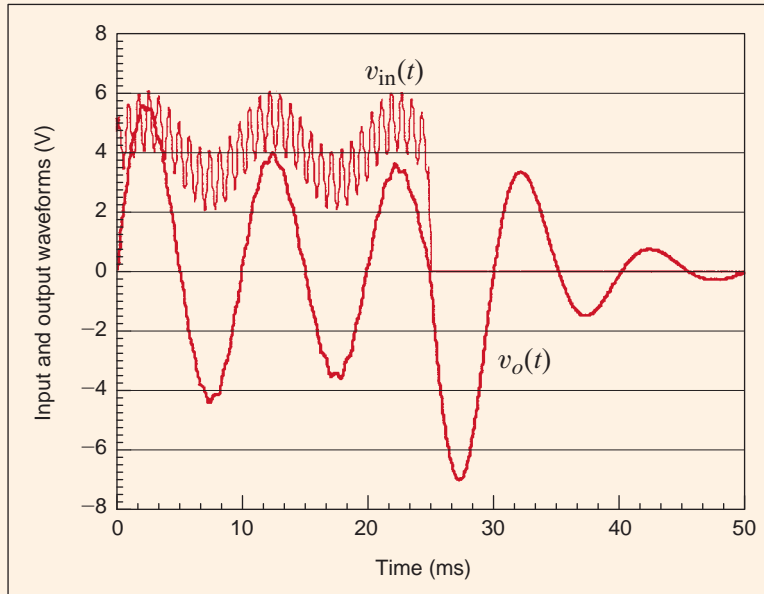


Figure 13.4

Plots of input and output waveforms reveal the nature of the band-pass filter—particularly attenuation of dc and higher-frequency components.

Suppose that we wish to determine the initial or final value of a circuit response in the time domain from the Laplace transform of the function in the  $s$ -domain without performing the inverse transform. If we determine the function  $f(t) = \mathcal{L}^{-1}[\mathbf{F}(s)]$ , we can find the initial value by evaluating  $f(t)$  as  $t \rightarrow 0$  and the final value by evaluating  $f(t)$  as  $t \rightarrow \infty$ . It would be very convenient, however, if we could simply determine the initial and final values from  $\mathbf{F}(s)$  without having to perform the inverse transform. The initial- and final-value theorems allow us to do just that.

The *initial-value theorem* states that

$$\lim_{t \rightarrow 0} f(t) = \lim_{s \rightarrow \infty} s\mathbf{F}(s) \quad 13.31$$

provided that  $f(t)$  and its first derivative are transformable.

The proof of this theorem employs the Laplace transform of the function  $df(t)/dt$ :

$$\int_0^{\infty} \frac{df(t)}{dt} e^{-st} dt = s\mathbf{F}(s) - f(0)$$

Taking the limit of both sides as  $s \rightarrow \infty$ , we find that

$$\lim_{s \rightarrow \infty} \int_0^{\infty} \frac{df(t)}{dt} e^{-st} dt = \lim_{s \rightarrow \infty} [s\mathbf{F}(s) - f(0)]$$

and since

$$\int_0^{\infty} \frac{df(t)}{dt} \lim_{s \rightarrow \infty} e^{-st} dt = 0$$

then

$$f(0) = \lim_{s \rightarrow \infty} s\mathbf{F}(s)$$

which is, of course,

$$\lim_{t \rightarrow 0} f(t) = \lim_{s \rightarrow \infty} s\mathbf{F}(s)$$

## 13.7

### Initial-Value and Final-Value Theorems

The *final-value theorem* states that

$$\lim_{t \rightarrow \infty} f(t) = \lim_{s \rightarrow 0} s\mathbf{F}(s) \quad 13.32$$

provided that  $f(t)$  and its first derivative are transformable and that  $f(\infty)$  exists. This latter requirement means that the poles of  $\mathbf{F}(s)$  must have negative real parts with the exception that there can be a simple pole at  $s = 0$ .

The proof of this theorem also involves the Laplace transform of the function  $df(t)/dt$ :

$$\int_0^{\infty} \frac{df(t)}{dt} e^{-st} dt = s\mathbf{F}(s) - f(0)$$

Taking the limit of both sides as  $s \rightarrow 0$  gives us

$$\lim_{s \rightarrow 0} \int_0^{\infty} \frac{df(t)}{dt} e^{-st} dt = \lim_{s \rightarrow 0} [s\mathbf{F}(s) - f(0)]$$

Therefore,

$$\int_0^{\infty} \frac{df(t)}{dt} dt = \lim_{s \rightarrow 0} [s\mathbf{F}(s) - f(0)]$$

and

$$f(\infty) - f(0) = \lim_{s \rightarrow 0} s\mathbf{F}(s) - f(0)$$

and hence,

$$f(\infty) = \lim_{t \rightarrow \infty} f(t) = \lim_{s \rightarrow 0} s\mathbf{F}(s)$$

### EXAMPLE 13.13

Let us determine the initial and final values for the function

$$\mathbf{F}(s) = \frac{10(s+1)}{s(s^2+2s+2)}$$

and corresponding time function

$$f(t) = 5 + 5\sqrt{2} e^{-t} \cos(t - 135^\circ)u(t)$$

**SOLUTION** Applying the initial-value theorem, we have

$$\begin{aligned} f(0) &= \lim_{s \rightarrow \infty} s\mathbf{F}(s) \\ &= \lim_{s \rightarrow \infty} \frac{10(s+1)}{s^2+2s+2} \\ &= 0 \end{aligned}$$

The poles of  $\mathbf{F}(s)$  are  $s = 0$  and  $s = -1 \pm j1$ , so the final-value theorem is applicable. Thus,

$$\begin{aligned} f(\infty) &= \lim_{s \rightarrow 0} s\mathbf{F}(s) \\ &= \lim_{s \rightarrow 0} \frac{10(s+1)}{s^2+2s+2} \\ &= 5 \end{aligned}$$

Note that these values could be obtained directly from the time function  $f(t)$ .

As a prelude to Chapter 14, in which we will employ the power and versatility of the Laplace transform in a wide variety of circuit analysis problems, we will now demonstrate how the techniques outlined in this chapter can be used in the solution of a circuit problem via the differential equation that describes the network.

## 13.8

Application  
Example

Consider the network shown in Fig. 13.5a. Assume that the network is in steady state prior to  $t = 0$ . Let us find the current  $i(t)$  for  $t > 0$ .

In steady state prior to  $t = 0$ , the network is as shown in Fig. 13.5b, since the inductor acts like a short circuit to dc and the capacitor acts like an open circuit to dc. From Fig. 13.5b we note that  $i(0) = 4$  A and  $v_C(0) = 4$  V. For  $t > 0$ , the KVL equation for the network is

$$12u(t) = 2i(t) + 1 \frac{di(t)}{dt} + \frac{1}{0.1} \int_0^t i(x) dx + v_C(0)$$

Using the results of Example 13.1 and properties 7 and 10, the transformed expression becomes

$$\frac{12}{s} = 2\mathbf{I}(s) + s\mathbf{I}(s) - i(0) + \frac{10}{s}\mathbf{I}(s) + \frac{v_C(0)}{s}$$

Using the initial conditions, we find that the equation becomes

$$\frac{12}{s} = \mathbf{I}(s) \left( 2 + s + \frac{10}{s} \right) - 4 + \frac{4}{s}$$

or

$$\mathbf{I}(s) = \frac{4(s+2)}{s^2 + 2s + 10} = \frac{4(s+2)}{(s+1-j3)(s+1+j3)}$$

and then

$$\begin{aligned} K_1 &= \left. \frac{4(s+2)}{s+1+j3} \right|_{s=-1-j3} \\ &= 2.11 \angle -18.4^\circ \end{aligned}$$

Therefore,

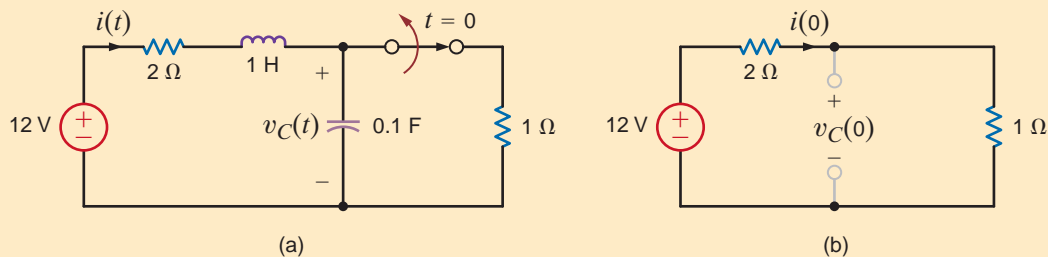
$$i(t) = 2(2.11)e^{-t} \cos(3t - 18.4^\circ)u(t) \text{ A}$$

Note that this expression satisfies the initial condition  $i(0) = 4$  A.

In the introduction to this chapter, we stated that the Laplace transform would yield both the natural and forced responses for a circuit. Our solution to this problem contains only one term. Is it the forced response or the natural response? Remember that the forced response always has the same form as the forcing function or source. The source for this problem is a dc voltage source, so the forced response should be a constant. In fact, the forced response is zero for our circuit, and the natural response is the damped cosine function. Does a zero forced response make sense? Yes! If we look at our circuit, the capacitor is going to charge up to the source voltage. Once the capacitor voltage reaches the source voltage, the current will become zero.

APPLICATION  
EXAMPLE 13.14

## SOLUTION



**Figure 13.5**  
Circuits used in  
Example 13.14.

## Learning Assessments

**E13.14** Find the initial and final values of the function  $f(t)$  if  $\mathbf{F}(s) = \mathcal{L}[f(t)]$  is given by the expression

$$\mathbf{F}(s) = \frac{(s+1)^2}{s(s+2)(s^2+2s+2)}$$

**ANSWER:**

$$f(0) = 0 \text{ and } f(\infty) = \frac{1}{4}.$$

**E13.15** Find the initial and final values of the time function  $f(t)$  if  $\mathbf{F}(s) = \frac{8s^2 - 20s + 500}{s(s^2 + 4s + 50)}$

**ANSWER:**

$$f(0) = 8; f(\infty) = 10.$$

**E13.16** Use the Laplace transform to find  $y(t)$  if

$$\frac{dy}{dt} + 4y(t) + 4 \int_0^t y(x) dx = 10u(t), y(0) = 10$$

**ANSWER:**

$$y(t) = (10e^{-2t} - 10te^{-2t})u(t).$$

## Problem-Solving Strategy

### The Laplace Transform and Transient Circuits

- Step 1.** Assume that the circuit has reached steady state before a switch is moved. Draw the circuit valid for  $t = 0^-$  replacing capacitors with open circuits and inductors with short circuits. Solve for the initial conditions: voltages across capacitors and currents flowing through inductors. Remember that  $v_C(0^-) = v_C(0^+) = v_C(0)$  and  $i_L(0^-) = i_L(0^+) = i_L(0)$ .
- Step 2.** Draw the circuit valid for  $t > 0$ . Use circuit analysis techniques to determine the differential or integrodifferential equation that describes the behavior of the circuit.
- Step 3.** Convert this differential/integrodifferential equation to an algebraic equation using the Laplace transform.
- Step 4.** Solve this algebraic equation for the variable of interest. Your result will be a ratio of polynomials in the complex variable  $s$ .
- Step 5.** Perform an inverse Laplace transform to solve for the circuit response in the time domain.

## Learning Assessments

**E13.17** Assuming that the network in Fig. E13.17 is in steady state prior to  $t = 0$ , find  $i(t)$  for  $t > 0$ .

**ANSWER:**

$$i(t) = (3 - e^{-2t})u(t) \text{ A.}$$

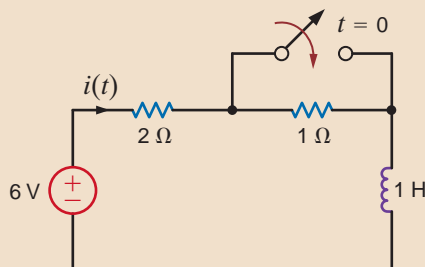


Figure E13.17



**E13.18** In the circuit in Fig. E13.18, the switch opens at  $t = 0$ . Use Laplace transforms to find  $v_o(t)$  for  $t > 0$ .

**ANSWER:**

$$v_o(t) = (12 - 5e^{-66.67t}) u(t) \text{ V.}$$

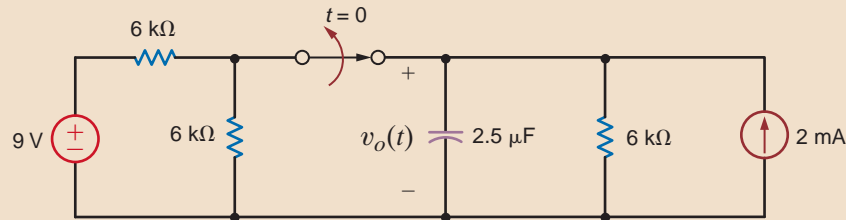


Figure E13.18

**E13.19** In the circuit in Fig. E13.19, the switch opens at  $t = 0$ . Use Laplace transforms to find  $i(t)$  for  $t > 0$ .

**ANSWER:**

$$i(t) = (-0.274e^{-0.172t} + 9.274e^{-5.828t}) u(t) \text{ A.}$$

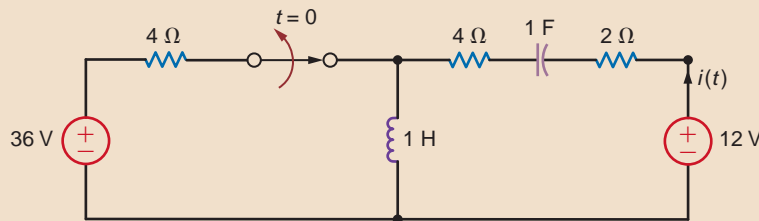


Figure E13.19

## SUMMARY

- In applying the Laplace transform, we convert an integrodifferential equation in the time domain to an algebraic equation, which includes initial conditions, in the  $s$ -domain. We solve for the unknowns in the  $s$ -domain and convert the results back to the time domain.
- The Laplace transform is defined by the expression

$$\mathcal{L}[f(t)] = \mathbf{F}(s) = \int_0^{\infty} f(t)e^{-st} dt$$

- Laplace transform pairs, as listed in Table 13.1, can be used to convert back and forth between the time and frequency domains.

- The Laplace transform properties, as listed in Table 13.2, are useful in performing the Laplace transform and its inverse.
- The partial fraction expansion of a function in the  $s$ -domain permits the use of the transform pairs in Table 13.1 and the properties in Table 13.2 to convert the function to the time domain.
- The convolution of two functions in the time domain corresponds to a simple multiplication of the two functions in the  $s$ -domain.
- The initial and final values of a time-domain function can be obtained from its Laplace transform in the frequency domain.

## PROBLEMS

**13.1** Demonstrate the following equalities:

(a)  $\mathcal{L}[e^{-at}] = \frac{1}{s + a}$ .

(b)  $\mathcal{L}[\sin \omega t] = \frac{\omega}{s^2 + \omega^2}$ .

(c)  $\mathcal{L}[t] = \frac{1}{s^2}$ .

**13.2** Find the  $\mathcal{L}[f(t)]$  if  $f(t)$  is

$$f(t) = a + a^2t + ae^{-at} + a^2 \cos at.$$

**13.3** Find  $\mathbf{F}(s)$  if  $f(t) = e^{-at} \sin \omega t u(t - 1)$ .


**13.4** Find  $\mathbf{F}(s)$  if  $f(t) = te^{-at} u(t - 4)$ .


**13.5** Use the time-shifting theorem to determine  $\mathcal{L}[f(t)]$ , where  $f(t) = [t - 1 + e^{-(t-1)}] u(t - 1)$ .

**13.6** If  $f(t) = te^{-(t-a)}u(t - a) - e^{-t}u(t - a)$ , find  $\mathbf{F}(s)$ .

**13.7** Use the time-shifting theorem to determine  $\mathcal{L}[f(t)]$ , where  $f(t) = [e^{-(t-2)} - e^{-2(t-2)}] u(t - 2)$ .


**13.8** Use property number 7 to find  $\mathcal{L}[f(t)]$  if  $f(t) = te^{-at}u(t-1)$ .

 **13.9** Use property number 5 to find  $\mathcal{L}[f(t)]$  if  $f(t) = e^{-at}u(t-1)$ .

 **13.10** If  $f(t) = te^{-t} \cos(\omega t)(a^2 + 1)$ , find  $\mathbf{F}(s)$ .

**13.11** Find the Laplace transform of the function  $f(t) = e^{-at}\delta(t-1)$ .

**13.12** If  $f(t) = t \cos \omega t u(t-1)$ , find  $\mathbf{F}(s)$ .

 **13.13** If  $f(t) = t \sin(\omega t)u(t-1)$ , find  $\mathbf{F}(s)$ .

**13.14** If  $f(t) = d/dt(te^{-5t} \sin 5t)$ , find  $\mathbf{F}(s)$ .

**13.15** If  $f(t) = d/dt(e^{-5t} \cos 2t)$ , find  $\mathbf{F}(s)$ .

**13.16** Given the following functions  $\mathbf{F}(s)$ , find  $f(t)$ .

(a)  $\mathbf{F}(s) = \frac{s+1}{(s+2)(s+6)}$

(b)  $\mathbf{F}(s) = \frac{24}{(s+2)(s+3)}$

(c)  $\mathbf{F}(s) = \frac{4}{(s+3)(s+4)}$

(d)  $\mathbf{F}(s) = \frac{10s}{(s+1)(s+6)}$

**13.17** Given the following functions  $\mathbf{F}(s)$ , find  $f(t)$ .

(a)  $\mathbf{F}(s) = \frac{s+10}{(s+4)(s+6)}$

(b)  $\mathbf{F}(s) = \frac{24}{(s+2)(s+8)}$

**13.18** Given the following functions  $\mathbf{F}(s)$ , find  $f(t)$ .

(a)  $\mathbf{F}(s) = \frac{s+1}{s(s+2)(s+3)}$

(b)  $\mathbf{F}(s) = \frac{s^2+s+1}{s(s+1)(s+2)}$

**13.19** Given the following functions  $\mathbf{F}(s)$ , find  $f(t)$ .

(a)  $\mathbf{F}(s) = \frac{s^2+7s+12}{(s+2)(s+4)(s+6)}$

(b)  $\mathbf{F}(s) = \frac{(s+3)(s+6)}{s(s^2+10s+24)}$

(c)  $\mathbf{F}(s) = \frac{s^2+5s+12}{(s+2)(s+4)(s+6)}$

(d)  $\mathbf{F}(s) = \frac{(s+3)(s+6)}{s(s^2+8s+12)}$

**13.20** Given the following functions  $\mathbf{F}(s)$ , find  $f(t)$ .

(a)  $\mathbf{F}(s) = \frac{s^2+4s+8}{(s+1)(s+4)^2}$

(b)  $\mathbf{F}(s) = \frac{s+4}{s^2}$

**13.21** Given the following functions  $\mathbf{F}(s)$ , find  $f(t)$ .

(a)  $\mathbf{F}(s) = \frac{s+4}{(s+2)^2}$

(b)  $\mathbf{F}(s) = \frac{s+6}{s(s+1)^2}$

**13.22** Given the following functions  $\mathbf{F}(s)$ , find  $f(t)$ .

(a)  $\mathbf{F}(s) = \frac{s+3}{s(s+2)^2}$

(b)  $\mathbf{F}(s) = \frac{s+6}{s(s+2)^2}$

**13.23** Given the following functions  $\mathbf{F}(s)$ , find the inverse Laplace transform of each function.

(a)  $\mathbf{F}(s) = \frac{s+6}{s^2(s+2)}$

(b)  $\mathbf{F}(s) = \frac{s+3}{(s+1)^2(s+3)}$

**13.24** Given the following functions  $\mathbf{F}(s)$ , find  $f(t)$ .

(a)  $\mathbf{F}(s) = \frac{s+8}{s^2(s+4)}$

(b)  $\mathbf{F}(s) = \frac{1}{s^2(s+1)^2}$

**13.25** Given the following functions  $\mathbf{F}(s)$ , find the inverse Laplace transform of each function.

(a)  $\mathbf{F}(s) = \frac{10(s+1)}{s^2+2s+2}$

(b)  $\mathbf{F}(s) = \frac{s+1}{s(s^2+4s+5)}$

**13.26** Given the following functions  $\mathbf{F}(s)$ , find  $f(t)$ .

(a)  $\mathbf{F}(s) = \frac{s(s+6)}{(s+3)(s^2+6s+18)}$

(b)  $\mathbf{F}(s) = \frac{(s+4)(s+8)}{s(s^2+4s+8)}$

**13.27** Given the following functions  $\mathbf{F}(s)$ , find  $f(t)$ .

(a)  $\mathbf{F}(s) = \frac{10}{s^2+2s+2}$

(b)  $\mathbf{F}(s) = \frac{10(s+2)}{s^2+4s+5}$



**13.28** Given the following functions  $F(s)$ , find  $f(t)$ .

(a)  $F(s) = \frac{s(s+6)}{(s+3)(s^2+6s+18)}$

(b)  $F(s) = \frac{(s+4)(s+8)}{s(s^2+8s+32)}$

**13.29** Given the following functions  $F(s)$ , find  $f(t)$ .

(a)  $F(s) = \frac{(s+1)(s+3)}{(s+2)(s^2+2s+2)}$

(b)  $F(s) = \frac{(s+2)^2}{s^2+4s+5}$

 **13.30** Given the following functions  $F(s)$ , find  $f(t)$ .

(a)  $F(s) = \frac{6s+12}{(s^2+4s+5)(s^2+4s+8)}$


(b)  $F(s) = \frac{s(s+2)}{s^2+2s+2}$

**13.31** Find the inverse Laplace transform of the following functions.

(a)  $F(s) = \frac{e^{-s}}{s+1}$

(b)  $F(s) = \frac{1-e^{-2s}}{s}$

(c)  $F(s) = \frac{1-e^{-s}}{s+2}$

 **13.32** Find  $f(t)$  if  $F(s)$  is given by the following functions:

(a)  $F(s) = \frac{2(s+1)e^{-s}}{(s+2)(s+4)}$

(b)  $F(s) = \frac{10(s+2)e^{-2s}}{(s+1)(s+4)}$

(c)  $F(s) = \frac{se^{-s}}{(s+4)(s+8)}$

**13.33** Find the inverse Laplace transform of the following functions.

(a)  $F(s) = \frac{(s+2)e^{-s}}{s(s+2)}$

(b)  $F(s) = \frac{e^{-10s}}{(s+2)(s+3)}$

(c)  $F(s) = \frac{(s^2+2s+1)e^{-2s}}{s(s+1)(s+2)}$

(d)  $F(s) = \frac{(s+1)e^{-4s}}{s^2(s+2)}$

**13.34** Find  $f(t)$  if  $F(s)$  is given by the following function:

$$F(s) = \frac{(s+1)e^{-s}}{s(s+2)(s^2+2s+2)}$$

**13.35** Find the inverse Laplace transform of the function

$$F(s) = \frac{10s(s+2)e^{-4s}}{(s+1)^2(s^2+2s+2)}$$

**13.36** Find  $f(t)$  if  $F(s)$  is given by the expression

$$F(s) = \frac{s^2e^{-2s}}{(s^2+1)(s+1)(s^2+2s-2)}$$

**13.37** Solve the following differential equations using Laplace transforms.

(a)  $\frac{dx(t)}{dt} + 4x(t) = e^{-2t}, \quad x(0) = 1$

(b)  $\frac{dx(t)}{dt} + 6x(t) = 4u(t), \quad x(0) = 2$

**13.38** Solve the following differential equations using Laplace transforms.

(a)  $\frac{d^2y(t)}{dt^2} + \frac{2dy(t)}{dt} + y(t) = e^{-2t}, \quad y(0) = y'(0) = 0$

(b)  $\frac{d^2y(t)}{dt^2} + \frac{4y(t)}{dt} + 4y(t) = u(t), \quad y(0) = 0, \quad y'(0) = 1$

**13.39** Solve the following integrodifferential equation using Laplace transforms.

$$\frac{dy(t)}{dt} + 2y(t) + \int_0^t y(\lambda)d\lambda = 1 - e^{-2t}, \quad y(0) = 0, \quad t > 0$$

**13.40** Use Laplace transforms to find  $y(t)$  if

$$\frac{dy(t)}{dt} + 3y(t) + 2 \int_0^t y(x)dx = u(t), \quad y(0) = 0, \quad t > 0.$$

**13.41** Use Laplace transforms to solve the following integrodifferential equation.

$$\frac{dy(t)}{dt} + 2y(t) + \int_0^t y(\lambda)e^{-2(t-\lambda)}d\lambda = 4u(t),$$

$$y(0) = 1, \quad t > 0$$

**13.42** Find  $f(t)$  using convolution if  $F(s)$  is

$$F(s) = \frac{1}{(s+1)(s+2)}$$

**13.43** Use convolution if  $f(t)$  if

$$F(s) = \frac{1}{(s+1)(s+2)^2}$$

**13.44** Find  $f(t)$  using convolution if  $F(s)$  is

(a)  $F(s) = \frac{1}{(s+1)(s+4)}$

(b)  $F(s) = \frac{10}{(s+1)(s+3)^2}$

**13.45** Determine the initial and final values of  $f(t)$  if  $F(s)$  is given by the expressions

(a)  $F(s) = \frac{2(s+2)}{s(s+1)}$

(b)  $F(s) = \frac{2(s^2+2s+6)}{(s+1)(s+2)(s+3)}$

(c)  $F(s) = \frac{2s^2}{(s+1)(s^2+2s+2)}$

**13.46** Find the initial and final values of the time function  $f(t)$  if  $F(s)$  is given as

(a)  $F(s) = \frac{10(s+2)}{(s+1)(s+3)}$

(b)  $F(s) = \frac{s^2+2s+4}{(s+6)(s^3+4s^2+8s+10)}$

(c)  $F(s) = \frac{2s}{s^2+2s+2}$

**13.47** Find the final values of the time function  $f(t)$  given that

(a)  $F(s) = \frac{10(s+1)}{(s+2)(s-3)}$

(b)  $F(s) = \frac{10}{s^2+4}$

**13.48** Find the final values of the time function  $f(t)$  given that

(a)  $F(s) = \frac{10(s+6)}{(s+2)(s+3)}$

(b)  $F(s) = \frac{2}{s^2+4s+8}$

**13.49** Find the initial and final values of the time function  $f(t)$  if  $F(s)$  is given as

(a)  $F(s) = \frac{10(s+2)}{(s+1)(s+4)}$

(b)  $F(s) = \frac{s^2+2s+2}{(s+6)(s^3+4s^2+8s+4)}$

(c)  $F(s) = \frac{2s}{s^2+2s+3}$

**13.50** Determine the initial and final values of  $f(t)$  if  $F(s)$  is given by the expressions

(a)  $F(s) = \frac{2(s+2)}{s(s+1)}$

(b)  $F(s) = \frac{2(s^2+2s+6)}{(s+1)(s+2)(s+3)}$

(c)  $F(s) = \frac{2s^2}{(s+1)(s^2+2s+2)}$

**13.51** In the circuit in Fig. P13.51, the switch moves from position 1 to position 2 at  $t = 0$ . Use Laplace transforms to find  $v(t)$  for  $t > 0$ .

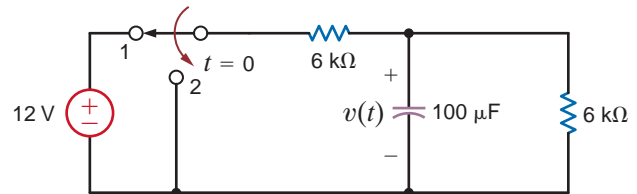


Figure P13.51

**13.52** In the network in Fig. P13.52, the switch opens at  $t = 0$ . Use Laplace transforms to find  $i(t)$  for  $t > 0$ .

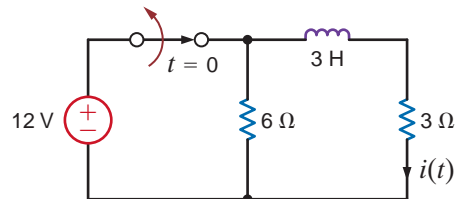


Figure P13.52

**13.53** In the network in Fig. P13.53, the switch opens at  $t = 0$ . Use Laplace transforms to find  $v_o(t)$  for  $t > 0$ .

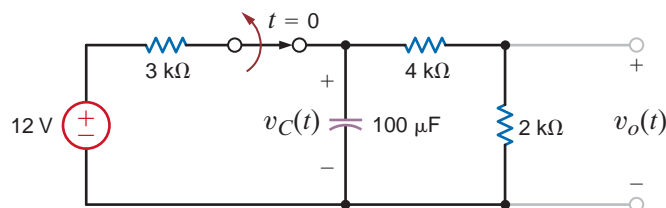


Figure P13.53

- 13.54** The switch in the circuit in Fig. P13.54 opens at  $t = 0$ . Find  $i(t)$  for  $t > 0$  using Laplace transforms.

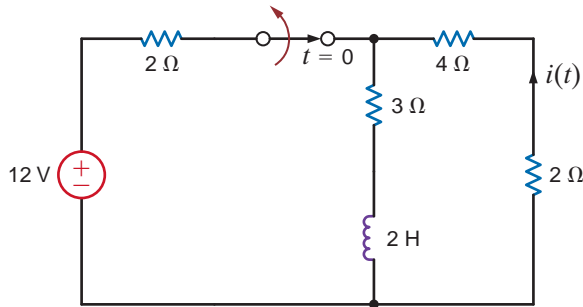


Figure P13.54

- 13.55** The switch in the circuit in Fig. P13.55 has been closed for a long time and is opened at  $t = 0$ . Find  $i(t)$  for  $t > 0$  using Laplace transforms.

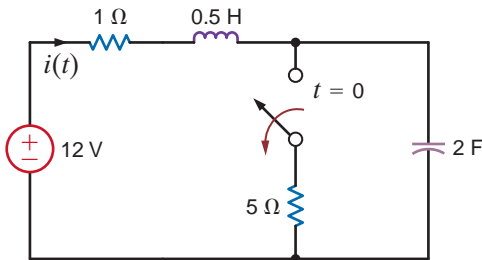


Figure P13.55

- 13.56** In the network in Fig. P13.56, the switch opens at  $t = 0$ . Use Laplace transforms to find  $i_L(t)$  for  $t > 0$ .

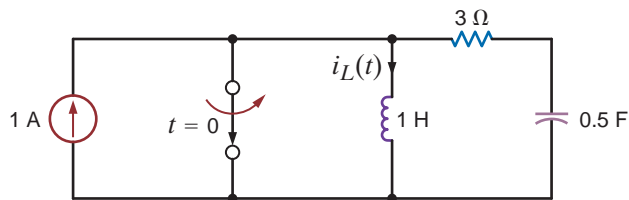


Figure P13.56

- 13.57** The switch in the circuit in Fig. P13.57 has been closed for a long time and is opened at  $t = 0$ . Find  $i(t)$  for  $t > 0$ , using Laplace transforms.

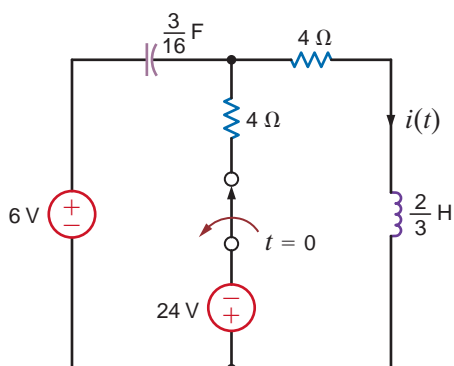


Figure P13.57

- 13.58** The switch in the circuit in Fig. P13.58 has been closed for a long time and is opened at  $t = 0$ . Find  $i(t)$  for  $t > 0$  using Laplace transforms.

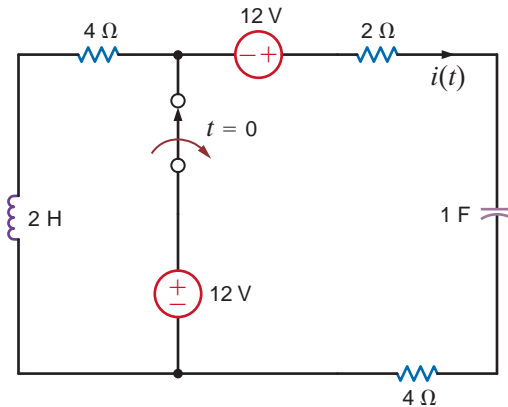


Figure P13.58

- 13.59** The switch in the circuit in Fig. P13.59 has been closed for a long time and is opened at  $t = 0$ . Find  $i(t)$  for  $t > 0$  using Laplace transforms.

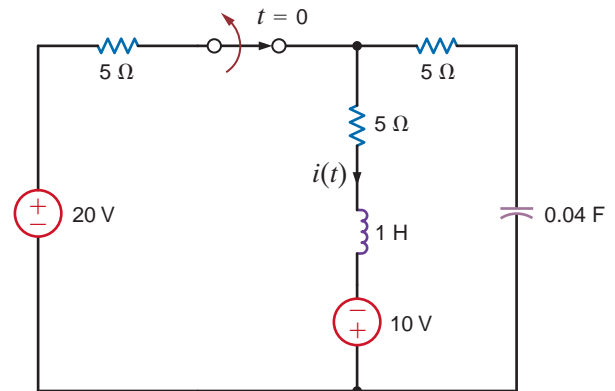


Figure P13.59

- 13.60** In the circuit shown in Fig. P13.60, switch action occurs at  $t = 0$ . Determine the voltage  $v_o(t)$ ,  $t > 0$  using Laplace transforms.

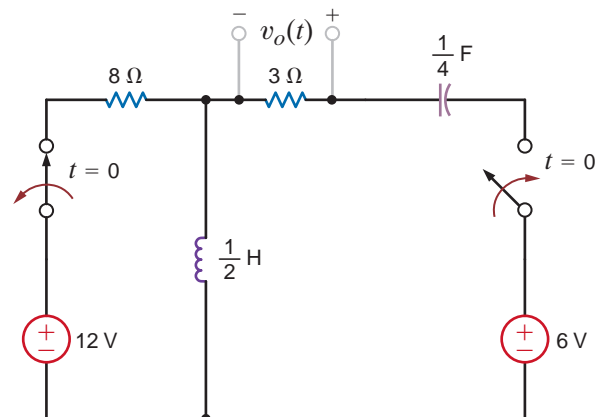


Figure P13.60

## TYPICAL PROBLEMS FOUND ON THE FE EXAM

**13PFE-1** The output function of a network is expressed using Laplace transforms in the following form:

$$\mathbf{V}_o(s) = \frac{12}{s(s^2 + 3s + 2)}$$

Find the output  $v_o(t)$  as a function of time.

- $\left[12 + 3e^{-2t} + 4e^{-t}\right]u(t)\text{V}$
- $\left[2 + 4e^{2t} + 8e^t\right]u(t)\text{V}$
- $\left[6 + 6e^{-2t} - 12e^{-t}\right]u(t)\text{V}$
- $\left[3 + 2e^{2t} - 6e^t\right]u(t)\text{V}$

**13PFE-2** The Laplace transform function representing the output voltage of a network is expressed as

$$\mathbf{V}_o(s) = \frac{120}{s(s + 10)(s + 20)}$$

Determine the value of  $v_o(t)$  at  $t = 100$  ms.

- 0.64 V
- 0.45 V
- 0.33 V
- 0.24 V

**13PFE-3** The Laplace transform function for the output voltage of a network is expressed in the following form:

$$\mathbf{V}_o(s) = \frac{12(s + 2)}{s(s + 1)(s + 3)(s + 4)}$$

Determine the final value of this voltage, that is,  $v_o(t)$  as  $t \rightarrow \infty$ .

- 6 V
- 2 V
- 12 V
- 4 V

**13PFE-4** The output of a network is expressed as

$$\mathbf{V}_o(s) = \frac{2s}{(s + 1)^2(s + 4)}$$

Determine the output as a function of time.

- $\left[-\frac{8}{9}e^{-4t} + \frac{8}{9}e^{-t} - \frac{2}{3}te^{-t}\right]u(t)\text{V}$
- $\left[\frac{3}{4}e^{4t} - \frac{2}{3}te^{-t} + \frac{1}{3}te^t\right]u(t)\text{V}$
- $\left[\frac{2}{3}e^{-4t} + \frac{1}{4}te^{-t} - \frac{1}{3}e^{-t}\right]u(t)\text{V}$
- $\left[\frac{1}{2}e^{-4t} - \frac{1}{3}e^{-t} + \frac{2}{3}te^{-t}\right]u(t)\text{V}$


**13PFE-5** Solve the following differential equation using Laplace transforms:

$$\frac{d^2x(t)}{dt^2} + 6\frac{dx(t)}{dt} + 8x(t) = 2e^{-3t}$$

$$x(0) = 0 \text{ and } \frac{dx(0)}{dt} = 0$$

- $\left[2e^{-2t} + e^{-4t} - 3e^{-3t}\right]u(t)$
- $\left[3e^{2t} + e^{-4t} + e^{3t}\right]u(t)$
- $\left[e^{-2t} + e^{-4t} - 2e^{-3t}\right]u(t)$
- $\left[4e^{2t} - e^{4t} - 2e^{3t}\right]u(t)$

# APPLICATION OF THE LAPLACE TRANSFORM TO CIRCUIT ANALYSIS



Courtesy of P. Auster/OAR/National Undersea Research Program (NURP); University of Connecticut.

## THE LEARNING GOALS FOR THIS CHAPTER ARE:

- Understand  $s$ -domain representations of basic circuit elements, including initial conditions
- Be able to construct the  $s$ -domain circuit for an electric circuit
- Be able to apply circuit analysis techniques to solve for voltages and/or currents in an  $s$ -domain circuit and know how to use the inverse Laplace transform to determine the voltages and/or currents in the time domain
- Know how to determine the transfer function for an  $s$ -domain circuit
- Be able to calculate a circuit's response to unit step and impulse functions using a transfer function
- Know how to calculate the steady-state response of a circuit to a sinusoidal source using a transfer function

**Undersea Robotic Vehicles** Robots explore Earth's frontiers where no human can go—deep beneath the seas. Undersea robotic vehicles make repairs at ocean depths, collect data for oceanographers, and operate with efficient propulsion systems. In environments unsuited for manned crafts, these undersea vehicles can attempt to cap a gushing oil spill, examine exotic flora on the ocean's bottom, or produce a geological mapping of volcanic hot spots. Whether roaming the decks of the sunken Titanic nearly 25 years ago or navigating the sea floor over three miles below the surface off the Pacific Northwest today, undersea robotic vehicles conduct high-resolution oceanographic surveys that would be quite difficult otherwise.

Advances in undersea robotic technology have been astounding. A submersible 183-pound Solo-Trec robot runs on energy from changes of water temperatures between different ocean depths. Solo-Trec is the first undersea robotic vehicle to be powered entirely by the ocean's thermal energy.

In this chapter, we continue our study of dynamic models of circuits using Laplace transforms—much like the dynamic models used in the design of undersea robotic vehicles. The differences between these models are that circuit variables are electrical voltages and currents and robotic vehicle variables are mechanical positions and velocities. Transient analysis is handled efficiently for circuit models by using a

Laplace transform chart that directly includes initial conditions, either capacitor voltages or inductor currents. Robotic vehicle dynamics are expressed in block diagrams with integration blocks and gains. Transient analysis for this model applies initial conditions on position and velocity variables

as impulse inputs to the blocks. Initial-condition operations are built directly into the Laplace transform analysis procedure from the beginning—a clear advantage for the analysis of circuit or robotic dynamic models.

## 14.1

### Laplace Circuit Solutions

To introduce the utility of the Laplace transform in circuit analysis, let us consider the  $RL$  series circuit shown in Fig. 14.1. In particular, let us find the current,  $i(t)$ .

Using Kirchoff's voltage law, we can write the time-domain differential equation,

$$v_S(t) = L \left( \frac{di(t)}{dt} \right) + Ri(t)$$

The complementary differential equation is

$$L \left( \frac{di(t)}{dt} \right) + Ri(t) = 0 \quad 14.1$$

and has the solution

$$i_C(t) = K_C e^{-\alpha t}$$

Substituting  $i_C(t)$  into the complementary equation yields the relationship

$$R - \alpha L = 0$$

or

$$\alpha = \frac{R}{L} = 1000$$

The particular solution is of the same form as the forcing function,  $v_S(t)$ :

$$i_p(t) = K_p$$

Substituting  $i_p(t)$  into the original differential equation yields the expression

$$1 = RK_p$$

or

$$K_p = 1/R = 1/100$$

The final solution is the sum of  $i_p(t)$  and  $i_C(t)$ ,

$$i(t) = K_p + K_C e^{-\alpha t} = \frac{1}{100} + K_C e^{-1000t}$$

To find  $K_C$ , we must use the value of the current at some particular instant of time. For  $t < 0$ , the unit step function is zero and so is the current. At  $t = 0$ , the unit step goes to one; however, the inductor forces the current to instantaneously remain at zero. Therefore, at  $t = 0$ , we can write

$$i(0) = 0 = K_p + K_C$$

or

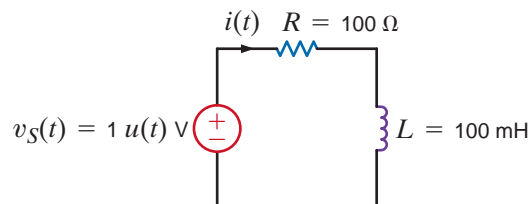
$$K_C = -K_p = -\frac{1}{100}$$

Thus, the current is

$$i(t) = 10(1 - e^{-1000t})u(t) \text{ mA}$$

Let us now try a different approach to the same problem. Making use of Table 13.2, let us take the Laplace transform of both sides of Eq. (14.1):

**Figure 14.1**  
 $RL$  series network.





$$\mathcal{L}[v_s(t)] = \mathbf{V}_s(s) = L[s\mathbf{I}(s) - i(0)] + R\mathbf{I}(s)$$

Since the initial value for the inductor  $i(0) = 0$ , this equation becomes

$$\mathcal{L}[v_s(t)] = \mathbf{V}_s(s) = L[s\mathbf{I}(s)] + R\mathbf{I}(s)$$

Now the circuit is represented not by a time-domain differential equation, but rather by an algebraic expression in the  $s$ -domain. Solving for  $\mathbf{I}(s)$ , we can write

$$\mathbf{I}(s) = \frac{\mathbf{V}_s(s)}{sL + R} = \frac{1}{s[sL + R]}$$

We find  $i(t)$  using the inverse Laplace transform. First, let us express  $\mathbf{I}(s)$  as a sum of partial products:

$$\mathbf{I}(s) = \frac{1/L}{s\left[s + \frac{R}{L}\right]} = \frac{1}{sR} - \frac{1}{R\left[s + \frac{R}{L}\right]}$$

The inverse transform is simply

$$i(t) = \frac{1}{R}(1 - e^{-Rt/L})$$

Given the circuit element values in Fig. 14.1, the current is

$$i(t) = 10(1 - e^{-1000t})u(t) \text{ mA}$$

which is exactly the same as that obtained using the differential equation approach. Note carefully that the solution using the Laplace transform approach yields the entire solution in one step.

We have shown that the Laplace transform can be used to transform a differential equation into an algebraic equation. Since the voltage–current relationships for resistors, capacitors, and inductors involve only constants, derivatives, and integrals, we can represent and solve any circuit in the  $s$ -domain.

The Laplace transform technique employed earlier implies that the terminal characteristics of circuit elements can be expressed as algebraic expressions in the  $s$ -domain. Let us examine these characteristics for the resistor, capacitor, and inductor.

The voltage–current relationship for a resistor in the time domain using the passive sign convention is

$$v(t) = Ri(t) \quad 14.2$$

Using the Laplace transform, we find that this relationship in the  $s$ -domain is

$$\mathbf{V}(s) = R\mathbf{I}(s) \quad 14.3$$

Therefore, the time-domain and complex frequency-domain representations of this element are as shown in Fig. 14.2a.

The time-domain relationships for a capacitor using the passive sign convention are

$$v(t) = \frac{1}{C} \int_0^t i(x) dx + v(0) \quad 14.4$$

$$i(t) = C \frac{dv(t)}{dt} \quad 14.5$$

The  $s$ -domain equations for the capacitor are then

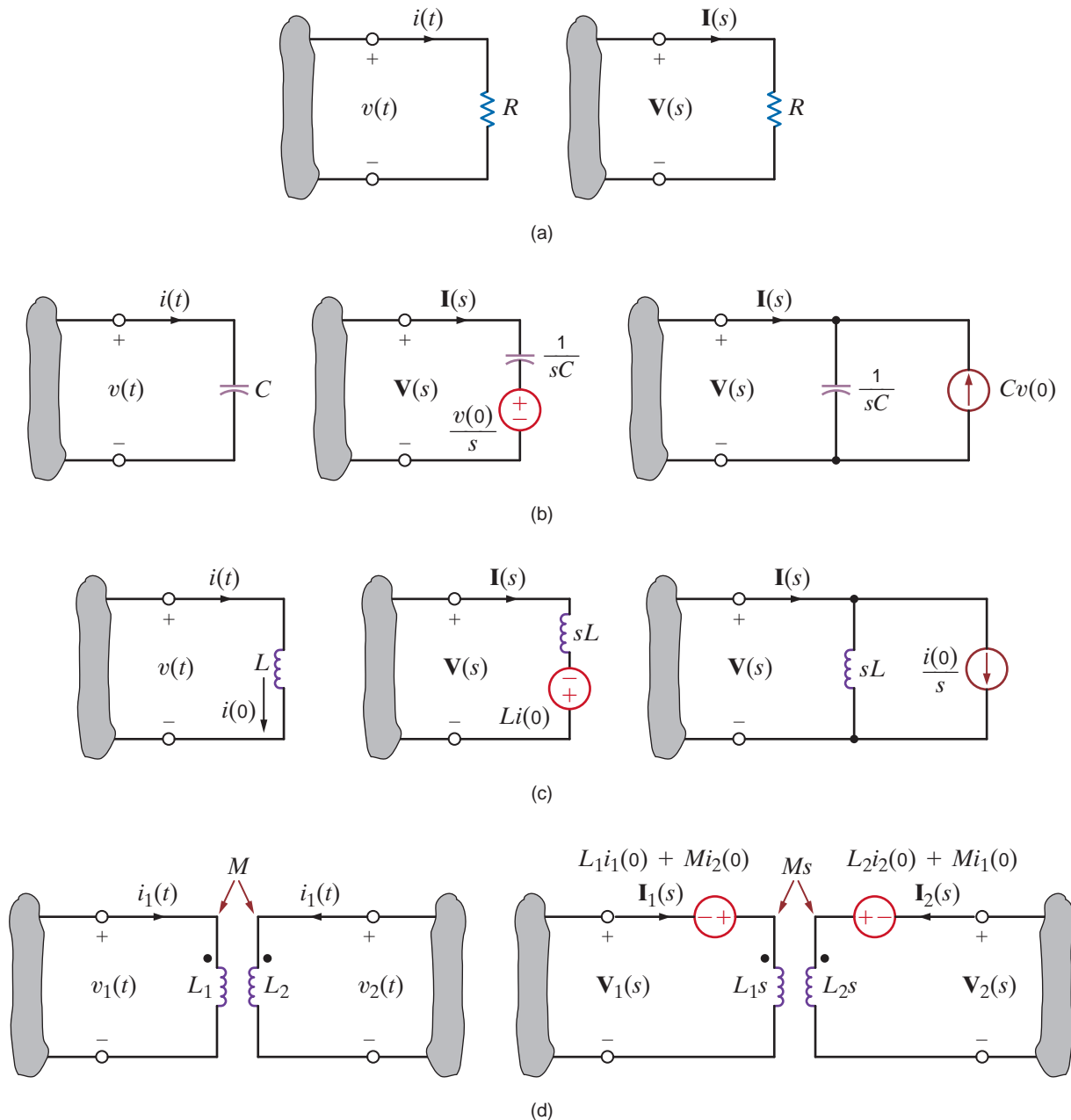
$$\mathbf{V}(s) = \frac{\mathbf{I}(s)}{sC} + \frac{v(0)}{s} \quad 14.6$$

$$\mathbf{I}(s) = sC\mathbf{V}(s) - Cv(0) \quad 14.7$$

and hence the  $s$ -domain representation of this element is as shown in Fig. 14.2b.

## 14.2

### Circuit Element Models

**Figure 14.2**

Time-domain and  $s$ -domain representations of circuit elements.

For the inductor, the voltage–current relationships using the passive sign convention are

$$v(t) = L \frac{di(t)}{dt} \quad 14.8$$

$$i(t) = \frac{1}{L} \int_0^t v(x) dx + i(0) \quad 14.9$$

The relationships in the  $s$ -domain are then

$$\mathbf{V}(s) = sL\mathbf{I}(s) - Li(0) \quad 14.10$$

$$\mathbf{I}(s) = \frac{\mathbf{V}(s)}{sL} + \frac{i(0)}{s} \quad 14.11$$

The  $s$ -domain representation of this element is shown in Fig. 14.2c.

Using the passive sign convention, we find that the voltage–current relationships for the coupled inductors shown in Fig. 14.2d are

$$\begin{aligned}v_1(t) &= L_1 \frac{di_1(t)}{dt} + M \frac{di_2(t)}{dt} \\v_2(t) &= L_2 \frac{di_2(t)}{dt} + M \frac{di_1(t)}{dt}\end{aligned}\quad 14.12$$

The relationships in the  $s$ -domain are then

$$\begin{aligned}\mathbf{V}_1(s) &= L_1 s \mathbf{I}_1(s) - L_1 i_1(0) + M s \mathbf{I}_2(s) - M i_2(0) \\ \mathbf{V}_2(s) &= L_2 s \mathbf{I}_2(s) - L_2 i_2(0) + M s \mathbf{I}_1(s) - M i_1(0)\end{aligned}\quad 14.13$$

Independent and dependent voltage and current sources can also be represented by their transforms; that is,

$$\begin{aligned}\mathbf{V}_1(s) &= \mathcal{L}[v_1(t)] \\ \mathbf{I}_2(s) &= \mathcal{L}[i_2(t)]\end{aligned}\quad 14.14$$

and if  $v_1(t) = A i_2(t)$ , which represents a current-controlled voltage source, then

$$\mathbf{V}_1(s) = A \mathbf{I}_2(s) \quad 14.15$$

Note carefully the direction of the current sources and the polarity of the voltage sources in the transformed network that result from the initial conditions. If the polarity of the initial voltage or direction of the initial current is reversed, the sources in the transformed circuit that results from the initial condition are also reversed.

## Problem-Solving Strategy

- Step 1.** Solve for initial capacitor voltages and inductor currents. This may require the analysis of a circuit valid for  $t < 0$  drawn with all capacitors replaced by open circuits and all inductors replaced by short circuits.
- Step 2.** Draw an  $s$ -domain circuit by substituting an  $s$ -domain representation for all circuit elements. Be sure to include initial conditions for capacitors and inductors if nonzero.
- Step 3.** Use the circuit analysis techniques presented in this textbook to solve for the appropriate voltages and/or currents. The voltages and/or currents will be described by a ratio of polynomials in  $s$ .
- Step 4.** Perform an inverse Laplace transform to convert the voltages and/or currents back to the time domain.

### s-Domain Circuits

Now that we have the  $s$ -domain representation for the circuit elements, we are in a position to analyze networks using a transformed circuit.

# 14.3

## Analysis Techniques

Given the network in Fig. 14.3a, let us draw the  $s$ -domain equivalent circuit and find the output voltage in both the  $s$  and time domains.

The  $s$ -domain network is shown in Fig. 14.3b. We can write the output voltage as

$$\mathbf{V}_o(s) = \left[ R // \frac{1}{sC} \right] \mathbf{I}_s(s)$$

### EXAMPLE

## 14.1

### SOLUTION

or

$$\mathbf{V}_o(s) = \left[ \frac{1/C}{s + (1/RC)} \right] \mathbf{I}_s(s)$$

Given the element values,  $\mathbf{V}_o(s)$  becomes

$$\mathbf{V}_o(s) = \left( \frac{40,000}{s + 4} \right) \left( \frac{0.003}{s + 1} \right) = \frac{120}{(s + 4)(s + 1)}$$

Expanding  $\mathbf{V}_o(s)$  into partial fractions yields

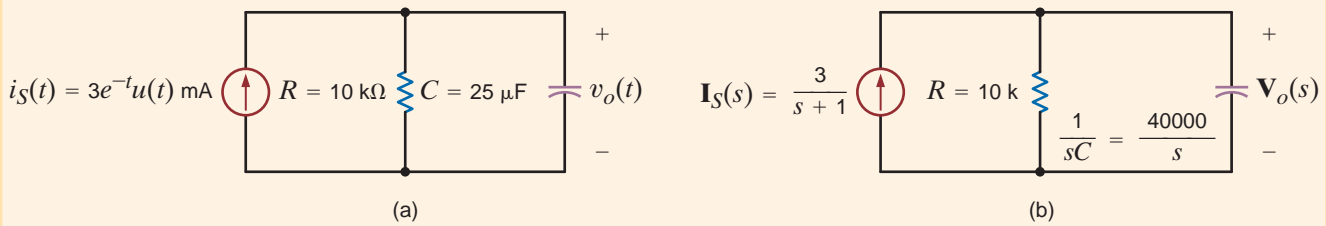
$$\mathbf{V}_o(s) = \frac{120}{(s + 4)(s + 1)} = \frac{40}{s + 1} - \frac{40}{s + 4}$$

Performing the inverse Laplace transform yields the time-domain representation

$$v_o(t) = 40[e^{-t} - e^{-4t}]u(t) \text{ V}$$

**Figure 14.3**

Time-domain and  $s$ -domain representations of an RC parallel network.



Now that we have demonstrated the use of the Laplace transform in the solution of a simple circuit, let us consider the more general case. Note that in Fig. 14.2 we have shown two models for the capacitor and inductor when initial conditions are present. Let us now consider an example in which we will illustrate the use of these models in deriving both the node and loop equations for the circuit.

### EXAMPLE 14.2

**SOLUTION**

Given the circuits in Figs. 14.4a and b, we wish to write the mesh equations in the  $s$ -domain for the network in Fig. 14.4a and the node equations in the  $s$ -domain for the network in Fig. 14.4b.

The transformed circuit for the network in Fig. 14.4a is shown in Fig. 14.4c. The mesh equations for this network are

$$\begin{aligned} \left( R_1 + \frac{1}{sC_1} + \frac{1}{sC_2} + sL_1 \right) \mathbf{I}_1(s) - \left( \frac{1}{sC_2} + sL_1 \right) \mathbf{I}_2(s) &= \mathbf{V}_A(s) - \frac{v_1(0)}{s} + \frac{v_2(0)}{s} - L_1 i_1(0) \\ - \left( \frac{1}{sC_2} + sL_1 \right) \mathbf{I}_1(s) + \left( \frac{1}{sC_2} + sL_1 + sL_2 + R_2 \right) \mathbf{I}_2(s) &= L_1 i_1(0) - \frac{v_2(0)}{s} - L_2 i_2(0) + \mathbf{V}_B(s) \end{aligned}$$

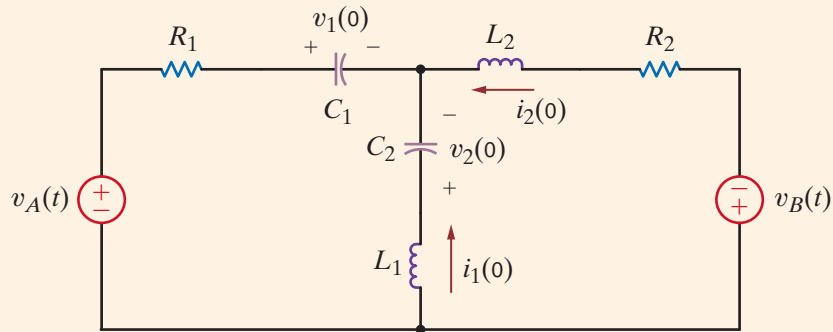
**[hint]**

Note that the equations employ the same convention used in dc analysis.

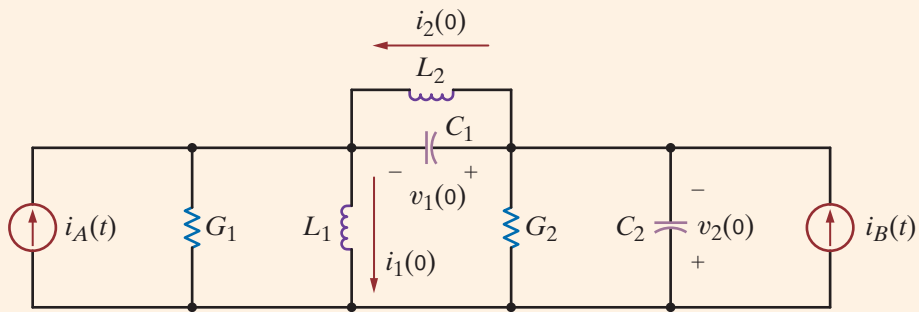
The transformed circuit for the network in Fig. 14.4b is shown in Fig. 14.4d. The node equations for this network are

$$\begin{aligned} \left( G_1 + \frac{1}{sL_1} + sC_1 + \frac{1}{sL_2} \right) \mathbf{V}_1(s) - \left( \frac{1}{sL_2} + sC_1 \right) \mathbf{V}_2(s) &= \mathbf{I}_A(s) - \frac{i_1(0)}{s} + \frac{i_2(0)}{s} - C_1 v_1(0) \end{aligned}$$

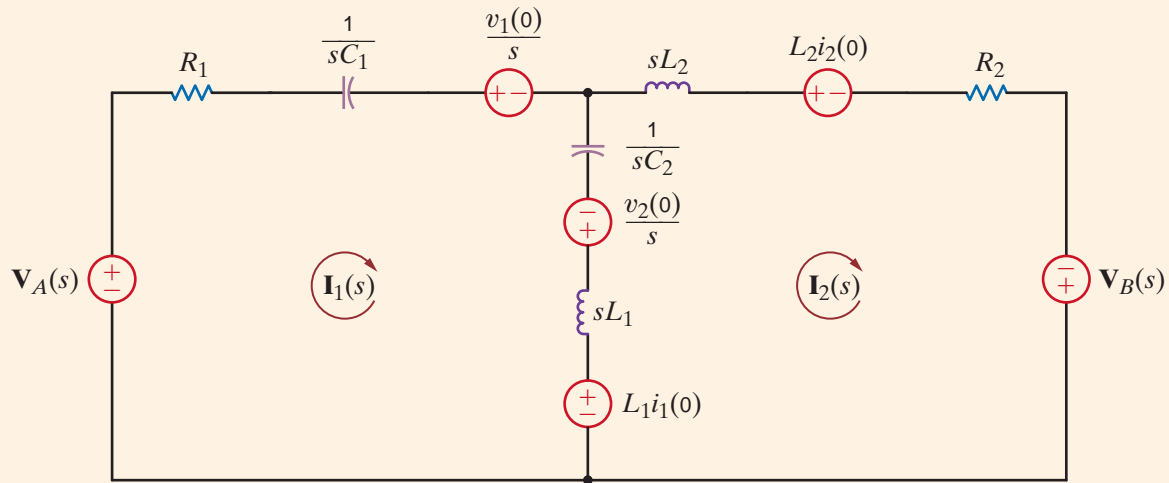
$$\begin{aligned}
 -\left(\frac{1}{sL_2} + sC_1\right)\mathbf{V}_1(s) + \left(\frac{1}{sL_2} + sC_1 + G_2 + sC_2\right)\mathbf{V}_2(s) \\
 = C_1v_1(0) - \frac{i_2(0)}{s} - C_2v_2(0) + \mathbf{I}_B(s)
 \end{aligned}$$



(a)



(b)

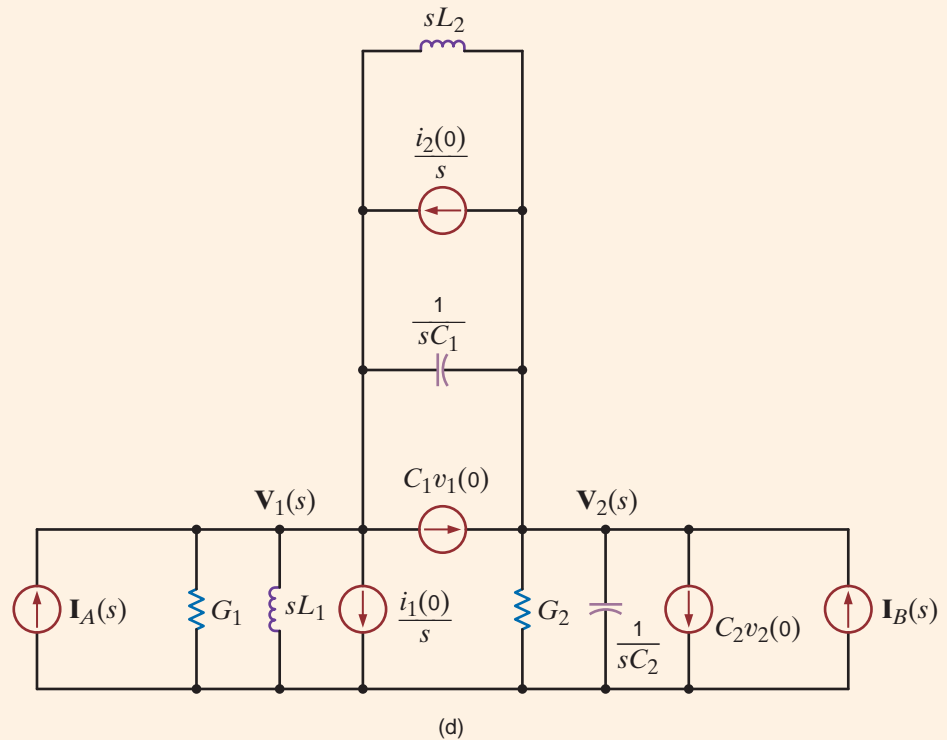


(c)

**Figure 14.4**

Circuits used in Example 14.2.

**Figure 14.4**  
(continued)



Example 14.2 attempts to illustrate the manner in which to employ the two  $s$ -domain representations of the inductor and capacitor circuit elements when initial conditions are present. In the following examples, we illustrate the use of a number of analysis techniques in obtaining the complete response of a transformed network. The circuits analyzed have been specifically chosen to demonstrate the application of the Laplace transform to circuits with a variety of passive and active elements.

### EXAMPLE 14.3 SOLUTION

Let us examine the network in Fig. 14.5a. We wish to determine the output voltage  $v_o(t)$ .

As a review of the analysis techniques presented earlier in this text, we will solve this problem using nodal analysis, mesh analysis, superposition, source exchange, Thévenin's theorem, and Norton's theorem.

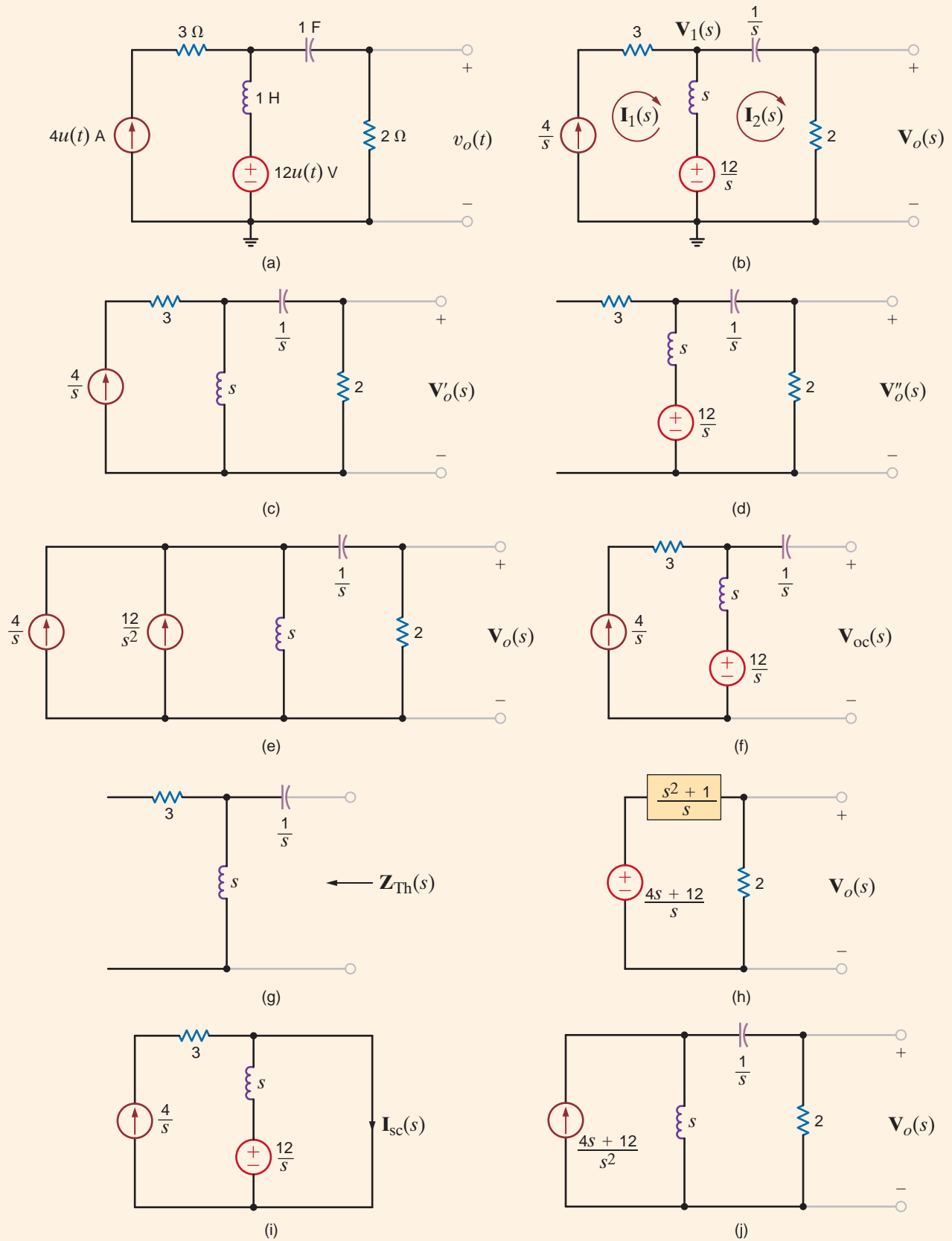
The transformed network is shown in Fig. 14.5b. In our employment of nodal analysis, rather than writing KCL equations at the nodes labeled  $\mathbf{V}_1(s)$  and  $\mathbf{V}_o(s)$ , we will use only the former node and use voltage division to find the latter.

KCL at the node labeled  $\mathbf{V}_1(s)$  is

$$-\frac{4}{s} + \frac{\mathbf{V}_1(s) - \frac{12}{s}}{s} + \frac{\mathbf{V}_1(s)}{\frac{1}{s} + 2} = 0$$

Solving for  $\mathbf{V}_1(s)$  we obtain

$$\mathbf{V}_1(s) = \frac{4(s+3)(2s+1)}{s(s^2+2s+1)}$$



**Figure 14.5**  
Circuits used in Example 14.3.

Now employing voltage division,

$$\begin{aligned} \mathbf{V}_o(s) &= \mathbf{V}_1(s) \left[ \frac{2}{\frac{1}{s} + 2} \right] = \mathbf{V}_1(s) \left( \frac{2s}{2s + 1} \right) \\ &= \frac{8(s + 3)}{(s + 1)^2} \end{aligned}$$

In our mesh analysis we note that the current  $\mathbf{I}_1(s)$  goes through the current source, and therefore KVL for the right-hand loop is

$$\frac{12}{s} - [\mathbf{I}_2(s) - \mathbf{I}_1(s)]s - \frac{\mathbf{I}_2(s)}{s} - 2\mathbf{I}_2(s) = 0$$

However,  $\mathbf{I}_1(s) = 4/s$ , and hence

$$\mathbf{I}_2(s) = \frac{4(s + 3)}{(s + 1)^2}$$

Therefore,

$$\mathbf{V}_o(s) = \frac{8(s + 3)}{(s + 1)^2}$$

The  $3\text{-}\Omega$  resistor never enters our equations. Furthermore, it will not enter our other analyses either. Why?

In using superposition, we first consider the current source acting alone as shown in Fig. 14.5c. Applying current division, we obtain

$$\begin{aligned} \mathbf{V}'_o(s) &= \left[ \frac{\frac{4}{s}(s)}{s + \frac{1}{s} + 2} \right] (2) \\ &= \frac{8s}{s^2 + 2s + 1} \end{aligned}$$

With the voltage source acting alone, as shown in Fig. 14.5d, we obtain

$$\begin{aligned} \mathbf{V}''_o(s) &= \left[ \frac{\frac{12}{s}}{s + \frac{1}{s} + 2} \right] (2) \\ &= \frac{24}{s^2 + 2s + 1} \end{aligned}$$

Hence,

$$\begin{aligned} \mathbf{V}_o(s) &= \mathbf{V}'_o(s) + \mathbf{V}''_o(s) \\ &= \frac{8(s + 3)}{(s + 1)^2} \end{aligned}$$

In applying source exchange, we transform the voltage source and series inductor into a current source with the inductor in parallel as shown in Fig. 14.5e. Adding the current sources and applying current division yields

$$\begin{aligned} \mathbf{V}_o(s) &= \left( \frac{12}{s^2} + \frac{4}{s} \right) \left[ \frac{s}{s + \frac{1}{s} + 2} \right] (2) \\ &= \frac{\left( \frac{12}{s} + 4 \right) (2)}{s + \frac{1}{s} + 2} \end{aligned}$$



$$\mathbf{V}_o(s) = \frac{8(s+3)}{(s+1)^2}$$

To apply Thévenin's theorem, we first find the open-circuit voltage shown in Fig. 14.5f.  $\mathbf{V}_{oc}(s)$  is then

$$\begin{aligned}\mathbf{V}_{oc}(s) &= \left(\frac{4}{s}\right)(s) + \frac{12}{s} \\ &= \frac{4s+12}{s}\end{aligned}$$

The Thévenin equivalent impedance derived from Fig. 14.5g is

$$\begin{aligned}\mathbf{Z}_{Th}(s) &= \frac{1}{s} + s \\ &= \frac{s^2+1}{s}\end{aligned}$$

Now, connecting the Thévenin equivalent circuit to the load produces the circuit shown in Fig. 14.5h. Then, applying voltage division, we obtain

$$\begin{aligned}\mathbf{V}_o(s) &= \frac{4s+12}{s} \left[ \frac{2}{\frac{s^2+1}{s} + 2} \right] \\ &= \frac{8(s+3)}{(s+1)^2}\end{aligned}$$

In applying Norton's theorem, for simplicity we break the network to the right of the first mesh. In this case, the short-circuit current is obtained from the circuit in Fig. 14.5i, that is,

$$\begin{aligned}\mathbf{I}_{sc}(s) &= \frac{12}{s} + \frac{4}{s} \\ &= \frac{4s+12}{s^2}\end{aligned}$$

The Thévenin equivalent impedance in this application of Norton's theorem is  $\mathbf{Z}_{Th}(s) = s$ . Connecting the Norton equivalent circuit to the remainder of the original network yields the circuit in Fig. 14.5j. Then

$$\begin{aligned}\mathbf{V}_o(s) &= \frac{4s+12}{s^2} \left[ \frac{s}{s + \frac{1}{s} + 2} \right] (2) \\ &= \frac{8(s+3)}{(s+1)^2}\end{aligned}$$

Finally,  $\mathbf{V}_o(s)$  can now be transformed to  $v_o(t)$ .  $\mathbf{V}_o(s)$  can be written as

$$\mathbf{V}_o(s) = \frac{8(s+3)}{(s+1)^2} = \frac{K_{11}}{(s+1)^2} + \frac{K_{12}}{s+1}$$

Evaluating the constants, we obtain

$$\begin{aligned}8(s+3)|_{s=-1} &= K_{11} \\ 16 &= K_{11}\end{aligned}$$

and

$$\left. \frac{d}{ds} [8(s+3)] \right|_{s=-1} = K_{12}$$

$$8 = K_{12}$$

Therefore,

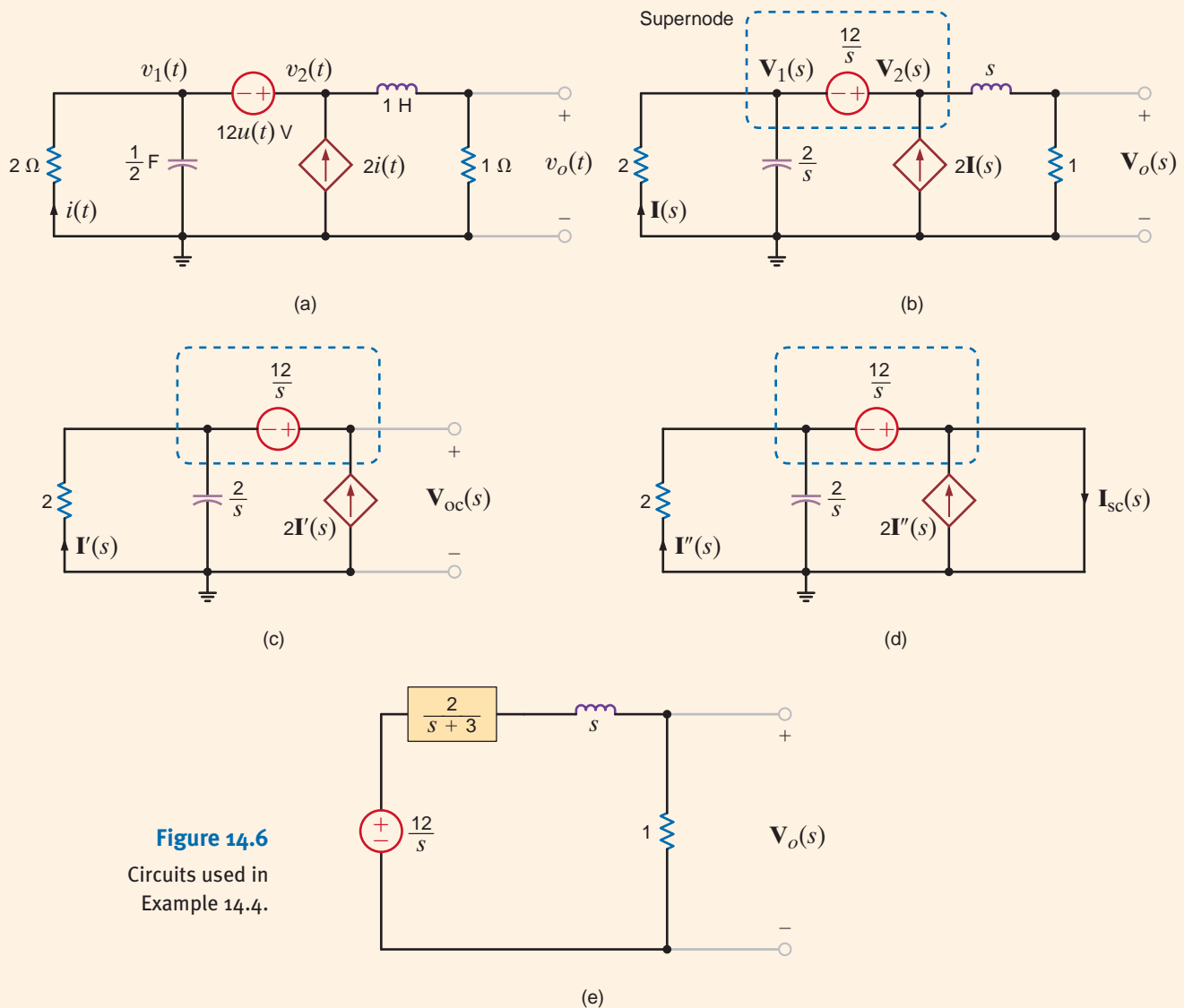
$$v_o(t) = (16te^{-t} + 8e^{-t})u(t) \text{ V}$$

### EXAMPLE

## 14.4 SOLUTION

Consider the network shown in Fig. 14.6a. We wish to determine the output voltage  $v_o(t)$ .

As we begin to attack the problem, we note two things. First, because the source  $12u(t)$  is connected between  $v_1(t)$  and  $v_2(t)$ , we have a supernode. Second, if  $v_2(t)$  is known,  $v_o(t)$  can be easily obtained by voltage division. Hence, we will use nodal analysis in conjunction with voltage division to obtain a solution. Then for purposes of comparison, we will find  $v_o(t)$  using Thévenin's theorem.



**Figure 14.6**  
Circuits used in  
Example 14.4.

The transformed network is shown in Fig. 14.6b. KCL for the supernode is

$$\frac{\mathbf{V}_1(s)}{2} + \mathbf{V}_1(s) \frac{s}{2} - 2\mathbf{I}(s) + \frac{\mathbf{V}_2(s)}{s+1} = 0$$

However,

$$\mathbf{I}(s) = -\frac{\mathbf{V}_1(s)}{2}$$

and

$$\mathbf{V}_1(s) = \mathbf{V}_2(s) - \frac{12}{s}$$

Substituting the last two equations into the first equation yields

$$\left[ \mathbf{V}_2(s) - \frac{12}{s} \right] \frac{s+3}{2} + \frac{\mathbf{V}_2(s)}{s+1} = 0 \quad \text{or}$$

$$\mathbf{V}_2(s) = \frac{12(s+1)(s+3)}{s(s^2+4s+5)}$$

Employing a voltage divider, we obtain

$$\begin{aligned} \mathbf{V}_o(s) &= \mathbf{V}_2(s) \frac{1}{s+1} \\ &= \frac{12(s+3)}{s(s^2+4s+5)} \end{aligned}$$

To apply Thévenin's theorem, we break the network to the right of the dependent current source as shown in Fig. 14.6c. KCL for the supernode is

$$\frac{\mathbf{V}_{oc}(s) - \frac{12}{s}}{2} + \frac{\mathbf{V}_{oc}(s) - \frac{12}{s}}{\frac{2}{s}} - 2\mathbf{I}'(s) = 0$$

where

$$\mathbf{I}'(s) = -\left( \frac{\mathbf{V}_{oc}(s) - \frac{12}{s}}{2} \right)$$

Solving these equations for  $\mathbf{V}_{oc}(s)$  yields

$$\mathbf{V}_{oc}(s) = \frac{12}{s}$$

The short-circuit current is derived from the network in Fig. 14.6d as

$$\mathbf{I}_{sc}(s) = 2\mathbf{I}''(s) + \frac{\frac{12}{s}}{2 + \frac{2}{s}}$$

where

$$\mathbf{I}''(s) = \frac{\frac{12}{s}}{2}$$

Solving these equations for  $\mathbf{I}_{sc}(s)$  yields

$$\mathbf{I}_{sc}(s) = \frac{6(s+3)}{s}$$

[hint]

Summing the currents leaving the supernode.

The Thévenin equivalent impedance is then

$$\begin{aligned} \mathbf{Z}_{\text{Th}}(s) &= \frac{\mathbf{V}_{\text{oc}}(s)}{\mathbf{I}_{\text{sc}}(s)} \\ &= \frac{\frac{12}{s}}{\frac{2}{s+3}} \\ &= \frac{2}{s+3} \end{aligned}$$

If we now connect the Thévenin equivalent circuit to the remainder of the original network, we obtain the circuit shown in Fig. 14.6e. Using voltage division,

$$\begin{aligned} \mathbf{V}_{\text{oc}}(s) &= \frac{1}{\frac{2}{s+3} + s+1} \left( \frac{12}{s} \right) \\ &= \frac{12(s+3)}{s(s^2+4s+5)} \end{aligned}$$

or

$$\mathbf{V}_{\text{oc}}(s) = \frac{12(s+3)}{s(s+2-j1)(s+2+j1)}$$

To obtain the inverse transform, the function is written as

$$\frac{12(s+3)}{s(s+2-j1)(s+2+j1)} = \frac{K_0}{s} + \frac{K_1}{s+2-j1} + \frac{K_1^*}{s+2+j1}$$

Evaluating the constants, we obtain

$$\begin{aligned} \left. \frac{12(s+3)}{s^2+4s+5} \right|_{s=0} &= K_0 \\ \frac{36}{5} &= K_0 \end{aligned}$$

and

$$\begin{aligned} \left. \frac{12(s+3)}{s(s+2+j1)} \right|_{s=-2+j1} &= K_1 \\ 3.79/161.57^\circ &= K_1 \end{aligned}$$

Therefore,

$$v_o(t) = [7.2 + 7.58e^{-2t} \cos(t + 161.57^\circ)]u(t) \text{ V}$$

## Learning Assessments

**E14.1** Find  $i_o(t)$  in the network in Fig. E14.1 using node equations.

**ANSWER:**

$$i_o(t) = 6.53e^{-t/4} \cos[(\sqrt{15}/4)t - 156.72^\circ]u(t) \text{ A.}$$

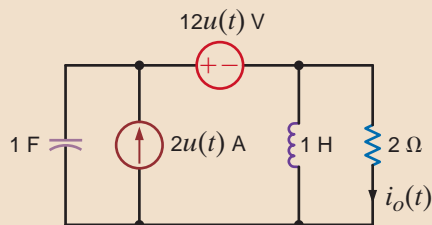


Figure E14.1

**E14.2** Find  $v_o(t)$  for  $t > 0$  in Fig. E14.2 using nodal analysis.

**ANSWER:**

$$v_o(t) = (10.64e^{-0.75t} \cos(0.97t - 19.84^\circ))u(t) \text{ V.}$$

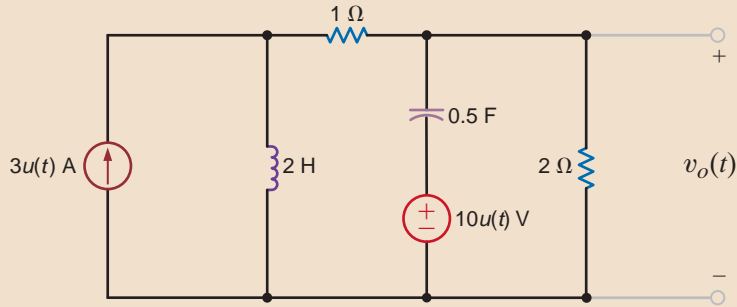


Figure E14.2

**E14.3** Find  $v_o(t)$  in the network in Fig. E14.3 using loop equations.

**ANSWER:**

$$v_o(t) = (4 - 8.93e^{-3.73t} + 4.93e^{-0.27t})u(t) \text{ V.}$$

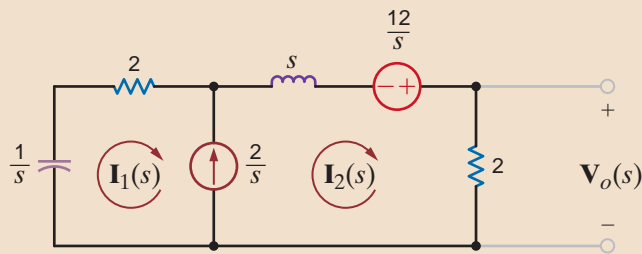


Figure E14.3

**E14.4** Find  $v_o(t)$  for  $t > 0$  in Fig. E14.2 using mesh analysis.

**ANSWER:**

$$v_o(t) = (10.64e^{-0.75t} \cos(0.97t - 19.84^\circ))u(t) \text{ V.}$$

**E14.5** Use Thévenin's theorem to determine  $v_o(t)$  for  $t > 0$  in Fig. E14.2.

**ANSWER:**

$$v_o(t) = (10.64e^{-0.75t} \cos(0.97t - 19.84^\circ))u(t) \text{ V.}$$

**E14.6** Use Thévenin's theorem to determine  $v_o(t)$  for  $t > 0$  in Fig. E14.6.

**ANSWER:**

$$v_o(t) = (21.5 + 12.29e^{-1.267t})u(t) \text{ V.}$$

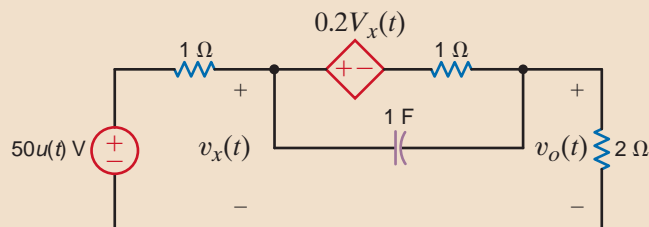


Figure E14.6

We will now illustrate the use of the Laplace transform in the transient analysis of circuits. We will analyze networks such as those considered in Chapter 7. Our approach will first be to determine the initial conditions for the capacitors and inductors in the network, and then we will employ the element models that were specified at the beginning of this chapter together with the circuit analysis techniques to obtain a solution. The following example demonstrates the approach.

**EXAMPLE****14.5 SOLUTION**

Let us determine the output voltage of the network shown in Fig. 14.7a for  $t > 0$ .

At  $t = 0$  the initial voltage across the capacitor is 1 V, and the initial current drawn through the inductor is 1 A. The circuit for  $t > 0$  is shown in Fig. 14.7b with the initial conditions. The transformed network is shown in Fig. 14.7c.

The mesh equations for the transformed network are

$$\begin{aligned}(s + 1)\mathbf{I}_1(s) - s\mathbf{I}_2(s) &= \frac{4}{s} + 1 \\ -s\mathbf{I}_1(s) + \left(s + \frac{2}{s} + 1\right)\mathbf{I}_2(s) &= \frac{-1}{s} - 1\end{aligned}$$

which can be written in matrix form as

$$\begin{bmatrix} s + 1 & -s \\ -s & \frac{s^2 + s + 2}{s} \end{bmatrix} \begin{bmatrix} \mathbf{I}_1(s) \\ \mathbf{I}_2(s) \end{bmatrix} = \begin{bmatrix} \frac{s + 4}{s} \\ -(s + 1) \\ s \end{bmatrix}$$

Solving for the currents, we obtain

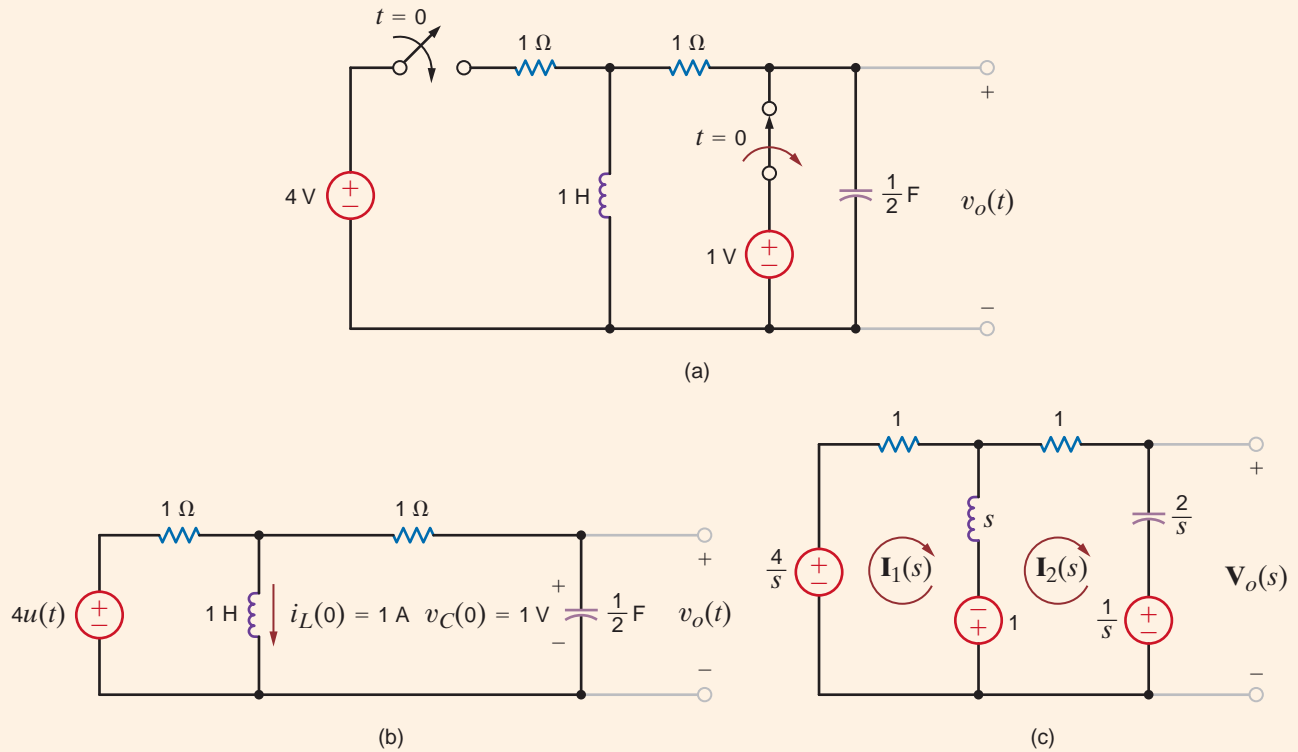
$$\begin{aligned}\begin{bmatrix} \mathbf{I}_1(s) \\ \mathbf{I}_2(s) \end{bmatrix} &= \begin{bmatrix} s + 1 & -s \\ -s & \frac{s^2 + s + 2}{s} \end{bmatrix}^{-1} \begin{bmatrix} \frac{s + 4}{s} \\ -(s + 1) \\ s \end{bmatrix} \\ &= \frac{s}{2s^2 + 3s + 2} \begin{bmatrix} \frac{s^2 + s + 2}{s} & s \\ s & s + 1 \end{bmatrix} \begin{bmatrix} \frac{s + 4}{s} \\ -(s + 1) \\ s \end{bmatrix} \\ &= \begin{bmatrix} \frac{4s^2 + 6s + 8}{s(2s^2 + 3s + 2)} \\ \frac{2s - 1}{2s^2 + 3s + 2} \end{bmatrix}\end{aligned}$$

The output voltage is then

$$\begin{aligned}\mathbf{V}_o(s) &= \frac{2}{s}\mathbf{I}_2(s) + \frac{1}{s} \\ &= \frac{2}{s} \left( \frac{2s - 1}{2s^2 + 3s + 2} \right) + \frac{1}{s} \\ &= \frac{s + \frac{7}{2}}{s^2 + \frac{3}{2}s + 1}\end{aligned}$$

This function can be written in a partial fraction expansion as

$$\frac{s + \frac{7}{2}}{s^2 + \frac{3}{2}s + 1} = \frac{K_1}{s + \frac{3}{4} - j(\sqrt{7}/4)} + \frac{K_1^*}{s + \frac{3}{4} + j(\sqrt{7}/4)}$$

**Figure 14.7**

Circuits employed in Example 14.5.

Evaluating the constants, we obtain

$$\left. \frac{s + \frac{7}{2}}{s + \frac{3}{4} + j(\sqrt{7}/4)} \right|_{s = -(3/4) + j(\sqrt{7}/4)} = K_1$$

$$2.14 \angle -76.5^\circ = K_1$$

Therefore,

$$v_o(t) = \left[ 4.29e^{-(3/4)t} \cos\left(\frac{\sqrt{7}}{4}t - 76.5^\circ\right) \right] u(t) \text{ V}$$

## Learning Assessments

**E14.7** Solve Learning Assessment E7.3 using Laplace transforms.**ANSWER:**

$$i_1(t) = (1e^{-9t})u(t) \text{ A.}$$

**E14.8** Solve Learning Assessment E7.6 using Laplace transforms.**ANSWER:**

$$v_o(t) = \left( 6 - \frac{10}{3}e^{-2t} \right) u(t) \text{ V.}$$

**E14.9** Find  $i_0(t)$  for  $t > 0$  in Fig. E14.9.

**ANSWER:**

$$i_0(t) = (-2e^{-2t} + e^{-4t})u(t) \text{ A.}$$

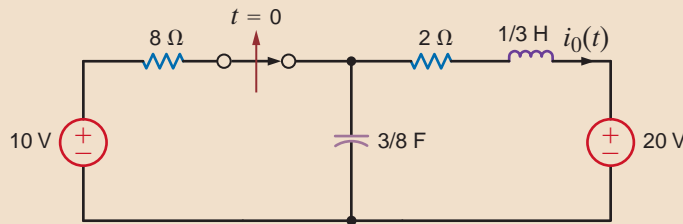


Figure E14.9

**E14.10** Find  $v_o(t)$  for  $t > 0$  in Fig. E14.10.

**ANSWER:**

$$v_o(t) = (-2.93e^{-4.13t} - 9.07e^{-14.54t})u(t) \text{ V.}$$

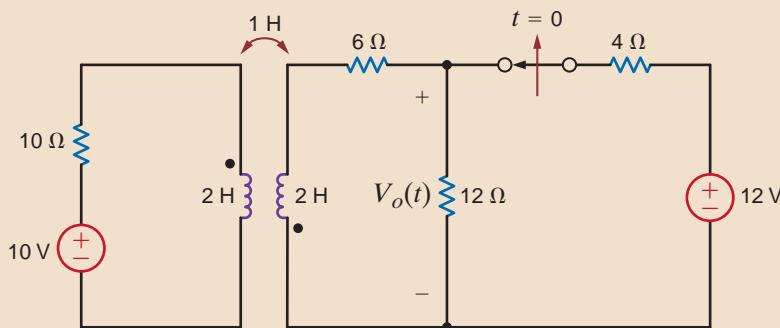


Figure E14.10

**E14.11** The input voltage for the circuit in Fig. E14.11 is given in the plot. Determine the output voltage  $v_o(t)$

**ANSWER:**

$$v_o(t) = [(4 - 4e^{-1.5t})u(t) - (4 - 4e^{-1.5(t-1)})u(t-1)] \text{ V.}$$

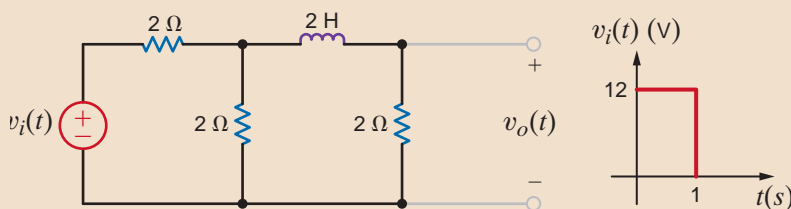


Figure E14.11

## 14.4

### Transfer Function

In Chapter 12 we introduced the concept of network or transfer function. It is essentially nothing more than the ratio of some output variable to some input variable. If both variables are voltages, the transfer function is a voltage gain. If both variables are currents, the transfer function is a current gain. If one variable is a voltage and the other is a current, the transfer function becomes a transfer admittance or impedance.

In deriving a transfer function, all initial conditions are set equal to zero. In addition, if the output is generated by more than one input source in a network, superposition can be employed in conjunction with the transfer function for each source.



To present this concept in a more formal manner, let us assume that the input/output relationship for a linear circuit is

$$\begin{aligned} b_n \frac{d^n y_o(t)}{dt^n} + b_{n-1} \frac{d^{n-1} y_o(t)}{dt^{n-1}} + \cdots + b_1 \frac{dy_o(t)}{dt} + b_0 y_o(t) \\ = a_m \frac{d^m x_i(t)}{dt^m} + a_{m-1} \frac{d^{m-1} x_i(t)}{dt^{m-1}} + \cdots + a_1 \frac{dx_i(t)}{dt} + a_0 x_i(t) \end{aligned}$$

If all the initial conditions are zero, the transform of the equation is

$$(b_n s^n + b_{n-1} s^{n-1} + \cdots + b_1 s + b_0) \mathbf{Y}_o(s) = (a_m s^m + a_{m-1} s^{m-1} + \cdots + a_1 s + a_0) \mathbf{X}_i(s)$$

or

$$\frac{\mathbf{Y}_o(s)}{\mathbf{X}_i(s)} = \frac{a_m s^m + a_{m-1} s^{m-1} + \cdots + a_1 s + a_0}{b_n s^n + b_{n-1} s^{n-1} + \cdots + b_1 s + b_0}$$

This ratio of  $\mathbf{Y}_o(s)$  to  $\mathbf{X}_i(s)$  is called the *transfer* or *network function*, which we denote as  $\mathbf{H}(s)$ ; that is,

$$\frac{\mathbf{Y}_o(s)}{\mathbf{X}_i(s)} = \mathbf{H}(s)$$

or

$$\mathbf{Y}_o(s) = \mathbf{H}(s) \mathbf{X}_i(s) \quad 14.16$$

This equation states that the output response  $\mathbf{Y}_o(s)$  is equal to the network function multiplied by the input  $\mathbf{X}_i(s)$ . Note that if  $x_i(t) = \delta(t)$  and therefore  $\mathbf{X}_i(s) = 1$ , the impulse response is equal to the inverse Laplace transform of the network function. This is an extremely important concept because it illustrates that if we know the impulse response of a network, we can find the response due to some other forcing function using Eq. (14.16).

At this point, it is informative to review briefly the natural response of both first-order and second-order networks. We demonstrated in Chapter 7 that if only a single storage element is present, the natural response of a network to an initial condition is always of the form

$$x(t) = X_0 e^{-t/\tau}$$

where  $x(t)$  can be either  $v(t)$  or  $i(t)$ ,  $X_0$  is the initial value of  $x(t)$ , and  $\tau$  is the time constant of the network. We also found that the natural response of a second-order network is controlled by the roots of the *characteristic equation*, which is of the form

$$s^2 + 2\zeta\omega_0 s + \omega_0^2 = 0$$

where  $\zeta$  is the *damping ratio* and  $\omega_0$  is the *undamped natural frequency*. These two key factors,  $\zeta$  and  $\omega_0$ , control the response, and there are basically three cases of interest.

**CASE 1,  $\zeta > 1$ : OVERDAMPED NETWORK** The roots of the characteristic equation are  $s_1, s_2 = -\zeta\omega_0 \pm \omega_0 \sqrt{\zeta^2 - 1}$ , and, therefore, the network response is of the form

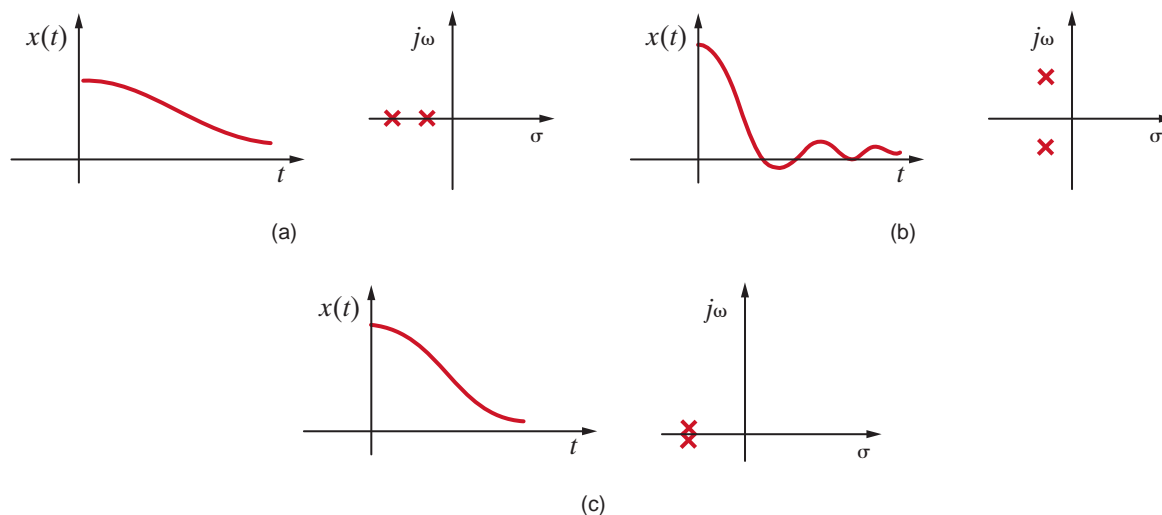
$$x(t) = K_1 e^{-(\zeta\omega_0 + \omega_0 \sqrt{\zeta^2 - 1})t} + K_2 e^{-(\zeta\omega_0 - \omega_0 \sqrt{\zeta^2 - 1})t}$$

**CASE 2,  $\zeta < 1$ : UNDERDAMPED NETWORK** The roots of the characteristic equation are  $s_1, s_2 = -\zeta\omega_0 \pm j\omega_0 \sqrt{1 - \zeta^2}$ , and, therefore, the network response is of the form

$$x(t) = K e^{-\zeta\omega_0 t} \cos(\omega_0 \sqrt{1 - \zeta^2} t + \phi)$$

**CASE 3,  $\zeta = 1$ : CRITICALLY DAMPED NETWORK** The roots of the characteristic equation are  $s_1, s_2 = -\omega_0$ , and, hence, the response is of the form

$$x(t) = K_1 t e^{-\omega_0 t} + K_2 e^{-\omega_0 t}$$

**Figure 14.8**

Natural response of a second-order network together with network pole locations for the three cases: (a) overdamped, (b) underdamped, and (c) critically damped.

The reader should note that the characteristic equation is the denominator of the transfer function  $\mathbf{H}(s)$ , and the roots of this equation, which are the poles of the network, determine the form of the network's natural response.

A convenient method for displaying the network's poles and zeros in graphical form is the use of a pole-zero plot. A pole-zero plot of a function can be accomplished using what is commonly called the *complex* or *s-plane*. In the complex plane the abscissa is  $\sigma$  and the ordinate is  $j\omega$ . Zeros are represented by 0's, and poles are represented by  $\times$ 's. Although we are concerned only with the finite poles and zeros specified by the network or response function, we should point out that a rational function must have the same number of poles and zeros. Therefore, if  $n > m$ , there are  $n - m$  zeros at the point at infinity, and if  $n < m$ , there are  $m - n$  poles at the point at infinity. A systems engineer can tell a lot about the operation of a network or system by simply examining its pole-zero plot.

In order to correlate the natural response of a network to an initial condition with the network's pole locations, we have illustrated in Fig. 14.8 the correspondence for all three cases: overdamped, underdamped, and critically damped. Note that if the network poles are real and unequal, the response is slow and, therefore,  $x(t)$  takes a long time to reach zero. If the network poles are complex conjugates, the response is fast; however, it overshoots and is eventually damped out. The dividing line between the overdamped and underdamped cases is the critically damped case in which the roots are real and equal. In this case the transient response dies out as quickly as possible, with no overshoot.

**EXAMPLE****14.6**

If the impulse response of a network is  $h(t) = e^{-t}$ , let us determine the response  $v_o(t)$  to an input  $v_i(t) = 10e^{-2t}u(t)$  V.

**SOLUTION** The transformed variables are

$$\mathbf{H}(s) = \frac{1}{s + 1}$$

$$\mathbf{V}_i(s) = \frac{10}{s + 2}$$

Therefore,

$$\begin{aligned} \mathbf{V}_o(s) &= \mathbf{H}(s)\mathbf{V}_i(s) \\ &= \frac{10}{(s + 1)(s + 2)} \end{aligned}$$

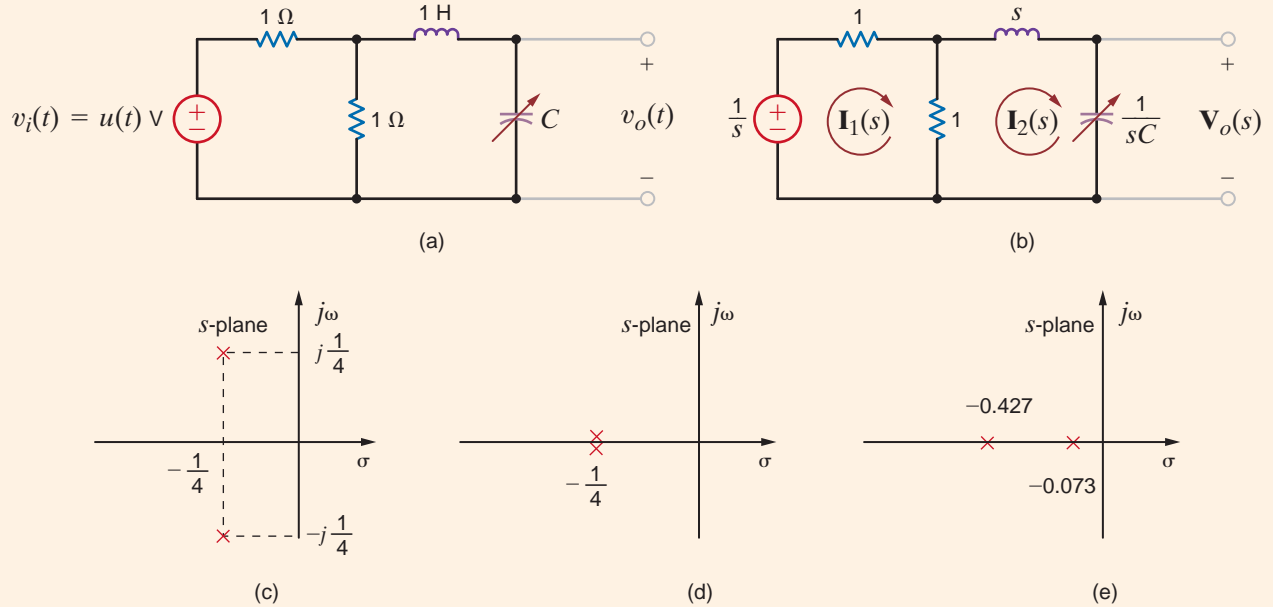
and hence,

$$v_o(t) = 10(e^{-t} - e^{-2t})u(t) \text{ V}$$

The transfer function is important because it provides the systems engineer with a great deal of knowledge about the system's operation, since its dynamic properties are governed by the system poles.

Let us derive the transfer function  $\mathbf{V}_o(s)/\mathbf{V}_i(s)$  for the network in Fig. 14.9a.

### EXAMPLE 14.7



**Figure 14.9**

Networks and pole-zero plots used in Example 14.7.

Our output variable is the voltage across a variable capacitor, and the input voltage is a unit step. The transformed network is shown in Fig. 14.9b. The mesh equations for the network are

$$\begin{aligned} 2\mathbf{I}_1(s) - \mathbf{I}_2(s) &= \mathbf{V}_i(s) \\ -\mathbf{I}_1(s) + \left(s + \frac{1}{sC} + 1\right)\mathbf{I}_2(s) &= 0 \end{aligned}$$

and the output equation is

$$\mathbf{V}_o(s) = \frac{1}{sC} \mathbf{I}_2(s)$$

From these equations we find that the transfer function is

$$\frac{\mathbf{V}_o(s)}{\mathbf{V}_i(s)} = \frac{1/2C}{s^2 + \frac{1}{2}s + 1/C}$$

Since the transfer function is dependent on the value of the capacitor, let us examine the transfer function and the output response for three values of the capacitor.

**a.**  $C = 8 F$

$$\frac{\mathbf{V}_o(s)}{\mathbf{V}_i(s)} = \frac{\frac{1}{16}}{\left(s^2 + \frac{1}{2}s + \frac{1}{8}\right)} = \frac{\frac{1}{16}}{\left(s + \frac{1}{4} - j\frac{1}{4}\right)\left(s + \frac{1}{4} + j\frac{1}{4}\right)}$$

### SOLUTION

The output response is

$$\mathbf{V}_o(s) = \frac{\frac{1}{16}}{s\left(s + \frac{1}{4} - j\frac{1}{4}\right)\left(s + \frac{1}{4} + j\frac{1}{4}\right)}$$

As illustrated in Chapter 7, the poles of the transfer function, which are the roots of the characteristic equation, are complex conjugates, as shown in Fig. 14.9c; therefore, the output response will be *underdamped*. The output response as a function of time is

$$v_o(t) = \left[ \frac{1}{2} + \frac{1}{\sqrt{2}} e^{-t/4} \cos\left(\frac{t}{4} + 135^\circ\right) \right] u(t) \text{ V}$$

Note that for large values of time the transient oscillations, represented by the second term in the response, become negligible and the output settles out to a value of 1/2 V. This can also be seen directly from the circuit since for large values of time the input looks like a dc source, the inductor acts like a short circuit, the capacitor acts like an open circuit, and the resistors form a voltage divider.

**b.**  $C = 16 \text{ F}$

$$\frac{\mathbf{V}_o(s)}{\mathbf{V}_i(s)} = \frac{\frac{1}{32}}{s^2 + \frac{1}{2}s + \frac{1}{16}} = \frac{\frac{1}{32}}{\left(s + \frac{1}{4}\right)^2}$$

The output response is

$$\mathbf{V}_o(s) = \frac{\frac{1}{32}}{s\left(s + \frac{1}{4}\right)^2}$$

Since the poles of the transfer function are real and equal as shown in Fig. 14.9d, the output response will be *critically damped*.  $v_o(t) = \mathcal{L}^{-1}[\mathbf{V}_o(s)]$  is

$$v_o(t) = \left[ \frac{1}{2} - \left(\frac{t}{8} + \frac{1}{2}\right) e^{-t/4} \right] u(t) \text{ V}$$

**c.**  $C = 32 \text{ F}$

$$\frac{\mathbf{V}_o(s)}{\mathbf{V}_i(s)} = \frac{\frac{1}{64}}{s^2 + \frac{1}{2}s + \frac{1}{32}} = \frac{\frac{1}{64}}{(s + 0.427)(s + 0.073)}$$

The output response is

$$\mathbf{V}_o(s) = \frac{\frac{1}{64}}{s(s + 0.427)(s + 0.073)}$$

The poles of the transfer function are real and unequal, as shown in Fig. 14.9e and, therefore, the output response will be *overdamped*. The response as a function of time is

$$v_o(t) = (0.5 + 0.103e^{-0.427t} - 0.603e^{-0.073t})u(t) \text{ V}$$

Although the values selected for the network parameters are not very practical, remember that both magnitude and frequency scaling, as outlined in Chapter 12, can be applied here also.

For the network in Fig. 14.10a let us compute (a) the transfer function, (b) the type of damping exhibited by the network, and (c) the unit step response.

## EXAMPLE 14.8

Recall that the voltage across the op-amp input terminals is zero and therefore KCL at the node labeled  $\mathbf{V}_1(s)$  in Fig. 14.10b yields the following equation:

**SOLUTION**

$$\frac{\mathbf{V}_s(s) - \mathbf{V}_1(s)}{1} = s\mathbf{V}_1(s) + \frac{\mathbf{V}_1(s) - \mathbf{V}_o(s)}{1} + \frac{\mathbf{V}_1(s)}{1}$$

Since the current into the negative input terminal of the op-amp is zero, KCL requires that

$$s\mathbf{V}_o(s) = -\frac{\mathbf{V}_1(s)}{1}$$

Combining the two equations yields the transfer function

$$\frac{\mathbf{V}_o(s)}{\mathbf{V}_s(s)} = \frac{-1}{s^2 + 3s + 1}$$

which can be expressed in the form

$$\frac{\mathbf{V}_o(s)}{\mathbf{V}_s(s)} = \frac{-1}{(s + 2.62)(s + 0.38)}$$

Since the roots are real and unequal, the step response of the network will be overdamped. The step response is

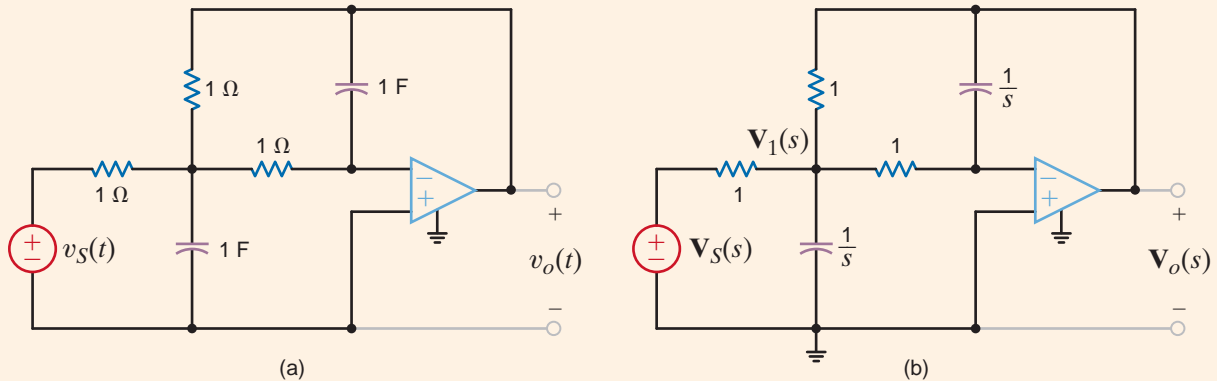
$$\begin{aligned} \mathbf{V}_o(s) &= \frac{-1}{s(s + 2.62)(s + 0.38)} \\ &= \frac{-1}{s} + \frac{-0.17}{s + 2.62} + \frac{1.17}{s + 0.38} \end{aligned}$$

Therefore,

$$v_o(t) = (-1 - 0.17e^{-2.62t} + 1.17e^{-0.38t})u(t) \text{ V}$$

**Figure 14.10**

Circuits used in Example 14.8.



## Learning Assessments

**E14.12** If the unit impulse response of a network is known to be  $10/9(e^{-t} - e^{-10t})$ , determine the unit step response.

**ANSWER:**

$$x(t) = \left(1 - \frac{10}{9}e^{-t} + \frac{1}{9}e^{-10t}\right)u(t).$$

**E14.13** The transfer function for a network is

$$\mathbf{H}(s) = \frac{s + 10}{s^2 + 4s + 8}$$

Determine the pole-zero plot of  $\mathbf{H}(s)$ , the type of damping exhibited by the network, and the unit step response of the network.

**ANSWER:** The network is underdamped;

$$x(t) = \left[ \frac{10}{8} + 1.46e^{-2t} \cos(2t - 210.96^\circ) \right] u(t).$$

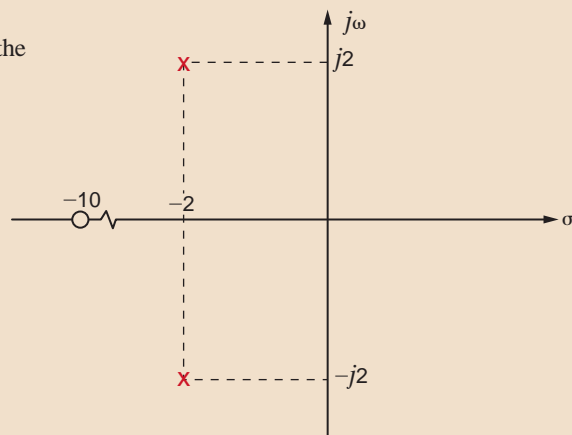
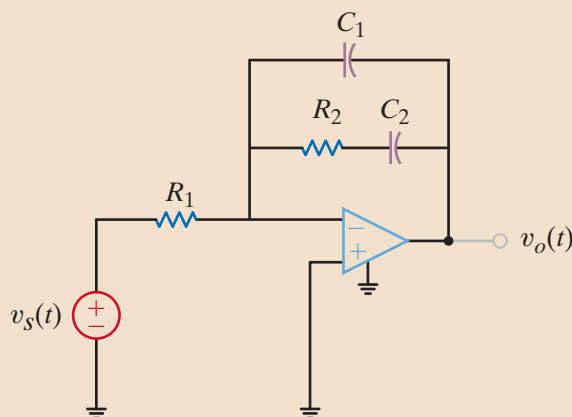


Figure E14.13

**E14.14** Find the transfer function for the network in Fig. E14.14.



**ANSWER:** 
$$-\frac{1}{R_1 C_1} \frac{s + \frac{1}{R_2 C_2}}{s \left( s + \frac{C_1 + C_2}{R_2 C_1 C_2} \right)}$$

Figure E14.14

Recall from our previous discussion that if a second-order network is underdamped, the characteristic equation of the network is of the form

$$s^2 + 2\zeta\omega_0 s + \omega_0^2 = 0$$

and the roots of this equation, which are the network poles, are of the form

$$s_1, s_2 = -\zeta\omega_0 \pm j\omega_0 \sqrt{1 - \zeta^2}$$

The roots  $s_1$  and  $s_2$ , when plotted in the  $s$ -plane, generally appear as shown in Fig. 14.11, where

$\zeta$  = damping ratio

$\omega_0$  = undamped natural frequency

and as shown in Fig. 14.11,

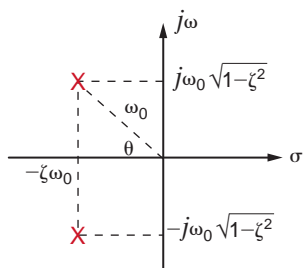


Figure 14.11

Pole locations for a second-order underdamped network.

$$\zeta = \cos \theta$$

The damping ratio and the undamped natural frequency are exactly the same quantities as those employed in Chapter 12 when determining a network's frequency response. We find that these same quantities govern the network's transient response.

Let us examine the effect of pole position in the  $s$ -plane on the transient response of the second-order  $RLC$  series network shown in Fig. 14.12.

The voltage gain transfer function is

$$\mathbf{G}_v(s) = \frac{\frac{1}{LC}}{s^2 + s\left(\frac{R}{L}\right) + \frac{1}{LC}} = \frac{\omega_0^2}{s^2 + 2\zeta\omega_0s + \omega_0^2}$$

For this analysis we will let  $\omega_0 = 2000$  rad/s for  $\zeta = 0.25, 0.50, 0.75,$  and  $1.0$ . From the preceding equation we see that

$$LC = \frac{1}{\omega_0^2} = 2.5 \times 10^{-7}$$

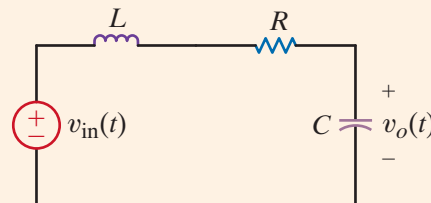
and

$$R = 2\zeta\sqrt{\frac{L}{C}}$$

If we arbitrarily let  $L = 10$  mH then  $C = 25$   $\mu$ F. Also, for  $\zeta = 0.25, 0.50, 0.75,$  and  $1.0$ ,  $R = 10 \Omega, 20 \Omega, 30 \Omega,$  and  $40 \Omega$ , respectively. Over the range of  $\zeta$  values, the network ranges from underdamped to critically damped. Since poles are complex for underdamped systems, the real and imaginary components and the magnitude of the poles of  $\mathbf{G}_v(s)$  are given in Table 14.1 for the  $\zeta$  values listed previously.

Fig. 14.13 shows the pole-zero diagrams for each value of  $\zeta$ . Note first that all the poles lie on a circle; thus, the pole magnitudes are constant, consistent with Table 14.1. Second, as  $\zeta$  decreases, the real part of the pole decreases while the imaginary part increases. In fact, when  $\zeta$  goes to zero, the poles become imaginary.

A simulation of a unit step transient excitation for all four values of  $R$  is shown in Fig. 14.14. We see that as  $\zeta$  decreases, the overshoot in the output voltage increases. Furthermore, when the network is critically damped ( $\zeta = 1$ ), there is no overshoot at all. In most applications excessive overshoot is not desired. To correct this, the damping ratio,  $\zeta$ , should be increased, which for this circuit would require an increase in the resistor value.



**Figure 14.12**  
 $RLC$  series network.

**TABLE 14.1** Pole locations for  $\zeta = 0.25$  to  $1.0$

DAMPING RATIO	REAL	IMAGINARY	MAGNITUDE
1.00	2000.0	0.0	2000.0
0.75	1500.0	1322.9	2000.0
0.50	1000.0	1732.1	2000.0
0.25	500.0	1936.5	2000.0

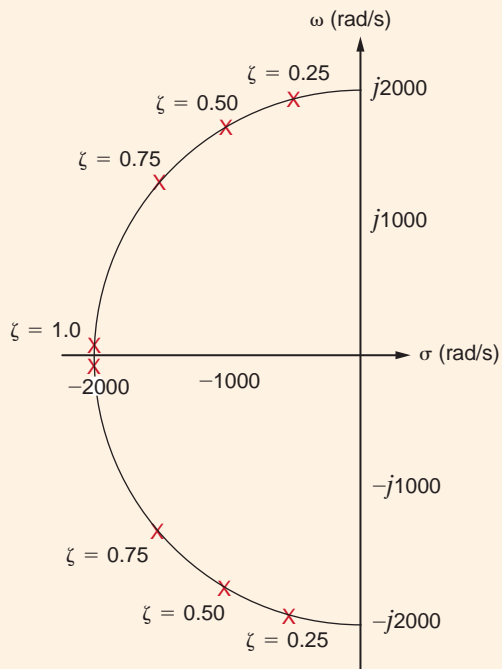


Figure 14.13

Pole-zero diagrams for  $\zeta = 0.25$  to 1.0.

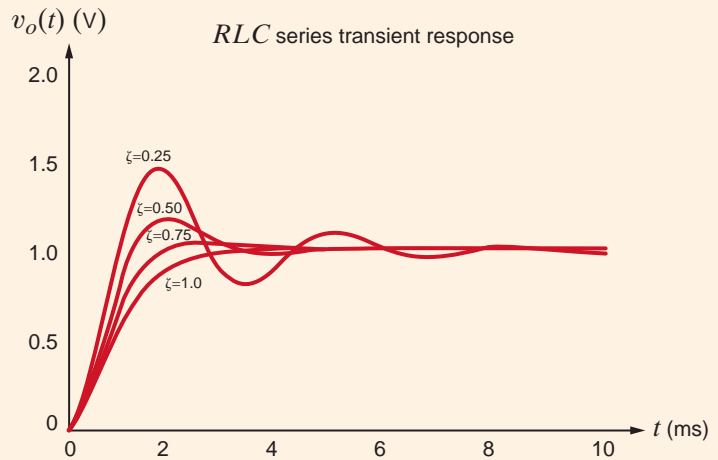


Figure 14.14

Transient response output for  $\zeta = 0.25$  to 1.0.

## EXAMPLE 14.10

Let us revisit the Tacoma Narrows Bridge disaster examined in Example 12.12. A photograph of the bridge as it collapsed is shown in Fig. 14.15.

In Chapter 12 we assumed that the bridge's demise was brought on by winds oscillating back and forth at a frequency near that of the bridge (0.2 Hz). We found that we could

Figure 14.15

Tacoma Narrow Bridge as it collapsed on November 7, 1940. (Special Collection Division, University of Washington Libraries, UW21413. Photo by Farguharson.)





create an *RLC* circuit, shown in Fig. 12.30, that resonates at 0.2 Hz and has an output voltage consistent with the vertical deflection of the bridge. This kind of forced resonance never happened at Tacoma Narrows. The real culprit was not so much wind fluctuations but the bridge itself. This is thoroughly explained in the paper “Resonance, Tacoma Narrows Bridge Failure, and Undergraduate Physics Textbooks,” by K. Y. Billah and R. H. Scanlan published in the *American Journal of Physics*, vol. 59, no. 2, pp. 118–124, in which the authors determined that changes in wind speed affected the coefficients of the second-order differential equation that models the resonant behavior. In particular, the damping ratio,  $\zeta$ , was dependent on the wind speed and is roughly given as

$$\zeta = 0.00460 - 0.00013U \quad 14.17$$

where  $U$  is the wind speed in mph. Note, as shown in Fig. 14.16, that  $\zeta$  becomes negative at wind speeds in excess of 35 mph—a point we will demonstrate later. Furthermore, Billah and Scanlan report that the bridge resonated in a twisting mode, which can be easily seen in Fig. 12.29 and is described by the differential equation

$$\frac{d^2\theta(t)}{dt^2} + 2\zeta\omega_0 \frac{d\theta(t)}{dt} + \omega_0^2\theta(t) = 0$$

or

$$\ddot{\theta} + 2\zeta\omega_0\dot{\theta} + \omega_0^2\theta = 0 \quad 14.18$$

where  $\theta(t)$  is the angle of twist in degrees and wind speed is implicit in  $\zeta$  through Eq. (14.17). Billah and Scanlan list the following data obtained either by direct observation at the bridge site or through scale model experiments afterward:

Wind speed at failure  $\approx 42$  mph  
 Twist at failure  $\approx \pm 12^\circ$   
 Time to failure  $\approx 45$  minutes

We will start the twisting oscillations using an initial condition on  $\theta(0)$  and see whether the bridge oscillations decrease or increase over time. Let us now design a network that will simulate the true Tacoma Narrows disaster.

First, we solve for  $\ddot{\theta}(t)$  in Eq. (14.18):

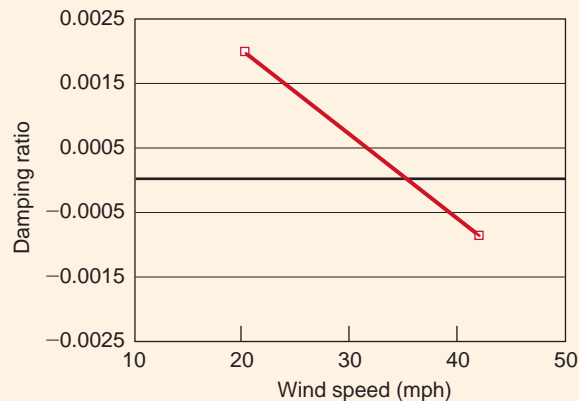
$$\ddot{\theta} = -2\zeta\omega_0\dot{\theta} - \omega_0^2\theta$$

$$\ddot{\theta} = -2(2\pi)(0.2)(0.0046 - 0.00013U)\dot{\theta} - [2(2\pi)(0.2)]^2\theta \quad 14.19$$

or

$$\ddot{\theta} = -(0.01156 - 0.00033U)\dot{\theta} - 1.579\theta$$

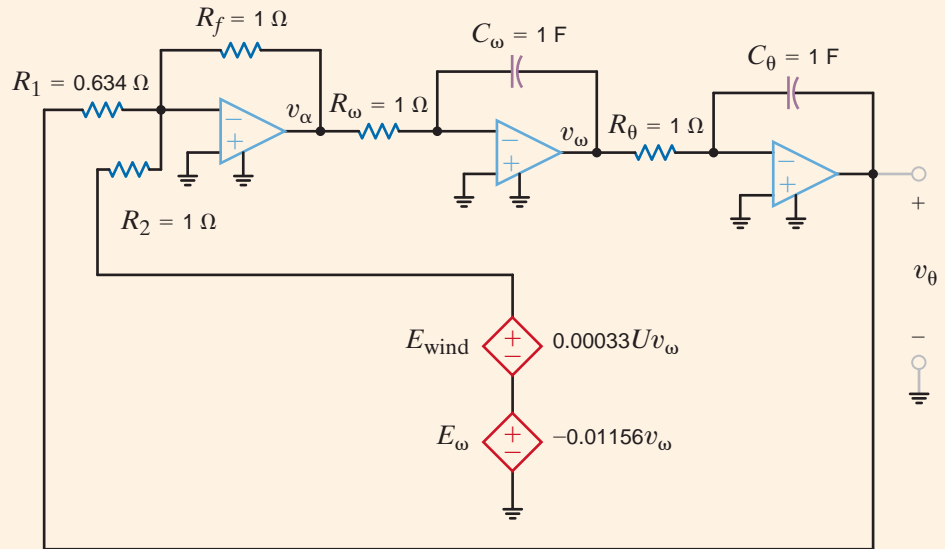
## SOLUTION



**Figure 14.16**

Damping ratio versus wind speed for the second-order twisting model of the Tacoma Narrows Bridge.

**Figure 14.17**  
Circuit diagram for Tacoma Narrows Bridge simulations.



We now wish to model this equation to produce a voltage proportional to  $\ddot{\theta}(t)$ . We can accomplish this using the op-amp integrator circuit shown in Fig. 14.17.

The circuit's operation can perhaps be best understood by first assigning the voltage  $v_\alpha$  to be proportional to  $\ddot{\theta}(t)$ , where 1 V represents 1 deg/s<sup>2</sup>. Thus, the output of the first integrator,  $v_\omega$ , must be

$$v_\omega = -\frac{1}{R_\omega C_\omega} \int v_\alpha dt$$

or, since  $R_\omega = 1 \Omega$  and  $C_\omega = 1 F$ ,

$$v_\omega = -\int v_\alpha dt$$

So  $v_\omega$  is proportional to  $-\dot{\theta}(t)$  and 1 V equals  $-1$  deg/s. Similarly, the output of the second integrator must be

$$v_\theta = -\int v_\omega dt$$

where  $v_\theta(t)$  is proportional to  $\theta(t)$  and 1 V equals 1 degree. The outputs of the integrators are then fed back as inputs to the summing op-amp. Note that the dependent sources,  $E_\omega$  and  $E_{\text{wind}}$ , re-create the coefficient on  $\dot{\theta}(t)$  in Eq. (14.17); that is,

$$2\zeta\omega_0 = (2)(0.2)(2\pi)\zeta = 0.01156 - 0.00033U$$

To simulate various wind speeds, we need only change the gain factor of  $E_{\text{wind}}$ . Finally, we can solve the circuit for  $v_\alpha(t)$ :

$$v_\alpha(t) = -\left(\frac{R_f}{R_2}\right)(E_\omega - E_{\text{wind}}) - \left(\frac{R_f}{R_1}\right)v_\theta$$

which matches Eq. (14.19) if

$$\frac{R_f}{R_1} = \omega_0^2 = [2\pi(0.2)]^2 = 1.579$$

and

$$\frac{R_f}{R_2} [E_\omega - E_{\text{wind}}] = 2\zeta\omega_0$$

or

$$\frac{R_f}{R_2} = 1$$

Thus, if  $R_f = R_2 = 1 \Omega$  and  $R_1 = 0.634 \Omega$ , the circuit will simulate the bridge's twisting motion. We will start the twisting oscillations using an initial condition  $\theta(0)$  and see whether the bridge oscillations decrease or increase over time.

The first simulation is for a wind speed of 20 mph and one degree of twist. The corresponding output voltage is shown in Fig. 14.18. The bridge twists at a frequency of 0.2 Hz and the oscillations decrease exponentially, indicating a nondestructive situation.

Fig. 14.19 shows the output for 35-mph winds and an initial twist of one degree. Notice that the oscillations neither increase nor decrease. This indicates that the damping ratio is zero.

Finally, the simulation at a wind speed of 42 mph and one degree initial twist is shown in Fig. 14.20. The twisting becomes worse and worse until after 45 minutes, the bridge is twisting  $\pm 12.5$  degrees, which matches values reported by Billah and Scalan for collapse.

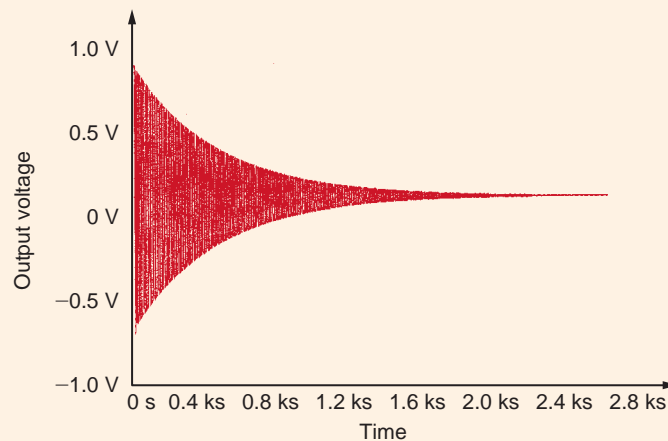
The dependency of the damping ratio on wind speed can also be demonstrated by investigating how the system poles change with the wind. The characteristic equation for the system is

$$s^2 + 2\zeta\omega_0 s + \omega_0^2 = 0$$

or

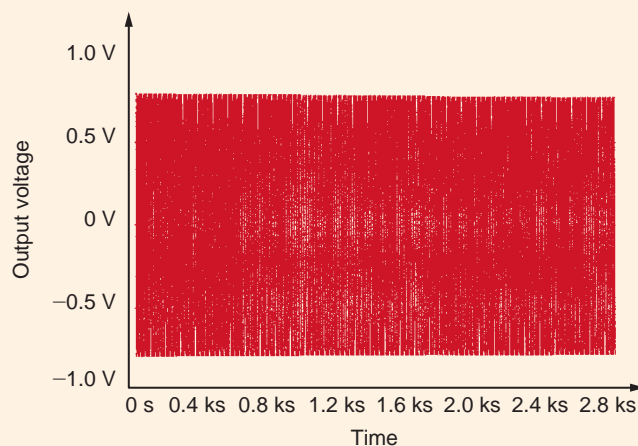
$$s^2 + (0.01156 - 0.00033U)s + 1.579 = 0$$

The roots of the characteristic equation yield the pole locations. Fig. 14.21 shows the system poles at wind speeds of 20, 35, and 42 mph. Note that at 20 mph, the stable situation is shown in Fig. 14.18, and the poles are in the left-half of the  $s$ -plane. At 35 mph ( $\zeta = 0$ ) the poles are on the  $j\omega$  axis and the system is oscillatory, as shown in Fig. 14.19. Finally, at 42 mph, we see that the poles are in the right half of the  $s$ -plane, and from Fig. 14.20 we know this is an unstable system. This relationship between pole location and transient response is true for all systems—right-half plane poles result in unstable systems.



**Figure 14.18**

Tacoma Narrows Bridge simulation at 20-mph wind speed and one degree twist initial condition.

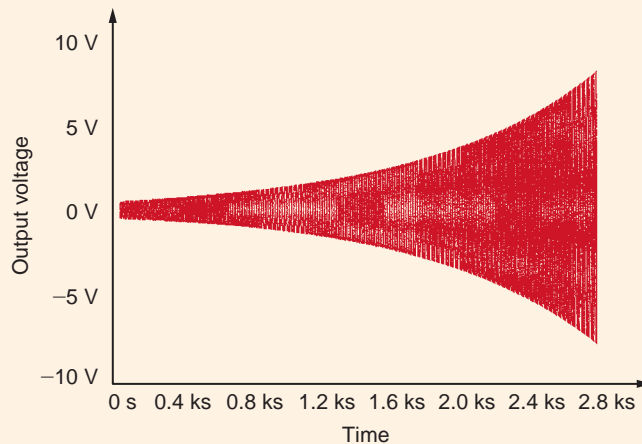


**Figure 14.19**

Tacoma Narrows Bridge simulation at 35-mph winds and one degree of initial twist.

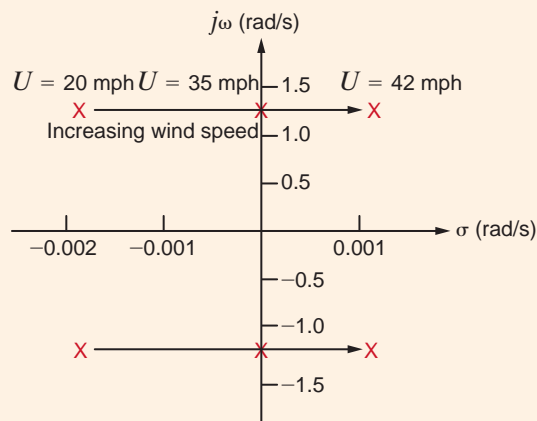
**Figure 14.20**

Tacoma Narrows Bridge simulation at 42-mph wind speed and one degree of initial twist.



**Figure 14.21**

Pole-zero plot for Tacoma Narrows Bridge second-order model at wind speeds of 20, 35, and 42 mph.



## 14.5

### Pole-Zero Plot/Bode Plot Connection

In Chapter 12 we introduced the Bode plot as an analysis tool for sinusoidal frequency-response studies. Let us now investigate the relationship between the  $s$ -plane pole-zero plot and the Bode plot. As an example, consider the transfer function of the  $RLC$  high-pass filter shown in Fig. 14.22.

The transfer function is

$$\mathbf{G}_v(s) = \frac{sL}{sL + R + \frac{1}{sC}} = \frac{s^2}{s^2 + s\left(\frac{R}{L}\right) + \frac{1}{LC}}$$

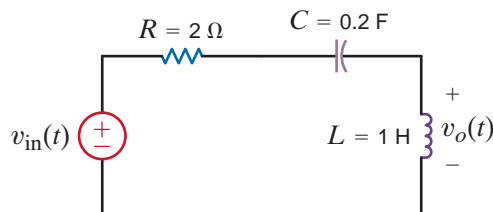
Using the element values, we find that the transfer function becomes

$$\mathbf{G}_v(s) = \frac{s^2}{s^2 + 2s + 5} = \frac{s^2}{(s + 1 + j2)(s + 1 - j2)}$$

We see that the transfer function has two zeros at the origin ( $s = 0$ ) and two complex-conjugate poles  $s = -1 \pm j2$ . The standard pole-zero plot for this function is shown in Fig. 14.23a. A three-dimensional  $s$ -plane plot of the magnitude of  $\mathbf{G}_v(s)$  is shown in Fig. 14.23b. Note carefully that when  $s = 0$ ,  $\mathbf{G}_v(s) = 0$  and when  $s = -1 \pm j2$ , the function is infinite.

**Figure 14.22**

$RLC$  high-pass filter.

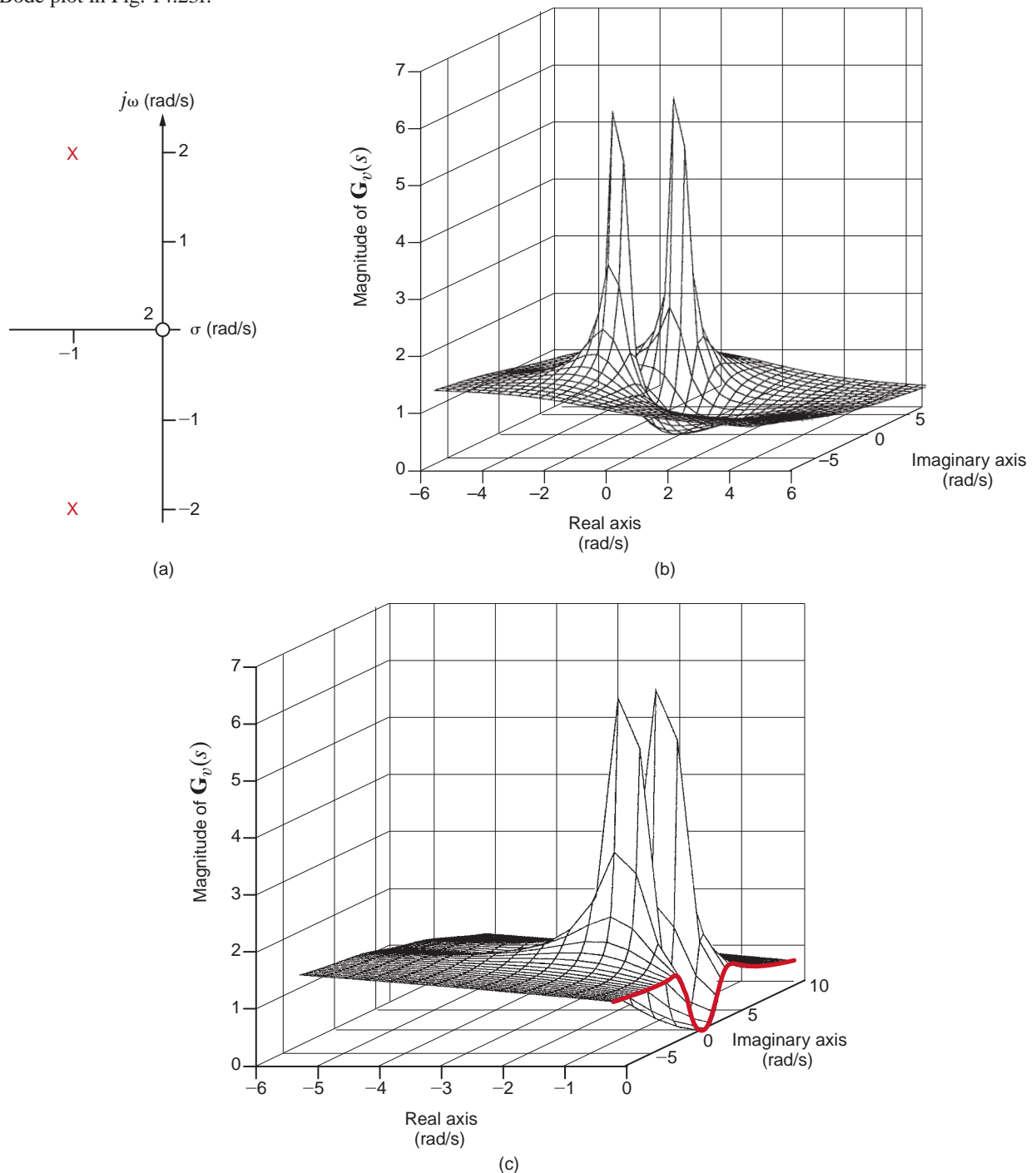


Recall that the Bode plot of a transfer function's magnitude is in reality a plot of the magnitude of the gain versus frequency. The frequency domain, where  $s = j\omega$ , corresponds to the  $j\omega$ -axis in the  $s$ -plane obtained by setting  $\sigma$ , the real part of  $s$ , to zero. Thus, the frequency domain corresponds directly to that part of the  $s$ -domain where  $\sigma = 0$ , as illustrated in the three-dimensional plot in Fig. 14.23c.

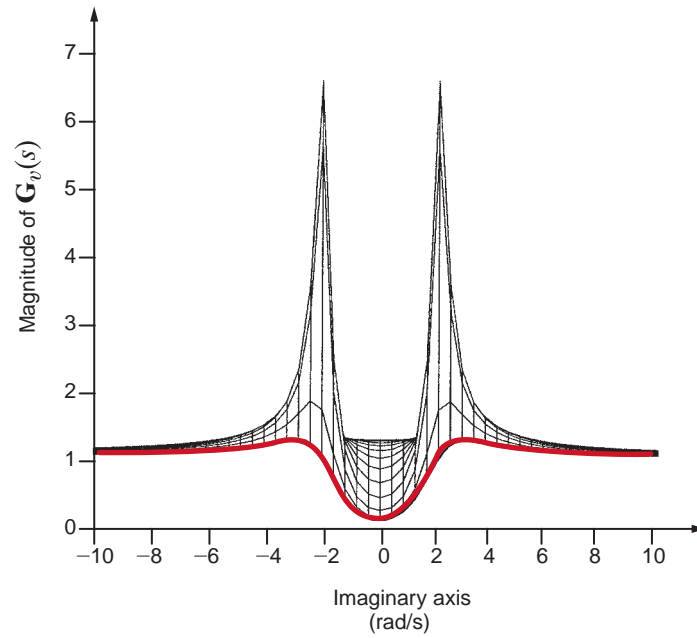
Let us develop the Bode plot by first rotating Fig. 14.23c such that the real axis is perpendicular to the page as shown in Fig. 14.23d. Note that the transfer function maximum occurs at  $\omega = \sqrt{5} = 2.24$  rad/s, which is the magnitude of the complex pole frequencies. In addition, the symmetry of the pole around the real axis becomes readily apparent. As a result of this symmetry, we can restrict our analysis to positive values of  $j\omega$ , with no loss of information. This plot for  $\omega \geq 0$  is shown in Fig. 14.23e where frequency is plotted in Hz rather than rad/s. Finally, converting the transfer function magnitude to dB and using a log axis for frequency, we produce the Bode plot in Fig. 14.23f.

**Figure 14.23**

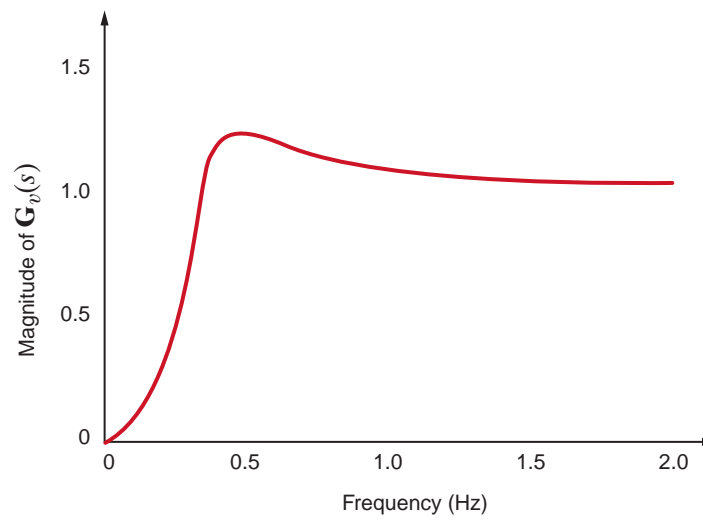
Figures used to demonstrate pole-zero plot/Bode plot connection.



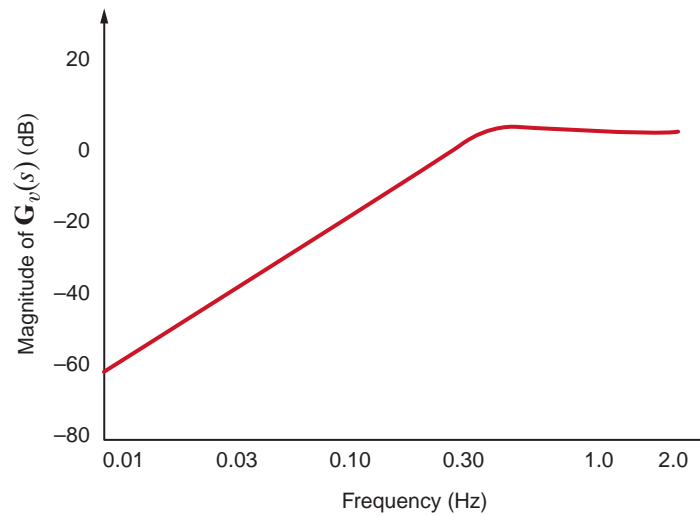
**Figure 14.23**  
(continued)



(d)



(e)



(f)

## 14.6

## Steady-State Response

In Section 14.3 we have demonstrated, using a variety of examples, the power of the Laplace transform technique in determining the complete response of a network. This complete response is composed of transient terms, which disappear as  $t \rightarrow \infty$ , and steady-state terms, which are present at all times. Let us now examine a method by which to determine the steady-state response of a network directly. Recall from previous examples that the network response can be written as

$$\mathbf{Y}(s) = \mathbf{H}(s)\mathbf{X}(s) \quad 14.20$$

where  $\mathbf{Y}(s)$  is the output or response,  $\mathbf{X}(s)$  is the input or forcing function, and  $\mathbf{H}(s)$  is the network function or transfer function defined in Section 12.1. The transient portion of the response  $\mathbf{Y}(s)$  results from the poles of  $\mathbf{H}(s)$ , and the steady-state portion of the response results from the poles of the input or forcing function.

As a direct parallel to the sinusoidal response of a network as outlined in Section 8.2, we assume that the forcing function is of the form

$$x(t) = X_M e^{j\omega_0 t} \quad 14.21$$

which by Euler's identity can be written as

$$x(t) = X_M \cos \omega_0 t + jX_M \sin \omega_0 t \quad 14.22$$

The Laplace transform of Eq. (14.21) is

$$\mathbf{X}(s) = \frac{X_M}{s - j\omega_0} \quad 14.23$$

and therefore,

$$\mathbf{Y}(s) = \mathbf{H}(s) \left( \frac{X_M}{s - j\omega_0} \right) \quad 14.24$$

At this point we tacitly assume that  $\mathbf{H}(s)$  does not have any poles of the form  $(s - j\omega_k)$ . If, however, this is the case, we simply encounter difficulty in defining the steady-state response.

Performing a partial fraction expansion of Eq. (14.24) yields

$$\mathbf{Y}(s) = \frac{X_M \mathbf{H}(j\omega_0)}{s - j\omega_0} + \text{terms that occur due to the poles of } \mathbf{H}(s) \quad 14.25$$

The first term to the right of the equal sign can be expressed as

$$\mathbf{Y}(s) = \frac{X_M |\mathbf{H}(j\omega_0)| e^{j\phi(j\omega_0)}}{s - j\omega_0} + \dots \quad 14.26$$

since  $\mathbf{H}(j\omega_0)$  is a complex quantity with a magnitude and phase that are a function of  $j\omega_0$ .

Performing the inverse transform of Eq. (14.26), we obtain

$$\begin{aligned} y(t) &= X_M |\mathbf{H}(j\omega_0)| e^{j\omega_0 t} e^{j\phi(j\omega_0)} + \dots \\ &= X_M |\mathbf{H}(j\omega_0)| e^{(j\omega_0 t + \phi(j\omega_0))} + \dots \end{aligned} \quad 14.27$$

and hence the steady-state response is

$$y_{ss}(t) = X_M |\mathbf{H}(j\omega_0)| e^{j(\omega_0 t + \phi(j\omega_0))} \quad 14.28$$

Since the actual forcing function is  $X_M \cos \omega_0 t$ , which is the real part of  $X_M e^{j\omega_0 t}$ , the steady-state response is the real part of Eq. (14.28):

$$y_{ss}(t) = X_M |\mathbf{H}(j\omega_0)| \cos[\omega_0 t + \phi(j\omega_0)] \quad 14.29$$

In general, the forcing function may have a phase angle  $\theta$ . In this case,  $\theta$  is simply added to  $\phi(j\omega_0)$  so that the resultant phase of the response is  $\phi(j\omega_0) + \theta$ .

[hint]

The transient terms disappear in steady state.

**EXAMPLE****14.5****SOLUTION**

For the circuit shown in Fig. 14.24a, we wish to determine the steady-state voltage  $v_{oss}(t)$  for  $t > 0$  if the initial conditions are zero.

As illustrated earlier, this problem could be solved using a variety of techniques, such as node equations, mesh equations, source transformation, and Thévenin's theorem. We will employ node equations to obtain the solution. The transformed network using the impedance values for the parameters is shown in Fig. 14.24b. The node equations for this network are

$$\begin{aligned} \left(\frac{1}{2} + \frac{1}{s} + \frac{s}{2}\right)\mathbf{V}_1(s) - \left(\frac{s}{2}\right)\mathbf{V}_o(s) &= \frac{1}{2}\mathbf{V}_i(s) \\ -\left(\frac{s}{2}\right)\mathbf{V}_1(s) + \left(\frac{s}{2} + 1\right)\mathbf{V}_o(s) &= 0 \end{aligned}$$

Solving these equations for  $\mathbf{V}_o(s)$ , we obtain

$$\mathbf{V}_o(s) = \frac{s^2}{3s^2 + 4s + 4}\mathbf{V}_i(s)$$

Note that this equation is in the form of Eq. (14.20), where  $\mathbf{H}(s)$  is

$$\mathbf{H}(s) = \frac{s^2}{3s^2 + 4s + 4}$$

Since the forcing function is  $10 \cos 2t u(t)$ , then  $V_M = 10$  and  $\omega_0 = 2$ . Hence,

$$\begin{aligned} \mathbf{H}(j2) &= \frac{(j2)^2}{3(j2)^2 + 4(j2) + 4} \\ &= 0.354 \angle 45^\circ \end{aligned}$$

Therefore,

$$\begin{aligned} |\mathbf{H}(j2)| &= 0.354 \\ \phi(j2) &= 45^\circ \end{aligned}$$

and, hence, the steady-state response is

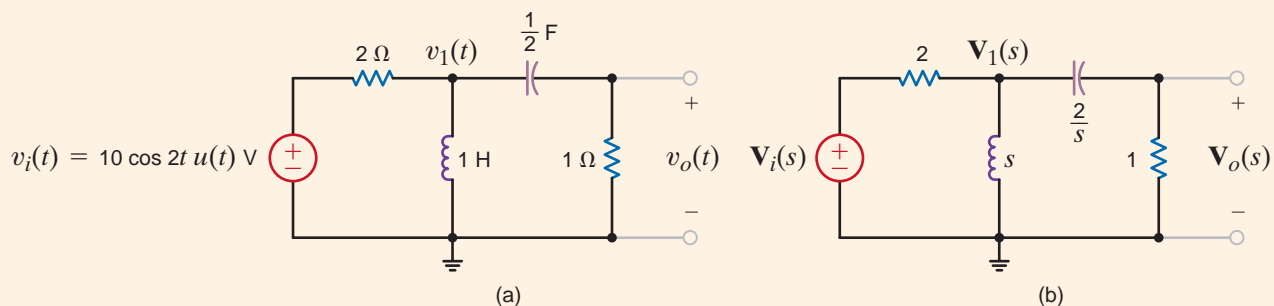
$$\begin{aligned} v_{oss}(t) &= V_M |\mathbf{H}(j2)| \cos[2t + \phi(j2)] \\ &= 3.54 \cos(2t + 45^\circ) \text{ V} \end{aligned}$$

The complete (transient plus steady-state) response can be obtained from the expression

$$\begin{aligned} \mathbf{V}_o(s) &= \frac{s^2}{3s^2 + 4s + 4}\mathbf{V}_i(s) \\ &= \frac{s^2}{3s^2 + 4s + 4} \left( \frac{10s}{s^2 + 4} \right) \\ &= \frac{10s^3}{(s^2 + 4)(3s^2 + 4s + 4)} \end{aligned}$$

**Figure 14.24**

Circuits used in Example 14.11.





Determining the inverse Laplace transform of this function using the techniques of Chapter 13, we obtain

$$v_o(t) = 3.54 \cos(2t + 45^\circ) + 1.44e^{-(2/3)t} \cos\left(\frac{2\sqrt{2}}{3}t - 55^\circ\right) \text{ V}$$

Note that as  $t \rightarrow \infty$  the second term approaches zero, and thus the steady-state response is

$$v_{oss}(t) = 3.54 \cos(2t + 45^\circ) \text{ V}$$

which can easily be checked using a phasor analysis.

## Learning Assessments

**E14.15** Determine the steady-state voltage  $v_{oss}(t)$  in the network in Fig. E14.15 for  $t > 0$  if the initial conditions in the network are zero.

**ANSWER:**

$$v_{oss}(t) = 3.95 \cos(2t - 99.46^\circ) \text{ V.}$$

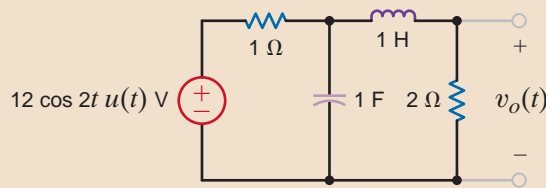


Figure E14.15

**E14.16** Find the steady-state response  $v_{oss}(t)$  in Fig. E14.16.

**ANSWER:**

$$v_{oss}(t) = 2.98 \cos(2t + 153.43^\circ) \text{ V.}$$

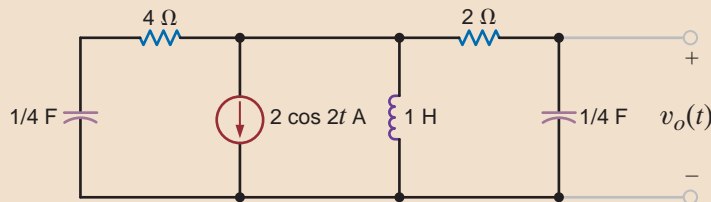


Figure E14.16

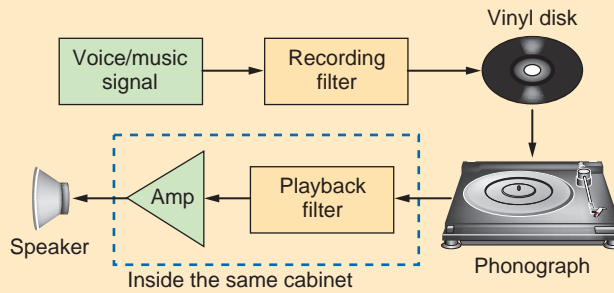
## 14.7

### Application Example

The Recording Industry Association of America (RIAA) uses standardized recording and playback filters to improve the quality of phonographic disk recordings. This process is demonstrated in Fig. 14.25. During a recording session, the voice or music signal is passed through the recording filter, which de-emphasizes the bass content. This filtered signal is then recorded into the vinyl. On playback, the phonograph needle assembly senses the recorded message and reproduces the filtered signal, which proceeds to the playback filter. The purpose of the playback filter is to emphasize the bass content and reconstruct the original voice/music signal. Next, the reconstructed signal can be amplified and sent on to the speakers.

### APPLICATION EXAMPLE 14.12

**Figure 14.25**  
Block diagram for  
phonograph disk  
recording and playback.



Let us examine the pole-zero diagrams for the record and playback filters.

**SOLUTION** The transfer function for the recording filter is

$$G_{vR}(s) = \frac{K(1 + s\tau_{z1})(1 + s\tau_{z2})}{1 + s\tau_p}$$

where the time constants are  $\tau_{z1} = 75 \mu\text{s}$ ,  $\tau_{z2} = 3180 \mu\text{s}$ ; and  $\tau_p = 318 \mu\text{s}$ ;  $K$  is a constant chosen such that  $G_{vR}(s)$  has a magnitude of 1 at 1000 Hz. The resulting pole and zero frequencies in radians/second are

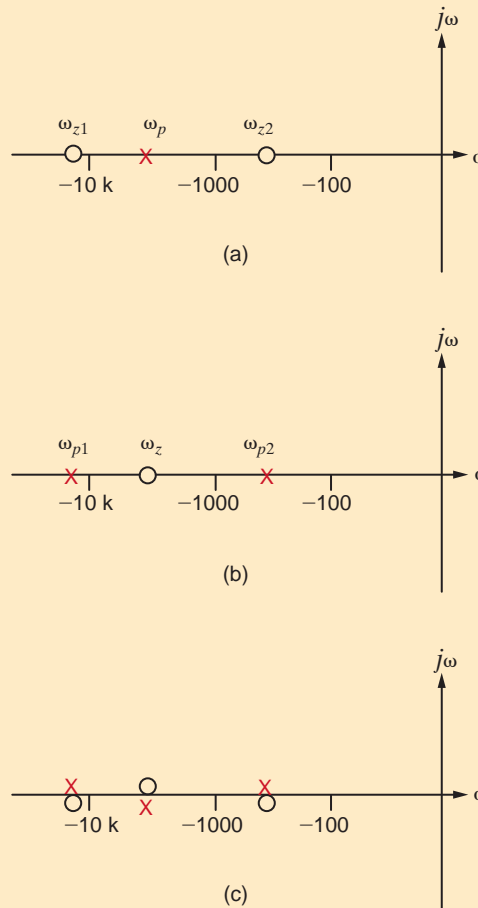
$$\omega_{z1} = 1/\tau_{z1} = 13.33 \text{ krad/s}$$

$$\omega_{z2} = 1/\tau_{z2} = 313.46 \text{ rad/s}$$

$$\omega_p = 1/\tau_p = 3.14 \text{ krad/s}$$

Fig. 14.26a shows the pole-zero diagram for the recording filter.

**Figure 14.26**  
Pole-zero diagrams  
for RIAA phonographic  
filters.



The playback filter transfer function is the reciprocal of the record transfer function.

$$\mathbf{G}_{vp}(s) = \frac{1}{\mathbf{G}_{vR}(s)} = \frac{A_o(1 + s\tau_z)}{(1 + s\tau_{p1})(1 + s\tau_{p2})}$$

where the time constants are now  $\tau_{p1} = 75 \mu\text{s}$ ,  $\tau_{p2} = 3180 \mu\text{s}$ ,  $\tau_z = 318 \mu\text{s}$ , and  $A_o$  is  $1/K$ . Pole and zero frequencies, in radians/second, are

$$\omega_{p1} = 1/\tau_{z1} = 13.33 \text{ krad/s}$$

$$\omega_{p2} = 1/\tau_{z2} = 313.46 \text{ rad/s}$$

$$\omega_z = 1/\tau_p = 3.14 \text{ krad/s}$$

which yields the pole-zero diagram in Fig. 14.26b. The voice/music signal eventually passes through both filters before proceeding to the amplifier. In the  $s$ -domain, this is equivalent to multiplying  $\mathbf{V}_s(s)$  by both  $\mathbf{G}_{vR}(s)$  and  $\mathbf{G}_{vp}(s)$ . In the pole-zero diagram, we simply superimpose the pole-zero diagrams of the two filters, as shown in Fig. 14.26c. Note that at each pole frequency there is a zero and vice versa. The pole-zero pairs cancel one another, yielding a pole-zero diagram that contains no poles and no zeros. This effect can be seen mathematically by multiplying the two transfer functions,  $\mathbf{G}_{vR}(s)\mathbf{G}_{vp}(s)$ , which yields a product independent of  $s$ . Thus, the original voice/music signal is reconstructed and fidelity is preserved.

## 14.8

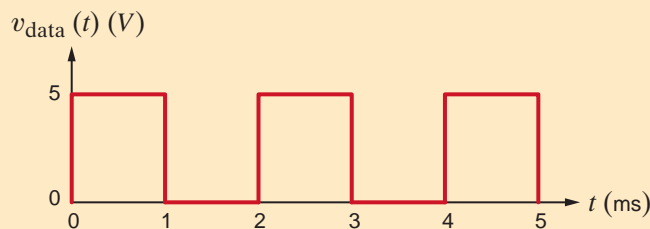
### Design Examples

In a large computer network, two computers are transferring digital data on a single wire at a rate of 1000 bits/s. The voltage waveform,  $v_{\text{data}}$ , in Fig. 14.27 shows a possible sequence of bits alternating between “high” and “low” values. Also present in the environment is a source of 100 kHz (628 krad/s) noise, which is corrupting the data.

It is necessary to filter out the high-frequency noise without destroying the data waveform. Let us place the second-order low-pass active filter of Fig. 14.28 in the data path so that the data and noise signals will pass through it.

The filter’s transfer function is found to be

$$\mathbf{G}_v(s) = \frac{\mathbf{V}_o(s)}{\mathbf{V}_{\text{data}}(s)} = \frac{-\left(\frac{R_3}{R_1}\right)\left(\frac{1}{R_2 R_3 C_1 C_2}\right)}{s^2 + s\left(\frac{1}{R_1 C_1} + \frac{1}{R_2 C_1} + \frac{1}{R_3 C_1}\right) + \frac{1}{R_2 R_3 C_1 C_2}}$$



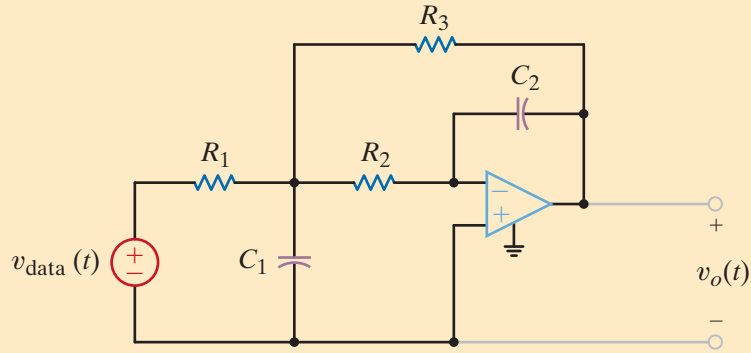
### DESIGN EXAMPLE 14.13

#### SOLUTION

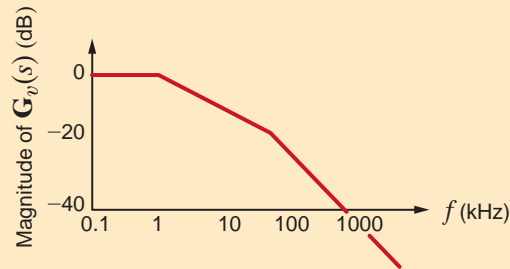
Figure 14.27

1000 bits/s digital data waveform.

**Figure 14.28**  
Second-order  
low-pass filter.



**Figure 14.29**  
Bode plot sketch  
for a second-order  
low-pass filter.



To simplify our work, let  $R_1 = R_2 = R_3 = R$ . From our work in Chapter 12, we know that the characteristic equation of a second-order system can be expressed

$$s^2 + 2s\zeta\omega_0 + \omega_0^2 = 0$$

Comparing the two preceding equations, we find that

$$\omega_0 = \frac{1}{R\sqrt{C_1C_2}}$$

$$2\zeta\omega_0 = \frac{3}{RC_1}$$

and therefore,

$$\zeta = \frac{3}{2}\sqrt{\frac{C_2}{C_1}}$$

The poles of the filter are at

$$s_1, s_2 = -\zeta\omega_0 \pm \omega_0\sqrt{\zeta^2 - 1}$$

To eliminate the 100-kHz noise, at least one pole should be well below 100 kHz, as shown in the Bode plot sketched in Fig. 14.29. By placing a pole well below 100 kHz, the gain of the filter will be quite small at 100 kHz, effectively filtering the noise.

If we arbitrarily choose an overdamped system with  $\omega_0 = 25$  krad/s and  $\zeta = 2$ , the resulting filter is overdamped with poles at  $s_1 = -6.7$  krad/s and  $s_2 = -93.3$  krad/s. The pole-zero diagram for the filter is shown in Fig. 14.30.

If we let  $R = 40$  k $\Omega$ , then we may write

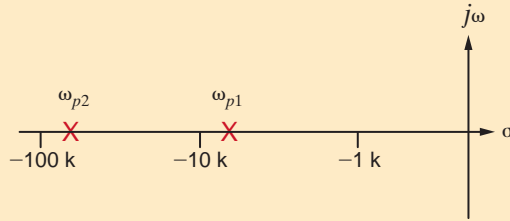
$$\omega_0 = 25,000 = \frac{1}{40,000\sqrt{C_1C_2}}$$

or

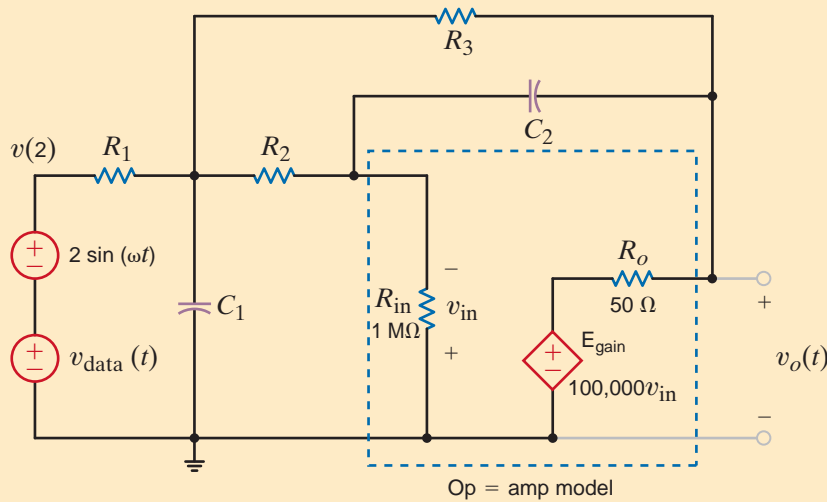
$$C_1C_2 = 10^{-18}$$

Also,

$$\zeta = 2 = \frac{3}{2}\sqrt{\frac{C_2}{C_1}}$$



**Figure 14.30**  
Pole-zero diagram for low-pass filter.



**Figure 14.31**  
Circuit for second-order filter.

which can be expressed as

$$\frac{C_2}{C_1} = \frac{16}{9}$$

Solving for  $C_1$  and  $C_2$  yields

$$C_1 = 0.75 \text{ nF}$$

$$C_2 = 1.33 \text{ nF}$$

The circuit used to simulate the filter is shown in Fig. 14.31. The sinusoidal source has a frequency of 100 kHz and is used to represent the noise source.

Plots for the input to the filter and the output voltage for 2 ms are shown in Fig. 14.32. Note that output indeed contains much less of the 100-kHz noise. Also, the fast rise and fall times of the data signal are slower in the output voltage. Despite this slower response, the output voltage is fast enough to keep pace with the 1000-bits/s transfer rate.

Let us now increase the data transfer rate from 1000 to 25,000 bits/s, as shown in Fig. 14.33. The total input and output signals are plotted in Fig. 14.34 for 200  $\mu$ s. Now the output cannot keep pace with the input, and the data information is lost. Let us investigate why this occurs. We know that the filter is second order with poles at  $s_1$  and  $s_2$ . If we represent the data input as a 5-V step function, the output voltage is

$$\mathbf{V}_o(s) = \mathbf{G}_v(s) \left( \frac{5}{s} \right) = \frac{K}{(s + s_1)(s + s_2)} \left( \frac{5}{s} \right)$$

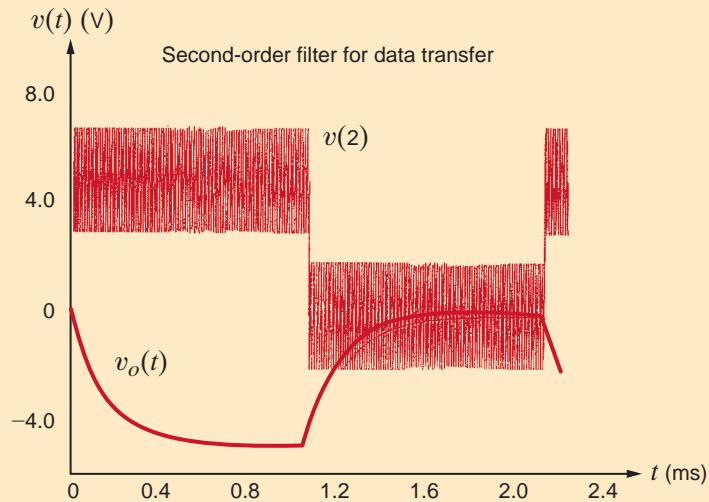
where  $K$  is a constant. Since the filter is overdamped,  $s_1$  and  $s_2$  are real and positive. A partial fraction expansion of  $\mathbf{V}_o(s)$  is of the form

$$\mathbf{V}_o(s) = \frac{K_1}{s} + \frac{K_2}{(s + s_1)} + \frac{K_3}{(s + s_2)}$$

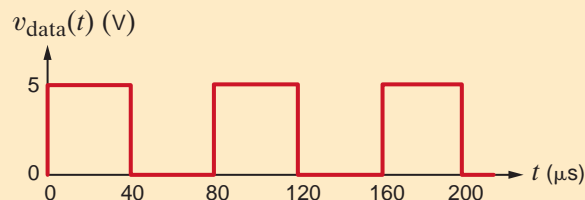
yielding the time-domain expression

$$v_o(t) = [K_1 + K_2 e^{-s_1 t} + K_3 e^{-s_2 t}] u(t) \text{ V}$$

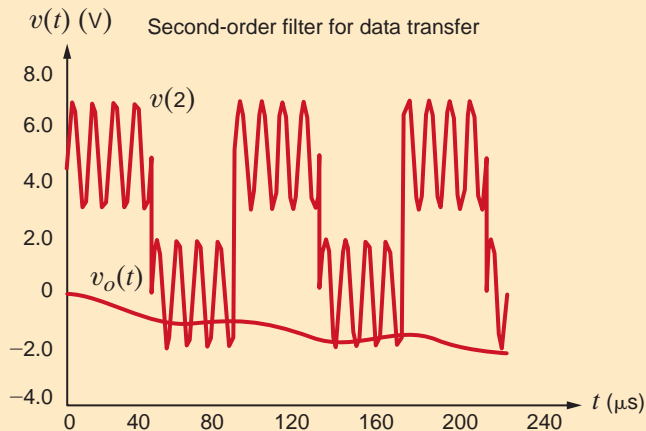
**Figure 14.32**  
Simulation output  
for node 2 and  $v_o(t)$ .



**Figure 14.33**  
25,000-bits/s digital  
data waveform.



**Figure 14.34**  
Simulation output  
for node 2 and  $v_o(t)$  with  
25,000-bits/s data trans-  
fer rate.



where  $K_1$ ,  $K_2$ , and  $K_3$  are real constants. The exponential time constants are the reciprocals of the pole frequencies.

$$\tau_1 = \frac{1}{s_1} = \frac{1}{6.7\text{k}} = 149 \mu\text{s}$$

$$\tau_2 = \frac{1}{s_2} = \frac{1}{93.3\text{k}} = 10.7 \mu\text{s}$$

Since exponentials reach steady state in roughly  $5\tau$ , the exponential associated with  $\tau_2$  affects the output for about  $50 \mu\text{s}$  and the  $\tau_1$  exponential will reach steady state after about  $750 \mu\text{s}$ . From Fig. 14.33 we see that at a 25,000-bits/s data transfer rate, each bit (a “high” or “low” voltage value) occupies a  $40\text{-}\mu\text{s}$  time span. Therefore, the exponential associated with  $s_1$ , and thus  $v_o(t)$ , is still far from its steady-state condition when the next bit is transmitted. In short,  $s_1$  is too small.

Let us remedy this situation by increasing the pole frequencies and changing to a critically damped system,  $\zeta = 1$ . If we select  $\omega_0 = 125 \text{ krad/s}$ , the poles will be at  $s_1 = s_2 = -125 \text{ krad/s}$  or  $19.9 \text{ kHz}$ —both below the  $100\text{-kHz}$  noise we wish to filter out. Fig. 14.35 shows the new pole positions moved to the left of their earlier positions, which we expect will result in a quicker response to the  $v_{\text{data}}$  pulse train.

Now the expressions for  $\omega_0$  and  $\zeta$  are

$$\omega_0 = 125,000 = \frac{1}{40,000\sqrt{C_1C_2}}$$

or

$$C_1C_2 = 4 \times 10^{-20}$$

Also,

$$\zeta = 1 = \frac{3}{2} \sqrt{\frac{C_2}{C_1}}$$

which can be expressed

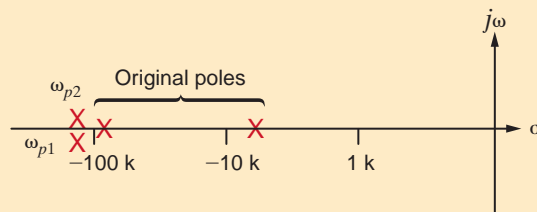
$$\frac{C_2}{C_1} = \frac{4}{9}$$

Solving for  $C_1$  and  $C_2$  yields

$$C_1 = 300 \text{ pF}$$

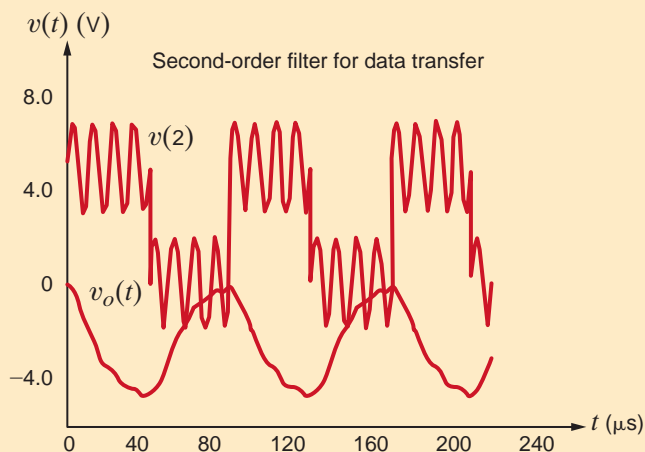
$$C_2 = 133.3 \text{ pF}$$

A simulation using these new capacitor values produces the input–output data shown in Fig. 14.36. Now the output voltage just reaches the “high” and “low” levels just before  $v_{\text{data}}$  makes its next transition and the  $100\text{-kHz}$  noise is still much reduced.



**Figure 14.35**

Pole-zero diagram for both original and critically damped systems.



**Figure 14.36**

Simulation outputs for node 2 and  $v_o(t)$  for the critically damped system.

## DESIGN EXAMPLE 14.14

The circuit in Fig. 14.37 is an existing low-pass filter. On installation, we find that its output exhibits too much oscillation when responding to pulses. We wish to alter the filter in order to make it critically damped.

**SOLUTION** First, we must determine the existing transfer function,  $\mathbf{H}(s)$ :

$$\mathbf{H}(s) = \frac{\mathbf{V}_o}{\mathbf{V}_s} = \frac{\frac{R}{1 + sRC}}{\frac{R}{1 + sRC} + sL} = \frac{\frac{1}{LC}}{s^2 + \frac{s}{RC} + \frac{1}{LC}} \quad 14.30$$

where the term  $\frac{R}{1 + sRC}$  is just the parallel combination of the resistor and capacitor. Given our component values, the transfer function is

$$\mathbf{H}(s) = \frac{10^{10}}{s^2 + (5 \times 10^4)s + 10^{10}} \quad 14.31$$

and the resonant frequency and damping ratio are

$$\omega_0 = \frac{1}{\sqrt{LC}} = 10^5 \text{ rad/s} \quad \text{and} \quad 2\zeta\omega_0 = \frac{1}{RC} \Rightarrow \zeta = \frac{5 \times 10^4}{2\omega_0} = \frac{5 \times 10^4}{2 \times 10^5} = 0.25 \quad 14.32$$

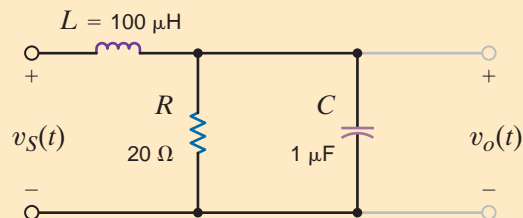
The network is indeed underdamped. From Eq. (14.32), we find that raising the damping ratio by a factor of 4 to 1.0 requires that  $R$  be lowered by the same factor of 4 to  $5 \Omega$ . This can be done by adding a resistor,  $R_X$ , in parallel with  $R$  as shown in Fig. 14.38. The required resistor value can be obtained by solving Eq. (14.33) for  $R_X$ :

$$R_{\text{eq}} = 5 = \frac{RR_X}{R + R_X} = \frac{20R_X}{20 + R_X} \quad 14.33$$

The solution is  $R_X = 6.67 \Omega$ .

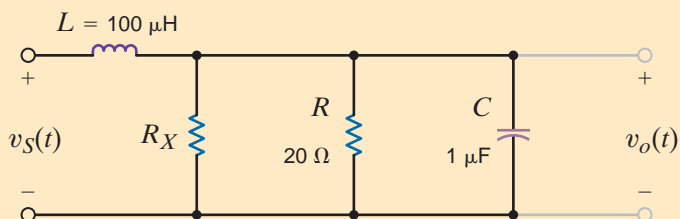
**Figure 14.37**

A second-order low-pass filter.



**Figure 14.38**

The addition of a resistor to change the damping ratio of the network.





The circuit in Fig. 14.39 is called a Wein bridge oscillator. Its output voltage is a sine wave whose frequency can be tuned. Let us design this circuit for an oscillation frequency of 10 kHz.

## DESIGN EXAMPLE 14.15

This network looks odd for two reasons. First, there is no input signal! Second, we have not seen an op-amp circuit in which the output is connected back to the noninverting input terminal. However, we do know that if the op-amp is working properly, its input currents are zero and the difference in voltage between the two input terminals is zero. We will employ these constraints to write two transfer functions from the op-amp *output* back to each of the op-amp *inputs*. The first is defined as

$$\mathbf{H}_{\text{neg}}(s) = \frac{\mathbf{V}_{\text{neg}}}{\mathbf{V}_o} = \frac{R_1}{R_1 + R_2} \quad 14.34$$

and the second is

$$\mathbf{H}_{\text{pos}}(s) = \frac{\mathbf{V}_{\text{pos}}}{\mathbf{V}_o} = \frac{\mathbf{Z}_1}{\mathbf{Z}_1 + \mathbf{Z}_2} \quad 14.35$$

where  $\mathbf{Z}_1$  is the parallel  $R$ - $C$  network and  $\mathbf{Z}_2$  is the series  $R$ - $C$  network. Thus,

$$\mathbf{Z}_1 = \frac{R/sC}{(1/sC) + R} = \frac{R}{1 + sRC} \quad \text{and} \quad \mathbf{Z}_2 = R + \frac{1}{sC} = \frac{1 + sRC}{sC} \quad 14.36$$

Substituting Eq. (14.36) into (14.35) yields

$$\mathbf{H}_{\text{pos}}(s) = \frac{\mathbf{V}_{\text{pos}}}{\mathbf{V}_o} = \frac{\frac{R}{1 + sRC}}{\frac{R}{1 + sRC} + \frac{1 + sRC}{sC}} = \frac{sRC}{s^2(RC)^2 + 3sRC + 1} \quad 14.37$$

Since the voltage across the op-amp inputs is zero,  $\mathbf{V}_{\text{neg}} = \mathbf{V}_{\text{pos}}$  and, thus,  $\mathbf{H}_{\text{pos}}(s) = \mathbf{H}_{\text{neg}}(s)$ ! Note that  $\mathbf{H}_{\text{neg}}(s)$  in Eq. (14.34) is just a resistor ratio and is therefore real. The op-amp forces the same to be true for  $\mathbf{H}_{\text{pos}}(s)$  at the frequency of oscillation! Now look at Eq. (14.37). Its numerator is purely imaginary. If  $\mathbf{H}_{\text{pos}}(s)$  is to be real, then its denominator must also be purely imaginary. The result is

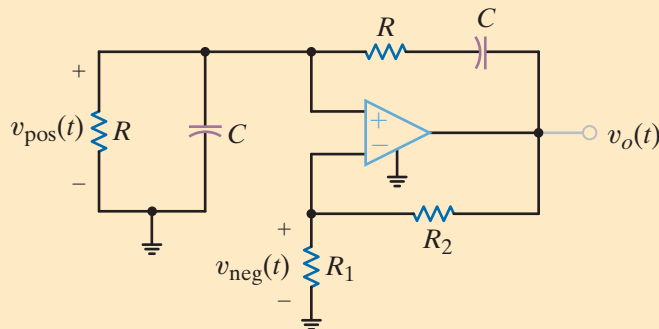
$$(j\omega)^2(RC)^2 + 1 = 0 \Rightarrow \omega = \frac{1}{RC} \Rightarrow f = \frac{1}{2\pi RC}$$

We arbitrarily select  $C = 10$  nF and find

$$R = \frac{1}{2\pi C f} = \frac{1}{2\pi(10^{-8})(10^4)} = 1.59 \text{ k}\Omega$$

We still must determine values for  $R_1$  and  $R_2$ . Examine once again the fact that  $\mathbf{H}_{\text{pos}}(s) = \mathbf{H}_{\text{neg}}(s)$ . At 10 kHz,  $\mathbf{H}_{\text{pos}}(s)$  becomes

$$\mathbf{H}_{\text{pos}}(s) = \frac{sRC}{s^2(RC)^2 + 3sRC + 1} = \frac{sRC}{3sRC} = \frac{1}{3}$$



**Figure 14.39**  
The classic Wein bridge oscillator.

The same must be true for  $\mathbf{H}_{\text{neg}}(s)$ :

$$\mathbf{H}_{\text{neg}}(s) = \frac{R_1}{R_1 + R_2} = \frac{1}{3}$$

The only possible solution is  $R_2 = 2R_1$ . Arbitrarily selecting  $R_1 = R = 1.59 \text{ k}\Omega$ , we find  $R_2 = 3.18 \text{ k}\Omega$ .

What happens if  $\mathbf{H}_{\text{pos}}(s)$  does not equal  $\mathbf{H}_{\text{neg}}(s)$  in the constructed circuit? If  $\mathbf{H}_{\text{neg}}(s)$  is larger, the oscillations will die out. But if  $\mathbf{H}_{\text{pos}}(s)$  is larger, the oscillations grow until the op-amp output reaches the power supply limits. At that point, the output is more of a square wave than a sinusoid. Since it is physically impossible to ensure that  $\mathbf{H}_{\text{pos}}(s)$  and  $\mathbf{H}_{\text{neg}}(s)$  are exactly the same at 10 kHz, engineers usually replace  $R_2$  with a nonlinear resistor whose resistance decreases with increasing temperature. In this way, if the output oscillations begin to grow, more power is dissipated in the nonlinear resistance, decreasing its value. This decrease in resistance will increase  $\mathbf{H}_{\text{neg}}(s)$  and bring the oscillator back to a balanced operating point.

## SUMMARY

- The use of  $s$ -domain models for circuit elements permits us to describe them with algebraic, rather than differential, equations.
- All the dc analysis techniques, including the network theorems, are applicable in the  $s$ -domain. Once the  $s$ -domain solution is obtained, the inverse transform is used to obtain a time domain solution.
- The roots of the network's characteristic equation (i.e., the poles) determine the type of network response. A plot of these roots in the left half of the  $s$ -plane provides an immediate indication of the network's behavior. The relationship between the pole-zero plot and the Bode plot provides further insight.
- The transfer (network) function for a network is expressed as

$$\mathbf{H}(s) = \frac{\mathbf{Y}(s)}{\mathbf{X}(s)}$$

where  $\mathbf{Y}(s)$  is the network response and  $\mathbf{X}(s)$  is the input forcing function. If the transfer function is known, the

output response is simply given by the product  $\mathbf{H}(s)\mathbf{X}(s)$ . If the input is an impulse function so that  $\mathbf{X}(s) = 1$ , the impulse response is equal to the inverse Laplace transform of the network function.

- The dc properties of the storage elements,  $L$  and  $C$ , can be used to obtain initial and final conditions. The initial conditions are required as a part of the  $s$ -domain model, and final conditions are often useful in verifying a solution.
  - The Laplace transform solution for the network response is composed of transient terms, which disappear as  $t \rightarrow \infty$ , and steady-state terms, which are present at all times.
  - The network response can be expressed as
- $$\mathbf{Y}(s) = \mathbf{H}(s)\mathbf{X}(s)$$
- The transient portion of the response  $\mathbf{Y}(s)$  results from the poles of  $\mathbf{H}(s)$ , and the steady-state portion of the response results from the poles of the forcing function  $\mathbf{X}(s)$ .

## PROBLEMS

-  **14.1** Find the input impedance  $\mathbf{Z}(s)$  of the network in Fig. P14.1.

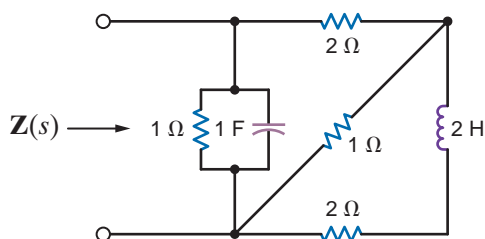



Figure P14.1

- 14.2** Find the input impedance  $\mathbf{Z}(s)$  of the network in Fig. P14.2 (a) when the terminals  $B$ - $B'$  are open circuited and (b) when the terminals  $B$ - $B'$  are short circuited. 

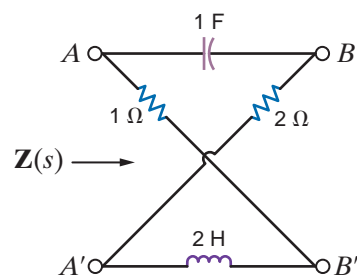


Figure P14.2

14.3 Find  $v_o(t)$ ,  $t > 0$ , in the network in Fig. P14.3.

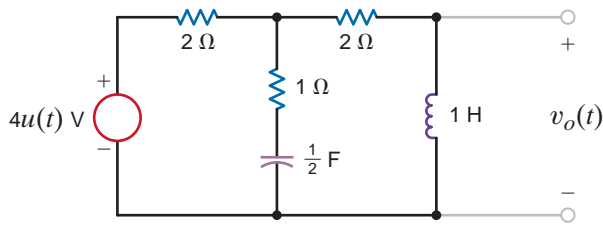


Figure P14.3

14.4 Find  $v_o(t)$ ,  $t > 0$ , in the network in Fig. P14.4.

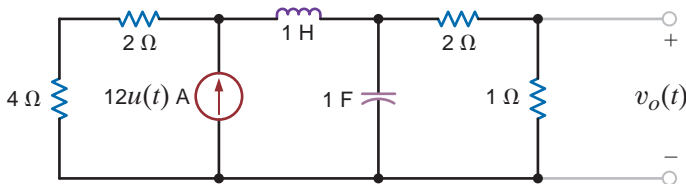


Figure P14.4

14.5 Find  $v_o(t)$ ,  $t > 0$ , in the network in Fig. P14.5 using node equations.

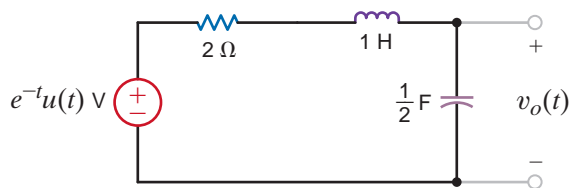


Figure P14.5

14.6 Use Laplace transforms and nodal analysis to find  $i_1(t)$  for  $t > 0$  in the network shown in Fig. P14.6. Assume zero initial conditions.

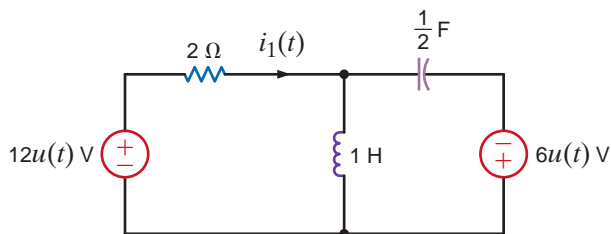


Figure P14.6

14.7 Use Laplace transforms to find  $v(t)$  for  $t > 0$  in the network shown in Fig. P14.7. Assume zero initial conditions.

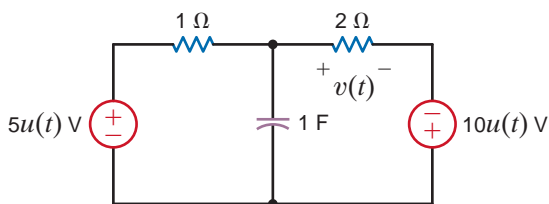


Figure P14.7

14.8 For the network shown in Fig. P14.8, find  $i_o(t)$ ,  $t > 0$ .

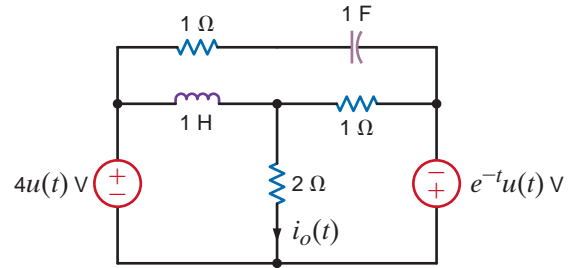


Figure P14.8

14.9 For the network shown in Fig. P14.9, find  $v_o(t)$ ,  $t > 0$ , using node equations.

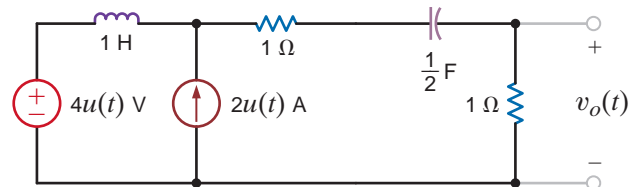


Figure P14.9

14.10 Use nodal analysis to find  $v_o(t)$ ,  $t > 0$ , in the network in Fig. P14.10.

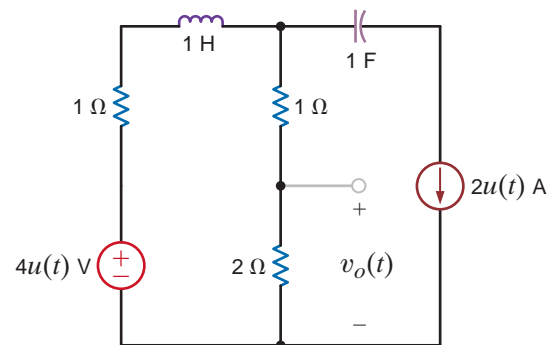


Figure P14.10

14.11 Find  $v_o(t)$ ,  $t > 0$ , in the network shown in Fig. P14.11 using nodal analysis.

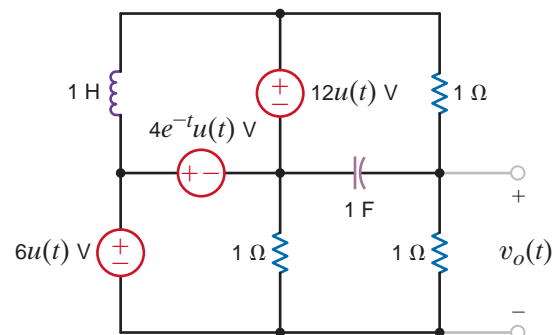


Figure P14.11

**14.12** For the network shown in Fig. P14.12, find  $v_o(t)$ ,  $t > 0$ , using loop equations.

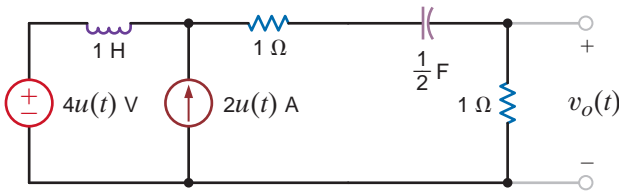


Figure P14.12

**14.15** Given the network in Fig. P14.15, find  $i_o(t)$ ,  $t > 0$ , using mesh equations.

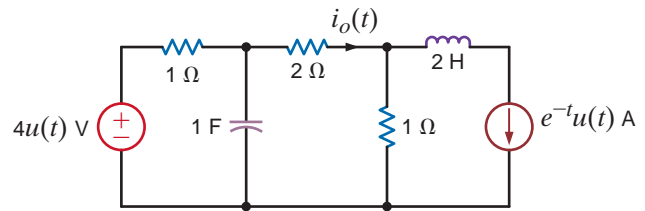


Figure P14.15

**14.13** For the network shown in Fig. P14.13, find  $v_o(t)$ ,  $t > 0$ , using mesh equations.

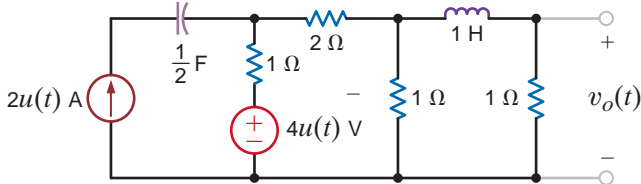


Figure P14.13

**14.14** Use loop equations to find  $i_o(t)$ ,  $t > 0$ , in the network shown in Fig. P14.14.

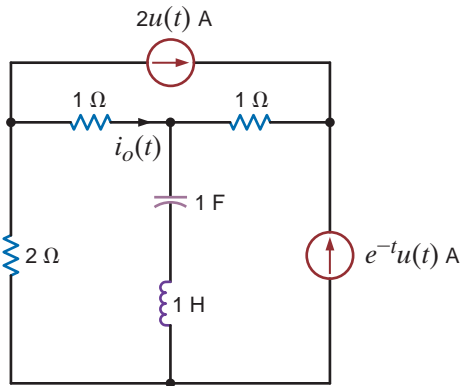


Figure P14.14

**14.16** Use mesh analysis to find  $v_o(t)$ ,  $t > 0$ , in the network in Fig. P14.16.

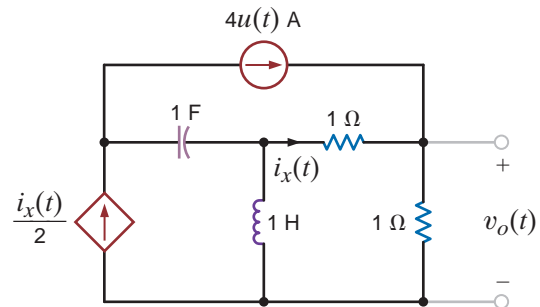


Figure P14.16

**14.17** Use loop analysis to find  $v_o(t)$  for  $t > 0$  in the network in Fig. P14.17.

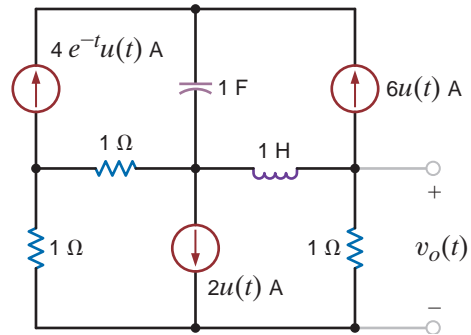


Figure P14.17

**14.18** Use mesh analysis to find  $v_o(t)$ , for  $t > 0$  in the network in Fig. P14.18.

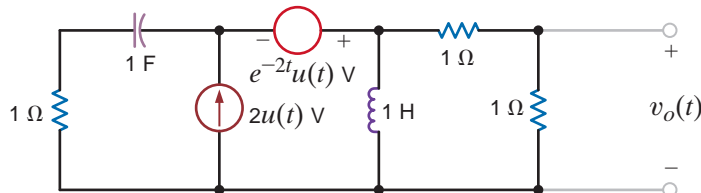


Figure P14.18

**14.19** Use mesh analysis to find  $v_o(t)$ , for  $t > 0$  in the network in Fig. P14.19.

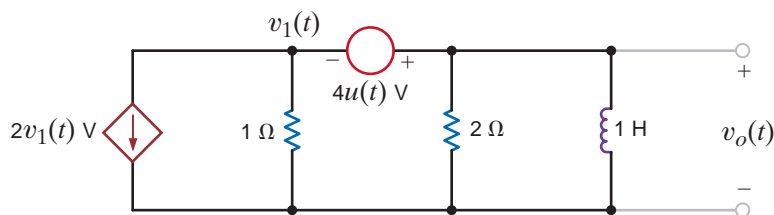


Figure P14.19

**14.20** Use superposition to find  $v_o(t)$ ,  $t > 0$ , in the network shown in Fig. P14.20.

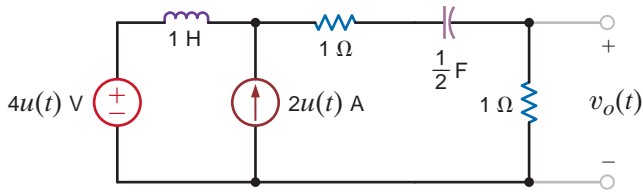


Figure P14.20

**14.21** Use superposition to find  $v_o(t)$ ,  $t > 0$ , in the network in Fig. P14.21.

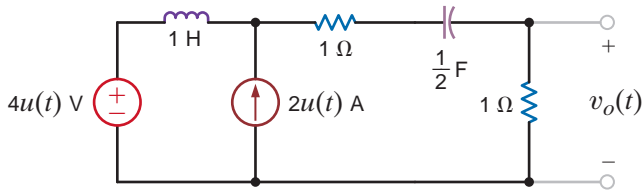


Figure P14.21

**14.22** Use superposition to find  $v_o(t)$ ,  $t > 0$ , in the network in Fig. P14.22.

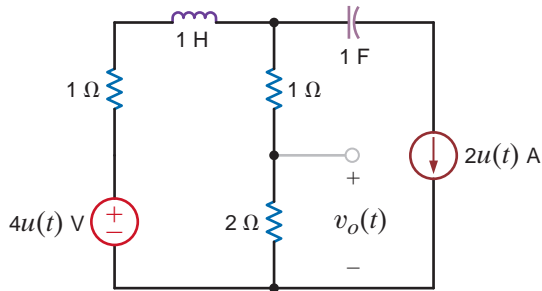


Figure P14.22

**14.23** Use source transformation to find  $v_o(t)$ ,  $t > 0$ , in the circuit in Fig. P14.23.

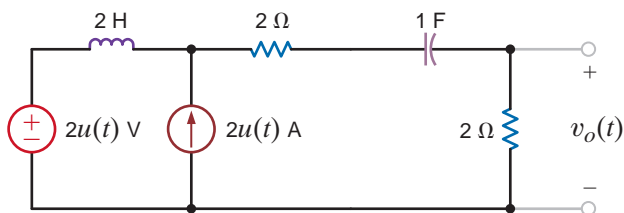


Figure P14.23

**14.24** Use source transformation to solve Problem 14.21.

**14.25** Use Thévenin's theorem to find  $v_o(t)$ ,  $t > 0$ , in Fig. P14.25.

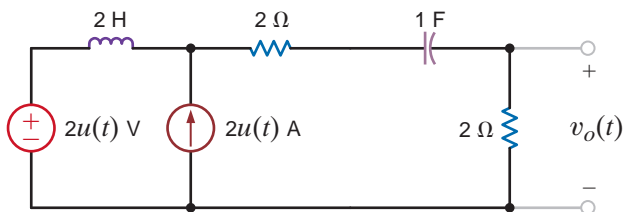


Figure P14.25

**14.26** Use Thévenin's theorem to find  $v_o(t)$ ,  $t > 0$ , in Fig. P14.26.

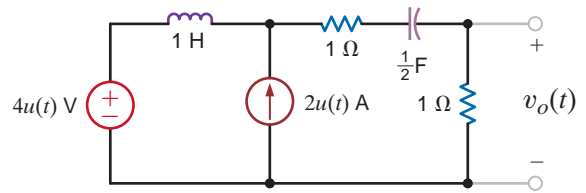


Figure P14.26

**14.27** Use Thévenin's theorem to find  $i_o(t)$ ,  $t > 0$ , in Fig. P14.27.

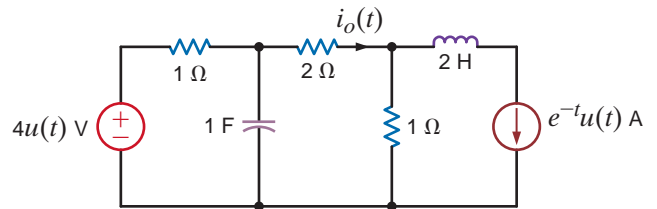


Figure P14.27

**14.28** Use Thévenin's theorem to find  $i_o(t)$ ,  $t > 0$ , in Fig. P14.28.

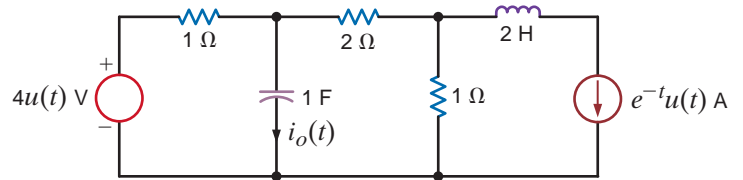


Figure P14.28

**14.29** Use Thévenin's theorem to determine  $i_o(t)$ ,  $t > 0$ , in the circuit shown in Fig. P14.29.

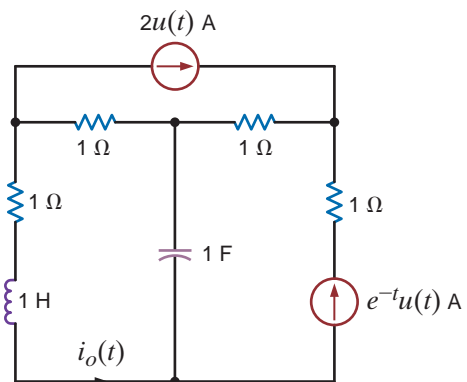


Figure P14.29



**14.30** Use Thévenin's theorem to find  $v_o(t)$ ,  $t > 0$ , in the network in Fig. P14.30.

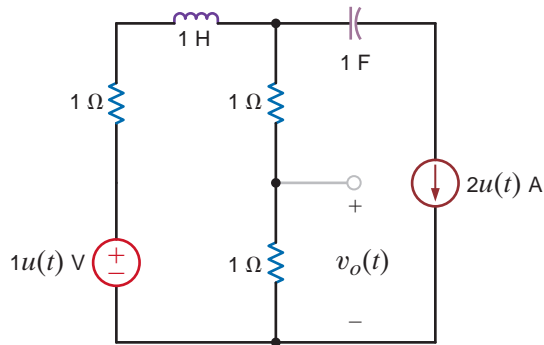


Figure P14.30

**14.31** Find  $v_o(t)$ ,  $t > 0$ , in the network in Fig. P14.31 using Thévenin's theorem.

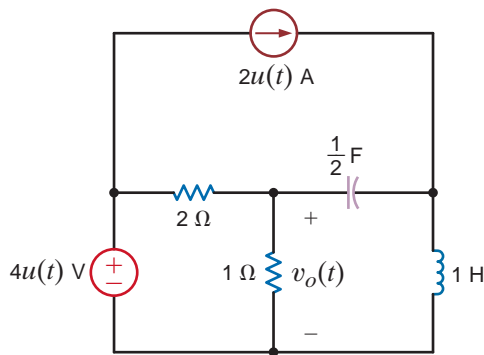


Figure P14.31

**14.32** Use Thévenin's theorem to find  $v_o(t)$ ,  $t > 0$ , in the network in Fig. P14.32.

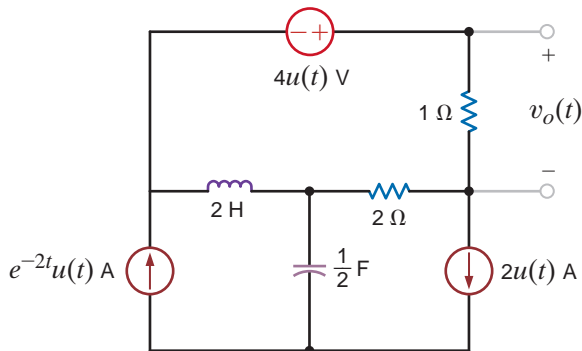


Figure P14.32

**14.33** Use Thévenin's theorem to find  $v_o(t)$ ,  $t > 0$ , in the network in Fig. P14.33.

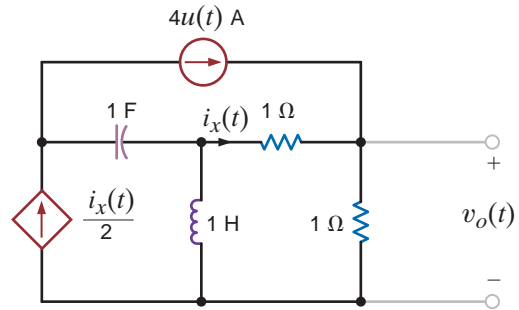


Figure P14.33

**14.34** Use Thévenin's theorem to find  $v_o(t)$ ,  $t > 0$ , in the network shown in Fig. P14.34.

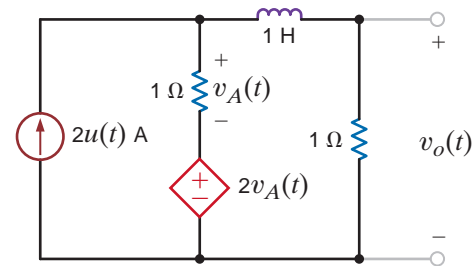


Figure P14.34

**14.35** Use Thévenin's theorem to find  $i_o(t)$ ,  $t > 0$ , in the network shown in Fig. P14.35.

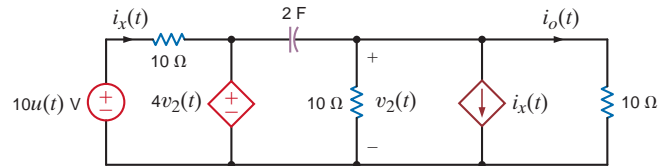


Figure P14.35

**14.36** Find  $v_o(t)$ ,  $t > 0$ , in the network shown in Fig. P14.36. Assume that the circuit has reached steady state at  $t = 0^-$ .

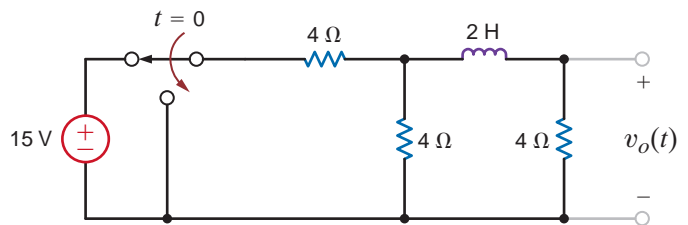


Figure P14.36

14.37 Find  $v_o(t)$ ,  $t > 0$ , in the circuit in Fig. P14.37.

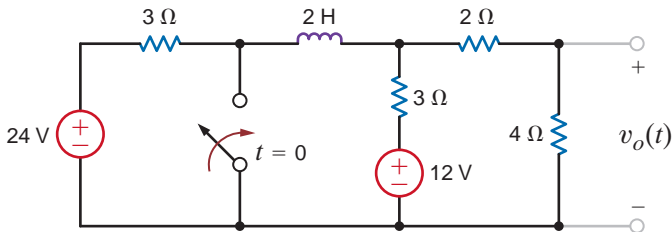


Figure P14.37

14.38 Find  $i_o(t)$ ,  $t > 0$ , in the network shown in Fig. P14.38.

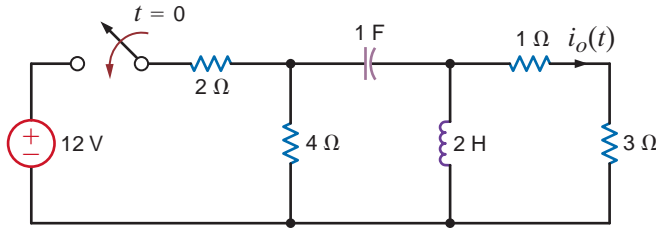


Figure P14.38

14.39 Find  $v_o(t)$ ,  $t > 0$ , in the circuit in Fig. P14.39.

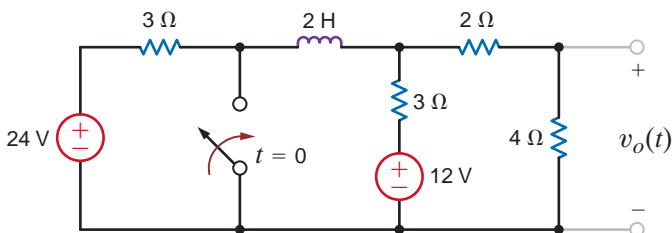


Figure P14.39

14.40 Find  $v_o(t)$ ,  $t > 0$ , in the circuit shown in Fig. P14.40.

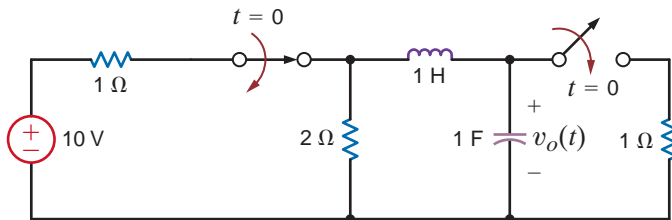


Figure P14.40

14.41 Find  $v_o(t)$ ,  $t > 0$ , in the network in Fig. P14.41.

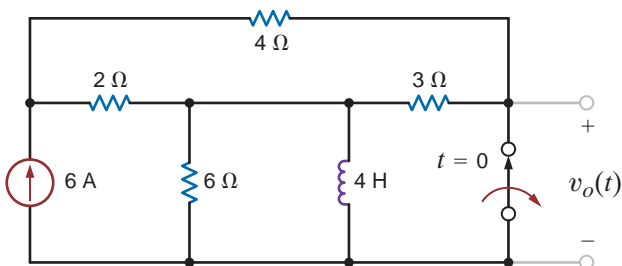


Figure P14.41

14.42 Find  $i_o(t)$ ,  $t > 0$ , in the network in Fig. P14.42.

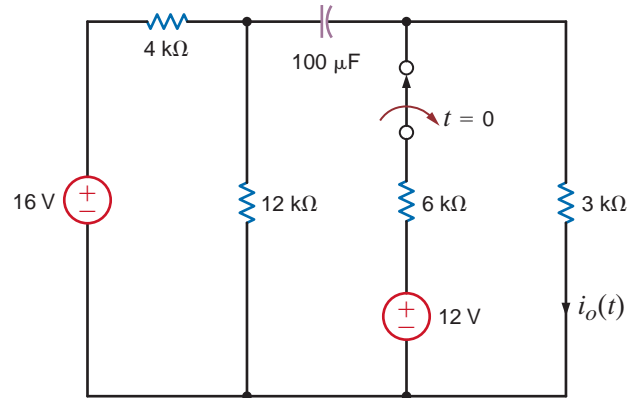


Figure P14.42

14.43 Find  $v_o(t)$ , for  $t > 0$ , in the network in Fig. P14.43.

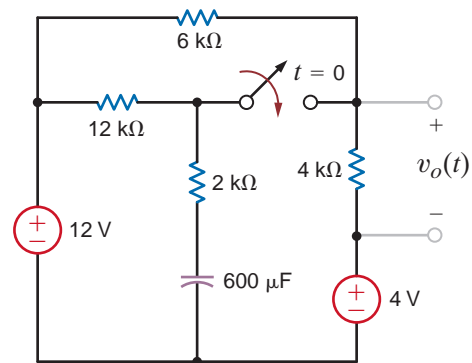


Figure P14.43

14.44 Find  $v_o(t)$ , for  $t > 0$ , in the network in Fig. P14.44.

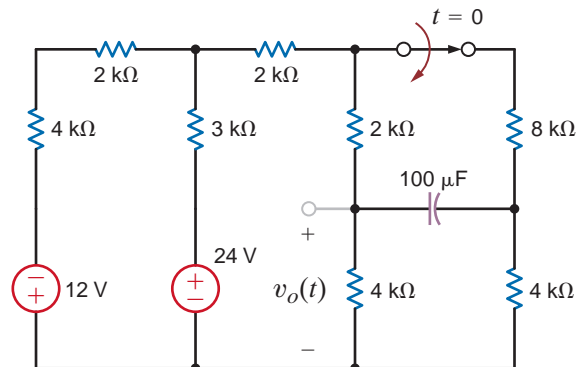


Figure P14.44

14.45 Find  $v_o(t)$ , for  $t > 0$ , in the network in Fig. P14.45.

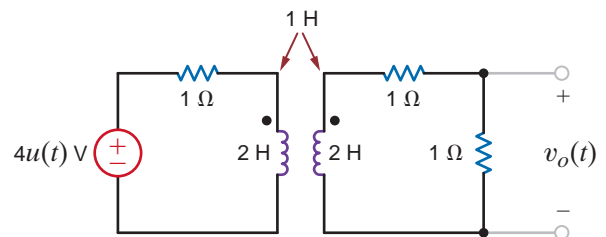


Figure P14.45

**14.46** Find  $v_o(t)$ , for  $t > 0$ , in the network in Fig. P14.46.

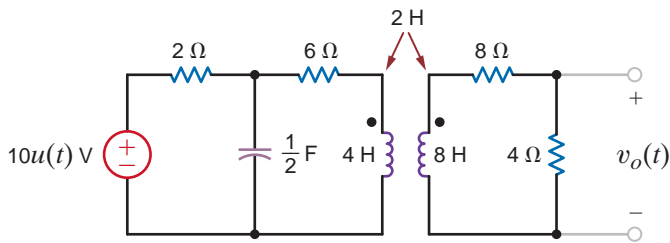


Figure P14.46

**14.47** Find  $v_o(t)$ , for  $t > 0$ , in the network in Fig. P14.47.

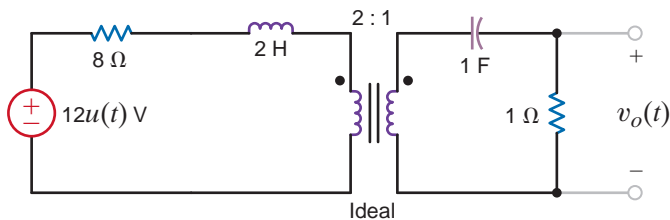


Figure P14.47

**14.48** Find  $v_o(t)$ , for  $t > 0$ , in the network in Fig. P14.48.

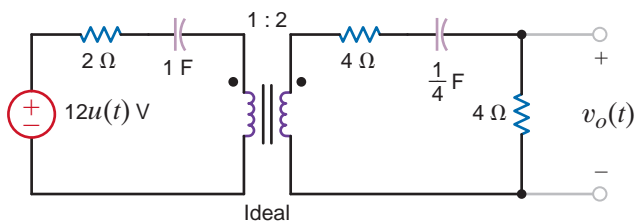


Figure P14.48

**14.49** For the network shown in Fig. P14.49, determine the value of the output voltage as  $t \rightarrow \infty$ .

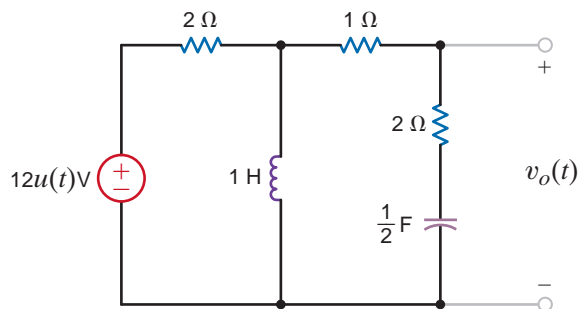


Figure P14.49

**14.50** Given the network in Fig. P14.50, determine the value of the output voltage as  $t \rightarrow \infty$ .

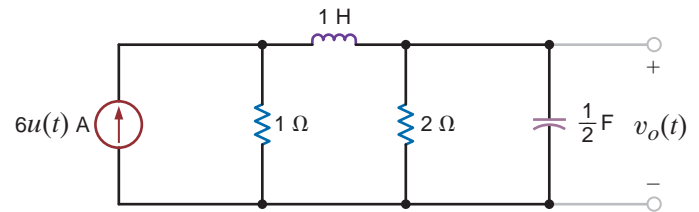


Figure P14.50

**14.51** Determine the initial and final values of the voltage  $v_o(t)$  in the network in Fig. P14.51.

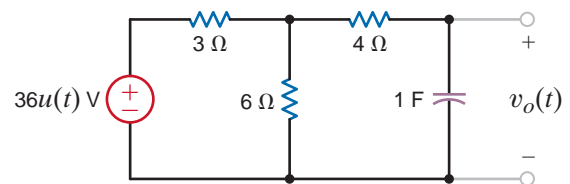


Figure P14.51

**14.52** Determine the initial and final values of the voltage  $v_o(t)$  in the network in Fig. P14.52.

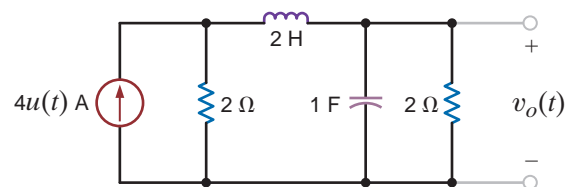


Figure P14.52



**14.53** Find the initial and final values of the current  $i_o(t)$  in the network in Fig. P14.53.

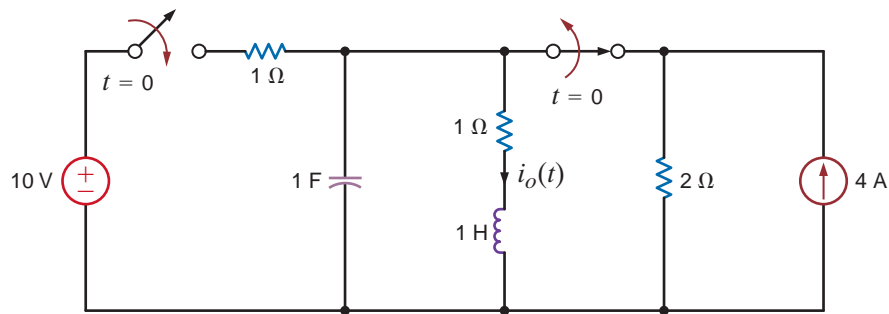


Figure P14.53

**14.54** Determine the output voltage  $v_o(t)$  in the network in Fig. P14.54a if the input is given by the source in Fig. P14.54b.

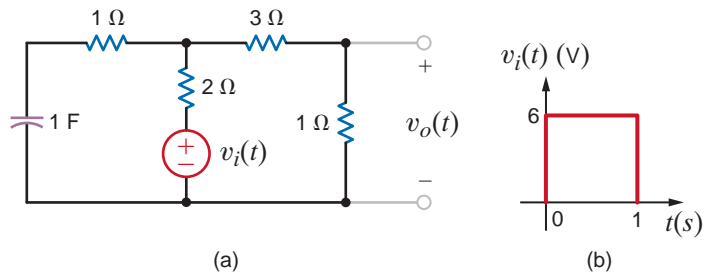


Figure P14.54

**14.55** Find the output voltage,  $v_o(t)$ ,  $t > 0$ , in the network in Fig. P14.55a if the input is represented by the waveform shown in Fig. P14.55b.

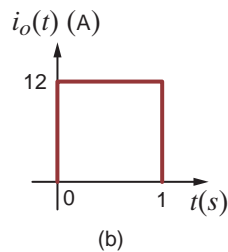
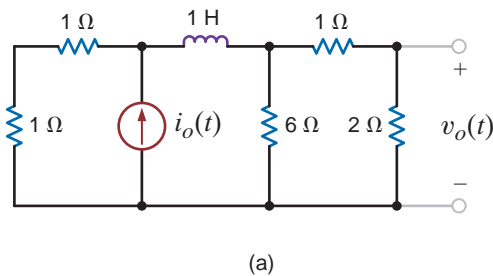


Figure P14.55

**14.56** Determine the output voltage,  $v_o(t)$ , in the circuit in Fig. P14.56a if the input is given by the source described in Fig. P14.56b.

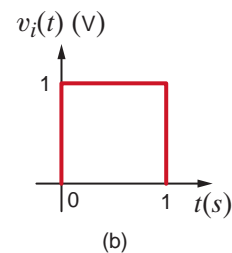
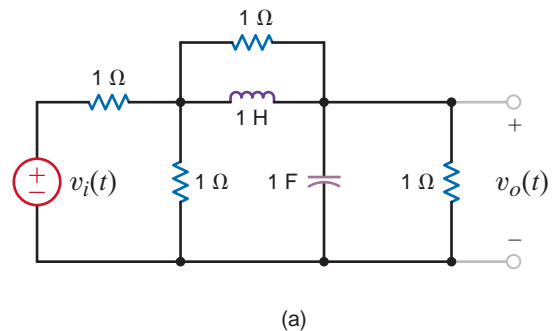


Figure P14.56

- 14.57** Determine the transfer function  $\mathbf{I}_o(s)/\mathbf{I}_i(s)$  for the network shown in Fig. P14.57.

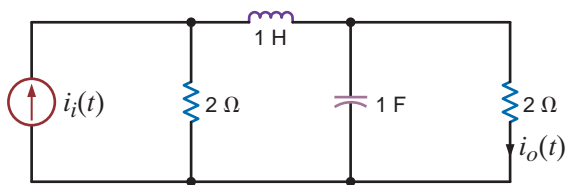


Figure P14.57

- 14.58** Find the transfer function  $\mathbf{V}_o(s)/\mathbf{V}_i(s)$  for the network shown in Fig. P14.58.

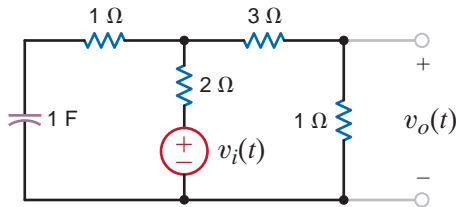


Figure P14.58

- 14.59** Find the transfer function for the network shown in Fig. P14.59.

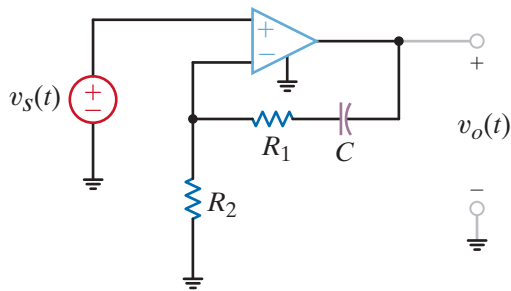


Figure P14.59

- 14.60** Find the transfer function for the network shown in Fig. P14.60.

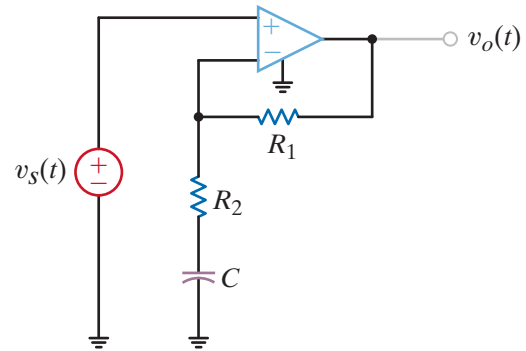


Figure P14.60

- 14.61** Find the transfer function for the network in Fig. P14.61.

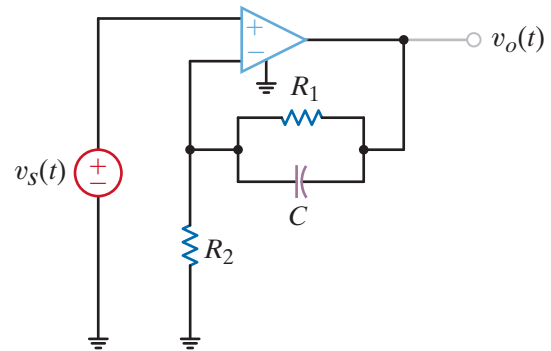


Figure P14.61

-  **14.62** Find the transfer function for the network in Fig. P14.62.

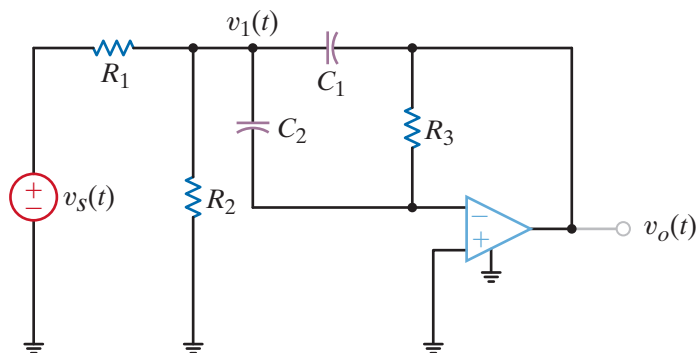


Figure P14.62

- 14.63** Find the transfer function for the network in Fig. P14.63. If a step function is applied to the network, will the response be overdamped, underdamped, or critically damped?

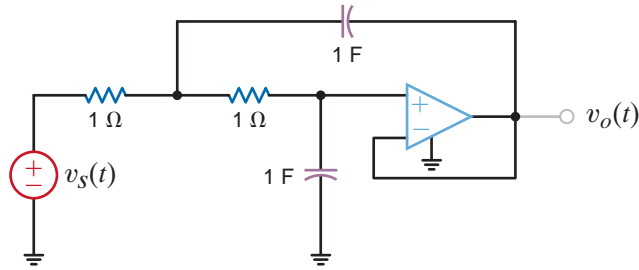


Figure P14.63

- 14.64** Determine the transfer function for the network shown in Fig. P14.64. If a step function is applied to the network, what type of damping will the network exhibit?

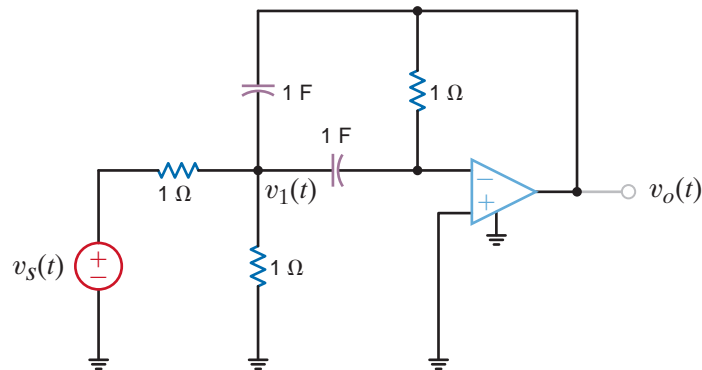


Figure P14.64

- 14.65** The voltage response of the network to a unit step input is

$$\mathbf{V}_o(s) = \frac{2(s + 1)}{s(s^2 + 10s + 25)}$$

Is the response overdamped?

- 14.66** The transfer function of the network is given by the expression

$$\mathbf{G}(s) = \frac{100s}{s^2 + 13s + 40}$$

Determine the damping ratio, the undamped natural frequency, and the type of response that will be exhibited by the network.

- 14.67** The transfer function of the network is given by the expression

$$\mathbf{G}(s) = \frac{100s}{s^2 + 22s + 40}$$

Determine the damping ratio, the undamped natural frequency, and the type of response that will be exhibited by the network.

- 14.68** The voltage response of a network to a unit step input is

$$\mathbf{V}_o(s) = \frac{10}{s(s^2 + 8s + 18)}$$

Is the response critically damped?

- 14.69** For the network in Fig. P14.69, choose the value of  $C$  for critical damping.

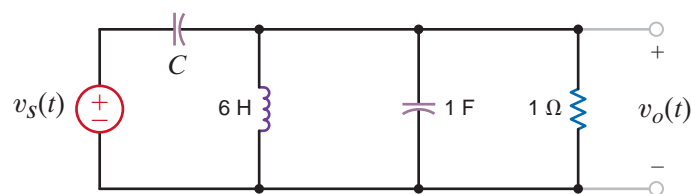


Figure P14.69

- 14.70** For the filter in Fig. P14.70, choose the values of  $C_1$  and  $C_2$  to place poles at  $s = -2$  and  $s = -5$  rad/s.

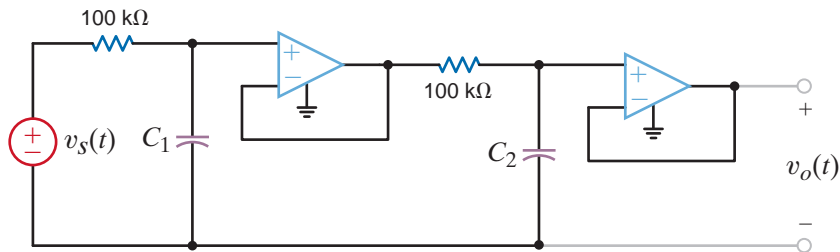


Figure P14.70

- 14.71** Find the steady-state response  $v_o(t)$  for the circuit shown in Fig. P14.71.

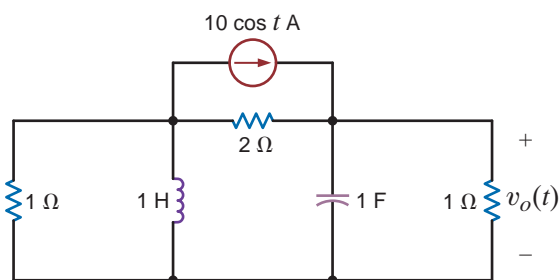


Figure P14.71

- 14.72** Find the steady-state response  $v_o(t)$  for the network in Fig. P14.72.

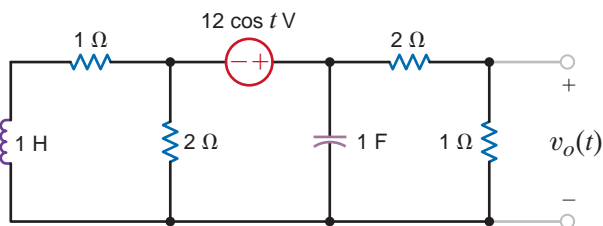


Figure P14.72

- 14.73** Determine the steady-state response  $v_o(t)$  for the network in Fig. P14.73.

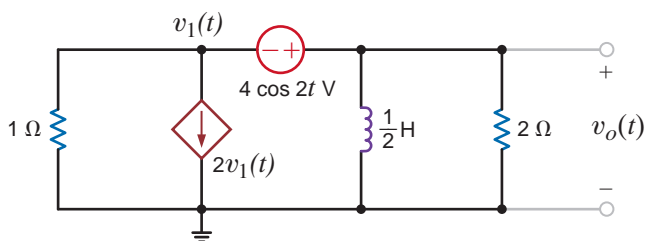


Figure P14.73

- 14.74** Determine the steady-state response  $i_o(t)$  for the network in Fig. P14.74.

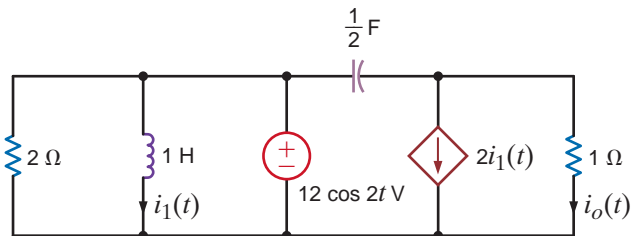


Figure P14.74

- 14.75** Find the steady-state response  $i_o(t)$  for the network shown in Fig. P14.75.

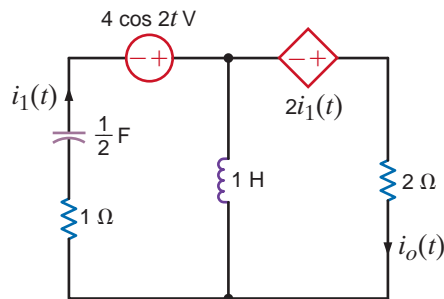


Figure P14.75

- 14.76** Find the steady-state response  $v_o(t)$ ,  $t > 0$ , in the network in Fig. P14.76.

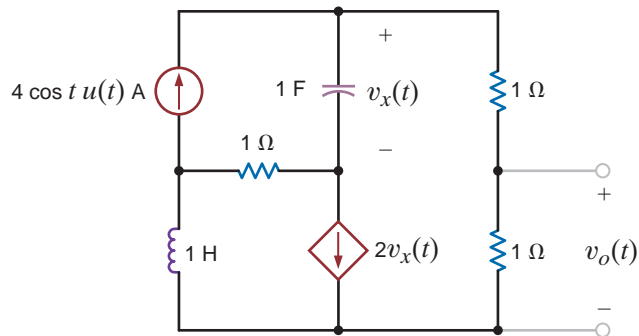


Figure P14.76

**14.77** Find the steady-state response  $v_o(t)$ ,  $t > 0$ , in the network in Fig. P14.77.

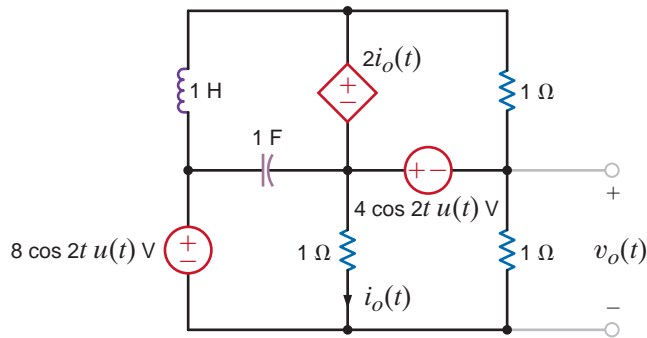


Figure P14.77

**TYPICAL PROBLEMS FOUND ON THE FE EXAM**

**14PFE-1** A single-loop, second-order circuit is described by the following differential equation:

$$2 \frac{dv^2(t)}{dt^2} + 4 \frac{dv(t)}{dt} + 4v(t) = 12u(t) \quad t > 0$$

Which is the correct form of the total (natural plus forced) response?

- a.  $v(t) = K_1 + K_2 e^{-t}$
- b.  $v(t) = K_1 \cos t + K_2 \sin t$
- c.  $v(t) = K_1 + K_2 t e^{-t}$
- d.  $v(t) = K_1 + K_2 e^{-t} \cos t + K_3 e^{-t} \sin t$

**14PFE-2** If all initial conditions are zero in the network in Fig. 14PFE-2, find the transfer function  $\mathbf{V}_o(s)/\mathbf{V}_s(s)$ .

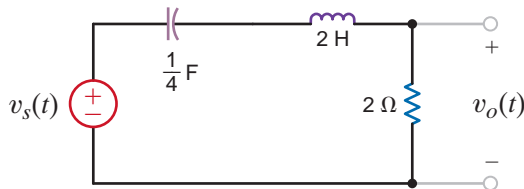


Figure 14PFE-2

- a.  $\frac{s + 1}{s^2 + 4s + 6}$
- b.  $\frac{s}{s^2 + 2s + 5}$
- c.  $\frac{s}{s^2 + s + 2}$
- d.  $\frac{s + 2}{s^2 + 5s + 8}$

**14PFE-3** The initial conditions in the circuit in Fig. 14PFE-3 are zero. Find the transfer function  $\mathbf{I}_o(s)/\mathbf{I}_s(s)$ .

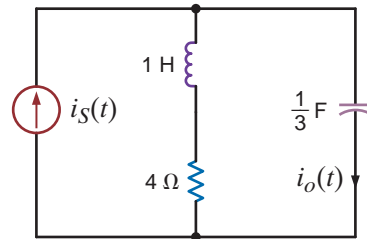
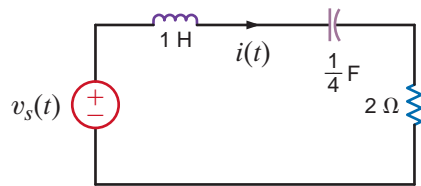


Figure 14PFE-3

- a.  $\frac{s(s + 4)}{s^2 + 4s + 3}$
- b.  $\frac{s + 2}{s^2 + 3s + 1}$
- c.  $\frac{s}{s^2 + 5s + 7}$
- d.  $\frac{s + 3}{s^2 + 2s + 10}$

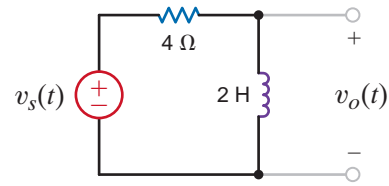
**14PFE-4** In the circuit in Fig. 14PFE-4, use Laplace transforms to find the current  $\mathbf{I}(s)$ . Assume zero initial conditions and that  $v_s(t) = 4 \cos t u(t)$ .



**Figure 14PFE-4**

- $\frac{2s}{s^2 + 4s + 5}$
- $\frac{4s^2}{(s^2 + 1)(s^2 + 2s + 4)}$
- $\frac{2s^2}{s^2 + 7s + 9}$
- $\frac{4s}{(s^2 + 1)(s^2 + 3s + 5)}$

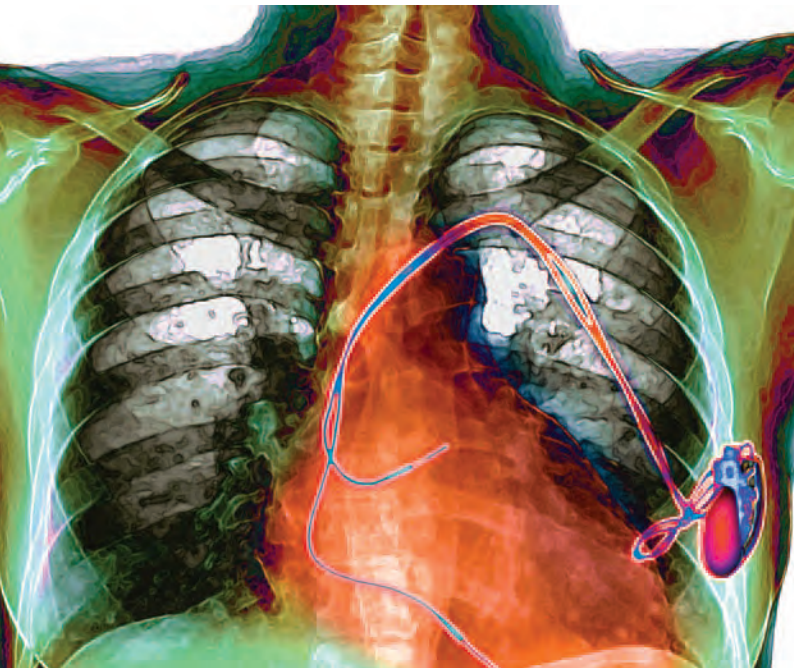
**14PFE-5** Assuming that the initial inductor current is zero in the circuit in Fig. 14PFE-5, find the transfer function  $\mathbf{V}_o(s)/\mathbf{V}_s(s)$ .



**Figure 14PFE-5**

- $\frac{s}{s^2 + 1}$
- $\frac{s^2}{2s + 5}$
- $\frac{s^2}{s + 8}$
- $\frac{s}{s + 2}$

# FOURIER ANALYSIS TECHNIQUES



Du Cane Medical Imaging Ltd./Photo Researchers

## THE LEARNING GOALS FOR THIS CHAPTER ARE:

- Be able to determine the trigonometric and exponential Fourier series for a periodic signal and understand the effects of waveform symmetry on the coefficients of a trigonometric Fourier series
- Be able to calculate the steady-state response of an electric circuit when excited by a periodic voltage or current signal
- Know how to calculate average power in an electric circuit excited by a periodic voltage or current signal
- Be able to determine Fourier transform pairs for signals common to electric circuit analysis and use the Fourier transform to calculate the response of an electric circuit
- Be able to apply Parseval's theorem

**Artificial Pacemakers for Hearts** To find happiness, the Tin Man in the Wizard of Oz thought he only needed a heart – but a healthy one. Most hearts have a natural pacemaker and are healthy. For irregular heartbeats or heart blocks, artificial pacemakers may be needed to maintain an adequate heart rate. These pacemakers use electrodes contacting the heart muscle to deliver electrical impulses that regulate the beating of the heart. Optimum pacing modes for individual patients can be programmed into a microprocessor externally. Stimulus signals are either periodic impulses over a brief range (pacemaker) or sudden jolts to shock the heart into a

steady pattern (defibrillator). A pacemaker and defibrillator can be combined into a single implantable device.

Pacemakers can be single-chamber, dual-chamber, or rate-responsive. In a single-chamber unit the atrium or the ventricle has a single electrode; dual-chamber units have electrodes in each chamber to improve synchronization. In the rate-responsive pacemaker, sensors detect the body's activity and automatically adjust the pacing rate. Pacemakers contain a lithium battery power source, sensing amplifier, computer logic, and output circuitry that delivers the pacing signal to the electrodes.

This chapter introduces you to Fourier series and Fourier transforms—the basic frequency techniques for finding responses for periodic and non-periodic voltages and currents in dynamic systems. Fourier series describe periodic signals. We consider three forms of Fourier series, symmetry properties, and power spectra at the fundamental frequency and its harmonics. Fourier transforms describe non-periodic signals.

We treat Fourier transforms as an extension of Laplace transforms, relating them to time-domain representations of sources and circuits. The key to keeping an impaired heart beating, or re-starting a stopped heart, is the delivery of appropriate periodic or non-periodic voltages to a delicate organ embedded in a living person. Few systems are as dynamic—or as important—as that.

## 15.1

### Fourier Series

A periodic function is one that satisfies the relationship

$$f(t) = f(t + nT_0), \quad n = \pm 1, \pm 2, \pm 3, \dots$$

for every value of  $t$  where  $T_0$  is the period. As we have shown in previous chapters, the sinusoidal function is a very important periodic function. However, many other periodic functions have wide applications. For example, laboratory signal generators produce the pulse-train and square-wave signals shown in Figs. 15.1a and b, respectively, which are used for testing circuits. The oscilloscope is another laboratory instrument, and the sweep of its electron beam across the face of the cathode ray tube is controlled by a triangular signal of the form shown in Fig. 15.1c.

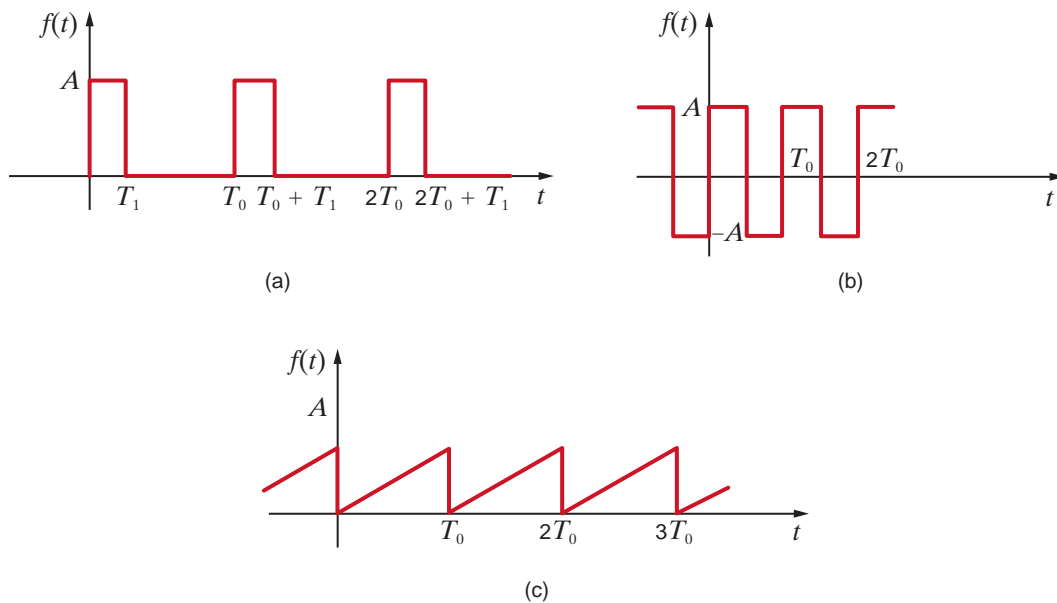
The techniques we will explore are based on the work of Jean Baptiste Joseph Fourier. Although our analyses will be confined to electric circuits, it is important to point out that the techniques are applicable to a wide range of engineering problems. In fact, it was Fourier's work in heat flow that led to the techniques that will be presented here.

In his work, Fourier demonstrated that a periodic function  $f(t)$  could be expressed as a sum of sinusoidal functions. Therefore, given this fact and the fact that if a periodic function is expressed as a sum of linearly independent functions, each function in the sum must be periodic with the same period, and the function  $f(t)$  can be expressed in the form

$$f(t) = a_0 + \sum_{n=1}^{\infty} D_n \cos(n\omega_0 t + \theta_n) \quad 15.1$$

**Figure 15.1**

Some useful periodic signals.





where  $\omega_0 = 2\pi/T_0$  and  $a_0$  is the average value of the waveform. An examination of this expression illustrates that all sinusoidal waveforms that are periodic with period  $T_0$  have been included. For example, for  $n = 1$ , one cycle covers  $T_0$  seconds, and  $D_1 \cos(\omega_0 t + \theta_1)$  is called the *fundamental*. For  $n = 2$ , two cycles fall within  $T_0$  seconds, and the term  $D_2 \cos(2\omega_0 t + \theta_2)$  is called the *second harmonic*. In general, for  $n = k$ ,  $k$  cycles fall within  $T_0$  seconds, and  $D_k \cos(k\omega_0 t + \theta_k)$  is the *kth harmonic term*.

Since the function  $\cos(n\omega_0 t + \theta_k)$  can be written in exponential form using Euler's identity or as a sum of cosine and sine terms of the form  $\cos n\omega_0 t$  and  $\sin n\omega_0 t$  as demonstrated in Chapter 8, the series in Eq. (15.1) can be written as

$$f(t) = a_0 + \sum_{\substack{n=-\infty \\ n \neq 0}}^{\infty} \mathbf{c}_n e^{jn\omega_0 t} = \sum_{n=-\infty}^{\infty} \mathbf{c}_n e^{jn\omega_0 t} \quad 15.2$$

Using the real-part relationship employed as a transformation between the time domain and the frequency domain, we can express  $f(t)$  as

$$f(t) = a_0 + \sum_{n=1}^{\infty} \operatorname{Re}[(D_n / \theta_n) e^{jn\omega_0 t}] \quad 15.3$$

$$= a_0 + \sum_{n=1}^{\infty} \operatorname{Re}(2\mathbf{c}_n e^{jn\omega_0 t}) \quad 15.4$$

$$= a_0 + \sum_{n=1}^{\infty} \operatorname{Re}[(a_n - jb_n) e^{jn\omega_0 t}] \quad 15.5$$

$$= a_0 + \sum_{n=1}^{\infty} (a_n \cos n\omega_0 t + b_n \sin n\omega_0 t) \quad 15.6$$

These equations allow us to write the Fourier series in a number of equivalent forms. Note that the *phasor* for the  $n$ th harmonic is

$$D_n / \theta_n = 2\mathbf{c}_n = a_n - jb_n \quad 15.7$$

The approach we will take will be to represent a nonsinusoidal periodic input by a sum of complex exponential functions, which because of Euler's identity is equivalent to a sum of sines and cosines. We will then use (1) the superposition property of linear systems and (2) our knowledge that the steady-state response of a time-invariant linear system to a sinusoidal input of frequency  $\omega_0$  is a sinusoidal function of the same frequency to determine the response of such a system.

To illustrate the manner in which a nonsinusoidal periodic signal can be represented by a Fourier series, consider the periodic function shown in Fig. 15.2a. In Figs. 15.2b–d we can see the impact of using a specific number of terms in the series to represent the original function. Note that the series more closely represents the original function as we employ more and more terms.

**EXPONENTIAL FOURIER SERIES** Any physically realizable periodic signal may be represented over the interval  $t_1 < t < t_1 + T_0$  by the *exponential Fourier series*

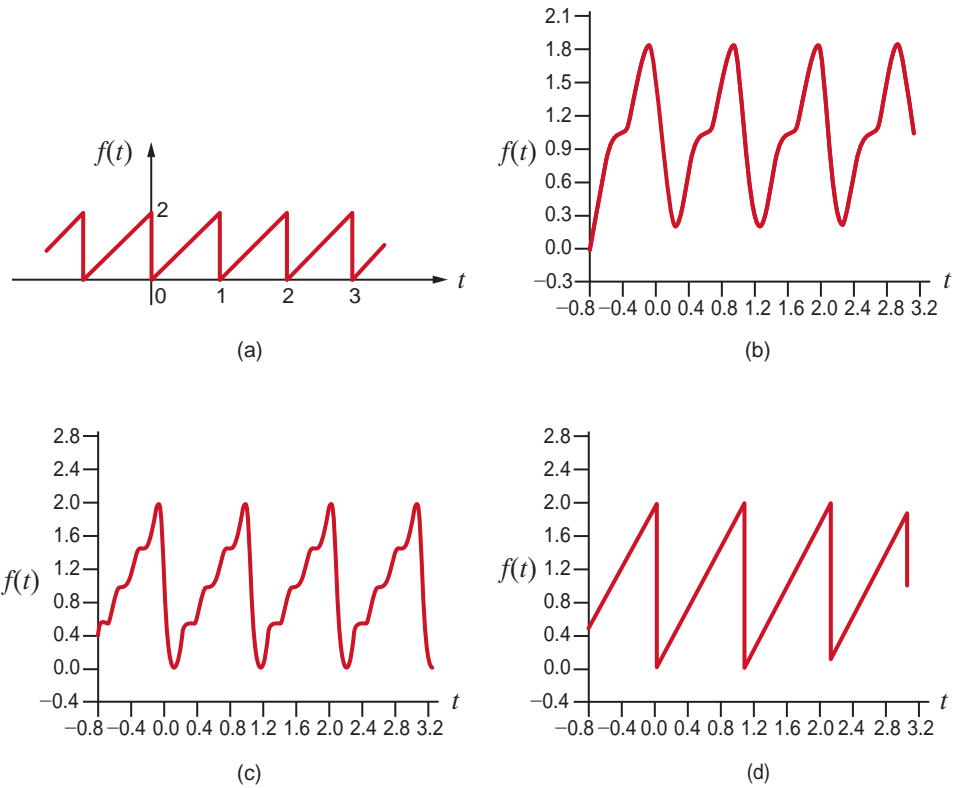
$$f(t) = \sum_{n=-\infty}^{\infty} \mathbf{c}_n e^{jn\omega_0 t} \quad 15.8$$

where the  $\mathbf{c}_n$  are the complex (phasor) Fourier coefficients. These coefficients are derived as follows. Multiplying both sides of Eq. (15.8) by  $e^{-jk\omega_0 t}$  and integrating over the interval  $t_1$  to  $t_1 + T_0$ , we obtain

$$\begin{aligned} \int_{t_1}^{t_1+T_0} f(t) e^{-jk\omega_0 t} dt &= \int_{t_1}^{t_1+T_0} \left( \sum_{n=-\infty}^{\infty} \mathbf{c}_n e^{jn\omega_0 t} \right) e^{-jk\omega_0 t} dt \\ &= \mathbf{c}_k T_0 \end{aligned}$$

**Figure 15.2**

Periodic function (a) and its representation by a fixed number of Fourier series terms, (b) 2 terms, (c) 4 terms, (d) 100 terms.



since

$$\int_{t_1}^{t_1+T_0} e^{j(n-k)\omega_0 t} dt = \begin{cases} 0 & \text{for } n \neq k \\ T_0 & \text{for } n = k \end{cases}$$

Therefore, the Fourier coefficients are defined by the equation

$$c_n = \frac{1}{T_0} \int_{t_1}^{t_1+T_0} f(t) e^{-jn\omega_0 t} dt \tag{15.9}$$

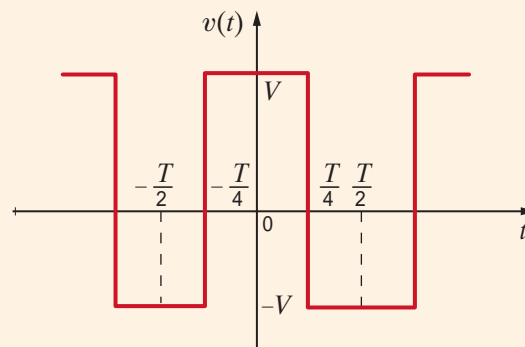
The following example illustrates the manner in which we can represent a periodic signal by an exponential Fourier series.

**EXAMPLE 15.1**

**Figure 15.3**

Periodic voltage waveform.

We wish to determine the exponential Fourier series for the periodic voltage waveform shown in Fig. 15.3.



The Fourier coefficients are determined using Eq. (15.9) by integrating over one complete period of the waveform,

**SOLUTION**

$$\begin{aligned}
 c_n &= \frac{1}{T} \int_{-T/2}^{T/2} f(t) e^{-jn\omega_0 t} dt \\
 &= \frac{1}{T} \int_{-T/2}^{-T/4} -V e^{-jn\omega_0 t} dt \\
 &\quad + \int_{-T/4}^{T/4} V e^{-jn\omega_0 t} dt + \int_{T/4}^{T/2} -V e^{-jn\omega_0 t} dt \\
 &= \frac{V}{jn\omega_0 T} \left[ +e^{-jn\omega_0 t} \Big|_{-T/2}^{-T/4} - e^{-jn\omega_0 t} \Big|_{-T/4}^{T/4} + e^{-jn\omega_0 t} \Big|_{T/4}^{T/2} \right] \\
 &= \frac{V}{jn\omega_0 T} (2e^{jn\pi/2} - 2e^{-jn\pi/2} + e^{-jn\pi} - e^{+jn\pi}) \\
 &= \frac{V}{n\omega_0 T} \left[ 4 \sin \frac{n\pi}{2} - 2 \sin(n\pi) \right] \\
 &= 0 \quad \text{for } n \text{ even} \\
 &= \frac{2V}{n\pi} \sin \frac{n\pi}{2} \quad \text{for } n \text{ odd}
 \end{aligned}$$

$c_0$  corresponds to the average value of the waveform. This term can be evaluated using the original equation for  $c_n$ . Therefore,

$$\begin{aligned}
 c_0 &= \frac{1}{T} \int_{-T/2}^{T/2} v(t) dt \\
 &= \frac{1}{T} \left[ \int_{-T/2}^{-T/4} -V dt + \int_{-T/4}^{T/4} V dt + \int_{T/4}^{T/2} -V dt \right] \\
 &= \frac{1}{T} \left[ -\frac{VT}{4} + \frac{VT}{2} - \frac{VT}{4} \right] = 0
 \end{aligned}$$

Therefore,

$$v(t) = \sum_{\substack{n=-\infty \\ n \neq 0 \\ n \text{ odd}}}^{\infty} \frac{2V}{n\pi} \sin \frac{n\pi}{2} e^{jn\omega_0 t}$$

This equation can be written as

$$\begin{aligned}
 v(t) &= \sum_{\substack{n=1 \\ n \text{ odd}}}^{\infty} \frac{2V}{n\pi} \sin \frac{n\pi}{2} e^{jn\omega_0 t} + \sum_{\substack{n=-1 \\ n \text{ odd}}}^{-\infty} \frac{2V}{n\pi} \sin \frac{n\pi}{2} e^{jn\omega_0 t} \\
 &= \sum_{\substack{n=1 \\ n \text{ odd}}}^{\infty} \left( \frac{2V}{n\pi} \sin \frac{n\pi}{2} \right) e^{jn\omega_0 t} + \left( \frac{2V}{n\pi} \sin \frac{n\pi}{2} \right)^* e^{-jn\omega_0 t}
 \end{aligned}$$

Since a number plus its complex conjugate is equal to two times the real part of the number,  $v(t)$  can be written as

$$v(t) = \sum_{\substack{n=1 \\ n \text{ odd}}}^{\infty} 2 \operatorname{Re} \left( \frac{2V}{n\pi} \sin \frac{n\pi}{2} e^{jn\omega_0 t} \right)$$

or

$$v(t) = \sum_{\substack{n=1 \\ n \text{ odd}}}^{\infty} \frac{4V}{n\pi} \sin \frac{n\pi}{2} \cos n\omega_0 t$$

Note that this same result could have been obtained by integrating over the interval  $-T/4$  to  $3T/4$ .

## Learning Assessments

**E15.1** Find the Fourier coefficients for the waveform in Fig. E15.1.

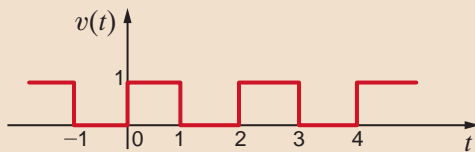


Figure E15.1

**ANSWER:**

$$\mathbf{c}_n = \frac{1 - e^{-jn\pi}}{j2\pi n}; \mathbf{c}_0 = \frac{1}{2}.$$

**E15.2** Find the Fourier coefficients for the waveform in Fig. E15.2.

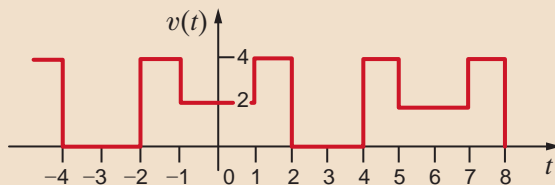


Figure E15.2

**ANSWER:**

$$\mathbf{c}_n = \frac{2}{n\pi} \left( 2 \sin \frac{2\pi n}{3} - \sin \frac{n\pi}{3} \right); \mathbf{c}_0 = 2.$$

**E15.3** Find the exponential Fourier series for the waveform shown in Fig. E15.3.

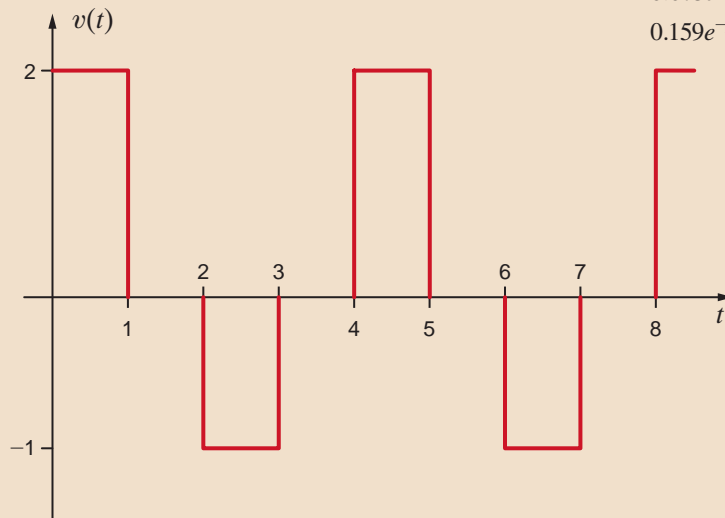


Figure E15.3

**ANSWER:**

$$\begin{aligned} v(t) = & \dots + 0.225e^{j135^\circ} e^{-j1.5\pi t} + 0.159e^{j90^\circ} e^{-j\pi t} + \\ & 0.675e^{j45^\circ} e^{-j0.5\pi t} + 0.25 + 0.675e^{-j45^\circ} e^{j0.5\pi t} + \\ & 0.159e^{-j90^\circ} e^{j\pi t} + 0.225e^{-j135^\circ} e^{j1.5\pi t} + \dots \text{V.} \end{aligned}$$

**TRIGONOMETRIC FOURIER SERIES** Let us now examine another form of the Fourier series. Since

$$2\mathbf{c}_n = a_n - jb_n \quad \mathbf{15.10}$$

we will examine this quantity  $2\mathbf{c}_n$  and separate it into its real and imaginary parts. Using Eq. (15.9), we find that

$$2\mathbf{c}_n = \frac{2}{T_0} \int_{t_1}^{t_1+T_0} f(t) e^{-jn\omega_0 t} dt \quad \mathbf{15.11}$$

Using Euler's identity, we can write this equation in the form

$$\begin{aligned} 2\mathbf{c}_n &= \frac{2}{T_0} \int_{t_1}^{t_1+T_0} f(t) (\cos n\omega_0 t - j \sin n\omega_0 t) dt \\ &= \frac{2}{T_0} \int_{t_1}^{t_1+T_0} f(t) \cos n\omega_0 t dt - j \frac{2}{T_0} \int_{t_1}^{t_1+T_0} f(t) \sin n\omega_0 t dt \end{aligned}$$

From Eq. (15.10) we note then that

$$a_n = \frac{2}{T_0} \int_{t_1}^{t_1+T_0} f(t) \cos n\omega_0 t \, dt \quad 15.12$$

$$b_n = \frac{2}{T_0} \int_{t_1}^{t_1+T_0} f(t) \sin n\omega_0 t \, dt \quad 15.13$$

These are the coefficients of the Fourier series described by Eq. (15.6), which we call the *trigonometric Fourier series*. These equations are derived directly in most textbooks using the orthogonality properties of the cosine and sine functions. Note that we can now evaluate  $c_n$ ,  $a_n$ ,  $b_n$ , and since

$$2c_n = D_n / \theta_n \quad 15.14$$

we can derive the coefficients for the *cosine Fourier series* described by Eq. (15.1). This form of the Fourier series is particularly useful because it allows us to represent each harmonic of the function as a phasor.

From Eq. (15.9) we note that  $c_0$ , which is written as  $a_0$ , is

$$a_0 = \frac{1}{T} \int_{t_1}^{t_1+T_0} f(t) \, dt \quad 15.15$$

This is the average value of the signal  $f(t)$  and can often be evaluated directly from the waveform.

**SYMMETRY AND THE TRIGONOMETRIC FOURIER SERIES** If a signal exhibits certain symmetrical properties, we can take advantage of these properties to simplify the calculations of the Fourier coefficients. There are three types of symmetry: (1) even-function symmetry, (2) odd-function symmetry, and (3) half-wave symmetry.

**Even-Function Symmetry** A function is said to be even if

$$f(t) = f(-t) \quad 15.16$$

An even function is symmetrical about the vertical axis, and a notable example is the function  $\cos n\omega_0 t$ . Note that the waveform in Fig. 15.3 also exhibits even-function symmetry. Let us now determine the expressions for the Fourier coefficients if the function satisfies Eq. (15.16).

If we let  $t_1 = -T_0/2$  in Eq. (15.15), we obtain

$$a_0 = \frac{1}{T_0} \int_{-T_0/2}^{T_0/2} f(t) \, dt$$

which can be written as

$$a_0 = \frac{1}{T_0} \int_{-T_0/2}^0 f(t) \, dt + \frac{1}{T_0} \int_0^{T_0/2} f(t) \, dt$$

If we now change the variable on the first integral (i.e., let  $t = -x$ ), then  $f(-x) = f(x)$ ,  $dt = -dx$ , and the range of integration is from  $x = T_0/2$  to 0. Therefore, the preceding equation becomes

$$\begin{aligned} a_0 &= \frac{1}{T_0} \int_{T_0/2}^0 f(x)(-dx) + \frac{1}{T_0} \int_0^{T_0/2} f(t) \, dt \\ &= \frac{1}{T_0} \int_0^{T_0/2} f(x) \, dx + \frac{1}{T_0} \int_0^{T_0/2} f(t) \, dt \\ &= \frac{2}{T_0} \int_0^{T_0/2} f(t) \, dt \end{aligned} \quad 15.17$$

The other Fourier coefficients are derived in a similar manner. The  $a_n$  coefficient can be written

$$a_n = \frac{2}{T_0} \int_{-T_0/2}^0 f(t) \cos n\omega_0 t \, dt + \frac{2}{T_0} \int_0^{T_0/2} f(t) \cos n\omega_0 t \, dt$$

Employing the change of variable that led to Eq. (15.17), we can express the preceding equation as

$$\begin{aligned} a_n &= \frac{2}{T_0} \int_{T_0/2}^0 f(x) \cos(-n\omega_0 x)(-dx) + \frac{2}{T_0} \int_0^{T_0/2} f(t) \cos n\omega_0 t \, dt \\ &= \frac{2}{T_0} \int_0^{T_0/2} f(x) \cos n\omega_0 x \, dx + \frac{2}{T_0} \int_0^{T_0/2} f(t) \cos n\omega_0 t \, dt \end{aligned}$$

$$a_n = \frac{4}{T_0} \int_0^{T_0/2} f(t) \cos n\omega_0 t \, dt \quad \mathbf{15.18}$$

Once again, following the preceding development, we can write the equation for the  $b_n$  coefficient as

$$b_n = \frac{2}{T_0} \int_{-T_0/2}^0 f(t) \sin n\omega_0 t \, dt + \int_0^{T_0/2} f(t) \sin n\omega_0 t \, dt$$

The variable change employed previously yields

$$\begin{aligned} b_n &= \frac{2}{T_0} \int_{T_0/2}^0 f(x) \sin(-n\omega_0 x)(-dx) + \frac{2}{T_0} \int_0^{T_0/2} f(t) \sin n\omega_0 t \, dt \\ &= \frac{-2}{T_0} \int_0^{T_0/2} f(x) \sin n\omega_0 x \, dx + \frac{2}{T_0} \int_0^{T_0/2} f(t) \sin n\omega_0 t \, dt \end{aligned}$$

$$b_n = 0 \quad \mathbf{15.19}$$

The preceding analysis indicates that the Fourier series for an even periodic function consists only of a constant term and cosine terms. Therefore, if  $f(t)$  is even,  $b_n = 0$  and from Eqs. (15.10) and (15.14),  $c_n$  are real and  $\theta_n$  are multiples of  $180^\circ$ .

**Odd-Function Symmetry** A function is said to be odd if

$$f(t) = -f(-t) \quad \mathbf{15.20}$$

An example of an odd function is  $\sin n\omega_0 t$ . Another example is the waveform in Fig. 15.4a. Following the mathematical development that led to Eqs. (15.17) to (15.19), we can show that for an odd function the Fourier coefficients are

$$a_0 = 0 \quad \mathbf{15.21}$$

$$a_n = 0 \quad \text{for all } n > 0 \quad \mathbf{15.22}$$

$$b_n = \frac{4}{T_0} \int_0^{T_0/2} f(t) \sin n\omega_0 t \, dt \quad \mathbf{15.23}$$

Therefore, if  $f(t)$  is odd,  $a_n = 0$  and, from Eqs. (15.10) and (15.14),  $c_n$  are pure imaginary and  $\theta_n$  are odd multiples of  $90^\circ$ .

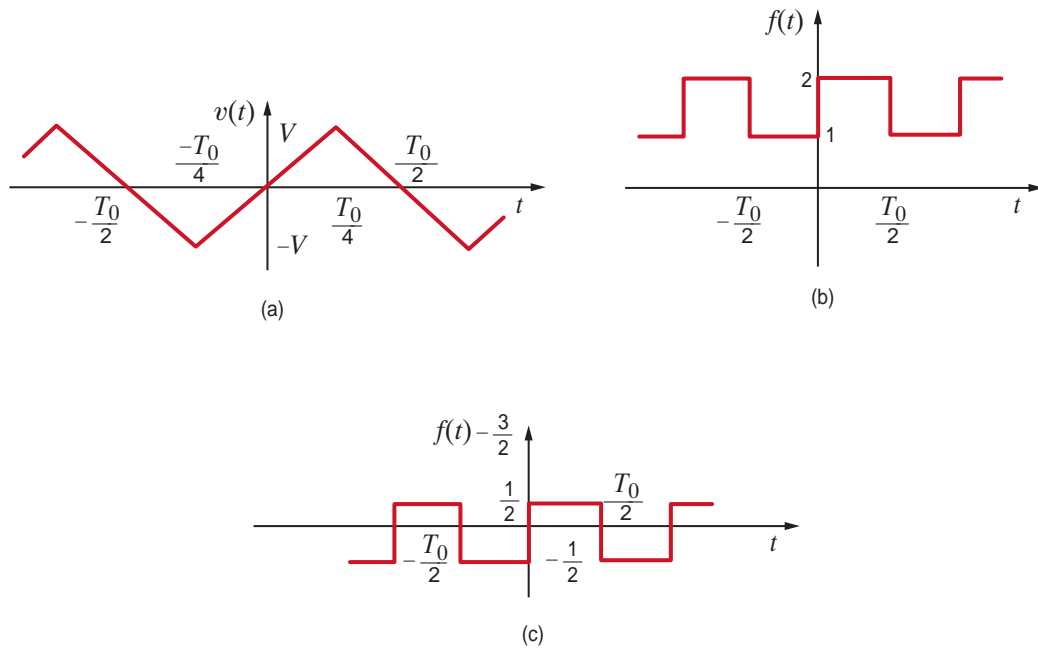


Figure 15.4

Three waveforms; (a) and (c) possess half-wave symmetry.

**Half-Wave Symmetry** A function is said to possess *half-wave symmetry* if

$$f(t) = -f\left(t - \frac{T_0}{2}\right) \quad 15.24$$

Basically, this equation states that each half-cycle is an inverted version of the adjacent half-cycle; that is, if the waveform from  $-T_0/2$  to 0 is inverted, it is identical to the waveform from 0 to  $T_0/2$ . The waveforms shown in Figs. 15.4a and c possess half-wave symmetry.

Once again we can derive the expressions for the Fourier coefficients in this case by repeating the mathematical development that led to the equations for even-function symmetry using the change of variable  $t = x + T_0/2$  and Eq. (15.24). The results of this development are the following equations:

$$a_0 = 0 \quad 15.25$$

$$a_n = b_n = 0 \quad \text{for } n \text{ even} \quad 15.26$$

$$a_n = \frac{4}{T_0} \int_0^{T_0/2} f(t) \cos n\omega_0 t \, dt \quad \text{for } n \text{ odd} \quad 15.27$$

$$b_n = \frac{4}{T_0} \int_0^{T_0/2} f(t) \sin n\omega_0 t \, dt \quad \text{for } n \text{ odd} \quad 15.28$$

The following equations are often useful in the evaluation of the trigonometric Fourier series coefficients:

$$\begin{aligned} \int \sin ax \, dx &= -\frac{1}{a} \cos ax \\ \int \cos ax \, dx &= \frac{1}{a} \sin ax \\ \int x \sin ax \, dx &= \frac{1}{a^2} \sin ax - \frac{1}{a} x \cos ax \\ \int x \cos ax \, dx &= \frac{1}{a^2} \cos ax + \frac{1}{a} x \sin ax \end{aligned} \quad 15.29$$

**EXAMPLE****15.2 SOLUTION**

We wish to find the trigonometric Fourier series for the periodic signal in Fig. 15.3.

The waveform exhibits even-function symmetry and therefore

$$\begin{aligned} a_0 &= 0 \\ b_n &= 0 \quad \text{for all } n \end{aligned}$$

The waveform exhibits half-wave symmetry and therefore

$$a_n = 0 \quad \text{for } n \text{ even}$$

Hence,

$$\begin{aligned} a_n &= \frac{4}{T_0} \int_0^{T/2} f(t) \cos n\omega_0 t \, dt \quad \text{for } n \text{ odd} \\ &= \frac{4}{T} \left( \int_0^{T/4} V \cos n\omega_0 t \, dt - \int_{T/4}^{T/2} V \cos n\omega_0 t \, dt \right) \\ &= \frac{4V}{n\omega_0 T} \left( \sin n\omega_0 t \Big|_0^{T/4} - \sin n\omega_0 t \Big|_{T/4}^{T/2} \right) \\ &= \frac{4V}{n\omega_0 T} \left( \sin \frac{n\pi}{2} - \sin n\pi + \sin \frac{n\pi}{2} \right) \\ &= \frac{8V}{n2\pi} \sin \frac{n\pi}{2} \quad \text{for } n \text{ odd} \\ &= \frac{4V}{n\pi} \sin \frac{n\pi}{2} \quad \text{for } n \text{ odd} \end{aligned}$$

The reader should compare this result with that obtained in Example 15.1.

**EXAMPLE****15.3 SOLUTION**

Let us determine the trigonometric Fourier series expansion for the waveform shown in Fig. 15.4a.

The function not only exhibits odd-function symmetry, but it possesses half-wave symmetry as well. Therefore, it is necessary to determine only the coefficients  $b_n$  for  $n$  odd. Note that

$$v(t) = \begin{cases} \frac{4Vt}{T_0} & 0 \leq t \leq T_0/4 \\ 2V - \frac{4Vt}{T_0} & T_0/4 < t \leq T_0/2 \end{cases}$$

The  $b_n$  coefficients are then

$$b_n = \frac{4}{T_0} \int_0^{T_0/4} \frac{4Vt}{T_0} \sin n\omega_0 t \, dt + \frac{4}{T_0} \int_{T_0/4}^{T_0/2} \left( 2V - \frac{4Vt}{T_0} \right) \sin n\omega_0 t \, dt$$

The evaluation of these integrals is tedious but straightforward and yields

$$b_n = \frac{8V}{n^2\pi^2} \sin \frac{n\pi}{2} \quad \text{for } n \text{ odd}$$

Hence, the Fourier series expansion is

$$v(t) = \sum_{\substack{n=1 \\ n \text{ odd}}}^{\infty} \frac{8V}{n^2\pi^2} \sin \frac{n\pi}{2} \sin n\omega_0 t$$



We wish to find the trigonometric Fourier series expansion of the waveform in Fig. 15.4b.

Note that this waveform has an average value of  $3/2$ . Therefore, instead of determining the Fourier series expansion of  $f(t)$ , we will determine the Fourier series for  $f(t) - 3/2$ , which is the waveform shown in Fig. 15.4c. The latter waveform possesses half-wave symmetry. The function is also odd and therefore

$$\begin{aligned} b_n &= \frac{4}{T_0} \int_0^{T_0/2} \frac{1}{2} \sin n\omega_0 t \, dt \\ &= \frac{2}{T_0} \left( \frac{-1}{n\omega_0} \cos n\omega_0 t \Big|_0^{T_0/2} \right) \\ &= \frac{-2}{n\omega_0 T_0} (\cos n\pi - 1) \\ &= \frac{2}{n\pi} \quad \text{for } n \text{ odd} \end{aligned}$$

Therefore, the Fourier series expansion for  $f(t) - 3/2$  is

$$f(t) - \frac{3}{2} = \sum_{\substack{n=1 \\ n \text{ odd}}}^{\infty} \frac{2}{n\pi} \sin n\omega_0 t$$

or

$$f(t) = \frac{3}{2} + \sum_{\substack{n=1 \\ n \text{ odd}}}^{\infty} \frac{2}{n\pi} \sin n\omega_0 t$$

## EXAMPLE

### 15.4

#### SOLUTION

## Learning Assessments

**E15.4** Determine the type of symmetry exhibited by the waveform in Figs. E15.2 and E15.4.

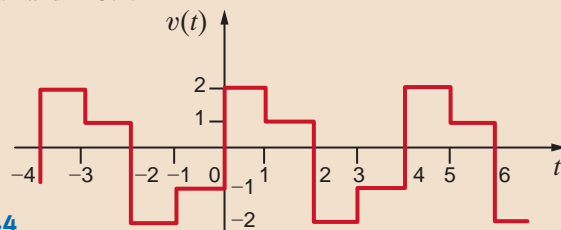


Figure E15.4

**ANSWER:** Figure E15.2, even symmetry; Fig. E15.4, half-wave symmetry.

**E15.5** Find the trigonometric Fourier series for the voltage waveform in Fig. E15.2.

**ANSWER:**

$$v(t) = 2 + \sum_{n=1}^{\infty} \frac{4}{n\pi} \left( 2 \sin \frac{2\pi n}{3} - \sin \frac{n\pi}{3} \right) \cos \frac{n\pi}{3} t.$$

**E15.6** Find the trigonometric Fourier series for the voltage waveform in Fig. E15.4.

**ANSWER:**

$$\begin{aligned} v(t) &= \sum_{\substack{n=1 \\ n \text{ odd}}}^{\infty} \frac{2}{n\pi} \sin \frac{n\pi}{2} \cos \frac{n\pi}{2} t \\ &\quad + \frac{2}{n\pi} (2 - \cos n\pi) \sin \frac{n\pi}{2} t. \end{aligned}$$

**E15.7** Determine the trigonometric Fourier series for the waveform shown in Fig. E15.3.

**ANSWER:**

$$\begin{aligned} v(t) &= 0.25 + 0.955 \cos(0.5\pi t) + 0.955 \sin(0.5\pi t) + \\ &\quad 0.318 \sin(\pi t) - 0.318 \cos(1.5\pi t) + 0.318 \sin(1.5\pi t) + \dots \text{ V.} \end{aligned}$$

**TIME-SHIFTING** Let us now examine the effect of time-shifting a periodic waveform  $f(t)$  defined by the equation

$$f(t) = \sum_{n=-\infty}^{\infty} \mathbf{c}_n e^{jn\omega_0 t}$$

Note that

$$f(t - t_0) = \sum_{n=-\infty}^{\infty} \mathbf{c}_n e^{jn\omega_0(t-t_0)}$$

$$f(t - t_0) = \sum_{n=-\infty}^{\infty} (\mathbf{c}_n e^{-jn\omega_0 t_0}) e^{jn\omega_0 t} \quad \mathbf{15.30}$$

Since  $e^{-jn\omega_0 t_0}$  corresponds to a phase shift, the Fourier coefficients of the time-shifted function are the Fourier coefficients of the original function, with the angle shifted by an amount directly proportional to frequency. Therefore, time shift in the time domain corresponds to phase shift in the frequency domain.

**EXAMPLE**  
**15.5 SOLUTION**

Let us time-delay the waveform in Fig. 15.3 by a quarter period and compute the Fourier series.

The waveform in Fig. 15.3 time delayed by  $T_0/4$  is shown in Fig. 15.5. Since the time delay is  $T_0/4$ ,

$$n\omega_0 t_d = n \frac{2\pi}{T_0} \frac{T_0}{4} = n \frac{\pi}{2} = n 90^\circ$$

Therefore, using Eq. (15.30) and the results of Example 15.1, the Fourier coefficients for the time-shifted waveform are

$$\mathbf{c}_n = \frac{2V}{n\pi} \sin \frac{n\pi}{2} \angle -n 90^\circ \quad n \text{ odd}$$

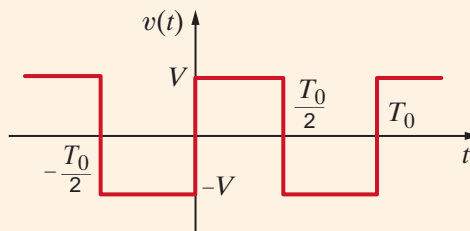
and therefore,

$$v(t) = \sum_{\substack{n=1 \\ n \text{ odd}}}^{\infty} \frac{4V}{n\pi} \sin \frac{n\pi}{2} \cos(n\omega_0 t - n 90^\circ)$$

If we compute the Fourier coefficients for the time-shifted waveform in Fig. 15.5, we obtain

$$\begin{aligned} \mathbf{c}_n &= \frac{1}{T_0} \int_{-T_0/2}^{T_0/2} f(t) e^{-jn\omega_0 t} dt \\ &= \frac{1}{T_0} \int_{-T_0/2}^0 -V e^{-jn\omega_0 t} dt + \frac{1}{T_0} \int_0^{T_0/2} V e^{-jn\omega_0 t} dt \\ &= \frac{2V}{jn\pi} \quad \text{for } n \text{ odd} \end{aligned}$$

**Figure 15.5**  
Waveform in Fig. 15.3 time-shifted by  $T_0/4$ .



Therefore,

$$\mathbf{c}_n = \frac{2V}{n\pi} \angle -90^\circ \quad n \text{ odd}$$

Since  $n$  is odd, we can show that this expression is equivalent to the one obtained earlier.

In general, we can compute the phase shift in degrees using the expression

$$\text{phase shift(deg)} = \omega_0 t_d = (360^\circ) \frac{t_d}{T_0} \quad 15.31$$

so that a time shift of one-quarter period corresponds to a  $90^\circ$  phase shift.

As another interesting facet of the time shift, consider a function  $f_1(t)$  that is nonzero in the interval  $0 \leq t \leq T_0/2$  and is zero in the interval  $T_0/2 < t \leq T_0$ . For purposes of illustration, let us assume that  $f_1(t)$  is the triangular waveform shown in Fig. 15.6a.  $f_1(t - T_0/2)$  is then shown in Fig. 15.6b. Then the function  $f(t)$  defined as

$$f(t) = f_1(t) - f_1\left(t - \frac{T_0}{2}\right) \quad 15.32$$

is shown in Fig. 15.6c. Note that  $f(t)$  has half-wave symmetry. In addition, note that if

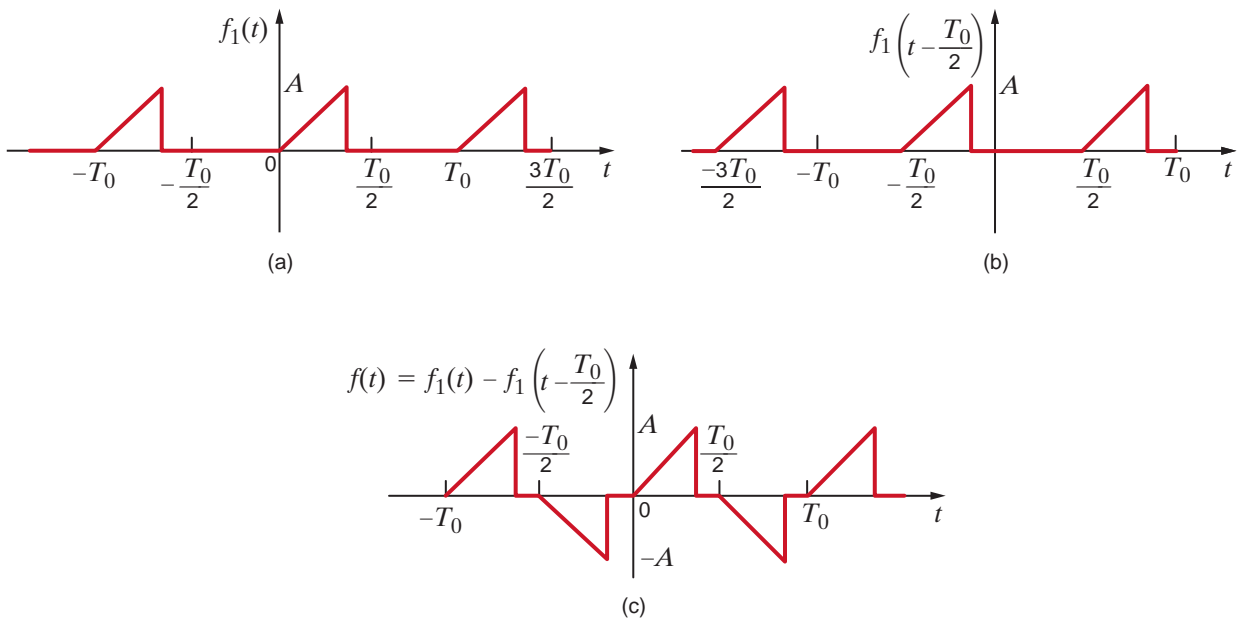
$$f_1(t) = \sum_{n=-\infty}^{\infty} \mathbf{c}_n e^{-jn\omega_0 t}$$

then

$$\begin{aligned} f(t) = f_1(t) - f_1\left(t - \frac{T_0}{2}\right) &= \sum_{n=-\infty}^{\infty} \mathbf{c}_n (1 - e^{-jn\pi}) e^{jn\omega_0 t} \\ &= \begin{cases} \sum_{n=-\infty}^{\infty} 2\mathbf{c}_n e^{jn\omega_0 t} & n \text{ odd} \\ 0 & n \text{ even} \end{cases} \end{aligned} \quad 15.33$$

**Figure 15.6**

Waveforms that illustrate the generation of half-wave symmetry.



Therefore, we see that any function with half-wave symmetry can be expressed in the form of Eq. (15.32), where the Fourier series is defined by Eq. (15.33), and  $c_n$  is the Fourier coefficient for  $f_1(t)$ .

## Learning Assessment

**E15.8** If the waveform in Fig. E15.1 is time-delayed 1 s, we obtain the waveform in Fig. E15.8. Compute the exponential Fourier coefficients for the waveform in Fig. E15.8 and show that they differ from the coefficients for the waveform in Fig. E15.1 by an angle  $n(180^\circ)$ .

**ANSWER:**  $c_0 = \frac{1}{2}$ ;

$$c_n = -\left(\frac{1 - e^{-jn\pi}}{j2\pi n}\right).$$

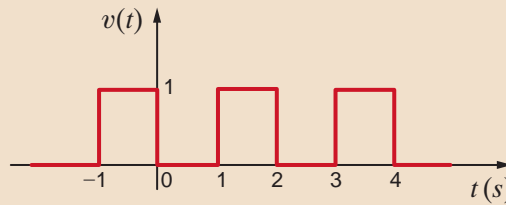
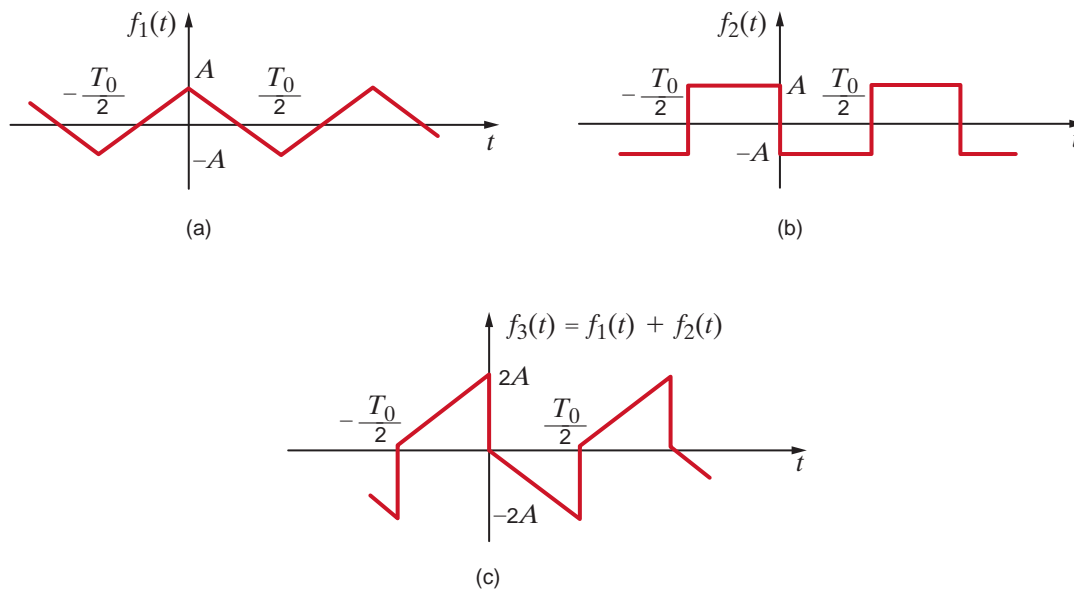


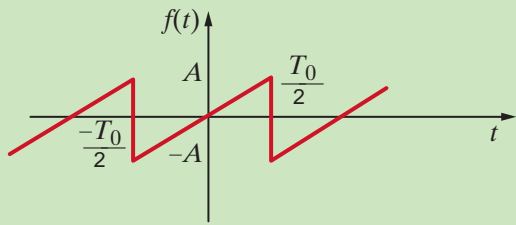
Figure E15.8

**WAVEFORM GENERATION** The magnitude of the harmonics in a Fourier series is independent of the time scale for a given waveshape. Therefore, the equations for a variety of waveforms can be given in tabular form without expressing a specific time scale. Table 15.1 is a set of commonly occurring periodic waves where the advantage of symmetry has been used to simplify the coefficients. These waveforms can be used to generate other waveforms. The level of a wave can be adjusted by changing the average value component; the time can be shifted by adjusting the angle of the harmonics; and two waveforms can be added to produce a third waveform. For example, the waveforms in Figs. 15.7a and b can be added to produce the waveform in Fig. 15.7c.

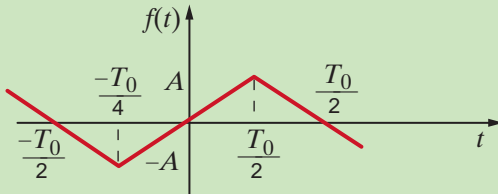
Figure 15.7

Example of waveform generation.

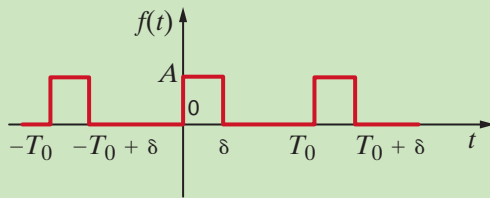


**TABLE 15.1** Fourier series for some common waveforms

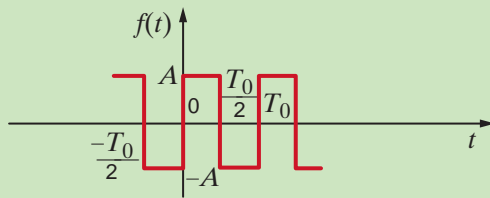
$$f(t) = \sum_{n=1}^{\infty} (-1)^{n+1} \frac{2A}{n\pi} \sin n\omega_0 t$$



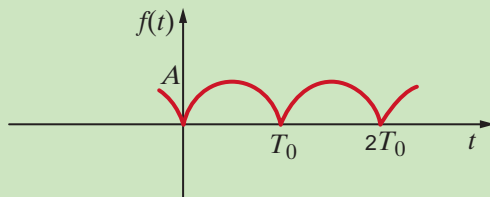
$$f(t) = \sum_{\substack{n=1 \\ n \text{ odd}}}^{\infty} \frac{8A}{n^2 \pi^2} \sin \frac{n\pi}{2} \sin n\omega_0 t$$



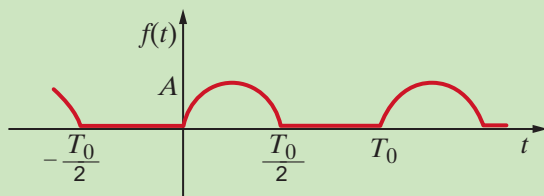
$$f(t) = \sum_{n=-\infty}^{\infty} \frac{A}{n\pi} \sin \frac{n\pi\delta}{T_0} e^{jn\omega_0[t-(\delta/2)]}$$



$$f(t) = \sum_{\substack{n=1 \\ n \text{ odd}}}^{\infty} \frac{4A}{n\pi} \sin n\omega_0 t$$



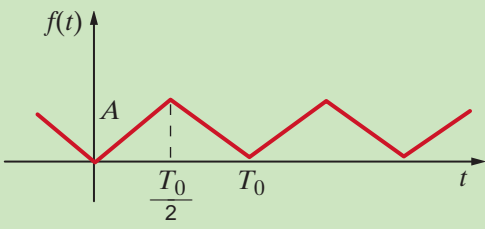
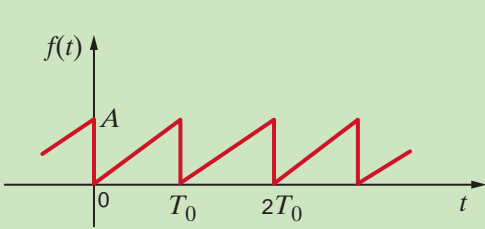
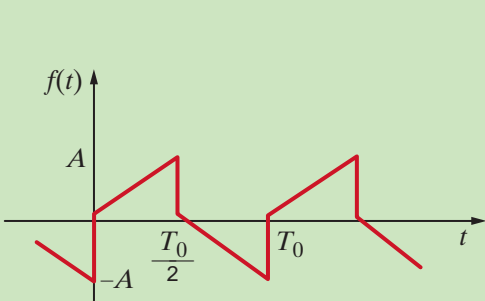
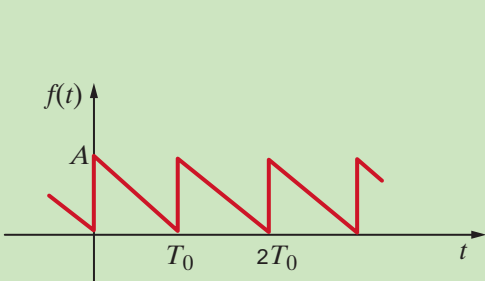
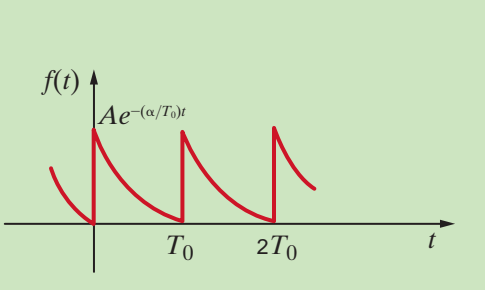
$$f(t) = \frac{2A}{\pi} + \sum_{n=1}^{\infty} \frac{4A}{\pi(1-4n^2)} \cos n\omega_0 t$$



$$f(t) = \frac{A}{\pi} + \frac{A}{2} \sin \omega_0 t + \sum_{\substack{n=2 \\ n \text{ even}}}^{\infty} \frac{2A}{\pi(1-n^2)} \cos n\omega_0 t$$

(Continues on the next page)

TABLE 15.1 (Continued)

	$f(t) = \frac{A}{2} + \sum_{\substack{n=-\infty \\ n \neq 0 \\ n \text{ odd}}}^{\infty} \frac{-2A}{n^2 \pi^2} e^{jn\omega_0 t}$
	$f(t) = \frac{A}{2} + \sum_{n=1}^{\infty} \frac{-A}{n\pi} \sin n\omega_0 t$
	$f(t) = \sum_{n=1}^{\infty} \frac{-4A}{\pi^2 n^2} \cos n\omega_0 t + \frac{2A}{\pi n} \sin n\omega_0 t$
	$f(t) = \frac{A}{2} + \sum_{n=1}^{\infty} \frac{A}{\pi n} \sin n\omega_0 t$
	$f(t) = \sum_{n=-\infty}^{\infty} \frac{A(1 - e^{-\alpha})}{\alpha + j2\pi n} e^{jn\omega_0 t}$

## Learning Assessment

**E15.9** Two periodic waveforms are shown in Fig. E15.9. Compute the exponential Fourier series for each waveform, and then add the results to obtain the Fourier series for the waveform in Fig. E15.2.

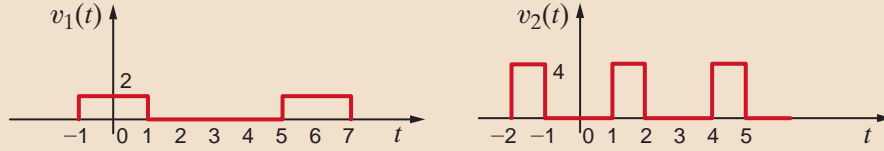


Figure E15.9

**ANSWER:**

$$v_1(t) = \frac{2}{3} + \sum_{\substack{n=-\infty \\ n \neq 0}}^{\infty} \frac{2}{n\pi} \sin \frac{n\pi}{3} e^{jn\omega_0 t};$$

$$v_2(t) = \frac{4}{3} + \sum_{n=-\infty}^{\infty} -\frac{4}{n\pi} \left( \sin \frac{n\pi}{3} - \sin \frac{2n\pi}{3} \right) e^{jn\omega_0 t}.$$

**FREQUENCY SPECTRUM** The *frequency spectrum* of the function  $f(t)$  expressed as a Fourier series consists of a plot of the amplitude of the harmonics versus frequency, which we call the *amplitude spectrum*, and a plot of the phase of the harmonics versus frequency, which we call the *phase spectrum*. Since the frequency components are discrete, the spectra are called *line spectra*. Such spectra illustrate the frequency content of the signal. Plots of the amplitude and phase spectra are based on Eqs. (15.1), (15.3), and (15.7) and represent the amplitude and phase of the signal at specific frequencies.

The Fourier series for the triangular-type waveform shown in Fig. 15.7c with  $A = 5$  is given by the equation

$$v(t) = \sum_{\substack{n=1 \\ n \text{ odd}}}^{\infty} \left( \frac{20}{n\pi} \sin n\omega_0 t - \frac{40}{n^2\pi^2} \cos n\omega_0 t \right)$$

We wish to plot the first four terms of the amplitude and phase spectra for this signal.

Since  $D_n \angle \theta_n = a_n - jb_n$ , the first four terms for this signal are

$$D_1 \angle \theta_1 = -\frac{40}{\pi^2} - j \frac{20}{\pi} = 7.5 \angle -122^\circ$$

$$D_3 \angle \theta_3 = -\frac{40}{9\pi^2} - j \frac{20}{3\pi} = 2.2 \angle -102^\circ$$

$$D_5 \angle \theta_5 = -\frac{40}{25\pi^2} - j \frac{20}{5\pi} = 1.3 \angle -97^\circ$$

$$D_7 \angle \theta_7 = -\frac{40}{49\pi^2} - j \frac{20}{7\pi} = 0.91 \angle -95^\circ$$

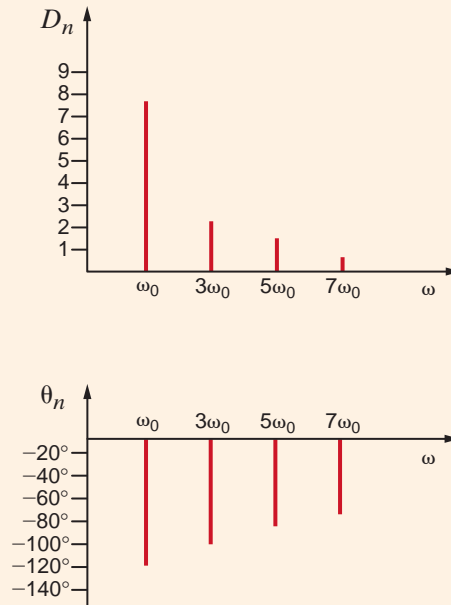
Therefore, the plots of the amplitude and phase versus  $\omega$  are as shown in Fig. 15.8.

### EXAMPLE 15.6

**SOLUTION**

**Figure 15.8**

Amplitude and phase spectra.



## Learning Assessments

**E15.10** Determine the trigonometric Fourier series for the voltage waveform in Fig. E15.10 and plot the first four terms of the amplitude and phase spectra for this signal.

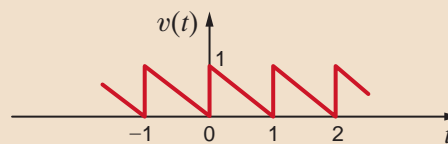
**ANSWER:**  $a_0 = 1/2$ ;

$$D_1 = -j(1/\pi);$$

$$D_2 = -j(1/2\pi);$$

$$D_3 = -j(1/3\pi);$$

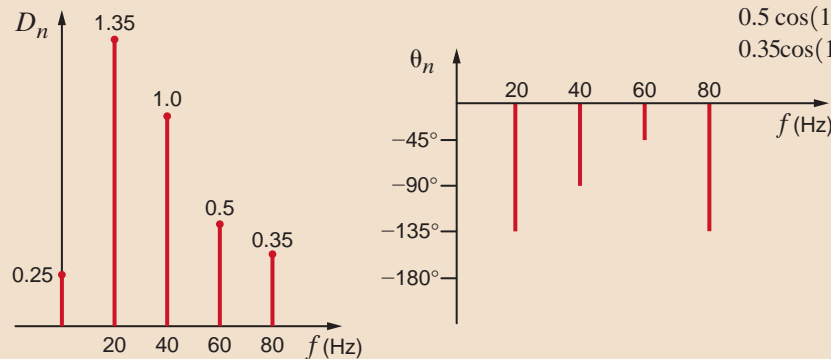
$$D_4 = -j(1/4\pi).$$



**Figure E15.10**

**E15.11** The discrete line spectrum for a periodic function is shown in Fig. E15.11. Determine the expression for  $f(t)$ .

**ANSWER:**  $f(t) = 0.25 + 1.35 \cos(40\pi t - 135^\circ) + \cos(80\pi t - 90^\circ) + 0.5 \cos(120\pi t - 45^\circ) + 0.35 \cos(160\pi t - 90^\circ)$ .



**Figure E15.11**

**STEADY-STATE NETWORK RESPONSE** If a periodic signal is applied to a network, the steady-state voltage or current response at some point in the circuit can be found in the following manner. First, we represent the periodic forcing function by a Fourier series. If the input forcing function for a network is a voltage, the input can be expressed in the form

$$v(t) = v_0 + v_1(t) + v_2(t) + \dots$$



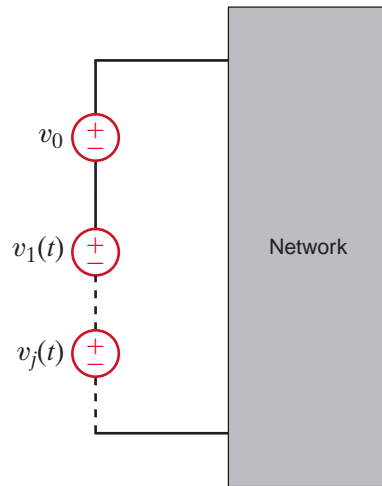


Figure 15.9

Network with a periodic voltage forcing function.

and therefore represented in the time domain as shown in Fig. 15.9. Each source has its own amplitude and frequency. Next we determine the response due to each component of the input Fourier series; that is, we use phasor analysis in the frequency domain to determine the network response due to each source. The network response due to each source in the frequency domain is then transformed to the time domain. Finally, we add the time-domain solutions due to each source using the Principle of Superposition to obtain the Fourier series for the total *steady-state* network response.

**AVERAGE POWER** We have shown that when a linear network is forced with a nonsinusoidal periodic signal, voltages and currents throughout the network are of the form

$$v(t) = V_{\text{DC}} + \sum_{n=1}^{\infty} V_n \cos(n\omega_0 t - \theta_{v_n})$$

and

$$i(t) = I_{\text{DC}} + \sum_{n=1}^{\infty} I_n \cos(n\omega_0 t - \theta_{i_n})$$

If we employ the passive sign convention and assume that the voltage across an element and the current through it are given by the preceding equations, then from Eq. (9.6),

$$\begin{aligned} P &= \frac{1}{T} \int_{t_0}^{t_0+T} p(t) dt \\ &= \frac{1}{T} \int_{t_0}^{t_0+T} v(t)i(t) dt \end{aligned} \quad 15.34$$

Note that the integrand involves the product of two infinite series. However, the determination of the average power is actually easier than it appears. First, note that the product  $V_{\text{DC}}I_{\text{DC}}$  when integrated over a period and divided by the period is simply  $V_{\text{DC}}I_{\text{DC}}$ . Second, the product of  $V_{\text{DC}}$  and any harmonic of the current or  $I_{\text{DC}}$  and any harmonic of the voltage when integrated over a period yields zero. Third, the product of any two *different* harmonics of the voltage and the current when integrated over a period yields zero. Finally, nonzero terms result only from the products of voltage and current at the *same* frequency. Hence, using the mathematical development that follows Eq. (9.6), we find that

$$P = V_{\text{DC}}I_{\text{DC}} + \sum_{n=1}^{\infty} \frac{V_n I_n}{2} \cos(\theta_{v_n} - \theta_{i_n}) \quad 15.35$$

## EXAMPLE 15.7

We wish to determine the steady-state voltage  $v_o(t)$  in Fig. 15.10 if the input voltage  $v(t)$  is given by the expression

$$v(t) = \sum_{\substack{n=1 \\ n \text{ odd}}}^{\infty} \left( \frac{20}{n\pi} \sin 2nt - \frac{40}{n^2\pi^2} \cos 2nt \right) \text{ V}$$

### SOLUTION

Note that this source has no constant term, and therefore its dc value is zero. The amplitude and phase for the first four terms of this signal are given in Example 15.6, and therefore the signal  $v(t)$  can be written as

$$v(t) = 7.5 \cos(2t - 122^\circ) + 2.2 \cos(6t - 102^\circ) \\ + 1.3 \cos(10t - 97^\circ) + 0.91 \cos(14t - 95^\circ) + \dots$$

From the network we find that

$$\mathbf{I} = \frac{\mathbf{V}}{2 + \frac{2/j\omega}{2 + 1/j\omega}} = \frac{\mathbf{V}(1 + 2j\omega)}{4 + 4j\omega}$$

$$\mathbf{I}_1 = \frac{\mathbf{I}(1/j\omega)}{2 + 1/j\omega} = \frac{\mathbf{I}}{1 + 2j\omega}$$

$$\mathbf{V}_o = (1)\mathbf{I}_1 = 1 \cdot \frac{\mathbf{V}(1 + 2j\omega)}{4 + 4j\omega} \frac{1}{1 + 2j\omega} = \frac{\mathbf{V}}{4 + 4j\omega}$$

Therefore, since  $\omega_0 = 2$ ,

$$\mathbf{V}_o(n) = \frac{\mathbf{V}(n)}{4 + j8n}$$

The individual components of the output due to the components of the input source are then

$$\mathbf{V}_o(\omega_0) = \frac{7.5 \angle -122^\circ}{4 + j8} = 0.84 \angle -185.4^\circ \text{ V}$$

$$\mathbf{V}_o(3\omega_0) = \frac{2.2 \angle -102^\circ}{4 + j24} = 0.09 \angle -182.5^\circ \text{ V}$$

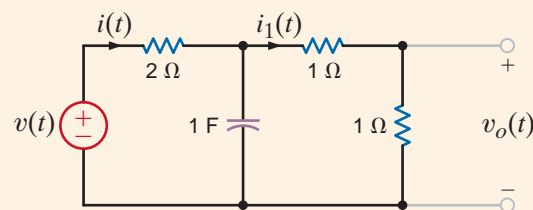
$$\mathbf{V}_o(5\omega_0) = \frac{1.3 \angle -97^\circ}{4 + j40} = 0.03 \angle -181.3^\circ \text{ V}$$

$$\mathbf{V}_o(7\omega_0) = \frac{0.91 \angle -95^\circ}{4 + j56} = 0.016 \angle -181^\circ \text{ V}$$

Hence, the steady-state output voltage  $v_o(t)$  can be written as

$$v_o(t) = 0.84 \cos(2t - 185.4^\circ) + 0.09 \cos(6t - 182.5^\circ) \\ + 0.03 \cos(10t - 181.3^\circ) + 0.016 \cos(14t - 181^\circ) + \dots \text{ V}$$

**Figure 15.10**  
RC circuit employed in  
Example 15.7.



In the network in Fig. 15.11,  $v(t) = 42 + 16 \cos(377t + 30^\circ) + 12 \cos(754t - 20^\circ)$  V. We wish to compute the current  $i(t)$  and determine the average power absorbed by the network.

## EXAMPLE 15.8

The capacitor acts as an open circuit to dc, and therefore  $I_{DC} = 0$ . At  $\omega = 377$  rad/s,

**SOLUTION**

$$\frac{1}{j\omega C} = \frac{1}{j(377)(100)(10)^{-6}} = -j26.53 \Omega$$

$$j\omega L = j(377)(20)10^{-3} = j7.54 \Omega$$

Hence,

$$\mathbf{I}_{377} = \frac{16 \angle 30^\circ}{16 + j7.54 - j26.53} = 0.64 \angle 79.88^\circ \text{ A}$$

At  $\omega = 754$  rad/s,

$$\frac{1}{j\omega C} = \frac{1}{j(754)(100)(10)^{-6}} = -j13.26 \Omega$$

$$j\omega L = j(754)(20)10^{-3} = j15.08 \Omega$$

Hence,

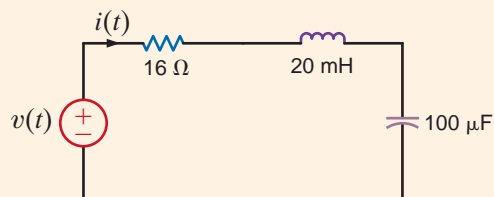
$$\mathbf{I}_{754} = \frac{12 \angle 20^\circ}{16 + j15.08 - j13.26} = 0.75 \angle -26.49^\circ \text{ A}$$

Therefore, the current  $i(t)$  is

$$\begin{aligned} i(t) &= 0.64 \cos(377t + 79.88^\circ) \\ &\quad + 0.75 \cos(754t + 26.49^\circ) \text{ A} \end{aligned}$$

and the average power absorbed by the network is

$$\begin{aligned} P &= (42)(0) + \frac{(16)(0.64)}{2} \cos(30^\circ - 79.88^\circ) \\ &\quad + \frac{(12)(0.75)}{2} \cos(-20^\circ + 26.49^\circ) \\ &= 7.77 \text{ W} \end{aligned}$$



**Figure 15.11**  
Network used in  
Example 15.8.

## Problem-Solving Strategy

### Steady-State Response to Periodic Forcing Functions

- Step 1.** Determine the Fourier series for the periodic forcing function, which is now expressed as a summation of harmonically related sinusoidal functions.
- Step 2.** Use phasor analysis to determine the network response due to each sinusoidal function acting alone.
- Step 3.** Use the Principle of Superposition to add the time domain solution from each source acting alone to determine the total steady-state network response.
- Step 4.** If you need to calculate the average power dissipated in a network element, determine the average power dissipated in that element due to each source acting alone and then sum these for the total power dissipation from the periodic forcing function.

## Learning Assessments

**E15.12** Determine the expression for the steady-state current  $i(t)$  in Fig. E15.12 if the input voltage  $v_S(t)$  is given by the expression

$$v_S(t) = \frac{20}{\pi} + \sum_{n=1}^{\infty} \frac{-40}{\pi(4n^2 - 1)} \cos 2nt \text{ V}$$

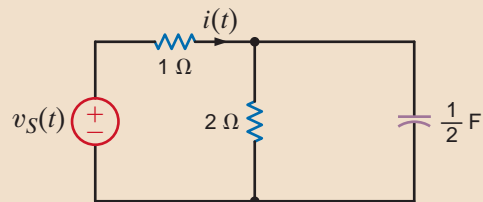


Figure E15.12

**ANSWER:**  $i(t) = 2.12$

$$+ \sum_{n=1}^{\infty} \frac{-40}{\pi(4n^2 - 1)} \frac{1}{A_n} \cos(2nt - \theta_n) \text{ A.}$$

**E15.13** At the input terminals of a network, the voltage  $v(t)$  and the current  $i(t)$  are given by the following expressions:

$$v(t) = 64 + 36 \cos(377t + 60^\circ) - 24 \cos(754t + 102^\circ) \text{ V}$$

$$i(t) = 1.8 \cos(377t + 45^\circ) + 1.2 \cos(754t + 100^\circ) \text{ A}$$

Find the average power absorbed by the network.

**ANSWER:**

$$P_{\text{ave}} = 16.91 \text{ W.}$$

**E15.14** Determine the first three terms of the steady-state current  $i(t)$  in Fig. E15.14 if the input voltage is given by

$$v(t) = \frac{30}{\pi} + 15 \sin 10t + \sum_{\substack{n=1 \\ n \text{ even}}}^{\infty} \frac{60}{\pi(1 - n^2)} \cos 10nt \text{ V.}$$

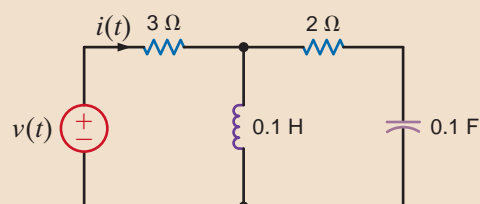


Figure E15.14

**ANSWER:**

$$i(t) = 3.18 + 4.12 \cos(10t + 106^\circ) + 1.45 \cos(20t + 166^\circ) \text{ A.}$$

**E15.15** Find the average power absorbed by the network in Fig. E15.15 if

$$v(t) = 20 + 5 \cos 377t + 3.5 \cos(754t - 20^\circ) \text{ V and}$$

$$i(t) = 1.2 \cos(377t - 30^\circ) + 0.8 \cos(754t + 45^\circ) \text{ A}$$

**ANSWER:**  $P = 3.19 \text{ W}$ .

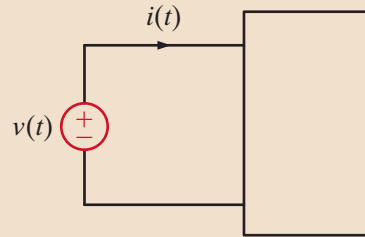


Figure E15.15

The preceding sections of this chapter have illustrated that the exponential Fourier series can be used to represent a periodic signal for all time. We will now consider a technique for representing an aperiodic signal for all values of time.

Suppose that an aperiodic signal  $f(t)$  is as shown in Fig. 15.12a. We now construct a new signal  $f_p(t)$  that is identical to  $f(t)$  in the interval  $-T/2$  to  $T/2$  but is *periodic* with period  $T$ , as shown in Fig. 15.12b. Since  $f_p(t)$  is periodic, it can be represented in the interval  $-\infty$  to  $\infty$  by an exponential Fourier series;

$$f_p(t) = \sum_{n=-\infty}^{\infty} \mathbf{c}_n e^{jn\omega_0 t} \quad 15.36$$

where

$$\mathbf{c}_n = \frac{1}{T} \int_{-T/2}^{T/2} f_p(t) e^{-jn\omega_0 t} dt \quad 15.37$$

and

$$\omega_0 = \frac{2\pi}{T} \quad 15.38$$

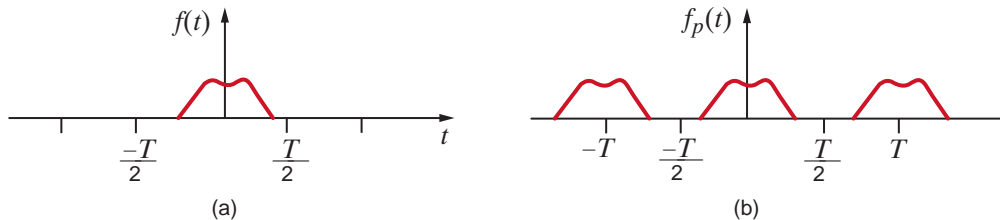


Figure 15.12

Aperiodic and periodic signals.

At this point we note that if we take the limit of the function  $f_p(t)$  as  $T \rightarrow \infty$ , the periodic signal in Fig. 15.12b approaches the aperiodic signal in Fig. 15.12a; that is, the repetitious signals centered at  $-T$  and  $+T$  in Fig. 15.12b are moved to infinity.

The line spectrum for the periodic signal exists at harmonic frequencies ( $n\omega_0$ ), and the incremental spacing between the harmonics is

$$\Delta\omega = (n+1)\omega_0 - n\omega_0 = \omega_0 = \frac{2\pi}{T} \quad 15.39$$

As  $T \rightarrow \infty$  the lines in the frequency spectrum for  $f_p(t)$  come closer and closer together,  $\Delta\omega$  approaches the differential  $d\omega$ , and  $n\omega_0$  can take on any value of  $\omega$ . Under these conditions, the line spectrum becomes a continuous spectrum. Since as  $T \rightarrow \infty$ ,  $\mathbf{c}_n \rightarrow 0$  in Eq. (15.37), we will examine the product  $\mathbf{c}_n T$ , where

$$\mathbf{c}_n T = \int_{-T/2}^{T/2} f_p(t) e^{-jn\omega_0 t} dt$$

## 15.2

### Fourier Transform

In the limit as  $T \rightarrow \infty$ ,

$$\lim_{T \rightarrow \infty} (\mathbf{c}_n T) = \lim_{T \rightarrow \infty} \int_{-T/2}^{T/2} f_p(t) e^{-jn\omega_0 t} dt$$

which in view of the previous discussion can be written as

$$\lim_{T \rightarrow \infty} (\mathbf{c}_n T) = \int_{-\infty}^{\infty} f(t) e^{-j\omega t} dt$$

This integral is the Fourier transform of  $f(t)$ , which we will denote as  $\mathbf{F}(\omega)$ , and hence

$$\mathbf{F}(\omega) = \int_{-\infty}^{\infty} f(t) e^{-j\omega t} dt \tag{15.40}$$

Similarly,  $f_p(t)$  can be expressed as

$$\begin{aligned} f_p(t) &= \sum_{n=-\infty}^{\infty} \mathbf{c}_n e^{jn\omega_0 t} \\ &= \sum_{n=-\infty}^{\infty} (\mathbf{c}_n T) e^{jn\omega_0 t} \frac{1}{T} \\ &= \sum_{n=-\infty}^{\infty} (\mathbf{c}_n T) e^{jn\omega_0 t} \frac{\Delta\omega}{2\pi} \end{aligned}$$

which in the limit as  $T \rightarrow \infty$  becomes

$$f(t) = \frac{1}{2\pi} \int_{-\infty}^{\infty} \mathbf{F}(\omega) e^{j\omega t} d\omega \tag{15.41}$$

Eqs. (15.40) and (15.41) constitute what is called the *Fourier transform pair*. Since  $\mathbf{F}(\omega)$  is the Fourier transform of  $f(t)$  and  $f(t)$  is the inverse Fourier transform of  $\mathbf{F}(\omega)$ , they are normally expressed in the form

$$\mathbf{F}(\omega) = \mathcal{F}[f(t)] = \int_{-\infty}^{\infty} f(t) e^{-j\omega t} dt \tag{15.42}$$

$$f(t) = \mathcal{F}^{-1}[\mathbf{F}(\omega)] = \frac{1}{2\pi} \int_{-\infty}^{\infty} \mathbf{F}(\omega) e^{j\omega t} d\omega \tag{15.43}$$

**SOME IMPORTANT TRANSFORM PAIRS** There are a number of important Fourier transform pairs. In the following material we derive a number of them and then list some of the more common ones in tabular form.

**EXAMPLE**

**15.9**

**SOLUTION**

We wish to derive the Fourier transform for the voltage pulse shown in Fig. 15.13a.

Using Eq. (15.42), the Fourier transform is

$$\begin{aligned} \mathbf{F}(\omega) &= \int_{-\delta/2}^{\delta/2} V e^{-j\omega t} dt \\ &= \frac{V}{-j\omega} e^{-j\omega t} \Big|_{-\delta/2}^{\delta/2} \\ &= V \frac{e^{-j\omega\delta/2} - e^{+j\omega\delta/2}}{-j\omega} \\ &= V\delta \frac{\sin(\omega\delta/2)}{\omega\delta/2} \end{aligned}$$

Therefore, the Fourier transform for the function

$$f(t) = \begin{cases} 0 & -\infty < t \leq -\frac{\delta}{2} \\ V & -\frac{\delta}{2} < t \leq \frac{\delta}{2} \\ 0 & \frac{\delta}{2} < t < \infty \end{cases}$$

is

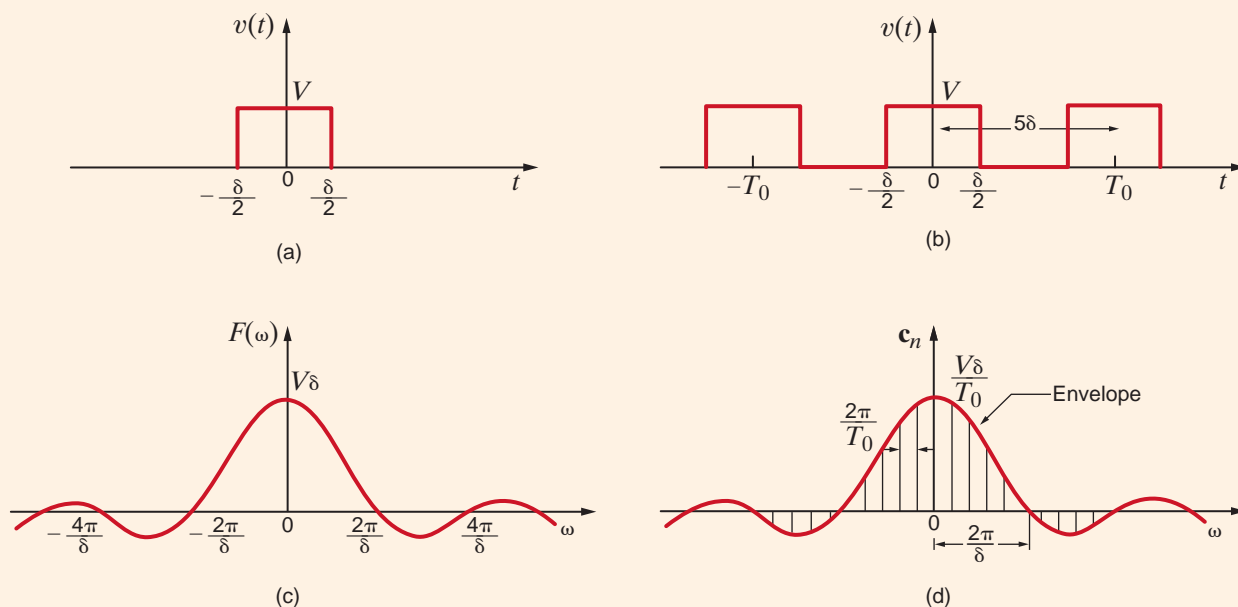
$$F(\omega) = V\delta \frac{\sin(\omega\delta/2)}{\omega\delta/2}$$

A plot of this function is shown in Fig. 15.13c. Let us explore this example even further. Consider now the pulse train shown in Fig. 15.13b. Using the techniques that have been demonstrated earlier, we can show that the Fourier coefficients for this waveform are

$$c_n = \frac{V\delta}{T_0} \frac{\sin(n\omega_0\delta/2)}{n\omega_0\delta/2}$$

The line spectrum for  $T_0 = 5\delta$  is shown in Fig. 15.13d.

The equations and figures in this example indicate that as  $T_0 \rightarrow \infty$  and the periodic function becomes aperiodic, the lines in the discrete spectrum become denser and the amplitude gets smaller, and the amplitude spectrum changes from a line spectrum to a continuous spectrum. Note that the envelope for the discrete spectrum has the same shape as the continuous spectrum. Since the Fourier series represents the amplitude and phase of the signal at specific frequencies, the Fourier transform also specifies the frequency content of a signal.



**Figure 15.13**

Pulses and their spectra.

**EXAMPLE****15.10****SOLUTION**

Find the Fourier transform for the unit impulse function  $\delta(t)$ .

The Fourier transform of the unit impulse function  $\delta(t - a)$  is

$$\mathbf{F}(\omega) = \int_{-\infty}^{\infty} \delta(t - a)e^{-j\omega t} dt$$

Using the sampling property of the unit impulse, we find that

$$\mathbf{F}(\omega) = e^{-j\omega a}$$

and if  $a = 0$ , then

$$\mathbf{F}(\omega) = 1$$

Note then that the  $\mathbf{F}(\omega)$  for  $f(t) = \delta(t)$  is *constant for all frequencies*. This is an important property, as we shall see later.

**EXAMPLE****15.11****SOLUTION**

We wish to determine the Fourier transform of the function  $f(t) = e^{j\omega_0 t}$ .

In this case note that if  $\mathbf{F}(\omega) = 2\pi\delta(\omega - \omega_0)$ , then

$$\begin{aligned} f(t) &= \frac{1}{2\pi} \int_{-\infty}^{\infty} 2\pi\delta(\omega - \omega_0)e^{j\omega t} d\omega \\ &= e^{j\omega_0 t} \end{aligned}$$

Therefore,  $f(t) = e^{j\omega_0 t}$  and  $\mathbf{F}(\omega) = 2\pi\delta(\omega - \omega_0)$  represent a Fourier transform pair.

## Learning Assessment

**E15.16** If  $f(t) = \sin \omega_0 t$ , find  $\mathbf{F}(\omega)$ .

**ANSWER:**

$$\mathbf{F}(\omega) = \pi j [\delta(\omega + \omega_0) - \delta(\omega - \omega_0)].$$

A number of useful Fourier transform pairs are shown in Table 15.2.

**TABLE 15.2** Fourier transform pairs

$f(t)$	$\mathbf{F}(\omega)$
$\delta(t - a)$	$e^{-j\omega a}$
$A$	$2\pi A\delta(\omega)$
$e^{j\omega_0 t}$	$2\pi\delta(\omega - \omega_0)$
$\cos \omega_0 t$	$\pi\delta(\omega - \omega_0) + \pi\delta(\omega + \omega_0)$
$\sin \omega_0 t$	$j\pi\delta(\omega + \omega_0) - j\pi\delta(\omega - \omega_0)$
$e^{-at}u(t), a > 0$	$\frac{1}{a + j\omega}$
$e^{-\alpha t }, a > 0$	$\frac{2a}{a^2 + \omega^2}$
$e^{-at} \cos \omega_0 t u(t), a > 0$	$\frac{j\omega + a}{(j\omega + a)^2 + \omega_0^2}$
$e^{-at} \sin \omega_0 t u(t), a > 0$	$\frac{\omega_0}{(j\omega + a)^2 + \omega_0^2}$



**SOME PROPERTIES OF THE FOURIER TRANSFORM** The Fourier transform defined by the equation

$$\mathbf{F}(\omega) = \int_{-\infty}^{\infty} f(t)e^{-j\omega t} dt$$

has a number of important properties. Table 15.3 provides a short list of a number of these properties.

The proofs of these properties are generally straightforward; however, as an example we will demonstrate the time convolution property.

If  $\mathcal{F}[f_1(t)] = \mathbf{F}_1(\omega)$  and  $\mathcal{F}[f_2(t)] = \mathbf{F}_2(\omega)$ , then

$$\begin{aligned} \mathcal{F}\left[\int_{-\infty}^{\infty} f_1(x)f_2(t-x) dx\right] &= \int_{t=-\infty}^{\infty} \int_{x=-\infty}^{\infty} f_1(x)f_2(t-x) dx e^{-j\omega t} dt \\ &= \int_{x=-\infty}^{\infty} f_1(x) \int_{t=-\infty}^{\infty} f_2(t-x)e^{-j\omega t} dt dx \end{aligned}$$

If we now let  $u = t - x$ , then

$$\begin{aligned} \mathcal{F}\left[\int_{-\infty}^{\infty} f_1(x)f_2(t-x) dx\right] &= \int_{x=-\infty}^{\infty} f_1(x) \int_{u=-\infty}^{\infty} f_2(u)e^{-j\omega(u+x)} du dx \\ &= \int_{x=-\infty}^{\infty} f_1(x)e^{-j\omega x} \int_{u=-\infty}^{\infty} f_2(u)e^{-j\omega u} du dx \\ &= \mathbf{F}_1(\omega)\mathbf{F}_2(\omega) \end{aligned} \quad 15.44$$

We should note very carefully the time convolution property of the Fourier transform. With reference to Fig. 15.14, this property states that if  $\mathbf{V}_i(\omega) = \mathcal{F}[v_i(t)]$ ,  $\mathbf{H}(\omega) = \mathcal{F}[h(t)]$ , and  $\mathbf{V}_o(\omega) = \mathcal{F}[v_o(t)]$ , then:

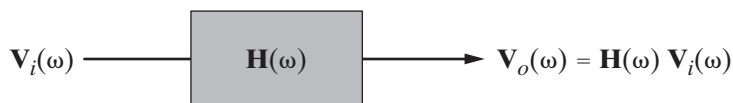
$$\mathbf{V}_o(\omega) = \mathbf{H}(\omega)\mathbf{V}_i(\omega) \quad 15.45$$

**TABLE 15.3** Properties of the Fourier transform

$f(t)$	$\mathbf{F}(\omega)$ PROPERTY	
$Af(t)$	$A\mathbf{F}(\omega)$	Linearity
$f_1(t) \pm f_2(t)$	$\mathbf{F}_1(\omega) \pm \mathbf{F}_2(\omega)$	
$f(at)$	$\frac{1}{a}\mathbf{F}\left(\frac{\omega}{a}\right), a > 0$	Time-scaling
$f(t - t_0)$	$e^{-j\omega t_0}\mathbf{F}(\omega)$	Time-shifting
$e^{j\omega_0 t}f(t)$	$\mathbf{F}(\omega - \omega_0)$	Modulation
$\frac{d^n f(t)}{dt^n}$	$(j\omega)^n \mathbf{F}(\omega)$	
$t^n f(t)$	$(j)^n \frac{d^n \mathbf{F}(\omega)}{d\omega^n}$	Differentiation
$\int_{-\infty}^{\infty} f_1(x)f_2(t-x) dx$	$\mathbf{F}_1(\omega)\mathbf{F}_2(\omega)$	
$f_1(t)f_2(t)$	$\frac{1}{2\pi} \int_{-\infty}^{\infty} \mathbf{F}_1(x)\mathbf{F}_2(\omega-x) dx$	Convolution

**Figure 15.14**

Representation of the time convolution property.



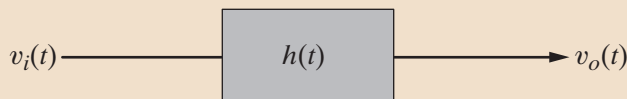
where  $\mathbf{V}_i(\omega)$  represents the input signal,  $\mathbf{H}(\omega)$  is the network transfer function, and  $\mathbf{V}_o(\omega)$  represents the output signal. Eq. (15.45) tacitly assumes that the initial conditions of the network are zero.

## Learning Assessments

**E15.17** Determine the output  $v_o(t)$  in Fig. E15.17 if the signal  $v_i(t) = e^{-t}u(t)$  V, the network impulse response  $h(t) = e^{-2t}u(t)$ , and all initial conditions are zero.

**ANSWER:**

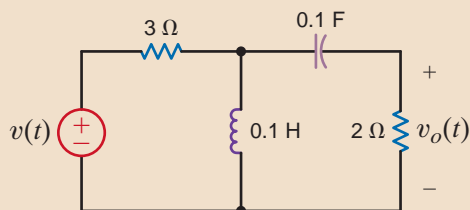
$$v_o(t) = (e^{-t} - e^{-2t})u(t) \text{ V.}$$

**Figure E15.17**

**E15.18** Use the transform technique to find  $v_o(t)$  in Fig. E15.18 if  $v(t) = 15 \cos 10t$  V.

**ANSWER:**

$$v_o(t) = 4.12 \cos(10t + 74^\circ) \text{ V.}$$

**Figure E15.18**

**PARSEVAL'S THEOREM** A mathematical statement of Parseval's theorem is

$$\int_{-\infty}^{\infty} f^2(t) dt = \frac{1}{2\pi} \int_{-\infty}^{\infty} |\mathbf{F}(\omega)|^2 d\omega \quad 15.46$$

This relationship can be easily derived as follows:

$$\begin{aligned} \int_{-\infty}^{\infty} f^2(t) dt &= \int_{-\infty}^{\infty} f(t) \frac{1}{2\pi} \int_{-\infty}^{\infty} \mathbf{F}(\omega) e^{j\omega t} d\omega dt \\ &= \frac{1}{2\pi} \int_{-\infty}^{\infty} \mathbf{F}(\omega) \int_{-\infty}^{\infty} f(t) e^{-j(\omega)t} dt d\omega \\ &= \int_{-\infty}^{\infty} \frac{1}{2\pi} \mathbf{F}(\omega) \mathbf{F}(-\omega) d\omega \\ &= \int_{-\infty}^{\infty} \frac{1}{2\pi} \mathbf{F}(\omega) \mathbf{F}^*(\omega) d\omega \\ &= \int_{-\infty}^{\infty} \frac{1}{2\pi} |\mathbf{F}(\omega)|^2 d\omega \end{aligned}$$

The importance of Parseval's theorem can be seen if we imagine that  $f(t)$  represents the current in a 1- $\Omega$  resistor. Since  $f^2(t)$  is power and the integral of power over time is energy, Eq. (15.46) shows that we can compute this 1- $\Omega$  energy or normalized energy in either the time domain or the frequency domain.

Using the transform technique, we wish to determine  $v_o(t)$  in Fig. 15.15 if (a)  $v_i(t) = 5e^{-2t}u(t)$  V and (b)  $v_i(t) = 5 \cos 2t$  V.

## EXAMPLE 15.12

a. In this case since  $v_i(t) = 5e^{-2t}u(t)$  V, then

$$\mathbf{V}_i(\omega) = \frac{5}{2 + j\omega} \text{ V}$$

$\mathbf{H}(\omega)$  for the network is

$$\begin{aligned} \mathbf{H}(\omega) &= \frac{R}{R + j\omega L} \\ &= \frac{10}{10 + j\omega} \end{aligned}$$

From Eq. (15.45),

$$\begin{aligned} \mathbf{V}_o(\omega) &= \mathbf{H}(\omega)\mathbf{V}_i(\omega) \\ &= \frac{50}{(2 + j\omega)(10 + j\omega)} \\ &= \frac{50}{8} \left( \frac{1}{2 + j\omega} - \frac{1}{10 + j\omega} \right) \end{aligned}$$

Hence, from Table 15.2, we see that

$$v_o(t) = 6.25[e^{-2t}u(t) - e^{-10t}u(t)] \text{ V}$$

b. In this case, since  $v_i(t) = 5 \cos 2t$ ,

$$\mathbf{V}_i(\omega) = 5\pi\delta(\omega - 2) + 5\pi\delta(\omega + 2) \text{ V}$$

The output voltage in the frequency domain is then

$$\mathbf{V}_o(\omega) = \frac{50\pi[\delta(\omega - 2) + \delta(\omega + 2)]}{(10 + j\omega)}$$

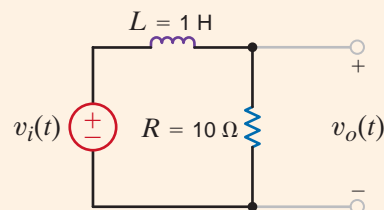
Using the inverse Fourier transform gives us

$$v_o(t) = \mathcal{F}^{-1}[\mathbf{V}_o(\omega)] = \frac{1}{2\pi} \int_{-\infty}^{\infty} 50\pi \frac{\delta(\omega - 2) + \delta(\omega + 2)}{10 + j\omega} e^{j\omega t} d\omega$$

Employing the sampling property of the unit impulse function, we obtain

$$\begin{aligned} v_o(t) &= 25 \left( \frac{e^{j2t}}{10 + j2} + \frac{e^{-j2t}}{10 - j2} \right) \\ &= 25 \left( \frac{e^{j2t}}{10.2e^{j11.31^\circ}} + \frac{e^{-j2t}}{10.2e^{-j11.31^\circ}} \right) \\ &= 4.90 \cos(2t - 11.31^\circ) \text{ V} \end{aligned}$$

This result can be easily checked using phasor analysis.



**Figure 15.15**  
Simple RL circuit.

## 15.3

Application  
Examples**APPLICATION  
EXAMPLE 15.13**

Consider the network shown in Fig. 15.16a. This network represents a simple low-pass filter, as shown in Chapter 12. We wish to illustrate the impact of this network on the input signal by examining the frequency characteristics of the output signal and the relationship between the 1- $\Omega$  or normalized energy at the input and output of the network.

**SOLUTION** The network transfer function is

$$\mathbf{H}(\omega) = \frac{1/RC}{1/RC + j\omega} = \frac{5}{5 + j\omega} = \frac{1}{1 + 0.2j\omega}$$

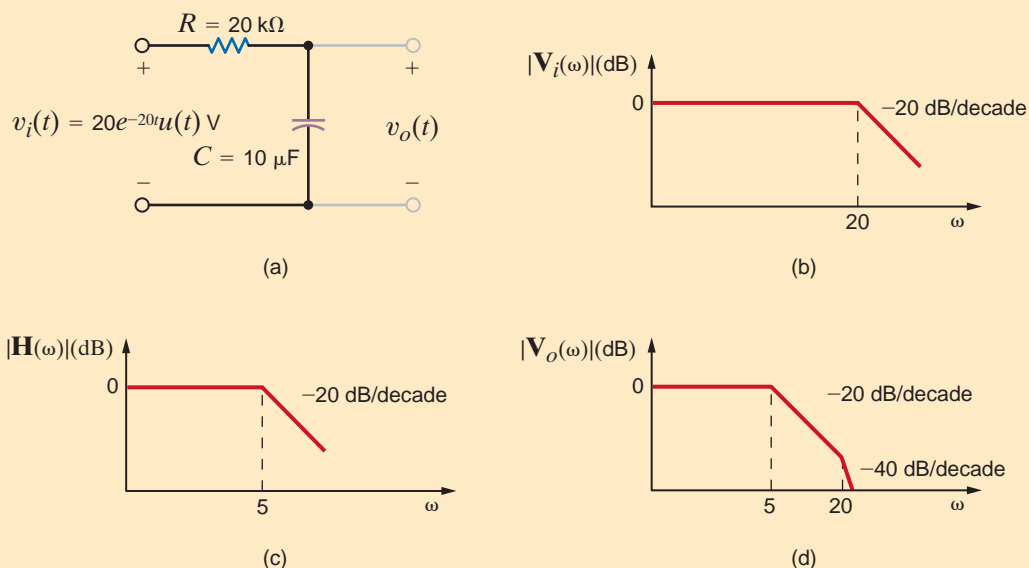
The Fourier transform of the input signal is

$$\mathbf{V}_i(\omega) = \frac{20}{20 + j\omega} = \frac{1}{1 + 0.05j\omega}$$

Then, using Eq. (15.45), the Fourier transform of the output is

$$\mathbf{V}_o(\omega) = \frac{1}{(1 + 0.2j\omega)(1 + 0.05j\omega)}$$

Using the techniques of Chapter 12, we note that the straight-line log-magnitude plot (frequency characteristic) for these functions is shown in Figs. 15.16b–d. Note that the low-pass filter passes the low frequencies of the input signal but attenuates the high frequencies.



**Figure 15.16**

Low-pass filter, its frequency characteristic, and its output spectra.

The normalized energy at the filter input is

$$\begin{aligned} W_i &= \int_0^{\infty} (20e^{-20t})^2 dt \\ &= \frac{400}{-40} e^{-40t} \Big|_0^{\infty} \\ &= 10 \text{ J} \end{aligned}$$

The normalized energy at the filter output can be computed using Parseval's theorem. Since

$$\mathbf{V}_o(\omega) = \frac{100}{(5 + j\omega)(20 + j\omega)}$$

and

$$|\mathbf{V}_o(\omega)|^2 = \frac{10^4}{(\omega^2 + 25)(\omega^2 + 400)}$$

$|\mathbf{V}_o(\omega)|^2$  is an even function, and therefore

$$W_o = 2 \left( \frac{1}{2\pi} \right) \int_0^{\infty} \frac{10^4 d\omega}{(\omega^2 + 25)(\omega^2 + 400)}$$

However, we can use the fact that

$$\frac{10^4}{(\omega^2 + 25)(\omega^2 + 400)} = \frac{10^4/375}{\omega^2 + 25} - \frac{10^4/375}{\omega^2 + 400}$$

Then

$$\begin{aligned} W_o &= \frac{1}{\pi} \left( \int_0^{\infty} \frac{10^4/375}{\omega^2 + 25} d\omega - \int_0^{\infty} \frac{10^4/375}{\omega^2 + 400} d\omega \right) \\ &= \frac{10^4}{375} \left( \frac{1}{\pi} \right) \left[ \frac{1}{5} \left( \frac{\pi}{2} \right) - \frac{1}{20} \left( \frac{\pi}{2} \right) \right] \\ &= 2.0 \text{ J} \end{aligned}$$

## Learning Assessments

**E15.19** Compute the total 1- $\Omega$  energy content of the signal  $v_i(t) = e^{-2t}u(t)$  V using both the time-domain and frequency-domain approaches. **ANSWER:**  $W = 0.25$  J.

**E15.20** Compute the 1- $\Omega$  energy content of the signal  $v_i(t) = e^{-2t}u(t)$  V in the frequency range from 0 to 1 rad/s. **ANSWER:**  $W = 0.07$  J.

**E15.21** Determine the total 1- $\Omega$  energy content of the output  $v_o(t)$  in Fig. E15.21 if  $v_i(t) = 5e^{2t}u(t)$  V. **ANSWER:**  $W = 5.21$  J.

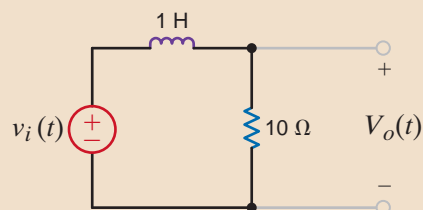
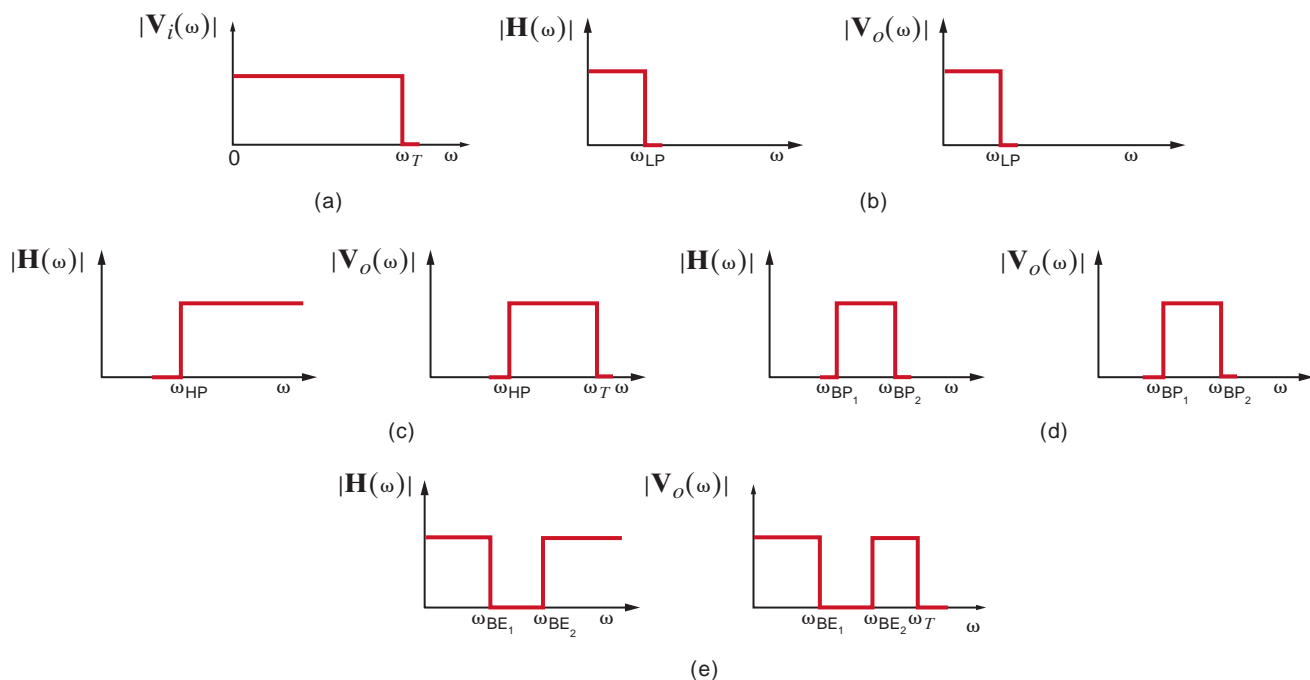


Figure E15.21



**Figure 15.17**

Frequency spectra for the input and output of ideal low-pass, high-pass, band-pass, and band-elimination filters.

Example 15.13 illustrates the effect that  $\mathbf{H}(\omega)$  has on the frequency spectrum of the input signal. In general,  $\mathbf{H}(\omega)$  can be selected to shape that spectrum in some prescribed manner. As an illustration of this effect, consider the *ideal* frequency spectrums shown in Fig. 15.17. Figure 15.17a shows an ideal input magnitude spectrum  $|\mathbf{V}_i(\omega)|$ .  $|\mathbf{H}(\omega)|$  and the output magnitude spectrum  $|\mathbf{V}_o(\omega)|$ , which are related by Eq. (15.45), are shown in Figs. 15.17b–e for *ideal* low-pass, high-pass, band-pass, and band-elimination filters, respectively.

We note that by using Parseval's theorem we can compute the total energy content of a signal using either a time-domain or frequency-domain approach. However, the frequency-domain approach is more flexible in that it permits us to determine the energy content of a signal within some specified frequency band.

### APPLICATION EXAMPLE 15.14

In AM (amplitude modulation) radio, there are two very important waveforms—the signal,  $s(t)$ , and the carrier. All of the information we desire to transmit, voice, music, and so on, is contained in the signal waveform, which is in essence transported by the carrier. Therefore, the Fourier transform of  $s(t)$  contains frequencies from about 50 Hz to 20,000 Hz. The carrier,  $c(t)$ , is a sinusoid oscillating at a frequency much greater than those in  $s(t)$ . For example, the FCC (Federal Communications Commission) rules and regulations have allocated the frequency range 540 kHz to 1.7 MHz for AM radio station carrier frequencies. Even the lowest possible carrier frequency allocation of 540 kHz is much greater than the audio frequencies in  $s(t)$ . In fact, when a station broadcasts its call letters and frequency, they are telling you the carrier's frequency, which the FCC assigned to that station!

In simple cases, the signal,  $s(t)$ , is modified to produce a voltage of the form

$$v(t) = [A + s(t)] \cos(\omega_c t)$$

where  $A$  is a constant and  $\omega_c$  is the carrier frequency in rad/s. This voltage,  $v(t)$ , with the signal “coded” within, is sent to the antenna and is broadcast to the public whose radios “pick up” a faint replica of the waveform  $v(t)$ .

Let us plot the magnitude of the Fourier transform of both  $s(t)$  and  $v(t)$  given that  $s(t)$  is

$$s(t) = \cos(2\pi f_a t)$$

where  $f_a$  is 1000 Hz, the carrier frequency is 900 kHz, and the constant  $A$  is unity.

The Fourier transform of  $s(t)$  is

$$\mathbf{S}(\omega) = \mathcal{F}[\cos(\omega_a t)] = \pi\delta(\omega - \omega_a) + \pi\delta(\omega + \omega_a)$$

and is shown in Fig. 15.18.

The voltage  $v(t)$  can be expressed in the form

$$v(t) = [1 + s(t)] \cos(\omega_c t) = \cos(\omega_c t) + s(t) \cos(\omega_c t)$$

The Fourier transform for the carrier is

$$\mathcal{F}[\cos(\omega_c t)] = \pi\delta(\omega - \omega_c) + \pi\delta(\omega + \omega_c)$$

The term  $s(t) \cos(\omega_c t)$  can be written as

$$s(t) \cos(\omega_c t) = s(t) \left\{ \frac{e^{j\omega_c t} + e^{-j\omega_c t}}{2} \right\}$$

Using the property of modulation as given in Table 15.3, we can express the Fourier transform of  $s(t) \cos(\omega_c t)$  as

$$\mathcal{F}[s(t) \cos(\omega_c t)] = \frac{1}{2} \{ \mathbf{S}(\omega - \omega_c) + \mathbf{S}(\omega + \omega_c) \}$$

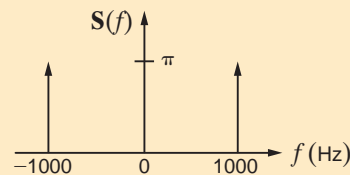
Employing  $\mathbf{S}(\omega)$ , we find

$$\begin{aligned} \mathcal{F}[s(t) \cos(\omega_c t)] &= \mathcal{F}[\cos(\omega_a t) \cos(\omega_c t)] \\ &= \frac{\pi}{2} \{ \delta(\omega - \omega_a - \omega_c) + \delta(\omega + \omega_a - \omega_c) \\ &\quad + \delta(\omega - \omega_a + \omega_c) + \delta(\omega + \omega_a + \omega_c) \} \end{aligned}$$

Finally, the Fourier transform of  $v(t)$  is

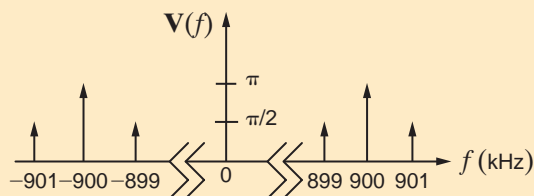
$$\begin{aligned} \mathbf{V}(\omega) &= \frac{\pi}{2} \{ 2\delta(\omega - \omega_c) + 2\delta(\omega + \omega_c) + \delta(\omega - \omega_a - \omega_c) \\ &\quad + \delta(\omega + \omega_a - \omega_c) + \delta(\omega - \omega_a + \omega_c) + \delta(\omega + \omega_a + \omega_c) \} \end{aligned}$$

which is shown in Fig. 15.19. Notice that  $\mathbf{S}(\omega)$  is centered about the carrier frequency. This is the effect of modulation.



**Figure 15.18**

Fourier transform magnitude for  $s(t)$  versus frequency.



**Figure 15.19**

Fourier transform of the transmitted waveform  $v(t)$  versus frequency.

**APPLICATION  
EXAMPLE 15.15**

Harmonics can be quite detrimental in a power distribution system. As an example, consider the scenario shown in Fig. 15.20, where a nonlinear three-phase load creates harmonic currents on the lines. Table 15.4 shows the magnitude of the current for each of the harmonics. If the resistance of each line is  $0.2\ \Omega$ , what is the total power loss in the system? In addition, how much of the power loss is caused by the harmonic content?

**SOLUTION** The power loss in a line at any single frequency is

$$P_{\text{line}} = \frac{I_{\text{line}}^2}{2} R_{\text{line}}$$

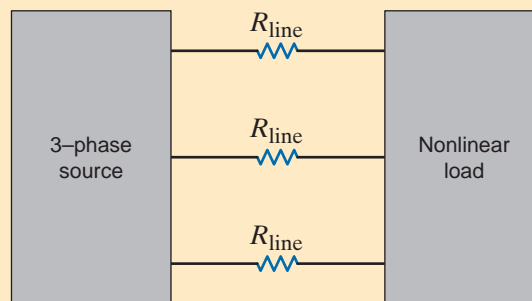
Using this equation, we can calculate the power loss in a line for the fundamental and each harmonic frequency. The results of this calculation are shown in Table 15.5. The power lost in each line is simply the sum of each of the powers shown in Table 15.5. Since this is a three-phase system, the total power that is lost in the lines is simply

$$P_{\text{total}} = 3[1000 + 0.5 + 90 + 0.1 + 10] = 3301.8\ \text{W}$$

Note that the harmonics account for 301.8 W, or 9.14% of the total power that is lost.

**Figure 15.20**

A simple model for a three-phase distribution system connecting a nonlinear load.



**TABLE 15.4** Harmonic line current content for a nonlinear load

HARMONIC	MAGNITUDE (A)
Fundamental	100
1st	5
2nd	30
3rd	1
4th	10

**TABLE 15.5** Line power loss at the fundamental and each harmonic frequency

HARMONIC	P (W)
Fundamental	1000
1st	0.5
2nd	90
3rd	0.1
4th	10



Electrical sources such as batteries, solar panels, and fuel cells produce a dc output voltage. An electrical load requiring an ac voltage can be powered from a dc source using a device called an inverter, which converts a dc voltage to an ac voltage. Inverters can produce single-phase or three-phase ac voltages. Single-phase inverters are often classified as pure or true sine wave inverters or modified sine wave inverters. The output from a pure sine wave inverter is shown in Fig. 15.21. This waveform was discussed in Chapter 8 and could be described by  $v(t) = 170 \sin 377t$  volts. Fig. 15.22 is the output voltage from a modified sine wave inverter. Note that this waveform is more square wave than sine wave.

Let's determine the Fourier components of the modified sine wave inverter output voltage using the waveform in Fig. 15.23. Note that this waveform consists of one positive pulse of width  $t_\delta$  centered about  $T/4$  and a negative pulse of the same width centered about  $3T/4$ . Close examination of this waveform reveals that it is an odd function with half-wave symmetry. Therefore,

$$a_0 = 0$$

$$a_n = 0 \text{ for all } n$$

$$b_n = 0 \text{ for } n \text{ even}$$

## APPLICATION EXAMPLE 15.16

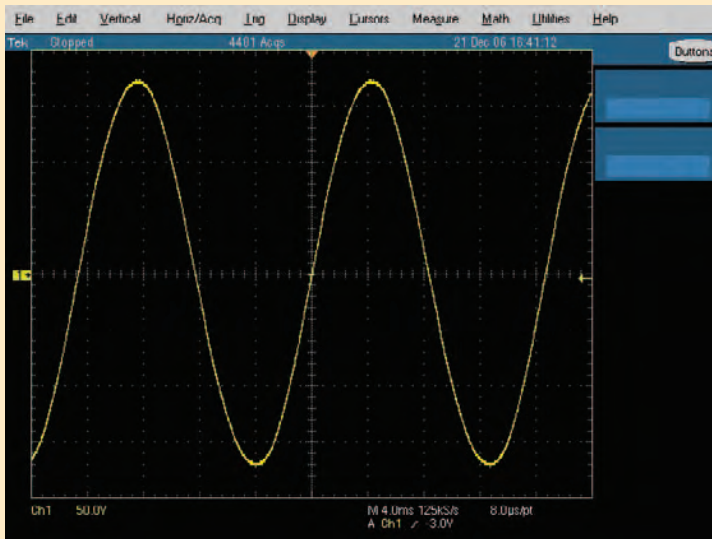


Figure 15.21

Output voltage for a pure sine wave inverter.

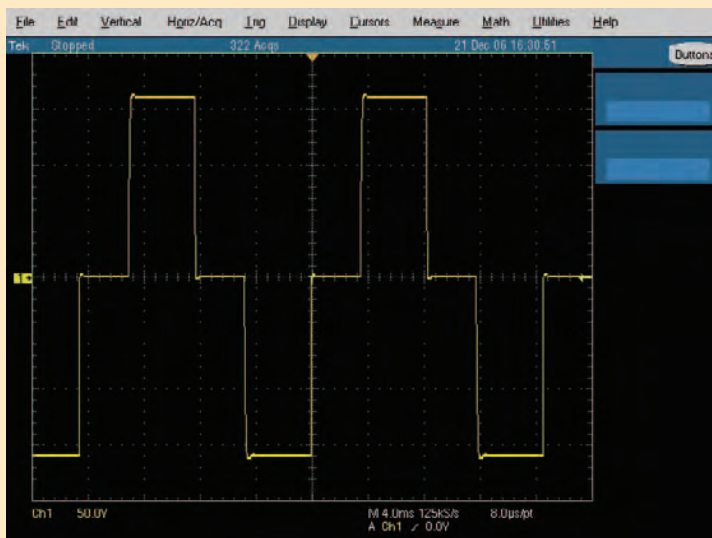
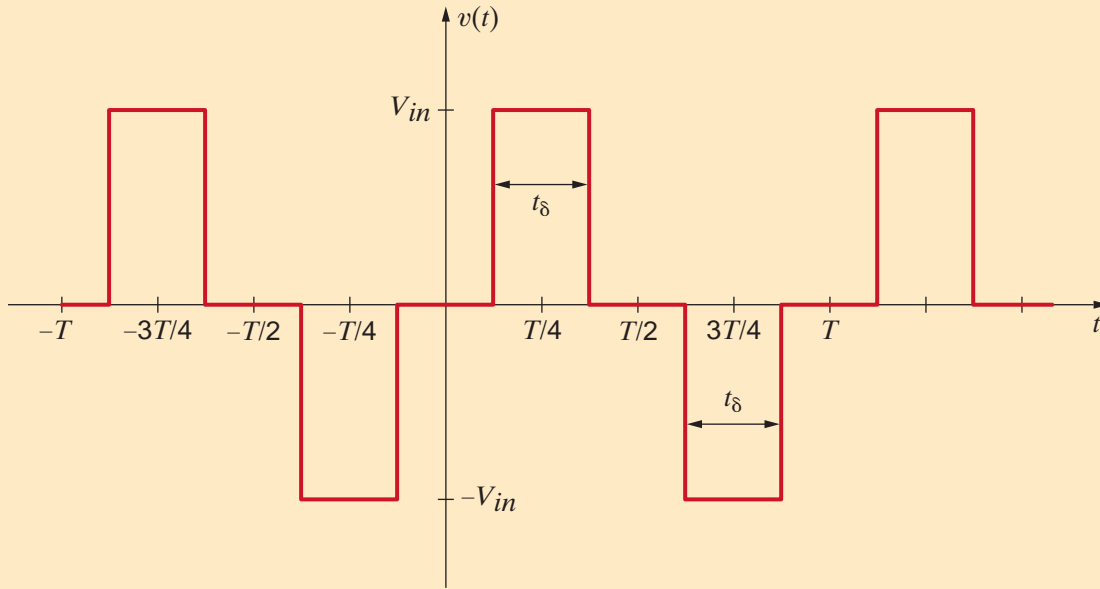


Figure 15.22

Output voltage for a modified sine wave inverter.



**Figure 15.23**  
Waveform for determining Fourier components of the modified sine wave inverter output voltage.

We can find  $b_n$  for  $n$  odd using

$$b_n = \frac{4}{T_0} \int_0^{T_0/2} f(t) \sin n\omega_0 t \, dt$$

The waveform has a value of  $V_{in}$  between  $t = T/4 - \delta/2$  and  $t = T/4 + \delta/2$  and zero elsewhere over the interval from 0 to  $T/2$ . Therefore,

$$b_n = \frac{4}{T} \int_{T/4-t_\delta/2}^{T/4+t_\delta/2} V_{in} \sin n\omega_0 t \, dt$$

$$b_n = \frac{4V_{in}}{T} \int_{T/4-t_\delta/2}^{T/4+t_\delta/2} \sin n\omega_0 t \, dt$$

Integrating yields

$$b_n = \frac{4V_{in}}{n\omega_0 T} \left[ -\cos n\omega_0 t \right]_{T/4-t_\delta/2}^{T/4+t_\delta/2}$$

Recalling that  $\omega_0 T = 2\pi$  and evaluating the function at the limits produces

$$b_n = \frac{2V_{in}}{\pi} \left[ -\cos\left(\frac{n\omega_0 T}{4} + \frac{n\omega_0 t_\delta}{2}\right) + \cos\left(\frac{n\omega_0 T}{4} - \frac{n\omega_0 t_\delta}{2}\right) \right]$$

The expression in brackets is  $-\cos(\alpha + \beta) + \cos(\alpha - \beta)$ . Using the appropriate trigonometric identities, we have

$$\begin{aligned} -\cos(\alpha + \beta) + \cos(\alpha - \beta) &= -\cos \alpha \cos \beta + \sin \alpha \sin \beta + \cos \alpha \cos \beta + \sin \alpha \sin \beta \\ -\cos(\alpha + \beta) + \cos(\alpha - \beta) &= 2 \sin \alpha \sin \beta \end{aligned}$$

The expression for  $b_n$ , which is valid  $n$  odd, becomes

$$b_n = \frac{4V_{in}}{n\pi} \left[ \sin\left(\frac{n\omega_0 T}{4}\right) \sin\left(\frac{n\omega_0 t_\delta}{2}\right) \right]$$

Let's define  $\omega_0 t_\delta = \delta$  and again utilize  $\omega_0 T = 2\pi$ :

$$b_n = \frac{4V_{in}}{n\pi} \left[ \sin\left(\frac{n\pi}{2}\right) \sin\left(\frac{n\delta}{2}\right) \right]$$

Using this expression,

$$b_1 = \frac{4V_{in}}{\pi} \sin\left(\frac{\pi}{2}\right) \sin\left(\frac{\delta}{2}\right) = \frac{4V_{in}}{\pi} \sin\left(\frac{\delta}{2}\right)$$

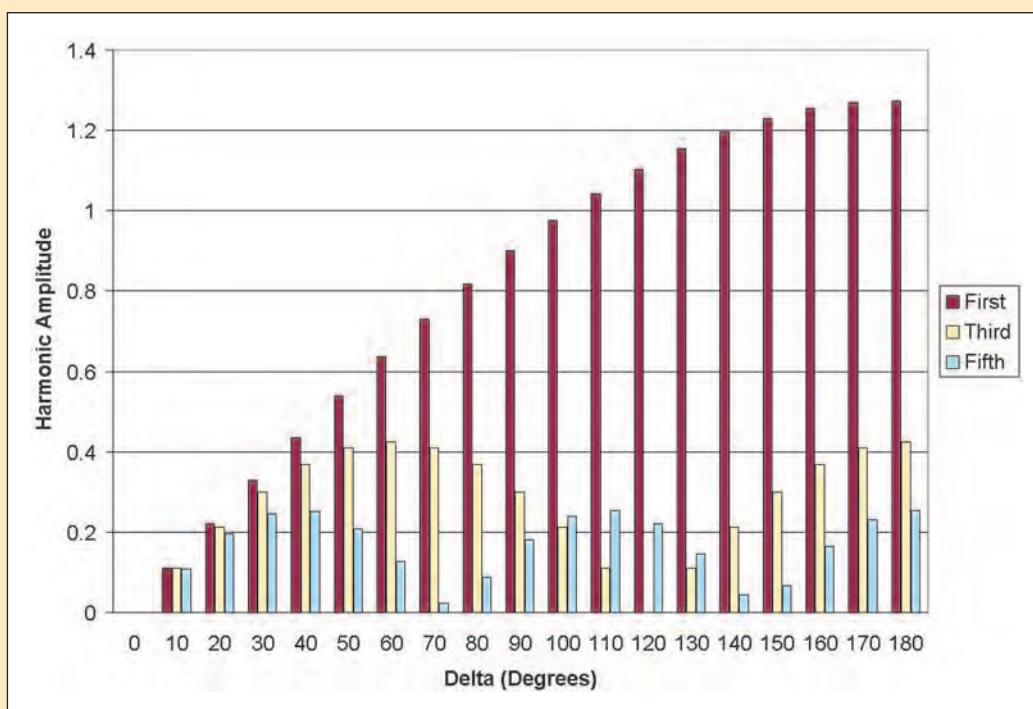
$$b_3 = \frac{4V_{in}}{3\pi} \sin\left(\frac{3\pi}{2}\right) \sin\left(\frac{3\delta}{2}\right) = -\frac{4V_{in}}{3\pi} \sin\left(\frac{3\delta}{2}\right)$$

$$b_5 = \frac{4V_{in}}{5\pi} \sin\left(\frac{5\pi}{2}\right) \sin\left(\frac{5\delta}{2}\right) = \frac{4V_{in}}{5\pi} \sin\left(\frac{5\delta}{2}\right)$$

Now let's plot the absolute value of  $b_1$ ,  $b_3$ , and  $b_5$  as  $\delta$  varies between  $0^\circ$  and  $180^\circ$  for  $V_{in} = 1$  volt as shown in Fig. 15.24. Note that  $b_1$ —the coefficient of the first harmonic or fundamental—is zero for  $\delta = 0^\circ$  and reaches a maximum value of  $4/\pi = 1.273$  volts for  $\delta = 180^\circ$ . Examination of this plot reveals that the absolute value of the third harmonic is zero for  $\delta = 120^\circ$ . The expression for  $b_3$  contains the term  $\sin(3\delta/2)$ , which has a value of zero for  $\delta = 120^\circ$ . If we chose  $\delta = 72^\circ$ , the amplitude of the fifth harmonic would be zero. This example illustrates that it is possible to eliminate one harmonic from the Fourier series for the output voltage by proper selection of the angle  $\delta$ .

Figure 15.24

Plot of harmonic amplitude versus the angle  $\delta$ .



## 15.4

### Design Example

Two nearby AM stations are broadcasting at carrier frequencies

$$f_1 = 900 \text{ kHz}$$

and

$$f_2 = 960 \text{ kHz}$$

### DESIGN EXAMPLE 15.17

To simplify the analysis, we will assume that the information signals,  $s_1(t)$  and  $s_2(t)$ , are identical. It follows that the Fourier transforms  $\mathbf{S}_1(\omega)$  and  $\mathbf{S}_2(\omega)$  are also identical, and a sketch of what they might look like is shown in Fig. 15.25.

The broadcast waveforms are

$$v_1(t) = [1 + s_1(t)] \cos(\omega_1 t)$$

and

$$v_2(t) = [1 + s_2(t)] \cos(\omega_2 t)$$

An antenna in the vicinity will “pick up” both broadcasts. Assuming that  $v_1(t)$  and  $v_2(t)$  are of equal strength at the antenna, the voltage received is

$$v_r(t) = K[v_1(t) + v_2(t)]$$

where  $K$  is a constant much less than 1. (Typical antenna voltages are in the  $\mu\text{V}$ -to- $\text{mV}$  range). A sketch of the Fourier transform of  $v_r(t)$  is shown in Fig. 15.26.

Before passing  $v_r(t)$  on to amplifying and decoding circuitry, we must first employ a tuner to select a particular station. Let us design an  $RLC$  band-pass filter that contains a variable capacitor to serve as our tuner. Such a circuit is shown in Fig. 15.27.

**SOLUTION** The transfer function is easily found to be

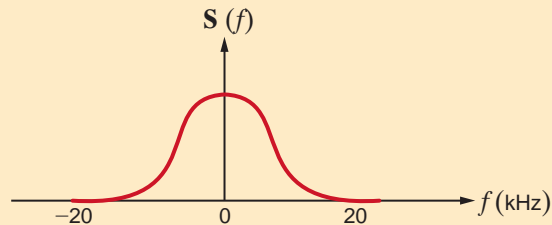
$$\mathbf{G}_v(s) = \frac{\mathbf{V}_o(s)}{\mathbf{V}_r(s)} = \frac{s\left(\frac{R}{L}\right)}{s^2 + s\left(\frac{R}{L}\right) + \frac{1}{LC}}$$

As shown in Chapter 12, the center frequency and bandwidth can be expressed in hertz as

$$f_o = \frac{1}{2\pi\sqrt{LC}}$$

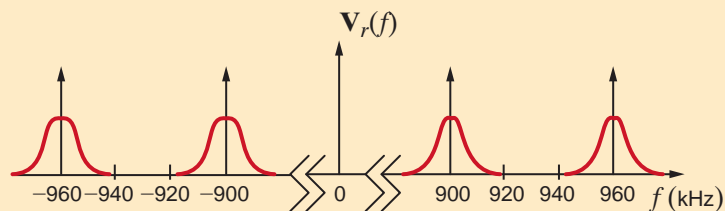
**Figure 15.25**

Sketch of an arbitrary AM Fourier transform.



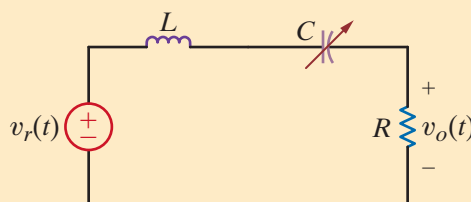
**Figure 15.26**

Fourier transform of the antenna waveform  $v_r(t)$ .



**Figure 15.27**

$RLC$  band-pass filter-tuner circuit.



and

$$BW = \frac{1}{2\pi} \frac{R}{L}$$

Since the two carrier frequencies are separated by only 60 kHz, the filter bandwidth should be less than 60 kHz. Let us arbitrarily choose a bandwidth of 10 kHz and  $R = 10 \Omega$ . Based on this selection, our design involves determining the resulting  $L$  and  $C$  values. From the expression for bandwidth,

$$L = \frac{1}{2\pi} \frac{R}{BW}$$

or

$$L = 159.2 \mu\text{H}$$

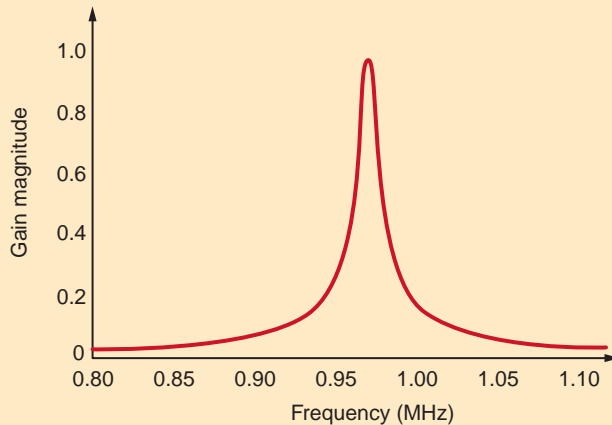
Placing the center frequency at 900 kHz, we find  $C$  to be

$$C = \frac{1}{L[2\pi f_o]^2}$$

or

$$C = 196.4 \text{ pF}$$

To tune to 960 kHz we need only change  $C$  to 172.6 pF and the bandwidth is unchanged. A Bode plot of the magnitude of  $G_v(s)$  tuned to 960 kHz is shown in Fig. 15.28. Note that the broadcast at 900 kHz, though attenuated, is not completely eliminated. If this is a problem, we can either narrow the bandwidth through  $R$  and/or  $L$  or design a more complex tuner filter.



**Figure 15.28**

Bode plot for RLC tuner circuit of Fig. 15.27.

The signal expressed in Eq. (15.47) describes a 10-kHz signal swamped in noise that has two frequency components—1 kHz and 100 kHz. From the equation we see that the signal amplitude is only 1/10 that of the noise components. Let us use the circuit in Fig. 15.29 to design a band-pass filter such that the signal amplitude is 100 times that of the noise components. Assume that the op-amps are ideal.

$$v_S(t) = 0.1 \sin[(2\pi)10^3 t] + 0.01 \sin[(2\pi)10^4 t] + 0.1 \sin[(2\pi)10^5 t] \text{ V} \quad 15.47$$

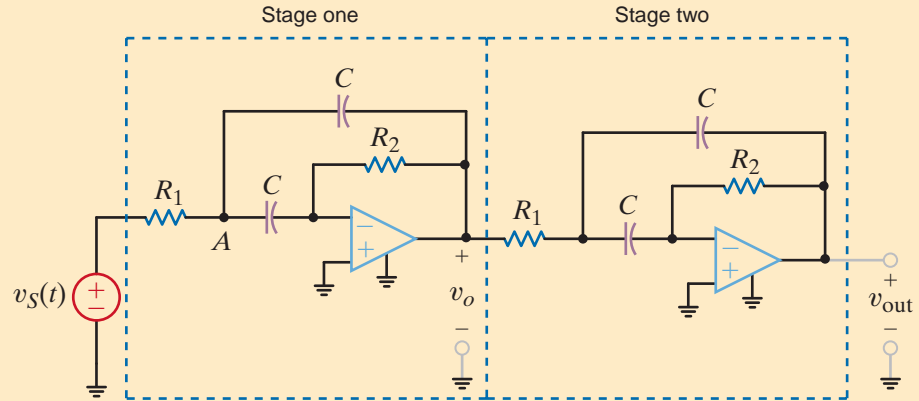
Note that the band-pass filter in Fig. 15.29 consists of two identical cascaded stages. We need only determine the gain of a single stage,  $\mathbf{A}_1(j\omega)$ , since the total gain is

$$\mathbf{A}(j\omega) = \mathbf{A}_1(j\omega)\mathbf{A}_1(j\omega) = [\mathbf{A}_1(j\omega)]^2$$

## DESIGN EXAMPLE 15.18

### SOLUTION

**Figure 15.29**  
A two-stage, fourth-order band-pass filter.



Applying KCL at the first op-amp's inverting input, we have

$$\mathbf{V}_A j\omega C = \frac{-\mathbf{V}_o}{R_2}$$

or

$$\mathbf{V}_A = \frac{-\mathbf{V}_o}{j\omega CR_2} \quad 15.48$$

Using KCL at node A yields

$$\frac{\mathbf{V}_S - \mathbf{V}_A}{R_1} = (\mathbf{V}_A - \mathbf{V}_o)j\omega C + \mathbf{V}_A j\omega C$$

Multiplying both sides by  $R_1$  and collecting terms produces

$$\mathbf{V}_S = \mathbf{V}_A[2j\omega CR_1 + 1] - \mathbf{V}_o j\omega CR_1$$

Substituting from Eq. (15.48) and solving for the gain,  $\mathbf{A}_1(j\omega) = \mathbf{V}_o/\mathbf{V}_S$ ,

$$\mathbf{A}_1(j\omega) = \frac{\mathbf{V}_o}{\mathbf{V}_S} = \frac{-j\omega CR_2}{-\omega^2 C^2 R_1 R_2 + j\omega 2CR_1 + 1}$$

Finally, we rearrange the gain expression in the form

$$\frac{\mathbf{V}_o}{\mathbf{V}_S} = \frac{-\left[\frac{1}{CR_1}\right]j\omega}{-\omega^2 + \left[\frac{2}{CR_2}\right]j\omega + \frac{1}{C^2 R_1 R_2}} \quad 15.49$$

which matches the general form of a band-pass filter given by the expression

$$\frac{\mathbf{V}_o}{\mathbf{V}_S} = \frac{A_o \left[\frac{\omega_0}{Q}\right]j\omega}{-\omega^2 + \left[\frac{\omega_0}{Q}\right]j\omega + \omega_0^2} \quad 15.50$$

Comparing Eqs. (15.49) and (15.50), we find

$$\begin{aligned} \omega_0 &= \frac{1}{C\sqrt{R_1 R_2}} & \frac{\omega_0}{Q} &= \frac{2}{CR_2} \\ Q &= \frac{1}{2}\sqrt{\frac{R_2}{R_1}} & A_o &= \frac{-R_2}{2R_1} \end{aligned} \quad 15.51$$

There are two requirements for the filter performance. First, given the signal and noise amplitudes at the filter input, producing the desired ratio of signal to noise components at

the output requires the ratio of the center frequency gain,  $A_o$ , to the gains at 1 kHz and 100 kHz to be 1000/1. Since the band-pass gain is symmetric about the center frequency on a log axis, the gains at 1 kHz and 100 kHz will be the same. Thus, we will focus on the gain at 1 kHz only. From Eq. (15.50) the ratio of the single-stage gain at  $\omega_0$  and  $\omega_0/10$  is

$$\begin{aligned} \frac{A(\omega_0)}{A(\omega_0/10)} &= \frac{-A_o}{\frac{-A_o\omega_0^2}{10Q}} \\ &= \frac{\left| \omega_0^2 - \frac{\omega_0^2}{100} + j \frac{\omega_0^2}{10Q} \right|}{\left| \omega_0^2 - \frac{\omega_0^2}{100} + j \frac{\omega_0^2}{10Q} \right|} = \sqrt{1000} \\ &= \frac{\omega_0^2}{\frac{\omega_0^2}{10Q}} \end{aligned}$$

For simplicity's sake, we will assume that  $\omega_0^2 \gg \omega_0^2/100$ . Solving for  $Q$  yields

$$\sqrt{100Q^2 + 1} = \sqrt{1000}$$

or, employing Eq. (15.51),

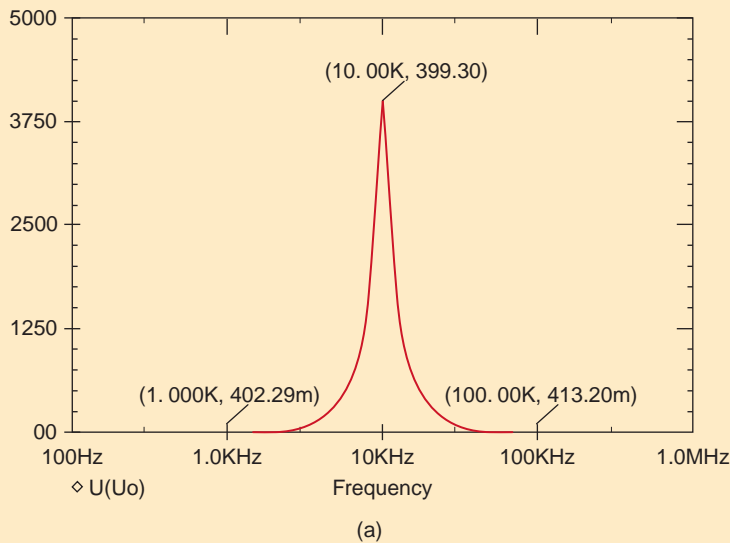
$$Q \approx \sqrt{10} = \frac{1}{2} \sqrt{\frac{R_2}{R_1}}$$

Thus, the gain requirement forces  $R_2 = 40R_1$ . Arbitrarily choosing  $R_1 = 1 \text{ k}\Omega$  fixes  $R_2$  at 40 k $\Omega$ . The second requirement is that  $\omega_0/2\pi$  must equal 10 kHz. From Eq. (15.51) and our resistor values, we have

$$\omega_0 = (2\pi)10^4 = \frac{1}{C\sqrt{R_1R_2}} = \frac{1}{10^3\sqrt{40}C}$$

which yields  $C = 2.5 \text{ nF}$ .

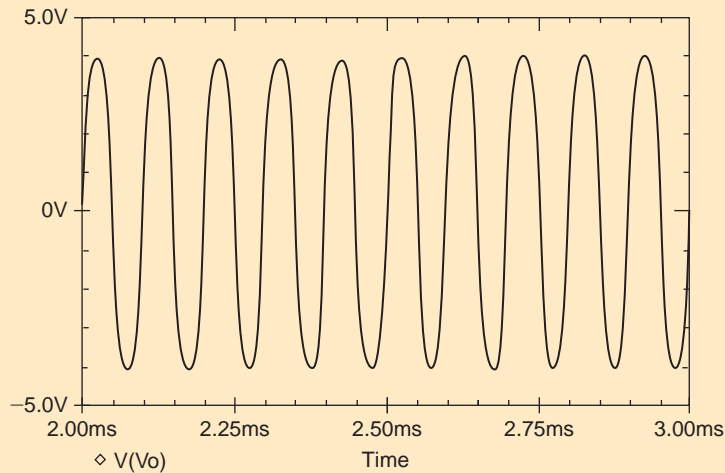
The resulting Bode plot is shown in Fig. 15.30a where the center frequency is at 10 kHz, the gain at 10 kHz is roughly 400, and the gains at 1 kHz and 100 kHz are 0.4—a ratio of 1000/1. Output voltage results from a transient analysis are shown in Fig. 15.30b for 10 cycles of the 10 kHz signal. Appropriately, the waveform is a 4-V sine wave at 10 kHz with little visible distortion.



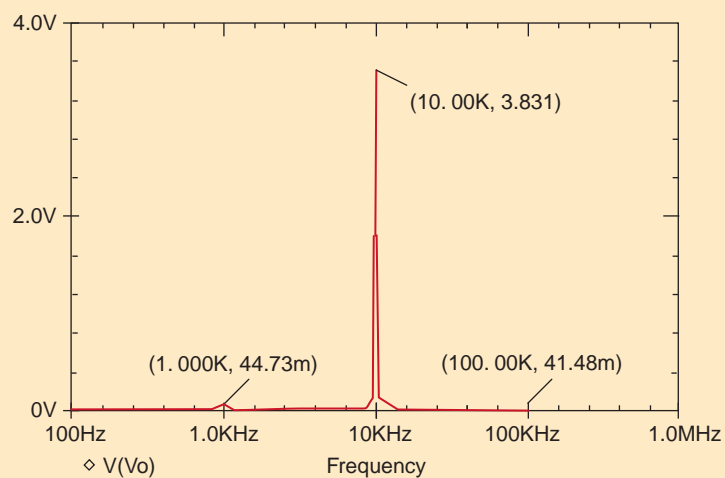
**Figure 15.30**

(a) Results from a frequency analysis showing the amplification of the signal over the noise, (b) transient simulation results, and (c) the corresponding FFT.

**Figure 15.30**  
(continued)



(b)



(c)

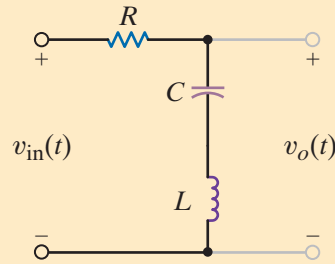
The Fourier components of the output are obtained through use of the Fast Fourier Transform and from the result in plot, shown in Fig. 15.30c, we confirm that the signal amplitude is 1000 times longer than the noise components. It should be mentioned that the FFT in Fig. 15.30c is the result of a 5-ms transient simulation (i.e., 50 cycles at 10 kHz). In general, the more cycles in the transient analysis, the better is the frequency resolution of the FFT. Op-amps with gains of  $10^6$  and supply rails of  $\pm 15$  V were used in the simulation.

### DESIGN EXAMPLE 15.19

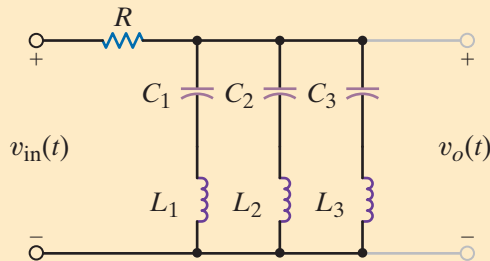
The circuit shown in Fig. 15.31 is a notch filter. At its resonant frequency, the  $L$ - $C$  series circuit has zero effective impedance, and, as a result, any signal at that frequency is short-circuited. For this reason, the filter is often referred to as a trap.

Consider the following scenario. A system operating at 1 kHz has picked up noise at a fundamental frequency of 10 kHz, as well as some second- and third-harmonic junk. Given this information, we wish to design a filter that will eliminate both the noise and its attendant harmonics.




**Figure 15.31**

A notch filter, or trap, utilizing a series  $L$ - $C$  branch.


**Figure 15.32**

The notch filter in Fig. 15.31 expanded to remove three different frequency components.

The key to the trap is setting the resonant frequency of the  $L$ - $C$  series branch to the frequency we wish to eliminate. Since we have three frequency components to remove, 10 kHz, 20 kHz, and 30 kHz, we will simply use three different  $L$ - $C$  branches as shown in Fig. 15.32 and set  $L_1C_1$  to trap at 10 kHz,  $L_2C_2$  at 20 kHz, and  $L_3C_3$  at 30 kHz. If we arbitrarily set the value of all inductors to 10  $\mu\text{H}$  and calculate the value of each capacitor, we obtain

$$C_1 = \frac{1}{(2\pi)^2 f^2 L} = \frac{1}{(2\pi)^2 (10^4)^2 (10^{-5})} = 25.3 \mu\text{F}$$

$$C_2 = \frac{1}{(2\pi)^2 (4 \times 10^4)^2 (10^{-5})} = 6.34 \mu\text{F}$$

$$C_3 = \frac{1}{(2\pi)^2 (9 \times 10^4)^2 (10^{-5})} = 2.81 \mu\text{F}$$

The three traps shown in Fig. 15.32 should eliminate the noise and its harmonics.

### SOLUTION

## SUMMARY

- A periodic function, its representation using a Fourier series, and some of the useful properties of a Fourier series are outlined here.

- **A periodic function**

$$f(t) = f(t + nT_0), \quad n = 1, 2, 3, \dots \text{ and } T_0 \text{ is the period}$$

- **Exponential Fourier series of a periodic function**

$$f(t) = \sum_{n=-\infty}^{\infty} c_n e^{jn\omega_0 t}, \quad c_n = \frac{1}{T_0} \int_{t_1}^{t_1+T_0} f(t) e^{-jn\omega_0 t} dt$$

- **Trigonometric Fourier series of a periodic function**

$$f(t) = a_0 + \sum_{n=1}^{\infty} (a_n \cos n\omega_0 t + b_n \sin n\omega_0 t)$$

$$a_n = \frac{2}{T_0} \int_{t_1}^{t_1+T_0} f(t) \cos n\omega_0 t dt,$$

$$b_n = \frac{2}{T_0} \int_{t_1}^{t_1+T_0} f(t) \sin n\omega_0 t dt,$$

and

$$a_0 = \frac{1}{T_0} \int_{t_1}^{t_1+T_0} f(t) dt$$

■ **Even symmetry of a periodic function**

$$f(t) = f(-t)$$

$$a_n = \frac{4}{T_0} \int_0^{T_0/2} f(t) \cos n\omega_0 t \, dt,$$

$$b_n = 0,$$

and

$$a_0 = \frac{2}{T_0} \int_0^{T_0/2} f(t) \, dt$$

■ **Odd symmetry of a periodic function**

$$f(t) = -f(-t)$$

$$a_n = 0, \quad b_n = \frac{4}{T_0} \int_0^{T_0/2} f(t) \sin n\omega_0 t \, dt, \quad \text{and} \quad a_0 = 0$$

■ **Half-wave symmetry of a periodic function**

$$f(t) = -f(t - T_0/2)$$

$$a_n = b_n = 0, \quad \text{for } n \text{ even}$$

$$a_n = \frac{4}{T_0} \int_0^{T_0/2} f(t) \cos n\omega_0 t \, dt \quad \text{for } n \text{ odd}$$

$$b_n = \frac{4}{T_0} \int_0^{T_0/2} f(t) \sin n\omega_0 t \, dt \quad \text{for } n \text{ odd and } a_0 = 0$$

■ **Time-shifting of a periodic function**

$$f(t - t_0) = \sum_{n=-\infty}^{\infty} (c_n e^{-jn\omega_0 t_0}) e^{jn\omega_0 t}$$

■ **Frequency spectrum of a periodic function**

A Fourier series contains discrete frequency components, called line spectra.

■ **Steady-state response of a periodic function input**

The periodic function input is expressed as a Fourier series, and phasor analysis is used to determine the response of each component of the series. Each component is transformed to the time domain, and superposition is used to determine the total output.

The Fourier transform, its features and properties, as well as its use in circuit analysis, are outlined here.

■ **Fourier transform for an aperiodic function**

$$F(\omega) = \int_{-\infty}^{\infty} f(t) e^{-j\omega t} \, dt \quad \text{and} \quad f(t) = \frac{1}{2\pi} \int_{-\infty}^{\infty} F(\omega) e^{j\omega t} \, d\omega$$

■ **Fourier transform pairs and properties**

The Fourier transform pairs in Table 15.2 and the properties in Table 15.3 can be used together to transform time-domain functions to the frequency domain and vice versa.

■ **Parseval's theorem for determining the energy content of a signal**

$$\int_{-\infty}^{\infty} f^2(t) \, dt = \frac{1}{2\pi} \int_{-\infty}^{\infty} |F(\omega)|^2 \, d\omega$$

■ **Network response to an aperiodic input**

An aperiodic input  $x(t)$  can be transformed to the frequency domain as  $\mathbf{X}(\omega)$ . Then using the network transfer function  $\mathbf{H}(\omega)$ , the output can be computed as  $\mathbf{Y}(\omega) = \mathbf{H}(\omega)\mathbf{X}(\omega)$ .  $y(t)$  can be obtained transforming  $\mathbf{Y}(\omega)$  to the time domain.

**PROBLEMS**

15.1 Find the exponential Fourier series for the periodic pulse train shown in Fig. P15.1.

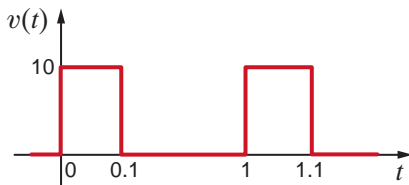


Figure P15.1

15.2 Find the exponential Fourier series for the periodic signal shown in Fig. P15.2.

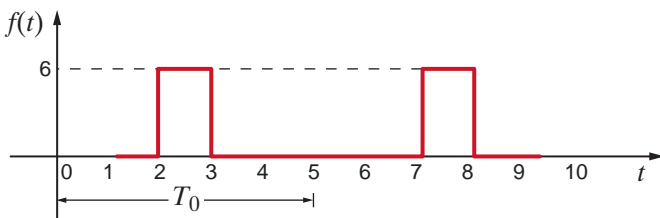


Figure P15.2

15.3 Find the exponential Fourier series for the signal shown in Fig. P15.3.

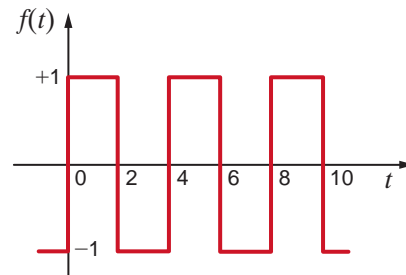


Figure P15.3

15.4 Find the exponential Fourier series for the signal shown in Fig. P15.4.

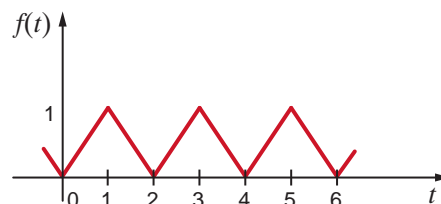
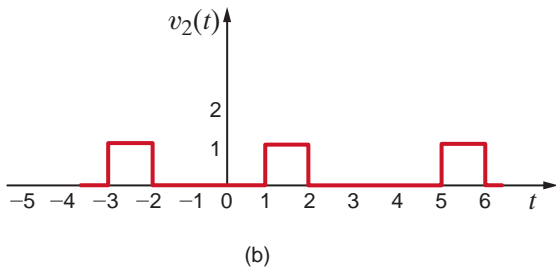
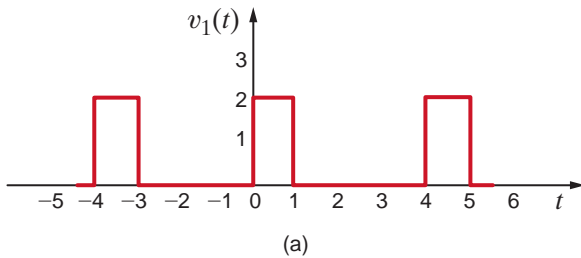


Figure P15.4

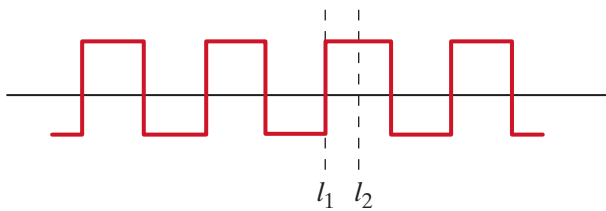


**15.5** Compute the exponential Fourier series for the waveform that is the sum of the two waveforms in Fig. P15.5 by computing the exponential Fourier series of the two waveforms and adding them.



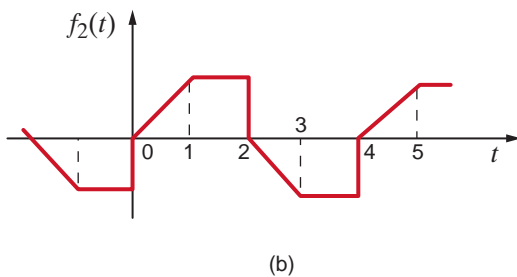
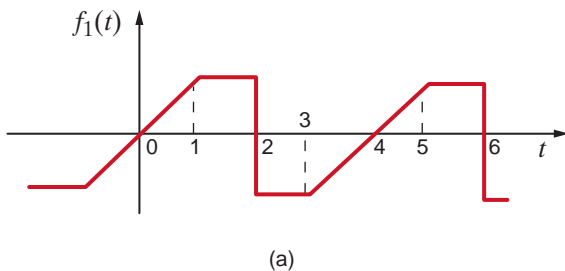
**Figure P15.5**

**15.6** Given the waveform in Fig. P15.6, determine the type of symmetry that exists if the origin is selected at (a)  $l_1$  and (b)  $l_2$ .



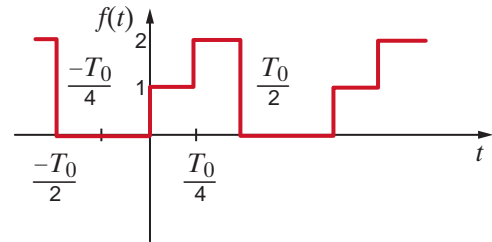
**Figure P15.6**

**15.7** What type of symmetry is exhibited by the two waveforms in Fig. P15.7?



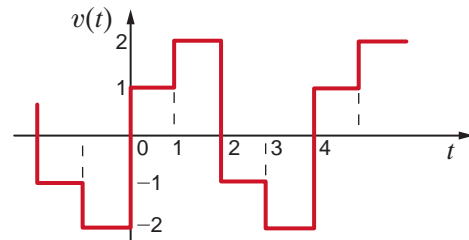
**Figure P15.7**

**15.8** Find the trigonometric Fourier series for the periodic waveform shown in Fig. P15.8.



**Figure P15.8**

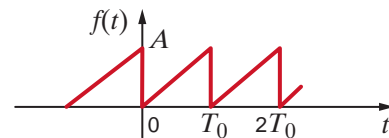
**15.9** Find the trigonometric Fourier series for the waveform shown in Fig. P15.9.



**Figure P15.9**

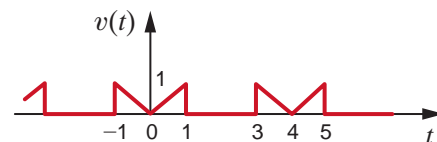
**15.10** Given the waveform in Fig. P15.10, show that

$$f(t) = \frac{A}{2} + \sum_{n=1}^{\infty} \frac{-A}{n\pi} \sin \frac{2n\pi}{T_0} t$$



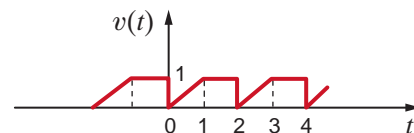
**Figure P15.10**

**15.11** Find the trigonometric Fourier series coefficients for the waveform in Fig. P15.11.



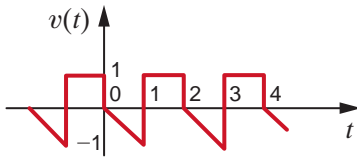
**Figure P15.11**

**15.12** Find the trigonometric Fourier series coefficients for the waveform in Fig. P15.12.



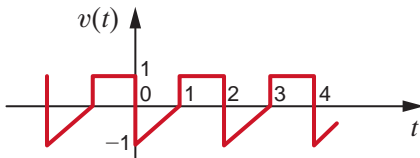
**Figure P15.12**

**15.13** Find the trigonometric Fourier series coefficients for the waveform in Fig. P15.13.



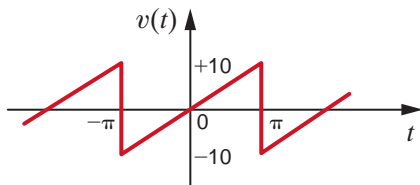
**Figure P15.13**

**15.14** Find the trigonometric Fourier series coefficients for the waveform in Fig. P15.14.



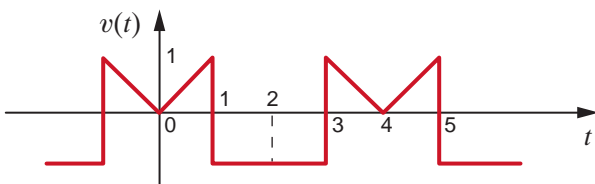
**Figure P15.14**

**15.15** Derive the trigonometric Fourier series for the waveform shown in Fig. P15.15.



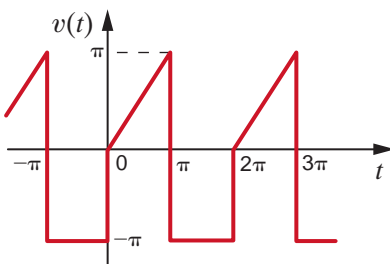
**Figure P15.15**

**15.16** Find the trigonometric Fourier series coefficients for the waveform in Fig. P15.16.



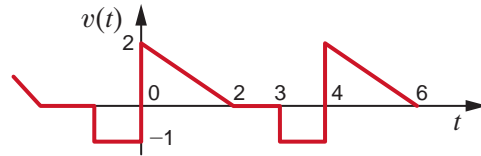
**Figure P15.16**

**15.17** Find the trigonometric Fourier series for the waveform shown in Fig. P15.17.



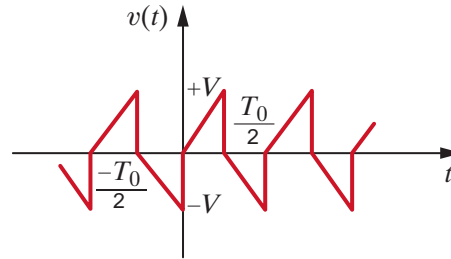
**Figure P15.17**

**15.18** Find the trigonometric Fourier series coefficients for the waveform in Fig. P15.18.



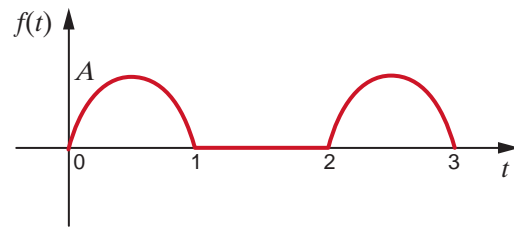
**Figure P15.18**

**15.19** Derive the trigonometric Fourier series for the function shown in Fig. P15.19.



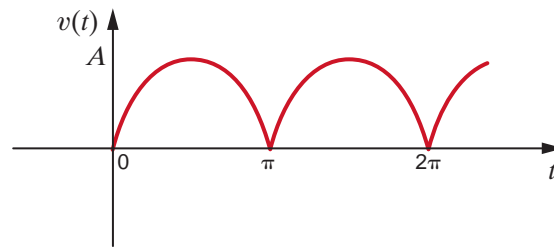
**Figure P15.19**

**15.20** Derive the trigonometric Fourier series of the waveform shown in Fig. P15.20.



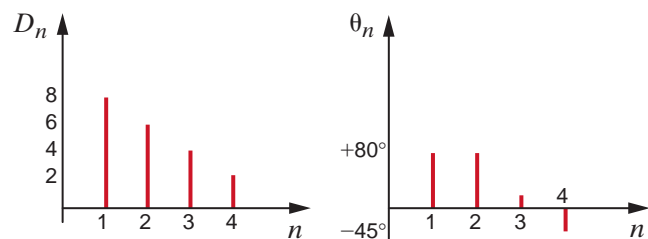
**Figure P15.20**

**15.21** Derive the trigonometric Fourier series for the function  $v(t) = A|\sin t|$  as shown in Fig. P15.21.



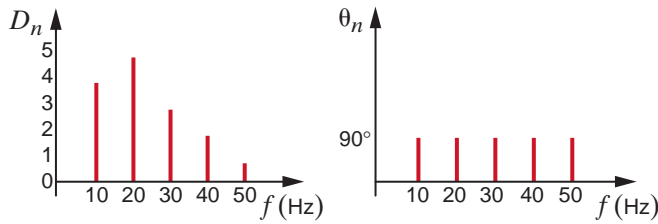
**Figure P15.21**

**15.22** The amplitude and phase spectra for a periodic function  $v(t)$  that has only a small number of terms is shown in Fig. P15.22. Determine the expression for  $v(t)$  if  $T_0 = 0.1$  s.



**Figure P15.22**

**15.23** The discrete line spectrum for a periodic function  $f(t)$  is shown in Fig. P15.23. Determine the expression for  $f(t)$ .

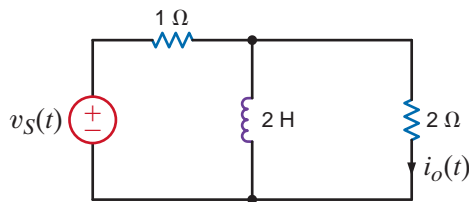


**Figure P15.23**

**15.24** Plot the first four terms of the amplitude and phase spectra for the signal

$$f(t) = \sum_{\substack{n=1 \\ n \text{ odd}}}^{\infty} \frac{-2}{n\pi} \sin \frac{n\pi}{2} \cos n\omega_0 t + \frac{6}{n\pi} \sin n\omega_0 t$$

**15.25** Determine the steady-state response of the current  $i_o(t)$  in the circuit shown in Fig. P15.25 if the input voltage is described by the waveform shown in Problem 15.15.



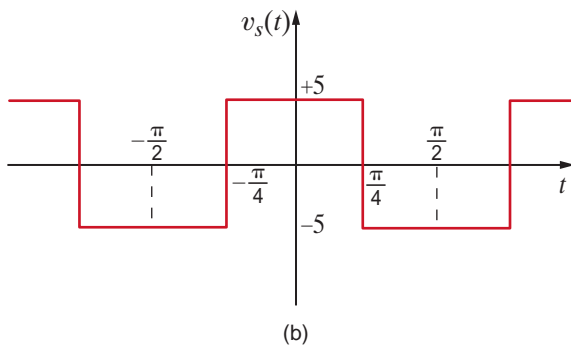
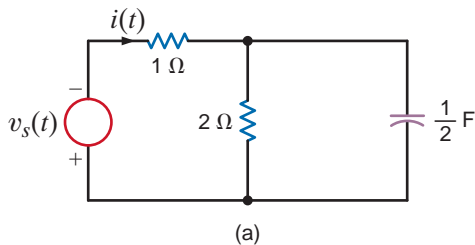
**Figure P15.25**

**15.26** If the input voltage in Problem 15.25 is

$$v_s(t) = 1 - \frac{2}{\pi} \sum_{n=1}^{\infty} \frac{1}{n} \sin 0.2\pi n t \text{ V}$$

find the expression for the steady-state current  $i_o(t)$ .

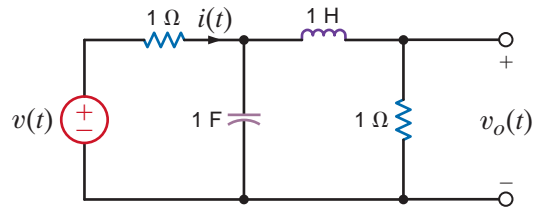
**15.27** Find the steady-state current  $i(t)$  in the network in Fig. P15.27a. If the input signal is shown in P15.27b.



**Figure P15.27**

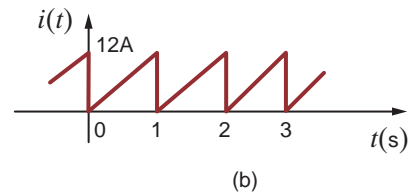
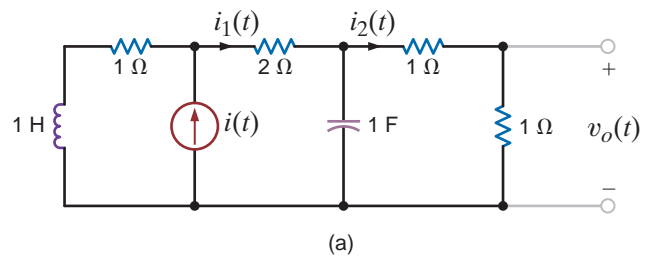
**15.28** Determine the first three terms of the steady-state voltage  $v_o(t)$  in Fig. P15.28 if the input voltage is a periodic signal of the form

$$v(t) = \frac{1}{2} + \sum_{n=1}^{\infty} \frac{1}{n\pi} (\cos n\pi - 1) \sin n\pi t \text{ V}$$



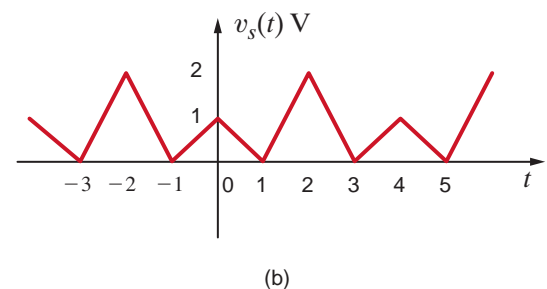
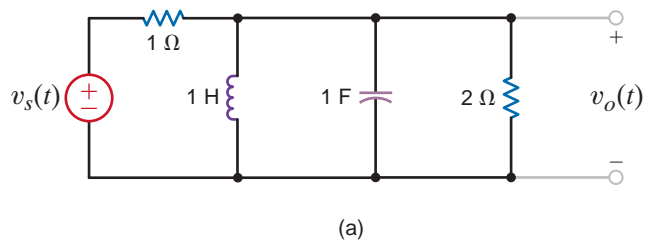
**Figure P15.28**

**15.29** Determine the steady-state voltage  $v_o(t)$  in the network in Fig. P15.29a if the input current is given in Fig. P15.29b.



**Figure P15.29**

**15.30** Determine the steady-state voltage  $v_o(t)$  in the circuit shown in Fig. P15.30a if the input signal is shown in Fig. P15.30b.



**Figure P15.30**

**15.31** The current  $i_s(t)$  shown in Fig. P15.31a is applied to the circuit shown in Fig. P15.31b. Determine the expression for the steady-state current  $i_o(t)$  using the first four harmonics.

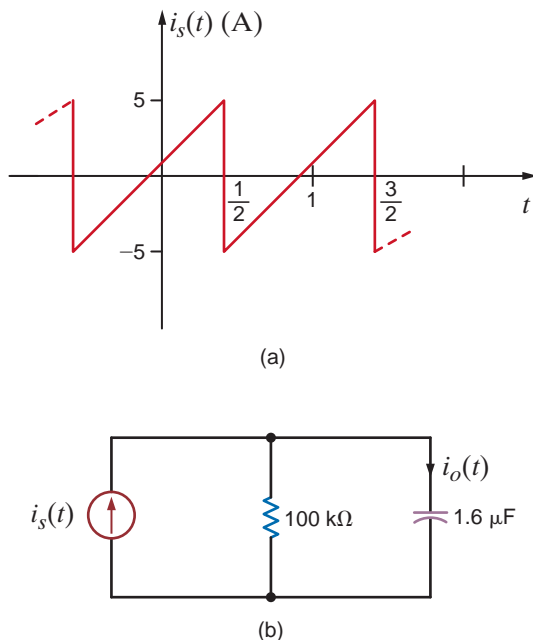


Figure P15.31

**15.32** Find the average power absorbed by the network in Fig. P15.32 if

$$v(t) = 12 + 6 \cos(377t - 10^\circ) + 4 \cos(754t - 60^\circ) \text{ V}$$

$$i(t) = 0.2 + 0.4 \cos(377t - 150^\circ) - 0.2 \cos(754t - 80^\circ) + 0.1 \cos(1131t - 60^\circ) \text{ A}$$

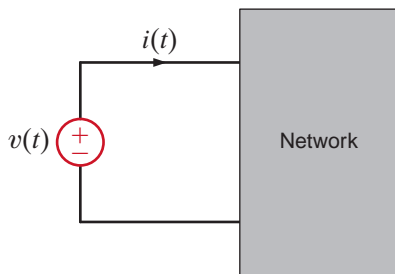


Figure P15.32

**15.33** Find the average power absorbed by the network in Fig. P15.33 if

$$v(t) = 60 + 36 \cos(377t + 45^\circ) + 24 \cos(754t - 60^\circ) \text{ V}$$

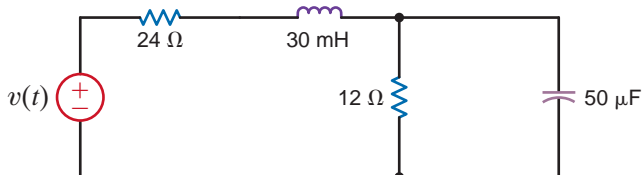


Figure P15.33

**15.34** Find the average power absorbed by the 12-Ω resistor in the network in Fig. P15.33 if

$$v(t) = 50 + 25 \cos(377t + 45^\circ) + 12.5 \cos(754t - 45^\circ) \text{ V}$$

**15.35** Determine the Fourier transform of the waveform shown in Fig. P15.35.

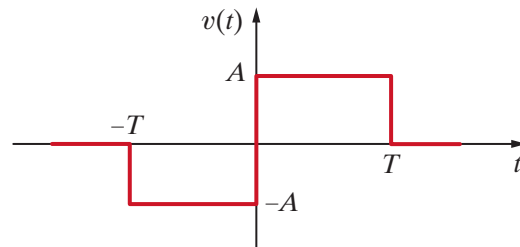


Figure P15.35

**15.36** Derive the Fourier transform for the following functions:

- (a)  $f(t) = e^{-2t} \cos 4tu(t)$
- (b)  $f(t) = e^{-2t} \sin 4tu(t)$

**15.37** Show that

$$\mathcal{F}[f_1(t)f_2(t)] = \frac{1}{2\pi} \int_{-\infty}^{\infty} \mathbf{F}_1(x)\mathbf{F}_2(\omega - x)dx$$

**15.38** Find the Fourier transform of the function

$$f(t) = 12e^{-2|t|} \cos 4t$$

**15.39** Use the transform technique to find  $v_o(t)$  in the network in Fig. P15.29a if (a)  $i(t) = 4(e^{-t} - e^{-2t})u(t)$  A and (b)  $i(t) = 12 \cos 4t$  A.

**15.40** The input signal to a network is  $v_i(t) = e^{-3t}u(t)$  V. The transfer function of the network is  $\mathbf{H}(j\omega) = 1/(j\omega + 4)$ . Find the output of the network  $v_o(t)$  if the initial conditions are zero.

**15.41** Determine  $v_o(t)$  in the circuit shown in Fig. P15.41 using the Fourier transform if the input signal is  $i_s(t) = (e^{-2t} + \cos t)u(t)$  A.

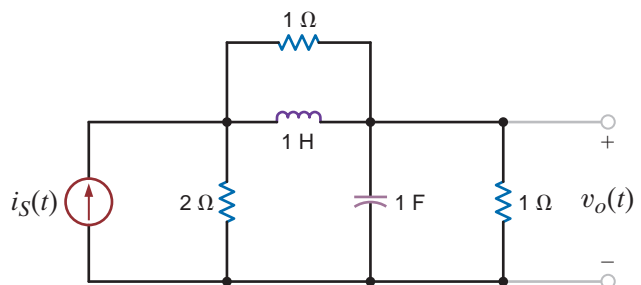
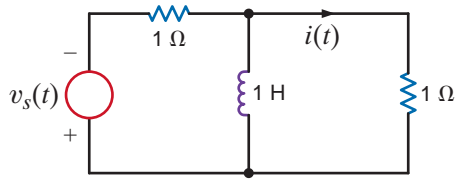


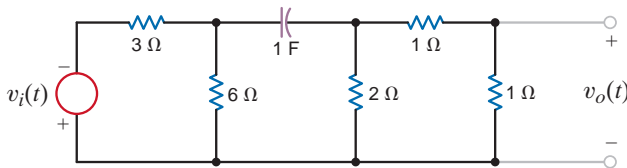
Figure P15.41

- 15.42** Use the Fourier transform to find  $i(t)$  in the network in Fig. P15.42 if  $v_i(t) = 2e^{-t}u(t)$ .



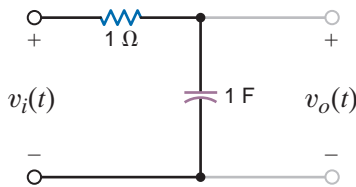
**Figure P15.42**

- 15.43** Use the transform technique to find  $v_o(t)$  in the network in Fig. P15.43 if (a)  $v_i(t) = 4e^{-t}u(t)$  V and (b)  $v_i(t) = 4(e^{-2t} + 2e^{-2t})u(t)$  V.



**Figure P15.43**

- 15.44** The input signal for the network in Fig. P15.44 is  $v_i(t) = 10e^{-5t}u(t)$  V. Determine the total 1- $\Omega$  energy content of the output  $v_o(t)$ .

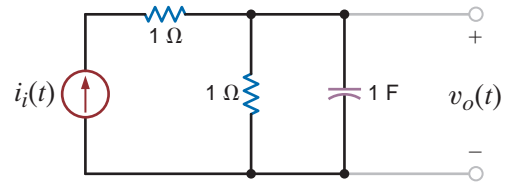


**Figure P15.44**

- 15.45** Compute the 1- $\Omega$  energy content of the signal  $v_o(t)$  in Fig. P15.44 in the frequency range from  $\omega = 2$  to  $\omega = 4$  rad/s.

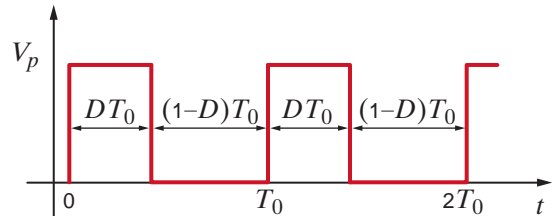
- 15.46** Determine the 1- $\Omega$  energy content of the signal  $v_o(t)$  in Fig. P15.44 in the frequency range from 0 to 1 rad/s.

- 15.47** Compare the 1- $\Omega$  energy at both the input and output of the network in Fig. P15.47 for the given input forcing function  $i_i(t) = 2e^{-4t}u(t)$  A.



**Figure P15.47**

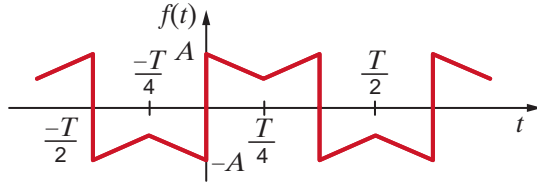
- 15.48** The waveform shown in Fig. P15.48 demonstrates what is called the duty cycle; that is,  $D$  illustrates the fraction of the total period that is occupied by the pulse. Determine the average value of this waveform.



**Figure P15.48**

**TYPICAL PROBLEMS FOUND ON THE FE EXAM**

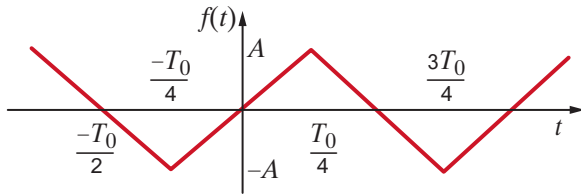
**15PFE-1** Given the waveform in Fig. 15PFE-1, determine if the trigonometric Fourier coefficient  $a_n$  has zero value or nonzero value and why.



**Figure 15PFE-1**

- a.  $a_n = 0$  for  $n$  even due to half-wave symmetry
- b.  $a_n = 0$  for all  $n$  due to odd symmetry
- c.  $a_n$  is finite and nonzero for all  $n$
- d.  $a_n$  is finite and nonzero for  $n$  even

**15PFE-2** Given the waveform in Fig. 15PFE-2, describe the type of symmetry and its impact on the trigonometric Fourier coefficient  $b_n$ .

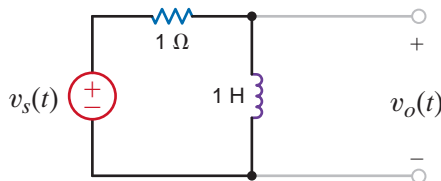


**Figure 15PFE-2**

- a.  $b_n = 0$  for  $n$  even due to odd symmetry;  $b_n$  is nonzero for  $n$  odd
- b.  $b_n$  is nonzero for all  $n$
- c.  $b_n = 0$  for all  $n$  due to half-wave symmetry
- d.  $b_n = 0$  for  $n$  even due to half-wave symmetry;  $b_n$  is nonzero for  $n$  odd

**15PFE-3** Determine the first three nonzero terms of the voltage  $v_o(t)$  in the circuit in Fig. 15PFE-3 if the input voltage  $v_s(t)$  is given by the expression

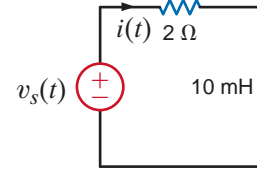
$$v_s(t) = \frac{1}{2} + \sum_{n=1}^{\infty} \frac{30}{n\pi} \cos 2nt \text{ V}$$



**Figure 15PFE-3**

- a.  $8.54 \cos(2t + 26.57^\circ) + 4.63 \cos(4t + 14.04^\circ) + 3.14 \cos(6t + 9.46^\circ) + \dots \text{ V}$
- b.  $10.82 \cos(2t + 35.63^\circ) + 6.25 \cos(4t + 18.02^\circ) + 2.16 \cos(6t + 30.27^\circ) + \dots \text{ V}$
- c.  $4.95 \cos(2t - 25.43^\circ) + 3.19 \cos(4t + 60.34^\circ) + 1.78 \cos(6t - 20.19^\circ) + \dots \text{ V}$
- d.  $7.35 \cos(2t + 50.12^\circ) + 4.61 \cos(4t + 21.24^\circ) + 2.28 \cos(6t - 10.61^\circ) + \dots \text{ V}$

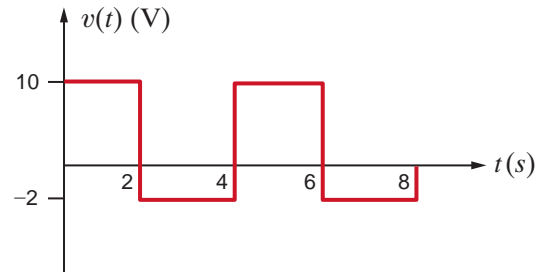
**15PFE-4** Find the average power absorbed by the network in Fig. 15PFE-4, if  $v_s(t) = 20 + 10 \cos(377t + 60^\circ) + 4 \cos(1131t + 45^\circ) \text{ V}$



**Figure 15PFE-4**

- a. 175.25 W
- b. 205.61 W
- c. 150.36 W
- d. 218.83 W

**15PPFE-5** Find the average value of the waveform shown in Fig. 15PFE-5.



**Figure 15PFE-5**

- a. 6 V
- b. 4 V
- c. 8 V
- d. 2 V



# TWO-PORT NETWORKS



Courtesy of Kyu Oh/iStockphoto

## THE LEARNING GOALS FOR THIS CHAPTER ARE:

- Know how to calculate admittance, impedance, hybrid, and transmission parameters for two-port networks
- Be able to convert between admittance, impedance, hybrid, and transmission parameters
- Understand the interconnection of two-port networks to form more complicated networks

**High Definition Television** You can see more clearly now—up to five times more clearly. That's what you get from today's high definition television with one to two million picture elements (pixels) per frame. Thinking back to when you first experienced HDTV, you may wonder how you could ever have been satisfied with standard television—itsself leaps ahead of your grandparent's black-and-white TV that received broadcasts during only a few hours of the day.

Resolution is the main reason why HDTV gives such a super-sharp picture. High resolution is achieved in HDTV broadcast

systems by transmitting millions of pixels at a high frame rate. You enjoy HDTV not only because of the high-resolution broadcast system but because your HDTV has sophisticated internal electronics that convert these received digital video compressed signals to a superior picture quality. It's the ultimate input-output system for entertainment.

In this chapter, we describe two-port networks in terms of input and output voltages and currents. Four sets of two-port parameters are examined, including a hybrid set that is especially useful for describing electronic device characteristics.

We show how to solve for each set using open-circuit and short-circuit operations, and we provide a table to convert from one set to another easily. We look at series, parallel, and cascade network interconnections in terms of these parameter sets. High definition television can be viewed as a two-port network—internal variables are hidden. You focus on receiving

broadcast signals as inputs to your HDTV and picture quality as its output. Later, you will learn these electronic details but already you can begin to work with the simple two-ports of this chapter—an elementary opening to the world of consumer electronics in HDTV.

## 16.1

### Admittance Parameters

We say that the linear network in Fig. 16.1a has a single *port*—that is, a single pair of terminals. The pair of terminals *A-B* that constitute this port could represent a single element (e.g., *R*, *L*, or *C*), or it could be some interconnection of these elements. The linear network in Fig. 16.1b is called a two-port. As a general rule the terminals *A-B* represent the input port, and the terminals *C-D* represent the output port.

In the two-port network shown in Fig. 16.2, it is customary to label the voltages and currents as shown; that is, the upper terminals are positive with respect to the lower terminals, the currents are into the two-port at the upper terminals, and, because KCL must be satisfied at each port, the current is out of the two-port at the lower terminals. Since the network is linear and contains no independent sources, the principle of superposition can be applied to determine the current  $\mathbf{I}_1$ , which can be written as the sum of two components, one due to  $\mathbf{V}_1$  and one due to  $\mathbf{V}_2$ . Using this principle, we can write

$$\mathbf{I}_1 = \mathbf{y}_{11} \mathbf{V}_1 + \mathbf{y}_{12} \mathbf{V}_2$$

where  $\mathbf{y}_{11}$  and  $\mathbf{y}_{12}$  are essentially constants of proportionality with units of siemens. In a similar manner  $\mathbf{I}_2$  can be written as

$$\mathbf{I}_2 = \mathbf{y}_{21} \mathbf{V}_1 + \mathbf{y}_{22} \mathbf{V}_2$$

Therefore, the two equations that describe the two-port network are

$$\mathbf{I}_1 = \mathbf{y}_{11} \mathbf{V}_1 + \mathbf{y}_{12} \mathbf{V}_2$$

$$\mathbf{I}_2 = \mathbf{y}_{21} \mathbf{V}_1 + \mathbf{y}_{22} \mathbf{V}_2$$

16.1

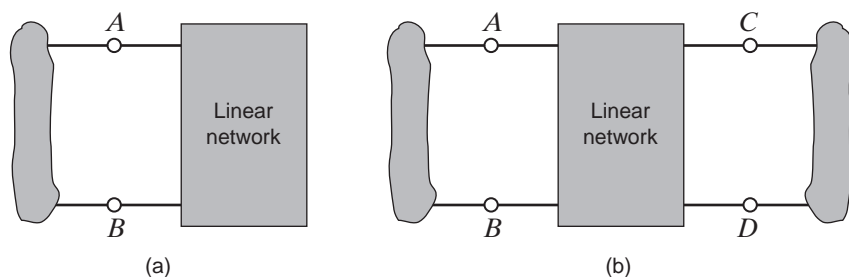
or in matrix form,

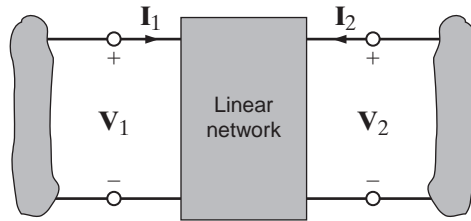
$$\begin{bmatrix} \mathbf{I}_1 \\ \mathbf{I}_2 \end{bmatrix} = \begin{bmatrix} \mathbf{y}_{11} & \mathbf{y}_{12} \\ \mathbf{y}_{21} & \mathbf{y}_{22} \end{bmatrix} \begin{bmatrix} \mathbf{V}_1 \\ \mathbf{V}_2 \end{bmatrix}$$

Note that subscript 1 refers to the input port and subscript 2 refers to the output port, and the equations describe what we will call the *Y parameters* for a network. If these parameters  $\mathbf{y}_{11}$ ,  $\mathbf{y}_{12}$ ,  $\mathbf{y}_{21}$ , and  $\mathbf{y}_{22}$  are known, the input/output operation of the two-port is completely defined.

**Figure 16.1**

- (a) Single-port network;  
(b) two-port network.





**Figure 16.2**  
Generalized two-port network.

From Eq. (16.1) we can determine the  $Y$  parameters in the following manner. Note from the equations that  $y_{11}$  is equal to  $I_1$  divided by  $V_1$  with the output short-circuited (i.e.,  $V_2 = 0$ ).

$$y_{11} = \left. \frac{I_1}{V_1} \right|_{V_2=0} \quad 16.2$$

Since  $y_{11}$  is an admittance at the input measured in siemens with the output short-circuited, it is called the *short-circuit input admittance*. The equations indicate that the other  $Y$  parameters can be determined in a similar manner:

$$\begin{aligned} y_{12} &= \left. \frac{I_1}{V_2} \right|_{V_1=0} \\ y_{21} &= \left. \frac{I_2}{V_1} \right|_{V_2=0} \\ y_{22} &= \left. \frac{I_2}{V_2} \right|_{V_1=0} \end{aligned} \quad 16.3$$

$y_{12}$  and  $y_{21}$  are called the *short-circuit transfer admittances*, and  $y_{22}$  is called the *short-circuit output admittance*. As a group, the  $Y$  parameters are referred to as the *short-circuit admittance parameters*. Note that by applying the preceding definitions, these parameters could be determined experimentally for a two-port network whose actual configuration is unknown.

We wish to determine the  $Y$  parameters for the two-port network shown in Fig. 16.3a. Once these parameters are known, we will determine the current in a  $4\text{-}\Omega$  load, which is connected to the output port when a  $2\text{-A}$  current source is applied at the input port.

## EXAMPLE 16.1

From Fig. 16.3b, we note that

$$I_1 = V_1 \left( \frac{1}{1} + \frac{1}{2} \right)$$

Therefore,

$$y_{11} = \frac{3}{2} \text{ S}$$

As shown in Fig. 16.3c,

$$I_1 = -\frac{V_2}{2}$$

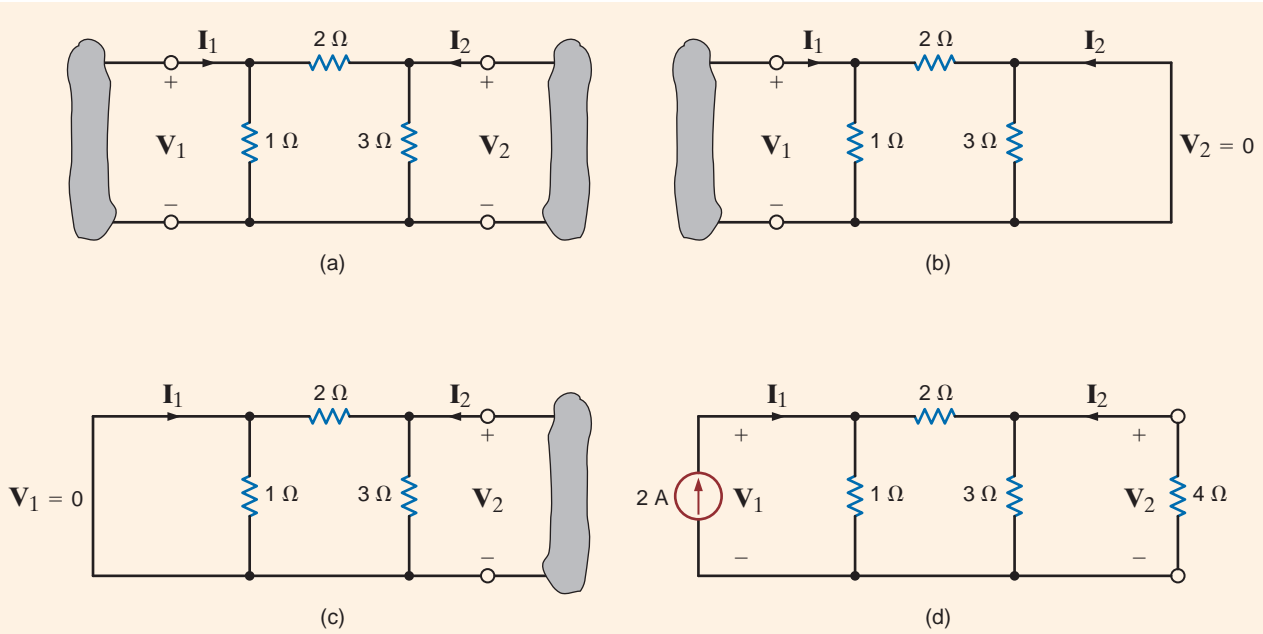
and hence,

$$y_{12} = -\frac{1}{2} \text{ S}$$

Also,  $y_{21}$  is computed from Fig. 16.3b using the equation

$$I_2 = -\frac{V_1}{2}$$

**SOLUTION**



**Figure 16.3** and therefore,  
 Networks employed in  
 Example 16.1.

$$y_{21} = -\frac{1}{2} \text{ S}$$

Finally,  $y_{22}$  can be derived from Fig. 16.3c using

$$I_2 = V_2 \left( \frac{1}{3} + \frac{1}{2} \right)$$

and

$$y_{22} = \frac{5}{6} \text{ S}$$

Therefore, the equations that describe the two-port itself are

$$I_1 = \frac{3}{2} V_1 - \frac{1}{2} V_2 \quad I_2 = -\frac{1}{2} V_1 + \frac{5}{6} V_2$$

These equations can now be employed to determine the operation of the two-port for some given set of terminal conditions. The terminal conditions we will examine are shown in Fig. 16.3d. From this figure we note that

$$I_1 = 2 \text{ A} \quad \text{and} \quad V_2 = -4I_2$$

Combining these with the preceding two-port equations yields

$$2 = \frac{3}{2} V_1 - \frac{1}{2} V_2$$

$$0 = -\frac{1}{2} V_1 + \frac{13}{12} V_2$$

or in matrix form

$$\begin{bmatrix} \frac{3}{2} & -\frac{1}{2} \\ -\frac{1}{2} & \frac{13}{12} \end{bmatrix} \begin{bmatrix} V_1 \\ V_2 \end{bmatrix} = \begin{bmatrix} 2 \\ 0 \end{bmatrix}$$

Note carefully that these equations are simply the nodal equations for the network in Fig. 16.3d. Solving the equations, we obtain  $V_2 = 8/11 \text{ V}$  and therefore  $I_2 = -2/11 \text{ A}$ .

## Learning Assessments

**E16.1** Find the Y parameters for the two-port network shown in Fig. E16.1.

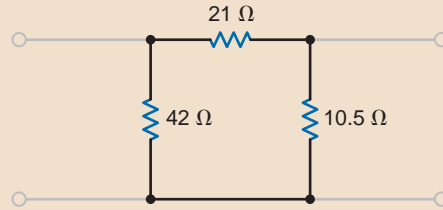


Figure E16.1

**ANSWER:**  $y_{11} = \frac{1}{14} \text{ S};$

$y_{12} = y_{21} = -\frac{1}{21} \text{ S}; y_{22} = \frac{1}{7} \text{ S}.$

**E16.2** If a 10-A source is connected to the input of the two-port network in Fig. E16.1, find the current in a 5-Ω resistor connected to the output port.

**ANSWER:**  $I_2 = -4.29 \text{ A}.$

**E16.3** Find the Y parameters for the two-port network shown in Fig. E16.3.

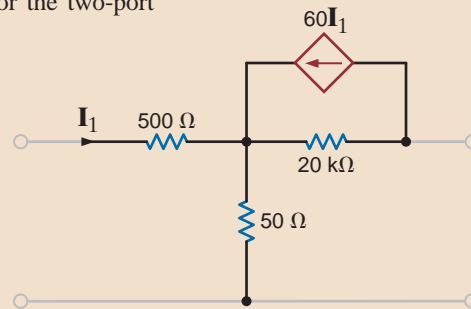


Figure E16.3

**ANSWER:**

$y_{11} = 282.2 \text{ } \mu\text{S}; y_{12} = -704 \text{ nS};$

$y_{21} = 16.9 \text{ mS}; y_{22} = 7.74 \text{ } \mu\text{S}.$

Once again, if we assume that the two-port network is a linear network that contains no independent sources, then by means of superposition we can write the input and output voltages as the sum of two components, one due to  $\mathbf{I}_1$  and one due to  $\mathbf{I}_2$ :

$$\mathbf{V}_1 = \mathbf{z}_{11}\mathbf{I}_1 + \mathbf{z}_{12}\mathbf{I}_2 \quad 16.4$$

$$\mathbf{V}_2 = \mathbf{z}_{21}\mathbf{I}_1 + \mathbf{z}_{22}\mathbf{I}_2$$

These equations, which describe the two-port network, can also be written in matrix form as

$$\begin{bmatrix} \mathbf{V}_1 \\ \mathbf{V}_2 \end{bmatrix} = \begin{bmatrix} \mathbf{z}_{11} & \mathbf{z}_{12} \\ \mathbf{z}_{21} & \mathbf{z}_{22} \end{bmatrix} \begin{bmatrix} \mathbf{I}_1 \\ \mathbf{I}_2 \end{bmatrix} \quad 16.5$$

Like the Y parameters, these *Z parameters* can be derived as follows:

$$\begin{aligned} \mathbf{z}_{11} &= \left. \frac{\mathbf{V}_1}{\mathbf{I}_1} \right|_{\mathbf{I}_2=0} \\ \mathbf{z}_{12} &= \left. \frac{\mathbf{V}_1}{\mathbf{I}_2} \right|_{\mathbf{I}_1=0} \\ \mathbf{z}_{21} &= \left. \frac{\mathbf{V}_2}{\mathbf{I}_1} \right|_{\mathbf{I}_2=0} \\ \mathbf{z}_{22} &= \left. \frac{\mathbf{V}_2}{\mathbf{I}_2} \right|_{\mathbf{I}_1=0} \end{aligned} \quad 16.6$$

In the preceding equations, setting  $\mathbf{I}_1$  or  $\mathbf{I}_2 = 0$  is equivalent to open-circuiting the input or output port. Therefore, the Z parameters are called the *open-circuit impedance parameters*.  $\mathbf{z}_{11}$  is called the *open-circuit input impedance*,  $\mathbf{z}_{22}$  is called the *open-circuit output impedance*, and  $\mathbf{z}_{12}$  and  $\mathbf{z}_{21}$  are termed *open-circuit transfer impedances*.

## 16.2

### Impedance Parameters

**EXAMPLE**  
**16.2**

We wish to find the Z parameters for the network in Fig. 16.4a. Once the parameters are known, we will use them to find the current in a 4-Ω resistor that is connected to the output terminals when a 12∠0°-V source with an internal impedance of 1 + j0 Ω is connected to the input.

**SOLUTION** From Fig. 16.4a we note that

$$z_{11} = 2 - j4 \Omega$$

$$z_{12} = -j4 \Omega$$

$$z_{21} = -j4 \Omega$$

$$z_{22} = -j4 + j2 = -j2 \Omega$$

The equations for the two-port network are, therefore,

$$V_1 = (2 - j4)I_1 - j4I_2$$

$$V_2 = -j4I_1 - j2I_2$$

The terminal conditions for the network shown in Fig. 16.4b are

$$V_1 = 12 \angle 0^\circ - (1)I_1$$

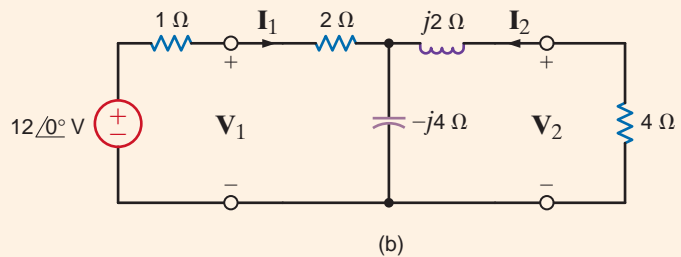
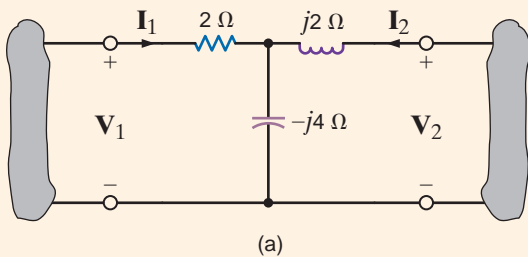
$$V_2 = -4I_2$$

Combining these with the two-port equations yields

$$12 \angle 0^\circ = (3 - j4)I_1 - j4I_2$$

$$0 = -j4I_1 + (4 - j2)I_2$$

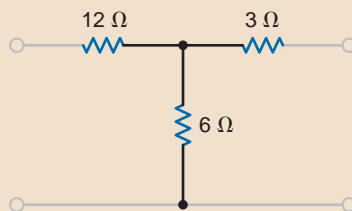
**Figure 16.4** It is interesting to note that these equations are the mesh equations for the network. Circuits employed in Example 16.2. If we solve the equations for  $I_2$ , we obtain  $I_2 = 1.61 \angle 137.73^\circ$  A, which is the current in the 4-Ω load.



## Learning Assessments

**E16.4** Find the Z parameters for the network in Fig. E16.4. Then compute the current in a 4-Ω load if a 12∠0°-V source is connected at the input port.

**ANSWER:**  
 $I_2 = -0.73 \angle 0^\circ$  A.



**Figure E16.4**

**E16.5** Determine the Z parameters for the two-port network shown in Fig. E16.5.

**ANSWER:**  $z_{11} = 15 \Omega$ ;  
 $z_{12} = 5 \Omega$ ;  $z_{21} = 5 - j8 \Omega$ ;  
 $z_{22} = 5 - j4 \Omega$ .

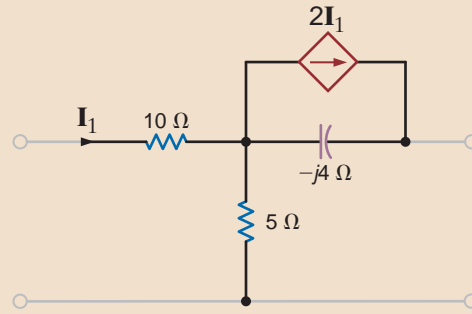


Figure E16.5

Under the assumptions used to develop the Y and Z parameters, we can obtain what are commonly called the *hybrid parameters*. In the pair of equations that define these parameters,  $\mathbf{V}_1$  and  $\mathbf{I}_2$  are the independent variables. Therefore, the two-port equations in terms of the hybrid parameters are

$$\begin{aligned} \mathbf{V}_1 &= \mathbf{h}_{11} \mathbf{I}_1 + \mathbf{h}_{12} \mathbf{V}_2 \\ \mathbf{I}_2 &= \mathbf{h}_{21} \mathbf{I}_1 + \mathbf{h}_{22} \mathbf{V}_2 \end{aligned} \quad 16.7$$

or in matrix form,

$$\begin{bmatrix} \mathbf{V}_1 \\ \mathbf{I}_2 \end{bmatrix} = \begin{bmatrix} \mathbf{h}_{11} & \mathbf{h}_{12} \\ \mathbf{h}_{21} & \mathbf{h}_{22} \end{bmatrix} \begin{bmatrix} \mathbf{I}_1 \\ \mathbf{V}_2 \end{bmatrix} \quad 16.8$$

These parameters are especially important in transistor circuit analysis. The parameters are determined via the following equations:

$$\begin{aligned} \mathbf{h}_{11} &= \left. \frac{\mathbf{V}_1}{\mathbf{I}_1} \right|_{\mathbf{V}_2=0} \\ \mathbf{h}_{12} &= \left. \frac{\mathbf{V}_1}{\mathbf{V}_2} \right|_{\mathbf{I}_1=0} \\ \mathbf{h}_{21} &= \left. \frac{\mathbf{I}_2}{\mathbf{I}_1} \right|_{\mathbf{V}_2=0} \\ \mathbf{h}_{22} &= \left. \frac{\mathbf{I}_2}{\mathbf{V}_2} \right|_{\mathbf{I}_1=0} \end{aligned} \quad 16.9$$

The parameters  $\mathbf{h}_{11}$ ,  $\mathbf{h}_{12}$ ,  $\mathbf{h}_{21}$ , and  $\mathbf{h}_{22}$  represent the *short-circuit input impedance*, the *open-circuit reverse voltage gain*, the *short-circuit forward current gain*, and the *open-circuit output admittance*, respectively. Because of this mix of parameters, they are called *hybrid parameters*. In transistor circuit analysis, the parameters  $\mathbf{h}_{11}$ ,  $\mathbf{h}_{12}$ ,  $\mathbf{h}_{21}$ , and  $\mathbf{h}_{22}$  are normally labeled  $\mathbf{h}_i$ ,  $\mathbf{h}_r$ ,  $\mathbf{h}_f$ , and  $\mathbf{h}_o$ .

An equivalent circuit for the op-amp in Fig. 16.5a is shown in Fig. 16.5b. We will determine the hybrid parameters for this network.

Parameter  $\mathbf{h}_{11}$  is derived from Fig. 16.5c. With the output shorted,  $\mathbf{h}_{11}$  is a function of only  $R_i$ ,  $R_1$ , and  $R_2$  and

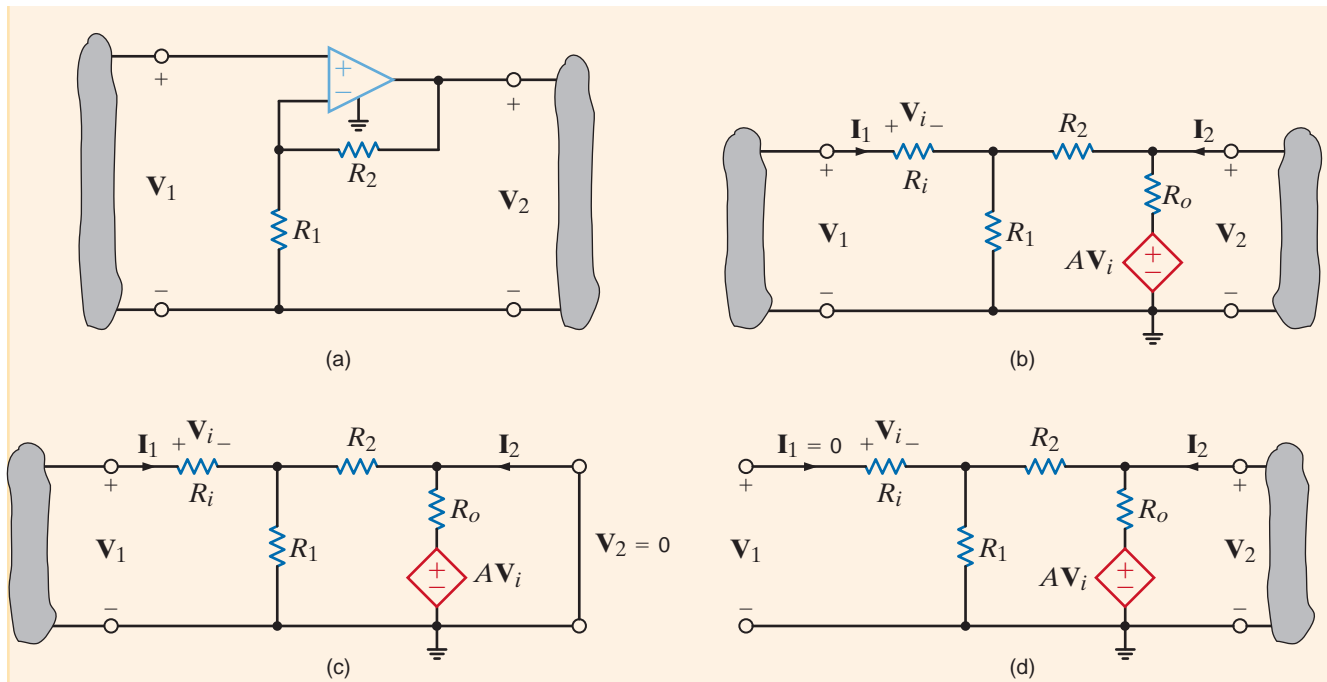
$$\mathbf{h}_{11} = R_i + \frac{R_1 R_2}{R_1 + R_2}$$

## 16.3

### Hybrid Parameters

### EXAMPLE 16.3

**SOLUTION**



**Figure 16.5**  
Circuit employed in  
Example 16.3.

Fig. 16.5d is used to derive  $h_{12}$ . Since  $I_1 = 0$ ,  $V_i = 0$  and the relationship between  $V_1$  and  $V_2$  is a simple voltage divider:

$$V_1 = \frac{V_2 R_1}{R_1 + R_2}$$

Therefore,

$$h_{12} = \frac{R_1}{R_1 + R_2}$$

KVL and KCL can be applied to Fig. 16.5c to determine  $h_{21}$ . The two equations that relate  $I_2$  to  $I_1$  are

$$\begin{aligned} V_i &= I_1 R_i \\ I_2 &= \frac{-AV_i}{R_o} - \frac{I_1 R_1}{R_1 + R_2} \end{aligned}$$

Therefore,

$$h_{21} = -\left(\frac{AR_i}{R_o} + \frac{R_1}{R_1 + R_2}\right)$$

Finally, the relationship between  $I_2$  and  $V_2$  in Fig. 16.5d is

$$\frac{V_2}{I_2} = \frac{R_o(R_1 + R_2)}{R_o + R_1 + R_2}$$

and therefore,

$$h_{22} = \frac{R_o + R_1 + R_2}{R_o(R_1 + R_2)}$$



The network equations are, therefore,

$$\begin{aligned} \mathbf{V}_1 &= \left( R_i + \frac{R_1 R_2}{R_1 + R_2} \right) \mathbf{I}_1 + \frac{R_1}{R_1 + R_2} \mathbf{V}_2 \\ \mathbf{I}_2 &= - \left( \frac{A R_i}{R_o} + \frac{R_1}{R_1 + R_2} \right) \mathbf{I}_1 + \frac{R_o + R_1 + R_2}{R_o (R_1 + R_2)} \mathbf{V}_2 \end{aligned}$$

## Learning Assessments

**E16.6** Find the hybrid parameters for the network shown in Fig. E16.4.

**ANSWER:**  $\mathbf{h}_{11} = 14 \Omega$ ;  
 $\mathbf{h}_{12} = \frac{2}{3}$ ;  $\mathbf{h}_{21} = -\frac{2}{3}$ ;  $\mathbf{h}_{22} = \frac{1}{9} \text{S}$ .

**E16.7** If a  $4\text{-}\Omega$  load is connected to the output port of the network examined in Learning Assessment E16.6, determine the input impedance of the two-port with the load connected.

**ANSWER:**  $\mathbf{Z}_i = 15.23 \Omega$ .

**E16.8** Find the hybrid parameters for the two-port network shown in Fig. E16.3.

**ANSWER:**  $\mathbf{h}_{11} = 3543.6 \Omega$ ;  
 $\mathbf{h}_{12} = 2.49 \times 10^{-3}$ ;  $\mathbf{h}_{21} = 59.85$ ;  
 $\mathbf{h}_{22} = 49.88 \mu\text{S}$ .

The final parameters we will discuss are called the *transmission parameters*. They are defined by the equations

$$\begin{aligned} \mathbf{V}_1 &= \mathbf{A}\mathbf{V}_2 - \mathbf{B}\mathbf{I}_2 \\ \mathbf{I}_1 &= \mathbf{C}\mathbf{V}_2 - \mathbf{D}\mathbf{I}_2 \end{aligned} \quad 16.10$$

or in matrix form,

$$\begin{bmatrix} \mathbf{V}_1 \\ \mathbf{I}_1 \end{bmatrix} = \begin{bmatrix} \mathbf{A} & \mathbf{B} \\ \mathbf{C} & \mathbf{D} \end{bmatrix} \begin{bmatrix} \mathbf{V}_2 \\ -\mathbf{I}_2 \end{bmatrix} \quad 16.11$$

These parameters are very useful in the analysis of circuits connected in cascade, as we will demonstrate later. The parameters are determined via the following equations:

$$\begin{aligned} \mathbf{A} &= \left. \frac{\mathbf{V}_1}{\mathbf{V}_2} \right|_{\mathbf{I}_2=0} \\ \mathbf{B} &= \left. \frac{\mathbf{V}_1}{-\mathbf{I}_2} \right|_{\mathbf{V}_2=0} \\ \mathbf{C} &= \left. \frac{\mathbf{I}_1}{\mathbf{V}_2} \right|_{\mathbf{I}_2=0} \\ \mathbf{D} &= \left. \frac{\mathbf{I}_1}{-\mathbf{I}_2} \right|_{\mathbf{V}_2=0} \end{aligned} \quad 16.12$$

**A**, **B**, **C**, and **D** represent the *open-circuit voltage ratio*, the *negative short-circuit transfer impedance*, the *open-circuit transfer admittance*, and the *negative short-circuit current ratio*, respectively. For obvious reasons the transmission parameters are commonly referred to as the *ABCD parameters*.

## 16.4

### Transmission Parameters

**EXAMPLE**
**16.4 SOLUTION**

We will now determine the transmission parameters for the network in Fig. 16.6.

Let us consider the relationship between the variables under the conditions stated in the parameters in Eq. (16.12). For example, with  $I_2 = 0$ ,  $V_2$  can be written as

$$V_2 = \frac{V_1}{1 + 1/j\omega} \left( \frac{1}{j\omega} \right)$$

or

$$A = \frac{V_1}{V_2} \Big|_{I_2=0} = 1 + j\omega$$

Similarly, with  $V_2 = 0$ , the relationship between  $I_2$  and  $V_1$  is

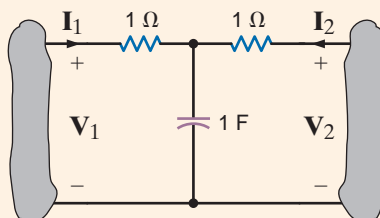
$$-I_2 = \frac{V_1}{1 + \frac{1/j\omega}{1 + 1/j\omega}}$$

or

$$B = \frac{V_1}{-I_2} = 2 + j\omega$$

In a similar manner, we can show that  $C = j\omega$  and  $D = 1 + j\omega$ .

**Figure 16.6**  
Circuit used in  
Example 16.4



## Learning Assessments

**E16.9** Compute the transmission parameters for the two-port network in Fig. E16.1.

**ANSWER:**  $A = 3$ ;  $B = 21 \Omega$ ;

$$C = \frac{1}{6} \text{ S}; D = \frac{3}{2}.$$

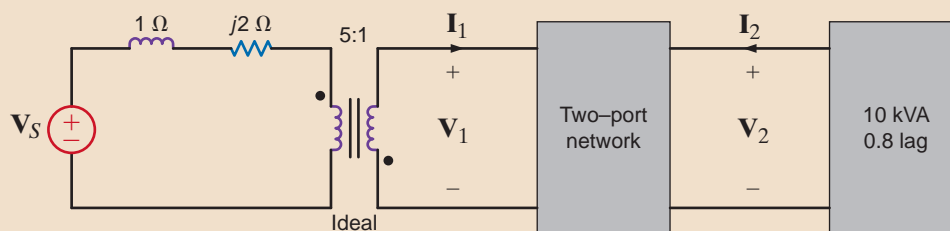
**E16.10** Find the transmission parameters for the two-port network shown in Fig. E16.5.

**ANSWER:**  $A = 0.843 + j1.348$ ;  $B = 4.61 + j3.37 \Omega$ ;

$C = 0.056 + j0.09 \text{ S}$ ;  $D = 0.64 + j0.225$ .

**E16.11** Find  $V_s$  if  $V_2 = 220 \angle 0^\circ \text{ V rms}$  in the network shown in Fig. E16.11.

**ANSWER:**  $V_s = 1015.9 \angle -137.63^\circ \text{ V rms}$ .



**Figure E16.11**

$$\begin{bmatrix} V_1 \\ I_1 \end{bmatrix} = \begin{bmatrix} 0.333 + j0.333 & -(1.333 + j6) \\ j0.1667 & -(0.333 + j0.333) \end{bmatrix} \begin{bmatrix} V_2 \\ I_2 \end{bmatrix}$$

If all the two-port parameters for a network exist, it is possible to relate one set of parameters to another since the parameters interrelate the variables  $V_1$ ,  $I_1$ ,  $V_2$ , and  $I_2$ .

Table 16.1 lists all the conversion formulas that relate one set of two-port parameters to another. Note that  $\Delta_Z$ ,  $\Delta_Y$ ,  $\Delta_H$ , and  $\Delta_T$  refer to the determinants of the matrices for the Z, Y, hybrid, and ABCD parameters, respectively. Therefore, given one set of parameters for a network, we can use Table 16.1 to find others.

## 16.5

## Parameter Conversions

**TABLE 16.1** Two-port parameter conversion formulas

$\begin{bmatrix} z_{11} & z_{12} \\ z_{21} & z_{22} \end{bmatrix}$	$\begin{bmatrix} y_{22} & -y_{12} \\ \Delta_Y & \Delta_Y \\ -y_{21} & y_{11} \\ \Delta_Y & \Delta_Y \end{bmatrix}$	$\begin{bmatrix} A & \Delta_T \\ C & C \\ 1 & D \\ C & C \end{bmatrix}$	$\begin{bmatrix} \Delta_H & h_{12} \\ h_{22} & h_{22} \\ -h_{21} & 1 \\ h_{22} & h_{22} \end{bmatrix}$
$\begin{bmatrix} z_{22} & -z_{12} \\ \Delta_Z & \Delta_Z \\ -z_{21} & z_{11} \\ \Delta_Z & \Delta_Z \end{bmatrix}$	$\begin{bmatrix} y_{11} & y_{12} \\ y_{21} & y_{22} \end{bmatrix}$	$\begin{bmatrix} D & -\Delta_T \\ B & B \\ -1 & A \\ B & B \end{bmatrix}$	$\begin{bmatrix} 1 & -h_{12} \\ h_{11} & h_{11} \\ h_{21} & \Delta_H \\ h_{11} & h_{11} \end{bmatrix}$
$\begin{bmatrix} z_{11} & \Delta_Z \\ z_{21} & z_{21} \\ 1 & z_{22} \\ z_{21} & z_{21} \end{bmatrix}$	$\begin{bmatrix} -y_{22} & -1 \\ y_{21} & y_{21} \\ -\Delta_Y & -y_{11} \\ y_{21} & y_{21} \end{bmatrix}$	$\begin{bmatrix} A & B \\ C & D \end{bmatrix}$	$\begin{bmatrix} -\Delta_H & -h_{11} \\ h_{21} & h_{21} \\ -h_{22} & -1 \\ h_{21} & h_{21} \end{bmatrix}$
$\begin{bmatrix} \Delta_Z & z_{12} \\ z_{22} & z_{22} \\ -z_{21} & 1 \\ z_{22} & z_{22} \end{bmatrix}$	$\begin{bmatrix} 1 & -y_{12} \\ y_{11} & y_{11} \\ y_{21} & \Delta_Y \\ y_{11} & y_{11} \end{bmatrix}$	$\begin{bmatrix} B & \Delta_T \\ D & D \\ -1 & C \\ D & D \end{bmatrix}$	$\begin{bmatrix} h_{11} & h_{12} \\ h_{21} & h_{22} \end{bmatrix}$

## Learning Assessment

**E16.12** Determine the Y parameters for a two-port if the Z parameters are

$$\mathbf{Z} = \begin{bmatrix} 18 & 6 \\ 6 & 9 \end{bmatrix}$$

**ANSWER:**  $y_{11} = \frac{1}{14} \text{ S};$   
 $y_{12} = y_{21} = -\frac{1}{21} \text{ S};$   
 $y_{22} = \frac{1}{7} \text{ S}.$

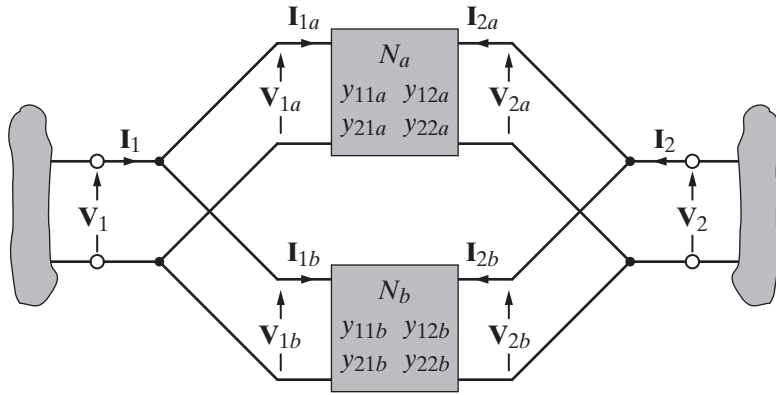
Interconnected two-port circuits are important because when designing complex systems it is generally much easier to design a number of simpler subsystems that can then be interconnected to form the complete system. If each subsystem is treated as a two-port network, the interconnection techniques described in this section provide some insight into the manner in which a total system may be analyzed and/or designed. Thus, we will now illustrate techniques for treating a network as a combination of subnetworks. We will, therefore, analyze a

## 16.6

## Interconnection of Two-Ports

**Figure 16.7**

Parallel interconnection of two-ports.



two-port network as an interconnection of simpler two-ports. Although two-ports can be interconnected in a variety of ways, we will treat only three types of connections: parallel, series, and cascade.

For the two-port interconnections to be valid, they must satisfy certain specific requirements that are outlined in the book *Network Analysis and Synthesis* by L. Weinberg (McGraw-Hill, 1962). The following examples will serve to illustrate the interconnection techniques.

In the parallel interconnection case, a two-port  $N$  is composed of two-ports  $N_a$  and  $N_b$  connected as shown in Fig. 16.7. *Provided that the terminal characteristics of the two networks  $N_a$  and  $N_b$  are not altered by the interconnection illustrated in the figure*, then the Y parameters for the total network are

$$\begin{bmatrix} y_{11} & y_{12} \\ y_{21} & y_{22} \end{bmatrix} = \begin{bmatrix} y_{11a} + y_{11b} & y_{12a} + y_{12b} \\ y_{21a} + y_{21b} & y_{22a} + y_{22b} \end{bmatrix} \quad 16.13$$

and hence to determine the Y parameters for the total network, we simply add the Y parameters of the two networks  $N_a$  and  $N_b$ .

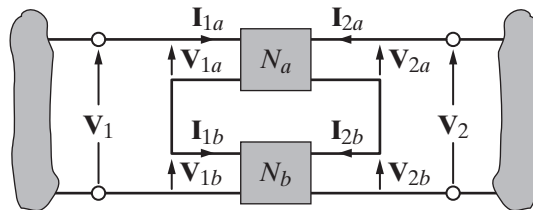
Likewise, if the two-port  $N$  is composed of the series connection of  $N_a$  and  $N_b$ , as shown in Fig. 16.8, then *once again, as long as the terminal characteristics of the two networks  $N_a$  and  $N_b$  are not altered by the series interconnection*, the Z parameters for the total network are

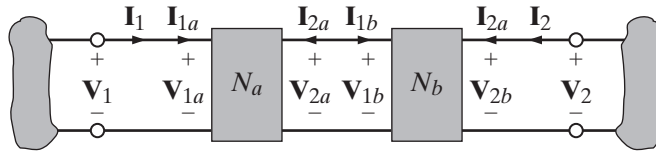
$$\begin{bmatrix} z_{11} & z_{12} \\ z_{21} & z_{22} \end{bmatrix} = \begin{bmatrix} z_{11a} + z_{11b} & z_{12a} + z_{12b} \\ z_{21a} + z_{21b} & z_{22a} + z_{22b} \end{bmatrix} \quad 16.14$$

Therefore, the Z parameters for the total network are equal to the sum of the Z parameters for the networks  $N_a$  and  $N_b$ .

**Figure 16.8**

Series interconnection of two-ports.





**Figure 16.9**  
Cascade interconnection  
of networks.

Finally, if a two-port  $N$  is composed of a cascade interconnection of  $N_a$  and  $N_b$ , as shown in Fig. 16.9, the equations for the total network are

$$\begin{bmatrix} \mathbf{V}_1 \\ \mathbf{I}_1 \end{bmatrix} = \begin{bmatrix} \mathbf{A}_a & \mathbf{B}_a \\ \mathbf{C}_a & \mathbf{D}_a \end{bmatrix} \begin{bmatrix} \mathbf{A}_b & \mathbf{B}_b \\ \mathbf{C}_b & \mathbf{D}_b \end{bmatrix} \begin{bmatrix} \mathbf{V}_2 \\ -\mathbf{I}_2 \end{bmatrix} \quad 16.15$$

Hence, the transmission parameters for the total network are derived by matrix multiplication as indicated previously. The order of the matrix multiplication is important and is performed in the order in which the networks are interconnected.

The cascade interconnection is very useful. Many large systems can be conveniently modeled as the cascade interconnection of a number of stages. For example, the very weak signal picked up by a radio antenna is passed through a number of successive stages of amplification—each of which can be modeled as a two-port subnetwork. In addition, in contrast to the other interconnection schemes, no restrictions are placed on the parameters of  $N_a$  and  $N_b$  in obtaining the parameters of the two-port resulting from their interconnection.

We wish to determine the Y parameters for the network shown in Fig. 16.10a by considering it to be a parallel combination of two networks as shown in Fig. 16.10b. The capacitive network will be referred to as  $N_a$ , and the resistive network will be referred to as  $N_b$ .

The Y parameters for  $N_a$  are

$$\begin{aligned} \mathbf{y}_{11a} &= j\frac{1}{2}\text{S} & \mathbf{y}_{12a} &= -j\frac{1}{2}\text{S} \\ \mathbf{y}_{21a} &= -j\frac{1}{2}\text{S} & \mathbf{y}_{22a} &= j\frac{1}{2}\text{S} \end{aligned}$$

and the Y parameters for  $N_b$  are

$$\begin{aligned} \mathbf{y}_{11b} &= \frac{3}{5}\text{S} & \mathbf{y}_{12b} &= -\frac{1}{5}\text{S} \\ \mathbf{y}_{21b} &= -\frac{1}{5}\text{S} & \mathbf{y}_{22b} &= \frac{2}{5}\text{S} \end{aligned}$$

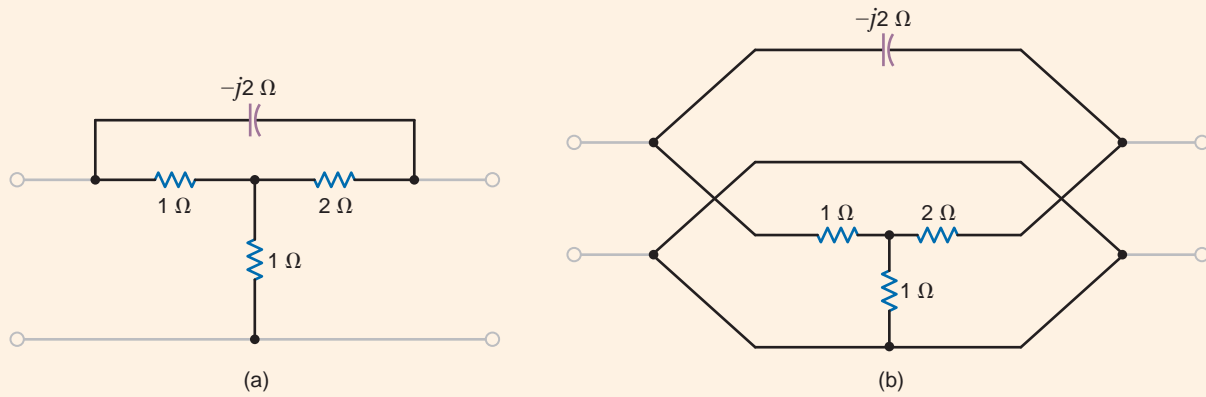
Hence, the Y parameters for the network in Fig. 16.10 are

$$\begin{aligned} \mathbf{y}_{11} &= \frac{3}{5} + j\frac{1}{2}\text{S} & \mathbf{y}_{12} &= -\left(\frac{1}{5} + j\frac{1}{2}\right)\text{S} \\ \mathbf{y}_{21} &= -\left(\frac{1}{5} + j\frac{1}{2}\right)\text{S} & \mathbf{y}_{22} &= \frac{2}{5} + j\frac{1}{2}\text{S} \end{aligned}$$

To gain an appreciation for the simplicity of this approach, you need only try to find the Y parameters for the network in Fig. 16.10a directly.

## EXAMPLE 16.5

### SOLUTION



**Figure 16.10**

Network composed of the parallel combination of two subnetworks.

**EXAMPLE 16.6**

Let us determine the Z parameters for the network shown in Fig. 16.10a. The circuit is redrawn in Fig. 16.11, illustrating a series interconnection. The upper network will be referred to as  $N_a$ , and the lower network as  $N_b$ .

**SOLUTION** The Z parameters for  $N_a$  are

$$\begin{aligned} z_{11a} &= \frac{2 - 2j}{3 - 2j} \Omega & z_{12a} &= \frac{2}{3 - 2j} \Omega \\ z_{21a} &= \frac{2}{3 - 2j} \Omega & z_{22a} &= \frac{2 - 4j}{3 - 2j} \Omega \end{aligned}$$

and the Z parameters for  $N_b$  are

$$z_{11b} = z_{12b} = z_{21b} = z_{22b} = 1 \Omega$$

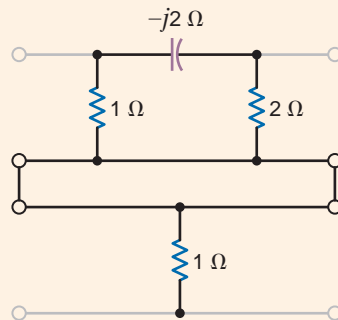
Hence the Z parameters for the total network are

$$\begin{aligned} z_{11} &= \frac{5 - 4j}{3 - 2j} \Omega & z_{12} &= \frac{5 - 2j}{3 - 2j} \Omega \\ z_{21} &= \frac{5 - 2j}{3 - 2j} \Omega & z_{22} &= \frac{5 - 6j}{3 - 2j} \Omega \end{aligned}$$

We could easily check these results against those obtained in Example 16.5 by applying the conversion formulas in Table 16.1.

**Figure 16.11**

Network in Fig. 16.10a redrawn as a series interconnection of two networks.



Let us derive the two-port parameters of the network in Fig. 16.12 by considering it to be a cascade connection of two networks as shown in Fig. 16.6.

## EXAMPLE 16.7

The ABCD parameters for the identical T networks were calculated in Example 16.4 to be

### SOLUTION

$$\begin{aligned} \mathbf{A} &= 1 + j\omega & \mathbf{B} &= 2 + j\omega \\ \mathbf{C} &= j\omega & \mathbf{D} &= 1 + j\omega \end{aligned}$$

Therefore, the transmission parameters for the total network are

$$\begin{bmatrix} \mathbf{A} & \mathbf{B} \\ \mathbf{C} & \mathbf{D} \end{bmatrix} = \begin{bmatrix} 1 + j\omega & 2 + j\omega \\ j\omega & 1 + j\omega \end{bmatrix} \begin{bmatrix} 1 + j\omega & 2 + j\omega \\ j\omega & 1 + j\omega \end{bmatrix}$$

Performing the matrix multiplication, we obtain

$$\begin{bmatrix} \mathbf{A} & \mathbf{B} \\ \mathbf{C} & \mathbf{D} \end{bmatrix} = \begin{bmatrix} 1 + 4j\omega - 2\omega^2 & 4 + 6j\omega - 2\omega^2 \\ 2j\omega - 2\omega^2 & 1 + 4j\omega - 2\omega^2 \end{bmatrix}$$

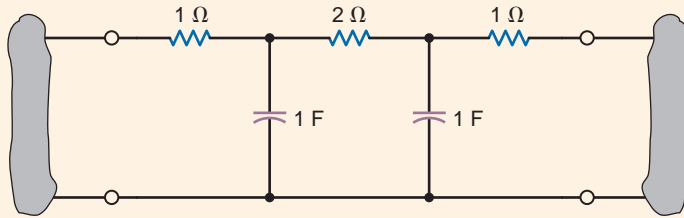


Figure 16.12

Circuit used in Example 16.7.

## 16.7

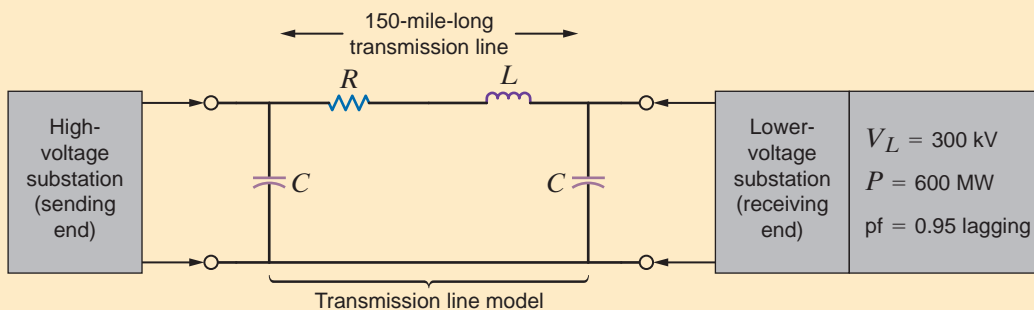
### Application Examples

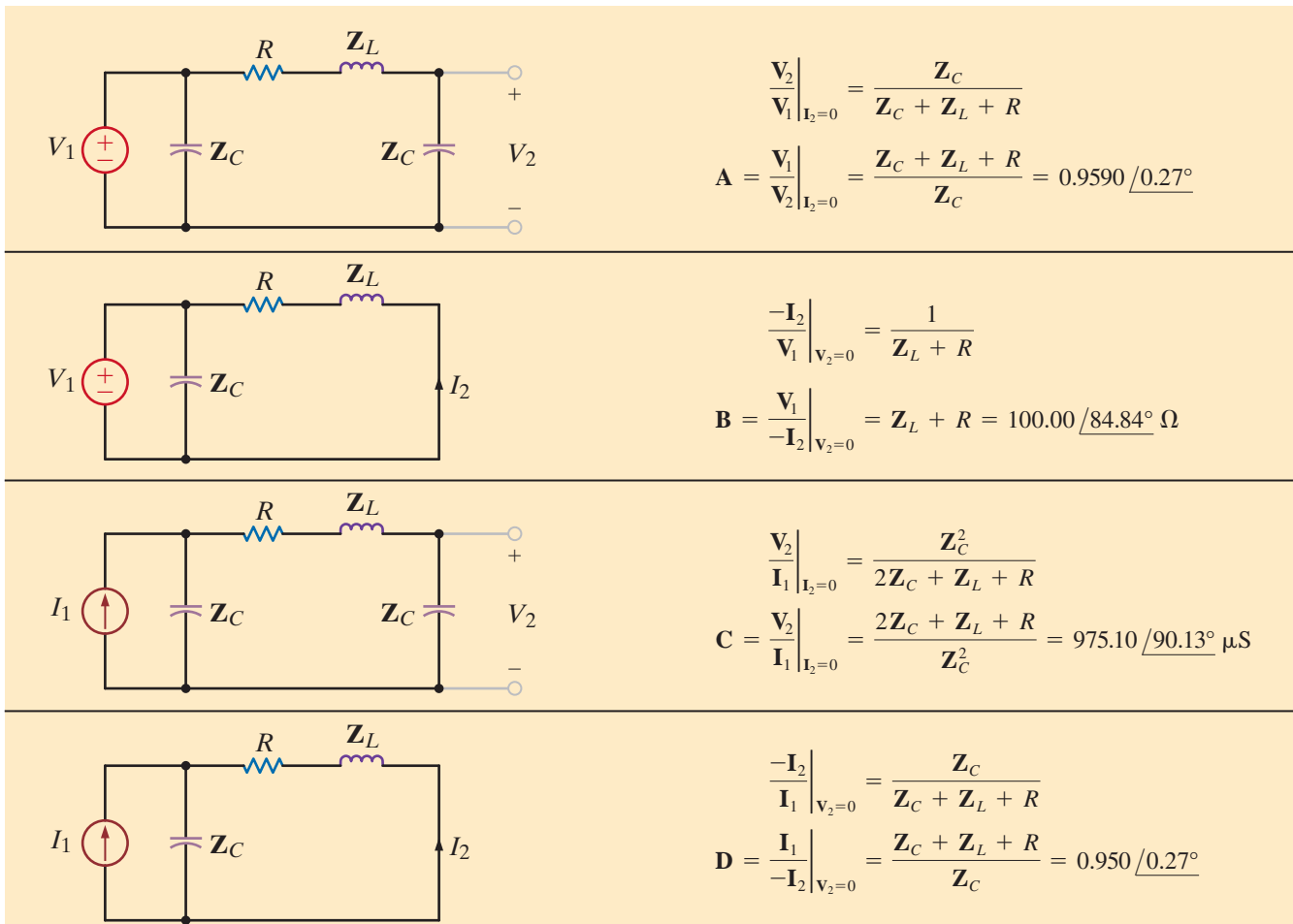
Fig. 16.13 is a per-phase model used in the analysis of three-phase high-voltage transmission lines. As a general rule in these systems, the voltage and current at the receiving end are known, and it is the conditions at the sending end that we wish to find. The transmission parameters perfectly fit this scenario. Thus, we will find the transmission parameters for a reasonable transmission line model, and, then, given the receiving-end voltages, power, and power factor, we will find the receiving-end current, sending-end voltage and current, and the transmission efficiency. Finally, we will plot the efficiency versus the power factor.

## APPLICATION EXAMPLE 16.8

Figure 16.13

A  $\pi$ -circuit model for power transmission lines.




**Figure 16.14**

Equivalent circuits used to determine the transmission parameters.

**SOLUTION** Given a 150-mile-long transmission line, reasonable values for the  $\pi$ -circuit elements of the transmission line model are  $C = 1.326 \mu\text{F}$ ,  $R = 9.0 \Omega$ , and  $L = 264.18 \text{ mH}$ . The transmission parameters can be easily found using the circuits in Fig. 16.14. At 60 Hz, the transmission parameters are

$$A = 0.9590 \angle 0.27^\circ \quad C = 975.10 \angle 90.13^\circ \mu\text{S}$$

$$B = 100.00 \angle 84.84^\circ \Omega \quad D = 0.9590 \angle 0.27^\circ$$

To use the transmission parameters, we must know the receiving-end current,  $I_2$ . Using standard three-phase circuit analysis outlined in Chapter 11, we find the line current to be

$$I_2 = -\frac{600 \angle \cos^{-1}(\text{pf})}{\sqrt{3}(300)(\text{pf})} = -1.215 \angle -18.19^\circ \text{ kA}$$

where the line-to-neutral (i.e., phase) voltage at the receiving end,  $V_2$ , is assumed to have zero phase. Now, we can use the transmission parameters to determine the sending-end voltage and power. Since the line-to-neutral voltage at the receiving end is  $300/\sqrt{3} = 173.21 \text{ kV}$ , the results are

$$V_1 = AV_2 - BI_2 = (0.9590 \angle 0.27^\circ)(173.21 \angle 0^\circ) + (100.00 \angle 84.84^\circ)(1.215 \angle -18.19^\circ) = 241.92 \angle 27.67^\circ \text{ kV}$$

$$I_1 = CV_2 - DI_2 = (975.10 \times 10^{-6} \angle 90.13^\circ)(173.21 \angle 0^\circ) + (0.9590 \angle 0.27^\circ)(1.215 \angle -18.19^\circ) = 1.12 \angle -9.71^\circ \text{ kA}$$



At the sending end, the power factor and power are

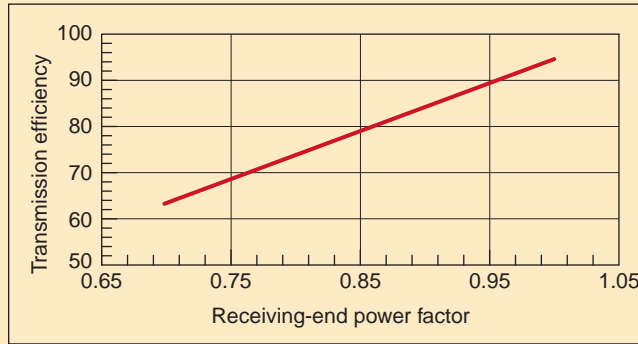
$$\text{pf} = \cos(27.67 - (-9.71)) = \cos(37.38) = 0.80 \text{ lagging}$$

$$P_1 = 3V_1I_1(\text{pf}) = (3)(241.92)(1.12)(0.80) = 650.28 \text{ MW}$$

Finally, the transmission efficiency is

$$\eta = \frac{P_2}{P_1} = \frac{600}{650.28} = 92.3\%$$

This entire analysis can be easily programmed into an Excel spreadsheet. A plot of the transmission efficiency versus power factor at the receiving end is shown in Fig. 16.15. We see that as the power factor decreases, the transmission efficiency drops, which increases the cost of production for the power utility. This is precisely why utilities encourage industrial customers to operate as close to unity power factor as possible.



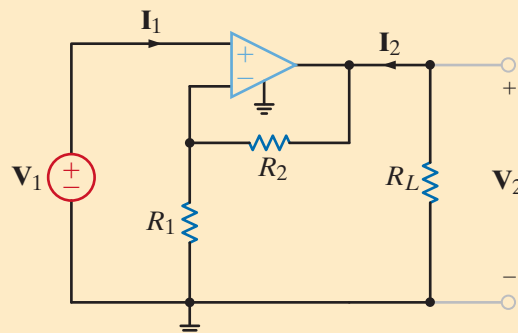
**Figure 16.15**

The results of an Excel simulation showing the effect of the receiving-end power factor on the transmission efficiency. Because the Excel simulation used more significant digits, slight differences exist between the values in the plot and those in the text.

We have available the noninverting op-amp circuit shown in Fig. 16.16 with the following parameters:  $A = 20,000$ ,  $R_i = 1 \text{ M}\Omega$ ,  $R_o = 500 \Omega$ ,  $R_1 = 1 \text{ k}\Omega$ , and  $R_2 = 49 \text{ k}\Omega$ . To determine the possible applications for this network configuration, we will determine the effect of the load  $R_L$  on the gain and the gain error (a comparison of the actual gain with the ideal gain).

In Example 16.3, the hybrid parameters for the noninverting op-amp were found to be

$$\begin{aligned} h_{11} &= R_i + \frac{R_1 R_2}{R_1 + R_2} & h_{12} &= \frac{R_1}{R_1 + R_2} \\ h_{21} &= -\left[ \frac{A R_i}{R_o} + \frac{R_1}{R_1 + R_2} \right] & h_{22} &= \frac{R_o + R_1 + R_2}{R_o(R_1 + R_2)} \end{aligned}$$



## APPLICATION EXAMPLE 16.9

### SOLUTION

**Figure 16.16**

The classic noninverting gain configuration with load.

If we solve the hybrid parameter two-port Eq. (16.7) for  $\mathbf{V}_2$ , we obtain

$$\mathbf{V}_2 = \frac{-\mathbf{h}_{21}\mathbf{V}_1 + \mathbf{h}_{11}\mathbf{I}_2}{\mathbf{h}_{11}\mathbf{h}_{22} - \mathbf{h}_{12}\mathbf{h}_{21}}$$

Since the op-amp is connected to a load  $R_L$ , then

$$\mathbf{I}_2 = -\frac{\mathbf{V}_2}{R_L}$$

Combining these expressions, we obtain the equation for the gain,

$$\frac{\mathbf{V}_2}{\mathbf{V}_1} = \frac{-\mathbf{h}_{21}}{\mathbf{h}_{11}\mathbf{h}_{22} - \mathbf{h}_{12}\mathbf{h}_{21} + \frac{\mathbf{h}_{11}}{R_L}}$$

Using the parameter values, the equation becomes

$$\frac{\mathbf{V}_2}{\mathbf{V}_1} = \frac{4 \times 10^7}{8.02 \times 10^5 + \frac{10^6}{R_L}} = \frac{49.88}{1 + \frac{1.247}{R_L}} \quad 16.16$$

If the term involving  $R_L$  remains small compared to unity, then the gain will be largely independent of  $R_L$ .

It is convenient to view the gain of the amplifier with respect to its ideal value of

$$A_{\text{ideal}} = \left. \frac{\mathbf{V}_2}{\mathbf{V}_1} \right|_{\text{ideal op-amp}} = 1 + \frac{R_2}{R_1} = 1 + \frac{49}{1} = 50$$

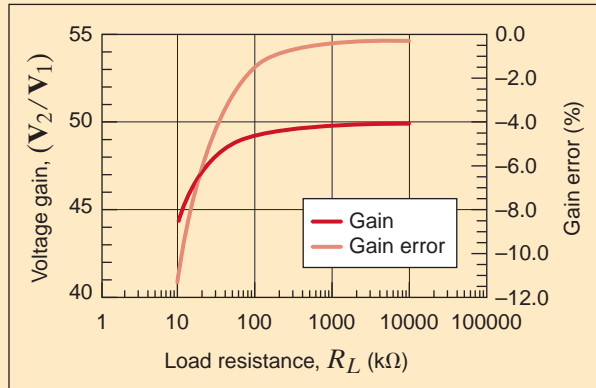
From Eq. (16.16), if  $R_L$  is infinite, the gain is only 49.88. This deviation from the ideal performance is caused by nonideal values for the op-amp gain, input resistance, and output resistance. We define the gain error as

$$\text{Gain error} = \frac{A_{\text{actual}} - A_{\text{ideal}}}{A_{\text{ideal}}} = \frac{0.998}{1 + \frac{1.247}{R_L}} - 1 \quad 16.17$$

A plot of the gain and the gain error versus  $R_L$  is shown in Fig. 16.17. Note that as the load resistance decreases, the gain drops and the error increases—consistent with Eq. (16.17). In addition, as  $R_L$  increases, the gain asymptotically approaches the ideal value, never quite reaching it.

To identify specific uses for this amplifier, recognize that at a gain of 50, a 0.1-V input will produce a 5-V output. Three possible applications are as follows:

1. Low-budget audio preamplifier—Amplifies low voltages from tape heads and phonograph needle cartridges to levels suitable for power amplification to drive speakers.
2. Sensor amplifier—In many sensors—for example, temperature-dependent resistors—changes in the electrical characteristic (resistance) can be much less than changes in the environmental parameter (temperature). The resulting output voltage changes are also small and usually require amplification.
3. Current sensing—Monitoring large currents can be done inexpensively by using low-value sense resistors and a voltmeter. By Ohm's law, the resulting voltage is  $IR_{\text{sense}}$  where  $I$  is the current of interest. A voltmeter can be used to measure the voltage and, knowing the value of  $R_{\text{sense}}$ , the current can be determined. The power lost in the sense resistor is  $I^2R_{\text{sense}}$ . Thus, low power loss implies low sense voltage values, which most inexpensive voltmeters cannot accurately measure. Our simple amplifier can boost the sense voltage to more reasonable levels.

**Figure 16.17**

The gain and gain error of the noninverting gain configuration described in Example 16.9.

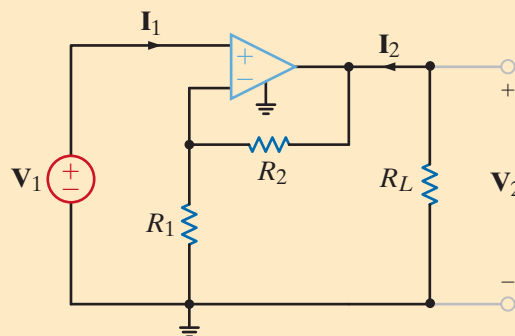
## 16.8

### Design Example

For a particular application, we need an amplifier with a gain of 10,000 when connected to a 1-k $\Omega$  load. We have available to us some noninverting op-amps that could be used for this application.

The noninverting op-amp, together with some available components that, based on the results of the previous example (i.e., the ideal gain formula), should yield a gain of 10,000, are shown in Fig. 16.18. Using the hybrid parameter equations for the amplifier, as outlined in the previous example, yields

$$\begin{aligned} h_{11} &= 1.001 \text{ M}\Omega & h_{12} &= 1.000 \times 10^{-4} \\ h_{21} &= -4.000 \times 10^7 & h_{22} &= 2.000 \text{ mS} \end{aligned}$$

**Figure 16.18**

A single-stage amplifier that should have a gain of 10,000.

OP-AMP SPECIFICATIONS	COMPONENTS
$A = 20,000$	$R_1 = 1 \text{ k}\Omega$
$R_i = 1 \text{ M}\Omega$	$R_2 = 9,999 \text{ M}\Omega$
$R_o = 500 \Omega$	

### DESIGN EXAMPLE 16.10

#### SOLUTION

Using Table 16.1, we can convert to the transmission parameters:

$$\mathbf{A} = \frac{-\Delta_H}{\mathbf{h}_{21}} = \frac{\mathbf{h}_{12}\mathbf{h}_{21} - \mathbf{h}_{11}\mathbf{h}_{22}}{\mathbf{h}_{21}} \quad \mathbf{B} = \frac{-\mathbf{h}_{11}}{\mathbf{h}_{21}}$$

$$\mathbf{C} = \frac{-\mathbf{h}_{22}}{\mathbf{h}_{21}} \quad \mathbf{D} = \frac{-1}{\mathbf{h}_{21}}$$

Based on the hybrid parameter values above, we find

$$\mathbf{A} = 1.501 \times 10^{-4} \quad \mathbf{B} = 2.502 \times 10^{-2}$$

$$\mathbf{C} = 5.000 \times 10^{-11} \quad \mathbf{D} = 2.500 \times 10^{-8}$$

The circuit is now modeled by the two-port equations

$$\begin{bmatrix} \mathbf{V}_1 \\ \mathbf{I}_1 \end{bmatrix} = \begin{bmatrix} \mathbf{A} & \mathbf{B} \\ \mathbf{C} & \mathbf{D} \end{bmatrix} \begin{bmatrix} \mathbf{V}_2 \\ -\mathbf{I}_2 \end{bmatrix}$$

Since  $\mathbf{V}_2 = -\mathbf{I}_2 R_L$ , we can write the equation for  $\mathbf{V}_1$  as

$$\mathbf{V}_1 = \mathbf{A}\mathbf{V}_2 + \frac{\mathbf{B}}{R_L}\mathbf{V}_2$$

and the gain as

$$\frac{\mathbf{V}_2}{\mathbf{V}_1} = \frac{1}{\mathbf{A} + \frac{\mathbf{B}}{R_L}} = \frac{6667}{1 + \frac{166.7}{R_L}}$$

Although the ideal model predicts a gain of 10,000, the actual gain for infinite  $R_L$  is only 6667—a rather large discrepancy! A careful analysis of the parameters indicates two problems: (1) the gain of the op-amp is on the same order as the circuit gain, and (2)  $R_2$  is actually larger than  $R_1$ . Recall that the ideal op-amp assumptions are that both  $A$  and  $R_i$  should approach infinity, or, in essence,  $A$  should be much larger than the overall gain and  $R_i$  should be the largest resistor in the circuit—neither condition exists. We will address these issues by cascading two op-amps. We will design each stage for a gain of 100 by selecting  $R_2$  to be 99 k $\Omega$ , thus alleviating the two issues above. Since the stages are cascaded, the ideal overall gain should be  $100 \times 100 = 10,000$ .

The transmission parameters with the new values of  $R_2$  are

$$\mathbf{A} = 1.005 \times 10^{-2} \quad \mathbf{B} = 2.502 \times 10^{-2}$$

$$\mathbf{C} = 5.025 \times 10^{-11} \quad \mathbf{D} = 2.500 \times 10^{-8}$$

Since the two stages are cascaded, the transmission parameter equations that describe the overall circuit are

$$\begin{bmatrix} \mathbf{V}_1 \\ \mathbf{I}_1 \end{bmatrix} = \begin{bmatrix} \mathbf{A}_a & \mathbf{B}_a \\ \mathbf{C}_a & \mathbf{D}_a \end{bmatrix} \begin{bmatrix} \mathbf{A}_b & \mathbf{B}_b \\ \mathbf{C}_b & \mathbf{D}_b \end{bmatrix} \begin{bmatrix} \mathbf{V}_2 \\ -\mathbf{I}_2 \end{bmatrix}$$

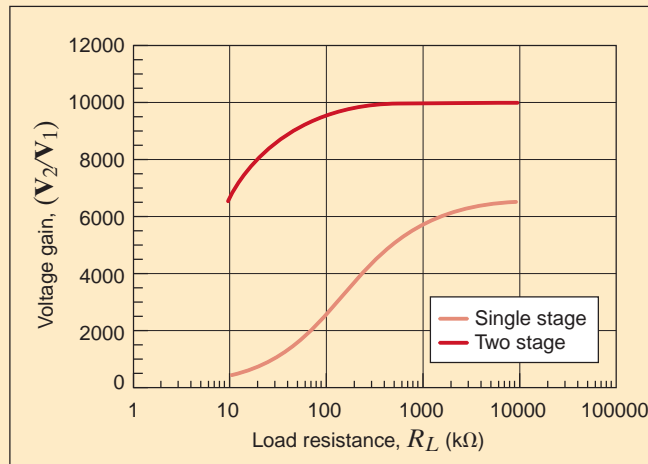
or

$$\begin{bmatrix} \mathbf{V}_1 \\ \mathbf{I}_1 \end{bmatrix} = \begin{bmatrix} \mathbf{A}_a\mathbf{A}_b - \mathbf{B}_a\mathbf{C}_b & \mathbf{A}_a\mathbf{B}_b - \mathbf{B}_a\mathbf{D}_b \\ \mathbf{C}_a\mathbf{A}_b - \mathbf{D}_a\mathbf{C}_b & \mathbf{C}_a\mathbf{B}_b - \mathbf{D}_a\mathbf{D}_b \end{bmatrix} \begin{bmatrix} \mathbf{V}_2 \\ -\mathbf{I}_2 \end{bmatrix}$$

where the subscripts  $a$  and  $b$  indicate the first and second op-amp stages. Since the stages are identical, we can just use  $\mathbf{A}$ ,  $\mathbf{B}$ ,  $\mathbf{C}$ , and  $\mathbf{D}$ . Still,  $\mathbf{V}_2 = -\mathbf{I}_2 R_L$ , and the gain is

$$\frac{\mathbf{V}_2}{\mathbf{V}_1} = \frac{1}{\mathbf{A}^2 - \mathbf{BC} + \frac{\mathbf{AB} - \mathbf{BD}}{R_L}}$$

Using our transmission parameter values, when  $R_L$  is infinite, the gain is 9900.75, an error of less than 1%. This is a significant improvement over the single-stage amplifier. Fig. 16.19 shows the single- and two-stage gains versus load resistance,  $R_L$ . As  $R_L$  decreases, the superiority of the two-stage amp is even more marked.



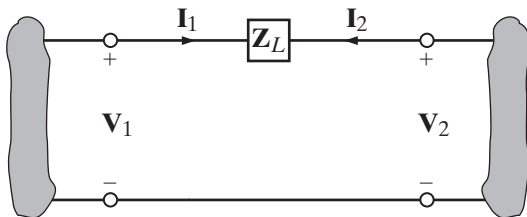
**Figure 16.19**  
The voltage gain of the single- and two-stage op-amp circuits versus load resistance.

### SUMMARY

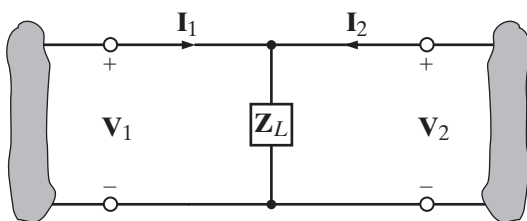
- Four of the most common parameters used to describe a two-port network are the admittance, impedance, hybrid, and transmission parameters.
- If all the two-port parameters for a network exist, a set of conversion formulas can be used to relate one set of two-port parameters to another.
- When interconnecting two-ports, the Y parameters are added for a parallel connection, the Z parameters are added for a series connection, and the transmission parameters in matrix form are multiplied together for a cascade connection.

### PROBLEMS

**16.1** Given the two networks in Fig. P16.1, find the Y parameters for the circuit in (a) and the Z parameters for the circuit in (b).



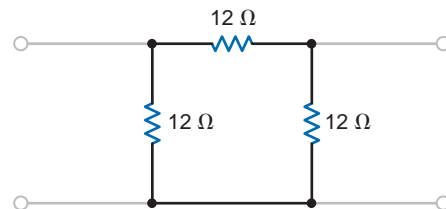
(a)



(b)

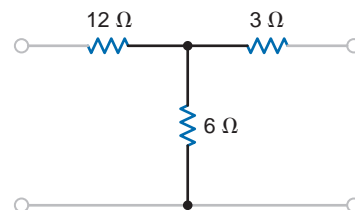
**Figure P16.1**

**16.2** Find the Y parameters for the two-port network shown in Fig. P16.2.



**Figure P16.2**

**16.3** Find the Y parameters for the two-port network shown in Fig. P16.3.



**Figure P16.3**

**16.4** Determine the Y parameters for the network shown in Fig. P16.4.

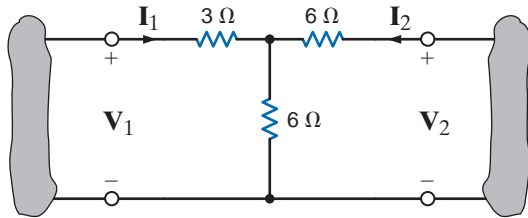


Figure P16.4

**16.5** Determine the admittance parameters for the network shown in Fig. P16.5.

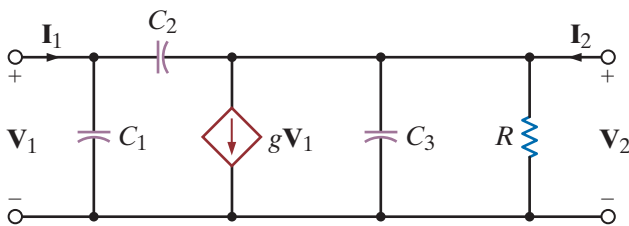


Figure P16.5

**16.6** Find the Y parameters for the two-port network in Fig. P16.6.

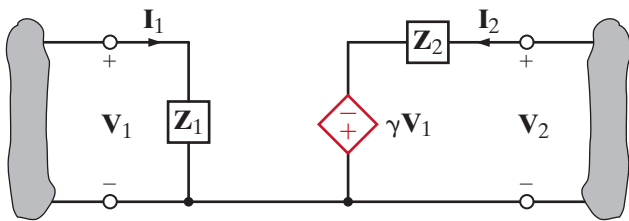


Figure P16.6

**16.7** Find the Z parameters for the network in Fig. P16.6.

**16.8** Find the Z parameters for the two-port network in Fig. P16.8.

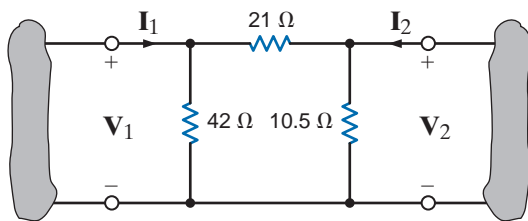


Figure P16.8

**16.9** Find the Z parameters for the two-port network shown in Fig. P16.9 and determine the voltage gain of the entire circuit with a 4-kΩ load attached to the output.

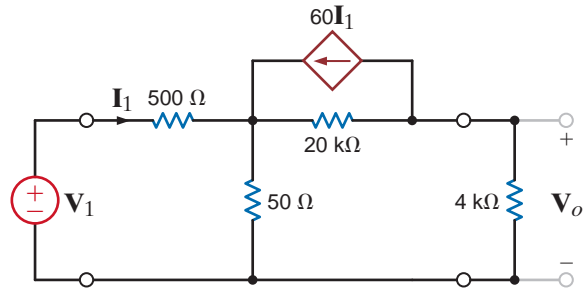


Figure P16.9

**16.10** Determine the input impedance of the network shown in Fig. P16.10 in terms of the Z parameters and the load impedance Z.

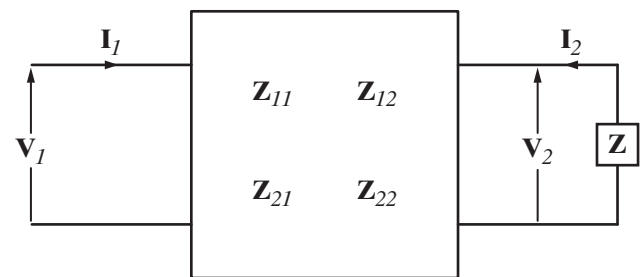


Figure P16.10

**16.11** Find the voltage gain of the two-port network in Fig. P16.10 if a 12-kΩ load is connected to the output port.

**16.12** Find the input impedance of the network in Fig. P16.10.

**16.13** Find the Y parameters for the network in Fig. P16.13.

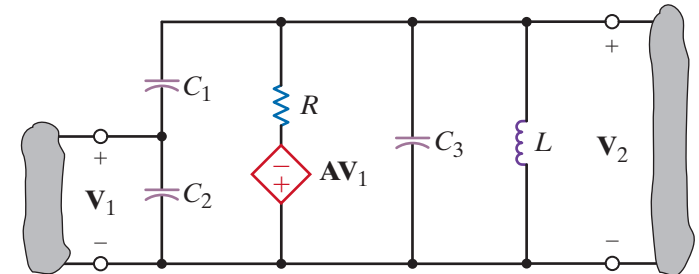


Figure P16.13

**16.14** Find the Z parameters for the network in Fig. P16.14.

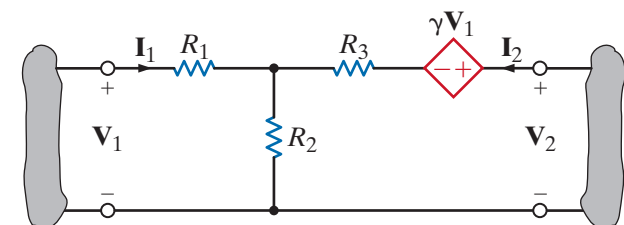


Figure P16.14

- 16.15** Find the Z parameters of the two-port network in Fig. P16.15.

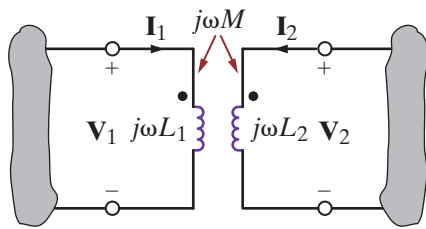


Figure P16.15

- 16.18** Find the Z parameters for the two-port network shown in Fig. P16.18.

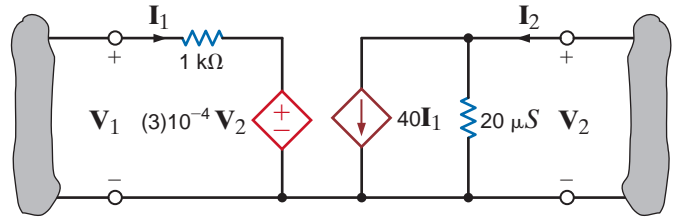


Figure P16.18

- 16.16** Given the network in Fig. P16.16, (a) find the Z parameters for the transformer, (b) write the terminal equation at each end of the two-port, and (c) use the information obtained to find  $V_2$ .

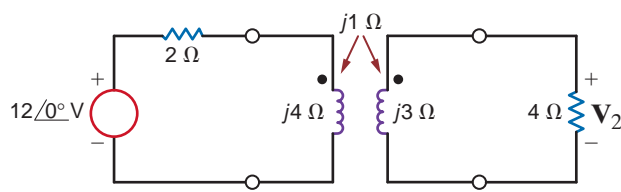


Figure P16.16

- 16.19** Find the Z parameters of the two-port network in Fig. P16.19.

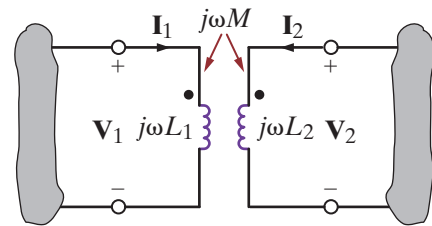


Figure P16.19

- 16.20** Determine the Z parameters for the two-port network in Fig. P16.20.

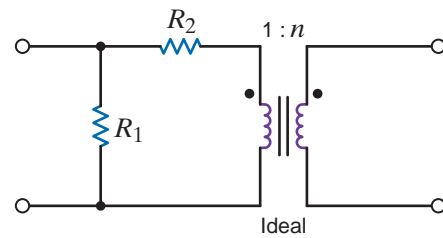


Figure P16.20

- 16.17** Find the Z parameters for the network in Fig. P16.17.

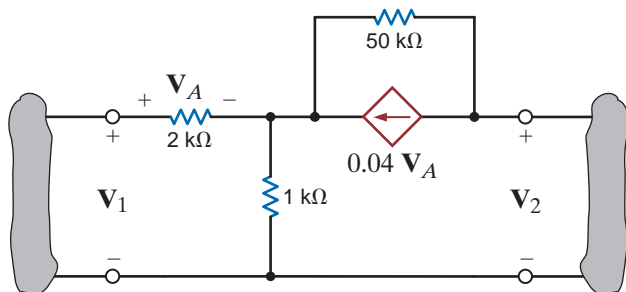


Figure P16.17

- 16.21** Draw the circuit diagram (with all passive elements in ohms) for a network that has the following Y parameters:

$$[Y] = \begin{bmatrix} \frac{3}{2} & -\frac{1}{2} \\ -\frac{1}{2} & \frac{5}{6} \end{bmatrix}$$

- 16.22** Draw the circuit diagram for a network that has the following Z parameters:

$$[Z] = \begin{bmatrix} 6 - j2 & 4 - j6 \\ 4 - j6 & 7 + j2 \end{bmatrix}$$

**16.23** Show that the network in Fig. P16.23 does not have a set of Y parameters unless the source has an internal impedance.

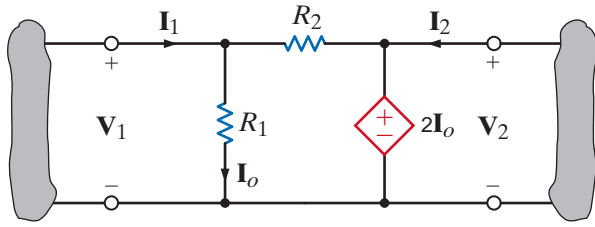


Figure P16.23

**16.24** Compute the hybrid parameters for the network in Fig. E16.1.

**16.25** Find the hybrid parameters for the network in Fig. P16.2.

**16.26** Find the hybrid parameters for the network in Fig. P16.26.

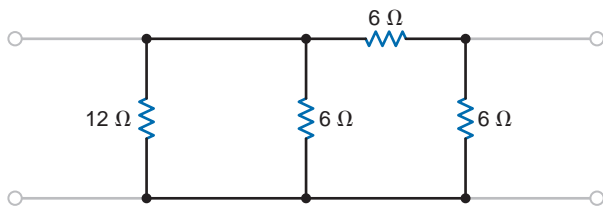


Figure P16.26

**16.27** Consider the network in Fig. P16.27. The two-port network is a hybrid model for a basic transistor. Determine the voltage gain of the entire network,  $V_2/V_S$ , if a source  $V_S$  with internal resistance  $R_1$  is applied at the input to the two-port network and a load  $R_L$  is connected at the output port.

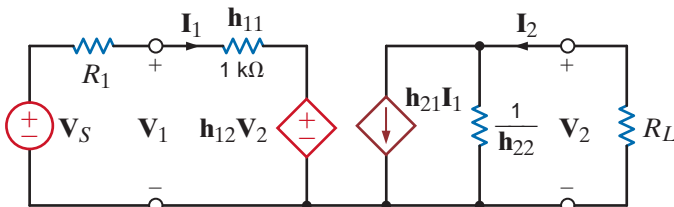


Figure P16.27

**16.28** Determine the hybrid parameters for the network shown in Fig. P16.28.

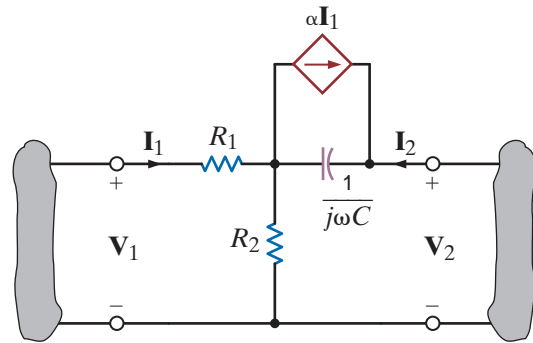


Figure P16.28

**16.29** Find the ABCD parameters for the networks in Fig. P16.1.

**16.30** Find the transmission parameters for the network in Fig. P16.30.

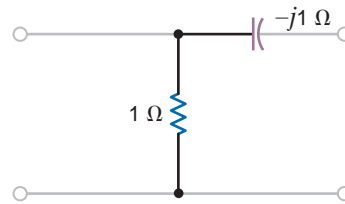


Figure P16.30

**16.31** Given the network in Fig. P16.31, find the transmission parameters for the two-port network and then find  $I_o$  using the terminal conditions.

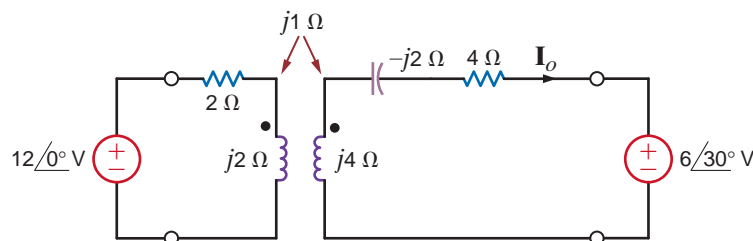


Figure P16.31



- 16.32** Find the voltage gain  $V_2/V_1$  for the network in Fig. P16.32 using the ABCD parameters.

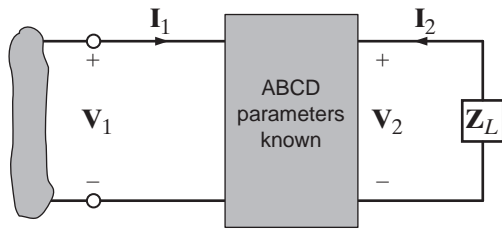


Figure P16.32

- 16.33** Find the input admittance of the two-port in Fig. P16.33 in terms of the Y parameters and the load  $Y_L$ .

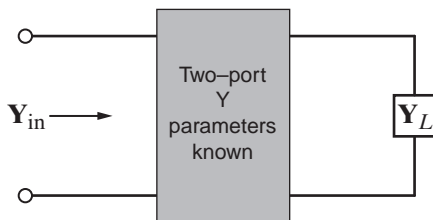


Figure P16.33

- 16.34** Find the voltage gain  $V_2/V_1$  for the network in Fig. P16.34 using the Z parameters.

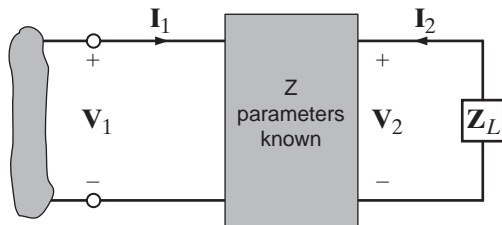


Figure P16.34

- 16.35** Draw the circuit diagram (with all passive elements in ohms) for a network that has the following Y parameters:

$$[Y] = \begin{bmatrix} \frac{5}{11} & -\frac{2}{11} \\ -\frac{2}{11} & \frac{3}{11} \end{bmatrix}$$

- 16.36** Draw the circuit diagram for a network that has the following Z parameters:

$$[Z] = \begin{bmatrix} 6 + j4 & 4 + j6 \\ 4 + j6 & 10 + j6 \end{bmatrix}$$

- 16.37** Following are the hybrid parameters for a network:

$$\begin{bmatrix} h_{11} & h_{12} \\ h_{21} & h_{22} \end{bmatrix} = \begin{bmatrix} \frac{11}{5} & \frac{2}{5} \\ -\frac{2}{5} & \frac{1}{5} \end{bmatrix}$$

Determine the Y parameters for the network.

- 16.38** If the Y parameters for a network are known to be

$$\begin{bmatrix} y_{11} & y_{12} \\ y_{21} & y_{22} \end{bmatrix} = \begin{bmatrix} \frac{5}{11} & -\frac{2}{11} \\ -\frac{2}{11} & \frac{3}{11} \end{bmatrix}$$

find the Z parameters.

- 16.39** Find the Z parameters in terms of the ABCD parameters.

- 16.40** Find the hybrid parameters in terms of the Z parameters.

- 16.41** Find the transmission parameters for the two-port in Fig. P16.41.

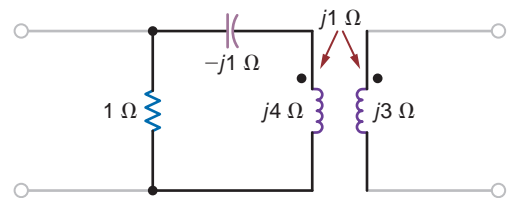


Figure P16.41

- 16.42** Find the transmission parameters for the two-port in Fig. P16.42.

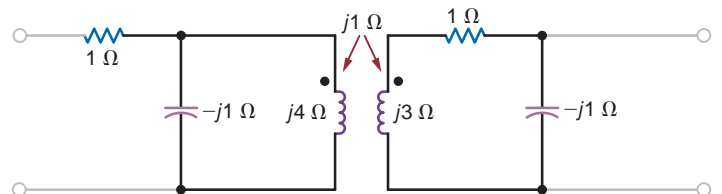


Figure P16.42

- 16.43** Find the transmission parameters for the two-port in Fig. P16.43 and then use the terminal conditions to compute  $I_o$ .

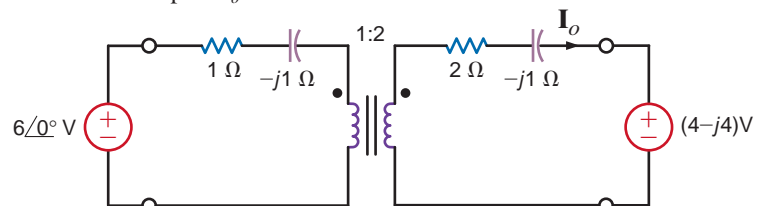


Figure P16.43

16.44 Find the Y parameters for the network in Fig. P16.44.

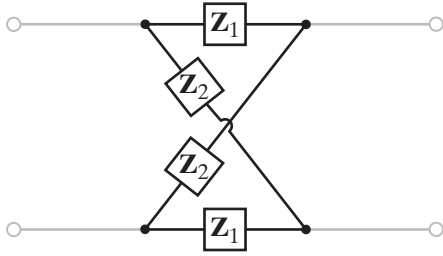


Figure P16.44

16.45 Determine the Y parameters for the network shown in Fig. P16.45.

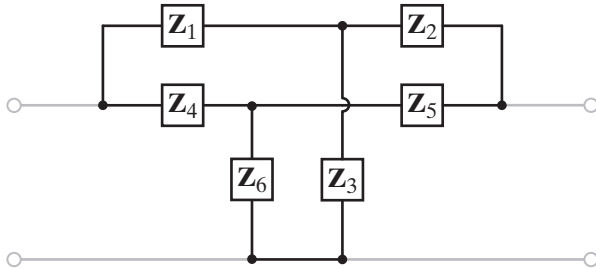


Figure P16.45

16.46 Find the Y parameters for the two-port network in Fig. P16.46.

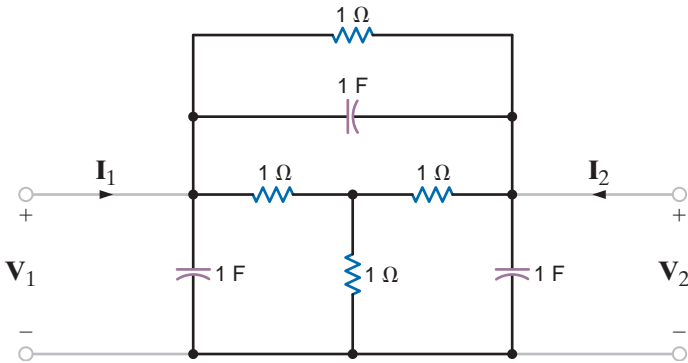


Figure P16.46

16.47 Find the Y parameters of the two-port network in Fig. P16.47. Find the input admittance of the network when the capacitor is connected to the output port.

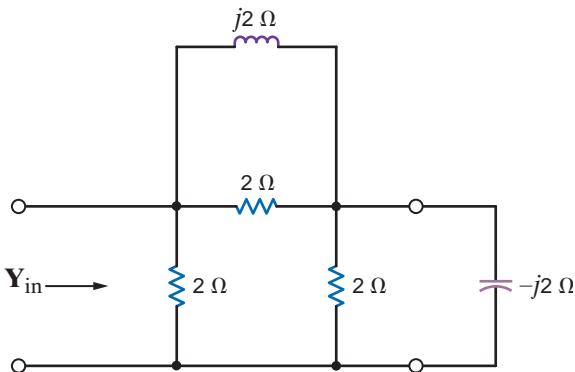


Figure P16.47

16.48 Find the Y parameters for the two-port in Fig. P16.48.

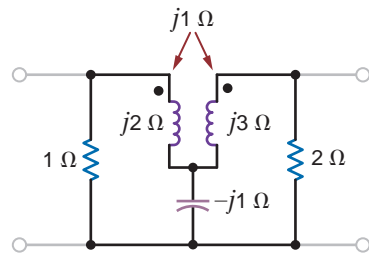


Figure P16.48

16.49 Find the transmission parameters of the network in Fig. E16.4 by considering the circuit to be a cascade interconnection of three two-port networks as shown in Fig. P16.49.

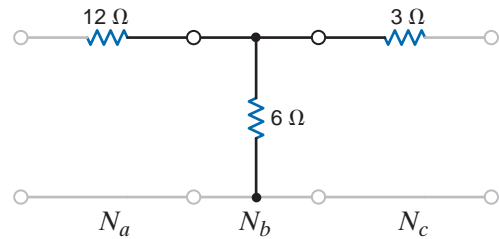


Figure P16.49

16.50 Find the ABCD parameters for the circuit in Fig. P16.50.

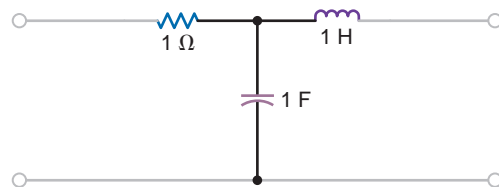


Figure P16.50

16.51 Find the Y parameters for the two-port in Fig. P16.51.

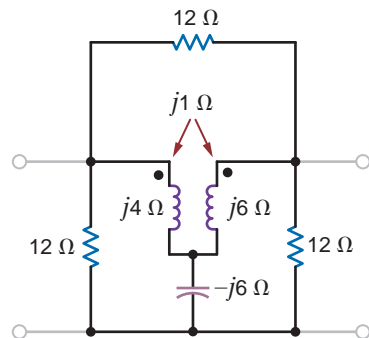


Figure P16.51

- 16.52 Find the Z parameters for the two-port network in Fig. P16.52 and then determine  $I_o$  for the specified terminal conditions.

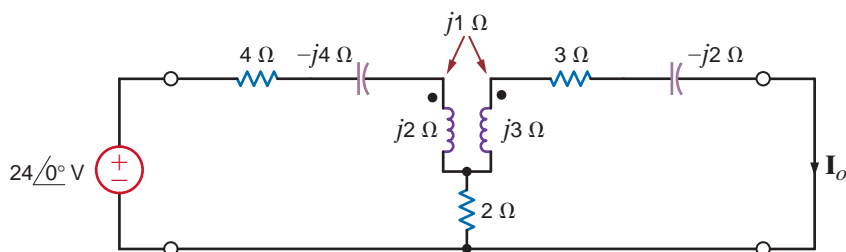


Figure P16.52

- 16.53 Determine the output voltage  $V_o$  in the network in Fig. P16.53 if the Z parameters for the two-port are

$$\mathbf{Z} = \begin{bmatrix} 3 & 2 \\ 2 & 3 \end{bmatrix}$$

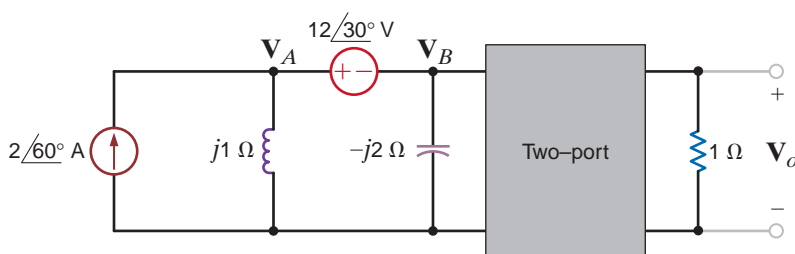


Figure P16.53

- 16.54 Determine the output voltage  $V_o$  in the network in Fig. P16.54 if the Z parameters for the two-port are

$$\mathbf{Z} = \begin{bmatrix} 5 & 4 \\ 4 & 12 \end{bmatrix}$$

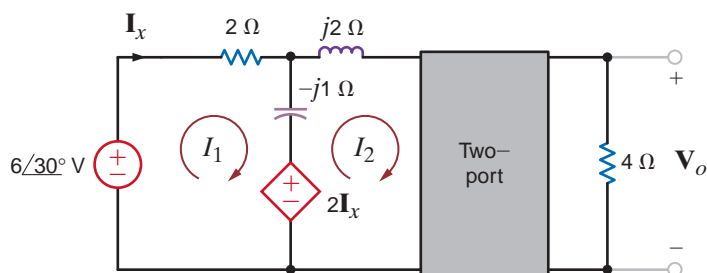


Figure P16.54

- 16.55 Find the transmission parameters of the two-port in Fig. 16.55 and then use the terminal conditions to compute  $I_o$ .

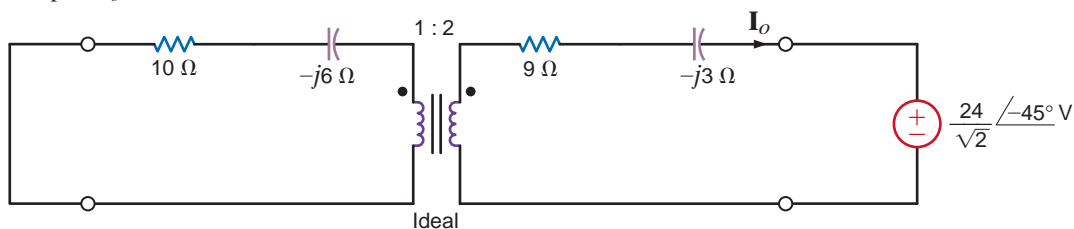


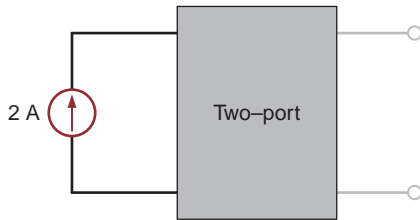
Figure P16.55

**TYPICAL PROBLEMS FOUND ON THE FE EXAM**

**16PFE-1** A two-port network is known to have the following parameters:

$$y_{11} = \frac{1}{14} S \quad y_{12} = y_{21} = -\frac{1}{21} S \quad y_{22} = \frac{1}{7} S$$

If a 2-A current source is connected to the input terminals as shown in Fig. 16PFE-1, find the voltage across this current source.



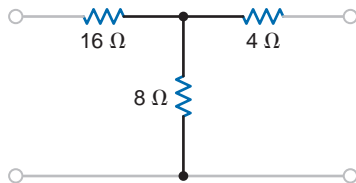
**Figure 16PFE-1**

- a. 36 V      b. 12 V
- c. 24 V      d. 6 V

**16PFE-2** Find the Thévenin equivalent resistance at the output terminals of the network in Fig. 16PFE-1.

- a. 3 Ω      b. 9 Ω
- c. 12 Ω      d. 6 Ω

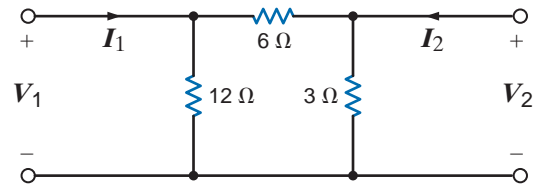
**16PFE-3** Find the Y parameters for the two-port network shown in Fig. 16PFE-3.



**Figure 16PFE-3**

- a.  $y_{11} = \frac{5}{32} S, y_{21} = y_{12} = -\frac{5}{14} S, y_{22} = \frac{9}{14} S$
- b.  $y_{11} = \frac{7}{48} S, y_{21} = y_{12} = -\frac{3}{16} S, y_{22} = \frac{7}{16} S$
- c.  $y_{11} = \frac{3}{25} S, y_{21} = y_{12} = -\frac{1}{15} S, y_{22} = \frac{4}{15} S$
- d.  $y_{11} = \frac{3}{56} S, y_{21} = y_{12} = -\frac{1}{28} S, y_{22} = \frac{3}{28} S$

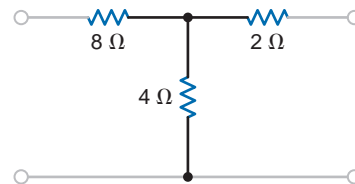
**16PFE-4** Find the Z parameters of the network shown in Fig. 16PFE-4.



**Figure 16PFE-4**

- a.  $z_{11} = \frac{19}{3} \Omega, z_{21} = z_{12} = \frac{5}{3} \Omega, z_{22} = \frac{7}{3} \Omega$
- b.  $z_{11} = \frac{22}{5} \Omega, z_{21} = z_{12} = \frac{7}{5} \Omega, z_{22} = \frac{9}{5} \Omega$
- c.  $z_{11} = \frac{36}{7} \Omega, z_{21} = z_{12} = \frac{12}{7} \Omega, z_{22} = \frac{18}{7} \Omega$
- d.  $z_{11} = \frac{27}{6} \Omega, z_{21} = z_{12} = \frac{7}{6} \Omega, z_{22} = \frac{13}{6} \Omega$

**16PFE-5** Calculate the hybrid parameters of the network in Fig. 16PFE-5.



**Figure 16PFE-5**

- a.  $h_{11} = \frac{28}{3} \Omega, h_{21} = -\frac{2}{3}, h_{12} = \frac{2}{3}, h_{22} = \frac{1}{6} S$
- b.  $h_{11} = \frac{16}{5} \Omega, h_{21} = -\frac{1}{5}, h_{12} = \frac{1}{5}, h_{22} = \frac{3}{10} S$
- c.  $h_{11} = \frac{19}{4} \Omega, h_{21} = -\frac{3}{4}, h_{12} = \frac{3}{4}, h_{22} = \frac{5}{8} S$
- d.  $h_{11} = \frac{32}{9} \Omega, h_{21} = -\frac{2}{9}, h_{12} = \frac{2}{9}, h_{22} = \frac{1}{18} S$

# COMPLEX NUMBERS

Complex numbers are typically represented in three forms: exponential, polar, or rectangular. In the exponential form a complex number  $A$  is written as

$$\mathbf{A} = z e^{j\theta} \quad \mathbf{1}$$

The real quantity  $z$  is known as the amplitude or magnitude, the real quantity  $\theta$  is called the *angle* as shown in Fig. 1, and  $j$  is the imaginary operator  $j = \sqrt{-1}$ .  $\theta$ , which is the angle between the real axis and  $A$ , may be expressed in either radians or degrees.

The polar form of a complex number  $A$ , which is symbolically equivalent to the exponential form, is written as

$$\mathbf{A} = z \angle \theta \quad \mathbf{2}$$

and the rectangular representation of a complex number is written as

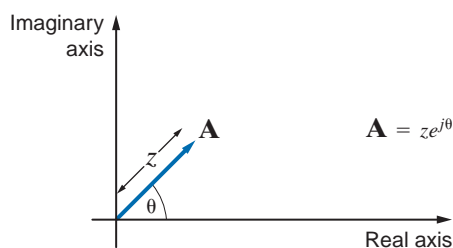
$$\mathbf{A} = x + jy \quad \mathbf{3}$$

where  $x$  is the real part of  $A$  and  $y$  is the imaginary part of  $A$ .

The connection between the various representations of  $A$  can be seen via Euler's identity, which is

$$e^{j\theta} = \cos \theta + j \sin \theta \quad \mathbf{4}$$

Fig. 2 illustrates that this function in rectangular form is a complex number with a unit amplitude.

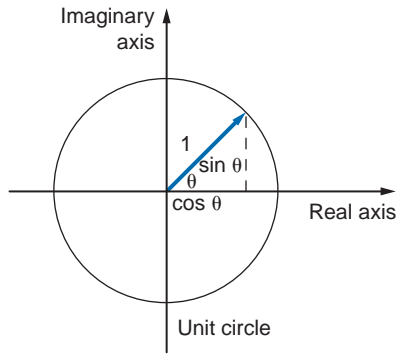


**Figure 1**

The exponential form of a complex number.

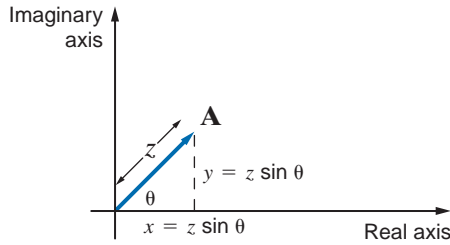
**Figure 2**

A graphical interpretation of Euler's identity.



**Figure 3**

The relationship between the exponential and rectangular representation of a complex number.



Using this identity, we can write the complex number **A** as

$$\mathbf{A} = ze^{j\theta} = z \cos \theta + jz \sin \theta \quad 5$$

which, as shown in Fig. 3, can be written as

$$\mathbf{A} = x + jy$$

Equating the real and imaginary parts of these two equations yields

$$\begin{aligned} x &= z \cos \theta \\ y &= z \sin \theta \end{aligned} \quad 6$$

From these equations we obtain

$$x^2 + y^2 = z^2 \cos^2 \theta + z^2 \sin^2 \theta = z^2 \quad 7$$

Therefore,

$$z = \sqrt{x^2 + y^2} \quad 8$$

In addition,

$$\frac{z \sin \theta}{z \cos \theta} = \tan \theta = \frac{y}{x}$$

and hence

$$\theta = \tan^{-1} \frac{y}{x} \quad 9$$

The interrelationships among the three representations of a complex number are as follows:

EXPONENTIAL	POLAR	RECTANGULAR
$ze^{j\theta}$	$z/\theta$	$x+jy$
$\theta = \tan^{-1}y/x$	$\theta = \tan^{-1}y/x$	$x = z \cos \theta$
$z = \sqrt{x^2 + y^2}$	$z = \sqrt{x^2 + y^2}$	$y = z \sin \theta$

We will now show that the operations of addition, subtraction, multiplication, and division apply to complex numbers in the same manner that they apply to real numbers.

The *sum* of two complex numbers  $\mathbf{A} = x_1 + jy_1$  and  $\mathbf{B} = x_2 + jy_2$  is

$$\begin{aligned}\mathbf{A} + \mathbf{B} &= x_1 + jy_1 + x_2 + jy_2 \\ &= (x_1 + x_2) + j(y_1 + y_2)\end{aligned}\quad 10$$

That is, we simply add the individual real parts, and we add the individual imaginary parts to obtain the components of the resultant complex number.

Suppose we wish to calculate the sum  $\mathbf{A} + \mathbf{B}$  if  $\mathbf{A} = 5 \angle 36.9^\circ$  and  $\mathbf{B} = 5 \angle 53.1^\circ$ .

We must first convert from polar to rectangular form.

$$\begin{aligned}\mathbf{A} &= 5 \angle 36.9^\circ = 4 + j3 \\ \mathbf{B} &= 5 \angle 53.1^\circ = 3 + j4\end{aligned}$$

Therefore,

$$\begin{aligned}\mathbf{A} + \mathbf{B} &= 4 + j3 + 3 + j4 = 7 + j7 \\ &= 9.9 \angle 45^\circ\end{aligned}$$

### EXAMPLE

## 1

### SOLUTION

[hint]

Addition and subtraction of complex numbers are most easily performed when the numbers are in rectangular form.

The *difference* of two complex numbers  $\mathbf{A} = x_1 + jy_1$  and  $\mathbf{B} = x_2 + jy_2$  is

$$\begin{aligned}\mathbf{A} - \mathbf{B} &= (x_1 + jy_1) - (x_2 + jy_2) \\ &= (x_1 - x_2) + j(y_1 - y_2)\end{aligned}\quad 11$$

That is, we simply subtract the individual real parts, and we subtract the individual imaginary parts to obtain the components of the resultant complex number.

Let us calculate the difference  $\mathbf{A} - \mathbf{B}$  if  $\mathbf{A} = 5 \angle 36.9^\circ$  and  $\mathbf{B} = 5 \angle 53.1^\circ$ .

Converting both numbers from polar to rectangular form,

$$\begin{aligned}\mathbf{A} &= 5 \angle 36.9^\circ = 4 + j3 \\ \mathbf{B} &= 5 \angle 53.1^\circ = 3 + j4\end{aligned}$$

Then

$$\mathbf{A} - \mathbf{B} = (4 + j3) - (3 + j4) = 1 - j1 = \sqrt{2} \angle -45^\circ$$

### EXAMPLE

## 2

### SOLUTION

The *product* of two complex numbers  $\mathbf{A} = z_1 \angle \theta_1 = x_1 + jy_1$  and  $\mathbf{B} = z_2 \angle \theta_2 = x_2 + jy_2$  is

$$\mathbf{AB} = (z_1 e^{j\theta_1})(z_2 e^{j\theta_2}) = z_1 z_2 \angle \theta_1 + \theta_2 \quad 12$$

**EXAMPLE****3****SOLUTION**

Given  $\mathbf{A} = 5 \angle 36.9^\circ$  and  $\mathbf{B} = 5 \angle 53.1^\circ$ , we wish to calculate the product in both polar and rectangular forms.

**[hint]**

Multiplication and division of complex numbers are most easily performed when the numbers are in exponential or polar form.

$$\begin{aligned}\mathbf{AB} &= (5 \angle 36.9^\circ)(5 \angle 53.1^\circ) = 25 \angle 90^\circ \\ &= (4 + j3)(3 + j4) \\ &= 12 + j16 + j9 + j^2 12 \\ &= 25j \\ &= 25 \angle 90^\circ\end{aligned}$$

**EXAMPLE****4****SOLUTION**

Given  $\mathbf{A} = 2 + j2$  and  $\mathbf{B} = 3 + j4$ , we wish to calculate the product  $\mathbf{AB}$ .

$$\mathbf{A} = 2 + j2 = 2.828 \angle 45^\circ$$

$$\mathbf{B} = 3 + j4 = 5 \angle 53.1^\circ$$

and

$$\mathbf{AB} = (2.828 \angle 45^\circ)(5 \angle 53.1^\circ) = 14.14 \angle 98.1^\circ$$

The *quotient* of two complex numbers  $\mathbf{A} = z_1 \angle \theta_1 = x_1 + jy_1$  and  $\mathbf{B} = z_2 \angle \theta_2 = x_2 + jy_2$  is

$$\frac{\mathbf{A}}{\mathbf{B}} = \frac{z_1 e^{j\theta_1}}{z_2 e^{j\theta_2}} = \frac{z_1}{z_2} e^{j(\theta_1 - \theta_2)} = \frac{z_1}{z_2} \angle \theta_1 - \theta_2 \quad 13$$

**EXAMPLE****5****SOLUTION**

Given  $\mathbf{A} = 10 \angle 30^\circ$  and  $\mathbf{B} = 5 \angle 53.1^\circ$ , we wish to determine the quotient  $\mathbf{A/B}$  in both polar and rectangular forms.

$$\begin{aligned}\frac{\mathbf{A}}{\mathbf{B}} &= \frac{10 \angle 30^\circ}{5 \angle 53.1^\circ} \\ &= 2 \angle -23.1^\circ \\ &= 1.84 - j0.79\end{aligned}$$

**EXAMPLE****6****SOLUTION**

Given  $\mathbf{A} = 3 + j4$  and  $\mathbf{B} = 1 + j2$ , we wish to calculate the quotient  $\mathbf{A/B}$ .

$$\mathbf{A} = 3 + j4 = 5 \angle 53.1^\circ$$

$$\mathbf{B} = 1 + j2 = 2.236 \angle 63^\circ$$

and

$$\frac{\mathbf{A}}{\mathbf{B}} = \frac{5 \angle 53.1^\circ}{2.236 \angle 63^\circ} = 2.236 \angle -9.9^\circ$$



If  $\mathbf{A} = 3 + j4$ , let us compute  $1/\mathbf{A}$ .

$$\mathbf{A} = 3 + j4 = 5/\underline{53.1^\circ}$$

and

$$\frac{1}{\mathbf{A}} = \frac{1/0^\circ}{5/\underline{53.1^\circ}} = 0.2/\underline{-53.1^\circ}$$

or

$$\begin{aligned}\frac{1}{\mathbf{A}} &= \frac{1}{3 + j4} = \frac{3 - j4}{(3 + j4)(3 - j4)} \\ &= \frac{3 - j4}{25} = 0.12 - j0.16\end{aligned}$$

**EXAMPLE****7****SOLUTION**

- A**
- AC-DC converter, 645–646
  - AC steady-state analysis
    - analysis techniques, 396–408
    - application examples, 408–410
    - basic AC analysis, 385
    - design examples, 410–413
    - impedance and admittance, 383–389
    - Kirchhoff's laws and, 393–396
    - phasor diagrams, 390–393
    - phasor relationships for circuit elements, 379–383
    - phasors, 377–379
    - sinusoidal and complex forcing functions, 373–377
    - sinusoids, 370–372
  - Active filters, 627–645
  - Admittance, 386–389
  - Admittance parameters, two-port networks and, 802–805
  - Air conditioner current, 473–474
  - Airport scanners, 245
  - Alternating current (ac), defined, 3
  - Aluminum electrolytic capacitors, 246
  - AM (amplitude modulation) radio, 782–783
  - American Wire Gauge (AWG) standard, 262
  - Ampère's law, 492
  - Amplifier equivalent network, 583
  - Amplifier frequency-response requirements, 583
  - Amplifier input bias current, 640
  - Analog-to-digital converter (ADC), 653
  - Aperiodic signals, 773
  - Apparent power, 450, 452
  - Apple iPod, 16
  - Applied voltage, current response to in electrical network, 373
  - Arbitrary AM Fourier transform, 788
  - Artificial pacemakers, 751
  - Attenuator pad design, 222–223
  - Automatic gain control, 641–642
  - Automobile ignition system, 347–349
  - Average power, 437–442, 769
- B**
- Balanced three-phase circuit, 545
  - Balanced three-phase voltage source, 547
  - Balanced three-phase voltages, 545
  - Balanced wye-wye connection, 548–552
  - Band-elimination filters, 782
  - Band-pass filters, 620, 623, 683–685, 782
  - Band-rejection filters, 620, 623
  - Bandwidth, 622
  - Bass boost amplifier, 654
  - Bipolar junction transistors (BJTs), 64
  - Bipolar transistors, 10
  - Biquad filter, 643
  - Bode diagram
    - constant term, 588
    - poles or zeros at the origin, 588
    - quadratic poles or zeros, 589–590
    - simple poles or zeros, 588–589
  - Bode plots
    - asymptotic for first-order low-pass filter, 643
    - connection, 724–726
    - deriving the transfer function from, 595–597
    - frequency response using, 586–595
    - for parallel resonant tuned amplifier, 647–648
    - for *RLC* tuner circuit, 789
    - for second-order low-pass filter, 732
    - for single- and two-stage filters, 649–651
    - of Tow-Thomas low-pass filter, 645
    - variable-frequency networks and, 625
  - Boost converter, 339–341
  - Branch, 31
  - Break frequency, 588
  - Buffer amplifiers, 162
  - Bulk electrical energy transmission, 516–517
- C**
- Camera flash charging circuits, 333–334
  - Capacitor bank, 459
  - Capacitors, 246–253
    - aluminum electrolytic capacitors, 246
    - ceramic dielectric capacitors, 246
    - chip capacitors, 270
    - continuity of voltage and, 249
    - current and voltage waveforms and, 249–253
    - dc voltage and, 248–249
    - design examples and, 279–280
    - double-layer, 279
    - electrical symbol and, 246
    - frequency-dependent impedance of, 579–580
    - parallel capacitors, 266–267
    - series capacitors, 264–266
    - specifications for, 261–262
    - stray capacitance, 246–247
    - typical capacitors, 246
    - voltage and current waveforms, 249–250
    - voltage-current relationships for, 382–383
  - Carrier waveform, 782–783
  - Cascade interconnections, 813
  - Ceramic chip capacitor standard sizes, 271
  - Ceramic dielectric capacitors, 246
  - Characteristic equation, 321, 713
  - Charge, 2
  - Chebyshev filter, 648–649
  - Chip capacitors, 270
  - Chip inductors, 271
  - Christmas tree lights, 523–524
  - Circuit analysis
    - application example, 729–731
    - Laplace circuit solutions, 696–697
    - pole-zero plot/Bode plot connection, 724–726
    - steady-state response, 727–729
    - transfer function and, 712–724
    - transient analysis, 709–712
  - Circuit breaker, 366
  - Circuits
    - dependent sources, 10–11, 64–69
    - elements, 8–17
    - independent sources, 8–10
    - Laplace transform and, 697–699
    - phasor relationships and, 379–383
    - s*-domain representations and, 698–699
    - second-order filters and, 733
    - with series-parallel combinations of resistors, 55–61
    - time constant and, 297
    - time-domain representations and, 698
  - Clothes dryers, 474–475
  - Coarse/find adjustment circuit, 222
  - Coaxial cables, 222–223
  - Compact discs (CDs), 649–651
  - Comparators, 172–173
  - Complementary solution, 299
  - Complex forcing function, 373–377
  - Complex numbers, 829–833
  - Complex or *s*-plane, 714
  - Complex power, 452–457
  - Conductance, 386
  - Constant forcing function, 330–331
  - Constant term, Bode diagram and, 588
  - Constraint equations, 115
  - Continuity of current, inductor, 255
  - Continuity of voltage, capacitor, 249
  - Control loops, 79–80
  - Conventional current flow, 2
  - Converter circuit, powering panel lighting and, 76
  - Convolution integral, 681–685
  - Cosine Fourier series, 757
  - Cosine waveforms with various phase angles, 372
  - Coupled noise, 520–521
  - Critically damped responses, 322, 716
  - Crosstalk, 274–277
  - Current division, 46–48
  - Current flow, 2
  - Current magnitudes, 3
  - Current sensing, 818
  - Current-to-voltage converter, 79

- Current waveforms
  - capacitors and, 249–253
  - inductors and, 256–258
- Cutoff frequencies, 622
- D**
- Damping ratio
  - exponential, 321–322
  - quadratic poles and zeros and, 589
  - resistor addition and, 736
  - transfer function and, 713
  - transient response and, 719
  - wind speed and, 721–724
- Data transfer, filtering of, 731–735
- Decoupling capacitors, 345
- Defibrillators, 349–350
- Delta-connected loads, 548, 554–556
- Delta-connected source, 552–554
- Delta-to-wye transformations, 61–64
- Delta-wye network, 553
- Dependent source circuits, 64–69
  - loop analysis and, 131–136
  - nodal analysis and, 110–112
  - Norton's theorem and, 205–206
  - Thévenin's theorem and, 205–206
- Dependent voltage sources, 10, 117–120
- Differential operational circuits, 167, 272
- Differential equation approach, 300–305
- Digital data waveform, 731, 734
- Direct current (dc)
  - capacitors and, 248–249
  - defined, 3
  - inductors and, 255
- Double-layer capacitors, 279
- Driving point functions, 584–585
- Duty cycle, boost converter gain and, 341
- Dynamic random access memory (DRAM), 277–278
- E**
- Effective value of periodic waveform, 447–450
- EKG systems, 469
- Electric charge, 2
- Electric circuit, 2
- Electric current, 2
- Electric equipment, shocks and, 467
- Electric lawn mower, 472–473
- Electric meters, 464
- Electric toothbrush, 518–520
- Electrical isolation using ground wire in
  - crosstalk model, 276
- Electrical shock, 464–472
- Electromotive force, 3
- Electronic manufacturing, resistor technologies
  - for, 69–72
- Elna American Inc., 279
- Energy, 5
- Energy absorbed, 5
- Energy analysis, mutually coupled networks
  - and, 503–505
- Energy supplied, 5
- Energy transfer in resonant circuit, 604
- Equivalence, 190
- Equivalent circuits
  - for inverting and noninverting operational amplifier circuits, 628
  - with multiple sources, 42
  - transmission parameters and, 815–817
- Equivalent impedance, 388–389
- Error signal for op-amp, 161
- Euler's equation, 375–376
- Euler's identity, graphical interpretation of, 830
- Even-function symmetry, Fourier series and, 757–758
- Exponential Fourier series, 753–756
- Exponential representation of complex number, 830
- F**
- Faraday's law, 492–493, 515
- Fast Fourier Transform, 792
- Faulty circuits, 466
- Ferrite chip inductor cross section, 271
- Ferrite-core inductors, 254
- Field-effect transistors (FETs), 64
- Filter networks
  - active filters, 627–645
  - passive filters, 620–627
- Final-value theorem, 686
- First-order circuits, 298–319
  - differential equation approach, 300–305
  - general form of response equations, 298–300
  - problem-solving strategy, 306–307
  - pulse response and, 316–319
  - step-by-step approach, 306
- First-order low-pass OTA-C filter, 642–643
- Flash circuit, camera, 297–298
- Flashlight circuit, 5
- Floating simulated resistor, 640
- Flux linkage, 492–493
- FM radio antenna, 646–648
- Forced response, 299
- Fossil-fuel generating facility, 543–544
- Four-node circuit, 107
- Fourier analysis techniques
  - application examples, 780–787
  - design examples, 787–793
  - Fourier series, 752–773
  - Fourier transform, 773–779
- Fourier series, 752–773
  - average power and, 769
  - exponential Fourier series, 753–756
  - frequency spectrum and, 767–768
  - steady-state network response and, 768–769
  - symmetry and trigonometric Fourier series, 757–761
  - time-shifting and, 762–764
  - trigonometric Fourier series, 756–757
  - waveform generation and, 764–766
- Fourier transform, 773–779
  - important transform pairs, 774–776
  - Parseval's theorem and, 778–779
  - properties of, 777–778
- Frequency-dependent impedance of capacitor, 579–580
- Frequency-dependent impedance of inductor, 579
- Frequency-dependent impedance of RLC series network, 581
- Frequency domain analysis, 378
- Frequency-independent impedance of resistor, 578
- Frequency-response plots, 608–609, 630–631
- Frequency scaling, 619–620
- Frequency-shifting theorem, 673–674
- Frequency spectrum, Fourier series and, 767–768
- Fundamental, 753
- Fundamental op-amp circuits, 163–172
- Fuse, 366
- G**
- Gain error in amplifier, 166
- General impedance converter, 409–410
- General impedance relationship, 383
- Ground conductor, 465
- Ground-fault interrupters, 466–467
- Ground wire in crosstalk model, 276
- H**
- Half-power frequency, 622
- Half-wave symmetry, Fourier series and, 759
- Harmonic amplitude, 787
- Harmonics, 784
- Headlight intensity, starter current and, 73
- Heart pacemaker equivalent circuit, 336
- Heart pacemaker output voltage waveform, 337
- Heating element, varying temperature of, 343–344
- Henry, Joseph, 254
- Henry unit, 254
- High definition television, 801–802
- High-frequency noise filtering, 731–735
- High-pass filters, 620–621, 782
- High-voltage dc transmission facility, 41
- High-voltage lines, 470
- High-voltage pulse generator, 334–335
- High-voltage transmission lines, 815–819
- Household three-wire network and appliance usage, 462–463
- Hubble space telescope, 1
- Hybrid parameters, two-port networks and, 807–809
- Hydroelectric generating facility, 542–543
- I**
- Ideal inductor, 492
- Ideal op-amp model, 161–162
- Ideal transformer, 506–515
- Ignition current as function of time, 348–349
- Impedance and admittance, 383–389
- Impedance parameters, two-port networks and, 805–807
- Impedance scaling, 619
- Independent source circuits, 8–10
  - loop analysis and, 126–130
  - nodal analysis and, 104–110
  - Norton's theorem and, 200–204, 206–211
  - Thévenin's theorem and, 200–204, 206–211
- Independent voltage sources, 8–10
  - loop analysis and, 122–125
  - nodal analysis and, 113–116

Inductive kick, 338–339  
 Inductively coupled noise, 520–521  
 Inductors, 254–264  
   chip inductors, 271  
   current and voltage waveforms, 256–258  
   dc current flowing through, 255  
   electrical symbol and, 254  
   ferrite-core inductors, 254  
   frequency-dependent impedance of, 579  
   iron-core inductors, 254  
   parallel inductors, 268–269  
   series inductors, 267–268  
   specifications for, 261–262  
   stray inductance, 254  
   typical inductors, 254  
   voltage-current relationships for, 381  
 Initial-value theorem, 685  
 Input impedance, 508  
 Input terminal I/V values, 161  
 Input waveforms for differentiator circuit, 273  
 Instantaneous power, 436–437  
 Instrumentation amplifier circuit, 168  
 Insulated-gate field-effect transistors (IGFETs), 64  
 Integrator operational amplifier circuits, 272  
 Interconnected two-port circuits, 811–815  
 Inverse Laplace transform, 676–681  
   complex-conjugate poles, 678–679  
   multiple poles, 679–680  
   simple poles, 676–677  
 Inverters, 785–787  
 Iron-core inductors, 254  
 Isolation capability, voltage follower, 162

**K**

Kirchhoff's current law (KCL), 31–32,  
 103–120. *See also* Nodal analysis  
 Kirchhoff's laws, 31–39, 393–396  
 Kirchhoff's voltage law (KVL), 34–40,  
 122–136, 625, 696. *See also* Loop analysis  
 Kirchoff, Gustav Robert, 31  
 kth harmonic term, 753

**L**

Labeling, voltage, 37  
 Ladder networks, 56  
 Laplace transform  
   application example, 687–688  
   circuit element models, 697–699  
   circuit solutions and, 696–697  
   convolution integral and, 681–685  
   definition of, 668  
   final-value theorem, 686  
   frequency-shifting theorem and, 673–674  
   initial-value theorem and, 685  
   inverse transform, 676–681  
   problem-solving strategy, 688  
   singularity functions and, 669–671  
   steady-state response and, 727–729  
   time-scaling theorem and, 673  
   time-shifting theorem and, 673  
   transfer function and, 712–724  
   transform pairs, 671–672  
   transform properties, 673–675  
   transient analysis of circuits and, 709–712

  unit impulse function and, 670–671  
   unit step function and, 669–670  
 Light bulb, voltage-current relationship for, 27  
 Line power loss, harmonic frequency and, 784  
 Line voltages, 548  
 Linear resistors, 26–27  
 Linear variable differential transformer  
   (LVDT), 521–523  
 Linearity, 190–192  
 LM339 comparators, 172–173  
 LM324 quad op-amp, 157–159  
 LMC6492 op-amps, 159–160  
 Loop analysis, 122–137, 397–398, 402  
   circuits containing dependent sources,  
     131–136  
   circuits containing independent current  
     sources, 126–130  
   circuits containing only independent voltage  
     sources, 122–125  
   problem-solving strategy and, 136  
 Loop currents, 122  
 Loops, 31  
 Loss-pass filters, 780–782  
 Lossless elements, 438  
 Low-budget audio preamplifier, 818  
 Low defibrillator waveform, 349  
 Low-pass filters, 620–621, 630, 649–651  
 Lown, Bernard, 349  
 Lown defibrillator, 349–350  
 Lumped-parameter circuit, 31

**M**

Magnetic levitation train, 491  
 Magnetically coupled coils, 494–495  
 Magnetically coupled networks  
   design examples, 521–525  
   energy analysis, 503–505  
   ideal transformer, 506–515  
   mutual inductance, 492–503  
   safety considerations, 515–516  
 Magnitude adjuster, 568  
 Magnitude scaling, 619  
 MAX917 comparators, 172–173  
 MAX4240 op-amps, 159–160, 175  
 Maximum average power transfer, 442–446  
 Maximum power transfer, 216–221  
   design examples and, 221–226  
   equivalent circuit for, 216  
   parameter plots and, 220  
 Mesh, 123  
 Mesh analysis, 123  
 Metal-oxide-semiconductor field-effect  
   transistors (MOSFETs), 10, 64  
 Micro-aerial robots, 667–668  
 Microprocessors, 64  
 Mixed-mode circuitry, 653  
 Modulation theorem, 673–674  
 Motorola RAZR, 16  
 Multilayer ceramic chip capacitor, 270  
 Multiple-source/resistor networks  
   single-loop circuits and, 42–45  
   single-node-pair circuits and, 42–45  
 Music and frequency, 577  
 Mutual inductance, 492–503, 500

**N**

National Electrical Safety Code, 472  
 Natural frequencies, 321  
 Natural response, 299  
 Negative current flow, 2  
 Negative feedback, omp-amp circuits and,  
 171–172  
 Negative short-circuit current ratio, 809  
 Negative short-circuit transfer impedance, 809  
 Network analysis, transformed circuits and,  
 699–709  
 Network frequency response, 603  
 Network pole locations, 714–715  
 Network transfer functions, 584–585  
 Neutral conductor, 465  
 Nichrome (NiCr), 70  
 Nodal analysis, 102–121, 396–397, 401–402  
   circuits containing dependent current  
     sources, 110–112  
   circuits containing dependent voltage  
     sources, 117–120  
   circuits containing independent voltage  
     sources, 113–116  
   circuits containing only independent current  
     sources, 104–110  
   Ohm's law and, 103  
   problem solving strategy, 121  
   reference node, 102  
 Node voltages  
   circuits with known, 102  
   illustration, 103  
 Nodes, 31  
 Noise, 520–521  
 Noninverting gain configuration with load,  
 817–818  
 Noninverting op-amps, 177, 819–821  
 Nonlinear load, harmonic line current content  
   for, 784  
 Nonlinear resistance characteristics, 26  
 Norton analysis, 400–404  
 Norton's theorem, 198–216, 510, 705–708  
   circuits containing both independent and  
     dependent sources, 206–211  
   circuits containing only dependent sources,  
     205–206  
   circuits containing only independent sources,  
     200–204  
   design examples and, 221–226  
   equivalent circuits, 199–200  
   problem-solving strategy, 211  
   source transformation and, 213–214  
 Notch filter, 651–652, 792–793  
 Nuclear generating facility, 544  
 Nyquist criterion, 649

**O**

Odd-function symmetry, Fourier series and,  
 758–759  
 Ohm, Georg Simon, 26  
 Ohm's laws, 26–30, 39–40, 42, 44, 103  
 Open-circuit descriptions, 28  
 Open-circuit impedance parameters, 805  
 Open-circuit input impedance, 805  
 Open-circuit output admittance, 807  
 Open-circuit output impedance, 805

Open-circuit reverse voltage gain, 807  
 Open-circuit transfer admittance, 809  
 Open-circuit transfer impedances, 805  
 Open-circuit voltage ratio, 809  
 Operational amplifiers (op-amp)  
   4-20 mA to 0-5 V converter circuit, 179  
   application examples, 173–176  
   buffer amplifier, 162  
   circuit with integrator and summer, 280  
   commercial op-amps and model values, 159  
   comparators, 172–173  
   design examples and, 176–179  
   filter circuit, 629–630  
   fundamental op-amp circuits, 163–172  
   ideal op-amp model, 161–162  
   input-output characteristics, 160  
   input terminal I/V values, 161  
   models, 157–162  
   negative and positive feedback and, 171–172  
   noninverting configuration, 165, 177  
   selection of, 157  
   standard inverting amplifier stage, 177  
   standard weighted-summer configuration, 178  
   subcircuits, 630  
   transfer plots for, 160  
   unity gain buffer performance, 161–162  
 Operational transconductance amplifier (OTA), 637–643  
   OTA integrator, 639  
   OTA simulated resistor, 639  
   OTA voltage summer, 639  
 Output voltage, sine wave inverter and, 785–787  
 Output waveforms for differentiator circuit, 273  
 Overdamped responses, 321, 716

## P

Pacemaker equivalent network  
   during capacitor charge cycle, 336  
   during capacitor discharge cycle, 337  
 Panel lighting, converter circuit for powering, 76  
 PA03 op-amps, 159–160, 175  
 Parallel capacitors, 266–267  
 Parallel circuit, 387, 390  
 Parallel combination of two subnetworks, 814  
 Parallel inductors, 268–269  
 Parallel interconnection of two-ports, 812  
 Parallel resonance, 611–619  
 Parallel resonant tuned amplifier, 647  
 Parallel *RLC* circuit, 612  
 Parameter conversions, two-port networks and, 811  
 Parseval's theorem, 778–779, 781  
 Particular integral solution, 299  
 Passive element impedance, 384  
 Passive filters, 620–627  
 Passive sign convention, 6  
 Passive summer circuit, 412  
 Periodic signals, 752, 773  
 Phase and line voltages in balanced wye-wye system, 549  
 Phase angle, 370–371  
 Phase angle generator, 568–569

Phasor diagrams, 379, 390–393  
 Phasor relationships for circuit elements, 379–383  
 Phasors, 377–379  
 Planar circuits, defined, 122  
 “Pole pig,” 517  
 Pole-zero diagrams, 733, 735  
 Pole-zero plot/Bode plot connection, 724–726  
 Pole-zero plots, 714–715, 719–720  
 Poles and zeros, 585–586  
 Poles or zeros at the origin, 588  
 Polyphase circuits  
   application examples, 562–565  
   design examples, 566–569  
   power factor correction, 561–562  
   power relationships, 557–561  
   source/load connections, 548–557  
   three-phase circuits, 542–547  
   three-phase connections, 547–548  
 Pools, electric shocks and, 468  
 Positive current flow, 2  
 Positive feedback, omp-amp circuits and, 171–172  
 Potential energy, 3  
 Potentiometers, 343  
 Power balance, 439  
 Power factor, 450–452  
 Power factor angle, 450  
 Power factor correction, 457–461, 561–562  
 Power outage ride-through circuit, 279  
 Power ratings, power factor correction capacitors and, 565  
 Power relationships, 557–561  
   circuit used to explain, 452  
   diagram for illustrating, 453  
 Power transmission lines, 544, 815–819  
 Power triangle, 454  
 Practical parallel resonant circuit, 616  
 Precision chip inductor cross section, 271  
 Prefixes, 2  
 Printed circuit board, 69  
 Pulse generator  
   high-voltage, 334–335  
   output voltage, 335  
 Pulse response, 316–319  
 Pulse train, 318  
 Pulses and their spectra, 775

## Q

Quadratic poles or zeros, Bode diagram and, 589–590  
 Quadrature component, 454  
 Quadrature power, 452

## R

Radio frequency noise pickup, 408–409  
 Railgun, 341–342  
 Random access memories (RAMs), 64  
*RC* operational amplifier circuits, 272–274  
*RC* parallel network, 699–700  
 Reactive or quadrature power, 452  
 Read-only memories (ROM), 64  
 Real or average power, 452  
 Recording Industry Association of America (RIAA), 729–731

Rectangular representation of complex number, 830  
 Reference node, 102  
 Required reactive power per watt, 565  
 Residential utility transformer, 517–518  
 Resistance per foot of solid copper wire, 262  
 Resistive circuits  
   application examples, 72–75  
   circuits with series-parallel combinations of resistors, 55–61  
   design examples, 75–81  
   Kirchhoff's laws, 31–39  
   Ohm's law, 26–30  
   resistor technologies for electronic manufacturing, 69–72  
   series and parallel resistor combinations, 51–55  
   silicon-diffused resistors, 70–72  
   single-loop circuits, 39–45  
   single-node-pair circuits, 46–50  
   thick-film resistors, 69–70  
   thin-film resistors, 70  
   wye-to-delta transformations, 61–64  
 Resistor combinations  
   circuits with dependent sources, 64–69  
   series and parallel combinations, 51–55  
   simplifying, 52  
 Resistors  
   frequency-independent impedance of, 578  
   power ratings and, 54–55  
   specifications and, 54–55  
   symbols and, 26  
   technologies for electronic manufacturing, 69–72  
   tolerance and, 54–55  
   values and, 54–55  
   voltage-current relationships and, 380  
 Resonant circuits, 597–619  
   parallel resonance, 611–619  
   resonant frequency, 597  
   series resonance, 597–611  
 Rheostats, 343  
*RL* circuits, 373  
*RL* series network, 696  
*RLC* band-pass filter-tuner circuit, 788  
*RLC* high-pass filter, 724  
*RLC* series network, 581, 719  
*RLC* series resonant network, 599  
*RLC* series transient response, 720  
 rms values, 447–450  
 Robotic surgery, 156  
 Rotomolding manufacturing process, 459–460

## S

*s*-domain circuits, 698–699  
*s*-domain representations, 699–700  
*s*-plane, 714  
 Safety devices, 471–472  
 Safety guidelines, 471  
 Sampling property, 670  
 Scaling, 619–620  
 Sea ice measurements, 296  
 Second harmonic, 753  
 Second-order band pass filter, 634–635

- Second-order circuits, 319–332
    - analysis technique and, 323–328
    - basic circuit equation, 319–320
    - network response, 322
    - problem-solving strategy, 323
    - response equations, 320–322
  - Second-order filter for data transfer, 732–735
  - Second-order low-pass filter, 632, 732, 736
  - Second-order network, natural response of, 714
  - Second-order underdamped network, 718
  - Sensor amplifier, 818
  - Series and parallel resistor combinations, 51–55
  - Series capacitors, 264–266
  - Series circuits, 599
  - Series inductors, 267–268
  - Series interconnection of two-ports, 812
  - Series-parallel combinations of resistors, 55–61
  - Series resonance, 597–611
  - Series resonant circuit, 606
  - Series *RLC* circuit, 597–598
  - Series *RLC* circuit excited at its resonant frequency, 603
  - Short-circuit admittance parameters, 803
  - Short-circuit descriptions, 28
  - Short-circuit forward current gain, 807
  - Short-circuit input admittance, 803
  - Short-circuit input impedance, 807
  - Short-circuit output admittance, 803
  - Short-circuit transfer admittances, 803
  - Sign convention for power, 6
  - Signal waveform, 782–783
  - Silicon-controlled rectifier, 336
  - Silicon-diffused resistors, 70–72
  - Simple parallel circuit, 46
  - Simple pole or zero, Bode diagram and, 588–589
  - Simple resistive heater selector circuit, 73
  - Simple voltage divider, 77–79
  - Single-loop circuits, 39–45
    - multiple-source/resistor networks, 42–45
    - voltage division, 39–41
  - Single-node-pair circuits, 46–50
    - current division, 46–48
    - multiple-source/resistor networks, 49–50
  - Single-phase three-wire circuits, 461–464
  - Single-phase transformers, 517
  - Single-pole low-pass filter, 650–651
  - Single-stage amplifier gain, 819–821
  - Single-stage tuned amplifier, 615–616
  - Singular function, 316
  - Singularity functions, 669–671
  - Sinusoidal and complex forcing functions, 373–377
  - Sinusoidal frequency analysis, 586–597
    - deriving the transfer function from Bode plot, 595–597
    - frequency response using a Bode plot, 586–595
  - Sinusoids, 370–372
  - Smart power grids, 369
  - Snubber circuit, 339
  - Solar mirror arrays, 435
  - Source exchange, 213–214, 398–399
  - Source/load connections
    - balanced wye-wye connection, 548–552
    - delta-connected load, 554–556
    - delta-connected source, 552–554
  - Standard capacitor values, 261
  - Standard inductor values, 261
  - Standard inverting amplifier stage, 177
  - Standard SI prefixes, 2
  - Standard weighted-summer configuration, 178
  - Starter current, headlight intensity and, 73
  - State-variable approach, 300
  - Steady-state ac superposition, 413
  - Steady-state network response, Fourier series and, 768–769
  - Steady-state power analysis
    - average power, 437–442
    - complex power, 452–457
    - design examples, 476–477
    - effective or rms values, 447–450
    - instantaneous power, 436–437
    - maximum average power transfer, 442–446
    - power factor, 450–452
    - power factor correction, 457–461
    - safety considerations, 464–472
    - single-phase three-wire circuits, 461–464
  - Steady-state response, 727–729
  - Steady-state solution, 299
  - Step function input, 329–330
  - Stray capacitance, 246–247
  - Stray inductance, 254
  - Subcircuits within three-phase emulator, 568
  - Supernodes, 115–116
  - Superposition, 192–199, 398
  - Suppermesh approach, 129
  - Surface mount technology (SMT), 69
  - Susceptance, 386
  - Switched inductor network, 338–339
  - Symmetry and trigonometric Fourier series, 757–761
    - even-function symmetry, 757–758
    - half-wave symmetry, 759
    - odd-function symmetry, 758–759
  - System poles, 586
  - Système International des Unités, 2
  - Systems of units, 2
- T**
- T-*Network*, 223
  - Tacoma Narrows Bridge, 609–611, 720–724
  - Tantalum nitride (TaN), 70
  - Tesla Roadster, 25
  - Thévenin analysis, 399–403
  - Thévenin equivalent circuit, 645
  - Thévenin's theorem, 198–216, 510–511, 705
    - application example and, 220–221
    - circuits containing both independent and dependent sources, 206–211
    - circuits containing only dependent sources, 205–206
    - circuits containing only independent sources, 200–204
    - design examples and, 221–226
    - developmental concepts, 198
    - equivalent circuits, 199–200
    - Microsoft Excel and, 215–216
    - problem-solving strategy, 211
    - source transformation, 213–214
  - Thick-film chip resistor
    - cross-section, 70
    - standard sizes, 69
  - Thick-film resistors, 69–70
  - Thin-film resistors, 70
  - Three-node circuits, 104
  - Three-phase circuits, 542–547
  - Three-phase connections, 547–548
  - Three-phase emulator, 567–569
  - Three-phase power transformer, 545
  - Three-phase system for line loss calculation, 560
  - Three-phase terminology, 570
  - Time constant, circuit, 299–300
  - Time convolution property, 778
  - Time-domain representations, 698–700
  - Time-scaling theorem, 673
  - Time-shifting, Fourier series and, 762–764
  - Time-shifting theorem, 673
  - Tow-Thomas filter, 643–645
  - Transfer functions, 584, 712–724
  - Transform pairs, 671–672
  - Transform properties, 673–675
  - Transformer employing magnetic core, 506
  - Transistor amplifier circuit model, 80–81
  - Transmission parameters, two-port networks and, 809–810
  - Treble boost circuit, 655
  - Trigonometric Fourier series, 756–757
    - even-function symmetry and, 757–758
    - half-wave symmetry, 759
    - odd-function symmetry, 758–759
    - symmetry and, 757–761
  - Troubleshooting device, 471
  - 24-V fans, 225–226
  - Twisting oscillations, 721–724
  - Two coils magnetically coupled, 493
  - Two-integrator biquad filter, 643
  - Two-loop circuits, 123
  - Two-port networks
    - admittance parameters, 802–805
    - application examples and, 815–819
    - hybrid parameters and, 807–809
    - impedance parameters, 805–807
    - interconnection of two-ports, 811–815
    - parameter conversions and, 811
    - transmission parameters and, 809–810
  - Two-quadrant analog multiplier, 641
  - Two-stage, fourth-order band-pass filter, 790
  - Two-stage buffered filter, 650–651
  - Typical current magnitudes, 3–4
- U**
- Undamped natural frequency, 321, 713
  - Underdamped responses, 321, 716–718
  - Undersea robotic vehicles, 695–696
  - Unit impulse function, 670–671
  - Unit step function, 316, 669–670
  - Unity gain buffer, 161–162
  - Universal serial bus (USB) ports, 16
  - Unmanned aerial vehicles (UAV), 667–668
  - Utility poles, 517–518

**V**

Variable-frequency network performance  
  application examples, 645–649  
  design examples, 649–655  
  filter networks, 620–645  
  resonant circuits, 597–619  
  scaling, 619–620  
  sinusoidal frequency analysis, 586–597  
  variable-frequency response analysis,  
    578–586  
Variable-frequency response analysis, 578–586  
  network functions, 584–585  
  poles and zeros, 585–586  
Voltage  
  defining, 3  
  division, 39–41, 77–79

  equivalent forms for labeling, 37  
  gain, 584  
  gain transfer function, 719  
  ratings, 565  
  representations, 4  
Voltage-current relationships, 5,  
  26–27  
  for capacitor, 382–383  
  for inductor, 381  
  for resistors, 380  
Voltage waveforms  
  capacitors and, 249–253  
  inductors and, 256–258

**W**

Wall transformers, 524–525

Waveform generation, Fourier series and,  
  764–766  
Wein bridge oscillator, 737–738  
Wheatstone bridge circuit, 74  
Wind farms, 541  
Wind speed, 721–724  
Wire-wound chip inductor cross-section, 271  
Wye-connected loads, 548  
Wye-to-delta transformations, 61–64

**Z**

Zero-crossing detector, 173  
Zeros of transfer function, 585–586

## Accreditation Criteria Covered in this Text

Engineering educators are paying increasing attention to student learning outcomes. In a world of fast-paced technological change, it is no longer possible for students to master in an undergraduate program all they will need to know to succeed in their careers. The half-life of the knowledge students acquire grows shorter daily. More than ever, practicing engineers need to be prepared to be lifelong learners, adaptive to new technologies and challenges, applying their knowledge and skills to novel situations. What remains essential is that undergraduates develop a solid foundation in the engineering concepts specific to their discipline. Just as important, they must develop the skill of applying those concepts to solving realistic problems, and become adept at adapting solutions and approaches to unfamiliar challenges.

Employers, professional societies, and accreditation bodies increasingly seek to measure students' learning in terms of the abilities they can demonstrate. In the U.S., the Accreditation Board for Engineering and Technology (ABET) describes these abilities as a list of criteria used in their periodic evaluation of engineering programs. This book is designed to support, in every way possible, student learning outcomes that are aligned with these criteria. The print and digital material in this textbook is designed to provide an integrated teaching and learning system in support of the following learning objectives that students should be able to demonstrate upon graduation:

*An ability to apply knowledge of mathematics, basic science, and engineering to solve problems encompassing a number of fundamental areas, one of which is circuits.*

Throughout this text, the student is required to apply mathematics to solve a wide variety of circuit problems. Algebra, trigonometry, determinants, matrices, differential equations, and transform models—Laplace and Fourier—are all employed. New to this edition are a set of math skills assessments that provide faculty with the tools to assess student mastery of essential mathematical concepts. Moreover, students can use these modules to assess their own strengths and bolster their areas of weakness.

*An ability to design an electrical component or system to meet desired needs.*

Numerous design examples and problems are employed throughout the text. The desired specifications are given and the students must apply the knowledge they have attained up to that point to determine a method of attack that will arrive at a viable solution. These are interesting problems that quite often have more than one solution, and thus the student becomes acquainted with the types of issues and tradeoffs that face engineers in practice on a daily basis.



*An ability to identify and formulate a problem when faced with a situation that calls for an engineering solution.*

The text contains a variety of applications, examples, and problems that call for an engineering solution. Both the examples and problems span a wide spectrum and range from fairly simple issues to some that are very complicated. The depth and breadth of these examples and problems provide the student with the type of experience needed to identify and formulate problems that require an engineering solution.

*A proficiency in the use of computers and modern tools and skills to solve circuit problems.*

An application of the fundamental laws of circuit analysis and design will inevitably yield a set of mathematical equations. While it is always possible to solve these equations in a brute force manner, the application of modern mathematical tools will typically be much more efficient and less prone to errors. These tools are typically implemented in software and thus the tremendous processing power of the digital computer can be applied to yield a solution. A variety of new and efficient tools are employed in this text to quickly solve a wide spectrum of problems. For example, this text offers supplementary material on employing three modern tools commonly used in industry—PSpICE, MATLAB, and Multisim—which can be accessed online or integrated into custom versions of the text. The knowledge gained in the use of one or more of these tools at this early stage in the engineering curriculum will be extremely valuable since these tools are typically employed in many of the courses that will follow a circuits course.

*An appreciation of the need for, and an ability to learn new concepts as required for continuing practice in the profession.*

One quickly finds that the concepts learned early in this text are applied later to solve more complicated problems. In addition, the material learned early on is the basis for the development of new concepts and techniques that are needed to support the growth required for continued advancement. A natural extension of this process is, of course, the continued enhancement of students' knowledge and abilities that will eventually support their success as engineering professionals.